

BSF (Tradesmen)

Previous Year Paper
28 Aug, 2023 Shift 2

Test Prime

**ALL EXAMS,
ONE SUBSCRIPTION**



70,000+
Mock Tests



**Personalised
Report Card**



**Unlimited
Re-Attempt**



600+
Exam Covered



**Previous Year
Papers**



**500%
Refund**



ATTEMPT FREE MOCK NOW



सीमा सुरक्षा बल

BORDER SECURITY FORCE

Participant ID	
Participant Name	
Test Center Name	
Test Date	28/08/2023
Test Time	12:30 PM - 2:30 PM
Subject	Constable (Tradesmen)

Section : General Awareness / General Knowledge

Q.1 In March 2023, the Defence Acquisition Council approved proposals worth Rs. _____ crore for the Armed Forces and Indian Coast Guard under the Buy (Indian-IDDm) category.

- Ans

1. 60500

2. 80500

3. 70500

4. 50500

Question ID : 630680321039
 Option 1 ID : 6306801248878
 Option 2 ID : 6306801248880
 Option 3 ID : 6306801248879
 Option 4 ID : 6306801248877
 Status : Answered
 Chosen Option : 4

Q.2 As per the 2011 Census of India, what is the female population in percentage?

- Ans

1. 47.5 percent

2. 46.5 percent

3. 48.5 percent

4. 49.5 percent

Question ID : 630680321052
 Option 1 ID : 6306801248930
 Option 2 ID : 6306801248929
 Option 3 ID : 6306801248931
 Option 4 ID : 6306801248932
 Status : Answered
 Chosen Option : 4

Q.3 Which of the following is NOT a method of separating substances?

- Ans ☒ 1. Threshing
☒ 2. Handpicking
☒ 3. Winnowing
☒ 4. Sewing

Question ID : 630680321058
Option 1 ID : 6306801248954
Option 2 ID : 6306801248953
Option 3 ID : 6306801248955
Option 4 ID : 6306801248956
Status : Answered
Chosen Option : 1

Q.4 When was the expression 'Unity of the Nation' changed to 'Unity and Integrity of the Nation' in the preamble of the Indian Constitution?

- Ans ☒ 1. 1976
☒ 2. 1971
☒ 3. 1951
☒ 4. 1956

Question ID : 630680321054
Option 1 ID : 6306801248940
Option 2 ID : 6306801248939
Option 3 ID : 6306801248937
Option 4 ID : 6306801248938
Status : Answered
Chosen Option : 3

Q.5 Which of the following was the first language to be accorded the status of a classical language in India?

- Ans ☒ 1. Telugu
☒ 2. Tamil
☒ 3. Sanskrit
☒ 4. Kannada

Question ID : 630680321046
Option 1 ID : 6306801248908
Option 2 ID : 6306801248907
Option 3 ID : 6306801248905
Option 4 ID : 6306801248906
Status : Answered
Chosen Option : 3

Q.6 The wind blowing in the northern plains in the summer is known as ____.

- Ans ☒ 1. Loo
☒ 2. Trade winds
☒ 3. Kaal Baisakhi
☒ 4. Foehn

Question ID : 630680321049
Option 1 ID : 6306801248918
Option 2 ID : 6306801248920
Option 3 ID : 6306801248917
Option 4 ID : 6306801248919
Status : Answered
Chosen Option : 1

Q.7 Which of the following statement is correct regarding National Income Accounting?
I. Stocks are defined over a period of time.
II. Flows are defined at a particular point of time.

- Ans ☒ 1. Only II
☒ 2. Neither I nor II
☒ 3. Both I and II
☒ 4. Only I

Question ID : 630680321042
Option 1 ID : 6306801248890
Option 2 ID : 6306801248892
Option 3 ID : 6306801248891
Option 4 ID : 6306801248889
Status : Answered
Chosen Option : 3

Q.8 The average temperature of Chennai, on the eastern coast, during winter season is between _____ Celsius.

- Ans ☒ 1. 8° – 10°
☒ 2. 24° – 25°
☒ 3. 45° – 50°
☒ 4. 14° – 12°

Question ID : 630680321051
Option 1 ID : 6306801248926
Option 2 ID : 6306801248927
Option 3 ID : 6306801248928
Option 4 ID : 6306801248925
Status : Answered
Chosen Option : 3

Q.9 The _____ of a firm is a relationship between inputs used and output produced by the firm.

- Ans ☒ 1. Income function
☒ 2. Sales function
☒ 3. Production function
☒ 4. Distribution function

Question ID : 630680321041
Option 1 ID : 6306801248885
Option 2 ID : 6306801248888
Option 3 ID : 6306801248886
Option 4 ID : 6306801248887
Status : Answered
Chosen Option : 1

Q.10 Which of the following is NOT an official language of Tripura?

- Ans ☒ 1. Bengali
☒ 2. Hindi
☒ 3. Kokborok
☒ 4. English

Question ID : 630680321047
Option 1 ID : 6306801248909
Option 2 ID : 6306801248910
Option 3 ID : 6306801248912
Option 4 ID : 6306801248911
Status : Answered
Chosen Option : 3

Q.11 What is the literacy rate of Karnataka as per the 2011 census of India?

- Ans
1. 81.37 percent

2. 71.37 percent

3. 85.37 percent

4. 75.37 percent

Question ID : 630680321053

Option 1 ID : 6306801248935

Option 2 ID : 6306801248933

Option 3 ID : 6306801248936

Option 4 ID : 6306801248934

Status : Answered

Chosen Option : 4

Q.12 Dola Purnima is related to which of the following Indian states?

- Ans
1. Gujarat

2. Kerala

3. Haryana

4. Odisha

Question ID : 630680321048

Option 1 ID : 6306801248915

Option 2 ID : 6306801248913

Option 3 ID : 6306801248914

Option 4 ID : 6306801248916

Status : Answered

Chosen Option : 4

Q.13 Which of the following statements is correct regarding the Indian Constitution?
I. The President of India administers the oath of Secrecy of the Union Ministers.
II. A Union Minister loses his or her position if he or she is not a member of parliament for six consecutive months.

- Ans
1. Both I and II

2. Neither I nor II

3. Only I

4. Only II

Question ID : 630680321056

Option 1 ID : 6306801248947

Option 2 ID : 6306801248948

Option 3 ID : 6306801248945

Option 4 ID : 6306801248946

Status : Answered

Chosen Option : 1

Q.14 The 5th Junior Boys National Boxing Championship 2023 was held in which of the following Indian states?

- Ans
- ☒ 1. Mizoram
 - ☒ 2. Manipur
 - ☒ 3. Assam
 - ☒ 4. Arunachal Pradesh

Question ID : 630680321036
Option 1 ID : 6306801248867
Option 2 ID : 6306801248866
Option 3 ID : 6306801248865
Option 4 ID : 6306801248868
Status : Answered
Chosen Option : 4

Q.15 Article 76 of the Indian Constitution is related with _____.

- Ans
- ☒ 1. Council of Ministers to aid and advise President
 - ☒ 2. the president has power to grant pardon in certain cases
 - ☒ 3. extent of executive power of the union
 - ☒ 4. Attorney-General for India

Question ID : 630680321055
Option 1 ID : 6306801248943
Option 2 ID : 6306801248942
Option 3 ID : 6306801248941
Option 4 ID : 6306801248944
Status : Answered
Chosen Option : 2

Q.16 Which of the following is correct about Herbs?
I. They have tender stems.
II. They are usually very big.

- Ans
- ☒ 1. Only II
 - ☒ 2. Both I and II
 - ☒ 3. Neither I nor II
 - ☒ 4. Only I

Question ID : 630680321059
Option 1 ID : 6306801248958
Option 2 ID : 6306801248959
Option 3 ID : 6306801248960
Option 4 ID : 6306801248957
Status : Answered
Chosen Option : 4

Q.17 In May 2023, which was the host city of the India-Africa joint military exercise 'AFINDEX-2023'?

- Ans
- ☒ 1. Chennai
 - ☒ 2. Kolkata
 - ☒ 3. Visakhapatnam
 - ☒ 4. Pune

Question ID : 630680321038
 Option 1 ID : 6306801248874
 Option 2 ID : 6306801248873
 Option 3 ID : 6306801248876
 Option 4 ID : 6306801248875
 Status : Answered
 Chosen Option : 4

Q.18 The northern part of the western coastal plain of India is called the _____.

- Ans
- ☒ 1. Kutch
 - ☒ 2. Kannad Plain
 - ☒ 3. Konkan
 - ☒ 4. Malabar coast

Question ID : 630680321050
 Option 1 ID : 6306801248922
 Option 2 ID : 6306801248923
 Option 3 ID : 6306801248921
 Option 4 ID : 6306801248924
 Status : Answered
 Chosen Option : 3

Q.19 The National Sports Day in India is celebrated on _____.

- Ans
- ☒ 1. 29th August
 - ☒ 2. 7th July
 - ☒ 3. 29th July
 - ☒ 4. 7th August

Question ID : 630680321035
 Option 1 ID : 6306801248864
 Option 2 ID : 6306801248861
 Option 3 ID : 6306801248862
 Option 4 ID : 6306801248863
 Status : Answered
 Chosen Option : 3

Q.20 On _____, 1919, the infamous Jallianwala Bagh incident took place in Amritsar.

- Ans
- ☒ 1. 11 April
 - ☒ 2. 12 April
 - ☒ 3. 13 April
 - ☒ 4. 10 April

Question ID : 630680321043
 Option 1 ID : 6306801248894
 Option 2 ID : 6306801248895
 Option 3 ID : 6306801248896
 Option 4 ID : 6306801248893
 Status : Answered
 Chosen Option : 3

Q.21 Under which of the following acts, plantation workers in Assam were not permitted to leave the tea gardens without permission during British India?

- Ans
- ☒ 1. Labour Restriction Act
 - ☒ 2. Tea monopoly Act
 - ☒ 3. Plantation labourers Act
 - ☒ 4. Inland Emigration Act

Question ID : 630680321044
 Option 1 ID : 6306801248900
 Option 2 ID : 6306801248899
 Option 3 ID : 6306801248897
 Option 4 ID : 6306801248898
 Status : Answered
 Chosen Option : 1

Q.22 The Charaka Samhita book is related to ____.

- Ans
- ☒ 1. Geometry
 - ☒ 2. Ayurveda
 - ☒ 3. Numerology
 - ☒ 4. Astronomy

Question ID : 630680321045
 Option 1 ID : 6306801248903
 Option 2 ID : 6306801248901
 Option 3 ID : 6306801248902
 Option 4 ID : 6306801248904
 Status : Answered
 Chosen Option : 2

Q.23 Which of the following is an objective of the Chandrayaan - 3 mission?
 I. To demonstrate safe and soft landing on Lunar Surface.
 II. To conduct in-situ scientific experiments.

- Ans
- ☒ 1. Both I and II
 - ☒ 2. Neither I nor II
 - ☒ 3. Only II
 - ☒ 4. Only I

Question ID : 630680321037
 Option 1 ID : 6306801248871
 Option 2 ID : 6306801248872
 Option 3 ID : 6306801248870
 Option 4 ID : 6306801248869
 Status : Answered
 Chosen Option : 4

Q.24 Which of the following is/are a bench of Odisha High Court?
 I. Cuttack
 II. Bhubaneswar

- Ans

✗ 1. Neither I nor II

✓ 2. Only I

✗ 3. Only II

✗ 4. Both I and II

Question ID : 630680321057
 Option 1 ID : 6306801248952
 Option 2 ID : 6306801248949
 Option 3 ID : 6306801248950
 Option 4 ID : 6306801248951
 Status : Answered
 Chosen Option : 2

Q.25 The Kui language, which was in the news in July 2023, is associated with which of the following Indian states?

- Ans

✓ 1. Odisha

✗ 2. Assam

✗ 3. Manipur

✗ 4. Goa

Question ID : 630680321040
 Option 1 ID : 6306801248884
 Option 2 ID : 6306801248881
 Option 3 ID : 6306801248882
 Option 4 ID : 6306801248883
 Status : Answered
 Chosen Option : 4

Section : Knowledge of elementary mathematics

Q.1 A student obtained equal marks in english and history. The ratio of marks in history and maths is 6 : 7. He scored an aggregate of 76 percent in the three subjects. Maximum marks for each subject is 100. How much did he score in history?

- Ans

✓ 1. 72

✗ 2. 48

✗ 3. 84

✗ 4. 36

Question ID : 630680321073
 Option 1 ID : 6306801249013
 Option 2 ID : 6306801249014
 Option 3 ID : 6306801249016
 Option 4 ID : 6306801249015
 Status : Answered
 Chosen Option : 4

Q.2 60 percent of the cost price of an article is equal to the 40 percent of its selling price. What is the profit percentage?

- Ans ☒ 1. 50 percent
☒ 2. 100 percent
☒ 3. 60 percent
☒ 4. 40 percent

Question ID : 630680321067
Option 1 ID : 6306801248990
Option 2 ID : 6306801248991
Option 3 ID : 6306801248992
Option 4 ID : 6306801248989
Status : Answered
Chosen Option : 3

Q.3 Height of a cone is 12 cm and radius of its base is 3.5 cm. What is the volume of the cone?

- Ans ☒ 1. 154 cm³
☒ 2. 116 cm³
☒ 3. 144 cm³
☒ 4. 168 cm³

Question ID : 630680321082
Option 1 ID : 6306801249051
Option 2 ID : 6306801249049
Option 3 ID : 6306801249050
Option 4 ID : 6306801249052
Status : Answered
Chosen Option : 4

Q.4

What is the value of: $\left(1 + \frac{1}{19}\right) + \left(1 + \frac{2}{19}\right) + \left(1 + \frac{3}{19}\right) + \dots + \left(1 + \frac{18}{19}\right)$

- Ans ☒ 1. 21
☒ 2. 27
☒ 3. 36
☒ 4. 25

Question ID : 630680321061
Option 1 ID : 6306801248965
Option 2 ID : 6306801248967
Option 3 ID : 6306801248968
Option 4 ID : 6306801248966
Status : Answered
Chosen Option : 2

Q.5 The ratio of three numbers is 2 : 6 : 3. If their product is 12348, then what is the sum of the three numbers?

- Ans
- ☒ 1. 55
 - ☒ 2. 66
 - ☒ 3. 44
 - ☒ 4. 77

Question ID : 630680321072
 Option 1 ID : 6306801249009
 Option 2 ID : 6306801249010
 Option 3 ID : 6306801249012
 Option 4 ID : 6306801249011
 Status : Answered
 Chosen Option : 3

Q.6 If two successive discounts of 25 percent and 4 percent are offered, then what is the net discount?

- Ans
- ☒ 1. 25 percent
 - ☒ 2. 30 percent
 - ☒ 3. 28 percent
 - ☒ 4. 32 percent

Question ID : 630680321070
 Option 1 ID : 6306801249001
 Option 2 ID : 6306801249003
 Option 3 ID : 6306801249004
 Option 4 ID : 6306801249002
 Status : Answered
 Chosen Option : 1

Q.7 What is the total surface area of a cone whose radius is 10 cm and height is 24 cm?

- Ans
- ☒ 1. 1376.73 cm²
 - ☒ 2. 1131.43 cm²
 - ☒ 3. 1249.37 cm²
 - ☒ 4. 976.29 cm²

Question ID : 630680321083
 Option 1 ID : 6306801249053
 Option 2 ID : 6306801249056
 Option 3 ID : 6306801249054
 Option 4 ID : 6306801249055
 Status : Answered
 Chosen Option : 2

Q.8 A dealer sells a machine having marked price as Rs. 2200 at a discount of 14 percent. What is the selling price of the machine?

- Ans
- ☒ 1. Rs. 1952
 - ☒ 2. Rs. 1892
 - ☒ 3. Rs. 1785
 - ☒ 4. Rs. 2042

Question ID : 630680321069
 Option 1 ID : 6306801248999
 Option 2 ID : 6306801248998
 Option 3 ID : 6306801249000
 Option 4 ID : 6306801248997
 Status : Answered
 Chosen Option : 3

Q.9 What is the average of first 23 multiples of 17?

- Ans

✖

1. 310

✔

2. 204

✖

3. 212

✖

4. 210

Question ID : 630680321062
Option 1 ID : 6306801248971
Option 2 ID : 6306801248970
Option 3 ID : 6306801248972
Option 4 ID : 6306801248969
Status : Answered
Chosen Option : 4

Q.10 Average age of 12 students of a school is 23 years. The average age of students and their mathematics and science teacher is 35 years. If the age of science teacher is 15 years more than the age of mathematics teacher, then what is the age of mathematics teacher?

- Ans

✖

1. 98.5 years

✖

2. 101.5 years

✖

3. 100 years

✔

4. 99.5 years

Question ID : 630680321064
Option 1 ID : 6306801248980
Option 2 ID : 6306801248979
Option 3 ID : 6306801248977
Option 4 ID : 6306801248978
Status : Answered
Chosen Option : 1

Q.11 If z percent of z is 1849, then what is the value of z?

- Ans

✔

1. 430

✖

2. 470

✖

3. 530

✖

4. 370

Question ID : 630680321065
Option 1 ID : 6306801248983
Option 2 ID : 6306801248982
Option 3 ID : 6306801248984
Option 4 ID : 6306801248981
Status : Answered
Chosen Option : 3

Q.12 Two pipes can fill a tank in 20 hours and 24 hours respectively and a outlet pipe can empty 44 gallons of water per hour. All the three pipes working together can fill the same empty tank in 40 hours. What is the capacity of the tank?

- Ans
- ☒ 1. 700 gallons
 - ☒ 2. 670 gallons
 - ☒ 3. 660 gallons
 - ☒ 4. 610 gallons

Question ID : 630680321077
 Option 1 ID : 6306801249032
 Option 2 ID : 6306801249031
 Option 3 ID : 6306801249029
 Option 4 ID : 6306801249030
 Status : Answered
 Chosen Option : 1

Q.13 On a table the profit earned is 220 percent of the cost price. If the cost price increases by 40 percent but the selling price remains same, then what is the new profit percentage?

- Ans
- ☒ 1. 137.66 percent
 - ☒ 2. 128.57 percent
 - ☒ 3. 100 percent
 - ☒ 4. 132.5 percent

Question ID : 630680321068
 Option 1 ID : 6306801248996
 Option 2 ID : 6306801248994
 Option 3 ID : 6306801248995
 Option 4 ID : 6306801248993
 Status : Answered
 Chosen Option : 2

Q.14 If 37.5 percent of S is added to 12.5 percent of T, then the resultant comes as 62.5 percent of T. S is what percentage of T?

- Ans
- ☒ 1. 33.3 percent
 - ☒ 2. 66.6 percent
 - ☒ 3. 133.3 percent
 - ☒ 4. 99.9 percent

Question ID : 630680321066
 Option 1 ID : 6306801248985
 Option 2 ID : 6306801248986
 Option 3 ID : 6306801248988
 Option 4 ID : 6306801248987
 Status : Answered
 Chosen Option : 3

Q.15 The compound interest on a sum for 2 years at the rate of 32 percent per annum (compounded annually) is Rs. 6681.6. What is the sum?

- Ans ☒ 1. Rs. 8700
☒ 2. Rs. 9000
☒ 3. Rs. 8600
☒ 4. Rs. 8400

Question ID : 630680321075
Option 1 ID : 6306801249021
Option 2 ID : 6306801249022
Option 3 ID : 6306801249024
Option 4 ID : 6306801249023
Status : Answered
Chosen Option : 3

Q.16 One third part of a certain journey is covered at the speed of 18 km/hr, one fourth part at the speed of 27 km/hr and the rest part at the speed of 45 km/hr. What will be the average speed for the whole journey?

- Ans ☒ 1. 35 km/hr
☒ 2. 27 km/hr
☒ 3. 24 km/hr
☒ 4. 22 km/hr

Question ID : 630680321079
Option 1 ID : 6306801249040
Option 2 ID : 6306801249039
Option 3 ID : 6306801249038
Option 4 ID : 6306801249037
Status : Answered
Chosen Option : 2

Q.17 The angles of a triangle are in the ratio 8 : 7 : 3. What is the largest angle of the triangle?

- Ans ☒ 1. 30 degree
☒ 2. 70 degree
☒ 3. 80 degree
☒ 4. 50 degree

Question ID : 630680321071
Option 1 ID : 6306801249006
Option 2 ID : 6306801249005
Option 3 ID : 6306801249007
Option 4 ID : 6306801249008
Status : Answered
Chosen Option : 3

Q.18 A new student having weight 49 kg join a class of 43 students and the average weight of the class reduces by 0.5 kg. What is the new average weight of the class?

- Ans
- ☒ 1. 72 kg
 - ☒ 2. 70.5 kg
 - ☒ 3. 69 kg
 - ☒ 4. 71 kg

Question ID : 630680321063
 Option 1 ID : 6306801248975
 Option 2 ID : 6306801248976
 Option 3 ID : 6306801248973
 Option 4 ID : 6306801248974
 Status : Answered
 Chosen Option : 2

Q.19 What is the length of the longest rod that can be placed in a room which is 5 metres long, 12 metres broad and 13 metres high?

- Ans
- ☒ 1. $8\sqrt{2}$ metres
 - ☒ 2. $13\sqrt{2}$ metres
 - ☒ 3. $15\sqrt{2}$ metres
 - ☒ 4. $12\sqrt{2}$ metres

Question ID : 630680321084
 Option 1 ID : 6306801249057
 Option 2 ID : 6306801249059
 Option 3 ID : 6306801249060
 Option 4 ID : 6306801249058
 Status : Answered
 Chosen Option : 4

Q.20 The length of two parallel sides of a trapezium are 10 metre and 20 metre. If its height is 8 metre, then what is the area of the trapezium?

- Ans
- ☒ 1. 70 metre²
 - ☒ 2. 150 metre²
 - ☒ 3. 120 metre²
 - ☒ 4. 100 metre²

Question ID : 630680321080
 Option 1 ID : 6306801249042
 Option 2 ID : 6306801249041
 Option 3 ID : 6306801249044
 Option 4 ID : 6306801249043
 Status : Answered
 Chosen Option : 3

Q.21 What is the remainder when 24^{24} is divided by 10?

- Ans
- ☒ 1. 2
 - ☒ 2. 6
 - ☒ 3. 4
 - ☒ 4. 8

Question ID : 630680321060
 Option 1 ID : 6306801248963
 Option 2 ID : 6306801248962
 Option 3 ID : 6306801248961
 Option 4 ID : 6306801248964
 Status : Answered
 Chosen Option : 3

Q.22 A sum becomes Rs. 34400 in 6 years on simple interest at the rate of 12 percent per annum. What is the total interest for the 6 years?

- Ans
- ☒ 1. Rs. 16800
 - ☒ 2. Rs. 17200
 - ☒ 3. Rs. 14400
 - ☒ 4. Rs. 15400

Question ID : 630680321074
 Option 1 ID : 6306801249019
 Option 2 ID : 6306801249020
 Option 3 ID : 6306801249018
 Option 4 ID : 6306801249017
 Status : Answered
 Chosen Option : 3

Q.23 The speed of a train is 46 km/hr. If the length of the train is 805 metre, then how much time train will take to cross a man standing on the platform?

- Ans
- ☒ 1. 25/18 minutes
 - ☒ 2. 21/20 minutes
 - ☒ 3. 23/19 minutes
 - ☒ 4. 37/30 minutes

Question ID : 630680321078
 Option 1 ID : 6306801249035
 Option 2 ID : 6306801249033
 Option 3 ID : 6306801249034
 Option 4 ID : 6306801249036
 Status : Answered
 Chosen Option : 4

Q.24 The area of a square and a rectangle is equal. The length of the rectangle is 6 cm more than the side of the square and breadth is 4 cm less than the side of the square. What is the perimeter of the rectangle?

- Ans
- ☐ 1. 48 cm
 - ☐ 2. 62 cm
 - ☐ 3. 42 cm
 - ☒ 4. 52 cm

Question ID : 630680321081
 Option 1 ID : 6306801249046
 Option 2 ID : 6306801249047
 Option 3 ID : 6306801249048
 Option 4 ID : 6306801249045
 Status : Answered
 Chosen Option : 1

Q.25 X, Y and Z together can complete a work in 15 days. X and Y together can complete the same work in 30 days. Z alone can finish the same work in how many days?

- Ans
- ☐ 1. 35 days
 - ☐ 2. 40 days
 - ☒ 3. 30 days
 - ☐ 4. 45 days

Question ID : 630680321076
 Option 1 ID : 6306801249025
 Option 2 ID : 6306801249027
 Option 3 ID : 6306801249026
 Option 4 ID : 6306801249028
 Status : Answered
 Chosen Option : 4

Section : Analytical Aptitude and ability to observe the distinguished patterns

Q.1 In the question given below, relationships between different elements are shown in the statements. These statements are followed by two conclusions. Give answer:

Statements:

I. $T < I = Z \leq H$; $G < I$

Conclusions:

I. $H > T$

II. $H > G$

- Ans
- ☐ 1. If neither conclusion I nor conclusion II is true
 - ☐ 2. If only conclusion I is true
 - ☐ 3. If only conclusion II is true
 - ☒ 4. If both conclusions I and II are true

Question ID : 630680321102
 Option 1 ID : 6306801249131
 Option 2 ID : 6306801249129
 Option 3 ID : 6306801249130
 Option 4 ID : 6306801249132
 Status : Answered
 Chosen Option : 1

Q.2 What is the approximate value of $\sqrt[3]{1330.628} + \sqrt{574.97} - \sqrt{145}$?

- Ans
- ☐ 1. 7

☐ 2. 36

☒ 3. 23

☐ 4. 49

Question ID : 630680321106
 Option 1 ID : 6306801249146
 Option 2 ID : 6306801249148
 Option 3 ID : 6306801249147
 Option 4 ID : 6306801249145
 Status : Answered
 Chosen Option : 3

Q.3 In the following question, a group of letters is given. The letters of each group are related with the letters of the same group by some Logic/Rule/Relation. From the given alternatives, select a group of letters which follows the same Logic/Rule/Relation. (HK, FI, DG)

- Ans
- ☐ 1. (TV, RT, PW)

☐ 2. (DH, FE, HC)

☐ 3. (MT, KR, IO)

☒ 4. (TW, RU, PS)

Question ID : 630680321101
 Option 1 ID : 6306801249126
 Option 2 ID : 6306801249128
 Option 3 ID : 6306801249125
 Option 4 ID : 6306801249127
 Status : Answered
 Chosen Option : 4

Q.4 In a certain code language, 'PSUET' is written as '27', 'SDONT' is written as '24'. What is the code for 'LAWES' in that code language?

- Ans
- ☒ 1. 20

☐ 2. 22

☐ 3. 19

☐ 4. 18

Question ID : 630680321095
 Option 1 ID : 6306801249104
 Option 2 ID : 6306801249103
 Option 3 ID : 6306801249101
 Option 4 ID : 6306801249102
 Status : Answered
 Chosen Option : 3

Q.5 In the following question, select the related letter pair from the given alternatives.
RT : PQ :: ?

- Ans ☒ 1. NP : LM
☐ 2. AI : CD
☐ 3. ZL : BN
☐ 4. TN : NT

Question ID : 630680321099
Option 1 ID : 6306801249117
Option 2 ID : 6306801249118
Option 3 ID : 6306801249119
Option 4 ID : 6306801249120
Status : Answered
Chosen Option : 1

Q.6 In a certain code language, 'BETTER' is written as 'ZCRQBO'. What is the code for 'DRIVEN' in that code language?

- Ans ☐ 1. BPGTCL
☐ 2. BPGSBL
☐ 3. BPGSCK
☒ 4. BPGSBK

Question ID : 630680321096
Option 1 ID : 6306801249108
Option 2 ID : 6306801249105
Option 3 ID : 6306801249107
Option 4 ID : 6306801249106
Status : Answered
Chosen Option : 4

Q.7 If 'p' means 'x', 'q' means '-' and 'r' means '÷', then which of the following equation is correct?
I. 7 p 18 r 3 q 11 = 31
II. 8 r 10 p 20 q 14 = 3

- Ans ☐ 1. Neither I nor II
☒ 2. Only I
☐ 3. Both I and II
☐ 4. Only II

Question ID : 630680321109
Option 1 ID : 6306801249160
Option 2 ID : 6306801249157
Option 3 ID : 6306801249159
Option 4 ID : 6306801249158
Status : Answered
Chosen Option : 1

Q.8 In the question given below, relationships between different elements are shown in the statements. These statements are followed by two conclusions. Give answer:
 Statements:
 I. $B < A \geq Z > Y \leq X$
 Conclusions:
 I. $A > Y$
 II. $X \geq Z$

- Ans ☒ 1. If neither conclusion I nor conclusion II is true
- ☒ 2. If only conclusion II is true
- ☒ 3. If only conclusion I is true
- ☒ 4. If both conclusions I and II are true

Question ID : 630680321103
 Option 1 ID : 6306801249135
 Option 2 ID : 6306801249134
 Option 3 ID : 6306801249133
 Option 4 ID : 6306801249136
 Status : Answered
 Chosen Option : 3

Q.9 In the following question, four letter pairs are given. The letters on left side of (–) is related to the letters on the right side of (–) with some Logic/Rule/Relation. Three are similar on basis of same Logic/Rule/Relation. Select the odd one out from the given alternatives.

- Ans ☒ 1. OFX – QIC
- ☒ 2. YPH – ASS
- ☒ 3. DOV – FQF
- ☒ 4. EVN – GYM

Question ID : 630680321100
 Option 1 ID : 6306801249124
 Option 2 ID : 6306801249123
 Option 3 ID : 6306801249122
 Option 4 ID : 6306801249121
 Status : Answered
 Chosen Option : 4

Q.10 How many pairs (in forward direction) of letters are there in the word, "NUISANCE" which have as many letters between them in the word as there are in the english alphabetical order?

- Ans ☒ 1. 0
- ☒ 2. 4
- ☒ 3. 1
- ☒ 4. 3

Question ID : 630680321092
 Option 1 ID : 6306801249089
 Option 2 ID : 6306801249092
 Option 3 ID : 6306801249090
 Option 4 ID : 6306801249091
 Status : Answered
 Chosen Option : 3

Q.11 'A @ B' means 'A is the mother of B', 'A * B' means 'A is the father of B', 'A \$ B' means 'A is the son of B' and 'A # B' means 'A is the daughter of B'. If P @ Q # R \$ S * T, then how is S related to Q

- Ans

1. Uncle

2. Grandfather

3. Father

4. Brother

Question ID : 630680321097
 Option 1 ID : 6306801249112
 Option 2 ID : 6306801249110
 Option 3 ID : 6306801249111
 Option 4 ID : 6306801249109
 Status : Answered
 Chosen Option : 1

Q.12 In the following question below are given some statements followed by some conclusions based on those statements. Taking the given statements to be true even if they seem to be at variance from commonly known facts. Read all the conclusions and then decide which of the given conclusion logically follows the given statements.

- Statements:
 I. Some M are G.
 II. All H are B.
 III. Some G are H.
 Conclusions:
 I. Some B are G.
 II. No M is H.
 III. Some G are not B.

- Ans

1. Neither conclusion I nor II nor III follows

2. Only conclusion I follows

3. Only conclusion II follows

4. Only conclusion III follows

Question ID : 630680321088
 Option 1 ID : 6306801249076
 Option 2 ID : 6306801249073
 Option 3 ID : 6306801249074
 Option 4 ID : 6306801249075
 Status : Answered
 Chosen Option : 2

Q.13 Six person A, B, C, W, X and Y are sitting around a circular table facing opposite to the centre (not necessarily in the same order). A is second to the right of X. C is the immediate neighbour of both A and Y. W is fourth to the right of B. Who is to the immediate left of X?

- Ans

1. Y

2. W

3. A

4. B

Question ID : 630680321085
 Option 1 ID : 6306801249062
 Option 2 ID : 6306801249061
 Option 3 ID : 6306801249064
 Option 4 ID : 6306801249063
 Status : Answered
 Chosen Option : 2

Q.14 In the following question, select the missing number from the given series.
100, 99, 95, 79, ?, -241

Ans ☒ 1. 15

☐ 2. 18

☐ 3. 50

☐ 4. 20

Question ID : 630680321104
Option 1 ID : 6306801249140
Option 2 ID : 6306801249137
Option 3 ID : 6306801249139
Option 4 ID : 6306801249138

Status : Answered

Chosen Option : 1

Q.15 A series is given with one term missing. Select the correct alternative from the given ones
that will complete the series.
PQR, RST, TUV, VWX, ?

Ans ☒ 1. XYZ

☐ 2. WXZ

☐ 3. WXM

☐ 4. XMR

Question ID : 630680321093
Option 1 ID : 6306801249096
Option 2 ID : 6306801249093
Option 3 ID : 6306801249094
Option 4 ID : 6306801249095

Status : Answered

Chosen Option : 1

Q.16 Five students P, Q, R, S and T are sitting in a row facing towards the north (not necessarily in
the same order). P is on the left end of the row. Q is third to the right of P. Only T is sitting
between Q and R. Who is sitting to immediate right of Q?

Ans ☐ 1. T

☒ 2. S

☐ 3. R

☐ 4. P

Question ID : 630680321086
Option 1 ID : 6306801249066
Option 2 ID : 6306801249065
Option 3 ID : 6306801249067
Option 4 ID : 6306801249068

Status : Answered

Chosen Option : 2

Q.17 By interchanging which two numbers the equation will be correct?
 $5 - 6 \times 8 \div 3 + 4 = 5$

- Ans

☒ 1. 8 and 4

☐ 2. 6 and 4

☐ 3. 8 and 3

☐ 4. 4 and 3

Question ID : 630680321107

Option 1 ID : 6306801249150

Option 2 ID : 6306801249152

Option 3 ID : 6306801249149

Option 4 ID : 6306801249151

Status : Answered

Chosen Option : 3

Q.18 If $4\ M\ 10\ N\ 9 = 31$ and $6\ M\ 12\ N\ 20 = 52$, then $8\ M\ 3\ N\ 1 = ?$

- Ans

☐ 1. 25

☒ 2. 23

☐ 3. 20

☐ 4. 35

Question ID : 630680321108

Option 1 ID : 6306801249155

Option 2 ID : 6306801249154

Option 3 ID : 6306801249153

Option 4 ID : 6306801249156

Status : Answered

Chosen Option : 2

Q.19 The word 'REMARKABLE' is written in the reverse order to form a new word. How many pairs (in both forward and backward direction) of letters are there in the newly formed word, which have as many letters between them as in the word as in the english alphabetical order?

- Ans

☐ 1. 6

☐ 2. 0

☒ 3. 2

☐ 4. 4

Question ID : 630680321091

Option 1 ID : 6306801249088

Option 2 ID : 6306801249085

Option 3 ID : 6306801249086

Option 4 ID : 6306801249087

Status : Answered

Chosen Option : 3

Q.20 In the following question below are given some statements followed by some conclusions based on those statements. Taking the given statements to be true even if they seem to be at variance from commonly known facts. Read all the conclusions and then decide which of the given conclusion logically follows the given statements.

- Statements:
- I. Some Z are K.
- II. All K are G.
- Conclusion:
- I. All G are Z.
- II. No K is Z.

- Ans
- ☒

1. Only conclusion I follows
- ☒

2. Neither conclusion I nor II follows
- ☒

3. Both conclusions I and II follows
- ☒

4. Only conclusion II follows

Question ID : 630680321087

Option 1 ID : 6306801249069

Option 2 ID : 6306801249072

Option 3 ID : 6306801249071

Option 4 ID : 6306801249070

Status : Answered

Chosen Option : 2

Q.21 In the following question, select the missing number from the given series.
100, 104, 96, 108, 92, ?

- Ans
- ☒

1. 115
- ☒

2. 110
- ☒

3. 114
- ☒

4. 112

Question ID : 630680321105

Option 1 ID : 6306801249143

Option 2 ID : 6306801249144

Option 3 ID : 6306801249142

Option 4 ID : 6306801249141

Status : Answered

Chosen Option : 4

Q.22 A series is given with one term missing. Select the correct alternative from the given ones that will complete the series.
NR, QH, TX, WN, ?

- Ans
- ☒

1. ZA
- ☒

2. ZR
- ☒

3. ZD
- ☒

4. ZM

Question ID : 630680321094

Option 1 ID : 6306801249097

Option 2 ID : 6306801249100

Option 3 ID : 6306801249098

Option 4 ID : 6306801249099

Status : Answered

Chosen Option : 3

Q.23 Consider the string given below made up of digits from 0 to 9. How many 3's are immediately preceded by 5 but not immediately followed by 3 or 5?

5 9 8 8 7 8 9 7 8
8 8 3 3 9 3 5 9 5
3 5 5 3 7 3 3

- Ans ☒ 1. 3
☒ 2. 1
☒ 3. 2
☒ 4. 0

Question ID : 630680321090
Option 1 ID : 6306801249084
Option 2 ID : 6306801249082
Option 3 ID : 6306801249083
Option 4 ID : 6306801249081
Status : Answered
Chosen Option : 4

Q.24 Consider the string given below made up of letters and symbols. How many letters are immediately preceded and immediately followed by symbols?

G @ W @ G W G G
\$ @ @ @ @ W @ G
W \$ @ \$ G \$ \$ \$ \$

- Ans ☒ 1. 3
☒ 2. 1
☒ 3. 5
☒ 4. 2

Question ID : 630680321089
Option 1 ID : 6306801249079
Option 2 ID : 6306801249077
Option 3 ID : 6306801249080
Option 4 ID : 6306801249078
Status : Answered
Chosen Option : 1

Q.25 In the following question, select the related letters from the given alternatives.
UTV : QPR :: FCQ : ?

- Ans ☒ 1. BXM
☒ 2. CXN
☒ 3. BYM
☒ 4. CYN

Question ID : 630680321098
Option 1 ID : 6306801249113
Option 2 ID : 6306801249116
Option 3 ID : 6306801249114
Option 4 ID : 6306801249115
Status : Answered
Chosen Option : 3

Q.1 Select the most appropriate synonym of the given word.

Corp

- Ans
- ☒ 1. Whole
 - ☒ 2. Individual
 - ☒ 3. Connection
 - ☒ 4. Contingent

Question ID : 630680321121
Option 1 ID : 6306801249207
Option 2 ID : 6306801249208
Option 3 ID : 6306801249205
Option 4 ID : 6306801249206
Status : Answered
Chosen Option : 4

Q.2 Select the most appropriate meaning of the given proverb.

Once bitten, twice shy

- Ans
- ☒ 1. If one has been hurt then he will be more careful the next time
 - ☒ 2. If you take up a task without much thought you may have great difficulty in completing it
 - ☒ 3. Those who learn from mistakes become doubly confident of handling such situations in future
 - ☒ 4. An introverted person will always feel awkward in a gathering

Question ID : 630680321128
Option 1 ID : 6306801249235
Option 2 ID : 6306801249234
Option 3 ID : 6306801249236
Option 4 ID : 6306801249233
Status : Answered
Chosen Option : 1

Q.3 Select the most appropriate synonym of the given word.

Rancor

- Ans
- ☒ 1. Stale
 - ☒ 2. Reverence
 - ☒ 3. Acrimony
 - ☒ 4. Comradery

Question ID : 630680321130
Option 1 ID : 6306801249241
Option 2 ID : 6306801249243
Option 3 ID : 6306801249244
Option 4 ID : 6306801249242
Status : Answered
Chosen Option : 3

Q.4 Select the most appropriate antonym of the given word.

Mediocre

- Ans ☒ 1. occasional
☒ 2. extraordinary
☒ 3. decent
☒ 4. niche

Question ID : 630680321122
Option 1 ID : 6306801249212
Option 2 ID : 6306801249210
Option 3 ID : 6306801249211
Option 4 ID : 6306801249209
Status : Answered
Chosen Option : 2

Q.5 Fill in the blank with the most appropriate option.

'My Lord, you should wait _____,' said Taman.

- Ans ☒ 1. otherside
☒ 2. backside
☒ 3. in
☒ 4. inside

Question ID : 630680321116
Option 1 ID : 6306801249186
Option 2 ID : 6306801249188
Option 3 ID : 6306801249185
Option 4 ID : 6306801249187
Status : Answered
Chosen Option : 4

Q.6 Select the most appropriate antonym of the given word.

Destitution

- Ans ☒ 1. Adulation
☒ 2. Felicitation
☒ 3. Thievery
☒ 4. Affluence

Question ID : 630680321129
Option 1 ID : 6306801249240
Option 2 ID : 6306801249239
Option 3 ID : 6306801249238
Option 4 ID : 6306801249237
Status : Answered
Chosen Option : 4

Q.7 Select the most appropriate meaning of the given proverb.

A journey of a thousand miles begins with a single step.

- Ans
1. What is “beautiful” is different for each person.
-
2. If something takes time to do, it doesn’t help to constantly check on it.

Question ID : 630680321119

Option 1 ID : 6306801249198

Option 2 ID : 6306801249197

Option 3 ID : 6306801249199

Option 4 ID : 6306801249200

Status : Answered

Chosen Option : 4

Q.8 Select the most appropriate word for the given phrase.

A group of fishes.

- Ans
1. Bunch of fishes.
-
2. Camp of fishes.

Question ID : 630680321110

Option 1 ID : 6306801249161

Option 2 ID : 6306801249163

Option 3 ID : 6306801249164

Option 4 ID : 6306801249162

Status : Answered

Chosen Option : 3

Q.9 Fill in the blank with the most appropriate option.

As his heart sank deeper and his tears rose, he _____ the portion the old man gave him quickly.

- Ans
1. dye
-
2. ate

Question ID : 630680321126

Option 1 ID : 6306801249228

Option 2 ID : 6306801249226

Option 3 ID : 6306801249225

Option 4 ID : 6306801249227

Status : Answered

Chosen Option : 4

Q.10 Fill in the blank with the most appropriate option.

Vraka _____ rose and saluted his commander.

- Ans

 1. fast

 2. moreover

 3. rapidly

 4. immediately

Question ID : 630680321115

Option 1 ID : 6306801249183

Option 2 ID : 6306801249184

Option 3 ID : 6306801249181

Option 4 ID : 6306801249182

Status : Answered

Chosen Option : 2

Q.11 Four words are given, out of which only one word is spelt correct. Choose the correct spelt word.

- Ans

 1. RELEVANT

 2. TWELTH

 3. NOTICIBLE

 4. LEISURE

Question ID : 630680321123

Option 1 ID : 6306801249213

Option 2 ID : 6306801249214

Option 3 ID : 6306801249215

Option 4 ID : 6306801249216


Status : Answered


Chosen Option : 4

Q.12 Select the most appropriate antonym of the given word.


Astute

- Ans

 1. canny

 2. clever

 3. keen

 4. foolish

Question ID : 630680321120

Option 1 ID : 6306801249201

Option 2 ID : 6306801249203

Option 3 ID : 6306801249202

Option 4 ID : 6306801249204

Status : Answered

Chosen Option : 2

Q.13 Four sentences are given, out of which one sentence has spelling errors. Choose the sentence with incorrect spelt words.

- Ans ☒ 1. Likewise, I may update this peice as more information becomes available.
- ☐ 2. I contrived in an hour or two to print and smear the epistle.
- ☐ 3. They packed up as quickly as their chilled fingers would work.
- ☐ 4. Their ponies were standing crowded together with their heads down.

Question ID : 630680321124
Option 1 ID : 6306801249218
Option 2 ID : 6306801249219
Option 3 ID : 6306801249220
Option 4 ID : 6306801249217
Status : Answered
Chosen Option : 2

Q.14 Fill in the blank with the most appropriate option.

She is the class teacher, _____ she?

- Ans ☐ 1. can't
- ☒ 2. isn't
- ☐ 3. is
- ☐ 4. can

Question ID : 630680321117
Option 1 ID : 6306801249191
Option 2 ID : 6306801249192
Option 3 ID : 6306801249189
Option 4 ID : 6306801249190
Status : Answered
Chosen Option : 2

Q.15 Select the most appropriate meaning of the given idiom.

Not all moonlight and roses

- Ans ☐ 1. An urgent situation.
- ☒ 2. Not always pleasant.
- ☐ 3. To make a bad situation worse.
- ☐ 4. To make someone angry.

Question ID : 630680321118
Option 1 ID : 6306801249195
Option 2 ID : 6306801249193
Option 3 ID : 6306801249196
Option 4 ID : 6306801249194
Status : Answered
Chosen Option : 2

Q.16 The sentence given below is divided into multiple segments. The first and last parts are given. The remaining parts of the sentence are listed in a jumbled order. Choose the option that arranges these parts in logical sequence.

It was late in the morning the next day

- A. and Kanakhala waiting for him. A surprise
- B. when Shiva and Nandi entered the private
- C. Shiva said, 'I am sorry your Highness,
- D. royal office to find Daksha, Parvateshwar

I hope I haven't kept you waiting.'

- Ans
- ☒ 1. ACDB
 - ☒ 2. BDAC
 - ☒ 3. DCBA
 - ☒ 4. CABD

Question ID : 630680321114
Option 1 ID : 6306801249179
Option 2 ID : 6306801249177
Option 3 ID : 6306801249178
Option 4 ID : 6306801249180
Status : Answered
Chosen Option : 2

Q.17 Fill in the blank with the most appropriate option.

He extended his arms and touched the _____ of the old man.

- Ans
- ☒ 1. heir
 - ☒ 2. feet
 - ☒ 3. air
 - ☒ 4. feat

Question ID : 630680321125
Option 1 ID : 6306801249224
Option 2 ID : 6306801249221
Option 3 ID : 6306801249223
Option 4 ID : 6306801249222
Status : Answered
Chosen Option : 2

Q.18 Select the most appropriate word for the given phrase.

Fear of closed space.

- Ans
- ☒ 1. Hydrophobia
 - ☒ 2. Claustrophobia
 - ☒ 3. Zoophobia
 - ☒ 4. Aerophobia

Question ID : 630680321111
Option 1 ID : 6306801249167
Option 2 ID : 6306801249168
Option 3 ID : 6306801249165
Option 4 ID : 6306801249166
Status : Answered
Chosen Option : 4

Q.19 The sentence given below is divided into multiple segments. The first and last parts are given. The remaining parts of the sentence are listed in a jumbled order. Choose the option that arranges these parts in logical sequence.

The vision melted into waking;

- A. and through the open window. Outside
- B. and there was Tom whistling like
- C. already slanting down the hill
- D. a tree-full of birds; and the sun was

everything was green and pale gold.

- Ans
- ☒ 1. CADB
 - ☒ 2. ABCD
 - ☒ 3. BDCA
 - ☒ 4. DCBA

Question ID : 630680321113
Option 1 ID : 6306801249175
Option 2 ID : 6306801249174
Option 3 ID : 6306801249176
Option 4 ID : 6306801249173
Status : Answered
Chosen Option : 3

Q.20 Select the most appropriate meaning of the given idiom.

Take a rain check

- Ans
- ☒ 1. Be extra weary of unexpected natural events
 - ☒ 2. To refuse an offer or invitation politely
 - ☒ 3. To save money for an emergency
 - ☒ 4. To check if you have the requisite resources

Question ID : 630680321127
Option 1 ID : 6306801249230
Option 2 ID : 6306801249229
Option 3 ID : 6306801249231
Option 4 ID : 6306801249232
Status : Answered
Chosen Option : 1

Q.21 Select the word segment that substitutes (replaces) the bracketed word segment correctly and completes the sentence meaningfully. Select the option 'no correction required' if the sentence is correct as given.

After that the talk got further and further away, and I (couldn't make off the) words any more.

- Ans
- ☒ 1. could made off the
 - ☒ 2. couldn't cut out the
 - ☒ 3. couldn't make out the
 - ☒ 4. No correction required

Question ID : 630680321112
Option 1 ID : 6306801249170
Option 2 ID : 6306801249171
Option 3 ID : 6306801249169
Option 4 ID : 6306801249172
Status : Answered
Chosen Option : 1

Comprehension:
Read the given passage carefully and select the most appropriate answer to the questions that follow.

In the library I found, to my great delight, a vast number of English books, whole shelves full of them, and bound volumes of magazines and newspapers. A table in the centre was littered with English magazines and newspapers, though none of them were of very recent date. The books were of the most varied kind, history, geography, politics, political economy, botany, geology, law, all relating to England and English life and customs and manners. There were even such books of reference as the London Directory, the "Red" and "Blue" books, Whitaker's Almanac, the Army and Navy Lists, and it somehow gladdened my heart to see it, the Law List. Whilst I was looking at the books, the door opened, and the Count entered. He saluted me in a hearty way, and hoped that I had had a good night's rest. Then he went on.

SubQuestion No : 22

Q.22 Select the options the most appropriate meaning of the bracketed word given in the sentence below.

'...whole shelves full of them, and (bound) volumes of magazines and newspapers...'

- Ans
1. huge

2. irresolute

3. free

4. tied

Question ID : 630680321135

Option 1 ID : 6306801249259

Option 2 ID : 6306801249257

Option 3 ID : 6306801249258

Option 4 ID : 6306801249260

Status : Answered

Chosen Option : 1

Comprehension:
Read the given passage carefully and select the most appropriate answer to the questions that follow.

In the library I found, to my great delight, a vast number of English books, whole shelves full of them, and bound volumes of magazines and newspapers. A table in the centre was littered with English magazines and newspapers, though none of them were of very recent date. The books were of the most varied kind, history, geography, politics, political economy, botany, geology, law, all relating to England and English life and customs and manners. There were even such books of reference as the London Directory, the "Red" and "Blue" books, Whitaker's Almanac, the Army and Navy Lists, and it somehow gladdened my heart to see it, the Law List. Whilst I was looking at the books, the door opened, and the Count entered. He saluted me in a hearty way, and hoped that I had had a good night's rest. Then he went on.

SubQuestion No : 23

Q.23 Identify the correct inference that can be drawn from the passage.

- Ans
1. The library was dull and had not many books.

2. The library was old and not updated.

3. There were no reference books in the library.

4. The library seemed like an astronomical laboratory.

Question ID : 630680321134

Option 1 ID : 6306801249254

Option 2 ID : 6306801249256

Option 3 ID : 6306801249253

Option 4 ID : 6306801249255

Status : Answered

Chosen Option : 3

Comprehension:
 Read the given passage carefully and select the most appropriate answer to the questions that follow.

In the library I found, to my great delight, a vast number of English books, whole shelves full of them, and bound volumes of magazines and newspapers. A table in the centre was littered with English magazines and newspapers, though none of them were of very recent date. The books were of the most varied kind, history, geography, politics, political economy, botany, geology, law, all relating to England and English life and customs and manners. There were even such books of reference as the London Directory, the "Red" and "Blue" books, Whitaker's Almanac, the Army and Navy Lists, and it somehow gladdened my heart to see it, the Law List. Whilst I was looking at the books, the door opened, and the Count entered. He saluted me in a hearty way, and hoped that I had had a good night's rest. Then he went on.

SubQuestion No : 24

Q.24 From the given options, identify the suitable title for the passage.

- Ans

✖ 1. The Happy Day
 ✖ 2. The Count
 ✖ 3. London Directory
 ✔ 4. A Day at the Library

Question ID : 630680321132
 Option 1 ID : 6306801249248
 Option 2 ID : 6306801249247
 Option 3 ID : 6306801249245
 Option 4 ID : 6306801249246
 Status : Answered
 Chosen Option : 4

Comprehension:
 Read the given passage carefully and select the most appropriate answer to the questions that follow.

In the library I found, to my great delight, a vast number of English books, whole shelves full of them, and bound volumes of magazines and newspapers. A table in the centre was littered with English magazines and newspapers, though none of them were of very recent date. The books were of the most varied kind, history, geography, politics, political economy, botany, geology, law, all relating to England and English life and customs and manners. There were even such books of reference as the London Directory, the "Red" and "Blue" books, Whitaker's Almanac, the Army and Navy Lists, and it somehow gladdened my heart to see it, the Law List. Whilst I was looking at the books, the door opened, and the Count entered. He saluted me in a hearty way, and hoped that I had had a good night's rest. Then he went on.

SubQuestion No : 25

Q.25 Which of the following statements is NOT true with respect to the passage.

- Ans

✖ 1. There was a table in the centre which was littered with magazines.
 ✔ 2. The protagonist was alone at the library throughout.
 ✖ 3. The protagonist was glad to see the Law List at the library.
 ✖ 4. The protagonist was delighted to see the variety of books at the library.

Question ID : 630680321133
 Option 1 ID : 6306801249252
 Option 2 ID : 6306801249250
 Option 3 ID : 6306801249251
 Option 4 ID : 6306801249249
 Status : Answered
 Chosen Option : 2

Q.1 निम्नलिखित प्रश्न में, चार विकल्पों में से, उस विकल्प का चयन करें जो विलोम शब्द का सबसे अच्छा विकल्प है।

तिमिर

- Ans ☒ 1. प्रकाश
☐ 2. अँधेरा
☐ 3. पंछी
☐ 4. चेतन

Question ID : 630680321156
Option 1 ID : 6306801249344
Option 2 ID : 6306801249342
Option 3 ID : 6306801249341
Option 4 ID : 6306801249343
Status : Not Answered
Chosen Option : --

Q.2 निम्नलिखित प्रश्न में, चार विकल्पों में से, उस विकल्प का चयन करें जो दिए गए लोकोक्ति का सही अर्थ वाला विकल्प है।

सहज पके सो मीठा होय

- Ans ☐ 1. दो व्यक्तियों में अंतर होना
☐ 2. अस्थिरता के कारण कहीं का ना होना
☐ 3. थोड़ा सा शेष रहना
☒ 4. धीरे-धीरे कार्य में लगे रहने से परिणाम अच्छा मिलता है

Question ID : 630680321150
Option 1 ID : 6306801249318
Option 2 ID : 6306801249319
Option 3 ID : 6306801249317
Option 4 ID : 6306801249320
Status : Not Answered
Chosen Option : --

Q.3 निम्नलिखित प्रश्न में, चार विकल्पों में से, उस विकल्प का चयन करें जो सदैव एकवचन शब्द का विकल्प नहीं है।

- Ans ☒ 1. बाल
☐ 2. वर्षा
☐ 3. आकाश
☐ 4. आग

Question ID : 630680321147
Option 1 ID : 6306801249305
Option 2 ID : 6306801249306
Option 3 ID : 6306801249308
Option 4 ID : 6306801249307
Status : Not Answered
Chosen Option : --

Q.4 निम्नलिखित प्रश्न में, चार विकल्पों में से, उस विकल्प का चयन करें जो दिए गए शब्द के पर्यायवाची शब्द का सही विकल्प नहीं है।

सायक

- Ans ☒ 1. तीर
☒ 2. सारंग
☒ 3. शर
☒ 4. शिलीमुख

Question ID : 630680321155
Option 1 ID : 6306801249339
Option 2 ID : 6306801249337
Option 3 ID : 6306801249340
Option 4 ID : 6306801249338
Status : Not Answered
Chosen Option : --

Q.5 निम्नलिखित विकल्पों में से कौन सा विकल्प एक सुसंगत अनुच्छेद बनाने के लिए वाक्यों को सही ढंग से व्यवस्थित करता है?

- A - क्योंकि संस्कृति विचार व आचरण के वे नियम और मूल्य हैं जिन्हें कोई अपने अतीत से प्राप्त करता है।
B - इसलिए कहा जाता है कि इसे हम अतीत से अपनी विरासत के रूप में प्राप्त करते हैं।
C - वास्तव में संस्कृति का निर्माण एक लंबी परम्परा के बाद होता है।
D - संस्कृति का सामान्य अर्थ है, मानव जीवन के दैनिक आचार-व्यवहार, रहन-सहन तथा क्रिया-कलाप आदि।

- Ans ☒ 1. DCAB
☒ 2. ABDC
☒ 3. BCDA
☒ 4. BCAD

Question ID : 630680321138
Option 1 ID : 6306801249272
Option 2 ID : 6306801249270
Option 3 ID : 6306801249269
Option 4 ID : 6306801249271
Status : Not Answered
Chosen Option : --

Q.6 निम्नलिखित प्रश्न में, चार विकल्पों में से, उस विकल्प का चयन करें जो उपसर्ग से बने शब्द का सही विकल्प हो।

- Ans ☒ 1. धुलाई
☒ 2. बसेरा
☒ 3. दुर्भावना
☒ 4. छलनी

Question ID : 630680321141
Option 1 ID : 6306801249284
Option 2 ID : 6306801249282
Option 3 ID : 6306801249281
Option 4 ID : 6306801249283
Status : Not Answered
Chosen Option : --

Q.7 निम्नलिखित प्रश्न में, चार विकल्पों में से, उस विकल्प का चयन करें जो स्त्रीलिंग रूप वाला विकल्प है।

- Ans
- ☒ 1. बचाव
 - ☒ 2. मंत्र
 - ☒ 3. पहनावा
 - ☒ 4. अदालत

Question ID : 630680321146
 Option 1 ID : 6306801249303
 Option 2 ID : 6306801249301
 Option 3 ID : 6306801249304
 Option 4 ID : 6306801249302
 Status : Not Answered
 Chosen Option : --

Q.8 निम्नलिखित प्रश्न में, चार विकल्पों में से, उस विकल्प का चयन करें जो क्रिया के भेद वाला सही विकल्प हो।

दीपक ने अपनी छोटी बहन से घर साफ करवाया।

- Ans
- ☒ 1. प्रेरणार्थक क्रिया
 - ☒ 2. पूर्वकालिक क्रिया
 - ☒ 3. नामधातु क्रिया
 - ☒ 4. संयुक्त क्रिया

Question ID : 630680321143
 Option 1 ID : 6306801249291
 Option 2 ID : 6306801249292
 Option 3 ID : 6306801249290
 Option 4 ID : 6306801249289
 Status : Not Answered
 Chosen Option : --

Q.9 निम्नलिखित प्रश्न में, चार विकल्पों में से, उस सही विकल्प का चयन करें जो वाक्यांशों के लिए एक शब्द का विकल्प हो।

जिसका मन जगत से उचट गया हो

- Ans
- ☒ 1. उदासीन
 - ☒ 2. उच्छिष्ट
 - ☒ 3. ऊसर
 - ☒ 4. ऊहापोह

Question ID : 630680321140
 Option 1 ID : 6306801249277
 Option 2 ID : 6306801249278
 Option 3 ID : 6306801249279
 Option 4 ID : 6306801249280
 Status : Not Answered
 Chosen Option : --

Q.10 निम्नलिखित प्रश्न में, चार विकल्पों में से, उस सही विकल्प का चयन करें जो वाक्यांशों के लिए एक शब्द का विकल्प हो।

जिसकी आशा नहीं की गई हो

- Ans
- ☒ 1. अप्रहत
 - ☒ 2. अभिप्सा
 - ☒ 3. अभियुक्त
 - ☒ 4. अप्रत्याशित

Question ID : 630680321139
Option 1 ID : 6306801249273
Option 2 ID : 6306801249274
Option 3 ID : 6306801249276
Option 4 ID : 6306801249275
Status : Not Answered
Chosen Option : --

Q.11 निम्नलिखित प्रश्न में, चार विकल्पों में से, उस विकल्प का चयन करें जो भाववाचक संज्ञा का सही विकल्प नहीं है।

- Ans
- ☒ 1. ममता
 - ☒ 2. योगी
 - ☒ 3. प्रताप
 - ☒ 4. भिन्नता

Question ID : 630680321144
Option 1 ID : 6306801249296
Option 2 ID : 6306801249295
Option 3 ID : 6306801249293
Option 4 ID : 6306801249294
Status : Not Answered
Chosen Option : --

Q.12 निम्नलिखित प्रश्न में, चार विकल्पों में से, उस विकल्प का चयन करें जो विलोम शब्द का सबसे अच्छा विकल्प है।

अग्रिम

- Ans
- ☒ 1. उद्यमी
 - ☒ 2. अचानक
 - ☒ 3. अंतिम
 - ☒ 4. उधार

Question ID : 630680321152
Option 1 ID : 6306801249327
Option 2 ID : 6306801249328
Option 3 ID : 6306801249325
Option 4 ID : 6306801249326
Status : Not Answered
Chosen Option : --

Q.13 निम्नलिखित विकल्पों में से कौन सा विकल्प एक सुसंगत वाक्य बनाने के लिए वाक्यांशों को सही ढंग से व्यवस्थित करता है?
A - जहाँ का प्राकृतिक सौंदर्य
B - फूलों की घाटी एक ऐसा स्थान है
C - देखते ही बनता है
D - उत्तराखंड की पर्वतमालाओं में

Ans ☒ 1. DBAC

☒ 2. CBDA

☒ 3. CABD

☒ 4. DACB

Question ID : 630680321136

Option 1 ID : 6306801249264

Option 2 ID : 6306801249261

Option 3 ID : 6306801249263

Option 4 ID : 6306801249262

Status : Not Answered

Chosen Option : --

Q.14 निम्नलिखित विकल्पों में से कौन सा विकल्प एक सुसंगत वाक्य बनाने के लिए वाक्यांशों को सही ढंग से व्यवस्थित करता है?
A - कम बीमार पड़ते हैं
B - जो लोग ठंडे पानी से
C - नहाते हैं वे बहुत
D - अक्सर आपने देखा होगा कि

Ans ☒ 1. DABC

☒ 2. CABD

☒ 3. CBDA

☒ 4. DBCA

Question ID : 630680321137

Option 1 ID : 6306801249265

Option 2 ID : 6306801249268

Option 3 ID : 6306801249267

Option 4 ID : 6306801249266

Status : Not Answered

Chosen Option : --

Q.15 निम्नलिखित प्रश्न में, चार विकल्पों में से, उस विकल्प का चयन करें जो दिए गए शब्द के बहुवचन रूप का सबसे अच्छा विकल्प है।

धातु

Ans ☒ 1. धातुओ

☒ 2. धतुयें

☒ 3. धातुये

☒ 4. धातुएँ

Question ID : 630680321148

Option 1 ID : 6306801249309

Option 2 ID : 6306801249312

Option 3 ID : 6306801249311

Option 4 ID : 6306801249310

Status : Not Answered

Chosen Option : --

Q.16 निम्नलिखित प्रश्न में, चार विकल्पों में से, उस विकल्प का चयन करें जो प्रत्यय से बने शब्द का सही विकल्प हो।

- Ans
- ☒ 1. सुगति
 - ☒ 2. निर्गुण
 - ☒ 3. मनौती
 - ☒ 4. अवशेष

Question ID : 630680321142
Option 1 ID : 6306801249288
Option 2 ID : 6306801249285
Option 3 ID : 6306801249286
Option 4 ID : 6306801249287
Status : Not Answered
Chosen Option : --

Q.17 निम्नलिखित प्रश्न में, चार विकल्पों में से, उस विकल्प का चयन करें जो पुल्लिङ्ग रूप वाला विकल्प है।

- Ans
- ☒ 1. प्यास
 - ☒ 2. राहत
 - ☒ 3. झगड़ा
 - ☒ 4. थकावट

Question ID : 630680321145
Option 1 ID : 6306801249298
Option 2 ID : 6306801249297
Option 3 ID : 6306801249300
Option 4 ID : 6306801249299
Status : Not Answered
Chosen Option : --

Q.18 निम्नलिखित प्रश्न में, चार विकल्पों में से, उस विकल्प का चयन करें जो दिए गए शब्द के पर्यायवाची शब्द का सही विकल्प नहीं है।

धूप

- Ans
- ☒ 1. घाम
 - ☒ 2. रविप्रभा
 - ☒ 3. आतप
 - ☒ 4. संपदा

Question ID : 630680321151
Option 1 ID : 6306801249321
Option 2 ID : 6306801249324
Option 3 ID : 6306801249323
Option 4 ID : 6306801249322
Status : Not Answered
Chosen Option : --

Q.19 निम्नलिखित प्रश्न में, चार विकल्पों में से, उस विकल्प का चयन करें जो दी गई मुहावरे का सही अर्थ वाला विकल्प है।

कच्चे घड़े से पानी भरना

- Ans ☒ 1. ठीक ढंग से काम नहीं करना
- ☒ 2. बहुत मेहनत का काम
- ☒ 3. तितर बितर करना
- ☒ 4. बहुत प्यासा होना

Question ID : 630680321153
Option 1 ID : 6306801249331
Option 2 ID : 6306801249329
Option 3 ID : 6306801249332
Option 4 ID : 6306801249330
Status : Not Answered
Chosen Option : --

Q.20 निम्नलिखित प्रश्न में, चार विकल्पों में से, उस विकल्प का चयन करें जो दी गई मुहावरे का सही अर्थ वाला विकल्प है।

कोल्हू का बैल होना

- Ans ☒ 1. निरंतर कार्य करते रहना
- ☒ 2. कष्टदायक बात सहना
- ☒ 3. खोता आदमी
- ☒ 4. अस्थायी वस्तु

Question ID : 630680321149
Option 1 ID : 6306801249315
Option 2 ID : 6306801249313
Option 3 ID : 6306801249314
Option 4 ID : 6306801249316
Status : Not Answered
Chosen Option : --

Q.21 निम्नलिखित प्रश्न में, चार विकल्पों में से, उस विकल्प का चयन करें जो दिए गए लोकोक्ति का सही अर्थ वाला विकल्प है।

कूद-कूद मछली बगुले को खाए

- Ans ☒ 1. किसी प्रकार का भेदभाव न करना
- ☒ 2. पूर्णतः प्रतिकूल काम को करना
- ☒ 3. कुछ प्रयत्न से ही फल मिलता है
- ☒ 4. केवल दिखावा

Question ID : 630680321154
Option 1 ID : 6306801249333
Option 2 ID : 6306801249334
Option 3 ID : 6306801249335
Option 4 ID : 6306801249336
Status : Not Answered
Chosen Option : --

Comprehension:

नीचे दिए गये गद्यांश के बाद 4 प्रश्न दिए गये हैं। इस गद्यांश को ध्यानपूर्वक पढ़ें और चार विकल्पों में से प्रत्येक प्रश्न का सर्वोत्तम उत्तर चुनें।

अमृत तो प्रत्येक प्राणी के हृदय में समाया हुआ है, जरूरत है तो उसे जानने की। इस काया के अन्दर भरपूर अमृत है। गुरु के शब्द पर विचार करके ही उसे प्राप्त किया जा सकता है। जो प्रभु की खोज करते हैं वह इस अमृत को देह से ही प्राप्त करते हैं लेकिन गुरु के शब्द पर विचार न कर पाने के कारण अज्ञानी जीव व्यर्थ ही नष्ट हो जाता है। इस शरीर के नौ द्वार हैं परन्तु इन नौ द्वारों में से हमें अमृत प्राप्ति नहीं हो सकती क्योंकि वह दसवें द्वार में स्थित है। मनुष्य नौ द्वारों के रहस्य को तो जानता है परन्तु गुरु रूपी दसवें द्वार को भूला हुआ है। गुरु का कार्य उस द्वार को प्रकट करना है। यदि अन्तर में परमपिता परमात्मा से हमें प्रेम है, परन्तु जब तक हमें परमात्मा के दर्शन नहीं होते हम तब तक अमृतपान नहीं कर सकते।

SubQuestion No : 22

Q.22 अनुच्छेद के अनुसार दसवें द्वार क्या है?

- Ans ☒ 1. विचार
☒ 2. गुरु
☒ 3. अज्ञान
☒ 4. प्रेम

Question ID : 630680321159
Option 1 ID : 6306801249349
Option 2 ID : 6306801249352
Option 3 ID : 6306801249350
Option 4 ID : 6306801249351
Status : Not Answered

Chosen Option : --

Comprehension:

नीचे दिए गये गद्यांश के बाद 4 प्रश्न दिए गये हैं। इस गद्यांश को ध्यानपूर्वक पढ़ें और चार विकल्पों में से प्रत्येक प्रश्न का सर्वोत्तम उत्तर चुनें।

अमृत तो प्रत्येक प्राणी के हृदय में समाया हुआ है, जरूरत है तो उसे जानने की। इस काया के अन्दर भरपूर अमृत है। गुरु के शब्द पर विचार करके ही उसे प्राप्त किया जा सकता है। जो प्रभु की खोज करते हैं वह इस अमृत को देह से ही प्राप्त करते हैं लेकिन गुरु के शब्द पर विचार न कर पाने के कारण अज्ञानी जीव व्यर्थ ही नष्ट हो जाता है। इस शरीर के नौ द्वार हैं परन्तु इन नौ द्वारों में से हमें अमृत प्राप्ति नहीं हो सकती क्योंकि वह दसवें द्वार में स्थित है। मनुष्य नौ द्वारों के रहस्य को तो जानता है परन्तु गुरु रूपी दसवें द्वार को भूला हुआ है। गुरु का कार्य उस द्वार को प्रकट करना है। यदि अन्तर में परमपिता परमात्मा से हमें प्रेम है, परन्तु जब तक हमें परमात्मा के दर्शन नहीं होते हम तब तक अमृतपान नहीं कर सकते।

SubQuestion No : 23

Q.23 निम्न विकल्पों में से कौन-सा विकल्प काया का समानार्थी शब्द नहीं है?

- Ans ☒ 1. तनु
☒ 2. मुख
☒ 3. शरीर
☒ 4. देह

Question ID : 630680321160
Option 1 ID : 6306801249353
Option 2 ID : 6306801249354
Option 3 ID : 6306801249355
Option 4 ID : 6306801249356
Status : Not Answered

Chosen Option : --

Comprehension:

नीचे दिए गये गद्यांश के बाद 4 प्रश्न दिए गये हैं। इस गद्यांश को ध्यानपूर्वक पढ़ें और चार विकल्पों में से प्रत्येक प्रश्न का सर्वोत्तम उत्तर चुनें।

अमृत तो प्रत्येक प्राणी के हृदय में समाया हुआ है, जरूरत है तो उसे जानने की। इस काया के अन्दर भरपूर अमृत है। गुरु के शब्द पर विचार करके ही उसे प्राप्त किया जा सकता है। जो प्रभु की खोज करते हैं वह इस अमृत को देह से ही प्राप्त करते हैं लेकिन गुरु के शब्द पर विचार न कर पाने के कारण अज्ञानी जीव व्यर्थ ही नष्ट हो जाता है। इस शरीर के नौ द्वार हैं परन्तु इन नौ द्वारों में से हमें अमृत प्राप्ति नहीं हो सकती क्योंकि वह दसवें द्वार में स्थित है। मनुष्य नौ द्वारों के रहस्य को तो जानता है परन्तु गुरु रूपी दसवें द्वार को भूला हुआ है। गुरु का कार्य उस द्वार को प्रकट करना है। यदि अन्तर में परमपिता परमात्मा से हमें प्रेम है, परन्तु जब तक हमें परमात्मा के दर्शन नहीं होते हम तब तक अमृतपान नहीं कर सकते।

SubQuestion No : 24

Q.24 निम्न विकल्पों में से कौन-सा विकल्प नष्ट का विलोम शब्द नहीं है?

- Ans ☒ 1. निर्माण
☒ 2. आरंभ
☒ 3. ध्वंश
☒ 4. उत्थान

Question ID : 630680321161
Option 1 ID : 6306801249357
Option 2 ID : 6306801249360
Option 3 ID : 6306801249359
Option 4 ID : 6306801249358
Status : Not Answered
Chosen Option : --

Comprehension:

नीचे दिए गये गद्यांश के बाद 4 प्रश्न दिए गये हैं। इस गद्यांश को ध्यानपूर्वक पढ़ें और चार विकल्पों में से प्रत्येक प्रश्न का सर्वोत्तम उत्तर चुनें।

अमृत तो प्रत्येक प्राणी के हृदय में समाया हुआ है, जरूरत है तो उसे जानने की। इस काया के अन्दर भरपूर अमृत है। गुरु के शब्द पर विचार करके ही उसे प्राप्त किया जा सकता है। जो प्रभु की खोज करते हैं वह इस अमृत को देह से ही प्राप्त करते हैं लेकिन गुरु के शब्द पर विचार न कर पाने के कारण अज्ञानी जीव व्यर्थ ही नष्ट हो जाता है। इस शरीर के नौ द्वार हैं परन्तु इन नौ द्वारों में से हमें अमृत प्राप्ति नहीं हो सकती क्योंकि वह दसवें द्वार में स्थित है। मनुष्य नौ द्वारों के रहस्य को तो जानता है परन्तु गुरु रूपी दसवें द्वार को भूला हुआ है। गुरु का कार्य उस द्वार को प्रकट करना है। यदि अन्तर में परमपिता परमात्मा से हमें प्रेम है, परन्तु जब तक हमें परमात्मा के दर्शन नहीं होते हम तब तक अमृतपान नहीं कर सकते।

SubQuestion No : 25

Q.25 इस अनुच्छेद का कोई उपयुक्त शीर्षक-

- Ans ☒ 1. परमात्मा का घर
☒ 2. अज्ञानी जीवन
☒ 3. दसवाँ द्वार
☒ 4. अमृत का रहस्य

Question ID : 630680321158
Option 1 ID : 6306801249346
Option 2 ID : 6306801249348
Option 3 ID : 6306801249345
Option 4 ID : 6306801249347
Status : Not Answered
Chosen Option : --