

Question Paper Preview

Notations :

- 1.Options shown in green color and with ✓ icon are correct.
- 2.Options shown in red color and with ✗ icon are incorrect.

Question Paper Name:	PGT HISTORY MALE 5th July 2018 Shift1
Subject Name:	PGT HISTORY MALE
Creation Date:	2018-07-05 13:19:32
Duration:	180
Total Marks:	300
Display Marks:	Yes
Share Answer Key With Delivery Engine:	Yes
Actual Answer Key:	Yes
Calculator:	None
Magnifying Glass Required?:	No
Ruler Required?:	No
Eraser Required?:	No
Scratch Pad Required?:	No
Rough Sketch/Notepad Required?:	No
Protractor Required?:	No

	Mental Ability
Group Number :	1
Group Id :	16794372
Group Maximum Duration :	0
Group Minimum Duration :	0
Revisit allowed for view? :	No
Revisit allowed for edit? :	No
Break time:	0
Group Marks:	20

	Mental Ability
Section Id :	167943131
Section Number :	1
Section type :	Online
Mandatory or Optional:	Mandatory
Number of Questions:	20
Number of Questions to be attempted:	20
Section Marks:	20
Display Number Panel:	Yes
Group All Questions:	No

Test Prime

**ALL EXAMS,
ONE SUBSCRIPTION**



70,000+
Mock Tests



**Personalised
Report Card**



**Unlimited
Re-Attempt**



600+
Exam Covered



**Previous Year
Papers**



**500%
Refund**




ATTEMPT FREE MOCK NOW

Sub-Section Id: 167943318
Question Shuffling Allowed : Yes

Question Number : 1 Question Id : 1679435702 Question Type : MCQ Option Shuffling : Yes Display Question Number : Yes
Single Line Question Option : No Option Orientation : Vertical

Correct : 1 Wrong : 0.25

How many triangles are present in the following figure?



Options :

✗ 16

✓ 27

✗ 29

✗ 32

Question Number : 2 Question Id : 1679435703 Question Type : MCQ Option Shuffling : Yes Display Question Number : Yes
Single Line Question Option : No Option Orientation : Vertical

Correct : 1 Wrong : 0.25

Read the following information carefully and answer the question that follows.

Nine friends are watching a cricket match in a stadium. Seated in one row, they are A, B, C, D, E, F, G, H and I. C is seated to the right of D and to the third place at the right of E. B is at one end of the row. H is seated adjacent to both, F and G. F is at the third place to the left of B. A is right next to the left of F.

Who is sitting at the centre of the row?

Options :

✗ E

✗ F

✗ H

✓ A

Question Number : 3 Question Id : 1679435704 Question Type : MCQ Option Shuffling : Yes Display Question Number : Yes
Single Line Question Option : No Option Orientation : Vertical

Correct : 1 Wrong : 0.25

Consider the following statements labelled as Assertion and Reason and decide whether they are true and the correct explanation of each other.

Assertion (A):

The guide instructs the passengers in a boat that they are not allowed to stand.

Reason (R):

This may raise the centre of gravity of the boat, which may topple over due to unstable equilibrium.

Options :

- ☐ A is true but R is false
- ☐ A is false but R is true
- ☒ Both A and R are true and R is the correct explanation of A
- ☐ Both A and R are true and R is not the correct explanation of A

Question Number : 4 Question Id : 1679435705 Question Type : MCQ Option Shuffling : Yes Display Question Number : Yes
Single Line Question Option : No Option Orientation : Vertical

Correct : 1 Wrong : 0.25

Select the term that relates to the third term in the same way as the second term relates to the first term.

Spain : Madrid : : China : _____

Options :

- ☐ Hong Kong
- ☒ Beijing
- ☐ Shanghai
- ☐ Bangkok

Question Number : 5 Question Id : 1679435706 Question Type : MCQ Option Shuffling : Yes Display Question Number : Yes
Single Line Question Option : No Option Orientation : Vertical

Correct : 1 Wrong : 0.25

The following question has a matrix with a question mark in one block. Replace the question mark by choosing the correct response from amongst the alternatives given:

10	10	110
12	5	149
16	?	272

Options :

✖ 15

✔ 16

✖ 18

✖ 20

Question Number : 6 Question Id : 1679435707 Question Type : MCQ Option Shuffling : Yes Display Question Number : Yes
Single Line Question Option : No Option Orientation : Vertical

Correct : 1 Wrong : 0.25

If 'M' denotes 'multiplication', 'S' denotes 'subtraction', 'A' denotes 'addition' and 'D' denotes 'division', then what will be the value of the expression?

35 D 7 M 8 S 6 A 4 = ?

Options :

✔ 38

✖ 35

✖ 30

✖ 29

Question Number : 7 Question Id : 1679435708 Question Type : MCQ Option Shuffling : Yes Display Question Number : Yes
Single Line Question Option : No Option Orientation : Vertical

Correct : 1 Wrong : 0.25

Akash remembers that his friend Sanjay's birthday is after the 15th but before the 18th of February, whereas his brother Vijay remembers that Sanjay's birthday is after the 16th but before the 19th of February. On which day in February is Sanjay's birthday?

Options :

✖ 15

✖ 16

✔ 17

✖ 19

Question Number : 8 Question Id : 1679435709 Question Type : MCQ Option Shuffling : Yes Display Question Number : Yes
Single Line Question Option : No Option Orientation : Vertical

Correct : 1 Wrong : 0.25

Consider the following question and four arguments that follow and decide which of the arguments is/are strong.

Question:

Should all the private educational institutions in the country be brought under government control?

Arguments:

- I. Yes. Only then the quality of education would be improved.
- II. Yes. This will enable to have standardised education for all students.
- III. No. The government does not have adequate resources to run such institutions effectively.
- IV. No. Each institution should be given freedom to function on its own.

Options :

- ☐ Only argument I is strong
- ☐ Only arguments I, II and III are strong
- ☐ All arguments are strong
- ☒ None of the arguments are strong

Question Number : 9 Question Id : 1679435710 Question Type : MCQ Option Shuffling : Yes Display Question Number : Yes
Single Line Question Option : No Option Orientation : Vertical

Correct : 1 Wrong : 0.25

Find the missing number in the following series.

1, 8, 9, 64, 25, 216, 49, 512, 81, _____

Options :

- ☐ 100
- ☐ 121
- ☒ 1000
- ☐ 1100

Question Number : 10 Question Id : 1679435711 Question Type : MCQ Option Shuffling : Yes Display Question Number : Yes
Single Line Question Option : No Option Orientation : Vertical

Correct : 1 Wrong : 0.25

Priya walks 10 km towards North. From there she walks 7 km towards South. Then she walks 4 km towards East. How far is she with reference to her starting point?

Options :

- ☒ 5 km
- ☐ 3 km

✖ 6 km

✖ 2 km

Question Number : 11 Question Id : 1679435712 Question Type : MCQ Option Shuffling : Yes Display Question Number : Yes
Single Line Question Option : No Option Orientation : Vertical

Correct : 1 Wrong : 0.25

In a certain code language, if BAND is written as YZMW, then what will be the code for MILK?

Options :

✖ NRPO

✔ NROP

✖ KROP

✖ ORPQ

Question Number : 12 Question Id : 1679435713 Question Type : MCQ Option Shuffling : Yes Display Question Number : Yes
Single Line Question Option : No Option Orientation : Vertical

Correct : 1 Wrong : 0.25

Choose the correct alternative for the following.

‘Taxonomy’ is related to ‘Classification’ in the same way as ‘Pathology’ is related to:

Options :

✖ Body

✖ Mind

✔ Diseases

✖ Algae

Question Number : 13 Question Id : 1679435714 Question Type : MCQ Option Shuffling : Yes Display Question Number : Yes
Single Line Question Option : No Option Orientation : Vertical

Correct : 1 Wrong : 0.25

Consider the following statements to be true even if they are at variance from commonly known facts. Decide which of the conclusions logically follows from the statements.

Statements:

- A. Some rivers are ponds.
- B. Some ponds are seas.

Conclusions:

- I. Some seas are ponds.
- II. Some rivers are seas.

Options :

- ☒ Only conclusion I follows
- ☐ Only conclusion II follows
- ☐ Either conclusion I or II follows
- ☐ Neither conclusion I nor II follows

Question Number : 14 Question Id : 1679435715 Question Type : MCQ Option Shuffling : Yes Display Question Number : Yes
Single Line Question Option : No Option Orientation : Vertical
Correct : 1 Wrong : 0.25

Read the following information carefully and answer the question given below.

- (i) U, V, W, X, Y and Z are six members of a family.
- (ii) U is the son of W and Y is the daughter of U.
- (iii) X is the daughter of Z who is the mother of Y.
- (iv) One couple has parents and children in the family.

What relationship do X and Y bear with each other?

Options :

- ☒ Sisters
- ☐ Brothers
- ☐ Sister and Brother
- ☐ Father and Daughter

Question Number : 15 Question Id : 1679435716 Question Type : MCQ Option Shuffling : Yes Display Question Number : Yes
Single Line Question Option : No Option Orientation : Vertical
Correct : 1 Wrong : 0.25

You are a guest at a lunch. The host asks you to take some more rice after your stomach is full. You would:

Options :

- ☐ make a bad face at him.
- ☒ politely say that the food was very good and you have already eaten enough.
- ☐ take the rice.
- ☐ bluntly refuse.

Question Number : 16 Question Id : 1679435717 Question Type : MCQ Option Shuffling : Yes Display Question Number : Yes
Single Line Question Option : No Option Orientation : Vertical

Correct : 1 Wrong : 0.25

In a class of 30 students, 14 students play Cricket and 16 play Hockey, while 8 of them play none of these two games.
How many of the students play both, Cricket and Hockey?

Options :

✗ 2

✗ 4

✗ 5

✓ 8

Question Number : 17 Question Id : 1679435718 Question Type : MCQ Option Shuffling : Yes Display Question Number : Yes
Single Line Question Option : No Option Orientation : Vertical

Correct : 1 Wrong : 0.25

Replace the question mark in the following matrix by choosing the correct response from amongst the alternatives given.

A26	C24
O12	E22
M14	G20
?	I18

Options :

✗ J16

✓ K16

✗ L16

✗ 16J

Question Number : 18 Question Id : 1679435719 Question Type : MCQ Option Shuffling : Yes Display Question Number : Yes
Single Line Question Option : No Option Orientation : Vertical

Correct : 1 Wrong : 0.25

J, K, L, M, N and O are sitting in a row. N and O are in the centre and J and K are at the ends. L is sitting on the left of J. Who is sitting to the right of K?

Options :

✗ N

✗ O

✔ M

✘ L

Question Number : 19 Question Id : 1679435720 Question Type : MCQ Option Shuffling : Yes Display Question Number : Yes
Single Line Question Option : No Option Orientation : Vertical

Correct : 1 Wrong : 0.25

Sheela and Beena started walking simultaneously towards each other from two places 100 m apart. After walking 30 m, Sheela turns left and walks 10 m. Then, she turns right and walks 20 m. She then turns right again and comes back to the road on which she had started walking. If Sheela and Beena walk with the same speed, what is the distance between them at this point of time?

Options :

✔ 20 m

✘ 25 m

✘ 35 m

✘ 50 m

Question Number : 20 Question Id : 1679435721 Question Type : MCQ Option Shuffling : Yes Display Question Number : Yes
Single Line Question Option : No Option Orientation : Vertical

Correct : 1 Wrong : 0.25

Select the term that relates to the third term in the same way as the second term relates to the first term.

6 : 222 :: 10 : _____

Options :

✘ 100

✘ 110

✘ 1001

✔ 1010

General Awareness	
Group Number :	2
Group Id :	16794373
Group Maximum Duration :	0
Group Minimum Duration :	0
Revisit allowed for view? :	No
Revisit allowed for edit? :	No
Break time:	0
Group Marks:	20

General Awareness

Section Id :	167943132
Section Number :	1
Section type :	Online
Mandatory or Optional:	Mandatory
Number of Questions:	20
Number of Questions to be attempted:	20
Section Marks:	20
Display Number Panel:	Yes
Group All Questions:	No

Sub-Section Number:	1
Sub-Section Id:	167943319
Question Shuffling Allowed :	Yes

Question Number : 21 Question Id : 1679435722 Question Type : MCQ Option Shuffling : Yes Display Question Number : Yes
Single Line Question Option : No Option Orientation : Vertical
Correct : 1 Wrong : 0.25

In which of the following years Swami Vivekananda founded Ramakrishna Mission?

Options :

✓ 1897

✗ 1907

✗ 1887

✗ 1901

Question Number : 22 Question Id : 1679435723 Question Type : MCQ Option Shuffling : Yes Display Question Number : Yes
Single Line Question Option : No Option Orientation : Vertical
Correct : 1 Wrong : 0.25

Who among the following was the first ruler of Pala dynasty?

Options :

✓ Gopala

✗ Sishu Pala

✗ Dev Pala

✗ Mahendra Pala

Question Number : 23 Question Id : 1679435724 Question Type : MCQ Option Shuffling : Yes Display Question Number : Yes
Single Line Question Option : No Option Orientation : Vertical

Correct : 1 Wrong : 0.25

Mahatma Gandhi returned to India from South Africa in the year:

Options :

✗ 1905

✗ 1925

✗ 1912

✓ 1915

Question Number : 24 Question Id : 1679435725 Question Type : MCQ Option Shuffling : Yes Display Question Number : Yes
Single Line Question Option : No Option Orientation : Vertical

Correct : 1 Wrong : 0.25

What is the total land and water area of India?

Options :

✓ 3.28 million sq. km.

✗ 4.28 million sq. km.

✗ 5.28 million sq. km.

✗ 6.28 million sq. km.

Question Number : 25 Question Id : 1679435726 Question Type : MCQ Option Shuffling : Yes Display Question Number : Yes
Single Line Question Option : No Option Orientation : Vertical

Correct : 1 Wrong : 0.25

Which of the following rivers is NOT a tributary of Ganga river?

Options :

✗ Gomti

✗ Kosi

✓ Indrawati

✗ Ghaghara

Question Number : 26 Question Id : 1679435727 Question Type : MCQ Option Shuffling : Yes Display Question Number : Yes
Single Line Question Option : No Option Orientation : Vertical

Correct : 1 Wrong : 0.25

The total number of Ministers, including the Prime Minister, in the Council of Ministers, cannot exceed _____ of the total number of members of the Lok Sabha.

Options :

✓ 15%

✗ 25%

✗ 18%

✗ 21%

Question Number : 27 Question Id : 1679435728 Question Type : MCQ Option Shuffling : Yes Display Question Number : Yes
Single Line Question Option : No Option Orientation : Vertical

Correct : 1 Wrong : 0.25

Who is the head of a Council of Ministers of a State Government?

Options :

✗ The Governor

✓ The Chief Minister

✗ The Speaker of the Legislative Assembly

✗ The Vice-President

Question Number : 28 Question Id : 1679435729 Question Type : MCQ Option Shuffling : Yes Display Question Number : Yes
Single Line Question Option : No Option Orientation : Vertical

Correct : 1 Wrong : 0.25

Who among the following nominates one member of the Anglo-Indian Community to the Legislative assembly of a State?

Options :

✗ The Chief Minister

✗ The Speaker of the Legislative Assembly

✓ The Governor

✗ The President

Question Number : 29 Question Id : 1679435730 Question Type : MCQ Option Shuffling : Yes Display Question Number : Yes
Single Line Question Option : No Option Orientation : Vertical

Correct : 1 Wrong : 0.25

What was call/notice money rates per annum for 2016-17?

Options :

✓ 6.25

✗ 4.75

✖ 7.57

✖ 5.35

Question Number : 30 Question Id : 1679435731 Question Type : MCQ Option Shuffling : Yes Display Question Number : Yes
Single Line Question Option : No Option Orientation : Vertical

Correct : 1 Wrong : 0.25

As per its preamble, RBI can't have more than _____ deputy governors.

Options :

✖ one

✖ two

✖ three

✔ four

Question Number : 31 Question Id : 1679435732 Question Type : MCQ Option Shuffling : Yes Display Question Number : Yes
Single Line Question Option : No Option Orientation : Vertical

Correct : 1 Wrong : 0.25

Which of the following famous paintings belongs to the painter Raja Ravi Verma?

Options :

✖ Bharat Mata

✖ Mahishasura

✖ Three Pujarins

✔ Shakuntala

Question Number : 32 Question Id : 1679435733 Question Type : MCQ Option Shuffling : Yes Display Question Number : Yes
Single Line Question Option : No Option Orientation : Vertical

Correct : 1 Wrong : 0.25

The noted dancer Shovana Narayan is an exponent of which of the following dance styles?

Options :

✖ Mohiniyattam

✔ Kathak

✖ Odissi

✖ Kathakali

Question Number : 33 Question Id : 1679435734 Question Type : MCQ Option Shuffling : Yes Display Question Number : Yes
Single Line Question Option : No Option Orientation : Vertical

Correct : 1 Wrong : 0.25

With which musical instrument is the famous musician Pandit Shivkumar Sharma associated?

Options :

✓ Santoor

✗ Flute

✗ Sarod

✗ Mandolin

Question Number : 34 Question Id : 1679435735 Question Type : MCQ Option Shuffling : Yes Display Question Number : Yes
Single Line Question Option : No Option Orientation : Vertical

Correct : 1 Wrong : 0.25

“Flying Sikh” is nick name for which of the following sportsperson?

Options :

✓ Milkha Singh

✗ Sandeep Singh

✗ Dara Singh

✗ Manjeet Singh

Question Number : 35 Question Id : 1679435736 Question Type : MCQ Option Shuffling : Yes Display Question Number : Yes
Single Line Question Option : No Option Orientation : Vertical

Correct : 1 Wrong : 0.25

As of 1st May, 2018 who is the Union Minister of Sports?

Options :

✗ Vijay Goel

✓ Rajyavardhan Singh Rathore

✗ Smriti Irani

✗ Piyush Goyal

Question Number : 36 Question Id : 1679435737 Question Type : MCQ Option Shuffling : Yes Display Question Number : Yes
Single Line Question Option : No Option Orientation : Vertical

Correct : 1 Wrong : 0.25

Which 'Mirror' is used as a side rear view of a vehicle?

Options :

- ☐ Concave mirror
- ☒ Convex mirror
- ☐ Plane mirror
- ☐ Rectangle mirror

Question Number : 37 Question Id : 1679435738 Question Type : MCQ Option Shuffling : Yes Display Question Number : Yes
Single Line Question Option : No Option Orientation : Vertical

Correct : 1 Wrong : 0.25

Regulations regarding members of Board of SEBI are specified in section _____ of SEBI Act, 1992.

Options :

- ☒ 4 (1) (d)
- ☐ 14 (2) (d)
- ☐ 9 (2) (d)
- ☐ 8 (2) (c)

Question Number : 38 Question Id : 1679435739 Question Type : MCQ Option Shuffling : Yes Display Question Number : Yes
Single Line Question Option : No Option Orientation : Vertical

Correct : 1 Wrong : 0.25

What was the theme of World Press Freedom Day 2018?

Options :

- ☐ Keeping Corruption in Check
- ☐ Keeping Monarchy in Check
- ☐ Keeping Democracy in Check
- ☒ Keeping Power in Check

Question Number : 39 Question Id : 1679435740 Question Type : MCQ Option Shuffling : Yes Display Question Number : Yes
Single Line Question Option : No Option Orientation : Vertical

Correct : 1 Wrong : 0.25

In which country was giant mosquito with a wingspan of 11.15 centimetres?

Options :

☒ China

☐ Japan

☐ India

☐ Kenya

Question Number : 40 Question Id : 1679435741 Question Type : MCQ Option Shuffling : Yes Display Question Number : Yes
Single Line Question Option : No Option Orientation : Vertical

Correct : 1 Wrong : 0.25

Which country occupied the first rank in the list of top military spenders in the world in 2017?

Options :

☐ India

☐ China

☒ United States

☐ Russia

Arithmetic Ability	
Group Number :	3
Group Id :	16794374
Group Maximum Duration :	0
Group Minimum Duration :	0
Revisit allowed for view? :	No
Revisit allowed for edit? :	No
Break time:	0
Group Marks:	20

Arithmetic Ability	
Section Id :	167943133
Section Number :	1
Section type :	Online
Mandatory or Optional:	Mandatory
Number of Questions:	17
Number of Questions to be attempted:	17
Section Marks:	20
Display Number Panel:	Yes
Group All Questions:	No

Sub-Section Number: 1
Sub-Section Id: 167943320
Question Shuffling Allowed : Yes

Question Number : 41 Question Id : 1679435742 Question Type : MCQ Option Shuffling : Yes Display Question Number : Yes
Single Line Question Option : No Option Orientation : Vertical

Correct : 1 Wrong : 0.25

In a 3-digit number, the digit at unit's place and the digit at ten's place are 4 times and 2 times the digit at hundred's place, respectively. If the digits at unit's place and ten's place are interchanged, the number so obtained exceeds the original number by 36. If the original number is divided by 13, the remainder is:

Options :

✗ 10

✗ 8

✗ 5

✓ 1

Question Number : 42 Question Id : 1679435743 Question Type : MCQ Option Shuffling : Yes Display Question Number : Yes
Single Line Question Option : No Option Orientation : Vertical

Correct : 1 Wrong : 0.25

The value of $\frac{(2.44)^2 - (1.23)^2 - (2.46)(1.01) - (1.01)^2}{(2.44)^2 + (1.23)^2 + 4(1.22)(1.23) - (1.01)^2}$ is:

Options :

✗ $\frac{5}{266}$

✗ $\frac{7}{266}$

✓ $\frac{10}{133}$

✗ $\frac{20}{133}$

Question Number : 43 Question Id : 1679435744 Question Type : MCQ Option Shuffling : Yes Display Question Number : Yes
Single Line Question Option : No Option Orientation : Vertical

Correct : 1 Wrong : 0.25

The value of $\frac{0.896 \times 0.752 + 0.896 \times 0.248}{0.7 \times 0.034 + 0.7 \times 0.966} \div (6.25 \times 0.25 + 0.75 - 0.3125)$ lies between:

Options :

✗ 0.4 and 0.5

✗ 0.5 and 0.6

✓ 0.6 and 0.7

✗ 0.7 and 0.8

Question Number : 44 Question Id : 1679435745 Question Type : MCQ Option Shuffling : Yes Display Question Number : Yes
Single Line Question Option : No Option Orientation : Vertical

Correct : 1 Wrong : 0.25

On simplification, $\frac{\frac{5}{6} + \frac{3}{10}}{\frac{1}{3} \text{ of } 2\frac{1}{8}} \times \frac{5 - 3\frac{3}{4}}{1\frac{2}{3} - \frac{3}{5}} \times 2\frac{2}{3} \times \frac{2}{5} + \left(\frac{2\frac{2}{5}}{1\frac{23}{25}} \div \left(\frac{1}{8} - \frac{5}{6} + 1\frac{23}{24} \right) \right)$ reduces to:

Options :

✗ $2\frac{2}{5}$

✗ $2\frac{1}{2}$

✓ 3

✗ 4

Question Number : 45 Question Id : 1679435746 Question Type : MCQ Option Shuffling : Yes Display Question Number : Yes
Single Line Question Option : No Option Orientation : Vertical

Correct : 1 Wrong : 0.25

The sum of three fractions is $2\frac{3}{10}$. If the greatest fraction is divided by the smallest fraction, the result is $\frac{5}{4}$, which is greater than the middle (other than greatest and smallest) fraction by $\frac{9}{20}$. The smallest fraction is:

Options :

✓ $\frac{2}{3}$

✗ $\frac{1}{3}$

✗ $\frac{3}{5}$

✗ $\frac{4}{5}$

Question Number : 46 Question Id : 1679435747 Question Type : MCQ Option Shuffling : Yes Display Question Number : Yes
Single Line Question Option : No Option Orientation : Vertical
Correct : 1 Wrong : 0.25

A sum of ₹ 8,400 was to be distributed among A, B and C in the ratio of $\frac{1}{5} : \frac{1}{6} : \frac{1}{10}$, but it was erroneously distributed in the ratio of 5 : 6 : 10. As a result:

Options :

- ☐ A lost ₹ 1,600 and B gained ₹ 600
- ☐ B lost ₹ 600 and C gained ₹ 1,200
- ☐ A lost ₹ 1,800 and C gained ₹ 2,200
- ☒ B lost ₹ 600 and C gained ₹ 2,200

Question Number : 47 Question Id : 1679435748 Question Type : MCQ Option Shuffling : Yes Display Question Number : Yes
Single Line Question Option : No Option Orientation : Vertical
Correct : 1 Wrong : 0.25

The average score of 42 students in a class is 69. The number of girls is 10% more than the number of boys. The average score of boys is 20% more than that of girls. What is the average score of girls?

Options :

- ☒ 63
- ☐ 64
- ☐ 65
- ☐ 66

Question Number : 48 Question Id : 1679435749 Question Type : MCQ Option Shuffling : Yes Display Question Number : Yes
Single Line Question Option : No Option Orientation : Vertical
Correct : 1 Wrong : 0.25

An article is marked at a price that gives the shopkeeper a profit of 40%. After allowing a certain discount on the marked price, the profit reduces to 20%. The discount per cent is:

Options :

- ☐ $12\frac{3}{7}$
- ☒ $14\frac{2}{7}$
- ☐ 25
- ☐ 20

Question Number : 49 Question Id : 1679435750 Question Type : MCQ Option Shuffling : Yes Display Question Number : Yes
Single Line Question Option : No Option Orientation : Vertical

Correct : 1 Wrong : 0.25

The compound interest on a certain sum for 2 years at a rate of 5% per annum is ₹ 820. If twice the sum is borrowed at a rate of 10% per annum for $2\frac{1}{2}$ years compounded annually, then the interest will be:

Options :

✗ ₹ 4,426

✗ ₹ 4,382

✗ ₹ 4,366

✓ ₹ 4,328

Question Number : 50 Question Id : 1679435751 Question Type : MCQ Option Shuffling : Yes Display Question Number : Yes
Single Line Question Option : No Option Orientation : Vertical

Correct : 1 Wrong : 0.25

The height of the conical vessel is 48 cm and the radius of its top, which is open is 15 cm. It is completely filled with water to its brim. The water is poured into a right circular cylindrical vessel whose a radius $\frac{1}{3}$ of the radius of the cone. The height of water in the cylindrical vessel is:

Options :

✗ 72 cm

✗ 96 cm

✓ 144 cm

✗ 148 cm

Question Number : 51 Question Id : 1679435752 Question Type : MCQ Option Shuffling : Yes Display Question Number : Yes
Single Line Question Option : No Option Orientation : Vertical

Correct : 1 Wrong : 0.25

The sum of two numbers is 1215 and their HCF is 81. If each number lies between 550 and 650, then the LCM of the two numbers is:

Options :

✗ 1134

✗ 2106

✗ 3564

✓ 4536

Question Number : 52 Question Id : 1679435753 Question Type : MCQ Option Shuffling : Yes Display Question Number : Yes
Single Line Question Option : No Option Orientation : Vertical

Correct : 1 Wrong : 0.25

Let x be the least number that when divided by 36, 48, 21 and 28 leaves the remainder of 20 in each case. Moreover, x is divisible by 37. What is the sum of the digits of x ?

Options :

✖ 22

✖ 21

✔ 20

✖ 18

Question Number : 53 Question Id : 1679435754 Question Type : MCQ Option Shuffling : Yes Display Question Number : Yes
Single Line Question Option : No Option Orientation : Vertical

Correct : 1 Wrong : 0.25

A person rows a distance of 72 km upstream and returns to the starting point after 8 hours. If the speed of the stream is 12 km/h, then in how many hours will he row a distance of 180 km in still water?

Options :

✖ $7\frac{1}{4}$

✔ $7\frac{1}{2}$

✖ $6\frac{1}{2}$

✖ $6\frac{1}{4}$

Question Number : 54 Question Id : 1679435755 Question Type : MCQ Option Shuffling : Yes Display Question Number : Yes
Single Line Question Option : No Option Orientation : Vertical

Correct : 1 Wrong : 0.25

Remu can finish a certain task in 20 days. Abha is 25% more efficient than Remu and Anu is 28% more efficient than Abha. They work together for 5 days. How much time will Abha alone take to finish 10 times of the remaining work?

Options :

✖ 5 days

✔ 6 days

- ✖

8 days
- ✖

9 days

Sub-Section Number:

2

Sub-Section Id:

167943321

Question Shuffling Allowed :

Yes

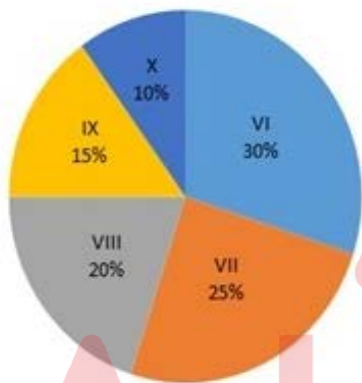
Question Id : 1679435756 Question Type : COMPREHENSION Sub Question Shuffling Allowed : Yes Group Comprehension Questions : No

Question Numbers : (55 to 56)

Question Label : Comprehension

Study the following pie-chart and table and answer the question that follows.

Percentage wise break up of students in different classes of school.
Total number of students = 1520



Ratio between the number of Boys and Girls

Class	Boys : Girls
VI	10 : 9
VII	3 : 2
VIII	9 : 7
IX	7 : 5
X	5 : 3

Sub questions

Question Number : 55 Question Id : 1679435757 Question Type : MCQ Option Shuffling : Yes Display Question Number : Yes

Single Line Question Option : No Option Orientation : Vertical

Correct : 1 Wrong : 0.25

If the total number of boys is $x\%$ more than the total number of girls in the school, then the value of x is closest to:

Options :

- ✖

30.5

✖ 30.6

✔ 32.8

✖ 35.4

Question Number : 56 Question Id : 1679435758 Question Type : MCQ Option Shuffling : Yes Display Question Number : Yes
Single Line Question Option : No Option Orientation : Vertical

Correct : 1 Wrong : 0.25

What is the ratio of the total number of boys in
classes VII and VIII to the total number of girls in
classes VIII to X?

Options :

✖ 5 : 7

✔ 7 : 5

✖ 3 : 5

✖ 5 : 3

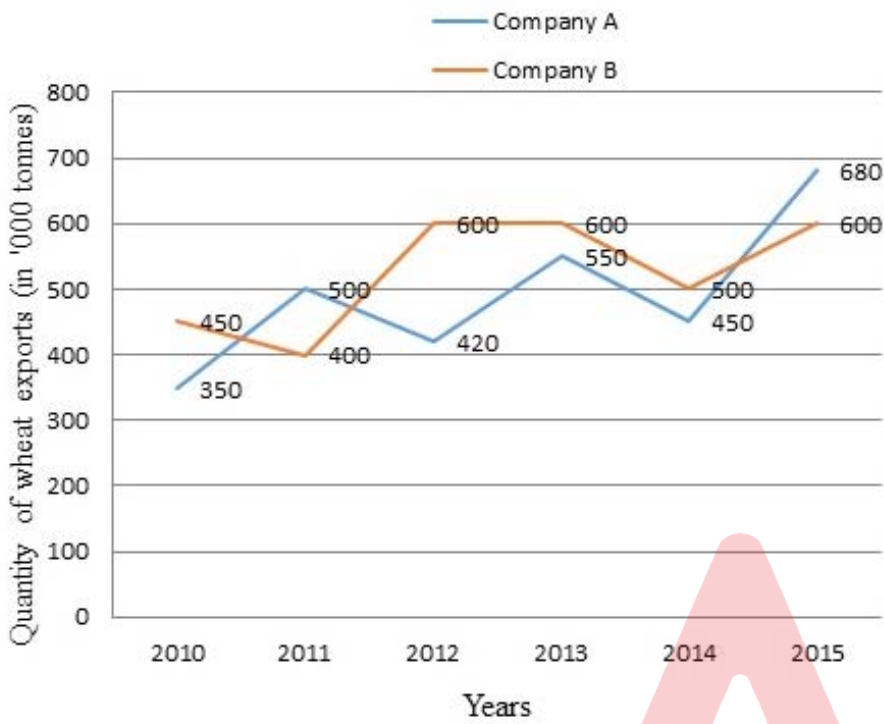
Sub-Section Number: 3
Sub-Section Id: 167943322
Question Shuffling Allowed : Yes

Question Id : 1679435759 Question Type : COMPREHENSION Sub Question Shuffling Allowed : Yes Group Comprehension
Questions : No

Question Numbers : (57 to 58)

Question Label : Comprehension

Study the following graph which shows exports (in '000 tonnes) of wheat by two companies A and B in different years, and answer the question that follows.



Sub questions

Question Number : 57 Question Id : 1679435760 Question Type : MCQ Option Shuffling : Yes Display Question Number : Yes
Single Line Question Option : No Option Orientation : Vertical
Correct : 1 Wrong : 0.25

Total exports (of wheat) of company A during 2011, 2013 and 2014 is what percent less than the total exports of company B during 2010, 2012 and 2015? (Correct to one decimal point)

Options :

✗ 8.7

✗ 8.9

✓ 9.1

✗ 9.3

Question Number : 58 Question Id : 1679435761 Question Type : MCQ Option Shuffling : Yes Display Question Number : Yes
Single Line Question Option : No Option Orientation : Vertical
Correct : 1 Wrong : 0.25

The average exports of company A during 2012 to 2015 is $x\%$ more than the average exports of B during the years 2010 to 2014. The value of x (nearest to an integer) is:

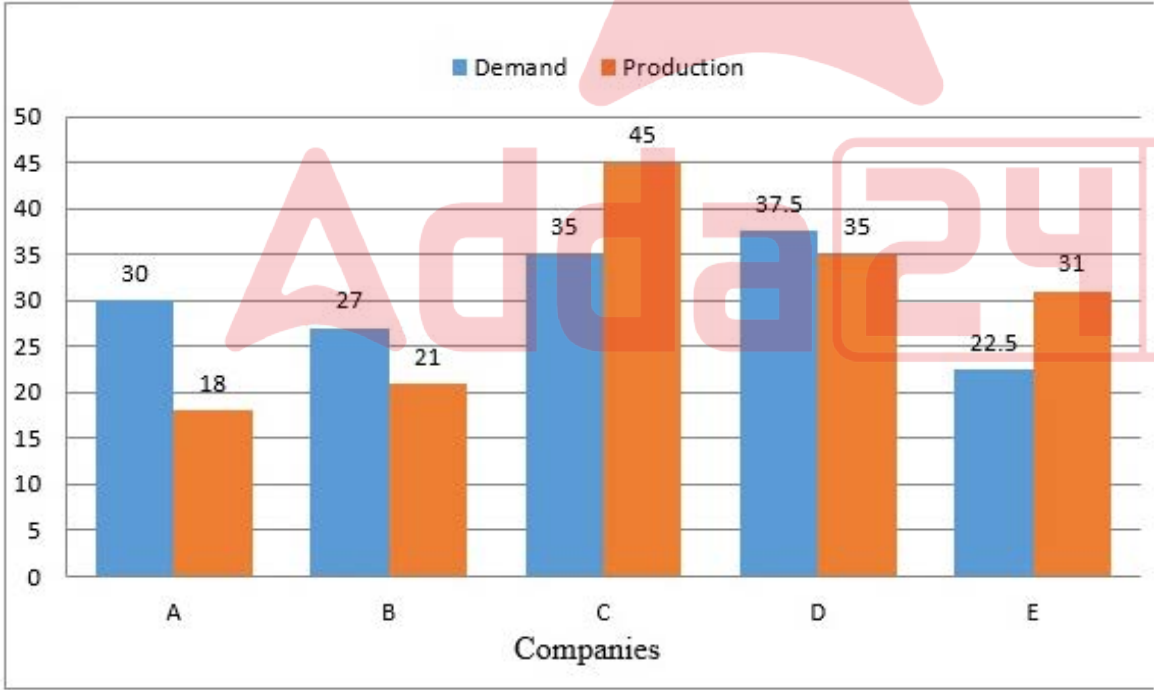
Options :

- ✖ 1%
- ✔ 3%
- ✖ 4%
- ✖ 5%

Sub-Section Number: 4
Sub-Section Id: 167943323
Question Shuffling Allowed : Yes

Question Id : 1679435762 Question Type : COMPREHENSION Sub Question Shuffling Allowed : Yes Group Comprehension Questions : No
Question Numbers : (59 to 60)
Question Label : Comprehension

Study the following bar graph and answer the questions that follows.
Demand and production (in lakhs) of two-wheelers of five companies in 2016.



Sub questions

Question Number : 59 Question Id : 1679435763 Question Type : MCQ Option Shuffling : Yes Display Question Number : Yes
Single Line Question Option : No Option Orientation : Vertical
Correct : 1 Wrong : 0.25

What is the difference (in lakhs) between the average demand and average production of two wheelers of all the companies taken together?

Options :

✖ 0.1

✖ 0.3

✔ 0.4

✖ 0.8

Question Number : 60 Question Id : 1679435764 Question Type : MCQ Option Shuffling : Yes Display Question Number : Yes
Single Line Question Option : No Option Orientation : Vertical

Correct : 1 Wrong : 0.25

Total demand of two wheelers of companies A, C and E is what percent more than the total production of companies E and D? (Correct to one decimal place).

Options :

✖ 24.6

✖ 27.2

✖ 30.8

✔ 32.6

Group Number :

Group Id :

Group Maximum Duration :

Group Minimum Duration :

Revisit allowed for view? :

Revisit allowed for edit? :

Break time:

Group Marks:

4

16794375

0

0

No

No

0

20

General English

General English

Section Id :

167943134

Section Number :

1

Section type :

Online

Mandatory or Optional:

Mandatory

Number of Questions:

16

Number of Questions to be attempted:

16

Section Marks:

20

Display Number Panel:

Yes

Group All Questions:

No

Sub-Section Number:

1

Sub-Section Id:

167943324

Question Shuffling Allowed :

Yes

Question Number : 61 Question Id : 1679435765 Question Type : MCQ Option Shuffling : Yes Display Question Number : Yes
Single Line Question Option : No Option Orientation : Vertical

Correct : 1 Wrong : 0.25

Choose the correct synonym of:

valiant

Options :

✓ brave

✗ honest

✗ kind

✗ grateful

Question Number : 62 Question Id : 1679435766 Question Type : MCQ Option Shuffling : Yes Display Question Number : Yes
Single Line Question Option : No Option Orientation : Vertical

Correct : 1 Wrong : 0.25

Choose the correct antonym of:

extravagant

Options :

✗ protective

✗ overwhelming

✓ miserly

✗ spendthrift

Question Number : 63 Question Id : 1679435767 Question Type : MCQ Option Shuffling : Yes Display Question Number : Yes
Single Line Question Option : No Option Orientation : Vertical

Correct : 1 Wrong : 0.25

Choose the correct antonym of the underlined word to fill in the blank.

Having read so much about the old palace, we expected it to be magnificent but we found it in quite a _____ state.

Options :

☐ dull

☐ marvellous

☒ dreadful

☐ fine

Question Number : 64 Question Id : 1679435768 Question Type : MCQ Option Shuffling : Yes Display Question Number : Yes
Single Line Question Option : No Option Orientation : Vertical

Correct : 1 Wrong : 0.25

Choose the correct word to fill in the blank.

I like to listen to spiritual music in _____ morning, since I find it soothing.

Options :

☒ the

☐ a

☐ some

☐ any

Question Number : 65 Question Id : 1679435769 Question Type : MCQ Option Shuffling : Yes Display Question Number : Yes
Single Line Question Option : No Option Orientation : Vertical

Correct : 1 Wrong : 0.25

Fill in the blank with the appropriate word.

Shuchita draws freehand. She _____ not use a ruler.

Options :

☐ do

☐ is

☒ does

☐ were

Question Number : 66 Question Id : 1679435770 Question Type : MCQ Option Shuffling : Yes Display Question Number : Yes
Single Line Question Option : No Option Orientation : Vertical

Correct : 1 Wrong : 0.25

Fill in the blank with the appropriate word.

He read the agreement _____ as he did not want to miss any detail.

Options :

- ☐ clearly
- ☐ carelessly
- ☐ quickly
- ☒ carefully

Question Number : 67 Question Id : 1679435771 Question Type : MCQ Option Shuffling : Yes Display Question Number : Yes
Single Line Question Option : No Option Orientation : Vertical

Correct : 1 Wrong : 0.25

In the following sentence four words or phrases have been underlined. One of them is incorrect. Choose the incorrect word or phrase from the given options.

Most countries have a system for recognising, honouring and rewarding people which have done something good in their countries and there are now hundreds of awards, and awards ceremonies, for all kinds of things.

Options :

- ☐ for recognising, honouring and rewarding
- ☒ which have done
- ☐ hundreds of awards
- ☐ all kinds of things

Question Number : 68 Question Id : 1679435772 Question Type : MCQ Option Shuffling : Yes Display Question Number : Yes
Single Line Question Option : No Option Orientation : Vertical

Correct : 1 Wrong : 0.25

In the following sentence four words or phrases have been underlined. One of them is incorrect. Choose the incorrect word or phrase from the given options.

If I had seen the film preview, I will not have bought the DVD. The film has no message for us and is quite disappointing.

Options :

- ☐ had seen
- ☒ will not have
- ☐ no message

✗ is quite disappointing

Question Number : 69 Question Id : 1679435773 Question Type : MCQ Option Shuffling : Yes Display Question Number : Yes
Single Line Question Option : No Option Orientation : Vertical

Correct : 1 Wrong : 0.25

Choose the passive voice form of the given sentence.

The organisation asked all its employees if they were willing to travel abroad for projects.

Options :

- ✓ All the employees of the organisation were asked if they were willing to travel abroad for projects.
- ✗ All the employees of the organisation are asking if they are willing to travel abroad for projects.
- ✗ All the employees of the organisation were being asked if they are willing to travel abroad for projects.
- ✗ The organisation was asking all the employees if they were willing to travel abroad for projects.

Question Number : 70 Question Id : 1679435774 Question Type : MCQ Option Shuffling : Yes Display Question Number : Yes
Single Line Question Option : No Option Orientation : Vertical

Correct : 1 Wrong : 0.25

Choose the most appropriate indirect speech form for the following.

Mother said to Anita, "It will be quite late by the time you finish your shopping. Book a cab on the way back and share the cab details with me."

Options :

- ✗ Mother said to Anita it will be quite late by the time you finish your shopping. Book a cab on the way back and share the cab details with me.
- ✗ Mother told Anita, "It will be quite late by the time you finished your shopping. Please she must book a cab on the way back and share the cab details with her.
- ✗ Mother said to Anita it would be quite late by the time she finishes her shopping. She said to book a cab on the way back and share the cab details with her.
- ✓ Mother told Anita that it would be quite late by the time she finished her shopping. She advised her daughter to book a cab on the way back and share the cab details with her.

Question Number : 71 Question Id : 1679435775 Question Type : MCQ Option Shuffling : Yes Display Question Number : Yes
Single Line Question Option : No Option Orientation : Vertical

Correct : 1 Wrong : 0.25

Choose the option that best combines the two given sentences.

You must walk very fast. That way, you will not miss the train.

Options :

- ☐ Because you walk very far you will not miss the train.
- ☒ If you walk very fast, you will not miss the train.
- ☐ You are walking so fast and you will not miss the train.
- ☐ You must walk very fast when you will not miss the train.

Question Number : 72 Question Id : 1679435776 Question Type : MCQ Option Shuffling : Yes Display Question Number : Yes
Single Line Question Option : No Option Orientation : Vertical

Correct : 1 Wrong : 0.25

Choose the passage that is correctly punctuated.

Options :

- ☐ Amit said could you please give me some time in the evening, sir? I have some difficulties in trigonometry. "Sure," smiled mr. anand.
- ☒ Amit said, "Could you please give me some time in the evening, Sir? I have some difficulties in Trigonometry." "Sure," smiled Mr. Anand.
- ☐ amit said, "Could you please give me some time in the evening? Sir, I have some difficulties in trigonometry," Sure, smiled Mr. Anand.
- ☐ Amit said, "Could you please give me some time in the evening, sir? I have some difficulties in trigonometry." "Sure." smiled Mr. Anand

Question Number : 73 Question Id : 1679435777 Question Type : MCQ Option Shuffling : Yes Display Question Number : Yes
Single Line Question Option : No Option Orientation : Vertical

Correct : 1 Wrong : 0.25

Choose the word that is correctly spelt.

Options :

- ☐ triviel
- ☐ parsial
- ☒ special
- ☐ servival

Question Number : 74 Question Id : 1679435778 Question Type : MCQ Option Shuffling : Yes Display Question Number : Yes
Single Line Question Option : No Option Orientation : Vertical

Correct : 1 Wrong : 0.25

Fill in the blank with the appropriate phrasal verb.

Whenever she gets time, my friend _____ to meet my mother who is not keeping good health.

Options :

- ☐ calls in
- ☐ calls off
- ☐ drops out
- ☒ drops in

Question Number : 75 Question Id : 1679435779 Question Type : MCQ Option Shuffling : Yes Display Question Number : Yes
Single Line Question Option : No Option Orientation : Vertical
Correct : 1 Wrong : 0.25

Fill in the blank with the appropriate idiomatic expression.

As far as marketing skills are concerned, Anubhav is highly efficient. He is _____ his team members.

Options :

- ☒ head and shoulders above
- ☐ moving heaven and earth
- ☐ making a clean sweep of
- ☐ straining every nerve of

Sub-Section Number: 2
Sub-Section Id: 167943325
Question Shuffling Allowed : Yes

Question Id : 1679435780 Question Type : COMPREHENSION Sub Question Shuffling Allowed : Yes Group Comprehension
Questions : No
Question Numbers : (76 to 80)
Question Label : Comprehension

On the basis of your reading of the following passage answer the questions given below.

At some point in our life, we have all lived through a phase where our 'self' became weaker than a leaf, and our faith stumped to the lowest point, yet most of us managed to pull through. How did this happen? The toughest part of this journey of 'coming out of a bad phase' is to convince our inner core that we can do it. The next big thing is to wait for help to come, but seldom notice the medium; would it be our prayer or someone's love?

There are endless inspiring stories over the internet that describe the journey of someone coming out of their darkest phase and facing the world with even more grit. These journeys have one thing in common: in all of them, the people turned to seek support through either prayer or love.

While prayer takes us beyond our biological self, love, on the other hand, forays beyond the boundaries of ego. For me, both work toward ensuring the calmness of our anxious soul; with prayer comes hope and with love comes faith.

They individually and together, bring about a sense of understanding the factual world in difficult times.

Through prayer, we feel deeply connected with an intangible energy that lets us have a clear view of the abundance of love around us, which we can use to heal our broken soul. Even though they both co-exist, yet we are unable to measure the power of either.

A group of researchers tried to find which one of these affects our brain first and how, by using an imaging technology called SPECT scanning to map the brains of Tibetan Buddhists meditating and Franciscan nuns engaged in deep, contemplative prayer. Their research suggested that intuitive feelings are actually generated by the genetically arranged wiring of the brain itself.

Sub questions

Question Number : 76 Question Id : 1679435781 Question Type : MCQ Option Shuffling : Yes Display Question Number : Yes
Single Line Question Option : No Option Orientation : Vertical

Correct : 1 Wrong : 0.25

Choose the most appropriate option to explain what the writer means by the following sentence.

".... We have all lived through a phase where our 'self' became weaker than a leaf and our faith stumped to the lowest point..."

Options :

- ✖ We fell down and hurt ourselves.
- ✖ We fell down like leaves.

✓ We lost hope and were demoralized.

✗ We climbed down a steep hill.

Question Number : 77 Question Id : 1679435782 Question Type : MCQ Option Shuffling : Yes Display Question Number : Yes
Single Line Question Option : No Option Orientation : Vertical

Correct : 1 Wrong : 0.25

Name two things we depend upon in times of trouble.

Options :

✓ Prayer and love

✗ Ego and hope

✗ Healing and debating

✗ Power and energy

Question Number : 78 Question Id : 1679435783 Question Type : MCQ Option Shuffling : Yes Display Question Number : Yes
Single Line Question Option : No Option Orientation : Vertical

Correct : 1 Wrong : 0.25

“These journeys have one thing in common.”
Which journeys are being referred to here?

Options :

✗ Journeys that people undertake to search the internet.

✗ Arduous journeys to places of worship.

✓ Efforts that people make to come out of a difficult phase of life.

✗ Journeys that take people to scary places.

Question Number : 79 Question Id : 1679435784 Question Type : MCQ Option Shuffling : Yes Display Question Number : Yes
Single Line Question Option : No Option Orientation : Vertical

Correct : 1 Wrong : 0.25

Choose the most appropriate option to complete the statement.

In difficult times, prayer and love _____

Options :

- ✖

make us anxious to succeed.
- ✖

bring us face-to-face with our feeling of self.
- ✔

enable us to face the real world around us.
- ✖

help our brains to win love.

Question Number : 80 Question Id : 1679435785 Question Type : MCQ Option Shuffling : Yes Display Question Number : Yes
Single Line Question Option : No Option Orientation : Vertical
Correct : 1 Wrong : 0.25

Choose the most appropriate option to complete the statement.

The imaging technology called SPECT revealed to researchers that _____

- Options :
- ✖

the Tibetan Buddhists and Franciscan nuns were always in deep prayer.
- ✔

the instinctive feelings of prayer and love originate in the brain.
- ✖

the Franciscan nuns engaged in deep, contemplative prayer are far superior to the Tibetan Buddhists in their prayer.
- ✖

prayer and love are not present together in both the Buddhist monks and the Franciscan nuns.

General Hindi	
Group Number :	5
Group Id :	16794376
Group Maximum Duration :	0
Group Minimum Duration :	0
Revisit allowed for view? :	No
Revisit allowed for edit? :	No
Break time:	0
Group Marks:	20

General Hindi	
Section Id :	167943135
Section Number :	1
Section type :	Online
Mandatory or Optional:	Mandatory
Number of Questions:	16
Number of Questions to be attempted:	16
Section Marks:	20
Display Number Panel:	Yes
Group All Questions:	No

Sub-Section Number: 1
Sub-Section Id: 167943326
Question Shuffling Allowed : Yes

Question Id : 1679435786 Question Type : COMPREHENSION Sub Question Shuffling Allowed : Yes Group Comprehension Questions : No
Question Numbers : (81 to 85)
Question Label : Comprehension



रेल के एक डिब्बे में किसी को गाते सुना था-

.....,
..... !

आज भी सोचता हूँ कि उस व्यक्ति ने कितना बड़ा सच उस दिन हमारे सामने रख दिया था। शताब्दियों से भारत को..... कुचलते रहे हैं, हमारे स्वाभिमान को, वीरता और शौर्य को अपने पैरों तले रौंदते रहे हैं, हमें टूटते-घसीटते रहे हैं, हमारी माँ-बहनों के सन्मान को ठोकर मारते रहे हैं और हम सिर झुकाए पर-कटे पक्षी की तरह केवल तड़फड़ाकर रह गए हैं। क्यों? क्यों होता रहा हा यह सब-कुछ?

इसलिए कि सभी कुश-ज्ञान-विज्ञान, बल-शौर्य और साधन-सम्पन्नता के होते हुए भी हम में एकता न थी। स्वार्थ, ईर्ष्या-द्वेष, झूठे अहंकार, धोखेदर्प, सीमित क्षेत्रीयता, धार्मिक मदांधता और जातीय घृणा ने हमें वंसु बना डाला था, हमसे हमारा विवेक और दृष्टि छीन लिए थे, हमें केवल हम दिखाई दे रहे थे, इसीलिए हर मोर्चे पर हम पराजित हुए; हर विरोधी-विपक्षी ने हमें बात की बात में धूलचटा दी। बाबर आया तो लाखों की संख्या में मौजूद इब्राहीम सोदी की सेना के पैर उखड़ गए, राणा साँगा की विशाल राजपूत सेना पीठ दिखाकर भागी; अहमदशाह अब्दाली और अहमदशाह दुर्रानी जैसे नादिरशाह ने खून की नदियाँ बहाई और स्वार्थों में बँटायह देश पिसता रहा, कराहता रहा, टूटता रहा, लुटता रहा। अंत में अंग्रेज़ आए और उन्होंने देखा कि उप महाद्वीप-जैसे इस विशाल देश की भूमि, जो सोना-चाँदी उगलती है, स्वार्थी और अहंकारी राव-राजाओं, नवाबों और सामंतों में बुरी तरह बँटी है। सबके अपने-अपने सीमित-संकुचित हित हैं। सबको खरीदा और बेचा जा सकता है; सबकी थोड़े-बहुत हेर-फेर के साथ कीमत है, लेकिन बिकाऊ सब हैं। हमारा राष्ट्रीय स्वाभिमान और जातीय गौरव खो गया है। लोग अपने अतीत को, अपने प्राचीन गौरव को भूल बैठे हैं; अतएव बड़ी सरलता से उन्होंने एक-एक करके सबको पराजित कर दिया। देखते ही देखते वे सारे महादेश को निगल गए और हम लगभग दो सौ साल तक गुलामी की जंजीरों में जकड़े रहे।

Question Number : 81 Question Id : 1679435787 Question Type : MCQ Option Shuffling : Yes Display Question Number : Yes
Single Line Question Option : No Option Orientation : Vertical
Correct : 1 Wrong : 0.25

शत्रुओं द्वारा भारतीयों को रौंदने का कारण था:

Options :

- ✖ भारतीयों में मुझ कौशल नहीं था।
- ✖ वेधीर-भीर नहीं थे।
- ✔ एकता का अभाव था।
- ✖ वे खुदगर्जी के शिकार नहीं थे।

Question Number : 82 Question Id : 1679435788 Question Type : MCQ Option Shuffling : Yes Display Question Number : Yes
Single Line Question Option : No Option Orientation : Vertical
Correct : 1 Wrong : 0.25

किस चीज़ के अभाव में हम विरोधियों से हार गए?

Options :

- ✔ विवेक शीलता के अभाव में
- ✖ धर्माधता के अभाव में
- ✖ जातीयघृणा के अभाव में
- ✖ मिथ्या अहंकार के अभाव में

Question Number : 83 Question Id : 1679435789 Question Type : MCQ Option Shuffling : Yes Display Question Number : Yes
Single Line Question Option : No Option Orientation : Vertical
Correct : 1 Wrong : 0.25

“हमारे सिंहों को धूल चटा गए।” वाक्य में सिंह कहा है:

Options :

- ✔ भारतीय वीरों को
- ✖ वानर की सेना को
- ✖ अहमदशाह अब्दाली को

✖ अहमदशाह दुरानी को

Question Number : 84 Question Id : 1679435790 Question Type : MCQ Option Shuffling : Yes Display Question Number : Yes
Single Line Question Option : No Option Orientation : Vertical

Correct : 1 Wrong : 0.25

‘खून की नदियाँ बहाना’ का अर्थ है:

Options :

✖ नदियों में खून डालना

✖ रुपों को खून देना

✖ युवाओं का खून खौलना

✔ कत्ल-ए आम करना

Question Number : 85 Question Id : 1679435791 Question Type : MCQ Option Shuffling : Yes Display Question Number : Yes
Single Line Question Option : No Option Orientation : Vertical

Correct : 1 Wrong : 0.25

अंग्रेजों ने हममें क्या नहीं पाया?

Options :

✖ संपदा

✔ आपसी सहयोग

✖ आपसी फूट

✖ स्वार्थ साधकता

Sub-Section Number: 2
Sub-Section Id: 167943327
Question Shuffling Allowed : Yes

Question Number : 86 Question Id : 1679435792 Question Type : MCQ Option Shuffling : Yes Display Question Number : Yes
Single Line Question Option : No Option Orientation : Vertical

Correct : 1 Wrong : 0.25

‘नमस्ते’ शब्द में संधि है:

Options :

- ✖ वृद्धी संधि
- ✔ विसर्ग संधि
- ✖ व्यंजक संधि
- ✖ दीर्घ संधि

Question Number : 87 Question Id : 1679435793 Question Type : MCQ Option Shuffling : Yes Display Question Number : Yes
Single Line Question Option : No Option Orientation : Vertical

Correct : 1 Wrong : 0.25

निम्नलिखित में से तद्भव शब्द चुनिए:

Options :

- ✔ महीना
- ✖ चैत्र
- ✖ सूत्र
- ✖ मंत्र

Question Number : 88 Question Id : 1679435794 Question Type : MCQ Option Shuffling : Yes Display Question Number : Yes
Single Line Question Option : No Option Orientation : Vertical

Correct : 1 Wrong : 0.25

‘तत्सम’ शब्द कौन-सा है?

Options :

- ✖ काम
- ✔ अग्नि
- ✖ गाहक
- ✖ बहू

Question Number : 89 Question Id : 1679435795 Question Type : MCQ Option Shuffling : Yes Display Question Number : Yes
Single Line Question Option : No Option Orientation : Vertical

Correct : 1 Wrong : 0.25

‘अंधकूप’ शब्द में कौन-सा समास है?

Options :

✖ अव्ययीभाव

✖ तत्पुरुष

✖ बहुव्रीहि

✔ कर्मधारय

Question Number : 90 Question Id : 1679435796 Question Type : MCQ Option Shuffling : Yes Display Question Number : Yes
Single Line Question Option : No Option Orientation : Vertical

Correct : 1 Wrong : 0.25

‘शोभा’ शब्द का पर्यायवाची नहीं है:

Options :

✖ कांति

✖ द्युति

✔ श्वेत

✖ प्रभा

Question Number : 91 Question Id : 1679435797 Question Type : MCQ Option Shuffling : Yes Display Question Number : Yes
Single Line Question Option : No Option Orientation : Vertical

Correct : 1 Wrong : 0.25

‘मौखिक’ शब्द का विलोम होता है:

Options :

✖ श्रुत

✖ पठित

✔ लिखित

✖ खचित

Question Number : 92 Question Id : 1679435798 Question Type : MCQ Option Shuffling : Yes Display Question Number : Yes
Single Line Question Option : No Option Orientation : Vertical

Correct : 1 Wrong : 0.25

‘किसी वस्तु का बढ़-चढ़ कर वर्णन करना’ के लिए एक शब्द है:

Options :

✓ अतिशयोक्ति

✗ पूर्णोक्ति

✗ सूक्ति

✗ प्रयुक्ति

Question Number : 93 Question Id : 1679435799 Question Type : MCQ Option Shuffling : Yes Display Question Number : Yes
Single Line Question Option : No Option Orientation : Vertical

Correct : 1 Wrong : 0.25

निम्नलिखितमें से कौन-सा शब्द पुल्लिंग है?

Options :

✗ दौलत

✗ कसरत

✓ शरबत

✗ अदालत

Question Number : 94 Question Id : 1679435800 Question Type : MCQ Option Shuffling : Yes Display Question Number : Yes
Single Line Question Option : No Option Orientation : Vertical

Correct : 1 Wrong : 0.25

कौन-सा शब्द भाववाचक संज्ञा शब्द है?

Options :

✗ प्रवीण

✗ चतुर्थ

✗ कुशल

✓ पारंगत

Question Number : 95 Question Id : 1679435801 Question Type : MCQ Option Shuffling : Yes Display Question Number : Yes
Single Line Question Option : No Option Orientation : Vertical

Correct : 1 Wrong : 0.25

कौन-सा वाक्य अशुद्ध है?

Options :

- ✖ मैंने सभी से पूछ लिया।
- ✖ हम सब आज.....।
- ✔ मैं तुमको किताब देनी है।
- ✖ मैंने भी वही खरीदा है।

Question Number : 96 Question Id : 1679435802 Question Type : MCQ Option Shuffling : Yes Display Question Number : Yes
Single Line Question Option : No Option Orientation : Vertical
Correct : 1 Wrong : 0.25

सकर्मक क्रिया वाला वाक्य छाँटिए:

Options :

- ✖ जल्दी जाओ।
- ✖ वह आया ही नहीं।
- ✖ क्यों दौड़ रहे हो।
- ✔ पढो; ज्ञान बढ़ेगा।

Question Number : 97 Question Id : 1679435803 Question Type : MCQ Option Shuffling : Yes Display Question Number : Yes
Single Line Question Option : No Option Orientation : Vertical
Correct : 1 Wrong : 0.25

बहुवचन में ही प्रयुक्त होने वाला शब्द है:

Options :

- ✖ नाम
- ✔ दाम
- ✖ काम
- ✖ शाम

Question Number : 98 Question Id : 1679435804 Question Type : MCQ Option Shuffling : Yes Display Question Number : Yes
Single Line Question Option : No Option Orientation : Vertical
Correct : 1 Wrong : 0.25

वृक्ष शब्द का बहुवचन (अविभक्तिक) होता है:

Options :

✓ वृक्ष

✗ वृक्षों

✗ वृक्षें

✗ वृक्षो

Question Number : 99 Question Id : 1679435805 Question Type : MCQ Option Shuffling : Yes Display Question Number : Yes
Single Line Question Option : No Option Orientation : Vertical

Correct : 1 Wrong : 0.25

‘पीछा न छोड़ना’ अर्थ को व्यक्त करने वाला मुहावरा है:

Options :

✗ हवेली पर सरसों उगाना

✗ सिर पर चढ़ना

✗ हाथों हाथ बिक जाना

✓ हाथ धोकर पीछे पड़ना

Question Number : 100 Question Id : 1679435806 Question Type : MCQ Option Shuffling : Yes Display Question Number : Yes
Single Line Question Option : No Option Orientation : Vertical

Correct : 1 Wrong : 0.25

‘एक दुष्ट आदमी सभी को बिगाड़ता है’ इस अर्थ को बताने वाली लोकोक्ति है:

Options :

✗ अशर्फियाँ लूटें कोयलों पर मोहर

✗ आधी छोड़ सारी को धावें, आधी मिले न सारी पावे

✗ आम के आम गुठलियों के दाम

✓ अकेली मछली सारे तालाब को गंदा कर देती है

Group Number :	6
Group Id :	16794377
Group Maximum Duration :	0
Group Minimum Duration :	0
Revisit allowed for view? :	No
Revisit allowed for edit? :	No
Break time:	0
Group Marks:	20

	Subject Related
Section Id :	167943136
Section Number :	1
Section type :	Online
Mandatory or Optional:	Mandatory
Number of Questions:	20
Number of Questions to be attempted:	20
Section Marks:	20
Display Number Panel:	Yes
Group All Questions:	No

Sub-Section Number:	1
Sub-Section Id:	167943328
Question Shuffling Allowed :	Yes

Question Number : 101 Question Id : 1679435807 Question Type : MCQ Option Shuffling : Yes Display Question Number : Yes
Single Line Question Option : No Option Orientation : Vertical

Correct : 1 Wrong : 0.25

Which of the following options represents two important Harappan crops?

Options :

- ☒ Wheat and barley
- ☐ Sesame and mustard
- ☐ Rice and lentils
- ☐ Cotton and sugar cane

Question Number : 102 Question Id : 1679435808 Question Type : MCQ Option Shuffling : Yes Display Question Number : Yes
Single Line Question Option : No Option Orientation : Vertical

Correct : 1 Wrong : 0.25

Which of the following was a reason for Harappans to move from their urban sites?

Options :

- ☐ Foreign invasion

- ☒ Hydrological changes
- ☐ Environmental changes
- ☐ Demographic changes

Question Number : 103 Question Id : 1679435809 Question Type : MCQ Option Shuffling : Yes Display Question Number : Yes
Single Line Question Option : No Option Orientation : Vertical

Correct : 1 Wrong : 0.25

The most important Harappan item(s) of export was/were:

Options :

- ☒ Metals and precious stones
- ☐ Foodgrains
- ☐ Textiles
- ☐ Pottery

Question Number : 104 Question Id : 1679435810 Question Type : MCQ Option Shuffling : Yes Display Question Number : Yes
Single Line Question Option : No Option Orientation : Vertical

Correct : 1 Wrong : 0.25

Copper in Harappan times was obtained from:

Options :

- ☐ Baluchistan
- ☐ Mesopotamia
- ☒ Khetri mines
- ☐ Barbarikon

Question Number : 105 Question Id : 1679435811 Question Type : MCQ Option Shuffling : Yes Display Question Number : Yes
Single Line Question Option : No Option Orientation : Vertical

Correct : 1 Wrong : 0.25

The most important industry at Lothal and Chanu daro was:

Options :

- ☐ Shipbuilding
- ☒ Bead making

- ✖ Handlooms
- ✖ Metallurgical products

Question Number : 106 Question Id : 1679435812 Question Type : MCQ Option Shuffling : Yes Display Question Number : Yes
Single Line Question Option : No Option Orientation : Vertical
Correct : 1 Wrong : 0.25

Harappan towns were divided into large _____ blocks.

Options :

- ✖ square
- ✔ rectangular
- ✖ circular
- ✖ semi-circular

Question Number : 107 Question Id : 1679435813 Question Type : MCQ Option Shuffling : Yes Display Question Number : Yes
Single Line Question Option : No Option Orientation : Vertical
Correct : 1 Wrong : 0.25

Harappan weapons were made from:

Options :

- ✖ Stone
- ✖ Copper
- ✖ Bronze
- ✔ All of the other options

Question Number : 108 Question Id : 1679435814 Question Type : MCQ Option Shuffling : Yes Display Question Number : Yes
Single Line Question Option : No Option Orientation : Vertical
Correct : 1 Wrong : 0.25

Which animal was engraved on most Harappan seals?

Options :

- ✔ Humpless bull/Unicorn
- ✖ Elephant
- ✖ Bison

✖ Tiger

Question Number : 109 Question Id : 1679435815 Question Type : MCQ Option Shuffling : Yes Display Question Number : Yes
Single Line Question Option : No Option Orientation : Vertical

Correct : 1 Wrong : 0.25

The entry port for trade between the Indus trading centres and Mesopotamia was:

Options :

✖ Elam

✖ Oman

✔ Bahrain

✖ Afghanistan

Question Number : 110 Question Id : 1679435816 Question Type : MCQ Option Shuffling : Yes Display Question Number : Yes
Single Line Question Option : No Option Orientation : Vertical

Correct : 1 Wrong : 0.25

Which city was the first metropolis of the Ganga civilisation?

Options :

✖ Vaishali

✖ Pataliputra

✖ Kausambhi

✔ Rajgriha

Question Number : 111 Question Id : 1679435817 Question Type : MCQ Option Shuffling : Yes Display Question Number : Yes
Single Line Question Option : No Option Orientation : Vertical

Correct : 1 Wrong : 0.25

Of the sixteen Mahajanapadas referenced, how many were located in the Ganga valley?

Options :

✔ 10

✖ 15

✖ 7

✖ 4

Question Number : 112 Question Id : 1679435818 Question Type : MCQ Option Shuffling : Yes Display Question Number : Yes
Single Line Question Option : No Option Orientation : Vertical
Correct : 1 Wrong : 0.25

The inhabitants of Anga and Magadha janapadas were held in contempt because:

Options :

- ☐ They were black-skinned
- ☒ They traded in certain articles not favoured by the Brahmanical law givers
- ☐ They supported the Buddha
- ☐ They were heretics

Question Number : 113 Question Id : 1679435819 Question Type : MCQ Option Shuffling : Yes Display Question Number : Yes
Single Line Question Option : No Option Orientation : Vertical
Correct : 1 Wrong : 0.25

Maurya chronology hinges around the date of:

Options :

- ☐ Alexander's invasion
- ☐ Mahavira's death
- ☒ Buddha's death
- ☐ Year of Asoka's coronation

Question Number : 114 Question Id : 1679435820 Question Type : MCQ Option Shuffling : Yes Display Question Number : Yes
Single Line Question Option : No Option Orientation : Vertical
Correct : 1 Wrong : 0.25

A central government Mauryan officer in charge of revenue collection was called:

Options :

- ☐ Adhyaksha
- ☐ Sannidhata
- ☒ Samaharta
- ☐ Karmika

Question Number : 115 Question Id : 1679435821 Question Type : MCQ Option Shuffling : Yes Display Question Number : Yes
Single Line Question Option : No Option Orientation : Vertical
Correct : 1 Wrong : 0.25

The Mauryan officer Dandapala was actually a:

Options :

- ☐ Royal door keeper
- ☒ Chief commandant
- ☐ Chief punitive officer
- ☐ Spy

Question Number : 116 Question Id : 1679435822 Question Type : MCQ Option Shuffling : Yes Display Question Number : Yes
Single Line Question Option : No Option Orientation : Vertical

Correct : 1 Wrong : 0.25

Any record pertaining to the Gupta empire is NOT available post which of the following dates?

Options :

- ☐ 535 CE
- ☐ 500 CE
- ☒ 543 CE
- ☐ 533 CE

Question Number : 117 Question Id : 1679435823 Question Type : MCQ Option Shuffling : Yes Display Question Number : Yes
Single Line Question Option : No Option Orientation : Vertical

Correct : 1 Wrong : 0.25

Which group first faced Samudragupta's imperial designs?

Options :

- ☐ Satavahanas
- ☒ Nagas
- ☐ Shakas
- ☐ Maghas

Question Number : 118 Question Id : 1679435824 Question Type : MCQ Option Shuffling : Yes Display Question Number : Yes
Single Line Question Option : No Option Orientation : Vertical

Correct : 1 Wrong : 0.25

How were the later-day Guptas related to the Imperial Guptas?

Options :

- ✖ Through marriage
- ✔ As feudatories
- ✖ As a junior branch of the imperial family
- ✖ As members of the same line

Question Number : 119 Question Id : 1679435825 Question Type : MCQ Option Shuffling : Yes Display Question Number : Yes
Single Line Question Option : No Option Orientation : Vertical
Correct : 1 Wrong : 0.25

The state promoted trade in ancient India through:

- Options :
- ✖ Establishing market towns
 - ✖ Maintaining roads
 - ✖ Ensuring security on trade routes
 - ✔ All of the other options

Question Number : 120 Question Id : 1679435826 Question Type : MCQ Option Shuffling : Yes Display Question Number : Yes
Single Line Question Option : No Option Orientation : Vertical
Correct : 1 Wrong : 0.25

In ancient India, the largest urban centre of the following was:

- Options :
- ✖ Kausambhi
 - ✖ Champa
 - ✔ Pataliputra
 - ✖ Taxila

Subject Related

Group Number :	7
Group Id :	16794378
Group Maximum Duration :	0
Group Minimum Duration :	0
Revisit allowed for view? :	No

Revisit allowed for edit? : No
Break time: 0
Group Marks: 20

	Subject Related
Section Id :	167943137
Section Number :	1
Section type :	Online
Mandatory or Optional:	Mandatory
Number of Questions:	20
Number of Questions to be attempted:	20
Section Marks:	20
Display Number Panel:	Yes
Group All Questions:	No

Sub-Section Number: 1
Sub-Section Id: 167943329
Question Shuffling Allowed : Yes

Question Number : 121 Question Id : 1679435827 Question Type : MCQ Option Shuffling : Yes Display Question Number : Yes
Single Line Question Option : No Option Orientation : Vertical

Correct : 1 Wrong : 0.25

Dinara was a:

Options :

✔ Gold coin

✘ Type of doorway

✘ Silver coin

✘ Dinarius coin

Question Number : 122 Question Id : 1679435828 Question Type : MCQ Option Shuffling : Yes Display Question Number : Yes
Single Line Question Option : No Option Orientation : Vertical

Correct : 1 Wrong : 0.25

The socio-economic significance of the trading and craft guilds lay in their:

Options :

✔ Maintaining business and occupational monopoly of particular *varnas*

✘ Enforcing social discipline

✘ Providing economic support and organisation to trade and crafts

✖ Evolving into castes

Question Number : 123 Question Id : 1679435829 Question Type : MCQ Option Shuffling : Yes Display Question Number : Yes
Single Line Question Option : No Option Orientation : Vertical

Correct : 1 Wrong : 0.25

Arikamedu and Barbaricum were:

Options :

✔ Famous ancient port-towns

✖ Agrarian centres

✖ Industrial bases

✖ Intermediate urban centres

Question Number : 124 Question Id : 1679435830 Question Type : MCQ Option Shuffling : Yes Display Question Number : Yes
Single Line Question Option : No Option Orientation : Vertical

Correct : 1 Wrong : 0.25

The ancient city of Muziris was situated in:

Options :

✖ Maharashtra

✔ Kerala

✖ Khyber pass

✖ Kabul valley

Question Number : 125 Question Id : 1679435831 Question Type : MCQ Option Shuffling : Yes Display Question Number : Yes
Single Line Question Option : No Option Orientation : Vertical

Correct : 1 Wrong : 0.25

The sophisticated life style of elite urbanites described by Vatsayana indicates:

Options :

✔ The emergence of a rich urban class

✖ The rise of trade

✖ The prevalence of port towns

✖ The rise of fashion consciousness

Question Number : 126 Question Id : 1679435832 Question Type : MCQ Option Shuffling : Yes Display Question Number : Yes
Single Line Question Option : No Option Orientation : Vertical
Correct : 1 Wrong : 0.25

Which ancient sect gave women an important place and instituted orders of female ascetics?

Options :

- ☐ Ajivikas
- ☐ Lokayatas
- ☒ Tantrics
- ☐ Virasaivites

Question Number : 127 Question Id : 1679435833 Question Type : MCQ Option Shuffling : Yes Display Question Number : Yes
Single Line Question Option : No Option Orientation : Vertical
Correct : 1 Wrong : 0.25

The Bhakti movement was headed by leaders such as:

Options :

- ☒ Ramanuja and Kabir
- ☐ Bindusara
- ☐ Sandrocottus and Seleucos
- ☐ Makanda Ghosale

Question Number : 128 Question Id : 1679435834 Question Type : MCQ Option Shuffling : Yes Display Question Number : Yes
Single Line Question Option : No Option Orientation : Vertical
Correct : 1 Wrong : 0.25

Which of the following is true about Sufism?

Options :

- ☒ Sufism made no distinction between creeds and faiths
- ☐ Sufism addressed itself to specific occupational groups
- ☐ Sufism was against synthesis of Hindu and Muslim culture
- ☐ Sufism supported the caste system actively

Question Number : 129 Question Id : 1679435835 Question Type : MCQ Option Shuffling : Yes Display Question Number : Yes
Single Line Question Option : No Option Orientation : Vertical
Correct : 1 Wrong : 0.25

The first sovereign ruler of the Delhi Sultanate was:

Options :

- ☐ Qutb ud din Aibak
- ☒ Iltutmish
- ☐ Aram Shah
- ☐ Nasiruddin Mahmud

Question Number : 130 Question Id : 1679435836 Question Type : MCQ Option Shuffling : Yes Display Question Number : Yes
Single Line Question Option : No Option Orientation : Vertical

Correct : 1 Wrong : 0.25

From Iltutmish's death until Balban's accession, actual power was wielded by:

Options :

- ☐ Army
- ☒ Nobility
- ☐ Theologians
- ☐ All of the other options

Question Number : 131 Question Id : 1679435837 Question Type : MCQ Option Shuffling : Yes Display Question Number : Yes
Single Line Question Option : No Option Orientation : Vertical

Correct : 1 Wrong : 0.25

Which sultan's territory was the largest in the Delhi Sultanate?

Options :

- ☐ Alauddin Khilji
- ☒ Muhammad bin Tughlaq
- ☐ Firuz Shah Tughlaq
- ☐ Sikander Lodi

Question Number : 132 Question Id : 1679435838 Question Type : MCQ Option Shuffling : Yes Display Question Number : Yes
Single Line Question Option : No Option Orientation : Vertical

Correct : 1 Wrong : 0.25

The dynasty founded by Khizr Khan, Timur's nominee, is known as the Sayyid dynasty because:

Options :

- ✘ They ruled under the title Sayyid
- ✔ Khizr Khan was a descendant of the Prophet
- ✘ Khizr Khan belonged to the Sayyid tribe of eastern Turkestan
- ✘ Khizr Khan was a distinguished scholar of theology

Question Number : 133 Question Id : 1679435839 Question Type : MCQ Option Shuffling : Yes Display Question Number : Yes
Single Line Question Option : No Option Orientation : Vertical

Correct : 1 Wrong : 0.25

The Lodis were:

Options :

- ✘ Of pure Turk origin
- ✘ Timurid Turks
- ✘ Ottoman Turks
- ✔ Of pure Afghan origin

Question Number : 134 Question Id : 1679435840 Question Type : MCQ Option Shuffling : Yes Display Question Number : Yes
Single Line Question Option : No Option Orientation : Vertical

Correct : 1 Wrong : 0.25

Babur wrote his autobiography *Babur Nama* in:

Options :

- ✘ Persian
- ✘ Arabic
- ✘ Pashto
- ✔ Turki

Question Number : 135 Question Id : 1679435841 Question Type : MCQ Option Shuffling : Yes Display Question Number : Yes
Single Line Question Option : No Option Orientation : Vertical

Correct : 1 Wrong : 0.25

After recapturing Delhi and his second coronation, Humayun could rule for only:

Options :

- ✔ Six months

- ✘ Two years
- ✘ Fourteen months
- ✘ Two and half years

Question Number : 136 Question Id : 1679435842 Question Type : MCQ Option Shuffling : Yes Display Question Number : Yes
Single Line Question Option : No Option Orientation : Vertical

Correct : 1 Wrong : 0.25

At the time of his coronation at Kalanaur, Akbar's age was:

Options :

- ✔ Thirteen and half
- ✘ Fifteen
- ✘ Twenty
- ✘ Eighteen

Question Number : 137 Question Id : 1679435843 Question Type : MCQ Option Shuffling : Yes Display Question Number : Yes
Single Line Question Option : No Option Orientation : Vertical

Correct : 1 Wrong : 0.25

Which of the following was one of the main elements of Akbar's Rajput policy?

Options :

- ✘ Establishment of matrimonial alliances
- ✘ Grant of full autonomy and protection to Rajput polities
- ✘ Appointment of Rajput chiefs as high officials of Mughal government
- ✔ All of the other options

Question Number : 138 Question Id : 1679435844 Question Type : MCQ Option Shuffling : Yes Display Question Number : Yes
Single Line Question Option : No Option Orientation : Vertical

Correct : 1 Wrong : 0.25

The Mughals captured Chittor in 1568 after defeating:

Options :

- ✔ Rana Uday Singh
- ✘ Rana Pratap Singh

✖

Rana Amar Singh

✖

Rana Ram Singh

Question Number : 139

Question Id : 1679435845

Question Type : MCQ

Option Shuffling : Yes

Display Question Number : Yes

Single Line Question Option : No

Option Orientation : Vertical

Correct : 1

Wrong : 0.25

The Jesuit missionary who held discussions with Akbar and wrote about them was:

Options :

✖

Thomas Roe

✔

Antony Monserrate

✖

William Rubruck

✖

John di Plan Carpini

Question Number : 140

Question Id : 1679435846

Question Type : MCQ

Option Shuffling : Yes

Display Question Number : Yes

Single Line Question Option : No

Option Orientation : Vertical

Correct : 1

Wrong : 0.25

Which was NOT an important constituent element of Mughal government?

Options :

✔

Arabic

✖

Persian

✖

Turki

✖

Indian

Subject Related	
Group Number :	8
Group Id :	16794379
Group Maximum Duration :	0
Group Minimum Duration :	0
Revisit allowed for view? :	No
Revisit allowed for edit? :	No
Break time:	0
Group Marks:	20

Subject Related	
Section Id :	167943138
Section Number :	1
Section type :	Online
Mandatory or Optional:	Mandatory
Number of Questions:	20
Number of Questions to be attempted:	20
Section Marks:	20
Display Number Panel:	Yes
Group All Questions:	No

Sub-Section Number:	1
Sub-Section Id:	167943330
Question Shuffling Allowed :	Yes

Question Number : 141 Question Id : 1679435847 Question Type : MCQ Option Shuffling : Yes Display Question Number : Yes
Single Line Question Option : No Option Orientation : Vertical
Correct : 1 Wrong : 0.25

Who first divided the Mughal empire into provinces?

- Options :
- ☐ Babur
 - ☐ Humayun
 - ☐ Jahangir
 - ☒ Akbar

Question Number : 142 Question Id : 1679435848 Question Type : MCQ Option Shuffling : Yes Display Question Number : Yes
Single Line Question Option : No Option Orientation : Vertical
Correct : 1 Wrong : 0.25

Akbar introduced the mansabdari system to:

- Options :
- ☐ Engender loyalty
 - ☐ Distribute favours
 - ☒ Organise nobility and army
 - ☐ Satisfy officer's egos

Question Number : 143 Question Id : 1679435849 Question Type : MCQ Option Shuffling : Yes Display Question Number : Yes
Single Line Question Option : No Option Orientation : Vertical
Correct : 1 Wrong : 0.25

Foreign traveller(s) who visited during Jahangir's reign was/were:

Options :

- ☐ William Finch
- ☐ Francisco Pelsaert
- ☐ Ralph Fitch
- ☒ William Finch and Francisco Pelsaert

Question Number : 144 Question Id : 1679435850 Question Type : MCQ Option Shuffling : Yes Display Question Number : Yes
Single Line Question Option : No Option Orientation : Vertical

Correct : 1 Wrong : 0.25

From the _____ century, several of the mystical and protestant elements were recombined in the Bhakti or devotional movements.

Options :

- ☐ late thirteenth
- ☒ fourteenth
- ☐ fifteenth
- ☐ early fourteenth

Question Number : 145 Question Id : 1679435851 Question Type : MCQ Option Shuffling : Yes Display Question Number : Yes
Single Line Question Option : No Option Orientation : Vertical

Correct : 1 Wrong : 0.25

Which is the correct chronological order of these Bhakti preachers?

Options :

- ☐ Chaitanya, Kabir, Nanak
- ☐ Nanak, Chaitanya, Kabir
- ☒ Kabir, Nanak, Chaitanya
- ☐ Kabir, Ramdas, Ramjas

Question Number : 146 Question Id : 1679435852 Question Type : MCQ Option Shuffling : Yes Display Question Number : Yes
Single Line Question Option : No Option Orientation : Vertical

Correct : 1 Wrong : 0.25

Shia *sufi* teachings spread from Sindh and Punjab across north and central India from the _____ century.

Options :

☒ eleventh

☐ twelvth

☐ thirteenth

☐ fourteenth

Question Number : 147 Question Id : 1679435853 Question Type : MCQ Option Shuffling : Yes Display Question Number : Yes
Single Line Question Option : No Option Orientation : Vertical

Correct : 1 Wrong : 0.25

The *sufi* sect of the Chistis was active in _____ India.

Options :

☐ South

☒ North

☐ Eastern

☐ North-west

Question Number : 148 Question Id : 1679435854 Question Type : MCQ Option Shuffling : Yes Display Question Number : Yes
Single Line Question Option : No Option Orientation : Vertical

Correct : 1 Wrong : 0.25

The medieval *sufi* sects of the Suhrawardi were active in _____ and the Firdausi were active in _____.

Options :

☐ East Bengal; Orissa

☐ Punjab; Bihar

☒ Sindh; Bihar

☐ Punjab; Sindh

Question Number : 149 Question Id : 1679435855 Question Type : MCQ Option Shuffling : Yes Display Question Number : Yes
Single Line Question Option : No Option Orientation : Vertical

Correct : 1 Wrong : 0.25

Who first translated the *Tota Maina* stories into Persian?

Options :

☐ Amir Khusrau

✘ Faizi

✔ Jiya Naqshwi

✘ Badauni

Question Number : 150 Question Id : 1679435856 Question Type : MCQ Option Shuffling : Yes Display Question Number : Yes
Single Line Question Option : No Option Orientation : Vertical

Correct : 1 Wrong : 0.25

The giant Qutb Minar within the Quwwat-ul-Islam mosque in Delhi consists of _____ tapering shafts with balconies supported on muqarnas corbels.

Options :

✔ five

✘ four

✘ six

✘ seven

Question Number : 151 Question Id : 1679435857 Question Type : MCQ Option Shuffling : Yes Display Question Number : Yes
Single Line Question Option : No Option Orientation : Vertical

Correct : 1 Wrong : 0.25

The media used for engraving Sultanate inscriptions was:

Options :

✔ Copper plate and stone

✘ Copper and iron plates

✘ Stone and iron plates

✘ Lead plates and stone

Question Number : 152 Question Id : 1679435858 Question Type : MCQ Option Shuffling : Yes Display Question Number : Yes
Single Line Question Option : No Option Orientation : Vertical

Correct : 1 Wrong : 0.25

The largest bridge was built in Akbar's time at:

Options :

✔ Delhi (Barapula)

✘ Jaunpur

- ✖ Jajau
- ✖ Nurpur

Question Number : 153 Question Id : 1679435859 Question Type : MCQ Option Shuffling : Yes Display Question Number : Yes
Single Line Question Option : No Option Orientation : Vertical
Correct : 1 Wrong : 0.25

Buland Darwaza was built at Fatehpur Sikri by Akbar to:

Options :

- ✔ Commemorate his victory over Gujarat
- ✖ Celebrate the birth of Salim
- ✖ Celebrate his alliance with Amber and his marriage with the Amber princess
- ✖ Commemorate the completion of twenty five years of rule

Question Number : 154 Question Id : 1679435860 Question Type : MCQ Option Shuffling : Yes Display Question Number : Yes
Single Line Question Option : No Option Orientation : Vertical
Correct : 1 Wrong : 0.25

What stylistic novelty is found in the tomb of Khan i Jahan Telangani built in Delhi under the Delhi Sultanate?

Options :

- ✖ Use of white marble against red sandstone
- ✖ True arch
- ✖ Double dome
- ✔ Octagonal shape

Question Number : 155 Question Id : 1679435861 Question Type : MCQ Option Shuffling : Yes Display Question Number : Yes
Single Line Question Option : No Option Orientation : Vertical
Correct : 1 Wrong : 0.25

The European nation that first discovered the sea route to India was:

Options :

- ✖ England under the Tudors
- ✔ Portugal under the Aviz dynasty
- ✖ Netherlands under the Spanish Hapsburgs

✖ Spain via Manila

Question Number : 156 Question Id : 1679435862 Question Type : MCQ Option Shuffling : Yes Display Question Number : Yes
Single Line Question Option : No Option Orientation : Vertical

Correct : 1 Wrong : 0.25

Who discovered the passage to India by the Cape of Good Hope?

Options :

✖ Niccolò Conti

✖ Vasco da Gama

✖ Marco Polo

✔ Bartolomeu Diaz

Question Number : 157 Question Id : 1679435863 Question Type : MCQ Option Shuffling : Yes Display Question Number : Yes
Single Line Question Option : No Option Orientation : Vertical

Correct : 1 Wrong : 0.25

What are the three Gs motivating the European discoveries?

Options :

✖ Greed, gourmandise and glory

✖ Greed, god and glory

✔ God, gold and glory

✖ God, gluttony and gold

Question Number : 158 Question Id : 1679435864 Question Type : MCQ Option Shuffling : Yes Display Question Number : Yes
Single Line Question Option : No Option Orientation : Vertical

Correct : 1 Wrong : 0.25

Vasco da Gama was helped by _____ to reach the Malabar coast.

Options :

✖ Ibn Saud

✔ Ibn Majid

✖ The merchant Suleiman al-Tajir

✖ Ibn Khurdadhbi

Question Number : 159 Question Id : 1679435865 Question Type : MCQ Option Shuffling : Yes Display Question Number : Yes
Single Line Question Option : No Option Orientation : Vertical
Correct : 1 Wrong : 0.25

The Portuguese first arrived in India at:

- Options :
- ✓ Calicut
 - ✗ Kappad
 - ✗ Mangalore
 - ✗ Kochi

Question Number : 160 Question Id : 1679435866 Question Type : MCQ Option Shuffling : Yes Display Question Number : Yes
Single Line Question Option : No Option Orientation : Vertical
Correct : 1 Wrong : 0.25

The first Portuguese settlement in Bengal was at:

- Options :
- ✓ Hooghly
 - ✗ Bandel
 - ✗ Baranagar
 - ✗ Chandernagar

Group Number :	9
Group Id :	16794380
Group Maximum Duration :	0
Group Minimum Duration :	0
Revisit allowed for view? :	No
Revisit allowed for edit? :	No
Break time:	0
Group Marks:	20

Subject Related

Section Id :	167943139
Section Number :	1
Section type :	Online
Mandatory or Optional:	Mandatory
Number of Questions:	20
Number of Questions to be attempted:	20

Subject Related

Section Marks: 20
Display Number Panel: Yes
Group All Questions: No

Sub-Section Number: 1
Sub-Section Id: 167943331
Question Shuffling Allowed : Yes

Question Number : 161 Question Id : 1679435867 Question Type : MCQ Option Shuffling : Yes Display Question Number : Yes
Single Line Question Option : No Option Orientation : Vertical
Correct : 1 Wrong : 0.25

The Dutch established themselves in Bengal at

Options :

- ☐ Serampore
- ☒ Chinsurah
- ☐ Bankibazar
- ☐ Murshidabad

Question Number : 162 Question Id : 1679435868 Question Type : MCQ Option Shuffling : Yes Display Question Number : Yes
Single Line Question Option : No Option Orientation : Vertical
Correct : 1 Wrong : 0.25

The French headquarters in South India was at:

Options :

- ☐ Arcot
- ☐ Tanjore
- ☐ Arikamedu
- ☒ Pondicherry

Question Number : 163 Question Id : 1679435869 Question Type : MCQ Option Shuffling : Yes Display Question Number : Yes
Single Line Question Option : No Option Orientation : Vertical
Correct : 1 Wrong : 0.25

All European companies established themselves at Surat because:

Options :

- ☐ It had good transport links with the interior
- ☐ It was a great emporium of trade

✘ It had a great market

✔ It was a great emporium of trade and it had a great market

Question Number : 164 Question Id : 1679435870 Question Type : MCQ Option Shuffling : Yes Display Question Number : Yes
Single Line Question Option : No Option Orientation : Vertical

Correct : 1 Wrong : 0.25

The Dutch lost to the English at the:

Options :

✔ Battle of Chinsurah or Battle of Biderrain 1759

✘ Battle of Jugalkot in 1752

✘ Battle of Hugli in 1758

✘ Battle of Plassey in 1757

Question Number : 165 Question Id : 1679435871 Question Type : MCQ Option Shuffling : Yes Display Question Number : Yes
Single Line Question Option : No Option Orientation : Vertical

Correct : 1 Wrong : 0.25

The Danes are famous for introducing into Bengal:

Options :

✔ Missionary activities

✘ The printing press

✘ Evangelists

✘ Charity work

Question Number : 166 Question Id : 1679435872 Question Type : MCQ Option Shuffling : Yes Display Question Number : Yes
Single Line Question Option : No Option Orientation : Vertical

Correct : 1 Wrong : 0.25

What was NOT a consideration for European companies to settle in Bengal?

Options :

✘ Diversity and inexpensiveness of trading goods

✘ Good transport links through rivers

✘ Inexpensiveness of items for daily use

✓ Power of the local court

Question Number : 167 Question Id : 1679435873 Question Type : MCQ Option Shuffling : Yes Display Question Number : Yes
Single Line Question Option : No Option Orientation : Vertical

Correct : 1 Wrong : 0.25

The greatest bankers in Bengal were:

Options :

✗ Hazoorimull

✓ Jagat Seth

✗ Alamchand

✗ Gyanchand

Question Number : 168 Question Id : 1679435874 Question Type : MCQ Option Shuffling : Yes Display Question Number : Yes
Single Line Question Option : No Option Orientation : Vertical

Correct : 1 Wrong : 0.25

The French in Bengal reached great heights under:

Options :

✗ Francis Hardancourt

✓ Francois Dupleix

✗ Robert Lessier

✗ Philippe Caron

Question Number : 169 Question Id : 1679435875 Question Type : MCQ Option Shuffling : Yes Display Question Number : Yes
Single Line Question Option : No Option Orientation : Vertical

Correct : 1 Wrong : 0.25

A famous French traveller who visited Chinsurah in the late seventeenth century was:

Options :

✗ Francois Beaulieu

✗ Robert Challes

✗ Francois Bernier

✓ Jean Baptiste Tavernier

Question Number : 170 Question Id : 1679435876 Question Type : MCQ Option Shuffling : Yes Display Question Number : Yes
Single Line Question Option : No Option Orientation : Vertical

Correct : 1 Wrong : 0.25

Which historian claimed that 1757 did NOT impact the Indian economy and that the boom continued into the nineteenth century?

Options :

✘ Morris D Morris

✘ Angus Maddison

✔ C A Bayly

✘ B R Tomlinson

Question Number : 171 Question Id : 1679435877 Question Type : MCQ Option Shuffling : Yes Display Question Number : Yes
Single Line Question Option : No Option Orientation : Vertical

Correct : 1 Wrong : 0.25

The first negative effect of British rule in Bengal was seen in:

Options :

✘ The new market towns established by the British

✔ The famine of 1769-70

✘ Revenue farming

✘ None of the other options

Question Number : 172 Question Id : 1679435878 Question Type : MCQ Option Shuffling : Yes Display Question Number : Yes
Single Line Question Option : No Option Orientation : Vertical

Correct : 1 Wrong : 0.25

De-industrialisation referred to:

Options :

✘ Deserted villages

✘ Decay of traditional urban centres

✘ Decline of indigenous crafts

✔ All of the other options

Question Number : 173 Question Id : 1679435879 Question Type : MCQ Option Shuffling : Yes Display Question Number : Yes
Single Line Question Option : No Option Orientation : Vertical

Correct : 1 Wrong : 0.25

What is NOT a true statement with regard to the eighteenth century India?

Options :

- ☒ Towns such as Benares, Pune, Lucknow, Hyderabad, Mysore or Jaipur experienced growth in the eighteenth century at the expense of Delhi, Agra, and Lahore.
- ☒ Indigenous trade and shipping increased
- ☒ By 1800, commercially speaking, the capitals of most successor states were towns without a secure future.
- ☒ Traditional towns in India were eclipsed by the dynamism of Calcutta, Madras and Bombay.

Question Number : 174 Question Id : 1679435880 Question Type : MCQ Option Shuffling : Yes Display Question Number : Yes
Single Line Question Option : No Option Orientation : Vertical

Correct : 1 Wrong : 0.25

The first European steam-powered factory producing cotton yarn was established:

Options :

- ☒ Near Calcutta in 1817 or 1818
- ☒ In Bombay in 1854
- ☒ In Ahmedabad in 1853
- ☒ In Bombay in 1856

Question Number : 175 Question Id : 1679435881 Question Type : MCQ Option Shuffling : Yes Display Question Number : Yes
Single Line Question Option : No Option Orientation : Vertical

Correct : 1 Wrong : 0.25

Which successive order of Governor-Generals is correct?

Options :

- ☒ Warren Hastings, Cornwallis, Sir John Shore, Wellesley (Mornington)
- ☒ Hastings, Cornwallis, Barlow, Amherst
- ☒ Hastings, Shore, Cornwallis, Wellesley (Mornington)
- ☒ Cornwallis, Bentinck, Auckland, Ellenborough,

Question Number : 176 Question Id : 1679435882 Question Type : MCQ Option Shuffling : Yes Display Question Number : Yes
Single Line Question Option : No Option Orientation : Vertical

Correct : 1 Wrong : 0.25

Which of the following is NOT true with regard to the British impact on the Indian economy?

Options :

✖ The terms of international trade, the conditions of production in India, and the regulations imposed by its European government all turned against Indian entrepreneurs and merchants.

✖ In the 1900s, J. N. Tata, after large expenditure, sought to raise capital in London for a proposed steel works plant at Jamshedpur. He found London financiers unwilling to lend to a speculation under Indian management.

✖ Secure, profitable and expensive state-backed loans for major railways and canals were raised internationally.

✔ Nineteenth-century colonial policy offered protection to Indian-owned and India-based enterprises.

Question Number : 177 Question Id : 1679435883 Question Type : MCQ Option Shuffling : Yes Display Question Number : Yes
Single Line Question Option : No Option Orientation : Vertical

Correct : 1 Wrong : 0.25

Which of the following is NOT true about the revolt of 1857?

Options :

✖ It spread over much of North and Central India.

✖ Leaders participating in the revolt evoked Mughal forms of governance.

✖ Leaders participating in revolt instituted command structures on the model of the company's army and administration.

✔ Leaders participating in revolt established pan-Indian alliances.

Question Number : 178 Question Id : 1679435884 Question Type : MCQ Option Shuffling : Yes Display Question Number : Yes
Single Line Question Option : No Option Orientation : Vertical

Correct : 1 Wrong : 0.25

The British East India Company could ultimately suppress the 1857 revolt because:

Options :

✔ The revolt focussed upon only a few hubs, such as Delhi or Lucknow, and the leaders failed to consolidate across wider areas except through alliance with lesser centres or power-brokers.

✖ The Company had large numbers of British troops

✖ Company ships fired cannons on the Indians

✖ The Company controlled all land routes

Question Number : 179 Question Id : 1679435885 Question Type : MCQ Option Shuffling : Yes Display Question Number : Yes
Single Line Question Option : No Option Orientation : Vertical

Correct : 1 Wrong : 0.25

Who wrote the book *The Indian Musalmans*?

Options :

✔ W W Hunter

✘ Kevin MacDonald

✘ S S Thorburn

✘ James Mill

Question Number : 180 Question Id : 1679435886 Question Type : MCQ Option Shuffling : Yes Display Question Number : Yes
Single Line Question Option : No Option Orientation : Vertical
Correct : 1 Wrong : 0.25

A former Brahmo, Shiv Narayan Agnihotri (1850–1929), formed the Dev Samaj in the Punjab in:

Options :

✘ 1885

✔ 1887

✘ 1897

✘ 1859

Group Number :	10
Group Id :	16794381
Group Maximum Duration :	0
Group Minimum Duration :	0
Revisit allowed for view? :	No
Revisit allowed for edit? :	No
Break time:	0
Group Marks:	20

	Subject Related
Section Id :	167943140
Section Number :	1
Section type :	Online
Mandatory or Optional:	Mandatory
Number of Questions:	20
Number of Questions to be attempted:	20
Section Marks:	20
Display Number Panel:	Yes
Group All Questions:	No

Sub-Section Number: 1
Sub-Section Id: 167943332
Question Shuffling Allowed : Yes

Question Number : 181 Question Id : 1679435887 Question Type : MCQ Option Shuffling : Yes Display Question Number : Yes
Single Line Question Option : No Option Orientation : Vertical

Correct : 1 Wrong : 0.25

Arya Samaj, which was started in erstwhile Bombay in 1875 and in Lahore in 1877 by Dayanand Saraswati, was also known as:

Options :

- ☒ Noble Society
- ☐ Honoured Society
- ☐ Great Society
- ☐ Distinguished Society

Question Number : 182 Question Id : 1679435888 Question Type : MCQ Option Shuffling : Yes Display Question Number : Yes
Single Line Question Option : No Option Orientation : Vertical

Correct : 1 Wrong : 0.25

After Dayanand's death, the Lahore Samaj and other societies he had formed across Northern India came together to establish a school in his memory at _____, which was called _____ and whose date of establishment was _____.

Options :

- ☒ Lahore; The Dayanand Anglo-Vedic College; 1886
- ☐ Bombay; The Dayanand Shaka; 1887
- ☐ Lahore; The Dayanand Vedic Association; 1890
- ☐ Lahore; The Dayanand Vedic College; 1887

Question Number : 183 Question Id : 1679435889 Question Type : MCQ Option Shuffling : Yes Display Question Number : Yes
Single Line Question Option : No Option Orientation : Vertical

Correct : 1 Wrong : 0.25

Jyotirao Phule established the _____ Samaj (truth-seeking society).

Options :

- ☐ Satyapath
- ☒ Satyashodhak
- ☐ Satyagraha

✖ Satyabhama

Question Number : 184 Question Id : 1679435890 Question Type : MCQ Option Shuffling : Yes Display Question Number : Yes
Single Line Question Option : No Option Orientation : Vertical

Correct : 1 Wrong : 0.25

Brahma Sabha (1828), Dharma Sabha (1830) and Landholders' Society (1838) were _____ based societies.

Options :

✖ Patna

✖ Delhi

✖ Bombay

✔ Calcutta

Question Number : 185 Question Id : 1679435891 Question Type : MCQ Option Shuffling : Yes Display Question Number : Yes
Single Line Question Option : No Option Orientation : Vertical

Correct : 1 Wrong : 0.25

The poem Vande Mataram was written by:

Options :

✔ Bankim Chandra Chatterjee

✖ Aurobindo Ghosh

✖ Rabindranath Tagore

✖ Bipin Chandra Pal

Question Number : 186 Question Id : 1679435892 Question Type : MCQ Option Shuffling : Yes Display Question Number : Yes
Single Line Question Option : No Option Orientation : Vertical

Correct : 1 Wrong : 0.25

Which political leader entitled his political autobiography, A Nation in Making (1925)?

Options :

✖ Dadabhai Naoroji

✔ Surendranath Banerjee

✖ M K Gandhi

✖ Motilal Nehru

Question Number : 187 Question Id : 1679435893 Question Type : MCQ Option Shuffling : Yes Display Question Number : Yes
Single Line Question Option : No Option Orientation : Vertical
Correct : 1 Wrong : 0.25

The East India Association (1855) was set up in:

Options :

- ☒ London and Bombay
- ☐ Calcutta and Nagpur
- ☐ Calcutta and Bombay
- ☐ Madras and Bombay

Question Number : 188 Question Id : 1679435894 Question Type : MCQ Option Shuffling : Yes Display Question Number : Yes
Single Line Question Option : No Option Orientation : Vertical
Correct : 1 Wrong : 0.25

Rowlatt in 1919, non-cooperation in 1920–22, civil disobedience in 1930–34 were:

Options :

- ☐ Urban protests.
- ☐ Mass movements by Gandhi, based on ‘truth-force’ (*satyagraha*) and a Jain-influenced non-violence (*ahimsa*).
- ☐ Based on Gandhi’s activism and idealism, which appealed to young volunteers, local leaders and many established all-India politicians as a means of confronting the British without risking violence or violent reprisals.
- ☒ Both mass movements by Gandhi, based on ‘truth-force’ (*satyagraha*) and a Jain-influenced non-violence (*ahimsa*); and based on Gandhi’s activism and idealism, which appealed to young volunteers, local leaders and many established all-India politicians as a means of confronting the British without risking violence or violent reprisals.

Question Number : 189 Question Id : 1679435895 Question Type : MCQ Option Shuffling : Yes Display Question Number : Yes
Single Line Question Option : No Option Orientation : Vertical
Correct : 1 Wrong : 0.25

When did the Indian Constitution come into force?

Options :

- ☐ 25th January, 1950
- ☐ 26th January, 1948
- ☐ 25th January, 1949
- ☒ 26th January, 1950

Question Number : 190 Question Id : 1679435896 Question Type : MCQ Option Shuffling : Yes Display Question Number : Yes
Single Line Question Option : No Option Orientation : Vertical
Correct : 1 Wrong : 0.25

Which of the following is a correct statement?

Options :

✓ ☒ Untouchability was officially abolished, though not removed, under the schedules of the Constitution, reinforced by an Act of 1955

✗ ☐ Untouchability was removed under the schedules of the Constitution

✗ ☐ Untouchability was neither abolished nor removed under the schedules of the Constitution

✗ ☐ Untouchability was declared a crime punishable by law, carrying a prison sentence under the schedules of the Constitution

Question Number : 191 Question Id : 1679435897 Question Type : MCQ Option Shuffling : Yes Display Question Number : Yes
Single Line Question Option : No Option Orientation : Vertical
Correct : 1 Wrong : 0.25

Motilal Nehru's constitutional consultative committee report (1928) was rejected by the All India Muslim Conference in 1929 because the Conference thought that:

Options :

✗ ☐ It favoured Hindus and would create a Hindu state

✗ ☐ It marginalised Muslims from decision making

✗ ☐ It was too pro-British

✓ ☒ The Nehru Report generated the broadest possible consensus among Indian opinion and envisaged pan-Indian rights and structures, while the Muslim Conference felt that in view of India's vast extent and divisions, the only form of Government suitable to Indian conditions was a federal system with complete autonomy and residuary powers vested in the constituent states

Question Number : 192 Question Id : 1679435898 Question Type : MCQ Option Shuffling : Yes Display Question Number : Yes
Single Line Question Option : No Option Orientation : Vertical
Correct : 1 Wrong : 0.25

The raw material that epitomises Mesopotamian civilisation is:

Options :

✗ ☐ Stone

✓ ☒ Clay

✗ ☐ Palm leaf

✗ ☐ Wood

Question Number : 193 Question Id : 1679435899 Question Type : MCQ Option Shuffling : Yes Display Question Number : Yes
Single Line Question Option : No Option Orientation : Vertical

Correct : 1 Wrong : 0.25

A system of writing first developed by the ancient Sumerians of Mesopotamia is known as:

Options :

- ☒ Cuneiform
- ☐ Cuneiformal
- ☐ Apsidal
- ☐ Cueniform

Question Number : 194 Question Id : 1679435900 Question Type : MCQ Option Shuffling : Yes Display Question Number : Yes
Single Line Question Option : No Option Orientation : Vertical

Correct : 1 Wrong : 0.25

The earliest cities of southern Mesopotamia were:

Options :

- ☐ Uruk and Kish
- ☐ Eridu and Babylonia
- ☒ Eridu, Uruk, Bad-tibira, Nippur and Kish
- ☐ Nippur and Kish

Question Number : 195 Question Id : 1679435901 Question Type : MCQ Option Shuffling : Yes Display Question Number : Yes
Single Line Question Option : No Option Orientation : Vertical

Correct : 1 Wrong : 0.25

The surveys of Robert McCormick Adams and Hans Nissen showed:

Options :

- ☐ Mesopotamian settlements gradually shifted to urban conglomerates
- ☒ How the relative size and number of Mesopotamian settlements gradually shifted: the number of small or very small settlements was reduced overall, whereas the number of larger places grew.
- ☐ Small or very small settlements grew fast
- ☐ Small settlements suddenly died out

Question Number : 196 Question Id : 1679435902 Question Type : MCQ Option Shuffling : Yes Display Question Number : Yes
Single Line Question Option : No Option Orientation : Vertical

Correct : 1 Wrong : 0.25

The clearest sign of Mesopotamian urbanisation can be seen at:

Options :

- ☐ Nippur
- ☐ Eridu
- ☐ Uruk and Kish
- ☒ Uruk Levels VI to IV

Question Number : 197 Question Id : 1679435903 Question Type : MCQ Option Shuffling : Yes Display Question Number : Yes
Single Line Question Option : No Option Orientation : Vertical

Correct : 1 Wrong : 0.25

Later Mesopotamian urbanisation showed:

Options :

- ☐ Presence of camels
- ☐ Drainage canals
- ☐ Small settlements
- ☒ An almost explosive increase in the size of the buildings

Question Number : 198 Question Id : 1679435904 Question Type : MCQ Option Shuffling : Yes Display Question Number : Yes
Single Line Question Option : No Option Orientation : Vertical

Correct : 1 Wrong : 0.25

Mesopotamian temples were:

Options :

- ☒ Rectangular buildings, covering areas as large as 275 by 175 feet
- ☐ Round in shape
- ☐ Hexagonal in shape
- ☐ Square in shape

Question Number : 199 Question Id : 1679435905 Question Type : MCQ Option Shuffling : Yes Display Question Number : Yes
Single Line Question Option : No Option Orientation : Vertical

Correct : 1 Wrong : 0.25

A trans-shipment point for Mesopotamian trade with the Oman coast and the Indus region was:

Options :

✔ The isle of Dilmun (modern Bahrain)

✘ Barbarikon

✘ Nishapur

✘ Barygaza

Question Number : 200 Question Id : 1679435906 Question Type : MCQ Option Shuffling : Yes Display Question Number : Yes
Single Line Question Option : No Option Orientation : Vertical

Correct : 1 Wrong : 0.25

In the more recent texts, Oman and the Indus region are known as:

Options :

✔ Magan and Meluhha

✘ Om Kippur and Tilgrath

✘ Bad Kimbesh and Meluhha

✘ Lugalzagesi and Lagash

Group Number :

Group Id :

Group Maximum Duration :

Group Minimum Duration :

Revisit allowed for view? :

Revisit allowed for edit? :

Break time:

Group Marks:

Subject Related

11

16794382

0

0

No

No

0

20

Subject Related

Section Id :

167943141

Section Number :

1

Section type :

Online

Mandatory or Optional:

Mandatory

Number of Questions:

20

Number of Questions to be attempted:

20

Section Marks:

20

Display Number Panel:

Yes

Group All Questions:

No

Sub-Section Number: 1
Sub-Section Id: 167943333
Question Shuffling Allowed : Yes

Question Number : 201 Question Id : 1679435907 Question Type : MCQ Option Shuffling : Yes Display Question Number : Yes
Single Line Question Option : No Option Orientation : Vertical

Correct : 1 Wrong : 0.25

The year 2350 B.C. was a turning point in the history of Mesopotamia because:

Options :

- ☐ Rivers dried up and trade was affected for the first time.
- ☒ For the first time, an empire arose on Mesopotamian soil. The driving force of that empire were the Akkadians.
- ☐ The Mesopotamian civilisation faced constant invasions.
- ☐ Floods destroyed all its cities.

Question Number : 202 Question Id : 1679435908 Question Type : MCQ Option Shuffling : Yes Display Question Number : Yes
Single Line Question Option : No Option Orientation : Vertical

Correct : 1 Wrong : 0.25

The first ruler of the Akkadians was:

Options :

- ☐ Tilgrath Pilser
- ☐ Heraclitus
- ☐ Eusebius
- ☒ Sargon

Question Number : 203 Question Id : 1679435909 Question Type : MCQ Option Shuffling : Yes Display Question Number : Yes
Single Line Question Option : No Option Orientation : Vertical

Correct : 1 Wrong : 0.25

The Akkadians were contemporary to the:

Options :

- ☒ Sumerians
- ☐ Babylonians
- ☐ Early Mesopotamians
- ☐ Very early Harappans

Question Number : 204 Question Id : 1679435910 Question Type : MCQ Option Shuffling : Yes Display Question Number : Yes
Single Line Question Option : No Option Orientation : Vertical

Correct : 1 Wrong : 0.25

In its character, Mesopotamia was a:

Options :

- ☐ Composite civilisation
- ☒ Heterogeneous civilisation, containing many diverse elements and people
- ☐ Centralised empire
- ☐ Homogeneous

Question Number : 205 Question Id : 1679435911 Question Type : MCQ Option Shuffling : Yes Display Question Number : Yes
Single Line Question Option : No Option Orientation : Vertical

Correct : 1 Wrong : 0.25

The concept of an atomic universe was first posited in Greece through the work of:

Options :

- ☒ Democritus and Leucippus
- ☐ Heraclitus
- ☐ Argon
- ☐ Thales

Question Number : 206 Question Id : 1679435912 Question Type : MCQ Option Shuffling : Yes Display Question Number : Yes
Single Line Question Option : No Option Orientation : Vertical

Correct : 1 Wrong : 0.25

Early work in physics and engineering was pioneered by:

Options :

- ☒ Archimedes of the Greek colony of Syracuse
- ☐ Democritus
- ☐ Themistocles
- ☐ Euclid

Question Number : 207 Question Id : 1679435913 Question Type : MCQ Option Shuffling : Yes Display Question Number : Yes
Single Line Question Option : No Option Orientation : Vertical

Correct : 1 Wrong : 0.25

Which sea does NOT surround Greece?

Options :

- ☐ Aegean Sea
- ☐ Mediterranean Sea
- ☒ Akkadian Sea
- ☐ Ionian Sea

Question Number : 208 Question Id : 1679435914 Question Type : MCQ Option Shuffling : Yes Display Question Number : Yes
Single Line Question Option : No Option Orientation : Vertical

Correct : 1 Wrong : 0.25

The designation *Hellas* is derived from:

Options :

- ☐ Hellenic, a mountain in Central Greece
- ☒ Hellen, son of Deucalion and Pyrrha, who features in Ovid's tale of the Great Flood in his *Metamorphoses*
- ☐ Helios, the Sun God
- ☐ Hela, the Greek Goddess of Fortune

Question Number : 209 Question Id : 1679435915 Question Type : MCQ Option Shuffling : Yes Display Question Number : Yes
Single Line Question Option : No Option Orientation : Vertical

Correct : 1 Wrong : 0.25

Which civilisation was NOT a part of ancient Greece?

Options :

- ☐ Minoan Civilisation
- ☐ Cycladic Civilisation
- ☒ Aegean Civilisation
- ☐ Mycenaean Civilisation

Question Number : 210 Question Id : 1679435916 Question Type : MCQ Option Shuffling : Yes Display Question Number : Yes
Single Line Question Option : No Option Orientation : Vertical

Correct : 1 Wrong : 0.25

The Archaic Period (800-500 BCE) in Greece is characterised by:

Options :

✓ The introduction of republics instead of monarchies (which, in Athens, moved towards Democratic rule) organised as a single city-state or polis

✗ A highly statist rule

✗ The institution of a legal framework

✗ The introduction of republics instead of monarchies (which, in Athens, moved towards Democratic rule) organised as a single city-state or polis as well as The institution of a legal framework

Question Number : 211 Question Id : 1679435917 Question Type : MCQ Option Shuffling : Yes Display Question Number : Yes
Single Line Question Option : No Option Orientation : Vertical

Correct : 1 Wrong : 0.25

Which of the following was a city-state hostile to Athens?

Options :

✗ Knossos

✗ Rhodes

✗ Naxos

✓ Sparta

Question Number : 212 Question Id : 1679435918 Question Type : MCQ Option Shuffling : Yes Display Question Number : Yes
Single Line Question Option : No Option Orientation : Vertical

Correct : 1 Wrong : 0.25

The Peloponnesian League was:

Options :

✗ An offensive alliance of the Greek city states against the Persians

✓ A defensive alliance against the Delian League

✗ An alliance of the Greek islands against mainland Greece

✗ A league formed to promote Greek commercial interests

Question Number : 213 Question Id : 1679435919 Question Type : MCQ Option Shuffling : Yes Display Question Number : Yes
Single Line Question Option : No Option Orientation : Vertical

Correct : 1 Wrong : 0.25

The power vacuum after the fall of Athens and Sparta was filled by:

Options :

✘ Alexander I of Macedonia after a devastating flood weakened Greece

✘ Anaximander of Macedonia

✓ Philip II of Macedon (382-336 BCE), after his victory over the Athenian forces and their allies at the Battle of Chaeronea in 338 BCE

✘ Philip I of Macedon

Question Number : 214 Question Id : 1679435920 Question Type : MCQ Option Shuffling : Yes Display Question Number : Yes
Single Line Question Option : No Option Orientation : Vertical
Correct : 1 Wrong : 0.25

The Hellenistic Age is the period during which:

Options :

✘ The later Greeks fought with the Persians

✓ Greek thought and culture became dominant in the regions under the rule of the four generals among whom Alexander's empire had been divided

✘ The early Greeks fought the Sassanians

✘ The Athenian Empire fought the Sassanid Empire

Question Number : 215 Question Id : 1679435921 Question Type : MCQ Option Shuffling : Yes Display Question Number : Yes
Single Line Question Option : No Option Orientation : Vertical
Correct : 1 Wrong : 0.25

Which of the following work was NOT done by the Roman Empire?

Options :

✘ Encompassing most of continental Europe, Britain, much of Western Asia, northern Africa and the Mediterranean islands

✘ Following a mixture of paganism, philosophical beliefs and early Christianity

✘ Introducing the western calendar

✓ None of the other options

Question Number : 216 Question Id : 1679435922 Question Type : MCQ Option Shuffling : Yes Display Question Number : Yes
Single Line Question Option : No Option Orientation : Vertical
Correct : 1 Wrong : 0.25

Greece was designated a Protectorate of Rome in:

Options :

✓ 146 BCE

✗ 168 BCE

✗ 141 BCE

✗ 167 BCE

Question Number : 217 Question Id : 1679435923 Question Type : MCQ Option Shuffling : Yes Display Question Number : Yes
Single Line Question Option : No Option Orientation : Vertical

Correct : 1 Wrong : 0.25

In 31 BCE, Octavian Caesar annexed _____ as a province of Rome following his victory over Mark Antony and Cleopatra at the Battle of Actium.

Options :

✗ Gaul

✗ England

✗ Germania

✓ Greece

Question Number : 218 Question Id : 1679435924 Question Type : MCQ Option Shuffling : Yes Display Question Number : Yes
Single Line Question Option : No Option Orientation : Vertical

Correct : 1 Wrong : 0.25

Augustus Caesar's original name was:

Options :

✗ Julius

✓ Octavian Caesar

✗ Marcus

✗ Antonius Caesar

Question Number : 219 Question Id : 1679435925 Question Type : MCQ Option Shuffling : Yes Display Question Number : Yes
Single Line Question Option : No Option Orientation : Vertical

Correct : 1 Wrong : 0.25

The first Roman emperor was:

Options :

✗ Tiberius

✖ Julius

✖ Nero

✔ Augustus

Question Number : 220 Question Id : 1679435926 Question Type : MCQ Option Shuffling : Yes Display Question Number : Yes
Single Line Question Option : No Option Orientation : Vertical
Correct : 1 Wrong : 0.25

Which of the following is among the many legacies of Roman dominance?

Options :

✖ Capture of the Red Sea trade

The widespread use of Romance languages (Italian, French, Spanish, Portuguese and Romanian) derived from Latin, the modern Western alphabet, the calendar and the emergence of Christianity as a major world religion

✖ The Rome-India trade

✔ All of the other options

Subject Related	
Group Number :	12
Group Id :	16794383
Group Maximum Duration :	0
Group Minimum Duration :	0
Revisit allowed for view? :	No
Revisit allowed for edit? :	No
Break time:	0
Group Marks:	20

Subject Related	
Section Id :	167943142
Section Number :	1
Section type :	Online
Mandatory or Optional:	Mandatory
Number of Questions:	20
Number of Questions to be attempted:	20
Section Marks:	20
Display Number Panel:	Yes
Group All Questions:	No

Sub-Section Id: 167943334
Question Shuffling Allowed : Yes

Question Number : 221 Question Id : 1679435927 Question Type : MCQ Option Shuffling : Yes Display Question Number : Yes
Single Line Question Option : No Option Orientation : Vertical

Correct : 1 Wrong : 0.25

The Prophet Muhammad (570–632 CE) was tasked with:

Options :

- ☐ Conveying the revelation
- ☐ Providing economic support and organisation to trade and crafts
- ☐ Putting into place Islam's ethical framework
- ☒ Conveying the revelation and putting into place Islam's ethical framework

Question Number : 222 Question Id : 1679435928 Question Type : MCQ Option Shuffling : Yes Display Question Number : Yes
Single Line Question Option : No Option Orientation : Vertical

Correct : 1 Wrong : 0.25

The defining aspect(s) of the Prophet's ethical framework at large was/were:

Options :

- ☐ Jihad
- ☐ Trade and commerce as a sacred duty
- ☐ The rule of a just king
- ☒ The 'pillars' of the faith: bearing witness to God and his prophet, ritual prayer, alms-giving, fasting and pilgrimage

Question Number : 223 Question Id : 1679435929 Question Type : MCQ Option Shuffling : Yes Display Question Number : Yes
Single Line Question Option : No Option Orientation : Vertical

Correct : 1 Wrong : 0.25

The sharia (from *shar* or 'the way') is:

Options :

- ☒ The body of normative guidance that grew out of the original framework, during and after the time of Prophet Muhammad
- ☐ A set of laws
- ☐ Laws inscribed permanently
- ☐ A system of faith

Question Number : 224 Question Id : 1679435930 Question Type : MCQ Option Shuffling : Yes Display Question Number : Yes
Single Line Question Option : No Option Orientation : Vertical
Correct : 1 Wrong : 0.25

The Arab occupation of _____ led to the crusades.

Options :

- ☐ Lebanon
- ☒ Jerusalem
- ☐ Syria
- ☐ Byzantium

Question Number : 225 Question Id : 1679435931 Question Type : MCQ Option Shuffling : Yes Display Question Number : Yes
Single Line Question Option : No Option Orientation : Vertical
Correct : 1 Wrong : 0.25

Constantinople fell to the Ottoman Turks on:

Options :

- ☐ 29 May, 1456
- ☒ 29 May, 1453
- ☐ 2 June, 1204
- ☐ 3 November, 1492

Question Number : 226 Question Id : 1679435932 Question Type : MCQ Option Shuffling : Yes Display Question Number : Yes
Single Line Question Option : No Option Orientation : Vertical
Correct : 1 Wrong : 0.25

Which author has written on Central Asian nomadic culture?

Options :

- ☐ Philip Ashton
- ☐ Carlo Nicolo
- ☐ Mario Prato
- ☒ Owen Lattimore

Question Number : 227 Question Id : 1679435933 Question Type : MCQ Option Shuffling : Yes Display Question Number : Yes
Single Line Question Option : No Option Orientation : Vertical
Correct : 1 Wrong : 0.25

The Mongols were:

Options :

- ☐ Agriculturists
- ☐ Horse rearing nomadic people at inception
- ☐ Pastoralists
- ☒ Horse rearing nomadic people at inception and Pastoralists

Question Number : 228 Question Id : 1679435934 Question Type : MCQ Option Shuffling : Yes Display Question Number : Yes
Single Line Question Option : No Option Orientation : Vertical

Correct : 1 Wrong : 0.25

Feudalism is:

Options :

- ☒ A land-based social, economic and political system
- ☐ Not hostile to mercantilism
- ☐ A system where the king appropriates all control
- ☐ A patrimonial system

Question Number : 229 Question Id : 1679435935 Question Type : MCQ Option Shuffling : Yes Display Question Number : Yes
Single Line Question Option : No Option Orientation : Vertical

Correct : 1 Wrong : 0.25

Feudal relations encompass:

Options :

- ☐ The republican spirit
- ☐ Economic relations
- ☐ Social, political, religious, legal and moral spheres
- ☒ Economic relations; and social, political, religious, legal and moral spheres

Question Number : 230 Question Id : 1679435936 Question Type : MCQ Option Shuffling : Yes Display Question Number : Yes
Single Line Question Option : No Option Orientation : Vertical

Correct : 1 Wrong : 0.25

What is NOT true with regard to feudalism?

Options :

- ✓ It adopted western philosophies of monarchism
- ✗ It made land the basis of all relations
- ✗ It made agriculture the chief activity
- ✗ It had more villages than towns

Question Number : 231 Question Id : 1679435937 Question Type : MCQ Option Shuffling : Yes Display Question Number : Yes
Single Line Question Option : No Option Orientation : Vertical

Correct : 1 Wrong : 0.25

The transition debate refers to:

Options :

- ✗ The transition from agrarian capitalism to commercial capitalism
- ✓ The transition from feudalism to capitalism
- ✗ The transition from trade to agriculture
- ✗ The transition from republicanism to a monarchical system

Question Number : 232 Question Id : 1679435938 Question Type : MCQ Option Shuffling : Yes Display Question Number : Yes
Single Line Question Option : No Option Orientation : Vertical

Correct : 1 Wrong : 0.25

Which of the following authors wrote on the transition from feudalism to capitalism?

Options :

- ✗ Fernand Braudel
- ✗ Gabriel Ferrand
- ✓ Paul M Sweezy
- ✗ Ronald La Haye

Question Number : 233 Question Id : 1679435939 Question Type : MCQ Option Shuffling : Yes Display Question Number : Yes
Single Line Question Option : No Option Orientation : Vertical

Correct : 1 Wrong : 0.25

Which of the following books was written by Maurice Dobb?

Options :

- ✗ *India in the World Economy*

- ✖ *The Rise of Capitalist Agriculture*
- ✖ *Commercial Capitalism in England*
- ✔ *Studies in The Development of Capitalism*

Question Number : 234 Question Id : 1679435940 Question Type : MCQ Option Shuffling : Yes Display Question Number : Yes
Single Line Question Option : No Option Orientation : Vertical

Correct : 1 Wrong : 0.25

Which of the following monarchs was intimately associated with the early feudal system?

Options :

- ✖ Barbarossa
- ✔ Charlemagne
- ✖ Charles V
- ✖ Henry Tudor

Question Number : 235 Question Id : 1679435941 Question Type : MCQ Option Shuffling : Yes Display Question Number : Yes
Single Line Question Option : No Option Orientation : Vertical

Correct : 1 Wrong : 0.25

The middle period of feudalism saw:

Options :

- ✔ A revolution in technology
- ✖ A transport revolution
- ✖ A monarchical revolution leading to the concentration of power
- ✖ The appearance of large-scale cities in Europe

Question Number : 236 Question Id : 1679435942 Question Type : MCQ Option Shuffling : Yes Display Question Number : Yes
Single Line Question Option : No Option Orientation : Vertical

Correct : 1 Wrong : 0.25

The tax imposed by the medieval church was called:

Options :

- ✖ Gabelle
- ✔ Tithe

✘ Religiosa

✘ Imperium

Question Number : 237 Question Id : 1679435943 Question Type : MCQ Option Shuffling : Yes Display Question Number : Yes
Single Line Question Option : No Option Orientation : Vertical

Correct : 1 Wrong : 0.25

The hunting and burning of witches at the stake reached its height during:

Options :

✘ The fifteenth century

✔ The seventeenth century

✘ The late medieval period

✘ The sixteenth century

Question Number : 238 Question Id : 1679435944 Question Type : MCQ Option Shuffling : Yes Display Question Number : Yes
Single Line Question Option : No Option Orientation : Vertical

Correct : 1 Wrong : 0.25

Ganshof wrote on:

Options :

✘ The feudal economic structure

✔ The legal aspects of feudalism

✘ Feudal religion and morality

✘ Feudal policy

Question Number : 239 Question Id : 1679435945 Question Type : MCQ Option Shuffling : Yes Display Question Number : Yes
Single Line Question Option : No Option Orientation : Vertical

Correct : 1 Wrong : 0.25

The birthplace of the renaissance is:

Options :

✘ France

✔ Italy

✘ Spain

✖ Germany

Question Number : 240 Question Id : 1679435946 Question Type : MCQ Option Shuffling : Yes Display Question Number : Yes
Single Line Question Option : No Option Orientation : Vertical
Correct : 1 Wrong : 0.25

The renaissance put _____ at the centre of the world.

Options :
✔ ideas of man

✖ nature

✖ cities

✖ discoveries

Group Number :	13
Group Id :	16794384
Group Maximum Duration :	0
Group Minimum Duration :	0
Revisit allowed for view? :	No
Revisit allowed for edit? :	No
Break time:	0
Group Marks:	20

	Subject Related
Section Id :	167943143
Section Number :	1
Section type :	Online
Mandatory or Optional:	Mandatory
Number of Questions:	20
Number of Questions to be attempted:	20
Section Marks:	20
Display Number Panel:	Yes
Group All Questions:	No

Sub-Section Number:	1
Sub-Section Id:	167943335
Question Shuffling Allowed :	Yes

Question Number : 241 Question Id : 1679435947 Question Type : MCQ Option Shuffling : Yes Display Question Number : Yes
Single Line Question Option : No Option Orientation : Vertical
Correct : 1 Wrong : 0.25

Which of the following is TRUE with regard to the renaissance?

Options :

- ☐ Portraiture emerged as an art style during the renaissance
- ☐ Majority of renaissance art had a religious theme
- ☐ It was not hostile to religion but religion was left as a personal matter
- ☒ All of the other options

Question Number : 242 Question Id : 1679435948 Question Type : MCQ Option Shuffling : Yes Display Question Number : Yes
Single Line Question Option : No Option Orientation : Vertical

Correct : 1 Wrong : 0.25

The artist Mantegna painted at the:

Options :

- ☐ Church in Padua
- ☒ The court of the Gonzagas in Mantua
- ☐ Vatican Church in Rome
- ☐ Sistine Chapel

Question Number : 243 Question Id : 1679435949 Question Type : MCQ Option Shuffling : Yes Display Question Number : Yes
Single Line Question Option : No Option Orientation : Vertical

Correct : 1 Wrong : 0.25

The 'discoveries' of the world beyond Europe were led in the fifteenth century by:

Options :

- ☒ Portugal and Spain
- ☐ Portugal
- ☐ Spain
- ☐ Catalan

Question Number : 244 Question Id : 1679435950 Question Type : MCQ Option Shuffling : Yes Display Question Number : Yes
Single Line Question Option : No Option Orientation : Vertical

Correct : 1 Wrong : 0.25

Portugal's map and atlas making tradition was inherited from:

Options :

✖ Spain

✔ The Catalans of Mallorca by way of the Arabs

✖ Mathematicians

✖ Scientists at Sagres

Question Number : 245 Question Id : 1679435951 Question Type : MCQ Option Shuffling : Yes Display Question Number : Yes
Single Line Question Option : No Option Orientation : Vertical

Correct : 1 Wrong : 0.25

Prince Henry of Portugal set up a laboratory for the discovery project at:

Options :

✖ Lagos

✔ Sagres

✖ Lisbon

✖ Tagus

Question Number : 246 Question Id : 1679435952 Question Type : MCQ Option Shuffling : Yes Display Question Number : Yes
Single Line Question Option : No Option Orientation : Vertical

Correct : 1 Wrong : 0.25

Christopher Columbus's voyage was financed by:

Options :

✖ The republic of Genoa

✔ Queen Isabella and King Ferdinand of Spain

✖ King Ferdinand of Aragon

✖ Calvi in Corsica

Question Number : 247 Question Id : 1679435953 Question Type : MCQ Option Shuffling : Yes Display Question Number : Yes
Single Line Question Option : No Option Orientation : Vertical

Correct : 1 Wrong : 0.25

The initial preacher of the Protestant Reformation was:

Options :

✖ Auguste Calvin

✘ John of Presbyter

✔ Martin Luther

✘ John Knox

Question Number : 248 Question Id : 1679435954 Question Type : MCQ Option Shuffling : Yes Display Question Number : Yes
Single Line Question Option : No Option Orientation : Vertical

Correct : 1 Wrong : 0.25

The Peasant's War in Germany lasted for the duration of:

Options :

✔ 1524-1525

✘ 1525-1530

✘ 1526-1530

✘ 1528-1530

Question Number : 249 Question Id : 1679435955 Question Type : MCQ Option Shuffling : Yes Display Question Number : Yes
Single Line Question Option : No Option Orientation : Vertical

Correct : 1 Wrong : 0.25

Which of the following is NOT true about the Protestant Reformation?

Options :

✘ It believed in direct and personal communion with God

✘ It dispensed with the pomp and pageantry of the Catholic Church

✘ It attacked the corruption of bishops and cardinals

✔ It believed in massive altar decorations

Question Number : 250 Question Id : 1679435956 Question Type : MCQ Option Shuffling : Yes Display Question Number : Yes
Single Line Question Option : No Option Orientation : Vertical

Correct : 1 Wrong : 0.25

Calvin was a _____ reformer.

Options :

✔ Swiss

✘ French

✖ Belgian

✖ English

Question Number : 251 Question Id : 1679435957 Question Type : MCQ Option Shuffling : Yes Display Question Number : Yes
Single Line Question Option : No Option Orientation : Vertical

Correct : 1 Wrong : 0.25

Which of the following is true about The Reformation?

Options :

✖ It heightened popular consciousness of the occult

✖ It popularised witch hunting

✔ It shook peoples' faith in one, unitary Christian Church

✖ It created many peasant leaders

Question Number : 252 Question Id : 1679435958 Question Type : MCQ Option Shuffling : Yes Display Question Number : Yes
Single Line Question Option : No Option Orientation : Vertical

Correct : 1 Wrong : 0.25

Capitalism was first visible:

Options :

✔ In England with the rise of capitalist agriculture

✖ In Spain with bureaucratic capitalism

✖ In France as the feudal system declined

✖ In the Portuguese imperial system

Question Number : 253 Question Id : 1679435959 Question Type : MCQ Option Shuffling : Yes Display Question Number : Yes
Single Line Question Option : No Option Orientation : Vertical

Correct : 1 Wrong : 0.25

Agrarian capitalism was synonymous with:

Options :

✖ A big transport revolution

✔ The enclosure movement in the countryside

- ✘ Improvements in riverine traffic
- ✘ The use of steam

Question Number : 254 Question Id : 1679435960 Question Type : MCQ Option Shuffling : Yes Display Question Number : Yes
Single Line Question Option : No Option Orientation : Vertical
Correct : 1 Wrong : 0.25

Which one of the following is NOT a phase of Capitalism?

Options :

- ✘ Merchant Capitalism
- ✔ Imperial Capitalism
- ✘ Industrial Capitalism
- ✘ Finance Capitalism

Question Number : 255 Question Id : 1679435961 Question Type : MCQ Option Shuffling : Yes Display Question Number : Yes
Single Line Question Option : No Option Orientation : Vertical
Correct : 1 Wrong : 0.25

Proto-industrialisation is also known as:

Options :

- ✘ Putting out system
- ✘ Verlag system
- ✘ Kauf system
- ✔ Industrialisation before industrialisation

Question Number : 256 Question Id : 1679435962 Question Type : MCQ Option Shuffling : Yes Display Question Number : Yes
Single Line Question Option : No Option Orientation : Vertical
Correct : 1 Wrong : 0.25

Which authors coined the term 'proto- industrialisation'?

Options :

- ✔ Hans Medick, Peter Kriedte, Jurgen Schlumbohm
- ✘ Peter Metcalfe and Hans Humperdink
- ✘ Amos Vanderbilt and Michael Wood

✘ Peter Burke and C H Phillips

Question Number : 257 Question Id : 1679435963 Question Type : MCQ Option Shuffling : Yes Display Question Number : Yes
Single Line Question Option : No Option Orientation : Vertical

Correct : 1 Wrong : 0.25

Merchant capitalism was based on:

Options :

✔ Trade, plunder and slavery

✘ Trade and commerce as duty

✘ Overseas trade

✘ Sea-borne commerce

Question Number : 258 Question Id : 1679435964 Question Type : MCQ Option Shuffling : Yes Display Question Number : Yes
Single Line Question Option : No Option Orientation : Vertical

Correct : 1 Wrong : 0.25

Industrial capitalism was based on:

Options :

✘ High and protective tariffs

✘ Centralised production, as in the factory system

✘ Tax-free lands

✔ High and protective tariffs; and centralised production, as in the factory system

Question Number : 259 Question Id : 1679435965 Question Type : MCQ Option Shuffling : Yes Display Question Number : Yes
Single Line Question Option : No Option Orientation : Vertical

Correct : 1 Wrong : 0.25

How is capital different from money?

Options :

✘ Money is for spending while capital creates more money

✘ Money is for hoarding, while capital is for spending

✘ Money is for everyday use, while capital is only for investment

✔ Money is for spending while capital creates more money; and Money is for everyday use, while capital is only for investment

Question Number : 260 Question Id : 1679435966 Question Type : MCQ Option Shuffling : Yes Display Question Number : Yes
Single Line Question Option : No Option Orientation : Vertical

Correct : 1 Wrong : 0.25

Mercantilism was:

Options :

- ☒ An initial phase in merchant capitalism
- ☐ A part of national economic strategies
- ☐ Based on plunder and protectionism
- ☐ All of the other options

Subject Related

Group Number :	14
Group Id :	16794385
Group Maximum Duration :	0
Group Minimum Duration :	0
Revisit allowed for view? :	No
Revisit allowed for edit? :	No
Break time:	0
Group Marks:	20

Subject Related

Section Id :	167943144
Section Number :	1
Section type :	Online
Mandatory or Optional:	Mandatory
Number of Questions:	20
Number of Questions to be attempted:	20
Section Marks:	20
Display Number Panel:	Yes
Group All Questions:	No

Sub-Section Number:	1
Sub-Section Id:	167943336
Question Shuffling Allowed :	Yes

Question Number : 261 Question Id : 1679435967 Question Type : MCQ Option Shuffling : Yes Display Question Number : Yes
Single Line Question Option : No Option Orientation : Vertical

Correct : 1 Wrong : 0.25

China faced _____ opium war(s).

Options :

- ✖ Three
- ✔ Two
- ✖ One
- ✖ None of the other options

Question Number : 262 Question Id : 1679435968 Question Type : MCQ Option Shuffling : Yes Display Question Number : Yes
Single Line Question Option : No Option Orientation : Vertical

Correct : 1 Wrong : 0.25

Which of the following is true about the Anglo-Chinese opium wars?

Options :

- ✖ They opened up China
- ✖ They broke the myth of China's invulnerability
- ✖ They opened up China, saw inflation and protection to missionaries
- ✔ They broke the myth of China's invulnerability; and They opened up China, saw inflation and protection to missionaries

Question Number : 263 Question Id : 1679435969 Question Type : MCQ Option Shuffling : Yes Display Question Number : Yes
Single Line Question Option : No Option Orientation : Vertical

Correct : 1 Wrong : 0.25

The opium wars were followed by:

Options :

- ✖ The Boxer Movement
- ✔ The Taiping Rebellion
- ✖ Muslim revolts in Xinjiang
- ✖ The Hundred Flowers Reform Movement

Question Number : 264 Question Id : 1679435970 Question Type : MCQ Option Shuffling : Yes Display Question Number : Yes
Single Line Question Option : No Option Orientation : Vertical

Correct : 1 Wrong : 0.25

The leaders of the Taiping Rebellion were:

Options :

- ✖ Li Tong and the Society of Righteous Fists

- ✓ Hung Hsiu Ch'uan and his Society of God Worshippers
- ✗ Li Huang Cho and the Society of the Harmonious Hand
- ✗ None of the other options

Question Number : 265 Question Id : 1679435971 Question Type : MCQ Option Shuffling : Yes Display Question Number : Yes
Single Line Question Option : No Option Orientation : Vertical

Correct : 1 Wrong : 0.25

The Taiping movement rose in:

Options :

- ✗ Gansu province
- ✗ Szechwan province
- ✗ The heart of China
- ✓ Kwangtan province, a remote Southwest corner of China

Question Number : 266 Question Id : 1679435972 Question Type : MCQ Option Shuffling : Yes Display Question Number : Yes
Single Line Question Option : No Option Orientation : Vertical

Correct : 1 Wrong : 0.25

The Taipings were:

Options :

- ✗ Intent on retaking Nanking as the Treaty of Nanking 1842 was a symbol of Chinese humiliation
- ✗ Influenced by Confucian and Christian doctrines
- ✗ Linked with secret societies such as The Triad
- ✓ All of the other options

Question Number : 267 Question Id : 1679435973 Question Type : MCQ Option Shuffling : Yes Display Question Number : Yes
Single Line Question Option : No Option Orientation : Vertical

Correct : 1 Wrong : 0.25

The Qings crushed the Taiping rebellion on:

Options :

- ✓ 19th July, 1864

- ✖ 18th February, 1865
- ✖ 27th July, 1863
- ✖ 20th July, 1864

Question Number : 268 Question Id : 1679435974 Question Type : MCQ Option Shuffling : Yes Display Question Number : Yes
Single Line Question Option : No Option Orientation : Vertical

Correct : 1 Wrong : 0.25

Which is NOT true with regard to the Taiping Rebellion?

Options :

- ✖ It saw the early tremors of Communist 'earthquake' that would engulf China in the 1940s
- ✔ It captured all the coastal forts in China
- ✖ Hardly any land tax was paid to the Qings after the rebellion
- ✖ It was an anti-imperialist movement

Question Number : 269 Question Id : 1679435975 Question Type : MCQ Option Shuffling : Yes Display Question Number : Yes
Single Line Question Option : No Option Orientation : Vertical

Correct : 1 Wrong : 0.25

The Sino-Japan war was:

Options :

- ✖ The result of an illegal railway line laid by Japan in Hunan
- ✖ A clash between China and Japan for the control of Korea and Manchuria
- ✖ The outcome of conflicts in Manchuria
- ✔ A clash between China and Japan for the control of Korea

Question Number : 270 Question Id : 1679435976 Question Type : MCQ Option Shuffling : Yes Display Question Number : Yes
Single Line Question Option : No Option Orientation : Vertical

Correct : 1 Wrong : 0.25

Between which duration did the Boxer Uprising take place?

Options :

- ✖ 1898-1900

✘ 1898-1899

✔ 1899-1901

✘ 1900-1901

Question Number : 271 Question Id : 1679435977 Question Type : MCQ Option Shuffling : Yes Display Question Number : Yes
Single Line Question Option : No Option Orientation : Vertical

Correct : 1 Wrong : 0.25

The reason(s) behind the Boxer Uprising is/are:

Options :

✘ Imperial designs of Britain and Russia

✘ Severe drought and the disruption caused by the growth of foreign spheres of influence

✔ Imperial designs of Britain and Russia; and Severe drought and the disruption caused by the growth of foreign spheres of influence

✘ None of the other options

Question Number : 272 Question Id : 1679435978 Question Type : MCQ Option Shuffling : Yes Display Question Number : Yes
Single Line Question Option : No Option Orientation : Vertical

Correct : 1 Wrong : 0.25

The Eight-Nation Alliance — an international military coalition set up in response to Boxer Rebellion in summer of 1900 — was composed of:

Options :

✘ Japan, Russia, Britain, France, United States, Germany, Italy and Austria.

✔ Japan, Russia, Britain, France, United States, Germany, Italy and the Austro-Hungarian Empire.

✘ Japan, Russia, Britain, France, United States, Germany, Italy and the Portuguese Empire.

✘ Japan, Russia, Britain, France, United States, Germany, Italy and Spain.

Question Number : 273 Question Id : 1679435979 Question Type : MCQ Option Shuffling : Yes Display Question Number : Yes
Single Line Question Option : No Option Orientation : Vertical

Correct : 1 Wrong : 0.25

The immediate background to the establishment of Nationalist China was:

Options :

✘ Military reforms between 1901-11

- ✓ The October 1911 Wuhan uprising by the New Army whose officers did not support the Qings
- ✗ Revolutionary Alliance of 1905 by Sun Yat-Sen
- ✗ Anti-Qing feeling in cities

Question Number : 274 Question Id : 1679435980 Question Type : MCQ Option Shuffling : Yes Display Question Number : Yes
Single Line Question Option : No Option Orientation : Vertical

Correct : 1 Wrong : 0.25

Which is NOT true as regard the May Fourth Movement of 1917-23?

Options :

- ✗ It was a reaction to Treaty of Versailles and the Allies' favourable treatment of Japan
- ✓ It was a peasant movement seen chiefly in the countryside
- ✗ It saw a move from anti-Qing feelings to anti-imperialism
- ✗ It was a precursor of communism with its anti-warlord activities

Question Number : 275 Question Id : 1679435981 Question Type : MCQ Option Shuffling : Yes Display Question Number : Yes
Single Line Question Option : No Option Orientation : Vertical

Correct : 1 Wrong : 0.25

Which of the following is NOT true with regard to Japan?

Options :

- ✗ It transformed from a feudal agricultural society to an industrialised society within a little over 100 years.
- ✗ It is poor in natural resources, yet it could rise from defeat in World War II through rapid economic development.
- ✓ It adopted western philosophies of liberalism.
- ✗ It adopted western science, technology, constitutional monarchy and military on western lines.

Question Number : 276 Question Id : 1679435982 Question Type : MCQ Option Shuffling : Yes Display Question Number : Yes
Single Line Question Option : No Option Orientation : Vertical

Correct : 1 Wrong : 0.25

Japan consists of 4 large islands: Honshu, Hokkaido, Shikoku and Kyushu. Which among them is the seat of Japanese culture and contains its main cities?

Options :

- ✗ Hokkaido
- ✗ Kyushu

✓ Honshu

✗ Shikoku

Question Number : 277 Question Id : 1679435983 Question Type : MCQ Option Shuffling : Yes Display Question Number : Yes
Single Line Question Option : No Option Orientation : Vertical

Correct : 1 Wrong : 0.25

Which of the following is NOT true regarding Japan's economy?

Options :

✗ Rice is its chief crop

✗ It is the world's top fishing nation

✓ Japan is subject to earthquakes but has very little rainfall

✗ It has the greatest number of ports for container and marine shipping concentrated in a small space

Question Number : 278 Question Id : 1679435984 Question Type : MCQ Option Shuffling : Yes Display Question Number : Yes
Single Line Question Option : No Option Orientation : Vertical

Correct : 1 Wrong : 0.25

Commodore Perry first landed at Yedo Bay on:

Options :

✗ 4 February, 1854

✗ 21 August, 1853

✓ 8 July, 1853

✗ 3 July, 1853

Question Number : 279 Question Id : 1679435985 Question Type : MCQ Option Shuffling : Yes Display Question Number : Yes
Single Line Question Option : No Option Orientation : Vertical

Correct : 1 Wrong : 0.25

The Treaty of Kanagawa, signalling the 'opening up' of Japan, was signed on:

Options :

✗ 28 March, 1854

✗ 2 April, 1854

✗ 30 March, 1854

✔ 31 March, 1854

Question Number : 280 Question Id : 1679435986 Question Type : MCQ Option Shuffling : Yes Display Question Number : Yes
Single Line Question Option : No Option Orientation : Vertical
Correct : 1 Wrong : 0.25

Japanese emperor who assumed the title of Meiji, or Enlightened Ruler, was:

Options :

✖ Masahiro

✔ Mutsuhito

✖ Hirohito

✖ Shigeru Okinawa

Group Number :	15
Group Id :	16794386
Group Maximum Duration :	0
Group Minimum Duration :	180
Revisit allowed for view? :	No
Revisit allowed for edit? :	No
Break time:	0
Group Marks:	20

	Subject Related
Section Id :	167943145
Section Number :	1
Section type :	Online
Mandatory or Optional:	Mandatory
Number of Questions:	20
Number of Questions to be attempted:	20
Section Marks:	20
Display Number Panel:	Yes
Group All Questions:	No

Sub-Section Number:	1
Sub-Section Id:	167943337
Question Shuffling Allowed :	Yes

Question Number : 281 Question Id : 1679435987 Question Type : MCQ Option Shuffling : Yes Display Question Number : Yes
Single Line Question Option : No Option Orientation : Vertical
Correct : 1 Wrong : 0.25

Language development starts with:

Options :

- ☐ Cooing
- ☒ Sound discrimination
- ☐ Imitation
- ☐ Reading

Question Number : 282 Question Id : 1679435988 Question Type : MCQ Option Shuffling : Yes Display Question Number : Yes
Single Line Question Option : No Option Orientation : Vertical

Correct : 1 Wrong : 0.25

Introduction of pre-matric scholarship is an initiative for “Education for Women’s equality” proposed by:

Options :

- ☐ UNESCO
- ☒ NPE
- ☐ ICDS
- ☐ UGC

Question Number : 283 Question Id : 1679435989 Question Type : MCQ Option Shuffling : Yes Display Question Number : Yes
Single Line Question Option : No Option Orientation : Vertical

Correct : 1 Wrong : 0.25

Government and the education board form an important element in this layer of the child’s ecosystem according to Bronfenbrenner.

Options :

- ☐ Chronosystem
- ☐ Mesosystem
- ☐ Endosystem
- ☒ Exosystem

Question Number : 284 Question Id : 1679435990 Question Type : MCQ Option Shuffling : Yes Display Question Number : Yes
Single Line Question Option : No Option Orientation : Vertical

Correct : 1 Wrong : 0.25

What does the transferability feature of learning improve?

Options :

- ✗ Increases horizontal span of learning
- ✗ Enhances vertical structure of learning
- ✓ Gives scope for spiral structure of learning
- ✗ Makes learning difficult

Question Number : 285 Question Id : 1679435991 Question Type : MCQ Option Shuffling : Yes Display Question Number : Yes
Single Line Question Option : No Option Orientation : Vertical

Correct : 1 Wrong : 0.25

Conveying messages through circulars is which form of communication?

Options :

- ✓ Mass communication
- ✗ Non-verbal communication
- ✗ Oral communication
- ✗ Personal communication

Question Number : 286 Question Id : 1679435992 Question Type : MCQ Option Shuffling : Yes Display Question Number : Yes
Single Line Question Option : No Option Orientation : Vertical

Correct : 1 Wrong : 0.25

One of the basic scientific skills is:

Options :

- ✓ Observation
- ✗ Listening
- ✗ Narrating
- ✗ Teaching

Question Number : 287 Question Id : 1679435993 Question Type : MCQ Option Shuffling : Yes Display Question Number : Yes
Single Line Question Option : No Option Orientation : Vertical

Correct : 1 Wrong : 0.25

Illustrating boys as active and girls as passive was done in:

Options :

- ✓ Textbooks in the 80's and 90's

- ✖ Policy documents in the 70's
- ✖ Government initiatives in the 80's
- ✖ In the rural settings

Question Number : 288 Question Id : 1679435994 Question Type : MCQ Option Shuffling : Yes Display Question Number : Yes
Single Line Question Option : No Option Orientation : Vertical

Correct : 1 Wrong : 0.25

Sheela wants to conduct extra classes for students who scored below 50% in Science. In order to find out who are such students, she would list their information and use the Excel command:

Options :

- ✖ Average
- ✖ Sum
- ✔ Sort
- ✖ Format

Question Number : 289 Question Id : 1679435995 Question Type : MCQ Option Shuffling : Yes Display Question Number : Yes
Single Line Question Option : No Option Orientation : Vertical

Correct : 1 Wrong : 0.25

A Science teacher of grade 7 wants to state instructional objectives at the Analysis level of Bloom's Taxonomy. What is the correct action word that he/she needs to use?

Options :

- ✖ Describe
- ✖ Relate
- ✔ Justify
- ✖ Identify

Question Number : 290 Question Id : 1679435996 Question Type : MCQ Option Shuffling : Yes Display Question Number : Yes
Single Line Question Option : No Option Orientation : Vertical

Correct : 1 Wrong : 0.25

Staying updated with current affairs is best possible through:

Options :

- ✖ Telephonic conversations
- ✖ TV, internet and newspapers

☐ Gossiping

☒ TV and newspapers

Question Number : 291 Question Id : 1679435997 Question Type : MCQ Option Shuffling : Yes Display Question Number : Yes
Single Line Question Option : No Option Orientation : Vertical

Correct : 1 Wrong : 0.25

Complete the sentence choosing the correct option.

Simulations as a teaching method allows:

Options :

☐ Playing a role

☐ Imagination

☒ Experiencing a given situation

☐ Reading a story

Question Number : 292 Question Id : 1679435998 Question Type : MCQ Option Shuffling : Yes Display Question Number : Yes
Single Line Question Option : No Option Orientation : Vertical

Correct : 1 Wrong : 0.25

Radha wants children to develop appropriate tone and modulations. Which method should she employ?

Options :

☐ Singing

☐ Listening

☒ Part taking in drama

☐ Simulations

Question Number : 293 Question Id : 1679435999 Question Type : MCQ Option Shuffling : Yes Display Question Number : Yes
Single Line Question Option : No Option Orientation : Vertical

Correct : 1 Wrong : 0.25

Which one is an example of a URL leading to a Search engine?

Options :

☒ www.yahoo.com

☐ http.rediff.com

✘ Html.google.com

✘ [Index.html](#)

Question Number : 294 Question Id : 1679436000 Question Type : MCQ Option Shuffling : Yes Display Question Number : Yes
Single Line Question Option : No Option Orientation : Vertical

Correct : 1 Wrong : 0.25

What is the right sequence if Rohan wants to add sound effects to his power point presentation?

Options :

✔ Open the slide – animation – transition sound – applause

✘ Open the slide – animation – custom animation – sound effects

✘ Place the cursor on the content – review – track changes

✘ Select picture – insert – clipart

Question Number : 295 Question Id : 1679436001 Question Type : MCQ Option Shuffling : Yes Display Question Number : Yes
Single Line Question Option : No Option Orientation : Vertical

Correct : 1 Wrong : 0.25

Emphasis of curriculum is on the:

Options :

✘ Content to be taught

✘ Process followed

✔ Process and skills to be developed

✘ Material provided

Question Number : 296 Question Id : 1679436002 Question Type : MCQ Option Shuffling : Yes Display Question Number : Yes
Single Line Question Option : No Option Orientation : Vertical

Correct : 1 Wrong : 0.25

What would Harish ensure by using rubrics to assess reading skills?

Options :

✘ Validity

✔ Reliability

✘ Scaffolding

✖ Uniformity

Question Number : 297 Question Id : 1679436003 Question Type : MCQ Option Shuffling : Yes Display Question Number : Yes
Single Line Question Option : No Option Orientation : Vertical

Correct : 1 Wrong : 0.25

Online exams are preferred because:

Options :

✖ They save time

✖ Administration is easy

✔ Malpractices are diminished

✖ Objective tests

Question Number : 298 Question Id : 1679436004 Question Type : MCQ Option Shuffling : Yes Display Question Number : Yes
Single Line Question Option : No Option Orientation : Vertical

Correct : 1 Wrong : 0.25

What does maintaining a reflective diary help teachers in?

Options :

✔ Professional development

✖ Planning lessons

✖ Talking to parents

✖ Reporting to management

Question Number : 299 Question Id : 1679436005 Question Type : MCQ Option Shuffling : Yes Display Question Number : Yes
Single Line Question Option : No Option Orientation : Vertical

Correct : 1 Wrong : 0.25

Which of the following distinguishes inclusion from integration?

Options :

✖ Fitting the child into the system

✔ Modifying the curriculum and setup to suit the child's needs

✖ Providing material

✘ Giving additional information

Question Number : 300 Question Id : 1679436006 Question Type : MCQ Option Shuffling : Yes Display Question Number : Yes
Single Line Question Option : No Option Orientation : Vertical

Correct : 1 Wrong : 0.25

Special educators help the school in implementing inclusion by:

Options :

✔ Creating awareness about the different types of special needs

✘ Bringing new admissions

✘ Providing material for play

✘ Providing reading activities

