

Question Paper Preview

Notations :

- 1.Options shown in green color and with ✓ icon are correct.
- 2.Options shown in red color and with ✗ icon are incorrect.

Question Paper Name:	PGT ECONOMICS MALE 3rd July 2018
Subject Name:	PGT ECONOMICS MALE
Creation Date:	2018-07-03 13:33:03
Duration:	180
Total Marks:	300
Display Marks:	Yes
Share Answer Key With Delivery Engine:	Yes
Actual Answer Key:	Yes
Calculator:	None
Magnifying Glass Required?:	No
Ruler Required?:	No
Eraser Required?:	No
Scratch Pad Required?:	No
Rough Sketch/Notepad Required?:	No
Protractor Required?:	No

	Mental Ability
Group Number :	1
Group Id :	72305361
Group Maximum Duration :	0
Group Minimum Duration :	0
Revisit allowed for view? :	No
Revisit allowed for edit? :	No
Break time:	0
Group Marks:	20

	Mental Ability
Section Id :	72305361
Section Number :	1
Section type :	Online
Mandatory or Optional:	Mandatory
Number of Questions:	20
Number of Questions to be attempted:	20
Section Marks:	20
Display Number Panel:	Yes
Group All Questions:	No

# Test Prime

**ALL EXAMS,  
ONE SUBSCRIPTION**



**70,000+**  
Mock Tests



**Personalised  
Report Card**



**Unlimited  
Re-Attempt**



**600+**  
Exam Covered



**Previous Year  
Papers**



**500%  
Refund**



**ATTEMPT FREE MOCK NOW**

Sub-Section Id: 72305387  
Question Shuffling Allowed : Yes

Question Number : 1 Question Id : 7230531233 Question Type : MCQ Option Shuffling : Yes Display Question Number : Yes  
Single Line Question Option : No Option Orientation : Vertical  
Correct : 1 Wrong : 0.25

Choose the missing character from the given alternatives.

AD <sub>2.5</sub>	BE <sub>3.5</sub>	CF <sub>4.5</sub>
DG <sub>5.5</sub>	EH <sub>6.5</sub>	FI <sub>7.5</sub>
GJ <sub>8.5</sub>	?	IL <sub>10.5</sub>

Options :

✓ HK<sub>9.5</sub>

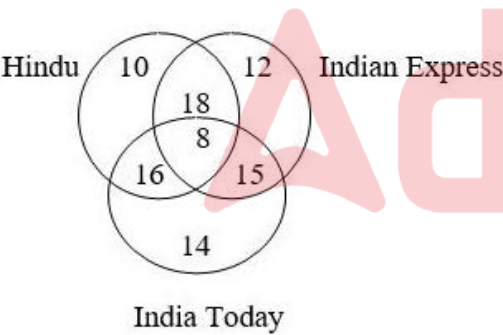
✗ HI<sub>9.5</sub>

✗ KH<sub>9.5</sub>

✗ KL<sub>9.5</sub>

Question Number : 2 Question Id : 7230531234 Question Type : MCQ Option Shuffling : Yes Display Question Number : Yes  
Single Line Question Option : No Option Orientation : Vertical  
Correct : 1 Wrong : 0.25

Consider the following venn diagram.



The numbers in the Venn diagram indicate the number of persons reading various newspapers. The diagram is drawn after surveying 100 persons. In a population of 5,000, how many can be expected to read at least two newspapers?

Options :

✗ 2,750

✓ 2,850

✗ 2,875

✗ 2,900

Question Number : 3 Question Id : 7230531235 Question Type : MCQ Option Shuffling : Yes Display Question Number : Yes  
Single Line Question Option : No Option Orientation : Vertical

Correct : 1 Wrong : 0.25

You are given two statements and two conclusions. Read them carefully and decide which of the conclusions logically follow(s) from the statements.

Statements:

All bulbs are flowers.

Some flowers are leaves.

Conclusions:

I. All bulbs are leaves.

II. All leaves are flowers.

Options :

☐ Only conclusion I follows

☐ Only conclusion II follows

☐ Either conclusion I or II follows

☒ Neither conclusion I nor II follows

Question Number : 4 Question Id : 7230531236 Question Type : MCQ Option Shuffling : Yes Display Question Number : Yes  
Single Line Question Option : No Option Orientation : Vertical

Correct : 1 Wrong : 0.25

In a certain code, PAPER is written as QCSIW. How is HOSTEL written in the same code?

Options :

☐ IQUXJQ

☐ IQVXIR

☒ IQVXJR

☐ IQUXIR

Question Number : 5 Question Id : 7230531237 Question Type : MCQ Option Shuffling : Yes Display Question Number : Yes  
Single Line Question Option : No Option Orientation : Vertical

Correct : 1 Wrong : 0.25

Which letter will be 10<sup>th</sup> to the right of the 18<sup>th</sup> letter from the right end of the English alphabet series?

Options :

☐ P

☐ R

✓ S

✗ T

Question Number : 6 Question Id : 7230531238 Question Type : MCQ Option Shuffling : Yes Display Question Number : Yes  
Single Line Question Option : No Option Orientation : Vertical

Correct : 1 Wrong : 0.25

Kumar walks 6 km to the east and then turns to the south to walk 2 km. He again turns to the east and walks 2 km. Next, he turns northwards and walks 8 km. How far is he now from his starting point?

Options :

✗ 8 km

✓ 10 km

✗ 10.5 km

✗ 12 km

Question Number : 7 Question Id : 7230531239 Question Type : MCQ Option Shuffling : Yes Display Question Number : Yes  
Single Line Question Option : No Option Orientation : Vertical

Correct : 1 Wrong : 0.25

'C \$ D' means 'C is the mother of D';

'C # D' means 'C is the father of D';

'C @ D' means 'C is the daughter of D';

Now, if P \$ Q # R @ S, then which of the following is NOT true?

Options :

✗ S is the wife of Q

✓ Q is the wife of S

✗ R is Q's daughter

✗ P is mother-in-law of S

Question Number : 8 Question Id : 7230531240 Question Type : MCQ Option Shuffling : Yes Display Question Number : Yes  
Single Line Question Option : No Option Orientation : Vertical

Correct : 1 Wrong : 0.25

In the following figure, if the centres of all the circles are joined by horizontal and vertical lines, then find the number of squares that can be formed is:





Options :

✗ 3

✗ 4

✓ 5

✗ 8

Question Number : 9 Question Id : 7230531241 Question Type : MCQ Option Shuffling : Yes Display Question Number : Yes  
Single Line Question Option : No Option Orientation : Vertical

Correct : 1 Wrong : 0.25

Find the missing term in the below number series.

22, 23, 27, 36, 52, 77, 113, \_\_\_\_\_, 226

Options :

✗ 161

✓ 162

✗ 167

✗ 176

Question Number : 10 Question Id : 7230531242 Question Type : MCQ Option Shuffling : Yes Display Question Number : Yes  
Single Line Question Option : No Option Orientation : Vertical

Correct : 1 Wrong : 0.25

Five friends — Geetha, Seetha, Preetha, Vanitha and Rani — are sitting in a circle. Seetha is sitting between Geetha and Vanitha, whereas Vanitha is sitting to Rani's right. Then, who is seated to Preetha's left?

Options :

✓ Geetha

✗ Seetha

✗ Rani

✗ Vanitha

Question Number : 11 Question Id : 7230531243 Question Type : MCQ Option Shuffling : Yes Display Question Number : Yes  
Single Line Question Option : No Option Orientation : Vertical

Correct : 1 Wrong : 0.25

Select the option that is related to the third term in the same way the second term is related to the first term.

Assign : Allot : : Blend : \_\_\_\_\_

Options :

- ✗ Juice
- ✗ Separate
- ✗ Bend
- ✓ Mix

Question Number : 12 Question Id : 7230531244 Question Type : MCQ Option Shuffling : Yes Display Question Number : Yes  
Single Line Question Option : No Option Orientation : Vertical

Correct : 1 Wrong : 0.25

If BIRLA is coded as 92513 and UMPIRE is coded as 487256, then what is the code for UMBRELLA?

Options :

- ✗ 48659113
- ✓ 48956113
- ✗ 48695113
- ✗ 48959113

Question Number : 13 Question Id : 7230531245 Question Type : MCQ Option Shuffling : Yes Display Question Number : Yes  
Single Line Question Option : No Option Orientation : Vertical

Correct : 1 Wrong : 0.25

Choose the missing character from the given alternatives.

3	3	216
4	3	?
5	3	512

Options :

- ✗ 256
- ✓ 343
- ✗ 356
- ✗ 396

Question Number : 14 Question Id : 7230531246 Question Type : MCQ Option Shuffling : Yes Display Question Number : Yes  
Single Line Question Option : No Option Orientation : Vertical

Correct : 1 Wrong : 0.25

Select the pair from the options that has the same relationship between the numbers as there exists between the numbers of the pair given below.

4 : 36 :: \_\_\_\_\_ : \_\_\_\_\_

Options :

✗ 2 : 8

✗ 3 : 81

✓ 5 : 49

✗ 6 : 50

Question Number : 15 Question Id : 7230531247 Question Type : MCQ Option Shuffling : Yes Display Question Number : Yes  
Single Line Question Option : No Option Orientation : Vertical

Correct : 1 Wrong : 0.25

Read the following information carefully and answer the question given below.

$\alpha$  denotes 'greater than';

$\beta$  denotes 'less than';

$\gamma$  denotes 'not greater than';

$\delta$  denotes 'equal to';

$\mu$  denotes 'not less than';

If  $Y \delta 2Z$  and  $3Z \gamma X$ , then which of the following is true?

Options :

✓  $Y \beta X$

✗  $Y \delta X$

✗  $3Y \alpha 2X$

✗  $Y \mu 2X$

Question Number : 16 Question Id : 7230531248 Question Type : MCQ Option Shuffling : Yes Display Question Number : Yes  
Single Line Question Option : No Option Orientation : Vertical

Correct : 1 Wrong : 0.25

Read the situation below and choose the most logical step you would take.

Your neighbour's hand is burnt while cooking food. You should:



Options :

- ☐ apply an ointment on the burn.
- ☐ tell your neighbour that she should have been more careful.
- ☒ dip her hand in water till burning sensation subsides.
- ☐ ignore the situation.

Question Number : 17 Question Id : 7230531249 Question Type : MCQ Option Shuffling : Yes Display Question Number : Yes  
Single Line Question Option : No Option Orientation : Vertical

Correct : 1 Wrong : 0.25

Find the missing term in the below series.

ZabY, XcdW, VefU, \_\_\_\_\_, RjiQ

Options :

- ☐ SghT
- ☐ ThgS
- ☐ ShgT
- ☒ TghS

Question Number : 18 Question Id : 7230531250 Question Type : MCQ Option Shuffling : Yes Display Question Number : Yes  
Single Line Question Option : No Option Orientation : Vertical

Correct : 1 Wrong : 0.25

Out of the four given alternatives, choose the most appropriate description about the three words given below.

BIBLE : GITA : QURAN

Options :

- ☐ All of them are written in Urdu language.
- ☒ They are the holy books.
- ☐ They teach that Hindu, Muslims and Christians are different.
- ☐ They are sacred books of a few Indians.

Question Number : 19 Question Id : 7230531251 Question Type : MCQ Option Shuffling : Yes Display Question Number : Yes  
Single Line Question Option : No Option Orientation : Vertical

Correct : 1 Wrong : 0.25

You are given a statement and two conclusions. Read them carefully and select the option(s) that logically follow(s) from the statement.

Statement:  
'Our 'X' brand mobile phones are best in picture clarity and multiplicity of functions.' – An advertisement on TV.

- Conclusions:
- I. TV has a wide range of viewers.
  - II. People look for picture clarity and multiplicity of functions in a mobile phone.

- Options :
- ☐ Only conclusion I follows
  - ☐ Only conclusion II follows
  - ☐ Either conclusion I or II follows
  - ☒ Both conclusions I and II follows

Question Number : 20 Question Id : 7230531252 Question Type : MCQ Option Shuffling : Yes Display Question Number : Yes  
Single Line Question Option : No Option Orientation : Vertical

Correct : 1 Wrong : 0.25

Raja and Sanjay started walking from certain points towards each other. Raja walked 20 km and Sanjay walked 30 km. Then Raja turned to his left and Sanjay turned to his right, and they walked 25 km each. If Raja is facing North, which direction is Sanjay facing now?

- Options :
- ☐ East
  - ☐ West
  - ☒ North
  - ☐ South

General Awareness	
Group Number :	2
Group Id :	72305362
Group Maximum Duration :	0
Group Minimum Duration :	0
Revisit allowed for view? :	No
Revisit allowed for edit? :	No
Break time:	0
Group Marks:	20

Section Id :	72305362
Section Number :	1
Section type :	Online
Mandatory or Optional:	Mandatory
Number of Questions:	20
Number of Questions to be attempted:	20
Section Marks:	20
Display Number Panel:	Yes
Group All Questions:	No

Sub-Section Number:	1
Sub-Section Id:	72305388
Question Shuffling Allowed :	Yes

Question Number : 21 Question Id : 7230531253 Question Type : MCQ Option Shuffling : Yes Display Question Number : Yes  
Single Line Question Option : No Option Orientation : Vertical  
Correct : 1 Wrong : 0.25

Who was the author of the famous book “Poverty and Un-British Rule in India”?

Options :

- ✔ Dadabhai Naoroji
- ✘ Subhash Chandra Bose
- ✘ Mohammad Ali Jinnah
- ✘ Madan Mohan Malaviya

Question Number : 22 Question Id : 7230531254 Question Type : MCQ Option Shuffling : Yes Display Question Number : Yes  
Single Line Question Option : No Option Orientation : Vertical  
Correct : 1 Wrong : 0.25

The Non-Cooperation Movement was discontinued by Mahatma Gandhi in 1922 because a crowd of protestors set fire to a police station at:

Options :

- ✔ Chauri Chaura
- ✘ Wardha
- ✘ Vaishali
- ✘ Sabarmati

Question Number : 23 Question Id : 7230531255 Question Type : MCQ Option Shuffling : Yes Display Question Number : Yes  
Single Line Question Option : No Option Orientation : Vertical  
Correct : 1 Wrong : 0.25

Which one of the following features distinguishes Buddhism from Jainism?

Options :

- ☐ Rejection of the authority of the Vedas
- ☐ Non-injury to living beings
- ☒ Extreme form of conduct and self-mortification
- ☐ Belief in good action

Question Number : 24 Question Id : 7230531256 Question Type : MCQ Option Shuffling : Yes Display Question Number : Yes  
Single Line Question Option : No Option Orientation : Vertical

Correct : 1 Wrong : 0.25

In which state is the Kanha National Park situated?

Options :

- ☐ Uttar Pradesh
- ☒ Madhya Pradesh
- ☐ Chhattisgarh
- ☐ West Bengal

Question Number : 25 Question Id : 7230531257 Question Type : MCQ Option Shuffling : Yes Display Question Number : Yes  
Single Line Question Option : No Option Orientation : Vertical

Correct : 1 Wrong : 0.25

In which state is the Anantagiri Hills located?

Options :

- ☐ Andhra Pradesh
- ☐ Karnataka
- ☐ Kerala
- ☒ Telangana

Question Number : 26 Question Id : 7230531258 Question Type : MCQ Option Shuffling : Yes Display Question Number : Yes  
Single Line Question Option : No Option Orientation : Vertical

Correct : 1 Wrong : 0.25

The Comptroller and Auditor-General of India is appointed by:

Options :

- ☐ the Prime Minister of India



- ✓ the President of India
- ✗ the Chief Justice of India
- ✗ the Vice-President of India

Question Number : 27 Question Id : 7230531259 Question Type : MCQ Option Shuffling : Yes Display Question Number : Yes  
Single Line Question Option : No Option Orientation : Vertical  
Correct : 1 Wrong : 0.25

Which of the following is correct?

Options :

- ✗ The Governor dissolves the Legislative Council of a State.
- ✗ The Legislative Council of a State is dissolved after five years.
- ✓ The Legislative Council of a State is not subject to dissolution.
- ✗ The Legislative Council of a State is dissolved after six years.

Question Number : 28 Question Id : 7230531260 Question Type : MCQ Option Shuffling : Yes Display Question Number : Yes  
Single Line Question Option : No Option Orientation : Vertical  
Correct : 1 Wrong : 0.25

The Governor of a State holds office during the pleasure of:

Options :

- ✗ The Home Minister of India
- ✓ The President of India
- ✗ The Chief Minister of the concerned State
- ✗ The Attorney-General of India

Question Number : 29 Question Id : 7230531261 Question Type : MCQ Option Shuffling : Yes Display Question Number : Yes  
Single Line Question Option : No Option Orientation : Vertical  
Correct : 1 Wrong : 0.25

The statutory power for exchange control was provided to the RBI by the Foreign Exchange Regulation Act (FERA) of:

Options :

- ✗ 1923
- ✗ 1981



✖ 1963

✔ 1947

Question Number : 30 Question Id : 7230531262 Question Type : MCQ Option Shuffling : Yes Display Question Number : Yes  
Single Line Question Option : No Option Orientation : Vertical

Correct : 1 Wrong : 0.25

Which rank did India occupy in Global Optimism Index released as part of Grant Thornton's International Business Report (IBR) in the first quarter of 2018?

Options :

✔ 6

✖ 3

✖ 9

✖ 2

Question Number : 31 Question Id : 7230531263 Question Type : MCQ Option Shuffling : Yes Display Question Number : Yes  
Single Line Question Option : No Option Orientation : Vertical

Correct : 1 Wrong : 0.25

In which state is Chapchar Kut festival celebrated?

Options :

✖ Manipur

✖ Assam

✔ Mizoram

✖ Nagaland

Question Number : 32 Question Id : 7230531264 Question Type : MCQ Option Shuffling : Yes Display Question Number : Yes  
Single Line Question Option : No Option Orientation : Vertical

Correct : 1 Wrong : 0.25

The noted musician Arvind Parikh is associated with which of the following musical instruments?

Options :

✖ Sarod

✔ Sitar

✖ Shehnai

✖ Mridangam

Question Number : 33 Question Id : 7230531265 Question Type : MCQ Option Shuffling : Yes Display Question Number : Yes  
Single Line Question Option : No Option Orientation : Vertical

Correct : 1 Wrong : 0.25

Who established the Darpana Academy of Performing Arts in Ahmedabad?

Options :

✖ Rukmini Devi Arundale

✔ Mrinalini Sarabhai

✖ Sonal Mansingh

✖ Yamini Krishnamurthy

Question Number : 34 Question Id : 7230531266 Question Type : MCQ Option Shuffling : Yes Display Question Number : Yes  
Single Line Question Option : No Option Orientation : Vertical

Correct : 1 Wrong : 0.25

How many Olympic Medals has India won in the sport of wrestling so far?

Options :

✔ 5

✖ 7

✖ 3

✖ 2

Question Number : 35 Question Id : 7230531267 Question Type : MCQ Option Shuffling : Yes Display Question Number : Yes  
Single Line Question Option : No Option Orientation : Vertical

Correct : 1 Wrong : 0.25

Who holds the record for the “highest number of wickets” across all seasons of IPL as of April 2018?

Options :

✖ Harbhajan Singh

✖ Ravichandran Ashwin

✖ Umesh Yadav

✔ Lasith Malinga

Question Number : 36 Question Id : 7230531268 Question Type : MCQ Option Shuffling : Yes Display Question Number : Yes  
Single Line Question Option : No Option Orientation : Vertical

Correct : 1 Wrong : 0.25

Which mirror is used in the headlight of cars?

Options :

- ☐ Convex mirror
- ☒ Concave mirror
- ☐ Plane mirror
- ☐ Rectangle mirror

Question Number : 37 Question Id : 7230531269 Question Type : MCQ Option Shuffling : Yes Display Question Number : Yes  
Single Line Question Option : No Option Orientation : Vertical

Correct : 1 Wrong : 0.25

Where is the headquarters of UNICEF located?

Options :

- ☒ New York
- ☐ Paris
- ☐ Shanghai
- ☐ London

Question Number : 38 Question Id : 7230531270 Question Type : MCQ Option Shuffling : Yes Display Question Number : Yes  
Single Line Question Option : No Option Orientation : Vertical

Correct : 1 Wrong : 0.25

The Gobar-Dhan Scheme was launched at National Dairy Research Institute, \_\_\_\_\_.

Options :

- ☒ Karnal
- ☐ Hisar
- ☐ Ambala
- ☐ Rohtak

Question Number : 39 Question Id : 7230531271 Question Type : MCQ Option Shuffling : Yes Display Question Number : Yes  
Single Line Question Option : No Option Orientation : Vertical

Correct : 1 Wrong : 0.25

With whom has the Union Government of India entered into an agreement for flexible financing arrangement to accelerate research towards early development of biopharmaceuticals under National Biopharma Mission?

Options :

✗ UNICEF

✗ WHO

✗ IMF

✓ World Bank

Question Number : 40 Question Id : 7230531272 Question Type : MCQ Option Shuffling : Yes Display Question Number : Yes  
Single Line Question Option : No Option Orientation : Vertical

Correct : 1 Wrong : 0.25

What has been set as MSP for jute per quintal for 2018-19?

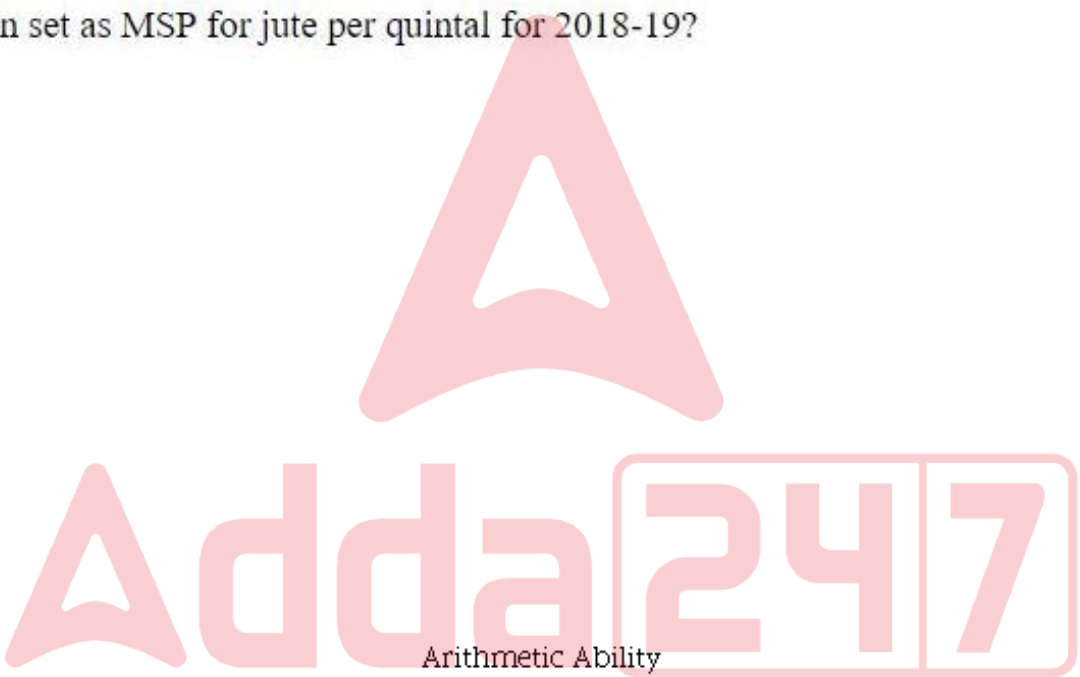
Options :

✗ ₹ 3,500

✓ ₹ 3,700

✗ ₹ 4,200

✗ ₹ 3,100



Group Number :	3
Group Id :	72305363
Group Maximum Duration :	0
Group Minimum Duration :	0
Revisit allowed for view? :	No
Revisit allowed for edit? :	No
Break time:	0
Group Marks:	20

Arithmetic Ability

Section Id :	72305363
Section Number :	1
Section type :	Online
Mandatory or Optional:	Mandatory
Number of Questions:	17
Number of Questions to be attempted:	17
Section Marks:	20
Display Number Panel:	Yes

Group All Questions:

No

Sub-Section Number:

1

Sub-Section Id:

72305389

Question Shuffling Allowed :

Yes

Question Number : 41 Question Id : 7230531273 Question Type : MCQ Option Shuffling : Yes Display Question Number : Yes  
Single Line Question Option : No Option Orientation : Vertical

Correct : 1 Wrong : 0.25

If the sum of eighteen consecutive positive integers is a perfect square, then the smallest possible value of the sum is:

Options :

✗ 169

✓ 225

✗ 289

✗ 324

Question Number : 42 Question Id : 7230531274 Question Type : MCQ Option Shuffling : Yes Display Question Number : Yes  
Single Line Question Option : No Option Orientation : Vertical

Correct : 1 Wrong : 0.25

The value of  $\frac{(12.12)^2 - (8.12)^2}{(0.25)^2 + (0.25)(19.99)} \div \left(\frac{17.28 \div 12}{3.6 \times 0.02}\right)$  is:

Options :

✗ 0.4

✗ 0.6

✓ 0.8

✗ 1.2

Question Number : 43 Question Id : 7230531275 Question Type : MCQ Option Shuffling : Yes Display Question Number : Yes  
Single Line Question Option : No Option Orientation : Vertical

Correct : 1 Wrong : 0.25

The value of  $\frac{5 + [2 + \{2 - 2(5 - 3) + 5\} - 10] \div 5}{3 + \frac{1}{6}\{29 - (20 + 3) + \frac{1}{2} \text{ of } 48\} + 4}$  lies between:

Options :

✗ 0.1 and 0.2

✗ 0.2 and 0.3



✓ 0.3 and 0.4

✗ 0.4 and 0.5

Question Number : 44 Question Id : 7230531276 Question Type : MCQ Option Shuffling : Yes Display Question Number : Yes  
Single Line Question Option : No Option Orientation : Vertical

Correct : 1 Wrong : 0.25

$\frac{1}{2} + \frac{1}{5} + \frac{1}{8} + \frac{1}{11} + \frac{1}{20} + \frac{1}{41} + \frac{1}{110} + \frac{1}{1640}$  is equal to:

Options :

✗ 2

✗ 1.6

✗ 1.8

✓ 1

Question Number : 45 Question Id : 7230531277 Question Type : MCQ Option Shuffling : Yes Display Question Number : Yes  
Single Line Question Option : No Option Orientation : Vertical

Correct : 1 Wrong : 0.25

On simplification,  $\frac{\frac{1}{5}}{\frac{1}{5} + \frac{7}{39} - \frac{5}{1 + \frac{2}{3}}}$  reduces to:

Options :

✓ 9

✗  $\frac{1}{45}$

✗  $\frac{1}{9}$

✗ 45

Question Number : 46 Question Id : 7230531278 Question Type : MCQ Option Shuffling : Yes Display Question Number : Yes  
Single Line Question Option : No Option Orientation : Vertical

Correct : 1 Wrong : 0.25

The sum and difference of LCM and HCF of two numbers are 592 and 518, respectively. If the difference of the numbers is  $x$  and their sum is 296 then the value of  $x$  is:

Options :

✗ 37

✓ 74

✗ 111

✗ 148

Question Number : 47 Question Id : 7230531279 Question Type : MCQ Option Shuffling : Yes Display Question Number : Yes  
Single Line Question Option : No Option Orientation : Vertical

Correct : 1 Wrong : 0.25

A person has 1323 mangoes, 2457 apples and 2835 oranges. He wants to pack them in boxes so that each box has equal number of fruits of the same kind. The least number of boxes will be:

Options :

✗ 20

✗ 28

✓ 35

✗ 54

Question Number : 48 Question Id : 7230531280 Question Type : MCQ Option Shuffling : Yes Display Question Number : Yes  
Single Line Question Option : No Option Orientation : Vertical

Correct : 1 Wrong : 0.25

Two alloys A and B contain copper and zinc in the ratio 4 : 1 and 3 : 5, respectively. They are mixed in the ratio 9 : 4 to get a new alloy C. What is the ratio of copper and zinc in alloy C?

Options :

✗ 13 : 12

✗ 16 : 17

✗ 17 : 18

✓ 87 : 43

Question Number : 49 Question Id : 7230531281 Question Type : MCQ Option Shuffling : Yes Display Question Number : Yes  
Single Line Question Option : No Option Orientation : Vertical

Correct : 1 Wrong : 0.25

Anil spends 90% of his salary. Suppose his salary increases by 32% and savings increase by 50%, what is the percentage increase in his expenditure?

Options :

✗ 25

✓ 30

✖ 32

✖ 36

Question Number : 50 Question Id : 7230531282 Question Type : MCQ Option Shuffling : Yes Display Question Number : Yes  
Single Line Question Option : No Option Orientation : Vertical

Correct : 1 Wrong : 0.25

On selling an article at 20% discount on its marked price, there is a loss of  $x\%$ . If it is sold at the marked price, then profit is 15%. What is the value of  $x$ ?

Options :

✔ 8%

✖ 9%

✖ 10%

✖ 12%

Question Number : 51 Question Id : 7230531283 Question Type : MCQ Option Shuffling : Yes Display Question Number : Yes  
Single Line Question Option : No Option Orientation : Vertical

Correct : 1 Wrong : 0.25

A sum of ₹ 13,600 amounts to ₹ 16,456 at compound interest in a certain time at a certain rate percent per annum. What will the same sum amount to at the same rate in half the earlier time?

Options :

✖ ₹ 14,840

✖ ₹ 14,980

✔ ₹ 14,960

✖ ₹ 15,840

Question Number : 52 Question Id : 7230531284 Question Type : MCQ Option Shuffling : Yes Display Question Number : Yes  
Single Line Question Option : No Option Orientation : Vertical

Correct : 1 Wrong : 0.25

Three concentric circles have radii (in cm)  $a$ ,  $b$  and  $c$  where  $a < b < c$ . if  $a = 8$ ,  $b = 9$  and the middle circle bisects the area between the other two circles, then the value of  $c$  is:

Options :

✖ 7

✔  $7\sqrt{2}$

✗ 8

✗  $8\sqrt{2}$

Question Number : 53 Question Id : 7230531285 Question Type : MCQ Option Shuffling : Yes Display Question Number : Yes  
Single Line Question Option : No Option Orientation : Vertical

Correct : 1 Wrong : 0.25

A person rows upstream for a distance of 21 km and returns to the starting point. He completes this journey in 10 hours. If the time taken by him in going 7 km downstream is equal to the time taken in going 3 km upstream, then what is the speed of the current?

Options :

✗  $3\frac{1}{2}$  km/h

✗ 3 km/h

✓ 2 km/h

✗  $1\frac{1}{2}$  km/h

Question Number : 54 Question Id : 7230531286 Question Type : MCQ Option Shuffling : Yes Display Question Number : Yes  
Single Line Question Option : No Option Orientation : Vertical

Correct : 1 Wrong : 0.25

A, B and C working together can complete a task in 18 days. B takes double the time that A takes and C takes double the time that B takes to complete the task. They work together for 4 days. A alone will complete the remaining task in:

Options :

✗ 20 days

✗  $20\frac{1}{2}$  days

✗ 24 days

✓  $24\frac{1}{2}$  days

Sub-Section Number: 2  
Sub-Section Id: 72305390  
Question Shuffling Allowed : Yes

Question Id : 7230531287 Question Type : COMPREHENSION Sub Question Shuffling Allowed : Yes Group Comprehension Questions : No

Question Numbers : (55 to 56)

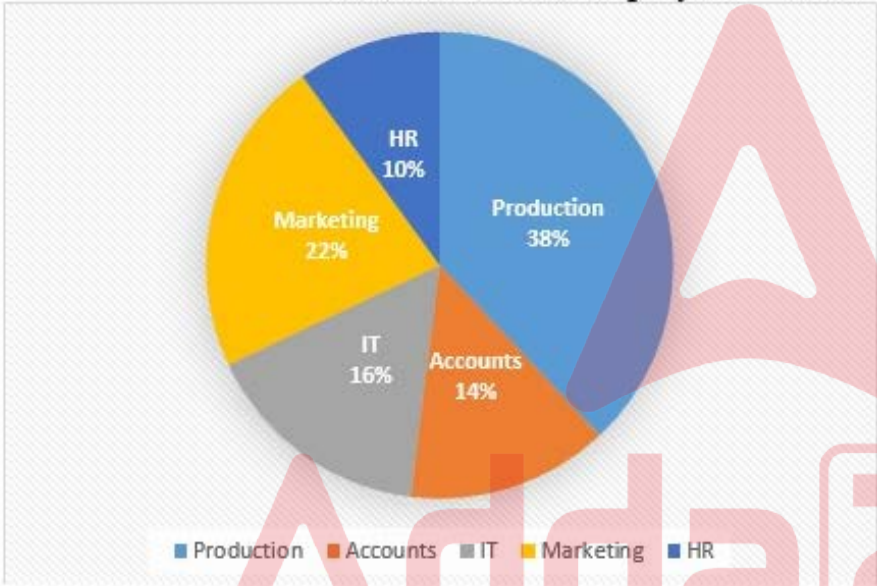
Question Label : Comprehension

Study the following pie chart and table and answer the questions that follow.

The following table shows the respective ratio of males to females in each department of a company.

Department	Males : females
Production	11 : 8
HR	8 : 7
IT	3 : 5
Marketing	7 : 4
Accounts	2 : 5

Percentage wise breakup of employees in various departments  
Total number of employees = 2850



Sub questions

Question Number : 55 Question Id : 7230531288 Question Type : MCQ Option Shuffling : Yes Display Question Number : Yes  
Single Line Question Option : No Option Orientation : Vertical  
Correct : 1 Wrong : 0.25

What is the ratio of the total number of males working in IT and marketing departments to the numbers of females working in the Production department?

Options :

✗ 2 : 1

✗ 5 : 2

✓ 5 : 4

✗ 10 : 9



Question Number : 56 Question Id : 7230531289 Question Type : MCQ Option Shuffling : Yes Display Question Number : Yes  
Single Line Question Option : No Option Orientation : Vertical  
Correct : 1 Wrong : 0.25

The total number of females working in the HR department and the total number of males working in the Accounts department forms approximately how much percent of the total number of female employees in the company?

Options :

✖ 15.8%

✖ 16.2%

✖ 16.4%

✔ 17.8%

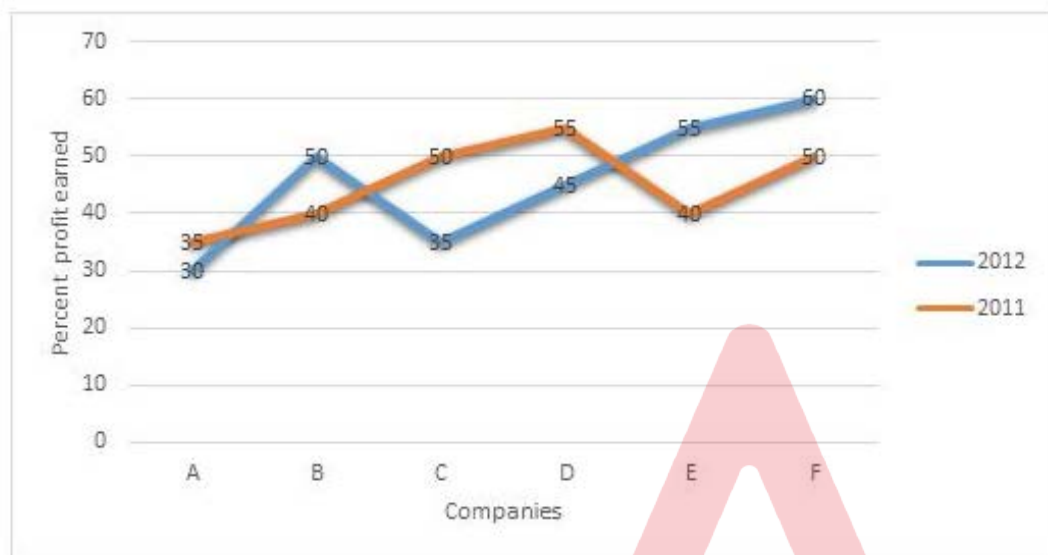
Sub-Section Number: 3  
Sub-Section Id: 72305391  
Question Shuffling Allowed : Yes

Question Id : 7230531290 Question Type : COMPREHENSION Sub Question Shuffling Allowed : Yes Group Comprehension Questions : No  
Question Numbers : (57 to 58)  
Question Label : Comprehension

Study the following graph which shows percent profit earned by six companies during 2011 and 2012. And answer the questions that follow.

Profit = Income – Expenditure

$$\% \text{ profit} = \frac{\text{Income} - \text{Expenditure}}{\text{Expenditure}} \times 100$$



Sub questions

Question Number : 57 Question Id : 7230531291 Question Type : MCQ Option Shuffling : Yes Display Question Number : Yes  
Single Line Question Option : No Option Orientation : Vertical

Correct : 1 Wrong : 0.25

If the expenditure of company E in 2011 and 2012 was the same, then what was the ratio of incomes of the company in the same years respectively?

Options :

✗ 8 : 11

✗ 9 : 10

✗ 29 : 31

✓ 28 : 31

Question Number : 58 Question Id : 7230531292 Question Type : MCQ Option Shuffling : Yes Display Question Number : Yes  
Single Line Question Option : No Option Orientation : Vertical

Correct : 1 Wrong : 0.25

The expenditures of company A in 2011 and 2012 were ₹ 21 crores and ₹ 25 crores, respectively.

What was the total income of the company in these two years? (in crores of rupees)

Options :

✖ 60.55

✔ 60.85

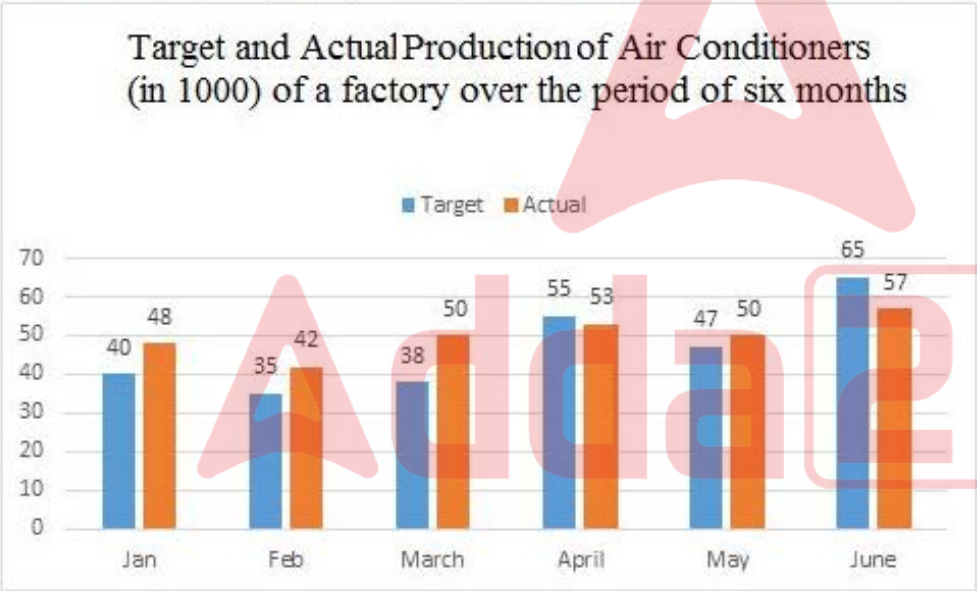
✖ 70.82

✖ 70.52

Sub-Section Number: 4  
Sub-Section Id: 72305392  
Question Shuffling Allowed : Yes

Question Id : 7230531293 Question Type : COMPREHENSION Sub Question Shuffling Allowed : Yes Group Comprehension Questions : No  
Question Numbers : (59 to 60)  
Question Label : Comprehension

Study the following graph and answer the question that follows.



Sub questions

Question Number : 59 Question Id : 7230531294 Question Type : MCQ Option Shuffling : Yes Display Question Number : Yes  
Single Line Question Option : No Option Orientation : Vertical  
Correct : 1 Wrong : 0.25

The combined actual production of air conditioners in February and June is what percent less than the combined targeted production in January, March and May?

Options :

✖ 19.8%

✖ 20.4%

✔ 20.8%

✘ 21.2%

Question Number : 60 Question Id : 7230531295 Question Type : MCQ Option Shuffling : Yes Display Question Number : Yes  
Single Line Question Option : No Option Orientation : Vertical  
Correct : 1 Wrong : 0.25

What is the difference between the total targeted production for February, April and May and the actual production in thousand for January, March and June?

Options :

✔ 18

✘ 22

✘ 24

✘ 29

Group Number :	4
Group Id :	72305364
Group Maximum Duration :	0
Group Minimum Duration :	0
Revisit allowed for view? :	No
Revisit allowed for edit? :	No
Break time:	0
Group Marks:	20

Section Id :	72305364
Section Number :	1
Section type :	Online
Mandatory or Optional:	Mandatory
Number of Questions:	16
Number of Questions to be attempted:	16
Section Marks:	20
Display Number Panel:	Yes
Group All Questions:	No

Sub-Section Number:	1
Sub-Section Id:	72305393

Question Shuffling Allowed : Yes

Question Number : 61 Question Id : 7230531296 Question Type : MCQ Option Shuffling : Yes Display Question Number : Yes  
Single Line Question Option : No Option Orientation : Vertical

Correct : 1 Wrong : 0.25

Choose the correct synonym of:

oration

Options :

✘ attraction

✘ dialogue

✔ speech

✘ silence

Question Number : 62 Question Id : 7230531297 Question Type : MCQ Option Shuffling : Yes Display Question Number : Yes  
Single Line Question Option : No Option Orientation : Vertical

Correct : 1 Wrong : 0.25

Choose the appropriate antonym of:

avoid

Options :

✔ seek

✘ dodge

✘ kill

✘ discover

Question Number : 63 Question Id : 7230531298 Question Type : MCQ Option Shuffling : Yes Display Question Number : Yes  
Single Line Question Option : No Option Orientation : Vertical

Correct : 1 Wrong : 0.25

Choose the correct antonym of the underlined word to fill in the blank.

It looked as if the answer to the quiz question was obvious but it turned out to be \_\_\_\_\_.

Options :

✘ persuasion

✔ ambiguous



☐ predictable

☐ transparent

Question Number : 64 Question Id : 7230531299 Question Type : MCQ Option Shuffling : Yes Display Question Number : Yes  
Single Line Question Option : No Option Orientation : Vertical

Correct : 1 Wrong : 0.25

Fill in the blank with the correct word.

The match was quite boring as we could easily predict who would be \_\_\_\_\_ winner.

Options :

☐ an

☐ some

☒ the

☐ a

Question Number : 65 Question Id : 7230531300 Question Type : MCQ Option Shuffling : Yes Display Question Number : Yes  
Single Line Question Option : No Option Orientation : Vertical

Correct : 1 Wrong : 0.25

Fill in the blank with the appropriate word/s.

Did your college \_\_\_\_\_ in the university tournament?

Options :

☐ are participating

☐ participated

☐ participating

☒ participate

Question Number : 66 Question Id : 7230531301 Question Type : MCQ Option Shuffling : Yes Display Question Number : Yes  
Single Line Question Option : No Option Orientation : Vertical

Correct : 1 Wrong : 0.25

Fill in the blank with the appropriate word.

On Sundays I \_\_\_\_\_ have my breakfast in bed and spend the morning relaxing with a book.

Options :

✘ frequently

✔ usually

✘ gradually

✘ rapidly

Question Number : 67 Question Id : 7230531302 Question Type : MCQ Option Shuffling : Yes Display Question Number : Yes  
Single Line Question Option : No Option Orientation : Vertical

Correct : 1 Wrong : 0.25

In the following sentence four words or phrases have been underlined. One of them is incorrect. Choose the incorrect word or phrase from the given options.

One who desires wealth and property from God is not a devotee but a slavery of wealth and property because, to him, God is only a means to an end.

Options :

✘ One who desires

✘ not a devotee

✔ slavery of wealth

✘ means to an end

Question Number : 68 Question Id : 7230531303 Question Type : MCQ Option Shuffling : Yes Display Question Number : Yes  
Single Line Question Option : No Option Orientation : Vertical

Correct : 1 Wrong : 0.25

In the following sentence four words or phrases have been underlined. One of them is incorrect. Choose the incorrect word or phrase from the given options.

It was a near-impossible mission, and once more fate handed me a failure when I could see the finish line and expect to win.

Options :

✘ once more

✘ handed me

✘ I could see

✔ expect to win

Question Number : 69 Question Id : 7230531304 Question Type : MCQ Option Shuffling : Yes Display Question Number : Yes  
Single Line Question Option : No Option Orientation : Vertical

Correct : 1 Wrong : 0.25

Choose the passive voice form of the given sentence.

My colleague and I decided we would continue our efforts to conquer the seas.

Options :

- ☐ My colleague and I decided we would be continuing our efforts to conquer the seas.
- ☐ My colleague and I decided we will continue our efforts to conquer the seas.
- ☒ It was decided by my colleague and me that we would continue our efforts to conquer the seas.
- ☐ It is decided by my colleague and me to continue our efforts to conquer the seas.

Question Number : 70 Question Id : 7230531305 Question Type : MCQ Option Shuffling : Yes Display Question Number : Yes  
Single Line Question Option : No Option Orientation : Vertical

Correct : 1 Wrong : 0.25

Choose the most appropriate indirect narration for the following sentence.

Ravi said, "Do you understand how difficult this job is? I need at least four team members to complete it within five days."

Options :

- ☐ Ravi said if he understands how difficult this job is? He said he needs at least four team members to complete it within five days.
- ☒ Ravi asked if he understood how difficult that job was and further said he needed at least four team members to complete it within five days.
- ☐ Ravi asked do you understand how difficult this job is? I need at least four team members to complete it within five days.
- ☐ Ravi says, "Do you understand how difficult this job is? I needed at least four team members to complete it within five days."

Question Number : 71 Question Id : 7230531306 Question Type : MCQ Option Shuffling : Yes Display Question Number : Yes  
Single Line Question Option : No Option Orientation : Vertical

Correct : 1 Wrong : 0.25

Choose the best option to combine the given sentences.

Ritu felt very offended. She stopped talking to her friend.

Options :

- ☒ Ritu felt so offended that she stopped talking to her friend.
- ☐ Ritu felt very offended that she stopped talking to her friend.
- ☐ Ritu felt too offended she that stopped talking to her friend.



✘ Ritu felt very offended because she stopped talking to her friend.

Question Number : 72 Question Id : 7230531307 Question Type : MCQ Option Shuffling : Yes Display Question Number : Yes  
Single Line Question Option : No Option Orientation : Vertical

Correct : 1 Wrong : 0.25

Choose the passage that is correctly punctuated.

Options :

✘ It was very dark and windy. Aastha saw the dark clouds and shouted Mother! It's going to rain. Let's run indoors quickly.

✘ It was very dark and windy, Aastha saw the dark clouds and shouted, "mother it's going to rain. Let's run indoors quickly."

✔ It was very dark and windy. Aastha saw the dark clouds and shouted, "Mother! It's going to rain. Let's run indoors quickly."

✘ It was very dark and windy. Aastha saw the dark clouds and shouted, "Mother! Its going to rain. Let's run indoors quickly."

Question Number : 73 Question Id : 7230531308 Question Type : MCQ Option Shuffling : Yes Display Question Number : Yes  
Single Line Question Option : No Option Orientation : Vertical

Correct : 1 Wrong : 0.25

Choose the word that is correctly spelt.

Options :

✘ imediate

✘ grammer

✘ recieve

✔ irrelevant

Question Number : 74 Question Id : 7230531309 Question Type : MCQ Option Shuffling : Yes Display Question Number : Yes  
Single Line Question Option : No Option Orientation : Vertical

Correct : 1 Wrong : 0.25

Fill in the blank with the appropriate idiomatic expression.

Why are you \_\_\_\_\_? You paid no heed when you were warned so many times.

Options :

✘ chicken- hearted

✘ beating about the bush

✓ crying over spilt milk

✗ giving yourself airs

Question Number : 75 Question Id : 7230531310 Question Type : MCQ Option Shuffling : Yes Display Question Number : Yes  
Single Line Question Option : No Option Orientation : Vertical

Correct : 1 Wrong : 0.25

Fill in the blank with the appropriate idiomatic expression.

Virat Kohli is \_\_\_\_\_ most batsmen in the world.

Options :

✗ hard and fast

✓ head and shoulders above

✗ keeping an eye on

✗ leaving no stone unturned

Sub-Section Number: 2  
Sub-Section Id: 72305394  
Question Shuffling Allowed : Yes

Question Id : 7230531311 Question Type : COMPREHENSION Sub Question Shuffling Allowed : Yes Group Comprehension  
Questions : No

Question Numbers : (76 to 80)

Question Label : Comprehension



Read the following passage and answer the questions based on it.

My only work is to give you a clear-cut idea how you can become more conscious; I call it meditation. Working, walking, sitting. . . . I don't believe what others call meditation; that for ten minutes or 20 minutes you do it and then just be your ordinary self for 24 hours and again meditate for 20 minutes. It is like asking a person to breathe every day for 20 minutes and then forget all about it, because the person has to do many other things! And then next day she/he can breathe again in the morning! To me meditation is exactly like breathing. So whatsoever you are doing and wherever you are, do it more consciously.

Just try for few minutes to walk consciously; be alert at each step and you will be surprised that the quality of your walk is totally different. It is relaxed. There is no tension and there is a subtle joy that is arising out of your relaxed walking. And the more you become aware of this joy, the more you would like to be awake.

Eat with awareness. Thirty million people in America are suffering from overeating. Strange world we are living in; men are dying every day in Ethiopia because they don't have food, and millions are dying in America because they have too much food. These people who are suffering from obesity cannot resist eating. No doctor is going to help them, unless they become aware, while they are eating. They have to be aware that a man of awareness eats only as much as his body needs. He immediately feels that now there is no need, the hunger is gone, he is content.

#### Sub questions

Question Number : 76 Question Id : 7230531312 Question Type : MCQ Option Shuffling : Yes Display Question Number : Yes  
Single Line Question Option : No Option Orientation : Vertical  
Correct : 1 Wrong : 0.25

Complete the sentence by choosing a suitable option.

The writer believes that meditation \_\_\_\_\_.

Options :

- ☒ is a process that requires consciousness
- ☐ can be done only when you are walking
- ☐ needs to be done for only 20 minutes a day
- ☐ must be done many times during the day

Question Number : 77 Question Id : 7230531313 Question Type : MCQ Option Shuffling : Yes Display Question Number : Yes  
Single Line Question Option : No Option Orientation : Vertical  
Correct : 1 Wrong : 0.25

Choose the most suitable option to complete the sentence given below.

When meditation is done with awareness, it:

Options :

- ☐ makes you a forgetful person.
- ☐ is painful and tedious.
- ☐ is quite time consuming.
- ☒ gives a great deal of satisfaction.

Question Number : 78 Question Id : 7230531314 Question Type : MCQ Option Shuffling : Yes Display Question Number : Yes  
Single Line Question Option : No Option Orientation : Vertical  
Correct : 1 Wrong : 0.25

Choose the most suitable option to answer the question given below.

What is the irony of life mentioned by the writer?

Options :

- ☐ Many Americans are dying due to overeating
- ☒ While some people die of hunger, others die of overeating
- ☐ Many people are dying in Ethiopia
- ☐ Awareness is essential but it has no effect

Question Number : 79 Question Id : 7230531315 Question Type : MCQ Option Shuffling : Yes Display Question Number : Yes  
Single Line Question Option : No Option Orientation : Vertical  
Correct : 1 Wrong : 0.25

Choose the most suitable option to answer the question given below.

What should you NOT do if you are obese?

Options :

- ☐ Consult a doctor
- ☒ Be led by your love for food

✖ Eat only what your body needs

✖ Resist eating too much

Question Number : 80 Question Id : 7230531316 Question Type : MCQ Option Shuffling : Yes Display Question Number : Yes  
Single Line Question Option : No Option Orientation : Vertical

Correct : 1 Wrong : 0.25

One who is \_\_\_\_\_ is an aware person.

Options :

✖ terribly overweight

✔ always alert

✖ always tense

✖ eats unconsciously

General Hindi

Group Number :	5
Group Id :	72305365
Group Maximum Duration :	0
Group Minimum Duration :	0
Revisit allowed for view? :	No
Revisit allowed for edit? :	No
Break time:	0
Group Marks:	20

General Hindi

Section Id :	72305365
Section Number :	1
Section type :	Online
Mandatory or Optional:	Mandatory
Number of Questions:	16
Number of Questions to be attempted:	16
Section Marks:	20
Display Number Panel:	Yes
Group All Questions:	No

Sub-Section Number:	1
Sub-Section Id:	72305395
Question Shuffling Allowed :	Yes



Question Id : 7230531317 Question Type : COMPREHENSION Sub Question Shuffling Allowed : Yes Group Comprehension Questions : No

Question Numbers : (81 to 85)

Question Label : Comprehension

निम्नलिखित गद्यांश को ध्यानपूर्वक पढ़कर पूछे गए प्रश्नों के उत्तर दीजिये।

हम एक ऐसे युग में जी रहे हैं, जहाँ एक तरफ भौतिक समृद्धि अपनी ऊँचाई पर है, तो दूसरी तरफ चारित्रिक पतन की गहराई है। आधुनिकीकरण में उलझा मानव सफलता की नित नई परिभाषाएँ खोजता रहता है अपनी अंतहीन इच्छाओं के रेगिस्तान में भटकता रहता है। ऐसे समय में सच्ची सफलता और सुख-शांति की प्यास से व्याकुल व्यक्ति अनेक मानसिक रोगों का शिकार बनता जा रहा है। हमसे कितने लोगों को इस बात का ज्ञान है की जीवन में सफलता प्राप्त करना और सफल जीवन जीना, यह दोनों अलग-अलग बातें हैं! यह ज़रूरी नहीं कि जिसने अपने जीवन में साधारण कामनाओं को हासिल कर लिया हो, वह पूर्णतः संतुष्ट और प्रसन्न भी हो। अतः हमें गंभीरतापूर्वक इस बात को समझना चाहिए कि इच्छित फल को प्राप्त कर लेना ही सफलता नहीं है। जब तक हम अपने जीवन में नैतिक व आध्यात्मिक मूल्यों का सिंचन नहीं करेंगे, तब तक यथार्थ सफलता पाना हमारे लिए मुश्किल ही नहीं, अपितु असंभव कार्य हो जाएगा, क्योंकि बिना मूल्यों के प्राप्त सफलता केवल क्षणभंगुर सुख के समान रहती है। कुछ निराशावादी लोगों का कहना है कि हम सफल नहीं हो सकते, क्योंकि हमारी तकदीर या परिस्थितियाँ ही ऐसी हैं। परंतु यदि हम अपना ध्येय निश्चित करके उसे अपने मन में बिठा लें, तो फिर सफलता स्वयं हमारी ओर चलकर आएगी। सफल होना हर मनुष्य का जन्मसिद्ध अधिकार है, परंतु यदि हम अपनी विफलताओं के बारे में ही सोचते रहेंगे, तो सफलता को कभी हासिल नहीं कर पाएँगे। अतः विफलताओं की चिंता न करें, क्योंकि वे तो हमारे जीवन का सौंदर्य है और संघर्ष जीवन का काव्य है, कई बार प्रथम आघात में पत्थर नहीं टूट पाता, उसे तोड़ने के लिए आघात करने पड़ते हैं, इसलिए सदैव अपने लक्ष्य को सामने रख आगे बढ़ने की जरूरत है। कहा भी गया है कि जीवन में सकारात्मक कोशिश करने वालों की कभी हार नहीं होती।

Sub questions

Question Number : 81 Question Id : 7230531318 Question Type : MCQ Option Shuffling : Yes Display Question Number : Yes Single Line Question Option : No Option Orientation : Vertical

Correct : 1 Wrong : 0.25

यथार्थ सफलता मिलती है:

Options :

- ✘ इच्छाओं की पूर्ति से
- ✘ आधुनिकीकरण की प्रवृत्ति से
- ✘ भौतिक समृद्धि से
- ✔ नैतिक मूल्यों को अपनाने से

Question Number : 82 Question Id : 7230531319 Question Type : MCQ Option Shuffling : Yes Display Question Number : Yes  
Single Line Question Option : No Option Orientation : Vertical

Correct : 1 Wrong : 0.25

चारित्रिक पतन का कारण है:

Options :

- ✔ अंतहीन इच्छाएँ
- ✘ नैतिक मूल्यों को महत्व देना
- ✘ आध्यात्मिक चिंतन
- ✘ प्रगतिशील विचार

Question Number : 83 Question Id : 7230531320 Question Type : MCQ Option Shuffling : Yes Display Question Number : Yes  
Single Line Question Option : No Option Orientation : Vertical

Correct : 1 Wrong : 0.25

परस्थितियों को असफलता का कारण मानते हैं:

Options :

- ✘ श्रमशील लोग
- ✘ ध्येयनिष्ठ व्यक्ति
- ✔ निराश लोग
- ✘ कर्मरत लोग



Question Number : 84 Question Id : 7230531321 Question Type : MCQ Option Shuffling : Yes Display Question Number : Yes  
Single Line Question Option : No Option Orientation : Vertical  
Correct : 1 Wrong : 0.25

दृढनिश्चय वाले लोग पा लेते हैं:

Options :

- ☒ सफलता
- ☐ हताशा
- ☐ निराशा
- ☐ विफलता

Question Number : 85 Question Id : 7230531322 Question Type : MCQ Option Shuffling : Yes Display Question Number : Yes  
Single Line Question Option : No Option Orientation : Vertical  
Correct : 1 Wrong : 0.25

‘पत्थर तोड़ने के लिए कई आघात करने पड़ते हैं’  
का आशय है:

Options :

- ☐ निरंतर चोट खाते रहना।
- ☒ निरंतर श्रम करते रहना।
- ☐ निरंतर सहायतार्थ पुकारना।
- ☐ निरंतर पत्थर तोड़ते रहना।

Sub-Section Number: 2  
Sub-Section Id: 72305396  
Question Shuffling Allowed : Yes

Question Number : 86 Question Id : 7230531323 Question Type : MCQ Option Shuffling : Yes Display Question Number : Yes  
Single Line Question Option : No Option Orientation : Vertical  
Correct : 1 Wrong : 0.25

निम्नलिखित में से ‘तत्सम’ शब्द की पहचान करें।

Options :

- ☐ व्याह
- ☐ साँस

✓ मनुष्य

✗ सात

Question Number : 87 Question Id : 7230531324 Question Type : MCQ Option Shuffling : Yes Display Question Number : Yes  
Single Line Question Option : No Option Orientation : Vertical

Correct : 1 Wrong : 0.25

निम्नलिखित में से कौन सा शब्द तद्भव है?

Options :

✗ मित्र

✗ शाक

✗ सूत्र

✓ मुँह

Question Number : 88 Question Id : 7230531325 Question Type : MCQ Option Shuffling : Yes Display Question Number : Yes  
Single Line Question Option : No Option Orientation : Vertical

Correct : 1 Wrong : 0.25

‘सदधर्म’ शब्द में कौन-सा समास है?

Options :

✓ कर्मधारय

✗ तत्पुरुष

✗ बहुव्रीहि

✗ द्वन्द्व

Question Number : 89 Question Id : 7230531326 Question Type : MCQ Option Shuffling : Yes Display Question Number : Yes  
Single Line Question Option : No Option Orientation : Vertical

Correct : 1 Wrong : 0.25

‘उज्ज्वल’ का संधि विच्छेद होगा:

Options :

✗ उज्+ज्वल

✓ उत्+ज्वल

✖ उद+ज्वल

✖ उत्+ज्वल

Question Number : 90 Question Id : 7230531327 Question Type : MCQ Option Shuffling : Yes Display Question Number : Yes  
Single Line Question Option : No Option Orientation : Vertical

Correct : 1 Wrong : 0.25

‘माली’ शब्द का बहुवचन (अभिभक्ति) होगा:

Options :

✔ माली

✖ मालिया

✖ मालिँ

✖ मालियों

Question Number : 91 Question Id : 7230531328 Question Type : MCQ Option Shuffling : Yes Display Question Number : Yes  
Single Line Question Option : No Option Orientation : Vertical

Correct : 1 Wrong : 0.25

सदा बहुवचन में प्रयुक्त होने वाला शब्द है:

Options :

✖ गीत

✖ सब्जी

✔ दर्शन

✖ वेद

Question Number : 92 Question Id : 7230531329 Question Type : MCQ Option Shuffling : Yes Display Question Number : Yes  
Single Line Question Option : No Option Orientation : Vertical

Correct : 1 Wrong : 0.25

निम्नलिखित में से भाववाचक संज्ञा शब्द की पहचान करें।

Options :

✖ नुकीला

✔ क्रोध

✖ शूर

✖ घर

Question Number : 93 Question Id : 7230531330 Question Type : MCQ Option Shuffling : Yes Display Question Number : Yes  
Single Line Question Option : No Option Orientation : Vertical

Correct : 1 Wrong : 0.25

‘मित्र’ शब्द का पर्यायवाची शब्द नहीं है:

Options :

✔ सखा

✖ गीत

✖ सहपाठी

✖ दोस्त

Note: For this question, discrepancy is found in question/answer. So, this question is ignored for all candidates.

Question Number : 94 Question Id : 7230531331 Question Type : MCQ Option Shuffling : Yes Display Question Number : Yes  
Single Line Question Option : No Option Orientation : Vertical

Correct : 1 Wrong : 0.25

‘दुराचार’ शब्द का विलोम है:

Options :

✖ कदाचार

✔ सदाचार

✖ अपचार

✖ अविचार

Question Number : 95 Question Id : 7230531332 Question Type : MCQ Option Shuffling : Yes Display Question Number : Yes  
Single Line Question Option : No Option Orientation : Vertical

Correct : 1 Wrong : 0.25

‘जिसमे संदेह न हो’ उसे कहते हैं:

Options :

✖ संदिग्ध

✔ असंदिग्ध

✖ आंत

✖ अनिर्णीत

Question Number : 96 Question Id : 7230531333 Question Type : MCQ Option Shuffling : Yes Display Question Number : Yes  
Single Line Question Option : No Option Orientation : Vertical

Correct : 1 Wrong : 0.25

निम्नलिखित में से कौन-सा शब्द स्त्रीलिंग है?

Options :

✖ मात

✔ बात

✖ गात

✖ दांत

Question Number : 97 Question Id : 7230531334 Question Type : MCQ Option Shuffling : Yes Display Question Number : Yes  
Single Line Question Option : No Option Orientation : Vertical

Correct : 1 Wrong : 0.25

निम्नलिखित में से कौन-सा शब्द पुलिंग है?

Options :

✔ बहाव

✖ भौंह

✖ उलझन

✖ चमक

Question Number : 98 Question Id : 7230531335 Question Type : MCQ Option Shuffling : Yes Display Question Number : Yes  
Single Line Question Option : No Option Orientation : Vertical

Correct : 1 Wrong : 0.25

निम्नलिखित वाक्यों में से शुद्धवाक्य को छांटिए:

Options :

✖ फलों का रस मेरे को नहीं पीना।

✔ आज हमारे घर बहुत मेहमान आएँगे।



- ✖ उसे पैसे निकालने चाहिएँ।
- ✖ मेरे को इसका उत्तर नहीं आता।

Question Number : 99 Question Id : 7230531336 Question Type : MCQ Option Shuffling : Yes Display Question Number : Yes  
Single Line Question Option : No Option Orientation : Vertical  
Correct : 1 Wrong : 0.25

‘बांसों उछालना’ मुहावरे का अर्थ होता है:

Options :

- ✖ उछल कर चढ़ना
- ✖ पागल हो जाना
- ✔ प्रसन्न होना
- ✖ बांस की सहायता से ऊपर उठना

Question Number : 100 Question Id : 7230531337 Question Type : MCQ Option Shuffling : Yes Display Question Number : Yes  
Single Line Question Option : No Option Orientation : Vertical  
Correct : 1 Wrong : 0.25

‘इस हाथ दे उस हाथ ले’ लोकोक्ति का अर्थ है:

Options :

- ✔ लेने का देना
- ✖ लाभ कमाना
- ✖ हैरान रह जाना
- ✖ चालाकी से काम निकालना

Subject Related

Group Number :	6
Group Id :	72305366
Group Maximum Duration :	0
Group Minimum Duration :	0
Revisit allowed for view? :	No
Revisit allowed for edit? :	No
Break time:	0
Group Marks:	20

	Subject Related
Section Id :	72305366
Section Number :	1
Section type :	Online
Mandatory or Optional:	Mandatory
Number of Questions:	20
Number of Questions to be attempted:	20
Section Marks:	20
Display Number Panel:	Yes
Group All Questions:	No

Sub-Section Number:	1
Sub-Section Id:	72305397
Question Shuffling Allowed :	Yes

Question Number : 101 Question Id : 7230531338 Question Type : MCQ Option Shuffling : Yes Display Question Number : Yes  
Single Line Question Option : No Option Orientation : Vertical  
Correct : 1 Wrong : 0.25

Utilisation of its available resources fully and most effectively and thereby production of maximum possible output with the given amount of resources by a firm, industry or an entire economy is known as:

Options :

- ☐ Economic efficiency
- ☒ Technical efficiency
- ☐ Market efficiency
- ☐ Allocation efficiency

Question Number : 102 Question Id : 7230531339 Question Type : MCQ Option Shuffling : Yes Display Question Number : Yes  
Single Line Question Option : No Option Orientation : Vertical  
Correct : 1 Wrong : 0.25

A graphical presentation of alternative production possibilities facing an economy is called as:

Options :

- ☒ Production possibility curve
- ☐ Marginal cost curve
- ☐ Average cost curve
- ☐ Lorenz curve

Question Number : 103 Question Id : 7230531340 Question Type : MCQ Option Shuffling : Yes Display Question Number : Yes  
Single Line Question Option : No Option Orientation : Vertical

Correct : 1 Wrong : 0.25

Rightward movement of the economy from one production possibility curve to another indicates:

Options :

- ☐ Increase in consumption
- ☐ Increase in cost of production
- ☐ Increase in number of firms
- ☒ Increase in output of goods and services

Question Number : 104 Question Id : 7230531341 Question Type : MCQ Option Shuffling : Yes Display Question Number : Yes  
Single Line Question Option : No Option Orientation : Vertical

Correct : 1 Wrong : 0.25

The amount of a next best commodity foregone for producing an extra unit of a commodity is known as:

Options :

- ☐ Total fixed cost
- ☐ Total average cost
- ☒ Opportunity cost
- ☐ Total variable cost

Question Number : 105 Question Id : 7230531342 Question Type : MCQ Option Shuffling : Yes Display Question Number : Yes  
Single Line Question Option : No Option Orientation : Vertical

Correct : 1 Wrong : 0.25

The principle of increasing opportunity cost makes the production possibility curve as:

Options :

- ☐ Convex to origin
- ☐ Horizontal
- ☒ Concave to origin
- ☐ Vertical

Question Number : 106 Question Id : 7230531343 Question Type : MCQ Option Shuffling : Yes Display Question Number : Yes  
Single Line Question Option : No Option Orientation : Vertical

Correct : 1 Wrong : 0.25

In a free market economy, the point at which the production possibility curve will operate depends upon the:

Options :

- ✗ Supply of different goods by the producers
- ✓ Consumer demand for different goods
- ✗ Government decisions
- ✗ Pattern of allocation of resources

Question Number : 107 Question Id : 7230531344 Question Type : MCQ Option Shuffling : Yes Display Question Number : Yes  
Single Line Question Option : No Option Orientation : Vertical

Correct : 1 Wrong : 0.25

In a socialist economy, the functions of the market are performed by the:

Options :

- ✗ Producers
- ✗ Consumers
- ✗ Managers
- ✓ Central planning authority

Question Number : 108 Question Id : 7230531345 Question Type : MCQ Option Shuffling : Yes Display Question Number : Yes  
Single Line Question Option : No Option Orientation : Vertical

Correct : 1 Wrong : 0.25

In a capitalist economy, the resource allocation is done by the:

Options :

- ✗ Government
- ✗ Monopolies
- ✗ Total industry
- ✓ Free market mechanism

Question Number : 109 Question Id : 7230531346 Question Type : MCQ Option Shuffling : Yes Display Question Number : Yes  
Single Line Question Option : No Option Orientation : Vertical

Correct : 1 Wrong : 0.25

The condition of consumer's equilibrium in case of two goods under proportionality rule:

Options :



✗  $\frac{\Delta Q_A}{\Delta Q_B} \times \frac{P_B}{P_A}$

✗  $\frac{\Delta P_B}{\Delta Q_A} \times \frac{Q_A}{P_B}$

✓  $\frac{MU_A}{P_A} = \frac{MU_B}{P_B}$

✗  $MU_A = MU_B$

Question Number : 110 Question Id : 7230531347 Question Type : MCQ Option Shuffling : Yes Display Question Number : Yes  
Single Line Question Option : No Option Orientation : Vertical

Correct : 1 Wrong : 0.25

If the consumer is affected by the principle of Demonstration effect, then the shape of the demand curve is:

Options :

✗ Negative slope from left to right

✓ Positive slope from left to right

✗ Horizontal to OX - axis

✗ Vertical towards OY - axis

Question Number : 111 Question Id : 7230531348 Question Type : MCQ Option Shuffling : Yes Display Question Number : Yes  
Single Line Question Option : No Option Orientation : Vertical

Correct : 1 Wrong : 0.25

Find the incorrect statement.

Options :

✗ Higher indifference curve represents a higher level of satisfaction.

✗ The slope of the Indifference curve is convex to the origin.

✗ Indifference curves neither touch nor intersect with each other.

✓ The shape of the indifference curve is 'U' shaped in the case of perfect complementary goods.

Question Number : 112 Question Id : 7230531349 Question Type : MCQ Option Shuffling : Yes Display Question Number : Yes  
Single Line Question Option : No Option Orientation : Vertical

Correct : 1 Wrong : 0.25

The concept of Marginal Rate of Substitution is an important tool in analysing:



Options :

- ☒ Demand
- ☐ Supply
- ☐ Both demand and Supply
- ☐ Neither demand nor Supply

Question Number : 113 Question Id : 7230531350 Question Type : MCQ Option Shuffling : Yes Display Question Number : Yes  
Single Line Question Option : No Option Orientation : Vertical

Correct : 1 Wrong : 0.25

When the price consumption curve (PCC) is horizontal then the elasticity is:

Options :

- ☐  $E_p > 1$
- ☐  $E_p < 1$
- ☒  $E_p = 1$
- ☐  $E_p = \infty$

Question Number : 114 Question Id : 7230531351 Question Type : MCQ Option Shuffling : Yes Display Question Number : Yes  
Single Line Question Option : No Option Orientation : Vertical

Correct : 1 Wrong : 0.25

In the case of inferior goods, the income effect is:

Options :

- ☒ Negative
- ☐ Positive
- ☐ Equal to zero
- ☐ Equal to one

Question Number : 115 Question Id : 7230531352 Question Type : MCQ Option Shuffling : Yes Display Question Number : Yes  
Single Line Question Option : No Option Orientation : Vertical

Correct : 1 Wrong : 0.25

If the price of good 'x' declines, the number of its quantities purchased rises proportionately; however, the purchased quantity of good 'y' remains same. What is the shape of the price consumption curve?

Options :

- ✖ Vertical
- ✖ Convex
- ✔ Horizontal
- ✖ Concave

Question Number : 116 Question Id : 7230531353 Question Type : MCQ Option Shuffling : Yes Display Question Number : Yes  
Single Line Question Option : No Option Orientation : Vertical  
Correct : 1 Wrong : 0.25

The curve that connects the various tangency points of indifference curves and wage lines is:

- Options :
- ✖ Iso-cost curve
  - ✖ Iso-revenue curve
  - ✔ Wage offer curve
  - ✖ Budget line

Question Number : 117 Question Id : 7230531354 Question Type : MCQ Option Shuffling : Yes Display Question Number : Yes  
Single Line Question Option : No Option Orientation : Vertical  
Correct : 1 Wrong : 0.25

Match the following.

1	Liquidity trap	A	H.H. Gossen
2	Law of Diminishing Marginal Utility	B	J.M. Keynes
3	Diamond-Water paradox	C	Robert Giffen
4	Substitution effect	D	Adam Smith
5	Demand for inferior goods	E	Eugen Slutsky

- Options :
- ✖ 1-A; 2-B; 3-E; 4-C; 5-D
  - ✖ 1-A; 2-C; 3-E; 4-B; 5-D
  - ✖ 1-B; 2-D; 3-E; 4-C;5- A
  - ✔ 1-B; 2-A; 3-D; 4-E; 5-C

Question Number : 118 Question Id : 7230531355 Question Type : MCQ Option Shuffling : Yes Display Question Number : Yes  
Single Line Question Option : No Option Orientation : Vertical

Correct : 1 Wrong : 0.25

The Arc method is used to measure:

Options :

- ☐ Total utility of a consumer
- ☐ Consumer's equilibrium
- ☐ Marginal utility of a consumer
- ☒ Elasticity between two points on a demand curve

Question Number : 119 Question Id : 7230531356 Question Type : MCQ Option Shuffling : Yes Display Question Number : Yes  
Single Line Question Option : No Option Orientation : Vertical

Correct : 1 Wrong : 0.25

Compensated demand curve includes only the:

Options :

- ☐ Price effect
- ☐ Income effect
- ☒ Substitution effect
- ☐ Both price and income effect

Question Number : 120 Question Id : 7230531357 Question Type : MCQ Option Shuffling : Yes Display Question Number : Yes  
Single Line Question Option : No Option Orientation : Vertical

Correct : 1 Wrong : 0.25

If income effect is negative and X is an inferior good and Y is a normal good, then the income - consumption curve (ICC) will slope:

Options :

- ☒ Backward bending to the left
- ☐ Slope downwards to the right
- ☐ Constant
- ☐ Straight line

Subject Related

Group Number :	7
Group Id :	72305367
Group Maximum Duration :	0
Group Minimum Duration :	0
Revisit allowed for view? :	No
Revisit allowed for edit? :	No
Break time:	0
Group Marks:	20

Subject Related

Section Id :	72305367
Section Number :	1
Section type :	Online
Mandatory or Optional:	Mandatory
Number of Questions:	20
Number of Questions to be attempted:	20
Section Marks:	20
Display Number Panel:	Yes
Group All Questions:	No

Sub-Section Number:	1
Sub-Section Id:	72305398
Question Shuffling Allowed :	Yes

Question Number : 121 Question Id : 7230531358 Question Type : MCQ Option Shuffling : Yes Display Question Number : Yes  
Single Line Question Option : No Option Orientation : Vertical

Correct : 1 Wrong : 0.25

When labour is on x-axis, the shape of the iso-quant that combines more labour with the same quantity of capital is:

Options :

☒ Horizontal

☐ Vertical

☐ Convex

☐ Concave

Question Number : 122 Question Id : 7230531359 Question Type : MCQ Option Shuffling : Yes Display Question Number : Yes  
Single Line Question Option : No Option Orientation : Vertical

Correct : 1 Wrong : 0.25

The line that joins all the tangency points of iso-quant and iso-cost line is:

Options :

☐ Iso-project curve

- ☐ Production possibility curve
- ☒ Output-factor curve
- ☐ Opportunity cost

Question Number : 123 Question Id : 7230531360 Question Type : MCQ Option Shuffling : Yes Display Question Number : Yes  
Single Line Question Option : No Option Orientation : Vertical

Correct : 1 Wrong : 0.25

Technical substitution measures the degree of substitutability between:

Options :

- ☐ Two goods
- ☐ Two firms
- ☒ Two factors
- ☐ Two individuals

Question Number : 124 Question Id : 7230531361 Question Type : MCQ Option Shuffling : Yes Display Question Number : Yes  
Single Line Question Option : No Option Orientation : Vertical

Correct : 1 Wrong : 0.25

The important property of the Cobb-Douglas production is that the production function is subject to:

Options :

- ☐ Increasing returns to scale
- ☒ Constant returns to scale
- ☐ Decreasing returns to scale
- ☐ Negative returns to scale

Question Number : 125 Question Id : 7230531362 Question Type : MCQ Option Shuffling : Yes Display Question Number : Yes  
Single Line Question Option : No Option Orientation : Vertical

Correct : 1 Wrong : 0.25

Imputed value of an entrepreneur's own resources and services is known as:

Options :

- ☐ Selling cost
- ☐ Opportunity cost



✗ Total cost

✓ Implicit cost

Question Number : 126 Question Id : 7230531363 Question Type : MCQ Option Shuffling : Yes Display Question Number : Yes  
Single Line Question Option : No Option Orientation : Vertical

Correct : 1 Wrong : 0.25

In a competitive factor market, a firm is said to be in equilibrium in the long run when which of the following conditions is satisfied?

Options :

✗  $MRP > MFC$

✗  $MRP = MFC$

✗ MRP curve must cut MFC curve from above

✓ Both  $MRP = MFC$  and MRP curve must cut MFC curve from above

Question Number : 127 Question Id : 7230531364 Question Type : MCQ Option Shuffling : Yes Display Question Number : Yes  
Single Line Question Option : No Option Orientation : Vertical

Correct : 1 Wrong : 0.25

Match the following.

1	Differential rent theory	A	Wickstead
2	Marginal productivity theory	B	Karl Marx
3	Surplus value principle	C	Kalecki
4	Degree of monopoly theory of profit	D	Alfred Marshall
5	Adding-up problem	E	David Ricardo

Options :

✗ 1-D; 2-E; 3-B; 4-C; 5-A

✓ 1-E; 2-D; 3-B; 4-C; 5-A

✗ 1-E; 2-B; 3-A; 4-C; 5-D

✗ 1-D; 2-B; 3-A; 4-E; 5-C

Question Number : 128 Question Id : 7230531365 Question Type : MCQ Option Shuffling : Yes Display Question Number : Yes  
Single Line Question Option : No Option Orientation : Vertical

Correct : 1 Wrong : 0.25

What is the shape of the MFC and AFC if the factor market is monopsony and the product market is perfect competition?

Options :

- ☒ Positively rising from left to right
- ☐ Negatively sloping from left to right
- ☐ Both are same and horizontal
- ☐ An upward sloping where AFC lies above the MFC

Question Number : 129 Question Id : 7230531366 Question Type : MCQ Option Shuffling : Yes Display Question Number : Yes  
Single Line Question Option : No Option Orientation : Vertical

Correct : 1 Wrong : 0.25

Income derived from machines and other appliances made by man during short run is known as:

Options :

- ☐ Profits
- ☐ Interest
- ☐ Rent
- ☒ Quasi-rent

Question Number : 130 Question Id : 7230531367 Question Type : MCQ Option Shuffling : Yes Display Question Number : Yes  
Single Line Question Option : No Option Orientation : Vertical

Correct : 1 Wrong : 0.25

Which factors the modern economist took into consideration to determine interest?

Options :

- ☐ Savings and investment
- ☐ Demand and supply of loanable funds
- ☒ Savings and investment on one hand and liquidity preference and supply of money on another
- ☐ Liquidity preference schedules

Question Number : 131 Question Id : 7230531368 Question Type : MCQ Option Shuffling : Yes Display Question Number : Yes  
Single Line Question Option : No Option Orientation : Vertical

Correct : 1 Wrong : 0.25

Who introduced the concept of externalities to explain welfare?

Options :

- ✗ Hicks
- ✓ Pigou
- ✗ Marshall
- ✗ Pareto

Question Number : 132 Question Id : 7230531369 Question Type : MCQ Option Shuffling : Yes Display Question Number : Yes  
Single Line Question Option : No Option Orientation : Vertical  
Correct : 1 Wrong : 0.25

The concept of social welfare function was first introduced by:

Options :

- ✓ Bergson
- ✗ Hicks and Kaldor
- ✗ Scitovsky
- ✗ Arrow

Question Number : 133 Question Id : 7230531370 Question Type : MCQ Option Shuffling : Yes Display Question Number : Yes  
Single Line Question Option : No Option Orientation : Vertical  
Correct : 1 Wrong : 0.25

Constrained bliss point is the point where the:

Options :

- ✗ Indifference curve is tangent to the budget line
- ✗ Iso-quant is tangent to the iso-cost curve
- ✓ Social indifference curve of the society is tangent to the grand utility possibility curve
- ✗ There is equality between iso-cost curve and iso-project curve

Question Number : 134 Question Id : 7230531371 Question Type : MCQ Option Shuffling : Yes Display Question Number : Yes  
Single Line Question Option : No Option Orientation : Vertical  
Correct : 1 Wrong : 0.25

Match the following.

1	Increasing returns to scale	A	Long-run period
2	All inputs are changeable	B	Existence of external economies
3	Decreasing returns to scale	C	Short-run period
4	Labour is the only variable input	D	Existence of external diseconomies

Options :

✓ 1-B; 2-A; 3-D; 4-C

✗ 1-B; 2-D; 3-C; 4-A

✗ 1-A; 2-D; 3-B; 4-C

✗ 1-A; 2-B; 3-D; 4-C

Question Number : 135 Question Id : 7230531372 Question Type : MCQ Option Shuffling : Yes Display Question Number : Yes  
Single Line Question Option : No Option Orientation : Vertical

Correct : 1 Wrong : 0.25

Match the following.

1	Marginal products of factors of production becomes zero	A	Budget line
2	Represents the prices of the goods and consumer's money income	B	Price consumption curve
3	Locus of different equilibrium points of a consumer at different prices, given the money income	C	Iso-cost curve
4	Combinations of two factors that the firm can buy with a given outlay	D	Ridgelines

Options :

✗ 1-C; 2-D; 3-A; 4-B

✗ 1-A; 2-D; 3-C; 4-B

✗ 1-D; 2-C; 3-B; 4-A



✓ 1-D; 2-A; 3-B; 4-C

Question Number : 136 Question Id : 7230531373 Question Type : MCQ Option Shuffling : Yes Display Question Number : Yes  
Single Line Question Option : No Option Orientation : Vertical

Correct : 1 Wrong : 0.25

The price of a perishable commodity is influenced by:

Options :

✗ Changes in supply

✗ No change in supply

✓ Changes in demand

✗ Changes in the prices of substitutes

Question Number : 137 Question Id : 7230531374 Question Type : MCQ Option Shuffling : Yes Display Question Number : Yes  
Single Line Question Option : No Option Orientation : Vertical

Correct : 1 Wrong : 0.25

Which among following is not correct assumption of perfect competition?

Options :

✗ Perfect market knowledge

✗ Absence of selling costs

✓ Differentiated product

✗ Perfect mobilisation of inputs

Question Number : 138 Question Id : 7230531375 Question Type : MCQ Option Shuffling : Yes Display Question Number : Yes  
Single Line Question Option : No Option Orientation : Vertical

Correct : 1 Wrong : 0.25

The demand curve (Average Revenue Curve) under perfect competition is:

Options :

✗ Perfect inelastic

✗ Relative elastic

✓ Perfect elastic

✗ Relative inelastic



Question Number : 139 Question Id : 7230531376 Question Type : MCQ Option Shuffling : Yes Display Question Number : Yes  
Single Line Question Option : No Option Orientation : Vertical  
Correct : 1 Wrong : 0.25

Under which condition price discrimination is profitable?

Options :

✖ Same elasticities of demand

✔ Different elasticities of demand

✖ Perfect elastic demand

✖ Relative inelastic demand

Question Number : 140 Question Id : 7230531377 Question Type : MCQ Option Shuffling : Yes Display Question Number : Yes  
Single Line Question Option : No Option Orientation : Vertical  
Correct : 1 Wrong : 0.25

If the monopolist sells his product at a higher price in internal market and at a lower price in external market, it is known as:

Options :

✔ Dumping

✖ Tariff

✖ Countervailing duty

✖ Export duty

Subject Related

Group Number :	8
Group Id :	72305368
Group Maximum Duration :	0
Group Minimum Duration :	0
Revisit allowed for view? :	No
Revisit allowed for edit? :	No
Break time:	0
Group Marks:	20

Subject Related

Section Id :	72305368
Section Number :	1
Section type :	Online
Mandatory or Optional:	Mandatory

Number of Questions: 20  
Number of Questions to be attempted: 20  
Section Marks: 20  
Display Number Panel: Yes  
Group All Questions: No

Sub-Section Number: 1  
Sub-Section Id: 72305399  
Question Shuffling Allowed : Yes

Question Number : 141 Question Id : 7230531378 Question Type : MCQ Option Shuffling : Yes Display Question Number : Yes  
Single Line Question Option : No Option Orientation : Vertical

Correct : 1 Wrong : 0.25

The degrees of price discrimination has been distinguished by:

Options :

✗ Chamberlin

✗ Marshall

✓ Pigou

✗ Cournot

Question Number : 142 Question Id : 7230531379 Question Type : MCQ Option Shuffling : Yes Display Question Number : Yes  
Single Line Question Option : No Option Orientation : Vertical

Correct : 1 Wrong : 0.25

A. P. Lerner's index of monopoly power is given by:

Options :

✗  $\frac{MC - P}{MC}$

✗  $\frac{MC - P}{AC}$

✗  $\frac{P - MC}{MC}$

✓  $\frac{P - MC}{P}$

Question Number : 143 Question Id : 7230531380 Question Type : MCQ Option Shuffling : Yes Display Question Number : Yes  
Single Line Question Option : No Option Orientation : Vertical

Correct : 1 Wrong : 0.25

Cross elasticity of demand for product of pure monopoly is:

Options :

✗  $E_c = 1$

✗  $E_c > 1$

✓  $E_c = 0$

✗  $E_c < 1$

Question Number : 144 Question Id : 7230531381 Question Type : MCQ Option Shuffling : Yes Display Question Number : Yes  
Single Line Question Option : No Option Orientation : Vertical

Correct : 1 Wrong : 0.25

The Total cost (TC) in monopolistic competition is a sum of:

Options :

✗ Total Fixed Cost and Total Variable Cost

✓ Production Cost and Selling Cost

✗ Average Fixed Cost and Quantity of Output

✗ Total Fixed Cost and Marginal Cost

Question Number : 145 Question Id : 7230531382 Question Type : MCQ Option Shuffling : Yes Display Question Number : Yes  
Single Line Question Option : No Option Orientation : Vertical

Correct : 1 Wrong : 0.25

Which is created under monopolistic competition due to entry of too many firms in long run and absence of price competition each firm produces much less than its full capacity?

Options :

✗ Optimum output

✗ Optimum firm size

✓ Excess capacity

✗ Excess output

Question Number : 146 Question Id : 7230531383 Question Type : MCQ Option Shuffling : Yes Display Question Number : Yes  
Single Line Question Option : No Option Orientation : Vertical

Correct : 1 Wrong : 0.25

In which model each producer believes that his rival will keep the prices of his products constant at the present level, whatever price the producer might himself set?

Options :

- ✔ Bertrand model
- ✘ Cournot’s model
- ✘ Edgeworth model
- ✘ Chamberlin’s model

Question Number : 147 Question Id : 7230531384 Question Type : MCQ Option Shuffling : Yes Display Question Number : Yes  
Single Line Question Option : No Option Orientation : Vertical  
Correct : 1 Wrong : 0.25  
Match the following.

1	Kinked demand curve	A	Monopolistic competition
2	Monopolistic competition	B	Oligopoly
3	Price leadership	C	Price rigidity
4	Group equilibrium	D	Excess capacity

- Options :
- ✔ 1-C; 2-D; 3-B; 4-A
  - ✘ 1-A; 2-D; 3-B; 4-C
  - ✘ 1-B; 2-D; 3-A; 4-C
  - ✘ 1-B; 2-D; 3-C; 4-A

Question Number : 148 Question Id : 7230531385 Question Type : MCQ Option Shuffling : Yes Display Question Number : Yes  
Single Line Question Option : No Option Orientation : Vertical  
Correct : 1 Wrong : 0.25

Marginal revenue of a firm under perfect competition is:

- Options :
- ✘ Less than the price
  - ✘ Greater than the price
  - ✔ Equal to the price
  - ✘ Greater than marginal cost

Question Number : 149 Question Id : 7230531386 Question Type : MCQ Option Shuffling : Yes Display Question Number : Yes  
Single Line Question Option : No Option Orientation : Vertical

Correct : 1 Wrong : 0.25

The industry demand curve and the average revenue curve are same in the case of:

Options :

- ☐ Monopolistic competition
- ☐ Duopoly
- ☐ Oligopoly
- ☒ Monopoly

Question Number : 150 Question Id : 7230531387 Question Type : MCQ Option Shuffling : Yes Display Question Number : Yes  
Single Line Question Option : No Option Orientation : Vertical

Correct : 1 Wrong : 0.25

Income elasticity of a luxury good is:

Options :

- ☐ Equal to one
- ☒ Greater than one
- ☐ Less than one
- ☐ Zero

Question Number : 151 Question Id : 7230531388 Question Type : MCQ Option Shuffling : Yes Display Question Number : Yes  
Single Line Question Option : No Option Orientation : Vertical

Correct : 1 Wrong : 0.25

In a straight line demand curve meeting the two axis, the marginal revenue (MR) at the mid-point of the curve is:

Options :

- ☐ One
- ☒ Zero
- ☐ Greater than one
- ☐ Less than one

Question Number : 152 Question Id : 7230531389 Question Type : MCQ Option Shuffling : Yes Display Question Number : Yes  
Single Line Question Option : No Option Orientation : Vertical

Correct : 1 Wrong : 0.25

The best indicator of economic development is:



Options :

- ☐ Real national income
- ☒ Per capita real national income
- ☐ National income at factor cost
- ☐ GNP at current prices

Question Number : 153 Question Id : 7230531390 Question Type : MCQ Option Shuffling : Yes Display Question Number : Yes  
Single Line Question Option : No Option Orientation : Vertical

Correct : 1 Wrong : 0.25

GDP at market price exceeds GDP at factor cost by the amount of revenue raised through:

Options :

- ☐ Income tax
- ☐ Sales tax
- ☐ Direct taxes
- ☒ Indirect taxes

Question Number : 154 Question Id : 7230531391 Question Type : MCQ Option Shuffling : Yes Display Question Number : Yes  
Single Line Question Option : No Option Orientation : Vertical

Correct : 1 Wrong : 0.25

Wages and salaries + dividends paid at home + factor income received from abroad + transfers from government – personal income tax =

Options :

- ☐ GDP
- ☐ National income
- ☒ Personal disposable income
- ☐ Per capita income

Question Number : 155 Question Id : 7230531392 Question Type : MCQ Option Shuffling : Yes Display Question Number : Yes  
Single Line Question Option : No Option Orientation : Vertical

Correct : 1 Wrong : 0.25

Which of the following does not form a part of someone's personal income?

Options :

- ☐ Personal savings
- ☐ Transfer payments
- ☒ Undistributed corporate profits
- ☐ Personal taxes

Question Number : 156 Question Id : 7230531393 Question Type : MCQ Option Shuffling : Yes Display Question Number : Yes  
Single Line Question Option : No Option Orientation : Vertical  
Correct : 1 Wrong : 0.25

The slope of consumption function represents:

Options :

- ☐ Marginal propensity to save
- ☐ Average propensity to consume
- ☐ Average propensity to save
- ☒ Marginal propensity to consume

Question Number : 157 Question Id : 7230531394 Question Type : MCQ Option Shuffling : Yes Display Question Number : Yes  
Single Line Question Option : No Option Orientation : Vertical  
Correct : 1 Wrong : 0.25

At zero level of income, average propensity to consume is:

Options :

- ☒ Infinite
- ☐ Zero
- ☐ Between 0 and 1
- ☐ Between 0 and  $\infty$

Question Number : 158 Question Id : 7230531395 Question Type : MCQ Option Shuffling : Yes Display Question Number : Yes  
Single Line Question Option : No Option Orientation : Vertical  
Correct : 1 Wrong : 0.25

An expansionary monetary and fiscal policy shifts:

Options :

- ☐ Aggregate supply curve to the right

- ✘ Aggregate supply curve to the left
- ✔ Aggregate demand curve to the right
- ✘ Aggregate demand curve to the left

Question Number : 159 Question Id : 7230531396 Question Type : MCQ Option Shuffling : Yes Display Question Number : Yes  
Single Line Question Option : No Option Orientation : Vertical  
Correct : 1 Wrong : 0.25

Payments accruing to factors of production is equal to:

Options :

- ✘ Transfer payments
- ✘ Personal income
- ✔ Net value added
- ✘ Corporate profits

Question Number : 160 Question Id : 7230531397 Question Type : MCQ Option Shuffling : Yes Display Question Number : Yes  
Single Line Question Option : No Option Orientation : Vertical  
Correct : 1 Wrong : 0.25

If GDP (at market prices) = ₹ 500 crore, depreciation = ₹ 50 crore, indirect taxes = ₹ 30 crore, subsidies = ₹ 10 crore, net factor income from abroad = ₹ 20 crore, then national income is:

Options :

- ✘ ₹ 540 crore
- ✔ ₹ 450 crore
- ✘ ₹ 500 crore
- ✘ ₹ 570 crore

Subject Related

Group Number :	9
Group Id :	72305369
Group Maximum Duration :	0
Group Minimum Duration :	0
Revisit allowed for view? :	No
Revisit allowed for edit? :	No
Break time:	0
Group Marks:	20

	Subject Related
Section Id :	72305369
Section Number :	1
Section type :	Online
Mandatory or Optional:	Mandatory
Number of Questions:	20
Number of Questions to be attempted:	20
Section Marks:	20
Display Number Panel:	Yes
Group All Questions:	No

Sub-Section Number:	1
Sub-Section Id:	723053100
Question Shuffling Allowed :	Yes

Question Number : 161 Question Id : 7230531398 Question Type : MCQ Option Shuffling : Yes Display Question Number : Yes  
Single Line Question Option : No Option Orientation : Vertical  
Correct : 1 Wrong : 0.25

Which is the flow variable among the following?

Options :

- ☐ Unemployment
- ☐ Foreign exchange reserves
- ☒ Consumption S
- ☐ Money supply

Question Number : 162 Question Id : 7230531399 Question Type : MCQ Option Shuffling : Yes Display Question Number : Yes  
Single Line Question Option : No Option Orientation : Vertical  
Correct : 1 Wrong : 0.25

If the net national product is increased by 8.8%, the population is increased by 2.0%, then the per capita income will increase by:

Options :

- ☐ 10.8%
- ☐ 4.4%
- ☒ 6.8%
- ☐ 16.8%

Question Number : 163 Question Id : 7230531400 Question Type : MCQ Option Shuffling : Yes Display Question Number : Yes  
Single Line Question Option : No Option Orientation : Vertical  
Correct : 1 Wrong : 0.25

If consumption function curve intersects aggregate expenditure curve then:

Options :

- ☐ Savings equals to one
- ☒ Savings equals to zero
- ☐ Savings equal to investment
- ☐ Investment is equal to zero

Question Number : 164 Question Id : 7230531401 Question Type : MCQ Option Shuffling : Yes Display Question Number : Yes  
Single Line Question Option : No Option Orientation : Vertical  
Correct : 1 Wrong : 0.25

Identify which is not the subject of macroeconomics among the following.

Options :

- ☐ Theory of economic development
- ☐ Theory of employment
- ☐ Theory of general prices
- ☒ Theory of economic welfare

Question Number : 165 Question Id : 7230531402 Question Type : MCQ Option Shuffling : Yes Display Question Number : Yes  
Single Line Question Option : No Option Orientation : Vertical  
Correct : 1 Wrong : 0.25

Which among the following relates to macroeconomics?

Options :

- ☐ Output of coal industry
- ☐ Revenue from cement industry
- ☐ Capita-output ratio in the steel industry
- ☒ Disposable income of a country

Question Number : 166 Question Id : 7230531403 Question Type : MCQ Option Shuffling : Yes Display Question Number : Yes  
Single Line Question Option : No Option Orientation : Vertical  
Correct : 1 Wrong : 0.25



In evolving a detailed system of national accounts, who made a valuable contribution?

Options :

- ☐ AC Pigou
- ☐ A Marshall
- ☒ Richard Stone
- ☐ JM Keynes

Question Number : 167 Question Id : 7230531404 Question Type : MCQ Option Shuffling : Yes Display Question Number : Yes  
Single Line Question Option : No Option Orientation : Vertical

Correct : 1 Wrong : 0.25

International current account shows:

Options :

- ☐ Total exports
- ☐ Total imports
- ☒ Inflows and outflows of goods and services
- ☐ Transfers to other countries

Question Number : 168 Question Id : 7230531405 Question Type : MCQ Option Shuffling : Yes Display Question Number : Yes  
Single Line Question Option : No Option Orientation : Vertical

Correct : 1 Wrong : 0.25

“Ratchet effect” is the situation where households find:

Options :

- ☐ Difficult to adjust to both raising income as well as falling income
- ☒ Easy to adjust to rising income than falling income
- ☐ Difficult to adjust to rising incomes than falling income
- ☐ Easy to adjust to falling income than rising income

Question Number : 169 Question Id : 7230531406 Question Type : MCQ Option Shuffling : Yes Display Question Number : Yes  
Single Line Question Option : No Option Orientation : Vertical

Correct : 1 Wrong : 0.25

If the marginal propensity to import increases:

Options :

- ☒ The value of multiplier decreases
- ☐ No effect on multiplier value
- ☐ The value of multiplier increases
- ☐ The marginal propensity to invest increases

Question Number : 170 Question Id : 7230531407 Question Type : MCQ Option Shuffling : Yes Display Question Number : Yes  
Single Line Question Option : No Option Orientation : Vertical

Correct : 1 Wrong : 0.25

Increase in the value of multiplier will not depend on:

Options :

- ☒ Increase in marginal propensity to save
- ☐ Decrease in tax rate
- ☐ Increase in marginal propensity to consume
- ☐ Increase in average propensity to consume

Question Number : 171 Question Id : 7230531408 Question Type : MCQ Option Shuffling : Yes Display Question Number : Yes  
Single Line Question Option : No Option Orientation : Vertical

Correct : 1 Wrong : 0.25

The increase in autonomous investment leads to:

Options :

- ☐ Shifting the LM curve to the left
- ☒ Shifting the IS curve to the right
- ☐ Shifting the IS curve to the left
- ☐ Shifting the LM curve to the right

Question Number : 172 Question Id : 7230531409 Question Type : MCQ Option Shuffling : Yes Display Question Number : Yes  
Single Line Question Option : No Option Orientation : Vertical

Correct : 1 Wrong : 0.25

Which of the following is not a classical assumption?

Options :

- ☐ Existence of full employment

- ✘ Perfect competition
- ✘ Laissez-faire
- ✔ Rigid wages and prices

Question Number : 173 Question Id : 7230531410 Question Type : MCQ Option Shuffling : Yes Display Question Number : Yes  
Single Line Question Option : No Option Orientation : Vertical

Correct : 1 Wrong : 0.25

The vertical difference between aggregate demand curve and consumption function curve is equal to:

Options :

- ✘ Autonomous consumption
- ✔ Autonomous investment
- ✘ Induced investment
- ✘ Induced consumption

Question Number : 174 Question Id : 7230531411 Question Type : MCQ Option Shuffling : Yes Display Question Number : Yes  
Single Line Question Option : No Option Orientation : Vertical

Correct : 1 Wrong : 0.25

Keynesian transactionary demand for money is:

Options :

- ✘ Interest elastic and income inelastic
- ✘ Interest inelastic and income inelastic
- ✘ Interest elastic and income elastic
- ✔ Interest inelastic and income elastic

Question Number : 175 Question Id : 7230531412 Question Type : MCQ Option Shuffling : Yes Display Question Number : Yes  
Single Line Question Option : No Option Orientation : Vertical

Correct : 1 Wrong : 0.25

At the minimum rate of interest, the shape of liquidity preference curve:

Options :

- ✘ is inelastic
- ✔ is horizontal

✗ is vertical

✗ Intersects on axis

Question Number : 176 Question Id : 7230531413 Question Type : MCQ Option Shuffling : Yes Display Question Number : Yes  
Single Line Question Option : No Option Orientation : Vertical

Correct : 1 Wrong : 0.25

Investment is determined by:

Options :

✓ Marginal efficiency of capital and rate of interest

✗ Marginal efficiency of capital and rate of consumption

✗ Marginal propensity to consume and rate of consumption

✗ Marginal propensity to import and rate of interest

Question Number : 177 Question Id : 7230531414 Question Type : MCQ Option Shuffling : Yes Display Question Number : Yes  
Single Line Question Option : No Option Orientation : Vertical

Correct : 1 Wrong : 0.25

Keynesian theory of consumption is based on:

Options :

✗ Relative income hypothesis

✗ Past income hypothesis

✓ Absolute income hypothesis

✗ Permanent income hypothesis

Question Number : 178 Question Id : 7230531415 Question Type : MCQ Option Shuffling : Yes Display Question Number : Yes  
Single Line Question Option : No Option Orientation : Vertical

Correct : 1 Wrong : 0.25

The flexible acceleration theory of investment was developed by:

Options :

✗ J.B. Clark

✗ Nicholas Kaldor

✗ J. R. Hicks



✓ H.B. Chenery

Question Number : 179 Question Id : 7230531416 Question Type : MCQ Option Shuffling : Yes Display Question Number : Yes  
Single Line Question Option : No Option Orientation : Vertical

Correct : 1 Wrong : 0.25

If MPC is 0.2, then the value of the multiplier is:

Options :

✗ 0.8

✗ 1.0

✓ 1.25

✗ 5.0

Question Number : 180 Question Id : 7230531417 Question Type : MCQ Option Shuffling : Yes Display Question Number : Yes  
Single Line Question Option : No Option Orientation : Vertical

Correct : 1 Wrong : 0.25

AW Phillips curve shows the relationship between:

Options :

✓ Money wage rate and unemployment

✗ Real wage rate and unemployment

✗ Real wage rate and inflation

✗ Deflation and unemployment

Subject Related

Group Number :	10
Group Id :	72305370
Group Maximum Duration :	0
Group Minimum Duration :	0
Revisit allowed for view? :	No
Revisit allowed for edit? :	No
Break time:	0
Group Marks:	20

Subject Related

Section Id :	72305370
Section Number :	1



Section type :	Online
Mandatory or Optional:	Mandatory
Number of Questions:	20
Number of Questions to be attempted:	20
Section Marks:	20
Display Number Panel:	Yes
Group All Questions:	No

Sub-Section Number:	1
Sub-Section Id:	723053101
Question Shuffling Allowed :	Yes

Question Number : 181 Question Id : 7230531418 Question Type : MCQ Option Shuffling : Yes Display Question Number : Yes  
Single Line Question Option : No Option Orientation : Vertical  
Correct : 1 Wrong : 0.25

The difference between  $M_3$  and  $M_1$  is:

Options :

- ✗ Post office saving deposits
- ✓ Term deposits
- ✗ Demand deposits
- ✗  $M_2$

Question Number : 182 Question Id : 7230531419 Question Type : MCQ Option Shuffling : Yes Display Question Number : Yes  
Single Line Question Option : No Option Orientation : Vertical  
Correct : 1 Wrong : 0.25

The High power money can be calculated with:

Options :

- ✗  $H = \frac{C_r - RR_r + ER_r}{1 + C_r} \times M$
- ✗  $H = \frac{1 + C_r}{C_r + RR_r + ER_r} \times M$
- ✓  $H = \frac{C_r + RR_r + ER_r}{1 + C_r} \times M$
- ✗  $H = \frac{C_r + RR_r - ER_r}{1 + C_r} \times M$

Question Number : 183 Question Id : 7230531420 Question Type : MCQ Option Shuffling : Yes Display Question Number : Yes  
Single Line Question Option : No Option Orientation : Vertical

Correct : 1 Wrong : 0.25

The formula for money multiplier  $m$  is:

Options :

✗  $m = \frac{1 + C_r}{C_r + RR_r + ER_r} - H$

✗  $m = \frac{1 + C_r}{C_r + RR_r + ER_r} + H$

✗  $m = C_r + RR_r + ER_r$

✓  $m = \frac{1 + C_r}{C_r + RR_r + ER_r}$

Question Number : 184 Question Id : 7230531421 Question Type : MCQ Option Shuffling : Yes Display Question Number : Yes  
Single Line Question Option : No Option Orientation : Vertical

Correct : 1 Wrong : 0.25

The relationship between required reserve ratio and money supply is:

Options :

✓ Negative

✗ Positive

✗ Either negative or positive

✗ Unrelated

Question Number : 185 Question Id : 7230531422 Question Type : MCQ Option Shuffling : Yes Display Question Number : Yes  
Single Line Question Option : No Option Orientation : Vertical

Correct : 1 Wrong : 0.25

Government sells bonds and securities to the people during:

Options :

✗ Deflation

✗ Recession

✓ Inflation

✗ Stagflation

Question Number : 186 Question Id : 7230531423 Question Type : MCQ Option Shuffling : Yes Display Question Number : Yes  
Single Line Question Option : No Option Orientation : Vertical

Correct : 1 Wrong : 0.25

Which one of the following is not a function of the RBI?

Options :

- ☐ Banker to government
- ☐ Issue of notes
- ☐ Custodian of cash reserves of banks
- ☒ Accepting the deposits from public

Question Number : 187 Question Id : 7230531424 Question Type : MCQ Option Shuffling : Yes Display Question Number : Yes  
Single Line Question Option : No Option Orientation : Vertical

Correct : 1 Wrong : 0.25

Which of the following is not a quantitative measure of RBI?

Options :

- ☐ Bank rate
- ☒ Variable interest rates
- ☐ Variable reserve requirements
- ☐ Open market operations

Question Number : 188 Question Id : 7230531425 Question Type : MCQ Option Shuffling : Yes Display Question Number : Yes  
Single Line Question Option : No Option Orientation : Vertical

Correct : 1 Wrong : 0.25

“Taxation is not just a vehicle for raising state revenue, it is critically important for economic and political development.” This was opined by:

Options :

- ☒ Besley and Pearson
- ☐ Adam Smith and Dalton
- ☐ J. B. Say and A. C. Pigou
- ☐ Shirras and Bastable

Question Number : 189 Question Id : 7230531426 Question Type : MCQ Option Shuffling : Yes Display Question Number : Yes  
Single Line Question Option : No Option Orientation : Vertical

Correct : 1 Wrong : 0.25

The amount of revenue deficit of the Central Government for the period April to November during the year 2017-18:

Options :

✗ ₹ 3.45 lakh Crore

✓ ₹ 4.90 lakh Crore

✗ ₹ 5.48 lakh Crore

✗ ₹ 4.58 lakh Crore

Question Number : 190 Question Id : 7230531427 Question Type : MCQ Option Shuffling : Yes Display Question Number : Yes  
Single Line Question Option : No Option Orientation : Vertical

Correct : 1 Wrong : 0.25

To which parameter was the focus laid by Government of India to reset India's fiscal policy as was recommended by N. K. Singh panel?

Options :

✓ Debt-to-GDP Ratio

✗ Expenditure-to-GDP Ratio

✗ Borrowings-to-GDP Ratio

✗ Tax Revenue-to-GDP Ratio

Question Number : 191 Question Id : 7230531428 Question Type : MCQ Option Shuffling : Yes Display Question Number : Yes  
Single Line Question Option : No Option Orientation : Vertical

Correct : 1 Wrong : 0.25

Which type of deficit refers to the difference between revenue deficit and Grants for creation of capital assets?

Options :

✗ Revenue Deficit

✓ Effective Revenue Deficit

✗ Fiscal Deficit

✗ Primary Deficit

Question Number : 192 Question Id : 7230531429 Question Type : MCQ Option Shuffling : Yes Display Question Number : Yes  
Single Line Question Option : No Option Orientation : Vertical

Correct : 1 Wrong : 0.25

In which type of budget, outlays, outputs and outcomes in measurable terms are presented to the Parliament?

Options :

☒ Outcome Budget

☐ Balanced Budget

☐ Deficit Budget

☐ Surplus Budget

Question Number : 193 Question Id : 7230531430 Question Type : MCQ Option Shuffling : Yes Display Question Number : Yes  
Single Line Question Option : No Option Orientation : Vertical

Correct : 1 Wrong : 0.25

The percentage of Fiscal Deficit was revised for the financial year ending 2018 as:

Options :

☐ 3.3% of the GDP

☐ 3.0% of the GDP

☒ 3.5% of the GDP

☐ 3.2% m of the GDP

Question Number : 194 Question Id : 7230531431 Question Type : MCQ Option Shuffling : Yes Display Question Number : Yes  
Single Line Question Option : No Option Orientation : Vertical

Correct : 1 Wrong : 0.25

Find out which type of deficit is arrived at by deducting interest paid on borrowings from the fiscal deficit.

Options :

☒ Primary deficit

☐ Budget deficit

☐ Revenue deficit

☐ Fiscal deficit

Question Number : 195 Question Id : 7230531432 Question Type : MCQ Option Shuffling : Yes Display Question Number : Yes  
Single Line Question Option : No Option Orientation : Vertical

Correct : 1 Wrong : 0.25

The number of GST registrants in India, as on December 2017, was estimated at:

Options :

☐ 9.0 million



✘ 8.9 million

✔ 9.8 million

✘ 9.1 million

Question Number : 196 Question Id : 7230531433 Question Type : MCQ Option Shuffling : Yes Display Question Number : Yes  
Single Line Question Option : No Option Orientation : Vertical  
Correct : 1 Wrong : 0.25

Which committee recommended the Debt-to-GDP ratio as a medium term anchor for fiscal policy in India?

Options :

✘ Taxation Enquiry Commission 1953-54

✔ FRBM Review Committee 2017

✘ Wanchoo Committee 1970

✘ Rekhi Committee 1993

Question Number : 197 Question Id : 7230531434 Question Type : MCQ Option Shuffling : Yes Display Question Number : Yes  
Single Line Question Option : No Option Orientation : Vertical  
Correct : 1 Wrong : 0.25

Which type of budgeting technique is considered as a powerful tool for achieving gender-mainstreaming in India?

Options :

✘ Outcome Budget

✘ Zero-Based Budgeting

✔ Gender Budgeting

✘ Traditional Budgeting

Question Number : 198 Question Id : 7230531435 Question Type : MCQ Option Shuffling : Yes Display Question Number : Yes  
Single Line Question Option : No Option Orientation : Vertical  
Correct : 1 Wrong : 0.25

The targets of fixed percentages of Debt-to-GDP Ratio for Centre and States as suggested by FRBM Review Committee, 2017 are:

Options :

✘ 30.0% and 20% respectively

✘ 35.0% and 19.0% respectively

✔ 40.0% and 20.0% respectively

✘ 33.0% and 23.0% respectively

Question Number : 199 Question Id : 7230531436 Question Type : MCQ Option Shuffling : Yes Display Question Number : Yes  
Single Line Question Option : No Option Orientation : Vertical

Correct : 1 Wrong : 0.25

The target for the amount of disinvestment for the year 2018-19 was set as:

Options :

✘ ₹ 72,500 Cr

✔ ₹ 80,000 Cr

✘ ₹ 1,00,000 Cr

✘ ₹ 79,000 Cr

Question Number : 200 Question Id : 7230531437 Question Type : MCQ Option Shuffling : Yes Display Question Number : Yes  
Single Line Question Option : No Option Orientation : Vertical

Correct : 1 Wrong : 0.25

A budget based on functions, activities and projects, which was adopted in USA (1949), refers to:

Options :

✔ Performance Budgeting

✘ Programming Budgeting

✘ Zero-Based Budget

✘ Planning Budget

Subject Related

Group Number :	11
Group Id :	72305371
Group Maximum Duration :	0
Group Minimum Duration :	0
Revisit allowed for view? :	No
Revisit allowed for edit? :	No
Break time:	0
Group Marks:	20

	Subject Related
Section Id :	72305371
Section Number :	1
Section type :	Online
Mandatory or Optional:	Mandatory
Number of Questions:	20
Number of Questions to be attempted:	20
Section Marks:	20
Display Number Panel:	Yes
Group All Questions:	No

Sub-Section Number:	1
Sub-Section Id:	723053102
Question Shuffling Allowed :	Yes

Question Number : 201 Question Id : 7230531438 Question Type : MCQ Option Shuffling : Yes Display Question Number : Yes  
Single Line Question Option : No Option Orientation : Vertical  
Correct : 1 Wrong : 0.25

Find out the correct matched pair from the following.

Options :

- ✔ Government Budget - Economic Growth
- ✘ Fiscal Policy - Money Supply
- ✘ Monetary Policy - Public Borrowings
- ✘ Taxes on Personal Income - Indirect Taxes

Question Number : 202 Question Id : 7230531439 Question Type : MCQ Option Shuffling : Yes Display Question Number : Yes  
Single Line Question Option : No Option Orientation : Vertical  
Correct : 1 Wrong : 0.25

Which of the following pairs is not correctly matched?

Options :

- ✘ NABH Nirman - Expansion of Airport Capacity
- ✘ UDAN - Ude Desh Ka Aam Nagarik
- ✘ Budget - a small leather bag
- ✔ Gr. AMs - German Agricultural Markets

Question Number : 203 Question Id : 7230531440 Question Type : MCQ Option Shuffling : Yes Display Question Number : Yes  
Single Line Question Option : No Option Orientation : Vertical  
Correct : 1 Wrong : 0.25

Foreign exchange rate is defined as:

Options :

- ☐ Price of one unit of foreign currency expressed in terms of gold equivalent
- ☒ Price of one unit of foreign currency expressed in terms of domestic currency
- ☐ Number of units of domestic currency exchanged for 100 units of foreign currency
- ☐ Number of units of foreign currency exchanged for 100 units of domestic currency

Question Number : 204 Question Id : 7230531441 Question Type : MCQ Option Shuffling : Yes Display Question Number : Yes  
Single Line Question Option : No Option Orientation : Vertical

Correct : 1 Wrong : 0.25

Under Gold standard, the exchange rates were:

Options :

- ☒ Fixed
- ☐ Flexible
- ☐ Floating
- ☐ Managed

Question Number : 205 Question Id : 7230531442 Question Type : MCQ Option Shuffling : Yes Display Question Number : Yes  
Single Line Question Option : No Option Orientation : Vertical

Correct : 1 Wrong : 0.25

Fixed exchange rates may lead to:

Options :

- ☐ Inflation
- ☐ Depreciation of domestic currency
- ☐ Appreciation of domestic currency
- ☒ Drain on Foreign exchange reserves

Question Number : 206 Question Id : 7230531443 Question Type : MCQ Option Shuffling : Yes Display Question Number : Yes  
Single Line Question Option : No Option Orientation : Vertical

Correct : 1 Wrong : 0.25

The system of flexible exchange rates gives rise to:

Options :



- ✖ Deficit in balance of payments
- ✖ Surplus in balance of payments
- ✔ Equilibrium in balance of payments
- ✖ Depletion of foreign exchange reserves

Question Number : 207 Question Id : 7230531444 Question Type : MCQ Option Shuffling : Yes Display Question Number : Yes  
Single Line Question Option : No Option Orientation : Vertical

Correct : 1 Wrong : 0.25

When the forces of demand for and supply of a currency operate freely to determine its foreign exchange rate, the system is known as:

Options :

- ✖ Fixed Exchange Rate
- ✔ Floating Exchange Rate
- ✖ Managed Flexibility
- ✖ Crawling Peg

Question Number : 208 Question Id : 7230531445 Question Type : MCQ Option Shuffling : Yes Display Question Number : Yes  
Single Line Question Option : No Option Orientation : Vertical

Correct : 1 Wrong : 0.25

An Indian exporter, who was getting ₹ 65 per dollar in 2017, gets ₹ 60 in 2018. The situation is known as:

Options :

- ✔ Appreciation of Rupee
- ✖ Depreciation of Rupee
- ✖ Revaluation of Rupee
- ✖ Depreciation of Dollar

Question Number : 209 Question Id : 7230531446 Question Type : MCQ Option Shuffling : Yes Display Question Number : Yes  
Single Line Question Option : No Option Orientation : Vertical

Correct : 1 Wrong : 0.25

Reduction in the value of rupee against US dollar under Bretton Woods system meant:

Options :



- ☐ Depreciation
- ☒ Devaluation
- ☐ Revaluation
- ☐ Realignment of parity of the currencies

Question Number : 210 Question Id : 7230531447 Question Type : MCQ Option Shuffling : Yes Display Question Number : Yes  
Single Line Question Option : No Option Orientation : Vertical  
Correct : 1 Wrong : 0.25

Importers and exporters can reduce their exchange risk through:

Options :

- ☐ Speculation
- ☐ Spot buying of foreign currency
- ☒ Hedging
- ☐ Arbitrage

Question Number : 211 Question Id : 7230531448 Question Type : MCQ Option Shuffling : Yes Display Question Number : Yes  
Single Line Question Option : No Option Orientation : Vertical  
Correct : 1 Wrong : 0.25

When the demand for Euro rises in India, it leads to:

Options :

- ☒ Depreciation of Rupee
- ☐ Depreciation of Euro
- ☐ Appreciation of Rupee
- ☐ Revaluation of Rupee

Question Number : 212 Question Id : 7230531449 Question Type : MCQ Option Shuffling : Yes Display Question Number : Yes  
Single Line Question Option : No Option Orientation : Vertical  
Correct : 1 Wrong : 0.25

Identify the item that does not fall under current account of the balance of payments.

Options :

- ☐ Shipping Charges

✖ Insurance charges

✖ Interest payments

✔ Capital payments

Question Number : 213 Question Id : 7230531450 Question Type : MCQ Option Shuffling : Yes Display Question Number : Yes  
Single Line Question Option : No Option Orientation : Vertical

Correct : 1 Wrong : 0.25

The problem of Surplus in India's balance of payments could be solved through:

Options :

✖ Depreciation of Rupee

✖ Cutting expenditure on imports

✔ Appreciation of Rupee

✖ Exporting more goods and services

Question Number : 214 Question Id : 7230531451 Question Type : MCQ Option Shuffling : Yes Display Question Number : Yes  
Single Line Question Option : No Option Orientation : Vertical

Correct : 1 Wrong : 0.25

Indemnity payments is a component of:

Options :

✖ Merchandise account

✔ Invisible account

✖ Long term Capital account

✖ Short term capital account

Question Number : 215 Question Id : 7230531452 Question Type : MCQ Option Shuffling : Yes Display Question Number : Yes  
Single Line Question Option : No Option Orientation : Vertical

Correct : 1 Wrong : 0.25

Agreement made at present to get foreign exchange at a future date at a specified exchange rate is known as:

Options :

✖ Spot contract

✖ Arbitrage

✘ Gentlemen agreement

✔ Forward contract

Question Number : 216 Question Id : 7230531453 Question Type : MCQ Option Shuffling : Yes Display Question Number : Yes  
Single Line Question Option : No Option Orientation : Vertical

Correct : 1 Wrong : 0.25

Which of the following is not correct regarding the year of establishment?

Options :

✘ International Bank of Reconstruction and Development (IBRD), 1945

✔ International Financial Corporation (IFC), 1950

✘ International Development Association (IDA), 1960

✘ Multilateral Investment Guarantee Agency (MIGA), 1988

Question Number : 217 Question Id : 7230531454 Question Type : MCQ Option Shuffling : Yes Display Question Number : Yes  
Single Line Question Option : No Option Orientation : Vertical

Correct : 1 Wrong : 0.25

From the following, identify the intra-industry trade model.

Options :

✘ Adam Smith Model

✘ Ricardo's Model

✘ Heckscher-Ohlin Model

✔ Neo-Heckscher-Ohlin Model

Question Number : 218 Question Id : 7230531455 Question Type : MCQ Option Shuffling : Yes Display Question Number : Yes  
Single Line Question Option : No Option Orientation : Vertical

Correct : 1 Wrong : 0.25

Leontief empirically verified the theory of:

Options :

✘ Absolute Cost Difference

✘ Comparative Cost Difference

✔ Factor Proportions

✖ Opportunity Cost

Question Number : 219 Question Id : 7230531456 Question Type : MCQ Option Shuffling : Yes Display Question Number : Yes  
Single Line Question Option : No Option Orientation : Vertical

Correct : 1 Wrong : 0.25

Free Trade redistributes income in favour of:

Options :

✖ Scarce Factor of Production

✔ Abundant Factor of Production

✖ Fixed Factor of Production

✖ Variable Factor of Production

Question Number : 220 Question Id : 7230531457 Question Type : MCQ Option Shuffling : Yes Display Question Number : Yes  
Single Line Question Option : No Option Orientation : Vertical

Correct : 1 Wrong : 0.25

Which of the following is the practical, as against theoretical, importance of free international trade?

Options :

✖ Efficient allocation of world resources

✖ Equalisation of commodity prices across the trading nations

✖ Equalisation of factor prices across the trading nations

✔ Wider choice of commodities for the consumers

Subject Related

Group Number :	12
Group Id :	72305372
Group Maximum Duration :	0
Group Minimum Duration :	0
Revisit allowed for view? :	No
Revisit allowed for edit? :	No
Break time:	0
Group Marks:	20

Subject Related

Section Id :	72305372
Section Number :	1



Section type :	Online
Mandatory or Optional:	Mandatory
Number of Questions:	20
Number of Questions to be attempted:	20
Section Marks:	20
Display Number Panel:	Yes
Group All Questions:	No

Sub-Section Number:	1
Sub-Section Id:	723053103
Question Shuffling Allowed :	Yes

Question Number : 221 Question Id : 7230531458 Question Type : MCQ Option Shuffling : Yes Display Question Number : Yes  
Single Line Question Option : No Option Orientation : Vertical  
Correct : 1 Wrong : 0.25

Tariffs cannot improve the terms of trade of the tariff imposing country when the elasticity of the offer curve of the foreign country is:

Options :

- ✗ Zero
- ✓ Perfectly elastic
- ✗ Perfectly inelastic
- ✗ Equal to unity

Question Number : 222 Question Id : 7230531459 Question Type : MCQ Option Shuffling : Yes Display Question Number : Yes  
Single Line Question Option : No Option Orientation : Vertical  
Correct : 1 Wrong : 0.25

The Gold Tranche of the IMF quota of a country is equal to:

Options :

- ✗ 125 percent of the country's quota
- ✗ 100 percent of the country's quota
- ✗ 50 percent of the country's quota
- ✓ 25 percent of the country's quota

Question Number : 223 Question Id : 7230531460 Question Type : MCQ Option Shuffling : Yes Display Question Number : Yes  
Single Line Question Option : No Option Orientation : Vertical  
Correct : 1 Wrong : 0.25

Who is the Managing Director of IMF as of April 2018?

Options :



✓ Christine Lagarde

✗ Dominique Strauss-Kahn

✗ Rodrigo de Rato y Figaredo

✗ Horst Köhler

Question Number : 224 Question Id : 7230531461 Question Type : MCQ Option Shuffling : Yes Display Question Number : Yes  
Single Line Question Option : No Option Orientation : Vertical

Correct : 1 Wrong : 0.25

Which of the following organisations is called 'Soft lending institution'?

Options :

✗ IBRD

✗ IMF

✓ IDA

✗ BRICS Bank

Question Number : 225 Question Id : 7230531462 Question Type : MCQ Option Shuffling : Yes Display Question Number : Yes  
Single Line Question Option : No Option Orientation : Vertical

Correct : 1 Wrong : 0.25

The Eleventh Ministerial Conference of the WTO was held in:

Options :

✗ Nairobi

✓ Buenos Aires

✗ Doha

✗ Bali

Question Number : 226 Question Id : 7230531463 Question Type : MCQ Option Shuffling : Yes Display Question Number : Yes  
Single Line Question Option : No Option Orientation : Vertical

Correct : 1 Wrong : 0.25

Which of the following is not the function of Stock market?

Options :

✗ Pricing of Securities

- ✘ Ensuring the safety of the transactions
- ✘ Contribution to Economic Growth
- ✔ Spreading the debt culture

Question Number : 227 Question Id : 7230531464 Question Type : MCQ Option Shuffling : Yes Display Question Number : Yes  
Single Line Question Option : No Option Orientation : Vertical

Correct : 1 Wrong : 0.25

SEBI was given Statutory powers in:

Options :

- ✘ April - 1988
- ✘ July - 1982
- ✔ January - 1992
- ✘ April -1990

Question Number : 228 Question Id : 7230531465 Question Type : MCQ Option Shuffling : Yes Display Question Number : Yes  
Single Line Question Option : No Option Orientation : Vertical

Correct : 1 Wrong : 0.25

Bombay Stock Exchange was founded in the year:

Options :

- ✔ July, 1875
- ✘ June, 1870
- ✘ July, 1936
- ✘ June, 1949

Question Number : 229 Question Id : 7230531466 Question Type : MCQ Option Shuffling : Yes Display Question Number : Yes  
Single Line Question Option : No Option Orientation : Vertical

Correct : 1 Wrong : 0.25

Which of the following is not ensured by owning a share of a company?

Options :

- ✘ Ownership of the company

✖ Voting Rights

✖ Dividend

✔ Assured Flow of Income

Question Number : 230 Question Id : 7230531467 Question Type : MCQ Option Shuffling : Yes Display Question Number : Yes  
Single Line Question Option : No Option Orientation : Vertical

Correct : 1 Wrong : 0.25

Who is the current (as of April 2018) Managing Director and CEO of NSE?

Options :

✖ Ashok Chawla

✔ Vikram Limaye

✖ Deepak Mishra

✖ Anurag Patil

Question Number : 231 Question Id : 7230531468 Question Type : MCQ Option Shuffling : Yes Display Question Number : Yes  
Single Line Question Option : No Option Orientation : Vertical

Correct : 1 Wrong : 0.25

Which of the following awards was not obtained by NSE in the year 2015?

Options :

✖ Golden Peacock Innovative Product / Service Award

✔ Global Architecture Excellence Award

✖ Asian Banker Achievement Awards - Stock Exchange of the Year

✖ FOW Awards for Asia - Best New Technology Product - Market Surveillance

Question Number : 232 Question Id : 7230531469 Question Type : MCQ Option Shuffling : Yes Display Question Number : Yes  
Single Line Question Option : No Option Orientation : Vertical

Correct : 1 Wrong : 0.25

Premchand Roychand founded:

Options :

✔ Bombay Stock Exchange

✖ National Stock Exchange

✘ Calcutta Stock Exchange

✘ Chennai Stock Exchange

Question Number : 233 Question Id : 7230531470 Question Type : MCQ Option Shuffling : Yes Display Question Number : Yes  
Single Line Question Option : No Option Orientation : Vertical

Correct : 1 Wrong : 0.25

Which of the following is the regulatory function of SEBI?

Options :

✘ Check on price rigging

✘ Prohibiting insider trading

✔ Conducting inquiries and audit of stock exchanges

✘ Prohibiting fraudulent and unfair trade practices

Question Number : 234 Question Id : 7230531471 Question Type : MCQ Option Shuffling : Yes Display Question Number : Yes  
Single Line Question Option : No Option Orientation : Vertical

Correct : 1 Wrong : 0.25

The relationship between two variables are shown in:

Options :

✘ Histogram

✘ Pictograph

✘ Bar diagram

✔ Line diagram

Question Number : 235 Question Id : 7230531472 Question Type : MCQ Option Shuffling : Yes Display Question Number : Yes  
Single Line Question Option : No Option Orientation : Vertical

Correct : 1 Wrong : 0.25

The most common form of diagrammatic representation of a grouped frequency system is:

Options :

✘ Ogive curve

✔ Histogram

✖ Frequency polygon

✖ Pie diagram

Question Number : 236 Question Id : 7230531473 Question Type : MCQ Option Shuffling : Yes Display Question Number : Yes  
Single Line Question Option : No Option Orientation : Vertical

Correct : 1 Wrong : 0.25

Mode is found graphically by:

Options :

✖ Frequency polygon

✖ Ogive curve

✔ Histogram

✖ Pie diagram

Question Number : 237 Question Id : 7230531474 Question Type : MCQ Option Shuffling : Yes Display Question Number : Yes  
Single Line Question Option : No Option Orientation : Vertical

Correct : 1 Wrong : 0.25

If  $\sum fd^2$  is 362,  $\sum fd$  is +128 and n is 217, then  $\sigma$  is:

Options :

✔ 1.149

✖ 2.0

✖ 1.9

✖ 1.7

Question Number : 238 Question Id : 7230531475 Question Type : MCQ Option Shuffling : Yes Display Question Number : Yes  
Single Line Question Option : No Option Orientation : Vertical

Correct : 1 Wrong : 0.25

The formula for the coefficient of variation is:

Options :

✔  $\frac{\sigma}{\text{Mean}} \times 100$

✖  $\frac{\text{Mean}}{\sigma} \times 100$



☐  $\frac{Z}{\text{Mean}} \times 100$

☐  $\frac{\text{Mean}}{Z} \times 100$

Question Number : 239 Question Id : 7230531476 Question Type : MCQ Option Shuffling : Yes Display Question Number : Yes  
Single Line Question Option : No Option Orientation : Vertical  
Correct : 1 Wrong : 0.25

Gini coefficient is used to measure:

Options :

☐ Poverty Index (PI)

☐ Human Development Index (HDI)

☐ Physical Quality Life Index (PQLI)

☒ Income Inequality

Question Number : 240 Question Id : 7230531477 Question Type : MCQ Option Shuffling : Yes Display Question Number : Yes  
Single Line Question Option : No Option Orientation : Vertical  
Correct : 1 Wrong : 0.25

Mean – Mode/ $\sigma$  is used to calculate:

Options :

☐ Standard Deviation

☐ Karl Pearson's coefficient of correlation

☒ Karl Pearson's coefficient of skewness

☐ Quartile deviation

Subject Related

Group Number :	13
Group Id :	72305373
Group Maximum Duration :	0
Group Minimum Duration :	0
Revisit allowed for view? :	No
Revisit allowed for edit? :	No
Break time:	0
Group Marks:	20

	Subject Related
Section Id :	72305373
Section Number :	1
Section type :	Online
Mandatory or Optional:	Mandatory
Number of Questions:	20
Number of Questions to be attempted:	20
Section Marks:	20
Display Number Panel:	Yes
Group All Questions:	No

Sub-Section Number:	1
Sub-Section Id:	723053104
Question Shuffling Allowed :	Yes

Question Number : 241 Question Id : 7230531478 Question Type : MCQ Option Shuffling : Yes Display Question Number : Yes  
Single Line Question Option : No Option Orientation : Vertical  
Correct : 1 Wrong : 0.25

The sum of squares of differences of ranks, given by the judges A and B, for 8 students, is 21. The value of rank correlation coefficient is:

Options :

✖ 0.7

✖ 0.65

✔ 0.75

✖ 0.8

Question Number : 242 Question Id : 7230531479 Question Type : MCQ Option Shuffling : Yes Display Question Number : Yes  
Single Line Question Option : No Option Orientation : Vertical  
Correct : 1 Wrong : 0.25

The quartile deviation of 12, 7, 15, 10, 16, 17 and 25 is:

Options :

✖ 4.5

✔ 3.5

✖ 9

✖ 5.5

Question Number : 243 Question Id : 7230531480 Question Type : MCQ Option Shuffling : Yes Display Question Number : Yes  
Single Line Question Option : No Option Orientation : Vertical  
Correct : 1 Wrong : 0.25

The land tenure system introduced by Sir Thomas Munro was introduced:

Options :

- ☐ Zamindari System
- ☒ Ryotwari System
- ☐ Mahalwari System
- ☐ Miras System

Question Number : 244 Question Id : 7230531481 Question Type : MCQ Option Shuffling : Yes Display Question Number : Yes  
Single Line Question Option : No Option Orientation : Vertical  
Correct : 1 Wrong : 0.25

The classical economist who worked for the British East India company in 1857 was:

Options :

- ☒ John Stuart Mill
- ☐ Adam Smith
- ☐ David Ricardo
- ☐ TR Malthus

Question Number : 245 Question Id : 7230531482 Question Type : MCQ Option Shuffling : Yes Display Question Number : Yes  
Single Line Question Option : No Option Orientation : Vertical  
Correct : 1 Wrong : 0.25

The cultivation of which commercial crop led to 'Uprising' among the farmers during the British rule?

Options :

- ☐ Cotton
- ☐ Jute
- ☒ Indigo
- ☐ Tobacco

Question Number : 246 Question Id : 7230531483 Question Type : MCQ Option Shuffling : Yes Display Question Number : Yes  
Single Line Question Option : No Option Orientation : Vertical  
Correct : 1 Wrong : 0.25

Which of the following was not the goal of the First Ten Five Year Plans in India?

Options :

- ☐ Increasing the National Income

✓ Inclusive Growth

✗ Socialistic Pattern of Society

✗ Balanced Regional Development

Question Number : 247 Question Id : 7230531484 Question Type : MCQ Option Shuffling : Yes Display Question Number : Yes  
Single Line Question Option : No Option Orientation : Vertical

Correct : 1 Wrong : 0.25

'Removal of poverty' was the objective of which five year plan?

Options :

✗ Third Five Year Plan

✗ Fourth Five year Plan

✓ Fifth Five Year Plan

✗ Sixth Five Year Plan

Question Number : 248 Question Id : 7230531485 Question Type : MCQ Option Shuffling : Yes Display Question Number : Yes  
Single Line Question Option : No Option Orientation : Vertical

Correct : 1 Wrong : 0.25

The Fifth Five year Plan was prepared and launched by:

Options :

✗ MN Roy

✗ P R Brahmananda

✗ S Chakraborty

✓ D P Dhar

Question Number : 249 Question Id : 7230531486 Question Type : MCQ Option Shuffling : Yes Display Question Number : Yes  
Single Line Question Option : No Option Orientation : Vertical

Correct : 1 Wrong : 0.25

Which sector was given 'Commanding Heights' during the Second Five Year Plan?

Options :

✗ Cooperative Sector

✗ Private Sector

✓ Public Sector

✗ Joint Sector

Question Number : 250 Question Id : 7230531487 Question Type : MCQ Option Shuffling : Yes Display Question Number : Yes  
Single Line Question Option : No Option Orientation : Vertical

Correct : 1 Wrong : 0.25

Which of the following was not the problem of 'Heavy Industry First' model of the Indian Planning?

Options :

✗ Rising unemployment

✗ Widening regional inequalities

✗ Growing poverty

✓ Strengthening forward and backward linkages

Question Number : 251 Question Id : 7230531488 Question Type : MCQ Option Shuffling : Yes Display Question Number : Yes  
Single Line Question Option : No Option Orientation : Vertical

Correct : 1 Wrong : 0.25

Vakil and Brahmananda attributed the existence of mass poverty in India to the shortages of:

Options :

✗ Raw materials

✗ Intermediate goods

✓ Wage goods

✗ Capital goods

Question Number : 252 Question Id : 7230531489 Question Type : MCQ Option Shuffling : Yes Display Question Number : Yes  
Single Line Question Option : No Option Orientation : Vertical

Correct : 1 Wrong : 0.25

Which of the following was not the priority of the First Five Year Plan?

Options :

✗ Rehabilitation of the refugees

✗ Correction of the disequilibrium in the economy caused by the partition of the country

✗ Rapid agricultural development to achieve self-sufficiency in food grains



✓ Accelerated development of the industrial sector

Question Number : 253 Question Id : 7230531490 Question Type : MCQ Option Shuffling : Yes Display Question Number : Yes  
Single Line Question Option : No Option Orientation : Vertical

Correct : 1 Wrong : 0.25

The actual public sector outlay during the First Five Year Plan was:

Options :

✗ ₹ 1,450 crore

✗ ₹ 1,650 crore

✓ ₹ 1,960 crore

✗ ₹ 4,600 crore

Question Number : 254 Question Id : 7230531491 Question Type : MCQ Option Shuffling : Yes Display Question Number : Yes  
Single Line Question Option : No Option Orientation : Vertical

Correct : 1 Wrong : 0.25

Which of the following was not the reason for the introduction of New Economic Reforms in India in 1991?

Options :

✗ Rising average trade deficit

✓ Rising receipts on invisible account

✗ Fall in the foreign exchange reserves

✗ Fall in India's credit rating by the international agencies

Question Number : 255 Question Id : 7230531492 Question Type : MCQ Option Shuffling : Yes Display Question Number : Yes  
Single Line Question Option : No Option Orientation : Vertical

Correct : 1 Wrong : 0.25

As a part of the new economic reforms in 1997, the statutory liquidity ratio (SLR) was brought down to:

Options :

✗ 8.0 percent

✗ 11.0 percent

✓ 25.0 percent

✗ 20 percent

Question Number : 256 Question Id : 7230531493 Question Type : MCQ Option Shuffling : Yes Display Question Number : Yes  
Single Line Question Option : No Option Orientation : Vertical

Correct : 1 Wrong : 0.25

The World Bank supported India's economic reforms of 1991 with a Structural Adjustment Loan of:

Options :

- ☒ USS 500 million
- ☐ USS 600 million
- ☐ USS 1,000 million
- ☐ USS 5,000 million

Question Number : 257 Question Id : 7230531494 Question Type : MCQ Option Shuffling : Yes Display Question Number : Yes  
Single Line Question Option : No Option Orientation : Vertical

Correct : 1 Wrong : 0.25

Which of the following reform measures was NOT undertaken by India on domestic sector in 1991?

Options :

- ☐ Cut in subsidies
- ☐ Cut in transfers to public sector enterprises
- ☒ Cut in interest rates
- ☐ Cut in fiscal deficit

Question Number : 258 Question Id : 7230531495 Question Type : MCQ Option Shuffling : Yes Display Question Number : Yes  
Single Line Question Option : No Option Orientation : Vertical

Correct : 1 Wrong : 0.25

Which of the following reform measures was NOT undertaken by India on external sector in 1991?

Options :

- ☐ Liberalisation of trade policy
- ☒ Revaluation of rupee by 23 % in two stages
- ☐ Liberalisation of FDI Policy
- ☐ Abolition of complex system of import licensing

Question Number : 259 Question Id : 7230531496 Question Type : MCQ Option Shuffling : Yes Display Question Number : Yes  
Single Line Question Option : No Option Orientation : Vertical

Correct : 1 Wrong : 0.25

The Fiscal Responsibility and Budget Management (FRBM) Act, 2003, aims to bring down fiscal deficit to:

Options :

✔ 3 % of GDP

✘ 4 % of GDP

✘ 4.5 % of GDP

✘ 5 % of GDP

Question Number : 260 Question Id : 7230531497 Question Type : MCQ Option Shuffling : Yes Display Question Number : Yes  
Single Line Question Option : No Option Orientation : Vertical

Correct : 1 Wrong : 0.25

Which of the following is not considered to be the positive effect of LPG policies?

Options :

✘ Control on Fiscal Deficit

✘ High growth rate of the economy

✘ Increased foreign exchange reserves

✔ Increased role of MNCs



Group Number :	14
Group Id :	72305374
Group Maximum Duration :	0
Group Minimum Duration :	0
Revisit allowed for view? :	No
Revisit allowed for edit? :	No
Break time:	0
Group Marks:	20

	Subject Related
Section Id :	72305374
Section Number :	1
Section type :	Online
Mandatory or Optional:	Mandatory
Number of Questions:	20
Number of Questions to be attempted:	20
Section Marks:	20
Display Number Panel:	Yes
Group All Questions:	No

Sub-Section Number: 1  
Sub-Section Id: 723053105  
Question Shuffling Allowed : Yes

Question Number : 261 Question Id : 7230531498 Question Type : MCQ Option Shuffling : Yes Display Question Number : Yes  
Single Line Question Option : No Option Orientation : Vertical  
Correct : 1 Wrong : 0.25

Identify the positive Effect of the Economic Reforms of 1991.

Options :

- ☐ Erosion of cultural values
- ☐ Widening of the 'rural-urban divide'
- ☒ Shift from monopoly to competitive market
- ☐ Lopsided growth process

Question Number : 262 Question Id : 7230531499 Question Type : MCQ Option Shuffling : Yes Display Question Number : Yes  
Single Line Question Option : No Option Orientation : Vertical  
Correct : 1 Wrong : 0.25

Globalisation does not include:

Options :

- ☐ Liberalisation of FDI
- ☐ Reduction in tariff levels
- ☐ Allowing MNCs
- ☒ Reduction in excise duty

Question Number : 263 Question Id : 7230531500 Question Type : MCQ Option Shuffling : Yes Display Question Number : Yes  
Single Line Question Option : No Option Orientation : Vertical  
Correct : 1 Wrong : 0.25

The 2009 Tendulkar Committee Report related to methodology of estimation of:

Options :

- ☒ Poverty
- ☐ Inequality
- ☐ Unemployment

✖ Inflation

Question Number : 264 Question Id : 7230531501 Question Type : MCQ Option Shuffling : Yes Display Question Number : Yes  
Single Line Question Option : No Option Orientation : Vertical

Correct : 1 Wrong : 0.25

Studies on poverty heavily depend upon:

Options :

✖ NCAER Data

✔ NSSO Data

✖ CSO Data

✖ Census Data

Question Number : 265 Question Id : 7230531502 Question Type : MCQ Option Shuffling : Yes Display Question Number : Yes  
Single Line Question Option : No Option Orientation : Vertical

Correct : 1 Wrong : 0.25

According to World Bank study of 2016, poverty rate is the highest among:

Options :

✔ STs

✖ SCs

✖ OBCs

✖ Others

Question Number : 266 Question Id : 7230531503 Question Type : MCQ Option Shuffling : Yes Display Question Number : Yes  
Single Line Question Option : No Option Orientation : Vertical

Correct : 1 Wrong : 0.25

Which of the following is not the economic factor determining the cropping pattern?

Options :

✖ Price of the product

✔ Soil

✖ Insurance against risk

✖ Procurement policy of the government



Question Number : 267 Question Id : 7230531504 Question Type : MCQ Option Shuffling : Yes Display Question Number : Yes  
Single Line Question Option : No Option Orientation : Vertical

Correct : 1 Wrong : 0.25

India's ranking in the world production of the fruits is:

Options :

- ☐ First
- ☒ Second
- ☐ Third
- ☐ Tenth

Question Number : 268 Question Id : 7230531505 Question Type : MCQ Option Shuffling : Yes Display Question Number : Yes  
Single Line Question Option : No Option Orientation : Vertical

Correct : 1 Wrong : 0.25

Which of the following is the least important in human capital formation?

Options :

- ☐ Good Health
- ☒ Good friendship
- ☐ Good Education
- ☐ Good Training

Question Number : 269 Question Id : 7230531506 Question Type : MCQ Option Shuffling : Yes Display Question Number : Yes  
Single Line Question Option : No Option Orientation : Vertical

Correct : 1 Wrong : 0.25

According to India Brand Equity Foundation (IBEF), in April 2018, India has become the second largest market for e-learning after:

Options :

- ☐ China
- ☐ Australia
- ☒ USA
- ☐ Canada

Question Number : 270 Question Id : 7230531507 Question Type : MCQ Option Shuffling : Yes Display Question Number : Yes  
Single Line Question Option : No Option Orientation : Vertical

Correct : 1 Wrong : 0.25

The Report "Our Common Future" was submitted in the year:

Options :

✘ 1982

✔ 1987

✘ 1992

✘ 1997

Question Number : 271 Question Id : 7230531508 Question Type : MCQ Option Shuffling : Yes Display Question Number : Yes  
Single Line Question Option : No Option Orientation : Vertical

Correct : 1 Wrong : 0.25

The word 'Sustainable Development' was first coined by:

Options :

✘ European Commission

✘ Global Judicial Institute on Environment

✔ Brundtland Commission

✘ The Water Commission

Question Number : 272 Question Id : 7230531509 Question Type : MCQ Option Shuffling : Yes Display Question Number : Yes  
Single Line Question Option : No Option Orientation : Vertical

Correct : 1 Wrong : 0.25

The Sustainable Development Goals (SDGs) that came into effect in January 2016 will continue to guide UNDP policy and funding until the year:

Options :

✘ 2020

✘ 2025

✔ 2030

✘ 2035

Question Number : 273 Question Id : 7230531510 Question Type : MCQ Option Shuffling : Yes Display Question Number : Yes  
Single Line Question Option : No Option Orientation : Vertical

Correct : 1 Wrong : 0.25

Which of the following was not one of the 8 Millennium Development Goals?

Options :

- ✘ Eradicate Extreme Poverty and Hunger
- ✔ Achieve Sustainable Cities and Communities
- ✘ Promote Gender Equality and Empower Women
- ✘ Achieve Universal Primary Education

Question Number : 274 Question Id : 7230531511 Question Type : MCQ Option Shuffling : Yes Display Question Number : Yes  
Single Line Question Option : No Option Orientation : Vertical  
Correct : 1 Wrong : 0.25

China seemed to have outstripped India for the first time in the share of World GDP in the year around:

Options :

- ✘ 1000
- ✔ 1500
- ✘ 1600
- ✘ 1700

Question Number : 275 Question Id : 7230531512 Question Type : MCQ Option Shuffling : Yes Display Question Number : Yes  
Single Line Question Option : No Option Orientation : Vertical  
Correct : 1 Wrong : 0.25

Which of the following comparisons between India and China is not true?

Options :

- ✘ China has one party authoritarian rule while India has a multi-party system
- ✘ Chinese people are relatively homogeneous while those of India are heterogeneous
- ✘ Chinese economy is the second largest and the Indian economy is the fourth largest in the world in terms of PPP GDP
- ✔ The economic reforms in both the countries are crisis driven

Question Number : 276 Question Id : 7230531513 Question Type : MCQ Option Shuffling : Yes Display Question Number : Yes  
Single Line Question Option : No Option Orientation : Vertical  
Correct : 1 Wrong : 0.25

The initial Reform process in China covering the period from 1978 to 1984 focused on:

Options :

- ✔ Land tenure system and support prices for agricultural products

✘ Non-farm activities in rural areas

✘ Industrial development

✘ Foreign trade and investments

Question Number : 277 Question Id : 7230531514 Question Type : MCQ Option Shuffling : Yes Display Question Number : Yes  
Single Line Question Option : No Option Orientation : Vertical

Correct : 1 Wrong : 0.25

According to Human Development Report 2016:

Options :

✘ Both India and Pakistan are placed in Low Human Development category countries

✔ Both India and Pakistan are placed in Medium Human Development category countries

✘ India is placed in Medium Human Development category while Pakistan in Low Human Development category

✘ India is placed in Low Human Development category while Pakistan in Medium Human Development category

Question Number : 278 Question Id : 7230531515 Question Type : MCQ Option Shuffling : Yes Display Question Number : Yes  
Single Line Question Option : No Option Orientation : Vertical

Correct : 1 Wrong : 0.25

According to Human Development Report 2016:

Options :

✘ Both India and China are placed in Medium Human Development category countries

✘ Both India and China are placed in High Human Development category countries

✘ India is placed in Medium Human Development category while China in Low Human Development category

✔ India is placed in Medium Human Development category while China in High Human Development category

Question Number : 279 Question Id : 7230531516 Question Type : MCQ Option Shuffling : Yes Display Question Number : Yes  
Single Line Question Option : No Option Orientation : Vertical

Correct : 1 Wrong : 0.25

According to Human Development Report 2016, Gender inequality in India was:

Options :

✔ Higher than China but lower than Pakistan

✘ Lower than China but higher than Pakistan



✖ Higher than both China and Pakistan

✖ Lower than both China and Pakistan

Question Number : 280 Question Id : 7230531517 Question Type : MCQ Option Shuffling : Yes Display Question Number : Yes  
Single Line Question Option : No Option Orientation : Vertical

Correct : 1 Wrong : 0.25

The Comprehensive Crop Insurance Scheme (CCIS) was introduced in India in the year:

Options :

✖ 1975

✖ 1980

✔ 1985

✖ 1990

Group Number :	15
Group Id :	72305375
Group Maximum Duration :	0
Group Minimum Duration :	180
Revisit allowed for view? :	No
Revisit allowed for edit? :	No
Break time:	0
Group Marks:	20

	Subject Related
Section Id :	72305375
Section Number :	1
Section type :	Online
Mandatory or Optional:	Mandatory
Number of Questions:	20
Number of Questions to be attempted:	20
Section Marks:	20
Display Number Panel:	Yes
Group All Questions:	No

Sub-Section Number:	1
Sub-Section Id:	723053106
Question Shuffling Allowed :	Yes



Question Number : 281 Question Id : 7230531518 Question Type : MCQ Option Shuffling : Yes Display Question Number : Yes  
Single Line Question Option : No Option Orientation : Vertical  
Correct : 1 Wrong : 0.25

Which of these factors does NOT affect the emotionality of a person?

Options :

- ☐ Child A is too much excited at the thought of an ice cream
- ☐ Child B is exhausted after travelling for 4 hours in the car
- ☒ Child C is happily sleeping at night undisturbed for 8 hours
- ☐ Child D is suffering from disease due to malnutrition

Question Number : 282 Question Id : 7230531519 Question Type : MCQ Option Shuffling : Yes Display Question Number : Yes  
Single Line Question Option : No Option Orientation : Vertical  
Correct : 1 Wrong : 0.25

\_\_\_\_\_ is/are mandated to provide academic and technical resource support to adult and continuing education through development and production of material and training modules. In addition to this, it/they would be required to conduct motivational and environmental building, action research and evaluation and monitoring.

Options :

- ☒ The State Resource Centre(s)
- ☐ Jan Shikshan Sansthan
- ☐ Sarva Shiksha Abhiyan
- ☐ Rashtriya Madhyamik Shiksha Abhiyan

Question Number : 283 Question Id : 7230531520 Question Type : MCQ Option Shuffling : Yes Display Question Number : Yes  
Single Line Question Option : No Option Orientation : Vertical  
Correct : 1 Wrong : 0.25

When a learner performs a skill according to the instruction rather than the observation, he is known to be at the \_\_\_\_\_ level of psychomotor domain.

Options :

- ☒ 'Imitates'
- ☐ 'Manipulates'
- ☐ 'Articulates'
- ☐ 'Naturalises'

Question Number : 284 Question Id : 7230531521 Question Type : MCQ Option Shuffling : Yes Display Question Number : Yes  
Single Line Question Option : No Option Orientation : Vertical

Correct : 1 Wrong : 0.25

Identify the learning style from the given description:

Somu likes to have a hands-on experience in anything he learns. He enjoys field trips to experience the physical proximity of the target knowledge. He makes his own notes on whatever he learns.

Options :

☐ Visual / Non-verbal Learning style

☐ Visual / Verbal Learning style

☒ Tactile Learning style

☐ Auditory Learning style

Question Number : 285 Question Id : 7230531522 Question Type : MCQ Option Shuffling : Yes Display Question Number : Yes  
Single Line Question Option : No Option Orientation : Vertical

Correct : 1 Wrong : 0.25

Which of these skills is a receptive skill?

Options :

☒ Listening

☐ Speaking

☐ Writing

☐ Language

Question Number : 286 Question Id : 7230531523 Question Type : MCQ Option Shuffling : Yes Display Question Number : Yes  
Single Line Question Option : No Option Orientation : Vertical

Correct : 1 Wrong : 0.25

What should be the objective of teaching science at higher secondary school level?

Options :

☒ To develop economic efficiency and capacity to earn a livelihood

☐ To get the knowledge about the society and natural environment

☐ Develop the quantitative sense to solve the problems

☐ To develop the observation skills

Question Number : 287 Question Id : 7230531524 Question Type : MCQ Option Shuffling : Yes Display Question Number : Yes  
Single Line Question Option : No Option Orientation : Vertical

Correct : 1 Wrong : 0.25

The ability to perceive existing gender differences and issues and to incorporate these into strategies and actions is known as:

Options :

- ☐ gender equality
- ☐ gender equity
- ☐ gender parity
- ☒ gender sensitivity

Question Number : 288 Question Id : 7230531525 Question Type : MCQ Option Shuffling : Yes Display Question Number : Yes  
Single Line Question Option : No Option Orientation : Vertical

Correct : 1 Wrong : 0.25

Which of these is NOT a part of social science?

Options :

- ☐ Statistics
- ☐ Anthropology
- ☒ Biology
- ☐ Sociology

Question Number : 289 Question Id : 7230531526 Question Type : MCQ Option Shuffling : Yes Display Question Number : Yes  
Single Line Question Option : No Option Orientation : Vertical

Correct : 1 Wrong : 0.25

In a particular Mathematics class, a student can draw geometrical figures and graphs. Which stage of cognitive domain is the student exhibiting?

Options :

- ☐ Knowledge
- ☐ Understanding
- ☐ Application
- ☒ Skill

Question Number : 290 Question Id : 7230531527 Question Type : MCQ Option Shuffling : Yes Display Question Number : Yes  
Single Line Question Option : No Option Orientation : Vertical



Correct : 1 Wrong : 0.25

Which of these is NOT a good aspect relating to reading a newspaper?

Options :

- ☐ Increased vocabulary
- ☐ Latest update on the current happenings
- ☐ Knowledge on antisocial elements in the society
- ☒ Exaggerated or underplayed news of the real situation

Question Number : 291 Question Id : 7230531528 Question Type : MCQ Option Shuffling : Yes Display Question Number : Yes  
Single Line Question Option : No Option Orientation : Vertical

Correct : 1 Wrong : 0.25

Which of these is NOT a 2D art, method or technique to use while teaching a subject?

Options :

- ☐ Collage making
- ☐ Rangoli
- ☐ Mandna
- ☒ Installation

Question Number : 292 Question Id : 7230531529 Question Type : MCQ Option Shuffling : Yes Display Question Number : Yes  
Single Line Question Option : No Option Orientation : Vertical

Correct : 1 Wrong : 0.25

Identify the correct statement on role play from the given options?

Options :

- ☒ Effective while addressing issues in the affective domain
- ☐ Low level of learner involvement
- ☐ All kinds of learners are proactive to take up role plays
- ☐ Introverts enjoy Role plays

Question Number : 293 Question Id : 7230531530 Question Type : MCQ Option Shuffling : Yes Display Question Number : Yes  
Single Line Question Option : No Option Orientation : Vertical

Correct : 1 Wrong : 0.25

Which of these is NOT a blog tool?

Options :

- ☐ Edublog
- ☐ Blogger
- ☐ WordPress
- ☒ Trackback

Question Number : 294 Question Id : 7230531531 Question Type : MCQ Option Shuffling : Yes Display Question Number : Yes  
Single Line Question Option : No Option Orientation : Vertical

Correct : 1 Wrong : 0.25

Which of these is NOT a correct statement of the CAI?

Options :

- ☐ It facilitates reteaching and reinforcing
- ☐ It can create simulations in the learner
- ☐ It can help teachers to improve their role in education process.
- ☒ CAI can give a human touch better than traditional teaching

Question Number : 295 Question Id : 7230531532 Question Type : MCQ Option Shuffling : Yes Display Question Number : Yes  
Single Line Question Option : No Option Orientation : Vertical

Correct : 1 Wrong : 0.25

When knowledge is acquired through religious texts, it is known as \_\_\_\_\_.

Options :

- ☒ revelation
- ☐ testimony
- ☐ authority
- ☐ reason

Question Number : 296 Question Id : 7230531533 Question Type : MCQ Option Shuffling : Yes Display Question Number : Yes  
Single Line Question Option : No Option Orientation : Vertical

Correct : 1 Wrong : 0.25

Which of these is NOT an assessment method?

Options :

- ☐ Presentations



- ✗ Simulations
- ✗ Homework exercises
- ✓ Students watching an audiovisual

Question Number : 297 Question Id : 7230531534 Question Type : MCQ Option Shuffling : Yes Display Question Number : Yes  
Single Line Question Option : No Option Orientation : Vertical

Correct : 1 Wrong : 0.25

Which of these is NOT a correct statement on the guiding principles of constructivism?

Options :

- ✓ The learning process focuses on isolated facts, not on primary concepts
- ✗ Learning requires understanding wholes as well as parts and parts must be understood in the context of wholes
- ✗ The purpose of learning is for an individual to construct his or her own meaning, not just to memorise the "right" answers
- ✗ Learning must start with the issues around which students are actively trying to construct meaning

Question Number : 298 Question Id : 7230531535 Question Type : MCQ Option Shuffling : Yes Display Question Number : Yes  
Single Line Question Option : No Option Orientation : Vertical

Correct : 1 Wrong : 0.25

The assessment that expands the findings of an assessment with analysis of abilities and potentials with a further dimension is known as:

Options :

- ✓ prognostic assessment
- ✗ formative assessment
- ✗ diagnostic assessment
- ✗ summative assessment

Question Number : 299 Question Id : 7230531536 Question Type : MCQ Option Shuffling : Yes Display Question Number : Yes  
Single Line Question Option : No Option Orientation : Vertical

Correct : 1 Wrong : 0.25

Which of these is NOT a correct statement on including inclusive education in India?

Options :

- ✓ Children with special needs cannot be made a part of regular school.
- ✗ Giving all the normal and differently abled children equal opportunities to learn and get equal treatment as others.

- ✘ It is an opportunity to form friendships with other children.
- ✘ It develops the tolerance and appreciation of normal children for differently abled students.

Question Number : 300 Question Id : 7230531537 Question Type : MCQ Option Shuffling : Yes Display Question Number : Yes  
Single Line Question Option : No Option Orientation : Vertical

Correct : 1 Wrong : 0.25

\_\_\_\_\_ is a developmental disability significantly affecting verbal and non-verbal communication and social interaction, generally evident before age three and characterised by engaging in repetitive activities and stereotyped movements.

Options :

✔ Autism

✘ Dyslexia

✘ Dysgraphia

✘ ADHD

