

Question Paper Preview

Notations :

- 1.Options shown in green color and with ✓ icon are correct.
- 2.Options shown in red color and with ✗ icon are incorrect.

Question Paper Name:	PGT ECONOMICS FEMALE 7th July 2018 Shift1
Subject Name:	PGT ECONOMICS FEMALE
Creation Date:	2018-07-07 21:15:50
Duration:	180
Total Marks:	300
Display Marks:	Yes
Share Answer Key With Delivery Engine:	Yes
Actual Answer Key:	Yes
Calculator:	None
Magnifying Glass Required?:	No
Ruler Required?:	No
Eraser Required?:	No
Scratch Pad Required?:	No
Rough Sketch/Notepad Required?:	No
Protractor Required?:	No

	Mental Ability
Group Number :	1
Group Id :	167943162
Group Maximum Duration :	0
Group Minimum Duration :	0
Revisit allowed for view? :	No
Revisit allowed for edit? :	No
Break time:	0
Group Marks:	20

	Mental Ability
Section Id :	167943221
Section Number :	1
Section type :	Online
Mandatory or Optional:	Mandatory
Number of Questions:	20
Number of Questions to be attempted:	20
Section Marks:	20
Display Number Panel:	Yes
Group All Questions:	No

Test Prime

**ALL EXAMS,
ONE SUBSCRIPTION**



70,000+
Mock Tests



**Personalised
Report Card**



**Unlimited
Re-Attempt**



600+
Exam Covered



**Previous Year
Papers**



**500%
Refund**



ATTEMPT FREE MOCK NOW

Sub-Section Id: 167943438
Question Shuffling Allowed : Yes

Question Number : 1 Question Id : 1679437532 Question Type : MCQ Option Shuffling : Yes Display Question Number : Yes
Single Line Question Option : No Option Orientation : Vertical

Correct : 1 Wrong : 0.25

Rahi said to Mausami, "Your mother's father's only son-in-law is my brother." How is Rahi related to Mausami's mother?

Options :

✖ Mother-in-law

✔ Sister-in-law

✖ Daughter

✖ Daughter-in-law

Question Number : 2 Question Id : 1679437533 Question Type : MCQ Option Shuffling : Yes Display Question Number : Yes
Single Line Question Option : No Option Orientation : Vertical

Correct : 1 Wrong : 0.25

Select the option that is related to the third term in the same way as the second term is related to the first term.

Lion : Roar :: Cow : ?

Options :

✖ Bleat

✔ Moo Moo

✖ Caw

✖ Hiss

Question Number : 3 Question Id : 1679437534 Question Type : MCQ Option Shuffling : Yes Display Question Number : Yes
Single Line Question Option : No Option Orientation : Vertical

Correct : 1 Wrong : 0.25

Select the option that is related to the third term in the same way as the second term is related to the first term.

7 : 49 :: 11 : ?

Options :

✖ 132

✖ 110

✔ 121

✖ 144

Question Number : 4 Question Id : 1679437535 Question Type : MCQ Option Shuffling : Yes Display Question Number : Yes
Single Line Question Option : No Option Orientation : Vertical

Correct : 1 Wrong : 0.25

Select the option that is related to the third term in the same way as the second term is related to the first term.

56 : 30 :: 78 : ?

Options :

✔ 56

✖ 50

✖ 48

✖ 64

Question Number : 5 Question Id : 1679437536 Question Type : MCQ Option Shuffling : Yes Display Question Number : Yes
Single Line Question Option : No Option Orientation : Vertical

Correct : 1 Wrong : 0.25

Three out of the four words below are similar in a certain way and one is different. Select the option that is different from the others.

Options :

✖ Cotton

✖ Linen

✔ Leather

✖ Silk

Question Number : 6 Question Id : 1679437537 Question Type : MCQ Option Shuffling : Yes Display Question Number : Yes
Single Line Question Option : No Option Orientation : Vertical

Correct : 1 Wrong : 0.25

Harshad starts from his home and goes straight for 3 km. Then he turns right and goes for 5 km. Finally, he turns left and goes for 3 km to reach his school. To which direction is Harshad's school located with relation to his home if he started his journey facing East?

Options :

✖ North-west

✖ South-west

✖ North-east

✓ South-east

Question Number : 7 Question Id : 1679437538 Question Type : MCQ Option Shuffling : Yes Display Question Number : Yes
Single Line Question Option : No Option Orientation : Vertical

Correct : 1 Wrong : 0.25

Harshad starts from his home and goes straight for 3 km. Then he turns right and goes for 8 km. Finally, he turns left and goes for 3 km to reach his school. What is the shortest distance between Harshad's home and his school?

Options :

✗ 12 km

✓ 10 km

✗ 14 km

✗ 8.5 km

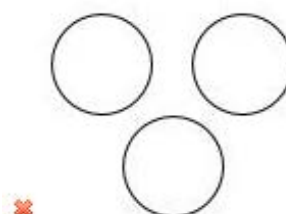

Question Number : 8 Question Id : 1679437539 Question Type : MCQ Option Shuffling : Yes Display Question Number : Yes
Single Line Question Option : No Option Orientation : Vertical

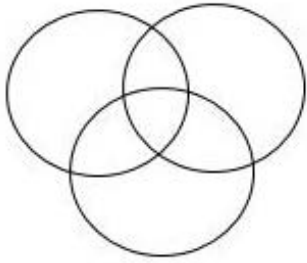
Correct : 1 Wrong : 0.25

Select the diagram that best represents the relationship among classes given below.

Punjab, India, Karnataka

Options :





Question Number : 9 Question Id : 1679437540 Question Type : MCQ Option Shuffling : Yes Display Question Number : Yes
Single Line Question Option : No Option Orientation : Vertical

Correct : 1 Wrong : 0.25

Six friends, Gary, Harry, Isaac, James, Ken and Louis are sitting around a circular table facing the one another, such that each friend is seated exactly opposite another friend. Gary does not sit next to Harry or Louis. Ken sits to Louis's immediate right. Isaac is sitting opposite Ken. James is sitting to Gary's immediate right.

Between whom is Harry sitting?

Options :

✓ Louis and Isaac

✗ Ken and James

✗ Louis and James

✗ Isaac and Gary

Question Number : 10 Question Id : 1679437541 Question Type : MCQ Option Shuffling : Yes Display Question Number : Yes
Single Line Question Option : No Option Orientation : Vertical

Correct : 1 Wrong : 0.25

Six friends, Gary, Harry, Isaac, James, Ken, and Louis are sitting around a circular table facing the one another, such that each friend is seated exactly opposite another friend. Gary does not sit next to Harry or Louis. Ken sits to Louis's immediate right. Isaac is sitting opposite Ken. James is sitting to Gary's immediate right.

Who is sitting exactly opposite Louis?

Options :

✗ Ken

✓ James

✗ Isaac

✗ Gary

Question Number : 11 Question Id : 1679437542 Question Type : MCQ Option Shuffling : Yes Display Question Number : Yes
Single Line Question Option : No Option Orientation : Vertical

Correct : 1 Wrong : 0.25

In a code language, PUZZLE is coded as OTYAMF. How will DAZZLE be coded in that language?

Options :

✓ CZYAMF

✗ AMFYZB

✗ CZYBNG

✗ EBAAMF

Question Number : 12 Question Id : 1679437543 Question Type : MCQ Option Shuffling : Yes Display Question Number : Yes
Single Line Question Option : No Option Orientation : Vertical

Correct : 1 Wrong : 0.25

If '\$' means '÷'; if '&' means '×'; '@' means '-' and '#' means '+', find the value of the following equation.

$$144 \$ 12 \& 3 \# 6 @ 2 = ?$$

Options :

✓ 40

✗ 148

✗ 44

✗ 76

Question Number : 13 Question Id : 1679437544 Question Type : MCQ Option Shuffling : Yes Display Question Number : Yes
Single Line Question Option : No Option Orientation : Vertical

Correct : 1 Wrong : 0.25

Six friends are riding horses. Vishal rides faster than Deepak. Prakash rides faster than Vishal. Deepak rides faster than Harish but slower than Tarun. Tarun does not ride as fast as Vishal. Who among the following rides the fastest?

Options :

✓ Prakash

✗ Vishal

✗ Tarun

✗ Deepak

Question Number : 14 Question Id : 1679437545 Question Type : MCQ Option Shuffling : Yes Display Question Number : Yes
Single Line Question Option : No Option Orientation : Vertical

Correct : 1 Wrong : 0.25

What will come in place of the blank in the series?

0, 2, 5, 9, 14, 20, _____

Options :

✗ 30

✗ 25

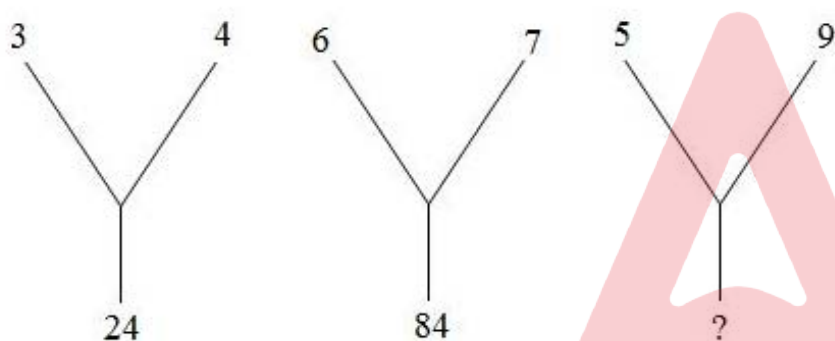
✗ 24

✓ 27

Question Number : 15 Question Id : 1679437546 Question Type : MCQ Option Shuffling : Yes Display Question Number : Yes
Single Line Question Option : No Option Orientation : Vertical

Correct : 1 Wrong : 0.25

Select the option that will correctly replace the question mark (?) and complete the series.



Options :

✗ 45

✗ 80

✓ 90

✗ 63

Question Number : 16 Question Id : 1679437547 Question Type : MCQ Option Shuffling : Yes Display Question Number : Yes
Single Line Question Option : No Option Orientation : Vertical

Correct : 1 Wrong : 0.25

In this question, two statements are given, which are followed by two conclusions numbered 1 and 2. Take the given statements to be true even if they seem to be at variance from commonly known facts. Read the conclusions and then decide which of the given conclusions logically follow(s) from the given statements, disregarding commonly known facts.

Statements:

All swans are birds.

All birds are mammals.

Conclusions:

1. All mammals are birds.

2. Some mammals are swans.

Options :

- ✗ Only conclusion 1 follows.
- ✓ Only conclusion 2 follows.
- ✗ Neither conclusions 1 nor 2 follows.
- ✗ Both conclusions 1 and 2 follow.

Question Number : 17 Question Id : 1679437548 Question Type : MCQ Option Shuffling : Yes Display Question Number : Yes
Single Line Question Option : No Option Orientation : Vertical

Correct : 1 Wrong : 0.25

The statement below is followed by two arguments labeled I and II. Read the arguments in relation with the statement and identify the strong argument.

Statement: Cigarette factories should be shut down immediately.

Argument I: The government is spending more money to prevent and cure oral cancer than the revenue collected by the government and the profit earned by companies put together.

Argument II: About 70% of active smokers and 7% passive smokers have been diagnosed with oral cancer.

Options :

- ✗ Only argument I is strong.
- ✗ Only argument II is strong.
- ✓ Both I and II arguments are strong.
- ✗ Either argument I or argument II is strong.

Question Number : 18 Question Id : 1679437549 Question Type : MCQ Option Shuffling : Yes Display Question Number : Yes
Single Line Question Option : No Option Orientation : Vertical

Correct : 1 Wrong : 0.25

The statement below is followed by two conclusions labeled I and II. Assuming that the information in the statement is true, even if it appears at variance from generally established facts, decide which conclusion(s) logically and definitely follow(s) from the information given in the statement.

Statement: Only intelligent people can understand the true meaning hidden in Picasso's paintings. Ayush has written a treatise on Picasso's paintings with a new interpretation of most of his paintings.

Conclusion I: Ayush has studied modern art and is interning at the Contemporary Art Gallery, Paris.

Conclusion II: Ayush is an intelligent person.

Options :

- ✗ Only conclusion I follows.

✓ Only conclusion II follows.

✗ Both conclusions I and II follow.

✗ Neither conclusion I nor conclusion II follows.

Question Number : 19 Question Id : 1679437550 Question Type : MCQ Option Shuffling : Yes Display Question Number : Yes
Single Line Question Option : No Option Orientation : Vertical

Correct : 1 Wrong : 0.25

Study the following scenario (situation) and answer the question that follows.

You are playing cricket with your younger brother at your home. Your brother throws a metal object at you, which hits your arm and you start bleeding bit.

Select the option that describes the most appropriate action that you will take in this situation.

Options :

✗ You will thrash your brother until he faints or starts bleeding.

✗ Laugh and cheer your brother to get a better aim next time.

✗ Call up your parents and ask them to rush back home as there's an emergency.

✓ Use first aid to clean and bandage the wound and tell your brother that he should be careful when playing.

Question Number : 20 Question Id : 1679437551 Question Type : MCQ Option Shuffling : Yes Display Question Number : Yes
Single Line Question Option : No Option Orientation : Vertical

Correct : 1 Wrong : 0.25

In this question, two statements labelled I and II are given. Read both the statements and decide which option correctly shows the relationship between these given statements.

Statement I: The police have arrested Jignesh for money laundering.

Statement II: Unaccounted money in the form of new currency was found in Jignesh's possession and he could not explain the source of the money.

Options :

✗ Statement I is the cause and Statement II is its effect.

✓ Statement II is the cause and Statement I is its effect.

✗ Both the statements I and II are independent causes.

✗ Both the statements I and II are effects of independent causes.

General Awareness

Group Number :	2
Group Id :	167943163
Group Maximum Duration :	0
Group Minimum Duration :	0
Revisit allowed for view? :	No
Revisit allowed for edit? :	No
Break time:	0
Group Marks:	20

General Awareness

Section Id :	167943222
Section Number :	1
Section type :	Online
Mandatory or Optional:	Mandatory
Number of Questions:	20
Number of Questions to be attempted:	20
Section Marks:	20
Display Number Panel:	Yes
Group All Questions:	No

Sub-Section Number:	1
Sub-Section Id:	167943439
Question Shuffling Allowed :	Yes

Question Number : 21 Question Id : 1679437552 Question Type : MCQ Option Shuffling : Yes Display Question Number : Yes
Single Line Question Option : No Option Orientation : Vertical
Correct : 1 Wrong : 0.25

The All India Muslim League was founded in 1906 at:

Options :
☒ Dacca

☐ Patna

☐ Gaya

☐ Kolkata

Question Number : 22 Question Id : 1679437553 Question Type : MCQ Option Shuffling : Yes Display Question Number : Yes
Single Line Question Option : No Option Orientation : Vertical
Correct : 1 Wrong : 0.25

The Indian National Congress was founded in December 1885 at:

Options :
☐ Chennai

✓ Bombay

✗ Bhopal

✗ Delhi

Question Number : 23 Question Id : 1679437554 Question Type : MCQ Option Shuffling : Yes Display Question Number : Yes
Single Line Question Option : No Option Orientation : Vertical

Correct : 1 Wrong : 0.25

Who among the following freedom fighters had famously declared, "Freedom is my birthright and I shall have it!"?

Options :

✗ Subhash Chandra Bose

✓ Bal Gangadhar Tilak

✗ Chandrashekhar Azad

✗ Bhagat Singh

Question Number : 24 Question Id : 1679437555 Question Type : MCQ Option Shuffling : Yes Display Question Number : Yes
Single Line Question Option : No Option Orientation : Vertical

Correct : 1 Wrong : 0.25

Which of the following states is the largest producer of wheat in India?

Options :

✗ Punjab

✗ Madhya Pradesh

✓ Uttar Pradesh

✗ Haryana

Question Number : 25 Question Id : 1679437556 Question Type : MCQ Option Shuffling : Yes Display Question Number : Yes
Single Line Question Option : No Option Orientation : Vertical

Correct : 1 Wrong : 0.25

Which of the following rivers ends in the Bay of Bengal?

Options :

✓ Kaveri

✗ Narmada

✖ Tapti

✖ Indus

Question Number : 26 Question Id : 1679437557 Question Type : MCQ Option Shuffling : Yes Display Question Number : Yes
Single Line Question Option : No Option Orientation : Vertical

Correct : 1 Wrong : 0.25

Which of the following is correct?

Options :

✔ The Governor is the Constitutional Head of a State.

✖ The Chief Minister is the Constitutional Head of a State.

✖ The Speaker of the Legislative Assembly is the Constitutional Head of a State.

✖ The Vice-President is the Constitutional Head of a State.

Question Number : 27 Question Id : 1679437558 Question Type : MCQ Option Shuffling : Yes Display Question Number : Yes
Single Line Question Option : No Option Orientation : Vertical

Correct : 1 Wrong : 0.25

The Comptroller and Auditor-General of India can be removed from office in like manner and on the like grounds as:

Options :

✖ the Governor of a State

✔ a Judge of the Supreme Court

✖ the Prime Minister of India

✖ the Attorney-General for India

Question Number : 28 Question Id : 1679437559 Question Type : MCQ Option Shuffling : Yes Display Question Number : Yes
Single Line Question Option : No Option Orientation : Vertical

Correct : 1 Wrong : 0.25

Which of the following words was inserted in the Preamble by the Constitution (42nd Amendment) Act, 1976?

Options :

✖ Expression

✖ People

✔ Socialist

✖ Worship

Question Number : 29 Question Id : 1679437560 Question Type : MCQ Option Shuffling : Yes Display Question Number : Yes
Single Line Question Option : No Option Orientation : Vertical

Correct : 1 Wrong : 0.25

What was India's per capita GDP for 2016-17?

Options :

✔ 116,888

✖ 96,202

✖ 166,102

✖ 216,152

Question Number : 30 Question Id : 1679437561 Question Type : MCQ Option Shuffling : Yes Display Question Number : Yes
Single Line Question Option : No Option Orientation : Vertical

Correct : 1 Wrong : 0.25

As per 2017 estimate, what is the rank occupied by India among economies of the world in term of import volume?

Options :

✖ 22nd

✖ 16th

✔ 11th

✖ 18th

Question Number : 31 Question Id : 1679437562 Question Type : MCQ Option Shuffling : Yes Display Question Number : Yes
Single Line Question Option : No Option Orientation : Vertical

Correct : 1 Wrong : 0.25

In which state is the Yaoshang festival primarily celebrated?

Options :

✖ Arunachal Pradesh

✔ Manipur

✖ Tripura

✖ Sikkim

Question Number : 32 Question Id : 1679437563 Question Type : MCQ Option Shuffling : Yes Display Question Number : Yes
Single Line Question Option : No Option Orientation : Vertical

Correct : 1 Wrong : 0.25

The National Award-winning film director Jayaraj is associated with which of the following languages?

Options :

✓ Malayalam

✗ Kannada

✗ Telugu

✗ Tamil

Question Number : 33 Question Id : 1679437564 Question Type : MCQ Option Shuffling : Yes Display Question Number : Yes
Single Line Question Option : No Option Orientation : Vertical

Correct : 1 Wrong : 0.25

With which of the following Sikh Gurus is Gurudwara Paonta Sahib in Himachal Pradesh associated?

Options :

✗ Guru Nanak

✗ Guru Tegh Bahadur

✗ Guru Amar Das

✓ Guru Gobind Singh

Question Number : 34 Question Id : 1679437565 Question Type : MCQ Option Shuffling : Yes Display Question Number : Yes
Single Line Question Option : No Option Orientation : Vertical

Correct : 1 Wrong : 0.25

Which franchise played some of its home games in "Holkar Stadium, Indore" in 2018 edition of Indian Premier League cricket tournament?

Options :

✗ Mumbai Indians

✗ Chennai Super Kings

✗ Kolkata Knight Riders

✓ Kings XI Punjab

Question Number : 35 Question Id : 1679437566 Question Type : MCQ Option Shuffling : Yes Display Question Number : Yes
Single Line Question Option : No Option Orientation : Vertical

Correct : 1 Wrong : 0.25

The 2018 edition of annual men's hockey tournament Sultan Azlan Shah cup was _____ edition of the tournament.

Options :

✗ 54th

✓ 27th

✗ 15th

✗ 7th

Question Number : 36 Question Id : 1679437567 Question Type : MCQ Option Shuffling : Yes Display Question Number : Yes
Single Line Question Option : No Option Orientation : Vertical

Correct : 1 Wrong : 0.25

Which of the following is NOT used as a lubricant?

Options :

✗ Paraffin wax

✗ Fuel oil

✗ Powder

✓ Rubber

Question Number : 37 Question Id : 1679437568 Question Type : MCQ Option Shuffling : Yes Display Question Number : Yes
Single Line Question Option : No Option Orientation : Vertical

Correct : 1 Wrong : 0.25

Parliament passed a bill de-linking the four subsidiaries from GIC in July, _____.

Options :

✗ 2005

✓ 2002

✗ 2000

✗ 1988

Question Number : 38 Question Id : 1679437569 Question Type : MCQ Option Shuffling : Yes Display Question Number : Yes
Single Line Question Option : No Option Orientation : Vertical

Correct : 1 Wrong : 0.25

What is the percent increment in Indian defence expenditure in 2017 over 2016 expenditure?

Options :

✖ 2.4%

✖ 4.3%

✔ 5.5%

✖ 7.1%

Question Number : 39 Question Id : 1679437570 Question Type : MCQ Option Shuffling : Yes Display Question Number : Yes
Single Line Question Option : No Option Orientation : Vertical
Correct : 1 Wrong : 0.25

When is National Panchayati Raj Day celebrated?

Options :

✔ 24th April

✖ 5th May

✖ 12th April

✖ 23rd May

Question Number : 40 Question Id : 1679437571 Question Type : MCQ Option Shuffling : Yes Display Question Number : Yes
Single Line Question Option : No Option Orientation : Vertical
Correct : 1 Wrong : 0.25

What is the name of virtual assistant launched by HDFC Bank in May 2018?

Options :

✖ IMN

✖ IRA

✔ EVA

✖ DIY

Arithmetic Ability

Group Number :	3
Group Id :	167943164
Group Maximum Duration :	0
Group Minimum Duration :	0
Revisit allowed for view? :	No
Revisit allowed for edit? :	No

Break time: 0
Group Marks: 20

Arithmetic Ability

Section Id : 167943223
Section Number : 1
Section type : Online
Mandatory or Optional: Mandatory
Number of Questions: 17
Number of Questions to be attempted: 17
Section Marks: 20
Display Number Panel: Yes
Group All Questions: No

Sub-Section Number: 1
Sub-Section Id: 167943440
Question Shuffling Allowed : Yes

Question Number : 41 Question Id : 1679437572 Question Type : MCQ Option Shuffling : Yes Display Question Number : Yes
Single Line Question Option : No Option Orientation : Vertical
Correct : 1 Wrong : 0.25

If three times the larger of two numbers is divided by the smaller one, the quotient and remainder are 4 and 3, respectively. If 7 times the smaller number is divided by the larger one, the quotient and remainder are 5 and 1, respectively. What is the difference between the two numbers?

Options :

✖ 6

✔ 7

✖ 8

✖ 9

Question Number : 42 Question Id : 1679437573 Question Type : MCQ Option Shuffling : Yes Display Question Number : Yes
Single Line Question Option : No Option Orientation : Vertical
Correct : 1 Wrong : 0.25

The expression $\frac{(0.\overline{2}+0.\overline{4}+0.\overline{9}+0.\overline{39})\times0.\overline{36}}{(0.\overline{36}+0.\overline{33}+0.\overline{05})\times0.18}$ is equal to:

Options :

✔ $0.\overline{891}$

✖ $0.\overline{981}$

✖ $5.\overline{531}$

✖ 5.351

Note: For this question, discrepancy is found in question/answer. So, this question is ignored for all candidates.

Question Number : 43 Question Id : 1679437574 Question Type : MCQ Option Shuffling : Yes Display Question Number : Yes
Single Line Question Option : No Option Orientation : Vertical

Correct : 1 Wrong : 0.25

The value of $\frac{\sqrt[6]{2}[5^{2.4} \times 2^{-12} \div 5^{1.2}]^{0.5}}{(\sqrt[3]{128})^{-2.5} \times (125)^{0.2}}$ is:

Options :

✔ 1

✖ 5

✖ $\frac{1}{5}$

✖ $\frac{1}{2}$

Question Number : 44 Question Id : 1679437575 Question Type : MCQ Option Shuffling : Yes Display Question Number : Yes
Single Line Question Option : No Option Orientation : Vertical

Correct : 1 Wrong : 0.25

What is the simplified value of the following expression?

$$\left(\frac{4}{5} - \frac{3}{5} \text{ of } \frac{5}{6} + \frac{1}{4}\right) \times \left(\frac{1\frac{2}{3} + \frac{3}{5}}{\frac{2}{3} \text{ of } 2\frac{1}{4}} \div \frac{3\frac{1}{3} - 1\frac{1}{5}}{5 - 2\frac{1}{2}} \times 1\frac{1}{17}\right)$$

Options :

✖ $\frac{15}{8}$

✖ $\frac{11}{20}$

✔ $\frac{33}{32}$

✖ $\frac{22}{75}$

Question Number : 45 Question Id : 1679437576 Question Type : MCQ Option Shuffling : Yes Display Question Number : Yes
Single Line Question Option : No Option Orientation : Vertical

Correct : 1 Wrong : 0.25

The sum of the numerator and denominator of a fraction is 11. If 1 is added to the numerator and 2 is subtracted from the denominator, the fraction becomes $\frac{7}{2}$ less than 5. The fraction is greater than $\frac{1}{12}$ by:

Options :

☐ $\frac{1}{3}$

☐ $\frac{1}{2}$

☐ $\frac{2}{3}$

☒ $\frac{3}{4}$

Question Number : 46 Question Id : 1679437577 Question Type : MCQ Option Shuffling : Yes Display Question Number : Yes
Single Line Question Option : No Option Orientation : Vertical

Correct : 1 Wrong : 0.25

Anupam spends 20% of his monthly income on household expenditure. Out of the remaining, he spends 25% on children's education, 10% on transport and 5% on miscellaneous expenses. He is left now with ₹ 9,792 after incurring all these expenditures. How much does he spend on children's education?

Options :

☐ ₹ 4,050

☐ ₹ 4,060

☒ ₹ 4,080

☐ ₹ 4,200

Question Number : 47 Question Id : 1679437578 Question Type : MCQ Option Shuffling : Yes Display Question Number : Yes
Single Line Question Option : No Option Orientation : Vertical

Correct : 1 Wrong : 0.25

What is the ratio of the third proportional to 0.72 and 0.96 and the mean proportional between 1.6 and 2.5?

Options :

☒ 16 : 25

☐ 6 : 5

☐ 9 : 10

✖ 4 : 5

Question Number : 48 Question Id : 1679437579 Question Type : MCQ Option Shuffling : Yes Display Question Number : Yes
Single Line Question Option : No Option Orientation : Vertical

Correct : 1 Wrong : 0.25

A shopkeeper sold an article for ₹ 399 after allowing a 5% discount on its marked price. Had he not allowed the discount, he would have earned a profit of 12% on its cost price. To get a 16% profit, he should sell the article for:

Options :

✖ ₹ 412

✖ ₹ 416

✖ ₹ 420

✔ ₹ 435

Question Number : 49 Question Id : 1679437580 Question Type : MCQ Option Shuffling : Yes Display Question Number : Yes
Single Line Question Option : No Option Orientation : Vertical

Correct : 1 Wrong : 0.25

Surbhi borrowed a sum of ₹ 7,200 at $7\frac{1}{2}\%$ compound interest. At the end of every year, she paid ₹ 4,000 as part of the repayment of the loan and interest. How much does she owe after 2 years?

Options :

✖ ₹ 18.80

✖ ₹ 20.80

✔ ₹ 20.50

✖ ₹ 25.50

Question Number : 50 Question Id : 1679437581 Question Type : MCQ Option Shuffling : Yes Display Question Number : Yes
Single Line Question Option : No Option Orientation : Vertical

Correct : 1 Wrong : 0.25

The sum of the radius of the base and the height of a solid cylinder is 41 cm. If the total surface area of the cylinder is 1804 cm^2 , then its volume (in cm^3) is (use $\pi = \frac{22}{7}$):

Options :

✖ 5082

✔ 5236

✖ 5390

✖ 5434

Question Number : 51 Question Id : 1679437582 Question Type : MCQ Option Shuffling : Yes Display Question Number : Yes
Single Line Question Option : No Option Orientation : Vertical

Correct : 1 Wrong : 0.25

Let x be the largest number of 4 digits that when added to 5231 is divisible by 12, 15, 27, 32, 36 and 40. If x is divided by 523, the remainder will be:

Options :

✖ 393

✖ 403

✔ 407

✖ 411

Question Number : 52 Question Id : 1679437583 Question Type : MCQ Option Shuffling : Yes Display Question Number : Yes
Single Line Question Option : No Option Orientation : Vertical

Correct : 1 Wrong : 0.25

The HCF of two numbers is 81 and their sum is 1215. If the difference between them lies between 500 and 600, then the sum of their reciprocals is:

Options :

✖ $\frac{5}{1516}$

✔ $\frac{5}{1188}$

✖ $\frac{9}{1188}$

✖ $\frac{9}{1516}$

Question Number : 53 Question Id : 1679437584 Question Type : MCQ Option Shuffling : Yes Display Question Number : Yes
Single Line Question Option : No Option Orientation : Vertical

Correct : 1 Wrong : 0.25

Points A and B are 105 km apart. Two cars, X and Y, start simultaneously from A and B, respectively. If they move towards each other, they meet after 1 hour; however, if they move in the same direction, they meet after 7 hours. What is the ratio of the speeds of X and Y?

Options :

✖ 3 : 2

✓ 4 : 3

✗ 8 : 7

✗ 11 : 10

Question Number : 54 Question Id : 1679437585 Question Type : MCQ Option Shuffling : Yes Display Question Number : Yes
Single Line Question Option : No Option Orientation : Vertical

Correct : 1 Wrong : 0.25

Person A can complete $\frac{1}{3}$ of a certain task in 5 days, Person B can complete $\frac{2}{5}$ of the same task in 10 days and Person C can complete $\frac{3}{4}$ of the same task in 15 days. They worked together for 4 days. The remaining work will be completed by B alone in:

Options :

✗ $5\frac{3}{5}$ days

✗ $5\frac{2}{5}$ days

✓ $9\frac{1}{3}$ days

✗ $8\frac{2}{3}$ days

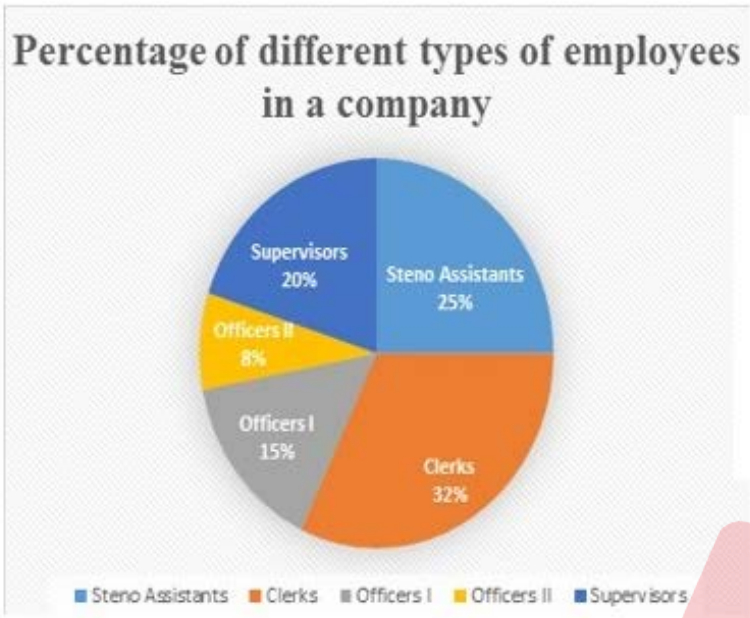
Sub-Section Number: 2
Sub-Section Id: 167943441
Question Shuffling Allowed : Yes

Question Id : 1679437586 Question Type : COMPREHENSION Sub Question Shuffling Allowed : Yes Group Comprehension Questions : No

Question Numbers : (55 to 56)

Question Label : Comprehension

Study the following pie chart and table and answer the questions that follow.



Percentage of female employees

Employees	Females
Steno Assistants	52%
Supervisors	38%
Clerks	55%
Officer II	45%
Officer I	47%

Sub questions

Question Number : 55 Question Id : 1679437587 Question Type : MCQ Option Shuffling : Yes Display Question Number : Yes
Single Line Question Option : No Option Orientation : Vertical
Correct : 1 Wrong : 0.25

The number of female employees working as Clerks and Officer II together exceeds the number of male employees working as Supervisors and Officers I by:

Options :

✔ 47

✘ 51

✘ 147

✘ 151

Note: For this question, discrepancy is found in question/answer. So,this question is ignored for all candidates.

Question Number : 56 Question Id : 1679437588 Question Type : MCQ Option Shuffling : Yes Display Question Number : Yes
Single Line Question Option : No Option Orientation : Vertical
Correct : 1 Wrong : 0.25

The total number of male employees working as Steno Assistants and Clerks is approximately what per cent of the total number of female employees working in the company?

Options :

✔ 43%

✘ 45%

✘ 51%

✘ 54%

Note: For this question, discrepancy is found in question/answer. So,this question is ignored for all candidates.

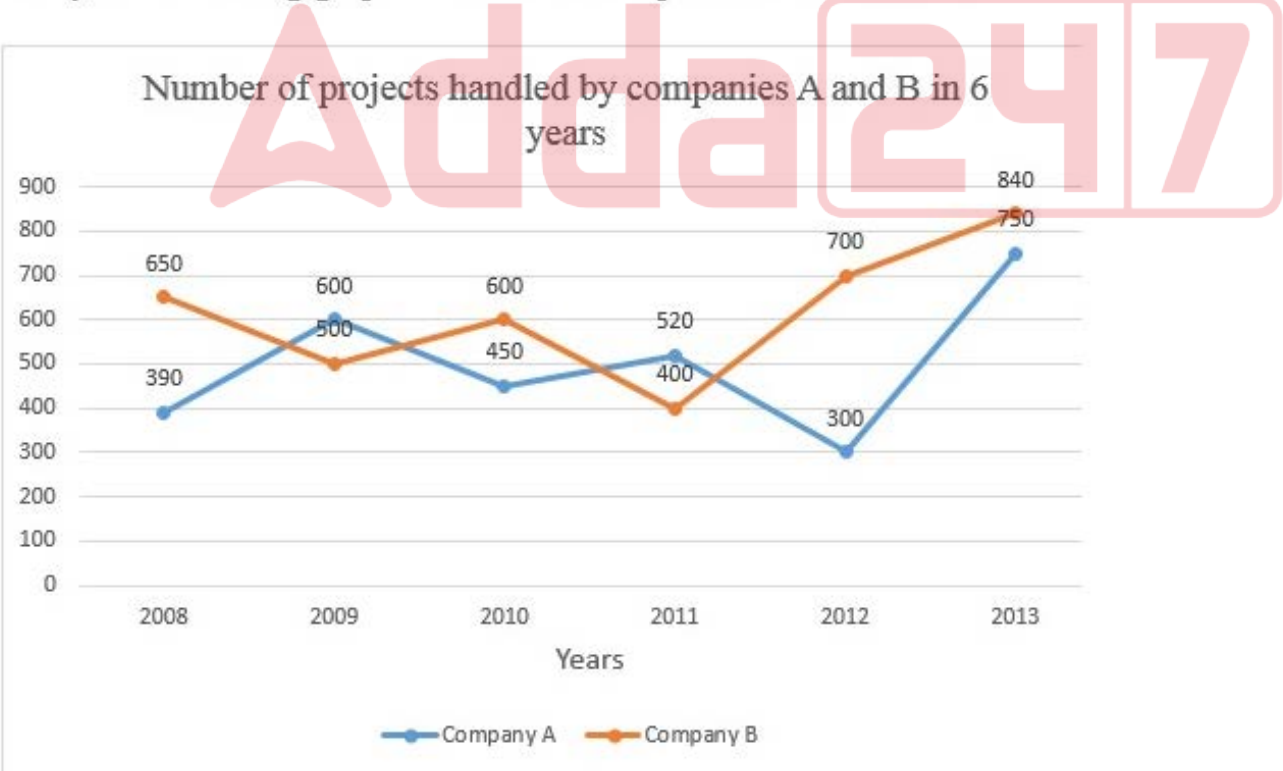
Sub-Section Number: 3
Sub-Section Id: 167943442
Question Shuffling Allowed : Yes

Question Id : 1679437589 Question Type : COMPREHENSION Sub Question Shuffling Allowed : Yes Group Comprehension Questions : No

Question Numbers : (57 to 58)

Question Label : Comprehension

Study the following graph and answer the questions that follow.



Sub questions

Question Number : 57 Question Id : 1679437590 Question Type : MCQ Option Shuffling : Yes Display Question Number : Yes Single Line Question Option : No Option Orientation : Vertical

Correct : 1 Wrong : 0.25

What is the difference between the average number of projects handled by company A during 2008, 2010 and 2012 and the average number of projects handled by company B during 2009, 2011 and 2013?

Options :

✖ 198

✔ 200

✖ 203

✖ 208

Question Number : 58 Question Id : 1679437591 Question Type : MCQ Option Shuffling : Yes Display Question Number : Yes
Single Line Question Option : No Option Orientation : Vertical

Correct : 1 Wrong : 0.25

The total number of items handled by company A during 2009, 2011 and 2013 is what per cent less than the total number of items handled by company B during 2009 to 2012?

Options :

✖ 18%

✖ 17.5%

✖ 16.5%

✔ 15%

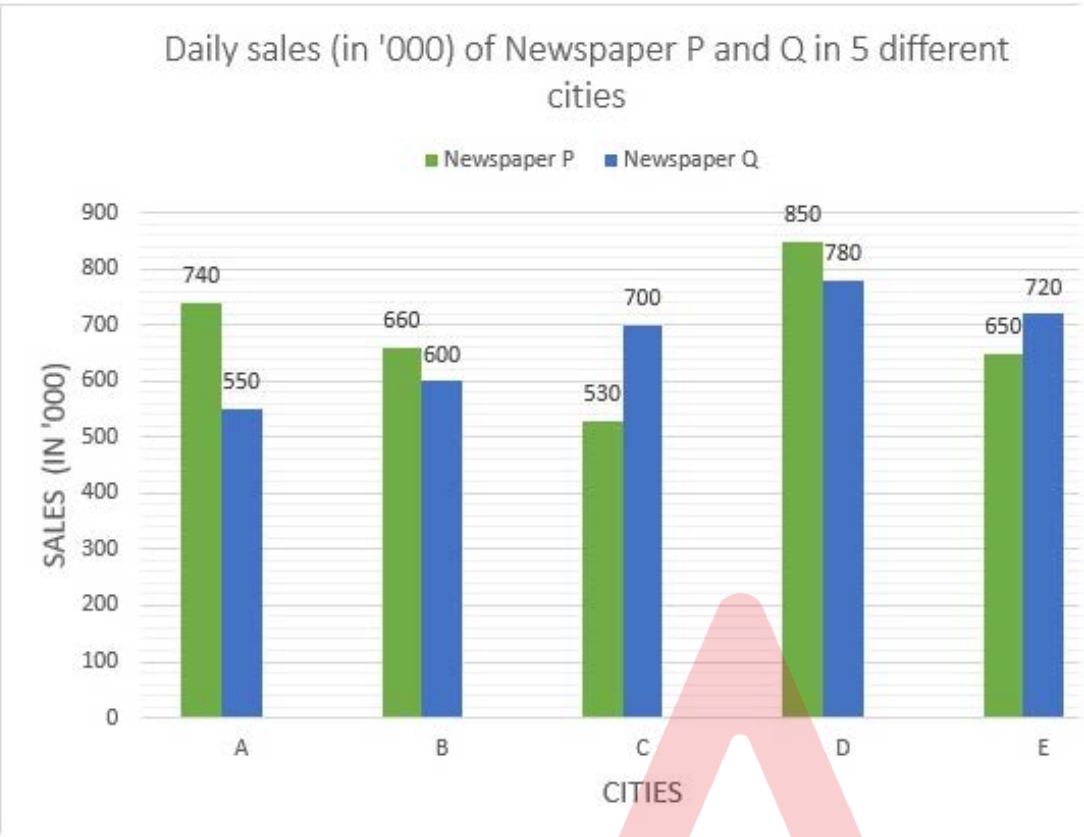
Sub-Section Number: 4
Sub-Section Id: 167943443
Question Shuffling Allowed : Yes

Question Id : 1679437592 Question Type : COMPREHENSION Sub Question Shuffling Allowed : Yes Group Comprehension Questions : No

Question Numbers : (59 to 60)

Question Label : Comprehension

Study the following bar graph and answer the questions that follow.



Sub questions

Question Number : 59 Question Id : 1679437593 Question Type : MCQ Option Shuffling : Yes Display Question Number : Yes
Single Line Question Option : No Option Orientation : Vertical

Correct : 1 Wrong : 0.25

What is the ratio of the average daily sale of Newspaper P in cities A, C and E to that of Newspaper Q in cities B, D and E?

Options :

✗ 31 : 35

✗ 33 : 34

✗ 32 : 33

✓ 32 : 35

Question Number : 60 Question Id : 1679437594 Question Type : MCQ Option Shuffling : Yes Display Question Number : Yes
Single Line Question Option : No Option Orientation : Vertical

Correct : 1 Wrong : 0.25

Total daily sale of Newspaper P in cities D and E is what per cent of the total sale of Newspaper Q in all the cities (correct to one decimal place)?

Options :

✖ 43.7%

✖ 43.4%

✔ 44.8%

✖ 44.9%

General English	
Group Number :	4
Group Id :	167943165
Group Maximum Duration :	0
Group Minimum Duration :	0
Revisit allowed for view? :	No
Revisit allowed for edit? :	No
Break time:	0
Group Marks:	20

General English	
Section Id :	167943224
Section Number :	1
Section type :	Online
Mandatory or Optional:	Mandatory
Number of Questions:	16
Number of Questions to be attempted:	16
Section Marks:	20
Display Number Panel:	Yes
Group All Questions:	No

Sub-Section Number:	1
Sub-Section Id:	167943444
Question Shuffling Allowed :	Yes

Question Number : 61 Question Id : 1679437595 Question Type : MCQ Option Shuffling : Yes Display Question Number : Yes
Single Line Question Option : No Option Orientation : Vertical
Correct : 1 Wrong : 0.25

Choose the correct SYNONYM of:

GRATITUDE

Options :

✖ Ingratitude

✖ Deprivation

✖ Kindness

✔ Thankfulness

Question Number : 62 Question Id : 1679437596 Question Type : MCQ Option Shuffling : Yes Display Question Number : Yes
Single Line Question Option : No Option Orientation : Vertical

Correct : 1 Wrong : 0.25

Choose the correct ANTONYM of:

DISTURBANCE

Options :

✖ Sermon

✖ Address

✔ Calm

✖ Commotion

Question Number : 63 Question Id : 1679437597 Question Type : MCQ Option Shuffling : Yes Display Question Number : Yes
Single Line Question Option : No Option Orientation : Vertical

Correct : 1 Wrong : 0.25

Choose the correct ANTONYM of the underlined phrase to fill in the blank.

We thought we could do without the cook's services, but within a few days, we realised how _____ she was.

Options :

✖ good-natured

✖ stingy

✔ indispensable

✖ generous

Question Number : 64 Question Id : 1679437598 Question Type : MCQ Option Shuffling : Yes Display Question Number : Yes
Single Line Question Option : No Option Orientation : Vertical

Correct : 1 Wrong : 0.25

Fill in the blank with the correct word.

The speech was on quite an interesting topic. Everyone in _____ audience sat through till the end.

Options :

✖ any

✘ an

✔ the

✘ a

Question Number : 65 Question Id : 1679437599 Question Type : MCQ Option Shuffling : Yes Display Question Number : Yes
Single Line Question Option : No Option Orientation : Vertical

Correct : 1 Wrong : 0.25

Fill in the blank with the appropriate word(s).

Arjun had a tough time climbing the last stretch of the peak. It is only when he finally _____ the top that he realised what a tough time he had in conquering it.

Options :

✘ reaches

✘ had reach

✘ was reaching

✔ reached

Question Number : 66 Question Id : 1679437600 Question Type : MCQ Option Shuffling : Yes Display Question Number : Yes
Single Line Question Option : No Option Orientation : Vertical

Correct : 1 Wrong : 0.25

Fill in the blank with the appropriate word.

In my winter vacation, I _____ visit my uncle who lives in Mumbai.

Options :

✘ increasingly

✘ rapidly

✘ gradually

✔ usually

Question Number : 67 Question Id : 1679437601 Question Type : MCQ Option Shuffling : Yes Display Question Number : Yes
Single Line Question Option : No Option Orientation : Vertical

Correct : 1 Wrong : 0.25

In the following sentences, four words or phrases have been underlined. One of them is incorrect. Choose the INCORRECT word or phrase from the given options.

The quality of the material used in the construction of the bridge was so poor that it crumbled during the rainy season and many people were crushing under it.

Options :

- ✗ quality of
- ✗ the construction
- ✗ that it
- ✓ were crushing under

Question Number : 68 Question Id : 1679437602 Question Type : MCQ Option Shuffling : Yes Display Question Number : Yes
Single Line Question Option : No Option Orientation : Vertical

Correct : 1 Wrong : 0.25

In the following sentences, four words or phrases have been underlined. One of them is incorrect. Choose the INCORRECT word or phrase from the given options.

The security officer announced, "There has been a fire in the basement to the hotel. Everyone is advised to evacuate the hotel immediately."

Options :

- ✗ announced
- ✗ has been
- ✓ to the hotel
- ✗ is advised

Question Number : 69 Question Id : 1679437603 Question Type : MCQ Option Shuffling : Yes Display Question Number : Yes
Single Line Question Option : No Option Orientation : Vertical

Correct : 1 Wrong : 0.25

Choose the PASSIVE VOICE form of the given sentence.

The ticket checkers checked the tickets of all spectators carefully.

Options :

- ✗ The tickets of all spectators were being checked carefully by the ticket checkers.
- ✗ The spectators were stopped by the ticket checkers for checking of their tickets.
- ✓ The tickets of all spectators were checked carefully by the ticket checkers.

✘ The ticket checkers were checking the tickets of all spectators carefully.

Question Number : 70 Question Id : 1679437604 Question Type : MCQ Option Shuffling : Yes Display Question Number : Yes
Single Line Question Option : No Option Orientation : Vertical

Correct : 1 Wrong : 0.25

Choose the most appropriate INDIRECT SPEECH for the following sentence.

“What a lovely day!” said Anu, “Let’s go on a picnic to Suraj Kund”.

Options :

- ✔ Anu exclaimed that it was a lovely day and proposed that they should go on a picnic to Suraj Kund.
- ✘ Anu exclaimed that “it was a lovely day and proposed that they should go on a picnic to Suraj Kund”.
- ✘ Anu was exclaiming that it was a lovely day and proposed that they should go on a picnic to Suraj Kund.
- ✘ Anu was suggesting that they should go on a picnic to Suraj Kund as it was a lovely day.

Question Number : 71 Question Id : 1679437605 Question Type : MCQ Option Shuffling : Yes Display Question Number : Yes
Single Line Question Option : No Option Orientation : Vertical

Correct : 1 Wrong : 0.25

Choose the best option to combine the given sentences.

Rachna has made this mess. She must clear it up.

Options :

- ✘ Rachna must be clearing it up the mess she has made.
- ✘ Rachna whom has made this mess must clear it up.
- ✔ Since Rachna has made this mess, she must clear it up.
- ✘ Rachna when she has made this mess she must clear it up.

Question Number : 72 Question Id : 1679437606 Question Type : MCQ Option Shuffling : Yes Display Question Number : Yes
Single Line Question Option : No Option Orientation : Vertical

Correct : 1 Wrong : 0.25

Choose the sentence that is correctly punctuated.

Options :

- ✘ The manager “Who was extremely dissatisfied with Rohit’s work said, I think you need to improve the way you work”.
- ✘ The manager who was extremely dissatisfied with Rohit’s work said I think you need to improve the way you work.

- ✓ The manager, who was extremely dissatisfied with Rohit's work, said, "I think you need to improve the way you work".
- ✗ The manager who was extremely dissatisfied with Rohit's work said "I think you need to improve the way you work".

Question Number : 73 Question Id : 1679437607 Question Type : MCQ Option Shuffling : Yes Display Question Number : Yes
Single Line Question Option : No Option Orientation : Vertical

Correct : 1 Wrong : 0.25

Choose the word that is correctly spelt.

Options :

- ✗ Arogant
- ✓ Grammar
- ✗ Diference
- ✗ Comittee

Question Number : 74 Question Id : 1679437608 Question Type : MCQ Option Shuffling : Yes Display Question Number : Yes
Single Line Question Option : No Option Orientation : Vertical

Correct : 1 Wrong : 0.25

Fill in the blank with the appropriate idiom/phrase.

Please do not _____; I want to know exactly what happened in my absence.

Options :

- ✓ beat about the bush
- ✗ put your head together
- ✗ keep your fingers crossed
- ✗ kill two birds with one stone

Question Number : 75 Question Id : 1679437609 Question Type : MCQ Option Shuffling : Yes Display Question Number : Yes
Single Line Question Option : No Option Orientation : Vertical

Correct : 1 Wrong : 0.25

Fill in the blank with appropriate words.

Sarita's plans of clearing the class XII exam _____ when she was told she could not appear for more than 3 papers at a time.

Options :

- ✗ became child's play
- ✗ had a silver lining

✘ were put on trial

✔ were dashed to the ground

Sub-Section Number: 2
Sub-Section Id: 167943445
Question Shuffling Allowed : Yes

Question Id : 1679437610 Question Type : COMPREHENSION Sub Question Shuffling Allowed : Yes Group Comprehension Questions : No

Question Numbers : (76 to 80)

Question Label : Comprehension

Read the following passage and answer the questions that follow.

Do you ever find yourself watching an awful TV programme, unable to turn it off? The raucous noises, explosions of gunfire, are upsetting, yet you don't get up and turn it off. Why do you torture yourself in this way? Watching a bad TV programme, we become the TV programme.

We are what we feel and perceive. If we are angry, we are the anger. We can be anything we want. In a single day, how many times do we become lost and scattered because of them? We must be very careful to protect our fate and our peace.

We can open our windows to so many miracles and look at any one of them with awareness. This way, even while sitting beside a clear, flowing stream, listening to beautiful music or watching an excellent movie, we need not lose ourselves entirely in the stream, the music or the film. We can continue to be aware of ourselves and our breathing.

We may want to leave the city and go off to the countryside. There we can become one with the quiet forest, and rediscover and restore ourselves, without being swept away by the chaos of the 'outside world'. The fresh and silent woods help us remain in awareness, and when our awareness is well-rooted, and we can maintain it without faltering, we may wish to return to the city and remain there, less troubled.

But sometimes, we have to find the refreshing and peaceful elements that can heal us right in the midst of our busy lives. We may wish to visit a good friend who can comfort us or go for a walk in a park and enjoy the trees and the cool breeze. Whether we are in the city, the countryside or the wilderness, we need to sustain ourselves by choosing our surroundings carefully and nourishing our awareness in each moment.

Sub questions

Question Number : 76 Question Id : 1679437611 Question Type : MCQ Option Shuffling : Yes Display Question Number : Yes
Single Line Question Option : No Option Orientation : Vertical

Correct : 1 Wrong : 0.25

Why is it NOT advisable to watch anything that can disturb you?

Options :

- ☒ Because it becomes a part of you
- ☐ Because it makes you peaceful
- ☐ Because it is fun
- ☐ Because it is exciting

Question Number : 77 Question Id : 1679437612 Question Type : MCQ Option Shuffling : Yes Display Question Number : Yes
Single Line Question Option : No Option Orientation : Vertical

Correct : 1 Wrong : 0.25

We can become what we want by:

Options :

- ☐ letting miracles happen.
- ☒ remaining calm and peaceful.
- ☐ watching programmes on TV.
- ☐ controlling other people's actions.

Question Number : 78 Question Id : 1679437613 Question Type : MCQ Option Shuffling : Yes Display Question Number : Yes
Single Line Question Option : No Option Orientation : Vertical

Correct : 1 Wrong : 0.25

'The chaos of the outside world' refers to:

Options :

- ☒ the physical world full of stress and noise.
- ☐ troubled thoughts and confusion in the mind.
- ☐ walking amidst forests in the countryside.
- ☐ listening to music and watching TV programmes.

Question Number : 79 Question Id : 1679437614 Question Type : MCQ Option Shuffling : Yes Display Question Number : Yes
Single Line Question Option : No Option Orientation : Vertical

Correct : 1 Wrong : 0.25

Peace and calm can be found by:

Options :

- ✗ opening the windows and looking at miracles.
- ✓ simply spending time with our own thoughts.
- ✗ listening to good talks.
- ✗ losing ourselves in the world of confusion.

Question Number : 80 Question Id : 1679437615 Question Type : MCQ Option Shuffling : Yes Display Question Number : Yes
Single Line Question Option : No Option Orientation : Vertical

Correct : 1 Wrong : 0.25

The author believes that:

Options :

- ✓ people's inner well-being depends on their own lifestyles.
- ✗ people should leave cities and move to the countryside.
- ✗ people have no choice in choosing their thoughts or surroundings.
- ✗ thinking of the past and the future is good for people.

General Hindi

Group Number :	5
Group Id :	167943166
Group Maximum Duration :	0
Group Minimum Duration :	0
Revisit allowed for view? :	No
Revisit allowed for edit? :	No
Break time:	0
Group Marks:	20

General Hindi

Section Id :	167943225
Section Number :	1

Section type :	Online
Mandatory or Optional:	Mandatory
Number of Questions:	16
Number of Questions to be attempted:	16
Section Marks:	20
Display Number Panel:	Yes
Group All Questions:	No

Sub-Section Number:	1
Sub-Section Id:	167943446
Question Shuffling Allowed :	Yes

Question Id : 1679437616 Question Type : COMPREHENSION Sub Question Shuffling Allowed : Yes Group Comprehension Questions : No

Question Numbers : (81 to 85)

Question Label : Comprehension

नीचे दिये गए गद्यांश को पढ़कर पूछे गये प्रश्नों के उत्तर दीजिए।

जिस प्रकार भक्ति आंदोलन ने हिन्दी को कबीर, जायसी, सूर, तुलसी, मीरा जैसे रचनाकार दिए, उसी प्रकार स्वाधीनता आंदोलन की देन प्रेमचंद, रामचंद्र शुक्ल, निराला, प्रसाद, पंत और महादेवी वर्मा हैं। स्वाधीनता का लक्ष्य इस युग में अधिक स्पष्ट हुआ, वैज्ञानिक दृष्टि अधिक सक्रिय हुई। वैज्ञानिकता का अर्थ केवल भौतिक विज्ञान नहीं, समाज विज्ञान भी है। रूस में 1917 ई. की समाजवादी क्रांति ने मार्क्सवाद को कभी परस्पर विरोधी और कभी एक दूसरे का पूरक समझा। इस दौर में फ्रायड के मनोविश्लेषण का प्रभाव भी रचनाकारों पर पड़ा। अतः इस काल में रचित साहित्य पर इन सभी विचारों का प्रभाव मिलता है। इसके कारण साहित्य में एक ओर यथार्थ को परखने की सूक्ष्म दृष्टि आई और दूसरी ओर कल्पना-प्रवणता दिखलाई पड़ती है। वैज्ञानिक दृष्टि स्वाधीन चेतना से मिलकर यथार्थपरक और कल्पनाशील हुई। यथार्थपरकता और कल्पनाशीलता ऊपर-ऊपर से ही परस्पर विरोधी लगती हैं। वैज्ञानिक विकास जब ज्ञान के लिए नए क्षितिज खोलता है, तो मनुष्य इस ज्ञान के आलोक में जीवन-जगत् का नया परिचय प्राप्त करता है। वह इन्हें पहले से अधिक समझता है। यह यथार्थ की बेहतर परख हुई। लेकिन यही नई जानकारी उसे कल्पना के पंख भी प्रदान करती है।

Sub questions

Question Number : 81 Question Id : 1679437617 Question Type : MCQ Option Shuffling : Yes Display Question Number : Yes
Single Line Question Option : No Option Orientation : Vertical

Correct : 1 Wrong : 0.25

भक्ति आंदोलन की देन नहीं हैं:

Options :

✘ कबीर

✘ जायसी

✘ तुलसी

✔ प्रेमचंद

Question Number : 82 Question Id : 1679437618 Question Type : MCQ Option Shuffling : Yes Display Question Number : Yes
Single Line Question Option : No Option Orientation : Vertical

Correct : 1 Wrong : 0.25

स्वाधीनता आंदोलन की देन नहीं हैं:

Options :

✘ निराला

✘ प्रसाद

✔ सूर

✘ पंत

Question Number : 83 Question Id : 1679437619 Question Type : MCQ Option Shuffling : Yes Display Question Number : Yes
Single Line Question Option : No Option Orientation : Vertical

Correct : 1 Wrong : 0.25

रूस में समाजवादी क्रान्ति कब हुई?

Options :

✘ 1907

✔ 1917

✘ 1927

✘ 1971

Question Number : 84 Question Id : 1679437620 Question Type : MCQ Option Shuffling : Yes Display Question Number : Yes
Single Line Question Option : No Option Orientation : Vertical
Correct : 1 Wrong : 0.25

मनोविश्लेषण का संबंध किससे है?

Options :

✓ फ्रायड

✗ मार्क्स

✗ लेनिन

✗ माओत्से

Question Number : 85 Question Id : 1679437621 Question Type : MCQ Option Shuffling : Yes Display Question Number : Yes
Single Line Question Option : No Option Orientation : Vertical
Correct : 1 Wrong : 0.25

वैज्ञानिक दृष्टि किस स्वाधीन चेतना से मिलकर
हुई?

Options :

✗ अदर्शपरक और कल्पनाशील

✗ अदर्शपरक और विचारशील

✓ यथार्थपरक और कल्पनाशील

✗ यथार्थपरक और विचारशील

Sub-Section Number: 2
Sub-Section Id: 167943447
Question Shuffling Allowed : Yes

Question Number : 86 Question Id : 1679437622 Question Type : MCQ Option Shuffling : Yes Display Question Number : Yes
Single Line Question Option : No Option Orientation : Vertical
Correct : 1 Wrong : 0.25

निम्नलिखित में तत्सम शब्द है:

Options :

✗ अचरज

✓ अमृत

✗ आँख

✗ आम

Question Number : 87 Question Id : 1679437623 Question Type : MCQ Option Shuffling : Yes Display Question Number : Yes
Single Line Question Option : No Option Orientation : Vertical

Correct : 1 Wrong : 0.25

निम्नलिखित में तद्रव शब्द है:

Options :

✗ दृष्टि

✗ निर्झर

✗ जीर्ण

✓ तलवार

Question Number : 88 Question Id : 1679437624 Question Type : MCQ Option Shuffling : Yes Display Question Number : Yes
Single Line Question Option : No Option Orientation : Vertical

Correct : 1 Wrong : 0.25

‘अकथनीय’ का अर्थ है:

Options :

✓ जो कहा न जा सके

✗ जो सुना न जा सके

✗ जो सहा न जा सके

✗ जो देखा न जा सके

Question Number : 89 Question Id : 1679437625 Question Type : MCQ Option Shuffling : Yes Display Question Number : Yes
Single Line Question Option : No Option Orientation : Vertical

Correct : 1 Wrong : 0.25

‘अन्वेषण’ का संधि विच्छेद होगा:

Options :

✗ अन्+ एषण

✖ अन्+ वेषण

✖ अनु+ वेषण

✔ अनु+ एषण

Question Number : 90 Question Id : 1679437626 Question Type : MCQ Option Shuffling : Yes Display Question Number : Yes
Single Line Question Option : No Option Orientation : Vertical

Correct : 1 Wrong : 0.25

‘आजन्म’ में समास है:

Options :

✖ तत्पुरुष

✖ द्वंद्व

✔ अव्ययीभाव

✖ द्विगु

Question Number : 91 Question Id : 1679437627 Question Type : MCQ Option Shuffling : Yes Display Question Number : Yes
Single Line Question Option : No Option Orientation : Vertical

Correct : 1 Wrong : 0.25

निम्नलिखित में कौन सा शब्द संज्ञा है?

Options :

✔ आकाश

✖ नया

✖ पुराना

✖ ताजा

Question Number : 92 Question Id : 1679437628 Question Type : MCQ Option Shuffling : Yes Display Question Number : Yes
Single Line Question Option : No Option Orientation : Vertical

Correct : 1 Wrong : 0.25

निम्नलिखित में से कौन सा शब्द पुलिङ्ग है?

Options :

✖ क्षमा

✓ मित्र

✗ शोभा

✗ सभा

Question Number : 93 Question Id : 1679437629 Question Type : MCQ Option Shuffling : Yes Display Question Number : Yes
Single Line Question Option : No Option Orientation : Vertical

Correct : 1 Wrong : 0.25

‘पानी बरसा।’ कैसा वाक्य है?

Options :

✓ सरल वाक्य

✗ मिश्र वाक्य

✗ संयुक्त वाक्य

✗ उपवाक्य

Question Number : 94 Question Id : 1679437630 Question Type : MCQ Option Shuffling : Yes Display Question Number : Yes
Single Line Question Option : No Option Orientation : Vertical

Correct : 1 Wrong : 0.25

‘तुम खाओ।’ वाक्य है:

Options :

✗ निषेधवाचक

✓ आज्ञावाचक

✗ प्रश्नवाचक

✗ विस्मयवाचक

Question Number : 95 Question Id : 1679437631 Question Type : MCQ Option Shuffling : Yes Display Question Number : Yes
Single Line Question Option : No Option Orientation : Vertical

Correct : 1 Wrong : 0.25

‘बाघ और बकरी एक घाट पानी पीती है।’ वाक्य में अशुद्ध अंश है:

Options :

✗ बाघ और बकरी

✖ एक घाट

✖ पानी

✔ पीती है।

Question Number : 96 Question Id : 1679437632 Question Type : MCQ Option Shuffling : Yes Display Question Number : Yes
Single Line Question Option : No Option Orientation : Vertical

Correct : 1 Wrong : 0.25

‘असुर’ का पर्यायवाची है:

Options :

✖ पावक

✖ धूमकेतु

✔ दनुज

✖ दहन

Question Number : 97 Question Id : 1679437633 Question Type : MCQ Option Shuffling : Yes Display Question Number : Yes
Single Line Question Option : No Option Orientation : Vertical

Correct : 1 Wrong : 0.25

‘दास’ का पर्यायवाची नहीं है:

Options :

✔ शोक

✖ अनुचर

✖ चाकर

✖ सेवक

Question Number : 98 Question Id : 1679437634 Question Type : MCQ Option Shuffling : Yes Display Question Number : Yes
Single Line Question Option : No Option Orientation : Vertical

Correct : 1 Wrong : 0.25

‘सिंह’ का पर्यायवाची है:

Options :

✖ दिनकर

✓ मृगेन्द्र

✗ आदित्य

✗ तड़ाग

Question Number : 99 Question Id : 1679437635 Question Type : MCQ Option Shuffling : Yes Display Question Number : Yes
Single Line Question Option : No Option Orientation : Vertical

Correct : 1 Wrong : 0.25

‘अगम’ का विलोम है:

Options :

✗ सहज

✗ सरल

✗ गम

✓ सुगम

Question Number : 100 Question Id : 1679437636 Question Type : MCQ Option Shuffling : Yes Display Question Number : Yes
Single Line Question Option : No Option Orientation : Vertical

Correct : 1 Wrong : 0.25

‘हित’ का विलोम होगा:

Options :

✗ भला

✗ बुरा

✓ अहित

✗ दुःख

Subject Related

Group Number :	6
Group Id :	167943167
Group Maximum Duration :	0
Group Minimum Duration :	0
Revisit allowed for view? :	No
Revisit allowed for edit? :	No
Break time:	0

Group Marks: 20

	Subject Related
Section Id :	167943226
Section Number :	1
Section type :	Online
Mandatory or Optional:	Mandatory
Number of Questions:	20
Number of Questions to be attempted:	20
Section Marks:	20
Display Number Panel:	Yes
Group All Questions:	No

Sub-Section Number:	1
Sub-Section Id:	167943448
Question Shuffling Allowed :	Yes

Question Number : 101 Question Id : 1679437637 Question Type : MCQ Option Shuffling : Yes Display Question Number : Yes
Single Line Question Option : No Option Orientation : Vertical
Correct : 1 Wrong : 0.25

Which of the following perceptions is related to Opportunity Cost?

Options :

- ☒ Next best alternative that is given up
- ☐ Supply of public goods
- ☐ Satisfaction of Wants
- ☐ Choice among different goods

Question Number : 102 Question Id : 1679437638 Question Type : MCQ Option Shuffling : Yes Display Question Number : Yes
Single Line Question Option : No Option Orientation : Vertical
Correct : 1 Wrong : 0.25

Production possibility curve represents:

Options :

- ☐ Alarming production
- ☒ Opportunity Set
- ☐ Unattainable combinations
- ☐ Group of options in openness

Question Number : 103 Question Id : 1679437639 Question Type : MCQ Option Shuffling : Yes Display Question Number : Yes
Single Line Question Option : No Option Orientation : Vertical

Correct : 1 Wrong : 0.25

Why the production possibility curve is concave?

Options :

- ☐ Because of the law of diminishing opportunity cost
- ☐ Because of the law of constant opportunity cost
- ☒ Because of the law of increasing opportunity cost
- ☐ Because economic resources are completely adaptable to alternative uses

Question Number : 104 Question Id : 1679437640 Question Type : MCQ Option Shuffling : Yes Display Question Number : Yes
Single Line Question Option : No Option Orientation : Vertical

Correct : 1 Wrong : 0.25

Which of the following basic economic concept is not demonstrated by a production possibility curve?

Options :

- ☐ Scarcity of resources
- ☐ Choice by society from the opportunity set
- ☒ Open possibility
- ☐ Opportunity cost

Question Number : 105 Question Id : 1679437641 Question Type : MCQ Option Shuffling : Yes Display Question Number : Yes
Single Line Question Option : No Option Orientation : Vertical

Correct : 1 Wrong : 0.25

What is problem of choice?

Options :

- ☒ Choice among multiple wants which are to be satisfied
- ☐ Choice of equal society
- ☐ Choice of limited wants
- ☐ Choice of resources

Question Number : 106 Question Id : 1679437642 Question Type : MCQ Option Shuffling : Yes Display Question Number : Yes
Single Line Question Option : No Option Orientation : Vertical

Correct : 1 Wrong : 0.25

Read the following two Assertions carefully and select the correct option regarding the given Assertions.

Assertion (A): Economic growth depends on capital accumulation and technological progress.

Assertion (B): For poor developing country, capital accumulation is very much essential.

Options :

- ☒ Both A and B are individually true
- ☐ A is false but B is true
- ☐ A is true but B is false
- ☐ Both A and B are individually false

Question Number : 107 Question Id : 1679437643 Question Type : MCQ Option Shuffling : Yes Display Question Number : Yes
Single Line Question Option : No Option Orientation : Vertical

Correct : 1 Wrong : 0.25

Which of the following statement is not true?

Options :

- ☐ Macroeconomics deals with the economy as a whole
- ☒ Testing economic model is hardly complicated
- ☐ Microeconomics is concerned with Individual markets
- ☐ 'Ceteris Paribus' means other things remaining the same

Question Number : 108 Question Id : 1679437644 Question Type : MCQ Option Shuffling : Yes Display Question Number : Yes
Single Line Question Option : No Option Orientation : Vertical

Correct : 1 Wrong : 0.25

Which of the following statements is false?

Options :

- ☐ Marshall's economics is a study of material welfare of man
- ☐ Robbin's economics is a science of scarcity and choice
- ☒ The concept of scarcity is valid only in poor countries
- ☐ Economics is an enquiry into the nature and causes of wealth of nations

Question Number : 109 Question Id : 1679437645 Question Type : MCQ Option Shuffling : Yes Display Question Number : Yes
Single Line Question Option : No Option Orientation : Vertical

Correct : 1 Wrong : 0.25

Who said, "Economics is what economist do".

Options :

✗ Howard Schultz

✓ Jacob Viner

✗ Lionel Robbin

✗ Paul Samuelson

Question Number : 110 Question Id : 1679437646 Question Type : MCQ Option Shuffling : Yes Display Question Number : Yes
Single Line Question Option : No Option Orientation : Vertical

Correct : 1 Wrong : 0.25

Demand is a Consumer's:

Options :

✗ Desire for a commodity

✗ Willingness to get a commodity

✗ Ability to get a commodity

✓ Desire to purchase and ability to pay for a commodity

Question Number : 111 Question Id : 1679437647 Question Type : MCQ Option Shuffling : Yes Display Question Number : Yes
Single Line Question Option : No Option Orientation : Vertical

Correct : 1 Wrong : 0.25

Which is not the limitation of Consumer's equilibrium under equi-marginal utility?

Options :

✗ Difficult to measure marginal utilities on different commodities

✓ Rational Consumer

✗ Indivisibility of certain goods

✗ Habits and customs of the consumers while spending money

Question Number : 112 Question Id : 1679437648 Question Type : MCQ Option Shuffling : Yes Display Question Number : Yes
Single Line Question Option : No Option Orientation : Vertical

Correct : 1 Wrong : 0.25

One condition of equilibrium of the consumer under indifference curve is:

Options :

- ✘ Marginal Rate of Substitution (MRS) of good x for good y must be increasing.
- ✘ MRS of good x for good y must be less than price ratio of two goods.
- ✔ MRS of good x for good y must be equal to price ratio of two goods.
- ✘ MRS of good x for good y must be more than price ratio of two good.

Question Number : 113 Question Id : 1679437649 Question Type : MCQ Option Shuffling : Yes Display Question Number : Yes
Single Line Question Option : No Option Orientation : Vertical

Correct : 1 Wrong : 0.25

How is the working of the 'income effect' and the 'substitution effect' in case of 'inferior good'?

Options :

- ✘ Income effect outweigh substitution effect
- ✔ Income effect works in opposite direction to the substitution effect
- ✘ Income effect moves and substitution effect remains constant
- ✘ Quantity demanded varies positively with price when negative income effect is weaker than the substitution effect.

Question Number : 114 Question Id : 1679437650 Question Type : MCQ Option Shuffling : Yes Display Question Number : Yes
Single Line Question Option : No Option Orientation : Vertical

Correct : 1 Wrong : 0.25

In terms of Utility Analysis, the price of a commodity is determined by:

Options :

- ✘ Total utility
- ✔ Marginal utility
- ✘ Diminishing marginal utility
- ✘ Equi-marginal utility

Question Number : 115 Question Id : 1679437651 Question Type : MCQ Option Shuffling : Yes Display Question Number : Yes
Single Line Question Option : No Option Orientation : Vertical

Correct : 1 Wrong : 0.25

Which of the following is related to Engle Curve?

Options :

- ✘ Price consumption curve

- ✖ Diminishing marginal rate of substitution curve
- ✔ Income consumption curve
- ✖ Supply curve

Question Number : 116 Question Id : 1679437652 Question Type : MCQ Option Shuffling : Yes Display Question Number : Yes
Single Line Question Option : No Option Orientation : Vertical

Correct : 1 Wrong : 0.25

Decrease in demand means?

Options :

- ✖ Rise in demand due to fall in price
- ✖ Fall in demand due to rise in price
- ✖ More demand at same price
- ✔ Less demand at same price

Question Number : 117 Question Id : 1679437653 Question Type : MCQ Option Shuffling : Yes Display Question Number : Yes
Single Line Question Option : No Option Orientation : Vertical

Correct : 1 Wrong : 0.25

In case of a Giffen commodity, a fall in price tends to:

Options :

- ✖ Increase in demand
- ✔ Decrease in demand
- ✖ Constant demand
- ✖ Extension in demand

Question Number : 118 Question Id : 1679437654 Question Type : MCQ Option Shuffling : Yes Display Question Number : Yes
Single Line Question Option : No Option Orientation : Vertical

Correct : 1 Wrong : 0.25

A demand curve which is horizontal and parallel to the x-axis represents:

Options :

- ✖ Perfectly inelastic demand
- ✔ Infinitely elastic demand

- ✘ Unitary elastic demand
- ✘ Relatively inelastic demand

Question Number : 119 Question Id : 1679437655 Question Type : MCQ Option Shuffling : Yes Display Question Number : Yes
Single Line Question Option : No Option Orientation : Vertical
Correct : 1 Wrong : 0.25

The demand curve has the shape of a rectangular hyperbola when point price elasticity has:

Options :

- ✘ Perfectly elastic demand
- ✘ Perfectly inelastic demand
- ✘ Relatively elastic demand
- ✔ Unitary elasticity throughout on a demand curve

Question Number : 120 Question Id : 1679437656 Question Type : MCQ Option Shuffling : Yes Display Question Number : Yes
Single Line Question Option : No Option Orientation : Vertical
Correct : 1 Wrong : 0.25

Which of the following commodities has the lowest price elasticity of demand?

Options :

- ✔ Common salt
- ✘ Car
- ✘ Coffee
- ✘ Cloth

Subject Related

Group Number :	7
Group Id :	167943168
Group Maximum Duration :	0
Group Minimum Duration :	0
Revisit allowed for view? :	No
Revisit allowed for edit? :	No
Break time:	0
Group Marks:	20

Subject Related	
Section Id :	167943227
Section Number :	1
Section type :	Online
Mandatory or Optional:	Mandatory
Number of Questions:	20
Number of Questions to be attempted:	20
Section Marks:	20
Display Number Panel:	Yes
Group All Questions:	No

Sub-Section Number:	1
Sub-Section Id:	167943449
Question Shuffling Allowed :	Yes

Question Number : 121 Question Id : 1679437657 Question Type : MCQ Option Shuffling : Yes Display Question Number : Yes
Single Line Question Option : No Option Orientation : Vertical
Correct : 1 Wrong : 0.25

What is meant by Land in ‘Economics’?

Options :

- ✗ Soil
- ✓ All-natural resources which have exchange value
- ✗ Mineral deposits only
- ✗ Agricultural land only

Question Number : 122 Question Id : 1679437658 Question Type : MCQ Option Shuffling : Yes Display Question Number : Yes
Single Line Question Option : No Option Orientation : Vertical
Correct : 1 Wrong : 0.25

What quantity of output can be obtained by using Cobb-Douglas production function with different combinations of capital and labour?

Options :

- ✗ Optimum
- ✗ Minimum
- ✗ Unit
- ✓ Maximum

Question Number : 123 Question Id : 1679437659 Question Type : MCQ Option Shuffling : Yes Display Question Number : Yes
Single Line Question Option : No Option Orientation : Vertical
Correct : 1 Wrong : 0.25

The cost that is incurred by a firm, and cannot be recoverable is known as:

Options :

- ☐ Variable cost
- ☒ Sunk Cost
- ☐ Fixed cost
- ☐ Marginal cost

Question Number : 124 Question Id : 1679437660 Question Type : MCQ Option Shuffling : Yes Display Question Number : Yes
Single Line Question Option : No Option Orientation : Vertical

Correct : 1 Wrong : 0.25

Which of the following curves is not U shaped graphically?

Options :

- ☐ Long run average cost
- ☒ Total fixed cost
- ☐ Average variable cost
- ☐ Marginal cost

Question Number : 125 Question Id : 1679437661 Question Type : MCQ Option Shuffling : Yes Display Question Number : Yes
Single Line Question Option : No Option Orientation : Vertical

Correct : 1 Wrong : 0.25

The Isoquant is defined as:

Options :

- ☐ Equal-cost curve
- ☒ Equal-product curve of producer's equilibrium
- ☐ Equal-revenue curve
- ☐ Indifference curve of consumer's equilibrium

Question Number : 126 Question Id : 1679437662 Question Type : MCQ Option Shuffling : Yes Display Question Number : Yes
Single Line Question Option : No Option Orientation : Vertical

Correct : 1 Wrong : 0.25

Under the law of variable proportions, the average and marginal product of the variable factor would finally:

Options :

- ☐ Increase
- ☒ Decrease
- ☐ Become equal
- ☐ Become constant

Question Number : 127 Question Id : 1679437663 Question Type : MCQ Option Shuffling : Yes Display Question Number : Yes
Single Line Question Option : No Option Orientation : Vertical

Correct : 1 Wrong : 0.25

If we increase all factors in a given proportion and the output increases in the same proportion, then returns to scale are said to be:

Options :

- ☐ Increasing returns to scale
- ☒ Linear homogeneous production function
- ☐ Decreasing returns to scale
- ☐ Variable returns to scale

Question Number : 128 Question Id : 1679437664 Question Type : MCQ Option Shuffling : Yes Display Question Number : Yes
Single Line Question Option : No Option Orientation : Vertical

Correct : 1 Wrong : 0.25

The concept of Supply of a commodity refers to:

Options :

- ☐ Stock
- ☒ Flow
- ☐ Both stock and flow
- ☐ Neither stock nor flow

Question Number : 129 Question Id : 1679437665 Question Type : MCQ Option Shuffling : Yes Display Question Number : Yes
Single Line Question Option : No Option Orientation : Vertical

Correct : 1 Wrong : 0.25

If the supply curve is upward-sloping, a rise in price of the commodity results:

Options :

- ☒ Increase in the quantity supplied

- ✗ Decrease in the quantity supplied
- ✗ Increase in supply
- ✗ Decrease in supply

Question Number : 130 Question Id : 1679437666 Question Type : MCQ Option Shuffling : Yes Display Question Number : Yes
Single Line Question Option : No Option Orientation : Vertical

Correct : 1 Wrong : 0.25

Increase in supply occurs due to:

Options :

- ✗ Rise in price of inputs
- ✓ Fall in price of inputs
- ✗ Increase in taxes
- ✗ Downgrading of technology

Question Number : 131 Question Id : 1679437667 Question Type : MCQ Option Shuffling : Yes Display Question Number : Yes
Single Line Question Option : No Option Orientation : Vertical

Correct : 1 Wrong : 0.25

If the supply curve is vertical straight line parallel to the Y-axis, then elasticity of supply will be:

Options :

- ✓ Zero
- ✗ Infinity
- ✗ Unitary
- ✗ Positive

Question Number : 132 Question Id : 1679437668 Question Type : MCQ Option Shuffling : Yes Display Question Number : Yes
Single Line Question Option : No Option Orientation : Vertical

Correct : 1 Wrong : 0.25

Pareto's concept of maximum social welfare is based on?

Options :

- ✗ Cardinal utility
- ✓ Ordinal utility

✖ Immobility of factors of production

✖ Indivisible goods

Question Number : 133 Question Id : 1679437669 Question Type : MCQ Option Shuffling : Yes Display Question Number : Yes
Single Line Question Option : No Option Orientation : Vertical

Correct : 1 Wrong : 0.25

A monopolist can control over:

Options :

✖ Production and price

✔ Either production or price

✖ Production, price and consumers

✖ Neither production nor price

Question Number : 134 Question Id : 1679437670 Question Type : MCQ Option Shuffling : Yes Display Question Number : Yes
Single Line Question Option : No Option Orientation : Vertical

Correct : 1 Wrong : 0.25

Under monopoly, social welfare is:

Options :

✔ Less

✖ High

✖ Constant

✖ Can't be said

Question Number : 135 Question Id : 1679437671 Question Type : MCQ Option Shuffling : Yes Display Question Number : Yes
Single Line Question Option : No Option Orientation : Vertical

Correct : 1 Wrong : 0.25

It will not profitable for the monopolist to discriminate between the two markets, if the price elasticity of demand is:

Options :

✖ Different

✔ Same

✖ Infinity

✘ Zero

Question Number : 136 Question Id : 1679437672 Question Type : MCQ Option Shuffling : Yes Display Question Number : Yes
Single Line Question Option : No Option Orientation : Vertical

Correct : 1 Wrong : 0.25

If price does not cover the average cost in the short run under perfect competition, the firm will even then stay in the market as long as price covers:

Options :

✘ Average fixed cost

✔ Average variable cost

✘ Explicit costs

✘ Some profit is earned

Question Number : 137 Question Id : 1679437673 Question Type : MCQ Option Shuffling : Yes Display Question Number : Yes
Single Line Question Option : No Option Orientation : Vertical

Correct : 1 Wrong : 0.25

Which of the following is the condition of equilibrium of the firm in the short run under perfect competition?

Options :

✘ Average cost is equal to marginal cost

✘ Average cost is equal to price

✔ Marginal cost is equal to price

✘ Average is more than marginal cost

Question Number : 138 Question Id : 1679437674 Question Type : MCQ Option Shuffling : Yes Display Question Number : Yes
Single Line Question Option : No Option Orientation : Vertical

Correct : 1 Wrong : 0.25

The concept of selling costs under imperfect competition was introduced in the Price Theory by:

Options :

✘ Stonier and Hague

✔ Edward H. Chamberlin

✘ John Robinson

✘ James E. Hibdon

Question Number : 139 Question Id : 1679437675 Question Type : MCQ Option Shuffling : Yes Display Question Number : Yes
Single Line Question Option : No Option Orientation : Vertical

Correct : 1 Wrong : 0.25

Under the influence of selling costs in imperfect competition, price elasticity of demand for a profit maximizing firm will:

Options :

✔ Decline

✘ Increase

✘ Constant

✘ Infinity

Question Number : 140 Question Id : 1679437676 Question Type : MCQ Option Shuffling : Yes Display Question Number : Yes
Single Line Question Option : No Option Orientation : Vertical

Correct : 1 Wrong : 0.25

Above the point of kink, a kinked demand curve has a:

Options :

✔ Higher elasticity

✘ Lower elasticity

✘ Uniform elasticity

✘ Can't be said

Group Number :	8
Group Id :	167943169
Group Maximum Duration :	0
Group Minimum Duration :	0
Revisit allowed for view? :	No
Revisit allowed for edit? :	No
Break time:	0
Group Marks:	20

Subject Related

Section Id :	167943228
Section Number :	1
Section type :	Online
Mandatory or Optional:	Mandatory

Number of Questions: 20
Number of Questions to be attempted: 20
Section Marks: 20
Display Number Panel: Yes
Group All Questions: No

Sub-Section Number: 1
Sub-Section Id: 167943450
Question Shuffling Allowed : Yes

Question Number : 141 Question Id : 1679437677 Question Type : MCQ Option Shuffling : Yes Display Question Number : Yes
Single Line Question Option : No Option Orientation : Vertical

Correct : 1 Wrong : 0.25

Theory of Duopoly (1838) was first put forwarded by:

Options :

- ☐ Léon Walras
- ☒ Augustin Cournot
- ☐ Edward Chamberlin
- ☐ Joseph Bertrand

Question Number : 142 Question Id : 1679437678 Question Type : MCQ Option Shuffling : Yes Display Question Number : Yes
Single Line Question Option : No Option Orientation : Vertical

Correct : 1 Wrong : 0.25

Which of the following statements is false?

Options :

- ☒ The term macroeconomics was coined and used by Ragnar Frisch in 1936
- ☐ 'Ceteris Paribus' means other things remaining the same
- ☐ Macroeconomics deals with the economy as a whole
- ☐ J.M. Keynes laid stress on macro economics

Question Number : 143 Question Id : 1679437679 Question Type : MCQ Option Shuffling : Yes Display Question Number : Yes
Single Line Question Option : No Option Orientation : Vertical

Correct : 1 Wrong : 0.25

In circular flow of income, Households:

Options :

- ☐ are not owners of resources

- ✓ supply resources to Firms
- ✗ do not receive incomes in the form of wages, interest, rent and profit
- ✗ are not source of investment funds

Question Number : 144 Question Id : 1679437680 Question Type : MCQ Option Shuffling : Yes Display Question Number : Yes
Single Line Question Option : No Option Orientation : Vertical

Correct : 1 Wrong : 0.25

GDP at market prices is equal to:

Options :

- ✗ Value of Final goods
- ✗ Value of intermediate goods
- ✗ Value of Raw material
- ✓ Value of Final goods including depreciation

Question Number : 145 Question Id : 1679437681 Question Type : MCQ Option Shuffling : Yes Display Question Number : Yes
Single Line Question Option : No Option Orientation : Vertical

Correct : 1 Wrong : 0.25

The difference between GNP and GDP is:

Options :

- ✗ Net Exports
- ✗ Net Imports
- ✓ Net factor income from abroad
- ✗ Net Foreign Investment

Question Number : 146 Question Id : 1679437682 Question Type : MCQ Option Shuffling : Yes Display Question Number : Yes
Single Line Question Option : No Option Orientation : Vertical

Correct : 1 Wrong : 0.25

What is Net Domestic Product (NDP)?

Options :

- ✗ Gross Value Added (GVA) at basic prices
- ✗ GVA at basic prices + Product subsidies – Product taxes

✓ GDP - Depreciation

✗ GNP - Depreciation

Question Number : 147 Question Id : 1679437683 Question Type : MCQ Option Shuffling : Yes Display Question Number : Yes
Single Line Question Option : No Option Orientation : Vertical

Correct : 1 Wrong : 0.25

Net National Product (NNP) is equal to:

Options :

✗ GNP + Exports

✓ GNP – Depreciation

✗ GDP + Imports

✗ GDP + Depreciation

Question Number : 148 Question Id : 1679437684 Question Type : MCQ Option Shuffling : Yes Display Question Number : Yes
Single Line Question Option : No Option Orientation : Vertical

Correct : 1 Wrong : 0.25

Which of the following determines aggregate demand in an economy?

Options :

✓ Personal disposable income

✗ Personal Income

✗ GDP at current prices

✗ Government's revenue

Question Number : 149 Question Id : 1679437685 Question Type : MCQ Option Shuffling : Yes Display Question Number : Yes
Single Line Question Option : No Option Orientation : Vertical

Correct : 1 Wrong : 0.25

Gross Value Added (GVA) at factor cost is equal to:

Options :

✗ GVA at basic prices + Production Taxes – Production subsidies

✗ GDP + Production taxes – Production subsidies

✗ GDP actually produced

✓ Value of output – Intermediate consumption – (Production taxes – Production subsidies)

Question Number : 150 Question Id : 1679437686 Question Type : MCQ Option Shuffling : Yes Display Question Number : Yes
Single Line Question Option : No Option Orientation : Vertical

Correct : 1 Wrong : 0.25

Read the given statements carefully and choose the correct option from given.

Statement (I): The payment made to enterprises is called operating surplus or mixed income.

Statement (II): The payment made to employees is called compensation to employees.

Options :

- ✓ Both statements I and II are true
- ✗ Statement I is false but II is true
- ✗ Statement I is true but II is false
- ✗ Both statements I and II are false

Question Number : 151 Question Id : 1679437687 Question Type : MCQ Option Shuffling : Yes Display Question Number : Yes
Single Line Question Option : No Option Orientation : Vertical

Correct : 1 Wrong : 0.25

The concepts of aggregate supply and aggregate demand were first used by:

Options :

- ✗ Keynes
- ✓ Malthus
- ✗ Pigou
- ✗ Marshall

Question Number : 152 Question Id : 1679437688 Question Type : MCQ Option Shuffling : Yes Display Question Number : Yes
Single Line Question Option : No Option Orientation : Vertical

Correct : 1 Wrong : 0.25

Read the following two Statements carefully and select the correct option regarding the given Statements.

Statement (I): In a simple two sector economy of households and firms, aggregate demand consists of consumer goods and investment goods.

Statement (II): Investment expenditure accounts for the highest proportion of the GDP as compared to consumption expenditure in two sector economy.

Options :

- ✗ Both statements I and II are true

✗ Statement I is false but statement II is true

✓ Statement I is true but statement II is false

✗ Both statements I and II are false

Question Number : 153 Question Id : 1679437689 Question Type : MCQ Option Shuffling : Yes Display Question Number : Yes
Single Line Question Option : No Option Orientation : Vertical

Correct : 1 Wrong : 0.25

According to Keynes, marginal propensity to consume decreases as income:

Options :

✗ decreases

✗ remains constant

✓ increases

✗ becomes random

Question Number : 154 Question Id : 1679437690 Question Type : MCQ Option Shuffling : Yes Display Question Number : Yes
Single Line Question Option : No Option Orientation : Vertical

Correct : 1 Wrong : 0.25

The relationship between marginal propensity to save and multiplier is:

Options :

✗ positive

✓ negative

✗ constant

✗ unpredictable

Question Number : 155 Question Id : 1679437691 Question Type : MCQ Option Shuffling : Yes Display Question Number : Yes
Single Line Question Option : No Option Orientation : Vertical

Correct : 1 Wrong : 0.25

Whether involuntary unemployment is existent in the state of full employment as per Classical Economists?

Options :

✗ Yes

✓ No

✖ Can't be said

✖ Maybe

Question Number : 156 Question Id : 1679437692 Question Type : MCQ Option Shuffling : Yes Display Question Number : Yes
Single Line Question Option : No Option Orientation : Vertical

Correct : 1 Wrong : 0.25

Suppose the consumption function and investment in a two-sector economy are given as $C = 100 + 0.75Y$ and $I = 200$. What will be the equilibrium level of income?

Options :

✔ 1200

✖ 900

✖ 1500

✖ 500

Question Number : 157 Question Id : 1679437693 Question Type : MCQ Option Shuffling : Yes Display Question Number : Yes
Single Line Question Option : No Option Orientation : Vertical

Correct : 1 Wrong : 0.25

What determines the investment multiplier?

Options :

✖ Value of National Income

✖ Value of Average Propensity to Consume

✔ Value of Marginal Propensity to Consume

✖ Value of autonomous investment

Question Number : 158 Question Id : 1679437694 Question Type : MCQ Option Shuffling : Yes Display Question Number : Yes
Single Line Question Option : No Option Orientation : Vertical

Correct : 1 Wrong : 0.25

A two-sector economy has a total income of ₹ 100 crore and its overall MPC is worked out to be 80 percent. How much does the economy need to invest once for all to double its total income?

Options :

✖ ₹ 80 crores

✔ ₹ 20 crores

✖ ₹ 100 crores

✘ ₹ 40 crores

Question Number : 159 Question Id : 1679437695 Question Type : MCQ Option Shuffling : Yes Display Question Number : Yes
Single Line Question Option : No Option Orientation : Vertical
Correct : 1 Wrong : 0.25

In Hyper Inflation, annual price rise is at the rate of:

Options :

✘ single digit

✘ double digit

✘ triple digit

✔ more than three digits

Question Number : 160 Question Id : 1679437696 Question Type : MCQ Option Shuffling : Yes Display Question Number : Yes
Single Line Question Option : No Option Orientation : Vertical
Correct : 1 Wrong : 0.25

Which measure is most appropriate to control inflation, when excess demand is caused by the private expenditure?

Options :

✘ Cut down public expenditure

✔ Taxation of incomes

✘ Increase in bank rate

✘ Decreasing budget deficit

Subject Related

Group Number :	9
Group Id :	167943170
Group Maximum Duration :	0
Group Minimum Duration :	0
Revisit allowed for view? :	No
Revisit allowed for edit? :	No
Break time:	0
Group Marks:	20

Subject Related

Section Id :	167943229
Section Number :	1

Section type :	Online
Mandatory or Optional:	Mandatory
Number of Questions:	20
Number of Questions to be attempted:	20
Section Marks:	20
Display Number Panel:	Yes
Group All Questions:	No

Sub-Section Number:	1
Sub-Section Id:	167943451
Question Shuffling Allowed :	Yes

Question Number : 161 Question Id : 1679437697 Question Type : MCQ Option Shuffling : Yes Display Question Number : Yes
Single Line Question Option : No Option Orientation : Vertical
Correct : 1 Wrong : 0.25

According to conventional approach, money can be defined as any commodity that is accepted as a medium of exchange and a:

Options :

- ✗ Store of value
- ✓ Measure of value
- ✗ Standard of deferred payments
- ✗ Factor of production

Question Number : 162 Question Id : 1679437698 Question Type : MCQ Option Shuffling : Yes Display Question Number : Yes
Single Line Question Option : No Option Orientation : Vertical
Correct : 1 Wrong : 0.25

High power money includes?

Options :

- ✓ Currency held by public and cash reserves of the commercial banks
- ✗ Liabilities of the commercial banks
- ✗ Demand and time deposit liabilities of the banks
- ✗ Currency and demand deposits only

Question Number : 163 Question Id : 1679437699 Question Type : MCQ Option Shuffling : Yes Display Question Number : Yes
Single Line Question Option : No Option Orientation : Vertical
Correct : 1 Wrong : 0.25

Which of the following statements is wrong?

Options :

- ✗ Central bank acts as bankers' bank
- ✗ Central bank acts as Government banker
- ✓ Central bank does not control credit operations of banks
- ✗ Central bank is the custodian of foreign exchange reserves

Question Number : 164 Question Id : 1679437700 Question Type : MCQ Option Shuffling : Yes Display Question Number : Yes
Single Line Question Option : No Option Orientation : Vertical

Correct : 1 Wrong : 0.25

Through open market operations, Central Bank does not purchase and sell:

Options :

- ✗ Gold
- ✗ Government securities
- ✗ Foreign exchange
- ✓ Private securities

Question Number : 165 Question Id : 1679437701 Question Type : MCQ Option Shuffling : Yes Display Question Number : Yes
Single Line Question Option : No Option Orientation : Vertical

Correct : 1 Wrong : 0.25

Credit is created by commercial banks on the basis of:

Options :

- ✗ total assets
- ✗ securities
- ✓ bank deposits
- ✗ gold reserves

Question Number : 166 Question Id : 1679437702 Question Type : MCQ Option Shuffling : Yes Display Question Number : Yes
Single Line Question Option : No Option Orientation : Vertical

Correct : 1 Wrong : 0.25

Read the following two Statements carefully and select the correct option regarding the given Statements.

Statement (I): India needs greater financial inclusion due to poor population.

Statement (II): More public-sector banks are required than private banks for financial inclusion in India.

Options :

✓ Both I and II are individually true

✗ I is false but II is true

✗ I is true but II is false

✗ Both I and II are individually false

Question Number : 167 Question Id : 1679437703 Question Type : MCQ Option Shuffling : Yes Display Question Number : Yes
Single Line Question Option : No Option Orientation : Vertical

Correct : 1 Wrong : 0.25

Who is deciding the Cash Reserve Ratio (CRR) of the scheduled commercial banks in India?

Options :

✗ Market forces

✗ Commercial Banks

✓ Reserve Bank of India

✗ Fiscal authority

Question Number : 168 Question Id : 1679437704 Question Type : MCQ Option Shuffling : Yes Display Question Number : Yes
Single Line Question Option : No Option Orientation : Vertical

Correct : 1 Wrong : 0.25

How many members are from Reserve Bank of India in the Monetary Policy Committee (MPC) constituted by the Central Government of India w.e.f. Sept. 2016?

Options :

✓ Three

✗ One

✗ Two

✗ Four

Question Number : 169 Question Id : 1679437705 Question Type : MCQ Option Shuffling : Yes Display Question Number : Yes
Single Line Question Option : No Option Orientation : Vertical

Correct : 1 Wrong : 0.25

Which of the following recommendations of Narasimham Committee II on banking sector reforms in India is not true?

Options :

✗ Rationalization of branches and staff of public-sector banks

- ✗ 8 to 10 banks of national orientation under Tier-2 of the banking structure
- ✗ Discarding budgetary recapitalization of the public-sector banks
- ✓ Licensing to new private banks should be discontinued

Question Number : 170 Question Id : 1679437706 Question Type : MCQ Option Shuffling : Yes Display Question Number : Yes
Single Line Question Option : No Option Orientation : Vertical

Correct : 1 Wrong : 0.25

What is the minimum capital requirement for setting up small banks and payment banks in India?

Options :

- ✗ ₹ 10 crores
- ✓ ₹ 100 crores
- ✗ ₹ 500 crores
- ✗ ₹ 50 crores

Question Number : 171 Question Id : 1679437707 Question Type : MCQ Option Shuffling : Yes Display Question Number : Yes
Single Line Question Option : No Option Orientation : Vertical

Correct : 1 Wrong : 0.25

What is Effective Revenue Deficit?

Options :

- ✗ Difference between revenue receipts and revenue expenditures
- ✓ Difference between revenue receipts, and revenue expenditures (excluding those done in the form of grants for creation of capital assets)
- ✗ Difference between total expenditures, and total revenue receipts & non-debt capital receipts
- ✗ Difference between total receipts and total expenditures

Question Number : 172 Question Id : 1679437708 Question Type : MCQ Option Shuffling : Yes Display Question Number : Yes
Single Line Question Option : No Option Orientation : Vertical

Correct : 1 Wrong : 0.25

Read the following two Statements carefully and select the correct option regarding the given Statements.

Statement (I): Zero-base budgeting (ZBB) in government budget was first introduced by Jimmy Carter, US President in 1979.

Statement (II): ZBB is the allocation of resources to agency, which reassesses what it is doing from top to bottom from a hypothetical zero-base.

Options :

✓ Both I and II are individually true

✗ I is false but II is true

✗ I is true but II is false

✗ Both I and II are individually false

Question Number : 173 Question Id : 1679437709 Question Type : MCQ Option Shuffling : Yes Display Question Number : Yes
Single Line Question Option : No Option Orientation : Vertical

Correct : 1 Wrong : 0.25

Which of the following is not the purpose of government budget?

Options :

✗ Promotion of economic development

✗ Public accountability

✗ To project current programmes and policies

✓ No financial control on disbursement.

Question Number : 174 Question Id : 1679437710 Question Type : MCQ Option Shuffling : Yes Display Question Number : Yes
Single Line Question Option : No Option Orientation : Vertical

Correct : 1 Wrong : 0.25

Which of the following is not a non-tax revenue receipt of the government?

Options :

✗ Profits and dividends from PSUs

✓ Customs duties

✗ Fees, penalties and fines

✗ Interest income

Question Number : 175 Question Id : 1679437711 Question Type : MCQ Option Shuffling : Yes Display Question Number : Yes
Single Line Question Option : No Option Orientation : Vertical

Correct : 1 Wrong : 0.25

Which of the following is not the capital expenditure of the government?

Options :

✗ Loan disbursements by the government

- ✘ Plan expenditure
- ✘ Loan repayments by the government
- ✔ Expenditures on social security

Question Number : 176 Question Id : 1679437712 Question Type : MCQ Option Shuffling : Yes Display Question Number : Yes
Single Line Question Option : No Option Orientation : Vertical

Correct : 1 Wrong : 0.25

What is balanced budgeting?

Options :

- ✘ A budget with zero fiscal deficit
- ✔ A budget with zero revenue deficit
- ✘ A budget with zero monetized deficit
- ✘ A budget with zero primary deficit

Question Number : 177 Question Id : 1679437713 Question Type : MCQ Option Shuffling : Yes Display Question Number : Yes
Single Line Question Option : No Option Orientation : Vertical

Correct : 1 Wrong : 0.25

Read the following two statements, Assertion (A) and Reason (R), carefully and select the correct answer regarding the statements.

Assertion (A): Fiscal policy is considered bad when the government has high revenue deficit budget.

Reason (R): Government fulfils the revenue deficit with the money which could have been spent for the creation of productive assets.

Options :

- ✔ Both A and R are individually true
- ✘ A is false but R is true
- ✘ A is true but R is false
- ✘ Both A and R are individually false

Question Number : 178 Question Id : 1679437714 Question Type : MCQ Option Shuffling : Yes Display Question Number : Yes
Single Line Question Option : No Option Orientation : Vertical

Correct : 1 Wrong : 0.25

Fiscal deficit is equivalent to:

Options :

- ✖ Total Receipts — Total Expenditure
- ✖ Primary Deficit — Interest Payments
- ✖ Revenue Receipts — Revenue Expenditure
- ✔ Total Receipts (excluding government market borrowings) — Total Expenditure

Question Number : 179 Question Id : 1679437715 Question Type : MCQ Option Shuffling : Yes Display Question Number : Yes
Single Line Question Option : No Option Orientation : Vertical

Correct : 1 Wrong : 0.25

Primary deficit is equivalent to:

- Options :
- ✔ Fiscal Deficit — Interest Payments
 - ✖ Total Receipts (excluding government market borrowings) — Total Expenditure
 - ✖ Revenue Receipts — Revenue Expenditure
 - ✖ Total Receipts — Total Expenditure

Question Number : 180 Question Id : 1679437716 Question Type : MCQ Option Shuffling : Yes Display Question Number : Yes
Single Line Question Option : No Option Orientation : Vertical

Correct : 1 Wrong : 0.25

Which of the following means is the best way to manage fiscal deficit and to sustain government budget for developmental needs?

- Options :
- ✖ Printing currency
 - ✖ Internal borrowings
 - ✔ External Aids
 - ✖ External borrowings

Subject Related

Group Number :	10
Group Id :	167943171
Group Maximum Duration :	0
Group Minimum Duration :	0

Revisit allowed for view? : No
Revisit allowed for edit? : No
Break time: 0
Group Marks: 20

Section Id : 167943230
Section Number : 1
Section type : Online
Mandatory or Optional: Mandatory
Number of Questions: 20
Number of Questions to be attempted: 20
Section Marks: 20
Display Number Panel: Yes
Group All Questions: No

Subject Related

Sub-Section Number: 1
Sub-Section Id: 167943452
Question Shuffling Allowed : Yes

Question Number : 181 Question Id : 1679437717 Question Type : MCQ Option Shuffling : Yes Display Question Number : Yes
Single Line Question Option : No Option Orientation : Vertical
Correct : 1 Wrong : 0.25

In which year, IMF allowed an option to its members to go for either fixed or floating currency regime?

Options :

- ✗ 1947
- ✗ 1971
- ✓ 1973
- ✗ 1975

Question Number : 182 Question Id : 1679437718 Question Type : MCQ Option Shuffling : Yes Display Question Number : Yes
Single Line Question Option : No Option Orientation : Vertical
Correct : 1 Wrong : 0.25

Which of the following is not the fixed exchange rate system?

Options :

- ✗ Pegging of currencies
- ✗ Crawling peg
- ✗ Currency board

✓ Market driven exchange rate

Question Number : 183 Question Id : 1679437719 Question Type : MCQ Option Shuffling : Yes Display Question Number : Yes
Single Line Question Option : No Option Orientation : Vertical

Correct : 1 Wrong : 0.25

Which of the following is the demerit of flexible exchange rate system?

Options :

✗ Large degree of autonomy

✓ Possibility of speculation

✗ Self-adjusting

✗ Actual purchasing power

Question Number : 184 Question Id : 1679437720 Question Type : MCQ Option Shuffling : Yes Display Question Number : Yes
Single Line Question Option : No Option Orientation : Vertical

Correct : 1 Wrong : 0.25

Which of the following would cause Rupee to depreciate against US \$, other things being equal?

Options :

✓ A fall in demand of Rupee in relation to its supply in the forex market.

✗ An expected rise in the value of Rupee.

✗ A fall in demand of US \$ in relation to its supply in the forex market.

✗ Improvement in the prospects for Indian firms.

Question Number : 185 Question Id : 1679437721 Question Type : MCQ Option Shuffling : Yes Display Question Number : Yes
Single Line Question Option : No Option Orientation : Vertical

Correct : 1 Wrong : 0.25

Lower exchange rate would result in:

Options :

✗ Lower demand for foreign goods

✓ Higher demand for foreign goods

✗ Lower demand for foreign exchange

✖ Higher supply of foreign exchange

Question Number : 186 Question Id : 1679437722 Question Type : MCQ Option Shuffling : Yes Display Question Number : Yes
Single Line Question Option : No Option Orientation : Vertical

Correct : 1 Wrong : 0.25

Which of the following is a Debit Entry in Balance of Payments accounts of any nation?

Options :

✖ Export of goods

✔ Export of capital

✖ Export of services

✖ Unilateral transfers abroad

Question Number : 187 Question Id : 1679437723 Question Type : MCQ Option Shuffling : Yes Display Question Number : Yes
Single Line Question Option : No Option Orientation : Vertical

Correct : 1 Wrong : 0.25

Under free floating exchange rate, a deficit in the balance of payments account of any country is automatically adjusted by:

Options :

✖ An appreciation of country's currency

✔ A depreciation of country's currency

✖ An Increase in country's national income

✖ Inflation in a country

Question Number : 188 Question Id : 1679437724 Question Type : MCQ Option Shuffling : Yes Display Question Number : Yes
Single Line Question Option : No Option Orientation : Vertical

Correct : 1 Wrong : 0.25

Which of the following items is not listed in the current account of balance of payments of a country?

Options :

✖ Export and import of goods

✖ Foreign travel

✔ Foreign Direct investment

✖ Investment income

Question Number : 189 Question Id : 1679437725 Question Type : MCQ Option Shuffling : Yes Display Question Number : Yes
Single Line Question Option : No Option Orientation : Vertical

Correct : 1 Wrong : 0.25

Read the following two Assertions carefully and select the correct option regarding the given Assertions.

Assertion (I): The current account of the Balance Of Payments (BOP) might be positive or negative.

Assertion (II): The deficit of current account of BOP can be offset by a surplus in the capital account of BOP.

Options :

☒ Both I and II are individually true

☐ I is false but II is true

☐ I is true but II is false

☐ Both I and II are individually false

Question Number : 190 Question Id : 1679437726 Question Type : MCQ Option Shuffling : Yes Display Question Number : Yes
Single Line Question Option : No Option Orientation : Vertical

Correct : 1 Wrong : 0.25

What is the basis of gains from International Trade?

Options :

☐ Absolute cost advantage

☒ Comparative cost advantage

☐ Foreign Exchange Rate

☐ Equal cost differences

Question Number : 191 Question Id : 1679437727 Question Type : MCQ Option Shuffling : Yes Display Question Number : Yes
Single Line Question Option : No Option Orientation : Vertical

Correct : 1 Wrong : 0.25

Under diminishing opportunity cost of production, the production possibility curve towards the point of origin of the axes will be:

Options :

☐ Concave

☐ Constant

☒ Convex

☐ Parabola

Question Number : 192 Question Id : 1679437728 Question Type : MCQ Option Shuffling : Yes Display Question Number : Yes
Single Line Question Option : No Option Orientation : Vertical

Correct : 1 Wrong : 0.25

If the weighted average of tariff on the material inputs exceeds the tariff on the final output, the effective rate of tariff will be:

Options :

- ☐ Positive
- ☐ Constant
- ☒ Negative
- ☐ Can't be said

Question Number : 193 Question Id : 1679437729 Question Type : MCQ Option Shuffling : Yes Display Question Number : Yes
Single Line Question Option : No Option Orientation : Vertical

Correct : 1 Wrong : 0.25

According to C. P. Kindelberger, the optimum tariff rate that can maximize welfare goes on diminishing as the elasticity of the offer curves of the foreign country:

Options :

- ☐ decreases
- ☐ remains constant
- ☐ becomes infinity
- ☒ increases

Question Number : 194 Question Id : 1679437730 Question Type : MCQ Option Shuffling : Yes Display Question Number : Yes
Single Line Question Option : No Option Orientation : Vertical

Correct : 1 Wrong : 0.25

Which of the following is the demerit of free trade?

Options :

- ☐ Optimization of consumption
- ☐ Output maximization
- ☐ Acquisition of advanced skills in production
- ☒ Emergence of monopolies

Question Number : 195 Question Id : 1679437731 Question Type : MCQ Option Shuffling : Yes Display Question Number : Yes
Single Line Question Option : No Option Orientation : Vertical

Correct : 1 Wrong : 0.25

The value of the Special Drawing Right (SDR), an international reserve asset of the IMF, is based on a basket of five currencies w.e.f. 1st October 2016, including:

Options :

- ☐ Indian Rupee
- ☒ Chinese Renminbi
- ☐ Australian Dollar
- ☐ UAE Dirham

Question Number : 196 Question Id : 1679437732 Question Type : MCQ Option Shuffling : Yes Display Question Number : Yes
Single Line Question Option : No Option Orientation : Vertical

Correct : 1 Wrong : 0.25

Which institution of the World Bank Group is focused exclusively on the private sector?

Options :

- ☒ International Finance Corporation (IFC)
- ☐ International Development Association (IDA)
- ☐ International Bank for Reconstruction and Development (IBRD)
- ☐ Multilateral Investment Guarantee Agency (MIGA)

Question Number : 197 Question Id : 1679437733 Question Type : MCQ Option Shuffling : Yes Display Question Number : Yes
Single Line Question Option : No Option Orientation : Vertical

Correct : 1 Wrong : 0.25

How many members were of World Trade Organization (WTO) as on April 2018?

Options :

- ☐ 193
- ☐ 188
- ☐ 189
- ☒ 164

Question Number : 198 Question Id : 1679437734 Question Type : MCQ Option Shuffling : Yes Display Question Number : Yes
Single Line Question Option : No Option Orientation : Vertical

Correct : 1 Wrong : 0.25

A share given to the employees of the company without any charge is called?

Options :

- ☐ Scrip Share
- ☐ Initial Public Offer (IPO)
- ☒ Sweat Share
- ☐ Greenshoe Option

Question Number : 199 Question Id : 1679437735 Question Type : MCQ Option Shuffling : Yes Display Question Number : Yes
Single Line Question Option : No Option Orientation : Vertical

Correct : 1 Wrong : 0.25

When Security Exchange Board of India (SEBI) was set up as non-statutory body to regulate Indian Stock Market?

Options :

- ☐ 1947
- ☐ 1992
- ☒ 1988
- ☐ 1999

Question Number : 200 Question Id : 1679437736 Question Type : MCQ Option Shuffling : Yes Display Question Number : Yes
Single Line Question Option : No Option Orientation : Vertical

Correct : 1 Wrong : 0.25

Which index is not the part of Bombay Stock Exchange Ltd. (BSE)?

Options :

- ☐ Sensex
- ☒ S&P CNX-500
- ☐ BSE-200
- ☐ Dollex-100

Subject Related

Group Number :	11
Group Id :	167943172
Group Maximum Duration :	0
Group Minimum Duration :	0

Revisit allowed for view? : No
Revisit allowed for edit? : No
Break time: 0
Group Marks: 20

	Subject Related
Section Id :	167943231
Section Number :	1
Section type :	Online
Mandatory or Optional:	Mandatory
Number of Questions:	20
Number of Questions to be attempted:	20
Section Marks:	20
Display Number Panel:	Yes
Group All Questions:	No

Sub-Section Number: 1
Sub-Section Id: 167943453
Question Shuffling Allowed : Yes

Question Number : 201 Question Id : 1679437737 Question Type : MCQ Option Shuffling : Yes Display Question Number : Yes
Single Line Question Option : No Option Orientation : Vertical
Correct : 1 Wrong : 0.25

Statistics is defined in singular sense as a:

- Options :
- ☐ number of data
 - ☒ method applied to the data
 - ☐ numerical facts
 - ☐ body of systematic knowledge

Question Number : 202 Question Id : 1679437738 Question Type : MCQ Option Shuffling : Yes Display Question Number : Yes
Single Line Question Option : No Option Orientation : Vertical
Correct : 1 Wrong : 0.25

Who was the first to use the German word, ‘Statistik’ or ‘Statistics’?

- Options :
- ☐ Laplace
 - ☐ Karl Gauss
 - ☒ Gottfried Achenwall

✖ Shakespeare

Question Number : 203 Question Id : 1679437739 Question Type : MCQ Option Shuffling : Yes Display Question Number : Yes
Single Line Question Option : No Option Orientation : Vertical

Correct : 1 Wrong : 0.25

The application of statistical methods to economic data is called?

Options :

✖ Financial Statistics

✔ Econometrics

✖ Mathematical Economics

✖ Experimental Economics

Question Number : 204 Question Id : 1679437740 Question Type : MCQ Option Shuffling : Yes Display Question Number : Yes
Single Line Question Option : No Option Orientation : Vertical

Correct : 1 Wrong : 0.25

Which of the following statements is not true?

Options :

✖ Statistical methods are used in economic planning.

✖ Engle's famous law of consumption (1895) has been formulated with the help of statistical data.

✖ A knowledge of statistics is like a knowledge of foreign language or algebra.

✔ Statistical methods are not connected with human activities and behaviour.

Question Number : 205 Question Id : 1679437741 Question Type : MCQ Option Shuffling : Yes Display Question Number : Yes
Single Line Question Option : No Option Orientation : Vertical

Correct : 1 Wrong : 0.25

In which sphere, statistics is not used?

Options :

✖ Inventory control

✔ Qualitative phenomena

✖ Marketing decisions

✖ Production planning

Question Number : 206 Question Id : 1679437742 Question Type : MCQ Option Shuffling : Yes Display Question Number : Yes
Single Line Question Option : No Option Orientation : Vertical

Correct : 1 Wrong : 0.25

Read the following two Assertions carefully and select the correct option regarding the given Assertions.

Assertion (A): If the problem relates to any field of social sciences, the relevant data may be collected through survey.

Assertion (B): If the problem relates to a physical or natural science, the data may be obtained through experiments.

Options :

✖ Both A and B are individually false

✖ A is false but B is true

✖ A is true but B is false

✔ Both A and B are individually true

Question Number : 207 Question Id : 1679437743 Question Type : MCQ Option Shuffling : Yes Display Question Number : Yes
Single Line Question Option : No Option Orientation : Vertical

Correct : 1 Wrong : 0.25

Which is not the part of organization of a statistical enquiry?

Options :

✖ Defining purpose of the enquiry

✖ Questionnaire design

✔ Studying qualitative problem in direct form

✖ Deciding sources of data

Question Number : 208 Question Id : 1679437744 Question Type : MCQ Option Shuffling : Yes Display Question Number : Yes
Single Line Question Option : No Option Orientation : Vertical

Correct : 1 Wrong : 0.25

Which of the following methods of collecting primary data is linked to a set of questions which are asked and filled in a face-to-face situation with another person?

Options :

✖ Direct personal interview

✖ Indirect oral interview

✔ Schedule

✖ Questionnaire

Question Number : 209 Question Id : 1679437745 Question Type : MCQ Option Shuffling : Yes Display Question Number : Yes
Single Line Question Option : No Option Orientation : Vertical

Correct : 1 Wrong : 0.25

Pre-testing the questionnaire does not:

Options :

- ☐ get an idea of non-responsive questions
- ☐ find drawbacks of the questionnaire
- ☐ secure greater cooperation of the informants
- ☒ cover the population ultimately to be surveyed

Question Number : 210 Question Id : 1679437746 Question Type : MCQ Option Shuffling : Yes Display Question Number : Yes
Single Line Question Option : No Option Orientation : Vertical

Correct : 1 Wrong : 0.25

Most statistical analysis rests on:

Options :

- ☐ Primary data
- ☒ Secondary data
- ☐ Tertiary data
- ☐ Both primary and tertiary data

Question Number : 211 Question Id : 1679437747 Question Type : MCQ Option Shuffling : Yes Display Question Number : Yes
Single Line Question Option : No Option Orientation : Vertical

Correct : 1 Wrong : 0.25

In which year, the first census was conducted in India?

Options :

- ☒ 1872
- ☐ 1881
- ☐ 1891
- ☐ 1951

Question Number : 212 Question Id : 1679437748 Question Type : MCQ Option Shuffling : Yes Display Question Number : Yes
Single Line Question Option : No Option Orientation : Vertical

Correct : 1 Wrong : 0.25

Read the following two Assertions carefully and select the correct option regarding the given Assertions.

Assertion (A): Under 'de facto' method of census, a definite night is fixed on which the population count is finalized.

Assertion (B): After the census of 1941 in India, 'de facto' method of census was given up and new method was introduced with the census of 1951.

Options :

☐ Both A and B are individually false

☐ A is false but B is true

☒ A is true but B is false

☐ Both A and B are individually true

Question Number : 213 Question Id : 1679437749 Question Type : MCQ Option Shuffling : Yes Display Question Number : Yes
Single Line Question Option : No Option Orientation : Vertical

Correct : 1 Wrong : 0.25

The first Round of National Sample Survey in India was conducted during:

Options :

☒ 1950

☐ 1973

☐ 1991

☐ 1999

Question Number : 214 Question Id : 1679437750 Question Type : MCQ Option Shuffling : Yes Display Question Number : Yes
Single Line Question Option : No Option Orientation : Vertical

Correct : 1 Wrong : 0.25

Which of the following is positional average?

Options :

☐ Mean

☒ Mode

☐ Geometric Mean

☐ Moving average

Question Number : 215 Question Id : 1679437751 Question Type : MCQ Option Shuffling : Yes Display Question Number : Yes
Single Line Question Option : No Option Orientation : Vertical

Correct : 1 Wrong : 0.25

In which of the following fields, geometric mean is not used?

Options :

- ☐ Averaging ratio and percentage
- ☐ Average of index numbers
- ☐ Where more weight is given to smaller items and vice versa
- ☒ Faster increase or decrease of given value over a certain period of time

Question Number : 216 Question Id : 1679437752 Question Type : MCQ Option Shuffling : Yes Display Question Number : Yes
Single Line Question Option : No Option Orientation : Vertical

Correct : 1 Wrong : 0.25

Which of the following statements is true about Harmonic Mean?

Options :

- ☐ It gives better results when the means adopted are the same for the different ends achieved.
- ☐ It is not rigidly defined.
- ☒ It gives better results when the ends to be achieved are the same for the different means adopted.
- ☐ It cannot be calculated when a series contains any negative value.

Question Number : 217 Question Id : 1679437753 Question Type : MCQ Option Shuffling : Yes Display Question Number : Yes
Single Line Question Option : No Option Orientation : Vertical

Correct : 1 Wrong : 0.25

Read the following two Assertions carefully and select the correct option regarding the given Assertions.

Assertion (A): Mean Deviation is less affected by the value of extreme items than standard deviation.

Assertion (B): Under standard deviation, the sum of the squares of the deviations of items in the series from their arithmetic mean is minimum.

Options :

- ☒ Both A and B are individually true
- ☐ A is false but B is true
- ☐ A is true but B is false
- ☐ Both A and B are individually false

Question Number : 218 Question Id : 1679437754 Question Type : MCQ Option Shuffling : Yes Display Question Number : Yes
Single Line Question Option : No Option Orientation : Vertical

Correct : 1 Wrong : 0.25

The area between the Lorenz curve and the line of equal distribution is called?

Options :

- ☐ Economic equality
- ☒ Ginni Coefficient
- ☐ between range 50% to 100%
- ☐ average of the distribution

Question Number : 219 Question Id : 1679437755 Question Type : MCQ Option Shuffling : Yes Display Question Number : Yes
Single Line Question Option : No Option Orientation : Vertical

Correct : 1 Wrong : 0.25

The correlation between the ages of a husband and a wife is:

Options :

- ☐ Negative
- ☐ Zero
- ☐ One
- ☒ Positive

Question Number : 220 Question Id : 1679437756 Question Type : MCQ Option Shuffling : Yes Display Question Number : Yes
Single Line Question Option : No Option Orientation : Vertical

Correct : 1 Wrong : 0.25

Which of the following properties of the correlation coefficient (r) is wrong?

Options :

- ☐ r lies between -1 and $+1$
- ☐ r is the geometric mean of the regression coefficients
- ☒ r is not independent of change of scale and origin of the two variables
- ☐ The degree of relationship between the two variables is symmetric

Subject Related

Group Number :

12

Group Id :

167943173

Group Maximum Duration :	0
Group Minimum Duration :	0
Revisit allowed for view? :	No
Revisit allowed for edit? :	No
Break time:	0
Group Marks:	20

	Subject Related
Section Id :	167943232
Section Number :	1
Section type :	Online
Mandatory or Optional:	Mandatory
Number of Questions:	20
Number of Questions to be attempted:	20
Section Marks:	20
Display Number Panel:	Yes
Group All Questions:	No

Sub-Section Number:	1
Sub-Section Id:	167943454
Question Shuffling Allowed :	Yes

Question Number : 221 Question Id : 1679437757 Question Type : MCQ Option Shuffling : Yes Display Question Number : Yes
Single Line Question Option : No Option Orientation : Vertical
Correct : 1 Wrong : 0.25

The Spearman's rank correlation coefficient is:

Options :

- ☒ distribution free
- ☐ normally distribution
- ☐ parametric
- ☐ one while doing sum of the ranks between two variables

Question Number : 222 Question Id : 1679437758 Question Type : MCQ Option Shuffling : Yes Display Question Number : Yes
Single Line Question Option : No Option Orientation : Vertical
Correct : 1 Wrong : 0.25

Which method of time series analysis is used to fit a parabolic trend?

Options :

- ☐ Freehand
- ☐ Semi-average

✘ Moving average

✔ Least squares

Question Number : 223 Question Id : 1679437759 Question Type : MCQ Option Shuffling : Yes Display Question Number : Yes
Single Line Question Option : No Option Orientation : Vertical

Correct : 1 Wrong : 0.25

Index numbers measures the:

Options :

✘ gross change in a group of related variables

✘ univariate index from a group of related variables

✔ effect of changes over a period of time

✘ average of all items expressed in single unit.

Question Number : 224 Question Id : 1679437760 Question Type : MCQ Option Shuffling : Yes Display Question Number : Yes
Single Line Question Option : No Option Orientation : Vertical

Correct : 1 Wrong : 0.25

Which method of weighted aggregative index numbers is called ideal index?

Options :

✘ Laspeyres

✘ Paasche

✘ Kelly

✔ Fisher

Question Number : 225 Question Id : 1679437761 Question Type : MCQ Option Shuffling : Yes Display Question Number : Yes
Single Line Question Option : No Option Orientation : Vertical

Correct : 1 Wrong : 0.25

The weight of crude petroleum in India's Wholesale Price Index (base 2011-12) basket is based on the value of:

Options :

✔ Domestic production

✘ Output adjusted for net imports

✘ Gross traded value

✖ Its derivatives

Question Number : 226 Question Id : 1679437762 Question Type : MCQ Option Shuffling : Yes Display Question Number : Yes
Single Line Question Option : No Option Orientation : Vertical

Correct : 1 Wrong : 0.25

Consumer price index is based on:

Options :

✔ Sampling in obtaining price quotations

✖ Wholesale prices

✖ Price of industrial production

✖ Cost prices

Question Number : 227 Question Id : 1679437763 Question Type : MCQ Option Shuffling : Yes Display Question Number : Yes
Single Line Question Option : No Option Orientation : Vertical

Correct : 1 Wrong : 0.25

Index of Industrial Production (IIP) measures changes in the:

Options :

✖ value of industrial production

✔ quantum of industrial production

✖ retail prices of industrial goods

✖ wholesale prices of industrial goods

Question Number : 228 Question Id : 1679437764 Question Type : MCQ Option Shuffling : Yes Display Question Number : Yes
Single Line Question Option : No Option Orientation : Vertical

Correct : 1 Wrong : 0.25

Which of the following is not the use of index numbers?

Options :

✖ Measuring changes in WPI

✖ Measuring changes in CPI

✖ Fixation of Dearness Allowances of the employee

✔ Measuring current national income

Question Number : 229 Question Id : 1679437765 Question Type : MCQ Option Shuffling : Yes Display Question Number : Yes
Single Line Question Option : No Option Orientation : Vertical

Correct : 1 Wrong : 0.25

Read the following two Statements carefully and select the correct option regarding the given Statements.

Statement (A): Index Numbers are capable of being used for any other purposes than the one for which they have been constructed particularly.

Statement (B): Index of Industrial Production (IIP) can also measure productivity of a particular industry.

Options :

☒ Both A and B are individually false

☐ A is false but B is true

☐ A is true but B is false

☐ Both A and B are individually true

Question Number : 230 Question Id : 1679437766 Question Type : MCQ Option Shuffling : Yes Display Question Number : Yes
Single Line Question Option : No Option Orientation : Vertical

Correct : 1 Wrong : 0.25

Counteracting the effect of inflation over a set of data to unravel their true values and make them comparable is called?

Options :

☐ Splicing

☐ Base shifting

☒ Deflating

☐ Inflating

Question Number : 231 Question Id : 1679437767 Question Type : MCQ Option Shuffling : Yes Display Question Number : Yes
Single Line Question Option : No Option Orientation : Vertical

Correct : 1 Wrong : 0.25

The aggregate real output per annum during the first half of the 20th century in India was estimated at?

Options :

☐ 3 per cent

☒ Less than 2 per cent

☐ More than 3 per cent

✖ 6 per cent

Question Number : 232 Question Id : 1679437768 Question Type : MCQ Option Shuffling : Yes Display Question Number : Yes
Single Line Question Option : No Option Orientation : Vertical

Correct : 1 Wrong : 0.25

What was the per capita income of India in 1899 at current prices in terms of Indian rupees?

Options :

✔ ₹ 18

✖ ₹ 12

✖ ₹ 40

✖ ₹ 100

Question Number : 233 Question Id : 1679437769 Question Type : MCQ Option Shuffling : Yes Display Question Number : Yes
Single Line Question Option : No Option Orientation : Vertical

Correct : 1 Wrong : 0.25

What percentage was the per capita growth of Indian Economy during 1600 to 1870, according to economic statistician Angus Maddison?

Options :

✖ 0.2

✖ 0.8

✔ No per capita growth

✖ 3

Question Number : 234 Question Id : 1679437770 Question Type : MCQ Option Shuffling : Yes Display Question Number : Yes
Single Line Question Option : No Option Orientation : Vertical

Correct : 1 Wrong : 0.25

Read the following two Assertions carefully and select the correct option regarding the given Assertions.

Assertion (A): Throughout the colonial rule, the economic vision was to increase India's capacity to export primary products and import British manufactured products.

Assertion (B): Britishers raised revenue to meet the drain of capital.

Options :

✖ Both A and B are individually false

✖ A is false but B is true

✖ A is true but B is false

✓ Both A and B are individually true

Question Number : 235 Question Id : 1679437771 Question Type : MCQ Option Shuffling : Yes Display Question Number : Yes
Single Line Question Option : No Option Orientation : Vertical

Correct : 1 Wrong : 0.25

What percentage was the per capita growth of Indian Economy during 1870 to 1947, according to economic statistician Angus Maddison?

Options :

✓ 0.2

✗ Zero

✗ 0.8

✗ 2

Question Number : 236 Question Id : 1679437772 Question Type : MCQ Option Shuffling : Yes Display Question Number : Yes
Single Line Question Option : No Option Orientation : Vertical

Correct : 1 Wrong : 0.25

Which Indian five-year plan was based on the Gadgil strategy with special focus to the ideas of growth with stability and progress towards self-reliance?

Options :

✗ Third

✓ Fourth

✗ Fifth

✗ Sixth

Question Number : 237 Question Id : 1679437773 Question Type : MCQ Option Shuffling : Yes Display Question Number : Yes
Single Line Question Option : No Option Orientation : Vertical

Correct : 1 Wrong : 0.25

The slogan of 'Garibi Hatao' (alleviate poverty) was given in the India's:

Options :

✗ Fourth five-year plan

✗ Fifth five-year plan

✓ Sixth five-year plan

✗ Eighth five-year plan

Question Number : 238 Question Id : 1679437774 Question Type : MCQ Option Shuffling : Yes Display Question Number : Yes
Single Line Question Option : No Option Orientation : Vertical

Correct : 1 Wrong : 0.25

Which Indian state has the highest percentage of people living below poverty line in rural areas at the end of Eleventh five-year plan?

Options :

✗ Odisha

✓ Chhattisgarh

✗ Bihar

✗ Jharkhand

Question Number : 239 Question Id : 1679437775 Question Type : MCQ Option Shuffling : Yes Display Question Number : Yes
Single Line Question Option : No Option Orientation : Vertical

Correct : 1 Wrong : 0.25

In which year, the Government of India could have thought about inclusiveness of the economy for the first time?

Options :

✗ 1991-92

✓ 2000-01

✗ 2008-09

✗ 2011-12

Question Number : 240 Question Id : 1679437776 Question Type : MCQ Option Shuffling : Yes Display Question Number : Yes
Single Line Question Option : No Option Orientation : Vertical

Correct : 1 Wrong : 0.25

Why financial strategy of supporting the plans was wrong till 7th five-year plan of India?

Options :

✓ To support capital-intensive plans

✗ To support labour-intensive plans

✗ Lesser capital for public sector undertakings

✗ Push to planned expenditure

Subject Related

Group Number :	13
Group Id :	167943174
Group Maximum Duration :	0
Group Minimum Duration :	0
Revisit allowed for view? :	No
Revisit allowed for edit? :	No
Break time:	0
Group Marks:	20

Subject Related

Section Id :	167943233
Section Number :	1
Section type :	Online
Mandatory or Optional:	Mandatory
Number of Questions:	20
Number of Questions to be attempted:	20
Section Marks:	20
Display Number Panel:	Yes
Group All Questions:	No

Sub-Section Number:	1
Sub-Section Id:	167943455
Question Shuffling Allowed :	Yes

Question Number : 241 Question Id : 1679437777 Question Type : MCQ Option Shuffling : Yes Display Question Number : Yes
Single Line Question Option : No Option Orientation : Vertical

Correct : 1 Wrong : 0.25

Read the following two Assertions carefully and select the correct option regarding the given Assertions.

Assertion (A): Promoting the cause of faster industrialization over time became so dear to the planning process that the agriculture sector got badly overshadowed.

Assertion (B): Such a policy always created a situation of food insecurity for the country.

Options :

✔ Both A and B are individually true

✘ A is false but B is true

✘ A is true but B is false

✘ Both A and B are false

Question Number : 242 Question Id : 1679437778 Question Type : MCQ Option Shuffling : Yes Display Question Number : Yes
Single Line Question Option : No Option Orientation : Vertical

Correct : 1 Wrong : 0.25

Which of the following is not the officially demarcated functions of the NITI Aayog?

Options :

- ✘ Cooperative federalism
- ✘ Shared national agenda
- ✔ Centralized planning
- ✘ Conflict resolution

Question Number : 243 Question Id : 1679437779 Question Type : MCQ Option Shuffling : Yes Display Question Number : Yes
Single Line Question Option : No Option Orientation : Vertical
Correct : 1 Wrong : 0.25

What was the production of foodgrains in India as per the Fourth Advance Estimates for 2016-17?

Options :

- ✘ 235.2 million tonnes
- ✘ 255.5 million tonnes
- ✔ 275.7 million tonnes
- ✘ 295.9 million tonnes

Question Number : 244 Question Id : 1679437780 Question Type : MCQ Option Shuffling : Yes Display Question Number : Yes
Single Line Question Option : No Option Orientation : Vertical
Correct : 1 Wrong : 0.25

Chief architect of Green Revolution in Indian agriculture was?

Options :

- ✘ Jawaharlal Nehru
- ✘ V R Krishna Aiyar
- ✘ V Kurien
- ✔ M S Swaminathan

Question Number : 245 Question Id : 1679437781 Question Type : MCQ Option Shuffling : Yes Display Question Number : Yes
Single Line Question Option : No Option Orientation : Vertical
Correct : 1 Wrong : 0.25

Cash crop does not include:

Options :

- ✘ Jute

✓ Maize

✗ Sugarcane

✗ Cotton

Question Number : 246 Question Id : 1679437782 Question Type : MCQ Option Shuffling : Yes Display Question Number : Yes
Single Line Question Option : No Option Orientation : Vertical

Correct : 1 Wrong : 0.25

Why agricultural growth in India is low?

Options :

✓ More than 50 per cent of Indian agriculture is rainfall dependent

✗ Share of livestock in total farm income is 10 per cent only

✗ Share of fishing and aquaculture in total farm incomes is 2 per cent only

✗ Share of crop is 50 per cent in the total GVA of agriculture and allied sector

Question Number : 247 Question Id : 1679437783 Question Type : MCQ Option Shuffling : Yes Display Question Number : Yes
Single Line Question Option : No Option Orientation : Vertical

Correct : 1 Wrong : 0.25

Which of the following is not the objective of Climate Smart Agriculture (CSA) Policy?

Options :

✗ Sustainably increasing agricultural productivity and incomes

✓ Dropping food security under climate change

✗ Adapting and building resilience to climate change

✗ Reducing and/or removing greenhouse gas emissions wherever possible

Question Number : 248 Question Id : 1679437784 Question Type : MCQ Option Shuffling : Yes Display Question Number : Yes
Single Line Question Option : No Option Orientation : Vertical

Correct : 1 Wrong : 0.25

What is the lending limit of 'Shishu' under Pradhan Mantri MUDRA (Micro Units Development & Refinance Agency) Yojna, launched in India during 2015?

Options :

✓ Up to ₹ 50 thousand

- ✖ ₹ 10-50 Lakh
- ✖ ₹ 50-100 Lakh
- ✖ ₹ 1 Crore and above

Question Number : 249 Question Id : 1679437785 Question Type : MCQ Option Shuffling : Yes Display Question Number : Yes
Single Line Question Option : No Option Orientation : Vertical

Correct : 1 Wrong : 0.25

Which country was the Top Export Partner of India during 2017-18?

Options :

- ✖ UAE
- ✖ China
- ✔ USA
- ✖ Saudi Arab

Question Number : 250 Question Id : 1679437786 Question Type : MCQ Option Shuffling : Yes Display Question Number : Yes
Single Line Question Option : No Option Orientation : Vertical

Correct : 1 Wrong : 0.25

Read the following two statements, Assertion (A) and Reason (R), carefully and select the correct answer regarding the statements.

Assertion (A): Economic reforms initiated in India since 1991 gave more emphasis to private sector.

Reason (R): Disillusionment of Public sector started due to low rate of return on investment and poor capacity utilization.

Options :

- ✔ Both A and R are individually true
- ✖ Both A and R are individually false
- ✖ A is true but R is false
- ✖ A is false but R is true

Question Number : 251 Question Id : 1679437787 Question Type : MCQ Option Shuffling : Yes Display Question Number : Yes
Single Line Question Option : No Option Orientation : Vertical

Correct : 1 Wrong : 0.25

Why economic reforms were launched in India w.e.f. 23 July 1991?

Options :

- ✖ To increase imports

- ☒ Balance of payment crisis
- ☐ Decline in foreign indebtedness
- ☐ To remove unemployment

Question Number : 252 Question Id : 1679437788 Question Type : MCQ Option Shuffling : Yes Display Question Number : Yes
Single Line Question Option : No Option Orientation : Vertical

Correct : 1 Wrong : 0.25

The central government of India started incremental approach and pushed for transformational reforms recently, which does not include:

Options :

- ☐ Demonetarization aimed to check black money
- ☐ Inflation targeting
- ☐ Enactment of the Aadhar Act
- ☒ Enactment of Foreign Exchange Management Act (FEMA) Act

Question Number : 253 Question Id : 1679437789 Question Type : MCQ Option Shuffling : Yes Display Question Number : Yes
Single Line Question Option : No Option Orientation : Vertical

Correct : 1 Wrong : 0.25

What was India's annual average real GDP growth rate during reforms period (1991-2017)?

Options :

- ☐ 3.5 per cent
- ☒ 6.6 per cent
- ☐ 5.7 per cent
- ☐ 8.3 per cent

Question Number : 254 Question Id : 1679437790 Question Type : MCQ Option Shuffling : Yes Display Question Number : Yes
Single Line Question Option : No Option Orientation : Vertical

Correct : 1 Wrong : 0.25

Which of the following Indian States had the lowest percentage of people living below the poverty line in urban areas during 2011-12?

Options :

- ☐ Kerala

✘ Punjab

✘ Tamil Nadu

✔ H.P.

Question Number : 255 Question Id : 1679437791 Question Type : MCQ Option Shuffling : Yes Display Question Number : Yes
Single Line Question Option : No Option Orientation : Vertical

Correct : 1 Wrong : 0.25

Pradhan Mantri Ujjwala Yojana (PMUY) has been launched w.e.f. May 2016 for below poverty families in India to provide:

Options :

✔ LPG connection

✘ Child protection

✘ Electricity

✘ Nutrition

Question Number : 256 Question Id : 1679437792 Question Type : MCQ Option Shuffling : Yes Display Question Number : Yes
Single Line Question Option : No Option Orientation : Vertical

Correct : 1 Wrong : 0.25

Which of the following items is received by all citizens from the government under Universal Basic Income (UBI) Welfare Programme?

Options :

✘ Housing

✔ Sum of money

✘ Cloth

✘ Cooking Gas

Question Number : 257 Question Id : 1679437793 Question Type : MCQ Option Shuffling : Yes Display Question Number : Yes
Single Line Question Option : No Option Orientation : Vertical

Correct : 1 Wrong : 0.25

How much concessional crop loans payable within one year could be availed by farmers under the Interest Subvention Scheme of the Indian Government during 2017-18?

Options :

✘ Upto ₹ 1 Lakh

✖ Upto ₹ 2 Lakh

✔ Upto ₹ 3 Lakh

✖ Upto ₹ 4 Lakh

Question Number : 258 Question Id : 1679437794 Question Type : MCQ Option Shuffling : Yes Display Question Number : Yes
Single Line Question Option : No Option Orientation : Vertical

Correct : 1 Wrong : 0.25

How many Indian States were live on the electronic National Agriculture Market (e-NAM) portal till May 2018?

Options :

✖ 8

✔ 16

✖ 24

✖ 29

Question Number : 259 Question Id : 1679437795 Question Type : MCQ Option Shuffling : Yes Display Question Number : Yes
Single Line Question Option : No Option Orientation : Vertical

Correct : 1 Wrong : 0.25

India's Agricultural Produce Market Committee (APMC) Act, 2003 does not:

Options :

✖ facilitates direct sale of farm produce to consumers

✖ provides a single level of market fee on the sale of notified agricultural commodities

✔ controls production, supply and distribution of agricultural commodities

✖ create marketing infrastructure from the revenue earned by the APMCs.

Question Number : 260 Question Id : 1679437796 Question Type : MCQ Option Shuffling : Yes Display Question Number : Yes
Single Line Question Option : No Option Orientation : Vertical

Correct : 1 Wrong : 0.25

How much tax deduction is given on the profit of Farmer Producer Companies in post-harvest value addition in agriculture as per Union Budget 2018-19?

Options :

✖ 10 per cent

✖ 40 per cent

✖ 70 per cent

✔ 100 per cent

Subject Related	
Group Number :	14
Group Id :	167943175
Group Maximum Duration :	0
Group Minimum Duration :	0
Revisit allowed for view? :	No
Revisit allowed for edit? :	No
Break time:	0
Group Marks:	20

Subject Related	
Section Id :	167943234
Section Number :	1
Section type :	Online
Mandatory or Optional:	Mandatory
Number of Questions:	20
Number of Questions to be attempted:	20
Section Marks:	20
Display Number Panel:	Yes
Group All Questions:	No

Sub-Section Number:	1
Sub-Section Id:	167943456
Question Shuffling Allowed :	Yes

Question Number : 261 Question Id : 1679437797 Question Type : MCQ Option Shuffling : Yes Display Question Number : Yes
Single Line Question Option : No Option Orientation : Vertical

Correct : 1 Wrong : 0.25

Which of the following Indian States has shown increasing values in crop diversification as per Index of Crop Diversification during 1994 to 2015?

Options :

✖ Punjab

✖ Chhattisgarh

✔ Jharkhand

✖ Uttar Pradesh

Question Number : 262 Question Id : 1679437798 Question Type : MCQ Option Shuffling : Yes Display Question Number : Yes
Single Line Question Option : No Option Orientation : Vertical

Correct : 1 Wrong : 0.25

In which city, the National Centre for Organic Farming (NCOF) is situated in India?

Options :

☐ Bhubaneswar

☐ Nagpur

☐ Bangalore

☒ Ghaziabad

Question Number : 263 Question Id : 1679437799 Question Type : MCQ Option Shuffling : Yes Display Question Number : Yes
Single Line Question Option : No Option Orientation : Vertical

Correct : 1 Wrong : 0.25

What was the Gross Enrolment Ratio (GER) in Higher education in India as per All India Survey on Higher Education (2015-16)?

Options :

☐ 6.1 per cent

☐ 19.2 per cent

☒ 24.5 per cent

☐ 46.2 per cent

Question Number : 264 Question Id : 1679437800 Question Type : MCQ Option Shuffling : Yes Display Question Number : Yes
Single Line Question Option : No Option Orientation : Vertical

Correct : 1 Wrong : 0.25

Which Indian State has been allocated largest smart cities under 'Smart Cities Mission 2015' in India?

Options :

☒ Uttar Pradesh

☐ Madhya Pradesh

☐ Karnataka

☐ Maharashtra

Question Number : 265 Question Id : 1679437801 Question Type : MCQ Option Shuffling : Yes Display Question Number : Yes
Single Line Question Option : No Option Orientation : Vertical

Correct : 1 Wrong : 0.25

Which of the following is the best meaning of sustainable economic development?

Options :

- ☐ Development of Green industries
- ☒ Meeting the needs of present, without compromising the ability of future generations to meet their own needs
- ☐ Promoting personal wellbeing
- ☐ Meeting the diverse needs of all people in existing communities

Question Number : 266 Question Id : 1679437802 Question Type : MCQ Option Shuffling : Yes Display Question Number : Yes
Single Line Question Option : No Option Orientation : Vertical

Correct : 1 Wrong : 0.25

Which of the following Government programmes is not covered under Climate Change in India?

Options :

- ☐ Pradhan Mantri Krishi Sinchayee Yojana
- ☐ Zero Effect, Zero Defect
- ☐ National Mission for Clean Ganga
- ☒ National Rural Livelihood Mission

Question Number : 267 Question Id : 1679437803 Question Type : MCQ Option Shuffling : Yes Display Question Number : Yes
Single Line Question Option : No Option Orientation : Vertical

Correct : 1 Wrong : 0.25

United Nations' Sustainable Development Goals (SDGs) came into force from:

Options :

- ☐ June 2015
- ☒ January 2016
- ☐ July 2017
- ☐ January 2018

Question Number : 268 Question Id : 1679437804 Question Type : MCQ Option Shuffling : Yes Display Question Number : Yes
Single Line Question Option : No Option Orientation : Vertical

Correct : 1 Wrong : 0.25

How much India's population was in the age group of 15-59 years as per 2011 census?

Options :

✗ 37 crore

✓ 73 crore

✗ 82 crore

✗ 98 crore

Question Number : 269 Question Id : 1679437805 Question Type : MCQ Option Shuffling : Yes Display Question Number : Yes
Single Line Question Option : No Option Orientation : Vertical

Correct : 1 Wrong : 0.25

India's rank was 131 in Human Development Index (HDI) 2015, prepared by United Nations Development Programme. What was then rank of Pakistan?

Options :

✓ 147

✗ 138

✗ 120

✗ 91

Question Number : 270 Question Id : 1679437806 Question Type : MCQ Option Shuffling : Yes Display Question Number : Yes
Single Line Question Option : No Option Orientation : Vertical

Correct : 1 Wrong : 0.25

Which of the following countries had the lowest Gross National Income (GNI) per capita (2011 PPP \$) in 2015?

Options :

✗ India

✓ Pakistan

✗ China

✗ Sri Lanka

Question Number : 271 Question Id : 1679437807 Question Type : MCQ Option Shuffling : Yes Display Question Number : Yes
Single Line Question Option : No Option Orientation : Vertical

Correct : 1 Wrong : 0.25

Read the following two Assertions carefully and select the correct option regarding the given Assertions.

Assertion (A): India's Life Expectancy at birth was more than Pakistan as per Human Development Index 2015 of United Nations Development Programme (UNDP).

Assertion (B): During 2015, Pakistan's Female Life Expectancy at birth was more than India.

Options :

- ✘ Both A and B are individually true
- ✘ A is false but B is true
- ✔ A is true but B is false
- ✘ Both A and B are false

Question Number : 272 Question Id : 1679437808 Question Type : MCQ Option Shuffling : Yes Display Question Number : Yes
Single Line Question Option : No Option Orientation : Vertical

Correct : 1 Wrong : 0.25

Which of the following groups has been occupied by China under Human Development Index 2015 of UNDP?

Options :

- ✘ Very High Human Development
- ✔ High Human Development
- ✘ Medium Human Development
- ✘ Low High Human Development

Question Number : 273 Question Id : 1679437809 Question Type : MCQ Option Shuffling : Yes Display Question Number : Yes
Single Line Question Option : No Option Orientation : Vertical

Correct : 1 Wrong : 0.25

The average annual HDI growth of China during 1990-2015 was 1.57 per cent as per UNDP. What was the same for India?

Options :

- ✘ 1.83 per cent
- ✔ 1.52 per cent
- ✘ 1.24 per cent
- ✘ 0.82 per cent

Question Number : 274 Question Id : 1679437810 Question Type : MCQ Option Shuffling : Yes Display Question Number : Yes
Single Line Question Option : No Option Orientation : Vertical

Correct : 1 Wrong : 0.25

Read the following two Assertions carefully and select the correct option regarding the given Assertions.

Assertion (A): Measure of the deviation of the distribution of income among individuals or households within a country from a perfectly equal distribution is called Gini Coefficient.

Assertion (B): During 2010-15, China had high Gini Coefficient (Income inequality) as compared to India.

Options :

- ☒ Both A and B are individually true
- ☐ A is false but B is true
- ☐ A is true but B is false
- ☐ Both A and B are false

Question Number : 275 Question Id : 1679437811 Question Type : MCQ Option Shuffling : Yes Display Question Number : Yes
Single Line Question Option : No Option Orientation : Vertical
Correct : 1 Wrong : 0.25

Which of the following Statements is wrong?

Options :

- ☐ India initiated economic reforms in 1991
- ☐ India's growth rate of manufacturing in 2016 was more than Pakistan
- ☐ China started economic reforms in 1978
- ☒ India's manufacturing contribution to GDP was less than Pakistan

Question Number : 276 Question Id : 1679437812 Question Type : MCQ Option Shuffling : Yes Display Question Number : Yes
Single Line Question Option : No Option Orientation : Vertical
Correct : 1 Wrong : 0.25

During 2015, the share of seats in Parliament held by women in India as compared to Pakistan was?

Options :

- ☐ More
- ☒ Less
- ☐ Equal
- ☐ Can't be said

Question Number : 277 Question Id : 1679437813 Question Type : MCQ Option Shuffling : Yes Display Question Number : Yes
Single Line Question Option : No Option Orientation : Vertical
Correct : 1 Wrong : 0.25

Which of the following countries had highest average annual growth rate of population during 2010/2015?

Options :

- ☐ India

✓ Pakistan

✗ China

✗ Bangladesh

Question Number : 278 Question Id : 1679437814 Question Type : MCQ Option Shuffling : Yes Display Question Number : Yes
Single Line Question Option : No Option Orientation : Vertical

Correct : 1 Wrong : 0.25

Forest area as percentage of total land area in case of India and China was 23.8 and 22.2, respectively, in 2015. What was this percentage for Pakistan?

Options :

✓ 1.9

✗ 11.0

✗ 25.4

✗ 72.3

Question Number : 279 Question Id : 1679437815 Question Type : MCQ Option Shuffling : Yes Display Question Number : Yes
Single Line Question Option : No Option Orientation : Vertical

Correct : 1 Wrong : 0.25

Which of the following countries had the highest GDP growth during 2016?

Options :

✓ India

✗ Pakistan

✗ China

✗ Nepal

Question Number : 280 Question Id : 1679437816 Question Type : MCQ Option Shuffling : Yes Display Question Number : Yes
Single Line Question Option : No Option Orientation : Vertical

Correct : 1 Wrong : 0.25

In terms of sectoral contribution to GDP during 2016, the economies of India, Pakistan, and China were relying more on:

Options :

✗ Agriculture

✗ Industry

✓ Services

✗ Manufacturing

Subject Related	
Group Number :	15
Group Id :	167943176
Group Maximum Duration :	0
Group Minimum Duration :	180
Revisit allowed for view? :	No
Revisit allowed for edit? :	No
Break time:	0
Group Marks:	20

Subject Related	
Section Id :	167943235
Section Number :	1
Section type :	Online
Mandatory or Optional:	Mandatory
Number of Questions:	20
Number of Questions to be attempted:	20
Section Marks:	20
Display Number Panel:	Yes
Group All Questions:	No

Sub-Section Number:	1
Sub-Section Id:	167943457
Question Shuffling Allowed :	Yes

Question Number : 281 Question Id : 1679437817 Question Type : MCQ Option Shuffling : Yes Display Question Number : Yes
Single Line Question Option : No Option Orientation : Vertical

Correct : 1 Wrong : 0.25

It is ideal for group and pair activity to be introduced at the age of:

Options :

✗ 7 – 8 years

✗ 1 – 2 years

✓ 3 – 4 years

✗ 6 – 7 years

Question Number : 282 Question Id : 1679437818 Question Type : MCQ Option Shuffling : Yes Display Question Number : Yes
Single Line Question Option : No Option Orientation : Vertical
Correct : 1 Wrong : 0.25

What was the aim of the National Adult Education Programme (NAEP) introduced in 1978?

Options :

- ☒ To impart skills of reading, writing and arithmetic
- ☐ To make all adults in the rural area literate
- ☐ To provide education to all women
- ☐ To start distance education programmes

Question Number : 283 Question Id : 1679437819 Question Type : MCQ Option Shuffling : Yes Display Question Number : Yes
Single Line Question Option : No Option Orientation : Vertical
Correct : 1 Wrong : 0.25

What is the advantage of distance education?

Options :

- ☐ It is time saving
- ☒ It encourages self-learning
- ☐ It enables teaching of large groups
- ☐ Students can benefit from combined studies

Question Number : 284 Question Id : 1679437820 Question Type : MCQ Option Shuffling : Yes Display Question Number : Yes
Single Line Question Option : No Option Orientation : Vertical
Correct : 1 Wrong : 0.25

The psycho-sexual development theory by Erickson recognises three factors that represent the personality, namely:

Options :

- ☐ Environment, family, individual
- ☐ School, society, self
- ☒ Somatic, ego, social
- ☐ Learning, knowledge, skills

Question Number : 285 Question Id : 1679437821 Question Type : MCQ Option Shuffling : Yes Display Question Number : Yes
Single Line Question Option : No Option Orientation : Vertical
Correct : 1 Wrong : 0.25

A good write-up or paragraph, which can be a descriptive answer in the context of a school, is characterised by four elements: the main idea in the beginning, clarity of thought, sequence and _____.

Options :

- ☐ continuity
- ☐ punctuation
- ☐ coherence
- ☒ conclusion

Question Number : 286 Question Id : 1679437822 Question Type : MCQ Option Shuffling : Yes Display Question Number : Yes
Single Line Question Option : No Option Orientation : Vertical

Correct : 1 Wrong : 0.25

Language is a powerful tool in any field because it gives users the ability to _____.

Options :

- ☐ express ideas
- ☒ influence opinions
- ☐ critique others
- ☐ explain thoughts

Question Number : 287 Question Id : 1679437823 Question Type : MCQ Option Shuffling : Yes Display Question Number : Yes
Single Line Question Option : No Option Orientation : Vertical

Correct : 1 Wrong : 0.25

“India’s Future is being prepared in its classrooms”. Which of the following entities has said this in one of its reports?

Options :

- ☐ Education Commission
- ☒ Kothari Commission
- ☐ University Grants Commission
- ☐ United Nations

Question Number : 288 Question Id : 1679437824 Question Type : MCQ Option Shuffling : Yes Display Question Number : Yes
Single Line Question Option : No Option Orientation : Vertical

Correct : 1 Wrong : 0.25

Which of the following learning processes is NOT necessarily in the teachers’ control?

Options :

- ☐ Lecture
- ☒ Project
- ☐ Demonstrations
- ☐ Remediation

Question Number : 289 Question Id : 1679437825 Question Type : MCQ Option Shuffling : Yes Display Question Number : Yes
Single Line Question Option : No Option Orientation : Vertical
Correct : 1 Wrong : 0.25

Using a close circuit television as a teaching-learning method is useful when:

Options :

- ☐ The class has less number of students
- ☐ The class has more number of weak students
- ☒ The learners are located in different places/locations
- ☐ It is a revision class

Question Number : 290 Question Id : 1679437826 Question Type : MCQ Option Shuffling : Yes Display Question Number : Yes
Single Line Question Option : No Option Orientation : Vertical
Correct : 1 Wrong : 0.25

Lexicon ability is:

Options :

- ☒ the systematic way of looking up words in a dictionary
- ☐ the ability to read and find information quickly
- ☐ the ability to use both hands deftly
- ☐ the ability to look up the encyclopedia efficiently

Question Number : 291 Question Id : 1679437827 Question Type : MCQ Option Shuffling : Yes Display Question Number : Yes
Single Line Question Option : No Option Orientation : Vertical
Correct : 1 Wrong : 0.25

Role playing is a form of theatre approach to teaching which helps to develop:

Options :

- ☒ understanding of others and empathy in students

- ✖ vocabulary skills and spelling of new words
- ✖ fluency of language and motor skills
- ✖ pride and confidence

Question Number : 292 Question Id : 1679437828 Question Type : MCQ Option Shuffling : Yes Display Question Number : Yes
Single Line Question Option : No Option Orientation : Vertical

Correct : 1 Wrong : 0.25

Integrating arts related to drawing etc. in school subjects develops:

Options :

- ✖ Vision and colour concept
- ✔ Visual-spatial skills and motor skills
- ✖ Confidence and collaboration
- ✖ Visibility and focus

Question Number : 293 Question Id : 1679437829 Question Type : MCQ Option Shuffling : Yes Display Question Number : Yes
Single Line Question Option : No Option Orientation : Vertical

Correct : 1 Wrong : 0.25

TCP/IP stands for:

Options :

- ✖ Translator Control Page/Internet Page
- ✔ Transmission Control Protocol/Internet Protocol
- ✖ Transfer Control Protocol/Internet Protocol
- ✖ Transmission Control Protocol/Internet Program

Question Number : 294 Question Id : 1679437830 Question Type : MCQ Option Shuffling : Yes Display Question Number : Yes
Single Line Question Option : No Option Orientation : Vertical

Correct : 1 Wrong : 0.25

Sridhar is asked to create a list of students who are interested in a singing competition from respective classes. The teacher also wants him to find the total number of participants. Select the formula he will use in Microsoft Excel in order to do so:

Options :

- ✖ Average (first cell reference : last cell reference)

- ✗ Total (first cell reference : last cell reference)
- ✓ Sum (first cell reference : last cell reference)
- ✗ Sort(first cell reference : last cell reference)

Question Number : 295 Question Id : 1679437831 Question Type : MCQ Option Shuffling : Yes Display Question Number : Yes
Single Line Question Option : No Option Orientation : Vertical

Correct : 1 Wrong : 0.25

Which of the following is the most probable cause?
Ecological imbalance is one of the results of:

Options :

- ✗ Globalisation
- ✗ Excessive agriculture
- ✓ Urbanisation
- ✗ Progress in the medical field

Question Number : 296 Question Id : 1679437832 Question Type : MCQ Option Shuffling : Yes Display Question Number : Yes
Single Line Question Option : No Option Orientation : Vertical

Correct : 1 Wrong : 0.25

Objectivity and reliability can be achieved by posing _____.

Options :

- ✗ Essay type questions
- ✗ Story telling
- ✓ Multiple choice questions
- ✗ Descriptive answers

Question Number : 297 Question Id : 1679437833 Question Type : MCQ Option Shuffling : Yes Display Question Number : Yes
Single Line Question Option : No Option Orientation : Vertical

Correct : 1 Wrong : 0.25

The timings achieved by 15 participants in a racing competition were recorded as 73, 74, 72, 73, 72, 76, 75, 75, 75, 71, 78, 76, 77, 79 and 80 seconds, respectively. Identify the right set of mean, median and mode of this data from the following options.

Options :

- ✗ 75, 76, 76

✓ 75, 75, 75

✗ 75, 76, 77

✗ 75, 77, 76

Question Number : 298 Question Id : 1679437834 Question Type : MCQ Option Shuffling : Yes Display Question Number : Yes
Single Line Question Option : No Option Orientation : Vertical

Correct : 1 Wrong : 0.25

“Muddiest point” is an effective type of _____ that supports improvising the lesson.

Options :

✗ exam pattern

✓ classroom assessment technique

✗ assessment technique

✗ icebreaker

Question Number : 299 Question Id : 1679437835 Question Type : MCQ Option Shuffling : Yes Display Question Number : Yes
Single Line Question Option : No Option Orientation : Vertical

Correct : 1 Wrong : 0.25

One of the aims of inclusive education is:

Options :

✗ providing a healthy environment

✓ providing mutual benefit to normal and disadvantaged children

✗ supporting teachers

✗ supporting students with special education needs

Question Number : 300 Question Id : 1679437836 Question Type : MCQ Option Shuffling : Yes Display Question Number : Yes
Single Line Question Option : No Option Orientation : Vertical

Correct : 1 Wrong : 0.25

Disturbing routine is generally not suggested for children diagnosed with:

Options :

✗ ADHD

✗ ADD

✔ Autistic spectrum disorder

✘ Hearing impairment

