

DSSSB Jail Warder

Previous Year Paper
20 Jun, 2024 Shift 1

Test Prime

**ALL EXAMS,
ONE SUBSCRIPTION**



70,000+
Mock Tests



**Personalised
Report Card**



**Unlimited
Re-Attempt**



600+
Exam Covered



**Previous Year
Papers**



**500%
Refund**



ATTEMPT FREE MOCK NOW



GOVT. OF NCT OF DELHI
Delhi Subordinate Services Selection Board
FC-18, Institutional Area, Karkardooma, Delhi – 110092.
www.dsssb.delhigovt.nic.in

Participant ID	
Participant Name	
Test Center Name	
Test Date	20/06/2024
Test Time	8:30 AM - 10:30 AM
Subject	Warder Reserved for male Only

Section : General intelligence and Reasoning Ability 1

Q.1 What will come in place of the question mark (?) to make the following series logically complete based on only the numerical values of the letters?

KMO, QSU, WYA, ???

- Ans ☒ 1. CEG
☐ 2. RQP
☐ 3. HJL
☐ 4. CBA

Question ID : 630680849827
Option 1 ID : 6306803328545
Option 2 ID : 6306803328547
Option 3 ID : 6306803328546
Option 4 ID : 6306803328548

Q.2 दी गई श्रृंखला में ऐसे कितने प्रतीक हैं जिनमें से प्रत्येक के ठीक बाद एक संख्या है?

7 N # 9 J O L 5 S \$ 3 * P % & A 8 6 B 2 * H 4

- Ans ☐ 1. 4
☒ 2. 2
☐ 3. 5
☐ 4. 1

Question ID : 630680835375
Option 1 ID : 6306803272289
Option 2 ID : 6306803272287
Option 3 ID : 6306803272288
Option 4 ID : 6306803272286

Q.3 On the basis of square or cube of numbers and addition method (either one of them) which of the following pairs is similar to the expression given below?

350: 738

- Ans
- ☒ 1. 216 : 49
 - ☒ 2. 30 : 220
 - ☒ 3. 68 : 222
 - ☒ 4. 216: 512

Question ID : 630680835407
Option 1 ID : 6306803272417
Option 2 ID : 6306803272414
Option 3 ID : 6306803272415
Option 4 ID : 6306803272416

Q.4 In a class of 25 girls, one girl's rank is 9 from the top. What is the rank of that girl from below?

- Ans
- ☒ 1. 17
 - ☒ 2. 18
 - ☒ 3. 19
 - ☒ 4. 20

Question ID : 630680849800
Option 1 ID : 6306803328437
Option 2 ID : 6306803328438
Option 3 ID : 6306803328439
Option 4 ID : 6306803328440

Q.5 What will come in place of the question mark (?) to make the following series logically complete based on the numerical values of the alphabets?

H, J, L, N, P, ?

- Ans
- ☒ 1. S
 - ☒ 2. R
 - ☒ 3. U
 - ☒ 4. T

Question ID : 630680835444
Option 1 ID : 6306803272563
Option 2 ID : 6306803272562
Option 3 ID : 6306803272565
Option 4 ID : 6306803272564

Q.6 There are total 15 boys in a horizontal row. Krishna's rank is 8th from the top. What is Krishna's rank from the bottom?

- Ans
- ☐ 1. 9th
 - ☐ 2. 7th
 - ☐ 3. 5th
 - ☒ 4. 8th

Question ID : 630680849799
Option 1 ID : 6306803328436
Option 2 ID : 6306803328434
Option 3 ID : 6306803328433
Option 4 ID : 6306803328435

Q.7 W means '+', X means '-', Y means '×' and Z means '÷', then what will be the value of the following expression?

14 Y 3 W 7 X 28 Z 4 =?

- Ans
- ☐ 1. 46
 - ☒ 2. 42
 - ☐ 3. 44
 - ☐ 4. 41

Question ID : 630680835450
Option 1 ID : 6306803272589
Option 2 ID : 6306803272587
Option 3 ID : 6306803272588
Option 4 ID : 6306803272586

Q.8 What will be the meaningful sequence of the following words based on the sequence of farming process?

1. Crop
2. Seed
3. Fertilizers
4. Irrigation

- Ans
- ☐ 1. 3, 4, 1, 2
 - ☒ 2. 2, 3, 4, 1
 - ☐ 3. 2, 3, 1, 4
 - ☐ 4. 3, 4, 2, 1

Question ID : 630680835426
Option 1 ID : 6306803272493
Option 2 ID : 6306803272490
Option 3 ID : 6306803272491
Option 4 ID : 6306803272492

Q.9 In a certain code language, READ is written as 28 and BLACK is written as 29. How GRAIN will be written in the same code language ?

- Ans
- ☐ 1. 46
 - ☒ 2. 49
 - ☐ 3. 48
 - ☐ 4. 47

Question ID : 630680835370
Option 1 ID : 6306803272266
Option 2 ID : 6306803272269
Option 3 ID : 6306803272268
Option 4 ID : 6306803272267

Q.10 5 friends named Amit, Bindu, Ravi, Kavi and Pavan are sitting in a straight line facing north. Bindu is sitting immediately after Amit. Kavi is not at any end of the row. Amit is not sitting at the extreme right end of the row. If Pavan is sitting immediate left of Ravi from the right side of the row, then who is sitting at the left end of the row?

- Ans
- ☐ 1. Ravi
 - ☐ 2. Bindu
 - ☐ 3. Kavi
 - ☒ 4. Amit

Question ID : 630680849043
Option 1 ID : 6306803325705
Option 2 ID : 6306803325703
Option 3 ID : 6306803325704
Option 4 ID : 6306803325702

Q.11 What will come in place of the question mark (?) to make the series given below logically complete by using addition and subtraction processes only whichever may be applicable?

11, 14, 27, 30, 43, ?, ?

- Ans
- ☐ 1. 54, 40
 - ☐ 2. 40, 54
 - ☐ 3. 49, 36
 - ☒ 4. 46, 59

Question ID : 630680849836
Option 1 ID : 6306803328581
Option 2 ID : 6306803328582
Option 3 ID : 6306803328583
Option 4 ID : 6306803328584

Q.12 Read the given statement(s) and conclusions carefully. Assuming that the information given in the statements is true, even if it appears to be at variance with commonly known facts, decide which of the given conclusions logically follow(s) from the statement(s).

Statements:

- A. Some kites are sky.
B. Some sky are birds.

Conclusion

1. All birds are Kites.
2. All sky are kites.

- Ans ☒ 1. Both conclusion 1 and 2 follow
☒ 2. Neither conclusion 1 nor 2 follows
☒ 3. Only conclusion 1 follows
☒ 4. Only conclusion 2 follows

Question ID : 630680849061
Option 1 ID : 6306803325777
Option 2 ID : 6306803325776
Option 3 ID : 6306803325774
Option 4 ID : 6306803325775

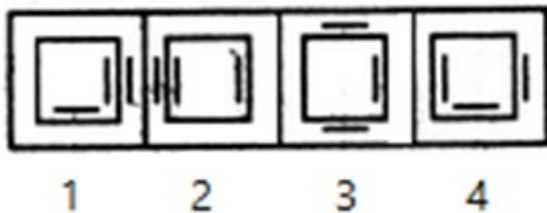
Q.13 If S means (\times), T means ($-$), U means (\div) and V means ($+$), then what will be the value of the following expression?

$$(42 \text{ U } 2) \text{ V } (5 \text{ S } 9)$$

- Ans ☒ 1. 50
☒ 2. 46
☒ 3. 30
☒ 4. 66

Question ID : 630680835451
Option 1 ID : 6306803272592
Option 2 ID : 6306803272591
Option 3 ID : 6306803272590
Option 4 ID : 6306803272593

Q.14 Find the figure which is different from the rest figure options given below.



- Ans ☒ 1. 1
☒ 2. 4
☒ 3. 2
☒ 4. 3

Question ID : 630680849076
Option 1 ID : 6306803325834
Option 2 ID : 6306803325837
Option 3 ID : 6306803325835
Option 4 ID : 6306803325836

Q.15 In a certain code language, SUN is written as TVO and SAND is written as TBOE. How MOON will be written in the same code?

- Ans

✖

1. POON

✖

2. PONO

✔

3. NPPO

✖

4. NPOP

Question ID : 630680849051

Option 1 ID : 6306803325737

Option 2 ID : 6306803325736

Option 3 ID : 6306803325734

Option 4 ID : 6306803325735

Q.16 How is Harshit's (Boy) mother's father's only son-in-law related to Harshit?

- Ans

✔

1. Father

✖

2. Father-in-law

✖

3. Paternal Uncle

✖

4. Son

Question ID : 630680835428

Option 1 ID : 6306803272499

Option 2 ID : 6306803272500

Option 3 ID : 6306803272501

Option 4 ID : 6306803272498

Q.17 Seven friends Kavi, Manas, Sohan, Harish, Falak, Deepali and Chandni are sitting around a circular table facing the centre. Sohan is sitting second to the right of Harish. Harish is sitting to the immediate right of Chandni. Manas is sitting to the immediate left of Chandni. Manas is sitting on the immediate right of the falak. Falak is sitting immediately to the right of the kavi. Deepali is sitting second to the left of the kavi. Who is sitting exactly between Manas and Kavi on the circular table?

- Ans

✖

1. Chandni

✖

2. Sohan

✔

3. Falak

✖

4. Harish

Question ID : 630680849796

Option 1 ID : 6306803328424

Option 2 ID : 6306803328422

Option 3 ID : 6306803328421

Option 4 ID : 6306803328423

Q.18 Which of the following option is different from the other three options on the basis of sportsperson and sports?

- Ans ☒ 1. Sharath Kamal
☒ 2. Sunil Gavaskar
☒ 3. Soumyajit Ghosh
☒ 4. Chetan Baboor

Question ID : 630680835390
 Option 1 ID : 6306803272349
 Option 2 ID : 6306803272347
 Option 3 ID : 6306803272346
 Option 4 ID : 6306803272348

Q.19 Which of the following options will replace the question mark to make the following expression logically complete on the basis of only square of numbers and addition method?

37 : 6
 26 : 5
 170 : ?

- Ans ☒ 1. 14
☒ 2. 13
☒ 3. 12
☒ 4. 11

Question ID : 630680849088
 Option 1 ID : 6306803325885
 Option 2 ID : 6306803325884
 Option 3 ID : 6306803325883
 Option 4 ID : 6306803325882

Q.20 On the basis of general mental ability and general mental understanding only, without regard to scientific and technical facts, Which of the following options will replace the question mark on the basis of tool and its function?

Shield : Guard :: Car:?

- Ans ☒ 1. Magnification
☒ 2. Grip
☒ 3. Drive
☒ 4. Scoop

Question ID : 630680849880
 Option 1 ID : 6306803328756
 Option 2 ID : 6306803328754
 Option 3 ID : 6306803328753
 Option 4 ID : 6306803328755

Q.1 Based only on common sense and normal mental ability without regard to any scientific and technical facts, which of the following option is different from the other three options on the basis of musical instruments and their types?

- Ans

✖

1. Harmonium

✖

2. Accordion

✔

3. Flute

✖

4. Piano

Question ID : 630680849070

Option 1 ID : 6306803325812

Option 2 ID : 6306803325813

Option 3 ID : 6306803325810

Option 4 ID : 6306803325811

Q.2 If all the symbols are removed from the given series, what will be the 11th element from the left?

G \$ 1 U 5 J # H @ 9 L 6 & S 8 & K 4 J 5 @ D \$

- Ans

✔

1. 8

✖

2. K

✖

3. S

✖

4. 6

Question ID : 630680849053

Option 1 ID : 6306803325744

Option 2 ID : 6306803325743

Option 3 ID : 6306803325745

Option 4 ID : 6306803325742

Q.3 Which of the following options is different from the other three options on the basis of transport and means of transport, based only on common sense and general mental ability, without regard to any scientific and technical facts?

- Ans

✖

1. Bus

✖

2. Car

✖

3. Truck

✔

4. Aeroplane

Question ID : 630680849067

Option 1 ID : 6306803325799

Option 2 ID : 6306803325801

Option 3 ID : 6306803325800

Option 4 ID : 6306803325798

Q.4 How is Palak related to the only daughter of Palak's mother's father's wife?

- Ans
- ☒ 1. Paternal Grandmother
 - ☒ 2. Maternal grandmother
 - ☒ 3. Daughter
 - ☒ 4. Mother

Question ID : 630680849874
Option 1 ID : 6306803328729
Option 2 ID : 6306803328732
Option 3 ID : 6306803328731
Option 4 ID : 6306803328730

Q.5 On the basis of general mental ability and general mental understanding only, without regard to scientific and technical facts , Which of the following options will replace the question mark on the basis of product and raw material?

Book : Paper :: Metal :?

- Ans
- ☒ 1. Glass
 - ☒ 2. Ore
 - ☒ 3. Pulp
 - ☒ 4. Wool

Question ID : 630680835437
Option 1 ID : 6306803272535
Option 2 ID : 6306803272537
Option 3 ID : 6306803272534
Option 4 ID : 6306803272536

Q.6 Read the given statement(s) and conclusions carefully. Assuming that the information given in the statements is true, even if it appears to be at variance with commonly known facts, decide which of the given conclusions logically follow(s) from the statement(s).

Statements:

- A. All forests are turmeric.
- B. All turmeric are herb.

Conclusions:

- 1. All turmeric are forest.
- 2. All herbs are forests.

- Ans
- ☒ 1. Neither conclusion 1 nor 2 follows
 - ☒ 2. Both conclusion 1 and 2 follow
 - ☒ 3. Only conclusion 1 follows
 - ☒ 4. Only conclusion 2 follows

Question ID : 630680849815
Option 1 ID : 6306803328499
Option 2 ID : 6306803328500
Option 3 ID : 6306803328497
Option 4 ID : 6306803328498

Q.7 Five friends named Neeti, Indu, Rajan, Suchit and Riyaz are sitting in a straight line facing north. Neeti sits at the extreme left end of the row. Indu sits exactly between Neeti and Suchit. Suchit is sitting exactly between Indu and Riyaz. If Riyaz is sitting second from the right end, then who is sitting at the right end of the line?

- Ans
- ☒ 1. Suchit
 - ☒ 2. Indu
 - ☒ 3. Rajan
 - ☒ 4. Riyaz

Question ID : 630680835412
Option 1 ID : 6306803272436
Option 2 ID : 6306803272435
Option 3 ID : 6306803272434
Option 4 ID : 6306803272437

Q.8 Which of the following options will replace the question mark to make the following expression logically complete?

7 : 56 :: 9 : ?

- Ans
- ☒ 1. 64
 - ☒ 2. 72
 - ☒ 3. 80
 - ☒ 4. 90

Question ID : 630680849785
Option 1 ID : 6306803328381
Option 2 ID : 6306803328382
Option 3 ID : 6306803328383
Option 4 ID : 6306803328384

Q.9 What will come in place of the question mark (?) to make the series given below logically complete by using addition and subtraction processes only whichever may be applicable?

14, 23, 21, 30, 28, ?, ?

- Ans
- ☒ 1. 37, 35
 - ☒ 2. 38, 40
 - ☒ 3. 40, 38
 - ☒ 4. 35, 37

Question ID : 630680849783
Option 1 ID : 6306803328373
Option 2 ID : 6306803328376
Option 3 ID : 6306803328375
Option 4 ID : 6306803328374

Q.10 On the basis of general mental ability and general mental understanding only, without regard to scientific and technical facts, Which of the following options will replace the question mark on the basis of subjects and their topics?

English : Preposition :: Mathematics:?

- Ans ☐ 1. Allotropy
☒ 2. Percentage
☐ 3. Mughals
☐ 4. Monsoon

Question ID : 630680835326
 Option 1 ID : 6306803272089
 Option 2 ID : 6306803272087
 Option 3 ID : 6306803272086
 Option 4 ID : 6306803272088

Q.11 Which of the following pairs is similar to the expression given below based on addition method only?

682 : 16
 653 : 14

- Ans ☐ 1. 345 : 15
☐ 2. 459 : 17
☐ 3. 289 : 17
☒ 4. 198 : 18

Question ID : 630680835406
 Option 1 ID : 6306803272412
 Option 2 ID : 6306803272413
 Option 3 ID : 6306803272411
 Option 4 ID : 6306803272410

Q.12 Read the given statement(s) and conclusions carefully. Assuming that the information given in the statements is true, even if it appears to be at variance with commonly known facts, decide which of the given conclusions logically follow(s) from the statement(s).

Statements:

- A. All turmeric are fennel.
 B. All fennel are sesame.

Conclusions:

1. All sesame are turmeric
 2. All sesame are fennel.

- Ans ☒ 1. Neither conclusion 1 nor 2 follows
☐ 2. Both conclusion 1 and 2 follow
☐ 3. Only conclusion 2 follows
☐ 4. Only conclusion 1 follows

Question ID : 630680849762
 Option 1 ID : 6306803328291
 Option 2 ID : 6306803328292
 Option 3 ID : 6306803328290
 Option 4 ID : 6306803328289

Q.13 In a certain code language, OWL is written as NXM and BAT is written as CZU. How CAT will be written in the same code language ?

Ans ☒ 1. DZU

☒ 2. DUZ

☒ 3. UZD

☒ 4. UDZ

Question ID : 630680849050
Option 1 ID : 6306803325731
Option 2 ID : 6306803325730
Option 3 ID : 6306803325732
Option 4 ID : 6306803325733

Q.14 On the basis of general mental understanding and general mental ability only, without caring for any scientific and technical aspect, which of the following options is different from the other three options based on flowers and fruits?

Ans ☒ 1. Lily

☒ 2. Jasmine

☒ 3. Orange

☒ 4. Marigold

Question ID : 630680849826
Option 1 ID : 6306803328543
Option 2 ID : 6306803328541
Option 3 ID : 6306803328544
Option 4 ID : 6306803328542

Q.15 Prem, Kunal, Rajesh, Sohan and Tarun are five boys who live on different floors but not necessarily in the same order. Kunal lives on the second floor from the top. Sohan lives immediately below the floor of Kunal. Tarun lives between the floors of Sohan and Rajesh. if Prem lives at the top floor, who lives on the middle floor of the building?

Ans ☒ 1. Kunal

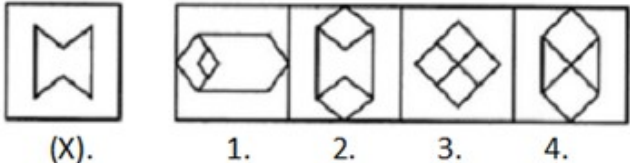
☒ 2. Rajesh

☒ 3. Prem

☒ 4. Sohan

Question ID : 630680849048
Option 1 ID : 6306803325725
Option 2 ID : 6306803325722
Option 3 ID : 6306803325724
Option 4 ID : 6306803325723

Q.16 Which of the following option will embed the original image (X)?



- Ans
- ☐ 1. 3

☐ 2. 4

☐ 3. 1

☒ 4. 2

Question ID : 630680835446

Option 1 ID : 6306803272572

Option 2 ID : 6306803272573

Option 3 ID : 6306803272570

Option 4 ID : 6306803272571

Q.17 If W means '+', X means '-', Y means 'x' and Z means ÷, then what will be the value of the following expression?

4 Y 12 W 6 X 12 Z 6 =?

- Ans
- ☐ 1. 50

☐ 2. 54

☒ 3. 52

☐ 4. 56

Question ID : 630680835342

Option 1 ID : 6306803272150

Option 2 ID : 6306803272152

Option 3 ID : 6306803272151

Option 4 ID : 6306803272153

Q.18 Only on the basis of alphabetical sequence what will come in the place of question mark (?) in the following series to make it logically complete?

S, R, Q, P, O, N, ?

- Ans
- ☒ 1. M

☐ 2. N

☐ 3. O

☐ 4. P

Question ID : 630680835393

Option 1 ID : 6306803272358

Option 2 ID : 6306803272359

Option 3 ID : 6306803272360

Option 4 ID : 6306803272361

Q.19 How many such symbols are there in the given series each of which is immediately preceded by a letter?

U \$ 5 B & N \$ 4 ^ 7 # 0 B 5 L # 3 * P % & K 8 7 T 1

- Ans
- ☒ 1. 4
 - ☐ 2. 1
 - ☐ 3. 2
 - ☒ 4. 5

Question ID : 630680835316
Option 1 ID : 6306803272049
Option 2 ID : 6306803272046
Option 3 ID : 6306803272047
Option 4 ID : 6306803272048

Q.20 On the basis of general mental ability and general mental understanding only, without regard to scientific and technical facts, Which of the following options will replace the question mark on the basis of tool and its action?

Knife : Cut :: Shield:?

- Ans
- ☒ 1. Guard
 - ☐ 2. Grip
 - ☐ 3. Write
 - ☐ 4. Magnification

Question ID : 630680849065
Option 1 ID : 6306803325790
Option 2 ID : 6306803325791
Option 3 ID : 6306803325792
Option 4 ID : 6306803325793

Section : General Awareness 1

Q.1 Election Commission of India (ECI) was established in which of the following year?

- Ans
- ☐ 1. 1956
 - ☐ 2. 1963
 - ☐ 3. 1957
 - ☒ 4. 1950

Question ID : 630680854829
Option 1 ID : 6306803348029
Option 2 ID : 6306803348027
Option 3 ID : 6306803348028
Option 4 ID : 6306803348026

Q.2 Census is an official count of the population conducted from time to time. In which of the following years was the first complete census conducted in India?

- Ans
- ☐ 1. 1872
 - ☐ 2. 1871
 - ☒ 3. 1881
 - ☐ 4. 1951

Question ID : 630680840353
Option 1 ID : 6306803292093
Option 2 ID : 6306803292094
Option 3 ID : 6306803292095
Option 4 ID : 6306803292096

Q.3 As on 31 December – 2023, which of the following languages is not included in the 8th Schedule of the Indian Constitution?

- Ans
- ☐ 1. Hindi
 - ☐ 2. Bodo
 - ☐ 3. Dogri
 - ☒ 4. Mizo

Question ID : 630680854815
Option 1 ID : 6306803347970
Option 2 ID : 6306803347971
Option 3 ID : 6306803347973
Option 4 ID : 6306803347972

Q.4 Surajkund Crafts Mela is mainly associated with which of the following states of India?

- Ans
- ☒ 1. Haryana
 - ☐ 2. Tamil Nadu
 - ☐ 3. Andhra Pradesh
 - ☐ 4. Kerala

Question ID : 630680839265
Option 1 ID : 6306803287744
Option 2 ID : 6306803287743
Option 3 ID : 6306803287741
Option 4 ID : 6306803287742

Q.5 In which part of the Indian Constitution the constitutional provisions related to Panchayat are discussed?

- Ans
- ☐ 1. Part – VI
 - ☒ 2. Part – IX
 - ☐ 3. Part – III
 - ☐ 4. Part – VII

Question ID : 630680854880
Option 1 ID : 6306803348240
Option 2 ID : 6306803348238
Option 3 ID : 6306803348241
Option 4 ID : 6306803348239

Q.6 Which of the following states/organizations/UT's stood second in the medal tally of the National Games-2023 held in Goa?

- Ans ☒ 1. Punjab
☒ 2. Railways
☒ 3. Chandigarh
☒ 4. Services

Question ID : 630680854847
 Option 1 ID : 6306803348109
 Option 2 ID : 6306803348107
 Option 3 ID : 6306803348108
 Option 4 ID : 6306803348106

Q.7 Who among the following has written the book titled "In a Free State"?

- Ans ☒ 1. Salman Rushdie
☒ 2. V.S. Naipaul
☒ 3. Kiran Desai
☒ 4. Aravind Adiga

Question ID : 630680854867
 Option 1 ID : 6306803348188
 Option 2 ID : 6306803348189
 Option 3 ID : 6306803348187
 Option 4 ID : 6306803348186

Q.8 In which of the following years was 5G services (communications and technology) launched in India?

- Ans ☒ 1. 2021
☒ 2. 2022
☒ 3. 2019
☒ 4. 2020

Question ID : 630680852069
 Option 1 ID : 6306803337332
 Option 2 ID : 6306803337333
 Option 3 ID : 6306803337335
 Option 4 ID : 6306803337334

Q.9 Which of the following is considered to be the most commonly used measure of money supply?

- Ans ☒ 1. M3
☒ 2. M1
☒ 3. M2
☒ 4. M4

Question ID : 630680854751
 Option 1 ID : 6306803347714
 Option 2 ID : 6306803347716
 Option 3 ID : 6306803347715
 Option 4 ID : 6306803347717

Q.10 India's only active volcano is found on ____ in Andaman and Nicobar group of Islands.

- Ans ☒ 1. Little Andaman Island
☒ 2. Barren island
☒ 3. Narcondam island
☒ 4. Car Nicobar Island

Question ID : 630680854819
 Option 1 ID : 6306803347987
 Option 2 ID : 6306803347988
 Option 3 ID : 6306803347989
 Option 4 ID : 6306803347986

Q.11 Which of the following rivers is also known as 'Singi Khamban'?

- Ans ☒ 1. Indus
☒ 2. Brahmaputra
☒ 3. Ganga
☒ 4. Sutlej

Question ID : 630680854764
 Option 1 ID : 6306803347766
 Option 2 ID : 6306803347768
 Option 3 ID : 6306803347769
 Option 4 ID : 6306803347767

Q.12 How many years is the tenure of the President in India?

- Ans ☒ 1. 7 years
☒ 2. 5 years
☒ 3. 6 years
☒ 4. 3 years

Question ID : 630680854830
 Option 1 ID : 6306803348030
 Option 2 ID : 6306803348032
 Option 3 ID : 6306803348031
 Option 4 ID : 6306803348033

Q.13 In which of the following cities of India was , the 3rd one-day regional seminar on 'Vatsal Bharat' – Child Protection, Child Safety and Child Welfare organized?

- Ans ☒ 1. Mumbai
☒ 2. New Delhi
☒ 3. Chennai
☒ 4. Kolkata

Question ID : 630680851641
 Option 1 ID : 6306803335630
 Option 2 ID : 6306803335629
 Option 3 ID : 6306803335631
 Option 4 ID : 6306803335628

Q.14 In which of the following states of India is the largest salt water lake Chilka located?

- Ans ☒ 1. Maharashtra
☒ 2. Kerala
☒ 3. Odisha
☒ 4. Gujarat

Question ID : 630680854873
 Option 1 ID : 6306803348213
 Option 2 ID : 6306803348210
 Option 3 ID : 6306803348212
 Option 4 ID : 6306803348211

Q.15 National Green Tribunal has been established in which of the following year?

- Ans ☒ 1. 2010
☒ 2. 2008
☒ 3. 2012
☒ 4. 2018

Question ID : 630680854782
 Option 1 ID : 6306803347841
 Option 2 ID : 6306803347839
 Option 3 ID : 6306803347840
 Option 4 ID : 6306803347838

Q.16 ____ are chlorophyll-bearing, simple, thalloid, autotrophic and largely aquatic (both fresh water and marine) organisms. They occur in a variety of other habitats: moist stones, soils and wood.

- Ans ☒ 1. Fungus
☒ 2. Gymnosperms
☒ 3. Protozoa
☒ 4. Algae

Question ID : 630680839280
 Option 1 ID : 6306803287802
 Option 2 ID : 6306803287804
 Option 3 ID : 6306803287803
 Option 4 ID : 6306803287801

Q.17 As on 31 December – 2023, which of the following languages is not included in the 8th Schedule of the Indian Constitution?

- Ans ☒ 1. Manipuri
☒ 2. Nepali
☒ 3. Pali
☒ 4. Sindhi

Question ID : 630680854759
 Option 1 ID : 6306803347746
 Option 2 ID : 6306803347749
 Option 3 ID : 6306803347748
 Option 4 ID : 6306803347747

Q.18 An exclusive training programme named Poshan Bhi, Padhai Bhi (PBPB) launched in which of the following year?

- Ans
- ☒ 1. 2022
 - ☐ 2. 2024
 - ☐ 3. 2021
 - ☒ 4. 2023

Question ID : 630680839248
Option 1 ID : 6306803287674
Option 2 ID : 6306803287676
Option 3 ID : 6306803287673
Option 4 ID : 6306803287675

Q.19 Which of the following is also known as aggregate monetary resources?

- Ans
- ☒ 1. M3
 - ☐ 2. M4
 - ☐ 3. M1
 - ☐ 4. M2

Question ID : 630680854861
Option 1 ID : 6306803348165
Option 2 ID : 6306803348162
Option 3 ID : 6306803348164
Option 4 ID : 6306803348163

Q.20 Which of the following is the botanical name of pea (matar)?

- Ans
- ☐ 1. Phaseolus aureus
 - ☒ 2. Pisum sativum
 - ☐ 3. Glycine max
 - ☐ 4. Cajanus cajan

Question ID : 630680852100
Option 1 ID : 6306803337458
Option 2 ID : 6306803337456
Option 3 ID : 6306803337459
Option 4 ID : 6306803337457

Q.1 When the rivers discharge their waters from all directions in a lake or depression, the pattern is known as_____.

- Ans
- ☒ 1. Radial
 - ☒ 2. Dendritic
 - ☒ 3. Centripetal
 - ☒ 4. Trellis

Question ID : 630680840350
Option 1 ID : 6306803292083
Option 2 ID : 6306803292081
Option 3 ID : 6306803292084
Option 4 ID : 6306803292082

Q.2 Who among the following has written the book titled Hind Swaraj?

- Ans
- ☒ 1. Motilal Nehru
 - ☒ 2. Mahatma Gandhi
 - ☒ 3. Madan Mohan malviya
 - ☒ 4. Shubhash Chandra bose

Question ID : 630680840343
Option 1 ID : 6306803292056
Option 2 ID : 6306803292055
Option 3 ID : 6306803292054
Option 4 ID : 6306803292053

Q.3 The root systems of all leguminous plants have specialized nodules that contain bacteria. These bacteria directly fix atmospheric nitrogen and convert it into nitrogen compounds. What is this process called?

- Ans
- ☒ 1. Denitrification
 - ☒ 2. Nitrogen-fixation
 - ☒ 3. Assimilation
 - ☒ 4. Nitrogen cycle

Question ID : 630680851675
Option 1 ID : 6306803335766
Option 2 ID : 6306803335764
Option 3 ID : 6306803335767
Option 4 ID : 6306803335765

Q.4 Sex ratio in India refers to the number of women per _____ men in a given area in a specified time period.

- Ans
- ☒ 1. 1000
 - ☒ 2. 10000
 - ☒ 3. 500
 - ☒ 4. 100

Question ID : 630680854824
Option 1 ID : 6306803348007
Option 2 ID : 6306803348006
Option 3 ID : 6306803348009
Option 4 ID : 6306803348008

Q.5 How many persons has been awarded the Nobel Prize for Chemistry for the year 2023?

- Ans ☒ 1. 4
☒ 2. 3
☒ 3. 2
☒ 4. 1

Question ID : 630680852068
 Option 1 ID : 6306803337328
 Option 2 ID : 6306803337331
 Option 3 ID : 6306803337330
 Option 4 ID : 6306803337329

Q.6 Madai festival is mainly celebrated in which of the following states of India?

- Ans ☒ 1. Chhattisgarh
☒ 2. Tripura
☒ 3. Nagaland
☒ 4. Manipur

Question ID : 630680854817
 Option 1 ID : 6306803347981
 Option 2 ID : 6306803347979
 Option 3 ID : 6306803347978
 Option 4 ID : 6306803347980

Q.7 World famous Sonepur Cattle Fair is well-known cultural event of Bihar . It recreates the legend of Gajendra Mokshya which is Associated with the ____ Temple in Sonepur.

- Ans ☒ 1. Harihar Nath
☒ 2. Someshwarnatha
☒ 3. Baba Basukinatha
☒ 4. Yamunotri

Question ID : 630680854761
 Option 1 ID : 6306803347757
 Option 2 ID : 6306803347755
 Option 3 ID : 6306803347756
 Option 4 ID : 6306803347754

Q.8 The Tropic of Cancer passes through the central part of India from Gujarat in the west to ____ state in the east.

- Ans ☒ 1. Nagaland
☒ 2. Mizoram
☒ 3. Arunachal Pradesh
☒ 4. Manipur

Question ID : 630680852089
 Option 1 ID : 6306803337415
 Option 2 ID : 6306803337412
 Option 3 ID : 6306803337414
 Option 4 ID : 6306803337413

Q.9 Rankireddy Satwik Sai Raj belongs to which among the following state of India?

- Ans ☒ 1. Delhi
☒ 2. Madhya Pradesh
☒ 3. Bihar
☒ 4. Andhra Pradesh

Question ID : 630680854736
 Option 1 ID : 6306803347654
 Option 2 ID : 6306803347655
 Option 3 ID : 6306803347656
 Option 4 ID : 6306803347657

Q.10 As on 31 December 2023, which of the following languages is not included in the 8th Schedule of the Indian Constitution?

- Ans ☒ 1. Punjabi
☒ 2. Gujarati
☒ 3. Marathi
☒ 4. Gondi

Question ID : 630680854869
 Option 1 ID : 6306803348194
 Option 2 ID : 6306803348195
 Option 3 ID : 6306803348197
 Option 4 ID : 6306803348196

Q.11 In which of the following years did the National Council for Promotion of Urdu Language (NCPUL) started it's operations in Delhi?

- Ans ☒ 1. 1980
☒ 2. 1996
☒ 3. 1989
☒ 4. 1984

Question ID : 630680854870
 Option 1 ID : 6306803348201
 Option 2 ID : 6306803348198
 Option 3 ID : 6306803348199
 Option 4 ID : 6306803348200

Q.12 Health and maternity benefits are insured under deprivation and occupation criteria through Ayushman Bharat-Pradhan Mantri Jan Arogya Yojana. It provides health insurance coverage for hospitalization related to secondary and tertiary care at an interval of how many years?

- Ans ☒ 1. 3 years
☒ 2. 1 year
☒ 3. 5 year
☒ 4. 2 years

Question ID : 630680854852
 Option 1 ID : 6306803348128
 Option 2 ID : 6306803348126
 Option 3 ID : 6306803348129
 Option 4 ID : 6306803348127

Q.13 INTEGRATED PENSIONERS' PORTAL has been launched in which of the following year?

- Ans ☒ 1. 2023
☒ 2. 2021
☒ 3. 2022
☒ 4. 2020

Question ID : 630680839247
 Option 1 ID : 6306803287671
 Option 2 ID : 6306803287670
 Option 3 ID : 6306803287669
 Option 4 ID : 6306803287672

Q.14 Provisions regarding "Original jurisdiction of the Supreme Court" has been mentioned in which Article of the Indian Constitution?

- Ans ☒ 1. Article - 134
☒ 2. Article - 131
☒ 3. Article - 132
☒ 4. Article - 133

Question ID : 630680854831
 Option 1 ID : 6306803348037
 Option 2 ID : 6306803348034
 Option 3 ID : 6306803348035
 Option 4 ID : 6306803348036

Q.15 "This writ is issued when the court finds that a particular office holder is not doing legal duty and thereby is infringing on the right of an individual." Which Writ has been mentioned here?

- Ans ☒ 1. Quo Warranto
☒ 2. Habeas corpus
☒ 3. Prohibition
☒ 4. Mandamus

Question ID : 630680854882
 Option 1 ID : 6306803348246
 Option 2 ID : 6306803348248
 Option 3 ID : 6306803348247
 Option 4 ID : 6306803348249

Q.16 How many years is the tenure of the Vice President in India?

- Ans ☒ 1. 3 years
☒ 2. 7 years
☒ 3. 6 years
☒ 4. 5 years

Question ID : 630680854884
 Option 1 ID : 6306803348257
 Option 2 ID : 6306803348254
 Option 3 ID : 6306803348255
 Option 4 ID : 6306803348256

Q.17 Which of the following is the botanical name of soyabean?

- Ans ☒ 1. Phaseolus aureus
☒ 2. Pisum sativum
☒ 3. Cajanas cajan
☒ 4. Glycine max

Question ID : 630680854777
 Option 1 ID : 6306803347820
 Option 2 ID : 6306803347818
 Option 3 ID : 6306803347819
 Option 4 ID : 6306803347821

Q.18 Which of the following festivals is known as 'Malayalam New Year' in Kerala?

- Ans ☒ 1. Vishu
☒ 2. Attukal Pongala
☒ 3. Onam
☒ 4. Thrissur Pooram

Question ID : 630680854871
 Option 1 ID : 6306803348205
 Option 2 ID : 6306803348204
 Option 3 ID : 6306803348202
 Option 4 ID : 6306803348203

Q.19 Those animals whose body temperature rises and falls with the rise and fall of their surrounding temperature are termed ____.

- Ans ☒ 1. Coelomates
☒ 2. Chiroptera
☒ 3. Rodentia
☒ 4. Ectotherms

Question ID : 630680854888
 Option 1 ID : 6306803348273
 Option 2 ID : 6306803348270
 Option 3 ID : 6306803348271
 Option 4 ID : 6306803348272

Q.20 Which of the following is the botanical name of groundnut ?

- Ans ☒ 1. Phaseolus aureus
☒ 2. Pisum sativum
☒ 3. Cajanas cajan
☒ 4. Arachis hypogea

Question ID : 630680854887
 Option 1 ID : 6306803348268
 Option 2 ID : 6306803348266
 Option 3 ID : 6306803348267
 Option 4 ID : 6306803348269

Q.1 The simple interest on a sum of money in 5 years at 12 % per annum is ₹ 600 less than the simple interest accrued on the same sum in 8 years at 10 % per annum. Find the sum.

- Ans**
- ☒ 1. ₹2200
 - ☒ 2. ₹2500
 - ☒ 3. ₹3000
 - ☒ 4. ₹3100

Question ID : 630680855057
Option 1 ID : 6306803348955
Option 2 ID : 6306803348957
Option 3 ID : 6306803348956
Option 4 ID : 6306803348954

Q.2 The table below shows the marked price (in ₹) and discount percentage on 6 different articles.

Article	Marked Price	Discount percentage
A	5000	20 %
B	4000	15 %
C	8000	25 %
D	5500	30 %
E	7800	10 %
F	9200	15 %

Find the difference between the selling prices of articles C and D.

- Ans**
- ☒ 1. ₹ 2875
 - ☒ 2. ₹ 2900
 - ☒ 3. ₹ 3135
 - ☒ 4. ₹ 2150

Question ID : 630680840394
Option 1 ID : 6306803292258
Option 2 ID : 6306803292259
Option 3 ID : 6306803292260
Option 4 ID : 6306803292257

Q.3 A rectangular strip $35 \text{ cm} \times 7 \text{ cm}$ is rotated about the longer side. Find the total surface area of the solid thus generated.
(Use $\pi = \frac{22}{7}$)

- Ans**
- ☒ 1. 1880 cm^2
 - ☒ 2. 1920 cm^2
 - ☒ 3. 1848 cm^2
 - ☒ 4. 1568 cm^2

Question ID : 630680840427
Option 1 ID : 6306803292389
Option 2 ID : 6306803292391
Option 3 ID : 6306803292392
Option 4 ID : 6306803292390

Q.4 What is 25% of the average of 2 consecutive even numbers, if the first even number is "e"?

Ans ☒ 1. $(e+1)/4$

☐ 2. $e/4$

☐ 3. $e/2$

☐ 4. $(e+2)/4$

Question ID : 630680855073
Option 1 ID : 6306803349020
Option 2 ID : 6306803349021
Option 3 ID : 6306803349019
Option 4 ID : 6306803349018

Q.5 $12.5\sqrt{6} + 13.7\sqrt{6}$ is equal to:

Ans ☐ 1. $26\sqrt{6}$

☐ 2. 39.3

☒ 3. $26.2\sqrt{6}$

☐ 4. 78.6

Question ID : 630680855010
Option 1 ID : 6306803348766
Option 2 ID : 6306803348768
Option 3 ID : 6306803348769
Option 4 ID : 6306803348767

Q.6 The compound interest on ₹30,000 for 9 months at 16% per annum, interest being compounded quarterly, is (nearest to a ₹)

Ans ☐ 1. ₹ 4030

☐ 2. ₹ 5100

☐ 3. ₹ 4450

☒ 4. ₹ 3746

Question ID : 630680849968
Option 1 ID : 6306803329102
Option 2 ID : 6306803329104
Option 3 ID : 6306803329103
Option 4 ID : 6306803329101

Q.7 P, Q and R are in a cycle race of 6000 meters and start at the same time from the same point. P cycles twice as fast as Q. R cycles 1/3rd as fast as Q. R completes the race in 45 minutes. Then where was Q from the finishing line when P finished the race?

- Ans**
- ✓ 1. 3000 meters
 - ✗ 2. 1850 meters
 - ✗ 3. 3500 meters
 - ✗ 4. 2000 meters

Question ID : 630680855036
Option 1 ID : 6306803348872
Option 2 ID : 6306803348870
Option 3 ID : 6306803348873
Option 4 ID : 6306803348871

Q.8 The volume of water measured on a rectangular field 300m x 400m is 12000m^3 . Find the rain fall (in cm).

- Ans**
- ✗ 1. 14
 - ✓ 2. 10
 - ✗ 3. 20
 - ✗ 4. 15

Question ID : 630680854968
Option 1 ID : 6306803348595
Option 2 ID : 6306803348594
Option 3 ID : 6306803348597
Option 4 ID : 6306803348596

Q.9 A dishonest shopkeeper sells his grocery using weights 10 % less than the true weights and makes a profit of 25 %. Find his actual gain percentage (correct to two decimal places).

- Ans**
- ✗ 1. 41.2%
 - ✓ 2. 38.89%
 - ✗ 3. 39.55%
 - ✗ 4. 26.67%

Question ID : 630680855078
Option 1 ID : 6306803349041
Option 2 ID : 6306803349039
Option 3 ID : 6306803349040
Option 4 ID : 6306803349038

Q.10 How much should be added to each term of 4 : 7 so that it becomes 3 : 4?

- Ans**
- ✗ 1. 7
 - ✗ 2. 4
 - ✓ 3. 5
 - ✗ 4. 8

Question ID : 630680850052
Option 1 ID : 6306803329439
Option 2 ID : 6306803329437
Option 3 ID : 6306803329438
Option 4 ID : 6306803329440

Q.11 A student was asked to divide a number by 8 and add 16 to the quotient. He, however, first added 16 to the number and then divided it by 8, getting 102 as the answer. What would have been the correct answer?

- Ans**
- ✓ 1. 116
 - ✗ 2. 124
 - ✗ 3. 100
 - ✗ 4. 112

Question ID : 630680855070
Option 1 ID : 6306803349007
Option 2 ID : 6306803349009
Option 3 ID : 6306803349008
Option 4 ID : 6306803349006

Q.12 One side of a parallelogram is 22 cm and its distance from the opposite side is 8 cm. The area of the parallelogram is:

- Ans**
- ✗ 1. 60 cm²
 - ✗ 2. 352 cm²
 - ✗ 3. 88 cm²
 - ✓ 4. 176 cm²

Question ID : 630680855039
Option 1 ID : 6306803348884
Option 2 ID : 6306803348882
Option 3 ID : 6306803348883
Option 4 ID : 6306803348885

Q.13 The marked price of an item was ₹ 580 and the shopkeeper offered a discount of 5%. At what price does he finally sell the item?

- Ans**
- ✗ 1. ₹ 541
 - ✗ 2. ₹ 513
 - ✓ 3. ₹ 551
 - ✗ 4. ₹ 492

Question ID : 630680855079
Option 1 ID : 6306803349044
Option 2 ID : 6306803349043
Option 3 ID : 6306803349045
Option 4 ID : 6306803349042

Q.14 Two trains of length 160 m and 180 m long are running on parallel track in same direction with the speeds of 96 km/h and 60 km/h. respectively. In how many seconds, will they cross each other?

- Ans
- ☒ 1. 53
 - ☒ 2. 42
 - ☒ 3. 30
 - ☒ 4. 34

Question ID : 630680850001
Option 1 ID : 6306803329236
Option 2 ID : 6306803329235
Option 3 ID : 6306803329233
Option 4 ID : 6306803329234

Q.15 How many runs on average does a team need to score per over to reach a total of 245 runs in a 20-over match?

- Ans
- ☒ 1. 13
 - ☒ 2. 12.75
 - ☒ 3. 12
 - ☒ 4. 12.25

Question ID : 630680849962
Option 1 ID : 6306803329080
Option 2 ID : 6306803329079
Option 3 ID : 6306803329077
Option 4 ID : 6306803329078

Q.16 The least common multiple of 33 and 550 is:

- Ans
- ☒ 1. 18150
 - ☒ 2. 1650
 - ☒ 3. 660
 - ☒ 4. 330

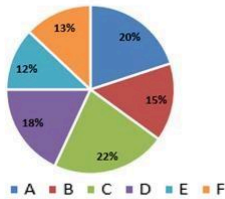
Question ID : 630680854941
Option 1 ID : 6306803348489
Option 2 ID : 6306803348488
Option 3 ID : 6306803348487
Option 4 ID : 6306803348486

Q.17 If $2a : 3b = 8 : 9$ and $4c : 5b = 1 : 2$, then what is $a : b : c$?

- Ans
- ☒ 1. 32 : 24 : 15
 - ☒ 2. 26 : 23 : 10
 - ☒ 3. 44 : 32 : 17
 - ☒ 4. 30 : 28 : 10

Question ID : 630680849992
Option 1 ID : 6306803329200
Option 2 ID : 6306803329198
Option 3 ID : 6306803329199
Option 4 ID : 6306803329197

- Q.18** The following pie-chart shows the percentage distribution of the expenditure incurred in publishing a book. Study the pie-chart and the answer the question.
Distribution of Expenditures (in percentage) Incurred in Publishing a Book



What is the central angle of the sector corresponding to the expenditure incurred on Expenditure D?

- Ans**
- ☒ 1. 60°
 - ☒ 2. 64.8°
 - ☒ 3. 62.5°
 - ☒ 4. 66.6°

Question ID : 630680855007
Option 1 ID : 6306803348754
Option 2 ID : 6306803348756
Option 3 ID : 6306803348755
Option 4 ID : 6306803348757

- Q.19** Rajan can paint a wall in 36 hours, while Anand can do the same work in 24 hours. Sohan can paint the same wall in 18 hours. In how much time can they paint the wall if they all work together?

- Ans**
- ☒ 1. 10 hours
 - ☒ 2. 8 hours
 - ☒ 3. 12 hours
 - ☒ 4. 16 hours

Question ID : 630680854961
Option 1 ID : 6306803348567
Option 2 ID : 6306803348566
Option 3 ID : 6306803348568
Option 4 ID : 6306803348569

- Q.20** The total population of a city is 7000. The number of males and females increases by 5 % and 10 % respectively and consequently the population becomes 7500. Find the number of females in the village, initially.

- Ans**
- ☒ 1. 3400
 - ☒ 2. 3000
 - ☒ 3. 3500
 - ☒ 4. 2800

Question ID : 630680855075
Option 1 ID : 6306803349028
Option 2 ID : 6306803349027
Option 3 ID : 6306803349029
Option 4 ID : 6306803349026

Q.1 P can do a job in 24 days. In how many days can P and Q together complete the job if Q is twice as fast as P?

- Ans** ☒ 1. 8
☒ 2. 5
☒ 3. 10
☒ 4. 6

Question ID : 630680854962
 Option 1 ID : 6306803348572
 Option 2 ID : 6306803348570
 Option 3 ID : 6306803348573
 Option 4 ID : 6306803348571

Q.2 What is the difference between the compound interest and the simple interest on a sum of ₹ 4000 for 2 years at the rate of 6% per annum?

- Ans** ☒ 1. ₹ 14.40
☒ 2. ₹ 15.50
☒ 3. ₹ 12.60
☒ 4. ₹ 10.50

Question ID : 630680854936
 Option 1 ID : 6306803348467
 Option 2 ID : 6306803348466
 Option 3 ID : 6306803348468
 Option 4 ID : 6306803348469

Q.3 The area of a trapezium is 480 cm^2 , the distance between two parallel sides is 16 cm and one of the parallel sides is 24 cm. The length of the other parallel side is:

- Ans** ☒ 1. 45 cm
☒ 2. 36 cm
☒ 3. 56 cm
☒ 4. 66 cm

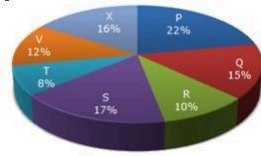
Question ID : 630680850003
 Option 1 ID : 6306803329242
 Option 2 ID : 6306803329241
 Option 3 ID : 6306803329243
 Option 4 ID : 6306803329244

Q.4 Sujoy ate 20 % of the bananas and 30 % of the apples. If there were 30 bananas and 10 apples, how many fruits did he eat?

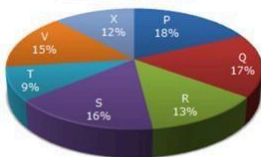
- Ans** ☒ 1. 9
☒ 2. 12
☒ 3. 10
☒ 4. 8

Question ID : 630680855016
 Option 1 ID : 6306803348792
 Option 2 ID : 6306803348790
 Option 3 ID : 6306803348791
 Option 4 ID : 6306803348793

Q.5 Study the following graph and answer the question below.
Distribution of candidates who were enrolled for MBA entrance exam and the candidates (out of those enrolled) who passed the exam in different institutes:



Candidates Enrolled = 6500



Candidates who passed the exam = 3000

What percentage of candidates passed the Exam from institute V out of the total number of candidates enrolled from the same institute? (correct to two decimal places)

- Ans**
- ☒ 1. 61.23%
 - ☒ 2. 55.45%
 - ☒ 3. 52.89%
 - ☒ 4. 57.69%

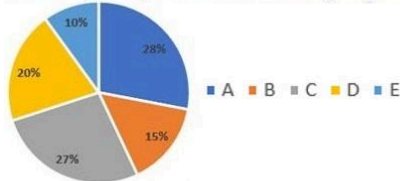
Question ID : 630680855008
Option 1 ID : 6306803348761
Option 2 ID : 6306803348759
Option 3 ID : 6306803348758
Option 4 ID : 6306803348760

Q.6 The sum of the radius and height of a cylinder is 46 m. The total surface area of the cylinder is $3036\pi \text{ m}^2$. What is the volume (in m^3) of the cylinder?

- Ans**
- ☒ 1. $34980\pi \text{ m}^3$
 - ☒ 2. $14157\pi \text{ m}^3$
 - ☒ 3. $34230\pi \text{ m}^3$
 - ☒ 4. $34500\pi \text{ m}^3$

Question ID : 630680854973
Option 1 ID : 6306803348617
Option 2 ID : 6306803348615
Option 3 ID : 6306803348616
Option 4 ID : 6306803348614

Q.7 The pie chart below shows the percentage of students in five schools (A, B, C, D and E) and the table below shows the ratio of boys and girls in each school. Study the pie chart and table and answer the question that follows.



School	Girls: Boys
A	1:3
B	1:4
C	4:5
D	1:3
E	3:2

If the total number of girls from all five schools is represented as a pie chart, then what will be the measure of the sector angle (to the nearest integer) corresponding to school E?

- Ans**
- ☒ 1. 30°
 - ☒ 2. 25°
 - ☒ 3. 35°
 - ☒ 4. 65°

Question ID : 630680850031
 Option 1 ID : 6306803329354
 Option 2 ID : 6306803329353
 Option 3 ID : 6306803329355
 Option 4 ID : 6306803329356

Q.8 A metro train runs at a speed of 50 km/h. It covers a total distance of 70 km on its route from origin to destination station in 2 hours that includes stops at intermediate stations. If it stops for 2 minutes at each station, how many intermediate stations are there in the route?

- Ans**
- ☒ 1. 12
 - ☒ 2. 15
 - ☒ 3. 23
 - ☒ 4. 18

Question ID : 630680854966
 Option 1 ID : 6306803348586
 Option 2 ID : 6306803348587
 Option 3 ID : 6306803348589
 Option 4 ID : 6306803348588

Q.9 Two times a positive number is less than its square by 15. What is the integer?

- Ans**
- ☒ 1. 5
 - ☒ 2. 6
 - ☒ 3. 4
 - ☒ 4. 8

Question ID : 630680854945
 Option 1 ID : 6306803348503
 Option 2 ID : 6306803348504
 Option 3 ID : 6306803348502
 Option 4 ID : 6306803348505

Q.10 Jeffy travels first 4 hours of her journey at a speed of 50 km/hr and the remaining distance in 6 hours at a speed of 30 km/hr. What is her average speed (in km/hr)?

- Ans
- ☒ 1. 30
 - ☒ 2. 20
 - ☒ 3. 34
 - ☒ 4. 38

Question ID : 630680849999
Option 1 ID : 6306803329228
Option 2 ID : 6306803329226
Option 3 ID : 6306803329227
Option 4 ID : 6306803329225

Q.11 The unit digit in the product (626 x 834 x 338)?

- Ans
- ☒ 1. 4
 - ☒ 2. 6
 - ☒ 3. 8
 - ☒ 4. 2

Question ID : 630680840398
Option 1 ID : 6306803292276
Option 2 ID : 6306803292273
Option 3 ID : 6306803292274
Option 4 ID : 6306803292275

Q.12 If A lends ₹ 6800 to B at 6% per annum and B lends the same sum to C at 10% per annum, find the gain of B in a period of 2 years.

- Ans
- ☒ 1. ₹780
 - ☒ 2. ₹460
 - ☒ 3. ₹544
 - ☒ 4. ₹640

Question ID : 630680854933
Option 1 ID : 6306803348454
Option 2 ID : 6306803348457
Option 3 ID : 6306803348456
Option 4 ID : 6306803348455

Q.13 Hansa is 40 years old and Rinki is 75 years old. How many years ago was the ratio of their ages 1:2?

- Ans
- ☒ 1. 2
 - ☒ 2. 7
 - ☒ 3. 4
 - ☒ 4. 5

Question ID : 630680854957
Option 1 ID : 6306803348550
Option 2 ID : 6306803348553
Option 3 ID : 6306803348551
Option 4 ID : 6306803348552

Q.14 The marked price of an item was ₹ 420 and the shopkeeper offered a discount of 10% on its marked price. At what price did he finally sell the item?

Ans ☒ 1. ₹378

☒ 2. ₹225

☒ 3. ₹362

☒ 4. ₹350

Question ID : 630680840459

Option 1 ID : 6306803292518

Option 2 ID : 6306803292517

Option 3 ID : 6306803292519

Option 4 ID : 6306803292520

Q.15 Rohit scored 328 marks out of 400 marks and his elder brother Benny scored 570 marks out of 600 marks. The greater percentage score is

Ans ☒ 1. 95%

☒ 2. 80%

☒ 3. 92%

☒ 4. 82%

Question ID : 630680840405

Option 1 ID : 6306803292302

Option 2 ID : 6306803292304

Option 3 ID : 6306803292303

Option 4 ID : 6306803292301

Q.16 The height of a cylinder whose radius is 14 cm, and the total surface area is 2156 cm^2 is: (Use $\pi = \frac{22}{7}$)

Ans ☒ 1. 12.5 cm

☒ 2. 10.5 cm

☒ 3. 15.5 cm

☒ 4. 13.6 cm

Question ID : 630680855095

Option 1 ID : 6306803349107

Option 2 ID : 6306803349106

Option 3 ID : 6306803349109

Option 4 ID : 6306803349108

Q.17 A dealer buys a cooler listed at ₹700 and gets two successive discounts of 20% and 10%. He spends ₹60 on its repairs and sells it at a profit of 20%. Find the selling price of the cooler.

Ans ☒ 1. ₹ 580.50

☒ 2. ₹ 630

☒ 3. ₹ 650.50

☒ 4. ₹ 676.80

Question ID : 630680855021

Option 1 ID : 6306803348810

Option 2 ID : 6306803348812

Option 3 ID : 6306803348813

Option 4 ID : 6306803348811

Q.18 The average of 8 numbers is 6. The average of 6 of them is 4. What is the average of remaining 2 numbers?

- Ans** ☒ 1. 12
☒ 2. 15
☒ 3. 14
☒ 4. 8

Question ID : 630680854998
 Option 1 ID : 6306803348721
 Option 2 ID : 6306803348719
 Option 3 ID : 6306803348718
 Option 4 ID : 6306803348720

Q.19 The ratio of present ages of two brothers is 1: 2 and 4 years ago, the ratio was 1: 3. What will be the ratio of their ages after 10 years ?

- Ans** ☒ 1. 9:11
☒ 2. 11:13
☒ 3. 13:11
☒ 4. 9:13

Question ID : 630680855085
 Option 1 ID : 6306803349066
 Option 2 ID : 6306803349069
 Option 3 ID : 6306803349068
 Option 4 ID : 6306803349067

Q.20 Find the minimum value of a, if it is given that a and b are two positive integers such that $a^2 - b^2 = 56$.

- Ans** ☒ 1. 4
☒ 2. 9
☒ 3. 6
☒ 4. 8

Question ID : 630680850035
 Option 1 ID : 6306803329372
 Option 2 ID : 6306803329369
 Option 3 ID : 6306803329371
 Option 4 ID : 6306803329370

Q.1 A statement has been given with highlighted text. You are required to replace the text with correct idiom from the given options.

Even though Andrew was late with his English assignment, Mr. William decided to (ease up on him to allow some leeway and give another chance) since he knew he had stomach flu.

- Ans

✔

1. cut him some slack

✖

2. (be) as cool as a cucumber

✖

3. cross his fingers

✖

4. add fuel to the fire

Question ID : 630680847731

Option 1 ID : 6306803320492

Option 2 ID : 6306803320490

Option 3 ID : 6306803320493

Option 4 ID : 6306803320491

Q.2 Choose the most appropriate one-word substitution for the below word.

“Study of birds”

- Ans

✔

1. Ornithology

✖

2. Paleology

✖

3. Geology

✖

4. Zoology

Question ID : 630680847784

Option 1 ID : 6306803320705

Option 2 ID : 6306803320703

Option 3 ID : 6306803320702

Option 4 ID : 6306803320704

Q.3 Select the appropriate article from the below options to complete the sentence. Mark “No article” if there is no requirement of article in the given sentence.

___ potential for networking is huge when attending an event or meeting.

- Ans

✖

1. An

✖

2. No article

✔

3. The

✖

4. A

Question ID : 630680848909

Option 1 ID : 6306803325177

Option 2 ID : 6306803325176

Option 3 ID : 6306803325175

Option 4 ID : 6306803325174

Q.4 Fill in the blanks with the most appropriate homonym in the following sentence.

They tried to ____ the painting.

- Ans
- ☒ 1. stale
 - ☒ 2. steal
 - ☒ 3. Tale still
 - ☒ 4. steel

Question ID : 630680847804
Option 1 ID : 6306803320778
Option 2 ID : 6306803320779
Option 3 ID : 6306803320780
Option 4 ID : 6306803320781

Q.5 Select the most appropriate SYNONYM of the given word below.

Rampant

- Ans
- ☒ 1. Constrained
 - ☒ 2. Hampered
 - ☒ 3. Controlled
 - ☒ 4. Uncontrolled

Question ID : 630680837938
Option 1 ID : 6306803282450
Option 2 ID : 6306803282447
Option 3 ID : 6306803282448
Option 4 ID : 6306803282449

Q.6 Select the most appropriate SYNONYM of the word highlighted/ given in brackets in the below sentence.

Happiness tends to become a feeling that can be (grasped) through the satisfaction of the mind and soul, and not through the pleasure of the body.

- Ans
- ☒ 1. understood
 - ☒ 2. misinterpreted
 - ☒ 3. discharged
 - ☒ 4. released

Question ID : 630680847802
Option 1 ID : 6306803320771
Option 2 ID : 6306803320773
Option 3 ID : 6306803320770
Option 4 ID : 6306803320772

Q.7 Select the most appropriate form of verb from the given options to replace the underlined and bracketed word in order to correct the below sentence.

She always (forgets) her purse.

- Ans
- ☒ 1. forgetting
 - ☒ 2. forgotten
 - ☒ 3. forgets
 - ☒ 4. had forgot

Question ID : 630680847775
Option 1 ID : 6306803320667
Option 2 ID : 6306803320666
Option 3 ID : 6306803320668
Option 4 ID : 6306803320669

Q.8 Choose the most appropriate one-word substitution for the below word.

"One who goes to settle in another country"

- Ans
- ☒ 1. Emigrant
 - ☒ 2. Enthusiast
 - ☒ 3. Native
 - ☒ 4. Tourist

Question ID : 630680838001
Option 1 ID : 6306803282702
Option 2 ID : 6306803282699
Option 3 ID : 6306803282701
Option 4 ID : 6306803282700

Q.9 Parts of the following sentence have been given as options that contain an error in spelling. Select from the below options that identify the misspelt word.

By promoting environmental sustaineability hand-in-hand with public health protection we can make significant steps towards mitigating climate change and achieving the Sustainable Development Goals.

- Ans
- ☒ 1. achieving
 - ☒ 2. sustaineability
 - ☒ 3. mitigating
 - ☒ 4. promoting

Question ID : 630680848948
Option 1 ID : 6306803325328
Option 2 ID : 6306803325329
Option 3 ID : 6306803325326
Option 4 ID : 6306803325327

Q.10 Select the most appropriate meaning of the proverb below from the given options.

"A bird in the hand is worth two in the bush"

- Ans
- ☒ 1. Eating an apple daily keeps you healthy
 - ☒ 2. What you have is better than what you might get
 - ☒ 3. It is better to take precautions than to regret later
 - ☒ 4. Evil thoughts come to us easily when we are idle

Question ID : 630680847733
Option 1 ID : 6306803320501
Option 2 ID : 6306803320498
Option 3 ID : 6306803320499
Option 4 ID : 6306803320500

Q.11 Select the correct preposition from the below options to complete the below sentence.

They quarrelled ___ a truffle pastry.

- Ans
- ☒ 1. by
 - ☒ 2. from
 - ☒ 3. on
 - ☒ 4. over

Question ID : 630680848911
Option 1 ID : 6306803325183
Option 2 ID : 6306803325185
Option 3 ID : 6306803325182
Option 4 ID : 6306803325184

Q.12 Fill in the blanks with the most appropriate homonym in the following sentence.

I need to take a ___ from work.

- Ans
- ☒ 1. brake
 - ☒ 2. berk
 - ☒ 3. bark
 - ☒ 4. break

Question ID : 630680838023
Option 1 ID : 6306803282783
Option 2 ID : 6306803282786
Option 3 ID : 6306803282784
Option 4 ID : 6306803282785

Q.13 Select the most appropriate SYNONYM of the word highlighted/ given in brackets in the below sentence.

The club members voted with one (accord) to raise the dues.

- Ans

☒

1. Feud
- ☒

2. Dispute
- ☒

3. Conflict
- ☒

4. Agreement

Question ID : 630680837839
 Option 1 ID : 6306803282066
 Option 2 ID : 6306803282063
 Option 3 ID : 6306803282065
 Option 4 ID : 6306803282064

Q.14 Select the appropriate article from the below options to complete the sentence. Mark “No article” if there is no requirement of article in the given sentence.

___ sooner he completes, the better it is.

- Ans

☒

1. A
- ☒

2. An
- ☒

3. The
- ☒

4. No article

Question ID : 630680847702
 Option 1 ID : 6306803320379
 Option 2 ID : 6306803320381
 Option 3 ID : 6306803320380
 Option 4 ID : 6306803320378

Q.15 Select the correct preposition from the below options to complete the below sentence.

Alex threw a stone ___ the pond.

- Ans

☒

1. to
- ☒

2. while
- ☒

3. into
- ☒

4. in

Question ID : 630680838076
 Option 1 ID : 6306803282991
 Option 2 ID : 6306803282994
 Option 3 ID : 6306803282992
 Option 4 ID : 6306803282993

Q.16 A statement has been given with highlighted text. You are required to replace the text with correct idiom from the given options.

He asked me for my phone number and I (failed to get an answer or a result) - I just could not remember it.

- Ans
- ☒ 1. (was) through thick and thin
 - ☒ 2. bit the bullet
 - ☒ 3. drew a blank
 - ☒ 4. (was) on cloud nine

Question ID : 630680837933
Option 1 ID : 6306803282427
Option 2 ID : 6306803282430
Option 3 ID : 6306803282429
Option 4 ID : 6306803282428

Q.17 Select the correct preposition from the below options to complete the below sentence.

John Smith is good_____ Mathematics.

- Ans
- ☒ 1. of
 - ☒ 2. from
 - ☒ 3. on
 - ☒ 4. at

Question ID : 630680838078
Option 1 ID : 6306803283002
Option 2 ID : 6306803283001
Option 3 ID : 6306803282999
Option 4 ID : 6306803283000

Q.18 Select the appropriate article from the below options to complete the sentence. Mark "No article" if there is no requirement of article in the given sentence.

He is __ man we were looking for.

- Ans
- ☒ 1. a
 - ☒ 2. No article
 - ☒ 3. the
 - ☒ 4. an

Question ID : 630680848907
Option 1 ID : 6306803325167
Option 2 ID : 6306803325166
Option 3 ID : 6306803325168
Option 4 ID : 6306803325169

Q.19 Choose the most logical order of the sentences from among the four given choices to construct a coherent paragraph.

Power foods are foods that provide rich levels of nutrients like fibre, potassium, and minerals.

- A) There are various ways of incorporating power foods in your daily diet.
 B) Of course, the key to enjoying power foods is proper preparation of these foods, the use of season-fresh foods, and identifying your choice of flavour among power foods.
 C) With people becoming increasingly health conscious today, a lot of fitness trainers encourage their clients to include these foods in their daily diet to increase muscle development.
 D) Some of the recommended power food combinations are those that are prepared in our kitchens on a regular basis. Take for instance, the combination of chickpeas and onions. This combination is a powerful source of iron which is required by the body to transport oxygen to its various parts.

Ans ☒ 1. ABCD

☒ 2. CABD

☒ 3. BDCA

☒ 4. DCBA

Question ID : 630680837999
 Option 1 ID : 6306803282693
 Option 2 ID : 6306803282692
 Option 3 ID : 6306803282691
 Option 4 ID : 6306803282694

Q.20 Select the most appropriate form of verb from the given options to replace the underlined and bracketed word in order to correct the below sentence.

We (watches) a movie last night.

Ans ☒ 1. watch

☒ 2. will be watching

☒ 3. watched

☒ 4. watching

Question ID : 630680847777
 Option 1 ID : 6306803320676
 Option 2 ID : 6306803320675
 Option 3 ID : 6306803320677
 Option 4 ID : 6306803320674

Q.1 Parts of the following sentence have been given as options that contain an error in spelling. Select from the below options that identify the misspelt word.

Digital life is augementing human capacities and disrupting eons-old human activities.

- Ans
- ☒ 1. capacities
 - ☒ 2. disrupting
 - ☒ 3. augementing
 - ☒ 4. activities

Question ID : 630680838025
Option 1 ID : 6306803282791
Option 2 ID : 6306803282792
Option 3 ID : 6306803282793
Option 4 ID : 6306803282794

Q.2 Select the most appropriate meaning of the proverb below from the given options.

"Practice what you preach."

- Ans
- ☒ 1. A performance, event, etc., must continue even though there are problems.
 - ☒ 2. Behave the way you encourage other people to behave.
 - ☒ 3. Someone's wrongful conduct is not a justification for acting in the same way.
 - ☒ 4. It's better to be cautious than regret later.

Question ID : 630680838015
Option 1 ID : 6306803282754
Option 2 ID : 6306803282752
Option 3 ID : 6306803282753
Option 4 ID : 6306803282751

Q.3 Select the most appropriate form of verb from the given options to replace the underlined and bracketed word in order to correct the below sentence.

They (sells) their company's products to people.

- Ans
- ☒ 1. are solds
 - ☒ 2. are selling
 - ☒ 3. have sells
 - ☒ 4. solds

Question ID : 630680837814
Option 1 ID : 6306803281968
Option 2 ID : 6306803281969
Option 3 ID : 6306803281970
Option 4 ID : 6306803281967

Q.4 Choose the most appropriate one-word substitution for the below word.

“One who is indifferent to pleasure or pain”

- Ans
1. Defiant

2. Sonnet

3. Cynic

4. Stoic

Question ID : 630680837819

Option 1 ID : 6306803281987

Option 2 ID : 6306803281990

Option 3 ID : 6306803281988

Option 4 ID : 6306803281989

Q.5 Select the correct preposition from the below options to complete the below sentence.

We have decided to hold our next meeting __ my house in Old Town.

- Ans
1. with

2. by

3. at

4. in

Question ID : 630680848910

Option 1 ID : 6306803325179

Option 2 ID : 6306803325181

Option 3 ID : 6306803325180

Option 4 ID : 6306803325178

Q.6 Select the correct preposition from the below options to complete the below sentence.

We have very good news __ him.

- Ans
1. with

2. for

3. to

4. through

Question ID : 630680847706

Option 1 ID : 6306803320394

Option 2 ID : 6306803320397

Option 3 ID : 6306803320396

Option 4 ID : 6306803320395

Q.7 Choose the most appropriate one-word substitution for the below word.

"The one who knows everything"

- Ans ☒ 1. Lexicographer
☒ 2. Omniscient
☒ 3. Biographer
☒ 4. Cartographer

Question ID : 630680837820
 Option 1 ID : 6306803281991
 Option 2 ID : 6306803281994
 Option 3 ID : 6306803281993
 Option 4 ID : 6306803281992

Q.8 Select the most appropriate SYNONYM of the given word below.

Virtual

- Ans ☒ 1. Real
☒ 2. Actual
☒ 3. Seeming
☒ 4. True

Question ID : 630680838019
 Option 1 ID : 6306803282767
 Option 2 ID : 6306803282768
 Option 3 ID : 6306803282770
 Option 4 ID : 6306803282769

Q.9 Choose the most logical order of the sentences from among the four given choices to construct a coherent paragraph.

Mathematics has often been described as the most perfect language of all, and for good reason.

- A) In this sense, mathematics is a beautiful language that can lead us closer to absolute truth than any other means.
 B) While traditional languages have their limitations in communicating complex ideas, mathematical symbols are universally accepted and can compress information in a way that no other language possibly could.
 C) For the most part, people are only exposed to the simpler forms of mathematics, such as arithmetic, algebra, and geometry, which are taught in schools due to their everyday applications.
 D) However, despite its importance, higher mathematics remains a minority language intelligible only to specialists.

- Ans ☒ 1. ADCB
☒ 2. BADC
☒ 3. BCDA
☒ 4. ABCD

Question ID : 630680847780
 Option 1 ID : 6306803320686
 Option 2 ID : 6306803320687
 Option 3 ID : 6306803320689
 Option 4 ID : 6306803320688

Q.10 Select the correct preposition from the below options to complete the below sentence.

There are tall, beautiful coconut trees ____ the river.

- Ans
- ☒ 1. onto
 - ☒ 2. into
 - ☒ 3. along
 - ☒ 4. from

Question ID : 630680837912
Option 1 ID : 6306803282350
Option 2 ID : 6306803282348
Option 3 ID : 6306803282347
Option 4 ID : 6306803282349

Comprehension:

Read the passage given below and answer the questions.

Wolf spiders are among the most important predators in the Alaskan Arctic. According to scientists, Wolf spiders in a warming Arctic are getting bigger, reproducing more and eating different foods including other spiders. A study conducted in Alaska suggests that as female wolf spiders become larger and produce more offsprings, competition among them increases - triggering higher rates of cannibalism and reducing the number of young spiders that survive to adulthood. Animals such as spiders that regulate their body temperature externally are particularly likely to experience changes as a result of warming. In some areas of the Arctic, biologists have found that wolf spiders are bigger following years with longer summers. This suggests that as climate change continues to warm up the Arctic, wolf spider body sizes will generally become larger. Wolf spiders from lower latitudes have previously been shown to cannibalize each other when experimentally exposed to higher densities. Yet the extent to which this behaviour affected natural populations of wolf spiders has not been clear. The results of this study suggest that cannibalism does regulate wolf spider populations in the wild by reducing juvenile survival. However, in the long term, frequent cannibalization may not be advantageous for individuals, or spider populations. But evidence from other studies has shown that wolf spiders that are only fed other wolf spiders don't live as long as those that eat a more varied diet. So even though they reproduce more, bigger spiders may not always lead to more spiders on the landscape. The results from these studies by scientists are a reminder that changes in invertebrate body size driven by climate change could have widespread ecological consequences, including shifts in intraspecific competition, diet and population structure.

SubQuestion No : 11

Q.11 Select the most appropriate meaning of the word given below.
Cannibalism

- Ans
- ☒ 1. Living by eating wholly of vegetables and fruits
 - ☒ 2. Not eating and not supporting the eating of flesh of an animal
 - ☒ 3. The eating of only a specific group of food like dairy products
 - ☒ 4. The eating of the flesh of an animal by another animal of its own kind

Question ID : 630680856301
Option 1 ID : 6306803353872
Option 2 ID : 6306803353870
Option 3 ID : 6306803353873
Option 4 ID : 6306803353871

Comprehension:

Read the passage given below and answer the questions.

Wolf spiders are among the most important predators in the Alaskan Arctic. According to scientists, Wolf spiders in a warming Arctic are getting bigger, reproducing more and eating different foods including other spiders. A study conducted in Alaska suggests that as female wolf spiders become larger and produce more offsprings, competition among them increases - triggering higher rates of cannibalism and reducing the number of young spiders that survive to adulthood. Animals such as spiders that regulate their body temperature externally are particularly likely to experience changes as a result of warming. In some areas of the Arctic, biologists have found that wolf spiders are bigger following years with longer summers. This suggests that as climate change continues to warm up the Arctic, wolf spider body sizes will generally become larger. Wolf spiders from lower latitudes have previously been shown to cannibalize each other when experimentally exposed to higher densities. Yet the extent to which this behaviour affected natural populations of wolf spiders has not been clear. The results of this study suggest that cannibalism does regulate wolf spider populations in the wild by reducing juvenile survival. However, in the long term, frequent cannibalization may not be advantageous for individuals, or spider populations. But evidence from other studies has shown that wolf spiders that are only fed other wolf spiders don't live as long as those that eat a more varied diet. So even though they reproduce more, bigger spiders may not always lead to more spiders on the landscape. The results from these studies by scientists are a reminder that changes in invertebrate body size driven by climate change could have widespread ecological consequences, including shifts in intraspecific competition, diet and population structure.

SubQuestion No : 12

Q.12 Select the most appropriate SYNONYM of the word given below.
Exposed

- Ans
- ☒ 1. Hidden
 - ☒ 2. Closed
 - ☒ 3. Ambiguous
 - ☒ 4. Uncovered

Question ID : 630680856303
Option 1 ID : 6306803353878
Option 2 ID : 6306803353880
Option 3 ID : 6306803353879
Option 4 ID : 6306803353881

Comprehension:

Read the passage given below and answer the questions.

Wolf spiders are among the most important predators in the Alaskan Arctic. According to scientists, Wolf spiders in a warming Arctic are getting bigger, reproducing more and eating different foods including other spiders. A study conducted in Alaska suggests that as female wolf spiders become larger and produce more offsprings, competition among them increases - triggering higher rates of cannibalism and reducing the number of young spiders that survive to adulthood. Animals such as spiders that regulate their body temperature externally are particularly likely to experience changes as a result of warming. In some areas of the Arctic, biologists have found that wolf spiders are bigger following years with longer summers. This suggests that as climate change continues to warm up the Arctic, wolf spider body sizes will generally become larger. Wolf spiders from lower latitudes have previously been shown to cannibalize each other when experimentally exposed to higher densities. Yet the extent to which this behaviour affected natural populations of wolf spiders has not been clear. The results of this study suggest that cannibalism does regulate wolf spider populations in the wild by reducing juvenile survival. However, in the long term, frequent cannibalization may not be advantageous for individuals, or spider populations. But evidence from other studies has shown that wolf spiders that are only fed other wolf spiders don't live as long as those that eat a more varied diet. So even though they reproduce more, bigger spiders may not always lead to more spiders on the landscape. The results from these studies by scientists are a reminder that changes in invertebrate body size driven by climate change could have widespread ecological consequences, including shifts in intraspecific competition, diet and population structure.

SubQuestion No : 13

Q.13 Select the most appropriate ANTONYM of the word given below.
Widespread

- Ans
- ☒ 1. Outspread
 - ☒ 2. Boundless
 - ☒ 3. Limited
 - ☒ 4. Popular

Question ID : 630680856304
Option 1 ID : 6306803353884
Option 2 ID : 6306803353882
Option 3 ID : 6306803353883
Option 4 ID : 6306803353885





Comprehension:

Read the passage given below and answer the questions.

Wolf spiders are among the most important predators in the Alaskan Arctic. According to scientists, Wolf spiders in a warming Arctic are getting bigger, reproducing more and eating different foods including other spiders. A study conducted in Alaska suggests that as female wolf spiders become larger and produce more offsprings, competition among them increases - triggering higher rates of cannibalism and reducing the number of young spiders that survive to adulthood. Animals such as spiders that regulate their body temperature externally are particularly likely to experience changes as a result of warming. In some areas of the Arctic, biologists have found that wolf spiders are bigger following years with longer summers. This suggests that as climate change continues to warm up the Arctic, wolf spider body sizes will generally become larger. Wolf spiders from lower latitudes have previously been shown to cannibalize each other when experimentally exposed to higher densities. Yet the extent to which this behaviour affected natural populations of wolf spiders has not been clear. The results of this study suggest that cannibalism does regulate wolf spider populations in the wild by reducing juvenile survival. However, in the long term, frequent cannibalization may not be advantageous for individuals, or spider populations. But evidence from other studies has shown that wolf spiders that are only fed other wolf spiders don't live as long as those that eat a more varied diet. So even though they reproduce more, bigger spiders may not always lead to more spiders on the landscape. The results from these studies by scientists are a reminder that changes in invertebrate body size driven by climate change could have widespread ecological consequences, including shifts in intraspecific competition, diet and population structure.

SubQuestion No : 14

Q.14 Identify the most suitable title for the passage.

- Ans  1. Increasing cannibalism in Wolf spiders
-  2. Wolf Spider and their new diet
-  3. Ecological changes around the world
-  4. Wolf spiders and their increasing population

Question ID : 630680856300
Option 1 ID : 6306803353866
Option 2 ID : 6306803353869
Option 3 ID : 6306803353868
Option 4 ID : 6306803353867

Comprehension:

Read the passage given below and answer the questions.

Wolf spiders are among the most important predators in the Alaskan Arctic. According to scientists, Wolf spiders in a warming Arctic are getting bigger, reproducing more and eating different foods including other spiders. A study conducted in Alaska suggests that as female wolf spiders become larger and produce more offsprings, competition among them increases - triggering higher rates of cannibalism and reducing the number of young spiders that survive to adulthood. Animals such as spiders that regulate their body temperature externally are particularly likely to experience changes as a result of warming. In some areas of the Arctic, biologists have found that wolf spiders are bigger following years with longer summers. This suggests that as climate change continues to warm up the Arctic, wolf spider body sizes will generally become larger. Wolf spiders from lower latitudes have previously been shown to cannibalize each other when experimentally exposed to higher densities. Yet the extent to which this behaviour affected natural populations of wolf spiders has not been clear. The results of this study suggest that cannibalism does regulate wolf spider populations in the wild by reducing juvenile survival. However, in the long term, frequent cannibalization may not be advantageous for individuals, or spider populations. But evidence from other studies has shown that wolf spiders that are only fed other wolf spiders don't live as long as those that eat a more varied diet. So even though they reproduce more, bigger spiders may not always lead to more spiders on the landscape. The results from these studies by scientists are a reminder that changes in invertebrate body size driven by climate change could have widespread ecological consequences, including shifts in intraspecific competition, diet and population structure.

SubQuestion No : 15

Q.15 Select the most appropriate SYNONYM of the word given below.
Triggering

- Ans
- ☒ 1. Ending
 - ☒ 2. Destroying
 - ☒ 3. Stopping
 - ☒ 4. Starting

Question ID : 630680856302
Option 1 ID : 6306803353875
Option 2 ID : 6306803353874
Option 3 ID : 6306803353877
Option 4 ID : 6306803353876

Comprehension:

Read the passage given below and answer the questions.

Reading is a very good habit that one needs to develop in life. Good books can inform you, enlighten you and lead you in the right direction. There is no better companion than a good book. Reading is important because it is good for your overall well-being. Once you start reading, you experience a whole new world. When you start loving the habit of reading you eventually get addicted to it. Reading develops language skills and vocabulary. Reading books is also a way to relax and reduce stress. It is important to read a good book at least for a few minutes each day to stretch the brain muscles for healthy functioning. Books enable you to have a glimpse into cultures, traditions, arts, history, geography, health, psychology and several other subjects and aspects of life. Journeys for long hours or a long vacation from work can be pretty boring in spite of all the social sites. Books come in handy and release you from boredom. You get an amazing amount of knowledge and information from books. Reading takes you to the world of imagination and enhances your creativity. Reading helps you explore life from different perspectives. While you read books you are building new and creative thoughts, images, and opinions in your mind. It makes you think creatively, fantasize, and use your imagination. The habit of reading is one of the best qualities that a person can possess. Books are known to be your best friend for a reason. So, it is very important to develop good reading habit. We must all read on a daily basis for at least 30 minutes to enjoy the sweet fruits of reading. It is a great pleasure to sit in a quiet place and enjoy reading. Reading a good book is the most enjoyable experience one can have.

SubQuestion No : 16

Q.16 Identify the most suitable title for the passage.

- Ans
- ☒ 1. Reading: A good habit
 - ☐ 2. Knowledge vs Reading
 - ☐ 3. Book Reading: A waste of time
 - ☐ 4. Reading vs enjoying life

Question ID : 630680856318
Option 1 ID : 6306803353926
Option 2 ID : 6306803353927
Option 3 ID : 6306803353929
Option 4 ID : 6306803353928

Comprehension:

Read the passage given below and answer the questions.

Reading is a very good habit that one needs to develop in life. Good books can inform you, enlighten you and lead you in the right direction. There is no better companion than a good book. Reading is important because it is good for your overall well-being. Once you start reading, you experience a whole new world. When you start loving the habit of reading you eventually get addicted to it. Reading develops language skills and vocabulary. Reading books is also a way to relax and reduce stress. It is important to read a good book at least for a few minutes each day to stretch the brain muscles for healthy functioning. Books enable you to have a glimpse into cultures, traditions, arts, history, geography, health, psychology and several other subjects and aspects of life. Journeys for long hours or a long vacation from work can be pretty boring in spite of all the social sites. Books come in handy and release you from boredom. You get an amazing amount of knowledge and information from books. Reading takes you to the world of imagination and enhances your creativity. Reading helps you explore life from different perspectives. While you read books you are building new and creative thoughts, images, and opinions in your mind. It makes you think creatively, fantasize, and use your imagination. The habit of reading is one of the best qualities that a person can possess. Books are known to be your best friend for a reason. So, it is very important to develop good reading habit. We must all read on a daily basis for at least 30 minutes to enjoy the sweet fruits of reading. It is a great pleasure to sit in a quiet place and enjoy reading. Reading a good book is the most enjoyable experience one can have.

SubQuestion No : 17

Q.17 Select the most appropriate meaning of the word given below.
Addicted

- Ans ☒ 1. unable to stop doing something as a habit
- ☐ 2. something necessary for our existence
- ☐ 3. to make someone angry or annoyed
- ☐ 4. an unforeseen occurrence

Question ID : 630680856319
Option 1 ID : 6306803353931
Option 2 ID : 6306803353933
Option 3 ID : 6306803353930
Option 4 ID : 6306803353932

Comprehension:

Read the passage given below and answer the questions.

Reading is a very good habit that one needs to develop in life. Good books can inform you, enlighten you and lead you in the right direction. There is no better companion than a good book. Reading is important because it is good for your overall well-being. Once you start reading, you experience a whole new world. When you start loving the habit of reading you eventually get addicted to it. Reading develops language skills and vocabulary. Reading books is also a way to relax and reduce stress. It is important to read a good book at least for a few minutes each day to stretch the brain muscles for healthy functioning. Books enable you to have a glimpse into cultures, traditions, arts, history, geography, health, psychology and several other subjects and aspects of life. Journeys for long hours or a long vacation from work can be pretty boring in spite of all the social sites. Books come in handy and release you from boredom. You get an amazing amount of knowledge and information from books. Reading takes you to the world of imagination and enhances your creativity. Reading helps you explore life from different perspectives. While you read books you are building new and creative thoughts, images, and opinions in your mind. It makes you think creatively, fantasize, and use your imagination. The habit of reading is one of the best qualities that a person can possess. Books are known to be your best friend for a reason. So, it is very important to develop good reading habit. We must all read on a daily basis for at least 30 minutes to enjoy the sweet fruits of reading. It is a great pleasure to sit in a quiet place and enjoy reading. Reading a good book is the most enjoyable experience one can have.

SubQuestion No : 18

Q.18 Select the most appropriate SYNONYM of the word given below.
Eventually

- Ans
- ☒ 1. Never
 - ☒ 2. Habitually
 - ☒ 3. Sometimes
 - ☒ 4. Ultimately

Question ID : 630680856321
Option 1 ID : 6306803353938
Option 2 ID : 6306803353940
Option 3 ID : 6306803353939
Option 4 ID : 6306803353941

Comprehension:

Read the passage given below and answer the questions.

Reading is a very good habit that one needs to develop in life. Good books can inform you, enlighten you and lead you in the right direction. There is no better companion than a good book. Reading is important because it is good for your overall well-being. Once you start reading, you experience a whole new world. When you start loving the habit of reading you eventually get addicted to it. Reading develops language skills and vocabulary. Reading books is also a way to relax and reduce stress. It is important to read a good book at least for a few minutes each day to stretch the brain muscles for healthy functioning. Books enable you to have a glimpse into cultures, traditions, arts, history, geography, health, psychology and several other subjects and aspects of life. Journeys for long hours or a long vacation from work can be pretty boring in spite of all the social sites. Books come in handy and release you from boredom. You get an amazing amount of knowledge and information from books. Reading takes you to the world of imagination and enhances your creativity. Reading helps you explore life from different perspectives. While you read books you are building new and creative thoughts, images, and opinions in your mind. It makes you think creatively, fantasize, and use your imagination. The habit of reading is one of the best qualities that a person can possess. Books are known to be your best friend for a reason. So, it is very important to develop good reading habit. We must all read on a daily basis for at least 30 minutes to enjoy the sweet fruits of reading. It is a great pleasure to sit in a quiet place and enjoy reading. Reading a good book is the most enjoyable experience one can have.

SubQuestion No : 19

Q.19 Select the most appropriate SYNONYM of the word given below.

Companion

- Ans
- ☒ 1. Rival
 - ☒ 2. friend
 - ☒ 3. Foe
 - ☒ 4. enemy

Question ID : 630680856320
Option 1 ID : 6306803353935
Option 2 ID : 6306803353936
Option 3 ID : 6306803353934
Option 4 ID : 6306803353937

Comprehension:

Read the passage given below and answer the questions.

Reading is a very good habit that one needs to develop in life. Good books can inform you, enlighten you and lead you in the right direction. There is no better companion than a good book. Reading is important because it is good for your overall well-being. Once you start reading, you experience a whole new world. When you start loving the habit of reading you eventually get addicted to it. Reading develops language skills and vocabulary. Reading books is also a way to relax and reduce stress. It is important to read a good book at least for a few minutes each day to stretch the brain muscles for healthy functioning. Books enable you to have a glimpse into cultures, traditions, arts, history, geography, health, psychology and several other subjects and aspects of life. Journeys for long hours or a long vacation from work can be pretty boring in spite of all the social sites. Books come in handy and release you from boredom. You get an amazing amount of knowledge and information from books. Reading takes you to the world of imagination and enhances your creativity. Reading helps you explore life from different perspectives. While you read books you are building new and creative thoughts, images, and opinions in your mind. It makes you think creatively, fantasize, and use your imagination. The habit of reading is one of the best qualities that a person can possess. Books are known to be your best friend for a reason. So, it is very important to develop good reading habit. We must all read on a daily basis for at least 30 minutes to enjoy the sweet fruits of reading. It is a great pleasure to sit in a quiet place and enjoy reading. Reading a good book is the most enjoyable experience one can have.

SubQuestion No : 20

Q.20 Select the most appropriate ANTONYM of the word given below.
Pleasure

- Ans
- ☒ 1. Enjoyment
 - ☒ 2. Gratification
 - ☒ 3. Discontent
 - ☒ 4. Amusement

Question ID : 630680856322
Option 1 ID : 6306803353945
Option 2 ID : 6306803353942
Option 3 ID : 6306803353943
Option 4 ID : 6306803353944

Section : Test of Hindi Language and Comprehension 1

Q.1 "मेरा जी घबराता है।" वाक्य में कौन-सी क्रिया है ?

- Ans
- ☒ 1. सकर्मक
 - ☒ 2. अकर्मक
 - ☒ 3. संयुक्त
 - ☒ 4. प्रेरणार्थक

Question ID : 630680855135
Option 1 ID : 6306803349259
Option 2 ID : 6306803349258
Option 3 ID : 6306803349261
Option 4 ID : 6306803349260

Q.2 मेरे घर का _____ उसे मालूम है।

इस वाक्य में रिक्त स्थान की पूर्ति शुद्ध शब्द द्वारा कीजिये

- Ans
- ☒ 1. ठिकना
 - ☒ 2. ठिकाण
 - ☒ 3. ठिकान
 - ☒ 4. ठिकाना

Question ID : 630680854288
Option 1 ID : 6306803345915
Option 2 ID : 6306803345917
Option 3 ID : 6306803345916
Option 4 ID : 6306803345914

Q.3 निम्नलिखित शब्दों में से अशुद्ध शब्द का चयन करें।

- Ans
- ☒ 1. गूँगा
 - ☒ 2. सूँड
 - ☒ 3. मुँह
 - ☒ 4. इस्कूल

Question ID : 630680855447
Option 1 ID : 6306803350508
Option 2 ID : 6306803350506
Option 3 ID : 6306803350509
Option 4 ID : 6306803350507

Q.4 “ फगुनिया के लिए तो काला अक्षर भैंस बराबर है।”

दिए गए वाक्य में रेखांकित लोकोक्ति का उचित अर्थ बताइये।

- Ans
- ☒ 1. बहुत ही बेकार लेखनी
 - ☒ 2. अक्षर ज्ञान से बिल्कुल शून्य
 - ☒ 3. काला अक्षर पढ़ने में कठिनाई
 - ☒ 4. अल्पज्ञानी

Question ID : 630680855443
Option 1 ID : 6306803350491
Option 2 ID : 6306803350490
Option 3 ID : 6306803350492
Option 4 ID : 6306803350493

Q.5 रूप की दृष्टि से क्रिया-विशेषण के कितने भेद हैं?

- Ans
- ☒ 1. चार
 - ☒ 2. दो
 - ☒ 3. पांच
 - ☒ 4. तीन

Question ID : 630680855136
Option 1 ID : 6306803349264
Option 2 ID : 6306803349262
Option 3 ID : 6306803349263
Option 4 ID : 6306803349265

Q.6 "जो बहुत जानता है।"

वाक्यांश के लिए उपयुक्त शब्द निम्नलिखित में से कौन सा है?

- Ans ☒ 1. बहुज्ञ
☒ 2. अल्पज्ञ
☒ 3. कृतज्ञ
☒ 4. तेजस्वी

Question ID : 630680855433
 Option 1 ID : 6306803350453
 Option 2 ID : 6306803350452
 Option 3 ID : 6306803350450
 Option 4 ID : 6306803350451

Q.7 "मेरा घर में शादी होनेवाला है।"

इस वाक्य में अशुद्धि पहचान कर शुद्ध वाक्य विकल्पों में से चुनें।

- Ans ☒ 1. मेरा घर शादी होनेवाली है।
☒ 2. मेरे घर शादी होनेवाली है।
☒ 3. मेरे घर शादी होनेवाला है।
☒ 4. मेरा घर शादी होनेवाला है।

Question ID : 630680855773
 Option 1 ID : 6306803351795
 Option 2 ID : 6306803351797
 Option 3 ID : 6306803351796
 Option 4 ID : 6306803351794

Q.8 "गुरु गुड़ चेला चीनी"

लोकोक्ति का निम्नलिखित विकल्पों में से कौन सा उचित अर्थ है?

- Ans ☒ 1. गुरु की भाषा में मिठास होना
☒ 2. गुरु से तेज शिष्य
☒ 3. गुरु से शिष्य का कम ज्ञान
☒ 4. गुरु और शिष्य का स्नेह संबंध

Question ID : 630680855445
 Option 1 ID : 6306803350498
 Option 2 ID : 6306803350499
 Option 3 ID : 6306803350500
 Option 4 ID : 6306803350501

Q.9 "शिष्य ने अपने गुरु के लिए सब कुछ किया।"

दिये गए वाक्य के रेखांकित भाग में किस कारक का उपयोग हुआ है?

- Ans
- ☒ 1. करण
 - ☒ 2. कर्म
 - ☒ 3. कर्ता
 - ☒ 4. संप्रदान

Question ID : 630680855760
Option 1 ID : 6306803351745
Option 2 ID : 6306803351743
Option 3 ID : 6306803351744
Option 4 ID : 6306803351742

Q.10 'ऊँट किस करवट बैठता है' लोकोक्ति का उचित अर्थ बताइये।

- Ans
- ☒ 1. व्यापार के लाभ में हानि
 - ☒ 2. परिणाम की अनिश्चितता होना
 - ☒ 3. अपनी चीज अपने काम आयी
 - ☒ 4. काम करने पर उतारू होना

Question ID : 630680855142
Option 1 ID : 6306803349287
Option 2 ID : 6306803349286
Option 3 ID : 6306803349289
Option 4 ID : 6306803349288

Q.11 "रहीम की कोठरी बहुत बड़ी है।"

दिये गए वाक्य में किस कारक का उपयोग हुआ है?

- Ans
- ☒ 1. संप्रदान
 - ☒ 2. अधिकरण
 - ☒ 3. सम्बोधन
 - ☒ 4. संबंध

Question ID : 630680855434
Option 1 ID : 6306803350454
Option 2 ID : 6306803350456
Option 3 ID : 6306803350457
Option 4 ID : 6306803350455

Q.12 'हथियार डाल देना' मुहावरे का उचित अर्थ बताइये।

- Ans
- ☒ 1. जान-बूझकर हानिकारक कार्य करना
 - ☒ 2. बढ़ावा देना
 - ☒ 3. मेहनत करना
 - ☒ 4. हार मान लेना

Question ID : 630680855140
Option 1 ID : 6306803349279
Option 2 ID : 6306803349281
Option 3 ID : 6306803349278
Option 4 ID : 6306803349280

Q.13 "जिसके दो पैर हैं।"

वाक्यांश के लिए उपयुक्त शब्द निम्नलिखित में से कौन सा है?

- Ans
- ☒ 1. चतुर्भुज
 - ☒ 2. दशानन
 - ☒ 3. निर्दय
 - ☒ 4. द्विपद

Question ID : 630680855432
Option 1 ID : 6306803350449
Option 2 ID : 6306803350448
Option 3 ID : 6306803350446
Option 4 ID : 6306803350447

Q.14 निम्नलिखित में से "कान देना" मुहावरे का सही अर्थ निम्नलिखित विकल्पों में से कौन सा है?

- Ans
- ☒ 1. चुँगली करना
 - ☒ 2. डींग हाँकना
 - ☒ 3. ध्यान देना
 - ☒ 4. डरना

Question ID : 630680855441
Option 1 ID : 6306803350483
Option 2 ID : 6306803350485
Option 3 ID : 6306803350482
Option 4 ID : 6306803350484

Q.15 "जिसके समान दूसरा न हो"

वाक्यांश के लिए उपयुक्त शब्द निम्नलिखित में से कौन-सा है?

- Ans
- ☒ 1. द्विज
 - ☒ 2. अद्वितीय
 - ☒ 3. महान
 - ☒ 4. अलौकिक

Question ID : 630680855757
Option 1 ID : 6306803351730
Option 2 ID : 6306803351731
Option 3 ID : 6306803351733
Option 4 ID : 6306803351732

Q.16 जिस सर्वनाम का प्रयोग विशेषण की तरह होता है उसे क्या कहते हैं?

- Ans
- ☒ 1. गुणवाचक विशेषण
 - ☒ 2. परिमाणवाचक विशेषण
 - ☒ 3. सार्वनामिक विशेषण
 - ☒ 4. संबंधवाचक विशेषण

Question ID : 630680855137
Option 1 ID : 6306803349266
Option 2 ID : 6306803349268
Option 3 ID : 6306803349267
Option 4 ID : 6306803349269

Q.17 गाय का गरम दूध _____ होता है।

इस वाक्य में रिक्त स्थान की पूर्ति शुद्ध शब्द द्वारा कीजिये

Ans ☒ 1. गुणकारी

☒ 2. गुनकारी

☒ 3. गूनकारी

☒ 4. गूणकारी

Question ID : 630680855147

Option 1 ID : 6306803349306

Option 2 ID : 6306803349307

Option 3 ID : 6306803349308

Option 4 ID : 6306803349309

Q.18 "आँखों में खून उतरना" मुहावरे का उचित अर्थ बतायें।

Ans ☒ 1. हार मान लेना

☒ 2. अत्यंत क्रोध में आँख लाल करना

☒ 3. आँख नम कर लेना

☒ 4. कड़वे वचन सुनाना

Question ID : 630680854282

Option 1 ID : 6306803345892

Option 2 ID : 6306803345891

Option 3 ID : 6306803345893

Option 4 ID : 6306803345890

Q.19 नीचे दिये गए गद्यांश में उचित शब्दों/शब्द के साथ रिक्त स्थान(गद्यांश में दिये गए "ङ" के स्थान पर) की पूर्ति करें।

समाचारपत्रों के प्रभावशाली होने के कारण इनके संपादकों का _____(क)_____ भी काफी बढ़ गया है। संपादकों को समाज और देश के हित का विचार करते हुए बहुत ही निर्भरता एवं समझदारी से _____(ख)_____ को चलाना होता है। समाचार पत्रों से सिर्फ हमारा मनोरंजन ही नहीं होता, बल्कि हमारा _____(ग)_____ भी बढ़ाता है। दैनिक समाचारपत्रों की _____(घ)_____ कम होनी चाहिए ताकि ज्यादा से ज्यादा लोग इसे पढ़ सकें तथा इससे लाभ उठा सकें। किसी भी स्वस्थ एवं विकसित लोकतंत्र में समाचारपत्रों का _____(ङ)_____ बढ़ा ही उज्ज्वल तथा सुखद है।

Ans ☒ 1. विकास

☒ 2. भविष्य

☒ 3. चयन

☒ 4. विचार

Question ID : 630680840557

Option 1 ID : 6306803292901

Option 2 ID : 6306803292903

Option 3 ID : 6306803292902

Option 4 ID : 6306803292904

Q.20 'अन्धा बनना' मुहावरे का उचित अर्थ बतायें।

- Ans
- ☒ 1. खा-पीकर लाल होना।
 - ☒ 2. जान-बूझकर किसी बात पर ध्यान न देना।
 - ☒ 3. फरार होना।
 - ☒ 4. बिना सोचे कुछ भी बोलना।

Question ID : 630680849945
Option 1 ID : 6306803329012
Option 2 ID : 6306803329009
Option 3 ID : 6306803329010
Option 4 ID : 6306803329011

Section : Test of Hindi Language and Comprehension 2

Q.1 निम्नलिखित में से कौन सा शब्द 'अम्बर' का अनेकार्थक शब्द नहीं है ?

- Ans
- ☒ 1. शिखर
 - ☒ 2. परख
 - ☒ 3. सीसा
 - ☒ 4. वस्त्र

Question ID : 630680855152
Option 1 ID : 6306803349328
Option 2 ID : 6306803349327
Option 3 ID : 6306803349329
Option 4 ID : 6306803349326

Q.2 'कक्ष' का अनेकार्थक शब्द समूह क्या होगा?

- Ans
- ☒ 1. जगह, चंपा, बगल
 - ☒ 2. पलाश, फाटक, जवाब
 - ☒ 3. कमरा, बगल, जंगल
 - ☒ 4. जंगल, घना, आवरण

Question ID : 630680855151
Option 1 ID : 6306803349322
Option 2 ID : 6306803349323
Option 3 ID : 6306803349324
Option 4 ID : 6306803349325

Q.3 "रमेश ने परीक्षा में आशा से अधिक परिणाम प्राप्त किया है।"

निम्नलिखित विकल्पों में से रेखांकित शब्द समूहों का अर्थ बताने वाले शब्द को चुने।

- Ans
- ☒ 1. अलौकिक
 - ☒ 2. सुलभ
 - ☒ 3. आशातीत
 - ☒ 4. प्रियदर्शी

Question ID : 630680855452
Option 1 ID : 6306803350529
Option 2 ID : 6306803350527
Option 3 ID : 6306803350528
Option 4 ID : 6306803350526

Q.4 निम्नलिखित शब्दों में से कौन-सा शब्द "नवीन" शब्द का विपरीतार्थक शब्द है?

- Ans
- ☒ 1. भविष्य
 - ☒ 2. नया
 - ☒ 3. प्राचीन
 - ☒ 4. नीति

Question ID : 630680855783
Option 1 ID : 6306803351837
Option 2 ID : 6306803351834
Option 3 ID : 6306803351836
Option 4 ID : 6306803351835

Q.5 निम्नलिखित वाक्यों में शुद्ध वाक्य को चुनें

- Ans
- ☒ 1. घड़े में ठसाठस पानी भरा है।
 - ☒ 2. यह पौधा कहाँ जनमता है।
 - ☒ 3. मुझे फेल होने की आशंका है।
 - ☒ 4. इस समय उसकी अवस्था क्या है।

Question ID : 630680855127
Option 1 ID : 6306803349226
Option 2 ID : 6306803349229
Option 3 ID : 6306803349227
Option 4 ID : 6306803349228

Q.6 'चोर' का पर्यायावाची शब्द चुनें ?

- Ans
- ☒ 1. खनक
 - ☒ 2. चलन
 - ☒ 3. नागर
 - ☒ 4. हाजत

Question ID : 630680855156
Option 1 ID : 6306803349344
Option 2 ID : 6306803349342
Option 3 ID : 6306803349343
Option 4 ID : 6306803349345

Q.7 दिये गए वाक्य का क्रम सही नहीं है | उनके सही क्रम के चार विकल्प दिए गए हैं | उनमें से सही विकल्प का चयन करें।

- 1) नीचे रख देते
- 2) जब वह हमारी ओर देखते,
- 3) तब हम कुछ लजाकर और
- 4) मुस्कुराकर आईना

Ans ☒ 1. 1, 4, 2, 3
☒ 2. 4, 1, 2, 3
☒ 3. 4, 1, 3, 2
☒ 4. 2, 3, 4, 1

Question ID : 630680855427
Option 1 ID : 6306803350428
Option 2 ID : 6306803350427
Option 3 ID : 6306803350429
Option 4 ID : 6306803350426

Q.8 निम्नलिखित में से किस शब्द का पर्यायवाची शब्द "कृशानु" है?

Ans ☒ 1. इन्द्र
☒ 2. कमल
☒ 3. आग
☒ 4. इच्छा

Question ID : 630680855779
Option 1 ID : 6306803351821
Option 2 ID : 6306803351820
Option 3 ID : 6306803351818
Option 4 ID : 6306803351819

Q.9 हिन्दी में संस्कृत के मूल शब्दों को क्या कहा जाता है?

Ans ☒ 1. देशज
☒ 2. तद्भव
☒ 3. विदेशज
☒ 4. तत्सम

Question ID : 630680855449
Option 1 ID : 6306803350516
Option 2 ID : 6306803350515
Option 3 ID : 6306803350517
Option 4 ID : 6306803350514

Q.10 जिनकी व्युत्पत्ति का पता नहीं चलता उसे क्या कहते हैं?

- Ans ☒ 1. विदेशज
☒ 2. देशज
☒ 3. तद्भव
☒ 4. तत्सम

Question ID : 630680855149
Option 1 ID : 6306803349315
Option 2 ID : 6306803349317
Option 3 ID : 6306803349316
Option 4 ID : 6306803349314

Comprehension:

नीचे दिए गए गद्यांश को ध्यानपूर्वक पढ़ें और बिना किसी सामान्य ज्ञान एवं साहित्य के तथ्यों की परवाह किए, केवल नीचे दिए गए गद्यांश के आधार पर ही प्रश्न के लिए सही उत्तर का चयन करें।

“जानवरों में गधा सबसे ज़्यादा बुद्धिहीन समझा जाता है। हम जब किसी आदमी को परले दरजे का बेवकूफ़ कहना चाहते हैं, तो उसे गधा कहते हैं। गधा सचमुच बेवकूफ़ है, या उसके सीधेपन, उसकी निरापद सहिष्णुता ने उसे यह पदवी दे दी है, इसका निश्चय नहीं किया जा सकता। गायें सींग मारती हैं, ब्याई हुई गाय तो अनायास ही सिंहनी का रूप धारण कर लेती है। कुत्ता भी बहुत वफ़ादार जानवर है, लेकिन कभी-कभी उसे भी क्रोध आ ही जाता है: किंतु गधे को कभी क्रोध करते नहीं सुना, न देखा। जितना चाहो कुत्ते को मारो, चाहे जैसी खराब, सड़ी हुई घास सामने डाल दो, उसके चेहरे पर कभी असंतोष की छाया भी न दिखाई देगी। वैशाख में चाहे एकाध कुलेल कर लेता हो: पर हमने तो उसे कभी खुश होते नहीं देखा। उसके चेहरे पर एक विषाद स्थायी रूप से छाया रहता है। सुख-दुख, हानि-लाभ, किसी भी दशा में उसे बदलते नहीं देखा। शांत लोगों के जितने भी गुण हैं वे सभी उसमें पराकाष्ठा को पहुँच गए हैं: पर आदमी उसे बेवकूफ़ कहता है। सद्गुणों का इतना अनादर कहीं नहीं देखा। कदाचित सीधापन संसार के लिए उपयुक्त नहीं है।”

SubQuestion No : 11

Q.11 किस जानवर को कभी क्रोध करते नहीं सुना गया है?

- Ans ☒ 1. गधा
☒ 2. बैल
☒ 3. कुत्ता
☒ 4. गाय

Question ID : 630680846638
Option 1 ID : 6306803316305
Option 2 ID : 6306803316304
Option 3 ID : 6306803316307
Option 4 ID : 6306803316306

Comprehension:

नीचे दिए गए गद्यांश को ध्यानपूर्वक पढ़ें और बिना किसी सामान्य ज्ञान एवं साहित्य के तथ्यों की परवाह किए, केवल नीचे दिए गए गद्यांश के आधार पर ही प्रश्न के लिए सही उत्तर का चयन करें।

“जानवरों में गधा सबसे ज़्यादा बुद्धिहीन समझा जाता है। हम जब किसी आदमी को परले दरजे का बेवकूफ़ कहना चाहते हैं, तो उसे गधा कहते हैं। गधा सचमुच बेवकूफ़ है, या उसके सीधेपन, उसकी निरापद सहिष्णुता ने उसे यह पदवी दे दी है, इसका निश्चय नहीं किया जा सकता। गायें सींग मारती हैं, ब्याई हुई गाय तो अनायास ही सिंहनी का रूप धारण कर लेती है। कुत्ता भी बहुत वफ़ादार जानवर है, लेकिन कभी-कभी उसे भी क्रोध आ ही जाता है: किंतु गधे को कभी क्रोध करते नहीं सुना, न देखा। जितना चाहो कुत्ते को मारो, चाहे जैसी खराब, सड़ी हुई घास सामने डाल दो, उसके चेहरे पर कभी असंतोष की छाया भी न दिखाई देगी। वैशाख में चाहे एकाध कुलेल कर लेता हो: पर हमने तो उसे कभी खुश होते नहीं देखा। उसके चेहरे पर एक विषाद स्थायी रूप से छाया रहता है। सुख-दुख, हानि-लाभ, किसी भी दशा में उसे बदलते नहीं देखा। शांत लोगों के जितने भी गुण हैं वे सभी उसमें पराकाष्ठा को पहुँच गए हैं: पर आदमी उसे बेवकूफ़ कहता है। सद्गुणों का इतना अनादर कहीं नहीं देखा। कदाचित सीधापन संसार के लिए उपयुक्त नहीं है।”

SubQuestion No : 12

Q.12 गधे में किनके सभी गुण पराकाष्ठा को पहुँच गए हैं?

- Ans ☒ 1. शांत लोगों के
☒ 2. गरीबों के
☒ 3. क्रोधियों के
☒ 4. लोभियों के

Question ID : 630680846640
Option 1 ID : 6306803316314
Option 2 ID : 6306803316315
Option 3 ID : 6306803316312
Option 4 ID : 6306803316313

Comprehension:

नीचे दिए गए गद्यांश को ध्यानपूर्वक पढ़ें और बिना किसी सामान्य ज्ञान एवं साहित्य के तथ्यों की परवाह किए, केवल नीचे दिए गए गद्यांश के आधार पर ही प्रश्न के लिए सही उत्तर का चयन करें।

“जानवरों में गधा सबसे ज़्यादा बुद्धिहीन समझा जाता है। हम जब किसी आदमी को परले दरजे का बेवकूफ़ कहना चाहते हैं, तो उसे गधा कहते हैं। गधा सचमुच बेवकूफ़ है, या उसके सीधेपन, उसकी निरापद सहिष्णुता ने उसे यह पदवी दे दी है, इसका निश्चय नहीं किया जा सकता। गायें सींग मारती हैं, ब्याई हुई गाय तो अनायास ही सिंहनी का रूप धारण कर लेती है। कुत्ता भी बहुत वफ़ादार जानवर है, लेकिन कभी-कभी उसे भी क्रोध आ ही जाता है: किंतु गधे को कभी क्रोध करते नहीं सुना, न देखा। जितना चाहो कुत्ते को मारो, चाहे जैसी खराब, सड़ी हुई घास सामने डाल दो, उसके चेहरे पर कभी असंतोष की छाया भी न दिखाई देगी। वैशाख में चाहे एकाध कुलेल कर लेता हो: पर हमने तो उसे कभी खुश होते नहीं देखा। उसके चेहरे पर एक विषाद स्थायी रूप से छाया रहता है। सुख-दुख, हानि-लाभ, किसी भी दशा में उसे बदलते नहीं देखा। शांत लोगों के जितने भी गुण हैं वे सभी उसमें पराकाष्ठा को पहुँच गए हैं: पर आदमी उसे बेवकूफ़ कहता है। सद्गुणों का इतना अनादर कहीं नहीं देखा। कदाचित सीधापन संसार के लिए उपयुक्त नहीं है।”

SubQuestion No : 13

Q.13 “विषाद” शब्द का सही अर्थ निम्नलिखित में से क्या है?

- Ans ☒ 1. खुशनुमा
☒ 2. जहरीला
☒ 3. क्रोध
☒ 4. दुख

Question ID : 630680846642
Option 1 ID : 6306803316321
Option 2 ID : 6306803316320
Option 3 ID : 6306803316322
Option 4 ID : 6306803316323

Comprehension:

नीचे दिए गए गद्यांश को ध्यानपूर्वक पढ़ें और बिना किसी सामान्य ज्ञान एवं साहित्य के तथ्यों की परवाह किए, केवल नीचे दिए गए गद्यांश के आधार पर ही प्रश्न के लिए सही उत्तर का चयन करें।

“जानवरों में गधा सबसे ज़्यादा बुद्धिहीन समझा जाता है। हम जब किसी आदमी को परले दरजे का बेवकूफ़ कहना चाहते हैं, तो उसे गधा कहते हैं। गधा सचमुच बेवकूफ़ है, या उसके सीधेपन, उसकी निरापद सहिष्णुता ने उसे यह पदवी दे दी है, इसका निश्चय नहीं किया जा सकता। गायें सींग मारती हैं, ब्याई हुई गाय तो अनायास ही सिंहनी का रूप धारण कर लेती है। कुत्ता भी बहुत वफ़ादार जानवर है, लेकिन कभी-कभी उसे भी क्रोध आ ही जाता है: किंतु गधे को कभी क्रोध करते नहीं सुना, न देखा। जितना चाहो कुत्ते को मारो, चाहे जैसी खराब, सड़ी हुई घास सामने डाल दो, उसके चेहरे पर कभी असंतोष की छाया भी न दिखाई देगी। वैशाख में चाहे एकाध कुलेल कर लेता हो: पर हमने तो उसे कभी खुश होते नहीं देखा। उसके चेहरे पर एक विषाद स्थायी रूप से छाया रहता है। सुख-दुख, हानि-लाभ, किसी भी दशा में उसे बदलते नहीं देखा। शांत लोगों के जितने भी गुण हैं वे सभी उसमें पराकाष्ठा को पहुँच गए हैं: पर आदमी उसे बेवकूफ़ कहता है। सद्गुणों का इतना अनादर कहीं नहीं देखा। कदाचित सीधापन संसार के लिए उपयुक्त नहीं है।”

SubQuestion No : 14

Q.14 गधे की प्रकृति वास्तव में किस प्रकार की होती है?

- Ans
- ☒ 1. चतुर की
 - ☒ 2. ज्ञानी की
 - ☒ 3. सीधेपन की
 - ☒ 4. क्रोधी की

Question ID : 630680846641
Option 1 ID : 6306803316319
Option 2 ID : 6306803316317
Option 3 ID : 6306803316318
Option 4 ID : 6306803316316

Comprehension:

नीचे दिए गए गद्यांश को ध्यानपूर्वक पढ़ें और बिना किसी सामान्य ज्ञान एवं साहित्य के तथ्यों की परवाह किए, केवल नीचे दिए गए गद्यांश के आधार पर ही प्रश्न के लिए सही उत्तर का चयन करें।

“जानवरों में गधा सबसे ज़्यादा बुद्धिहीन समझा जाता है। हम जब किसी आदमी को परले दरजे का बेवकूफ़ कहना चाहते हैं, तो उसे गधा कहते हैं। गधा सचमुच बेवकूफ़ है, या उसके सीधेपन, उसकी निरापद सहिष्णुता ने उसे यह पदवी दे दी है, इसका निश्चय नहीं किया जा सकता। गायें सींग मारती हैं, ब्याई हुई गाय तो अनायास ही सिंहनी का रूप धारण कर लेती है। कुत्ता भी बहुत वफ़ादार जानवर है, लेकिन कभी-कभी उसे भी क्रोध आ ही जाता है: किंतु गधे को कभी क्रोध करते नहीं सुना, न देखा। जितना चाहो कुत्ते को मारो, चाहे जैसी खराब, सड़ी हुई घास सामने डाल दो, उसके चेहरे पर कभी असंतोष की छाया भी न दिखाई देगी। वैशाख में चाहे एकाध कुलेल कर लेता हो: पर हमने तो उसे कभी खुश होते नहीं देखा। उसके चेहरे पर एक विषाद स्थायी रूप से छाया रहता है। सुख-दुख, हानि-लाभ, किसी भी दशा में उसे बदलते नहीं देखा। शांत लोगों के जितने भी गुण हैं वे सभी उसमें पराकाष्ठा को पहुँच गए हैं: पर आदमी उसे बेवकूफ़ कहता है। सद्गुणों का इतना अनादर कहीं नहीं देखा। कदाचित सीधापन संसार के लिए उपयुक्त नहीं है।”

SubQuestion No : 15

Q.15 ब्याई हुई गाय अनायास किसका रूप धारण कर लेती है?

- Ans
- ☒ 1. बाघ का
 - ☒ 2. कुत्ते का
 - ☒ 3. सिंहनी का
 - ☒ 4. बैल का

Question ID : 630680846639
Option 1 ID : 6306803316309
Option 2 ID : 6306803316310
Option 3 ID : 6306803316308
Option 4 ID : 6306803316311

Comprehension:

नीचे दिए गए गद्यांश को ध्यानपूर्वक पढ़ें और बिना किसी सामान्य ज्ञान एवं साहित्य के तथ्यों की परवाह किए, केवल नीचे दिए गए गद्यांश के आधार पर ही प्रश्न के लिए सही उत्तर का चयन करें।

अपने जीवन के अंतिम वर्षों में डॉ. सच्चिदानंद सिन्हा की उत्कट अभिलाषा थी कि सिन्हा लाइब्रेरी के प्रबंध की उपयुक्त व्यवस्था हो जाए। ट्रस्ट पहले से मौजूद था लेकिन आवश्यकता यह थी कि सरकारी उत्तरदायित्व भी स्थिर हो जाए। ऐसा मसविदा तैयार करना कि जिसमें ट्रस्ट का अस्तित्व भी न टूटे और सरकार द्वारा संस्था की देखभाल और पोषण की भी गारंटी मिल जाए, जो जरा टेढ़ी खीर थी। एक दिन एक चाय-पार्टी के दौरान सिन्हा साहब मेरे (जगदीशचंद्र माथुर) पास चुपके से आकर बैठ गए। सन् 1949 की बात है। मैं नया-नया शिक्षा सचिव हुआ था, लेकिन सिन्हा साहब की मौजूदगी में मेरी क्या हस्ती ? इसलिए जब वे मेरे पास बैठे और जरा विनीत स्वर में उन्होंने सिन्हा लाइब्रेरी की दास्तान कहनी शुरू की तो मैं सकपका गया। मन में सोचने लगा कि जो सिन्हा साहब मुख्यमंत्री, शिक्षा मंत्री और गवर्नर तक से आदेश के स्वर में सिन्हा लाइब्रेरी जैसी उपयोगी संस्था के बारे में बातचीत कर सकते हैं, वे मुझ जैसे कल के छोकरे को क्यों सिर चढ़ा रहे हैं। उस वक्त तो नहीं, किंतु बाद में गौर करने पर दो बातें स्पष्ट हुईं। एक तो यह कि मैं भले ही समझता रहा हूँ कि मेरी लल्लो-चप्पो हो रही है, किंतु वस्तुतः उनका विनीत स्वर उनके व्यक्तित्व के उस साधारणतया अलक्षित और आर्द्र पहलू की आवाज थी, जो पुस्तकों तथा सिन्हा लाइब्रेरी के प्रति उनकी भावुकता के उमड़ने पर ही मुखरित होती थी।

SubQuestion No : 16

Q.16 ऐसा मसविदा तैयार करना कि जिसमें ट्रस्ट का अस्तित्व भी न टूटे और सरकार द्वारा संस्था की देखभाल और _____ की भी गारंटी मिल जाए

- Ans
- ☒ 1. केवल भवन निर्माण
 - ☒ 2. केवल वित्तीय व्यवस्था
 - ☒ 3. केवल प्रशासनिक व्यवस्था
 - ☒ 4. पोषण

Question ID : 630680849923
Option 1 ID : 6306803328921
Option 2 ID : 6306803328923
Option 3 ID : 6306803328924
Option 4 ID : 6306803328922

Comprehension:

नीचे दिए गए गद्यांश को ध्यानपूर्वक पढ़ें और बिना किसी सामान्य ज्ञान एवं साहित्य के तथ्यों की परवाह किए, केवल नीचे दिए गए गद्यांश के आधार पर ही प्रश्न के लिए सही उत्तर का चयन करें।

अपने जीवन के अंतिम वर्षों में डॉ. सच्चिदानंद सिन्हा की उत्कट अभिलाषा थी कि सिन्हा लाइब्रेरी के प्रबंध की उपयुक्त व्यवस्था हो जाए। ट्रस्ट पहले से मौजूद था लेकिन आवश्यकता यह थी कि सरकारी उत्तरदायित्व भी स्थिर हो जाए। ऐसा मसविदा तैयार करना कि जिसमें ट्रस्ट का अस्तित्व भी न टूटे और सरकार द्वारा संस्था की देखभाल और पोषण की भी गारंटी मिल जाए, जो जरा टेढ़ी खीर थी। एक दिन एक चाय-पार्टी के दौरान सिन्हा साहब मेरे (जगदीशचंद्र माथुर) पास चुपके से आकर बैठ गए। सन् 1949 की बात है। मैं नया-नया शिक्षा सचिव हुआ था, लेकिन सिन्हा साहब की मौजूदगी में मेरी क्या हस्ती ? इसलिए जब वे मेरे पास बैठे और जरा विनीत स्वर में उन्होंने सिन्हा लाइब्रेरी की दास्तान कहनी शुरू की तो मैं सकपका गया। मन में सोचने लगा कि जो सिन्हा साहब मुख्यमंत्री, शिक्षा मंत्री और गवर्नर तक से आदेश के स्वर में सिन्हा लाइब्रेरी जैसी उपयोगी संस्था के बारे में बातचीत कर सकते हैं, वे मुझ जैसे कल के छोकरे को क्यों सिर चढ़ा रहे हैं। उस वक्त तो नहीं, किंतु बाद में गौर करने पर दो बातें स्पष्ट हुईं। एक तो यह कि मैं भले ही समझता रहा हूँ कि मेरी लल्लो-चप्पो हो रही है, किंतु वस्तुतः उनका विनीत स्वर उनके व्यक्तित्व के उस साधारणतया अलक्षित और आर्द्र पहलू की आवाज थी, जो पुस्तकों तथा सिन्हा लाइब्रेरी के प्रति उनकी भावुकता के उमड़ने पर ही मुखरित होती थी।

SubQuestion No : 17

Q.17 इसलिए जब वे मेरे पास बैठे और जरा विनीत स्वर में उन्होंने _____ की दास्तान कहनी शुरू की तो मैं सकपका गया।

- Ans
- ☒ 1. राज्य सरकार की कार्यप्रणाली
 - ☒ 2. सिन्हा लाइब्रेरी
 - ☒ 3. केंद्र सरकार की कार्यप्रणाली
 - ☒ 4. सरकारी लाइब्रेरी

Question ID : 630680849922
Option 1 ID : 6306803328917
Option 2 ID : 6306803328919
Option 3 ID : 6306803328920
Option 4 ID : 6306803328918

Comprehension:

नीचे दिए गए गद्यांश को ध्यानपूर्वक पढ़ें और बिना किसी सामान्य ज्ञान एवं साहित्य के तथ्यों की परवाह किए, केवल नीचे दिए गए गद्यांश के आधार पर ही प्रश्न के लिए सही उत्तर का चयन करें।

अपने जीवन के अंतिम वर्षों में डॉ. सच्चिदानंद सिन्हा की उत्कट अभिलाषा थी कि सिन्हा लाइब्रेरी के प्रबंध की उपयुक्त व्यवस्था हो जाए। ट्रस्ट पहले से मौजूद था लेकिन आवश्यकता यह थी कि सरकारी उत्तरदायित्व भी स्थिर हो जाए। ऐसा मसविदा तैयार करना कि जिसमें ट्रस्ट का अस्तित्व भी न टूटे और सरकार द्वारा संस्था की देखभाल और पोषण की भी गारंटी मिल जाए, जो जरा टेढ़ी खीर थी। एक दिन एक चाय-पार्टी के दौरान सिन्हा साहब मेरे (जगदीशचंद्र माथुर) पास चुपके से आकर बैठ गए। सन् 1949 की बात है। मैं नया-नया शिक्षा सचिव हुआ था, लेकिन सिन्हा साहब की मौजूदगी में मेरी क्या हस्ती ? इसलिए जब वे मेरे पास बैठे और जरा विनीत स्वर में उन्होंने सिन्हा लाइब्रेरी की दास्तान कहनी शुरू की तो मैं सकपका गया। मन में सोचने लगा कि जो सिन्हा साहब मुख्यमंत्री, शिक्षा मंत्री और गवर्नर तक से आदेश के स्वर में सिन्हा लाइब्रेरी जैसी उपयोगी संस्था के बारे में बातचीत कर सकते हैं, वे मुझ जैसे कल के छोकरे को क्यों सिर चढ़ा रहे हैं। उस वक्त तो नहीं, किंतु बाद में गौर करने पर दो बातें स्पष्ट हुईं। एक तो यह कि मैं भले ही समझता रहा हूँ कि मेरी लल्लो-चप्पो हो रही है, किंतु वस्तुतः उनका विनीत स्वर उनके व्यक्तित्व के उस साधारणतया अलक्षित और आर्द्र पहलू की आवाज थी, जो पुस्तकों तथा सिन्हा लाइब्रेरी के प्रति उनकी भावुकता के उमड़ने पर ही मुखरित होती थी।

SubQuestion No : 18

Q.18 किस पार्टी के दौरान सिन्हा साहब जगदीशचंद्र माथुर के पास चुपके से आकर बैठ गए।

Ans ☒ 1. चाय-पार्टी के दौरान

☐ 2. रात्रि भोज पार्टी के दौरान

☐ 3. फल पार्टी के दौरान

☐ 4. चुनावी पार्टी के दौरान

Question ID : 630680849921
Option 1 ID : 6306803328913
Option 2 ID : 6306803328915
Option 3 ID : 6306803328914
Option 4 ID : 6306803328916

Comprehension:

नीचे दिए गए गद्यांश को ध्यानपूर्वक पढ़ें और बिना किसी सामान्य ज्ञान एवं साहित्य के तथ्यों की परवाह किए, केवल नीचे दिए गए गद्यांश के आधार पर ही प्रश्न के लिए सही उत्तर का चयन करें।

अपने जीवन के अंतिम वर्षों में डॉ. सच्चिदानंद सिन्हा की उत्कट अभिलाषा थी कि सिन्हा लाइब्रेरी के प्रबंध की उपयुक्त व्यवस्था हो जाए। ट्रस्ट पहले से मौजूद था लेकिन आवश्यकता यह थी कि सरकारी उत्तरदायित्व भी स्थिर हो जाए। ऐसा मसविदा तैयार करना कि जिसमें ट्रस्ट का अस्तित्व भी न टूटे और सरकार द्वारा संस्था की देखभाल और पोषण की भी गारंटी मिल जाए, जो जरा टेढ़ी खीर थी। एक दिन एक चाय-पार्टी के दौरान सिन्हा साहब मेरे (जगदीशचंद्र माथुर) पास चुपके से आकर बैठ गए। सन् 1949 की बात है। मैं नया-नया शिक्षा सचिव हुआ था, लेकिन सिन्हा साहब की मौजूदगी में मेरी क्या हस्ती ? इसलिए जब वे मेरे पास बैठे और जरा विनीत स्वर में उन्होंने सिन्हा लाइब्रेरी की दास्तान कहनी शुरू की तो मैं सकपका गया। मन में सोचने लगा कि जो सिन्हा साहब मुख्यमंत्री, शिक्षा मंत्री और गवर्नर तक से आदेश के स्वर में सिन्हा लाइब्रेरी जैसी उपयोगी संस्था के बारे में बातचीत कर सकते हैं, वे मुझ जैसे कल के छोकरे को क्यों सिर चढ़ा रहे हैं। उस वक्त तो नहीं, किंतु बाद में गौर करने पर दो बातें स्पष्ट हुईं। एक तो यह कि मैं भले ही समझता रहा हूँ कि मेरी लल्लो-चप्पो हो रही है, किंतु वस्तुतः उनका विनीत स्वर उनके व्यक्तित्व के उस साधारणतया अलक्षित और आर्द्र पहलू की आवाज थी, जो पुस्तकों तथा सिन्हा लाइब्रेरी के प्रति उनकी भावुकता के उमड़ने पर ही मुखरित होती थी।

SubQuestion No : 19

Q.19 सिन्हा साहब की कब और क्या उत्कट अभिलाषा थी ?

Ans ☐ 1. बिहार प्रशासन के प्रबंध की उपयुक्त व्यवस्था हो जाए ।

☐ 2. जीवन के अंतिम समय में सुखमय जीवन चाहते थे ।

☐ 3. सरकारी उत्तरदायित्व भी स्थिर हो जाए।

☒ 4. अपने जीवन के अंतिम वर्षों में सिन्हा लाइब्रेरी के प्रबंध की उपयुक्त व्यवस्था हो जाए ।

Question ID : 630680849920
Option 1 ID : 6306803328912
Option 2 ID : 6306803328911
Option 3 ID : 6306803328909
Option 4 ID : 6306803328910

Comprehension:

नीचे दिए गए गद्यांश को ध्यानपूर्वक पढ़ें और बिना किसी सामान्य ज्ञान एवं साहित्य के तथ्यों की परवाह किए, केवल नीचे दिए गए गद्यांश के आधार पर ही प्रश्न के लिए सही उत्तर का चयन करें।

अपने जीवन के अंतिम वर्षों में डॉ. सच्चिदानंद सिन्हा की उत्कट अभिलाषा थी कि सिन्हा लाइब्रेरी के प्रबंध की उपयुक्त व्यवस्था हो जाए। ट्रस्ट पहले से मौजूद था लेकिन आवश्यकता यह थी कि सरकारी उत्तरदायित्व भी स्थिर हो जाए। ऐसा मसविदा तैयार करना कि जिसमें ट्रस्ट का अस्तित्व भी न टूटे और सरकार द्वारा संस्था की देखभाल और पोषण की भी गारंटी मिल जाए, जो जरा टेढ़ी खीर थी। एक दिन एक चाय-पार्टी के दौरान सिन्हा साहब मेरे (जगदीशचंद्र माथुर) पास चुपके से आकर बैठ गए। सन् 1949 की बात है। मैं नया-नया शिक्षा सचिव हुआ था, लेकिन सिन्हा साहब की मौजूदगी में मेरी क्या हस्ती ? इसलिए जब वे मेरे पास बैठे और जरा विनीत स्वर में उन्होंने सिन्हा लाइब्रेरी की दास्तान कहनी शुरू की तो मैं सकपका गया। मन में सोचने लगा कि जो सिन्हा साहब मुख्यमंत्री, शिक्षा मंत्री और गवर्नर तक से आदेश के स्वर में सिन्हा लाइब्रेरी जैसी उपयोगी संस्था के बारे में बातचीत कर सकते हैं, वे मुझ जैसे कल के छोकरे को क्यों सिर चढ़ा रहे हैं। उस वक्त तो नहीं, किंतु बाद में गौर करने पर दो बातें स्पष्ट हुईं। एक तो यह कि मैं भले ही समझता रहा हूँ कि मेरी लल्लो-चप्पो हो रही है, किंतु वस्तुतः उनका विनीत स्वर उनके व्यक्तित्व के उस साधारणतया अलक्षित और आर्द्र पहलू की आवाज थी, जो पुस्तकों तथा सिन्हा लाइब्रेरी के प्रति उनकी भावुकता के उमड़ने पर ही मुखरित होती थी।

SubQuestion No : 20

Q.20 कब और कौन नए-नए शिक्षा सचिव हुए थे ?

गद्यांश के आधार पर निम्नलिखित कथन में से कौन-सा कथन सही है?

- Ans
- ☒ 1. सन् 1849 में जगदीशचंद्र माथुर नये-नये शिक्षा मंत्री हुए थे ।
 - ☒ 2. सन् 1949 में जगदीशचंद्र माथुर नये-नये शिक्षा सचिव हुए थे ।
 - ☒ 3. सन् 1946 में डॉ राजेंद्र प्रसाद शिक्षा सचिव हुए थे।
 - ☒ 4. सन् 1949 में सच्चिदानंद सिन्हा नये-नये शिक्षा सचिव हुए थे ।

Question ID : 630680849919
Option 1 ID : 6306803328905
Option 2 ID : 6306803328907
Option 3 ID : 6306803328906
Option 4 ID : 6306803328908