

## Multi Tasking Non Technical Staff and Havaladar CBIC and CBN Examination 2022

Roll Number	
Candidate Name	
Venue Name	iON Digital Zone iDZ 2 Patliputra
Exam Date	19/06/2023
Exam Time	3:30 PM - 5:00 PM
Subject	MTS Non Tech Havaladar CBIC and CBN Examination 2022

### Section : Numerical and Mathematical Ability

**Q.1** The curved surface area of a cylinder is  $968 \text{ cm}^2$ . If the height of the cylinder is 11 cm, then what will be the diameter of its base?

- Ans**
- ☒ 1. 26 cm
  - ☒ 2. 22 cm
  - ☒ 3. 28 cm
  - ☒ 4. 24 cm

Question Type : MCQ

Question ID : 264330135411

Option 1 ID : 264330530554

Option 2 ID : 264330530551

Option 3 ID : 264330530553

Option 4 ID : 264330530552

Status : Answered

Chosen Option : 3

**Q.2** A train starts moving from a place A at 10:00 a.m. and arrives at another place B at 5:30 p.m. on the same day. If the speed of the train is 80 km/hr, then what will be the distance covered by the train?

- Ans**
- ☒ 1. 600 km
  - ☒ 2. 550 km
  - ☒ 3. 650 km
  - ☒ 4. 450 km

Question Type : MCQ

Question ID : 264330138017

Option 1 ID : 264330540675

Option 2 ID : 264330540676

Option 3 ID : 264330540678

Option 4 ID : 264330540677

Status : Answered

Chosen Option : 1

# Test Prime

**ALL EXAMS,  
ONE SUBSCRIPTION**



**70,000+**  
Mock Tests



**Personalised  
Report Card**



**Unlimited  
Re-Attempt**



**600+**  
Exam Covered



**Previous Year  
Papers**



**500%  
Refund**



**ATTEMPT FREE MOCK NOW**

**Q.3** A man earns a profit of 35 percent by selling a chair for a certain price. If he sells that chair at double the price, then what will be the profit percentage?

- Ans** ☒ 1. 170 percent  
☒ 2. 70 percent  
☒ 3. 180 percent  
☒ 4. 150 percent

Question Type : **MCQ**

Question ID : **264330138022**

Option 1 ID : **264330540697**

Option 2 ID : **264330540698**

Option 3 ID : **264330540695**

Option 4 ID : **264330540696**

Status : **Answered**

Chosen Option : **2**

**Q.4** The current population of the town is 68,000. The population increases by 10 percent in the first year and decreases by 5% in the second year. Find the population after 2 years.

- Ans** ☒ 1. 71,060  
☒ 2. 68,500  
☒ 3. 69,000  
☒ 4. 70,100

Question Type : **MCQ**

Question ID : **264330138424**

Option 1 ID : **264330542303**

Option 2 ID : **264330542304**

Option 3 ID : **264330542306**

Option 4 ID : **264330542305**

Status : **Answered**

Chosen Option : **1**

**Q.5** Ramesh runs at the speed of 234 kmph. How many metres does he run in ten minutes?

- Ans** ☒ 1. 35468 m  
☒ 2. 39000 m  
☒ 3. 37560 m  
☒ 4. 36000 m

Question Type : **MCQ**

Question ID : **264330138759**

Option 1 ID : **264330543646**

Option 2 ID : **264330543644**

Option 3 ID : **264330543643**

Option 4 ID : **264330543645**

Status : **Answered**

Chosen Option : **2**

**Q.6** The difference between compound interest and simple interest on a sum at 20% per annum for two years is Rs. 420.  
Find the sum (in Rs.).

- Ans**
- ☒ 1. Rs. 8000
  - ☒ 2. Rs. 10500
  - ☐ 3. Rs. 9000
  - ☐ 4. Rs. 11000

Question Type : **MCQ**  
 Question ID : **264330138403**  
 Option 1 ID : **264330542222**  
 Option 2 ID : **264330542220**  
 Option 3 ID : **264330542221**  
 Option 4 ID : **264330542219**  
 Status : **Answered**  
 Chosen Option : **1**

**Q.7** The ratio of speed of three racers is 5 : 2 : 1. What is the respective ratio of time taken by the three racers to cover the same distance?

- Ans**
- ☒ 1. 2 : 5 : 10
  - ☐ 2. 2 : 5 : 8
  - ☐ 3. 5 : 2 : 10
  - ☐ 4. 2 : 5 : 3

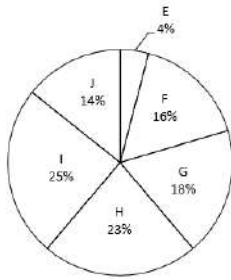
Question Type : **MCQ**  
 Question ID : **264330138024**  
 Option 1 ID : **264330540705**  
 Option 2 ID : **264330540703**  
 Option 3 ID : **264330540704**  
 Option 4 ID : **264330540706**  
 Status : **Answered**  
 Chosen Option : **1**

**Q.8** Average age of 14 teachers is 56 years. After involving a new teacher in that group, the average rises by 2 years. What is the age of the new teacher?

- Ans**
- ☒ 1. 86 years
  - ☐ 2. 72 years
  - ☐ 3. 84 years
  - ☐ 4. 78 years

Question Type : **MCQ**  
 Question ID : **264330138018**  
 Option 1 ID : **264330540679**  
 Option 2 ID : **264330540680**  
 Option 3 ID : **264330540681**  
 Option 4 ID : **264330540682**  
 Status : **Answered**  
 Chosen Option : **1**

- Q.9** The pie chart given below shows the number of students studying in six schools. Total number of students studying in all these six schools are 4000. Number of students studying in a particular school is shown as a percentage of total number of students studying in all these six schools.



What is the difference between the central angle formed by sectors F and H together and the central angle formed by sectors I and G together?

- Ans**
- ☒ 1. 9.6 degree
  - ☒ 2. 14.4 degree
  - ☒ 3. 17.4 degree
  - ☒ 4. 18.7 degree

Question Type : MCQ

Question ID : 264330138034

Option 1 ID : 264330540744

Option 2 ID : 264330540743

Option 3 ID : 264330540746

Option 4 ID : 264330540745

Status : Answered

Chosen Option : 2

- Q.10** An item is sold for Rs. 1440 after two successive discounts of 25 percent and 4 percent. What is the marked price of the article?

- Ans**
- ☒ 1. Rs. 2000
  - ☒ 2. Rs. 2500
  - ☒ 3. Rs. 2100
  - ☒ 4. Rs. 2200

Question Type : MCQ

Question ID : 264330138027

Option 1 ID : 264330540718

Option 2 ID : 264330540717

Option 3 ID : 264330540715

Option 4 ID : 264330540716

Status : Answered

Chosen Option : 1

Q.11 Simplify:  $44 + 67 - 32 \div 4 + (9 + 5 + 5 + 4) - 1$

- Ans
- ☒ 1. 130
  - ☒ 2. 125
  - ☒ 3. 122
  - ☒ 4. 123

Question Type : MCQ

Question ID : 264330138746

Option 1 ID : 264330543593

Option 2 ID : 264330543592

Option 3 ID : 264330543594

Option 4 ID : 264330543591

Status : Answered

Chosen Option : 2

Q.12 The given table shows the number of boys and girls in the schools. Which school has minimum number of students?

School	Number of boys	Number of girls
1	44	56
2	34	45
3	47	34
4	65	54
5	45	32

- Ans
- ☒ 1. 2
  - ☒ 2. 3
  - ☒ 3. 5
  - ☒ 4. 1

Question Type : MCQ

Question ID : 264330133751

Option 1 ID : 264330524027

Option 2 ID : 264330524028

Option 3 ID : 264330524029

Option 4 ID : 264330524030

Status : Answered

Chosen Option : 3

Q.13 If  $(7x + y) : (7x - y) = 7 : 2$ , then what is the value of  $x : y$ ?

- Ans
- ☒ 1. 9 : 35
  - ☒ 2. 11 : 42
  - ☒ 3. 6 : 41
  - ☒ 4. 17 : 52

Question Type : MCQ

Question ID : 264330138023

Option 1 ID : 264330540701

Option 2 ID : 264330540702

Option 3 ID : 264330540700

Option 4 ID : 264330540699

Status : Answered

Chosen Option : 1

**Q.14** If 3 boys and 8 girls can do a work in 6 days, and 1 boy and 5 girls can finish the same in 12 days, find the ratio of efficiencies of a boy and a girl.

- Ans** ☒ 1. 2:1  
☒ 2. 1:5  
☒ 3. 2:5  
☒ 4. 3:2

Question Type : **MCQ**

Question ID : **264330135406**

Option 1 ID : **264330530531**

Option 2 ID : **264330530534**

Option 3 ID : **264330530533**

Option 4 ID : **264330530532**

Status : **Answered**

Chosen Option : 1

**Q.15** Solve:  $(64 \div 8) - 5 + 4 \times 23 + 45 - 87$

- Ans** ☒ 1. 53  
☒ 2. 51  
☒ 3. 54  
☒ 4. 52

Question Type : **MCQ**

Question ID : **264330133737**

Option 1 ID : **264330523972**

Option 2 ID : **264330523973**

Option 3 ID : **264330523971**

Option 4 ID : **264330523974**

Status : **Answered**

Chosen Option : 1

**Q.16** The sum of the two numbers is 400. If the bigger number is decreased by 16% and the smaller number is increased by 16%, then the numbers obtained are equal. Find the smaller number.

- Ans** ☒ 1. 168  
☒ 2. 152  
☒ 3. 144  
☒ 4. 170

Question Type : **MCQ**

Question ID : **264330138396**

Option 1 ID : **264330542193**

Option 2 ID : **264330542192**

Option 3 ID : **264330542191**

Option 4 ID : **264330542194**

Status : **Answered**

Chosen Option : 3

Q.17 What is the Highest Common Factor of  $4/55$ ,  $2/11$  and  $8/22$ ?

- Ans
- ☒ 1.  $1/66$
  - ☒ 2.  $3/88$
  - ☒ 3.  $2/55$
  - ☒ 4.  $1/55$

Question Type : MCQ  
 Question ID : 264330138030  
 Option 1 ID : 264330540730  
 Option 2 ID : 264330540727  
 Option 3 ID : 264330540728  
 Option 4 ID : 264330540729  
 Status : Answered  
 Chosen Option : 4

Q.18 Ravi drives 200 km from Dungarpur to Udaipur. His average speed is 50 kmph. He leaves Dungarpur at 8:20 a.m. By what time he will reach Udaipur?

- Ans
- ☒ 1. 1:00 p.m.
  - ☒ 2. 12:20 p.m.
  - ☒ 3. 10 a.m.
  - ☒ 4. 11:30 a.m.

Question Type : MCQ  
 Question ID : 264330135113  
 Option 1 ID : 264330529390  
 Option 2 ID : 264330529389  
 Option 3 ID : 264330529387  
 Option 4 ID : 264330529388  
 Status : Answered  
 Chosen Option : 4

Q.19 By selling 100 notebooks, a shopkeeper gains the selling price of 20 notebooks. What is his gain percentage?

- Ans
- ☒ 1. 62.4%
  - ☒ 2. 22.5%
  - ☒ 3. 50.4%
  - ☒ 4. 25%

Question Type : MCQ  
 Question ID : 264330138752  
 Option 1 ID : 264330543617  
 Option 2 ID : 264330543618  
 Option 3 ID : 264330543616  
 Option 4 ID : 264330543615  
 Status : Answered  
 Chosen Option : 4



Q.20 What is the value of  $\frac{343}{49} \times \frac{45}{9}$  of  $\frac{27}{15} \times \frac{256}{64}$  ?

- Ans ☒ 1. 252  
☒ 2. 262  
☒ 3. 142  
☒ 4. 192

Question Type : MCQ  
 Question ID : 264330137661  
 Option 1 ID : 264330539254  
 Option 2 ID : 264330539253  
 Option 3 ID : 264330539251  
 Option 4 ID : 264330539252  
 Status : Answered  
 Chosen Option : 1

Section : Reasoning Ability and Problem Solving

Q.1 Which two signs should be interchanged to make the given equation correct?

$$9 \div 3 + 7 = 4 - 6$$

- Ans ☒ 1. - and =  
☒ 2.  $\div$  and -  
☒ 3. + and -  
☒ 4.  $\div$  and =

Question Type : MCQ  
 Question ID : 264330137825  
 Option 1 ID : 264330539907  
 Option 2 ID : 264330539908  
 Option 3 ID : 264330539909  
 Option 4 ID : 264330539910  
 Status : Answered  
 Chosen Option : 1

Q.2 In a certain code language, 'JOURNEY' is written as 'EJNORUY'. How will 'MEDICAL' be written in that language?

- Ans ☒ 1. ACDIELM  
☒ 2. ACDEILM  
☒ 3. ADCLEMI  
☒ 4. ADCLIEM

Question Type : MCQ  
 Question ID : 264330135026  
 Option 1 ID : 264330529042  
 Option 2 ID : 264330529041  
 Option 3 ID : 264330529039  
 Option 4 ID : 264330529040  
 Status : Answered  
 Chosen Option : 2

Q.3 Which of the following letter cluster will replace the question mark (?) in the given series?

SE, VI, YM, BQ, EU, ?

- Ans ☒ 1. HY  
☒ 2. JY  
☒ 3. GY  
☒ 4. HX

Question Type : MCQ

Question ID : 264330137808

Option 1 ID : 264330539839

Option 2 ID : 264330539840

Option 3 ID : 264330539842

Option 4 ID : 264330539841

Status : Answered

Chosen Option : 1

Q.4 Select the option that is related to the third word in the same way as the second word is related to the first word.

Marry : Divorce :: Native : ?

- Ans ☒ 1. Hometown  
☒ 2. Foreign  
☒ 3. Country  
☒ 4. Indoor

Question Type : MCQ

Question ID : 264330137811

Option 1 ID : 264330539851

Option 2 ID : 264330539852

Option 3 ID : 264330539854

Option 4 ID : 264330539853

Status : Answered

Chosen Option : 2

Q.5 Study the given pattern carefully and select the number that can replace the question mark (?) in it.

First row- 7, 9, 63

Second row- 6, 8, 48

Third row- 5, 7, ?

- Ans ☒ 1. 28  
☒ 2. 35  
☒ 3. 42  
☒ 4. 49

Question Type : MCQ

Question ID : 264330137824

Option 1 ID : 264330539906

Option 2 ID : 264330539903

Option 3 ID : 264330539904

Option 4 ID : 264330539905

Status : Answered

Chosen Option : 2

**Q.6** Two statements are given followed by two conclusions numbered I and II. Assuming the statements to be true, even if they seem to be at variance with commonly known facts, decide which of the conclusions logically follow(s) from the statements.

Statements:

Some cars are fast.

Some fast are slow.

Conclusions:

I. Some cars are not slow.

II. Some slow are fast.

- Ans**
- ☒ 1. Both conclusions I and II follow
  - ☒ 2. Only conclusion II follows
  - ☒ 3. Neither conclusion I nor II follows
  - ☒ 4. Only conclusion I follows

Question Type : MCQ

Question ID : 264330137819

Option 1 ID : 264330539885

Option 2 ID : 264330539884

Option 3 ID : 264330539886

Option 4 ID : 264330539883

Status : Answered

Chosen Option : 2

**Q.7** Ram, Shyam, Pankaj, Tilak, and Gaurav are sitting in a straight line facing south. Tilak and Gaurav are sitting at the ends. Ram is sitting to the immediate left of Gaurav and to the immediate right of Pankaj. Who is sitting to the immediate right of Tilak?

- Ans**
- ☒ 1. Shyam
  - ☒ 2. Pankaj
  - ☒ 3. Ram
  - ☒ 4. Gaurav

Question Type : MCQ

Question ID : 264330137817

Option 1 ID : 264330539875

Option 2 ID : 264330539876

Option 3 ID : 264330539877

Option 4 ID : 264330539878

Status : Answered

Chosen Option : 1

**Q.8** In a certain code language, 'JACKET' is written as 'EAKCTJ'. How will 'BLAZER' be written in that language?

- Ans**
- ☒ 1. ELRABZ
  - ☒ 2. EZLARB
  - ☒ 3. ELZARB
  - ☒ 4. ELZRAB

Question Type : MCQ

Question ID : 264330135003

Option 1 ID : 264330528950

Option 2 ID : 264330528947

Option 3 ID : 264330528949

Option 4 ID : 264330528948

Status : Answered

Chosen Option : 3

**Q.9** Select the option that is related to the third letter cluster in the same way as the second letter cluster is related to the first letter cluster.

GR : KV :: DL : ?

- Ans**
- ☒ 1. HQ
  - ☒ 2. GP
  - ☒ 3. HS
  - ☒ 4. HP

Question Type : **MCQ**

Question ID : **264330137810**

Option 1 ID : **264330539847**

Option 2 ID : **264330539848**

Option 3 ID : **264330539850**

Option 4 ID : **264330539849**

Status : **Answered**

Chosen Option : **4**

**Q.10** In the following question, select the missing number of the given series.

0, 22, 44, 66, ?, 110

- Ans**
- ☒ 1. 88
  - ☒ 2. 99
  - ☒ 3. 94
  - ☒ 4. 90

Question Type : **MCQ**

Question ID : **264330138510**

Option 1 ID : **264330542647**

Option 2 ID : **264330542649**

Option 3 ID : **264330542650**

Option 4 ID : **264330542648**

Status : **Answered**

Chosen Option : **1**

**Q.11** Priti, Rani, Sriti, Tania, Urusha, and Vidhi are sitting in a circle facing the centre. Vidhi is sitting second to the left of Sriti, and is in between Tania and Urusha. Sriti is not a neighbor to Rani or Tania. Who is sitting to the immediate right of Priti?

- Ans**
- ☒ 1. Vidhi
  - ☒ 2. Tania
  - ☒ 3. Sriti
  - ☒ 4. Rani

Question Type : **MCQ**

Question ID : **264330137816**

Option 1 ID : **264330539871**

Option 2 ID : **264330539874**

Option 3 ID : **264330539872**

Option 4 ID : **264330539873**

Status : **Answered**

Chosen Option : **4**

**Q.12** By Interchanging the given two numbers which of the following equation will be not correct?

9 and 7

I.  $7 \times 3 - 8 + 4 + 9 = 32$

II.  $7 - 9 \times 2 + 6 + 3 = -3$

**Ans**

☒ 1. Only II

☒ 2. Neither I nor II

☒ 3. Both I and II

☒ 4. Only I

Question Type : **MCQ**

Question ID : **264330138536**

Option 1 ID : **264330542752**

Option 2 ID : **264330542754**

Option 3 ID : **264330542753**

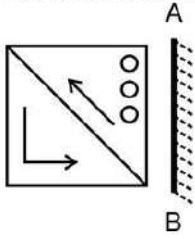
Option 4 ID : **264330542751**

Status : **Answered**

Chosen Option : **3**

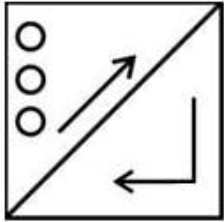


Q.13 Select the correct mirror image of the given figure when the mirror is placed at AB as shown below.

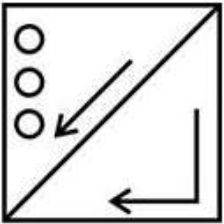


Ans

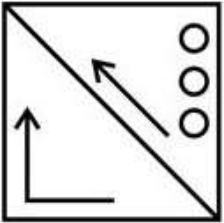
✓ 1.



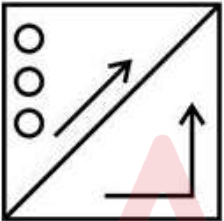
✗ 2.



✗ 3.



✗ 4.



Question Type : MCQ

Question ID : 264330133464

Option 1 ID : 264330522890

Option 2 ID : 264330522888

Option 3 ID : 264330522887

Option 4 ID : 264330522889

Status : Answered

Chosen Option : 1

**Q.14** Seven people K, B, M, C, R, P, and S have different heights. C is taller than K. B is shorter than M. P is shorter than M and B. C is not taller than P. S is not taller than K. M is shorter than only one person. Who is the shortest?

- Ans**
- ☒ 1. K
  - ☒ 2. S
  - ☒ 3. P
  - ☒ 4. B

Question Type : **MCQ**  
 Question ID : **264330137818**  
 Option 1 ID : **264330539880**  
 Option 2 ID : **264330539879**  
 Option 3 ID : **264330539881**  
 Option 4 ID : **264330539882**  
 Status : **Answered**  
 Chosen Option : **3**

**Q.15** Which of the following numbers will replace the question mark (?) in the given series?  
 64, 32, 96, 48, 144, 72, 216, ?

- Ans**
- ☒ 1. 108
  - ☒ 2. 104
  - ☒ 3. 112
  - ☒ 4. 114

Question Type : **MCQ**  
 Question ID : **264330137822**  
 Option 1 ID : **264330539897**  
 Option 2 ID : **264330539898**  
 Option 3 ID : **264330539895**  
 Option 4 ID : **264330539896**  
 Status : **Answered**  
 Chosen Option : **1**

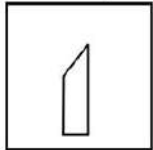
**Q.16** Select the option that is related to the fifth number in the same way as the second number is related to the first number and fourth number is related to third number.

4 : 25 :: 6 : 49 :: 8 : ?

- Ans**
- ☒ 1. 80
  - ☒ 2. 82
  - ☒ 3. 85
  - ☒ 4. 81

Question Type : **MCQ**  
 Question ID : **264330138512**  
 Option 1 ID : **264330542655**  
 Option 2 ID : **264330542657**  
 Option 3 ID : **264330542658**  
 Option 4 ID : **264330542656**  
 Status : **Answered**  
 Chosen Option : **4**

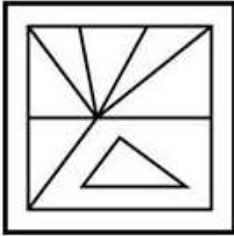
Q.17 Select the option figure in which the given figure (X) is embedded as its part (rotation is NOT allowed).



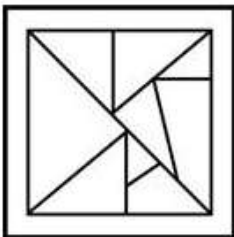
X

Ans

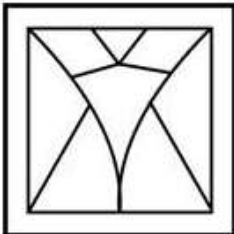
✗ 1.



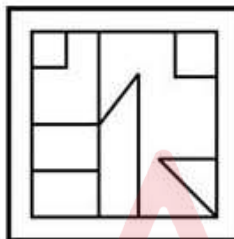
✗ 2.



✗ 3.



✓ 4.



Question Type : MCQ

Question ID : 264330133463

Option 1 ID : 264330522885

Option 2 ID : 264330522883

Option 3 ID : 264330522884

Option 4 ID : 264330522886

Status : Answered

Chosen Option : 4



**Q.18** Three statements are given followed by two conclusions numbered I and II. Assuming the statements to be true, even if they seem to be at variance with commonly known facts, decide which of the conclusions logically follow(s) from the statements.

Statements:

Some towels are bright.

Some bright are shiny.

All shiny are little.

Conclusions:

I. Some little are shiny.

II. Some little are bright.

- Ans**
- ☒ 1. Only conclusion I follows
  - ☒ 2. Neither conclusion I nor II follows
  - ☒ 3. Only conclusion II follows
  - ☒ 4. Both conclusions I and II follow

Question Type : **MCQ**

Question ID : **264330137820**

Option 1 ID : **264330539887**

Option 2 ID : **264330539890**

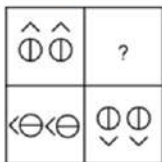
Option 3 ID : **264330539888**

Option 4 ID : **264330539889**

Status : **Answered**

Chosen Option : **4**

**Q.19** Select the option figure that will replace the question mark (?) in the figure given below to complete the pattern.  
(rotation is not allowed)



**Ans**

- ☒ 1.
- ☒ 2.
- ☒ 3.
- ☒ 4.

Question Type : **MCQ**

Question ID : **264330137829**

Option 1 ID : **264330539923**

Option 2 ID : **264330539925**

Option 3 ID : **264330539924**

Option 4 ID : **264330539926**

Status : **Answered**

Chosen Option : **4**

**Q.20** In a certain code language, 'BMWQ' is coded as '2546', 'WANB' is coded as '6751', 'MOST' is coded as '8249'. What is the code for 'M' in that code language?

- Ans**
- ☒ 1. 5
  - ☒ 2. 6
  - ☒ 3. 2
  - ☒ 4. 7

Question Type : **MCQ**  
 Question ID : **264330138587**  
 Option 1 ID : **264330542957**  
 Option 2 ID : **264330542956**  
 Option 3 ID : **264330542955**  
 Option 4 ID : **264330542958**  
 Status : **Answered**  
 Chosen Option : **3**

#### Section : General Awareness

**Q.1** The process of conversion of sugar into alcohol is known as \_\_\_\_\_.

- Ans**
- ☒ 1. Denudation
  - ☒ 2. Fragmentation
  - ☒ 3. Fermentation
  - ☒ 4. Infiltration

Question Type : **MCQ**  
 Question ID : **264330138285**  
 Option 1 ID : **264330541750**  
 Option 2 ID : **264330541748**  
 Option 3 ID : **264330541747**  
 Option 4 ID : **264330541749**  
 Status : **Answered**  
 Chosen Option : **3**

**Q.2** Sterility is caused due to the deficiency of which of the following Vitamins?

- Ans**
- ☒ 1. D
  - ☒ 2. E
  - ☒ 3. K
  - ☒ 4. B1

Question Type : **MCQ**  
 Question ID : **264330137925**  
 Option 1 ID : **264330540308**  
 Option 2 ID : **264330540309**  
 Option 3 ID : **264330540310**  
 Option 4 ID : **264330540307**  
 Status : **Answered**  
 Chosen Option : **2**

Q.3 In pre-independent India, who was the first person to discuss the concept of poverty line?

- Ans
- ☒ 1. M.K Gandhi
  - ☒ 2. Mahadev Govind Ranade
  - ☒ 3. B.R. Ambedkar
  - ☒ 4. Dadabhai Naoroji

Question Type : MCQ

Question ID : 264330133876

Option 1 ID : 264330524529

Option 2 ID : 264330524527

Option 3 ID : 264330524530

Option 4 ID : 264330524528

Status : Answered

Chosen Option : 4

Q.4 Which among the following folk dances is associated with Rajasthan?

- Ans
- ☒ 1. Rouf
  - ☒ 2. Bihu
  - ☒ 3. Lavani
  - ☒ 4. Kalbelia

Question Type : MCQ

Question ID : 264330137921

Option 1 ID : 264330540294

Option 2 ID : 264330540291

Option 3 ID : 264330540292

Option 4 ID : 264330540293

Status : Answered

Chosen Option : 4

Q.5 Which among the following states hosted the Track Asia Cup 2022 Cycling Tournament?

- Ans
- ☒ 1. Maharashtra
  - ☒ 2. Karnataka
  - ☒ 3. Kerala
  - ☒ 4. West Bengal

Question Type : MCQ

Question ID : 264330137941

Option 1 ID : 264330540374

Option 2 ID : 264330540372

Option 3 ID : 264330540371

Option 4 ID : 264330540373

Status : Answered

Chosen Option : 2

Q.6 The concept of "Republic" in the Indian Constitution was borrowed from the constitution of which of the following countries?

- Ans
- ☒ 1. Germany
  - ☒ 2. France
  - ☒ 3. Australia
  - ☒ 4. Japan

Question Type : MCQ  
Question ID : 264330137939  
Option 1 ID : 264330540364  
Option 2 ID : 264330540363  
Option 3 ID : 264330540365  
Option 4 ID : 264330540366  
Status : Answered  
Chosen Option : 1

Q.7 Ustaaad Amjad Ali Khan is associated with which of the following musical instruments?

- Ans
- ☒ 1. Saarang
  - ☒ 2. Sitar
  - ☒ 3. Sarod
  - ☒ 4. Veena

Question Type : MCQ  
Question ID : 264330137937  
Option 1 ID : 264330540358  
Option 2 ID : 264330540357  
Option 3 ID : 264330540355  
Option 4 ID : 264330540356  
Status : Answered  
Chosen Option : 3

Q.8 Where was the first underground railway started in India?

- Ans
- ☒ 1. Kolkata
  - ☒ 2. Mumbai
  - ☒ 3. Chennai
  - ☒ 4. Pune

Question Type : MCQ  
Question ID : 264330134703  
Option 1 ID : 264330527770  
Option 2 ID : 264330527769  
Option 3 ID : 264330527767  
Option 4 ID : 264330527768  
Status : Answered  
Chosen Option : 1

Q.9 The state government of \_\_\_\_\_ launched the Technology Transfer Scheme in November 2022.

- Ans ☒ 1. Kerala  
☒ 2. Tamil Nadu  
☒ 3. Andhra Pradesh  
☒ 4. Karnataka

Question Type : MCQ  
 Question ID : 264330137919  
 Option 1 ID : 264330540283  
 Option 2 ID : 264330540286  
 Option 3 ID : 264330540285  
 Option 4 ID : 264330540284  
 Status : Not Answered  
 Chosen Option : --

Q.10 In which year was All-India Muslim League formed?

- Ans ☒ 1. 1885  
☒ 2. 1911  
☒ 3. 1906  
☒ 4. 1920

Question Type : MCQ  
 Question ID : 264330133922  
 Option 1 ID : 264330524711  
 Option 2 ID : 264330524713  
 Option 3 ID : 264330524712  
 Option 4 ID : 264330524714  
 Status : Answered  
 Chosen Option : 3

Q.11 Nadir Shah, ruler of Iran plundered the city of Delhi in \_\_\_\_\_.

- Ans ☒ 1. 1739  
☒ 2. 1771  
☒ 3. 1748  
☒ 4. 1761

Question Type : MCQ  
 Question ID : 264330138293  
 Option 1 ID : 264330541779  
 Option 2 ID : 264330541782  
 Option 3 ID : 264330541780  
 Option 4 ID : 264330541781  
 Status : Answered  
 Chosen Option : 1

Q.12 Which among the following is an autobiography of Michelle Obama?

- Ans
- ☒ 1. Me
  - ☒ 2. Becoming
  - ☒ 3. Our House is on Fire
  - ☒ 4. My Life

Question Type : MCQ  
Question ID : 264330134711  
Option 1 ID : 264330527801  
Option 2 ID : 264330527802  
Option 3 ID : 264330527800  
Option 4 ID : 264330527799  
Status : Answered  
Chosen Option : 2

Q.13 Which of the following is NOT a family in classification of Modern Indian Languages?

- Ans
- ☒ 1. Indo - European
  - ☒ 2. Sino - Tibetan
  - ☒ 3. Indo - African
  - ☒ 4. Dravidian

Question Type : MCQ  
Question ID : 264330138340  
Option 1 ID : 264330541967  
Option 2 ID : 264330541968  
Option 3 ID : 264330541970  
Option 4 ID : 264330541969  
Status : Answered  
Chosen Option : 2

Q.14 The Brihadisvara temple at Tanjavur was constructed by \_\_\_\_\_.

- Ans
- ☒ 1. Rajaraja I
  - ☒ 2. Rajendra I
  - ☒ 3. Vijayalaya
  - ☒ 4. Aditya I

Question Type : MCQ  
Question ID : 264330138298  
Option 1 ID : 264330541799  
Option 2 ID : 264330541800  
Option 3 ID : 264330541801  
Option 4 ID : 264330541802  
Status : Answered  
Chosen Option : 2

Q.15 How many members in "Council of States" can be nominated by President of India?

- Ans
- ☐ 1. 9
  - ☐ 2. 15
  - ☒ 3. 12
  - ☐ 4. 6

Question Type : MCQ  
 Question ID : 264330138307  
 Option 1 ID : 264330541836  
 Option 2 ID : 264330541838  
 Option 3 ID : 264330541837  
 Option 4 ID : 264330541835  
 Status : Answered  
 Chosen Option : 3

Q.16 Asian Games 2022 held in which country?

- Ans
- ☐ 1. India
  - ☒ 2. China
  - ☐ 3. Japan
  - ☐ 4. Singapore

Question Type : MCQ  
 Question ID : 264330138275  
 Option 1 ID : 264330541707  
 Option 2 ID : 264330541709  
 Option 3 ID : 264330541708  
 Option 4 ID : 264330541710  
 Status : Answered  
 Chosen Option : 3

Q.17 Subsidiary Alliance was a system devised by \_\_\_\_\_ in 1798

- Ans
- ☒ 1. Lord Wellesley
  - ☐ 2. Lord Bentinck
  - ☐ 3. Lord Dalhousie
  - ☐ 4. Lord Hastings

Question Type : MCQ  
 Question ID : 264330138319  
 Option 1 ID : 264330541883  
 Option 2 ID : 264330541886  
 Option 3 ID : 264330541884  
 Option 4 ID : 264330541885  
 Status : Answered  
 Chosen Option : 3

**Q.18** The amount of water recommended by the United Nations for drinking, washing, cooking and maintaining proper hygiene is a minimum of \_\_\_\_\_ litres per person per day.

- Ans**
- ✓ 1. 50
  - ✗ 2. 60
  - ✗ 3. 40
  - ✗ 4. 70

Question Type : **MCQ**  
 Question ID : **264330138286**  
 Option 1 ID : **264330541752**  
 Option 2 ID : **264330541753**  
 Option 3 ID : **264330541751**  
 Option 4 ID : **264330541754**  
 Status : **Answered**  
 Chosen Option : **1**

**Q.19** Materials that allow electric current to pass through them are called \_\_\_\_\_.

- Ans**
- ✗ 1. insulators
  - ✗ 2. alternator
  - ✓ 3. conductors
  - ✗ 4. capacitor

Question Type : **MCQ**  
 Question ID : **264330138287**  
 Option 1 ID : **264330541756**  
 Option 2 ID : **264330541757**  
 Option 3 ID : **264330541755**  
 Option 4 ID : **264330541758**  
 Status : **Answered**  
 Chosen Option : **3**

**Q.20** What is the upper age limit for appointment as a judge of High court as of October 2022?

- Ans**
- ✓ 1. 62 years
  - ✗ 2. 57 years
  - ✗ 3. 55 years
  - ✗ 4. 60 years

Question Type : **MCQ**  
 Question ID : **264330137940**  
 Option 1 ID : **264330540370**  
 Option 2 ID : **264330540369**  
 Option 3 ID : **264330540367**  
 Option 4 ID : **264330540368**  
 Status : **Answered**  
 Chosen Option : **4**



Q.21 Who among the following was the student of 'Pandit Birju Maharaj' and received 'Padma Shri' in the year 1992 and 'Sangeet Natak Akademi Award' in the year 1999-2000?

- Ans
- ☐ 1. Kalamandalam Kalyanikutty Amma
  - ☐ 2. Mrinalini Sarabhai
  - ☐ 3. Yamini Krishnamurthy
  - ☒ 4. Shovana Narayan

Question Type : MCQ

Question ID : 264330134713

Option 1 ID : 264330527808

Option 2 ID : 264330527809

Option 3 ID : 264330527807

Option 4 ID : 264330527810

Status : Answered

Chosen Option : 4

Q.22 Which Indian state does not share border with Bangladesh as of 2022?

- Ans
- ☐ 1. Meghalaya
  - ☒ 2. Bihar
  - ☐ 3. West Bengal
  - ☐ 4. Mizoram

Question Type : MCQ

Question ID : 264330133919

Option 1 ID : 264330524702

Option 2 ID : 264330524699

Option 3 ID : 264330524701

Option 4 ID : 264330524700

Status : Answered

Chosen Option : 2

Q.23 Which among the following festivals is celebrated in Kerala?

- Ans
- ☐ 1. Bonalu
  - ☐ 2. Baisakhi
  - ☒ 3. Vishu
  - ☐ 4. Ambubachi

Question Type : MCQ

Question ID : 264330133909

Option 1 ID : 264330524659

Option 2 ID : 264330524662

Option 3 ID : 264330524661

Option 4 ID : 264330524660

Status : Answered

Chosen Option : 3

Q.24 \_\_\_\_\_ is the place of confluence for river Alaknanda and Dhauliganga.

- Ans
- ☒ 1. Nandaprayag
  - ☒ 2. Karnaprayag
  - ☒ 3. Vishnuprayag
  - ☒ 4. Rudraprayag

Question Type : MCQ  
Question ID : 264330137929  
Option 1 ID : 264330540324  
Option 2 ID : 264330540325  
Option 3 ID : 264330540323  
Option 4 ID : 264330540326  
Status : Answered  
Chosen Option : 2

Q.25 \_\_\_\_\_ refers to sale and purchase of government securities by RBI in the open market with the aim of influencing liquidity in the economy in the medium term.

- Ans
- ☒ 1. Marginal Standing Facility
  - ☒ 2. Credit Ceiling
  - ☒ 3. Open Market Operations
  - ☒ 4. Liquidity Adjustment Facility

Question Type : MCQ  
Question ID : 264330134718  
Option 1 ID : 264330527827  
Option 2 ID : 264330527829  
Option 3 ID : 264330527828  
Option 4 ID : 264330527830  
Status : Answered  
Chosen Option : 4

Section : English Language and Comprehension

Q.1 Select the most appropriate meaning of the bracketed idiom in the given sentence.

Let the bully have (a taste of his own medicine).

- Ans
- ☒ 1. A dangerous person pretending harmless
  - ☒ 2. A result that is still unclear and can go either way
  - ☒ 3. When you are mistreated the same way you mistreat others
  - ☒ 4. A visual presentation is far more descriptive than words

Question Type : MCQ  
Question ID : 264330136312  
Option 1 ID : 264330534023  
Option 2 ID : 264330534024  
Option 3 ID : 264330534026  
Option 4 ID : 264330534025  
Status : Answered  
Chosen Option : 3

Q.2 Select the most appropriate word for the given group of words.

A place where snakes are kept

- Ans
- ☒ 1. Apiary
  - ☒ 2. Hive
  - ☒ 3. Aviary
  - ☒ 4. Serpentarium

Question Type : MCQ  
 Question ID : 264330136653  
 Option 1 ID : 264330535332  
 Option 2 ID : 264330535334  
 Option 3 ID : 264330535333  
 Option 4 ID : 264330535331  
 Status : Answered  
 Chosen Option : 4

Q.3 Select the most appropriate antonym of the given word.

Misdemeanour

- Ans
- ☒ 1. Offence
  - ☒ 2. Amalgamation
  - ☒ 3. Obedience
  - ☒ 4. Gullible

Question Type : MCQ  
 Question ID : 264330136683  
 Option 1 ID : 264330535448  
 Option 2 ID : 264330535450  
 Option 3 ID : 264330535449  
 Option 4 ID : 264330535447  
 Status : Answered  
 Chosen Option : 3

Q.4 Select the most appropriate option to fill in the blank.  
 Different cells express different proteins depending on which promoters are either active or \_\_\_\_\_.

- Ans
- ☒ 1. dormant
  - ☒ 2. effectual
  - ☒ 3. productive
  - ☒ 4. lazy

Question Type : MCQ  
 Question ID : 264330134396  
 Option 1 ID : 264330526564  
 Option 2 ID : 264330526563  
 Option 3 ID : 264330526566  
 Option 4 ID : 264330526565  
 Status : Answered  
 Chosen Option : 1

**Q.5** Identify the segment that contains a grammatical error. If there is no error, select 'No error'

In practice rounds, my caddie, Greg, / and me works on my short/ game with a baseball glove.

- Ans**
- ☒ 1. and me works on my short
  - ☐ 2. No error
  - ☐ 3. game with a baseball glove.
  - ☐ 4. In practice rounds, my caddie, Greg,

Question Type : **MCQ**  
 Question ID : **264330136293**  
 Option 1 ID : **264330533952**  
 Option 2 ID : **264330533954**  
 Option 3 ID : **264330533953**  
 Option 4 ID : **264330533951**  
 Status : **Answered**  
 Chosen Option : 1

**Q.6** Identify the segment that contains a grammatical error. If there is no error, select 'No error'.

None of them, apart from Rohan / and Shilpa, had heard Mohan talk / about what happens that night.

- Ans**
- ☐ 1. No error
  - ☐ 2. and Shilpa, had heard Mohan talk
  - ☐ 3. None of them, apart from Rohan
  - ☒ 4. about what happens that night.

Question Type : **MCQ**  
 Question ID : **264330136691**  
 Option 1 ID : **264330535482**  
 Option 2 ID : **264330535480**  
 Option 3 ID : **264330535479**  
 Option 4 ID : **264330535481**  
 Status : **Answered**  
 Chosen Option : 4

**Q.7** Find the part of the given sentence that has an error in it. If there is no error, choose 'No error'.

Disease-carrying parasites is not picky about hosts.

- Ans**
- ☐ 1. about hosts.
  - ☐ 2. Disease-carrying parasites
  - ☐ 3. No error
  - ☒ 4. is not picky

Question Type : **MCQ**  
 Question ID : **264330135205**  
 Option 1 ID : **264330529749**  
 Option 2 ID : **264330529747**  
 Option 3 ID : **264330529750**  
 Option 4 ID : **264330529748**  
 Status : **Answered**  
 Chosen Option : 4

Q.8 Choose the word that means the same as the given word.  
Assail

- Ans ☒ 1. Perform  
☒ 2. Systematic  
☒ 3. Attack  
☒ 4. Shield

Question Type : MCQ  
Question ID : 264330134415  
Option 1 ID : 264330526638  
Option 2 ID : 264330526635  
Option 3 ID : 264330526636  
Option 4 ID : 264330526637  
Status : Answered  
Chosen Option : 4

Q.9 Improve the underlined part of the sentence. Choose 'No improvement' as an answer if the sentence is grammatically correct.

I like to hang my laundry outside in the suns to dry.

- Ans ☒ 1. No improvement  
☒ 2. sun to dried  
☒ 3. sun to dries  
☒ 4. sun to dry

Question Type : MCQ  
Question ID : 264330134801  
Option 1 ID : 264330528150  
Option 2 ID : 264330528147  
Option 3 ID : 264330528149  
Option 4 ID : 264330528148  
Status : Answered  
Chosen Option : 4

Q.10 Select the most appropriate option to fill in the blank.

I think he is a worthy \_\_\_\_\_ of the policy and a worthy adversary for the press.

- Ans ☒ 1. reciprocate  
☒ 2. placate  
☒ 3. educate  
☒ 4. advocate

Question Type : MCQ  
Question ID : 264330136297  
Option 1 ID : 264330533970  
Option 2 ID : 264330533968  
Option 3 ID : 264330533969  
Option 4 ID : 264330533967  
Status : Answered  
Chosen Option : 2

**Q.11** Select the word segment that substitutes (replaces) the bracketed word segment correctly and completes the sentence meaningfully. Select the option 'no correction required' if the sentence is correct as given.  
He looked around for Bunty or Vinay, (but either off) them were anywhere near him.

- Ans**
- ☒ 1. No correction required
  - ☒ 2. moreover neither of
  - ☒ 3. because either of
  - ☒ 4. but neither of

Question Type : MCQ  
Question ID : 264330136694  
Option 1 ID : 264330535494  
Option 2 ID : 264330535491  
Option 3 ID : 264330535493  
Option 4 ID : 264330535492  
Status : Answered  
Chosen Option : 4

**Q.12** A sentence has been given with a blank to be filled with an appropriate option. Choose the correct alternative.  
These were two Indian men who \_\_\_\_\_ hiding in the forest.

- Ans**
- ☒ 1. was
  - ☒ 2. has been
  - ☒ 3. had been
  - ☒ 4. have being

Question Type : MCQ  
Question ID : 264330134379  
Option 1 ID : 264330526500  
Option 2 ID : 264330526499  
Option 3 ID : 264330526502  
Option 4 ID : 264330526501  
Status : Answered  
Chosen Option : 3

**Q.13** Select the most appropriate synonym of the given word.

Disdain

- Ans**
- ☒ 1. Contempt
  - ☒ 2. Acceptance
  - ☒ 3. Admiration
  - ☒ 4. Withdraw

Question Type : MCQ  
Question ID : 264330136307  
Option 1 ID : 264330534006  
Option 2 ID : 264330534004  
Option 3 ID : 264330534005  
Option 4 ID : 264330534003  
Status : Answered  
Chosen Option : 1

Q.14 Select the most appropriate meaning of the given idiom.

A broth of a boy

- Ans
- ☒ 1. Not attached to someone
  - ☒ 2. To have specific food choices
  - ☒ 3. To behave foolishly
  - ☒ 4. A lively, energetic young person

Question Type : MCQ  
Question ID : 264330136659  
Option 1 ID : 264330535357  
Option 2 ID : 264330535356  
Option 3 ID : 264330535355  
Option 4 ID : 264330535358  
Status : Answered  
Chosen Option : 2

Q.15 Select the most appropriate antonym to substitute the bracketed word in the given sentence.

There is an unhealthy tendency to (subjugate) films to the dictates of raising public awareness.

- Ans
- ☒ 1. Colonize
  - ☒ 2. Modest
  - ☒ 3. Vanquish
  - ☒ 4. Liberate

Question Type : MCQ  
Question ID : 264330136310  
Option 1 ID : 264330534018  
Option 2 ID : 264330534015  
Option 3 ID : 264330534017  
Option 4 ID : 264330534016  
Status : Answered  
Chosen Option : 1

Q.16 Select the correctly spelt word.

- Ans
- ☒ 1. Porpos
  - ☒ 2. Propuse
  - ☒ 3. Purpose
  - ☒ 4. Purpos

Question Type : MCQ  
Question ID : 264330136313  
Option 1 ID : 264330534029  
Option 2 ID : 264330534028  
Option 3 ID : 264330534027  
Option 4 ID : 264330534030  
Status : Answered  
Chosen Option : 3

Q.17 Select the most appropriate option to fill in the blank.

At times he acted as viceroy in William's absence; at times he led the royal forces to \_\_\_\_\_ rebellions.

- Ans
- ☒ 1. scrutinize
  - ☒ 2. chastise
  - ☒ 3. compromise
  - ☒ 4. baptise

Question Type : MCQ  
Question ID : 264330136316  
Option 1 ID : 264330534039  
Option 2 ID : 264330534041  
Option 3 ID : 264330534042  
Option 4 ID : 264330534040  
Status : Answered  
Chosen Option : 2

Q.18 Choose the sentence with no spelling error.

- Ans
- ☒ 1. I am willing to consider the possibility
  - ☒ 2. I am willing to considerr the possibility
  - ☒ 3. I am wiling to consider the possibility
  - ☒ 4. I am willing to consider the possibility.

Question Type : MCQ  
Question ID : 264330134395  
Option 1 ID : 264330526560  
Option 2 ID : 264330526562  
Option 3 ID : 264330526561  
Option 4 ID : 264330526559  
Status : Answered  
Chosen Option : 1

Q.19 Select the most appropriate word for the given group of words.

Killing of one person by another

- Ans
- ☒ 1. Homicide
  - ☒ 2. Fratricide
  - ☒ 3. Genocide
  - ☒ 4. Filicide

Question Type : MCQ  
Question ID : 264330136306  
Option 1 ID : 264330533999  
Option 2 ID : 264330534002  
Option 3 ID : 264330534000  
Option 4 ID : 264330534001  
Status : Answered  
Chosen Option : 1



**Q.20** Select the word segment that substitutes (replaces) the bracketed word segment correctly and completes the sentence meaningfully. Select the option 'no correction required' if the sentence is correct as given.

It was a (easement to be far away) from that malicious old labyrinth with its stares and gossip.

- Ans**
- ☒ 1. help to be away
  - ☒ 2. relief to be away
  - ☒ 3. No correction required
  - ☒ 4. rest to be far

Question Type : MCQ  
Question ID : 264330136389  
Option 1 ID : 264330534323  
Option 2 ID : 264330534324  
Option 3 ID : 264330534326  
Option 4 ID : 264330534325  
Status : Answered  
Chosen Option : 2

### Comprehension:

In the following passage some words have been deleted. Fill in the blanks with the help of the alternatives given. Select the most appropriate option for each number.

English Ivy (1) \_\_\_\_\_ its poor reputation as a nuisance by its unparalleled ability to provide shade. By seamlessly covering the exterior of a building, it works as a natural (2) \_\_\_\_\_, blocking the sun and decreasing air conditioning costs. This means big savings for both building tenants and homeowners (3) \_\_\_\_\_. And it can happen quickly, too. Under the proper conditions, established English Ivy can grow to cover (4) \_\_\_\_\_ of roughly 500 square feet per year. Given that most homes have a roof measuring roughly 2000 square feet, ivy-friendly homeowners can rest assured that their roofs will be (5) \_\_\_\_\_ covered in about four years.

### SubQuestion No : 21

**Q.21** Select the most appropriate option to fill in blank number 1.

- Ans**
- ☒ 1. portrays
  - ☒ 2. follows
  - ☒ 3. betrays
  - ☒ 4. punishes

Question Type : MCQ  
Question ID : 264330136674  
Option 1 ID : 264330535411  
Option 2 ID : 264330535414  
Option 3 ID : 264330535412  
Option 4 ID : 264330535413  
Status : Answered  
Chosen Option : 1

### Comprehension:

In the following passage some words have been deleted. Fill in the blanks with the help of the alternatives given. Select the most appropriate option for each number.

English Ivy (1) \_\_\_\_\_ its poor reputation as a nuisance by its unparalleled ability to provide shade. By seamlessly covering the exterior of a building, it works as a natural (2) \_\_\_\_\_, blocking the sun and decreasing air conditioning costs. This means big savings for both building tenants and homeowners (3) \_\_\_\_\_. And it can happen quickly, too. Under the proper conditions, established English Ivy can grow to cover (4) \_\_\_\_\_ of roughly 500 square feet per year. Given that most homes have a roof measuring roughly 2000 square feet, ivy-friendly homeowners can rest assured that their roofs will be (5) \_\_\_\_\_ covered in about four years.

### SubQuestion No : 22

Q.22 Select the most appropriate option to fill in blank number 2.

- Ans
- ☒ 1. modulator
  - ☒ 2. postulator
  - ☒ 3. insulator
  - ☒ 4. regulator

Question Type : MCQ

Question ID : 264330136675

Option 1 ID : 264330535416

Option 2 ID : 264330535417

Option 3 ID : 264330535415

Option 4 ID : 264330535418

Status : Answered

Chosen Option : 3

### Comprehension:

In the following passage some words have been deleted. Fill in the blanks with the help of the alternatives given. Select the most appropriate option for each number.

English Ivy (1) \_\_\_\_\_ its poor reputation as a nuisance by its unparalleled ability to provide shade. By seamlessly covering the exterior of a building, it works as a natural (2) \_\_\_\_\_, blocking the sun and decreasing air conditioning costs. This means big savings for both building tenants and homeowners (3) \_\_\_\_\_. And it can happen quickly, too. Under the proper conditions, established English Ivy can grow to cover (4) \_\_\_\_\_ of roughly 500 square feet per year. Given that most homes have a roof measuring roughly 2000 square feet, ivy-friendly homeowners can rest assured that their roofs will be (5) \_\_\_\_\_ covered in about four years.

### SubQuestion No : 23

Q.23 Select the most appropriate option to fill in blank number 3.

- Ans
- ☒ 1. unlike
  - ☒ 2. likely
  - ☒ 3. dislike
  - ☒ 4. alike

Question Type : MCQ

Question ID : 264330136676

Option 1 ID : 264330535422

Option 2 ID : 264330535419

Option 3 ID : 264330535420

Option 4 ID : 264330535421

Status : Answered

Chosen Option : 4

### Comprehension:

In the following passage some words have been deleted. Fill in the blanks with the help of the alternatives given. Select the most appropriate option for each number.

English Ivy (1) \_\_\_\_\_ its poor reputation as a nuisance by its unparalleled ability to provide shade. By seamlessly covering the exterior of a building, it works as a natural (2) \_\_\_\_\_, blocking the sun and decreasing air conditioning costs. This means big savings for both building tenants and homeowners (3) \_\_\_\_\_. And it can happen quickly, too. Under the proper conditions, established English Ivy can grow to cover (4) \_\_\_\_\_ of roughly 500 square feet per year. Given that most homes have a roof measuring roughly 2000 square feet, ivy-friendly homeowners can rest assured that their roofs will be (5) \_\_\_\_\_ covered in about four years.

### SubQuestion No : 24

Q.24 Select the most appropriate option to fill in blank number 4.

- Ans
- ☒ 1. a lake
  - ☒ 2. an area
  - ☒ 3. a surface
  - ☒ 4. a wall

Question Type : MCQ

Question ID : 264330136677

Option 1 ID : 264330535424

Option 2 ID : 264330535426

Option 3 ID : 264330535423

Option 4 ID : 264330535425

Status : Answered

Chosen Option : 4

### Comprehension:

In the following passage some words have been deleted. Fill in the blanks with the help of the alternatives given. Select the most appropriate option for each number.

English Ivy (1) \_\_\_\_\_ its poor reputation as a nuisance by its unparalleled ability to provide shade. By seamlessly covering the exterior of a building, it works as a natural (2) \_\_\_\_\_, blocking the sun and decreasing air conditioning costs. This means big savings for both building tenants and homeowners (3) \_\_\_\_\_. And it can happen quickly, too. Under the proper conditions, established English Ivy can grow to cover (4) \_\_\_\_\_ of roughly 500 square feet per year. Given that most homes have a roof measuring roughly 2000 square feet, ivy-friendly homeowners can rest assured that their roofs will be (5) \_\_\_\_\_ covered in about four years.

### SubQuestion No : 25

Q.25 Select the most appropriate option to fill in blank number 5.

- Ans
- ☒ 1. obsoletely
  - ☒ 2. completely
  - ☒ 3. incompletely
  - ☒ 4. repletely

Question Type : MCQ

Question ID : 264330136678

Option 1 ID : 264330535428

Option 2 ID : 264330535427

Option 3 ID : 264330535430

Option 4 ID : 264330535429

Status : Answered

Chosen Option : 2