

Multi Tasking Non Technical Staff and Havaladar CBIC and CBN Examination 2022

Roll Number	
Candidate Name	
Venue Name	ION Digital Zone IDZ KIOT-Campus
Exam Date	16/06/2023
Exam Time	3:30 PM - 5:00 PM
Subject	MTS Non Tech Havaladar CBIC and CBN Examination 2022

Section : Numerical and Mathematical Ability

Q.1 The length of a cuboid is 10 cm. If the breadth of the cuboid is half of its length and height of the cuboid is twice of its length, then what is the lateral surface area of the cuboid?

- Ans**
- ✓ 1. 600 cm^2
 - ✗ 2. 500 cm^2
 - ✗ 3. 720 cm^2
 - ✗ 4. 560 cm^2

Question Type : **MCQ**

Question ID : **264330139601**

Option 1 ID : **264330546822**

Option 2 ID : **264330546819**

Option 3 ID : **264330546821**

Option 4 ID : **264330546820**

Status : **Not Answered**

Chosen Option : --

Q.2 What will be the HCF of 54 and 48?

- Ans**
- ✗ 1. 4
 - ✗ 2. 7
 - ✓ 3. 6
 - ✗ 4. 8

Question Type : **MCQ**

Question ID : **264330140778**

Option 1 ID : **264330551462**

Option 2 ID : **264330551461**

Option 3 ID : **264330551459**

Option 4 ID : **264330551460**

Status : **Answered**

Chosen Option : **3**

Test Prime

**ALL EXAMS,
ONE SUBSCRIPTION**



70,000+
Mock Tests



**Personalised
Report Card**



**Unlimited
Re-Attempt**



600+
Exam Covered



**Previous Year
Papers**



**500%
Refund**



ATTEMPT FREE MOCK NOW

Q.3 Sachin is 12.5 percent less efficient than Rohit. If Sachin alone can finish a work in 24 days, then in how many days will Rohit alone finish the same work?

- Ans**
- ☒ 1. 16 days
 - ☒ 2. 21 days
 - ☒ 3. 18 days
 - ☒ 4. 20 days

Question Type : **MCQ**
 Question ID : **264330139911**
 Option 1 ID : **264330548023**
 Option 2 ID : **264330548025**
 Option 3 ID : **264330548024**
 Option 4 ID : **264330548026**
 Status : **Not Answered**
 Chosen Option : --

Q.4 The angles of a triangle are in the ratio 2 : 3 : 4. What is the largest angle of the triangle?

- Ans**
- ☒ 1. 80 degree
 - ☒ 2. 100 degree
 - ☒ 3. 90 degree
 - ☒ 4. 120 degree

Question Type : **MCQ**
 Question ID : **264330139899**
 Option 1 ID : **264330547976**
 Option 2 ID : **264330547977**
 Option 3 ID : **264330547975**
 Option 4 ID : **264330547978**
 Status : **Answered**
 Chosen Option : **1**

Q.5 A person covers first 30 km in 60 minutes and next 40 km in 30 minutes. What is his average speed for the whole journey?

- Ans**
- ☒ 1. $(140/3)$ km/hr
 - ☒ 2. 30 km/hr
 - ☒ 3. $(160/3)$ km/hr
 - ☒ 4. 60 km/hr

Question Type : **MCQ**
 Question ID : **264330139630**
 Option 1 ID : **264330546936**
 Option 2 ID : **264330546935**
 Option 3 ID : **264330546937**
 Option 4 ID : **264330546938**
 Status : **Not Answered**
 Chosen Option : --

Q.6

What is the value of $\frac{6}{13} \left[\frac{29}{12} + \frac{4}{18} \left(\frac{16}{12} + \frac{18}{9} \right) - \frac{46}{15} \div \frac{23}{45} \right]$?

- Ans
- ☒ 1. $-312/137$
 - ☒ 2. $-307/234$
 - ☒ 3. $-294/117$
 - ☒ 4. $-207/119$

Question Type : MCQ

Question ID : 264330139968

Option 1 ID : 264330548252

Option 2 ID : 264330548251

Option 3 ID : 264330548254

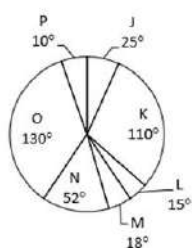
Option 4 ID : 264330548253

Status : Answered

Chosen Option : 2

Q.7

The pie chart given below shows the expenditure incurred by a person on 7 articles. The total expenditure of all these 7 articles is 1800. Expenditure incurred on a particular article is shown in terms of degree with respect to the total expenditure incurred in all these 7 articles.



Expenditure incurred on article L is what percent of expenditure incurred on article P?

- Ans
- ☒ 1. 125 percent
 - ☒ 2. 100 percent
 - ☒ 3. 75 percent
 - ☒ 4. 150 percent

Question Type : MCQ

Question ID : 264330140582

Option 1 ID : 264330550681

Option 2 ID : 264330550682

Option 3 ID : 264330550679

Option 4 ID : 264330550680

Status : Answered

Chosen Option : 4

Q.8 The ratio of spirit and water in two mixtures of 46 litres and 50 litres is 11:12 and 2:3 respectively. Both the mixtures are mixed. Find the ratio of the spirit and water in the new mixture.

- Ans**
- ☒ 1. 8:9
 - ☒ 2. 7:9
 - ☒ 3. 5:6
 - ☒ 4. 3:7

Question Type : **MCQ**

Question ID : **264330138416**

Option 1 ID : **264330542274**

Option 2 ID : **264330542272**

Option 3 ID : **264330542273**

Option 4 ID : **264330542271**

Status : **Answered**

Chosen Option : **2**

Q.9 35 percent of marked price is equal to 40 percent of cost price. If no discount is given, then what will be the profit percentage?

- Ans**
- ☒ 1. 12.5 percent
 - ☒ 2. 25 percent
 - ☒ 3. 14.28 percent
 - ☒ 4. 16.66 percent

Question Type : **MCQ**

Question ID : **264330140623**

Option 1 ID : **264330550842**

Option 2 ID : **264330550841**

Option 3 ID : **264330550840**

Option 4 ID : **264330550839**

Status : **Answered**

Chosen Option : **3**

Q.10 The simple interest on a sum for 5 years is Rs. 7590. The rate of interest for the first 3 years is 6 percent per annum and for the next 2 years is 14 percent per annum. What is the sum?

- Ans**
- ☒ 1. Rs. 17000
 - ☒ 2. Rs. 15000
 - ☒ 3. Rs. 14000
 - ☒ 4. Rs. 16500

Question Type : **MCQ**

Question ID : **264330139942**

Option 1 ID : **264330548148**

Option 2 ID : **264330548150**

Option 3 ID : **264330548149**

Option 4 ID : **264330548147**

Status : **Answered**

Chosen Option : **4**

Q.11 The difference between cost price and selling price is Rs.341. If profit percentage is 22 percent, then what is the selling price?

- Ans**
- ☒ 1. Rs.1972
 - ☒ 2. Rs.1752
 - ☒ 3. Rs.1891
 - ☒ 4. Rs.1858

Question Type : **MCQ**

Question ID : **264330139595**

Option 1 ID : **264330546796**

Option 2 ID : **264330546797**

Option 3 ID : **264330546795**

Option 4 ID : **264330546798**

Status : **Answered**

Chosen Option : **3**

Q.12 A man bought 30 mangoes for a rupee. How many mangoes had he sold for a rupee so that there is a loss of 40 percent?

- Ans**
- ☒ 1. 50
 - ☒ 2. 40
 - ☒ 3. 45
 - ☒ 4. 60

Question Type : **MCQ**

Question ID : **264330139594**

Option 1 ID : **264330546793**

Option 2 ID : **264330546792**

Option 3 ID : **264330546791**

Option 4 ID : **264330546794**

Status : **Not Answered**

Chosen Option : **--**

Q.13 If $A = 8X$ and $B = 6X$, then A is how much percentage more than B?

- Ans**
- ☒ 1. 50 percent
 - ☒ 2. 66.6 percent
 - ☒ 3. 100 percent
 - ☒ 4. 33.33 percent

Question Type : **MCQ**

Question ID : **264330139613**

Option 1 ID : **264330546869**

Option 2 ID : **264330546868**

Option 3 ID : **264330546870**

Option 4 ID : **264330546867**

Status : **Answered**

Chosen Option : **4**

Q.14 What will the curved surface area of cylinder with radius 10 cm and height 20 cm? (use $\pi = 3.14$)

- Ans
- ☒ 1. 1345 cm²
 - ☒ 2. 1453 cm²
 - ☒ 3. 1256 cm²
 - ☒ 4. 1234 cm²

Question Type : MCQ

Question ID : 264330140820

Option 1 ID : 264330551630

Option 2 ID : 264330551629

Option 3 ID : 264330551628

Option 4 ID : 264330551627

Status : Not Answered

Chosen Option : --

Q.15 A man takes 20 hours to go to a place and come back by walking both the ways. He could have saved 4 hours by riding both the ways. The distance covered in the whole journey is 36 miles. Find the average speed for the whole journey if he goes by walking and comes back by riding.

- Ans
- ☒ 1. 2 miles/hr
 - ☒ 2. 1 miles/hr
 - ☒ 3. 4 miles/hr
 - ☒ 4. 3 miles/hr

Question Type : MCQ

Question ID : 264330140780

Option 1 ID : 264330551467

Option 2 ID : 264330551470

Option 3 ID : 264330551469

Option 4 ID : 264330551468

Status : Not Answered

Chosen Option : --

Q.16 A principal of Rs. 16000 is invested at simple interest for 4 years. If the per annum rate of interest is 20 percent, then what will be the amount after 4 years?

- Ans
- ☒ 1. Rs. 23480
 - ☒ 2. Rs. 28800
 - ☒ 3. Rs. 26480
 - ☒ 4. Rs. 30420

Question Type : MCQ

Question ID : 264330139941

Option 1 ID : 264330548143

Option 2 ID : 264330548146

Option 3 ID : 264330548144

Option 4 ID : 264330548145

Status : Answered

Chosen Option : 2

Q.17 Find the fourth proportion to the numbers 49, 51 and 98.

- Ans ☒ 1. 96
☒ 2. 102
☒ 3. 112
☒ 4. 90

Question Type : MCQ

Question ID : 264330140182

Option 1 ID : 264330549110

Option 2 ID : 264330549107

Option 3 ID : 264330549108

Option 4 ID : 264330549109

Status : Answered

Chosen Option : 2

Q.18 The table given below shows the marks obtained by boys and girls in different subjects.

Subjects	Boys	Girls
A	60	120
B	80	100
C	140	40
D	120	60
E	100	40

L1 = The difference between marks obtained by boys and girls in all subjects.

L2 = The value of average of marks obtained by boys in C, D and E.

What is the value of $(L1 - L2)$?

- Ans ☒ 1. 40
☒ 2. 20
☒ 3. 10
☒ 4. 50

Question Type : MCQ

Question ID : 264330140551

Option 1 ID : 264330550560

Option 2 ID : 264330550562

Option 3 ID : 264330550561

Option 4 ID : 264330550559

Status : Answered

Chosen Option : 2

Q.19 What is the HCF of 513 and 1017?

- Ans
- ☒ 1. 15
 - ☒ 2. 8
 - ☒ 3. 9
 - ☒ 4. 13

Question Type : MCQ
 Question ID : 264330140228
 Option 1 ID : 264330549294
 Option 2 ID : 264330549292
 Option 3 ID : 264330549291
 Option 4 ID : 264330549293
 Status : Answered
 Chosen Option : 3

Q.20 Z1 and Z2 together complete a work in 15 days. Z2 alone can complete the same work in 30 days. They took Rs. 2000 to complete the work together. What will be the share of Z1?

- Ans
- ☒ 1. Rs. 1500
 - ☒ 2. Rs. 2000
 - ☒ 3. Rs. 1000
 - ☒ 4. Rs. 500

Question Type : MCQ
 Question ID : 264330140533
 Option 1 ID : 264330550488
 Option 2 ID : 264330550489
 Option 3 ID : 264330550487
 Option 4 ID : 264330550490
 Status : Answered
 Chosen Option : 3

Section : Reasoning Ability and Problem Solving

Q.1 Study the given pattern carefully and select the number that can replace the question mark (?) in it.

First row- 15, 12, 180
 Second row- 18, 13, 234
 Third row- 7, 32, ?

- Ans
- ☒ 1. 215
 - ☒ 2. 179
 - ☒ 3. 308
 - ☒ 4. 224

Question Type : MCQ
 Question ID : 264330140087
 Option 1 ID : 264330548728
 Option 2 ID : 264330548730
 Option 3 ID : 264330548729
 Option 4 ID : 264330548727
 Status : Answered
 Chosen Option : 4

Q.2 Three Statements are given followed by two conclusions numbered I and II. Assuming the statements to be true, even if they seem to be at variance with commonly known facts, decide which of the conclusions logically follow(s) from the statements.

Statements:

Some if's are but's.

All but's are so's.

No so is a then.

Conclusions:

I. All if's being then is a possibility.

II. All then's being if is a possibility.

Ans

- ✓ 1. Only conclusion II follows
- ✗ 2. Neither conclusion I nor II follows
- ✗ 3. Both conclusions I and II follow
- ✗ 4. Only conclusion I follows

Question Type : **MCQ**

Question ID : **264330140001**

Option 1 ID : **264330548384**

Option 2 ID : **264330548386**

Option 3 ID : **264330548385**

Option 4 ID : **264330548383**

Status : **Answered**

Chosen Option : **1**

Q.3 Two Statements are given followed by two conclusions numbered I and II. Assuming the statements to be true, even if they seem to be at variance with commonly known facts, decide which of the conclusions logically follow(s) from the statements.

Statements:

All rings are round.

No round is a square.

Conclusions:

I. No ring is square.

II. No square is round.

Ans

- ✗ 1. Neither conclusion I nor II follows
- ✓ 2. Both conclusions I and II follow
- ✗ 3. Only conclusion II follows
- ✗ 4. Only conclusion I follows

Question Type : **MCQ**

Question ID : **264330140000**

Option 1 ID : **264330548382**

Option 2 ID : **264330548381**

Option 3 ID : **264330548380**

Option 4 ID : **264330548379**

Status : **Answered**

Chosen Option : **2**

Q.4 If a mirror is placed on the line AB, then out of the option figures which figure will be the right image of the question figure?



Ans

✗ 1.



✗ 2.



✗ 3.



✓ 4.



Question Type : MCQ

Question ID : 264330139546

Option 1 ID : 264330546599

Option 2 ID : 264330546601

Option 3 ID : 264330546602

Option 4 ID : 264330546600

Status : Answered

Chosen Option : 4

Q.5 After interchanging the given two signs, what will be the value of the given equation?

$$+ \text{ and } - ; 12 + 8 \times 6 \div 3 - 11$$

Ans ☒ 1. 7

☐ 2. 5

☐ 3. 9

☐ 4. 8

Question Type : MCQ

Question ID : 264330139543

Option 1 ID : 264330546588

Option 2 ID : 264330546590

Option 3 ID : 264330546589

Option 4 ID : 264330546587

Status : Answered

Chosen Option : 1

Q.6 Four students M, N, O, and P are standing in a queue in a restaurant to give their orders. M is not behind O but behind P. O does not give the last order. Who is standing in front of the queue?

Ans ☒ 1. P

☐ 2. M

☐ 3. N

☐ 4. O

Question Type : MCQ

Question ID : 264330140079

Option 1 ID : 264330548698

Option 2 ID : 264330548695

Option 3 ID : 264330548696

Option 4 ID : 264330548697

Status : Not Answered

Chosen Option : --

Q.7 In the following question, select the missing number of the given series.

283, 295, 281, 297, 279, ?

Ans ☐ 1. 294

☐ 2. 298

☒ 3. 299

☐ 4. 291

Question Type : MCQ

Question ID : 264330139560

Option 1 ID : 264330546656

Option 2 ID : 264330546655

Option 3 ID : 264330546657

Option 4 ID : 264330546658

Status : Answered

Chosen Option : 3

Q.8 Select the option that is related to the sixth number in the same way as the first number is related to the second number and third number is related to fourth number.

13 : 168 :: 16 : 255 :: ? : 143

- Ans**
- ☒ 1. 14
 - ☒ 2. 15
 - ☒ 3. 11
 - ☒ 4. 12

Question Type : **MCQ**

Question ID : **264330139541**

Option 1 ID : **264330546581**

Option 2 ID : **264330546582**

Option 3 ID : **264330546579**

Option 4 ID : **264330546580**

Status : **Answered**

Chosen Option : **4**

Q.9 Select the option that is related to the fifth term in the same way as the second term is related to the first term and fourth term is related to third term.

GT16 : KW32 :: MQ29 : QT45 :: VA16 : ?

- Ans**
- ☒ 1. ZB32
 - ☒ 2. YC32
 - ☒ 3. ZD32
 - ☒ 4. YD32

Question Type : **MCQ**

Question ID : **264330138583**

Option 1 ID : **264330542941**

Option 2 ID : **264330542942**

Option 3 ID : **264330542939**

Option 4 ID : **264330542940**

Status : **Answered**

Chosen Option : **3**

Q.10 Words given on the left side of (::) are related with each other by some Logic/Rule/Relation. Select the missing word/word pair on the right side of (::) from the given alternatives based on the same Logic/Rule/Relation.

Kohima : Nagaland :: ?

- Ans**
- ☒ 1. Shillong : Meghalaya
 - ☒ 2. Uttar Pradesh : Lucknow
 - ☒ 3. Sikkim : Gangtok
 - ☒ 4. Bihar : Patna

Question Type : **MCQ**

Question ID : **264330139530**

Option 1 ID : **264330546537**

Option 2 ID : **264330546538**

Option 3 ID : **264330546535**

Option 4 ID : **264330546536**

Status : **Answered**

Chosen Option : **1**

Q.11 Usha is older than Savitri. Suruchi is younger than Nisha but older than Usha. Taniya is older to Ritu, but younger than Savitri. Manisha is the youngest. Who is the eldest among them?

- Ans**
- ☒ 1. Taniya
 - ☒ 2. Usha
 - ☒ 3. Manisha
 - ☒ 4. Nisha

Question Type : **MCQ**
 Question ID : **264330138775**
 Option 1 ID : **264330543709**
 Option 2 ID : **264330543708**
 Option 3 ID : **264330543710**
 Option 4 ID : **264330543707**
 Status : **Answered**
 Chosen Option : **4**

Q.12 Which two numbers should be interchanged to make the given equation correct?

$$96 \div 3 - 24 + 16 \times 8 = 36$$

- Ans**
- ☒ 1. 8 and 3
 - ☒ 2. 24 and 3
 - ☒ 3. 96 and 24
 - ☒ 4. 8 and 16

Question Type : **MCQ**
 Question ID : **264330140468**
 Option 1 ID : **264330550254**
 Option 2 ID : **264330550253**
 Option 3 ID : **264330550251**
 Option 4 ID : **264330550252**
 Status : **Answered**
 Chosen Option : **1**

Q.13 Which of the following letter will replace the question mark (?) in the given series?

T, Q, N, K, H, ?

- Ans**
- ☒ 1. R
 - ☒ 2. E
 - ☒ 3. O
 - ☒ 4. P

Question Type : **MCQ**
 Question ID : **264330140011**
 Option 1 ID : **264330548423**
 Option 2 ID : **264330548425**
 Option 3 ID : **264330548426**
 Option 4 ID : **264330548424**
 Status : **Answered**
 Chosen Option : **2**

Q.14 Which answer figure will complete the pattern in the question figure?



Ans

✗ 1.



✓ 2.



✗ 3.



✗ 4.



Question Type : MCQ

Question ID : 264330139567

Option 1 ID : 264330546683

Option 2 ID : 264330546684

Option 3 ID : 264330546685

Option 4 ID : 264330546686

Status : Answered

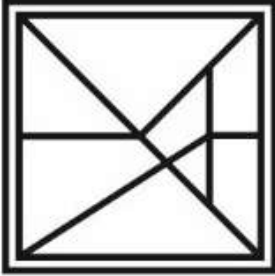
Chosen Option : 2

Q.15 Select the option figure in which the given figure is embedded. (rotation is NOT allowed)

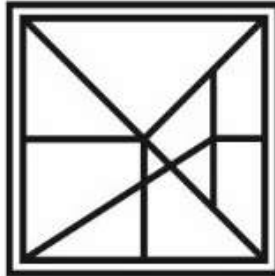


Ans

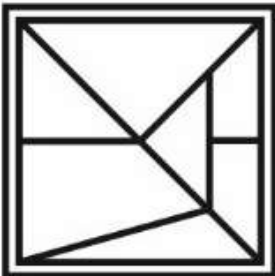
✗ 1.



✓ 2.



✗ 3.



✗ 4.



Question Type : MCQ

Question ID : 264330139565

Option 1 ID : 264330546675

Option 2 ID : 264330546677

Option 3 ID : 264330546678

Option 4 ID : 264330546676

Status : Answered

Chosen Option : 2

Q.16 In a certain code language, 'RUDE' is written as 'EDUR48'. How will 'SOUP' be written in that language?

- Ans
- ☒ 1. PUPS81
 - ☒ 2. PUOS71
 - ☒ 3. PUPS71
 - ☒ 4. PUOS81

Question Type : MCQ
Question ID : 264330139995
Option 1 ID : 264330548362
Option 2 ID : 264330548359
Option 3 ID : 264330548361
Option 4 ID : 264330548360
Status : Answered
Chosen Option : 2

Q.17 Which of the following numbers will replace the question mark (?) in the given series?

14, 9, 4, -1, -6, ?

- Ans
- ☒ 1. -8
 - ☒ 2. -14
 - ☒ 3. -23
 - ☒ 4. -11

Question Type : MCQ
Question ID : 264330140423
Option 1 ID : 264330550074
Option 2 ID : 264330550071
Option 3 ID : 264330550072
Option 4 ID : 264330550073
Status : Answered
Chosen Option : 4

Q.18 In a certain code language, 'DUKE' is coded as 'ZQGA'. What is the code for 'EXIT' in that code language?

- Ans
- ☒ 1. ATEQ
 - ☒ 2. ATEP
 - ☒ 3. AUFQ
 - ☒ 4. AUEP

Question Type : MCQ
Question ID : 264330140056
Option 1 ID : 264330548606
Option 2 ID : 264330548605
Option 3 ID : 264330548604
Option 4 ID : 264330548603
Status : Answered
Chosen Option : 2

Q.19 Eight boys B1, B2, B3, B4, B5, B6, B7 and B8 are sitting around a circular table facing opposite to the centre (not necessarily in the same order). B1 is third to the right of B3. B5 is second to the left of B3. B2 is fourth to the right of B4. B4 is second to the right of B1. B8 is third to the left of B6. B6 is not the immediate neighbour of B1. Who is third to right of B7?

- Ans**
- ☒ 1. B3
 - ☒ 2. B5
 - ☒ 3. B7
 - ☒ 4. B4

Question Type : MCQ
Question ID : 264330140983
Option 1 ID : 264330552282
Option 2 ID : 264330552279
Option 3 ID : 264330552281
Option 4 ID : 264330552280
Status : Answered
Chosen Option : 4

Q.20 In a certain code language, 'VRH' is written as 'TPJ'. How will 'LYS' be written in that language?

- Ans**
- ☒ 1. JUW
 - ☒ 2. JUT
 - ☒ 3. JWU
 - ☒ 4. WUJ

Question Type : MCQ
Question ID : 264330137588
Option 1 ID : 264330538959
Option 2 ID : 264330538962
Option 3 ID : 264330538960
Option 4 ID : 264330538961
Status : Answered
Chosen Option : 3

Section : General Awareness

Q.1 Article 40 of the Indian constitution, "Organisation of village panchayats", is a _____.

- Ans**
- ☒ 1. Directive Principles of State Policy
 - ☒ 2. Fundamental Duty
 - ☒ 3. Legal Right
 - ☒ 4. Fundamental Right

Question Type : MCQ
Question ID : 264330140671
Option 1 ID : 264330551034
Option 2 ID : 264330551031
Option 3 ID : 264330551033
Option 4 ID : 264330551032
Status : Answered
Chosen Option : 1

Q.2 The day to day condition of the atmosphere at a place with respect to the temperature humidity, rainfall, wind speed etc. is called _____ at that place.

- Ans**
- ☒ 1. climate
 - ☒ 2. weather
 - ☒ 3. environment
 - ☒ 4. ecology

Question Type : **MCQ**
 Question ID : **264330139663**
 Option 1 ID : **264330547067**
 Option 2 ID : **264330547069**
 Option 3 ID : **264330547068**
 Option 4 ID : **264330547070**
 Status : **Answered**
 Chosen Option : **2**

Q.3 The disease-causing microbes are called _____ .

- Ans**
- ☒ 1. toxins
 - ☒ 2. pathogens
 - ☒ 3. decomposers
 - ☒ 4. antibodies

Question Type : **MCQ**
 Question ID : **264330139687**
 Option 1 ID : **264330547163**
 Option 2 ID : **264330547165**
 Option 3 ID : **264330547164**
 Option 4 ID : **264330547166**
 Status : **Answered**
 Chosen Option : **2**

Q.4 The substances which reduce friction are called _____ .

- Ans**
- ☒ 1. fluids
 - ☒ 2. magnets
 - ☒ 3. springs
 - ☒ 4. lubricants

Question Type : **MCQ**
 Question ID : **264330140283**
 Option 1 ID : **264330549512**
 Option 2 ID : **264330549513**
 Option 3 ID : **264330549514**
 Option 4 ID : **264330549511**
 Status : **Answered**
 Chosen Option : **4**

Q.5 In 1927, B.R Ambedkar started which movement with Dalits?

- Ans
- ☐ 1. Self-respect movement
 - ☐ 2. Equal Pay movement
 - ☐ 3. Independence Movement
 - ☒ 4. Temple entry movement

Question Type : MCQ

Question ID : 264330139889

Option 1 ID : 264330547938

Option 2 ID : 264330547937

Option 3 ID : 264330547935

Option 4 ID : 264330547936

Status : Answered

Chosen Option : 1

Q.6 "Solung" is a festival celebrated by the Adi Tribe of which state?

- Ans
- ☐ 1. Himachal Pradesh
 - ☐ 2. Madhya Pradesh
 - ☒ 3. Arunachal Pradesh
 - ☐ 4. Andhra Pradesh

Question Type : MCQ

Question ID : 264330139699

Option 1 ID : 264330547214

Option 2 ID : 264330547213

Option 3 ID : 264330547212

Option 4 ID : 264330547211

Status : Answered

Chosen Option : 3

Q.7 Which river flows between the Vindhya and Satpura ranges?

- Ans
- ☒ 1. Narmada
 - ☐ 2. Godavari
 - ☐ 3. Son
 - ☐ 4. Mahanadi

Question Type : MCQ

Question ID : 264330140686

Option 1 ID : 264330551093

Option 2 ID : 264330551092

Option 3 ID : 264330551091

Option 4 ID : 264330551094

Status : Answered

Chosen Option : 1

Q.8 The Virupaksha Temple is situated at _____.

- Ans
- ☒ 1. Surat
 - ☒ 2. Sanchi
 - ☒ 3. Hampi
 - ☒ 4. Jaipur

Question Type : MCQ
 Question ID : 264330139725
 Option 1 ID : 264330547317
 Option 2 ID : 264330547315
 Option 3 ID : 264330547316
 Option 4 ID : 264330547318
 Status : Answered
 Chosen Option : 3

Q.9 Which country is the second largest producer of crude steel in the world for FY 2020-21?

- Ans
- ☒ 1. China
 - ☒ 2. India
 - ☒ 3. Australia
 - ☒ 4. Japan

Question Type : MCQ
 Question ID : 264330140660
 Option 1 ID : 264330550990
 Option 2 ID : 264330550988
 Option 3 ID : 264330550989
 Option 4 ID : 264330550987
 Status : Answered
 Chosen Option : 2

Q.10 Which famous Indian musician is associated with musical instrument Santoor?

- Ans
- ☒ 1. Ustad Amjad Ali Khan
 - ☒ 2. Ustad Zakir Hussain
 - ☒ 3. Pandit Shiv Kumar Sharma
 - ☒ 4. Hariprasad Chaurasia

Question Type : MCQ
 Question ID : 264330140744
 Option 1 ID : 264330551326
 Option 2 ID : 264330551325
 Option 3 ID : 264330551324
 Option 4 ID : 264330551323
 Status : Answered
 Chosen Option : 3

Q.11 Under the Delhi Sultanate, a religious tax _____ was imposed on the wealthy and rich Muslims in India.

- Ans
- ☒ 1. Firuz
 - ☒ 2. Mamluk
 - ☒ 3. Zakat
 - ☒ 4. Kismet

Question Type : MCQ
Question ID : 264330140715
Option 1 ID : 264330551208
Option 2 ID : 264330551210
Option 3 ID : 264330551209
Option 4 ID : 264330551207
Status : Answered
Chosen Option : 2

Q.12 How many silver medals won by India in Commonwealth Games 2022?

- Ans
- ☒ 1. 20
 - ☒ 2. 16
 - ☒ 3. 18
 - ☒ 4. 14

Question Type : MCQ
Question ID : 264330140270
Option 1 ID : 264330549462
Option 2 ID : 264330549460
Option 3 ID : 264330549461
Option 4 ID : 264330549459
Status : Not Answered
Chosen Option : --

Q.13 The term 'Kammakaras' in ancient times is related to _____.

- Ans
- ☒ 1. Landless agricultural labourers
 - ☒ 2. Craftsmen
 - ☒ 3. Tax collecting officer
 - ☒ 4. Goldsmith

Question Type : MCQ
Question ID : 264330139694
Option 1 ID : 264330547192
Option 2 ID : 264330547193
Option 3 ID : 264330547191
Option 4 ID : 264330547194
Status : Answered
Chosen Option : 3

Q.14 Which among the following parts of the Indian Constitution deals with 'The Panchayats'?

- Ans
- ☐ 1. X
 - ☒ 2. IX
 - ☐ 3. III
 - ☐ 4. VI

Question Type : MCQ

Question ID : 264330140363

Option 1 ID : 264330549833

Option 2 ID : 264330549831

Option 3 ID : 264330549834

Option 4 ID : 264330549832

Status : Answered

Chosen Option : 2

Q.15 The Biological Diversity (Amendment) Bill, 2021 is related to ____ Ministry of India.

- Ans
- ☐ 1. Agriculture & Farmers Welfare
 - ☐ 2. Earth Sciences
 - ☐ 3. Corporate Affairs
 - ☒ 4. Environment, Forests & Climate Change

Question Type : MCQ

Question ID : 264330140906

Option 1 ID : 264330551972

Option 2 ID : 264330551974

Option 3 ID : 264330551973

Option 4 ID : 264330551971

Status : Answered

Chosen Option : 4

Q.16 Which of the following is an important steel producing centres in India?

- I. Bhilai
- II. Jamshedpur
- III. Rourkela

- Ans
- ☐ 1. I and II only
 - ☐ 2. I and III only
 - ☐ 3. II and III only
 - ☒ 4. I, II and III

Question Type : MCQ

Question ID : 264330140898

Option 1 ID : 264330551940

Option 2 ID : 264330551939

Option 3 ID : 264330551941

Option 4 ID : 264330551942

Status : Answered

Chosen Option : 4

Q.17 Which freedom fighter is known as the mother of the Indian revolution?

- Ans
- ☐ 1. Sarojini Naidu
 - ☐ 2. Annie Besant
 - ☒ 3. Madam Bhikaji Cama
 - ☐ 4. Aruna Asaf Ali

Question Type : MCQ

Question ID : 264330140667

Option 1 ID : 264330551015

Option 2 ID : 264330551016

Option 3 ID : 264330551017

Option 4 ID : 264330551018

Status : Answered

Chosen Option : 3

Q.18 Small Industries Development Bank of India (SIDBI) is regulated by _____.

- Ans
- ☐ 1. State Bank of India
 - ☐ 2. Indian Bank
 - ☒ 3. Reserve Bank of India
 - ☐ 4. ICICI Bank

Question Type : MCQ

Question ID : 264330140750

Option 1 ID : 264330551349

Option 2 ID : 264330551348

Option 3 ID : 264330551350

Option 4 ID : 264330551347

Status : Answered

Chosen Option : 3

Q.19 Which of the following states does NOT share border with Nepal?

- Ans
- ☐ 1. Uttarakhand
 - ☐ 2. Uttar Pradesh
 - ☐ 3. Bihar
 - ☒ 4. Himachal Pradesh

Question Type : MCQ

Question ID : 264330140286

Option 1 ID : 264330549525

Option 2 ID : 264330549523

Option 3 ID : 264330549524

Option 4 ID : 264330549526

Status : Answered

Chosen Option : 4

Q.20 Provisions related to the Municipalities are mentioned under which part of the Indian constitution?

- Ans** ☒ 1. Part IXA
☒ 2. Part VII
☒ 3. Part V
☒ 4. Part XII

Question Type : **MCQ**
 Question ID : **264330139759**
 Option 1 ID : **264330547453**
 Option 2 ID : **264330547452**
 Option 3 ID : **264330547451**
 Option 4 ID : **264330547454**
 Status : **Answered**
 Chosen Option : **1**

Q.21 Which among the following plant kingdoms are divided into dicotyledons and monocotyledons?

- Ans** ☒ 1. Angiosperms
☒ 2. Pteridophytes
☒ 3. Bryophytes
☒ 4. Gymnosperms

Question Type : **MCQ**
 Question ID : **264330140348**
 Option 1 ID : **264330549774**
 Option 2 ID : **264330549772**
 Option 3 ID : **264330549771**
 Option 4 ID : **264330549773**
 Status : **Answered**
 Chosen Option : **3**

Q.22 Which among the following type of unemployment is also known as the real wage unemployment?

- Ans** ☒ 1. classical
☒ 2. seasonal
☒ 3. structural
☒ 4. frictional

Question Type : **MCQ**
 Question ID : **264330140354**
 Option 1 ID : **264330549797**
 Option 2 ID : **264330549798**
 Option 3 ID : **264330549795**
 Option 4 ID : **264330549796**
 Status : **Answered**
 Chosen Option : **2**

Q.23 Nalanda University, an important learning centre in ancient period is situated in which state?

- Ans ☒ 1. Bihar
☒ 2. Haryana
☒ 3. Uttar Pradesh
☒ 4. West Bengal

Question Type : MCQ
Question ID : 264330140883
Option 1 ID : 264330551881
Option 2 ID : 264330551880
Option 3 ID : 264330551879
Option 4 ID : 264330551882
Status : Answered
Chosen Option : 1

Q.24 Who among the following won the Men's Singles Paris Masters Title in 2022?

- Ans ☒ 1. Holger Rune
☒ 2. Carlos Alcaraz
☒ 3. Novak Djokovic
☒ 4. Casper Ruud

Question Type : MCQ
Question ID : 264330141069
Option 1 ID : 264330552625
Option 2 ID : 264330552623
Option 3 ID : 264330552626
Option 4 ID : 264330552624
Status : Answered
Chosen Option : 3

Q.25 Which former Miss India, also the recipient of the Sangeet Natak Akademi Award, popularised Indian classical dance in the west?

- Ans ☒ 1. Leela Naidu
☒ 2. Lona Pinto
☒ 3. Indrani Rahman
☒ 4. Peace Kanwal

Question Type : MCQ
Question ID : 264330140670
Option 1 ID : 264330551027
Option 2 ID : 264330551028
Option 3 ID : 264330551029
Option 4 ID : 264330551030
Status : Answered
Chosen Option : 3

Q.1 Select the appropriate antonym for the underlined word.

Educators play a key role as nation builders.

- Ans
- ✓ 1. negligible
 - ✗ 2. principal
 - ✗ 3. primitive
 - ✗ 4. predominant

Question Type : MCQ
 Question ID : 264330135249
 Option 1 ID : 264330529915
 Option 2 ID : 264330529916
 Option 3 ID : 264330529918
 Option 4 ID : 264330529917
 Status : Answered
 Chosen Option : 1

Q.2 Improve the underlined part of the sentence. Choose 'No improvement' as an answer if the sentence is grammatically correct.

He would prefer to speak with you in persona.

- Ans
- ✓ 1. you in person
 - ✗ 2. you on person
 - ✗ 3. No improvement
 - ✗ 4. you in personal

Question Type : MCQ
 Question ID : 264330135234
 Option 1 ID : 264330529859
 Option 2 ID : 264330529861
 Option 3 ID : 264330529862
 Option 4 ID : 264330529860
 Status : Answered
 Chosen Option : 4

Q.3 Select the correctly spelt word.

- Ans
- ✗ 1. simultenaous
 - ✗ 2. simulteneous
 - ✓ 3. simultaneous
 - ✗ 4. simultanous

Question Type : MCQ
 Question ID : 264330135685
 Option 1 ID : 264330531634
 Option 2 ID : 264330531631
 Option 3 ID : 264330531632
 Option 4 ID : 264330531633
 Status : Answered
 Chosen Option : 3

Q.4 Fill in the blank with the most appropriate option.

Pranav, Shagun and Munshi took a bus to the same _____.

Ans

- ☒ 1. slot
- ☒ 2. end
- ☒ 3. destination
- ☒ 4. target

Question Type : MCQ

Question ID : 264330135766

Option 1 ID : 264330531943

Option 2 ID : 264330531946

Option 3 ID : 264330531945

Option 4 ID : 264330531944

Status : Answered

Chosen Option : 3

Q.5 Select the most appropriate synonym of the given word.

Small

Ans

- ☒ 1. Rich
- ☒ 2. Adequate
- ☒ 3. Liberal
- ☒ 4. Slight

Question Type : MCQ

Question ID : 264330136125

Option 1 ID : 264330533306

Option 2 ID : 264330533304

Option 3 ID : 264330533305

Option 4 ID : 264330533303

Status : Answered

Chosen Option : 4

Q.6 Choose the word that can substitute the given group of words.

One who gives shape to stone

Ans

- ☒ 1. Curator
- ☒ 2. Sculptor
- ☒ 3. Apostate
- ☒ 4. Auditor

Question Type : MCQ

Question ID : 264330135524

Option 1 ID : 264330531001

Option 2 ID : 264330531002

Option 3 ID : 264330530999

Option 4 ID : 264330531000

Status : Answered

Chosen Option : 2

Q.7 Identify the segment that contains a grammatical error. If there is no error, select 'No error'.

The differences were/ imperceptible to all but/ the most trained eye.

- Ans
- ☒ 1. imperceptible to all but
 - ☒ 2. No error
 - ☒ 3. the most trained eye.
 - ☒ 4. The differences were

Question Type : MCQ
Question ID : 264330136345
Option 1 ID : 264330534152
Option 2 ID : 264330534154
Option 3 ID : 264330534153
Option 4 ID : 264330534151
Status : Answered
Chosen Option : 1

Q.8 Select the word segment that substitutes (replaces) the bracketed word segment correctly and completes the sentence meaningfully. Select the option 'no correction required' if the sentence is correct as given.
We've made extraordinary (flowering as a) society in that regard.

- Ans
- ☒ 1. progress as a
 - ☒ 2. advance as a
 - ☒ 3. improvement by a
 - ☒ 4. No correction required

Question Type : MCQ
Question ID : 264330135720
Option 1 ID : 264330531768
Option 2 ID : 264330531769
Option 3 ID : 264330531767
Option 4 ID : 264330531770
Status : Answered
Chosen Option : 1

Q.9 Select the most appropriate option to fill in the blank.

She was trying to help that little boy in the grocery _____.

- Ans
- ☒ 1. road
 - ☒ 2. asylum
 - ☒ 3. store
 - ☒ 4. park

Question Type : MCQ
Question ID : 264330135661
Option 1 ID : 264330531539
Option 2 ID : 264330531542
Option 3 ID : 264330531541
Option 4 ID : 264330531540
Status : Answered
Chosen Option : 3

Q.10 Identify the segment that contains a grammatical error. If there is no error, select 'No error'.

Even the most wise don't / know what's hidden in / the depths of their being.

- Ans
- ☒ 1. No error
 - ☒ 2. know what's hidden in
 - ☒ 3. the depths of their being.
 - ☒ 4. Even the most wise don't

Question Type : MCQ
Question ID : 264330136411
Option 1 ID : 264330534410
Option 2 ID : 264330534408
Option 3 ID : 264330534409
Option 4 ID : 264330534407
Status : Answered
Chosen Option : 4

Q.11 Select the most appropriate meaning of the bracketed idiom in the given sentence.

She invited (all and sundry) to her party.

- Ans
- ☒ 1. To take reckless risks
 - ☒ 2. To remove a misapprehension
 - ☒ 3. To suffer humiliation
 - ☒ 4. Everyone without distinction

Question Type : MCQ
Question ID : 264330136208
Option 1 ID : 264330533624
Option 2 ID : 264330533625
Option 3 ID : 264330533623
Option 4 ID : 264330533626
Status : Answered
Chosen Option : 4

Q.12 Select the wrongly spelt word.

- Ans
- ☒ 1. enormous
 - ☒ 2. mordern
 - ☒ 3. indolent
 - ☒ 4. courteous

Question Type : MCQ
Question ID : 264330136766
Option 1 ID : 264330535767
Option 2 ID : 264330535768
Option 3 ID : 264330535769
Option 4 ID : 264330535770
Status : Answered
Chosen Option : 2

Q.13 Fill in the blank with the most appropriate option.

Many Americans appear to be _____ those warnings seriously.

- Ans
- ☐ 1. understanding
 - ☐ 2. sacking
 - ☐ 3. making
 - ☒ 4. taking

Question Type : MCQ
Question ID : 264330136168
Option 1 ID : 264330533473
Option 2 ID : 264330533474
Option 3 ID : 264330533472
Option 4 ID : 264330533471
Status : Answered
Chosen Option : 4

Q.14 Select the most appropriate meaning of the given idiom.

Rust bucket

- Ans
- ☐ 1. To be absent minded
 - ☐ 2. An old man
 - ☒ 3. A vehicle that is old or almost broken
 - ☐ 4. To be late for everything

Question Type : MCQ
Question ID : 264330135865
Option 1 ID : 264330532323
Option 2 ID : 264330532325
Option 3 ID : 264330532324
Option 4 ID : 264330532326
Status : Answered
Chosen Option : 1

Q.15 Select the most appropriate option to substitute the bracketed segment in the given sentence. If there is no need to substitute it, select 'no substitution required'.

It is expected that this police power will only apply to air and (sea routes between the Great Britain and the Northern Ireland).

- Ans
- ☐ 1. sea routes across the Great Britain and Northern Ireland
 - ☐ 2. sea routes across the Great Britain and the Northern Ireland
 - ☒ 3. sea routes between Great Britain and Northern Ireland
 - ☐ 4. No substitution required

Question Type : MCQ
Question ID : 264330136348
Option 1 ID : 264330534163
Option 2 ID : 264330534164
Option 3 ID : 264330534165
Option 4 ID : 264330534166
Status : Answered
Chosen Option : 3

Q.16 Choose the word that is opposite in meaning to the given word.

Pardon

- Ans ☒ 1. Condemn
☒ 2. Spite
☒ 3. Boast
☒ 4. Release

Question Type : MCQ
 Question ID : 264330135248
 Option 1 ID : 264330529911
 Option 2 ID : 264330529913
 Option 3 ID : 264330529914
 Option 4 ID : 264330529912
 Status : Answered
 Chosen Option : 1

Q.17 Select the word from the options which is similar in meaning to the bracketed word given in the sentence below.

The (departure) of people from the city isn't necessarily good news.

- Ans ☒ 1. abidance
☒ 2. continuation
☒ 3. exodus
☒ 4. excavation

Question Type : MCQ
 Question ID : 264330136282
 Option 1 ID : 264330533910
 Option 2 ID : 264330533909
 Option 3 ID : 264330533907
 Option 4 ID : 264330533908
 Status : Answered
 Chosen Option : 1

Q.18 Identify the segment that contains a grammatical error. If there is no error, select 'No error'.

'He wants something done, / and it has not happen / fast enough,' he said.

- Ans ☒ 1. No error
☒ 2. He wants something done
☒ 3. fast enough,' he said.
☒ 4. and it has not happen

Question Type : MCQ
 Question ID : 264330136412
 Option 1 ID : 264330534414
 Option 2 ID : 264330534411
 Option 3 ID : 264330534413
 Option 4 ID : 264330534412
 Status : Answered
 Chosen Option : 2

Q.19 Select the most appropriate option to fill in the blank.

The event acts as a trigger or _____, which catapults them into an awareness of this phenomena.

- Ans**
- ☒ 1. dogma
 - ☒ 2. catalyst
 - ☒ 3. elegy
 - ☒ 4. harangue

Question Type : **MCQ**
 Question ID : **264330136350**
 Option 1 ID : **264330534172**
 Option 2 ID : **264330534173**
 Option 3 ID : **264330534174**
 Option 4 ID : **264330534171**
 Status : **Answered**
 Chosen Option : **2**

Q.20 Select the most appropriate word for the given group of words.

People who belong to the same country.

- Ans**
- ☒ 1. Natives
 - ☒ 2. Soldiers
 - ☒ 3. Folks
 - ☒ 4. Communists

Question Type : **MCQ**
 Question ID : **264330135703**
 Option 1 ID : **264330531699**
 Option 2 ID : **264330531700**
 Option 3 ID : **264330531701**
 Option 4 ID : **264330531702**
 Status : **Answered**
 Chosen Option : **1**

Comprehension:

In the following passage some of the words have been deleted. Read the passage carefully and select the correct answer for the given blank out of the four alternatives.

One headteacher asked what she should say to parents who request guidance _____ (1) getting their child "school-ready", because she was concerned that too _____ (2) parents have become convinced that an expert (the teacher) knows more than they do about their own child's _____ (3). Her intention was not to bash parents, _____ (4) she wanted to know how to encourage parents to see "school" as a distinct domain from "home", where their own _____ (5) ought to hold sway.

SubQuestion No : 21

Q.21 Select the most appropriate option to fill in the blank 1

- Ans
- ☒ 1. at
 - ☒ 2. to
 - ☒ 3. of
 - ☒ 4. on

Question Type : MCQ

Question ID : 264330141191

Option 1 ID : 264330553101

Option 2 ID : 264330553102

Option 3 ID : 264330553100

Option 4 ID : 264330553099

Status : Answered

Chosen Option : 4

Comprehension:

In the following passage some of the words have been deleted. Read the passage carefully and select the correct answer for the given blank out of the four alternatives.

One headteacher asked what she should say to parents who request guidance _____ (1) getting their child "school-ready", because she was concerned that too _____ (2) parents have become convinced that an expert (the teacher) knows more than they do about their own child's _____ (3). Her intention was not to bash parents, _____ (4) she wanted to know how to encourage parents to see "school" as a distinct domain from "home", where their own _____ (5) ought to hold sway.

SubQuestion No : 22

Q.22 Select the most appropriate option to fill in the blank 2

- Ans
- ☒ 1. many
 - ☒ 2. much
 - ☒ 3. most
 - ☒ 4. more

Question Type : MCQ

Question ID : 264330141192

Option 1 ID : 264330553104

Option 2 ID : 264330553105

Option 3 ID : 264330553106

Option 4 ID : 264330553103

Status : Answered

Chosen Option : 1

Comprehension:

In the following passage some of the words have been deleted. Read the passage carefully and select the correct answer for the given blank out of the four alternatives.

One headteacher asked what she should say to parents who request guidance _____ (1) getting their child "school-ready", because she was concerned that too _____ (2) parents have become convinced that an expert (the teacher) knows more than they do about their own child's _____ (3). Her intention was not to bash parents, _____ (4) she wanted to know how to encourage parents to see "school" as a distinct domain from "home", where their own _____ (5) ought to hold sway.

SubQuestion No : 23

Q.23 Select the most appropriate option to fill in the blank 3

- Ans ☒ 1. development
☒ 2. consistence
☒ 3. submission
☒ 4. maniacs

Question Type : MCQ

Question ID : 264330141193

Option 1 ID : 264330553109

Option 2 ID : 264330553108

Option 3 ID : 264330553110

Option 4 ID : 264330553107

Status : Answered

Chosen Option : 1

Comprehension:

In the following passage some of the words have been deleted. Read the passage carefully and select the correct answer for the given blank out of the four alternatives.

One headteacher asked what she should say to parents who request guidance _____ (1) getting their child "school-ready", because she was concerned that too _____ (2) parents have become convinced that an expert (the teacher) knows more than they do about their own child's _____ (3). Her intention was not to bash parents, _____ (4) she wanted to know how to encourage parents to see "school" as a distinct domain from "home", where their own _____ (5) ought to hold sway.

SubQuestion No : 24

Q.24 Select the most appropriate option to fill in the blank 4

- Ans ☒ 1. or
☒ 2. rather
☒ 3. so
☒ 4. yet

Question Type : MCQ

Question ID : 264330141194

Option 1 ID : 264330553111

Option 2 ID : 264330553114

Option 3 ID : 264330553113

Option 4 ID : 264330553112

Status : Answered

Chosen Option : 4

Comprehension:

In the following passage some of the words have been deleted. Read the passage carefully and select the correct answer for the given blank out of the four alternatives.

One headteacher asked what she should say to parents who request guidance _____ (1) getting their child "school-ready", because she was concerned that too _____ (2) parents have become convinced that an expert (the teacher) knows more than they do about their own child's _____ (3). Her intention was not to bash parents, _____ (4) she wanted to know how to encourage parents to see "school" as a distinct domain from "home", where their own _____ (5) ought to hold sway.

SubQuestion No : 25

Q.25 Select the most appropriate option to fill in the blank 5

- Ans
- ☒ 1. commotion
 - ☒ 2. games
 - ☒ 3. judgement
 - ☒ 4. turbulence

Question Type : MCQ

Question ID : 264330141195

Option 1 ID : 264330553115

Option 2 ID : 264330553117

Option 3 ID : 264330553116

Option 4 ID : 264330553118

Status : Answered

Chosen Option : 3

