

## Multi Tasking Non Technical Staff and Havaladar CBIC and CBN Examination 2022

Roll Number	
Candidate Name	
Venue Name	iON Digital Zone iDZ Asansol
Exam Date	16/05/2023
Exam Time	3:30 PM - 5:00 PM
Subject	MTS Non Tech Havaladar CBIC and CBN Examination 2022

### Section : Numerical and Mathematical Ability

**Q.1** A boatman rows 15 km in 15 minutes, along the stream and 10 km in 1 hour against the stream. Find the speed of the boat in still water.

- Ans**
- ☒ 1. 33 km/hr
  - ☒ 2. 35 km/hr
  - ☒ 3. 26 km/hr
  - ☒ 4. 40 km/hr

Question Type : MCQ

Question ID : 264330138404

Option 1 ID : 264330542224

Option 2 ID : 264330542226

Option 3 ID : 264330542223

Option 4 ID : 264330542225

Status : Answered

Chosen Option : 2

**Q.2** If  $(x + y) : (y + z) : (z + x) = 3 : 5 : 7$  and  $(x + y + z) = 45$ , then what is the value of  $z$ ?

- Ans**
- ☒ 1. 18
  - ☒ 2. 30
  - ☒ 3. 27
  - ☒ 4. 20

Question Type : MCQ

Question ID : 264330138400

Option 1 ID : 264330542209

Option 2 ID : 264330542207

Option 3 ID : 264330542208

Option 4 ID : 264330542210

Status : Not Answered

Chosen Option : --

# Test Prime

**ALL EXAMS,  
ONE SUBSCRIPTION**



**70,000+**  
Mock Tests



**Personalised  
Report Card**



**Unlimited  
Re-Attempt**



**600+**  
Exam Covered



**Previous Year  
Papers**



**500%  
Refund**



**ATTEMPT FREE MOCK NOW**

**Q.3** A and B together can complete a given work in 10 days. C can complete the same work alone in 15 days. In how many days can they complete the work, if all three work together?

- Ans**
- ☒ 1. 8 days
  - ☒ 2. 5 days
  - ☒ 3. 6 days
  - ☒ 4. 10 days

Question Type : **MCQ**  
 Question ID : **264330135427**  
 Option 1 ID : **264330530615**  
 Option 2 ID : **264330530618**  
 Option 3 ID : **264330530616**  
 Option 4 ID : **264330530617**  
 Status : **Answered**  
 Chosen Option : **3**

**Q.4** Rima buys a chair for Rs. 1000 and sells it at a loss of 8%. What is the selling price of the chair?

- Ans**
- ☒ 1. Rs. 920
  - ☒ 2. Rs. 900
  - ☒ 3. Rs. 980
  - ☒ 4. Rs. 1000

Question Type : **MCQ**  
 Question ID : **264330141003**  
 Option 1 ID : **264330552359**  
 Option 2 ID : **264330552362**  
 Option 3 ID : **264330552360**  
 Option 4 ID : **264330552361**  
 Status : **Answered**  
 Chosen Option : **1**

**Q.5** The following table shows the number of girls and boys in different classes. Find the sum of total number of students in all class.

Class	Number of girls	Number of boys
5	88	76
6	140	92
7	54	80
8	84	68
9	90	70

- Ans**
- ☒ 1. 840
  - ☒ 2. 842
  - ☒ 3. 800
  - ☒ 4. 760

Question Type : **MCQ**  
 Question ID : **264330133791**  
 Option 1 ID : **264330524189**  
 Option 2 ID : **264330524188**  
 Option 3 ID : **264330524187**  
 Option 4 ID : **264330524190**  
 Status : **Answered**  
 Chosen Option : **2**

Q.6 225 percent of 80 percent of 80 = \_\_\_\_\_.

- Ans
- ☒ 1. 156
  - ☒ 2. 132
  - ☒ 3. 144
  - ☒ 4. 138

Question Type : MCQ  
 Question ID : 264330137180  
 Option 1 ID : 264330537365  
 Option 2 ID : 264330537364  
 Option 3 ID : 264330537366  
 Option 4 ID : 264330537363  
 Status : Answered  
 Chosen Option : 3

Q.7 Find the value of  $[7 + \{4 \times (2 + 5 \times 4)\}]$ .

- Ans
- ☒ 1. 95
  - ☒ 2. 45
  - ☒ 3. 55
  - ☒ 4. 85

Question Type : MCQ  
 Question ID : 264330138390  
 Option 1 ID : 264330542167  
 Option 2 ID : 264330542168  
 Option 3 ID : 264330542169  
 Option 4 ID : 264330542170  
 Status : Answered  
 Chosen Option : 1

Q.8 Evaluate for the value of A.

$$(64 \div 8) - A + 4 \times 23 + 45 - 87 = 53$$

- Ans
- ☒ 1. 4
  - ☒ 2. 6
  - ☒ 3. 3
  - ☒ 4. 5

Question Type : MCQ  
 Question ID : 264330138747  
 Option 1 ID : 264330543596  
 Option 2 ID : 264330543598  
 Option 3 ID : 264330543597  
 Option 4 ID : 264330543595  
 Status : Answered  
 Chosen Option : 4

**Q.9** What will be the ratio of simple interest earned by certain amount at the same rate of interest for 8 years and 20 years?

- Ans**
- ☒ 1. 5:7
  - ☒ 2. 2:5
  - ☒ 3. 3:5
  - ☒ 4. 4:3

Question Type : **MCQ**  
 Question ID : **264330138446**  
 Option 1 ID : **264330542394**  
 Option 2 ID : **264330542391**  
 Option 3 ID : **264330542393**  
 Option 4 ID : **264330542392**  
 Status : **Answered**  
 Chosen Option : **2**

**Q.10** A trader marks his goods at 55% above the cost price and allows a discount of 20%. What is his gain percentage?

- Ans**
- ☒ 1. 24%
  - ☒ 2. 18%
  - ☒ 3. 22%
  - ☒ 4. 16%

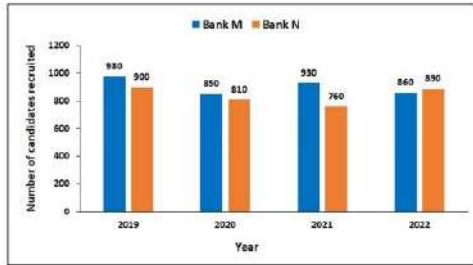
Question Type : **MCQ**  
 Question ID : **264330138399**  
 Option 1 ID : **264330542204**  
 Option 2 ID : **264330542205**  
 Option 3 ID : **264330542203**  
 Option 4 ID : **264330542206**  
 Status : **Answered**  
 Chosen Option : **1**

**Q.11** If a certain sum of money becomes double of itself in 3 years 6 months at simple interest, then what will be the annual rate of interest?

- Ans**
- ☒ 1. 22.5 percent
  - ☒ 2. 28.57 percent
  - ☒ 3. 30.53 percent
  - ☒ 4. 26.57 percent

Question Type : **MCQ**  
 Question ID : **264330137185**  
 Option 1 ID : **264330537384**  
 Option 2 ID : **264330537383**  
 Option 3 ID : **264330537385**  
 Option 4 ID : **264330537386**  
 Status : **Answered**  
 Chosen Option : **3**

**Q.12** The bar graph shows the candidates recruited in the 2 different banks M and N in different years. What is the average number of candidates in bank N in all the years together?



- Ans
- ☐ 1. 720
  - ☐ 2. 700
  - ☐ 3. 850
  - ☒ 4. 840

Question Type : MCQ

Question ID : 264330138408

Option 1 ID : 264330542239

Option 2 ID : 264330542240

Option 3 ID : 264330542241

Option 4 ID : 264330542242

Status : Answered

Chosen Option : 4

**Q.13** By selling 55 meters of cloth, one gains the selling price of 11 meters. Find the gain percent.

- Ans
- ☐ 1. 33%
  - ☐ 2. 15%
  - ☒ 3. 25%
  - ☐ 4. 23%

Question Type : MCQ

Question ID : 264330138398

Option 1 ID : 264330542202

Option 2 ID : 264330542199

Option 3 ID : 264330542201

Option 4 ID : 264330542200

Status : Not Answered

Chosen Option : --

**Q.14** The average age of four brothers is 24 years. If their father is included, the average is increased by 6 years. Find the age of the father (in years)

- Ans
- ☐ 1. 50 years
  - ☐ 2. 52 years
  - ☒ 3. 54 years
  - ☐ 4. 55 years

Question Type : MCQ

Question ID : 264330138393

Option 1 ID : 264330542179

Option 2 ID : 264330542181

Option 3 ID : 264330542182

Option 4 ID : 264330542180

Status : Answered

Chosen Option : 3

Q.15 The value of  $74 + 88 \div 8 \times 10$  of  $5 - 90 \div 15 + \{44 - (108 \div 12)\}$  is :

- Ans
- ☒ 1. 700
  - ☒ 2. 653
  - ☒ 3. 770
  - ☒ 4. 605

Question Type : MCQ

Question ID : 264330133777

Option 1 ID : 264330524134

Option 2 ID : 264330524131

Option 3 ID : 264330524132

Option 4 ID : 264330524133

Status : Not Answered

Chosen Option : --

Q.16 Find the fourth proportion to 21, 49 and 18.

- Ans
- ☒ 1. 42
  - ☒ 2. 56
  - ☒ 3. 49
  - ☒ 4. 44

Question Type : MCQ

Question ID : 264330138401

Option 1 ID : 264330542213

Option 2 ID : 264330542212

Option 3 ID : 264330542214

Option 4 ID : 264330542211

Status : Not Answered

Chosen Option : --

Q.17 Dev completed the school project alone in 40 days. How many days will Arun alone take to complete the same work if he is 25% more efficient than Dev?

- Ans
- ☒ 1. 35 days
  - ☒ 2. 14 days
  - ☒ 3. 32 days
  - ☒ 4. 16 days

Question Type : MCQ

Question ID : 264330138760

Option 1 ID : 264330543650

Option 2 ID : 264330543649

Option 3 ID : 264330543647

Option 4 ID : 264330543648

Status : Answered

Chosen Option : 3

**Q.18** Three numbers are in the ratio 2 : 3 : 5 and their LCM is 60. What is the HCF of the numbers?

- Ans**
- ☒ 1. 2
  - ☐ 2. 4
  - ☐ 3. 10
  - ☐ 4. 6

Question Type : **MCQ**

Question ID : **264330141011**

Option 1 ID : **264330552391**

Option 2 ID : **264330552392**

Option 3 ID : **264330552394**

Option 4 ID : **264330552393**

Status : **Not Answered**

Chosen Option : --

**Q.19** A man goes to a place on the car at a speed of 144 km/hr and comes back at a lower speed. If the average speed is 60 km/hr in total, then find his returning speed (in km/hr).

- Ans**
- ☐ 1. 40.05 km/hr
  - ☒ 2. 37.89 km/hr
  - ☐ 3. 33.33 km/hr
  - ☐ 4. 22.25 km/hr

Question Type : **MCQ**

Question ID : **264330135373**

Option 1 ID : **264330530401**

Option 2 ID : **264330530402**

Option 3 ID : **264330530400**

Option 4 ID : **264330530399**

Status : **Not Answered**

Chosen Option : --

**Q.20** If the length of a rectangle is decreased by 13% and the breadth is increased by 13%, Find the change of percentage in its area.

- Ans**
- ☒ 1. 1.69% decrease
  - ☐ 2. 1.69% increase
  - ☐ 3. No change
  - ☐ 4. 13% decrease

Question Type : **MCQ**

Question ID : **264330135431**

Option 1 ID : **264330530633**

Option 2 ID : **264330530632**

Option 3 ID : **264330530631**

Option 4 ID : **264330530634**

Status : **Answered**

Chosen Option : 1



Q.1 In the following question, select the missing number of the given series.

30, 60, 180, 720, 3600, ?

- Ans
- ☒ 1. 25000
  - ☒ 2. 21600
  - ☒ 3. 12000
  - ☒ 4. 14400

Question Type : MCQ

Question ID : 264330138511

Option 1 ID : 264330542653

Option 2 ID : 264330542651

Option 3 ID : 264330542654

Option 4 ID : 264330542652

Status : Answered

Chosen Option : 2

Q.2 Seven workers Rahul, Ram, Ramesh, Sohan, Sahil, Anil and Sonu are sitting around a circular table facing towards the centre (not necessarily in the same order). Anil is immediate neighbour of both Ram and Sonu. Ram is second to the right of Sahil. Rahul is immediate neighbour of both Sahil and Sohan. Who is second to the left of Sahil?

- Ans
- ☒ 1. Sonu
  - ☒ 2. Ramesh
  - ☒ 3. Sohan
  - ☒ 4. Anil

Question Type : MCQ

Question ID : 264330138506

Option 1 ID : 264330542633

Option 2 ID : 264330542631

Option 3 ID : 264330542632

Option 4 ID : 264330542634

Status : Answered

Chosen Option : 4

Q.3 By Interchanging the given two numbers which of the following equation will be correct?

5 and 4

I.  $4 + 8 \times 5 - 7 \div 1 = 30$

II.  $5 \times 3 - 4 + 6 \div 2 = 11$

- Ans
- ☒ 1. Both I and II
  - ☒ 2. Neither I nor II
  - ☒ 3. Only II
  - ☒ 4. Only I

Question Type : MCQ

Question ID : 264330138557

Option 1 ID : 264330542837

Option 2 ID : 264330542838

Option 3 ID : 264330542836

Option 4 ID : 264330542835

Status : Answered

Chosen Option : 4

**Q.4** In a certain code language, 'PIECES' is coded as 'PKBCGP'. What is the code for 'OBTAIN' in that code language?

- Ans**
- ☒ 1. ODQALL
  - ☒ 2. ODQBKK
  - ☒ 3. ODQAKK
  - ☒ 4. ODQAJK

Question Type : **MCQ**

Question ID : **264330138546**

Option 1 ID : **264330542791**

Option 2 ID : **264330542793**

Option 3 ID : **264330542794**

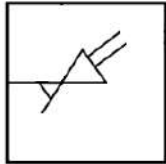
Option 4 ID : **264330542792**

Status : **Answered**

Chosen Option : **3**



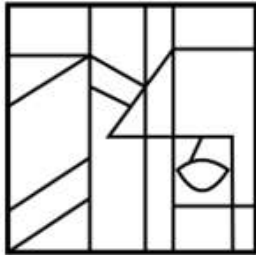
Q.5 Select the option figure in which the given figure (X) is embedded as its part (rotation is NOT allowed).



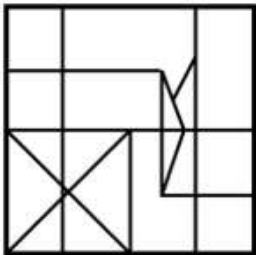
(X)

Ans

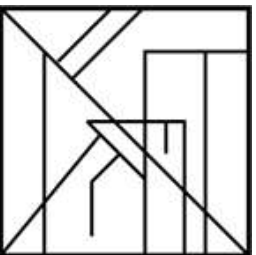
✗ 1.



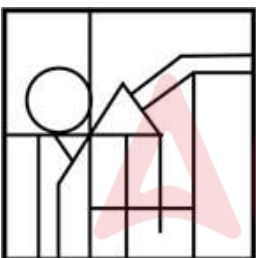
✗ 2.



✗ 3.



✓ 4.



Question Type : MCQ

Question ID : 264330133503

Option 1 ID : 264330523044

Option 2 ID : 264330523043

Option 3 ID : 264330523045

Option 4 ID : 264330523046

Status : Answered

Chosen Option : 4

**Q.6** In the following question below are given some statements followed by some conclusions based on those statements. Taking the given statements to be true even if they seem to be at variance from commonly known facts. Read all the conclusions and then decide which of the given conclusion logically follows the given statements.

Statements:

I. All bike are cycle.

II. Some cycle are tub.

Conclusion:

I. All tub are bike.

II. All cycle are tub.

III. All cycle are bike.

- Ans**
- ☒ 1. All conclusion follows
  - ☒ 2. Only conclusion II follows
  - ☒ 3. Neither conclusion follows
  - ☒ 4. Both conclusions I and II follows

Question Type : **MCQ**

Question ID : **264330138509**

Option 1 ID : **264330542645**

Option 2 ID : **264330542644**

Option 3 ID : **264330542646**

Option 4 ID : **264330542643**

Status : **Answered**

Chosen Option : **3**

**Q.7** In a certain code language, 'HEAVY' is coded as 'EBXSV'. What is the code for 'LABEL' in that code language?

- Ans**
- ☒ 1. IXYBJ
  - ☒ 2. IXZBI
  - ☒ 3. IXYBI
  - ☒ 4. JXYBJ

Question Type : **MCQ**

Question ID : **264330135597**

Option 1 ID : **264330531290**

Option 2 ID : **264330531287**

Option 3 ID : **264330531289**

Option 4 ID : **264330531288**

Status : **Answered**

Chosen Option : **3**

**Q.8** Select the option in which the numbers shares the same relationship in set as that shared by the numbers in the given set.  
(NOTE: Operations should be performed on the whole numbers, without breaking down the numbers into its constituent digits. E.g. 13 – Operations on 13 such as adding /subtracting /multiplying etc. to 13 can be performed. Breaking down 13 into 1 and 3 and then performing mathematical operations on 1 and 3 is not allowed)

(64, 8, 16)

(40, 20, 4)

- Ans** ☒ 1. (56, 14, 8)  
☒ 2. (100, 50, 8)  
☒ 3. (120, 100, 5)  
☒ 4. (54, 9, 14)

Question Type : **MCQ**

Question ID : **264330138513**

Option 1 ID : **264330542660**

Option 2 ID : **264330542659**

Option 3 ID : **264330542661**

Option 4 ID : **264330542662**

Status : **Not Answered**

Chosen Option : --

**Q.9** Weight of five pens P1, P2, P3, P4 and P5 is compared. Weight of P3 is less than P1 but more than P2. Weight of P2 is more than only two pens. Weight of P5 is not the least. If the weight of P5 is 100 grams, then what can be the weight of P1?

- Ans** ☒ 1. 108 grams  
☒ 2. 96 grams  
☒ 3. 95 grams  
☒ 4. 90 grams

Question Type : **MCQ**

Question ID : **264330138507**

Option 1 ID : **264330542638**

Option 2 ID : **264330542637**

Option 3 ID : **264330542635**

Option 4 ID : **264330542636**

Status : **Answered**

Chosen Option : **1**

Q.10 Select the correct mirror image of the given figure when the mirror is placed at MN as shown below.

R A M B O W A J K 

- Ans
- ☒ 1. K J A W O B M A R
  - ☒ 2. K L A W O B M A R
  - ☒ 3. K L A W O B M A R
  - ☒ 4. K L A W O B M A R

Question Type : MCQ  
Question ID : 264330133504  
Option 1 ID : 264330523050  
Option 2 ID : 264330523047  
Option 3 ID : 264330523049  
Option 4 ID : 264330523048  
Status : Answered  
Chosen Option : 4

Q.11 Which of the following numbers will replace the question mark (?) in the given series?  
17, 24, 32, 41, 51, ?

- Ans
- ☒ 1. 63
  - ☒ 2. 61
  - ☒ 3. 64
  - ☒ 4. 62

Question Type : MCQ  
Question ID : 264330137356  
Option 1 ID : 264330538053  
Option 2 ID : 264330538051  
Option 3 ID : 264330538054  
Option 4 ID : 264330538052  
Status : Answered  
Chosen Option : 4

Q.12 A series is given with one term missing. Select the correct alternative from the given ones that will complete the series.

FOC, IMF, LKL, OIL, ?

- Ans
- ☒ 1. SHO
  - ☒ 2. RGO
  - ☒ 3. SGO
  - ☒ 4. RHO

Question Type : MCQ  
Question ID : 264330138498  
Option 1 ID : 264330542599  
Option 2 ID : 264330542600  
Option 3 ID : 264330542602  
Option 4 ID : 264330542601  
Status : Answered  
Chosen Option : 2

**Q.13** In the following question below are given some statements followed by some conclusions based on those statements. Taking the given statements to be true even if they seem to be at variance from commonly known facts. Read all the conclusions and then decide which of the given conclusion logically follows the given statements.

Statements:

I. Some men are girls.

II. Some strong are girls.

Conclusion:

I. Some strong are not men.

II. Some girls are men.

- Ans**
- ☒ 1. Only conclusion I follows
  - ☒ 2. Neither conclusion follows
  - ☒ 3. Both conclusions I and II follows
  - ☒ 4. Only conclusion II follows

Question Type : MCQ

Question ID : 264330138508

Option 1 ID : 264330542639

Option 2 ID : 264330542642

Option 3 ID : 264330542641

Option 4 ID : 264330542640

Status : Answered

Chosen Option : 4

**Q.14** Words given on the left side of (::) are related with each other by some Logic/Rule/Relation. Select the missing word/word pair on the right side of (::) from the given alternatives based on the same Logic/Rule/Relation.

Rink : Skating :: Pitch : ?

- Ans**
- ☒ 1. Cricket
  - ☒ 2. Hockey
  - ☒ 3. Wrestling
  - ☒ 4. Football

Question Type : MCQ

Question ID : 264330138500

Option 1 ID : 264330542609

Option 2 ID : 264330542610

Option 3 ID : 264330542607

Option 4 ID : 264330542608

Status : Answered

Chosen Option : 1

Q.15 By Interchanging which two signs the equation will be correct?

$$27 \div 3 - 18 + 3 \times 2 = 18$$

- Ans
- ☒ 1. + and -
  - ☒ 2.  $\times$  and +
  - ☒ 3. + and  $\div$
  - ☒ 4.  $\div$  and  $\times$

Question Type : MCQ

Question ID : 264330138514

Option 1 ID : 264330542663

Option 2 ID : 264330542664

Option 3 ID : 264330542665

Option 4 ID : 264330542666

Status : Answered

Chosen Option : 3

Q.16 In a certain code language, 'REPORT' is coded as '18, 5, 16, 15, 18, 20', 'BEYOND' is coded as '2, 5, 25, 15, 14, 4'. What is the code for 'MONEY' in that code language?

- Ans
- ☒ 1. 13, 15, 12, 6, 25
  - ☒ 2. 13, 15, 14, 5, 25
  - ☒ 3. 13, 15, 14, 6, 25
  - ☒ 4. 15, 13, 12, 6, 25

Question Type : MCQ

Question ID : 264330138461

Option 1 ID : 264330542452

Option 2 ID : 264330542451

Option 3 ID : 264330542454

Option 4 ID : 264330542453

Status : Answered

Chosen Option : 2

Q.17 Eight friends Anil, Kamal, Ram, Sanjay, Aakash, Vivek, Rahul and Ramu are sitting around a circular table facing towards the centre (not necessarily in the same order). Vivek is second to the right of Anil. Kamal is third to the left of Anil. Ramu is second to the right of Vivek. Ram is second to the right of Ramu. Aakash is second to the right of Rahul. Rahul is not the immediate neighbour of Vivek. Who is second to the left of Anil?

- Ans
- ☒ 1. Vivek
  - ☒ 2. Ramu
  - ☒ 3. Kamal
  - ☒ 4. Ram

Question Type : MCQ

Question ID : 264330138505

Option 1 ID : 264330542630

Option 2 ID : 264330542628

Option 3 ID : 264330542629

Option 4 ID : 264330542627

Status : Not Answered

Chosen Option : --



**Q.18** Words given on the left side of (::) are related with each other by some Logic/Rule/Relation. Select the missing word/word pair on the right side of (::) from the given alternatives based on the same Logic/Rule/Relation.

Omelette : Egg ::?

- Ans**
- ☒ 1. Asphalt : Road
  - ☒ 2. Ore : Metal
  - ☒ 3. Furniture : Wood
  - ☒ 4. Seed : Oil

Question Type : **MCQ**

Question ID : **264330138501**

Option 1 ID : **264330542612**

Option 2 ID : **264330542614**

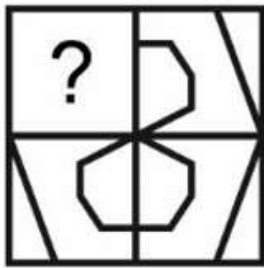
Option 3 ID : **264330542613**

Option 4 ID : **264330542611**

Status : **Answered**

Chosen Option : **2**

**Q.19** Which answer figure will complete the pattern in the question figure?



**Ans**

☒ 1.



☒ 2.



☒ 3.



☒ 4.



Question Type : **MCQ**

Question ID : **264330138518**

Option 1 ID : **264330542679**

Option 2 ID : **264330542682**

Option 3 ID : **264330542680**

Option 4 ID : **264330542681**

Status : **Answered**

Chosen Option : **1**

**Q.20** Select the option that is related to the third number in the same way as the second number is related to the first number.

67 : 336 :: 43 : ?

- Ans**
- ✓ 1. 216
  - ✗ 2. 226
  - ✗ 3. 214
  - ✗ 4. 236

Question Type : **MCQ**

Question ID : **264330137358**

Option 1 ID : **264330538059**

Option 2 ID : **264330538062**

Option 3 ID : **264330538060**

Option 4 ID : **264330538061**

Status : **Not Answered**

Chosen Option : --

Section : **General Awareness**

**Q.1** Which among the following is a traditional Hindu festival centered on the Goddess Mahakali from Telangana, India?

- Ans**
- ✗ 1. Dehing Patkai
  - ✓ 2. Bonalu
  - ✗ 3. Ugadi
  - ✗ 4. Lohri

Question Type : **MCQ**

Question ID : **264330133959**

Option 1 ID : **264330524862**

Option 2 ID : **264330524860**

Option 3 ID : **264330524861**

Option 4 ID : **264330524859**

Status : **Answered**

Chosen Option : 1

**Q.2** Kumari Kamala was awarded with Padma Bhushan in 1970. She was recognized for which classical dance form?

- Ans**
- ✗ 1. Mohiniyattam
  - ✗ 2. Manipuri
  - ✗ 3. Kathak
  - ✓ 4. Bharatanatyam

Question Type : **MCQ**

Question ID : **264330138328**

Option 1 ID : **264330541921**

Option 2 ID : **264330541920**

Option 3 ID : **264330541919**

Option 4 ID : **264330541922**

Status : **Answered**

Chosen Option : 4

Q.3 The sepoys of Meerut arrived at the Gates of Red Fort to meet the Mughal emperor, Bahadur Shah on \_\_\_\_\_.

- Ans
- ☒ 1. 11 March, 1857
  - ☒ 2. 10 March, 1857
  - ☒ 3. 10 May, 1857
  - ☒ 4. 11 May, 1857

Question Type : MCQ  
Question ID : 264330138344  
Option 1 ID : 264330541986  
Option 2 ID : 264330541985  
Option 3 ID : 264330541983  
Option 4 ID : 264330541984  
Status : Answered  
Chosen Option : 4

Q.4 Which of the following countries is a part of 'I2U2' Summit?

- Ans
- ☒ 1. India, Iran, UAE and US
  - ☒ 2. India, Israel, UAE and Uganda
  - ☒ 3. Iraq, Iran, UAE and US
  - ☒ 4. India, Israel, UAE and US

Question Type : MCQ  
Question ID : 264330138280  
Option 1 ID : 264330541730  
Option 2 ID : 264330541728  
Option 3 ID : 264330541727  
Option 4 ID : 264330541729  
Status : Answered  
Chosen Option : 1

Q.5 Vidushi Sharan Rani is famous for playing which musical instrument?

- Ans
- ☒ 1. Flute
  - ☒ 2. Sitar
  - ☒ 3. Tabla
  - ☒ 4. Sarod

Question Type : MCQ  
Question ID : 264330138277  
Option 1 ID : 264330541718  
Option 2 ID : 264330541717  
Option 3 ID : 264330541715  
Option 4 ID : 264330541716  
Status : Answered  
Chosen Option : 2

Q.6 Which among the following is the coldest planet in the solar system?

- Ans
- ☒ 1. Mars
  - ☒ 2. Neptune
  - ☒ 3. Saturn
  - ☒ 4. Uranus

Question Type : MCQ  
 Question ID : 264330137069  
 Option 1 ID : 264330536922  
 Option 2 ID : 264330536921  
 Option 3 ID : 264330536919  
 Option 4 ID : 264330536920  
 Status : Answered  
 Chosen Option : 2

Q.7 The settlements in which large number of houses are built very close to each other are \_\_\_\_\_.

- Ans
- ☒ 1. Compact settlements
  - ☒ 2. Star settlements
  - ☒ 3. Linear settlements
  - ☒ 4. Dispersed settlements

Question Type : MCQ  
 Question ID : 264330138669  
 Option 1 ID : 264330543283  
 Option 2 ID : 264330543286  
 Option 3 ID : 264330543284  
 Option 4 ID : 264330543285  
 Status : Answered  
 Chosen Option : 1

Q.8 Which of the following Indian Players has scored maximum runs in Cricket World Cup 1983?

- Ans
- ☒ 1. SM Gavaskar
  - ☒ 2. K. Srikanth
  - ☒ 3. Kapil Dev
  - ☒ 4. SM Patil

Question Type : MCQ  
 Question ID : 264330138274  
 Option 1 ID : 264330541703  
 Option 2 ID : 264330541704  
 Option 3 ID : 264330541705  
 Option 4 ID : 264330541706  
 Status : Answered  
 Chosen Option : 3

Q.9 Which among the following is not an alkali metals and does not belong to the Group 1 of Periodic Table?

- Ans ☒ 1. Calcium  
☒ 2. Lithium  
☒ 3. Sodium  
☒ 4. Potassium

Question Type : MCQ  
 Question ID : 264330137066  
 Option 1 ID : 264330536908  
 Option 2 ID : 264330536910  
 Option 3 ID : 264330536907  
 Option 4 ID : 264330536909  
 Status : Answered  
 Chosen Option : 1

Q.10 Who among the following is the first Indian to win the under 10 World Chess Championship in Menorca, Spain in the year 1996?

- Ans ☒ 1. Koneru Humpy  
☒ 2. Vishwanathan Anand  
☒ 3. Vidit Santosh Gujrathi  
☒ 4. P Harikrishna

Question Type : MCQ  
 Question ID : 264330137084  
 Option 1 ID : 264330536982  
 Option 2 ID : 264330536979  
 Option 3 ID : 264330536981  
 Option 4 ID : 264330536980  
 Status : Answered  
 Chosen Option : 2

Q.11 Which of the following has founded the city of Jaipur?

- Ans ☒ 1. Prithvi Raj Chauhan  
☒ 2. Raja Bharmal  
☒ 3. Sawai Jai Singh II  
☒ 4. Raja Man Singh

Question Type : MCQ  
 Question ID : 264330138323  
 Option 1 ID : 264330541902  
 Option 2 ID : 264330541900  
 Option 3 ID : 264330541901  
 Option 4 ID : 264330541899  
 Status : Answered  
 Chosen Option : 4

**Q.12** In which of the following articles, "Freedom of conscience and free profession, practice and propagation of religion" is mentioned?

- Ans**
- ☒ 1. Article 26
  - ☒ 2. Article 27
  - ☒ 3. Article 25
  - ☒ 4. Article 28

Question Type : **MCQ**  
 Question ID : **264330138283**  
 Option 1 ID : **264330541740**  
 Option 2 ID : **264330541742**  
 Option 3 ID : **264330541739**  
 Option 4 ID : **264330541741**  
 Status : **Answered**  
 Chosen Option : **3**

**Q.13** Which of the following is 'NOT' a feature of organic farming?

- Ans**
- ☒ 1. No use of mixed cropping
  - ☒ 2. Minimal or no use of chemicals
  - ☒ 3. Use of recycled farm wastes
  - ☒ 4. Use of biofertilizers

Question Type : **MCQ**  
 Question ID : **264330138284**  
 Option 1 ID : **264330541746**  
 Option 2 ID : **264330541745**  
 Option 3 ID : **264330541743**  
 Option 4 ID : **264330541744**  
 Status : **Answered**  
 Chosen Option : **1**

**Q.14** The emblem of the Chera Dynasty that controlled the central and northern parts of Kerala and the Kongu region of Tamil Nadu was \_\_\_\_\_.

- Ans**
- ☒ 1. birds
  - ☒ 2. fish
  - ☒ 3. bow and arrow
  - ☒ 4. tiger

Question Type : **MCQ**  
 Question ID : **264330137075**  
 Option 1 ID : **264330536945**  
 Option 2 ID : **264330536946**  
 Option 3 ID : **264330536944**  
 Option 4 ID : **264330536943**  
 Status : **Not Answered**  
 Chosen Option : **--**

Q.15 Banks are required to keep some reserves in liquid form with themselves. This is called \_\_\_\_\_.

- Ans
- ☒ 1. Marginal stability scheme
  - ☒ 2. Statutory liquidity ratio
  - ☒ 3. Open market operations
  - ☒ 4. Legal deposit ratio

Question Type : MCQ  
 Question ID : 264330138331  
 Option 1 ID : 264330541931  
 Option 2 ID : 264330541932  
 Option 3 ID : 264330541934  
 Option 4 ID : 264330541933  
 Status : Answered  
 Chosen Option : 2

Q.16 Sodium Hydroxide is the chemical name of which of the following common substances?

- Ans
- ☒ 1. Bleaching Powder
  - ☒ 2. Borax
  - ☒ 3. Caustic Soda
  - ☒ 4. Chalk

Question Type : MCQ  
 Question ID : 264330137068  
 Option 1 ID : 264330536916  
 Option 2 ID : 264330536918  
 Option 3 ID : 264330536915  
 Option 4 ID : 264330536917  
 Status : Answered  
 Chosen Option : 3

Q.17 Which country is the leading producer of coffee in the world?

- Ans
- ☒ 1. USA
  - ☒ 2. Brazil
  - ☒ 3. China
  - ☒ 4. India

Question Type : MCQ  
 Question ID : 264330138338  
 Option 1 ID : 264330541961  
 Option 2 ID : 264330541962  
 Option 3 ID : 264330541959  
 Option 4 ID : 264330541960  
 Status : Answered  
 Chosen Option : 2

Q.18 Which of the following books is written by Mulk Raj Anand?

- Ans
- ☒ 1. The English Teacher
  - ☒ 2. The Blue Umbrella
  - ☒ 3. Untouchable
  - ☒ 4. A Suitable Boy

Question Type : MCQ

Question ID : 264330138326

Option 1 ID : 264330541913

Option 2 ID : 264330541914

Option 3 ID : 264330541912

Option 4 ID : 264330541911

Status : Not Answered

Chosen Option : --

Q.19 Confluence of Bhagirathi and Alaknanda occur at \_\_\_\_\_.

- Ans
- ☒ 1. Vishnuprayag
  - ☒ 2. Nandaprayag
  - ☒ 3. Devaprayag
  - ☒ 4. Rudraprayag

Question Type : MCQ

Question ID : 264330138289

Option 1 ID : 264330541763

Option 2 ID : 264330541766

Option 3 ID : 264330541764

Option 4 ID : 264330541765

Status : Answered

Chosen Option : 4

Q.20 In the Indian Judicial system, PIL stands for \_\_\_\_\_.

- Ans
- ☒ 1. Public Interest Litigation
  - ☒ 2. Periodic Individual Litigation
  - ☒ 3. Private Interest License
  - ☒ 4. Periodic Interest Litigation

Question Type : MCQ

Question ID : 264330138332

Option 1 ID : 264330541936

Option 2 ID : 264330541937

Option 3 ID : 264330541938

Option 4 ID : 264330541935

Status : Answered

Chosen Option : 1



Q.21 Which of the following is one of the Trustees of the PM CARES Fund?

- Ans
- ☒ 1. Shri Azim Premji
  - ☒ 2. Shri Gautam Adani
  - ☒ 3. Shri Mukesh Ambani
  - ☒ 4. Shri Ratan N. Tata

Question Type : MCQ  
 Question ID : 264330138279  
 Option 1 ID : 264330541725  
 Option 2 ID : 264330541724  
 Option 3 ID : 264330541723  
 Option 4 ID : 264330541726  
 Status : Answered  
 Chosen Option : 4

Q.22 Which Mauryan ruler was called Amitrochates by the Greeks?

- Ans
- ☒ 1. Samudragupta
  - ☒ 2. Kanishka
  - ☒ 3. Bindusara
  - ☒ 4. Chandragupta I

Question Type : MCQ  
 Question ID : 264330133969  
 Option 1 ID : 264330524900  
 Option 2 ID : 264330524901  
 Option 3 ID : 264330524899  
 Option 4 ID : 264330524902  
 Status : Answered  
 Chosen Option : 3

Q.23 With respect to social groups in India, PVTGs stands for \_\_\_\_\_.

- Ans
- ☒ 1. Periodic Vulnerable Tribal Groups
  - ☒ 2. Periodic Various Tribal Groups
  - ☒ 3. Particularly Vulnerable Tribal Groups
  - ☒ 4. Particularly Various Tribal Groups

Question Type : MCQ  
 Question ID : 264330133901  
 Option 1 ID : 264330524628  
 Option 2 ID : 264330524630  
 Option 3 ID : 264330524627  
 Option 4 ID : 264330524629  
 Status : Answered  
 Chosen Option : 3

Q.24 Kathak classical dance had its origin in \_\_\_\_\_.

- Ans ☒ 1. Uttar Pradesh  
☒ 2. Rajasthan  
☒ 3. Odisha  
☒ 4. Assam

Question Type : MCQ  
 Question ID : 264330138271  
 Option 1 ID : 264330541694  
 Option 2 ID : 264330541691  
 Option 3 ID : 264330541693  
 Option 4 ID : 264330541692  
 Status : Answered  
 Chosen Option : 1

Q.25 In a drama, Hema spoke "Swaraj is my birth right and I shall have it". Which Indian freedom fighter gave this slogan?

- Ans ☒ 1. Mahatma Gandhi  
☒ 2. Lokmanya Bal Gangadhar Tilak  
☒ 3. Ambika Charan Majumdar  
☒ 4. Bhagat Singh

Question Type : MCQ  
 Question ID : 264330133972  
 Option 1 ID : 264330524911  
 Option 2 ID : 264330524912  
 Option 3 ID : 264330524914  
 Option 4 ID : 264330524913  
 Status : Answered  
 Chosen Option : 2

Section : English Language and Comprehension

Q.1 A sentence has been given with a blank to be filled with an appropriate option. Choose the correct alternative.  
 I went to the lake and \_\_\_\_\_ some of its water in my metallic cup.

- Ans ☒ 1. drank  
☒ 2. drinking  
☒ 3. drunk  
☒ 4. drunken

Question Type : MCQ  
 Question ID : 264330134457  
 Option 1 ID : 264330526800  
 Option 2 ID : 264330526799  
 Option 3 ID : 264330526801  
 Option 4 ID : 264330526802  
 Status : Answered  
 Chosen Option : 1

Q.2 Choose the word that is correctly spelt.

- Ans
- ☐ 1. Indispensible
  - ☐ 2. Liasion
  - ☐ 3. Privilige
  - ☒ 4. Occurred

Question Type : MCQ  
 Question ID : 264330136661  
 Option 1 ID : 264330535366  
 Option 2 ID : 264330535365  
 Option 3 ID : 264330535364  
 Option 4 ID : 264330535363  
 Status : Not Answered  
 Chosen Option : --

Q.3 Select the most appropriate meaning of the given idiom.

Gut Feeling

- Ans
- ☐ 1. To have a dispute with someone
  - ☒ 2. A personal intuition you get, especially when feel something may not be right
  - ☐ 3. Very excited and/or joyful, especially when in love
  - ☐ 4. Doing things recklessly

Question Type : MCQ  
 Question ID : 264330135787  
 Option 1 ID : 264330532025  
 Option 2 ID : 264330532023  
 Option 3 ID : 264330532026  
 Option 4 ID : 264330532024  
 Status : Answered  
 Chosen Option : 2

Q.4 Identify the segment that contains a grammatical error. If there is no error, select 'No error'.

George handing the / hairpin to Ron, / a moment later.

- Ans
- ☒ 1. George handing the
  - ☐ 2. hairpin to Ron,
  - ☐ 3. a moment later.
  - ☐ 4. No error

Question Type : MCQ  
 Question ID : 264330136641  
 Option 1 ID : 264330535287  
 Option 2 ID : 264330535288  
 Option 3 ID : 264330535289  
 Option 4 ID : 264330535290  
 Status : Answered  
 Chosen Option : 1

Q.5 Choose the sentence with no spelling error.

- Ans ☒ 1. He supposed he shuld be thankful.
- ☒ 2. He supposed he should be thankful.
- ☒ 3. He supposed he should be thankfull.
- ☒ 4. He suposed he should be thankful.

Question Type : MCQ  
Question ID : 264330134447  
Option 1 ID : 264330526761  
Option 2 ID : 264330526762  
Option 3 ID : 264330526759  
Option 4 ID : 264330526760  
Status : Answered  
Chosen Option : 2

Q.6 Select the word from the options which is exactly opposite in meaning to the bracketed word given in the sentence below.

Our financial situation had become (precarious).

- Ans ☒ 1. Insecure
- ☒ 2. Stable
- ☒ 3. Delicate
- ☒ 4. Noisy

Question Type : MCQ  
Question ID : 264330136658  
Option 1 ID : 264330535353  
Option 2 ID : 264330535352  
Option 3 ID : 264330535351  
Option 4 ID : 264330535354  
Status : Answered  
Chosen Option : 2

Q.7 Select the most appropriate word for the given group of words.

The medieval forerunner of chemistry

- Ans ☒ 1. Anthropologist
- ☒ 2. Curator
- ☒ 3. Alchemy
- ☒ 4. Anchor

Question Type : MCQ  
Question ID : 264330135781  
Option 1 ID : 264330532002  
Option 2 ID : 264330531999  
Option 3 ID : 264330532001  
Option 4 ID : 264330532000  
Status : Answered  
Chosen Option : 3

**Q.8** Improve the underlined part of the sentence. Choose 'No improvement' as an answer if the sentence is grammatically correct.

I'm recovering from the flu, and I still is feeling weak.

- Ans**
- ☒ 1. No improvement
  - ☒ 2. feels weakened
  - ☒ 3. felt weakest
  - ☒ 4. feel weak

Question Type : MCQ  
 Question ID : 264330135207  
 Option 1 ID : 264330529758  
 Option 2 ID : 264330529757  
 Option 3 ID : 264330529755  
 Option 4 ID : 264330529756  
 Status : Answered  
 Chosen Option : 4

**Q.9** Select the most appropriate synonym of the given word.

Subtle

- Ans**
- ☒ 1. Corrupt
  - ☒ 2. Homely
  - ☒ 3. Exquisite
  - ☒ 4. Wrong

Question Type : MCQ  
 Question ID : 264330136655  
 Option 1 ID : 264330535340  
 Option 2 ID : 264330535339  
 Option 3 ID : 264330535341  
 Option 4 ID : 264330535342  
 Status : Answered  
 Chosen Option : 3

**Q.10** Improve the underlined part of the sentence. Choose 'No improvement' as an answer if the sentence is grammatically correct.

The cat sits in the window and staring at the squirrel.

- Ans**
- ☒ 1. No improvement
  - ☒ 2. stares at
  - ☒ 3. stare on
  - ☒ 4. stared at

Question Type : MCQ  
 Question ID : 264330136773  
 Option 1 ID : 264330535798  
 Option 2 ID : 264330535796  
 Option 3 ID : 264330535795  
 Option 4 ID : 264330535797  
 Status : Answered  
 Chosen Option : 2

Q.11 Select the most appropriate word for the given group of words.

A long wandering or voyage usually marked by many changes of fortune

- Ans ☒ 1. Odyssey  
☒ 2. Ode  
☒ 3. Pilgrimage  
☒ 4. Trip

Question Type : MCQ  
 Question ID : 264330136654  
 Option 1 ID : 264330535335  
 Option 2 ID : 264330535337  
 Option 3 ID : 264330535338  
 Option 4 ID : 264330535336  
 Status : Answered  
 Chosen Option : 1

Q.12 Select the most appropriate option to fill in the blank.  
 Fear evolved over millions of years to protect us from \_\_\_\_\_.

- Ans ☒ 1. birth  
☒ 2. danger  
☒ 3. confidence  
☒ 4. courage

Question Type : MCQ  
 Question ID : 264330134448  
 Option 1 ID : 264330526765  
 Option 2 ID : 264330526763  
 Option 3 ID : 264330526766  
 Option 4 ID : 264330526764  
 Status : Answered  
 Chosen Option : 2

Q.13 Fill in the blank with the most appropriate option.

The plan began to \_\_\_\_\_ once we all met to discuss it.

- Ans ☒ 1. jail  
☒ 2. gel  
☒ 3. jell  
☒ 4. gale

Question Type : MCQ  
 Question ID : 264330136664  
 Option 1 ID : 264330535376  
 Option 2 ID : 264330535375  
 Option 3 ID : 264330535377  
 Option 4 ID : 264330535378  
 Status : Not Answered  
 Chosen Option : --

Q.14 Select the most appropriate antonym of the given word.

Calm

- Ans
- ☒ 1. Harmonious
  - ☒ 2. Frenzy
  - ☒ 3. Placid
  - ☒ 4. Low-key

Question Type : MCQ  
Question ID : 264330136709  
Option 1 ID : 264330535547  
Option 2 ID : 264330535550  
Option 3 ID : 264330535549  
Option 4 ID : 264330535548  
Status : Answered  
Chosen Option : 2

Q.15 The statement below has been given with bracketed text. Select the option with correct idiom for the bracketed text.

Although Shagun was competently doing the project on her own, Pranav couldn't stop himself from (giving her unnecessary advice).

- Ans
- ☒ 1. being a backseat driver
  - ☒ 2. devil's advocate
  - ☒ 3. a bitter pill to swallow
  - ☒ 4. cutting the mustard

Question Type : MCQ  
Question ID : 264330136660  
Option 1 ID : 264330535360  
Option 2 ID : 264330535362  
Option 3 ID : 264330535359  
Option 4 ID : 264330535361  
Status : Not Answered  
Chosen Option : --

Q.16 Select the most appropriate option to substitute the bracketed segment in the given sentence. If there is no need to substitute it, select 'no substitution required'.

(The transit of the Planet of Love happen in pairs), eight years apart every century.

- Ans
- ☒ 1. The transits of the Planet of Love happen in pairs
  - ☒ 2. No substitution required
  - ☒ 3. The transits of the Planet of Love happens at pairs
  - ☒ 4. The transit of Planet of Love happen in pairs

Question Type : MCQ  
Question ID : 264330136670  
Option 1 ID : 264330535401  
Option 2 ID : 264330535402  
Option 3 ID : 264330535399  
Option 4 ID : 264330535400  
Status : Answered  
Chosen Option : 2

Q.17 Find the part of the given sentence that has an error in it. If there is no error, choose 'No error'.

I am not going to help you of this science project.

- Ans
- ✓ 1. help you of
  - ✗ 2. I am not going to
  - ✗ 3. this science project.
  - ✗ 4. No error

Question Type : MCQ  
 Question ID : 264330135256  
 Option 1 ID : 264330529944  
 Option 2 ID : 264330529943  
 Option 3 ID : 264330529945  
 Option 4 ID : 264330529946  
 Status : Answered  
 Chosen Option : 1

Q.18 Choose the word that means the same as the given word.  
 Consensus

- Ans
- ✗ 1. Census
  - ✗ 2. Censure
  - ✗ 3. Puck
  - ✓ 4. Agreement

Question Type : MCQ  
 Question ID : 264330134467  
 Option 1 ID : 264330526837  
 Option 2 ID : 264330526838  
 Option 3 ID : 264330526836  
 Option 4 ID : 264330526835  
 Status : Answered  
 Chosen Option : 4

Q.19 Fill in the blank with the most appropriate option.

I watched him with the excitement of \_\_\_\_\_ him to do anything at any time.

- Ans
- ✗ 1. lacking
  - ✗ 2. excepting
  - ✓ 3. expecting
  - ✗ 4. accepting

Question Type : MCQ  
 Question ID : 264330136645  
 Option 1 ID : 264330535306  
 Option 2 ID : 264330535305  
 Option 3 ID : 264330535303  
 Option 4 ID : 264330535304  
 Status : Answered  
 Chosen Option : 3



**Q.20** Find the part of the given sentence that has an error in it. If there is no error, choose 'No error'.  
Humans have rapidly changing the balance of gases in the atmosphere.

- Ans**
- ☒ 1. Humans have rapidly
  - ☒ 2. changing the balance of
  - ☒ 3. gases in the atmosphere.
  - ☒ 4. No error

Question Type : MCQ  
Question ID : 264330136770  
Option 1 ID : 264330535783  
Option 2 ID : 264330535784  
Option 3 ID : 264330535785  
Option 4 ID : 264330535786  
Status : Answered  
Chosen Option : 1

### Comprehension:

In the following passage some words have been deleted. Fill in the blanks with the help of the alternatives given. Select the most appropriate option for each number.

I was surprised— (1) \_\_\_\_\_ at the news that my father spared me any thought, and second at my brother's compliment, (2) \_\_\_\_\_ it was backhanded. Dhri (3) \_\_\_\_\_ commented on my looks; nor did he encourage me to comment on his. Such useless (4) \_\_\_\_\_, he believed, made people vain. Was this another (5) \_\_\_\_\_ of change?

### SubQuestion No : 21

**Q.21** Select the most appropriate option to fill in the blank No. 1.

- Ans**
- ☒ 1. earlier
  - ☒ 2. first
  - ☒ 3. in the beginning
  - ☒ 4. second

Question Type : MCQ  
Question ID : 264330136700  
Option 1 ID : 264330535513  
Option 2 ID : 264330535512  
Option 3 ID : 264330535514  
Option 4 ID : 264330535511  
Status : Answered  
Chosen Option : 2

### Comprehension:

In the following passage some words have been deleted. Fill in the blanks with the help of the alternatives given. Select the most appropriate option for each number.

I was surprised— (1) \_\_\_\_\_ at the news that my father spared me any thought, and second at my brother's compliment, (2) \_\_\_\_\_ it was backhanded. Dhri (3) \_\_\_\_\_ commented on my looks; nor did he encourage me to comment on his. Such useless (4) \_\_\_\_\_, he believed, made people vain. Was this another (5) \_\_\_\_\_ of change?

### SubQuestion No : 22

Q.22 Select the most appropriate option to fill in the blank No. 2.

- Ans
- ☒ 1. afterwards
  - ☒ 2. all
  - ☒ 3. through
  - ☒ 4. though

Question Type : MCQ  
Question ID : 264330136701  
Option 1 ID : 264330535515  
Option 2 ID : 264330535517  
Option 3 ID : 264330535516  
Option 4 ID : 264330535518  
Status : Answered  
Chosen Option : 4

### Comprehension:

In the following passage some words have been deleted. Fill in the blanks with the help of the alternatives given. Select the most appropriate option for each number.

I was surprised— (1) \_\_\_\_\_ at the news that my father spared me any thought, and second at my brother's compliment, (2) \_\_\_\_\_ it was backhanded. Dhri (3) \_\_\_\_\_ commented on my looks; nor did he encourage me to comment on his. Such useless (4) \_\_\_\_\_, he believed, made people vain. Was this another (5) \_\_\_\_\_ of change?

### SubQuestion No : 23

Q.23 Select the most appropriate option to fill in the blank No. 3.

- Ans
- ☒ 1. always
  - ☒ 2. never
  - ☒ 3. forever
  - ☒ 4. ever

Question Type : MCQ  
Question ID : 264330136702  
Option 1 ID : 264330535521  
Option 2 ID : 264330535519  
Option 3 ID : 264330535522  
Option 4 ID : 264330535520  
Status : Answered  
Chosen Option : 2

### Comprehension:

In the following passage some words have been deleted. Fill in the blanks with the help of the alternatives given. Select the most appropriate option for each number.

I was surprised— (1) \_\_\_\_\_ at the news that my father spared me any thought, and second at my brother's compliment, (2) \_\_\_\_\_ it was backhanded. Dhri (3) \_\_\_\_\_ commented on my looks; nor did he encourage me to comment on his. Such useless (4) \_\_\_\_\_, he believed, made people vain. Was this another (5) \_\_\_\_\_ of change?

### SubQuestion No : 24

Q.24 Select the most appropriate option to fill in the blank No. 4.

- Ans
- ☒ 1. ode
  - ☒ 2. disclosure
  - ☒ 3. babble
  - ☒ 4. talk

Question Type : MCQ

Question ID : 264330136703

Option 1 ID : 264330535524

Option 2 ID : 264330535523

Option 3 ID : 264330535526

Option 4 ID : 264330535525

Status : Answered

Chosen Option : 4

### Comprehension:

In the following passage some words have been deleted. Fill in the blanks with the help of the alternatives given. Select the most appropriate option for each number.

I was surprised— (1) \_\_\_\_\_ at the news that my father spared me any thought, and second at my brother's compliment, (2) \_\_\_\_\_ it was backhanded. Dhri (3) \_\_\_\_\_ commented on my looks; nor did he encourage me to comment on his. Such useless (4) \_\_\_\_\_, he believed, made people vain. Was this another (5) \_\_\_\_\_ of change?

### SubQuestion No : 25

Q.25 Select the most appropriate option to fill in the blank No. 5.

- Ans
- ☒ 1. sign
  - ☒ 2. signature
  - ☒ 3. light
  - ☒ 4. symbolic

Question Type : MCQ

Question ID : 264330136704

Option 1 ID : 264330535528

Option 2 ID : 264330535527

Option 3 ID : 264330535530

Option 4 ID : 264330535529

Status : Answered

Chosen Option : 1