

Multi Tasking Non Technical Staff and Havaladar CBIC and CBN Examination 2022

Roll Number	
Candidate Name	
Venue Name	R K Digital Computer Centre 2
Exam Date	14/06/2023
Exam Time	9:00 AM - 10:30 AM
Subject	MTS Non Tech Havaladar CBIC and CBN Examination 2022

Section : Numerical and Mathematical Ability

Q.1 What is that rate of simple interest at which a sum of money becomes three times of itself in 36 years?

- Ans
- ☒ 1. 7.28 percent
 - ☒ 2. 6.86 percent
 - ☒ 3. 5.55 percent
 - ☒ 4. 6.28 percent

Question Type : MCQ

Question ID : 264330140183

Option 1 ID : 264330549112

Option 2 ID : 264330549111

Option 3 ID : 264330549114

Option 4 ID : 264330549113

Status : Answered

Chosen Option : 3

Q.2 If the radius of a cylinder is decreased by 12 percent, then by how much percent its height must be increased, so that the volume of the cylinder remains same?

- Ans
- ☒ 1. 29.13 percent
 - ☒ 2. 21.78 percent
 - ☒ 3. 42.56 percent
 - ☒ 4. 34.27 percent

Question Type : MCQ

Question ID : 264330140252

Option 1 ID : 264330549387

Option 2 ID : 264330549390

Option 3 ID : 264330549389

Option 4 ID : 264330549388

Status : Answered

Chosen Option : 3

Test Prime

**ALL EXAMS,
ONE SUBSCRIPTION**



70,000+
Mock Tests



**Personalised
Report Card**



**Unlimited
Re-Attempt**



600+
Exam Covered



**Previous Year
Papers**



**500%
Refund**



ATTEMPT FREE MOCK NOW

Q.3 On Selling a watch at $\frac{5}{6}$ of the marked price there is a loss of 10 percent. What will be the ratio of the marked price and cost price of the watch?

- Ans**
- ☒ 1. 28 : 27
 - ☒ 2. 27 : 25
 - ☒ 3. 29 : 25
 - ☒ 4. 25 : 22

Question Type : **MCQ**

Question ID : **264330139943**

Option 1 ID : **264330548151**

Option 2 ID : **264330548152**

Option 3 ID : **264330548154**

Option 4 ID : **264330548153**

Status : **Answered**

Chosen Option : **2**

Q.4 When 20 percent of a number is added to 160, then the result is that number only. What is the value of the number?

- Ans**
- ☒ 1. 160
 - ☒ 2. 150
 - ☒ 3. 200
 - ☒ 4. 240

Question Type : **MCQ**

Question ID : **264330139021**

Option 1 ID : **264330544692**

Option 2 ID : **264330544691**

Option 3 ID : **264330544693**

Option 4 ID : **264330544694**

Status : **Answered**

Chosen Option : **3**

Q.5 A sum of Rs.6000 is divided into two parts. The annual simple interest on the first part at the annual rate of 10 percent is equal to the annual simple interest on the second part at the annual rate of 15 percent. How much is the interest on each part for one year?

- Ans**
- ☒ 1. Rs.300
 - ☒ 2. Rs.330
 - ☒ 3. Rs.360
 - ☒ 4. Rs.420

Question Type : **MCQ**

Question ID : **264330139962**

Option 1 ID : **264330548229**

Option 2 ID : **264330548228**

Option 3 ID : **264330548227**

Option 4 ID : **264330548230**

Status : **Answered**

Chosen Option : **3**

Q.6 If 10 men can do a work in 10 days, then in how much time will 2 men do the same work?

- Ans
- ☒ 1. 75 days
 - ☒ 2. 60 days
 - ☒ 3. 25 days
 - ☒ 4. 50 days

Question Type : MCQ

Question ID : 264330140583

Option 1 ID : 264330550685

Option 2 ID : 264330550683

Option 3 ID : 264330550684

Option 4 ID : 264330550686

Status : Answered

Chosen Option : 4

Q.7 In a mixture of 55 liters, the ratio of acid to base is 7:4, how much base must be added to make the mixture ratio 4:3?

- Ans
- ☒ 1. 5.50 liters
 - ☒ 2. 5.85 liters
 - ☒ 3. 6.25 liters
 - ☒ 4. 4.45 liters

Question Type : MCQ

Question ID : 264330138728

Option 1 ID : 264330543520

Option 2 ID : 264330543521

Option 3 ID : 264330543522

Option 4 ID : 264330543519

Status : Answered

Chosen Option : 3

Q.8 What is the value of $13 \times 12 \div 26 - 5 \times 24 \div 10 + 4 \times 4 - 8$?

- Ans
- ☒ 1. 0
 - ☒ 2. -2
 - ☒ 3. -4
 - ☒ 4. 2

Question Type : MCQ

Question ID : 264330139604

Option 1 ID : 264330546832

Option 2 ID : 264330546833

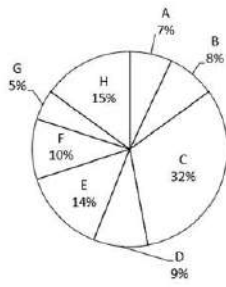
Option 3 ID : 264330546834

Option 4 ID : 264330546831

Status : Answered

Chosen Option : 4

Q.9 The pie chart given below shows the number of bikes sold by 8 different companies. The total number of bikes sold by all these 8 different companies are 15000. The number of bikes sold by a particular company is shown as a percent of total number of bikes sold by all these 8 different companies.



Which of the following statement is NOT correct?

- I. The value of central angle formed by sector A, C and D together is 170.8° .
 II. The value of central angle formed by sector B, E, F and H together is 169.2° .

Ans

- ✓ 1. Only I
 ✗ 2. Only II
 ✗ 3. Neither I nor II
 ✗ 4. Both I and II

Question Type : MCQ

Question ID : 264330140232

Option 1 ID : 264330549307

Option 2 ID : 264330549308

Option 3 ID : 264330549310

Option 4 ID : 264330549309

Status : Not Answered

Chosen Option : --

Q.10 The ratio of incomes of Manish and Pankaj is 13 : 7. If Pankaj gets Rs. 6000 less than Manish, then what is the total income of Manish and Pankaj?

Ans

- ✗ 1. Rs. 25000
 ✓ 2. Rs. 20000
 ✗ 3. Rs. 22500
 ✗ 4. Rs. 24000

Question Type : MCQ

Question ID : 264330139939

Option 1 ID : 264330548138

Option 2 ID : 264330548136

Option 3 ID : 264330548137

Option 4 ID : 264330548135

Status : Answered

Chosen Option : 2

Q.11 What is the Highest Common Factor of 25, 40 and 60?

- Ans
- ☐ 1. 10
 - ☐ 2. 12
 - ☐ 3. 8
 - ☒ 4. 5

Question Type : MCQ

Question ID : 264330140168

Option 1 ID : 264330549051

Option 2 ID : 264330549054

Option 3 ID : 264330549053

Option 4 ID : 264330549052

Status : Answered

Chosen Option : 4

Q.12 The cost of 23 tables is Rs. 52840. How many such tables can be purchased in Rs. 1690880?

- Ans
- ☐ 1. 590
 - ☐ 2. 690
 - ☐ 3. 528
 - ☒ 4. 736

Question Type : MCQ

Question ID : 264330140831

Option 1 ID : 264330551674

Option 2 ID : 264330551671

Option 3 ID : 264330551672

Option 4 ID : 264330551673

Status : Answered

Chosen Option : 4

Q.13 The table given below shows the marks obtained by five students in an examination.

Students	Marks
A	400
B	300
C	150
D	350
E	200

What is the ratio of marks obtained by D to the marks obtained by E?

- Ans
- ☐ 1. 5 : 3
 - ☒ 2. 7 : 4
 - ☐ 3. 5 : 4
 - ☐ 4. 7 : 3

Question Type : MCQ

Question ID : 264330140581

Option 1 ID : 264330550675

Option 2 ID : 264330550677

Option 3 ID : 264330550676

Option 4 ID : 264330550678

Status : Answered

Chosen Option : 2

Q.14 If the cost price is 40% of the selling price, then what is the profit percent?

- Ans
- ☒ 1. 50%
 - ☒ 2. 200%
 - ☒ 3. 100%
 - ☒ 4. 150%

Question Type : MCQ

Question ID : 264330139043

Option 1 ID : 264330544780

Option 2 ID : 264330544781

Option 3 ID : 264330544779

Option 4 ID : 264330544782

Status : Answered

Chosen Option : 4

Q.15 What is the value of $\frac{28}{21} \times \frac{96}{4} \div \frac{125}{5} \times \frac{42}{192} + \frac{297}{125} \times \frac{875}{3} \div \frac{99}{4} \times \frac{6}{25}$?

- Ans
- ☒ 1. 11
 - ☒ 2. 9/25
 - ☒ 3. 7/25
 - ☒ 4. 7

Question Type : MCQ

Question ID : 264330139645

Option 1 ID : 264330546995

Option 2 ID : 264330546998

Option 3 ID : 264330546996

Option 4 ID : 264330546997

Status : Answered

Chosen Option : 3

Q.16 If the ratio of the volumes of two cylinders is 7 : 5 and the ratio of their heights is 5 : 7, then what is the ratio of their radii?

- Ans
- ☒ 1. 7 : 5
 - ☒ 2. 3 : 4
 - ☒ 3. 5 : 9
 - ☒ 4. 4 : 5

Question Type : MCQ

Question ID : 264330140624

Option 1 ID : 264330550845

Option 2 ID : 264330550843

Option 3 ID : 264330550844

Option 4 ID : 264330550846

Status : Answered

Chosen Option : 1

Q.17 A walks at a speed of 10 km/hr and 20 hours after his start, B starts on his cycle after him at the speed of 15 km/hr. How far from the starting point will B catch A?

- Ans**
- ☒ 1. 600 km
 - ☐ 2. 800 km
 - ☐ 3. 1000 km
 - ☐ 4. 700 km

Question Type : **MCQ**
 Question ID : **264330139893**
 Option 1 ID : **264330547952**
 Option 2 ID : **264330547954**
 Option 3 ID : **264330547951**
 Option 4 ID : **264330547953**
 Status : **Answered**
 Chosen Option : **3**

Q.18 A man covers half part of a certain distance at 35 km/hr. He covers 40 percent of remaining distance at the speed of 8 km/hr and covers rest of the distance at the speed of 18 km/hr. What is his average speed for the entire journey?

- Ans**
- ☐ 1. 920/47 km/hr
 - ☐ 2. 680/47 km/hr
 - ☒ 3. 840/47 km/hr
 - ☐ 4. 760/47 km/hr

Question Type : **MCQ**
 Question ID : **264330139935**
 Option 1 ID : **264330548122**
 Option 2 ID : **264330548119**
 Option 3 ID : **264330548121**
 Option 4 ID : **264330548120**
 Status : **Not Answered**
 Chosen Option : **--**

Q.19 An article is bought for Rs. 600 and sold for Rs. 900. Find the gain percent?

- Ans**
- ☐ 1. 40%
 - ☒ 2. 50%
 - ☐ 3. 55%
 - ☐ 4. 45%

Question Type : **MCQ**
 Question ID : **264330140782**
 Option 1 ID : **264330551476**
 Option 2 ID : **264330551475**
 Option 3 ID : **264330551478**
 Option 4 ID : **264330551477**
 Status : **Answered**
 Chosen Option : **2**

Q.20 Rashi can finish a work alone in 10 hours, Gopi alone in 8 hours and Manju alone in 12 hours. How long will they take if they worked together?

Ans

✗ 1. $3\frac{11}{37}$ hours

✗ 2. $4\frac{7}{37}$ hours

✗ 3. $4\frac{3}{37}$ hours

✓ 4. $3\frac{9}{37}$ hours

Question Type : **MCQ**

Question ID : **264330139051**

Option 1 ID : **264330544813**

Option 2 ID : **264330544812**

Option 3 ID : **264330544814**

Option 4 ID : **264330544811**

Status : **Answered**

Chosen Option : **4**

Section : Reasoning Ability and Problem Solving



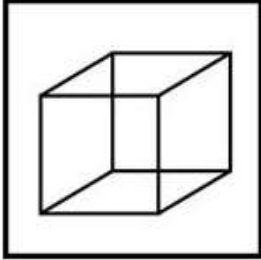
Q.1 Select the option figure in which the given figure (X) is embedded as its part (rotation is NOT allowed).



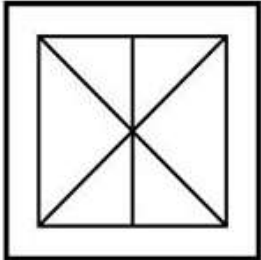
X

Ans

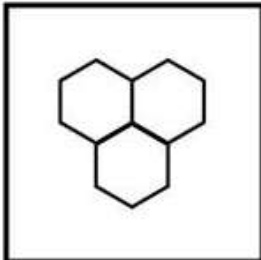
✗ 1.



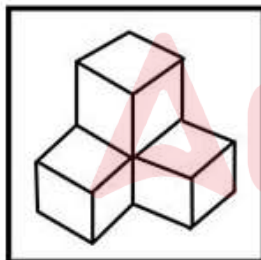
✗ 2.



✗ 3.



✓ 4.



Question Type : MCQ

Question ID : 264330140150

Option 1 ID : 264330548981

Option 2 ID : 264330548982

Option 3 ID : 264330548979

Option 4 ID : 264330548980

Status : Answered

Chosen Option : 4

Q.2 If A denotes 'addition', B denotes 'multiplication', C denotes 'subtraction', and D denotes 'division', then what will be the value of the following equation?
11 C 5 A (9 D 3) B 2 = ?

- Ans** ☒ 1. 12
☒ 2. 10
☒ 3. 7
☒ 4. 9

Question Type : **MCQ**
 Question ID : **264330138783**
 Option 1 ID : **264330543741**
 Option 2 ID : **264330543739**
 Option 3 ID : **264330543740**
 Option 4 ID : **264330543742**
 Status : **Answered**
 Chosen Option : **1**

Q.3 Which of the following letter cluster will replace the question mark (?) in the given series?
VC, WD, XE, YF, ZG, AH, ?

- Ans** ☒ 1. BI
☒ 2. IB
☒ 3. BJ
☒ 4. ID

Question Type : **MCQ**
 Question ID : **264330140392**
 Option 1 ID : **264330549947**
 Option 2 ID : **264330549948**
 Option 3 ID : **264330549949**
 Option 4 ID : **264330549950**
 Status : **Answered**
 Chosen Option : **1**

Q.4 In the following question, select the missing number of the given series.
1, 3, 9, 27, 81, ?

- Ans** ☒ 1. 283
☒ 2. 343
☒ 3. 313
☒ 4. 243

Question Type : **MCQ**
 Question ID : **264330139982**
 Option 1 ID : **264330548309**
 Option 2 ID : **264330548310**
 Option 3 ID : **264330548307**
 Option 4 ID : **264330548308**
 Status : **Answered**
 Chosen Option : **4**

Q.5 In the following question below are given some statements followed by some conclusions based on those statements. Taking the given statements to be true even if they seem to be at variance from commonly known facts. Read all the conclusions and then decide which of the given conclusion logically follows the given statements.

Statements:

I. Some T are M.

II. No T is Y.

Conclusion:

I. Some M are not Y.

II. Some M are T.

III. All M are Y.

- Ans**
- ☒ 1. Both conclusions II and III follows
 - ☒ 2. Neither conclusion follows
 - ☒ 3. Both conclusions I and II follows
 - ☒ 4. Both conclusions I and III follows

Question Type : **MCQ**

Question ID : **264330139538**

Option 1 ID : **264330546568**


Option 2 ID : **264330546570**

Option 3 ID : **264330546569**

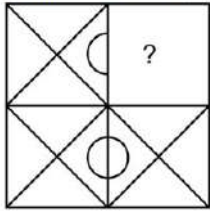
Option 4 ID : **264330546567**

Status : **Answered**

Chosen Option : **3**

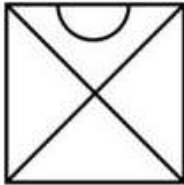


Q.6 Select the option figure that will replace the question mark (?) in the figure given below to complete the pattern.
(rotation is not allowed)

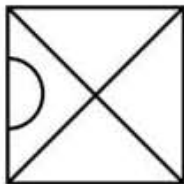


Ans

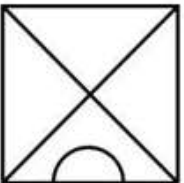
✗ 1.



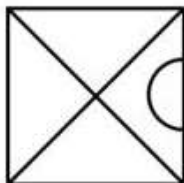
✓ 2.



✗ 3.



✗ 4.



Question Type : MCQ

Question ID : 264330140411

Option 1 ID : 264330550026

Option 2 ID : 264330550025

Option 3 ID : 264330550024

Option 4 ID : 264330550023

Status : Answered

Chosen Option : 2

Q.7 Rajesh, Ramesh, Suresh, Mukesh and Pritesh are five friends who scored different marks in a test. Two people scored between Rajesh and Mukesh. Ramesh scored the highest marks. Pritesh scored more than Suresh. Who scored the fourth highest marks?

Ans ✓ 1. Suresh

✗ 2. Rajesh

✗ 3. Mukesh

✗ 4. Ramesh

Question Type : MCQ

Question ID : 264330140460

Option 1 ID : 264330550221

Option 2 ID : 264330550219

Option 3 ID : 264330550222

Option 4 ID : 264330550220

Status : Answered

Chosen Option : 1

Q.8 In a certain code language, 'BROWN' is written as 'CSPXO' and 'CHAIR' is written as 'DIBJS'. How will 'COACH' be written in that language?

- Ans**
- ☐ 1. DPCDJ
 - ☐ 2. DPBDK
 - ☐ 3. DPBDJ
 - ☒ 4. DPBDI

Question Type : **MCQ**
 Question ID : **264330140436**
 Option 1 ID : **264330550125**
 Option 2 ID : **264330550126**
 Option 3 ID : **264330550124**
 Option 4 ID : **264330550123**
 Status : **Answered**
 Chosen Option : **4**

Q.9 A, N, E, H and S are sitting on a bench facing north. A is sitting to the immediate right of S and S is at one of the corners. E is sitting to the right of H, and to the left of N. Who is sitting to the immediate left of H?

- Ans**
- ☐ 1. N
 - ☒ 2. A
 - ☐ 3. S
 - ☐ 4. E

Question Type : **MCQ**
 Question ID : **264330140140**
 Option 1 ID : **264330548941**
 Option 2 ID : **264330548939**
 Option 3 ID : **264330548942**
 Option 4 ID : **264330548940**
 Status : **Answered**
 Chosen Option : **2**

Q.10 In a certain code language, 'BEARD' is coded as '30597', 'BOWEL' is coded as '17832', 'AWARD' is coded as '05209'. What is the code for 'O' in that code language?

- Ans**
- ☐ 1. 2
 - ☒ 2. 8
 - ☐ 3. 3
 - ☐ 4. 7

Question Type : **MCQ**
 Question ID : **264330140960**
 Option 1 ID : **264330552190**
 Option 2 ID : **264330552188**
 Option 3 ID : **264330552189**
 Option 4 ID : **264330552187**
 Status : **Answered**
 Chosen Option : **2**

Q.11 Which of the following numbers will replace the question mark (?) in the given series?

27, 31, 35, 39, 43, 47, ?

- Ans
- ☒ 1. 46
 - ☒ 2. 59
 - ☒ 3. 51
 - ☒ 4. 50

Question Type : MCQ

Question ID : 264330138779

Option 1 ID : 264330543723

Option 2 ID : 264330543725

Option 3 ID : 264330543724

Option 4 ID : 264330543726

Status : Answered

Chosen Option : 3

Q.12 Select the option that is related to the third word in the same way as the second word is related to the first word.

Mumbai : Maharashtra :: Chennai : ?

- Ans
- ☒ 1. Maharashtra
 - ☒ 2. Rajasthan
 - ☒ 3. Haryana
 - ☒ 4. Tamil Nadu

Question Type : MCQ

Question ID : 264330140014

Option 1 ID : 264330548436

Option 2 ID : 264330548435

Option 3 ID : 264330548437

Option 4 ID : 264330548438

Status : Answered

Chosen Option : 4

Q.13 Select the option that is related to the third word in the same way as the second word is related to the first word.

Rational : Illogical :: Scanty : ?

- Ans
- ☒ 1. Moving
 - ☒ 2. Abundant
 - ☒ 3. Nodding
 - ☒ 4. Less

Question Type : MCQ

Question ID : 264330141201

Option 1 ID : 264330553142

Option 2 ID : 264330553141

Option 3 ID : 264330553140

Option 4 ID : 264330553139

Status : Answered

Chosen Option : 2

Q.14 Select the correct mirror image of the given figure when the mirror is placed at MN as shown below.



Ans

- ✗ 1. 5 4 0 0 8 1
- ✓ 2. 7 8 0 0 4 2
- ✗ 3. 7 8 6 0 4 2
- ✗ 4. 7 8 6 9 4 2

Question Type : MCQ

Question ID : 264330140131

Option 1 ID : 264330548906

Option 2 ID : 264330548905

Option 3 ID : 264330548904

Option 4 ID : 264330548903

Status : Answered

Chosen Option : 2

Q.15 In the following question below are given some statements followed by some conclusions based on those statements.

Taking the given statements to be true even if they seem to be at variance from commonly known facts. Read all the conclusions and then decide which of the given conclusion logically follows the given statements.

Statements:

I. All red are bird.

II. All bird are dog.

Conclusion:

I. Some bird are dog.

II. Some dog are not red.

Ans

- ✗ 1. Only conclusion II follows
- ✗ 2. Both conclusions I and II follows
- ✓ 3. Only conclusion I follows
- ✗ 4. Neither conclusion follows

Question Type : MCQ

Question ID : 264330139577

Option 1 ID : 264330546724

Option 2 ID : 264330546725

Option 3 ID : 264330546723

Option 4 ID : 264330546726

Status : Answered

Chosen Option : 2

Q.16 Select the option that is related to the third number in the same way as the second number is related to the first number.

42 : 56 :: 24 : ?

- Ans
- ☐ 1. 48
 - ☐ 2. 16
 - ☒ 3. 32
 - ☐ 4. 40

Question Type : MCQ

Question ID : 264330140086

Option 1 ID : 264330548725

Option 2 ID : 264330548726

Option 3 ID : 264330548724

Option 4 ID : 264330548723

Status : Answered

Chosen Option : 3

Q.17 Eight friends Rahul, Ram, Ramesh, Sohan, Sahil, Anil, Sonu and Monu are sitting around a circular table facing towards the centre (not necessarily in the same order). Monu is to immediate right of Sahil. Sonu is third to the left of Sahil. Ram is third to the right of Anil. Sohan is second to the right of Monu. Who is fourth to the right of Monu?

- Ans
- ☐ 1. Rahul
 - ☐ 2. Ram
 - ☐ 3. Sahil
 - ☒ 4. Sonu

Question Type : MCQ

Question ID : 264330140059

Option 1 ID : 264330548617

Option 2 ID : 264330548616

Option 3 ID : 264330548618

Option 4 ID : 264330548615

Status : Answered

Chosen Option : 4

Q.18 Which two signs should be interchanged to make the given equation correct?

$$5 \div 4 \times 8 = 7 - 3$$

- Ans
- ☐ 1. \div and $-$
 - ☒ 2. $=$ and $-$
 - ☐ 3. \times and $-$
 - ☐ 4. \div and $=$

Question Type : MCQ

Question ID : 264330140407

Option 1 ID : 264330550008

Option 2 ID : 264330550009

Option 3 ID : 264330550007

Option 4 ID : 264330550010

Status : Answered

Chosen Option : 2

Q.19 In a certain code language, 'DRINK' is written as 'ETLRP'. How will 'ABOVE' be written in that language?

- Ans
- ☒ 1. BDRYJ
 - ☒ 2. BDRZJ
 - ☒ 3. BRDXJ
 - ☒ 4. BDRJX

Question Type : MCQ

Question ID : 264330135352

Option 1 ID : 264330530318

Option 2 ID : 264330530317

Option 3 ID : 264330530315

Option 4 ID : 264330530316

Status : Answered

Chosen Option : 2

Q.20 Select the set in which the numbers are related in the same way as are the numbers of the following sets.(NOTE : Operations should be performed on the whole numbers, without breaking down the numbers into its constituent digits. E.g 13 – Operations on 13 such as adding /subtracting /multiplying etc. to 13 can be performed. Breaking down 13 into 1 and 3 and then performing mathematical operations on 1 and 3 is not allowed)

(19, 37, 72)
(15, 29, 56)

- Ans
- ☒ 1. (11, 21, 40)
 - ☒ 2. (16, 30, 62)
 - ☒ 3. (18, 35, 69)
 - ☒ 4. (12, 25, 50)

Question Type : MCQ

Question ID : 264330140047

Option 1 ID : 264330548569

Option 2 ID : 264330548567

Option 3 ID : 264330548568

Option 4 ID : 264330548570

Status : Answered

Chosen Option : 1

Section : General Awareness

Q.1 Rabindranath Tagore started Santiniketan institute in _____.

- Ans
- ☒ 1. 1905
 - ☒ 2. 1901
 - ☒ 3. 1903
 - ☒ 4. 1899

Question Type : MCQ

Question ID : 264330139721

Option 1 ID : 264330547302

Option 2 ID : 264330547300

Option 3 ID : 264330547301

Option 4 ID : 264330547299

Status : Answered

Chosen Option : 2

Q.2 Lomas Rishi cave is situated in which of the following Hills?

- Ans
- ☒ 1. Vindhyas Hills
 - ☒ 2. Barabar Hills
 - ☒ 3. Aravali Hills
 - ☒ 4. Satpura Hills

Question Type : MCQ
Question ID : 264330139750
Option 1 ID : 264330547418
Option 2 ID : 264330547415
Option 3 ID : 264330547416
Option 4 ID : 264330547417
Status : Answered
Chosen Option : 2

Q.3 Archana wishes to contest for Lok Sabha elections in India. What is the maximum limit of constituencies that can she contest?

- Ans
- ☒ 1. One
 - ☒ 2. Four
 - ☒ 3. Three
 - ☒ 4. Two

Question Type : MCQ
Question ID : 264330140722
Option 1 ID : 264330551235
Option 2 ID : 264330551238
Option 3 ID : 264330551237
Option 4 ID : 264330551236
Status : Answered
Chosen Option : 4

Q.4 Nahid Siddiqui was awarded Milapfest's Lifetime Achievement Award in October 2017. She is recognized for which dance form?

- Ans
- ☒ 1. Odissi
 - ☒ 2. Sattriya
 - ☒ 3. Kuchipudi
 - ☒ 4. Kathak

Question Type : MCQ
Question ID : 264330139705
Option 1 ID : 264330547235
Option 2 ID : 264330547238
Option 3 ID : 264330547236
Option 4 ID : 264330547237
Status : Not Answered
Chosen Option : --

Q.5 What chemical element does "Mn" stand for in the science periodic table?

- Ans
- ☒ 1. Magnesium
 - ☒ 2. Manganese
 - ☒ 3. Mendelevium
 - ☒ 4. Molybdenum

Question Type : MCQ
 Question ID : 264330140706
 Option 1 ID : 264330551173
 Option 2 ID : 264330551174
 Option 3 ID : 264330551172
 Option 4 ID : 264330551171
 Status : Answered
 Chosen Option : 2

Q.6 The moon moves around the earth in about _____ days.

- Ans
- ☒ 1. 21
 - ☒ 2. 23
 - ☒ 3. 27
 - ☒ 4. 25

Question Type : MCQ
 Question ID : 264330138989
 Option 1 ID : 264330544563
 Option 2 ID : 264330544564
 Option 3 ID : 264330544566
 Option 4 ID : 264330544565
 Status : Answered
 Chosen Option : 3

Q.7 Which of the following articles of the Indian constitution provides for 'National commission for Scheduled Castes'?

- Ans
- ☒ 1. Article 337
 - ☒ 2. Article 344
 - ☒ 3. Article 343
 - ☒ 4. Article 338

Question Type : MCQ
 Question ID : 264330139877
 Option 1 ID : 264330547887
 Option 2 ID : 264330547890
 Option 3 ID : 264330547889
 Option 4 ID : 264330547888
 Status : Answered
 Chosen Option : 4

Q.8 The historical Sher-Shah Suri Marg runs between ____.

- Ans
- ☐ 1. Kanpur and Kanyakumari
 - ☐ 2. Delhi and Manali
 - ☒ 3. Delhi and Amritsar
 - ☐ 4. Lucknow and Kolkata

Question Type : MCQ
 Question ID : 264330140915
 Option 1 ID : 264330552010
 Option 2 ID : 264330552009
 Option 3 ID : 264330552007
 Option 4 ID : 264330552008
 Status : Answered
 Chosen Option : 3

Q.9 How many silver medals has won by India at Tokyo Olympics 2020 (played in 2021)?

- Ans
- ☐ 1. 1
 - ☐ 2. 3
 - ☒ 3. 2
 - ☐ 4. 4

Question Type : MCQ
 Question ID : 264330139652
 Option 1 ID : 264330547023
 Option 2 ID : 264330547025
 Option 3 ID : 264330547024
 Option 4 ID : 264330547026
 Status : Answered
 Chosen Option : 3

Q.10 Which famous female personality received the Padma Shri award for manipuri classical dance?

- Ans
- ☐ 1. Kalabati Devi
 - ☐ 2. Devyani Chalia
 - ☒ 3. Elam Endira Devi
 - ☐ 4. Charu Mathur

Question Type : MCQ
 Question ID : 264330140695
 Option 1 ID : 264330551128
 Option 2 ID : 264330551129
 Option 3 ID : 264330551127
 Option 4 ID : 264330551130
 Status : Not Answered
 Chosen Option : --

Q.11 Which king was shown on his coins as a Veena player?

- Ans
- ☒ 1. Ashoka
 - ☒ 2. Chandragupta Maurya
 - ☒ 3. Samudragupta
 - ☒ 4. Chandragupta I

Question Type : MCQ
 Question ID : 264330139887
 Option 1 ID : 264330547927
 Option 2 ID : 264330547930
 Option 3 ID : 264330547928
 Option 4 ID : 264330547929
 Status : Answered
 Chosen Option : 3

Q.12 Article 51A of the Indian constitution provides for _____.

- Ans
- ☒ 1. Fundamental Duties
 - ☒ 2. Fundamental Rights
 - ☒ 3. Directive Principles of State Policy
 - ☒ 4. Union Executive

Question Type : MCQ
 Question ID : 264330138958
 Option 1 ID : 264330544440
 Option 2 ID : 264330544439
 Option 3 ID : 264330544441
 Option 4 ID : 264330544442
 Status : Answered
 Chosen Option : 1

Q.13 Which of the following profession is a type of seasonal unemployment?

- Ans
- ☒ 1. Doctors
 - ☒ 2. Information Technology professional
 - ☒ 3. Accountants
 - ☒ 4. Farmer

Question Type : MCQ
 Question ID : 264330140663
 Option 1 ID : 264330550999
 Option 2 ID : 264330551000
 Option 3 ID : 264330551002
 Option 4 ID : 264330551001
 Status : Answered
 Chosen Option : 4

Q.14 Limestone is a type of _____.

- Ans ☒ 1. Sedimentary rock
☐ 2. Metamorphic rock
☐ 3. Igneous rock
☐ 4. Volcanic rock

Question Type : MCQ

Question ID : 264330140300

Option 1 ID : 264330549580

Option 2 ID : 264330549581

Option 3 ID : 264330549579

Option 4 ID : 264330549582

Status : Answered

Chosen Option : 2

Q.15 Which country won the Women's Asia Cup 2022 of cricket?

- Ans ☐ 1. Pakistan
☐ 2. Bangladesh
☒ 3. India
☐ 4. Sri Lanka

Question Type : MCQ

Question ID : 264330140698

Option 1 ID : 264330551142

Option 2 ID : 264330551140

Option 3 ID : 264330551141

Option 4 ID : 264330551139

Status : Answered

Chosen Option : 3

Q.16 Which of the following is NOT an example of "viviparous" animals?

- Ans ☒ 1. Bird
☐ 2. Dog
☐ 3. Cat
☐ 4. Cow

Question Type : MCQ

Question ID : 264330139712

Option 1 ID : 264330547266

Option 2 ID : 264330547264

Option 3 ID : 264330547263

Option 4 ID : 264330547265

Status : Answered

Chosen Option : 1

Q.17 The transformation of the larva into an adult through drastic change is called _____.

- Ans
- ☐ 1. budding
 - ☐ 2. shifting
 - ☐ 3. bulging
 - ☒ 4. metamorphosis

Question Type : MCQ

Question ID : 264330139761

Option 1 ID : 264330547459

Option 2 ID : 264330547461

Option 3 ID : 264330547462

Option 4 ID : 264330547460

Status : Answered

Chosen Option : 4

Q.18 The Ahom Kingdom in India was located in the _____.

- Ans
- ☐ 1. Chota Nagpur plateau
 - ☐ 2. Vindhayas
 - ☒ 3. Brahmaputra valley
 - ☐ 4. Coastal Odisha

Question Type : MCQ

Question ID : 264330139695

Option 1 ID : 264330547195

Option 2 ID : 264330547196

Option 3 ID : 264330547197

Option 4 ID : 264330547198

Status : Answered

Chosen Option : 3

Q.19 The Directive Principles of State Policy is included in which part of the Indian constitution?

- Ans
- ☐ 1. Part II
 - ☐ 2. Part III
 - ☐ 3. Part I
 - ☒ 4. Part IV

Question Type : MCQ

Question ID : 264330140312

Option 1 ID : 264330549627

Option 2 ID : 264330549630

Option 3 ID : 264330549629

Option 4 ID : 264330549628

Status : Answered

Chosen Option : 4

Q.20 An annual allowance for wear and tear of a capital good is known as _____.

- Ans
- ☒ 1. gross investment
 - ☒ 2. devaluation
 - ☒ 3. depreciation
 - ☒ 4. disinvestment

Question Type : MCQ
 Question ID : 264330139658
 Option 1 ID : 264330547049
 Option 2 ID : 264330547047
 Option 3 ID : 264330547048
 Option 4 ID : 264330547050
 Status : Answered
 Chosen Option : 3

Q.21 Indore gharana is one of the vocal gharanas of Indian classical music. It was founded by _____.

- Ans
- ☒ 1. Ustad Amir Khan
 - ☒ 2. Doreswamy V. Iyengar
 - ☒ 3. Dr. Lakshminarayana Subramaniam
 - ☒ 4. Ustad Bundu Khan

Question Type : MCQ
 Question ID : 264330139729
 Option 1 ID : 264330547333
 Option 2 ID : 264330547332
 Option 3 ID : 264330547334
 Option 4 ID : 264330547331
 Status : Answered
 Chosen Option : 1

Q.22 Guru Bipin Singh is associated with _____ dance form of India.

- Ans
- ☒ 1. Kathak
 - ☒ 2. Kalbelia
 - ☒ 3. Manipuri
 - ☒ 4. Bachata

Question Type : MCQ
 Question ID : 264330140703
 Option 1 ID : 264330551160
 Option 2 ID : 264330551161
 Option 3 ID : 264330551159
 Option 4 ID : 264330551162
 Status : Answered
 Chosen Option : 3

Q.23 Diwali marks the day when lord Ram returned to Ayodhya after _____ years of exile after defeating king ravan.

- Ans
- ☒ 1. 11
 - ☒ 2. 7
 - ☒ 3. 12
 - ☒ 4. 14

Question Type : MCQ

Question ID : 264330139724

Option 1 ID : 264330547312

Option 2 ID : 264330547311

Option 3 ID : 264330547313

Option 4 ID : 264330547314

Status : Answered

Chosen Option : 4

Q.24 As per the 2011 census of India, which Indian state has the lowest sex ratio?

- Ans
- ☒ 1. Bihar
 - ☒ 2. Punjab
 - ☒ 3. Haryana
 - ☒ 4. Jharkhand

Question Type : MCQ

Question ID : 264330140687

Option 1 ID : 264330551096

Option 2 ID : 264330551098

Option 3 ID : 264330551097

Option 4 ID : 264330551095

Status : Answered

Chosen Option : 3

Q.25 Shiv Dayal Saheb, a banker from Agra, founded the Radha Soami Satsang in _____.

- Ans
- ☒ 1. 1842
 - ☒ 2. 1880
 - ☒ 3. 1861
 - ☒ 4. 1875

Question Type : MCQ

Question ID : 264330141062

Option 1 ID : 264330552595

Option 2 ID : 264330552598

Option 3 ID : 264330552596

Option 4 ID : 264330552597

Status : Answered

Chosen Option : 3

Q.1 In the following question, out of the given four alternatives, select the alternative which best expresses the meaning of the Idiom/Phrase.
In the nick of time

- Ans** ☒ 1. Only just in time
☐ 2. Frequently
☐ 3. Every time
☐ 4. Meantime

Question Type : **MCQ**
Question ID : **264330141166**
Option 1 ID : **264330553008**
Option 2 ID : **264330553010**
Option 3 ID : **264330553009**
Option 4 ID : **264330553007**
Status : **Answered**
Chosen Option : **1**

Q.2 Fill in the blank with the most appropriate option.

Pay attention to what's happening and make _____ adjustments based on your personal experience.

- Ans** ☐ 1. impartial
☐ 2. honest
☐ 3. placid
☒ 4. reasonable

Question Type : **MCQ**
Question ID : **264330136586**
Option 1 ID : **264330535076**
Option 2 ID : **264330535075**
Option 3 ID : **264330535078**
Option 4 ID : **264330535077**
Status : **Answered**
Chosen Option : **4**

Q.3 Select the most appropriate option to substitute the bracketed segment in the given sentence. If there is no need to substitute it, select 'no substitution required'.
(Many a opportunities came and went while) he laid wasted.

- Ans** ☒ 1. Many an opportunity came and went while
☐ 2. No substitution required
☐ 3. Many an opportunities came and gone while
☐ 4. Many opportunities come and went as

Question Type : **MCQ**
Question ID : **264330136746**
Option 1 ID : **264330535691**
Option 2 ID : **264330535694**
Option 3 ID : **264330535692**
Option 4 ID : **264330535693**
Status : **Answered**
Chosen Option : **2**

Q.4 Find the part of the given sentence that has an error in it. If there is no error, choose 'No error'.

The participants responds to a series of statements at the dance competition.

- Ans
- ☒ 1. to a series of statements
 - ☒ 2. The participants responds
 - ☒ 3. No error
 - ☒ 4. at the dance competition.

Question Type : MCQ

Question ID : 264330135536

Option 1 ID : 264330531048

Option 2 ID : 264330531047

Option 3 ID : 264330531050

Option 4 ID : 264330531049

Status : Answered

Chosen Option : 4

Q.5 Select the most appropriate option to substitute the bracketed segment in the given sentence. If there is no need to substitute it, select 'no substitution required'.

(Neither of the political factions have had much) interest in environmental intent.

- Ans
- ☒ 1. No substitution required
 - ☒ 2. Neither of the political factions have had any
 - ☒ 3. Neither of the political faction has have much
 - ☒ 4. Neither of the political factions has had much

Question Type : MCQ

Question ID : 264330136539

Option 1 ID : 264330534898

Option 2 ID : 264330534896

Option 3 ID : 264330534895

Option 4 ID : 264330534897

Status : Answered

Chosen Option : 3

Q.6 Select the most appropriate option to fill in the blank.

Lumber has many _____ beyond home building.

- Ans
- ☒ 1. trunks
 - ☒ 2. loses
 - ☒ 3. pluses
 - ☒ 4. uses

Question Type : MCQ

Question ID : 264330136368

Option 1 ID : 264330534241

Option 2 ID : 264330534239

Option 3 ID : 264330534240

Option 4 ID : 264330534242

Status : Answered

Chosen Option : 4

Q.7 The statement below has been given with bracketed text. Select the option with correct idiom for the bracketed text.
Don't start to think we've (won this game certainly), gentlemen.

- Ans**
- ☒ 1. swallowed the bitter truth
 - ☒ 2. held our horses
 - ☒ 3. have skin in the game
 - ☒ 4. got this game in the bag

Question Type : **MCQ**
Question ID : **264330135866**
Option 1 ID : **264330532328**
Option 2 ID : **264330532330**
Option 3 ID : **264330532329**
Option 4 ID : **264330532327**
Status : **Answered**
Chosen Option : **4**

Q.8 Select the most appropriate antonym to substitute the bracketed word in the given sentence.

He is (frank) about what he sees as the shortcomings of his great predecessors.

- Ans**
- ☒ 1. assisting
 - ☒ 2. cheerful
 - ☒ 3. evasive
 - ☒ 4. fortunate

Question Type : **MCQ**
Question ID : **264330136502**
Option 1 ID : **264330534754**
Option 2 ID : **264330534751**
Option 3 ID : **264330534752**
Option 4 ID : **264330534753**
Status : **Answered**
Chosen Option : **3**

Q.9 Select the most appropriate option to fill in the blank.

Many people may not find the rewards _____ with the time and effort required.

- Ans**
- ☒ 1. collude
 - ☒ 2. coffer
 - ☒ 3. commensurate
 - ☒ 4. capable

Question Type : **MCQ**
Question ID : **264330136490**
Option 1 ID : **264330534708**
Option 2 ID : **264330534710**
Option 3 ID : **264330534707**
Option 4 ID : **264330534709**
Status : **Answered**
Chosen Option : **3**

Q.10 Select the correctly spelt word.

- Ans
- ☐ 1. Contribute
 - ☐ 2. Contribbute
 - ☒ 3. Contribute
 - ☐ 4. Contribuet

Question Type : MCQ

Question ID : 264330136209

Option 1 ID : 264330533629

Option 2 ID : 264330533628

Option 3 ID : 264330533630

Option 4 ID : 264330533627

Status : Answered

Chosen Option : 3

Q.11 Four sentences are given, out of which three have spelling errors. Choose the sentence with all correctly spelt words.

- Ans
- ☐ 1. Microsoft announced plans to make bids to acquire Byte Dance.
 - ☒ 2. The job of the artist is to make the revolution perceptible.
 - ☐ 3. Except that it'll be rooted in awkward, funny and compelling reality.
 - ☐ 4. She used the 14th Amendment to acheive equality.

Question Type : MCQ

Question ID : 264330136158

Option 1 ID : 264330533432

Option 2 ID : 264330533433

Option 3 ID : 264330533431

Option 4 ID : 264330533434

Status : Answered

Chosen Option : 1

Q.12 Select the most appropriate synonym of the given word.

Golden

- Ans
- ☐ 1. Dull
 - ☐ 2. Gloomy
 - ☒ 3. Shining
 - ☐ 4. Dark

Question Type : MCQ

Question ID : 264330136177

Option 1 ID : 264330533503

Option 2 ID : 264330533505

Option 3 ID : 264330533506

Option 4 ID : 264330533504

Status : Answered

Chosen Option : 3

Q.13 Identify the segment that contains a grammatical error. If there is no error, select 'No error'.

The NCGG has been/ set up to assist in / bring about governance reforms through studies.

- Ans
- ☒ 1. set up to assist in
 - ☒ 2. bring about governance reforms through studies.
 - ☒ 3. The NCGG has been
 - ☒ 4. No error

Question Type : MCQ
Question ID : 264330136563
Option 1 ID : 264330534988
Option 2 ID : 264330534989
Option 3 ID : 264330534987
Option 4 ID : 264330534990
Status : Answered
Chosen Option : 2

Q.14 Improve the underlined part of the sentence. Choose 'No improvement' as an answer if the sentence is grammatically correct.

I try to eat less meat and more vegetables.

- Ans
- ☒ 1. to eats less
 - ☒ 2. to eat lesser
 - ☒ 3. to ate less
 - ☒ 4. No improvement

Question Type : MCQ
Question ID : 264330141212
Option 1 ID : 264330553184
Option 2 ID : 264330553183
Option 3 ID : 264330553185
Option 4 ID : 264330553186
Status : Answered
Chosen Option : 2

Q.15 Identify the segment that contains a grammatical error. If there is no error, select 'No error'.

Eddie just panics/ when it gets close/ nearer the end.

- Ans
- ☒ 1. nearer the end.
 - ☒ 2. No error
 - ☒ 3. when it gets close
 - ☒ 4. Eddie just panics

Question Type : MCQ
Question ID : 264330136536
Option 1 ID : 264330534885
Option 2 ID : 264330534886
Option 3 ID : 264330534884
Option 4 ID : 264330534883
Status : Answered
Chosen Option : 1

Q.16 Fill in the blank with the most appropriate option.

The only one _____ shattered their monotony by his visits was Krishna.

- Ans
- ☒ 1. whom ever
 - ☒ 2. whatever
 - ☒ 3. who ever
 - ☒ 4. which ever

Question Type : MCQ
Question ID : 264330136416
Option 1 ID : 264330534427
Option 2 ID : 264330534429
Option 3 ID : 264330534430
Option 4 ID : 264330534428
Status : Answered
Chosen Option : 3

Q.17 Select the most appropriate antonym of the given word.

Irreverent

- Ans
- ☒ 1. Restoration
 - ☒ 2. Respectful
 - ☒ 3. Dormant
 - ☒ 4. Relevant

Question Type : MCQ
Question ID : 264330135863
Option 1 ID : 264330532316
Option 2 ID : 264330532315
Option 3 ID : 264330532317
Option 4 ID : 264330532318
Status : Answered
Chosen Option : 2

Q.18 Select the most appropriate word for the given group of words.

One who hates or discriminates against women.

- Ans
- ☒ 1. Misogynist
 - ☒ 2. Pessimist
 - ☒ 3. Feminist
 - ☒ 4. Atheist

Question Type : MCQ
Question ID : 264330135859
Option 1 ID : 264330532300
Option 2 ID : 264330532301
Option 3 ID : 264330532299
Option 4 ID : 264330532302
Status : Answered
Chosen Option : 1

Q.19 Select the most appropriate word for the given group of words.

A violent wind that has a circular movement

- Ans
- ☒ 1. Drought
 - ☒ 2. Deluge
 - ☒ 3. Tsunami
 - ☒ 4. Hurricane

Question Type : MCQ
 Question ID : 264330136576
 Option 1 ID : 264330535037
 Option 2 ID : 264330535038
 Option 3 ID : 264330535035
 Option 4 ID : 264330535036
 Status : Answered
 Chosen Option : 4

Q.20 Select the appropriate synonym for the underlined word.

I am parched, dehydrated to the point of pain.

- Ans
- ☒ 1. Braced
 - ☒ 2. Moistened
 - ☒ 3. Drained
 - ☒ 4. Washed

Question Type : MCQ
 Question ID : 264330141213
 Option 1 ID : 264330553189
 Option 2 ID : 264330553188
 Option 3 ID : 264330553190
 Option 4 ID : 264330553187
 Status : Answered
 Chosen Option : 3

Comprehension:

In the following passage some of the words have been deleted. Read the passage carefully and select the correct answer for the given blank out of the four alternatives.

The figure of Arthur first appeared in Welsh poetry in the (1) _____ sixth and early seventh centuries, a hero who was (2) _____ lead the Britons in battle against Saxon invaders. But it wasn't (3) _____ the 12th century that he was first tied to this dramatic headland, known as Tintagel.

The timeless popularity of the Arthur legend has overshadowed a central, unresolved (4) _____ : Was there really a King Arthur, or at least a historical prototype upon whom Geoffrey's hero is (5) _____ ?

SubQuestion No : 21

Q.21 Select the most appropriate option to fill in blank number 1.

- Ans
- ☒ 1. least
 - ☒ 2. late
 - ☒ 3. latest
 - ☒ 4. latter

Question Type : MCQ

Question ID : 264330135239

Option 1 ID : 264330529875

Option 2 ID : 264330529876

Option 3 ID : 264330529878

Option 4 ID : 264330529877

Status : Answered

Chosen Option : 2

Comprehension:

In the following passage some of the words have been deleted. Read the passage carefully and select the correct answer for the given blank out of the four alternatives.

The figure of Arthur first appeared in Welsh poetry in the (1) _____ sixth and early seventh centuries, a hero who was (2) _____ lead the Britons in battle against Saxon invaders. But it wasn't (3) _____ the 12th century that he was first tied to this dramatic headland, known as Tintagel.

The timeless popularity of the Arthur legend has overshadowed a central, unresolved (4) _____ : Was there really a King Arthur, or at least a historical prototype upon whom Geoffrey's hero is (5) _____ ?

SubQuestion No : 22

Q.22 Select the most appropriate option to fill in blank number 2.

- Ans
- ☒ 1. said to
 - ☒ 2. tamed to
 - ☒ 3. brought to
 - ☒ 4. told

Question Type : MCQ

Question ID : 264330135240

Option 1 ID : 264330529881

Option 2 ID : 264330529882

Option 3 ID : 264330529879

Option 4 ID : 264330529880

Status : Answered

Chosen Option : 1

Comprehension:

In the following passage some of the words have been deleted. Read the passage carefully and select the correct answer for the given blank out of the four alternatives.

The figure of Arthur first appeared in Welsh poetry in the (1) _____ sixth and early seventh centuries, a hero who was (2) _____ lead the Britons in battle against Saxon invaders. But it wasn't (3) _____ the 12th century that he was first tied to this dramatic headland, known as Tintagel.

The timeless popularity of the Arthur legend has overshadowed a central, unresolved (4) _____ : Was there really a King Arthur, or at least a historical prototype upon whom Geoffrey's hero is (5) _____ ?

SubQuestion No : 23

Q.23 Select the most appropriate option to fill in blank number 3.

- Ans
- ☒ 1. none
 - ☒ 2. beyond
 - ☒ 3. until
 - ☒ 4. unless

Question Type : MCQ

Question ID : 264330135241

Option 1 ID : 264330529883

Option 2 ID : 264330529885

Option 3 ID : 264330529886

Option 4 ID : 264330529884

Status : Answered

Chosen Option : 3

Comprehension:

In the following passage some of the words have been deleted. Read the passage carefully and select the correct answer for the given blank out of the four alternatives.

The figure of Arthur first appeared in Welsh poetry in the (1) _____ sixth and early seventh centuries, a hero who was (2) _____ lead the Britons in battle against Saxon invaders. But it wasn't (3) _____ the 12th century that he was first tied to this dramatic headland, known as Tintagel.

The timeless popularity of the Arthur legend has overshadowed a central, unresolved (4) _____ : Was there really a King Arthur, or at least a historical prototype upon whom Geoffrey's hero is (5) _____ ?

SubQuestion No : 24

Q.24 Select the most appropriate option to fill in blank number 4.

- Ans
- ☒ 1. establishment
 - ☒ 2. commotion
 - ☒ 3. mess
 - ☒ 4. question

Question Type : MCQ

Question ID : 264330135242

Option 1 ID : 264330529887

Option 2 ID : 264330529889

Option 3 ID : 264330529890

Option 4 ID : 264330529888

Status : Answered

Chosen Option : 4

Comprehension:

In the following passage some of the words have been deleted. Read the passage carefully and select the correct answer for the given blank out of the four alternatives.

The figure of Arthur first appeared in Welsh poetry in the (1) _____ sixth and early seventh centuries, a hero who was (2) _____ lead the Britons in battle against Saxon invaders. But it wasn't (3) _____ the 12th century that he was first tied to this dramatic headland, known as Tintagel.

The timeless popularity of the Arthur legend has overshadowed a central, unresolved (4) _____ : Was there really a King Arthur, or at least a historical prototype upon whom Geoffrey's hero is (5) _____ ?

SubQuestion No : 25

Q.25 Select the most appropriate option to fill in blank number 5.

- Ans
- ☒ 1. caged
 - ☒ 2. based
 - ☒ 3. hanged
 - ☒ 4. found

Question Type : MCQ

Question ID : 264330135243

Option 1 ID : 264330529892

Option 2 ID : 264330529893

Option 3 ID : 264330529894

Option 4 ID : 264330529891

Status : Answered

Chosen Option : 2

