

## Multi Tasking Non Technical Staff and Havaladar CBIC and CBN Examination 2022

Roll Number	
Candidate Name	
Venue Name	Bihar Digital World
Exam Date	12/05/2023
Exam Time	12:00 PM - 2:00 PM
Subject	MTS Non Tech Havaladar CBIC and CBN Examination 2022

### Section : Numerical and Mathematical Ability

**Q.1** The radius of a wheel is 21 cm. What is the distance (in cm) travelled by the wheel in 20 revolutions?

- Ans
- ☒ 1. 1440 cm
  - ☒ 2. 1500 cm
  - ☒ 3. 2640 cm
  - ☒ 4. 2100 cm

Question Type : MCQ

Question ID : 264330133794

Option 1 ID : 264330524200

Option 2 ID : 264330524201

Option 3 ID : 264330524199

Option 4 ID : 264330524202

Status : Answered

Chosen Option : 3

**Q.2** Dinesh makes four trips of equal distances. His speed on first trip was 140 km/hr and in each subsequent trip his speed was half of the previous trip. What is the average speed of Dinesh in these four trips?

- Ans
- ☒ 1. 40 km/hr
  - ☒ 2. 44 km/hr
  - ☒ 3. (112/3) km/hr
  - ☒ 4. (124/3) km/hr

Question Type : MCQ

Question ID : 264330137156

Option 1 ID : 264330537267

Option 2 ID : 264330537269

Option 3 ID : 264330537268

Option 4 ID : 264330537270

Status : Answered

Chosen Option : 3

# Test Prime

**ALL EXAMS,  
ONE SUBSCRIPTION**



**70,000+**  
Mock Tests



**Personalised  
Report Card**



**Unlimited  
Re-Attempt**



**600+**  
Exam Covered



**Previous Year  
Papers**



**500%**  
Refund



**ATTEMPT FREE MOCK NOW**

**Q.3** Krishna travels from point A to point B in 6 hours and returns back to point A from point B in 5 hours. Point A and point B are 220 miles apart along a straight highway. What is the average speed of Krishna for the whole journey?

- Ans**
- ☒ 1. 44 miles/hr
  - ☒ 2. 40 miles/hr
  - ☒ 3. 50 miles/hr
  - ☒ 4. 22 miles/hr

Question Type : **MCQ**  
 Question ID : **264330138704**  
 Option 1 ID : **264330543423**  
 Option 2 ID : **264330543424**  
 Option 3 ID : **264330543426**  
 Option 4 ID : **264330543425**  
 Status : **Answered**  
 Chosen Option : **2**

**Q.4** What is the compound interest on Rs.16400 for 1 year at 9% per annum when compounded half-yearly?

- Ans**
- ☒ 1. Rs.1640.40
  - ☒ 2. Rs.1608.20
  - ☒ 3. Rs.1509.21
  - ☒ 4. Rs.1680.90

Question Type : **MCQ**  
 Question ID : **264330138359**  
 Option 1 ID : **264330542046**  
 Option 2 ID : **264330542043**  
 Option 3 ID : **264330542044**  
 Option 4 ID : **264330542045**  
 Status : **Answered**  
 Chosen Option : **3**

**Q.5** Find the ratio of the LCM of 44, 10 and 5 to the HCF of 50 and 75.

- Ans**
- ☒ 1. 15 : 2
  - ☒ 2. 45 : 7
  - ☒ 3. 50 : 3
  - ☒ 4. 44 : 5

Question Type : **MCQ**  
 Question ID : **264330135066**  
 Option 1 ID : **264330529202**  
 Option 2 ID : **264330529200**  
 Option 3 ID : **264330529201**  
 Option 4 ID : **264330529199**  
 Status : **Answered**  
 Chosen Option : **4**

Q.6 What is the Least Common Multiple of 10, 12 and 15?

- Ans
- ☐ 1. 120
  - ☐ 2. 180
  - ☒ 3. 60
  - ☐ 4. 30

Question Type : MCQ

Question ID : 264330137618

Option 1 ID : 264330539080

Option 2 ID : 264330539079

Option 3 ID : 264330539082

Option 4 ID : 264330539081

Status : Answered

Chosen Option : 2

Q.7 Vijay sells bananas at the rate of Rs. 13 per dozen and earns a profit of 30 percent. The cost price of the bananas increases by 10 percent. If the selling price remains the same, then what is his new profit percent?

- Ans
- ☐ 1. 16.66 percent
  - ☒ 2. 18.18 percent
  - ☐ 3. 14.28 percent
  - ☐ 4. 12.5 percent

Question Type : MCQ

Question ID : 264330137610

Option 1 ID : 264330539049

Option 2 ID : 264330539050

Option 3 ID : 264330539048

Option 4 ID : 264330539047

Status : Answered

Chosen Option : 2

Q.8 Height of a cone is 12 cm and radius of its base is 14 cm. What is the volume of the cone?

- Ans
- ☒ 1. 2464 cm<sup>3</sup>
  - ☐ 2. 2692 cm<sup>3</sup>
  - ☐ 3. 2248 cm<sup>3</sup>
  - ☐ 4. 2872 cm<sup>3</sup>

Question Type : MCQ

Question ID : 264330137335

Option 1 ID : 264330537967

Option 2 ID : 264330537970

Option 3 ID : 264330537969

Option 4 ID : 264330537968

Status : Answered

Chosen Option : 1

Q.9 Sides of a triangle are 6 cm, 8 cm and 10 cm. What is the area of the triangle?

- Ans
- ☐ 1.  $20 \text{ cm}^2$
  - ☐ 2.  $28 \text{ cm}^2$
  - ☒ 3.  $24 \text{ cm}^2$
  - ☐ 4.  $16 \text{ cm}^2$

Question Type : MCQ

Question ID : 264330137679

Option 1 ID : 264330539325

Option 2 ID : 264330539324

Option 3 ID : 264330539326

Option 4 ID : 264330539323

Status : Answered

Chosen Option : 3

Q.10 What is the value of  $2[2.75 \times 2.75 + 1.25 \times 1.25]$ ?

- Ans
- ☐ 1. 19.75
  - ☐ 2. 17.50
  - ☒ 3. 18.25
  - ☐ 4. 15.75

Question Type : MCQ

Question ID : 264330137682

Option 1 ID : 264330539338

Option 2 ID : 264330539336

Option 3 ID : 264330539337

Option 4 ID : 264330539335

Status : Marked For Review

Chosen Option : 2

Q.11 While measuring a line segment of length 10 cm, it was measured 10.2 cm by mistake, what is the percent error in measurement?

- Ans
- ☐ 1. 1%
  - ☐ 2. 0.5%
  - ☐ 3. 0.2%
  - ☒ 4. 2%

Question Type : MCQ

Question ID : 264330138352

Option 1 ID : 264330542015

Option 2 ID : 264330542018

Option 3 ID : 264330542017

Option 4 ID : 264330542016

Status : Answered

Chosen Option : 4

**Q.12** Rs. 6000 was to be divided among P, Q and R in the ratio of 5 : 7 : 8. By mistake it was divided among P, Q and R in the ratio of 9 : 7 : 4. What amount R has lost in the division?

- Ans
- ☒ 1. Rs. 900
  - ☒ 2. Rs. 600
  - ☒ 3. Rs. 300
  - ☒ 4. Rs. 1200

Question Type : MCQ

Question ID : 264330137612

Option 1 ID : 264330539056

Option 2 ID : 264330539055

Option 3 ID : 264330539058

Option 4 ID : 264330539057

Status : Answered

Chosen Option : 4

**Q.13** A dealer marks his goods at 44% above the cost price. Then he allows 50% discount on it. What would be his loss percentage?

- Ans
- ☒ 1. 25%
  - ☒ 2. 28%
  - ☒ 3. 26%
  - ☒ 4. 32%

Question Type : MCQ

Question ID : 264330138397

Option 1 ID : 264330542197

Option 2 ID : 264330542195

Option 3 ID : 264330542198

Option 4 ID : 264330542196

Status : Answered

Chosen Option : 2

**Q.14** The average of 15 numbers is 45. One more number is added, and the new average becomes 50. What is that new number?

- Ans
- ☒ 1. 125
  - ☒ 2. 118
  - ☒ 3. 105
  - ☒ 4. 115

Question Type : MCQ

Question ID : 264330137606

Option 1 ID : 264330539032

Option 2 ID : 264330539034

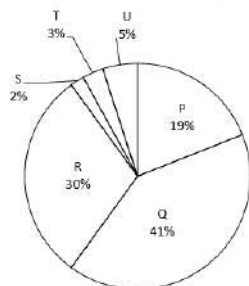
Option 3 ID : 264330539033

Option 4 ID : 264330539031

Status : Answered

Chosen Option : 1

**Q.15** The pie chart given below shows the production of 6 different factories. The total production of all these 6 factories is 17000. The production of a particular factory is shown as a percent of total production of all these 6 factories.



Which of the following statement is NOT correct?

- I. The ratio of the production of P and R together to the production of Q and U together is 49 : 46.  
 II. The production of S and T together is 91.66 percent more than the production of P and Q together.

- Ans**
- ☒ 1. Neither I nor II
  - ☒ 2. Only I
  - ☒ 3. Both I and II
  - ☒ 4. Only II

Question Type : MCQ  
 Question ID : 264330137622  
 Option 1 ID : 264330539098  
 Option 2 ID : 264330539095  
 Option 3 ID : 264330539097  
 Option 4 ID : 264330539096  
 Status : Not Answered  
 Chosen Option : --

**Q.16** If two successive discounts of 10 percent and 20 percent are offered, then what is the net discount?

- Ans**
- ☒ 1. 22 percent
  - ☒ 2. 28 percent
  - ☒ 3. 25 percent
  - ☒ 4. 20 percent

Question Type : MCQ  
 Question ID : 264330137615  
 Option 1 ID : 264330539067  
 Option 2 ID : 264330539068  
 Option 3 ID : 264330539070  
 Option 4 ID : 264330539069  
 Status : Answered  
 Chosen Option : 2

Q.17 If  $p : q = 7 : 5$ , then what is the value of  $\frac{(p^2+q^2)}{(p^2-q^2)}$ ?

- Ans
- ☒ 1. 48/7
  - ☒ 2. 36/11
  - ☒ 3. 37/12
  - ☒ 4. 38/5

Question Type : MCQ

Question ID : 264330137611

Option 1 ID : 264330539053

Option 2 ID : 264330539051

Option 3 ID : 264330539054

Option 4 ID : 264330539052

Status : Answered

Chosen Option : 3

Q.18 Time taken by boat to cover a distance of  $x$  km in upstream is 3 hours more than the time taken by the boat to cover the same distance in downstream. Speed of the boat in upstream is 8 km/hr. Which of the following statement(s) is/are correct?

- I. If the value of  $x$  is 48 km, then speed of boat in downstream is 16 km/hr.  
 II. If the speed of boat in downstream is 12 km/hr, then the value of  $x$  is 48 km.

- Ans
- ☒ 1. Neither I nor II
  - ☒ 2. Only II
  - ☒ 3. Only I
  - ☒ 4. Both I and II

Question Type : MCQ

Question ID : 264330137605

Option 1 ID : 264330539029

Option 2 ID : 264330539028

Option 3 ID : 264330539027

Option 4 ID : 264330539030

Status : Answered

Chosen Option : 3



**Q.19** The table given below shows the production of television and fridge by different companies.

Companies	Television	Fridge
A	60	80
B	50	30
C	40	20
D	30	50
E	70	35

$J_1$  = The value of average production of fridge by D and E.

$J_2$  = The total production of television and fridge by all companies.

What is the value of  $(J_2 - J_1)$ ?

- Ans**
- ☒ 1. 456.2
  - ☒ 2. 314.5
  - ☒ 3. 465
  - ☒ 4. 422.5

Question Type : **MCQ**

Question ID : **264330137683**

Option 1 ID : **264330539341**

Option 2 ID : **264330539342**

Option 3 ID : **264330539339**

Option 4 ID : **264330539340**

Status : **Not Answered**

Chosen Option : --

**Q.20** There are 1200 men in a group. They have food for 80 days. After 5 days, 400 men left the group. Remaining food will last for how many days?

- Ans**
- ☒ 1. 125 days
  - ☒ 2. 110.5 days
  - ☒ 3. 140.8 days
  - ☒ 4. 112.5 days

Question Type : **MCQ**

Question ID : **264330137666**

Option 1 ID : **264330539271**

Option 2 ID : **264330539273**

Option 3 ID : **264330539274**

Option 4 ID : **264330539272**

Status : **Answered**

Chosen Option : **3**

**Q.1** Select the option that is related to the fifth term in the same way as the second term is related to the first term and fourth term is related to third term.

FOM : IJT :: HIT : KDA :: FBQ : ?

- Ans**
- ☒ 1. JWX
  - ☒ 2. IXX
  - ☒ 3. KXX
  - ☒ 4. IWX

Question Type : MCQ

Question ID : 264330137518

Option 1 ID : 264330538680

Option 2 ID : 264330538682

Option 3 ID : 264330538681

Option 4 ID : 264330538679

Status : Answered

Chosen Option : 4

**Q.2** Speed of five cars named as Vivek, Laxman, Kamal, Mohan and Ramesh are compared. Speed of Vivek is more than only one car. Speed of Ramesh is more than four cars. Speed of Mohan is more than Vivek but less than Kamal and Ramesh. Speed of how many cars is less than the speed of Mohan?

- Ans**
- ☒ 1. 0
  - ☒ 2. 1
  - ☒ 3. 2
  - ☒ 4. 3

Question Type : MCQ

Question ID : 264330137525

Option 1 ID : 264330538710

Option 2 ID : 264330538709

Option 3 ID : 264330538707

Option 4 ID : 264330538708

Status : Answered

Chosen Option : 3

**Q.3** Select the option in which the numbers shares the same relationship in set as that shared by the numbers in the given set.  
(NOTE: Operations should be performed on the whole numbers, without breaking down the numbers into its constituent digits. E.g. 13 – Operations on 13 such as adding /subtracting /multiplying etc. to 13 can be performed. Breaking down 13 into 1 and 3 and then performing mathematical operations on 1 and 3 is not allowed)

(243, 81, 27)

(99, 33, 11)

- Ans**
- ☒ 1. (27, 25, 23)
  - ☒ 2. (27, 9, 3)
  - ☒ 3. (27, 20, 19)
  - ☒ 4. (27, 18, 9)

Question Type : MCQ

Question ID : 264330137531

Option 1 ID : 264330538733

Option 2 ID : 264330538732

Option 3 ID : 264330538734

Option 4 ID : 264330538731

Status : Answered

Chosen Option : 2

Q.4 In the following question, select the missing number of the given series.

30, 91, 274, 823, 2470, ?

- Ans ☒ 1. 7400  
☒ 2. 7420  
☒ 3. 4580  
☒ 4. 7411

Question Type : MCQ

Question ID : 264330137529

Option 1 ID : 264330538723

Option 2 ID : 264330538726

Option 3 ID : 264330538725

Option 4 ID : 264330538724

Status : Not Answered

Chosen Option : --

Q.5 Select the option that is related to the sixth number in the same way as the first number is related to the second number and third number is related to fourth number.

4 : 66 :: 8 : 514 :: ? : 345

- Ans ☒ 1. 11  
☒ 2. 7  
☒ 3. 9  
☒ 4. 8

Question Type : MCQ

Question ID : 264330138470

Option 1 ID : 264330542487

Option 2 ID : 264330542490

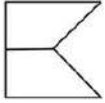
Option 3 ID : 264330542488

Option 4 ID : 264330542489

Status : Answered

Chosen Option : 2

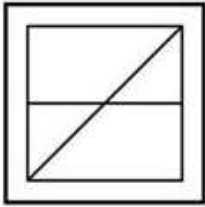
Q.6 Select the option figure in which the given figure (X) is embedded as its part (rotation is NOT allowed).



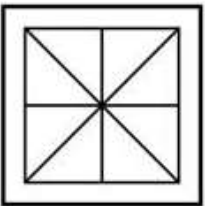
X

Ans


✗ 1.



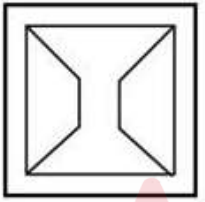
✓ 2.



✗ 3.



✗ 4.



Question Type : MCQ

Question ID : 264330137600

Option 1 ID : 264330539009

Option 2 ID : 264330539010

Option 3 ID : 264330539008

Option 4 ID : 264330539007

Status : Answered

Chosen Option : 2

Q.7 In a certain code language, 'SQUARE' is written as 'UQSERA'. How will 'CAREER' be written in that language?

Ans ✗ 1. RCAREE

✗ 2. EERACR

✗ 3. RACERE

✓ 4. RACREE

Question Type : MCQ

Question ID : 264330134958

Option 1 ID : 264330528769

Option 2 ID : 264330528768

Option 3 ID : 264330528770

Option 4 ID : 264330528767

Status : Answered

Chosen Option : 4

**Q.8** In the following question below are given some statements followed by some conclusions based on those statements. Taking the given statements to be true even if they seem to be at variance from commonly known facts. Read all the conclusions and then decide which of the given conclusion logically follows the given statements.

Statements:

I. All B are M.

II. Some J are B.

Conclusion:

I. Some M are not B.

II. No J is M.

- Ans**
- ☒ 1. Both conclusions I and II follows
  - ☒ 2. Only conclusion II follows
  - ☒ 3. Neither conclusion follows
  - ☒ 4. Only conclusion I follows

Question Type : **MCQ**

Question ID : **264330137526**

Option 1 ID : **264330538713**

Option 2 ID : **264330538712**

Option 3 ID : **264330538714**

Option 4 ID : **264330538711**

Status : **Answered**

Chosen Option : **3**

**Q.9** In the following question below are given some statements followed by some conclusions based on those statements. Taking the given statements to be true even if they seem to be at variance from commonly known facts. Read all the conclusions and then decide which of the given conclusion logically follows the given statements.

Statements:

I. Some boy are strong.

II. No strong is weak.

Conclusion:

I. All strong are boy.

II. All weak are boy.

III. All weak are strong.

- Ans**
- ☒ 1. Neither conclusion follows
  - ☒ 2. All conclusion follows
  - ☒ 3. Both conclusions I and III follows
  - ☒ 4. Both conclusions II and III follows

Question Type : **MCQ**

Question ID : **264330137527**

Option 1 ID : **264330538718**

Option 2 ID : **264330538717**

Option 3 ID : **264330538715**

Option 4 ID : **264330538716**

Status : **Answered**

Chosen Option : **1**

**Q.10** In the following question, select the missing number of the given series.

0, 20, 40, 60, 80, ?

- Ans**
- ☒ 1. 110
  - ☒ 2. 100
  - ☒ 3. 120
  - ☒ 4. 90

Question Type : **MCQ**  
 Question ID : **264330138468**  
 Option 1 ID : **264330542480**  
 Option 2 ID : **264330542479**  
 Option 3 ID : **264330542482**  
 Option 4 ID : **264330542481**  
 Status : **Answered**  
 Chosen Option : **2**

**Q.11** Eight friends Mansi, Shweta, Monika, Payal, Aarti, Kajal, Laxmi and Rani are sitting around a circular table facing towards the centre (not necessarily in the same order). Monika is second to the right of Kajal. Kajal is third to the right of Shweta. Payal is to the immediate left of Shweta. Shweta is second to the left of Aarti. Laxmi is fourth to the right of Shweta. Mansi is the immediate neighbour of both Shweta and Aarti. Who is second to the right of Mansi?

- Ans**
- ☒ 1. Aarti
  - ☒ 2. Laxmi
  - ☒ 3. Rani
  - ☒ 4. Kajal

Question Type : **MCQ**  
 Question ID : **264330137524**  
 Option 1 ID : **264330538704**  
 Option 2 ID : **264330538703**  
 Option 3 ID : **264330538705**  
 Option 4 ID : **264330538706**  
 Status : **Not Answered**  
 Chosen Option : **--**

**Q.12** Seven boys Rahul, Ram, Ramesh, Sohan, Sahil, Sonu and Monu are sitting around a circular table facing towards the centre (not necessarily in the same order). Monu is second to the left of Sonu. Sonu is second to the left of Rahul. Sahil is not the immediate neighbour of Sonu. Sahil is third to the right of Ram. Sohan is third to the right of Ramesh.

Who is third to the left of Rahul?

- Ans**
- ☒ 1. Sohan
  - ☒ 2. Ram
  - ☒ 3. Sahil
  - ☒ 4. Ramesh

Question Type : **MCQ**  
 Question ID : **264330137523**  
 Option 1 ID : **264330538702**  
 Option 2 ID : **264330538701**  
 Option 3 ID : **264330538700**  
 Option 4 ID : **264330538699**  
 Status : **Not Answered**  
 Chosen Option : **--**

**Q.13** After interchanging the given two numbers, what will be the value of the given equation?

3 and 4 ;  $3 \times 7 - 8 \div 2 + 4$

**Ans** ☒ 1. 30

☒ 2. 27

☒ 3. 31

☒ 4. 35

Question Type : **MCQ**

Question ID : **264330137532**

Option 1 ID : **264330538736**

Option 2 ID : **264330538735**

Option 3 ID : **264330538737**

Option 4 ID : **264330538738**

Status : **Answered**

Chosen Option : **2**

**Q.14** In a certain code language, 'PADM' is coded as '5372', 'AZDB' is coded as '7209', 'BALL' is coded as '9766'. What is the code for 'M' in that code language?

**Ans** ☒ 1. 2

☒ 2. 9

☒ 3. 7

☒ 4. 5

Question Type : **MCQ**

Question ID : **264330138566**

Option 1 ID : **264330542872**

Option 2 ID : **264330542873**

Option 3 ID : **264330542874**

Option 4 ID : **264330542871**

Status : **Not Answered**

Chosen Option : **--**

**Q.15** In a certain code language, 'NIGHT' is coded as '96270', 'OFTEN' is coded as '87561', 'PILOT' is coded as '23745'. What is the code for 'INF' in that code language?

**Ans** ☒ 1. 257

☒ 2. 269

☒ 3. 264

☒ 4. 268

Question Type : **MCQ**

Question ID : **264330137115**

Option 1 ID : **264330537105**

Option 2 ID : **264330537103**

Option 3 ID : **264330537106**

Option 4 ID : **264330537104**

Status : **Not Answered**

Chosen Option : **--**

Q.16 Select the correct mirror image of the given figure when the mirror MN is placed as shown below.



Ans

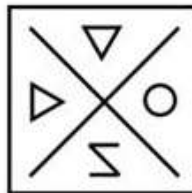
✗ 1.



✗ 2.



✓ 3.



✗ 4.



Question Type : MCQ

Question ID : 264330137601

Option 1 ID : 264330539012

Option 2 ID : 264330539013

Option 3 ID : 264330539014


Option 4 ID : 264330539011

Status : Answered

Chosen Option : 3



Q.17 Which answer figure will complete the pattern in the question figure?



Ans

✗ 1.



✓ 2.



✗ 3.



✗ 4.



Question Type : MCQ

Question ID : 264330137536

Option 1 ID : 264330538752

Option 2 ID : 264330538753

Option 3 ID : 264330538751

Option 4 ID : 264330538754

Status : Answered

Chosen Option : 2

Q.18 In a certain code language, 'MOTION' is written as '136435' and 'ONION' is written as '35435'. How will 'NOTION' be written in that language?

Ans

✗ 1. 362434

✗ 2. 534354

✗ 3. 352637

✓ 4. 536435

Question Type : MCQ

Question ID : 264330133371

Option 1 ID : 264330522518

Option 2 ID : 264330522516

Option 3 ID : 264330522517

Option 4 ID : 264330522515

Status : Answered

Chosen Option : 4

**Q.19** A series is given with one term missing. Select the correct alternative from the given ones that will complete the series.

FANY, JERC, NIVG, ?, VQDO

- Ans**
- ✓ 1. RMZK
  - ✗ 2. RMYK
  - ✗ 3. RMMK
  - ✗ 4. RNYK

Question Type : MCQ

Question ID : 264330137515

Option 1 ID : 264330538670

Option 2 ID : 264330538667

Option 3 ID : 264330538668

Option 4 ID : 264330538669

Status : Answered

Chosen Option : 1

**Q.20** Select the option that is related to the fourth term in the same way as the first term is related to the second term and fifth term is related to sixth term.

AKV : ZIS :: ? : ENI :: PQR : OOO

- Ans**
- ✗ 1. FOL
  - ✗ 2. EPL
  - ✓ 3. FPL
  - ✗ 4. EQL

Question Type : MCQ

Question ID : 264330137517

Option 1 ID : 264330538675

Option 2 ID : 264330538676

Option 3 ID : 264330538677

Option 4 ID : 264330538678

Status : Answered

Chosen Option : 3

Section : General Awareness

**Q.1** Annie Besant was associated with which of the following socio-religious movement?

- Ans**
- ✗ 1. Indian Reform Association
  - ✗ 2. Tattvabodhini Sabha
  - ✗ 3. Adi Brahmo Samaj
  - ✓ 4. Theosophical Society

Question Type : MCQ

Question ID : 264330137777

Option 1 ID : 264330539718

Option 2 ID : 264330539715

Option 3 ID : 264330539716

Option 4 ID : 264330539717

Status : Answered

Chosen Option : 4

Q.2 Air \_\_\_\_\_ on heating and \_\_\_\_\_ on cooling.

- Ans
- ✓ 1. expands, contracts
  - ✗ 2. contracts, stabilises
  - ✗ 3. expands, expands
  - ✗ 4. contracts, expands

Question Type : MCQ  
 Question ID : 264330134609  
 Option 1 ID : 264330527394  
 Option 2 ID : 264330527391  
 Option 3 ID : 264330527393  
 Option 4 ID : 264330527392  
 Status : Answered  
 Chosen Option : 1

Q.3 Who among the following Mughal Emperors had assumed the title of Padshah?

- Ans
- ✗ 1. Jahangir
  - ✓ 2. Babur
  - ✗ 3. Humayun
  - ✗ 4. Akbar

Question Type : MCQ  
 Question ID : 264330138235  
 Option 1 ID : 264330541550  
 Option 2 ID : 264330541547  
 Option 3 ID : 264330541548  
 Option 4 ID : 264330541549  
 Status : Not Answered  
 Chosen Option : --

Q.4 Garo tribe is related with which region of India?

- Ans
- ✗ 1. Western
  - ✗ 2. South
  - ✓ 3. North-eastern
  - ✗ 4. South-western

Question Type : MCQ  
 Question ID : 264330138266  
 Option 1 ID : 264330541671  
 Option 2 ID : 264330541672  
 Option 3 ID : 264330541674  
 Option 4 ID : 264330541673  
 Status : Answered  
 Chosen Option : 1

Q.5 Mohiniattam is a classical dance of which state?

- Ans
- ☐ 1. Karnataka
  - ☐ 2. Odisha
  - ☐ 3. Tamil Nadu
  - ☒ 4. Kerala

Question Type : MCQ

Question ID : 264330137688

Option 1 ID : 264330539359

Option 2 ID : 264330539362

Option 3 ID : 264330539361

Option 4 ID : 264330539360

Status : Answered

Chosen Option : 4

Q.6 How often are the Winter Olympic games held?

- Ans
- ☐ 1. Every three years
  - ☒ 2. Every four years
  - ☐ 3. Every two years
  - ☐ 4. Every five years

Question Type : MCQ

Question ID : 264330137708

Option 1 ID : 264330539439

Option 2 ID : 264330539442

Option 3 ID : 264330539440

Option 4 ID : 264330539441

Status : Answered

Chosen Option : 2

Q.7 Which of the following is a characteristic of a plant cell?

- Ans
- ☐ 1. Small central vacuole
  - ☐ 2. Chloroplasts absent
  - ☐ 3. Plastid absent
  - ☒ 4. Cell wall is present

Question Type : MCQ

Question ID : 264330137692

Option 1 ID : 264330539377

Option 2 ID : 264330539378

Option 3 ID : 264330539376

Option 4 ID : 264330539375

Status : Answered

Chosen Option : 1

Q.8 Goods which are of durable character which are used in the production process are called \_\_\_\_\_.

- Ans ☒ 1. capital goods
- ☐ 2. veblen goods
- ☐ 3. consumption goods
- ☐ 4. complementary goods

Question Type : MCQ  
Question ID : 264330133866  
Option 1 ID : 264330524490  
Option 2 ID : 264330524489  
Option 3 ID : 264330524488  
Option 4 ID : 264330524487  
Status : Answered  
Chosen Option : 1

Q.9 What was the title given to the late Sarojini Naidu?

- Ans ☒ 1. Nightingale of India
- ☐ 2. Kite of India
- ☐ 3. Sparrow of India
- ☐ 4. Hornbill of India

Question Type : MCQ  
Question ID : 264330137704  
Option 1 ID : 264330539424  
Option 2 ID : 264330539425  
Option 3 ID : 264330539423  
Option 4 ID : 264330539426  
Status : Answered  
Chosen Option : 1

Q.10 Who appoints the Chief Justice of India?

- Ans ☐ 1. Vice-President
- ☒ 2. President
- ☐ 3. Supreme Court Judge
- ☐ 4. Prime Minister

Question Type : MCQ  
Question ID : 264330137707  
Option 1 ID : 264330539438  
Option 2 ID : 264330539436  
Option 3 ID : 264330539437  
Option 4 ID : 264330539435  
Status : Answered  
Chosen Option : 2

Q.11 Which of the following is a fundamental duty stated under the Indian constitution?

- Ans
- ☒ 1. To safeguard private property
  - ☒ 2. To protect dignity
  - ☒ 3. To defend the country
  - ☒ 4. To manage religious affairs

Question Type : MCQ  
Question ID : 264330137706  
Option 1 ID : 264330539432  
Option 2 ID : 264330539431  
Option 3 ID : 264330539433  
Option 4 ID : 264330539434  
Status : Answered  
Chosen Option : 3

Q.12 Breeding of fish in specially constructed tanks and ponds is called \_\_\_\_\_.

- Ans
- ☒ 1. Viticulture
  - ☒ 2. Horticulture
  - ☒ 3. Pisciculture
  - ☒ 4. Sericulture

Question Type : MCQ  
Question ID : 264330133873  
Option 1 ID : 264330524516  
Option 2 ID : 264330524518  
Option 3 ID : 264330524517  
Option 4 ID : 264330524515  
Status : Answered  
Chosen Option : 3

Q.13 Ritusamhara or The Six Seasons is a classic of Sanskrit literature, written by \_\_\_\_\_.

- Ans
- ☒ 1. Tulsidas
  - ☒ 2. Ravi Kirti
  - ☒ 3. Kalidasa
  - ☒ 4. Harisena

Question Type : MCQ  
Question ID : 264330133861  
Option 1 ID : 264330524467  
Option 2 ID : 264330524468  
Option 3 ID : 264330524470  
Option 4 ID : 264330524469  
Status : Not Answered  
Chosen Option : --

Q.14 ENSO is the phenomenon related to pressure conditions. What is the full form of ENSO?

- Ans
- ☒ 1. El Nina Southern Occasions
  - ☒ 2. El Nino Southern Oscillation
  - ☒ 3. El Nino South Occasion
  - ☒ 4. El Nina South Oscillations

Question Type : MCQ

Question ID : 264330138229

Option 1 ID : 264330541524

Option 2 ID : 264330541523

Option 3 ID : 264330541525

Option 4 ID : 264330541526

Status : Answered

Chosen Option : 2

Q.15 Bhakra Nangal dam is built on which of the following river?

- Ans
- ☒ 1. Beas
  - ☒ 2. Sutlej
  - ☒ 3. Chenab
  - ☒ 4. Ravi

Question Type : MCQ

Question ID : 264330137696

Option 1 ID : 264330539394

Option 2 ID : 264330539393

Option 3 ID : 264330539391

Option 4 ID : 264330539392

Status : Answered

Chosen Option : 2

Q.16 Who among the following became the first Indian player to score 1,000 T20 International runs in a calendar year?

- Ans
- ☒ 1. Suryakumar Yadav
  - ☒ 2. Rishabh Pant
  - ☒ 3. Rohit Sharma
  - ☒ 4. Virat Kohli

Question Type : MCQ

Question ID : 264330138244

Option 1 ID : 264330541586

Option 2 ID : 264330541585

Option 3 ID : 264330541583

Option 4 ID : 264330541584

Status : Answered

Chosen Option : 1

Q.17 \_\_\_\_\_ unemployment refers to the lowest unemployment level a healthy economy can sustain without causing inflation.

- Ans
- ☒ 1. Structural
  - ☒ 2. Disguised
  - ☒ 3. Natural
  - ☒ 4. Frictional

Question Type : MCQ  
 Question ID : 264330134656  
 Option 1 ID : 264330527581  
 Option 2 ID : 264330527582  
 Option 3 ID : 264330527579  
 Option 4 ID : 264330527580  
 Status : Answered  
 Chosen Option : 1

Q.18 In Indus valley civilization, the city of Lothal stood beside a tributary of the \_\_\_\_\_.

- Ans
- ☒ 1. Periyar
  - ☒ 2. Sabarmati
  - ☒ 3. Krishna
  - ☒ 4. Narmada

Question Type : MCQ  
 Question ID : 264330137774  
 Option 1 ID : 264330539705  
 Option 2 ID : 264330539704  
 Option 3 ID : 264330539703  
 Option 4 ID : 264330539706  
 Status : Answered  
 Chosen Option : 2

Q.19 Under the Atal Pension Yojana, the pension returns are given after the subscriber turns \_\_\_\_\_.

- Ans
- ☒ 1. 60
  - ☒ 2. 55
  - ☒ 3. 50
  - ☒ 4. 65

Question Type : MCQ  
 Question ID : 264330137686  
 Option 1 ID : 264330539354  
 Option 2 ID : 264330539352  
 Option 3 ID : 264330539353  
 Option 4 ID : 264330539351  
 Status : Not Answered  
 Chosen Option : --



Q.20 Who has won the most individual gold Olympic medals?

- Ans
- ☐ 1. Simone Biles
  - ☐ 2. Katie Ledecky
  - ☐ 3. Usain Bolt
  - ☒ 4. Michael Phelps

Question Type : MCQ  
 Question ID : 264330134598  
 Option 1 ID : 264330527350  
 Option 2 ID : 264330527349  
 Option 3 ID : 264330527348  
 Option 4 ID : 264330527347  
 Status : Not Answered  
 Chosen Option : --

Q.21 "Gurpurab" is celebrated as a birth anniversary of which Sikh guru?

- Ans
- ☐ 1. Guru Angad
  - ☒ 2. Guru Nanak Dev
  - ☐ 3. Guru Arjan Dev
  - ☐ 4. Guru Gobind Singh

Question Type : MCQ  
 Question ID : 264330134595  
 Option 1 ID : 264330527337  
 Option 2 ID : 264330527338  
 Option 3 ID : 264330527336  
 Option 4 ID : 264330527335  
 Status : Answered  
 Chosen Option : 2

Q.22 Which of the following states primarily celebrate the chhath puja festival in India?

- Ans
- ☐ 1. Rajasthan
  - ☐ 2. Gujarat
  - ☐ 3. Andhra Pradesh
  - ☒ 4. Bihar

Question Type : MCQ  
 Question ID : 264330137764  
 Option 1 ID : 264330539664  
 Option 2 ID : 264330539665  
 Option 3 ID : 264330539663  
 Option 4 ID : 264330539666  
 Status : Answered  
 Chosen Option : 4

Q.23 Rukmini Devi Arundale was awarded with 'Padma Bhushan' in the year \_\_\_\_\_.

- Ans ☒ 1. 1956  
☒ 2. 1987  
☒ 3. 1978  
☒ 4. 1964

Question Type : MCQ  
 Question ID : 264330133863  
 Option 1 ID : 264330524476  
 Option 2 ID : 264330524477  
 Option 3 ID : 264330524475  
 Option 4 ID : 264330524478  
 Status : Not Answered  
 Chosen Option : --

Q.24 Which among the following acids is found in coconut oil?

- Ans ☒ 1. Erucic Acid  
☒ 2. Oxalic Acid  
☒ 3. Lactic Acid  
☒ 4. Lauric Acid

Question Type : MCQ  
 Question ID : 264330138228  
 Option 1 ID : 264330541521  
 Option 2 ID : 264330541520  
 Option 3 ID : 264330541522  
 Option 4 ID : 264330541519  
 Status : Answered  
 Chosen Option : 2

Q.25 \_\_\_\_\_ is a process in which natural rubber is treated with sulphur to make it more durable and elastic.

- Ans ☒ 1. Saponification  
☒ 2. Fermentation  
☒ 3. Vulcanisation  
☒ 4. Carbonation

Question Type : MCQ  
 Question ID : 264330138226  
 Option 1 ID : 264330541511  
 Option 2 ID : 264330541513  
 Option 3 ID : 264330541512  
 Option 4 ID : 264330541514  
 Status : Answered  
 Chosen Option : 3

**Q.1** Select the most appropriate antonym to substitute the bracketed word in the given sentence.  
An (unsullied) safety record swelled pride in Concorde's technical achievement as the years passed.

- Ans**
- ☒ 1. Undefined
  - ☒ 2. Impeccable
  - ☒ 3. Tarnished
  - ☒ 4. Perfect

Question Type : MCQ  
Question ID : 264330136050  
Option 1 ID : 264330533016  
Option 2 ID : 264330533017  
Option 3 ID : 264330533018  
Option 4 ID : 264330533015  
Status : Answered  
Chosen Option : 3

**Q.2** Improve the underlined part of the sentence. Choose 'No improvement' as an answer if the sentence is grammatically correct.

Training your dog have required a lot of patience.

- Ans**
- ☒ 1. require the lot
  - ☒ 2. requires a lot
  - ☒ 3. required lot
  - ☒ 4. No improvement

Question Type : MCQ  
Question ID : 264330134748  
Option 1 ID : 264330527945  
Option 2 ID : 264330527943  
Option 3 ID : 264330527944  
Option 4 ID : 264330527946  
Status : Answered  
Chosen Option : 2

**Q.3** Select the most appropriate option to fill in the blank.  
The question is why an \_\_\_\_\_ Hollywood film should provoke such a hostile reaction.

- Ans**
- ☒ 1. elicit
  - ☒ 2. innocuous
  - ☒ 3. obstinate
  - ☒ 4. erroneous

Question Type : MCQ  
Question ID : 264330136056  
Option 1 ID : 264330533040  
Option 2 ID : 264330533039  
Option 3 ID : 264330533042  
Option 4 ID : 264330533041  
Status : Answered  
Chosen Option : 1

Q.4 Select the most appropriate option to fill in the blank.

The respondents were very agile and \_\_\_\_\_ in subduing the situation.

- Ans
- ☐ 1. hassled
  - ☒ 2. quick
  - ☐ 3. tedious
  - ☐ 4. tasty

Question Type : MCQ  
Question ID : 264330136237  
Option 1 ID : 264330533735  
Option 2 ID : 264330533737  
Option 3 ID : 264330533738  
Option 4 ID : 264330533736  
Status : Answered  
Chosen Option : 2

Q.5 Select the most appropriate meaning of the bracketed idiom in the given sentence.

The last observation of yours has (hit the nail on the head).

- Ans
- ☐ 1. To have no idea about anything
  - ☐ 2. A personal interest in the matter
  - ☐ 3. To hear rumours
  - ☒ 4. Find exactly the right answer

Question Type : MCQ  
Question ID : 264330136052  
Option 1 ID : 264330533023  
Option 2 ID : 264330533026  
Option 3 ID : 264330533024  
Option 4 ID : 264330533025  
Status : Answered  
Chosen Option : 4

Q.6 Select the most appropriate synonym of the given word.

Decapitate

- Ans
- ☐ 1. Affection
  - ☐ 2. Sincerity
  - ☐ 3. Desolation
  - ☒ 4. Behead

Question Type : MCQ  
Question ID : 264330136047  
Option 1 ID : 264330533005  
Option 2 ID : 264330533006  
Option 3 ID : 264330533004  
Option 4 ID : 264330533003  
Status : Answered  
Chosen Option : 4

Q.7 Select the most appropriate meaning of the given idiom.

It takes two to tango

- Ans
- ☐ 1. Two people are required for a couple dance
  - ☐ 2. To fight fiercely
  - ☒ 3. For an argument both parties are equally responsible
  - ☐ 4. An interesting idea

Question Type : MCQ  
Question ID : 264330136607  
Option 1 ID : 264330535155  
Option 2 ID : 264330535158  
Option 3 ID : 264330535157  
Option 4 ID : 264330535156  
Status : Answered  
Chosen Option : 3

Q.8 Select the most appropriate option to fill in the blank.

Fetal \_\_\_\_\_ screening uses ultrasound scanning to find certain abnormalities in the baby.

- Ans
- ☐ 1. enfevering
  - ☒ 2. anomaly
  - ☐ 3. abeyance
  - ☐ 4. snuggle

Question Type : MCQ  
Question ID : 264330136037  
Option 1 ID : 264330532970  
Option 2 ID : 264330532969  
Option 3 ID : 264330532968  
Option 4 ID : 264330532967  
Status : Answered  
Chosen Option : 1

Q.9 Select the most appropriate option to fill in the blank.

For years, people afflicted with the itchy skin condition used stinky coal tar derivatives to \_\_\_\_\_ their symptoms.

- Ans
- ☐ 1. obviate
  - ☐ 2. refer
  - ☐ 3. deviate
  - ☒ 4. alleviate

Question Type : MCQ  
Question ID : 264330136298  
Option 1 ID : 264330533973  
Option 2 ID : 264330533971  
Option 3 ID : 264330533974  
Option 4 ID : 264330533972  
Status : Answered  
Chosen Option : 1

**Q.10** Select the most appropriate option to substitute the bracketed segment in the given sentence. If there is no need to substitute it, select 'no substitution required'.

(No sooner had the ink dried on last week's column, that) one of my long-suffering 17 readers was into action.

- Ans**
- ☒ 1. No sooner had the ink dry on last week's column, than
  - ☒ 2. No sooner did the ink dried on last week's column, than
  - ☒ 3. No substitution required
  - ☒ 4. No sooner had the ink dried on last week's column, than

Question Type : **MCQ**

Question ID : **264330136062**

Option 1 ID : **264330533064**

Option 2 ID : **264330533063**

Option 3 ID : **264330533066**

Option 4 ID : **264330533065**

Status : **Answered**

Chosen Option : **4**

**Q.11** Select the word segment that substitutes (replaces) the bracketed word segment correctly and completes the sentence meaningfully. Select the option 'no correction required' if the sentence is correct as given.

The (captain with the members of his team) failed to qualify for the African Nations Cup finals.

- Ans**
- ☒ 1. No correction required
  - ☒ 2. captain and his team
  - ☒ 3. captain along with the members of his team
  - ☒ 4. captain along side the members of his team

Question Type : **MCQ**

Question ID : **264330136617**

Option 1 ID : **264330535198**

Option 2 ID : **264330535196**

Option 3 ID : **264330535195**

Option 4 ID : **264330535197**

Status : **Answered**

Chosen Option : **3**

**Q.12** Select the correctly spelt word.

- Ans**
- ☒ 1. Deifinatn
  - ☒ 2. Defination
  - ☒ 3. Definition
  - ☒ 4. Definasion

Question Type : **MCQ**

Question ID : **264330136053**

Option 1 ID : **264330533027**

Option 2 ID : **264330533028**

Option 3 ID : **264330533029**

Option 4 ID : **264330533030**

Status : **Answered**

Chosen Option : **3**

Q.13 Find the part of the given sentence that has an error in it. If there is no error, choose 'No error'.

Your success were short-lived and had disastrous outcomes.

- Ans
- ☒ 1. No error
  - ☒ 2. had disastrous outcomes.
  - ☒ 3. short-lived and
  - ☒ 4. Your success were

Question Type : MCQ  
 Question ID : 264330134424  
 Option 1 ID : 264330526674  
 Option 2 ID : 264330526673  
 Option 3 ID : 264330526672  
 Option 4 ID : 264330526671  
 Status : Answered  
 Chosen Option : 4

Q.14 Select the wrongly spelt word.

- Ans
- ☒ 1. enigma
  - ☒ 2. expereince
  - ☒ 3. equivocate
  - ☒ 4. effigy

Question Type : MCQ  
 Question ID : 264330136236  
 Option 1 ID : 264330533732  
 Option 2 ID : 264330533731  
 Option 3 ID : 264330533733  
 Option 4 ID : 264330533734  
 Status : Answered  
 Chosen Option : 2

Q.15 Select the word from the options which is similar in meaning to the bracketed part given in the sentence below.

He has been used as the (fall guy) for issues with housing and unemployment.

- Ans
- ☒ 1. reticent
  - ☒ 2. confiscate
  - ☒ 3. scapegoat
  - ☒ 4. weakling

Question Type : MCQ  
 Question ID : 264330136256  
 Option 1 ID : 264330533807  
 Option 2 ID : 264330533810  
 Option 3 ID : 264330533809  
 Option 4 ID : 264330533808  
 Status : Answered  
 Chosen Option : 3

Q.16 Identify the segment that contains a grammatical error. If there is no error, select 'No error'.

The kids there were so notorious, the / more I asked them to quiet down, / the more loud they would scream.

- Ans
- ☒ 1. No error
  - ☒ 2. the more loud they would scream.
  - ☒ 3. more I asked them to quiet down,
  - ☒ 4. The kids there were so notorious, the

Question Type : MCQ

Question ID : 264330136614

Option 1 ID : 264330535186

Option 2 ID : 264330535185

Option 3 ID : 264330535184

Option 4 ID : 264330535183

Status : Answered

Chosen Option : 3

Q.17 Select the most appropriate word for the given group of words.

In exactly the same words as were used originally

- Ans
- ☒ 1. Misanthrope
  - ☒ 2. Verbatim
  - ☒ 3. Kennel
  - ☒ 4. Lunatic

Question Type : MCQ

Question ID : 264330136046

Option 1 ID : 264330533000

Option 2 ID : 264330532999

Option 3 ID : 264330533002

Option 4 ID : 264330533001

Status : Answered

Chosen Option : 2

Q.18 Choose the word that is opposite in meaning to the given word.

Humble

- Ans
- ☒ 1. Votary
  - ☒ 2. Passive
  - ☒ 3. Diffident
  - ☒ 4. Assertive

Question Type : MCQ

Question ID : 264330134737

Option 1 ID : 264330527901

Option 2 ID : 264330527900

Option 3 ID : 264330527902

Option 4 ID : 264330527899

Status : Not Attempted and  
Marked For Review

Chosen Option : --



**Q.19** Identify the segment that contains a grammatical error. If there is no error, select 'No error'.  
Unadulterated and unabashed were/ the two words that the judge use/ to define his performance.

- Ans** ☒ 1. Unadulterated and unabashed were  
☒ 2. the two words that the judge use  
☒ 3. to define his performance.  
☒ 4. No error

Question Type : MCQ  
 Question ID : 264330136033  
 Option 1 ID : 264330532951  
 Option 2 ID : 264330532952  
 Option 3 ID : 264330532953  
 Option 4 ID : 264330532954  
 Status : Answered  
 Chosen Option : 2

**Q.20** Select the most appropriate word for the given group of words.

An adventurous or bold person

- Ans** ☒ 1. Judgemental  
☒ 2. Foolhardy  
☒ 3. Debonair  
☒ 4. Assaultive

Question Type : MCQ  
 Question ID : 264330136601  
 Option 1 ID : 264330535133  
 Option 2 ID : 264330535131  
 Option 3 ID : 264330535134  
 Option 4 ID : 264330535132  
 Status : Answered  
 Chosen Option : 3

### Comprehension:

In the following passage some of the words have been deleted. Read the passage carefully and select the correct answer for the given blank out of the four alternatives.

Snail slime is made (1)\_\_\_\_\_ a mixture of substances. It is mostly water (2)\_\_\_\_\_ with proteins and some carbohydrates and minerals. (3)\_\_\_\_\_ into a sort of jelly. This jelly is (4)\_\_\_\_\_ "mucus". It's not that different to the snot that comes out of your nose when you have a (5)\_\_\_\_\_.

**SubQuestion No : 21**

**Q.21** Select the most appropriate option to fill in blank number 1.

- Ans** ☒ 1. for  
☒ 2. of  
☒ 3. up  
☒ 4. upon

Question Type : MCQ  
 Question ID : 264330134728  
 Option 1 ID : 264330527865  
 Option 2 ID : 264330527863  
 Option 3 ID : 264330527864  
 Option 4 ID : 264330527866  
 Status : Answered  
 Chosen Option : 2

### Comprehension:

In the following passage some of the words have been deleted. Read the passage carefully and select the correct answer for the given blank out of the four alternatives.

Snail slime is made (1)\_\_\_\_\_ a mixture of substances. It is mostly water (2)\_\_\_\_\_ with proteins and some carbohydrates and minerals, (3)\_\_\_\_\_ into a sort of jelly. This jelly is (4)\_\_\_\_\_ "mucus". It's not that different to the snot that comes out of your nose when you have a (5)\_\_\_\_\_.

SubQuestion No : 22

Q.22 Select the most appropriate option to fill in blank number 2.

- Ans
- ☒ 1. sliced
  - ☒ 2. diced
  - ☒ 3. mixed
  - ☒ 4. rotated

Question Type : MCQ

Question ID : 264330134729

Option 1 ID : 264330527868

Option 2 ID : 264330527869

Option 3 ID : 264330527867

Option 4 ID : 264330527870

Status : Answered

Chosen Option : 3

### Comprehension:

In the following passage some of the words have been deleted. Read the passage carefully and select the correct answer for the given blank out of the four alternatives.

Snail slime is made (1)\_\_\_\_\_ a mixture of substances. It is mostly water (2)\_\_\_\_\_ with proteins and some carbohydrates and minerals, (3)\_\_\_\_\_ into a sort of jelly. This jelly is (4)\_\_\_\_\_ "mucus". It's not that different to the snot that comes out of your nose when you have a (5)\_\_\_\_\_.

SubQuestion No : 23

Q.23 Select the most appropriate option to fill in blank number 3.

- Ans
- ☒ 1. moved
  - ☒ 2. framed
  - ☒ 3. tamed
  - ☒ 4. formed

Question Type : MCQ

Question ID : 264330134730

Option 1 ID : 264330527871

Option 2 ID : 264330527873

Option 3 ID : 264330527874

Option 4 ID : 264330527872

Status : Answered

Chosen Option : 4

### Comprehension:

In the following passage some of the words have been deleted. Read the passage carefully and select the correct answer for the given blank out of the four alternatives.

Snail slime is made (1)\_\_\_\_\_ a mixture of substances. It is mostly water (2)\_\_\_\_\_ with proteins and some carbohydrates and minerals, (3)\_\_\_\_\_ into a sort of jelly. This jelly is (4)\_\_\_\_\_ "mucus". It's not that different to the snot that comes out of your nose when you have a (5)\_\_\_\_\_.

SubQuestion No : 24

Q.24 Select the most appropriate option to fill in blank number 4.

- Ans
- ☒ 1. hailed
  - ☒ 2. called
  - ☒ 3. deemed
  - ☒ 4. stepped

Question Type : MCQ

Question ID : 264330134731

Option 1 ID : 264330527877

Option 2 ID : 264330527876

Option 3 ID : 264330527875

Option 4 ID : 264330527878

Status : Answered

Chosen Option : 2

### Comprehension:

In the following passage some of the words have been deleted. Read the passage carefully and select the correct answer for the given blank out of the four alternatives.

Snail slime is made (1)\_\_\_\_\_ a mixture of substances. It is mostly water (2)\_\_\_\_\_ with proteins and some carbohydrates and minerals, (3)\_\_\_\_\_ into a sort of jelly. This jelly is (4)\_\_\_\_\_ "mucus". It's not that different to the snot that comes out of your nose when you have a (5)\_\_\_\_\_.

SubQuestion No : 25

Q.25 Select the most appropriate option to fill in blank number 5.

- Ans
- ☒ 1. plague
  - ☒ 2. cold
  - ☒ 3. bug
  - ☒ 4. complaint

Question Type : MCQ

Question ID : 264330134732

Option 1 ID : 264330527879

Option 2 ID : 264330527881

Option 3 ID : 264330527882

Option 4 ID : 264330527880

Status : Answered

Chosen Option : 2