

Multi Tasking Non Technical Staff and Havaladar CBIC and CBN Examination 2022

Roll Number	
Candidate Name	
Venue Name	iON Digital Zone iDZ 1 Bhauti
Exam Date	12/05/2023
Exam Time	9:00 AM - 10:30 AM
Subject	MTS Non Tech Havaladar CBIC and CBN Examination 2022

Section : Numerical and Mathematical Ability

Q.1 What is the value of $\frac{(45 \times 3 \div 27 \times 4)(81 \div 5 \times 85 \div 51)}{(108 \div 18 \times 7 \div 21)(133 \times 3 \div 38 \times 4)}$?

- Ans
- ☒ 1. 46/7
 - ☒ 2. 45/7
 - ☒ 3. 54/7
 - ☒ 4. 39/7

Question Type : MCQ
 Question ID : 264330137193
 Option 1 ID : 264330537418
 Option 2 ID : 264330537416
 Option 3 ID : 264330537415
 Option 4 ID : 264330537417
 Status : Answered
 Chosen Option : 2

Q.2 If the radius of a sphere is 3/4 of the radius of a hemisphere, then what will be the ratio of the volumes of sphere and hemisphere?

- Ans
- ☒ 1. 9 : 16
 - ☒ 2. 51 : 64
 - ☒ 3. 27 : 32
 - ☒ 4. 18 : 64

Question Type : MCQ
 Question ID : 264330137336
 Option 1 ID : 264330537973
 Option 2 ID : 264330537974
 Option 3 ID : 264330537971
 Option 4 ID : 264330537972
 Status : Answered
 Chosen Option : 3

Test Prime

**ALL EXAMS,
ONE SUBSCRIPTION**



70,000+
Mock Tests



**Personalised
Report Card**



**Unlimited
Re-Attempt**



600+
Exam Covered



**Previous Year
Papers**



**500%
Refund**



ATTEMPT FREE MOCK NOW

Q.3 A boy can swim in still water at a speed of 40 km/hr. If the speed of the current would have been 15 km/hr, then find the time in which the boy could swim 25 km upstream.

- Ans**
- ☒ 1. 2 hours
 - ☒ 2. 2.5 hours
 - ☒ 3. 1 hour
 - ☒ 4. 3 hours

Question Type : **MCQ**

Question ID : **264330138426**

Option 1 ID : **264330542312**

Option 2 ID : **264330542313**

Option 3 ID : **264330542311**

Option 4 ID : **264330542314**

Status : **Answered**

Chosen Option : **3**

Q.4 Tina can do a work in 15 days and Manya can do the same work in 18 days. If they worked for 6 days, then what is the fraction of work is left?

- Ans**
- ☒ 1. 4/15
 - ☒ 2. 8/15
 - ☒ 3. 11/15
 - ☒ 4. 11/30

Question Type : **MCQ**

Question ID : **264330133595**

Option 1 ID : **264330523405**

Option 2 ID : **264330523406**

Option 3 ID : **264330523403**

Option 4 ID : **264330523404**

Status : **Answered**

Chosen Option : **1**

Q.5 A shopkeeper buys pencils from a wholesaler at Rs.20 for 40 pencils. He sells those pencils at Rs.20 for 20 pencils. What was his profit or loss percent?

- Ans**
- ☒ 1. 50% Profit
 - ☒ 2. 80% Loss
 - ☒ 3. 100% Profit
 - ☒ 4. 20% loss

Question Type : **MCQ**

Question ID : **264330141008**

Option 1 ID : **264330552380**

Option 2 ID : **264330552381**

Option 3 ID : **264330552382**

Option 4 ID : **264330552379**

Status : **Answered**

Chosen Option : **3**

Q.6 15 books were sold for Rs. 2200 thereby gaining a cost price of 5 books. Find the cost price of a book.

- Ans** ☒ 1. Rs. 110
☒ 2. Rs. 200
☒ 3. Rs. 210
☒ 4. Rs. 230

Question Type : **MCQ**

Question ID : **264330138420**

Option 1 ID : **264330542287**

Option 2 ID : **264330542289**

Option 3 ID : **264330542288**

Option 4 ID : **264330542290**

Status : **Answered**

Chosen Option : **1**

Q.7 In a class of 70 students, 70% are girls and the remaining are boys. If the average of the girl's marks is 30 and that of the boys is 40, what is the average mark for the whole class?

- Ans** ☒ 1. 33
☒ 2. 38
☒ 3. 30
☒ 4. 35

Question Type : **MCQ**

Question ID : **264330138415**

Option 1 ID : **264330542268**

Option 2 ID : **264330542270**

Option 3 ID : **264330542267**

Option 4 ID : **264330542269**

Status : **Answered**

Chosen Option : **1**

Q.8 Find the value of $24 + [33 + 40 \text{ of } \{3 \times (5 - 44 + 50)\}]$.

- Ans** ☒ 1. 1331
☒ 2. 1250
☒ 3. 1442
☒ 4. 1377

Question Type : **MCQ**

Question ID : **264330138412**

Option 1 ID : **264330542258**

Option 2 ID : **264330542255**

Option 3 ID : **264330542257**

Option 4 ID : **264330542256**

Status : **Answered**

Chosen Option : **4**

Q.9 If the third proportion to 10 and x is 90 and the third proportion of 12 and y is 27. Find the value of (x + y).

- Ans
- ☒ 1. 56
 - ☒ 2. 44
 - ☒ 3. 48
 - ☒ 4. 50

Question Type : MCQ
 Question ID : 264330138423
 Option 1 ID : 264330542301
 Option 2 ID : 264330542300
 Option 3 ID : 264330542299
 Option 4 ID : 264330542302
 Status : Answered
 Chosen Option : 3

Q.10 A person sold 28 articles for Rs. 2800 and incurred a loss of 20%. How many articles should he sell for Rs. 4400 to make a profit of 10%?

- Ans
- ☒ 1. 16
 - ☒ 2. 40
 - ☒ 3. 32
 - ☒ 4. 24

Question Type : MCQ
 Question ID : 264330138421
 Option 1 ID : 264330542291
 Option 2 ID : 264330542293
 Option 3 ID : 264330542292
 Option 4 ID : 264330542294
 Status : Answered
 Chosen Option : 3

Q.11 What is the value of $25 \times 7 \div 175 - 196 \div 14 \times 2 + 625 \div 25 \times 3$?

- Ans
- ☒ 1. 48
 - ☒ 2. 38
 - ☒ 3. 58
 - ☒ 4. 28

Question Type : MCQ
 Question ID : 264330137170
 Option 1 ID : 264330537325
 Option 2 ID : 264330537324
 Option 3 ID : 264330537323
 Option 4 ID : 264330537326
 Status : Answered
 Chosen Option : 1

Q.12 How much time will it take for an amount of Rs.450 to yield Rs.47.25 as interest at 3.5% per annum of simple interest?

- Ans
- ☒ 1. 1 year
 - ☒ 2. 2 years
 - ☒ 3. 3 years
 - ☒ 4. 4 years

Question Type : MCQ

Question ID : 264330133637

Option 1 ID : 264330523574

Option 2 ID : 264330523573

Option 3 ID : 264330523572

Option 4 ID : 264330523571

Status : Answered

Chosen Option : 3

Q.13 The area of the base of a rectangular tank is 720 m^2 and the volume of water contained in it is 28800 m^3 . What is the depth of the water?

- Ans
- ☒ 1. 30 m
 - ☒ 2. 40 m
 - ☒ 3. 50 m
 - ☒ 4. 60 m

Question Type : MCQ

Question ID : 264330133600

Option 1 ID : 264330523423

Option 2 ID : 264330523424

Option 3 ID : 264330523425

Option 4 ID : 264330523426

Status : Answered

Chosen Option : 2

Q.14 A number is divided in the ratio 5:7. When 6 was added to each, the ratio changes to 7:9. Find the greater number.

- Ans
- ☒ 1. 12
 - ☒ 2. 18
 - ☒ 3. 15
 - ☒ 4. 21

Question Type : MCQ

Question ID : 264330138422

Option 1 ID : 264330542298

Option 2 ID : 264330542297

Option 3 ID : 264330542295

Option 4 ID : 264330542296

Status : Answered

Chosen Option : 4

Q.15 Simple interest on a sum for three months at the rate of 15 percent per annum is Rs. 600. What is the sum?

- Ans** ☒ 1. Rs. 16000
☒ 2. Rs. 4000
☒ 3. Rs. 1600
☒ 4. Rs. 32000

Question Type : **MCQ**

Question ID : **264330138025**

Option 1 ID : **264330540709**

Option 2 ID : **264330540708**

Option 3 ID : **264330540707**

Option 4 ID : **264330540710**

Status : **Answered**

Chosen Option : **2**

Q.16 If 40 percent of $x = 25$ percent of 20, then what is the value of x ?

- Ans** ☒ 1. 22.5
☒ 2. 12.5
☒ 3. 17.5
☒ 4. 20

Question Type : **MCQ**

Question ID : **264330138020**

Option 1 ID : **264330540689**

Option 2 ID : **264330540687**

Option 3 ID : **264330540688**

Option 4 ID : **264330540690**

Status : **Answered**

Chosen Option : **2**

Q.17 The table given below shows the number of runs scored and number of balls played by 5 batsmen.

Batsman	No. of runs scored	No. of balls played
J	80	35
K	90	70
L	100	60
M	120	170
N	50	50

$$\text{Strikerate} = \frac{\text{Number of runs scored}}{\text{Number of balls played}} \times 100$$

Strike rate of J is what percent of strike rate of N?

- Ans**
- ✗ 1. 242.24 percent
- ✓ 2. 228.57 percent
- ✗ 3. 182.36 percent
- ✗ 4. 196.44 percent

Question Type : **MCQ**

Question ID : **264330137194**

Option 1 ID : **264330537419**

Option 2 ID : **264330537420**

Option 3 ID : **264330537421**

Option 4 ID : **264330537422**

Status : **Answered**

Chosen Option : **2**

Q.18 A girl goes from A to B with speed 60 km/hr and return from B to A with speed 30 km/hr. If whole journey takes 5 hours, then what is the distance between A and B?

- Ans**
- ✗ 1. 200 km
- ✓ 2. 100 km
- ✗ 3. 50 km
- ✗ 4. 90 km

Question Type : **MCQ**

Question ID : **264330138351**

Option 1 ID : **264330542011**

Option 2 ID : **264330542012**

Option 3 ID : **264330542013**

Option 4 ID : **264330542014**

Status : **Answered**

Chosen Option : **2**

Q.19 Some carpenters promised to complete a work in 20 days. When the work was started, 8 of them were absent and remaining completed the work in 40 days. What was the original number of carpenters?

- Ans**
- ☒ 1. 18
 - ☒ 2. 12
 - ☒ 3. 10
 - ☒ 4. 16

Question Type : MCQ

Question ID : 264330137321

Option 1 ID : 264330537914

Option 2 ID : 264330537913

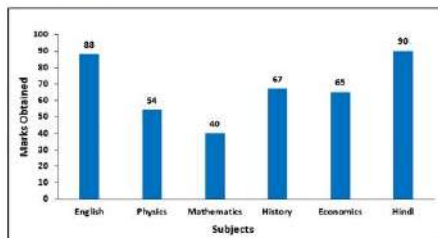
Option 3 ID : 264330537912

Option 4 ID : 264330537911

Status : Answered

Chosen Option : 4

Q.20 The bar graph shows the marks of a student in different subjects out of 100. His marks in physics is what percent more than that in mathematics?



- Ans**
- ☒ 1. 44%
 - ☒ 2. 35%
 - ☒ 3. 33%
 - ☒ 4. 28%

Question Type : MCQ

Question ID : 264330138430

Option 1 ID : 264330542327

Option 2 ID : 264330542328

Option 3 ID : 264330542329

Option 4 ID : 264330542330

Status : Answered

Chosen Option : 2

Q.1 By Interchanging which two signs the equation will be correct?

$$21 - 7 \times 4 \div 10 + 2 = 4$$

- Ans
- ☒ 1. $-$ and \times
 - ☒ 2. \times and \div
 - ☒ 3. $-$ and \div
 - ☒ 4. $+$ and $-$

Question Type : MCQ

Question ID : 264330138535

Option 1 ID : 264330542748

Option 2 ID : 264330542750

Option 3 ID : 264330542749

Option 4 ID : 264330542747

Status : Answered

Chosen Option : 3

Q.2 In a certain code language, 'EDITOR' is coded as 'CBGQLO'. What is the code for 'FOLDER' in that code language?

- Ans
- ☒ 1. DMJABO
 - ☒ 2. BMJBCR
 - ☒ 3. DMJACO
 - ☒ 4. DMJABR

Question Type : MCQ

Question ID : 264330138544

Option 1 ID : 264330542785

Option 2 ID : 264330542786

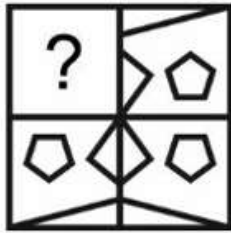
Option 3 ID : 264330542783

Option 4 ID : 264330542784

Status : Answered

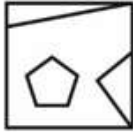
Chosen Option : 3

Q.3 Which answer figure will complete the pattern in the question figure?

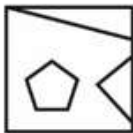


Ans

✗ 1.



✗ 2.



✓ 3.



✗ 4.



Question Type : MCQ

Question ID : 264330138539

Option 1 ID : 264330542766

Option 2 ID : 264330542765

Option 3 ID : 264330542763

Option 4 ID : 264330542764

Status : Answered

Chosen Option : 2

Q.4 In the following question below are given some statements followed by some conclusions based on those statements. Taking the given statements to be true even if they seem to be at variance from commonly known facts. Read all the conclusions and then decide which of the given conclusion logically follows the given statements.

Statements:

I. All G are K.

II. Some K are T.

Conclusion:

I. No T is G.

II. No K is T.

III. All K are G.

- Ans**
- ☒ 1. Neither conclusion follows
 - ☐ 2. Both conclusions II and III follows
 - ☐ 3. Both conclusions I and II follows
 - ☐ 4. Both conclusions I and III follows

Question Type : MCQ

Question ID : 264330138530

Option 1 ID : 264330542727

Option 2 ID : 264330542729

Option 3 ID : 264330542730

Option 4 ID : 264330542728

Status : Answered

Chosen Option : 1

Q.5 Select the option that is related to the fifth term in the same way as the second term is related to the first term and fourth term is related to third term.

AR9 : DN81 :: PS4 : SO16 :: MT9 : ?

- Ans**
- ☐ 1. PQ81
 - ☐ 2. PR729
 - ☒ 3. PP81
 - ☐ 4. PP729

Question Type : MCQ

Question ID : 264330138521

Option 1 ID : 264330542692

Option 2 ID : 264330542693

Option 3 ID : 264330542691

Option 4 ID : 264330542694

Status : Answered

Chosen Option : 3

Q.6 Select the correct mirror image of the given figure when the mirror is placed at MN as shown below.

X8SeVM5HJ
M N

Ans

- ✗ 1. X 8 2 6 Λ M 2 H 1
- ✗ 2. X 8 2 6 V W 5 H 1
- ✓ 3. X 8 2 6 Λ W 2 H 1
- ✗ 4. X 8 S 6 V W 5 H 1

Question Type : MCQ

Question ID : 264330137363

Option 1 ID : 264330538082

Option 2 ID : 264330538080

Option 3 ID : 264330538079

Option 4 ID : 264330538081

Status : Answered

Chosen Option : 3

Q.7 Which two signs should be interchanged to make the given equation correct?

$$8 - 9 + 24 \times 63 = 33$$

Ans

- ✓ 1. \times and $-$
- ✗ 2. $=$ and $+$
- ✗ 3. $-$ and $=$
- ✗ 4. $-$ and $+$

Question Type : MCQ

Question ID : 264330133382

Option 1 ID : 264330522559

Option 2 ID : 264330522561

Option 3 ID : 264330522560

Option 4 ID : 264330522562

Status : Answered

Chosen Option : 1

Q.8 Eight friends Mansi, Shweta, Monika, Payal, Aarti, Kajal, Laxmi and Rani are sitting around a circular table facing towards the centre (not necessarily in the same order). Mansi is third to the left of Monika. Aarti is second to the right of Monika. Shweta is fourth to the left of Payal. Payal is second to the left of Mansi. Rani is third to the right of Kajal. Kajal is not the immediate neighbour of Mansi. Who is second to the right of Kajal?

Ans

- ✗ 1. Rani
- ✓ 2. Payal
- ✗ 3. Laxmi
- ✗ 4. Aarti

Question Type : MCQ

Question ID : 264330138527

Option 1 ID : 264330542717

Option 2 ID : 264330542718

Option 3 ID : 264330542715

Option 4 ID : 264330542716

Status : Answered

Chosen Option : 2

Q.9 In a certain code language, 'DEAL' is coded as '22', 'EACH' is coded as '17'. What is the code for 'HALF' in that code language?

- Ans**
- ☒ 1. 24
 - ☒ 2. 26
 - ☒ 3. 25
 - ☒ 4. 27

Question Type : **MCQ**

Question ID : **264330135598**

Option 1 ID : **264330531291**

Option 2 ID : **264330531292**

Option 3 ID : **264330531294**

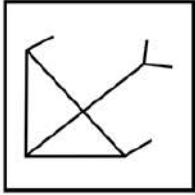
Option 4 ID : **264330531293**

Status : **Answered**

Chosen Option : **4**

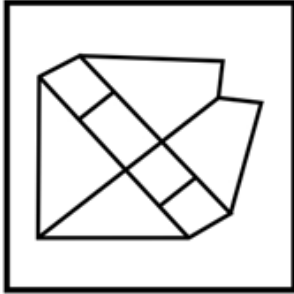


Q.10 Select the option figure in which the given figure is embedded as its part (rotation is NOT allowed).

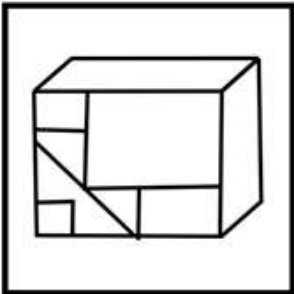


Ans


✓ 1.



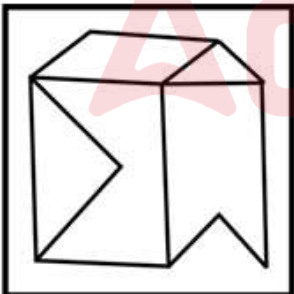
✗ 2.



✗ 3.



✗ 4.



Question Type : MCQ

Question ID : 264330137362

Option 1 ID : 264330538076

Option 2 ID : 264330538075

Option 3 ID : 264330538077

Option 4 ID : 264330538078

Status : Answered

Chosen Option : 1

Q.11 A series is given with one term missing. Select the correct alternative from the given ones that will complete the series.

ANS, CJU, EFW, GBY,?

- Ans**
- ☒ 1. IXA
 - ☐ 2. JWA
 - ☐ 3. JXB
 - ☐ 4. IWA

Question Type : **MCQ**

Question ID : **264330138519**

Option 1 ID : **264330542685**

Option 2 ID : **264330542686**

Option 3 ID : **264330542683**

Option 4 ID : **264330542684**

Status : **Answered**

Chosen Option : **1**

Q.12 In a certain code language, 'DUGPS' is written as '4377T'. How will 'AEMJQ' be written in that language?

- Ans**
- ☐ 1. 1R54R
 - ☐ 2. 1641R
 - ☒ 3. 1541R
 - ☐ 4. 1249R

Question Type : **MCQ**

Question ID : **264330133701**

Option 1 ID : **264330523830**

Option 2 ID : **264330523827**

Option 3 ID : **264330523828**

Option 4 ID : **264330523829**

Status : **Answered**

Chosen Option : **3**

Q.13 Price of five cars A, L, J, M and T are compared. Price of A is the least. No two cars have the same price. Price of J is less than T, L and M. Price of neither T nor L is the highest. Price of T is less than L. Price of how many cars is more than the price of T?

- Ans**
- ☐ 1. 1
 - ☐ 2. 3
 - ☒ 3. 2
 - ☐ 4. 0

Question Type : **MCQ**

Question ID : **264330138528**

Option 1 ID : **264330542721**

Option 2 ID : **264330542720**

Option 3 ID : **264330542722**

Option 4 ID : **264330542719**

Status : **Answered**

Chosen Option : **3**

Q.14 Which of the following numbers will replace the question mark (?) in the given series?

-7, -6, -4, -1, 3, 8, 14, ?

Ans ☒ 1. 26

☒ 2. 21

☒ 3. 24

☒ 4. 18

Question Type : MCQ

Question ID : 264330137821

Option 1 ID : 264330539891

Option 2 ID : 264330539892

Option 3 ID : 264330539894

Option 4 ID : 264330539893

Status : Answered

Chosen Option : 2

Q.15 Six girls Mansi, Shweta, Monika, Payal, Aarti and Kajal are sitting around a circular table facing towards the centre (not necessarily in the same order). Kajal is to immediate left of Mansi. Shweta is third to the left of Mansi. Payal is second to the right of Kajal. Monika is not second to the left of Mansi. Who is second to the right of Mansi?

Ans ☒ 1. Kajal

☒ 2. Shweta

☒ 3. Monika

☒ 4. Payal

Question Type : MCQ

Question ID : 264330138526

Option 1 ID : 264330542714

Option 2 ID : 264330542711

Option 3 ID : 264330542712

Option 4 ID : 264330542713

Status : Answered

Chosen Option : 3

Q.16 Words given on the left side of (::) are related with each other by some Logic/Rule/Relation. Select the missing word/word pair on the right side of (::) from the given alternatives based on the same Logic/Rule/Relation.

Cart : Wheel :: ?

Ans ☒ 1. House : Room

☒ 2. Chapter : Book

☒ 3. Pedal : Bicycle

☒ 4. Student : Class

Question Type : MCQ

Question ID : 264330138522

Option 1 ID : 264330542695

Option 2 ID : 264330542697

Option 3 ID : 264330542696

Option 4 ID : 264330542698

Status : Answered

Chosen Option : 1

Q.17 Select the option in which the numbers shares the same relationship in set as that shared by the numbers in the given set.
(NOTE: Operations should be performed on the whole numbers, without breaking down the numbers into its constituent digits. E.g. 13 – Operations on 13 such as adding /subtracting /multiplying etc. to 13 can be performed. Breaking down 13 into 1 and 3 and then performing mathematical operations on 1 and 3 is not allowed)

(10, 50, 250)

(20, 100, 500)

- Ans**
- ☒ 1. (14, 70, 300)
 - ☒ 2. (20, 80, 500)
 - ☒ 3. (10, 50, 200)
 - ☒ 4. (8, 40, 200)

Question Type : **MCQ**

Question ID : **264330138534**

Option 1 ID : **264330542745**

Option 2 ID : **264330542746**

Option 3 ID : **264330542744**

Option 4 ID : **264330542743**

Status : **Answered**

Chosen Option : **4**

Q.18 In the following question below are given some statements followed by some conclusions based on those statements. Taking the given statements to be true even if they seem to be at variance from commonly known facts. Read all the conclusions and then decide which of the given conclusion logically follows the given statements.

Statements:

I. Some toys are small.

II. Some tall are toys.

Conclusion:

I. Some small are toys.

II. All small are tall.

- Ans**
- ☒ 1. Only conclusion I follows
 - ☒ 2. Only conclusion II follows
 - ☒ 3. Both conclusions I and II follows
 - ☒ 4. Neither conclusion follows

Question Type : **MCQ**

Question ID : **264330138529**

Option 1 ID : **264330542723**

Option 2 ID : **264330542724**

Option 3 ID : **264330542725**

Option 4 ID : **264330542726**

Status : **Answered**

Chosen Option : **1**

Q.19 In the following question, select the missing number of the given series.

17, 19, 23, 29, 31,?

- Ans
- ☒ 1. 30
 - ☒ 2. 47
 - ☒ 3. 40
 - ☒ 4. 37

Question Type : MCQ
Question ID : 264330138532
Option 1 ID : 264330542735
Option 2 ID : 264330542738
Option 3 ID : 264330542737
Option 4 ID : 264330542736
Status : Answered
Chosen Option : 3

Q.20 Select the option that is related to the third number in the same way as the second number is related to the first number.
20 : 30 :: 100 : ?

- Ans
- ☒ 1. 210
 - ☒ 2. 1480
 - ☒ 3. 150
 - ☒ 4. 140

Question Type : MCQ
Question ID : 264330137823
Option 1 ID : 264330539900
Option 2 ID : 264330539901
Option 3 ID : 264330539902
Option 4 ID : 264330539899
Status : Answered
Chosen Option : 3

Section : General Awareness

Q.1 In which of the following articles, "Right against Exploitation" are mentioned?

- Ans
- ☒ 1. Article 23 – 24
 - ☒ 2. Article 32 - 35
 - ☒ 3. Article 25 – 28
 - ☒ 4. Article 29 – 30

Question Type : MCQ
Question ID : 264330138308
Option 1 ID : 264330541839
Option 2 ID : 264330541842
Option 3 ID : 264330541841
Option 4 ID : 264330541840
Status : Answered
Chosen Option : 1

Q.2 The western cyclonic disturbances in India are brought in by the westerly flow from which region?

- Ans
- ☐ 1. South-American region
 - ☒ 2. Mediterranean region
 - ☐ 3. Eastern European region
 - ☐ 4. South-African region

Question Type : MCQ

Question ID : 264330138314

Option 1 ID : 264330541863

Option 2 ID : 264330541865

Option 3 ID : 264330541866

Option 4 ID : 264330541864

Status : Answered

Chosen Option : 2

Q.3 Which organisation is responsible for the development and maintenance of the roads on the Indian borders?

- Ans
- ☒ 1. Border Roads Organisation
 - ☐ 2. Western Roadways Organisation
 - ☐ 3. National Green Highways Project
 - ☐ 4. Eastern Roadways Organisation

Question Type : MCQ

Question ID : 264330134065

Option 1 ID : 264330525283

Option 2 ID : 264330525286

Option 3 ID : 264330525284

Option 4 ID : 264330525285

Status : Answered

Chosen Option : 1

Q.4 Who is the author of the epic poem 'Padmavat'?

- Ans
- ☐ 1. Kuldeep Nayyar
 - ☐ 2. Kalidasa
 - ☒ 3. Malik Muhammad Jayasi
 - ☐ 4. Al-Biruni

Question Type : MCQ

Question ID : 264330134073

Option 1 ID : 264330525316

Option 2 ID : 264330525315

Option 3 ID : 264330525317

Option 4 ID : 264330525318

Status : Answered

Chosen Option : 3

Q.5 Density of population, is expressed as _____ .

- Ans
- ☐ 1. number of rural persons per unit area
 - ☐ 2. number of literate persons per unit area
 - ☒ 3. number of persons per unit area
 - ☐ 4. number of animals and persons per unit area

Question Type : MCQ

Question ID : 264330138693

Option 1 ID : 264330543380

Option 2 ID : 264330543381

Option 3 ID : 264330543379

Option 4 ID : 264330543382

Status : Answered

Chosen Option : 3

Q.6 The _____ is a meeting of all adults who live in the area covered by a Panchayat.

- Ans
- ☐ 1. Vidhan Sabha
 - ☐ 2. Lok Shaba
 - ☐ 3. Rajya Sabha
 - ☒ 4. Gram Sabha

Question Type : MCQ

Question ID : 264330133867

Option 1 ID : 264330524492

Option 2 ID : 264330524493

Option 3 ID : 264330524494

Option 4 ID : 264330524491

Status : Answered

Chosen Option : 4

Q.7 Alla Rakha left home at age 12 to learn a musical instrument under the great master (ustad) Mian Qadir Baksh. He became a renowned player of _____.

- Ans
- ☐ 1. Sarod
 - ☐ 2. Sarangi
 - ☒ 3. Tabla
 - ☐ 4. Sitar

Question Type : MCQ

Question ID : 264330138302

Option 1 ID : 264330541815

Option 2 ID : 264330541818

Option 3 ID : 264330541817

Option 4 ID : 264330541816

Status : Answered

Chosen Option : 3

Q.8 When was the Treaty of Purandar signed between Jai Singh I, commander of the Mughal Empire, and Shivaji?

- Ans**
- ☒ 1. 1639
 - ☒ 2. 1702
 - ☒ 3. 1665
 - ☒ 4. 1681

Question Type : **MCQ**
 Question ID : **264330137933**
 Option 1 ID : **264330540342**
 Option 2 ID : **264330540340**
 Option 3 ID : **264330540341**
 Option 4 ID : **264330540339**
 Status : **Answered**
 Chosen Option : **3**

Q.9 Who among the following was named as the captain for the three-match T20 series in New Zealand in November 2022 by Board of Control for Cricket in India?

- Ans**
- ☒ 1. Rishabh Pant
 - ☒ 2. Virat Kohli
 - ☒ 3. Hardik Pandya
 - ☒ 4. Shikhar Dhawan

Question Type : **MCQ**
 Question ID : **264330137942**
 Option 1 ID : **264330540377**
 Option 2 ID : **264330540375**
 Option 3 ID : **264330540378**
 Option 4 ID : **264330540376**
 Status : **Answered**
 Chosen Option : **3**

Q.10 Provisions related to the seat of the "Supreme Court of India" is mentioned in which article?

- Ans**
- ☒ 1. Article 132
 - ☒ 2. Article 131
 - ☒ 3. Article 130
 - ☒ 4. Article 129

Question Type : **MCQ**
 Question ID : **264330134605**
 Option 1 ID : **264330527378**
 Option 2 ID : **264330527377**
 Option 3 ID : **264330527376**
 Option 4 ID : **264330527375**
 Status : **Answered**
 Chosen Option : **1**

Q.11 In 1867, Keshab Chunder Sen helped found the Prarthana Samaj in _____.

- Ans
- ☒ 1. Pune
 - ☒ 2. Calcutta
 - ☒ 3. Bombay
 - ☒ 4. Madras

Question Type : MCQ
 Question ID : 264330137077
 Option 1 ID : 264330536954
 Option 2 ID : 264330536953
 Option 3 ID : 264330536952
 Option 4 ID : 264330536951
 Status : Answered
 Chosen Option : 2

Q.12 Which dancer received the Padma Shri award in 2021 for her contribution to art?

- Ans
- ☒ 1. Alarmel Valli
 - ☒ 2. Piuli Pati
 - ☒ 3. Aparna Satheesan
 - ☒ 4. Manjamma Jogati

Question Type : MCQ
 Question ID : 264330134075
 Option 1 ID : 264330525326
 Option 2 ID : 264330525323
 Option 3 ID : 264330525324
 Option 4 ID : 264330525325
 Status : Not Answered
 Chosen Option : --

Q.13 _____ is celebrated as the New Year of Kerala.

- Ans
- ☒ 1. Onam
 - ☒ 2. Pongal
 - ☒ 3. Bonalu
 - ☒ 4. Vishu

Question Type : MCQ
 Question ID : 264330137064
 Option 1 ID : 264330536901
 Option 2 ID : 264330536900
 Option 3 ID : 264330536899
 Option 4 ID : 264330536902
 Status : Answered
 Chosen Option : 1

Q.14 The Bandipur National Park is located in which of the following states?

- Ans ☒ 1. Karnataka
☒ 2. Andhra Pradesh
☒ 3. Kerala
☒ 4. Tamil Nadu

Question Type : MCQ
Question ID : 264330137926
Option 1 ID : 264330540312
Option 2 ID : 264330540314
Option 3 ID : 264330540311
Option 4 ID : 264330540313
Status : Answered
Chosen Option : 1

Q.15 Duties levied on goods produced within the country are _____.

- Ans ☒ 1. anti-dumping taxes
☒ 2. excise taxes
☒ 3. custom duties
☒ 4. wealth taxes

Question Type : MCQ
Question ID : 264330134080
Option 1 ID : 264330525344
Option 2 ID : 264330525345
Option 3 ID : 264330525346
Option 4 ID : 264330525343
Status : Answered
Chosen Option : 2

Q.16 The ozone layer is found in which of the following layers of the atmosphere?

- Ans ☒ 1. Stratosphere
☒ 2. Troposphere
☒ 3. Mesosphere
☒ 4. Exosphere

Question Type : MCQ
Question ID : 264330137927
Option 1 ID : 264330540315
Option 2 ID : 264330540317
Option 3 ID : 264330540316
Option 4 ID : 264330540318
Status : Answered
Chosen Option : 1

Q.17 Who among the following was the Governor-General from 1773 to 1785?

- Ans ☒ 1. Warren Hastings
- ☐ 2. Lord Dalhousie
- ☐ 3. William Bentinck
- ☐ 4. Lord Mountbatten

Question Type : MCQ
 Question ID : 264330133879
 Option 1 ID : 264330524540
 Option 2 ID : 264330524541
 Option 3 ID : 264330524539
 Option 4 ID : 264330524542
 Status : Answered
 Chosen Option : 3

Q.18 The Tapu dance from Arunachal Pradesh is performed by members of the _____.

- Ans ☐ 1. Munda tribe
- ☐ 2. Damor Tribe
- ☐ 3. Garasia Tribe
- ☒ 4. Adi Tribe

Question Type : MCQ
 Question ID : 264330138296
 Option 1 ID : 264330541791
 Option 2 ID : 264330541793
 Option 3 ID : 264330541794
 Option 4 ID : 264330541792
 Status : Answered
 Chosen Option : 4

Q.19 The iron pillar is situated in which of the following places?

- Ans ☒ 1. Delhi
- ☐ 2. Kolkata
- ☐ 3. Chennai
- ☐ 4. Jaipur

Question Type : MCQ
 Question ID : 264330133858
 Option 1 ID : 264330524456
 Option 2 ID : 264330524455
 Option 3 ID : 264330524457
 Option 4 ID : 264330524458
 Status : Answered
 Chosen Option : 1

Q.20 LPG subsidy to domestic consumer under PAHAL Scheme is given by _____.

- Ans ☒ 1. Ministry of Petroleum and Natural Gas
- ☒ 2. Ministry of Housing and Urban Affairs
- ☒ 3. Ministry of Finance
- ☒ 4. Ministry of Consumer Affairs

Question Type : MCQ

Question ID : 264330138305

Option 1 ID : 264330541830

Option 2 ID : 264330541827

Option 3 ID : 264330541829

Option 4 ID : 264330541828

Status : Answered

Chosen Option : 2

Q.21 Who among the following Navratnas from Chandragupta II court wrote 'Mantrashastra'?

- Ans ☒ 1. Kalidasa
- ☒ 2. Ghatakarapara
- ☒ 3. Vetala Bhatta
- ☒ 4. Amarasimha

Question Type : MCQ

Question ID : 264330137074

Option 1 ID : 264330536939

Option 2 ID : 264330536942

Option 3 ID : 264330536940

Option 4 ID : 264330536941

Status : Answered

Chosen Option : 3

Q.22 Fatima Sheikh was widely regarded as _____.

- Ans ☒ 1. India's First Female Muslim Entrepreneur
- ☒ 2. India's First Female Doctor
- ☒ 3. India's First Female Muslim Teacher
- ☒ 4. India's First Female Engineer

Question Type : MCQ

Question ID : 264330138304

Option 1 ID : 264330541824

Option 2 ID : 264330541826

Option 3 ID : 264330541823

Option 4 ID : 264330541825

Status : Answered

Chosen Option : 2

Q.23 Who was the only Indian to qualify for the 2022 Winter Olympics?

- Ans
- ☒ 1. Himanshu Thakur
 - ☒ 2. Nadeem Iqbal
 - ☒ 3. Arif Mohammad Khan
 - ☒ 4. Shiva Keshavan

Question Type : MCQ

Question ID : 264330138299

Option 1 ID : 264330541804

Option 2 ID : 264330541806

Option 3 ID : 264330541803

Option 4 ID : 264330541805

Status : Answered

Chosen Option : 3

Q.24 Which of the following is a non-metal that can exist in different form?

- Ans
- ☒ 1. Mercury
 - ☒ 2. Carbon
 - ☒ 3. Lithium
 - ☒ 4. Potassium

Question Type : MCQ

Question ID : 264330137924

Option 1 ID : 264330540306

Option 2 ID : 264330540303

Option 3 ID : 264330540304

Option 4 ID : 264330540305

Status : Answered

Chosen Option : 2

Q.25 The innermost part of a flower is called the _____.

- Ans
- ☒ 1. stamens
 - ☒ 2. pistil
 - ☒ 3. petals
 - ☒ 4. sepals

Question Type : MCQ

Question ID : 264330138309

Option 1 ID : 264330541846

Option 2 ID : 264330541843

Option 3 ID : 264330541845

Option 4 ID : 264330541844

Status : Answered

Chosen Option : 2

Q.1 Choose the word that is opposite in meaning to the given word.
Adhere

- Ans ☒ 1. Establish
☒ 2. Approve
☒ 3. Compel
☒ 4. Condemn

Question Type : MCQ
Question ID : 264330134338
Option 1 ID : 264330526340
Option 2 ID : 264330526339
Option 3 ID : 264330526342
Option 4 ID : 264330526341
Status : Answered
Chosen Option : 4

Q.2 Select the most appropriate option to fill in the blank.

Obesity is also a progressive condition, unlike anorexia nervosa, which tends to _____ with age.

- Ans ☒ 1. inebriate
☒ 2. ameliorate
☒ 3. struggle
☒ 4. negate

Question Type : MCQ
Question ID : 264330136671
Option 1 ID : 264330535404
Option 2 ID : 264330535403
Option 3 ID : 264330535405
Option 4 ID : 264330535406
Status : Answered
Chosen Option : 2

Q.3 Improve the underlined part of the sentence. Choose 'No improvement' as an answer if the sentence is grammatically correct.

In the summer, the weathering can be very hot around here.

- Ans ☒ 1. weathers could being
☒ 2. No improvement
☒ 3. weather is be
☒ 4. weather can be

Question Type : MCQ
Question ID : 264330135208
Option 1 ID : 264330529761
Option 2 ID : 264330529762
Option 3 ID : 264330529759
Option 4 ID : 264330529760
Status : Answered
Chosen Option : 4

Q.4 Fill in the blank with the most appropriate choice

At the _____ of the century the early evangelistic zeal of the chief Protestant denominations had notably lessened.

- Ans
- ☒ 1. final
 - ☒ 2. angst
 - ☒ 3. end
 - ☒ 4. ante

Question Type : MCQ

Question ID : 264330135791

Option 1 ID : 264330532041

Option 2 ID : 264330532039

Option 3 ID : 264330532042

Option 4 ID : 264330532040

Status : Answered

Chosen Option : 3

Q.5 Select the wrongly spelt word.

- Ans
- ☒ 1. Indispensable
 - ☒ 2. Discripancy
 - ☒ 3. Tyranny
 - ☒ 4. Pastime

Question Type : MCQ

Question ID : 264330135790

Option 1 ID : 264330532037

Option 2 ID : 264330532038

Option 3 ID : 264330532035

Option 4 ID : 264330532036

Status : Answered

Chosen Option : 2

Q.6 Select the most appropriate meaning of the bracketed idiom in the given sentence.

With one goal remaining, they weren't (out of the woods) just yet.

- Ans
- ☒ 1. Without hope
 - ☒ 2. Free from difficulties and dangers
 - ☒ 3. Under his control
 - ☒ 4. Between two dangers

Question Type : MCQ

Question ID : 264330136686

Option 1 ID : 264330535459

Option 2 ID : 264330535461

Option 3 ID : 264330535462

Option 4 ID : 264330535460

Status : Answered

Chosen Option : 2

Q.7 Select the word segment that substitutes (replaces) the bracketed word segment correctly and completes the sentence meaningfully. Select the option 'no correction required' if the sentence is correct as given.
(Their heads were) dragonish, and their pupil-less eyes white and staring.

- Ans**
- ☒ 1. Their head were
 - ☒ 2. Their heads was
 - ☒ 3. No correction required
 - ☒ 4. There heads were

Question Type : **MCQ**
Question ID : **264330136696**
Option 1 ID : **264330535501**
Option 2 ID : **264330535500**
Option 3 ID : **264330535502**
Option 4 ID : **264330535499**
Status : **Answered**
Chosen Option : **3**

Q.8 Select the most appropriate option to fill in the blank.
Sitting at the computer I saw something large and dark fall past my _____ vision followed by a dull thwack.

- Ans**
- ☒ 1. central
 - ☒ 2. external
 - ☒ 3. peripheral
 - ☒ 4. incidental

Question Type : **MCQ**
Question ID : **264330135800**
Option 1 ID : **264330532078**
Option 2 ID : **264330532077**
Option 3 ID : **264330532076**
Option 4 ID : **264330532075**
Status : **Answered**
Chosen Option : **3**

Q.9 Select the most appropriate word for the given group of words.

The sound of owls

- Ans**
- ☒ 1. Honk
 - ☒ 2. Neigh
 - ☒ 3. Croak
 - ☒ 4. Hoot

Question Type : **MCQ**
Question ID : **264330136305**
Option 1 ID : **264330533996**
Option 2 ID : **264330533997**
Option 3 ID : **264330533995**
Option 4 ID : **264330533998**
Status : **Answered**
Chosen Option : **3**

Q.10 Select the most appropriate antonym to substitute the bracketed word in the given sentence.

For years he pursued a (vendetta) against the Morris family.

- Ans**
- ☒ 1. conflict
 - ☒ 2. traduce
 - ☒ 3. tirade
 - ☒ 4. harmony

Question Type : **MCQ**
 Question ID : **264330136684**
 Option 1 ID : **264330535452**
 Option 2 ID : **264330535454**
 Option 3 ID : **264330535453**
 Option 4 ID : **264330535451**
 Status : **Answered**
 Chosen Option : **4**

Q.11 Identify the segment that contains a grammatical error. If there is no error, select 'No error'.

Even if a evidence was / relevant to the case, it couldn't / be used to determine the reprobate.

- Ans**
- ☒ 1. relevant to the case, it couldn't
 - ☒ 2. Even if a evidence was,
 - ☒ 3. No error
 - ☒ 4. be used to determine the reprobate.

Question Type : **MCQ**
 Question ID : **264330136667**
 Option 1 ID : **264330535388**
 Option 2 ID : **264330535387**
 Option 3 ID : **264330535390**
 Option 4 ID : **264330535389**
 Status : **Answered**
 Chosen Option : **2**

Q.12 Select the most appropriate option to fill in the blank.

In my view, this falls within the exception permitting warrantless seizure in _____ circumstances.

- Ans**
- ☒ 1. reverent
 - ☒ 2. sparse
 - ☒ 3. recondite
 - ☒ 4. exigent

Question Type : **MCQ**
 Question ID : **264330136690**
 Option 1 ID : **264330535477**
 Option 2 ID : **264330535478**
 Option 3 ID : **264330535475**
 Option 4 ID : **264330535476**
 Status : **Answered**
 Chosen Option : **4**

Q.13 Select the most appropriate synonym to substitute the bracketed word in the given sentence.
If you think atheists are all miserable, (nihilistic) amorlists, this book should put you straight.

- Ans** ☒ 1. canonical
☒ 2. cynical
☒ 3. conical
☒ 4. tyrannical

Question Type : **MCQ**
Question ID : **264330135810**
Option 1 ID : **264330532112**
Option 2 ID : **264330532114**
Option 3 ID : **264330532111**
Option 4 ID : **264330532113**
Status : **Answered**
Chosen Option : **2**

Q.14 Find the part of the given sentence that has an error in it. If there is no error, choose 'No error'.
She never did apologized for her misconduct with the boss.

- Ans** ☒ 1. for her misconduct
☒ 2. No error
☒ 3. with the boss.
☒ 4. She never did apologized

Question Type : **MCQ**
Question ID : **264330134295**
Option 1 ID : **264330526176**
Option 2 ID : **264330526178**
Option 3 ID : **264330526177**
Option 4 ID : **264330526175**
Status : **Answered**
Chosen Option : **4**

Q.15 Select the correctly spelt word.

- Ans** ☒ 1. Inteansity
☒ 2. Intensity
☒ 3. Intencity
☒ 4. Intansity

Question Type : **MCQ**
Question ID : **264330136687**
Option 1 ID : **264330535465**
Option 2 ID : **264330535463**
Option 3 ID : **264330535464**
Option 4 ID : **264330535466**
Status : **Answered**
Chosen Option : **2**

Q.16 Improve the underlined part of the sentence. Choose 'No improvement' as an answer if the sentence is grammatically correct.

Fishermen make their lives from the sea.

- Ans**
- ☒ 1. there livings
 - ☒ 2. his living
 - ☒ 3. their live
 - ☒ 4. No improvement

Question Type : MCQ
Question ID : 264330136798
Option 1 ID : 264330535892
Option 2 ID : 264330535891
Option 3 ID : 264330535893
Option 4 ID : 264330535894
Status : Answered
Chosen Option : 4

Q.17 Select the most appropriate word for the given group of words.

Rights to vote in an election

- Ans**
- ☒ 1. Potable
 - ☒ 2. Propaganda
 - ☒ 3. Suffrage
 - ☒ 4. Orchard

Question Type : MCQ
Question ID : 264330136680
Option 1 ID : 264330535437
Option 2 ID : 264330535435
Option 3 ID : 264330535436
Option 4 ID : 264330535438
Status : Answered
Chosen Option : 3

Q.18 Select the most appropriate synonym of the given word.

Virtuoso

- Ans**
- ☒ 1. Waive
 - ☒ 2. Voluble
 - ☒ 3. Maestro
 - ☒ 4. Novice

Question Type : MCQ
Question ID : 264330136681
Option 1 ID : 264330535439
Option 2 ID : 264330535440
Option 3 ID : 264330535441
Option 4 ID : 264330535442
Status : Answered
Chosen Option : 3

Q.19 Select the most appropriate meaning of the given idiom.

Far and wide

- Ans
- ☒ 1. Equal opportunity to all
 - ☒ 2. Present everywhere
 - ☒ 3. Divided into two equal parts
 - ☒ 4. Not frequent, unusual, rare

Question Type : MCQ
Question ID : 264330136311
Option 1 ID : 264330534019
Option 2 ID : 264330534022
Option 3 ID : 264330534021
Option 4 ID : 264330534020
Status : Answered
Chosen Option : 1

Q.20 Find the part of the given sentence that has an error in it. If there is no error, choose 'No error'.

Some realistic estimate will be knew after advance tax collection figures are out.

- Ans
- ☒ 1. No error
 - ☒ 2. tax collection figures are out.
 - ☒ 3. be knew after advance
 - ☒ 4. Some realistic estimate will

Question Type : MCQ
Question ID : 264330136795
Option 1 ID : 264330535882
Option 2 ID : 264330535881
Option 3 ID : 264330535880
Option 4 ID : 264330535879
Status : Answered
Chosen Option : 3

Comprehension:

In the following passage some of the words have been deleted. Read the passage carefully and select the correct answer for the given blank out of the four alternatives.

As an industrial solvent, pyridine is used in a (1) _____ range of manufacturing processes. It is also a by-product of coking coal, a crucial (2) _____ for steel production. The Tees area was home to both steel and chemical (3) _____ and the discharge of contaminated effluent (4) _____ the river and surrounding wetlands has been (5) _____ practice, often with minimal or no treatment.

SubQuestion No : 21

Q.21 Select the most appropriate option to fill in blank number 1.

- Ans
- ☒ 1. wide
 - ☒ 2. wider
 - ☒ 3. widest
 - ☒ 4. widely

Question Type : MCQ
Question ID : 264330134329
Option 1 ID : 264330526305
Option 2 ID : 264330526306
Option 3 ID : 264330526303
Option 4 ID : 264330526304
Status : Answered
Chosen Option : 1

Comprehension:

In the following passage some of the words have been deleted. Read the passage carefully and select the correct answer for the given blank out of the four alternatives.

As an industrial solvent, pyridine is used in a (1) _____ range of manufacturing processes. It is also a by-product of coking coal, a crucial (2) _____ for steel production. The Tees area was home to both steel and chemical (3) _____ and the discharge of contaminated effluent (4) _____ the river and surrounding wetlands has been (5) _____ practice, often with minimal or no treatment.

SubQuestion No : 22

Q.22 Select the most appropriate option to fill in blank number 2.

- Ans
- ☒ 1. code
 - ☒ 2. desire
 - ☒ 3. load
 - ☒ 4. input

Question Type : MCQ

Question ID : 264330134330

Option 1 ID : 264330526307

Option 2 ID : 264330526308

Option 3 ID : 264330526310

Option 4 ID : 264330526309

Status : Answered

Chosen Option : 4

Comprehension:

In the following passage some of the words have been deleted. Read the passage carefully and select the correct answer for the given blank out of the four alternatives.

As an industrial solvent, pyridine is used in a (1) _____ range of manufacturing processes. It is also a by-product of coking coal, a crucial (2) _____ for steel production. The Tees area was home to both steel and chemical (3) _____ and the discharge of contaminated effluent (4) _____ the river and surrounding wetlands has been (5) _____ practice, often with minimal or no treatment.

SubQuestion No : 23

Q.23 Select the most appropriate option to fill in blank number 3.

- Ans
- ☒ 1. fabrication
 - ☒ 2. industries
 - ☒ 3. monopoly
 - ☒ 4. salutation

Question Type : MCQ

Question ID : 264330134331

Option 1 ID : 264330526313

Option 2 ID : 264330526312

Option 3 ID : 264330526311

Option 4 ID : 264330526314

Status : Answered

Chosen Option : 2

Comprehension:

In the following passage some of the words have been deleted. Read the passage carefully and select the correct answer for the given blank out of the four alternatives.

As an industrial solvent, pyridine is used in a (1) _____ range of manufacturing processes. It is also a by-product of coking coal, a crucial (2) _____ for steel production. The Tees area was home to both steel and chemical (3) _____ and the discharge of contaminated effluent (4) _____ the river and surrounding wetlands has been (5) _____ practice, often with minimal or no treatment.

SubQuestion No : 24

Q.24 Select the most appropriate option to fill in blank number 4.

Ans ☒ 1. into

☐ 2. on

☐ 3. to

☐ 4. in

Question Type : MCQ

Question ID : 264330134332

Option 1 ID : 264330526318

Option 2 ID : 264330526317

Option 3 ID : 264330526315

Option 4 ID : 264330526316

Status : Answered

Chosen Option : 1

Comprehension:

In the following passage some of the words have been deleted. Read the passage carefully and select the correct answer for the given blank out of the four alternatives.

As an industrial solvent, pyridine is used in a (1) _____ range of manufacturing processes. It is also a by-product of coking coal, a crucial (2) _____ for steel production. The Tees area was home to both steel and chemical (3) _____ and the discharge of contaminated effluent (4) _____ the river and surrounding wetlands has been (5) _____ practice, often with minimal or no treatment.

SubQuestion No : 25

Q.25 Select the most appropriate option to fill in blank number 5.

Ans ☐ 1. maniac

☒ 2. common

☐ 3. bogus

☐ 4. ruckus

Question Type : MCQ

Question ID : 264330134333

Option 1 ID : 264330526319

Option 2 ID : 264330526322

Option 3 ID : 264330526321

Option 4 ID : 264330526320

Status : Answered

Chosen Option : 2