

Multi Tasking Non Technical Staff and Havalдар CBIC and CBN
Examination 2023

Roll Number	
Candidate Name	
Venue Name	iON Digital Zone IDZ Powai
Exam Date	08/09/2023
Exam Time	9:00 AM - 11:00 AM
Subject	MTS Non Tech Havalдар CBIC and CBN Examination 2023 Extra Time

Section : Numerical and Mathematical Ability

Q.1 There are 48 students in a class. Their average weight is 48 kg. When one student leaves the class, the average weight reduces by 200 grams. What is the weight of the student who left the class?

- Ans
- ✓ 1. 57.4 kg
 - ✗ 2. 54.7 kg
 - ✗ 3. 45.7 kg
 - ✗ 4. 47.5 kg

Question ID : 264330156547
Option 1 ID : 264330613578
Option 2 ID : 264330613576
Option 3 ID : 264330613575
Option 4 ID : 264330613577
Status : Answered
Chosen Option : 2

Test Prime

**ALL EXAMS,
ONE SUBSCRIPTION**



70,000+
Mock Tests



**Personalised
Report Card**



**Unlimited
Re-Attempt**



600+
Exam Covered



**Previous Year
Papers**



500%
Refund



ATTEMPT FREE MOCK NOW

Q.2 Following marks are obtained by a student in five subjects.

Subjects	Marks (out of 50)
CS	49
History	41
English	49
Science	44
Social Science	47

What is the percentage of marks scored by the student?

- Ans
- ☐ 1. 92.5%
 - ☐ 2. 45%
 - ☐ 3. 93%
 - ☒ 4. 92%

Question ID : 264330156537
Option 1 ID : 264330613536
Option 2 ID : 264330613538
Option 3 ID : 264330613537
Option 4 ID : 264330613535

Status : Answered

Chosen Option : 1

Q.3 Simplify:

$$3\frac{2}{7} + 3\frac{2}{11} \times 3\frac{1}{7} \div 4\frac{1}{3}$$

- Ans
- ☐ 1. $7\frac{54}{91}$
 - ☐ 2. $9\frac{54}{91}$
 - ☒ 3. $5\frac{54}{91}$
 - ☐ 4. $3\frac{54}{91}$

Question ID : 264330155721
Option 1 ID : 264330610289
Option 2 ID : 264330610290
Option 3 ID : 264330610288
Option 4 ID : 264330610287

Status : Answered

Chosen Option : 2

Q.4 A deposited ₹62,500 at the rate of 8% per annum compounded half yearly, then what is the compound interest at the end of two years?

- Ans**
- ☒ 1. ₹18,161.12
 - ☒ 2. ₹12,171.72
 - ☒ 3. ₹10,821.18
 - ☒ 4. ₹10,616.16

Question ID : 264330154090

Option 1 ID : 264330603825

Option 2 ID : 264330603826

Option 3 ID : 264330603823

Option 4 ID : 264330603824

Status : Answered

Chosen Option : 1

Q.5 A man and woman working on alternate days can finish a work in 15 days if the man works on the first day. The same work is finished in 14.5 days if they work on alternate days and if the woman starts on the first day. The work will be finished by a man alone in ____ days.

- Ans**
- ☒ 1. 25
 - ☒ 2. 21
 - ☒ 3. 15
 - ☒ 4. 22

Question ID : 264330153816

Option 1 ID : 264330602730

Option 2 ID : 264330602728

Option 3 ID : 264330602727

Option 4 ID : 264330602729

Status : Answered

Chosen Option : 2

Q.6 If the cost price of 12 mangoes is equal to the selling price of 16 mangoes, then the loss percentage is:

- Ans**
- ☒ 1. 25%
 - ☒ 2. 4%
 - ☒ 3. 20%
 - ☒ 4. 33%

Question ID : 264330153871

Option 1 ID : 264330602948

Option 2 ID : 264330602947

Option 3 ID : 264330602949

Option 4 ID : 264330602950

Status : Answered

Chosen Option : 4

Q.7 A boat covers a distance of 65 km downstream in 5 hours while it takes 13 hours to cover the same distance upstream. What is the speed of the boat in still water?

- Ans**
- ☐ 1. 8 km/h
 - ☐ 2. 11 km/h
 - ☐ 3. 6 km/h
 - ☒ 4. 9 km/h

Question ID : 264330154093

Option 1 ID : 264330603838

Option 2 ID : 264330603836

Option 3 ID : 264330603835

Option 4 ID : 264330603837

Status : Answered

Chosen Option : 3

Q.8 There are two varieties of rice. Variety 1 costs ₹100 per kg and variety 2 costs ₹120 per kg. The vendor mixed both the varieties and sold for ₹121 per kg and gained 10%. Find the ratio of variety 1 to variety 2 rice in the mixture.

- Ans**
- ☒ 1. 1 : 1
 - ☐ 2. 3 : 1
 - ☐ 3. 2 : 1
 - ☐ 4. 1 : 3

Question ID : 264330153837

Option 1 ID : 264330602812

Option 2 ID : 264330602814

Option 3 ID : 264330602813

Option 4 ID : 264330602811

Status : Answered

Chosen Option : 4

Q.9 The average weight of A, B and C is 43 kg. If the average weight of A and B is 40 kg and that of B and C is 41 kg, then the weight (in kg) of B is?

- Ans**
- ☐ 1. 41
 - ☐ 2. 43
 - ☒ 3. 33
 - ☐ 4. 37

Question ID : 264330156509

Option 1 ID : 264330613425

Option 2 ID : 264330613426

Option 3 ID : 264330613423

Option 4 ID : 264330613424

Status : Answered

Chosen Option : 1

Q.10 Vinita obtained an amount of ₹23,340 as simple interest on a certain amount at 15% per annum after 8 years. What was the amount invested by Vinita?

- Ans**
- ☒ 1. ₹20,450
 - ☒ 2. ₹18,650
 - ☒ 3. ₹17,490
 - ☒ 4. ₹19,450

Question ID : 264330156187

Option 1 ID : 264330612150

Option 2 ID : 264330612148

Option 3 ID : 264330612147

Option 4 ID : 264330612149

Status : Answered

Chosen Option : 4

Q.11 The largest three-digit number which gives the same remainder 2 when divided by 3, 5 and 9 is _____.

- Ans**
- ☒ 1. 980
 - ☒ 2. 992
 - ☒ 3. 995
 - ☒ 4. 990

Question ID : 264330156249

Option 1 ID : 264330612398

Option 2 ID : 264330612395

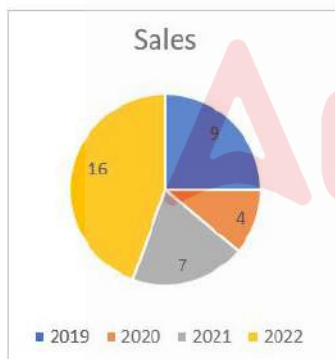
Option 3 ID : 264330612397

Option 4 ID : 264330612396

Status : Answered

Chosen Option : 2

Q.12 Consider the sales of a company in the year 2019, 2020, 2021 and 2022 given in the pie chart.



The difference in angles at the centre by sales in 2022 and 2019 is _____ degrees.

- Ans**
- ☒ 1. 50
 - ☒ 2. 80
 - ☒ 3. 60
 - ☒ 4. 70

Question ID : 264330153822

Option 1 ID : 264330602751

Option 2 ID : 264330602754

Option 3 ID : 264330602752

Option 4 ID : 264330602753

Status : Answered

Chosen Option : 2

Q.13 A can complete a piece of work in 20 days. B can complete the same work in 36 days. If A and B work together, then the number of days required to complete the work is:

Ans

☒ 1. $10\frac{6}{7}$

☒ 2. $12\frac{6}{7}$

☒ 3. $12\frac{1}{7}$

☒ 4. $10\frac{1}{7}$

Question ID : 264330156492

Option 1 ID : 264330613355

Option 2 ID : 264330613358

Option 3 ID : 264330613356

Option 4 ID : 264330613357

Status : Answered

Chosen Option : 3

Q.14 What is the fourth proportional to 816, 226, 408?

Ans

☒ 1. 108

☒ 2. 103

☒ 3. 113

☒ 4. 117

Question ID : 264330154086

Option 1 ID : 264330603807

Option 2 ID : 264330603809

Option 3 ID : 264330603810

Option 4 ID : 264330603808

Status : Answered

Chosen Option : 1

Q.15 If the price of a product is decreased by 50%, then increased by 50% and then again increased by 50%, what is the net increase percentage in the price?

Ans

☒ 1. 13.5%

☒ 2. 11.5%

☒ 3. 12.5%

☒ 4. 9.5%

Question ID : 264330156516

Option 1 ID : 264330613453

Option 2 ID : 264330613451

Option 3 ID : 264330613454

Option 4 ID : 264330613452

Status : Answered

Chosen Option : 3

Q.16 The marks scored by a student are directly proportional to the time invested in studies. If the student gets 60 marks when he studies 4 hours a day, then how many hours he should use in his studies daily to get 75 marks?

- Ans
- ☒ 1. 4.5
 - ☒ 2. 5
 - ☒ 3. 5.5
 - ☒ 4. 6

Question ID : 264330153810

Option 1 ID : 264330602703

Option 2 ID : 264330602705

Option 3 ID : 264330602704

Option 4 ID : 264330602706

Status : Answered

Chosen Option : 2

Q.17 The distance covered (in km) by a bus in 55 minutes at a speed of 69 km/h is:

- Ans
- ☒ 1. 67.75
 - ☒ 2. 63.25
 - ☒ 3. 65.25
 - ☒ 4. 60.75

Question ID : 264330156488

Option 1 ID : 264330613341

Option 2 ID : 264330613342

Option 3 ID : 264330613339

Option 4 ID : 264330613340

Status : Answered

Chosen Option : 1

Q.18 The cost price of an item is ₹4,850. What is the profit percentage (rounded off to 1 decimal place) if it is sold at ₹6,680?

- Ans
- ☒ 1. 44.6%
 - ☒ 2. 37.7%
 - ☒ 3. 39.5%
 - ☒ 4. 35.5%

Question ID : 264330163010

Option 1 ID : 264330639356

Option 2 ID : 264330639358

Option 3 ID : 264330639357

Option 4 ID : 264330639355

Status : Answered

Chosen Option : 2

Q.19 The radius of a cone is 10.5 cm and the area of the curved surface is 396 cm^2 . Find it's slant height.

Take $\pi = \frac{22}{7}$

- Ans**
- ☒ 1. 9 cm
 - ☒ 2. 11.5 cm
 - ☒ 3. 12 cm
 - ☒ 4. 8.5 cm

Question ID : 264330156371

Option 1 ID : 264330612884

Option 2 ID : 264330612885

Option 3 ID : 264330612886

Option 4 ID : 264330612883

Status : Answered

Chosen Option : 2

Q.20 Find the volume of a cuboid whose dimensions are 12.2 cm, 16 cm and 8.5 cm.

- Ans**
- ☒ 1. 3072 cm^3
 - ☒ 2. 1659.2 cm^3
 - ☒ 3. 832 cm^3
 - ☒ 4. 1664 cm^3

Question ID : 264330156087

Option 1 ID : 264330611749

Option 2 ID : 264330611748

Option 3 ID : 264330611747

Option 4 ID : 264330611750

Status : Answered

Chosen Option : 4

Section : Reasoning Ability and Problem Solving

Q.1 What should come in place of ? in the given series based on the English alphabetical order?

ICU, FAT, CYS, ZWR, ?

- Ans**
- ☒ 1. VTR
 - ☒ 2. VST
 - ☒ 3. WVS
 - ☒ 4. WUQ

Question ID : 264330155778

Option 1 ID : 264330610517

Option 2 ID : 264330610516

Option 3 ID : 264330610515

Option 4 ID : 264330610518

Status : Answered

Chosen Option : 4

Q.2 In a certain code language, 'YOU' is coded as '20' and 'LIP' is coded as '44'. What is the code for 'ROB' in the given code language?

- Ans**
- ☒ 1. 44
 - ☒ 2. 46
 - ☒ 3. 41
 - ☒ 4. 42

Question ID : 264330155820

Option 1 ID : 264330610683

Option 2 ID : 264330610684

Option 3 ID : 264330610686

Option 4 ID : 264330610685

Status : Answered

Chosen Option : 2

Q.3 In the following number-pairs, the second number is obtained by applying certain mathematical operations to the first number. Select the set in which the numbers are related in the same way as are the numbers of the following sets.
(NOTE: Operations should be performed on the whole numbers, without breaking down the numbers into its constituent digits. E.g. 13 – Operations on 13 such as adding / subtracting / multiplying etc. to 13 can be performed. Breaking down 13 into 1 and 3 and then performing mathematical operations on 1 and 3 is not allowed)

7, 13
18, 35

- Ans**
- ☒ 1. 77, 98
 - ☒ 2. 22, 43
 - ☒ 3. 32, 64
 - ☒ 4. 44, 76

Question ID : 264330151624

Option 1 ID : 264330594126

Option 2 ID : 264330594123

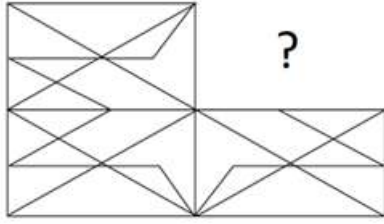
Option 3 ID : 264330594124

Option 4 ID : 264330594125

Status : Answered

Chosen Option : 2

Q.4 Identify the figure that completes the pattern (rotation is NOT allowed).



Ans

✓ 1.



✗ 2.



✗ 3.



✗ 4.



Question ID : 264330154519

Option 1 ID : 264330605541

Option 2 ID : 264330605540

Option 3 ID : 264330605539

Option 4 ID : 264330605542

Status : Answered

Chosen Option : 1

Q.5 What should come in place of ? in the given series based on the English alphabetical order?

TEO, RCM, PAK, NYL, ?

Ans

✗ 1. KVH

✗ 2. KUH

✗ 3. LVG

✓ 4. LWG

Question ID : 264330155769

Option 1 ID : 264330610481

Option 2 ID : 264330610480

Option 3 ID : 264330610479

Option 4 ID : 264330610482

Status : Answered

Chosen Option : 4

Q.6 Which figure should replace the question mark (?) if the following figure series were to be continued?

K	R	4	2	
R	S	A	Q	4
Q	4	K	A	R

Ans

✗ 1.

A		
G	R	S
2		4

✗ 2.

4		
G	2	A
S		K

✓ 3.

S		
G	4	A
2		K

✗ 4.

4		
G	A	S
2		K

Question ID : 264330154759

Option 1 ID : 264330606500

Option 2 ID : 264330606501

Option 3 ID : 264330606499

Option 4 ID : 264330606502

Status : Answered

Chosen Option : 4

Q.7 If G means '×'; C means '÷'; D means '+'; B means '-', then what will come in place of the question mark (?) in the following equation?

$$13 \text{ C } 8 \text{ G } 45 \text{ B } 22 \text{ D } 2 = ?$$

Ans ✗ 1. 78

✗ 2. 62

✓ 3. 70

✗ 4. 55

Question ID : 264330154682

Option 1 ID : 264330606194

Option 2 ID : 264330606192

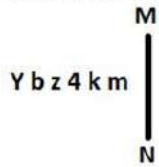
Option 3 ID : 264330606193

Option 4 ID : 264330606191

Status : Answered

Chosen Option : 3

Q.8 Select the correct mirror image of the given figure when the mirror is placed at MN as shown below.



- Ans
- ☒ 1. m k 4 z q l
 - ☒ 2. m k 4 z b Y
 - ☒ 3. w x 4 z d Y
 - ☒ 4. m x 4 z d Y

Question ID : 264330151513

Option 1 ID : 264330593682

Option 2 ID : 264330593681

Option 3 ID : 264330593679

Option 4 ID : 264330593680

Status : Answered

Chosen Option : 4

Q.9 Select the word-pair that best represents a similar relationship to the one expressed in the pair of words given below.

(The words must be considered as meaningful English words and must not be related to each other based on the number of letters/number of consonants/vowels in the word)

Cricket : Pitch

- Ans
- ☒ 1. Wrestling : Track
 - ☒ 2. Ship : Dock
 - ☒ 3. Boxing : Ring
 - ☒ 4. Boat : Harbour

Question ID : 264330154633

Option 1 ID : 264330605998

Option 2 ID : 264330605995

Option 3 ID : 264330605997

Option 4 ID : 264330605996

Status : Answered

Chosen Option : 3

Q.10 The position of how many letters will remain unchanged if each of the letter in the word 'POCKET' is arranged in alphabetical order?

- Ans
- ☒ 1. Two
 - ☒ 2. Five
 - ☒ 3. Three
 - ☒ 4. One

Question ID : 264330154322

Option 1 ID : 264330604752

Option 2 ID : 264330604754

Option 3 ID : 264330604753

Option 4 ID : 264330604751

Status : Answered

Chosen Option : 2

Q.11 What should come in place of ? in the given series?

73 75 77 79 81 ?

- Ans
- ☐ 1. 82
 - ☒ 2. 83
 - ☐ 3. 85
 - ☐ 4. 84

Question ID : 264330151540

Option 1 ID : 264330593787

Option 2 ID : 264330593788

Option 3 ID : 264330593790

Option 4 ID : 264330593789

Status : Answered

Chosen Option : 2

Q.12 Seven people, U, M, K, G, B, R and D are sitting in a straight line, facing south. Only two people sit to the left of B. M sits third to the right of G. U is the immediate neighbour of M and B. D sits to the immediate left of K.

Total how many people sit between D and G?

- Ans
- ☐ 1. Two
 - ☒ 2. Three
 - ☐ 3. One
 - ☐ 4. Four

Question ID : 264330161695

Option 1 ID : 264330634108

Option 2 ID : 264330634109

Option 3 ID : 264330634107

Option 4 ID : 264330634110

Status : Answered

Chosen Option : 2

Q.13 What should come in place of ? in the given series based on the English alphabetical order?

GUN, DWM, AYL, XAK, ?

- Ans
- ☐ 1. VCI
 - ☐ 2. VBH
 - ☒ 3. UCJ
 - ☐ 4. UBI

Question ID : 264330155805

Option 1 ID : 264330610625

Option 2 ID : 264330610623

Option 3 ID : 264330610624

Option 4 ID : 264330610626

Status : Answered

Chosen Option : 3

Q.14 In a certain code language, 'ATOM' is coded as '9613' and 'BOAT' is coded as '1938'. What is the code for 'B' in the given code language?

- Ans
- ☒ 1. 9
 - ☒ 2. 8
 - ☒ 3. 3
 - ☒ 4. 1

Question ID : 264330151705

Option 1 ID : 264330594449

Option 2 ID : 264330594448

Option 3 ID : 264330594447

Option 4 ID : 264330594450

Status : Answered

Chosen Option : 2

Q.15 Read the given statements and conclusions carefully. You have to take the given statements to be true even if they seem to be at variance from commonly known facts. You have to decide which conclusion/s logically follow/s from the given statements.

Statements: All people are tall. Some tall are buildings. No buildings are clocks.

Conclusion I: Some people are buildings.

Conclusion II: No clocks are buildings.

- Ans
- ☒ 1. Only conclusion (II) is follow.
 - ☒ 2. Neither conclusion (I) nor (II) is follow.
 - ☒ 3. Both conclusions (I) and (II) are follow.
 - ☒ 4. Only conclusion (I) is follow.

Question ID : 264330155920

Option 1 ID : 264330611084

Option 2 ID : 264330611085

Option 3 ID : 264330611086

Option 4 ID : 264330611083

Status : Answered

Chosen Option : 1

Q.16 If 'I' stands for '+', 'J' stands for '×', 'K' stands for '÷' and 'L' stands for '-', what will come in place of the question mark (?) in the following equation?
119 I (7 J 3) L (50 K 5) L 45 = ?

- Ans
- ☒ 1. 85
 - ☒ 2. 80
 - ☒ 3. 75
 - ☒ 4. 70

Question ID : 264330151804

Option 1 ID : 264330594844

Option 2 ID : 264330594843

Option 3 ID : 264330594846

Option 4 ID : 264330594845

Status : Answered

Chosen Option : 3

Q.17 In the following number-pairs, the second number is obtained by applying certain mathematical operations to the first number. Select the set in which the numbers are related in the same way as are the numbers of the following sets.
53, 90

79, 116

(NOTE: Operations should be performed on the whole numbers, without breaking down the numbers into its constituent digits. E.g. 13 – Operations on 13 such as adding / subtracting / multiplying etc. to 13 can be performed. Breaking down 13 into 1 and 3 and then performing mathematical operations on 1 and 3 is not allowed)

Ans ✓ 1. 47, 84

✗ 2. 31, 94

✗ 3. 59, 98

✗ 4. 42, 59

Question ID : 264330154501

Option 1 ID : 264330605470

Option 2 ID : 264330605467

Option 3 ID : 264330605469

Option 4 ID : 264330605468

Status : Answered

Chosen Option : 1

Q.18 What should come in place of '?' in the given series?

11 32 74 158 326 ?

Ans ✓ 1. 662

✗ 2. 674

✗ 3. 625

✗ 4. 648

Question ID : 264330151474

Option 1 ID : 264330593525

Option 2 ID : 264330593526

Option 3 ID : 264330593523

Option 4 ID : 264330593524

Status : Answered

Chosen Option : 1

Q.19 Read the given statements and conclusions carefully. You have to take the given statements to be true even if they seem to be at variance from commonly known facts. You have to decide which conclusion/s logically follow/s from the given statements.

Statements: Some combs are wood. Some wood are tables. Some tables are plastic.

Conclusion I: Some wood are combs.

Conclusion II: All plastic are tables.

Ans ✗ 1. Only conclusion (II) is follow.

✗ 2. Both conclusions (I) and (II) are follow.

✓ 3. Only conclusion (I) is follow.

✗ 4. Neither conclusion (I) nor (II) is follow.

Question ID : 264330155901

Option 1 ID : 264330611008

Option 2 ID : 264330611010

Option 3 ID : 264330611007

Option 4 ID : 264330611009

Status : Answered

Chosen Option : 3

Q.20 What should come in place of ? in the given series?

23 28 38 53 73 ?

- Ans
- ☒ 1. 95
 - ☒ 2. 91
 - ☒ 3. 101
 - ☒ 4. 98

Question ID : 264330151713

Option 1 ID : 264330594480

Option 2 ID : 264330594482

Option 3 ID : 264330594479

Option 4 ID : 264330594481

Status : Answered

Chosen Option : 4

Section : General Awareness

Q.1 Which Indian Mass Movement began with the famous 'Dandi March' of Mahatma Gandhi?

- Ans
- ☒ 1. Civil Disobedience Movement
 - ☒ 2. Non-Cooperation Movement
 - ☒ 3. Quit India Movement
 - ☒ 4. Kheda Movement

Question ID : 264330162326

Option 1 ID : 264330636633

Option 2 ID : 264330636632

Option 3 ID : 264330636631

Option 4 ID : 264330636634

Status : Answered

Chosen Option : 1

Q.2 Whose autobiography is titled 'An Unsuitable Boy'?

- Ans
- ☒ 1. Karan Johar
 - ☒ 2. Aditya Chopra
 - ☒ 3. Hansal Mehta
 - ☒ 4. Sanjay Kapoor

Question ID : 264330155448

Option 1 ID : 264330609197

Option 2 ID : 264330609195

Option 3 ID : 264330609196

Option 4 ID : 264330609198

Status : Not Answered

Chosen Option : --

Q.3 The length of the men's kabaddi court is ____ metres.

- Ans ☒ 1. 10
☒ 2. 13
☒ 3. 17
☒ 4. 15

Question ID : 264330158245
 Option 1 ID : 264330620339
 Option 2 ID : 264330620340
 Option 3 ID : 264330620342
 Option 4 ID : 264330620341
 Status : Not Answered
 Chosen Option : --

Q.4 Who among the following is the author of the book 'The Zoya factor'?

- Ans ☒ 1. Kiran Desai
☒ 2. Sudha Murty
☒ 3. Anuja Chauhan
☒ 4. Nandini Bajpai

Question ID : 264330155458
 Option 1 ID : 264330609235
 Option 2 ID : 264330609236
 Option 3 ID : 264330609238
 Option 4 ID : 264330609237
 Status : Answered
 Chosen Option : 2

Q.5 Who among the following has NOT received the Sangeet Natak Akademi Award-2021 (given in February 2023) for his/her contribution in dance ?

- Ans ☒ 1. Neena Prasad
☒ 2. Sumitra Guha
☒ 3. Jayalakshmi Eshwar
☒ 4. Thokchom Ibemubi Devi

Question ID : 264330157837
 Option 1 ID : 264330618708
 Option 2 ID : 264330618710
 Option 3 ID : 264330618707
 Option 4 ID : 264330618709
 Status : Not Answered
 Chosen Option : --

Q.6 Which of the following is NOT a Directive Principle based on the ideals of Mahatma Gandhi?

- Ans** ☒ 1. To promote industrialisation in urban areas
☒ 2. To organise village Panchayats
☒ 3. To prohibit intoxicating drinks and drugs that are injurious to health
☒ 4. To promote cottage industries in rural areas

Question ID : 264330162251
Option 1 ID : 264330636334
Option 2 ID : 264330636331
Option 3 ID : 264330636333
Option 4 ID : 264330636332
Status : Answered
Chosen Option : 3

Q.7 Which of the following methods is used to calculate national income by summing up the total incomes earned by individuals and businesses in an economy?

- Ans** ☒ 1. Value-added method
☒ 2. Output method
☒ 3. Income method
☒ 4. Expenditure method

Question ID : 264330157315
Option 1 ID : 264330616626
Option 2 ID : 264330616625
Option 3 ID : 264330616623
Option 4 ID : 264330616624
Status : Answered
Chosen Option : 2

Q.8 What is personal income?

- Ans** ☒ 1. The income earned by individuals and households after taxes and other deductions
☒ 2. The total income earned by businesses and corporations in an economy
☒ 3. The income earned by individuals through their own business or self-employment
☒ 4. The total income earned by individuals and households before taxes and other deductions

Question ID : 264330157318
Option 1 ID : 264330616637
Option 2 ID : 264330616635
Option 3 ID : 264330616638
Option 4 ID : 264330616636
Status : Answered
Chosen Option : 1

Q.9 Who founded the Hindu reform organisation Brahmo Samaj?

- Ans** ☒ 1. Ramkrishna Paramhans
☒ 2. Rabindranath Tagore
☒ 3. Atmaram Pandurang
☒ 4. Raja Ram Mohan Roy

Question ID : 264330161745
Option 1 ID : 264330634307
Option 2 ID : 264330634309
Option 3 ID : 264330634310
Option 4 ID : 264330634308
Status : Answered
Chosen Option : 4

Q.10 Whom among the following Indian singers is known as 'Gazal King'?

- Ans ☒ 1. Manna Dey
☒ 2. Mukesh
☒ 3. Shailendra
☒ 4. Jagjit Singh

Question ID : 264330162232
 Option 1 ID : 264330636256
 Option 2 ID : 264330636255
 Option 3 ID : 264330636257
 Option 4 ID : 264330636258
 Status : Answered
 Chosen Option : 3

Q.11 Dree Utsav is celebrated in the state of _____.

- Ans ☒ 1. Arunachal Pradesh
☒ 2. Kerala
☒ 3. Assam
☒ 4. Andhra Pradesh

Question ID : 264330159082
 Option 1 ID : 264330623689
 Option 2 ID : 264330623690
 Option 3 ID : 264330623688
 Option 4 ID : 264330623687
 Status : Answered
 Chosen Option : 1

Q.12 _____ word of Indian dance is derived from a Sanskrit word and literally means 'taking towards'.

- Ans ☒ 1. Nritta
☒ 2. Laasya
☒ 3. Taandava
☒ 4. Abhinaya

Question ID : 264330159047
 Option 1 ID : 264330623549
 Option 2 ID : 264330623547
 Option 3 ID : 264330623550
 Option 4 ID : 264330623548
 Status : Answered
 Chosen Option : 1

Q.13 Which of the following is an example of the Western Coast Port?

- Ans ☒ 1. Tuticorin Port
☒ 2. Paradip Port
☒ 3. Mumbai Port
☒ 4. Vishakhapatnam Port

Question ID : 264330160139
 Option 1 ID : 264330627897
 Option 2 ID : 264330627896
 Option 3 ID : 264330627898
 Option 4 ID : 264330627895
 Status : Answered
 Chosen Option : 3

Q.14 What are the three tiers of the Government in India?

- Ans ☒ 1. Union government, Judiciary government and Federal government
☒ 2. Union government, State Government and Federal Government
☒ 3. Union government, State government and Judiciary government
☒ 4. Union Government, State Government and Local Government

Question ID : 264330161290
 Option 1 ID : 264330632488
 Option 2 ID : 264330632490
 Option 3 ID : 264330632487
 Option 4 ID : 264330632489
 Status : Answered
 Chosen Option : 4

Q.15 The foundation of Sanchi Stupa was laid by which of the following Kings?

- Ans ☒ 1. Samudragupta
☒ 2. Bimbisara
☒ 3. Ashoka
☒ 4. Chandragupta Maurya

Question ID : 264330160758
 Option 1 ID : 264330630365
 Option 2 ID : 264330630363
 Option 3 ID : 264330630366
 Option 4 ID : 264330630364
 Status : Answered
 Chosen Option : 3

Q.16 During which months do retreating monsoons occur in India?

- Ans ☒ 1. January and February
☒ 2. May and June
☒ 3. October and November
☒ 4. March and April

Question ID : 264330160147
 Option 1 ID : 264330627930
 Option 2 ID : 264330627928
 Option 3 ID : 264330627927
 Option 4 ID : 264330627929
 Status : Answered
 Chosen Option : 3

Q.17 Which is the primary structural component responsible for most of the mechanical strength of the cell wall?

- Ans ☒ 1. Heparin
☒ 2. Glycogen
☒ 3. Chitin
☒ 4. Cellulose

Question ID : 264330161082
 Option 1 ID : 264330631662
 Option 2 ID : 264330631660
 Option 3 ID : 264330631661
 Option 4 ID : 264330631659
 Status : Answered
 Chosen Option : 4

Q.18 Ball and spring model of chemical bonds obey:

- Ans ☒ 1. Hooke's law
☒ 2. Charles' law
☒ 3. gravitational law
☒ 4. Newton's law

Question ID : 264330156586
 Option 1 ID : 264330613734
 Option 2 ID : 264330613732
 Option 3 ID : 264330613731
 Option 4 ID : 264330613733
 Status : Answered
 Chosen Option : 2

Q.19 Pandit Janki Prasad was associated with which of the following Gharanas of Kathak?

- Ans ☒ 1. Banaras
☒ 2. Raigarh
☒ 3. Jaipur
☒ 4. Lucknow

Question ID : 264330160809
 Option 1 ID : 264330630569
 Option 2 ID : 264330630570
 Option 3 ID : 264330630567
 Option 4 ID : 264330630568
 Status : Answered
 Chosen Option : 4

Q.20 In 2023, Ajay Singh, the chief of SpiceJet was appointed as president of which of the following?

- Ans ☒ 1. FICCI
☒ 2. ASSOCHAM
☒ 3. CII
☒ 4. NASSCOM

Question ID : 264330158348
 Option 1 ID : 264330620751
 Option 2 ID : 264330620752
 Option 3 ID : 264330620753
 Option 4 ID : 264330620754
 Status : Answered
 Chosen Option : 1

Q.21 Rohit Sharma became the first ever Indian to play how many T20 cricket matches in October 2022?

- Ans ☒ 1. 300
☒ 2. 100
☒ 3. 200
☒ 4. 400

Question ID : 264330158361
 Option 1 ID : 264330620805
 Option 2 ID : 264330620803
 Option 3 ID : 264330620804
 Option 4 ID : 264330620806
 Status : Answered
 Chosen Option : 1

Q.22 Which form of Indian dance is said to be 'soft and suitable for female presentation'?

- Ans ☒ 1. Nritta
☒ 2. Taandava
☒ 3. Laasya
☒ 4. Nritya

Question ID : 264330161891
 Option 1 ID : 264330634892
 Option 2 ID : 264330634893
 Option 3 ID : 264330634894
 Option 4 ID : 264330634891
 Status : Answered
 Chosen Option : 3

Q.23 Which of the following oceans is surrounded by the continent of North America and South America to the east?

- Ans ☒ 1. Pacific Ocean
☒ 2. Atlantic Ocean
☒ 3. Indian Ocean
☒ 4. Arctic Ocean

Question ID : 264330161323
 Option 1 ID : 264330632620
 Option 2 ID : 264330632622
 Option 3 ID : 264330632619
 Option 4 ID : 264330632621
 Status : Answered
 Chosen Option : 2

Q.24 The famous 'Pashupatinath Temple' is located in which country from the following?

- Ans ☒ 1. Nepal
☒ 2. Bhutan
☒ 3. Maldives
☒ 4. Sri Lanka

Question ID : 264330161561
 Option 1 ID : 264330633574
 Option 2 ID : 264330633571
 Option 3 ID : 264330633573
 Option 4 ID : 264330633572
 Status : Answered
 Chosen Option : 1

Q.25 In which of the following years was the first Janjatiya Khel Mahotsav held?

- Ans ☒ 1. 2023
☒ 2. 2021
☒ 3. 2020
☒ 4. 2022

Question ID : 264330161142
 Option 1 ID : 264330631900
 Option 2 ID : 264330631901
 Option 3 ID : 264330631902
 Option 4 ID : 264330631899
 Status : Answered
 Chosen Option : 1

Q.1 Select the option that can be used as a one-word substitute for the given group of words.

One who does not believe in the existence of God

- Ans ☒ 1. Atheist
☒ 2. Priest
☒ 3. Monk
☒ 4. Believer

Question ID : 264330153404
 Option 1 ID : 264330601152
 Option 2 ID : 264330601153
 Option 3 ID : 264330601151
 Option 4 ID : 264330601154
 Status : Answered
 Chosen Option : 1

Q.2 Select the most appropriate option that can rectify the underlined segment in the given sentence. If there is no need to rectify it, select 'no rectification needed'.

You are the beautiful woman I have ever seen.

- Ans ☒ 1. no rectification needed
☒ 2. more beautiful
☒ 3. beauty
☒ 4. most beautiful

Question ID : 264330153465
 Option 1 ID : 264330601378
 Option 2 ID : 264330601377
 Option 3 ID : 264330601375
 Option 4 ID : 264330601376
 Status : Answered
 Chosen Option : 4

Q.3 Choose the option which best expresses the meaning of the given idiom.

By fair means or foul

- Ans ☒ 1. To work without planning
☒ 2. To find difficulty in completing some work
☒ 3. To get one's way with honesty or dishonesty
☒ 4. To provoke someone into quarrelling

Question ID : 264330153347
 Option 1 ID : 264330600939
 Option 2 ID : 264330600941
 Option 3 ID : 264330600940
 Option 4 ID : 264330600942
 Status : Answered
 Chosen Option : 3

Q.4 The following sentence has been split into four segments. Identify the segment that contains a grammatical error.
My younger daughter, / Kanu prefer / dark chocolate / to yoghurt.

- Ans**
- ☒ 1. dark chocolate
 - ☒ 2. My younger daughter
 - ☒ 3. Kanu prefer
 - ☒ 4. to yoghurt

Question ID : 264330147603
Option 1 ID : 264330578633
Option 2 ID : 264330578631
Option 3 ID : 264330578632
Option 4 ID : 264330578634
Status : Answered
Chosen Option : 2

Q.5 Choose the sentence that contains an error.

- Ans**
- ☒ 1. I saw a movie that was directed by Steven Spielberg.
 - ☒ 2. She is the only person who can solve this difficult math problem.
 - ☒ 3. He is an lawyer who works for a prestigious law firm.
 - ☒ 4. The Great Wall of China is a popular tourist attraction.

Question ID : 264330155179
Option 1 ID : 264330608176
Option 2 ID : 264330608177
Option 3 ID : 264330608178
Option 4 ID : 264330608175
Status : Answered
Chosen Option : 2

Q.6 Parts of the following sentence have been given as options. Select the option that contains an error.
Ishita will playing Tennis for her favourite team.

- Ans**
- ☒ 1. will playing
 - ☒ 2. Tennis for
 - ☒ 3. her favourite team
 - ☒ 4. Ishita

Question ID : 264330152816
Option 1 ID : 264330598856
Option 2 ID : 264330598857
Option 3 ID : 264330598858
Option 4 ID : 264330598855
Status : Answered
Chosen Option : 1

Q.7 Select the most appropriate option that can substitute the underlined segment in the given sentence.

He apologised in her silently before he pushed deeper into her thoughts.

- Ans
- ☒ 1. apologise in her
 - ☒ 2. apologised with her
 - ☒ 3. apologised of her
 - ☒ 4. apologised to her

Question ID : 264330153476

Option 1 ID : 264330601421

Option 2 ID : 264330601420

Option 3 ID : 264330601419

Option 4 ID : 264330601422

Status : Answered

Chosen Option : 4

Q.8 Select the correctly spelt word.

- Ans
- ☒ 1. Bihavior
 - ☒ 2. Behavier
 - ☒ 3. Behaviour
 - ☒ 4. Behaveor

Question ID : 264330153412

Option 1 ID : 264330601183

Option 2 ID : 264330601186

Option 3 ID : 264330601185

Option 4 ID : 264330601184

Status : Answered

Chosen Option : 3

Q.9 Select the most appropriate synonym of the given word.
Obvious

- Ans
- ☒ 1. Clear
 - ☒ 2. Murky
 - ☒ 3. Ambiguous
 - ☒ 4. Opaque

Question ID : 264330151825

Option 1 ID : 264330594930

Option 2 ID : 264330594928

Option 3 ID : 264330594929

Option 4 ID : 264330594927

Status : Answered

Chosen Option : 1

Q.10 Select the most appropriate meaning of the given idiom.
As phony as a three-dollar bill

- Ans ☒ 1. Something that is attractive
☒ 2. Something that is genuine
☒ 3. Something that is disgusting
☒ 4. Something that is fake

Question ID : 264330153439
Option 1 ID : 264330601280
Option 2 ID : 264330601279
Option 3 ID : 264330601282
Option 4 ID : 264330601281
Status : Answered
Chosen Option : 1

Q.11 Select the most appropriate option to fill in the blank.

They are going to give me a lovely present, but I cannot ____ what it will be.

- Ans ☒ 1. give
☒ 2. gist
☒ 3. guess
☒ 4. guest

Question ID : 264330153496
Option 1 ID : 264330601502
Option 2 ID : 264330601501
Option 3 ID : 264330601500
Option 4 ID : 264330601499
Status : Answered
Chosen Option : 3

Q.12 Select the INCORRECTLY spelt word.

- Ans ☒ 1. Important
☒ 2. Maintanance
☒ 3. Friend
☒ 4. Rhythm

Question ID : 264330152643
Option 1 ID : 264330598177
Option 2 ID : 264330598176
Option 3 ID : 264330598178
Option 4 ID : 264330598175
Status : Answered
Chosen Option : 2

Q.13 Select the most appropriate synonym of the given word.
Determined

- Ans ☒ 1. Flexible
☒ 2. Famous
☒ 3. Decisive
☒ 4. Elevated

Question ID : 264330151919
Option 1 ID : 264330595291
Option 2 ID : 264330595293
Option 3 ID : 264330595294
Option 4 ID : 264330595292
Status : Not Answered
Chosen Option : --

Q.14 Select the most appropriate synonym of the underlined word.
Ray was cynical about love.

- Ans ☒ 1. prolific
☒ 2. obese
☒ 3. trusting
☒ 4. pessimistic

Question ID : 264330153520
Option 1 ID : 264330601594
Option 2 ID : 264330601593
Option 3 ID : 264330601592
Option 4 ID : 264330601591
Status : Answered
Chosen Option : 4

Q.15 Select the option that rectifies the spelling of the underlined word in the given sentence.

The company sent out a questionaire to its employees to gather feedback on their work environment.

- Ans ☒ 1. questioneire
☒ 2. questionnaire
☒ 3. questionnire
☒ 4. questionaiare

Question ID : 264330153229
Option 1 ID : 264330600478
Option 2 ID : 264330600476
Option 3 ID : 264330600475
Option 4 ID : 264330600477
Status : Answered
Chosen Option : 2

Q.16 Select the option that can be used as a one-word substitute for the given group of words.

A person who feeds on human flesh

- Ans ☒ 1. Cannibal
☒ 2. Carnivore
☒ 3. Nudge
☒ 4. Omnivore

Question ID : 264330153405

Option 1 ID : 264330601157

Option 2 ID : 264330601155

Option 3 ID : 264330601156

Option 4 ID : 264330601158

Status : Answered

Chosen Option : 2

Q.17 Select the most appropriate option that can substitute the underlined segment in the given sentence. If there is no need to substitute it, select 'No substitution required'.
Larger emissions of greenhouse gases lead to higher concentrations in the atmosphere.

- Ans ☒ 1. leaded to higher concentrations
☒ 2. have lead to higher concentrations
☒ 3. is lead to higher concentrations
☒ 4. No substitution required

Question ID : 264330151898

Option 1 ID : 264330595207

Option 2 ID : 264330595208

Option 3 ID : 264330595209

Option 4 ID : 264330595210

Status : Answered

Chosen Option : 4

Q.18 Select the most appropriate meaning of the underlined idiom.
Ramesh always blows his own trumpet.

- Ans ☒ 1. praises himself
☒ 2. criticises himself
☒ 3. does his own work
☒ 4. depends on others

Question ID : 264330152752

Option 1 ID : 264330598607

Option 2 ID : 264330598608

Option 3 ID : 264330598609

Option 4 ID : 264330598610

Status : Answered

Chosen Option : 1

Q.19 Select the most appropriate meaning of the underlined idiom.
He was on cloud nine when he got admission in Cambridge University.

- Ans ☒ 1. involved in useless journey
☒ 2. very happy
☒ 3. unsettled
☒ 4. available to be called to go to work

Question ID : 264330153642
Option 1 ID : 264330602042
Option 2 ID : 264330602039
Option 3 ID : 264330602041
Option 4 ID : 264330602040
Status : Answered
Chosen Option : 2

Q.20 Select the option that can be used as a one-word substitute for the given group of words.
An examination of a body after death

- Ans ☒ 1. Post room
☒ 2. Post death
☒ 3. Post partum
☒ 4. Post mortem

Question ID : 264330152588
Option 1 ID : 264330597958
Option 2 ID : 264330597956
Option 3 ID : 264330597955
Option 4 ID : 264330597957
Status : Answered
Chosen Option : 4

Comprehension:

In the following passage some words have been deleted. Fill in the blanks with the help of the alternatives given. Select the most appropriate option for each number.

One of the (1)_____ tragedies is seeing someone with incredible talent get (2)_____ because he or she lacks some basic skills. This book (3)_____ the number one reason executives derail, and it provides extremely helpful tools to operate in a fast-paced, result-oriented environment. I am impressed by how insightful, (4)_____, well organised and focused it is. It will surely help one (5)_____ several difficult situations.

SubQuestion No : 21

Q.21 Select the most appropriate option to fill in blank number 1.

- Ans ☒ 1. more great
☒ 2. great
☒ 3. greater
☒ 4. greatest

Question ID : 264330153590
Option 1 ID : 264330601850
Option 2 ID : 264330601847
Option 3 ID : 264330601848
Option 4 ID : 264330601849
Status : Answered
Chosen Option : 4

Comprehension:

In the following passage some words have been deleted. Fill in the blanks with the help of the alternatives given. Select the most appropriate option for each number.

One of the (1)_____ tragedies is seeing someone with incredible talent get (2)_____ because he or she lacks some basic skills. This book (3)_____ the number one reason executives derail, and it provides extremely helpful tools to operate in a fast-paced, result-oriented environment. I am impressed by how insightful, (4)_____, well organised and focused it is. It will surely help one (5)_____ several difficult situations.

SubQuestion No : 22

Q.22 Select the most appropriate option to fill in blank number 2.

- Ans ☒ 1. uplifted
☒ 2. damaged
☒ 3. derailed
☒ 4. channelised

Question ID : 264330153591

Option 1 ID : 264330601852

Option 2 ID : 264330601851

Option 3 ID : 264330601854

Option 4 ID : 264330601853

Status : Answered

Chosen Option : 3

Comprehension:

In the following passage some words have been deleted. Fill in the blanks with the help of the alternatives given. Select the most appropriate option for each number.

One of the (1)_____ tragedies is seeing someone with incredible talent get (2)_____ because he or she lacks some basic skills. This book (3)_____ the number one reason executives derail, and it provides extremely helpful tools to operate in a fast-paced, result-oriented environment. I am impressed by how insightful, (4)_____, well organised and focused it is. It will surely help one (5)_____ several difficult situations.

SubQuestion No : 23

Q.23 Select the most appropriate option to fill in blank number 3.

- Ans ☒ 1. demeans
☒ 2. devours
☒ 3. addresses
☒ 4. neglects

Question ID : 264330153592

Option 1 ID : 264330601858

Option 2 ID : 264330601857

Option 3 ID : 264330601855

Option 4 ID : 264330601856

Status : Answered

Chosen Option : 3

Comprehension:

In the following passage some words have been deleted. Fill in the blanks with the help of the alternatives given. Select the most appropriate option for each number.

One of the (1)_____ tragedies is seeing someone with incredible talent get (2)_____ because he or she lacks some basic skills. This book (3)_____ the number one reason executives derail, and it provides extremely helpful tools to operate in a fast-paced, result-oriented environment. I am impressed by how insightful, (4)_____, well organised and focused it is. It will surely help one (5)_____ several difficult situations.

SubQuestion No : 24

Q.24 Select the most appropriate option to fill in blank number 4.

- Ans ☒ 1. sophisticated
☒ 2. pessimistic
☒ 3. cumbersome
☒ 4. readable

Question ID : 264330153593

Option 1 ID : 264330601862

Option 2 ID : 264330601861

Option 3 ID : 264330601859

Option 4 ID : 264330601860

Status : Answered

Chosen Option : 2

Comprehension:

In the following passage some words have been deleted. Fill in the blanks with the help of the alternatives given. Select the most appropriate option for each number.

One of the (1)_____ tragedies is seeing someone with incredible talent get (2)_____ because he or she lacks some basic skills. This book (3)_____ the number one reason executives derail, and it provides extremely helpful tools to operate in a fast-paced, result-oriented environment. I am impressed by how insightful, (4)_____, well organised and focused it is. It will surely help one (5)_____ several difficult situations.

SubQuestion No : 25

Q.25 Select the most appropriate option to fill in blank number 5.

- Ans ☒ 1. condemn
☒ 2. salvage
☒ 3. reject
☒ 4. discourage

Question ID : 264330153594

Option 1 ID : 264330601866

Option 2 ID : 264330601864

Option 3 ID : 264330601863

Option 4 ID : 264330601865

Status : Answered

Chosen Option : 2