



Participant ID
Participant Name
Test Center Name
Test Date
Test Time
Subject

Section : General English

Q.1 Select the most appropriate antonym that can substitute the underlined phrase in the given sentence.

She advised the parents that they should write to the school authorities about their objections to the new policy.

- Ans ☒ A. Objectives
☒ B. Acceptance
☒ C. Protestations
☒ D. Motives

Question ID : 630680126992
 Option 1 ID : 630680492480
 Option 2 ID : 630680492479
 Option 3 ID : 630680492478
 Option 4 ID : 630680492481
 Status : Answered
 Chosen Option : B

Q.2 Select the most appropriate option that indicates manner to fill in the blank.

The professor spoke _____ confidence about the upcoming publication.

- Ans ☒ A. by
☒ B. over
☒ C. with
☒ D. beyond

Question ID : 630680739384
 Option 1 ID : 6306802898128
 Option 2 ID : 6306802898130
 Option 3 ID : 6306802898129
 Option 4 ID : 6306802898131
 Status : Answered
 Chosen Option : C

Q.3 Select the sentence with NO spelling error.

- Ans ☒ A. Mr. Bachchan is a versatule actor who can play all types of roles.
- ☒ B. Mr. Bachchan is a verssatile actor who can play all types of roles.
- ☒ C. Mr. Bachchan is a versattile actor who can play all types of roles.
- ☒ D. Mr. Bachchan is a versatile actor who can play all types of roles.

Question ID : 630680805912

Option 1 ID : 6306803157313

Option 2 ID : 6306803157315

Option 3 ID : 6306803157314

Option 4 ID : 6306803157312

Status : Answered

Chosen Option : B

Q.4 Select the most appropriate ANTONYM of the word given in bold.

The security measures were put in place to thwart untoward incidents from happening during the elections.

- Ans ☒ A. Prevent
- ☒ B. Foil
- ☒ C. Hinder
- ☒ D. Facilitate

Question ID : 630680805867

Option 1 ID : 6306803157116

Option 2 ID : 6306803157117

Option 3 ID : 6306803157118

Option 4 ID : 6306803157119

Status : Answered

Chosen Option : A

Q.5 Sentences of a paragraph are given below in jumbled order. Arrange the sentences in the correct order to form a meaningful and coherent paragraph.

- A. It not only facilitates the exchange of information but also plays a crucial role in building connections between individuals.
- B. Communication is the cornerstone of relationships, capable of either strengthening or weakening them.
- C. Communication has, since times immemorial, served as humanity's primary navigational tool in society.
- D. Similarly, it has the power to make or break a person's character.

- Ans ☒ A. ACBD
- ☒ B. CABD
- ☒ C. ABDC
- ☒ D. DACB

Question ID : 630680787984

Option 1 ID : 6306803087735

Option 2 ID : 6306803087732

Option 3 ID : 6306803087733

Option 4 ID : 6306803087734

Status : Answered

Chosen Option : B

Q.6 Select the proverb that means the same as the given sentence.

An incompetent person finds excuses for their failures rather than accepting their own mistakes.

- Ans** ☒ A. Everything comes to him who waits
☒ B. No man is an island
☒ C. Look before you leap
☒ D. A bad workman blames his tools

Question ID : **630680805931**
Option 1 ID : **6306803157388**
Option 2 ID : **6306803157389**
Option 3 ID : **6306803157391**
Option 4 ID : **6306803157390**
Status : **Answered**
Chosen Option : **D**

Q.7 Select the most appropriate option that introduces a condition to fill in the blank.

The experiment will proceed as planned _____ the equipment functions properly.

- Ans** ☒ A. however
☒ B. although
☒ C. thus
☒ D. provided

Question ID : **630680739395**
Option 1 ID : **6306802898171**
Option 2 ID : **6306802898169**
Option 3 ID : **6306802898170**
Option 4 ID : **6306802898168**
Status : **Answered**
Chosen Option : **B**

Q.8 Select the most appropriate option to fill in the blank.

At my request Tanya introduced me to her friend who is _____ singer and a doctor.

- Ans** ☒ A. one
☒ B. the
☒ C. an
☒ D. a

Question ID : **630680779765**
Option 1 ID : **6306803056245**
Option 2 ID : **6306803056243**
Option 3 ID : **6306803056244**
Option 4 ID : **6306803056246**
Status : **Answered**
Chosen Option : **D**

Q.9 Select the most appropriate proverb that means the same as the given group of words.

An expert in many things is expert in none

- Ans** ☒ A. Haste makes waste
☒ B. Eagle's don't catch flies
☒ C. No gain, no gain
☒ D. Jack of all trades, master of none

Question ID : **630680805942**

Option 1 ID : **6306803157435**

Option 2 ID : **6306803157432**

Option 3 ID : **6306803157433**

Option 4 ID : **6306803157434**

Status : **Answered**

Chosen Option : **D**

Q.10 Select the option that can be used as a one-word substitute for the given group of words.

A fictitious name used by an author

- Ans** ☒ A. Truant
☒ B. Pseudonym
☒ C. Utopian
☒ D. Nemesis

Question ID : **630680805388**

Option 1 ID : **6306803155243**

Option 2 ID : **6306803155244**

Option 3 ID : **6306803155242**

Option 4 ID : **6306803155241**

Status : **Answered**

Chosen Option : **B**

Comprehension:

Read the given passage and answer the questions that follow.

Adventure Travel

Time for an adventure? Are you a bit bored with your nine-to-five routine? Have a look at our exciting range of holidays and decide what type of adventure you'd like.

Activity holidays

Our activity holidays are for everyone, people who love danger or who just like sports. We have a huge variety of water, snow or desert holidays. We'll take you SCUBA diving in the Red Sea or kayaking and white water rafting in Canada. If you prefer snow, you can try skiing or snowboarding in the Alps or even igloo-building. For those who like warmer weather, we also have sandboarding (the desert version of skateboarding) or camel safaris.

Polar expeditions

Take a cruise to Antarctica or the northern Arctic; explore a land of white natural beauty and wonderful wildlife. Our experts will explain everything about the two poles as you watch the penguins in Antarctica or whales and polar bears in the Arctic. There's no greater adventure than travelling to the ends of the earth. A once-in-a-lifetime experience!

Cultural journeys

Our cultural journeys will help you discover ancient civilisations: India, Thailand, Egypt and many more. Visit temples, palaces and ancient ruins – just remember to bring your camera! Get to know local ways of life by exploring markets, trying exotic foods and meeting local people.

Trekking tours

We have trekking holidays to famous places such as Machu Picchu or the Everest Base Camp Trek, as well as some nearer to home in the Highlands of Scotland. You don't need to be very sporty, just fairly fit. You'll have a great time enjoying nature with a group of new friends. Some of the holidays include camping, but we'll transport the tents for you!

Wildlife holidays

We organise small-group tours to get closer to nature in Africa, Asia or South America. Go on safari in Africa and watch lions and giraffes. Meet the famous turtles of the Galapagos Islands. Look for tigers in India, or take an elephant safari in Sri Lanka. We use local guides and stay in a range of accommodation, from tents to tree houses.

SubQuestion No : 11

Q.11 According to the passage, what kind of physical fitness level is required for most trekking tours?

- Ans** ☒ **A. You only need to be able to walk for short distances.**
- ☒ **B. There is no physical fitness requirement.**
- ☒ **C. A moderate level of fitness is recommended.**
- ☒ **D. You need to be very athletic.**

Question ID : **630680806013**

Option 1 ID : **6306803157705**

Option 2 ID : **6306803157707**

Option 3 ID : **6306803157706**

Option 4 ID : **6306803157704**

Status : **Answered**

Chosen Option : **C**

Comprehension:

Read the given passage and answer the questions that follow.

Adventure Travel

Time for an adventure? Are you a bit bored with your nine-to-five routine? Have a look at our exciting range of holidays and decide what type of adventure you'd like.

Activity holidays

Our activity holidays are for everyone, people who love danger or who just like sports. We have a huge variety of water, snow or desert holidays. We'll take you SCUBA diving in the Red Sea or kayaking and white water rafting in Canada. If you prefer snow, you can try skiing or snowboarding in the Alps or even igloo-building. For those who like warmer weather, we also have sandboarding (the desert version of skateboarding) or camel safaris.

Polar expeditions

Take a cruise to Antarctica or the northern Arctic; explore a land of white natural beauty and wonderful wildlife. Our experts will explain everything about the two poles as you watch the penguins in Antarctica or whales and polar bears in the Arctic. There's no greater adventure than travelling to the ends of the earth. A once-in-a-lifetime experience!

Cultural journeys

Our cultural journeys will help you discover ancient civilisations: India, Thailand, Egypt and many more. Visit temples, palaces and ancient ruins – just remember to bring your camera! Get to know local ways of life by exploring markets, trying exotic foods and meeting local people.

Trekking tours

We have trekking holidays to famous places such as Machu Picchu or the Everest Base Camp Trek, as well as some nearer to home in the Highlands of Scotland. You don't need to be very sporty, just fairly fit. You'll have a great time enjoying nature with a group of new friends. Some of the holidays include camping, but we'll transport the tents for you!

Wildlife holidays

We organise small-group tours to get closer to nature in Africa, Asia or South America. Go on safari in Africa and watch lions and giraffes. Meet the famous turtles of the Galapagos Islands. Look for tigers in India, or take an elephant safari in Sri Lanka. We use local guides and stay in a range of accommodation, from tents to tree houses.

SubQuestion No : 12

Q.12 What kind of holidays does this travel company NOT offer?

- Ans
- ☒ A. Cultural exploration trips
 - ☒ B. Wildlife watching adventures
 - ☒ C. Relaxing beach vacations
 - ☒ D. Trekking expeditions

Question ID : **630680806009**

Option 1 ID : **6306803157690**

Option 2 ID : **6306803157689**

Option 3 ID : **6306803157688**

Option 4 ID : **6306803157691**

Status : **Answered**

Chosen Option : **C**

Comprehension:

Read the given passage and answer the questions that follow.

Adventure Travel

Time for an adventure? Are you a bit bored with your nine-to-five routine? Have a look at our exciting range of holidays and decide what type of adventure you'd like.

Activity holidays

Our activity holidays are for everyone, people who love danger or who just like sports. We have a huge variety of water, snow or desert holidays. We'll take you SCUBA diving in the Red Sea or kayaking and white water rafting in Canada. If you prefer snow, you can try skiing or snowboarding in the Alps or even igloo-building. For those who like warmer weather, we also have sandboarding (the desert version of skateboarding) or camel safaris.

Polar expeditions

Take a cruise to Antarctica or the northern Arctic; explore a land of white natural beauty and wonderful wildlife. Our experts will explain everything about the two poles as you watch the penguins in Antarctica or whales and polar bears in the Arctic. There's no greater adventure than travelling to the ends of the earth. A once-in-a-lifetime experience!

Cultural journeys

Our cultural journeys will help you discover ancient civilisations: India, Thailand, Egypt and many more. Visit temples, palaces and ancient ruins – just remember to bring your camera! Get to know local ways of life by exploring markets, trying exotic foods and meeting local people.

Trekking tours

We have trekking holidays to famous places such as Machu Picchu or the Everest Base Camp Trek, as well as some nearer to home in the Highlands of Scotland. You don't need to be very sporty, just fairly fit. You'll have a great time enjoying nature with a group of new friends. Some of the holidays include camping, but we'll transport the tents for you!

Wildlife holidays

We organise small-group tours to get closer to nature in Africa, Asia or South America. Go on safari in Africa and watch lions and giraffes. Meet the famous turtles of the Galapagos Islands. Look for tigers in India, or take an elephant safari in Sri Lanka. We use local guides and stay in a range of accommodation, from tents to tree houses.

SubQuestion No : 13

Q.13 What activity can you participate in on an all-inclusive trekking holiday, according to the passage?

- Ans
- ☒ A. Whale watching
 - ☒ B. Scuba diving
 - ☒ C. Camping
 - ☒ D. Sandboarding

Question ID : 630680806012

Option 1 ID : 6306803157703

Option 2 ID : 6306803157702

Option 3 ID : 6306803157700

Option 4 ID : 6306803157701

Status : Answered

Chosen Option : C

Comprehension:

Read the given passage and answer the questions that follow.

Adventure Travel

Time for an adventure? Are you a bit bored with your nine-to-five routine? Have a look at our exciting range of holidays and decide what type of adventure you'd like.

Activity holidays

Our activity holidays are for everyone, people who love danger or who just like sports. We have a huge variety of water, snow or desert holidays. We'll take you SCUBA diving in the Red Sea or kayaking and white water rafting in Canada. If you prefer snow, you can try skiing or snowboarding in the Alps or even igloo-building. For those who like warmer weather, we also have sandboarding (the desert version of skateboarding) or camel safaris.

Polar expeditions

Take a cruise to Antarctica or the northern Arctic; explore a land of white natural beauty and wonderful wildlife. Our experts will explain everything about the two poles as you watch the penguins in Antarctica or whales and polar bears in the Arctic. There's no greater adventure than travelling to the ends of the earth. A once-in-a-lifetime experience!

Cultural journeys

Our cultural journeys will help you discover ancient civilisations: India, Thailand, Egypt and many more. Visit temples, palaces and ancient ruins – just remember to bring your camera! Get to know local ways of life by exploring markets, trying exotic foods and meeting local people.

Trekking tours





We have trekking holidays to famous places such as Machu Picchu or the Everest Base Camp Trek, as well as some nearer to home in the Highlands of Scotland. You don't need to be very sporty, just fairly fit. You'll have a great time enjoying nature with a group of new friends. Some of the holidays include camping, but we'll transport the tents for you!

Wildlife holidays

We organise small-group tours to get closer to nature in Africa, Asia or South America. Go on safari in Africa and watch lions and giraffes. Meet the famous turtles of the Galapagos Islands. Look for tigers in India, or take an elephant safari in Sri Lanka. We use local guides and stay in a range of accommodation, from tents to tree houses.

SubQuestion No : 14

Q.14 If you are interested in learning about ancient ruins and local cultures, which type of holiday might be best for you?

- Ans  A. Trekking tours
-  B. Cultural journeys
-  C. Activity holidays
-  D. Wildlife holidays

Question ID : 630680806011

Option 1 ID : 6306803157698

Option 2 ID : 6306803157697

Option 3 ID : 6306803157696

Option 4 ID : 6306803157699

Status : Answered

Chosen Option : B

Comprehension:

Read the given passage and answer the questions that follow.

Adventure Travel

Time for an adventure? Are you a bit bored with your nine-to-five routine? Have a look at our exciting range of holidays and decide what type of adventure you'd like.

Activity holidays

Our activity holidays are for everyone, people who love danger or who just like sports. We have a huge variety of water, snow or desert holidays. We'll take you SCUBA diving in the Red Sea or kayaking and white water rafting in Canada. If you prefer snow, you can try skiing or snowboarding in the Alps or even igloo-building. For those who like warmer weather, we also have sandboarding (the desert version of skateboarding) or camel safaris.

Polar expeditions

Take a cruise to Antarctica or the northern Arctic; explore a land of white natural beauty and wonderful wildlife. Our experts will explain everything about the two poles as you watch the penguins in Antarctica or whales and polar bears in the Arctic. There's no greater adventure than travelling to the ends of the earth. A once-in-a-lifetime experience!

Cultural journeys

Our cultural journeys will help you discover ancient civilisations: India, Thailand, Egypt and many more. Visit temples, palaces and ancient ruins – just remember to bring your camera! Get to know local ways of life by exploring markets, trying exotic foods and meeting local people.

Trekking tours

We have trekking holidays to famous places such as Machu Picchu or the Everest Base Camp Trek, as well as some nearer to home in the Highlands of Scotland. You don't need to be very sporty, just fairly fit. You'll have a great time enjoying nature with a group of new friends. Some of the holidays include camping, but we'll transport the tents for you!

Wildlife holidays

We organise small-group tours to get closer to nature in Africa, Asia or South America. Go on safari in Africa and watch lions and giraffes. Meet the famous turtles of the Galapagos Islands. Look for tigers in India, or take an elephant safari in Sri Lanka. We use local guides and stay in a range of accommodation, from tents to tree houses.

SubQuestion No : 15

Q.15 The phrase 'nine-to-five routine' most likely refers to:

- Ans ☒ A. a commute to and from work
- ☒ B. a daily work schedule
- ☒ C. working long hours
- ☒ D. a job that requires a lot of travel

Question ID : **630680806010**

Option 1 ID : **6306803157694**

Option 2 ID : **6306803157693**

Option 3 ID : **6306803157692**

Option 4 ID : **6306803157695**

Status : **Answered**

Chosen Option : **B**

Section : **Reasoning**

Q.1 In a certain code language, 'he is tall' is written as 'df rt gy' and 'trees are tall' is written as 'gy fg cv'. What is the code for 'tall' in that language?

- Ans** ☒ A. cv
☒ B. rt
☒ C. fg
☒ D. gy

Question ID : **630680251542**

Option 1 ID : **630680976173**

Option 2 ID : **630680976174**

Option 3 ID : **630680976172**

Option 4 ID : **630680976171**

Status : **Answered**

Chosen Option : **D**

Q.2 Which of the following options can replace the question mark (?) and complete the given number series?
7, 10, 16, 19, 25, 28, ?

- Ans** ☒ A. 34
☒ B. 35
☒ C. 31
☒ D. 30

Question ID : **630680239262**

Option 1 ID : **630680928058**

Option 2 ID : **630680928059**

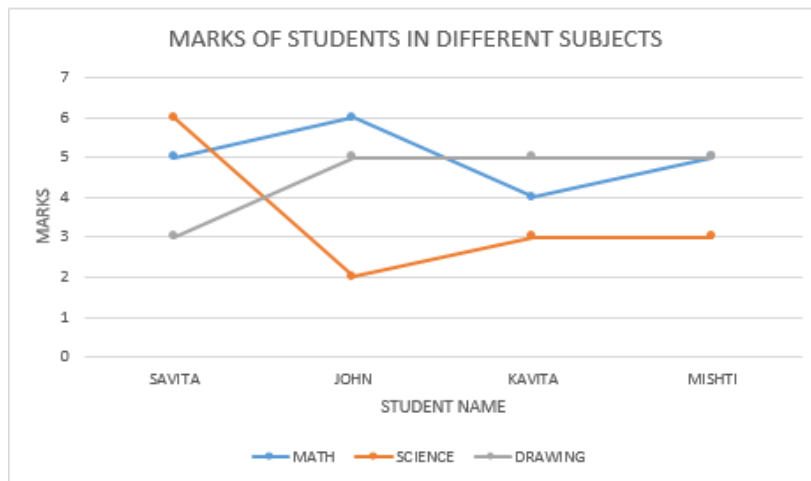
Option 3 ID : **630680928057**

Option 4 ID : **630680928056**

Status : **Answered**

Chosen Option : **A**

Q.3



Study the given line graph and answer the following question.

If the maximum marks in Science is 6, what is the percentage of marks of Kavita in Science?

Ans ☒ A. 50

☒ B. 45

☒ C. 40

☒ D. 65

Question ID : 630680409148

Option 1 ID : 6306801595439

Option 2 ID : 6306801595440

Option 3 ID : 6306801595438

Option 4 ID : 6306801595437

Status : Answered

Chosen Option : A

Q.4 In this question, a statement is followed by two conclusions. Find which conclusion is true based on the given statement.

Statement: $X < W$, $V \geq Y$, $Y > W$, $Z = V$

Conclusions:

I. $Y > X$

II. $Z < W$

Ans ☒ A. Only conclusion I is true.

☒ B. Neither conclusion I nor II is true.

☒ C. Both conclusions I and II are true.

☒ D. Only conclusion II is true.

Question ID : 630680630225

Option 1 ID : 6306802466923

Option 2 ID : 6306802466926

Option 3 ID : 6306802466925

Option 4 ID : 6306802466924

Status : Answered

Chosen Option : A

Q.5 Select the triad that follows the same pattern as the one followed by the two triads given below. Both triads follow the same pattern.

RV-ZD-HL
DH-LP-TX

Ans ☒ A. CG-KO-SW

☐ B. UH-KF-HY

☐ C. CG-KO-JK

☐ D. WR-KO-ML

Question ID : 630680919677

Option 1 ID : 6306803603906

Option 2 ID : 6306803603909

Option 3 ID : 6306803603907

Option 4 ID : 6306803603908

Status : Answered

Chosen Option : A

Q.6 Refer to the following letter, symbol series and answer the question that follows. Counting to be done from left to right only.

(Left) O # \$ R V @ + ^ G U Y T + ! U > \$ % Y W E % @ G I # > N G D + (Right)

How many such symbols are there, each of which is immediately preceded by a symbol and also immediately followed by a symbol?

Ans ☐ A. Three

☐ B. None

☒ C. Two

☐ D. One

Question ID : 630680742989

Option 1 ID : 6306802912267

Option 2 ID : 6306802912268

Option 3 ID : 6306802912266

Option 4 ID : 6306802912269

Status : Answered

Chosen Option : C

Q.7 A, B, C, D, E, and F are sitting around a circular table facing the centre. D is an immediate neighbour of B and A. C sits second to the right of B. F sits second to the left of E. Who sits second to the right of E?

Ans ☐ A. C

☒ B. D

☐ C. B

☐ D. A

Question ID : 630680335629

Option 1 ID : 6306801305410

Option 2 ID : 6306801305411

Option 3 ID : 6306801305412

Option 4 ID : 6306801305409

Status : Answered

Chosen Option : B

Q.8 In a certain code language,

A + B means 'A is the son of B',
A # B means 'A is the brother of B',
A – B means 'A is the wife of B' and
A @ B means 'A is the father of B'.

How is D related to N if 'D # E + F – M @ N'?

- Ans ☒ A. Son
☒ B. Husband
☒ C. Father
☒ D. Brother

Question ID : 630680482212
Option 1 ID : 6306801883362
Option 2 ID : 6306801883363
Option 3 ID : 6306801883365
Option 4 ID : 6306801883364
Status : Answered
Chosen Option : D

Q.9 Read the given statements and conclusions carefully. Assuming that the information given in the statements is true, even if it appears to be at variance with commonly known facts, decide which of the given conclusions logically follow(s) from the statements.

Statements:
All sneakers are trousers.
No trouser is a watch.

Conclusions:
(I) No sneaker is a watch.
(II) Some watches may be trousers.

- Ans ☒ A. Only conclusion (I) follows.
☒ B. Only conclusion (II) follows.
☒ C. Both conclusion (I) and (II) follow.
☒ D. Neither conclusion (I) nor (II) follows.

Question ID : 630680422371
Option 1 ID : 6306801647920
Option 2 ID : 6306801647921
Option 3 ID : 6306801647922
Option 4 ID : 6306801647923
Status : Answered
Chosen Option : A

Q.10 A, B, C, D, E and F live on six different floors of the same building. The lowermost floor in the building is numbered 1, the floor above it, number 2 and so on till the topmost floor is numbered 6. A lives on an even numbered floor but not on floor number 2. Only two people live above A. F lives on an even numbered floor below A. C lives immediately below D. E does not live on the lowermost floor. How many people live between C and B?

- Ans ☒ A. Three
☒ B. Four
☒ C. Two
☒ D. One

Question ID : 630680151875
Option 1 ID : 630680587546
Option 2 ID : 630680587547
Option 3 ID : 630680587545
Option 4 ID : 630680587544
Status : Answered
Chosen Option : A

Q.11 In a certain code language, 'BELT' is coded as '3719' and 'LAMP' is coded as '4678'. What is the code for 'L' in that language?

- Ans ☒ A. 4
☒ B. 8
☒ C. 7
☒ D. 1

Question ID : 630680410691
Option 1 ID : 6306801601522
Option 2 ID : 6306801601523
Option 3 ID : 6306801601520
Option 4 ID : 6306801601521
Status : Answered
Chosen Option : C

Q.12 Which of the following options can replace the question mark (?) and complete the given number series?
85, 111, 145, 187, ?

- Ans ☒ A. 245
☒ B. 237
☒ C. 240
☒ D. 235

Question ID : 630680239266
Option 1 ID : 630680928074
Option 2 ID : 630680928073
Option 3 ID : 630680928072
Option 4 ID : 630680928075
Status : Answered
Chosen Option : D

Q.13 DIMQ is related to FLQV in a certain way based on the English alphabetical order. In the same way, PRTU is related to RUXZ. To which of the following is KNOM related, following the same logic?

- Ans ☒ A. MRRS
☒ B. NRSS
☒ C. LQRS
☒ D. MQSR

Question ID : 630680349654
Option 1 ID : 6306801360905
Option 2 ID : 6306801360908
Option 3 ID : 6306801360906
Option 4 ID : 6306801360907
Status : Answered
Chosen Option : D

Q.14 Naval starts from Point Y and drives 6 km towards the South. He then takes a left turn, drives 29 km, turns right and drives 27 km. He then takes a right turn and drives 7 km. He takes a right turn and drives 13 km. He then turns right, drives 15 km, turns left and drives 20 km to stop at Point Z. How far (shortest distance) and towards which direction should he drive in order to reach Point Y again? (All turns are 90 degrees turns only unless specified)

- Ans** ☒ A. 36 km towards East
☒ B. 44 km towards East
☒ C. 37 km towards West
☒ D. 36 km towards West

Question ID : 630680240782

Option 1 ID : 630680933605

Option 2 ID : 630680933603

Option 3 ID : 630680933604

Option 4 ID : 630680933606

Status : Answered

Chosen Option : C

Q.15 What should come in place of the question mark (?) in the given series in order to make it logically complete?
2B7H 4K9J 8T11L ?

- Ans** ☒ A. 16C13N
☒ B. 16D14M
☒ C. 16D13M
☒ D. 16B13N

Question ID : 630680151156

Option 1 ID : 630680584685

Option 2 ID : 630680584686

Option 3 ID : 630680584687

Option 4 ID : 630680584684

Status : Not Attempted and
Marked For Review

Chosen Option : --

Section : Quantitative Aptitude

Q.1 A, B and C can finish a work in 10, 15 and 30 days, respectively. In how many days can B finish the work if he is assisted by A and C on every third day?

- Ans** ☒ A. 9
☒ B. 10
☒ C. 8
☒ D. 12

Question ID : 630680477700

Option 1 ID : 6306801865950

Option 2 ID : 6306801865949

Option 3 ID : 6306801865951

Option 4 ID : 6306801865948

Status : Not Answered

Chosen Option : --

Q.2 Karan travels the first 180 km of a journey at the speed of 54 km/h and the next 180 km at the speed of 60 km/h. Find his average speed for the entire journey.

Ans

☒ A. $52\frac{16}{19}$ km/h

☒ B. $54\frac{16}{19}$ km/h

☒ C. $56\frac{16}{19}$ km/h

☒ D. $58\frac{16}{19}$ km/h

Question ID : 630680138389

Option 1 ID : 630680535794

Option 2 ID : 630680535795

Option 3 ID : 630680535796

Option 4 ID : 630680535797

Status : Answered

Chosen Option : C

Q.3 A company earns a profit (in ₹) that is distributed among the company's three partners in the ratio of 3 : 5 : 14. If the difference between the smallest and the largest shares is ₹18137, the total profit (in ₹) of the company is:

Ans

☒ A. 36327

☒ B. 36296

☒ C. 36274

☒ D. 36261

Question ID : 630680789359

Option 1 ID : 6306803093217

Option 2 ID : 6306803093218

Option 3 ID : 6306803093216

Option 4 ID : 6306803093219

Status : Answered

Chosen Option : C

Q.4 There are a total 80 distinct books on a shelf such as 26 Math books, 24 English books, and 30 Biology books. One book is chosen at random. What is the probability that the chosen book is NOT an English book?

Ans

☒ A. $\frac{3}{8}$

☒ B. $\frac{4}{9}$

☒ C. $\frac{3}{10}$

☒ D. $\frac{7}{10}$

Question ID : 630680373689

Option 1 ID : 6306801456030

Option 2 ID : 6306801456029

Option 3 ID : 6306801456027

Option 4 ID : 6306801456028

Status : Not Answered

Chosen Option : --

Q.5 Two dice are thrown simultaneously and the sum of the numbers obtained is found to be 8. The probability that the number 5 has appeared at least once is:

Ans

☒ A. $\frac{1}{6}$

☒ B. $\frac{3}{5}$

☒ C. $\frac{2}{5}$

☒ D. $\frac{1}{2}$

Question ID : 630680183207

Option 1 ID : 630680709900

Option 2 ID : 630680709899

Option 3 ID : 630680709897

Option 4 ID : 630680709898

Status : Not Answered

Chosen Option : --

Q.6 A boatman goes 2 km against the current of the stream in 1 hour and goes 1 km along with the current in 15 minutes. How long will it take to go 5 km in stationary water?

Ans

☒ A. 1 hour

☒ B. 1 hour 30 minutes

☒ C. 1 hour 15 minutes

☒ D. 1 hour 40 minutes

Question ID : 630680186801

Option 1 ID : 630680724153

Option 2 ID : 630680724155

Option 3 ID : 630680724154

Option 4 ID : 630680724156

Status : Not Answered

Chosen Option : --

Q.7 A trader marked the price of his commodity so as to include a profit of 20%. He allowed a discount of 15% on the marked price. If the selling price was ₹4,284, find the cost price of the commodity.

Ans

☒ A. ₹4,200

☒ B. ₹4,110

☒ C. ₹4,100

☒ D. ₹4,900

Question ID : 630680447530

Option 1 ID : 6306801747376

Option 2 ID : 6306801747374

Option 3 ID : 6306801747373

Option 4 ID : 6306801747375

Status : Not Answered

Chosen Option : --

Q.8 A, B and C together finish work in 4 days. If A alone can finish the same work in 12 days and B in 18 days, find how long (in days) will C take to finish the work?

- Ans ☒ A. 8
☒ B. 9
☒ C. 10
☒ D. 11

Question ID : 630680659759
 Option 1 ID : 6306802582979
 Option 2 ID : 6306802582978
 Option 3 ID : 6306802582980
 Option 4 ID : 6306802582981
 Status : Not Answered
 Chosen Option : --

Q.9 जब एक अभिन्न सिक्के को उछाला जाता है, तो एक चित आने की प्रायिकता $\frac{2}{5}$ है। यदि सिक्के को दो बार उछाला जाता है, तो दो पट आने की प्रायिकता क्या होगी?

- Ans ☒ A. $\frac{9}{25}$
☒ B. $\frac{1}{8}$
☒ C. $\frac{4}{25}$
☒ D. $\frac{4}{5}$

Question ID : 630680182004
 Option 1 ID : 630680705239
 Option 2 ID : 630680705238
 Option 3 ID : 630680705240
 Option 4 ID : 630680705241
 Status : Answered
 Chosen Option : D

Q.10 If 20% of a number is added to 120, then the result is the same number. 70% of the same number is:

- Ans ☒ A. 125
☒ B. 105
☒ C. 225
☒ D. 157.5

Question ID : 630680573843
 Option 1 ID : 6306802244241
 Option 2 ID : 6306802244240
 Option 3 ID : 6306802244242
 Option 4 ID : 6306802244243
 Status : Answered
 Chosen Option : D

Q.11 The average of 10 observations is 40. It was realised later that an observation was misread as 40 in place of 49. Find the correct average.

- Ans ☒ A. 39.9
☒ B. 43.9
☒ C. 40.9
☒ D. 41.9

Question ID : 630680657306
Option 1 ID : 6306802573167
Option 2 ID : 6306802573169
Option 3 ID : 6306802573166
Option 4 ID : 6306802573168
Status : Answered
Chosen Option : C

Q.12 The population of a village was 110000. It increased by 5% in the first year and increased by 30% in the second year. Its population after two years is _____.

- Ans ☒ A. 150150
☒ B. 148500
☒ C. 115500
☒ D. 143000

Question ID : 630680591514
Option 1 ID : 6306802314523
Option 2 ID : 6306802314526
Option 3 ID : 6306802314524
Option 4 ID : 6306802314525
Status : Answered
Chosen Option : A

Q.13 The average of the marks of 13 students in a class is 40. If the marks of each student are doubled, find the new average?

- Ans ☒ A. 40
☒ B. 80
☒ C. 26
☒ D. 13

Question ID : 630680573386
Option 1 ID : 6306802242413
Option 2 ID : 6306802242412
Option 3 ID : 6306802242415
Option 4 ID : 6306802242414
Status : Answered
Chosen Option : C

Q.14 What sum (in ₹) will earn a simple interest of ₹960 in 2 years at 20% per year rate of interest?

- Ans ☒ A. 384
☒ B. 1200
☒ C. 2400
☒ D. 4800

Question ID : 630680665876
Option 1 ID : 6306802607067
Option 2 ID : 6306802607065
Option 3 ID : 6306802607064
Option 4 ID : 6306802607066
Status : Answered
Chosen Option : C

Q.15 A, B, C, and D are four partners in a business. A's investment is two-thirds of D's investment. B and C invest equal amounts and C's investment is half of D's investment. If they earn ₹94.4 lakhs at the end of one year, then find the total share (in lakhs rupee) of A and B put together.

- Ans ☒ A. 44.3
☒ B. 41.3
☒ C. 40.3
☒ D. 43.3

Question ID : 630680915242
Option 1 ID : 6306803586015
Option 2 ID : 6306803586012
Option 3 ID : 6306803586013
Option 4 ID : 6306803586014
Status : Not Answered
Chosen Option : --

Section : General Knowledge

Q.1 'दोआब' क्षेत्र किन दो नदियों के संगम से बना है?

- Ans ☒ A. ब्रह्मपुत्र और महानदी
☒ B. गंगा और यमुना
☒ C. गोदावरी और कृष्णा
☒ D. नर्मदा और ताप्ती

Question ID : 630680648986
Option 1 ID : 6306802541104
Option 2 ID : 6306802541105
Option 3 ID : 6306802541106
Option 4 ID : 6306802541103
Status : Not Answered
Chosen Option : --

Q.2 The full form of IOA is_____.

Ans ☒ A. India Olympic Association

☒ B. Indian Olympic Association

☒ C. Indian Olympic Agency

☒ D. India Olympic Agency

Question ID : 63068059820

Option 1 ID : 630680230851

Option 2 ID : 630680230850

Option 3 ID : 630680230852

Option 4 ID : 630680230853

Status : Answered

Chosen Option : B

Q.3 नीति आयोग की रिपोर्ट के अनुसार, 2013-14 और 2022-23 के बीच उत्तर प्रदेश में कितने व्यक्ति बहुआयामी गरीबी से सफलतापूर्वक बाहर निकले?

Ans ☒ A. 4.12 करोड़

☒ B. 7.26 करोड़

☒ C. 2.5 करोड़

☒ D. 5.94 करोड़

Question ID : 630680780428

Option 1 ID : 6306803058804

Option 2 ID : 6306803058806

Option 3 ID : 6306803058803

Option 4 ID : 6306803058805

Status : Answered

Chosen Option : B

Q.4 Which city will host the upcoming BRICS Summit in October 2024?

Ans ☒ A. New Delhi, India

☒ B. Cairo, Egypt

☒ C. Tehran, Iran

☒ D. Kazan, Russia

Question ID : 630680807139

Option 1 ID : 6306803162170

Option 2 ID : 6306803162171

Option 3 ID : 6306803162172

Option 4 ID : 6306803162169

Status : Not Answered

Chosen Option : --

Q.5 What is the term used when there is difference between the country's export and import of goods in trading?

Ans ☒ A. Balance of trade

☒ B. Symmetry in trade

☒ C. Equity of trade

☒ D. Imbalance of Trade

Question ID : 630680133451

Option 1 ID : 630680516780

Option 2 ID : 630680516779

Option 3 ID : 630680516781

Option 4 ID : 630680516778

Status : Answered

Chosen Option : A

Q.6 Which city is the host city for the 2024 UN Climate Change Conference (COP29)?

- Ans ☒ A. Baku, Azerbaijan
- ☐ B. Rio de Janeiro, Brazil
- ☐ C. Sharm El Sheik, Egypt
- ☐ D. Dubai, United Arab Emirates

Question ID : 630680807136

Option 1 ID : 6306803162159

Option 2 ID : 6306803162160

Option 3 ID : 6306803162158

Option 4 ID : 6306803162157

Status : Marked For Review

Chosen Option : A

Q.7 कोई सूक्ष्म वित्त संस्थान किन माध्यमों के द्वारा सामाजिक प्रभाव और संधारणीयता (Sustainability) से जुड़ी चिंताओं को हल कर सकता है?

- Ans ☐ A. लाभ और शेयरधारक मूल्य को अधिकाधिक बढ़ाकर
- ☒ B. वित्तीय समावेशन और गरीबी उन्मूलन को प्राथमिकता देकर
- ☐ C. आक्रामक विकास रणनीतियों को अपनाकर
- ☐ D. सट्टेबाजी से जुड़े वित्तीय क्रियाकलापों में शामिल होकर

Question ID : 630680720440

Option 1 ID : 6306802823158

Option 2 ID : 6306802823159

Option 3 ID : 6306802823161

Option 4 ID : 6306802823160

Status : Answered

Chosen Option : B

Q.8 In which state is the Vindhyachal Thermal Power Station located?

- Ans ☐ A. Uttar Pradesh
- ☐ B. Maharashtra
- ☒ C. Madhya Pradesh
- ☐ D. Rajasthan

Question ID : 630680111996

Option 1 ID : 630680433712

Option 2 ID : 630680433710

Option 3 ID : 630680433713

Option 4 ID : 630680433711

Status : Answered

Chosen Option : D

Q.9 Siddarmaiah on 20 May 2023 became the 24th Chief Minister of _____.

- Ans ☐ A. Goa
- ☐ B. Kerala
- ☐ C. Tamil Nadu
- ☒ D. Karnataka

Question ID : 630680809879

Option 1 ID : 6306803173098

Option 2 ID : 6306803173095

Option 3 ID : 6306803173097

Option 4 ID : 6306803173096

Status : Not Answered

Chosen Option : --

Q.10 How many stages of economic development did Rostow identify in 1956?

Ans ☒ A. 5

☐ B. 6

☐ C. 4

☐ D. 7

Question ID : 630680134869

Option 1 ID : 630680522294

Option 2 ID : 630680522295

Option 3 ID : 630680522296

Option 4 ID : 630680522297

Status : Not Answered

Chosen Option : --

Q.11 किस बैंक को 12 मार्च 2024 के अंत तक सभी इलेक्टोरल बॉन्ड (electoral bond) विवरणों का खुलासा करने के निर्देश दिए गए थे तथा ऐसा न करने पर उसके विरुद्ध अवमानना कार्यवाही की चेतावनी दी गई थी?

Ans ☒ A. स्टेट बैंक ऑफ इंडिया

☐ B. HDFC बैंक

☐ C. बैंक ऑफ बड़ौदा

☐ D. ICICI बैंक

Question ID : 630680809968

Option 1 ID : 6306803173416

Option 2 ID : 6306803173418

Option 3 ID : 6306803173415

Option 4 ID : 6306803173417

Status : Answered

Chosen Option : B

Q.12 समय मांग (AD) का सीधा संबंध निम्न से है:

A. उपभोग

B. निवेश

C. सरकारी खर्च

Ans ☐ A. B और C

☐ B. A और C

☒ C. A, B और C

☐ D. A और B

Question ID : 630680144753

Option 1 ID : 630680560056

Option 2 ID : 630680560055

Option 3 ID : 630680560057

Option 4 ID : 630680560054

Status : Answered

Chosen Option : C

Q.13 In which season do wet Westerlies arrive in the Mediterranean type of natural regions?

- Ans ☒ A. Autumn
☒ B. Summer
☒ C. Winter
☒ D. Spring

Question ID : 63068053134

Option 1 ID : 630680204639

Option 2 ID : 630680204638

Option 3 ID : 630680204640

Option 4 ID : 630680204641

Status : Answered

Chosen Option : D

Q.14 राजकोषीय घाटा क्या है?

- Ans ☒ A. सरकार के कुल व्यय और उधार को छोड़कर उसकी कुल प्राप्तियों के बीच का अंतर।
☒ B. सरकार के कुल व्यय और उसकी कुल प्राप्तियों और उधारों का योग।
☒ C. सरकार के कुल व्यय और उधार को छोड़कर उसकी कुल प्राप्तियों का योग।
☒ D. सरकार के कुल व्यय और उधार सहित उसकी कुल प्राप्तियों के बीच का अंतर।

Question ID : 63068056676

Option 1 ID : 630680218638

Option 2 ID : 630680218641

Option 3 ID : 630680218640

Option 4 ID : 630680218639

Status : Answered

Chosen Option : D

Q.15 नवंबर 2022 में भारतीय मूल की कितनी महिलाओं को ऑस्ट्रेलिया की 'सुपरस्टार ऑफ एसटीईएम (Superstars of STEM)' के रूप में चुना गया?

- Ans ☒ A. 1
☒ B. 3
☒ C. 5
☒ D. 2

Question ID : 630680303637

Option 1 ID : 6306801181117

Option 2 ID : 6306801181118

Option 3 ID : 6306801181119

Option 4 ID : 6306801181120

Status : Not Answered

Chosen Option : --

Section : Subject Knowledge

Q.1 National food security mission was started in _____.

- Ans ☒ A. 2014
☒ B. 2016
☒ C. 2019
☒ D. 2007

Question ID : 630680946873
Option 1 ID : 6306803712188
Option 2 ID : 6306803712189
Option 3 ID : 6306803712190
Option 4 ID : 6306803712191
Status : Answered
Chosen Option : D

Q.2 In which year was the power tiller first introduced in INDIA?

- Ans ☒ A. 1973
☒ B. 1960
☒ C. 1963
☒ D. 1975

Question ID : 630680926165
Option 1 ID : 6306803629633
Option 2 ID : 6306803629632
Option 3 ID : 6306803629631
Option 4 ID : 6306803629634
Status : Answered
Chosen Option : C

Q.3 Besides providing nitrogen, Azolla is used for weed control in which of the following?

- Ans ☒ A. Linseed
☒ B. Rice
☒ C. Castor
☒ D. Wheat

Question ID : 630680925724
Option 1 ID : 6306803627874
Option 2 ID : 6306803627872
Option 3 ID : 6306803627873
Option 4 ID : 6306803627871
Status : Answered
Chosen Option : B

Q.4 Which of the following is NOT an element of sustainable agriculture?

- Ans ☒ A. Agroforestry
☒ B. Crop rotation
☒ C. Permanent use of pesticide in farming
☒ D. Permaculture

Question ID : 630680926728
Option 1 ID : 6306803631853
Option 2 ID : 6306803631854
Option 3 ID : 6306803631856
Option 4 ID : 6306803631855
Status : Answered
Chosen Option : C

Q.5 The most devastating famine in India occurred in the which of the following states?

- Ans ☒ A. Bengal
☐ B. Punjab
☐ C. Bihar
☐ D. Uttar Pradesh

Question ID : 630680926784
Option 1 ID : 6306803632075
Option 2 ID : 6306803632073
Option 3 ID : 6306803632076
Option 4 ID : 6306803632074
Status : Answered
Chosen Option : A

Q.6 Which organisation facilitates the export of agricultural and processed food products from India?

- Ans ☒ A. Agricultural and Processed Food Products Export Development Authority (APEDA)
☐ B. Indian Council of Agricultural Research (ICAR)
☐ C. Food Corporation of India (FCI)
☐ D. Ministry of Agriculture

Question ID : 630680926746
Option 1 ID : 6306803631926
Option 2 ID : 6306803631928
Option 3 ID : 6306803631927
Option 4 ID : 6306803631925
Status : Answered
Chosen Option : A

Q.7 When Iron (Fe) contents in plants fall below or equal to _____ ppm, deficiency is likely to occur.

- Ans ☐ A. 40
☐ B. 20
☒ C. 50
☐ D. 100

Question ID : 630680925736
Option 1 ID : 6306803627920
Option 2 ID : 6306803627919
Option 3 ID : 6306803627921
Option 4 ID : 6306803627922
Status : Answered
Chosen Option : B

Q.8 Fern leaf in potato is caused due to the deficiency of which of the following?

- Ans ☒ A. Zinc
☐ B. Nitrogen
☐ C. Iron
☐ D. Manganese

Question ID : 630680925648
Option 1 ID : 6306803627570
Option 2 ID : 6306803627568
Option 3 ID : 6306803627567
Option 4 ID : 6306803627569
Status : Answered
Chosen Option : A

Q.9 FDI up to _____ is permitted under automatic route in specified activities of the agriculture and allied sectors.

- Ans ☒ A. 100
☒ B. 60
☒ C. 80
☒ D. 40

Question ID : 630680948454
Option 1 ID : 6306803718551
Option 2 ID : 6306803718549
Option 3 ID : 6306803718550
Option 4 ID : 6306803718548
Status : Not Attempted and Marked For Review
Chosen Option : --

Q.10 Which of the following is a variety of buckwheat?

- Ans ☒ A. Neelam
☒ B. Tokyo
☒ C. RD101
☒ D. Amber

Question ID : 630680924402
Option 1 ID : 6306803622684
Option 2 ID : 6306803622685
Option 3 ID : 6306803622686
Option 4 ID : 6306803622683
Status : Answered
Chosen Option : C

Q.11 The Janssen formula is used for the determination of which of the following?

- Ans ☒ A. Vertical pressure in shallow bins
☒ B. Density of liquids
☒ C. Lateral pressure in deep bins
☒ D. Lateral pressure in shallow bins

Question ID : 630680926639
Option 1 ID : 6306803631503
Option 2 ID : 6306803631504
Option 3 ID : 6306803631502
Option 4 ID : 6306803631501
Status : Answered
Chosen Option : A

Q.12 According to Whittaker 5 kingdom classification, Monera belongs to which family?

- Ans ☒ A. Multicellular eukaryotes
☒ B. Prokaryotes
☒ C. Unicellular eukaryotes
☒ D. Eukaryotes

Question ID : 630680926150
Option 1 ID : 6306803629574
Option 2 ID : 6306803629573
Option 3 ID : 6306803629571
Option 4 ID : 6306803629572
Status : Answered
Chosen Option : B

Q.13 Which of the following herbicides is known as Goal (trade name)?

- Ans ☒ A. Fluchloralin
☒ B. Oxyfluorfen
☒ C. Paraquat
☒ D. Pendimethalin

Question ID : 630680925717

Option 1 ID : 6306803627844

Option 2 ID : 6306803627845

Option 3 ID : 6306803627846

Option 4 ID : 6306803627843

Status : Answered

Chosen Option : A

Q.14 Which of the following Indian states is the largest producer of the cotton crop?

- Ans ☒ A. Gujarat
☒ B. Uttar Pradesh
☒ C. Madhya Pradesh
☒ D. Maharastra

Question ID : 630680925901

Option 1 ID : 6306803628575

Option 2 ID : 6306803628578

Option 3 ID : 6306803628577

Option 4 ID : 6306803628576

Status : Answered

Chosen Option : A

Q.15 Which of the following fungicides gives effective control of covered smut of barley?

- Ans ☒ A. Agrosan 5W
☒ B. Vitavax
☒ C. Sulphur dust
☒ D. Ceresan

Question ID : 630680925507

Option 1 ID : 6306803627077

Option 2 ID : 6306803627075

Option 3 ID : 6306803627078

Option 4 ID : 6306803627076

Status : Answered

Chosen Option : B

Q.16 According to the WTO's Trade Statistical Review (2022), India's share of global agricultural exports in 2021 was _____.

- Ans ☒ A. 4.4%
☒ B. 2.4%
☒ C. 3.4%
☒ D. 1.4%

Question ID : 630680948462

Option 1 ID : 6306803718591

Option 2 ID : 6306803718589

Option 3 ID : 6306803718590

Option 4 ID : 6306803718588

Status : Answered

Chosen Option : A

Q.17 Mutation due to change in gene is because of _____.

- Ans ☒ A. upgradation
☒ B. loss, degeneration and addition
☒ C. inheritance of acquired traits
☒ D. voluntary change

Question ID : 630680926157
Option 1 ID : 6306803629601
Option 2 ID : 6306803629599
Option 3 ID : 6306803629602
Option 4 ID : 6306803629600
Status : Answered
Chosen Option : B

Q.18 The portion of agricultural produce, which is sold in the market by the farmers, is called:

- Ans ☒ A. Marketed surplus
☒ B. Consumer's surplus
☒ C. Yield surplus
☒ D. Marketable surplus

Question ID : 630680926753
Option 1 ID : 6306803631954
Option 2 ID : 6306803631955
Option 3 ID : 6306803631956
Option 4 ID : 6306803631953
Status : Answered
Chosen Option : D

Q.19 Physical basis of life is _____.

- Ans ☒ A. ribosome
☒ B. protoplasm
☒ C. nucleus
☒ D. cytoplasm

Question ID : 630680946894
Option 1 ID : 6306803712275
Option 2 ID : 6306803712272
Option 3 ID : 6306803712274
Option 4 ID : 6306803712273
Status : Answered
Chosen Option : B

Q.20 _____ is an indication of how the speed of the traction device differs from the forward speed of the tractor.

- Ans ☒ A. Slip
☒ B. Traction
☒ C. Sinkage
☒ D. Traction efficiency

Question ID : 630680948382
Option 1 ID : 6306803718222
Option 2 ID : 6306803718223
Option 3 ID : 6306803718220
Option 4 ID : 6306803718221
Status : Answered
Chosen Option : D

Q.21 The difference between the field capacity and the soil moisture content in the root zone before application of irrigation water is known as _____.

- Ans ☒ A. base period
☒ B. duty of water
☒ C. delta
☒ D. net irrigation requirement

Question ID : 630680942089
Option 1 ID : 6306803692915
Option 2 ID : 6306803692913
Option 3 ID : 6306803692912
Option 4 ID : 6306803692914
Status : Answered
Chosen Option : B

Q.22 The pheromone trap contains a lure, impregnated with synthetic chemicals, which attracts _____.

- Ans ☒ A. male moths
☒ B. caterpillars
☒ C. female bugs
☒ D. female moths

Question ID : 630680925629
Option 1 ID : 6306803627530
Option 2 ID : 6306803627528
Option 3 ID : 6306803627527
Option 4 ID : 6306803627529
Status : Answered
Chosen Option : A

Q.23 Which of the following type of maize is suitable for double top cross hybrid?

- Ans ☒ A. Hi-starch
☒ B. Shaktiman 1 and 2
☒ C. Deccan
☒ D. CoBc 1

Question ID : 630680924374
Option 1 ID : 6306803622580
Option 2 ID : 6306803622581
Option 3 ID : 6306803622582
Option 4 ID : 6306803622579
Status : Answered
Chosen Option : B

Q.24 In case of diminishing rate of substitution, the curve will:

- Ans ☒ A. be at convex to origin
☒ B. be a straight line
☒ C. be at concave to origin
☒ D. pass through origin

Question ID : 630680925488
Option 1 ID : 6306803626999
Option 2 ID : 6306803627000
Option 3 ID : 6306803627001
Option 4 ID : 6306803627002
Status : Answered
Chosen Option : B

Q.25 What is the nitrogen content in anhydrous ammonia?

- Ans ☒ A. 52%
- ☒ B. 82%
- ☒ C. 72%
- ☒ D. 62%

Question ID : 630680925825
Option 1 ID : 6306803628278
Option 2 ID : 6306803628275
Option 3 ID : 6306803628276
Option 4 ID : 6306803628277
Status : Answered
Chosen Option : B

Q.26 Which of the following nutrient(s) is/are immobile in plants?

- Ans ☒ A. Na
- ☒ B. Ca and B
- ☒ C. K
- ☒ D. N

Question ID : 630680925798
Option 1 ID : 6306803628170
Option 2 ID : 6306803628168
Option 3 ID : 6306803628169
Option 4 ID : 6306803628167
Status : Answered
Chosen Option : B

Q.27 What is the main function of the rough endoplasmic reticulum?

- Ans ☒ A. Chlorophyll synthesis
- ☒ B. Protein synthesis
- ☒ C. Fat synthesis
- ☒ D. Disease resistance

Question ID : 630680926139
Option 1 ID : 6306803629530
Option 2 ID : 6306803629528
Option 3 ID : 6306803629527
Option 4 ID : 6306803629529
Status : Answered
Chosen Option : B

Q.28 Which of the following farming types is mainly practised in India?

- Ans ☒ A. Joint farming
- ☒ B. Peasant farming
- ☒ C. State farming
- ☒ D. Capitalistic farming

Question ID : 630680926708
Option 1 ID : 6306803631776
Option 2 ID : 6306803631773
Option 3 ID : 6306803631775
Option 4 ID : 6306803631774
Status : Answered
Chosen Option : D

Q.29 _____ as brand name for Indian cotton was launched on 7 October 2020.

- Ans ☐ A. Ahalya Cotton India
☐ B. Jyothi Cotton India
☐ C. Karthika Cotton India
☒ D. Kasturi Cotton India

Question ID : 630680948283
Option 1 ID : 6306803717831
Option 2 ID : 6306803717828
Option 3 ID : 6306803717829
Option 4 ID : 6306803717830
Status : Answered
Chosen Option : D

Q.30 The prevention of food adulteration Act was passed in which of the following years?

- Ans ☐ A. 1945
☐ B. 1964
☒ C. 1954
☐ D. 1944

Question ID : 630680926782
Option 1 ID : 6306803632065
Option 2 ID : 6306803632066
Option 3 ID : 6306803632067
Option 4 ID : 6306803632068
Status : Not Attempted and Marked For Review
Chosen Option : --

Q.31 Anthropometry deals with _____.

- Ans ☒ A. body dimensions of workers and their strength
☐ B. body dimensions of agricultural tools and their strength
☐ C. body dimensions of machine and its strength
☐ D. body dimensions of tool used by humans and their strength

Question ID : 630680948395
Option 1 ID : 6306803718281
Option 2 ID : 6306803718283
Option 3 ID : 6306803718282
Option 4 ID : 6306803718280
Status : Answered
Chosen Option : A

Q.32 Which is the biggest institution in relation to Agricultural Finance and Refinance?

- Ans ☐ A. Land Development Bank
☐ B. Regional Rural Bank
☒ C. NABARD
☐ D. Central Cooperative Bank

Question ID : 630680926743
Option 1 ID : 6306803631916
Option 2 ID : 6306803631913
Option 3 ID : 6306803631914
Option 4 ID : 6306803631915
Status : Answered
Chosen Option : C

Q.33 Photovoltaic solar cell is usually made up of which of the following?

- Ans ☒ A. Carbon
☒ B. Silicon
☒ C. Aluminium
☒ D. Gun metal

Question ID : 630680926605
Option 1 ID : 6306803631374
Option 2 ID : 6306803631375
Option 3 ID : 6306803631376
Option 4 ID : 6306803631373
Status : Answered
Chosen Option : A

Q.34 The heat liberated by the combustion of fuel is known as:

- Ans ☒ A. calorific value
☒ B. cetane number
☒ C. octane number
☒ D. thermal efficiency

Question ID : 630680926166
Option 1 ID : 6306803629636
Option 2 ID : 6306803629637
Option 3 ID : 6306803629635
Option 4 ID : 6306803629638
Status : Answered
Chosen Option : D

Q.35 Which of the following is called paddy leaf miner?

- Ans ☒ A. *Sesamia inferens*
☒ B. *Hispa armigera*
☒ C. *Spodoptera mauritia*
☒ D. *Pachytiplosis oryzae*

Question ID : 630680946831
Option 1 ID : 6306803712023
Option 2 ID : 6306803712020
Option 3 ID : 6306803712021
Option 4 ID : 6306803712022
Status : Answered
Chosen Option : B

Q.36 What is the ginning percentage in cotton?

- Ans ☒ A. 47%
☒ B. 33%
☒ C. 13%
☒ D. 53%

Question ID : 630680925904
Option 1 ID : 6306803628589
Option 2 ID : 6306803628587
Option 3 ID : 6306803628588
Option 4 ID : 6306803628590
Status : Answered
Chosen Option : B

Q.37 According to the State of Food Security and Nutrition in the World report, 2023, how many people experienced severe food insecurity?

- Ans ☒ A. 200 billion
☒ B. 2.4 billion
☒ C. 900 million
☒ D. 1.8 billion

Question ID : 630680948447
Option 1 ID : 6306803718514
Option 2 ID : 6306803718512
Option 3 ID : 6306803718513
Option 4 ID : 6306803718515
Status : Answered
Chosen Option : D

Q.38 Blast of rice caused by:

- Ans ☒ A. Pythium
☒ B. Cercospora
☒ C. Xanthomonas
☒ D. Pyricularia

Question ID : 630680946820
Option 1 ID : 6306803711983
Option 2 ID : 6306803711982
Option 3 ID : 6306803711980
Option 4 ID : 6306803711981
Status : Answered
Chosen Option : D

Q.39 _____ is the first commercial hybrid of sunflower.

- Ans ☒ A. KBSH 1
☒ B. MSHF 1
☒ C. APSH 11
☒ D. BSH 1

Question ID : 630680947068
Option 1 ID : 6306803712974
Option 2 ID : 6306803712975
Option 3 ID : 6306803712972
Option 4 ID : 6306803712973
Status : Answered
Chosen Option : D

Q.40 Sessamum phyllody disease spreads through _____.

- Ans ☒ A. Nephrotettix impicticeps
☒ B. Orossius albicinctus
☒ C. Nephrotettix nigropictus
☒ D. Jassus indicus

Question ID : 630680946816
Option 1 ID : 6306803711966
Option 2 ID : 6306803711964
Option 3 ID : 6306803711967
Option 4 ID : 6306803711965
Status : Answered
Chosen Option : A

Q.41 The power developed by an average pair of bullocks for doing usual farm work is:

- Ans** ☒ A. 1 hp
☐ B. 0.1 hp
☐ C. 15 hp
☐ D. 10 hp

Question ID : 630680926164
Option 1 ID : 6306803629629
Option 2 ID : 6306803629627
Option 3 ID : 6306803629630
Option 4 ID : 6306803629628
Status : Answered
Chosen Option : A

Q.42 Which of the following types of cotton covers the largest area in India?

- Ans** ☐ A. Brazilian cotton
☐ B. Indian cotton
☒ C. American cotton
☐ D. Chinese cotton

Question ID : 630680925914
Option 1 ID : 6306803628629
Option 2 ID : 6306803628628
Option 3 ID : 6306803628627
Option 4 ID : 6306803628630
Status : Answered
Chosen Option : C

Q.43 Which farm management system focuses on maximising output per unit of land?

- Ans** ☐ A. Primitive subsistence farming
☐ B. Extensive subsistence farming
☒ C. Commercial farming
☐ D. Intensive subsistence farming

Question ID : 630680926801
Option 1 ID : 6306803632143
Option 2 ID : 6306803632141
Option 3 ID : 6306803632142
Option 4 ID : 6306803632144
Status : Answered
Chosen Option : D

Q.44 Which of the following bacteria is NOT responsible for nitrogen fixation?

- Ans** ☒ A. E.Coli
☐ B. Rhizobium
☐ C. Azotobacter
☐ D. Azospirillum

Question ID : 630680926817
Option 1 ID : 6306803632205
Option 2 ID : 6306803632206
Option 3 ID : 6306803632207
Option 4 ID : 6306803632208
Status : Answered
Chosen Option : A

Q.45 What is the seed rate of buckwheat for 1 hectare?

- Ans ☒ A. 60-80 kg
☒ B. 10-20 kg
☒ C. 40-60 kg
☒ D. 75-95 kg

Question ID : 630680924407

Option 1 ID : 6306803622705

Option 2 ID : 6306803622704

Option 3 ID : 6306803622703

Option 4 ID : 6306803622706

Status : Answered

Chosen Option : C

Q.46 The Government of India decided to introduce 100% neem coating on all subsidised agricultural grade urea in _____.

- Ans ☒ A. 2015
☒ B. 2016
☒ C. 2014
☒ D. 2017

Question ID : 630680948597

Option 1 ID : 6306803719161

Option 2 ID : 6306803719162

Option 3 ID : 6306803719160

Option 4 ID : 6306803719163

Status : Not Answered

Chosen Option : --

Q.47 Which of the following statements is true with respect to *Ammannia baccifera*?

- i. It is classified as a wetland weed.
ii. It is classified as a dryland weed.
iii. It is adapted to withstand drought on account of mucilaginous nature of the stem.
iv. It is adapted to withstand drought on account hairy nature of the stem.

- Ans ☒ A. ii
☒ B. iv
☒ C. iii
☒ D. i

Question ID : 630680948249

Option 1 ID : 6306803717685

Option 2 ID : 6306803717687

Option 3 ID : 6306803717686

Option 4 ID : 6306803717684

Status : Not Answered

Chosen Option : --

Q.48 Under which of the following types of weed control methods is Chaining classified?

- Ans ☒ A. Chemical
☒ B. Physical
☒ C. Biological
☒ D. Cultural

Question ID : 630680925681
Option 1 ID : 6306803627701
Option 2 ID : 6306803627702
Option 3 ID : 6306803627700
Option 4 ID : 6306803627699
Status : Answered
Chosen Option : D

Q.49 One bale of cotton is equal to:

- Ans ☒ A. 180 kg
☒ B. 160 kg
☒ C. 170 kg
☒ D. 190 kg

Question ID : 630680925906
Option 1 ID : 6306803628597
Option 2 ID : 6306803628595
Option 3 ID : 6306803628596
Option 4 ID : 6306803628598
Status : Answered
Chosen Option : A

Q.50 Which of the following cell organelles act(s) as the site of the Krebs cycle?

- Ans ☒ A. Cell membrane
☒ B. Rough endoplasmic reticulum
☒ C. Lysosome
☒ D. Mitochondria

Question ID : 630680926132
Option 1 ID : 6306803629502
Option 2 ID : 6306803629501
Option 3 ID : 6306803629500
Option 4 ID : 6306803629499
Status : Answered
Chosen Option : D

Q.51 What are crops grown specifically to suppress the growth of weeds known as?

- Ans ☒ A. Skip crop
☒ B. Paired crop
☒ C. Smother crops
☒ D. Soiling crop

Question ID : 630680926716
Option 1 ID : 6306803631806
Option 2 ID : 6306803631805
Option 3 ID : 6306803631808
Option 4 ID : 6306803631807
Status : Answered
Chosen Option : C

Q.52 Tea yellow disease is caused in tea plants due to the deficiency of which of the following components?

- Ans ☒ A. Mo
☒ B. Mg
☒ C. N
☒ D. S

Question ID : 630680925778
Option 1 ID : 6306803628089
Option 2 ID : 6306803628090
Option 3 ID : 6306803628087
Option 4 ID : 6306803628088
Status : Answered
Chosen Option : C

Q.53 Which of the following agents can effectively control both fungal and bacterial diseases in plants?

- Ans ☒ A. Tetracycline
☒ B. Mancozeb
☒ C. Agrimycin
☒ D. Copper oxychloride

Question ID : 630680926148
Option 1 ID : 6306803629565
Option 2 ID : 6306803629563
Option 3 ID : 6306803629566
Option 4 ID : 6306803629564
Status : Answered
Chosen Option : A

Q.54 Which of the following pesticides is suitable for controlling white grub?

- Ans ☒ A. Aldicarb
☒ B. Malathion
☒ C. Deltamethrin
☒ D. Phorate

Question ID : 630680925538
Option 1 ID : 6306803627210
Option 2 ID : 6306803627207
Option 3 ID : 6306803627208
Option 4 ID : 6306803627209
Status : Answered
Chosen Option : B

Q.55 Who is known as the father of bacteriological technique?

- Ans ☒ A. Gram
☒ B. Pasteur
☒ C. Buchner
☒ D. Koch

Question ID : 630680926143
Option 1 ID : 6306803629545
Option 2 ID : 6306803629543
Option 3 ID : 6306803629546
Option 4 ID : 6306803629544
Status : Answered
Chosen Option : C

Q.56 Ribosomes, the macromolecular structures composed of rRNA and polypeptide chains, are synthesised by the:

- Ans** ☒ A. nucleolus
☒ B. nucleus
☒ C. cell wall
☒ D. cytoplasm

Question ID : **630680926128**
Option 1 ID : **6306803629484**
Option 2 ID : **6306803629483**
Option 3 ID : **6306803629486**
Option 4 ID : **6306803629485**
Status : **Answered**
Chosen Option : **B**

Q.57 Which of the following plants is long day plant?

- Ans** ☒ A. Chrysanthemum
☒ B. Soybean
☒ C. Rice
☒ D. Spinach

Question ID : **630680895453**
Option 1 ID : **6306803507924**
Option 2 ID : **6306803507923**
Option 3 ID : **6306803507922**
Option 4 ID : **6306803507921**
Status : **Answered**
Chosen Option : **C**

Q.58 When the volume of spray is greater than 400 litre per hectare, it is called as which type of spray?

- Ans** ☒ A. Ultra low volume spray
☒ B. High volume spray
☒ C. Low volume spray
☒ D. Medium volume spray

Question ID : **630680926167**
Option 1 ID : **6306803629640**
Option 2 ID : **6306803629641**
Option 3 ID : **6306803629639**
Option 4 ID : **6306803629642**
Status : **Answered**
Chosen Option : **B**

Q.59 The number of piston rings on piston varies between ____.

- Ans** ☒ A. 7-12
☒ B. 12-15
☒ C. 1-3
☒ D. 3-7

Question ID : **630680946885**
Option 1 ID : **6306803712238**
Option 2 ID : **6306803712239**
Option 3 ID : **6306803712236**
Option 4 ID : **6306803712237**
Status : **Answered**
Chosen Option : **C**

Q.60 *Claviceps fusiformis* causes _____ in pearl millet.

Ans  **A. Ergot**

 **B. Smut**

 **C. Blast**

 **D. Banded leafspot**

Question ID : **630680947083**

Option 1 ID : **6306803713033**

Option 2 ID : **6306803713035**

Option 3 ID : **6306803713034**

Option 4 ID : **6306803713032**

Status : **Answered**

Chosen Option : **A**