

Selection Post Examination Phase XII 2024

Exam Date	25/06/2024
Exam Time	2:30 PM - 3:30 PM
Subject	Selection Post Graduate level

Section : General Intelligence

Q.1 Select the option that is related to the third word in the same way as the second word is related to the first word.
(The words must be considered as meaningful English words and must not be related to each other based on the number of letters/number of consonants/vowels in the word.)
Cow : Calf :: Pig : ?

- Ans
- ☒ 1. Kitten
 - ☒ 2. Piglet
 - ☒ 3. Puppy
 - ☒ 4. Foal

Q.2 100 is related to 18 following a certain logic. Following the same logic, 90 is related to 16. Which of the following is related to 12 using the same logic?

- Ans
- ☒ 1. 70
 - ☒ 2. 65
 - ☒ 3. 80
 - ☒ 4. 60

Q.3 In a certain code language, 'TAIL' is coded as '7614' and 'TALE' is coded as '1749'. What is the code for 'I' in the given language?

- Ans
- ☒ 1. 6
 - ☒ 2. 9
 - ☒ 3. 1
 - ☒ 4. 7

Q.4 Select the option that represents the correct order of the given words as they would appear in an English dictionary.
1. Decision
2. Deference
3. Decorative
4. Decide
5. Defeat

- Ans
- ☒ 1. 3, 1, 2, 5, 2
 - ☒ 2. 3, 2, 1, 5, 4
 - ☒ 3. 4, 1, 3, 5, 2
 - ☒ 4. 4, 1, 2, 5, 3

Q.5 Select the combination of letters that when sequentially placed in the blanks of the given series will complete the series.
CO__G_C__E_E_OL__GE

- Ans
- ☒ 1. LLEEOLLGCLE
 - ☒ 2. CGLEOCOLGEL
 - ☒ 3. LGLEOCOGLGE
 - ☒ 4. COGLECELGEC

Test Prime

**ALL EXAMS,
ONE SUBSCRIPTION**



70,000+
Mock Tests



**Personalised
Report Card**



**Unlimited
Re-Attempt**



600+
Exam Covered



**Previous Year
Papers**



**500%
Refund**



ATTEMPT FREE MOCK NOW

Q6 Select the correct mirror image of the given figure when the mirror is placed at MN as shown.

LION

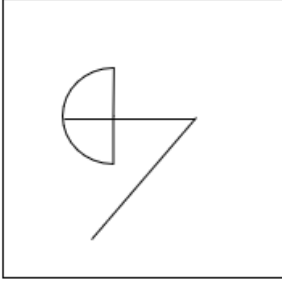
M

N

Ans

- ✓ 1. LION
- ✗ 2. NOIL
- ✗ 3. 7ION
- ✗ 4. 7ION

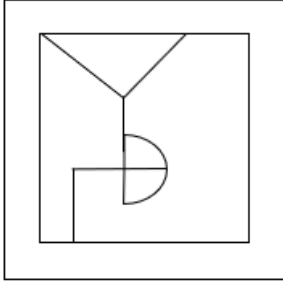
Q.7 Select the option figure in which the given figure is embedded as its part (rotation is NOT allowed).



Ans

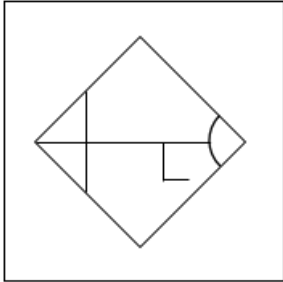
1.

✗



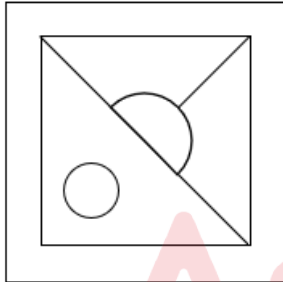
2.

✗



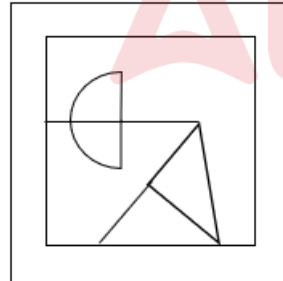
3.

✗



4.

✓



Q.8 Select the number from among the given options that can replace the question mark (?) in the following series.
4, 27, 16, 125, ?, 343

- Ans
- ✓ 1. 36
 - ✗ 2. 512
 - ✗ 3. 64
 - ✗ 4. 216

Q.9 In a code language, 'DANCER' is coded as 'REPEAD' and 'QUEAZY' is coded as 'YZGCUQ'. How will 'SQUAWK' be coded in the same language?

- Ans
- ✗ 1. KWAUQS
 - ✗ 2. KMWCQS
 - ✓ 3. KWWCQS
 - ✗ 4. KWBUQS

Q.10 In a code language, 'FAMOUS' is coded as 'UZNLFH' and 'SLOW' is coded as 'HOLD'. How will 'RUMOUR' be coded in the same language?

- Ans
- ✗ 1. IGNLGI
 - ✓ 2. IFNLFI
 - ✗ 3. JFNLFJ
 - ✗ 4. JGNLGI

Q.11 In this question, three statements are given, followed by three conclusions numbered I, II and III. Assuming the statements to be true, even if they seem to be at variance with commonly known facts, decide which of the conclusions logically follow(s) from the statements.

Statements:

Some rings are gold.

All gold is hot.

Some hot are red.

Conclusions:

I. Some gold are rings.

II. Some hot are gold.

III. Some red are hot.

- Ans
- ✗ 1. Only conclusion III follows.
 - ✗ 2. Only conclusion I follows.
 - ✓ 3. All the conclusions follow.
 - ✗ 4. Only conclusion II follows.

Q.12 In a certain code language, JUMP is coded as "HRIK" and WOLF is coded as "ULHA". How will FOWL be coded in that language?

- Ans
- ✓ 1. DLSG
 - ✗ 2. HLSG
 - ✗ 3. ALSG
 - ✗ 4. FLSG

Q.13 In a certain code language, 'QKV' is coded as '14819' and 'SHY' is coded as '16522'. How will 'MDS' be coded in that language?

- Ans
- ✓ 1. 10116
 - ✗ 2. 13127
 - ✗ 3. 12125
 - ✗ 4. 9127

Q.14 Select the option that indicates the correct arrangement of the given words in a logical and meaningful order.

1. Flower
2. Bees
3. Seed
4. Nectar
5. Honey

Ans ☒ 1. 1, 4, 2, 5, 3
☒ 2. 3, 1, 4, 2, 5
☒ 3. 1, 3, 2, 4, 5
☒ 4. 3, 1, 2, 4, 5

Q.15 Three statements are given, followed by Three conclusions numbered I, II and III. Assuming the statements to be true, even if they seem to be at variance with commonly known facts, decide which of the conclusions logically follow(s) from the statements.

Statements:

- All calculators are dustbins.
- All complexes are dustbins.
- Some adamants are cameras.

Conclusions:

- I. Some calculators are complexes.
- II. Some dustbins are calculators.
- III. Some dustbins are adamants.

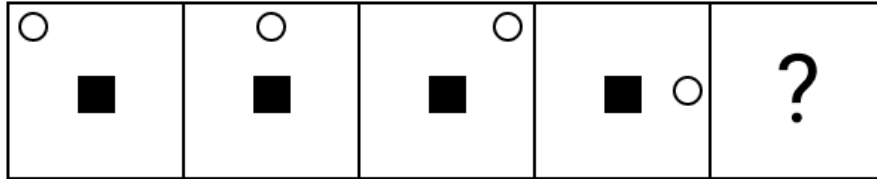
Ans ☒ 1. Both conclusions I and II follow
☒ 2. Only conclusion III follows
☒ 3. Only conclusion II follows
☒ 4. Both conclusions II and III follow

Q.16 Select the option that is related to the fifth letter-cluster in the same way as the second letter-cluster is related to the first letter-cluster and the fourth letter-cluster is related to the third letter-cluster.

GAINED : NEDGAI :: KINDLY : DLYKIN :: JUNIOR : ?

Ans ☒ 1. ROINUJ
☒ 2. IORJUN
☒ 3. JOINUR
☒ 4. JRUNIO

Q.17 Identify the figure which when put in place of the question mark (?) will logically complete the series.



Ans

1. ☐
2. ☐
3. ☐
4. ☒

Q.18 Select the combination of letters that when sequentially placed in the blanks of the given series will complete the series.

L _ _ L _ M _ L _ _ M _

- Ans
1. MMLMLML ☒
 2. MLMMLLL ☐
 3. LMLMLMM ☐
 4. LLMMLMM ☐

Q.19 In a certain code language, 'we live here' is coded as 'pa tu nk' and 'here was tree' is coded as 'rp nk fu'. How is 'here' coded in the given language?

- Ans
1. nk ☒
 2. fu ☐
 3. pa ☐
 4. rp ☐

Q.20 Select the option that is related to the fifth letter-cluster in the same way as the second letter-cluster is related to the first letter-cluster and the fourth letter-cluster is related to the third letter-cluster.

MEN : NVM :: OUT : LFG :: JOB : ?

- Ans
1. RKX ☐
 2. QLY ☒
 3. QKW ☐
 4. RJY ☐

Q21 Select the option that is related to the fifth letter-cluster in the same way as the second letter-cluster is related to the first letter-cluster and the fourth letter-cluster is related to the third letter-cluster.

MAKE : NCJC :: FOLD : GQKB :: VIEW : ?

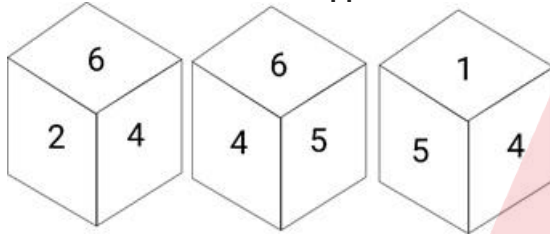
- Ans
- ✓ 1. WKDU
 - ✗ 2. XKDV
 - ✗ 3. WKEV
 - ✗ 4. WJEV

Q22 What will come in place of the question mark (?) in the following equation, if '+' and '-' are interchanged and 'x' and '÷' are interchanged?

$16 \div 6 + 12 \times 3 - 6 = ?$

- Ans
- ✗ 1. 96
 - ✗ 2. 94
 - ✗ 3. 92
 - ✓ 4. 98

Q23 Six numbers 1, 2, 3, 4, 5 and 6 are written on different faces of a dice. Three different positions of the same dice are shown. Select the number on the face opposite to the one having 1.



- Ans
- ✗ 1. 4
 - ✗ 2. 3
 - ✓ 3. 6
 - ✗ 4. 5

Q24 In a certain code language,

'A + B' means 'A is the mother of B',

'A - B' means 'A is the brother of B',

'A × B' means 'A is the wife of B',

'A ÷ B' means 'A is the father of B'.

Based on the above information, how is S related to U if 'P + Q ÷ R × S - T ÷ U'?

- Ans
- ✗ 1. Father's mother
 - ✓ 2. Father's brother
 - ✗ 3. Father's father
 - ✗ 4. Father's sister

Q25 Ayush told Neha, "Though I am the son of your father, but you are not my brother". How is Neha related to Ayush?

- Ans
- ✗ 1. Step-daughter
 - ✗ 2. Cousin
 - ✓ 3. Sister
 - ✗ 4. Daughter

Section : General Awareness

Q.1 Koderma Gaya Hazaribagh belt is known for the production of which of the following minerals?

- Ans
- ☒ 1. Copper
 - ☒ 2. Mica
 - ☒ 3. Coal
 - ☒ 4. Bauxite

Q.2 With which sport is the Burdwan Trophy associated?

- Ans
- ☒ 1. Boxing
 - ☒ 2. Weightlifting
 - ☒ 3. Powerlifting
 - ☒ 4. Wrestling

Q.3 Who was appointed as the chairman of the National Commission for Backward classes in December 2022?

- Ans
- ☒ 1. Hansraj Gangaram Ahir
 - ☒ 2. Arun Haldar
 - ☒ 3. Vijay Sampla
 - ☒ 4. Dr. Manoj Soni

Q.4 _____ is a mode of communication in itself, and it also regulates the use of other means of communication.

- Ans
- ☒ 1. Satellite
 - ☒ 2. Phone
 - ☒ 3. Television
 - ☒ 4. Radio

Q.5 Kathasaritasagara, a collection of stories, was written in which of the following languages?

- Ans
- ☒ 1. Sanskrit
 - ☒ 2. Prakrit
 - ☒ 3. Persian
 - ☒ 4. Pali

Q.6 Which Article of the Indian Constitution mentions that 'All doubts and disputes arising out of or in connection with the election of a President or Vice-President shall be inquired into and decided by the Supreme Court, whose decision shall be final'?

- Ans
- ☒ 1. Article 71
 - ☒ 2. Article 69
 - ☒ 3. Article 68
 - ☒ 4. Article 70

Q.7 Which Article of the Indian Constitution mentions that 'The President shall, notwithstanding the expiration of his/her term, continue to hold office until his successor enters upon his/her office'?

- Ans
- ☒ 1. Article 61
 - ☒ 2. Article 50
 - ☒ 3. Article 56
 - ☒ 4. Article 58

Q.8 Who among the following revolutionaries was one of the co-founders of the Hindustan Socialist Republican Association (HSRA) which got established in 1928 at Ferozeshah Kotla in Delhi?

- Ans
- ☐ 1. Gopal Krishna Gokhale
 - ☐ 2. Aurobindo Ghosh
 - ☒ 3. Bhagat Singh
 - ☐ 4. Mahatma Gandhi

Q.9 The novel 'Raavan - Enemy of Aryavarta' is written by whom among the following writers?

- Ans
- ☒ 1. Amish Tripathi
 - ☐ 2. Amitav Ghosh
 - ☐ 3. Ruskin Bond
 - ☐ 4. Kiran Desai

Q.10 Read the given statements and select the correct option.
A.Directive Principles of State Policy consists of all the ideals which the state should follow and keep in mind while formulating policies and enacting laws for the country.
B.It can be enforced by the Judiciary.
C.They can be suspended during a national emergency.

- Ans
- ☐ 1. Only C
 - ☐ 2. Only B
 - ☒ 3. Only A
 - ☐ 4. Both A and C

Q.11 What is the growth rate of population of India as per census 2011?

- Ans
- ☒ 1. 0.1764
 - ☐ 2. 0.2154
 - ☐ 3. 0.2164
 - ☐ 4. 0.1894

Q.12 Which of the following is NOT an option related to the non-cooperation movement launched by Mahatma Gandhi?

- Ans
- ☐ 1. Picketing of liquor shops
 - ☐ 2. Distribution of Charkhas
 - ☒ 3. Signing the resolution at Lahore for Poorna Swaraj
 - ☐ 4. Boycott of foreign goods

Q.13 Rani Karnaa was awarded the Sangeet Natak Akademi (1996) for her contribution to_.

- Ans
- ☐ 1. Kathakali
 - ☒ 2. Kathak
 - ☐ 3. Kuchipudi
 - ☐ 4. Odissi

Q.14 Who is credited with inventing the reflecting telescope?

- Ans
- ☒ 1. Isaac Newton
 - ☐ 2. Galileo Galilei
 - ☐ 3. Johannes Kepler
 - ☐ 4. Christiaan Huygens

Q.15 In 2023, Government of India has proposed to set up 'Central Processing Centre' for faster response to organisations through centralised handling of various forms filed with field offices under the _____.

- Ans
- ☐ 1. Sale of Goods Act
 - ☐ 2. Contract Act
 - ☒ 3. Companies Act
 - ☐ 4. Partnership Act

Q.16 Which was the prominent architectural feature of the Indus Valley towns and cities?

- Ans
- ☐ 1. Stupas
 - ☐ 2. Pyramids
 - ☐ 3. False Arch
 - ☒ 4. Citadel

Q.17 Select the correct statement.

- Ans
- ☒ 1. The pyramid of energy is always upright.
 - ☐ 2. The pyramid of mass is always upright.
 - ☐ 3. The pyramid of number is always upright.
 - ☐ 4. The pyramid of biomass is always inverted.

Q.18 The Beating Retreat Ceremony during Republic Day is held every year at which of the following places?

- Ans
- ☒ 1. New Delhi
 - ☐ 2. Bengaluru
 - ☐ 3. Hyderabad
 - ☐ 4. Jaipur

Q.19 The Vienna Convention is related to _____.

- Ans
- ☐ 1. Disposing of harmful electronic waste
 - ☐ 2. sustainable agriculture
 - ☒ 3. protection of ozone layer
 - ☐ 4. protection of wild life

Q.20 Select the INCORRECT combination of folk dance and its respective state.

- Ans
- ☐ 1. Dollu Kunitha - Karnataka
 - ☐ 2. Dandiya Raas- Gujarat
 - ☐ 3. Dhangari Gaja - Maharashtra
 - ☒ 4. Paika – Kerala

Q.21 Which of the following Indo-Greek kings was mentioned in the Buddhist text Milindapanho as Milinda?

- Ans
- ☐ 1. Antiochus II
 - ☒ 2. Menander I
 - ☐ 3. Demetrius I
 - ☐ 4. Strato II

Q.22 Consider the following statements and select the correct option:
i. Marginal Worker is a person who works for less than 183 days (or six months) in a year.
ii. Main Worker is a person who works for atleast 300 days (or ten months) in a year.

- Ans ☒ 1. Only i is correct.
☒ 2. Only ii is correct.
☒ 3. Both i and ii are incorrect.
☒ 4. Both i and ii are correct.

Q.23 Which of the following was discovered by GN Ramachandran?

- Ans ☒ 1. Golgi bodies
☒ 2. Triple helical structure of collagen
☒ 3. Fluid mosaic model of a cell
☒ 4. Plasma membrane

Q.24 Identify the Indian musician who is associated with any string instrument.

- Ans ☒ 1. Krishna Ram Chaudhary
☒ 2. Anindo Chatterjee
☒ 3. Pandit Ravi Shankar
☒ 4. Zakir Hussain

Q.25 On 11 May 2023, the Uttarakhand Chief Minister launched the 'Smart School Smart Block Programme' in the Goralchod auditorium in the state's _____ district.

- Ans ☒ 1. Dehradun
☒ 2. Champawat
☒ 3. Almora
☒ 4. Bageshwar

Section : Quantitative Aptitude

Q.1 $\triangle PQR$ and $\triangle ABC$ are two congruent triangles. If the area of $\triangle PQR$ is 225 cm^2 , then the area of $\triangle ABC$ is:

- Ans ☒ 1. 15 cm^2
☒ 2. 225 cm^2
☒ 3. 112.5 cm^2
☒ 4. 25 cm^2

Q.2 Simplify the expression:
 $15 \times 15 \times 15 + 3 \times 15 \times 12 \times 12 - 3 \times 15 \times 15 \times 12 - 12 \times 12 \times 12$

- Ans ☒ 1. 36
☒ 2. 18
☒ 3. 27
☒ 4. 9

Q.3 Suresh invested a certain sum of money at 5% per annum simple interest. If he receives an interest of ₹69687 after 15 year, the sum (in ₹) he invested is:

- Ans ☒ 1. 92880
☒ 2. 92456
☒ 3. 92916
☒ 4. 92530

Q.4 The strength of a school increases and decreases every alternate year by 20%. It started with an increase in 2018. What is the strength of the school at the start of 2021 as compared to that of 2018?

- Ans
- ☐ 1. Increase by 16.2%
 - ☒ 2. Increase by 15.2%
 - ☐ 3. Decrease by 16.2%
 - ☐ 4. Decrease by 15.2%

Q.5 If $x + y = 18$ and $xy = 9$, then the value of $\left(\frac{x}{y} + \frac{y}{x}\right)$ will be:

- Ans
- ☒ 1. 34
 - ☐ 2. 32
 - ☐ 3. 36
 - ☐ 4. 38

Q.6 A vendor buys 20 laptop bags for ₹13,000 and sells them at 15 for ₹10,125. How many laptop bags should be bought and sold to earn a profit of ₹3,225?

- Ans
- ☐ 1. 120
 - ☒ 2. 129
 - ☐ 3. 123
 - ☐ 4. 127

Q.7 A policeman notices a thief from a distance of 300 m. The thief starts running and the policeman chases him. The thief and the policeman run at the speeds of 10 km/h and 12 km/h, respectively. What will be the distance between them (in m) after 6 minutes?

- Ans
- ☐ 1. 80
 - ☐ 2. 200
 - ☐ 3. 150
 - ☒ 4. 100

Q.8 The sides of a right-angled triangle, right-angled at B, are 6, 8 and 10 units. C is the vertex opposite to the side with length 8 units. What is the value of $\tan^2 A + \cos^2 C$?

- Ans
- ☐ 1. $\frac{325}{400}$
 - ☐ 2. $\frac{125}{400}$
 - ☐ 3. $\frac{321}{400}$
 - ☒ 4. $\frac{369}{400}$

Q.9 If $\mu = 60^\circ$, then $\sin \mu + \cos(90 - \mu) =$ _____.

- Ans
- ☐ 1. $\frac{\sqrt{3}}{2}$
 - ☒ 2. $\sqrt{3}$
 - ☐ 3. $2\sqrt{3}$
 - ☐ 4. $\frac{1}{2}$

Q.10 The third proportional to $(5^2 - 3^2)$ and $(5 - 3)$ is:

- Ans
- ✓ 1. $\frac{1}{4}$
 - ✗ 2. $\frac{1}{2}$
 - ✗ 3. $\frac{1}{8}$
 - ✗ 4. $\frac{1}{3}$

Q.11 The average weight of Rohan and his three friends is 62 kg. If Rohan's weight is 8 kg more than the average weight of his three friends, what is Rohan's weight (in kg)?

- Ans
- ✓ 1. 68
 - ✗ 2. 60
 - ✗ 3. 65
 - ✗ 4. 72

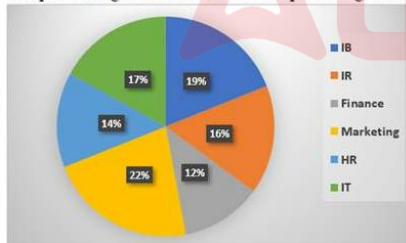
Q.12 The fourth proportional of 64, 80 and 88 is:

- Ans
- ✗ 1. 100
 - ✗ 2. 90
 - ✗ 3. 120
 - ✓ 4. 110

Q.13 An old HP Deskjet printer was bought for ₹4,800 and ₹500 was spent on its repair. If it was sold for ₹6,360, then its profit percentage is:

- Ans
- ✗ 1. 0.12
 - ✗ 2. 0.15
 - ✗ 3. 0.18
 - ✓ 4. 0.2

Q.14 The pie chart given below shows the percentage of 8000 students in terms of the subject of specialisation in MBA.



What is the total number of students specialising in IB?

- Ans
- ✗ 1. 1450
 - ✗ 2. 1625
 - ✓ 3. 1520
 - ✗ 4. 1850

Q.15 If three angles of a triangle are $(18x+6^\circ)$, $(10x+30^\circ)$ and $(15x+15^\circ)$, then the triangle is:

- Ans
- ✗ 1. right angled
 - ✗ 2. scalene
 - ✗ 3. isosceles
 - ✓ 4. equilateral

Q.16 From the following table, find is the average weight (in kg) of the given persons?

Name	Aman	Sudha	Vishal	Sumedha	Sahil	Usha
Weight (kg)	52.7	54	55.2	57.4	58.7	58

- Ans
- ✓ 1. 56.0
 - ✗ 2. 56.33
 - ✗ 3. 55.5
 - ✗ 4. 54.33

Q.17 Nazeer spends 20% of his monthly income on housing, 25% of the remaining on education, and saves 10% of the remaining. If his monthly salary is ₹52,600, how much money does he save every month?

- Ans
- ✓ 1. ₹3,156
 - ✗ 2. ₹2,367
 - ✗ 3. ₹5,260
 - ✗ 4. ₹1,578

Q.18 The number 7918378 is divisible by:

- Ans
- ✗ 1. 4
 - ✗ 2. 11
 - ✗ 3. 9
 - ✓ 4. 13

Q.19 A and B can do a piece of work in 10 days. B and C can do the same work in 12 days. C and A can do the same work in 15 days. If all the three work together, find the number of days required to complete the work.

- Ans
- ✗ 1. 12
 - ✗ 2. 6
 - ✗ 3. 10
 - ✓ 4. 8

Q.20 What least number must be subtracted from 2001 to get a number exactly divisible by 17?

- Ans
- ✗ 1. 11
 - ✓ 2. 12
 - ✗ 3. 13
 - ✗ 4. 14

Q.21 Who among the following scored the maximum overall percentage?

Name	Marks (out of 100)				
	English	Hindi	Maths	Science	IT
Simran	78	65	89	78	66
Sanjana	87	70	95	84	84
Payal	93	73	65	77	85
Bhumika	74	84	88	87	79
Neha	82	87	84	85	89
Jyoti	69	90	93	88	92

- Ans
- ✗ 1. Sanjana
 - ✗ 2. Simran
 - ✓ 3. Jyoti
 - ✗ 4. Bhumika

Q.22 The average monthly income of A and B is ₹5,050, the average monthly income of B and C is ₹6,250, and the average monthly income of A and C is ₹5,200. What is the sum of the monthly incomes (in ₹) of A, B and C?

- Ans
- ✓ 1. 16500
 - ✗ 2. 18000
 - ✗ 3. 11000
 - ✗ 4. 19500

Q.23 If $p = 106$, $q = 105$ and $r = 104$, then value of $p^2 + q^2 + r^2 - pq - qr - rp$ is:

- Ans
- ✓ 1. 3
 - ✗ 2. 2
 - ✗ 3. 1
 - ✗ 4. 0

Q.24 A tractor manufacturing company sells each tractor for ₹5,00,000. Assuming that KISAN firm buys 50 tractors from them as a part of an annual contract, the company offers a trade discount of 10% to KISAN and an additional 2% discount if the payment is made within 30 days. What will be the amount payable by KISAN within 30 days for the consignment?

- Ans
- ✗ 1. ₹22,080,100
 - ✓ 2. ₹22,050,000
 - ✗ 3. ₹20,051,000
 - ✗ 4. ₹24,050,020

Q.25 What is the radius of a sphere having a volume of 38808 cm^3 ?
(Use $\pi = \frac{22}{7}$)

- Ans
- ✓ 1. 21 cm
 - ✗ 2. 18 cm
 - ✗ 3. 27 cm
 - ✗ 4. 24 cm

Section : English Language

Q.1 Select the most appropriate ANTONYM of the given word.

Grave

- Ans
- ✗ 1. Low
 - ✗ 2. Living
 - ✗ 3. Belittle
 - ✓ 4. Humorous

Q.2 The given sentence has an error. Select the option that contains the error in the given sentence.
We have to be cautius regarding the impact of global warming.

- Ans
- ✗ 1. regarding the impact
 - ✓ 2. be cautius
 - ✗ 3. We have to
 - ✗ 4. of global warming

Q.3 Select the most appropriate synonym of the given word.
Inertia

- Ans
- ✗ 1. Progression
 - ✗ 2. Energy
 - ✗ 3. Activeness
 - ✓ 4. Inactivity

Q4 Select the most appropriate meaning of the underlined idiom.

Many unavoidable situations were avoided only because someone had our back.

- Ans
- ☒ 1. In consultation
 - ☒ 2. To support
 - ☒ 3. Without help
 - ☒ 4. Within reach

Q5 Parts of a sentence are given below in jumbled order. Arrange the parts in the correct order to form a meaningful sentence.

- (A) fell dead in an instant
(B) stunned the movement
(C) of the busy Bazaar and
(D) silenced the cacophony
(E) suddenly, a ringing blast
(F) out of the bodies, which

- Ans
- ☒ 1. EDCBFA
 - ☒ 2. BADFEC
 - ☒ 3. CABEDF
 - ☒ 4. FACEDB

Q6 Select the option that expresses the given sentence in direct speech.

The teacher orders Mohan not to tear off pages from his note-book.

- Ans
- ☒ 1. The teacher says to Mohan, "Don't tear off pages from your notebook."
 - ☒ 2. The teacher says to Mohan, "You shouldn't tear off pages from your notebook."
 - ☒ 3. The teacher says to Mohan, "Let the pages not be torn off from your notebook."
 - ☒ 4. The teacher says to Mohan, "Mustn't tear off pages from your notebook."

Q7 Select the most appropriate ANTONYM of the given word.
Melancholy

- Ans
- ☒ 1. Sad
 - ☒ 2. Blue
 - ☒ 3. Sorrow
 - ☒ 4. Cheerful

Q8 Select the option that expresses the given sentence in indirect speech.

"Hurrah! I have topped again," he said. "Congratulations," said I.

- Ans
- ☒ 1. He exclaimed that he topped, and I congratulated him.
 - ☒ 2. He said that he topped again. I congratulated him.
 - ☒ 3. He said to me he had topped again, and I congratulated him.
 - ☒ 4. He exclaimed with joy that he had topped again. I congratulated him.

Q9 Parts of the following sentence have been given as options. Select the option that contains an error.

Due to its fragrance, the petals of an rose are often used in perfumes and cosmetics.

- Ans
- ☒ 1. Due to its fragrance,
 - ☒ 2. the petals of an
 - ☒ 3. rose are often used
 - ☒ 4. in perfumes and cosmetics.

Q.10 Select the option that expresses the given sentence in passive voice.
Who is looking for a smart advisor?

- Ans**
- ✓ 1. By whom is a smart advisor being looked for?
 - ✗ 2. By whom was a smart advisor looked?
 - ✗ 3. By whom is a smart advisor looked for?
 - ✗ 4. By whom is a smart advisor looked?

Q.11 Select the most appropriate option that can substitute the underlined segment in the given sentence.
The plot of the story affects the character and their growth.

- Ans**
- ✓ 1. affects the character
 - ✗ 2. affect the character's
 - ✗ 3. effect the character
 - ✗ 4. affect the character

Q.12 The following sentence has been split into four segments. Identify the segment that contains a spelling error.
It seemed that his route / to the covted island / was not to be / an easy one.

- Ans**
- ✗ 1. was not to be
 - ✗ 2. an easy one
 - ✗ 3. It seemed that his route
 - ✓ 4. to the covted island

Q.13 Select the most appropriate option that can substitute the underlined segment in the given sentence.

The enigma of quantum mechanics remains inscrutably elusive despite of decades of intensive research by the world's leading physicists.

- Ans**
- ✗ 1. despite decades with
 - ✗ 2. despite of decades to
 - ✗ 3. despite of decades in
 - ✓ 4. despite decades of

Q.14 Select the option that expresses the given sentence in passive voice.
Mr. Johnson teaches us mathematics.

- Ans**
- ✗ 1. Mathematics will be taught to us by Mr. Johnson.
 - ✗ 2. Mathematics was taught to us by Mr. Johnson.
 - ✓ 3. Mathematics is taught to us by Mr. Johnson.
 - ✗ 4. Mathematics is being taught to us by Mr. Johnson.

Q.15 Select the most appropriate option to fill in the blank.

A popular theory among critics is that the character Count Dracula is based on the _____ barbaric Vlad III, better known as Vlad the Impaler.

- Ans**
- ✗ 1. debauched
 - ✓ 2. infamously
 - ✗ 3. miserably
 - ✗ 4. ingloriously

Comprehension:

In the following passage some words have been deleted. Fill in the blanks with the help of the alternatives given. Select the most appropriate option for each blank.

Student clubs are the place where students can (1)_____ their learning through interaction and discussion. Every activity in the club (2)_____ students to cultivate a different perception of life. The main purpose of the club is to provide a/an (3)_____ to showcase their talents and capabilities. It is the only place where students find time to (4)_____ themselves for their future. These activities not only benefit in shaping their interests and hobbies but also develop their leadership and social skills in a/an (5)_____ way.

SubQuestion No : 16

Q.16 Select the most appropriate option to fill in blank number 1.

- Ans
- ☒ 1. reduce
 - ☒ 2. adjust
 - ☒ 3. calculate
 - ☒ 4. improve

Comprehension:

In the following passage some words have been deleted. Fill in the blanks with the help of the alternatives given. Select the most appropriate option for each blank.

Student clubs are the place where students can (1)_____ their learning through interaction and discussion. Every activity in the club (2)_____ students to cultivate a different perception of life. The main purpose of the club is to provide a/an (3)_____ to showcase their talents and capabilities. It is the only place where students find time to (4)_____ themselves for their future. These activities not only benefit in shaping their interests and hobbies but also develop their leadership and social skills in a/an (5)_____ way.

SubQuestion No : 17

Q.17 Select the most appropriate option to fill in blank number 2.

- Ans
- ☒ 1. diminishes
 - ☒ 2. confuses
 - ☒ 3. simplifies
 - ☒ 4. encourages

Comprehension:

In the following passage some words have been deleted. Fill in the blanks with the help of the alternatives given. Select the most appropriate option for each blank.

Student clubs are the place where students can (1)_____ their learning through interaction and discussion. Every activity in the club (2)_____ students to cultivate a different perception of life. The main purpose of the club is to provide a/an (3)_____ to showcase their talents and capabilities. It is the only place where students find time to (4)_____ themselves for their future. These activities not only benefit in shaping their interests and hobbies but also develop their leadership and social skills in a/an (5)_____ way.

SubQuestion No : 18

Q.18 Select the most appropriate option to fill in blank number 3.

- Ans
- ☒ 1. occasion
 - ☒ 2. risk
 - ☒ 3. opportunity
 - ☒ 4. excuse

Comprehension:

In the following passage some words have been deleted. Fill in the blanks with the help of the alternatives given. Select the most appropriate option for each blank.

Student clubs are the place where students can (1)_____ their learning through interaction and discussion. Every activity in the club (2)_____ students to cultivate a different perception of life. The main purpose of the club is to provide a/an (3)_____ to showcase their talents and capabilities. It is the only place where students find time to (4)_____ themselves for their future. These activities not only benefit in shaping their interests and hobbies but also develop their leadership and social skills in a/an (5)_____ way.

SubQuestion No : 19

Q.19 Select the most appropriate option to fill in blank number 4.

- Ans
- ☒ 1. interrupt
 - ☒ 2. clean
 - ☒ 3. control
 - ☒ 4. groom

Comprehension:

In the following passage some words have been deleted. Fill in the blanks with the help of the alternatives given. Select the most appropriate option for each blank.

Student clubs are the place where students can (1)_____ their learning through interaction and discussion. Every activity in the club (2)_____ students to cultivate a different perception of life. The main purpose of the club is to provide a/an (3)_____ to showcase their talents and capabilities. It is the only place where students find time to (4)_____ themselves for their future. These activities not only benefit in shaping their interests and hobbies but also develop their leadership and social skills in a/an (5)_____ way.

SubQuestion No : 20

Q.20 Select the most appropriate option to fill in blank number 5.

- Ans
- ☒ 1. optimistic
 - ☒ 2. aggressive
 - ☒ 3. dominant
 - ☒ 4. pessimistic

Comprehension:

Read the given passage and answer the question that follows.

While some herbal remedies may have proven health benefits, not all herbs are safe. It's important to research and consult with a healthcare professional before using any herbal concoction. While we may use some herbs for minor ailments, such as a cold or headache, others may treat more serious conditions, such as cancer or heart disease. Not all herbal concoctions are natural and organic. Some may contain synthetic ingredients or preservatives, so it's important to read labels and research before using these concoctions. While herbal remedies may have some health benefits, they should not be used as a substitute for traditional medicine.

SubQuestion No : 21

Q.21 Select the most appropriate ANTONYM of the given word in the context of the passage.

Substitute

- Ans
- ☒ 1. Perdurable
 - ☒ 2. Equivalent
 - ☒ 3. Rival
 - ☒ 4. Surrogate

Comprehension:

Read the given passage and answer the question that follows.

While some herbal remedies may have proven health benefits, not all herbs are safe. It's important to research and consult with a healthcare professional before using any herbal concoction. While we may use some herbs for minor ailments, such as a cold or headache, others may treat more serious conditions, such as cancer or heart disease. Not all herbal concoctions are natural and organic. Some may contain synthetic ingredients or preservatives, so it's important to read labels and research before using these concoctions. While herbal remedies may have some health benefits, they should not be used as a substitute for traditional medicine.

SubQuestion No : 22

Q.22 Identify the tone of the passage.

- Ans
- ☒ 1. Sarcastic
 - ☒ 2. Cautionary
 - ☐ 3. Populist
 - ☐ 4. Pedestrian

Comprehension:

Read the given passage and answer the question that follows.

While some herbal remedies may have proven health benefits, not all herbs are safe. It's important to research and consult with a healthcare professional before using any herbal concoction. While we may use some herbs for minor ailments, such as a cold or headache, others may treat more serious conditions, such as cancer or heart disease. Not all herbal concoctions are natural and organic. Some may contain synthetic ingredients or preservatives, so it's important to read labels and research before using these concoctions. While herbal remedies may have some health benefits, they should not be used as a substitute for traditional medicine.

SubQuestion No : 23

Q.23 Identify the statement that holds true according to the passage.

- Ans
- ☒ 1. Herbal remedies can sometimes contain artificial ingredients.
 - ☐ 2. Herbal remedies have no proven health benefits.
 - ☐ 3. Herbal remedies can be trusted blindly.
 - ☐ 4. Herbal concoctions should not be used for curing minor illnesses.

Comprehension:

Read the given passage and answer the question that follows.

While some herbal remedies may have proven health benefits, not all herbs are safe. It's important to research and consult with a healthcare professional before using any herbal concoction. While we may use some herbs for minor ailments, such as a cold or headache, others may treat more serious conditions, such as cancer or heart disease. Not all herbal concoctions are natural and organic. Some may contain synthetic ingredients or preservatives, so it's important to read labels and research before using these concoctions. While herbal remedies may have some health benefits, they should not be used as a substitute for traditional medicine.

SubQuestion No : 24

Q.24 Select the option that best describes the central theme of the passage.

- Ans
- ☒ 1. While herbal remedies may have some benefits, these should be used cautiously and in consultation with health professionals.
 - ☐ 2. Herbal remedies can cause cancer and heart disease.
 - ☐ 3. Herbal remedies can successfully replace all other forms of medication.
 - ☐ 4. Herbal remedies are essential for fighting all sorts of modern diseases.

Comprehension:

Read the given passage and answer the question that follows.

While some herbal remedies may have proven health benefits, not all herbs are safe. It's important to research and consult with a healthcare professional before using any herbal concoction. While we may use some herbs for minor ailments, such as a cold or headache, others may treat more serious conditions, such as cancer or heart disease. Not all herbal concoctions are natural and organic. Some may contain synthetic ingredients or preservatives, so it's important to read labels and research before using these concoctions. While herbal remedies may have some health benefits, they should not be used as a substitute for traditional medicine.

SubQuestion No : 25

Q25 Select the most appropriate title for the passage.

- Ans
- ☒ 1. Herbal Remedies
 - ☒ 2. Risks with Herbal Remedies
 - ☒ 3. The Benefits of Herbal Concoctions
 - ☒ 4. Herbal Remedies: A Way of Life

