

1. An electric dipole is placed at an angle of 30° with an electric field of intensity $2 \times 10^5 \text{ NC}^{-1}$. It experiences a torque equal to 4 Nm. Calculate the magnitude of charge on the dipole, if the dipole length is 2 cm.

(2023)

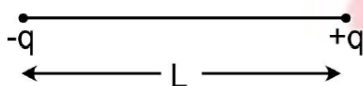
- (a) 2 mC (b) 8 mC
(c) 6 mC (d) 4 mC

2. If $\oint \vec{E} \cdot d\vec{S} = 0$ over a surface, then: (2023)

- (a) The electric field inside the surface is necessarily uniform.
(b) The number of flux lines entering the surface must be equal to the number of flux lines leaving it.
(c) The magnitude of electric field on the surface is constant.
(d) All the charges must necessarily be inside the surface.

3. Two point charges $-q$ and $+q$ are placed at a distance of L , as shown in the figure.

(2022)

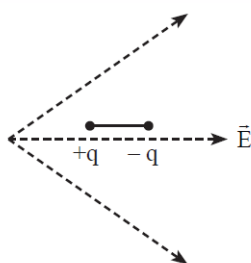


The magnitude of electric field intensity at a distance R ($R \gg L$) varies as:

- (a) $\frac{1}{R^3}$ (b) $\frac{1}{R^4}$
(c) $\frac{1}{R^6}$ (d) $\frac{1}{R^2}$

4. A dipole is placed in an electric field as shown. In which direction will it move?

(2021)



- (a) Towards the **right** as its potential energy will **decrease**.
(b) Towards the **left** as its potential energy will **decrease**.

- (c) Towards the **right** as its potential energy will **increase**.

- (d) Towards the **left** as its potential energy will **increase**.

5. The electric field at a point on the equatorial plane at a distance r from the centre of a dipole having dipole moment \vec{P} is given by, ($r \gg$ separation of two charges forming the dipole, ϵ_0 – permittivity of free space)

(2020 Covid Re-NEET)

- (a) $\vec{E} = \frac{2\vec{P}}{4\pi\epsilon_0 r^3}$ (b) $\vec{E} = -\frac{\vec{P}}{4\pi\epsilon_0 r}$
(c) $\vec{E} = -\frac{\vec{P}}{4\pi\epsilon_0 r^3}$ (d) $\vec{E} = \frac{\vec{P}}{4\pi\epsilon_0 r^3}$

6. A spherical conductor of radius 10 cm has a charge of $3.2 \times 10^{-7} \text{ C}$ distributed uniformly. What is the magnitude of electric field at a point 15 cm from the centre of the sphere?

(2020)

$$\left(\frac{1}{4\pi\epsilon_0} = 9 \times 10^9 \text{ N m}^2/\text{C}^2\right)$$

- (a) $1.28 \times 10^5 \text{ N/C}$ (b) $1.28 \times 10^6 \text{ N/C}$
(c) $1.28 \times 10^7 \text{ N/C}$ (d) $1.28 \times 10^4 \text{ N/C}$

7. A hollow metal sphere of radius R is uniformly charged. The electric field due to the sphere at a distance r from the centre

(2019)

- (a) Increases as r increases for $r < R$ and for $r > R$
(b) Zero as r increases for $r < R$, decreases as r increases for $r > R$
(c) Zero as r increases for $r < R$, increases as r increases for $r > R$
(d) Decreases as r increases for $r < R$ and for $r > R$

8. Two parallel infinite line charges with linear charge densities $+\lambda \text{ C/m}$ and $-\lambda \text{ C/m}$ are placed at a distance of $2R$ in free space. What is the electric field mid-way between the two line charges?

(2019)

- (a) Zero (b) $\frac{2\lambda}{\pi\epsilon_0 R} \text{ N/C}$
(c) $\frac{\lambda}{\pi\epsilon_0 R} \text{ N/C}$ (d) $\frac{\lambda}{2\pi\epsilon_0 R} \text{ N/C}$

9. Two point charges A and B, having charges $+Q$ and $-Q$ respectively, are placed at certain distance apart and force acting between them is F . If 25% charge of A is transferred to B, then force between the charges becomes: **(2019)**

(a) F (b) $\frac{9F}{16}$
(c) $\frac{16F}{9}$ (d) $\frac{4F}{3}$

10. Suppose the charge of a proton and an electron differ slightly. One of them is $-e$, the other is $(e + \Delta e)$. If the net of electrostatic force and gravitational force between two hydrogen atoms placed at a distance d (much greater than atomic size) apart is zero, then Δe is of the order of [Given mass of hydrogen, $m_h = 1.67 \times 10^{-27} \text{ kg}$]

(2017-Delhi)

(a) 10^{-23} C (b) 10^{-37} C
(c) 10^{-47} C (d) 10^{-20} C

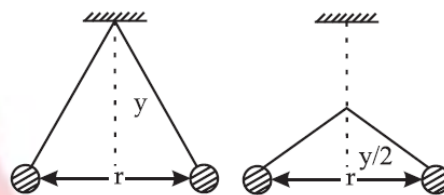
11. Two identical charged spheres suspended from a common point by two massless strings of lengths l , are initially at a distance d ($d \ll l$) apart because of their mutual repulsion. The charges begin to leak from both the spheres at a constant rate. As a result, the spheres approach each other with a velocity V . Then V varies as a function of the distance x between the spheres, as: **(2016-I)**

(a) $V \propto x^{\frac{1}{2}}$ (b) $V \propto x$
(c) $V \propto x^{-\frac{1}{2}}$ (d) $V \propto x^{-1}$

12. The electric field in a certain region is acting radially outward and is given by $E = Ar$. A charge contained in a sphere of radius 'a' centered at the origin of the field, will be given by: **(2015)**

(a) $A\epsilon_0 a^2$ (b) $4\pi\epsilon_0 Aa^3$
(c) $\epsilon_0 Aa^3$ (d) $4\pi\epsilon_0 Aa^2$

13. Two pith balls carrying equal charges are suspended from a common point by strings of equal length, the equilibrium separation between them is r . Now the strings are rigidly clamped at half the height. The equilibrium separation between the balls now become: **(2013)**



(a) $\left(\frac{2r}{3}\right)$ (b) $\left(\frac{1}{\sqrt{2}}\right)^2$
(c) $\left(\frac{r}{\sqrt[3]{2}}\right)$ (d) $\left(\frac{2r}{\sqrt{3}}\right)$