

**QUESTION BOOKLET AND ANSWER KEY  
FOR RECRUITMENT TEST OF  
Driver (Heavy Vehicle)  
Code 2.8  
HELD ON 13.11.2011**

## English Version

1. ਮਾਝੀ ਕੀ ਹੈ ?  
(A) ਲਿਪੀ (B) ਭਾਸ਼ਾ (C) ਉਪ-ਭਾਸ਼ਾ (D) ਵਿਆਕਰਣ
  2. 'ਅਭਾਸ' ਨੂੰ ਸ਼ੁੱਧ ਕਿਵੇਂ ਲਿਖਿਆ ਜਾਵੇਗਾ :  
(A) ਅਿ (B) ਭਿ (C) ਭੇ (D) ਸਿ
  3. 'ਲੱਤ ਅੜਾਉਂਟੀ' ਮੁਹਾਵਰੇ ਦਾ ਕੀ ਅਰਥ ਹੈ ?  
(A) ਸੰਭਲਿਆ ਨਾ ਜਾਣਾ (B) ਚੁਗਲੀ ਕਰਨਾ  
(C) ਸਿਫਤ ਕਰਨੀ (D) ਖਾਹ-ਮਖਾਹ ਦਖਲ ਦੇਣਾ
  4. ਸ਼ੁੱਧ ਮੁਹਾਵਰਾ ਚੁਣੋ :  
(A) ਇੱਲ ਦਾ ਨਾਂ ਉੱਲੂ ਨਾ ਆਉਂਟਾ (B) ਇੱਲ ਦਾ ਨਾਂ ਚਿੜੀ ਨਾ ਆਉਂਟਾ  
(C) ਇੱਲ ਦਾ ਨਾਂ ਕੋਕੋ ਨਾ ਆਉਂਟਾ (D) ਇੱਲ ਦਾ ਨਾਂ ਤੋਤਾ ਨਾ ਆਉਂਟਾ
  5. ਸ਼ੁੱਧ ਸ਼ਬਦ ਚੁਣੋ :  
(A) ਮੁੱਢੇ (B) ਮੁੰਡੇ (C) ਮੁੰਡੇ (D) ਮੁੰਢੇ
  6. ਨਾਂਵ ਕਿੰਨੇ ਪ੍ਰਕਾਰ ਦੇ ਹੁੰਦੇ ਹਨ :  
(A) ਪੰਜ (B) ਚਾਰ (C) ਛੇ (D) ਸੱਤ
  7. ਗੁਰਮੁਖੀ ਕੀ ਹੈ ?  
(A) ਪੰਜਾਬੀ ਭਾਸ਼ਾ (B) ਭਾਸ਼ਾ (C) ਉਪ-ਭਾਸ਼ਾ (D) ਲਿੱਪੀ
  8. ਠੀਕ ਸਮਾਸੀ ਸ਼ਬਦ ਚੁਣੋ :  
(A) ਬੁੱਢ-ਸੁਹਾਗਣ (B) ਜੁਆਨ-ਸੁਹਾਗਣ (C) ਕੁੜੀ-ਸੁਹਾਗਣ (D) ਤੀਵੀਂ-ਸੁਹਾਗਣ
  9. ਸ਼ੁੱਧ ਸ਼ਬਦ-ਜੋੜ ਵਾਲਾ ਸ਼ਬਦ ਚੁਣੋ :  
(A) ਔਗੁਨ (B) ਔਗੁਣ (C) ਔਗਨ (D) ਅਉਗਣ
  10. 'ਮਦਾਣੀ' ਸ਼ਬਦ ਨੂੰ ਸ਼ੁੱਧ ਕਰੋ :  
(A) ਢਾ (B) ਨੀ (C) ਧਾ (D) ਮੰ
  11. What is the meaning of ugly  
A) repulsive B) evilsome C) hateful D) fearful
  12. False means  
A) inaccurate B) incorrect C) untrue D) defective
- Fill in the blanks**
13. As the festival approaches, number of customers \_\_\_\_\_  
A) is increasing B) increases C) will be increased D) will have increased

14. The blood donation camp was organized \_\_\_\_\_ the Naval Youth Club  
A) to B) from C) with D) by

Find out which part has the error in Q. Nos. 15-16

15. Good night | I am glad | to see you  
i ii iii  
A) i B) ii C) iii D) no error

16. It is true | that God helps those | who helps themselves  
i ii iii  
A) i B) ii C) iii D) no error

Find the word which is correct substitute of sentences in Q. Nos. 17 and 18

17. A house for storing grains  
A) granary B) godown C) store D) cellar
18. A government run by a dictator  
A) democracy B) theocracy C) oligarchy D) autocracy

In Q.Nos. 19-20, select the opposite meaning of Bold/underlined word

19. The error in the newspaper is **accidental**  
A) conventional B) usual C) intentional D) by mistake
20. He was asked to **accelerate** the work  
A) supervise B) slacken C) speed up D) check
21. How many districts were in Punjab in 2010?  
A) 20 B) 19 C) 21 D) 22
22. How many Misls are mentioned in sikh history  
A) 10 B) 11 C) 12 D) 13
23. Which cities are known for Hosiery industry and Rock Garden respectively  
A) Ludhiana and Jullandhar B) Ludhiana and Chandigarh  
C) Chandigarh and Jullandhar D) Amritsar and Chandigarh
24. N.H.A.I means  
A) National Handloom Agency of India B) National Hockey Academy of India  
C) National Handball Association of India D) National Highways Authority of India
25. State bird of Punjab is  
A) Baaj B) Peacock C) Crow D) Pigeon
26. Who built the Taj Mehal  
A) Sher Shah Suri B) Akbar C) Shahjahan D) Aurangzeb
27. Gate Way of India is in  
A) Delhi B) Mumbai C) Chennai D) Agra
28. How many Lions are visible in the State Emblem of India?  
A) four full B) two full and one half C) all the four half D) three full

29. Which of the following is direct tax  
A) sales tax                      B) excise tax                      C) income tax                      D) both A and C
30. Who does issue one rupee notes in India  
A) Reserve Bank of India                      B) State Bank of India  
C) Finance Ministry                      D) Central Bank of India
31. The words 'Satya Meva Jayate' are related to  
A) National Anthem of India                      B) National Song of India  
C) National Emblem of India                      D) none of these
32. Which is the National Animal of India  
A) lion                      B) tiger                      C) panther                      D) cow
33. The largest country of the world is  
A) Russia                      B) Canada                      C) Australia                      D) USA
34. How many National Highways pass through Punjab  
A) 10                      B) 11                      C) 12                      D) 13
35. The acid generally stored in batteries is  
A) acetic acid                      B) sulphuric acid                      C) nitric acid                      D) hydrochloric acid
36. A person of which of the following blood groups is called a universal donor?  
A) O                      B) AB                      C) A                      D) B
37. Who among the following invented the steam engine?  
A) Macroni                      B) Wright Brothers                      C) Edison                      D) James Watt
38. Where were the XIX Commonwealth Games 2010 were hosted  
A) London                      B) Delhi                      C) Auckland                      D) Melbourne
39. Who among the following Sikh Gurus encouraged the Gurmukhi script?  
A) Guru Arjan Dev                      B) Guru Ramdas  
C) Guru Teg Bahadur                      D) Guru Angad Dev
40. Who was the first Chief Minister of Punjab  
A) Dr. Gopi Chand Bhargava                      B) Ram Krishan  
C) Bhim Sen Sachar                      D) Pratap Singh Kairon
41. Pointing to a photograph, Mohan said to his son, "The woman in the photograph is the only daughter-in-law of your grandmother". How is the lady in photograph related to Mohan.  
A) sister                      B) mother                      C) wife                      D) mother-in-law
42. Sudhir is 7<sup>th</sup> from right and 14<sup>th</sup> from left in a row of boys. How many boys are in the row  
A) 20                      B) 21                      C) 19                      D) 22
43. On which day of week, Ram was born, on the basis of following information  
i) Ram's birthday was one day after his sister's birthday  
ii) Ram was born on 3<sup>rd</sup> day of the week  
A) Monday                      B) Tuesday                      C) Wednesday                      D) Sunday

44. How is 'home' written in certain language in which  
 i) 'go home now' is written as 'ja ho na'  
 ii) 'come home later' is written as 'pa ta ho'  
 A) ho B) pa C) ja D) na
45. On which day of the week did Mohan visit Bangalore?  
 Information is :  
 i) Mohan took leave on Wednesday  
 ii) Mohan visited his brother on Friday the previous day of his visit to Bangalore  
 A) Thursday B) Friday C) Saturday D) Sunday
46. On the basis of following information, find who did reach the office first among Naveen, Mohan, Prakash and Kishore  
 i) Mohan reached the office before Naveen and Kishore but was not the first to reach  
 ii) Kishore reached the office after Mohan  
 A) Kishore B) Mohan C) Naveen D) Prakash
47. On the basis of following information, answer the question below  
 i) M and T are brothers of D  
 ii) D is the only daughter of N and K  
 How many sons does K have?  
 A) 1 B) 2 C) 3 D) 0
48. A letter was delivered in an office on the day when the dealing Clerk was on leave. Next day, he joined and wrote the comments on letter and put before his officer next day, which happened to be Friday. On what day of the week letter was received in the office.  
 A) Wednesday B) Thursday C) Tuesday D) Monday
49. If the first day of February 2008 was Sunday, what day was last day of this month that year  
 A) Saturday B) Monday C) Friday D) Sunday
50. A driver is driving a car at an average speed of 75km per hour towards his destination at the distance of 300 km. He takes rest for 15 minutes after every 100 km. How much time will he take to reach his destination?  
 A) 4 hrs. B) 4 hrs. 15 min. C) 4 hrs. 30 min. D) 4 hrs. 45 min.
51. Form the smallest number of 5 digits using all the digits 5, 4, 7, 0, 1 only once  
 A) 0 1 4 5 7 B) 1 4 5 7 0 C) 4 5 4 0 1 D) 1 0 4 5 7
52. Weight of 8 boxes is 25kg 600gm. Find the weight of one box  
 A) 3 kg 400 gm B) 3 kg 100 gm C) 3 kg 200 gm D) 3 kg 250 gm
53. A bus leaves for the Amritsar at 6.30 a.m. and reaches Amritsar at 3.15 p.m. How long does it take to reach Amritsar  
 A) 8 hrs. 45 min. B) 7 hrs. 45 min. C) 8 hrs. 15 min. D) 8 hrs. 30 min
54. The side of a square field is 43 m. Find the cost of fencing the field all around at the cost of Rs. 2.50 per metre.  
 A) Rs. 860 B) Rs. 430 C) Rs. 450 D) Rs. 215

55. Write the next number  
1, 3, 6, 10, 15, ?  
A) 21 B) 19 C) 17 D) 23
56. Simplify  
 $48 \times 976 \div 16 + 971$   
A) 2899 B) 3899 C) 3699 D) 3799
57. 5% of 320 is  
A) 6 B) 8 C) 12 D) 16
58. The population of a village increased from 24500 to 29400. Find percentage increase  
A) 15% B) 18% C) 20% D) 17%
59. Ram deposited Rs. 3000 at the simple interest rate of 7% per annum for three years. Find the interest.  
A) Rs. 210 B) Rs. 630 C) Rs. 900 D) Rs. 420
60. What is the area of a square whose perimeter is 36 cm  
A)  $24 \text{ cm}^2$  B)  $81 \text{ cm}^2$  C)  $36 \text{ cm}^2$  D)  $48 \text{ cm}^2$
61. The total wages of 30 labourers were Rs. 3450 per day. What will be total wages if 12 more labourers are added  
A) Rs. 4860 B) Rs. 6480 C) Rs. 6900 D) Rs. 4830
62. The three consecutive even numbers whose sum is 96, are  
A) 28, 32, 36 B) 30, 28, 38 C) 30, 32, 34 D) none
63. Income of a family in an year was Rs. One lakh. They spent on rent Rs. 2500 per month for the whole year and Rs. 1500 per month on food and Rs. 1000 per month on clothing. What was their savings in the year  
A) Rs.45000 B) Rs. 35000 C) Rs. 30000 D) Rs. 40000
64. Average age of Ram, Shyam and Krishan is 25 years. The total age of Ram and Krishan is 57 year. What is the age of Shyam  
A) 20 years B) 23 years C) 18 years D) 32 years
65. 16 men can complete a work in 7 days. In how many days will 28 men complete the same work  
A) 6 days B) 8 days C) 3 days D) 4 days
66. When should a driver not use high beams  
i) driving through well lit city roads  
ii) when an oncoming driver does not dim his lights  
iii) driving behind a vehicle  
A) all i,ii, and iii B) only ii C) ii and iii D) i and iii
67. During bad weather, while driving what precautions should a driver take  
i) drive the vehicle slow  
ii) should not bother and drive as in normal condition  
iii) should not take sudden turn  
iv) should keep comfortable distance from other vehicle  
A) all i, ii, iii, and iv B) i, iii and iv C) only iii D) i, ii and iii

68. Which among the following is not part of irresponsible driving  
 A) drinking and smoking while driving B) not obeying traffic rules  
 C) not using cell phones while driving D) over aggression
69. Which among the following is not risk factor of accidents  
 A) bad weather B) proper road conditions  
 C) irresponsible driving D) adverse road conditions
70. Which of the following is not the quality of a good driver  
 A) follow road signs B) drive in correct lane  
 C) turn as and when you feel like D) do not over speed
71. Safe enjoyable driving excludes  
 i) enjoy conversation with others ii) driving side by side with other friends  
 iii) listening music and smoking iv) using cell phones  
 A) i, ii and iii B) i & iv C) ii, iii, iv D) all
72. In case of accident, you must call the emergency number  
 A) if victim's condition is life threatening  
 B) if victim is unresponsive  
 C) if moving the patient could make his condition worse  
 D) all of the above
73. If the vehicle you are driving breaks down on the way, what would you do?  
 A) leave the vehicle there itself  
 B) call the mechanical help and ensure the safety of vehicle  
 C) get a lift and reach your destination  
 D) get a lift to arrange the mechanical help
74. Which among the following is not the duty of the driver  
 A) loading and unloading  
 B) ensure the maintenance of vehicle  
 C) keep the record of running of vehicle  
 D) accountable to the owner of the vehicle
75. Which is wrong in the following: A good driver should  
 A) be in proper uniform B) know the traffic rules and routes  
 C) be aggressive D) be healthy
76. As a driver in the corporation you may not know the contact number of  
 A) emergency B) ambulance  
 C) transport incharge of the corporation D) managing director of the corporation
77. For safe driving, a responsible driver may not bother about  
 A) condition of seat covers B) condition of tires  
 C) oil, fuel and water level D) all lights and indicators of vehicle
78. In case of brake failure, how should a driver act  
 i) shift to low gear to slow down  
 ii) try to get some break pressure by pumping the brake peddle  
 iii) try to stop the vehicle with hand brake  
 A) i and ii B) ii and iii C) i, ii and iii D) i and iii


79. In order to avoid road rage, what should as a responsible driver you should not do?
- A) give full attention to your driving
  - B) make the eye contact with the angry driver and control him physically
  - C) avoid to take your frustration out on other drivers
  - D) keep your cool
80. Which among the following is not a driving hazard?
- A) taking some medicine that affects the responses
  - B) tired
  - C) upset
  - D) bad eye sight that corrected with spectacles
81. As a driver of an official car with beacon (red light), what will you do when the dignitary is not travelling in the car?
- A) cover the beacon
  - B) use the beacon to get easy pass through
  - C) keep the beacon uncovered and drive the car
  - D) use the beacon to avoid any stop signal by traffic police
82. What is/are true about 'Authorization stickers'
- i) to be pasted on wind screen
  - ii) it is a kind of certificate permitting the use of red light
  - iii) it is kind of permission to jump traffic signals
- A) only i                      B) only ii                      C) i and ii                      D) all i, ii and iii
83. If vehicle is using red light/beacon without authorization, the enforcement officer will
- i) confiscate the beacon
  - ii) deposit it in police station having jurisdiction
  - iii) mention it in the challan
- A) only i                      B) only ii                      C) i and iii                      D) all i, ii and iii
84. If a vehicle behind you signals for overtake, what would you do allow it to overtake?
- A) extend the right arm and hand below the level of shoulder and move it upwards and downwards
  - B) extend the right arm and hand below the level of shoulder and move it backwards and forwards
  - C) will not give any signal, the vehicle may overtake at its own risk
  - D) will stop and allow the vehicle
85. If you intend to turn left, how would you give the signal?
- A) Extend the right arm and rotate it from shoulder clockwise
  - B) Extend the right arm and rotate it from shoulder anti clockwise
  - C) Extend the right arm and move it upwards and downwards
  - D) Extend the right arm and direct your thumb towards left
86. If you are crossing traffic signal and amber light starts flashing when you have crossed the stop line, what will you do?
- A) stop in between
  - B) pull back behind the stop line
  - C) cross the lights
  - D) will stop suddenly



87. On traffic signal green light is flashing for you but some pedestrians are crossing, what should you do under traffic rules  
 A) snub the pedestrians B) drive your vehicle without caring about them  
 C) give way to pedestrians D) ask them to stop to give you passage
88. Green arrows means  
 A) observe other signals  
 B) if other signals are indicating otherwise, proceed  
 C) if other signals are indicating otherwise, proceed in the direction of arrow  
 D) wait for other signals also allow you to proceed.
89. What is second injury', with regards to accidents  
 A) the injured gets up, falls and is injured again  
 B) it 2<sup>nd</sup> in the marked injuries of a victim as 1<sup>st</sup>, 2<sup>nd</sup> and 3<sup>rd</sup> \_\_\_\_ so on  
 C) caused by careless handling of injured  
 D) death due to waste of time for completing formalities
90. An ambulance beeping its siren as well as flashing its blue light atop, it means  
 A) it is transporting a serious patient to hospital  
 B) it is carrying a doctor  
 C) it is carrying para medical staff  
 D) it is carrying a high official of health department


Q.Nos. 91 to 97 are based on traffic signs, given below

91.




- A) U turn prohibited B) turn right C) right turn prohibited D) stop

92.




- A) go straight B) no overtaking  
 C) take a curve and go D) the road has steep curve ahead

93.



- A) stop B) no parking C) no stopping D) crossing ahead

94.



- A) blow horn    B) bridge ahead    C) men working ahead    D) horn prohibited

95.




- A) near guarded level crossing    B) don't cross  
C) near unguarded level crossing    D) be careful

96.



- A) restriction ends sign    B) no thoroughfare sign  
C) no entry sign    D) rough road ahead sign

97.



- A) two roads merge    B) narrow bridge ahead  
C) narrow road ahead    D) road widens ahead

98.

- The Motor Vehicle Inspector may detain the vehicle used**  
A) without certificate of registration    B) without permit  
C) without license    D) any of above

99.

- Regarding silence zone which of the following statements is not correct**  
A) should not sound the horn  
B) should not drive a vehicle creating undue noise  
C) should not drive a vehicle with a muffler causing alarming sound  
D) should not drive in the silence zone at all

100.

- What does yellow flashing light on an intersection means**  
A) stop  
B) slow down and drive with caution  
C) cross the intersection  
D) stop even if you have crossed the stop line & are in between the intersection