

# **CISF Const. Tradesmen**

**Previous Year Paper**  
**31 Oct, 2023 Shift 2**





केन्द्रीय औद्योगिक सुरक्षा बल  
CENTRAL INDUSTRIAL SECURITY FORCE

Participant ID	
Participant Name	
Test Center Name	
Test Date	31/10/2023
Test Time	12:30 PM - 2:30 PM
Subject	Constable Tradesman Group C

Section : General Awareness or General Knowledge

Q.1 Which vitamin is synthesized in the human body?

- Ans
- 1. Folic Acid
  - 2. Vitamin A
  - 3. Calciferol
  - 4. Vitamin B1

Question ID : 630680434500  
 Option 1 ID : 6306801695940  
 Option 2 ID : 6306801695941  
 Option 3 ID : 6306801695939  
 Option 4 ID : 6306801695942  
 Status : Answered  
 Chosen Option : 1

Q.2 In which of the following city India's first 'eCourt' has started ?

- Ans
- 1. Lucknow
  - 2. Hyderabad
  - 3. Bhopal
  - 4. Goa

Question ID : 630680434486  
 Option 1 ID : 6306801695886  
 Option 2 ID : 6306801695883  
 Option 3 ID : 6306801695885  
 Option 4 ID : 6306801695884  
 Status : Answered  
 Chosen Option : 1

Q.3 Where was martyr 'Rajendra Lahiri' hanged?

- Ans  1. Faizabad  
 2. Gorakhpur  
 3. Pentonville  
 4. Gonda

Question ID : 630680434488  
Option 1 ID : 6306801695894  
Option 2 ID : 6306801695892  
Option 3 ID : 6306801695891  
Option 4 ID : 6306801695893  
Status : Answered  
Chosen Option : 2

Q.4 Under whose leadership did the Cabinet Mission come to India?

- Ans  1. George VI  
 2. Pethick Lawrence  
 3. A V Alexander  
 4. Stafford Cripps

Question ID : 630680434489  
Option 1 ID : 6306801695898  
Option 2 ID : 6306801695895  
Option 3 ID : 6306801695897  
Option 4 ID : 6306801695896  
Status : Answered  
Chosen Option : 2

Q.5 What is the original language of 'Tuzuk-e-Babri' ?

- Ans  1. Turkish  
 2. Persian  
 3. Awadhi  
 4. Urdu

Question ID : 630680434490  
Option 1 ID : 6306801695901  
Option 2 ID : 6306801695899  
Option 3 ID : 6306801695902  
Option 4 ID : 6306801695900  
Status : Answered  
Chosen Option : 4

Q.6 'Konkani' is the approved official language of which state?

- Ans  1. Rajasthan  
 2. Goa  
 3. Jammu Kashmir  
 4. Kerala

Question ID : 630680434492  
Option 1 ID : 6306801695910  
Option 2 ID : 6306801695908  
Option 3 ID : 6306801695909  
Option 4 ID : 6306801695907  
Status : Answered  
Chosen Option : 3

Q.7 The Flower Festival 'Bathukamma' is an outstanding symbol of the cultural identity of which state?

- Ans  1. Arunachal Pradesh  
 2. Karnataka  
 3. Manipur  
 4. Telangana

Question ID : 630680434493  
Option 1 ID : 6306801695912  
Option 2 ID : 6306801695913  
Option 3 ID : 6306801695914  
Option 4 ID : 6306801695911  
Status : Answered  
Chosen Option : 4

Q.8 How many types of justice are mentioned in the Preamble of the Indian Constitution?

- Ans  1. 5  
 2. 4  
 3. 3  
 4. 2

Question ID : 630680434498  
Option 1 ID : 6306801695933  
Option 2 ID : 6306801695932  
Option 3 ID : 6306801695934  
Option 4 ID : 6306801695931  
Status : Answered  
Chosen Option : 1

Q.9 'The Theory of Drain' is related to whom of the following?

- Ans  1. F Shirras  
 2. Dadabhai Naoroji  
 3. Bal Gangadhar Tilak  
 4. V K R V Rao

Question ID : 630680434487  
Option 1 ID : 6306801695889  
Option 2 ID : 6306801695888  
Option 3 ID : 6306801695890  
Option 4 ID : 6306801695887  
Status : Answered  
Chosen Option : 2

Q.10 Article '5 to 11' is related to which part of the constitution?

- Ans  1. Part 4  
 2. Part 2  
 3. Part 3  
 4. Part 1

Question ID : 630680434497  
Option 1 ID : 6306801695928  
Option 2 ID : 6306801695927  
Option 3 ID : 6306801695929  
Option 4 ID : 6306801695930  
Status : Answered  
Chosen Option : 2

Q.11 According to the 2011 census, which state has the lowest population?

- Ans  1. Sikkim  
 2. Mizoram  
 3. Goa  
 4. Nagaland

Question ID : 630680434495  
Option 1 ID : 6306801695922  
Option 2 ID : 6306801695921  
Option 3 ID : 6306801695919  
Option 4 ID : 6306801695920  
Status : Answered  
Chosen Option : 1

Q.12 Which has started the initiative related to delivering blood to health centers through drones?

- Ans  1. ISRO  
 2. DRDO  
 3. IIT Kanpur  
 4. ICMR

Question ID : 630680434483  
Option 1 ID : 6306801695874  
Option 2 ID : 6306801695872  
Option 3 ID : 6306801695873  
Option 4 ID : 6306801695871  
Status : Answered  
Chosen Option : 2

Q.13 What is true regarding Sex Ratio in India as per Census 2011?

- Ans  1. Not Estimated  
 2. Decreased  
 3. Stabilized  
 4. Increased

Question ID : 630680434496  
Option 1 ID : 6306801695926  
Option 2 ID : 6306801695923  
Option 3 ID : 6306801695925  
Option 4 ID : 6306801695924  
Status : Answered  
Chosen Option : 4

Q.14 In which state is 'Sultanpur National Park' located?

- Ans  1. Karnataka  
 2. Haryana  
 3. Madhya Pradesh  
 4. Jammu Kashmir

Question ID : 630680434494  
Option 1 ID : 6306801695917  
Option 2 ID : 6306801695915  
Option 3 ID : 6306801695916  
Option 4 ID : 6306801695918  
Status : Answered  
Chosen Option : 2

Q.15 Where was the 'Sea Dragon 23' Naval Exercise held?

- Ans
- 1. England
  - 2. India
  - 3. United States of America
  - 4. Japan

Question ID : 630680434484  
Option 1 ID : 6306801695877  
Option 2 ID : 6306801695878  
Option 3 ID : 6306801695876  
Option 4 ID : 6306801695875  
Status : Answered  
Chosen Option : 3

Q.16 Which of the following team became India's first sports unicorn?

- Ans
- 1. Kolkata Night Riders
  - 2. Chennai Super Kings
  - 3. Gujarat Titans
  - 4. Rajasthan Royals

Question ID : 630680434481  
Option 1 ID : 6306801695863  
Option 2 ID : 6306801695864  
Option 3 ID : 6306801695865  
Option 4 ID : 6306801695866  
Status : Answered  
Chosen Option : 2

Q.17 Who has developed the anti-submarine torpedo "Varunastra"?

- Ans
- 1. IIT Madras
  - 2. Bharat Dynamics Limited
  - 3. Hindustan Aeronautics Limited
  - 4. Defense Research and Development Organization

Question ID : 630680434485  
Option 1 ID : 6306801695880  
Option 2 ID : 6306801695882  
Option 3 ID : 6306801695881  
Option 4 ID : 6306801695879  
Status : Answered  
Chosen Option : 2

Q.18 Which tennis player has been honored with the 'Golden Achievement Award 2021'?

- Ans  1. Pullela Gopichand  
 2. Vijay Amritraj  
 3. Sania Mirza  
 4. Prakash Padukone

Question ID : 630680434482  
Option 1 ID : 6306801695870  
Option 2 ID : 6306801695869  
Option 3 ID : 6306801695868  
Option 4 ID : 6306801695867  
Status : Answered  
Chosen Option : 3

Q.19 In the present form of the Constitution, how many other languages have been added to the languages mentioned in the Eighth Schedule after the implementation of the Constitution?

- Ans  1. 7  
 2. 5  
 3. 8  
 4. 6

Question ID : 630680434491  
Option 1 ID : 6306801695905  
Option 2 ID : 6306801695904  
Option 3 ID : 6306801695906  
Option 4 ID : 6306801695903  
Status : Answered  
Chosen Option : 1

Q.20 Which of the following does not come under the constitutional body in India?

- Ans  1. Finance Commission  
 2. NITI Aayog  
 3. National Commission for Scheduled Castes  
 4. Election Commissioner

Question ID : 630680434499  
Option 1 ID : 6306801695935  
Option 2 ID : 6306801695938  
Option 3 ID : 6306801695937  
Option 4 ID : 6306801695936  
Status : Answered  
Chosen Option : 1



Q.1 A girl bought a saree and a perfume for Rs.4000. She sold the saree at a gain of 25% and the perfume at a loss of 10%, thereby gaining 2% on the whole. Find the cost of the saree.

- Ans
- 1. Rs.2000
  - 2. Rs.2500
  - 3. Rs.3000
  - 4. Rs.3200

Question ID : 630680434509  
Option 1 ID : 6306801695975  
Option 2 ID : 6306801695978  
Option 3 ID : 6306801695977  
Option 4 ID : 6306801695976  
Status : Answered  
Chosen Option : 3

Q.2 Two trains 160 metres and 170 metres in length are running towards each other on parallel lines, one at the rate of 52kmph and another at 56kmph. Find the time (in seconds) in which they will cross each other.

- Ans
- 1. 9seconds
  - 2. 11seconds
  - 3. 12seconds
  - 4. 10seconds

Question ID : 630680434520  
Option 1 ID : 6306801696020  
Option 2 ID : 6306801696021  
Option 3 ID : 6306801696019  
Option 4 ID : 6306801696022  
Status : Marked For Review  
Chosen Option : 1

Q.3 A sum was put at simple interest at a certain rate for 4 years. Had it been put at 2% higher rate, it would have fetched Rs.400 more. Find the sum.

- Ans
- 1. Rs.7550
  - 2. Rs.5000
  - 3. Rs.8000
  - 4. Rs.6000

Question ID : 630680434515  
Option 1 ID : 6306801695999  
Option 2 ID : 6306801696000  
Option 3 ID : 6306801696002  
Option 4 ID : 6306801696001  
Status : Answered  
Chosen Option : 2

Q.4 The value of  $\frac{(.253 \times .253 - .253 \times .067 + .067 \times .067)}{(.253 \times .253 + .253 \times .067 + .067 \times .067)}$  is:

Ans  1. 3.125

2. .64

3. 1.128

4. 1

Question ID : 630680434502

Option 1 ID : 6306801695947

Option 2 ID : 6306801695949

Option 3 ID : 6306801695948

Option 4 ID : 6306801695950

Status : Answered

Chosen Option : 4

Q.5 Simplify:  $\frac{2}{3}$  of  $\frac{5}{7}$  of  $\frac{4}{5}$  of 630

Ans  1. 240

2. 150

3. 109

4. 200

Question ID : 630680434501

Option 1 ID : 6306801695945

Option 2 ID : 6306801695946

Option 3 ID : 6306801695943

Option 4 ID : 6306801695944

Status : Answered

Chosen Option : 1

Q.6 When the price of a laptop was decreased by 20%, the number sold increased by 50%.  
What was the effect on the total revenue?

Ans  1. 12%

2. 30%

3. 20%

4. 10%

Question ID : 630680434507

Option 1 ID : 6306801695969

Option 2 ID : 6306801695967

Option 3 ID : 6306801695970

Option 4 ID : 6306801695968

Status : Answered

Chosen Option : 3

Q.7 The average of 10 results is 50. If the average of first five results is 49 and that of the last five is 65, find the fifth result.

- Ans
- 1. 66
  - 2. 45
  - 3. 52
  - 4. 70

Question ID : 630680434503  
Option 1 ID : 6306801695951  
Option 2 ID : 6306801695953  
Option 3 ID : 6306801695954  
Option 4 ID : 6306801695952  
Status : Answered  
Chosen Option : 4

Q.8 30 litres of a mixture contains milk and water in the ratio 3:2. If 5 litres of this mixture be replaced by 5 litres of milk, the ratio of milk to water in the new mixture would be:

- Ans
- 1. 2:1
  - 2. 4:3
  - 3. 7:3
  - 4. 8:3

Question ID : 630680434513  
Option 1 ID : 6306801695991  
Option 2 ID : 6306801695994  
Option 3 ID : 6306801695992  
Option 4 ID : 6306801695993  
Status : Answered  
Chosen Option : 1

Q.9 Find the mean proportion between 0.04 and 0.16

- Ans
- 1. 0.12
  - 2. 0.08
  - 3. 0.32
  - 4. 0.64

Question ID : 630680434512  
Option 1 ID : 6306801695988  
Option 2 ID : 6306801695987  
Option 3 ID : 6306801695990  
Option 4 ID : 6306801695989  
Status : Answered  
Chosen Option : 2

Q.10 Distance between two stations P and Q is 500km. A train covers the journey from P to Q at 60km per hour and returns back to P with a uniform speed of 40km per hour. Find the average speed of the train during the whole journey

- Ans
- 1. 28km per hour
  - 2. 55km per hour
  - 3. 60km per hour
  - 4. 48km per hour

Question ID : 630680434504  
Option 1 ID : 6306801695958  
Option 2 ID : 6306801695956  
Option 3 ID : 6306801695955  
Option 4 ID : 6306801695957  
Status : Answered  
Chosen Option : 4

Q.11 A trader marked the selling price of an article at 20% above the cost price. At the time of selling, he allows certain discount and suffers a loss of 10%. He allowed a discount of:

- Ans
- 1. 25%
  - 2. 50%
  - 3. 20%
  - 4. 35%

Question ID : 630680434510  
Option 1 ID : 6306801695979  
Option 2 ID : 6306801695981  
Option 3 ID : 6306801695980  
Option 4 ID : 6306801695982  
Status : Answered  
Chosen Option : 1

Q.12 In a box, the ratio of pens to pencils to 7:6. If there are 180 pencils, the total number of pens and pencils in the box is:

- Ans
- 1. 400
  - 2. 200
  - 3. 390
  - 4. 150

Question ID : 630680434514  
Option 1 ID : 6306801695997  
Option 2 ID : 6306801695995  
Option 3 ID : 6306801695998  
Option 4 ID : 6306801695996  
Status : Answered  
Chosen Option : 3

Q.13 Find the compound interest on Rs.5000 in 2 years at 4% per annum, the interest being compounded half yearly.

- Ans
- 1. Rs.350
  - 2. Rs.500
  - 3. Rs.824.35
  - 4. Rs.412.16

Question ID : 630680434516  
Option 1 ID : 6306801696005  
Option 2 ID : 6306801696004  
Option 3 ID : 6306801696006  
Option 4 ID : 6306801696003  
Status : Answered  
Chosen Option : 4

Q.14 An electric pump can fill a tank in 4 hours. Because of a leak in the tank, it took  $4\frac{1}{2}$  hours to fill the tank. If the tank is full, how much time will the leak take to empty it?

- Ans
- 1. 48hours
  - 2. 21hours
  - 3. 36hours
  - 4. 18hours

Question ID : 630680434517  
Option 1 ID : 6306801696007  
Option 2 ID : 6306801696008  
Option 3 ID : 6306801696009  
Option 4 ID : 6306801696010  
Status : Answered  
Chosen Option : 3

Q.15 A tradesman sold an article at a loss of 10%. If the selling price had been increased by Rs.150, there would have been a gain of 20%. What was the cost price of the article?

- Ans
- 1. Rs.300
  - 2. Rs.600
  - 3. Rs.400
  - 4. Rs.500

Question ID : 630680434508  
Option 1 ID : 6306801695972  
Option 2 ID : 6306801695974  
Option 3 ID : 6306801695971  
Option 4 ID : 6306801695973  
Status : Answered  
Chosen Option : 4

Q.16 7 men and 2 women work together five times as much work as one man and one woman. Find the working capacities of one man and one woman in ratio:

- Ans
- 1. 5:6
  - 2. 1:2
  - 3. 3:2
  - 4. 2:1

Question ID : 630680434518  
Option 1 ID : 6306801696013  
Option 2 ID : 6306801696014  
Option 3 ID : 6306801696012  
Option 4 ID : 6306801696011  
Status : Answered  
Chosen Option : 2

Q.17 If X's income is 60% less than Y's income, by how much percent is Y's income more than X's?

- Ans
- 1. 50%
  - 2. 25%
  - 3. 100%
  - 4. 150%

Question ID : 630680434506  
Option 1 ID : 6306801695966  
Option 2 ID : 6306801695965  
Option 3 ID : 6306801695963  
Option 4 ID : 6306801695964  
Status : Answered  
Chosen Option : 1

Q.18 The average weight of 20 persons is 60kg and that of the remaining 10 persons is 55kg. Find the average weight of all the persons.

- Ans
- 1. 58.33kg
  - 2. 65kg
  - 3. 55kg
  - 4. 48.55kg

Question ID : 630680434505  
Option 1 ID : 6306801695959  
Option 2 ID : 6306801695962  
Option 3 ID : 6306801695961  
Option 4 ID : 6306801695960  
Status : Answered  
Chosen Option : 1

Q.19 The speed of a vehicle increases by 5km after every one hour. If the distance travelled in the first one hour was 30 km, then what was the total distance travelled in 10hours?

- Ans
- 1. 500 km
  - 2. 520 km
  - 3. 525 km
  - 4. 552 km

Question ID : 630680434519  
Option 1 ID : 6306801696015  
Option 2 ID : 6306801696016  
Option 3 ID : 6306801696018  
Option 4 ID : 6306801696017  
Status : Answered  
Chosen Option : 3

Q.20 A boy bought a shirt with 10% discount on the labelled price. He sold the shirt for Rs.1440 with 20% profit on the labelled price. At what price did he buy the shirt?

- Ans
- 1. Rs.1200
  - 2. Rs.1000
  - 3. Rs.900
  - 4. Rs.1080

Question ID : 630680434511  
Option 1 ID : 6306801695983  
Option 2 ID : 6306801695986  
Option 3 ID : 6306801695984  
Option 4 ID : 6306801695985  
Status : Answered  
Chosen Option : 4

Section : Analytical Aptitude

Q.1 Read the following statements and conclusion and choose the best option among the following.

Statements:  
Some plants are mosses.  
All plants are roots.

Conclusions:  
I. All mosses are plants.  
II. At least some mosses are roots.

- Ans
- 1. Neither conclusion I nor conclusion II follows
  - 2. Both conclusion I and conclusion II follow
  - 3. Only conclusion I follows
  - 4. Only conclusion II follows

Question ID : 630680434534  
Option 1 ID : 6306801696075  
Option 2 ID : 6306801696076  
Option 3 ID : 6306801696077  
Option 4 ID : 6306801696078  
Status : Answered  
Chosen Option : 4

Q.2 Five boys are sitting on a bench to get photographed. Sameer is to the immediate left of Ravish and to the immediate right of Bindesh. Mahesh is to the right of Ravish. Ramesh is between Ravish and Mahesh. Bindesh is on the extreme left of the bench. Who is sitting in the middle of the bench?

- Ans
- 1. Sameer
  - 2. Ramesh
  - 3. Mahesh
  - 4. Ravish

Question ID : 630680434522  
Option 1 ID : 6306801696030  
Option 2 ID : 6306801696027  
Option 3 ID : 6306801696029  
Option 4 ID : 6306801696028  
Status : Answered  
Chosen Option : 4

Q.3 If Reena's rank in a group of 48 candidates is 11th from the top, what will be Reena's rank from the bottom?

- Ans
- 1. 47
  - 2. 49
  - 3. 45
  - 4. 48

Question ID : 630680434523  
Option 1 ID : 6306801696034  
Option 2 ID : 6306801696033  
Option 3 ID : 6306801696032  
Option 4 ID : 6306801696031  
Status : Answered  
Chosen Option : 4

Q.4 If  $P > Q > R > S > T > U > V$ , then which is the shortest in the given series?

- Ans
- 1. V
  - 2. T
  - 3. U
  - 4. R

Question ID : 630680434533  
Option 1 ID : 6306801696073  
Option 2 ID : 6306801696071  
Option 3 ID : 6306801696074  
Option 4 ID : 6306801696072  
Status : Answered  
Chosen Option : 1

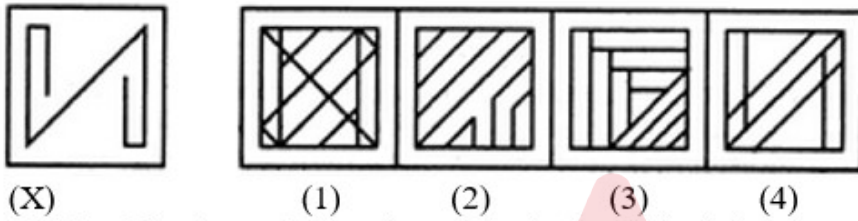


Q.5 In a certain code 'PROSE' is written as 'ESORP'. How would 'VENUS' be written in that code?

- Ans  1. SUNEV  
 2. SUVEN  
 3. VESUN  
 4. VENUS

Question ID : 630680434532  
 Option 1 ID : 6306801696067  
 Option 2 ID : 6306801696069  
 Option 3 ID : 6306801696070  
 Option 4 ID : 6306801696068  
 Status : Answered  
 Chosen Option : 1

Q.6



Which of the above four options embeds the original figure X?

- Ans  1. 2  
 2. 3  
 3. 1  
 4. 4

Question ID : 630680434538  
 Option 1 ID : 6306801696092  
 Option 2 ID : 6306801696093  
 Option 3 ID : 6306801696091  
 Option 4 ID : 6306801696094  
 Status : Answered  
 Chosen Option : 4

Q.7 Kanpur: Green Park:: Lucknow: ?  
 Which of the following will replace the question mark on the basis of cities and cricket stadiums located there?

- Ans  1. Wankhede  
 2. Barabati  
 3. Eden Garden  
 4. Ekana

Question ID : 630680434536  
 Option 1 ID : 6306801696085  
 Option 2 ID : 6306801696086  
 Option 3 ID : 6306801696083  
 Option 4 ID : 6306801696084  
 Status : Answered  
 Chosen Option : 3

Q.8



(X)



(1)



(2)



(3)



(4)

Which of the above four options embeds the original figure X?

- Ans
- 1. 2
  - 2. 3
  - 3. 4
  - 4. 1

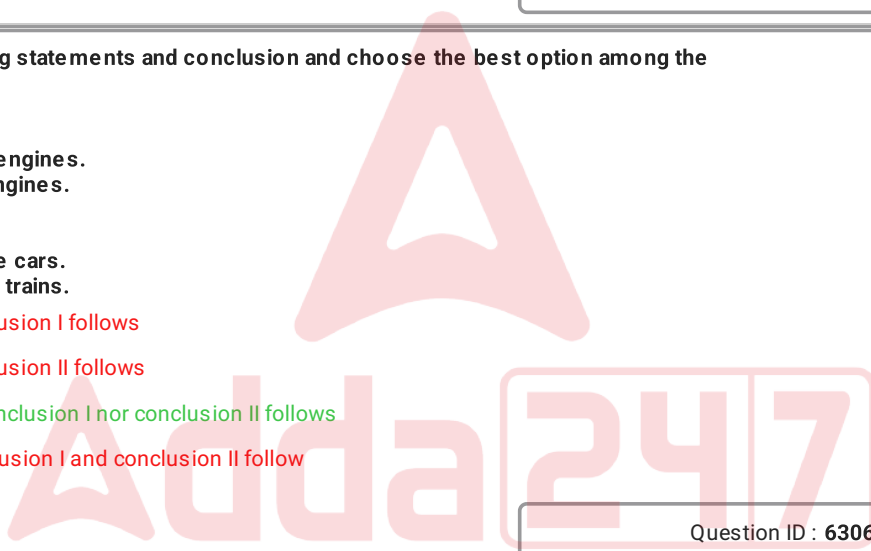
Question ID : 630680434540  
 Option 1 ID : 6306801696100  
 Option 2 ID : 6306801696101  
 Option 3 ID : 6306801696102  
 Option 4 ID : 6306801696099  
 Status : Answered  
 Chosen Option : 4

Q.9 Read the following statements and conclusion and choose the best option among the following.

Statements:  
 All the trains are engines.  
 Some cars are engines.

Conclusions:  
 I. All the trains are cars.  
 II. Some cars are trains.

- Ans
- 1. Only conclusion I follows
  - 2. Only conclusion II follows
  - 3. Neither conclusion I nor conclusion II follows
  - 4. Both conclusion I and conclusion II follow



Question ID : 630680434535  
 Option 1 ID : 6306801696081  
 Option 2 ID : 6306801696082  
 Option 3 ID : 6306801696079  
 Option 4 ID : 6306801696080  
 Status : Answered  
 Chosen Option : 3

Q.10 Five boys are sitting on a bench to get photographed. Sameer is to the immediate left of Ravish and to the immediate right of Bindesh. Mahesh is to the right of Ravish. Ramesh is between Ravish and Mahesh. Bindesh is on the extreme left of the bench. Who is sitting at the extreme right end of the bench?

- Ans
- 1. Ramesh
  - 2. Sameer
  - 3. Mahesh
  - 4. Ravish

Question ID : 630680434521  
Option 1 ID : 6306801696023  
Option 2 ID : 6306801696026  
Option 3 ID : 6306801696024  
Option 4 ID : 6306801696025  
Status : Answered  
Chosen Option : 3

Q.11 Arrange the following words in the order of the dictionary.

1. Oblate
2. Obese
3. Observe
4. Obnoxious

- Ans
- 1. 3 4 2 1
  - 2. 4 3 2 1
  - 3. 2 1 4 3
  - 4. 2 1 3 4

Question ID : 630680434527  
Option 1 ID : 6306801696050  
Option 2 ID : 6306801696049  
Option 3 ID : 6306801696048  
Option 4 ID : 6306801696047  
Status : Answered  
Chosen Option : 3

Q.12 Arrange the following words in the order of the dictionary.

1. Plane
2. Plate
3. Plain
4. Platter

- Ans
- 1. 3 4 2 1
  - 2. 2 3 4 1
  - 3. 2 3 1 4
  - 4. 3 1 2 4

Question ID : 630680434528  
Option 1 ID : 6306801696054  
Option 2 ID : 6306801696051  
Option 3 ID : 6306801696052  
Option 4 ID : 6306801696053  
Status : Answered  
Chosen Option : 4

Q.13 If ROSE is written as RESO, How SOUR will be written in that code?

Ans  1. SRUO

2. SURO

3. SORU

4. SOUR

Question ID : 630680434531

Option 1 ID : 6306801696064

Option 2 ID : 6306801696065

Option 3 ID : 6306801696066

Option 4 ID : 6306801696063

Status : Answered

Chosen Option : 1

Q.14 Pink City: Jaipur:: City of Lakes: ?

Which of the following will replace the question mark on the basis of other special names given on the basis of cities and their characteristics?

Ans  1. Kanpur

2. Udaipur

3. Jodhpur

4. Saharanpur

Question ID : 630680434537

Option 1 ID : 6306801696090

Option 2 ID : 6306801696087

Option 3 ID : 6306801696088

Option 4 ID : 6306801696089

Status : Answered

Chosen Option : 3

Q.15 LNQ, SUX, ZBE, ?

What will come in place of question mark?

Ans  1. LIG

2. GIL

3. IGL

4. LGI

Question ID : 630680434526

Option 1 ID : 6306801696045

Option 2 ID : 6306801696046

Option 3 ID : 6306801696044

Option 4 ID : 6306801696043


Status : Answered

Chosen Option : 2

Q.16



(X)



(1)

(2)

(3)

(4)

Which of the above four options embeds the original figure X?

- Ans
- 1. 3
  - 2. 1
  - 3. 2
  - 4. 4

Question ID : 630680434539  
 Option 1 ID : 6306801696097  
 Option 2 ID : 6306801696095  
 Option 3 ID : 6306801696096  
 Option 4 ID : 6306801696098

Status : Answered

Chosen Option : 4

Q.17 CEG, IKM, OQS, ?

What will come in place of the question mark?

- Ans
- 1. UWY
  - 2. XYZ
  - 3. YWU
  - 4. YUW

Question ID : 630680434525  
 Option 1 ID : 6306801696041  
 Option 2 ID : 6306801696039  
 Option 3 ID : 6306801696040  
 Option 4 ID : 6306801696042

Status : Answered

Chosen Option : 1

Q.18 How many such symbols are there in the given arrangement each of which is immediately followed by a number?

M 4 B \$ N 8 % G 8 # W 4 B 3 G \$ 5 # 6 U 2 & D ! 6 J \* 4 K

- Ans
- 1. 3
  - 2. 1
  - 3. 4
  - 4. 2

Question ID : 630680434529  
 Option 1 ID : 6306801696057  
 Option 2 ID : 6306801696055  
 Option 3 ID : 6306801696058  
 Option 4 ID : 6306801696056

Status : Answered

Chosen Option : 4

Q.19 If all the numbers are dropped from the series, given below which element will be 10 from the left?

M 4 B \$ N 8 % G 8 # W 4 B 3 G \$ 5 # 6 U 2 & D ! 6 J \* 4 K

- Ans
- 1. B
  - 2. &
  - 3. G
  - 4. #

Question ID : 630680434530  
Option 1 ID : 6306801696059  
Option 2 ID : 6306801696062  
Option 3 ID : 6306801696060  
Option 4 ID : 6306801696061  
Status : Answered  
Chosen Option : 3

Q.20 In the group of students, Sujoy is 19th from the top and 25th from the bottom. How many total students are there in the group?

- Ans
- 1. 43
  - 2. 44
  - 3. 41
  - 4. 42

Question ID : 630680434524  
Option 1 ID : 6306801696038  
Option 2 ID : 6306801696037  
Option 3 ID : 6306801696035  
Option 4 ID : 6306801696036  
Status : Answered  
Chosen Option : 1

Section : Ability to observe and distinguish patterns

Q.1  $45.49 + 30.06 + 60.59 = ?$   
What will come at the place of question mark?

- Ans
- 1. 145.16
  - 2. 160.14
  - 3. 136.14
  - 4. 182.16

Question ID : 630680434557  
Option 1 ID : 6306801696168  
Option 2 ID : 6306801696169  
Option 3 ID : 6306801696167  
Option 4 ID : 6306801696170  
Status : Answered  
Chosen Option : 3

Q.2 4, 7, 12, 19, 28, ?

What will come at the place of question mark?

Ans  1. 39

2. 43

3. 37

4. 41

Question ID : 630680434555

Option 1 ID : 6306801696160

Option 2 ID : 6306801696162

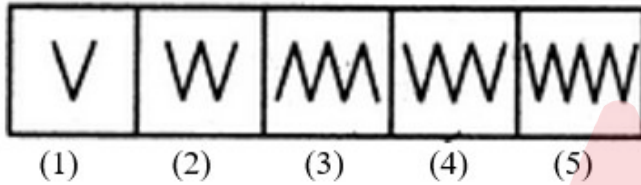
Option 3 ID : 6306801696159

Option 4 ID : 6306801696161

Status : Answered

Chosen Option : 1

Q.3 Find out the odd figure among the following?



Ans  1. 3

2. 4

3. 2

4. 1

Question ID : 630680434550

Option 1 ID : 6306801696141

Option 2 ID : 6306801696142

Option 3 ID : 6306801696140

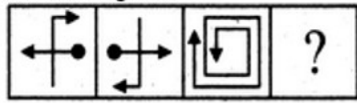
Option 4 ID : 6306801696139

Status : Answered

Chosen Option : 3

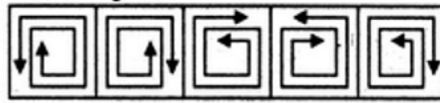
Q.4 Which of the following answer figure would replace the question mark?

Problem Figures:



(A) (B) (C) (D)

Answer Figures:



(1) (2) (3) (4) (5)

- Ans
- 1. 3
  - 2. 2
  - 3. 4
  - 4. 1

Question ID : 630680434548  
 Option 1 ID : 6306801696133  
 Option 2 ID : 6306801696132  
 Option 3 ID : 6306801696134  
 Option 4 ID : 6306801696131  
 Status : Answered  
 Chosen Option : 2

Q.5 13, 17, 29  
 Which of the following pair is similar to the above expression?

- Ans
- 1. 23, 31, 37
  - 2. 44, 15, 33
  - 3. 40, 13, 37
  - 4. 17, 19, 36

Question ID : 630680434560  
 Option 1 ID : 6306801696180  
 Option 2 ID : 6306801696179  
 Option 3 ID : 6306801696181  
 Option 4 ID : 6306801696182  
 Status : Answered  
 Chosen Option : 4

Q.6 W means '+', X means '-', Y means 'x' and Z means  $\div$ , then  
 $7 Y 4 W 5 X 36 Z 6 = ?$

- Ans
- 1. 16
  - 2. 46
  - 3. 27
  - 4. 34

Question ID : 630680434552  
 Option 1 ID : 6306801696147  
 Option 2 ID : 6306801696150  
 Option 3 ID : 6306801696148  
 Option 4 ID : 6306801696149  
 Status : Answered  
 Chosen Option : 3



Q.7 Look at this series:  
62, 66, 63, 67, 64, 68, ?  
What number should fill the blank?

- Ans
- 1. 67
  - 2. 64
  - 3. 69
  - 4. 65

Question ID : 630680434554  
Option 1 ID : 6306801696158  
Option 2 ID : 6306801696157  
Option 3 ID : 6306801696156  
Option 4 ID : 6306801696155  
Status : Answered  
Chosen Option : 4

Q.8 Pointing towards a photograph, Malti says that the woman in the photograph is the only daughter-in-law of her husband's wife's mother-in-law. How is Malti related to the picture towards which Malti is pointing?

- Ans
- 1. Niece
  - 2. Daughter
  - 3. Malti Herself
  - 4. Sister

Question ID : 630680434542  
Option 1 ID : 6306801696107  
Option 2 ID : 6306801696110  
Option 3 ID : 6306801696109  
Option 4 ID : 6306801696108  
Status : Answered  
Chosen Option : 3

Q.9 How is the only son of Priyanka's husband's son's grandmother related to Priyanka?

- Ans
- 1. Father in law
  - 2. Wife
  - 3. Brother
  - 4. Husband

Question ID : 630680434541  
Option 1 ID : 6306801696105  
Option 2 ID : 6306801696104  
Option 3 ID : 6306801696106  
Option 4 ID : 6306801696103  
Status : Answered  
Chosen Option : 4

Q.10  $0.6369 - 0.9341 + 4.329 + 1.003 = ?$   
What will come at the place of question mark?

- Ans
- 1. 4.3476
  - 2. 4.7645
  - 3. 5.0348
  - 4. 5.2378

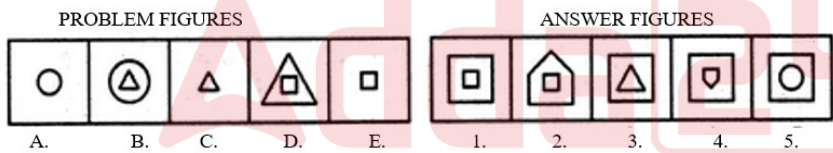
Question ID : 630680434556  
 Option 1 ID : 6306801696163  
 Option 2 ID : 6306801696166  
 Option 3 ID : 6306801696164  
 Option 4 ID : 6306801696165  
 Status : Answered  
 Chosen Option : 3

Q.11 If + means -, × means /, - means + and / means × then find out the answer of the following question.  
 $(100 \times 10) / 15$

- Ans
- 1. 50
  - 2. 200
  - 3. 100
  - 4. 150

Question ID : 630680434553  
 Option 1 ID : 6306801696151  
 Option 2 ID : 6306801696154  
 Option 3 ID : 6306801696152  
 Option 4 ID : 6306801696153  
 Status : Answered  
 Chosen Option : 4

Q.12



Consider the above problem and answer figures and find out the correct answer figure which will complete the series.

- Ans
- 1. 4
  - 2. 1
  - 3. 3
  - 4. 2

Question ID : 630680434546  
 Option 1 ID : 6306801696126  
 Option 2 ID : 6306801696123  
 Option 3 ID : 6306801696125  
 Option 4 ID : 6306801696124  
 Status : Answered  
 Chosen Option : 1

Q.13 Which of the following cities and their countries and capitals is different from the other?

- Ans  1. Dhaka  
 2. Rawalpindi  
 3. Colombo  
 4. New Delhi

Question ID : 630680434544  
 Option 1 ID : 6306801696117  
 Option 2 ID : 6306801696118  
 Option 3 ID : 6306801696116  
 Option 4 ID : 6306801696115  
 Status : Answered  
 Chosen Option : 2

Q.14 **PROBLEM FIGURES** **ANSWER FIGURES**

Consider the above problem and answer figures and find out the correct answer figure which will complete the series.

- Ans  1. 1  
 2. 2  
 3. 3  
 4. 4

Question ID : 630680434547  
 Option 1 ID : 6306801696127  
 Option 2 ID : 6306801696128  
 Option 3 ID : 6306801696129  
 Option 4 ID : 6306801696130  
 Status : Answered  
 Chosen Option : 2

Q.15 7 : 77  
 Which of the following pair is similar to the above expression?

- Ans  1. 9 : 95  
 2. 13 : 91  
 3. 11 : 123  
 4. 11 : 143

Question ID : 630680434558  
 Option 1 ID : 6306801696172  
 Option 2 ID : 6306801696174  
 Option 3 ID : 6306801696173  
 Option 4 ID : 6306801696171  
 Status : Answered  
 Chosen Option : 2

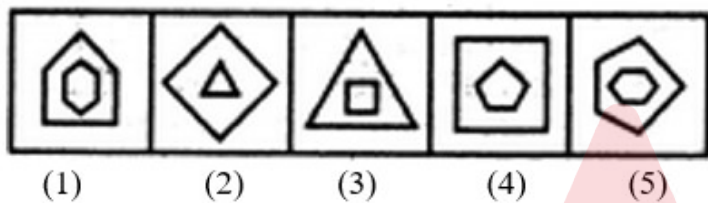
Q.16 12 : 60

Which of the following pair is similar to the above expression?

- Ans  1. 15 : 91  
 2. 17 : 119  
 3. 13 : 78  
 4. 14 : 70

Question ID : 630680434559  
 Option 1 ID : 6306801696176  
 Option 2 ID : 6306801696177  
 Option 3 ID : 6306801696178  
 Option 4 ID : 6306801696175  
 Status : Answered  
 Chosen Option : 3

Q.17 Find out the odd figure among the following?



- Ans  1. 2  
 2. 4  
 3. 1  
 4. 3

Question ID : 630680434549  
 Option 1 ID : 6306801696136  
 Option 2 ID : 6306801696138  
 Option 3 ID : 6306801696135  
 Option 4 ID : 6306801696137  
 Status : Answered  
 Chosen Option : 2

Q.18 If + means -, × means /, - means + and / means × then find out the answer of the following question.  
 $(15 \times 5)/25$

- Ans  1. 50  
 2. 100  
 3. 25  
 4. 75

Question ID : 630680434551  
 Option 1 ID : 6306801696144  
 Option 2 ID : 6306801696146  
 Option 3 ID : 6306801696143  
 Option 4 ID : 6306801696145  
 Status : Answered  
 Chosen Option : 4

Q.19 Which of the following options is different from the others on the basis of the following cities and the states in which these cities are located?

- Ans  1. Raipur  
 2. Udaipur  
 3. Jaipur  
 4. Jodhpur

Question ID : 630680434543

Option 1 ID : 6306801696114

Option 2 ID : 6306801696111

Option 3 ID : 6306801696113

Option 4 ID : 6306801696112

Status : Answered

Chosen Option : 1

Q.20 Based on the following persons and their positions, which of the given options is different from others?

- Ans  1. Jawahar Lal Nehru  
 2. Atal Bihari Bajpai  
 3. Shankar Dayal Sharma  
 4. Vishwanath Pratap Singh

Question ID : 630680434545

Option 1 ID : 6306801696119

Option 2 ID : 6306801696122

Option 3 ID : 6306801696120

Option 4 ID : 6306801696121

Status : Answered

Chosen Option : 2

Section : Basic Knowledge of Hindi

Q.1 गण, समूह, भूतप्रेत आदि किस शब्द के अनेकार्थी है ?

- Ans  1. विवश  
 2. धन  
 3. मनुष्य  
 4. खरल

Question ID : 630680434574

Option 1 ID : 6306801696237

Option 2 ID : 6306801696236

Option 3 ID : 6306801696235

Option 4 ID : 6306801696238

Status : Not Answered

Chosen Option : --

Q.2 निम्न में से " गधा" का पर्यायवाची शब्द क्या होगा ?

- Ans  1. तोय  
 2. खनक  
 3. रासभ  
 4. कर

Question ID : 630680434580

Option 1 ID : 6306801696262

Option 2 ID : 6306801696261

Option 3 ID : 6306801696260

Option 4 ID : 6306801696259

Status : Not Answered

Chosen Option : --

Q.3 निम्नलिखित वाक्यों में से कौन-सा वाक्य अशुद्ध है ?

- Ans  1. इसके बाद क्या हुआ ?  
 2. पुस्तक मेज पर रखी है।  
 3. तुम सबसे सुन्दरतम हो।  
 4. यह मेरे सपनों का घर है।

Question ID : 630680434561

Option 1 ID : 6306801696185

Option 2 ID : 6306801696183

Option 3 ID : 6306801696184

Option 4 ID : 6306801696186

Status : Not Answered

Chosen Option : --

Q.4 निम्न में से 'प्रश्नवाचक चिन्ह' का सही उदाहरण कौन-सा है ?

- Ans  1. मुख्य अतिथि आ गए हैं, वह शीघ्र चले जाएंगे।  
 2. मैं दिन-रात यही सोचता रहा।  
 3. निम्नलिखित प्रश्नों के उत्तर दीजिये :-  
 4. तुम्हारा नाम क्या है ?

Question ID : 630680434579

Option 1 ID : 6306801696255

Option 2 ID : 6306801696256

Option 3 ID : 6306801696258

Option 4 ID : 6306801696257

Status : Not Answered

Chosen Option : --

Q.5 निम्न में से "जय" का विलोम शब्द क्या होगा ?

- Ans  1. प्रजय  
 2. हार  
 3. पराजय  
 4. अजय

Question ID : 630680434571

Option 1 ID : 6306801696223

Option 2 ID : 6306801696225

Option 3 ID : 6306801696226

Option 4 ID : 6306801696224

Status : Not Answered

Chosen Option : --

Q.6 निम्न में से कौन-सा 'सम्बन्धबोधक' शब्द है ?

- Ans  1. तरफ  
 2. ऊपर  
 3. थोड़ा  
 4. इधर

Question ID : 630680434575

Option 1 ID : 6306801696239

Option 2 ID : 6306801696241

Option 3 ID : 6306801696240

Option 4 ID : 6306801696242

Status : Not Answered

Chosen Option : --

Q.7 "महाराजा" शब्द में कौन - सा समास है?

- Ans  1. कर्मधारय समास  
 2. द्वन्द समास  
 3. बहुव्रीहि समास  
 4. द्विगु समास

Question ID : 630680434566

Option 1 ID : 6306801696204

Option 2 ID : 6306801696203

Option 3 ID : 6306801696205

Option 4 ID : 6306801696206

Status : Not Answered

Chosen Option : --

Q.8 "दांत कटी रोटी" मुहावरा का उचित अर्थ बताएं।

- Ans
- 1. पागल हो जाना
  - 2. धोखा देना
  - 3. अति शीघ्र
  - 4. गहरी दोस्ती

Question ID : 630680434567

Option 1 ID : 6306801696209

Option 2 ID : 6306801696210

Option 3 ID : 6306801696208

Option 4 ID : 6306801696207

Status : Not Answered

Chosen Option : --

Q.9 "गिरीश" शब्द में कौन - सा समास है?

- Ans
- 1. द्वन्द समास
  - 2. अव्ययीभाव समास
  - 3. द्विगु समास
  - 4. बहुव्रीहि समास

Question ID : 630680434565

Option 1 ID : 6306801696202

Option 2 ID : 6306801696199

Option 3 ID : 6306801696201

Option 4 ID : 6306801696200

Status : Not Answered

Chosen Option : --

Q.10 निम्नलिखित वाक्यों में से कौन-सा वाक्य शुद्ध है ?

- Ans
- 1. साहित्य और जीवन का घोर सम्बन्ध है।
  - 2. एक गाय, दो धोड़े और एक बकरी मैदान में चर रही है।
  - 3. इस समय आपकी आयु चालीस वर्ष की है।
  - 4. हमारी सौभाग्यवती कन्या का विवाह होने जा रहा है।

Question ID : 630680434562

Option 1 ID : 6306801696189

Option 2 ID : 6306801696187

Option 3 ID : 6306801696190

Option 4 ID : 6306801696188

Status : Not Answered

Chosen Option : --



Q.11 "सर्द हो जाना" मुहावरा का उचित अर्थ बताएं।

- Ans
- 1. मालदार
  - 2. चालाक होना
  - 3. सावधान होना
  - 4. डरना

Question ID : 630680434568

Option 1 ID : 6306801696213

Option 2 ID : 6306801696212

Option 3 ID : 6306801696211

Option 4 ID : 6306801696214

Status : Not Answered

Chosen Option : --

Q.12 "नवनिधि" शब्द में कौन - सा समास है?

- Ans
- 1. अव्ययीभाव समास
  - 2. द्वन्द्व समास
  - 3. तत्पुरुष समास
  - 4. द्विगु समास

Question ID : 630680434564

Option 1 ID : 6306801696196

Option 2 ID : 6306801696197

Option 3 ID : 6306801696198

Option 4 ID : 6306801696195

Status : Not Answered

Chosen Option : --

Q.13 निम्न प्रश्नों में अनेकार्थी शब्द दिए गए हैं। एक अर्थ शब्द के साथ ही लिखा है, दूसरा अर्थ बताएं :

कर - हाथ :

- Ans
- 1. किरण
  - 2. द्रव्य
  - 3. दक्ष
  - 4. दंड

Question ID : 630680434573

Option 1 ID : 6306801696233

Option 2 ID : 6306801696231

Option 3 ID : 6306801696232

Option 4 ID : 6306801696234

Status : Not Answered

Chosen Option : --

Q.14 निम्न में से " आश्रम" का पर्यायवाची शब्द क्या होगा ?

- Ans  1. घर  
 2. मकान  
 3. विहार  
 4. झोंपड़ी

Question ID : 630680434572

Option 1 ID : 6306801696227

Option 2 ID : 6306801696228

Option 3 ID : 6306801696229

Option 4 ID : 6306801696230

Status : Not Answered

Chosen Option : --

Q.15 निम्न में से "गणतन्त्र" का विलोम शब्द क्या होगा ?

- Ans  1. अतन्त्र  
 2. स्वतन्त्र  
 3. परतन्त्र  
 4. राजतन्त्र

Question ID : 630680434570

Option 1 ID : 6306801696219

Option 2 ID : 6306801696222

Option 3 ID : 6306801696220

Option 4 ID : 6306801696221

Status : Not Answered

Chosen Option : --

Q.16 "अधजल गगरी छलकत जाय" लोकोक्ति का उचित अर्थ बताएं।

- Ans  1. अधिक लाभ  
 2. काम न जानना  
 3. मूर्ख धनवान  
 4. गुण की कमी होने पर भी उसी गुण के होने का दिखावा करना

Question ID : 630680434569

Option 1 ID : 6306801696218

Option 2 ID : 6306801696215

Option 3 ID : 6306801696217

Option 4 ID : 6306801696216

Status : Not Answered

Chosen Option : --

Q.17 निम्न में से 'विराम चिन्ह' का सही उदाहरण कौन-सा है ?

- Ans
- 1. रमेश-सुरेश-महेश और वीरेंद्र घुमने गए ।
  - 2. हां, मैं कविता करूँगा ;
  - 3. यह पुस्तक अच्छी है ?
  - 4. परहित सरिस धरम नहीं भाई ।

Question ID : 630680434577

Option 1 ID : 6306801696249

Option 2 ID : 6306801696250

Option 3 ID : 6306801696247

Option 4 ID : 6306801696248

Status : Not Answered

Chosen Option : --

Q.18 निम्न में से 'पूर्ण विराम चिन्ह' कौन-सा है ?

- Ans
- 1. (|)
  - 2. (\*)
  - 3. (-)
  - 4. (!)

Question ID : 630680434578

Option 1 ID : 6306801696251

Option 2 ID : 6306801696252

Option 3 ID : 6306801696253

Option 4 ID : 6306801696254

Status : Not Answered

Chosen Option : --

Q.19 निम्न में से कौन-सा 'समुच्चयबोधक' शब्द है ?

- Ans
- 1. चुप
  - 2. ठीक
  - 3. संग
  - 4. मगर

Question ID : 630680434576

Option 1 ID : 6306801696244

Option 2 ID : 6306801696246

Option 3 ID : 6306801696243

Option 4 ID : 6306801696245

Status : Not Answered

Chosen Option : --

Q.20 निम्नलिखित वाक्यों में से कौन-सा वाक्य शुद्ध है ?

- Ans  1. मुझसे यह काम संभव नहीं हो सकता ।  
 2. मेरे लिए ठंडी बर्फ और गर्म आग लाओ ।  
 3. तब यह काम जरूर हो जायेगा ।  
 4. व्यायाम करना चाहिए जिससे की स्वस्थ रहे ।

Question ID : 630680434563

Option 1 ID : 6306801696192

Option 2 ID : 6306801696194

Option 3 ID : 6306801696193

Option 4 ID : 6306801696191

Status : Not Answered

Chosen Option : --

Section : Basic Knowledge of English

Q.1 Choose the correct word from the given options that suits the question.  
I did not \_\_\_\_\_ what she said.

- Ans  1. hare  
 2. heir  
 3. here  
 4. hear

Question ID : 630680434597

Option 1 ID : 6306801696328

Option 2 ID : 6306801696327

Option 3 ID : 6306801696329

Option 4 ID : 6306801696330

Status : Answered

Chosen Option : 4

Q.2 Select the most appropriate SYNONYM of the given word below.  
Eradicate

- Ans  1. erase  
 2. protect  
 3. preserve  
 4. create

Question ID : 630680434594

Option 1 ID : 6306801696316

Option 2 ID : 6306801696315

Option 3 ID : 6306801696317

Option 4 ID : 6306801696318

Status : Answered

Chosen Option : 1

Q.3 Select the most appropriate SYNONYM of the highlighted word in the below sentence.  
It has been a tumultuous day at the international trade negotiations in Brussels.

- Ans
- 1. calm
  - 2. peaceful
  - 3. turbulent
  - 4. undisturbed

Question ID : 630680434596  
Option 1 ID : 6306801696325  
Option 2 ID : 6306801696323  
Option 3 ID : 6306801696324  
Option 4 ID : 6306801696326  
Status : Answered  
Chosen Option : 2

Q.4 Parts of the following sentence have been given as option that contains an error in spelling. If you do not find any error, mark "No error" as your answer.  
Education opens up various oportunities for individuals.

- Ans
- 1. No error
  - 2. individuals
  - 3. Education
  - 4. oportunities

Question ID : 630680434599  
Option 1 ID : 6306801696337  
Option 2 ID : 6306801696336  
Option 3 ID : 6306801696338  
Option 4 ID : 6306801696335  
Status : Answered  
Chosen Option : 4

Q.5 Choose the most appropriate one-word substitution for the below sentence.  
"A paper written in one's own handwriting"

- Ans
- 1. Epilogue
  - 2. Felicitate
  - 3. Transcript
  - 4. Manuscript

Question ID : 630680434582  
Option 1 ID : 6306801696267  
Option 2 ID : 6306801696270  
Option 3 ID : 6306801696268  
Option 4 ID : 6306801696269  
Status : Answered  
Chosen Option : 4

Q.6 In the following question a statement has been given with highlighted text. You are required to replace the text with correct Idioms or phrases given in the options. I know that your job is not going well, and you are stressed out, but do not worry, things will be better soon , all bad things one day eventually leads to good things.

- Ans  1. Every cloud has a silver lining  
 2. Fair and square  
 3. Having an Ace up the sleeve  
 4. A black sheep

Question ID : 630680434591  
Option 1 ID : 6306801696306  
Option 2 ID : 6306801696305  
Option 3 ID : 6306801696303  
Option 4 ID : 6306801696304  
Status : Answered  
Chosen Option : 4

Q.7 Select the word that needs to be changed to make the sentence correct. Select "No correction required" if there is no need for correction.  
The dumping ground is across the riverside.

- Ans  1. No correction required  
 2. dumping  
 3. across  
 4. riverside

Question ID : 630680434584  
Option 1 ID : 6306801696276  
Option 2 ID : 6306801696277  
Option 3 ID : 6306801696275  
Option 4 ID : 6306801696278  
Status : Answered  
Chosen Option : 2

Q.8 Select the most appropriate SYNONYM of the given word below.  
Antagonist

- Ans  1. Partner  
 2. Enemy  
 3. Fellow  
 4. Friend

Question ID : 630680434593  
Option 1 ID : 6306801696314  
Option 2 ID : 6306801696313  
Option 3 ID : 6306801696312  
Option 4 ID : 6306801696311  
Status : Answered  
Chosen Option : 2

Q.9 Select the most appropriate SYNONYM of the highlighted word in the below sentence.

My car was completely wrecked in the accident.

- Ans
- 1. reared
  - 2. ruined
  - 3. constructed
  - 4. fixed

Question ID : 630680434595  
Option 1 ID : 6306801696320  
Option 2 ID : 6306801696322  
Option 3 ID : 6306801696319  
Option 4 ID : 6306801696321  
Status : Answered  
Chosen Option : 2

Q.10 Select the most appropriate options from below which changes the following active sentences into passive voice.

I gave her a book for her birthday.

- Ans
- 1. She is giving a book for his birthday.
  - 2. She was given a book for her birthday.
  - 3. She had been gave a book for his birthday.
  - 4. For her birthday, a book was given to her.

Question ID : 630680434588  
Option 1 ID : 6306801696294  
Option 2 ID : 6306801696292  
Option 3 ID : 6306801696291  
Option 4 ID : 6306801696293  
Status : Answered  
Chosen Option : 2

Q.11 In the following question a statement has been given with highlighted text. You are required to replace the text with correct Idioms or phrases given in the options.  
I was driving through heavy traffic and managed to reach the interview just in time, by a narrow margin.

- Ans
- 1. the skin of my teeth
  - 2. Down for the count
  - 3. Draw the line
  - 4. Easier said than done

Question ID : 630680434592  
Option 1 ID : 6306801696307  
Option 2 ID : 6306801696308  
Option 3 ID : 6306801696309  
Option 4 ID : 6306801696310  
Status : Answered  
Chosen Option : 2

Q.12 Select the most appropriate options from below which changes the following direct sentences into indirect sentences.  
She said, " I am not feeling well today."

- Ans
- 1. She said that she was not feeling well that day.
  - 2. Today she was not feeling well was told to me.
  - 3. She told me that she has not been feeling well that day.
  - 4. She is telling she was not feeling well today.

Question ID : 630680434585  
Option 1 ID : 6306801696281  
Option 2 ID : 6306801696282  
Option 3 ID : 6306801696280  
Option 4 ID : 6306801696279  
Status : Answered  
Chosen Option : 1

Q.13 Select the most appropriate meaning of the idiom below.  
"Pull Someone's Leg"

- Ans
- 1. Calm down
  - 2. Something common
  - 3. Better to arrive late than not to come at all
  - 4. to deceive or joke in a playful, harmless way

Question ID : 630680434589  
Option 1 ID : 6306801696296  
Option 2 ID : 6306801696295  
Option 3 ID : 6306801696298  
Option 4 ID : 6306801696297  
Status : Answered  
Chosen Option : 1

Q.14 Choose the most appropriate one-word substitution for the below sentence.  
"A group of stars that form a particular shape"

- Ans
- 1. Constellation
  - 2. Galaxy
  - 3. Cluster
  - 4. Black hole

Question ID : 630680434581  
Option 1 ID : 6306801696266  
Option 2 ID : 6306801696263  
Option 3 ID : 6306801696264  
Option 4 ID : 6306801696265  
Status : Answered  
Chosen Option : 2



Q.15 Choose the correct word from the given options that suits the question.  
They tried to \_\_\_\_\_ the painting.

- Ans  1. stale  
 2. steal  
 3. steel  
 4. tale

Question ID : 630680434598  
Option 1 ID : 6306801696331  
Option 2 ID : 6306801696334  
Option 3 ID : 6306801696333  
Option 4 ID : 6306801696332  
Status : Answered  
Chosen Option : 1

Q.16 Parts of the following sentence have been given as option that contains an error in spelling. If you do not find any error, mark "No error" as your answer.  
The anoanymity provided by technology makes it easier for individuals to bully others without any fear of consequences.

- Ans  1. anoanymity  
 2. individuals  
 3. technology  
 4. No error

Question ID : 630680434600  
Option 1 ID : 6306801696342  
Option 2 ID : 6306801696341  
Option 3 ID : 6306801696339  
Option 4 ID : 6306801696340  
Status : Answered  
Chosen Option : 4

Q.17 Select the most appropriate options from below which changes the following active sentences into passive voice.  
His grandmother looked after him.

- Ans  1. His grandmother was looking after by him.  
 2. He would have been looked after by his grandmother.  
 3. He was look after through his grandmother.  
 4. He was looked after by his grandmother.

Question ID : 630680434587  
Option 1 ID : 6306801696288  
Option 2 ID : 6306801696287  
Option 3 ID : 6306801696290  
Option 4 ID : 6306801696289  
Status : Answered  
Chosen Option : 4

Q.18 Select the most appropriate options from below which changes the following direct sentences into indirect sentences.  
She said, "Her sister can dance."

- Ans
- 1. She said that her sister could dance.
  - 2. She has told that her sister can dance.
  - 3. She told that her sister can dance.
  - 4. Her sister dances very well was told by her.

Question ID : 630680434586  
Option 1 ID : 6306801696286  
Option 2 ID : 6306801696283  
Option 3 ID : 6306801696285  
Option 4 ID : 6306801696284  
Status : Answered  
Chosen Option : 1

Q.19 Select the most appropriate meaning of the idiom below.  
"Break a leg"

- Ans
- 1. used to wish someone good luck
  - 2. Slow down
  - 3. Used to wish someone bad luck
  - 4. to be jealous of someone

Question ID : 630680434590  
Option 1 ID : 6306801696300  
Option 2 ID : 6306801696302  
Option 3 ID : 6306801696299  
Option 4 ID : 6306801696301  
Status : Answered  
Chosen Option : 3

Q.20 Select the word that needs to be changed to make the sentence correct. Select "No correction required" if there is no need for correction.  
The dog jumped in the hurdle.

- Ans
- 1. jumped
  - 2. the
  - 3. No correction required
  - 4. in

Question ID : 630680434583  
Option 1 ID : 6306801696272  
Option 2 ID : 6306801696271  
Option 3 ID : 6306801696273  
Option 4 ID : 6306801696274  
Status : Answered  
Chosen Option : 3