

NTA UGC NET December 2025 31st Dec to 7th Jan 2026

Application No	
Candidate Name	
Roll No.	
Test Date	02/01/2026
Test Time	3:00 PM - 6:00 PM
Subject	81 Social Medicine and Community Health

Section : General Paper

Comprehension:

Study carefully the table given below and answer the question asked here under.
The following table gives the marks (out of 100) of five students (i.e. A, B, C, D and E) over the years 2021 to 2025.

Year	STUDENTS NAME				
	A	B	C	D	E
2021	75	82	75	84	74
2022	90	93	85	86	79
2023	96	76	65	85	85
2024	92	85	66	81	82
2025	86	82	73	80	83

SubQuestion No : 1

- Q1 In terms of the cumulative marks from 2021 to 2025, which of the following students has scored maximum marks ?
- (1) A
(2) B
(3) C
(4) D

- Options 1. 1
2. 2
3. 3
4. 4

Question Type : MCQ
Question ID : 432449156
Option 1 ID : 432449601
Option 2 ID : 432449602
Option 3 ID : 432449603
Option 4 ID : 432449604
Status : Answered
Chosen Option : 3

Adda247

Test Prime

ALL EXAMS, ONE SUBSCRIPTION



1,00,000+
Mock Tests



**Personalised
Report Card**



**Unlimited
Re-Attempt**



600+
Exam Covered



25,000+ Previous
Year Papers



500%
Refund



ATTEMPT FREE MOCK NOW

Comprehension:

Study carefully the table given below and answer the question asked here under.
The following table gives the marks (out of 100) of five students (i.e. A, B, C, D and E) over the years 2021 to 2025.

Year	STUDENTS NAME				
	A	B	C	D	E
2021	75	82	75	84	74
2022	90	93	85	86	79
2023	96	76	65	85	85
2024	92	85	66	81	82
2025	86	82	73	80	83

SubQuestion No : 2

- Q2 If we compare the cumulative combined marks of students A and B over the years with those of students C and D, then the marks scored by A and B together are more than those scored by C and D, by approximately what percent ?
- (1) 77

(2) 91

(3) 15

(4) 10

- Options 1. 1
2. 2
3. 3
4. 4

Question Type : MCQ

Question ID : 432449160

Option 1 ID : 432449617


Option 2 ID : 432449618

Option 3 ID : 432449619

Option 4 ID : 432449620

Status : Answered

Chosen Option : 1



Comprehension:

Study carefully the table given below and answer the question asked here under.
The following table gives the marks (out of 100) of five students (i.e. A, B, C, D and E) over the years 2021 to 2025.


Year	STUDENTS NAME				
	A	B	C	D	E
2021	75	82	75	84	74
2022	90	93	85	86	79
2023	96	76	65	85	85
2024	92	85	66	81	82
2025	86	82	73	80	83

SubQuestion No : 3

- Q3 Which year witnessed the lowest average marks attained by the students ?
- (1) 2021
(2) 2022
(3) 2023
(4) 2024

- Options 1. 1
2. 2
3. 3
4. 4

Question Type : MCQ
Question ID : 432449157
Option 1 ID : 432449605
Option 2 ID : 432449606
Option 3 ID : 432449607
Option 4 ID : 432449608
Status : Answered
Chosen Option : 1



Comprehension:

Study carefully the table given below and answer the question asked here under.
The following table gives the marks (out of 100) of five students (i.e. A, B, C, D and E) over the years 2021 to 2025.


Year	STUDENTS NAME				
	A	B	C	D	E
2021	75	82	75	84	74
2022	90	93	85	86	79
2023	96	76	65	85	85
2024	92	85	66	81	82
2025	86	82	73	80	83

SubQuestion No : 4

- Q4 What was the approximate percentage increase of marks for student C from 2023 to 2025 ?
- (1) 7
(2) 8
(3) 12
(4) 18

- Options 1 1
2 2
3 3
4 4

Question Type : MCQ
Question ID : 432449159
Option 1 ID : 432449613
Option 2 ID : 432449614
Option 3 ID : 432449615
Option 4 ID : 432449616
Status : Answered
Chosen Option : 2



Comprehension:

Study carefully the table given below and answer the question asked here under.
The following table gives the marks (out of 100) of five students (i.e. A, B, C, D and E) over the years 2021 to 2025.

Year	STUDENTS NAME				
	A	B	C	D	E
2021	75	82	75	84	74
2022	90	93	85	86	79
2023	96	76	65	85	85
2024	92	85	66	81	82
2025	86	82	73	80	83

SubQuestion No : 5

- Q5 How many students experienced continuous decrease in marks obtained from 2023 to 2025 ?
- (1) one
 - (2) two
 - (3) three
 - (4) four

- Options
- 1. 1
 - 2. 2
 - 3. 3
 - 4. 4

Question Type : MCQ
Question ID : 432449158
Option 1 ID : 432449609
Option 2 ID : 432449610
Option 3 ID : 432449611
Option 4 ID : 432449612
Status : Answered
Chosen Option : 3

- Q6 View of mass communication as the representation of shared belief where reality is produced, maintained, repaired, and transformed, is known as the :
- (1) Transmissional Perspective
 - (2) Publicity Perspective
 - (3) Ritual Perspective
 - (4) Critical Perspective

- Options
- 1. 1
 - 2. 2
 - 3. 3
 - 4. 4

Question Type : MCQ
Question ID : 432449174
Option 1 ID : 432449673
Option 2 ID : 432449674
Option 3 ID : 432449675
Option 4 ID : 432449676
Status : Answered
Chosen Option : 1

Q7 Given below are two statements : one is labelled as **Assertion (A)** and the other is labelled as **Reason (R)**.

Assertion (A) : People who are shown Television news edited to draw attention to a particular problem, assign greater importance to that problem.

Reason (R) : People learn how much importance to attach to an issue or topic from the emphasis the mass media places upon it.

In the light of the above statements, choose the **most appropriate answer** from the options given below :

- (1) Both (A) and (R) are correct and (R) is the correct explanation of (A)
- (2) Both (A) and (R) are correct but (R) is **not** the correct explanation of (A)
- (3) (A) is correct but (R) is not correct
- (4) (A) is not correct but (R) is correct

- Options 1 1
2 2
3 3
4 4

Question Type : MCQ
Question ID : 432449171
Option 1 ID : 432449661
Option 2 ID : 432449662
Option 3 ID : 432449663
Option 4 ID : 432449664
Status : Answered
Chosen Option : 3

Q8 Arrange the following in sequence according to Nowak and Warneryd’s model of a communication campaign.

- A. Manipulative Factors
- B. Receiving Group
- C. Obtained Effect
- D. Intended Effect
- E. Points of Departure

Choose the **correct** answer from the options given below :

- (1) A, D, B, E, C
- (2) D, E, B, A, C
- (3) E, D, B, A, C
- (4) A, C, D, B, E

- Options 1 1
2 2
3 3
4 4

Question Type : MCQ
Question ID : 432449172
Option 1 ID : 432449665
Option 2 ID : 432449666
Option 3 ID : 432449667
Option 4 ID : 432449668
Status : Answered
Chosen Option : 2

Q9

The biogas is a mixture of _____.

- (1) Methane and ethane
- (2) Methane and hydrogen
- (3) Ethanol and methane
- (4) Oxygen and butane

Options 1 1

2 2

3 3

4 4

Question Type : MCQ

Question ID : 432449195

Option 1 ID : 432449757

Option 2 ID : 432449758

Option 3 ID : 432449759

Option 4 ID : 432449760

Status : Answered

Chosen Option : 2

Q10

Arrange the following sheaths of personality from lower order to higher order :

- A. Anandmaya Kosh (Blissful Sheath)
- B. Pranmaya Kosh (Vital Sheath)
- C. Annamay Kosh (Physical Sheath)
- D. Vijnanmaya Kosh (Intellect Sheath)
- E. Manomaya Kosh (Mental Sheath)

Choose the **correct** answer from the options given below :

- (1) E, D, C, B, A
- (2) C, B, E, D, A
- (3) B, E, D, C, A
- (4) E, D, A, C, B

Options 1 1

2 2

3 3

4 4

Question Type : MCQ

Question ID : 432449164

Option 1 ID : 432449633

Option 2 ID : 432449634

Option 3 ID : 432449635

Option 4 ID : 432449636

Status : Answered

Chosen Option : 2

Q11 Match List - I with List - II.

List - I		List - II	
Word		Code	
A.	BROWN	I.	50
B.	TRING	II.	72
C.	APPLE	III.	67
D.	WATER	IV.	68

Choose the correct answer from the options given below :

- (1) A-II, B-IV, C-I, D-III
- (2) A-I, B-II, C-IV, D-III
- (3) A-II, B-I, C-IV, D-III
- (4) A-IV, B-II, C-III, D-I

- Options 1 1
2 2
3 3
4 4

Question Type : MCQ
Question ID : 432449180
Option 1 ID : 432449697
Option 2 ID : 432449698
Option 3 ID : 432449699
Option 4 ID : 432449700
Status : Answered
Chosen Option : 3

Q12 Suppose the water of a lake is contaminated by a pesticide. Arrange the following in the increasing order of accumulated concentration of the pesticide in the lake ecosystem.

- A. Water
- B. Zooplankton
- C. Phytoplankton
- D. Fish
- E. Bird

Choose the correct answer from the options given below :

- (1) E, D, C, B, A
- (2) A, B, C, D, E
- (3) A, C, B, D, E
- (4) C, B, D, E, A

- Options 1 1
2 2
3 3
4 4

Question Type : MCQ
Question ID : 432449192
Option 1 ID : 432449745
Option 2 ID : 432449746
Option 3 ID : 432449747
Option 4 ID : 432449748
Status : Answered
Chosen Option : 3

- Q13 Identify the correct logical sequence for programming :
- A. Compilation
 - B. Editing
 - C. Linking
 - D. Execution

Choose the **correct** answer from the options given below :

- (1) D, B, A, C
- (2) A, B, D, C
- (3) A, B, C, D
- (4) B, A, C, D

Options 1 1

2 2

3 3

4 4

Question Type : MCQ
Question ID : 432449186
Option 1 ID : 432449721
Option 2 ID : 432449722
Option 3 ID : 432449723
Option 4 ID : 432449724
Status : Answered
Chosen Option : 2

- Q14 Match List - I with List - II.

List - I

- A. Writing Disability
- B. Socio-Economically Disadvantaged Group
- C. National Mission for Mentoring
- D. National Assessment Centre

List - II

- I. Gender Identities
- II. Dysgraphia
- III. PARAKH
- IV. NCTE

Choose the **correct** answer from the options given below :

- (1) A-IV, B-I, C-III, D-II
- (2) A-III, B-I, C-IV, D-II
- (3) A-II, B-I, C-IV, D-III
- (4) A-II, B-III, C-IV, D-I

Options 1 1

2 2

3 3

4 4

Question Type : MCQ
Question ID : 432449162
Option 1 ID : 432449625
Option 2 ID : 432449626
Option 3 ID : 432449627
Option 4 ID : 432449628
Status : Answered
Chosen Option : 3

- Q15** In the National Education Policy-2020, which body has been proposed to frame 'graduate attributes' for higher education programme ?
- (1) University Grants Commission
 - (2) University Departments of Curriculum Studies
 - (3) National Council for Teacher Education
 - (4) General Education Council

Options 1. 1
2. 2
3. 3
4. 4

Question Type : MCQ
Question ID : 432449196
Option 1 ID : 432449761
Option 2 ID : 432449762
Option 3 ID : 432449763
Option 4 ID : 432449764
Status : Answered
Chosen Option : 2

- Q16** Given below are two statements : one is labelled as **Assertion (A)** and the other is labelled as **Reason (R)**.
Assertion (A) : Increase in average sea surface temperature will contribute towards enhancement of atmospheric CO₂ concentration.
Reason (R) : Increase in sea surface temperature increases the solubility of CO₂ in ocean water.
In the light of the above statements, choose the **most appropriate answer** from the options given below :
- (1) Both (A) and (R) are correct and (R) is the correct explanation of (A)
 - (2) Both (A) and (R) are correct but (R) is **not** the correct explanation of (A)
 - (3) (A) is correct but (R) is not correct
 - (4) (A) is not correct but (R) is correct

Options 1. 1
2. 2
3. 3
4. 4

Question Type : MCQ
Question ID : 432449191
Option 1 ID : 432449741
Option 2 ID : 432449742
Option 3 ID : 432449743
Option 4 ID : 432449744
Status : Answered
Chosen Option : 1

Q17 Given below are two statements : one is labelled as **Assertion (A)** and the other is labelled as **Reason (R)**.
Assertion (A) : Certain degree of intelligence is required for creative thinking.
Reason (R) : Students with high intelligence are not necessarily creative.
In the light of the above statements, choose the **most appropriate answer** from the options given below :

(1) Both (A) and (R) are correct and (R) is the correct explanation of (A)
(2) Both (A) and (R) are correct but (R) is **not** the correct explanation of (A)
(3) (A) is correct but (R) is not correct
(4) (A) is not correct but (R) is correct

- Options 1 1
2 2
3 3
4 4

Question Type : MCQ
Question ID : 432449161
Option 1 ID : 432449621
Option 2 ID : 432449622
Option 3 ID : 432449623
Option 4 ID : 432449624
Status : Answered
Chosen Option : 3

Q18 Match List - I with List - II.

List - I	List - II
Mixed Method Design	Nature
A. QUAN → qual	I. Exploratory sequential design
B. <div>QUAL quan</div>	II. Explanatory sequential design
C. QUAL → quan	III. Embedded design
D. QUAN + QUAL	IV. Convergent parallel design

Choose the **correct answer** from the options given below :

(1) A-II, B-I, C-IV, D-III
(2) A-III, B-II, C-I, D-IV
(3) A-I, B-II, C-IV, D-III
(4) A-II, B-III, C-I, D-IV

- Options 1 1
2 2
3 3
4 4

Question Type : MCQ
Question ID : 432449168
Option 1 ID : 432449649
Option 2 ID : 432449650
Option 3 ID : 432449651
Option 4 ID : 432449652
Status : Answered
Chosen Option : 2

- Q19 Being a constructivist teacher, you will NOT do what ?
- (1) Making your learner more active.
 - (2) Giving opportunity to learners to integrate what is presented and what they already know.
 - (3) Considering learners as sense makers who construct knowledge.
 - (4) Giving study materials to learners to recall the contents proficiently.

Options 1 1
2 2
3 3
4 4

Question Type : MCQ
Question ID : 432449165
Option 1 ID : 432449637
Option 2 ID : 432449638
Option 3 ID : 432449639
Option 4 ID : 432449640
Status : Answered
Chosen Option : 3

- Q20 Which term is **not** related to computer hardware ?
- (1) Mother board
 - (2) Registers
 - (3) Algorithm
 - (4) Flip-flop

Options 1 1
2 2
3 3
4 4

Question Type : MCQ
Question ID : 432449189
Option 1 ID : 432449733
Option 2 ID : 432449734
Option 3 ID : 432449735
Option 4 ID : 432449736
Status : Answered
Chosen Option : 2

Q21

Which of the following are **true** ?

- A. Some valid arguments contain false premises and a false conclusion.
- B. An argument can be invalid even if all the premises are true and the conclusion is true as well.
- C. When an argument is valid and all of its premises are true, it is called sound argument.
- D. The truth or falsity of the premises in an argument does not determine the soundness of the argument.

Choose the **correct** answer from the options given below :

- (1) A, B and C Only
- (2) A and B Only
- (3) A, C and D Only
- (4) B, C and D Only

Options 1 1

2 2

3 3

4 4

Question Type : MCQ

Question ID : 432449184

Option 1 ID : 432449713

Option 2 ID : 432449714

Option 3 ID : 432449715

Option 4 ID : 432449716

Status : Answered

Chosen Option : 2



Q22

Arrange the following fractions in ascending order :

A. $\frac{5}{8}$

B. $\frac{7}{12}$

C. $\frac{13}{16}$

D. $\frac{16}{29}$

E. $\frac{3}{4}$

Choose the **correct** answer from the options given below :

(1) $B < D < A < C < E$

(2) $B < C < D < E < A$

(3) $D < B < A < E < C$

(4) $D < E < B < A < C$

Options 1 1

2 2

3 3

4 4

Question Type : MCQ

Question ID : 432449178

Option 1 ID : 432449689

Option 2 ID : 432449690

Option 3 ID : 432449691

Option 4 ID : 432449692

Status : Answered

Chosen Option : 2

Q23

The next term in the following series is :

CMO, FPR, ISU, __?

- (1) JLO
- (2) PSU
- (3) LVX
- (4) LOQ

Options 1 1

2 2

3 3

4 4

Question Type : MCQ
Question ID : 432449177
Option 1 ID : 432449685
Option 2 ID : 432449686
Option 3 ID : 432449687
Option 4 ID : 432449688
Status : Answered
Chosen Option : 3

Q24

Given below are two statements : one is labelled as **Assertion (A)** and the other is labelled as **Reason (R)**.

Assertion (A) : Education builds character, and enables learners to be ethical, rational, compassionate, and caring.

Reason (R) : Our current education policy proposes curriculum and pedagogy of Higher Education Institutions (HEIs) to develop among the students a deep sense of respect towards the fundamental duties and constitutional values.

In the light of the above statements, choose the **most appropriate answer** from the options given below :

- (1) Both (A) and (R) are correct and (R) is the correct explanation of (A)
- (2) Both (A) and (R) are correct but (R) is **not** the correct explanation of (A)
- (3) (A) is correct but (R) is not correct
- (4) (A) is not correct but (R) is correct

Options 1 1

2 2

3 3

4 4

Question Type : MCQ
Question ID : 432449198
Option 1 ID : 432449769
Option 2 ID : 432449770
Option 3 ID : 432449771
Option 4 ID : 432449772
Status : Answered
Chosen Option : 3

Q25 Given below are two statements : one is labelled as **Assertion (A)** and the other is labelled as **Reason (R)**.

Assertion (A) : An argument can never be valid, if all the premises are false and conclusion is false as well.

Reason (R) : If an argument is valid and its premises are true, we may be certain that its conclusion is true also.

In the light of the above statements, choose the **most appropriate answer** from the options given below :

- (1) Both (A) and (R) are correct and (R) is the correct explanation of (A)
- (2) Both (A) and (R) are correct but (R) is **not** the correct explanation of (A)
- (3) (A) is correct but (R) is not correct
- (4) (A) is not correct but (R) is correct

Options 1 1
2 2
3 3
4 4

Question Type : MCQ
Question ID : 432449183
Option 1 ID : 432449709
Option 2 ID : 432449710
Option 3 ID : 432449711
Option 4 ID : 432449712
Status : Answered
Chosen Option : 4

Q26 If we suggest that x causes y , can we be sure that it is x that is responsible for the variation in y ?
This relates to :

- (1) external validity
- (2) reliability
- (3) internal validity
- (4) ecological validity

Options 1 1
2 2
3 3
4 4

Question Type : MCQ
Question ID : 432449170
Option 1 ID : 432449657
Option 2 ID : 432449658
Option 3 ID : 432449659
Option 4 ID : 432449660
Status : Answered
Chosen Option : 2

- Q27** Qualitative content analysis of documents relating to different time periods, pertains to which of the following research designs ?
- (1) cross-sectional
 - (2) longitudinal
 - (3) comparative
 - (4) experimental

Options 1 1
2 2
3 3
4 4

Question Type : MCQ
Question ID : 432449169
Option 1 ID : 432449653
Option 2 ID : 432449654
Option 3 ID : 432449655
Option 4 ID : 432449656
Status : Answered
Chosen Option : 3

- Q28** Match List - I with List - II.
- | List - I (Term) | List - II (Meaning/Related with) |
|------------------|---|
| A. Affirmation | I. Attempt to undermine an image |
| B. Reaffirmation | II. Creation of a particular mental image for the audience |
| C. Purification | III. Refining a previously established image for the audience |
| D. Subversion | IV. Revitalizing an image for the audience |
- Choose the **correct** answer from the options given below :
- (1) A-III, B-IV, C-II, D-I
 - (2) A-II, B-IV, C-III, D-I
 - (3) A-I, B-IV, C-II, D-III
 - (4) A-III, B-II, C-IV, D-I

Options 1 1
2 2
3 3
4 4

Question Type : MCQ
Question ID : 432449173
Option 1 ID : 432449669
Option 2 ID : 432449670
Option 3 ID : 432449671
Option 4 ID : 432449672
Status : Answered
Chosen Option : 2

Q29 Match List - I with List - II.

List - I (Standard Form Categorical Propositions)	List - II (Symbolic Representation)
A. All S is P.	I. $SP \neq 0$
B. No S is P.	II. $S\bar{P} \neq 0$
C. Some S is P.	III. $SP = 0$
D. Some S is not P.	IV. $S\bar{P} = 0$

Choose the **correct** answer from the options given below :

(1) A-II, B-III, C-IV, D-I
(2) A-III, B-I, C-II, D-IV
(3) A-IV, B-III, C-I, D-II
(4) A-I, B-II, C-III, D-IV

Options 1 1
2 2
3 3
4 4

Question Type : MCQ
Question ID : 432449182
Option 1 ID : 432449705
Option 2 ID : 432449706
Option 3 ID : 432449707
Option 4 ID : 432449708
Status : Answered
Chosen Option : 3

Q30 Match List - I with List - II.

List - I	List - II
A. Phishing	I. Malicious code installed on a user's computer or a web server
B. Pharming	II. Creator sends out legitimate-looking emails to target users
C. Spyware	III. Code that can replicate itself with the intention of deleting or corrupting files on the computer
D. Virus	IV. Software that gathers data by monitoring key presses on a user's computer keyboard

Choose the **correct** answer from the options given below :

(1) A-I, B-III, C-II, D-IV
(2) A-I, B-II, C-IV, D-III
(3) A-II, B-I, C-IV, D-III
(4) A-I, B-IV, C-II, D-III

Options 1 1
2 2
3 3
4 4

Question Type : MCQ
Question ID : 432449188
Option 1 ID : 432449729
Option 2 ID : 432449730
Option 3 ID : 432449731
Option 4 ID : 432449732
Status : Answered
Chosen Option : 3

Q31 The study of the communicative effect of time is known as :

- (1) Chronemics
- (2) Polychronic
- (3) Monochronic
- (4) Haptics

Options 1 1
2 2
3 3
4 4

Question Type : MCQ
Question ID : 432449175
Option 1 ID : 432449677
Option 2 ID : 432449678
Option 3 ID : 432449679
Option 4 ID : 432449680
Status : Answered
Chosen Option : 3

Q32 The Blue-Baby Syndrome is caused by the contamination of _____ in drinking water.

- (1) Mercury
- (2) Lead
- (3) Nitrate
- (4) Arsenic

Options 1 1
2 2
3 3
4 4

Question Type : MCQ
Question ID : 432449194
Option 1 ID : 432449753
Option 2 ID : 432449754
Option 3 ID : 432449755
Option 4 ID : 432449756
Status : Answered
Chosen Option : 4

- Q33 Which of the following are true ?
- A. In Equivocation fallacy, two or more meanings of the same word create confusion.
 - B. Amphiboly is not a fallacy of Ambiguity.
 - C. Accent is a fallacy that moves in a circle.
 - D. Composition and division are fallacies of ambiguity.
- Choose the **correct** answer from the options given below :
- (1) A and D Only
 - (2) B and C Only
 - (3) A and B Only
 - (4) A, B, C and D

Options 1 1
2 2
3 3
4 4

Question Type : MCQ
Question ID : 432449185
Option 1 ID : 432449717
Option 2 ID : 432449718
Option 3 ID : 432449719
Option 4 ID : 432449720
Status : Answered
Chosen Option : 2

- Q34 Match List - I with List - II.

List - I (Disaster)	List - II (Related Term)
A. Tropical Cyclone	I. Solifluction
B. Landslides	II. Shock waves
C. Drought	III. Storm surges
D. Earthquake	IV. Famine

- Choose the **correct** answer from the options given below :
- (1) A-I, B-II, C-III, D-IV
 - (2) A-III, B-I, C-IV, D-II
 - (3) A-II, B-I, C-III, D-IV
 - (4) A-IV, B-II, C-III, D-I

Options 1 1
2 2
3 3
4 4

Question Type : MCQ
Question ID : 432449193
Option 1 ID : 432449749
Option 2 ID : 432449750
Option 3 ID : 432449751
Option 4 ID : 432449752
Status : Answered
Chosen Option : 2

- Q35** As per the information processing approach of learning, which of the following statements is NOT correct ?
- (1) Learning is the construction of knowledge.
 - (2) Memory is the storage of knowledge.
 - (3) Thinking is the logical manipulation of knowledge.
 - (4) This approach doesn't categorize the types of knowledge.

Options 1 1
2 2
3 3
4 4

Question Type : MCQ
Question ID : 432449163
Option 1 ID : 432449629
Option 2 ID : 432449630
Option 3 ID : 432449631
Option 4 ID : 432449632
Status : Answered
Chosen Option : 4

- Q36** Match List - I with List - II.
- | List - I | List - II |
|----------------------|--|
| Body of a University | Function |
| A. Court/Senate | I. Principle decision making body on academic matters |
| B. Executive Council | II. To review and advise on the broad policies of the university |
| C. Academic Council | III. Highest decision making body having members from various fields |
| D. Board of Studies | IV. Department specific academic body |
- Choose the **correct** answer from the options given below :
- (1) A-III, B-II, C-IV, D-I
 - (2) A-II, B-IV, C-I, D-III
 - (3) A-IV, B-I, C-III, D-II
 - (4) A-II, B-III, C-I, D-IV

Options 1 1
2 2
3 3
4 4

Question Type : MCQ
Question ID : 432449200
Option 1 ID : 432449777
Option 2 ID : 432449778
Option 3 ID : 432449779
Option 4 ID : 432449780
Status : Answered
Chosen Option : 1

Q37 Arrange the following bodies in the chronological order of their establishment :

- A. University Grants Commission
- B. Central Advisory Board on Education
- C. National Educational Technology Forum
- D. Indira Gandhi National Open University
- E. National Medical Commission

Choose the correct answer from the options given below :

- (1) B, D, E, C, A
- (2) A, B, E, C, D
- (3) A, B, C, D, E
- (4) B, A, D, E, C

Options 1 1
2 2
3 3
4 4

Question Type : MCQ
Question ID : 432449199
Option 1 ID : 432449773
Option 2 ID : 432449774
Option 3 ID : 432449775
Option 4 ID : 432449776
Status : Answered
Chosen Option : 2

Q38 Identify the correct sequence of steps in the process of deduction from the following :

- A. Data Collection
- B. Hypothesis Testing
- C. Theory
- D. Findings
- E. Hypothesis Formulation

Choose the correct answer from the options given below :

- (1) E, A, D, B, C
- (2) C, E, A, D, B
- (3) E, A, B, D, C
- (4) C, A, D, E, B

Options 1 1
2 2
3 3
4 4

Question Type : MCQ
Question ID : 432449167
Option 1 ID : 432449645
Option 2 ID : 432449646
Option 3 ID : 432449647
Option 4 ID : 432449648
Status : Answered
Chosen Option : 2

Q39

Identify the correct mathematical statement(s) :

- A. If the cost price of 10 articles is equal to selling price of 9 articles, then profit is 10%.
- B. $4\frac{2}{3} + 3\frac{1}{2} - 1\frac{2}{3} = \frac{13}{2}$
- C. If $\frac{x}{y} = \frac{2}{75}$, then $\frac{y-x}{y+x} = \frac{77}{73}$
- D. $\frac{1}{0.04}$ is equal to 25

Choose the **correct** answer from the options given below :

- (1) B and D Only
- (2) A and B Only
- (3) B, C and D Only
- (4) D Only

Options 1 1

2 2

3 3

4 4

Question Type : MCQ

Question ID : 432449179

Option 1 ID : 432449693

Option 2 ID : 432449694

Option 3 ID : 432449695

Option 4 ID : 432449696

Status : Answered

Chosen Option : 3

Q40

Which of the following fall in the category of primary memory ?

- A. ROM
- B. RAM
- C. Cache
- D. HDD
- E. SSD

Choose the **correct** answer from the options given below :

- (1) B, C and D Only
- (2) A, C and E Only
- (3) A, B and D Only
- (4) A, B and C Only

Options 1 1

2 2

3 3

4 4

Question Type : MCQ

Question ID : 432449187

Option 1 ID : 432449725

Option 2 ID : 432449726

Option 3 ID : 432449727

Option 4 ID : 432449728

Status : Answered

Chosen Option : 3

- Q 41** Three years ago, the average age of a family of 5 members was 17 years. A baby was born, but the average age of the family is still the same today. The present age of the baby is :
- (1) 3 years
 - (2) 4 years
 - (3) 2 years
 - (4) 5 years

Options 1 1
2 2
3 3
4 4

Question Type : MCQ
Question ID : 432449176
Option 1 ID : 432449681
Option 2 ID : 432449682
Option 3 ID : 432449683
Option 4 ID : 432449684
Status : Answered
Chosen Option : 3

- Q 42** A box plot is useful for displaying information on :
- A. outliers
 - B. correlation
 - C. median
 - D. autocovariance
- Choose the **correct** answer from the options given below :
- (1) A and B Only
 - (2) B and C Only
 - (3) A and C Only
 - (4) A, C and D Only

Options 1 1
2 2
3 3
4 4

Question Type : MCQ
Question ID : 432449166
Option 1 ID : 432449641
Option 2 ID : 432449642
Option 3 ID : 432449643
Option 4 ID : 432449644
Status : Answered
Chosen Option : 2

Q 43

All bipeds are rational.

Swans are bipeds.

∴ Swans are rational.

commits the fallacy (hetvābhāsa) of :

- (1) Asiddha
- (2) Satpratipakṣa
- (3) Savyabhicāra
- (4) Viruddha

Options 1 1

2 2

3 3

4 4

Question Type : MCQ
Question ID : 432449181
Option 1 ID : 432449701
Option 2 ID : 432449702
Option 3 ID : 432449703
Option 4 ID : 432449704
Status : Answered
Chosen Option : 3

Q 44

Which among the following is **not** true with regards to the UGC guidelines (2022) for pursuing two academic programmes simultaneously ?

- (1) Two full time academic programmes in physical mode are allowed if the class timings for one programme do not overlap with the class timings of the other programme.
- (2) Two academic programmes, one in full time physical mode and another in Open and Distance Learning (ODL)/Online mode are allowed simultaneously.
- (3) Degree or diploma programmes under ODL/Online mode shall be pursued with only such Higher Education Institutions (HEIs) as recognized by UGC/Statutory Council/Govt. of India for running such programmes.
- (4) A student can pursue one full time academic programmes along with Ph.D. in physical mode.

Options 1 1

2 2

3 3

4 4

Question Type : MCQ
Question ID : 432449197
Option 1 ID : 432449765
Option 2 ID : 432449766
Option 3 ID : 432449767
Option 4 ID : 432449768
Status : Answered
Chosen Option : 2

- Q 45** Which aspect of security ensures that information is not altered by any unauthorised person ?
- (1) Confidentiality
 - (2) Integrity
 - (3) Authentication
 - (4) Privacy

- Options** 1. 1
2. 2
3. 3
4. 4

Question Type : MCQ
Question ID : 432449190
Option 1 ID : 432449737
Option 2 ID : 432449738
Option 3 ID : 432449739
Option 4 ID : 432449740
Status : Answered
Chosen Option : 3

Comprehension.

Read the following passage and answer the questions :

John B. Watson, an animal experimentalist who argued that all human action is merely a conditioned response to external environmental stimuli, first popularized stimulus-response psychology. Watson's theory became known as behaviorism in recognition of its narrow focus on isolated human behaviors. Behaviorists rejected psychology's widely held assumption that higher mental processes (that is, conscious thought or reflection) ordinarily control human action. In contrast to such "mentalist" views, behaviorists argued that the only purpose served by consciousness was to rationalize behaviors after they are triggered by external stimuli. Behaviorists attempted to purge all mentalist terms from their theories and to deal strictly with observable variables - environmental stimuli on the one hand and behaviors on the other. By studying the associations that existed between specific stimuli and specific behaviors, behaviorists hoped to discover previously unknown causes for action. One of the central notions in behaviorism was the idea of conditioning. Behaviorists argued that most human behavior is the result of conditioning by the external environment. We are conditioned to act in certain ways by positive and negative stimuli - we act to gain rewards or avoid punishments.

SubQuestion No : 46

- Q 46** In the passage, instead of the word 'purge', which of the following words can be used :
- (1) atone
 - (2) acquit
 - (3) kill
 - (4) cleanse

- Options** 1. 1
2. 2
3. 3
4. 4

Question Type : MCQ
Question ID : 432449203
Option 1 ID : 432449785
Option 2 ID : 432449786
Option 3 ID : 432449787
Option 4 ID : 432449788
Status : Answered
Chosen Option : 2

Comprehension:

Read the following passage and answer the questions :

John B. Watson, an animal experimentalist who argued that all human action is merely a conditioned response to external environmental stimuli, first popularized stimulus-response psychology. Watson's theory became known as behaviorism in recognition of its narrow focus on isolated human behaviors. Behaviorists rejected psychology's widely held assumption that higher mental processes (that is, conscious thought or reflection) ordinarily control human action. In contrast to such "mentalist" views, behaviorists argued that the only purpose served by consciousness was to rationalize behaviors after they are triggered by external stimuli. Behaviorists attempted to purge all mentalist terms from their theories and to deal strictly with observable variables - environmental stimuli on the one hand and behaviors on the other. By studying the associations that existed between specific stimuli and specific behaviors, behaviorists hoped to discover previously unknown causes for action. One of the central notions in behaviorism was the idea of conditioning. Behaviorists argued that most human behavior is the result of conditioning by the external environment. We are conditioned to act in certain ways by positive and negative stimuli - we act to gain rewards or avoid punishments.

SubQuestion No : 47

Q47

According to Behaviorism, all human action is :

- (1) Conscious behaviour
- (2) Isolated action
- (3) Conditioned response
- (4) Conscious thought

Options 1 1

2 2

3 3

4 4

Question Type : MCQ

Question ID : 432449204

Option 1 ID : 432449789

Option 2 ID : 432449790

Option 3 ID : 432449791

Option 4 ID : 432449792

Status : Answered

Chosen Option : 3

Comprehension:

Read the following passage and answer the questions :

John B. Watson, an animal experimentalist who argued that all human action is merely a conditioned response to external environmental stimuli, first popularized stimulus-response psychology. Watson's theory became known as behaviorism in recognition of its narrow focus on isolated human behaviors. Behaviorists rejected psychology's widely held assumption that higher mental processes (that is, conscious thought or reflection) ordinarily control human action. In contrast to such "mentalist" views, behaviorists argued that the only purpose served by consciousness was to rationalize behaviors after they are triggered by external stimuli. Behaviorists attempted to purge all mentalist terms from their theories and to deal strictly with observable variables - environmental stimuli on the one hand and behaviors on the other. By studying the associations that existed between specific stimuli and specific behaviors, behaviorists hoped to discover previously unknown causes for action. One of the central notions in behaviorism was the idea of conditioning. Behaviorists argued that most human behavior is the result of conditioning by the external environment. We are conditioned to act in certain ways by positive and negative stimuli - we act to gain rewards or avoid punishments.

SubQuestion No : 48

Q 48 When people want a reward, they behave in a certain way because of :

- (1) motivation
- (2) positive stimulus
- (3) reflection
- (4) negative stimulus

Options 1 1

2 2

3 3

4 4

Question Type : MCQ
Question ID : 432449206
Option 1 ID : 432449797
Option 2 ID : 432449798
Option 3 ID : 432449799
Option 4 ID : 432449800
Status : Answered
Chosen Option : 2

Comprehension:

Read the following passage and answer the questions :

John B. Watson, an animal experimentalist who argued that all human action is merely a conditioned response to external environmental stimuli, first popularized stimulus-response psychology. Watson’s theory became known as behaviorism in recognition of its narrow focus on isolated human behaviors. Behaviorists rejected psychology’s widely held assumption that higher mental processes (that is, conscious thought or reflection) ordinarily control human action. In contrast to such “mentalist” views, behaviorists argued that the only purpose served by consciousness was to rationalize behaviors after they are triggered by external stimuli. Behaviorists attempted to purge all mentalist terms from their theories and to deal strictly with observable variables - environmental stimuli on the one hand and behaviors on the other. By studying the associations that existed between specific stimuli and specific behaviors, behaviorists hoped to discover previously unknown causes for action. One of the central notions in behaviorism was the idea of conditioning. Behaviorists argued that most human behavior is the result of conditioning by the external environment. We are conditioned to act in certain ways by positive and negative stimuli - we act to gain rewards or avoid punishments.


SubQuestion No : 49

Q.49 Behaviorists do **not** recognise which of the following in their study of human action ?

- (1) Conscious thought
- (2) Environmental stimuli
- (3) Negative stimulus
- (4) Isolated human behavior

Options 1 1
2 2
3 3
4 4

Question Type : MCQ
Question ID : 432449202
Option 1 ID : 432449781
Option 2 ID : 432449782
Option 3 ID : 432449783
Option 4 ID : 432449784
Status : Answered
Chosen Option : 3



Comprehension:

Read the following passage and answer the questions :

John B. Watson, an animal experimentalist who argued that all human action is merely a conditioned response to external environmental stimuli, first popularized stimulus-response psychology. Watson's theory became known as behaviorism in recognition of its narrow focus on isolated human behaviors. Behaviorists rejected psychology's widely held assumption that higher mental processes (that is, conscious thought or reflection) ordinarily control human action. In contrast to such "mentalist" views, behaviorists argued that the only purpose served by consciousness was to rationalize behaviors after they are triggered by external stimuli. Behaviorists attempted to purge all mentalist terms from their theories and to deal strictly with observable variables - environmental stimuli on the one hand and behaviors on the other. By studying the associations that existed between specific stimuli and specific behaviors, behaviorists hoped to discover previously unknown causes for action. One of the central notions in behaviorism was the idea of conditioning. Behaviorists argued that most human behavior is the result of conditioning by the external environment. We are conditioned to act in certain ways by positive and negative stimuli - we act to gain rewards or avoid punishments.

SubQuestion No : 50

- Q50 One widely - held assumption of Psychology is that :
- (1) Conscious thought usually controls human action.
 - (2) The purpose of consciousness is only to rationalize behaviour.
 - (3) Human action is always a conditioned response.
 - (4) Conditioning by the external environmental factors leads to a specific behaviour.

- Options 1 1
2 2
3 3
4 4

Question Type : MCQ
Question ID : 432449205
Option 1 ID : 432449793
Option 2 ID : 432449794
Option 3 ID : 432449795
Option 4 ID : 432449796
Status : Answered
Chosen Option : 3

Section : Social Medicine and Community Health

- Q51 Regarding the latest amendment of the Transplantation of Human Organs and Tissues Act, which of the following statements are true :
- A. Live donors less than 18 years of age may act as donors
 - B. Two sets of donor-recipient can mutually exchange organ/tissue
 - C. Imprisonment upto 2 years and fine upto 10,000 for unauthorised removal of organs
 - D. Grand-parents and grandchildren included as near relatives for the purpose of tissue/organ donation
- Choose the correct answer from the options given below :
- (1) A and B only
 - (2) B and C only
 - (3) C and D only
 - (4) B and D only

- Options 1 1
2 2
3 3
4 4

Question Type : MCQ
Question ID : 432449274
Option 1 ID : 4324491069
Option 2 ID : 4324491070
Option 3 ID : 4324491071
Option 4 ID : 4324491072
Status : Answered
Chosen Option : 1

Q52 Given below are two statements : one is labelled as **Assertion (A)** and the other is labelled as **Reason (R)**.

Assertion (A) : Quarantine is preventive detention leading to limitation of freedom of movement of persons or domestic animals exposed to communicable disease for a period of time in such a manner so as to prevent effective contact with those not so exposed.

Reason (R) : The period of time for quarantine is double the longest incubation period of the disease.

In the light of the above statements, choose the **most appropriate answer** from the options given below :

- (1) Both (A) and (R) are correct and (R) is the correct explanation of (A)
- (2) Both (A) and (R) are correct but (R) is **not** the correct explanation of (A)
- (3) (A) is correct but (R) is not correct
- (4) (A) is not correct but (R) is correct

Options 1 1
2 2
3 3
4 4

Question Type : MCQ
Question ID : 432449252
Option 1 ID : 432449981
Option 2 ID : 432449982
Option 3 ID : 432449983
Option 4 ID : 432449984
Status : Answered
Chosen Option : 3

Q53 The respect and admiration that an occupation holds in a society is best called as :

- (1) Class
- (2) Prestige
- (3) Esteem
- (4) Power

Options 1 1
2 2
3 3
4 4

Question Type : MCQ
Question ID : 432449226
Option 1 ID : 432449877
Option 2 ID : 432449878
Option 3 ID : 432449879
Option 4 ID : 432449880
Status : Answered
Chosen Option : 2

Q54 Given below are two statements : one is labelled as **Assertion (A)** and the other is labelled as **Reason (R)**.

Assertion (A) : Rodeo riders, residents of a retirement community, workers on an offshore oil rig are examples of subcultures.

Reason (R) : A subculture is a segment of society that shares a distinctive pattern of customs, rules and traditions that differs from the pattern of the larger society.

In the light of the above statements, choose the **most appropriate answer** from the options given below :

- (1) Both (A) and (R) are correct and (R) is the correct explanation of (A)
- (2) Both (A) and (R) are correct but (R) is **not** the correct explanation of (A)
- (3) (A) is correct but (R) is not correct
- (4) (A) is not correct but (R) is correct

- Options 1 1
2 2
3 3
4 4

Question Type : MCQ
Question ID : 432449256
Option 1 ID : 432449997
Option 2 ID : 432449998
Option 3 ID : 432449999
Option 4 ID : 4324491000
Status : Answered
Chosen Option : 4

Q55 Arrange the following health committees in order from the oldest to the most recent ?

- A. Krishnan Committee
- B. Kartar Singh Committee
- C. Jungalwalla Committee
- D. Chadha Committee

Choose the **correct** answer from the options given below :

- (1) A, B, C, D
- (2) D, C, B, A
- (3) C, B, A, D
- (4) D, A, B, C

- Options 1 1
2 2
3 3
4 4

Question Type : MCQ
Question ID : 432449266
Option 1 ID : 4324491037
Option 2 ID : 4324491038
Option 3 ID : 4324491039
Option 4 ID : 4324491040
Status : Answered
Chosen Option : 3

Q56

X-ray machine is an example of :

- (1) Immovable, non expendable material
- (2) Movable, non expendable material
- (3) Expendable material, direct health care
- (4) Expendable material, indirect health care

Options 1 1

2 2

3 3

4 4

Question Type : MCQ
Question ID : 432449216
Option 1 ID : 432449837
Option 2 ID : 432449838
Option 3 ID : 432449839
Option 4 ID : 432449840
Status : Answered
Chosen Option : 2

Q57

Which of the following is not part of manpower at UHWC (Urban) as per IPHS 2022 guidelines ?

- (1) Medical Officer
- (2) Community Health Officer
- (3) Health Worker (Male)
- (4) Health Worker (Female)

Options 1 1

2 2

3 3

4 4

Question Type : MCQ
Question ID : 432449208
Option 1 ID : 432449805
Option 2 ID : 432449806
Option 3 ID : 432449807
Option 4 ID : 432449808
Status : Answered
Chosen Option : 1

- Q58 Arrange the following steps of out break investigation from START to END :
- A. Verification of diagnosis
 - B. Confirmation of the existence of an epidemic
 - C. Defining the population at risk
 - D. Formulation of hypothesis

Choose the correct answer from the options given below :

- (1) B, C, A, D
- (2) C, A, D, B
- (3) A, B, C, D
- (4) D, B, C, A

Options 1 1
2 2
3 3
4 4

Question Type : MCQ
Question ID : 432449263
Option 1 ID : 4324491025
Option 2 ID : 4324491026
Option 3 ID : 4324491027
Option 4 ID : 4324491028
Status : Answered
Chosen Option : 2

- Q59 The tendency of the superior to allow his/her good impressions of one or two important work characteristics of an individual, to carry over to total evaluation is best termed as :
- (1) 'Horns' effect
 - (2) 'Halo' effect
 - (3) "Tell and Sell"
 - (4) Mutual Problem Solving

Options 1 1
2 2
3 3
4 4

Question Type : MCQ
Question ID : 432449221
Option 1 ID : 432449857
Option 2 ID : 432449858
Option 3 ID : 432449859
Option 4 ID : 432449860
Status : Answered
Chosen Option : 4

Q60 Given below are two statements : one is labelled as **Assertion (A)** and the other is labelled as **Reason (R)**.
Assertion (A) : A useful way of expressing mortality is in terms of the number of deaths divided by the person-years over which a group is observed.
Reason (R) : Individuals are often observed for different periods of time so the unit used for counting observation time is the person-year instead of number of persons.
In the light of the above statements, choose the **most appropriate answer** from the options given below :
(1) Both (A) and (R) are correct and (R) is the correct explanation of (A)
(2) Both (A) and (R) are correct but (R) is **not** the correct explanation of (A)
(3) (A) is correct but (R) is not correct
(4) (A) is not correct but (R) is correct

- Options 1 1
2 2
3 3
4 4

Question Type : MCQ
Question ID : 432449254
Option 1 ID : 432449989
Option 2 ID : 432449990
Option 3 ID : 432449991
Option 4 ID : 432449992
Status : Answered
Chosen Option : 3

Q61 In which year, was the Jakarta Declaration on Health Promotion released ?
(1) 1978
(2) 1986
(3) 1990
(4) 1997

- Options 1 1
2 2
3 3
4 4

Question Type : MCQ
Question ID : 432449233
Option 1 ID : 432449905
Option 2 ID : 432449906
Option 3 ID : 432449907
Option 4 ID : 432449908
Status : Answered
Chosen Option : 2

Q62 Match List - I with List - II.

List - I	List - II
Situation	Statistical Test
A. Comparison of means from 2 Independent sample	I. Mann-Whitney U Test
B. Comparison of medians from 2 Independent sample	II. Kolmogorov-Smirnov Test
C. Comparison of mean of 3 or more Independent sample	III. Unpaired t-test
D. Test of normality	IV. ANOVA

Choose the correct answer from the options given below :

- (1) A-III, B-II, C-IV, D-I
(2) A-III, B-I, C-IV, D-II
(3) A-IV, B-II, C-III, D-I
(4) A-III, B-I, C-II, D-IV

Options 1 1
2 2
3 3
4 4

Question Type : MCQ
Question ID : 432449292
Option 1 ID : 4324491141
Option 2 ID : 4324491142
Option 3 ID : 4324491143
Option 4 ID : 4324491144
Status : Answered
Chosen Option : 3

Q63 Match List - I with List - II.

List - I	List - II
Sociological terms	Definitions
A. Cultural capital	I. The physical or technological aspects of our daily life
B. Culture lag	II. Ways of using material objects, as well as customs beliefs, philosophies, governments and patterns of communication
C. Material culture	III. A period of maladjustment when the non material culture is still struggling to adopt new material conditions.
D. Non material culture	IV. Non economic goods, such as family background and education which are reflected in a knowledge of language and the arts

Choose the correct answer from the options given below :

- (1) A-III, B-I, C-II, D-IV
(2) A-II, B-III, C-I, D-IV
(3) A-IV, B-III, C-I, D-II
(4) A-III, B-IV, C-II, D-I

Options 1 1
2 2
3 3
4 4

Question Type : MCQ
Question ID : 432449289
Option 1 ID : 4324491129
Option 2 ID : 4324491130
Option 3 ID : 4324491131
Option 4 ID : 4324491132
Status : Answered
Chosen Option : 2

- Q64** The term to describe the difficulty that arises when the same social position imposes conflicting demands and expectations is best defined by :
- (1) Master status
 - (2) Role conflict
 - (3) Role strain
 - (4) Role exit

Options 1 1
2 2
3 3
4 4

Question Type : MCQ
Question ID : 432449235
Option 1 ID : 432449913
Option 2 ID : 432449914
Option 3 ID : 432449915
Option 4 ID : 432449916
Status : Answered
Chosen Option : 2

- Q65** Arrange the following health organization according to their year of establishment (from OLDEST to NEWEST) :
- A. Health Organization of the League of Nations
 - B. United Nations Relief and Rehabilitation Administration
 - C. Office International d' Hygiene Publique
 - D. Pan American Sanitary Bureau
- Choose the **correct** answer from the options given below :
- (1) A, B, C, D
 - (2) C, D, A, B
 - (3) D, C, A, B
 - (4) D, C, B, A

Options 1 1
2 2
3 3
4 4

Question Type : MCQ
Question ID : 432449260
Option 1 ID : 4324491013
Option 2 ID : 4324491014
Option 3 ID : 4324491015
Option 4 ID : 4324491016
Status : Answered
Chosen Option : 2

- Q66 Which among the following is a social component of environment ?
- (1) Habits
 - (2) Housing
 - (3) Rodents
 - (4) Water

Options 1 1
2 2
3 3
4 4

Question Type : MCQ
Question ID : 432449207
Option 1 ID : 432449801
Option 2 ID : 432449802
Option 3 ID : 432449803
Option 4 ID : 432449804
Status : Answered
Chosen Option : 4

- Q67 Match List - I with List - II.
- | List - I | List - II |
|----------|--|
| Year | Public Health Event |
| A. 2020 | I. International Year of Millets declared by UN General Assembly |
| B. 2021 | II. Ayushman Bharat Digital Mission Launched |
| C. 2023 | III. National Digital Health Mission Launched |
| D. 2024 | IV. Trachoma elimination certificate issued to India by WHO |
- Choose the correct answer from the options given below :
- (1) A-I, B-III, C-II, D-IV
 - (2) A-III, B-II, C-I, D-IV
 - (3) A-I, B-IV, C-III, D-II
 - (4) A-III, B-IV, C-I, D-II

Options 1 1
2 2
3 3
4 4

Question Type : MCQ
Question ID : 432449283
Option 1 ID : 4324491105
Option 2 ID : 4324491106
Option 3 ID : 4324491107
Option 4 ID : 4324491108
Status : Answered
Chosen Option : 2

- Q68** For routine immunization against yellow fever, what is the minimum age at which the yellow fever vaccine (17D) can be given ?
- (1) 3 months
 - (2) 9 months
 - (3) 2 years
 - (4) 5 years

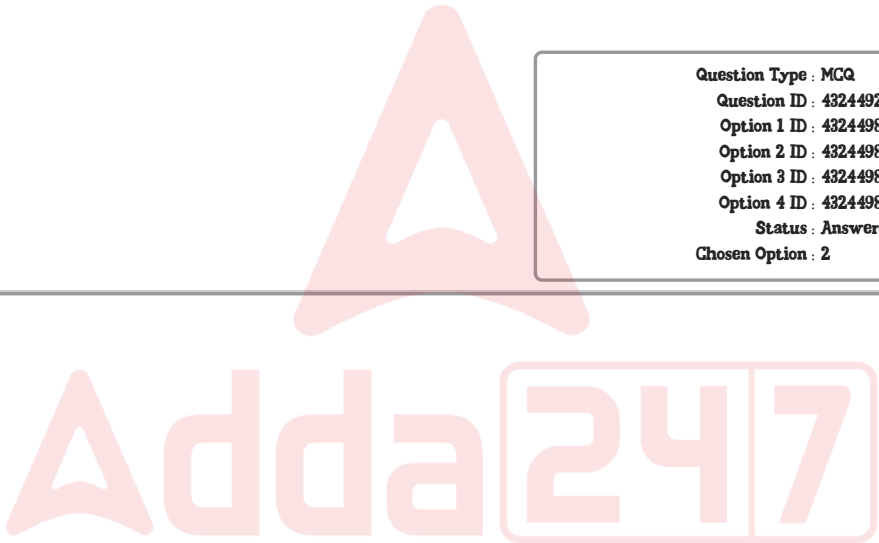
Options 1 1
2 2
3 3
4 4

Question Type : MCQ
Question ID : 432449223
Option 1 ID : 432449865
Option 2 ID : 432449866
Option 3 ID : 432449867
Option 4 ID : 432449868
Status : Answered
Chosen Option : 1

- Q69** Which one of the following best describes ProMED (www.promedmail.org) ?
- (1) Pro life movement to prevent irrational use of medical interventions in end-of-life care
 - (2) Online free statistical software for health research analysis
 - (3) Internet based reporting system dedicated to rapid global dissemination of information on outbreaks
 - (4) Initiative for promotion of voluntary organ donation in terminal patients world wide

Options 1 1
2 2
3 3
4 4

Question Type : MCQ
Question ID : 432449217
Option 1 ID : 432449841
Option 2 ID : 432449842
Option 3 ID : 432449843
Option 4 ID : 432449844
Status : Answered
Chosen Option : 2



Q70 Arrange the following steps of “planning cycle” from START to END :

A. Collect data for evaluation

B. Define programme objectives and how to measure achievement

C. Situational Analysis

D. Plan implementation of Integrated programme

Choose the **correct** answer from the options given below :

- (1) C, A, B, D
- (2) C, B, D, A
- (3) D, B, C, A
- (4) B, A, C, D

Options 1 1
2 2
3 3
4 4

Question Type : MCQ
Question ID : 432449258
Option 1 ID : 4324491005
Option 2 ID : 4324491006
Option 3 ID : 4324491007
Option 4 ID : 4324491008
Status : Answered
Chosen Option : 2

Q71 Given below are two statements : one is labelled as **Assertion (A)** and the other is labelled as **Reason (R)**.

Assertion (A) : The inner lining of a sanitary well should be built of bricks or stones set in cement up to a depth of atleast 6 feet.

Reason (R) : The inner lining of a sanitary well needs to be built of bricks or stones set in cement for a certain depth, so that the water enters from the bottom and not from the sides of the well.

In the light of the above statements, choose the **most appropriate answer** from the options given below :

- (1) Both (A) and (R) are correct and (R) is the correct explanation of (A)
- (2) Both (A) and (R) are correct but (R) is **not** the correct explanation of (A)
- (3) (A) is correct but (R) is not correct
- (4) (A) is not correct but (R) is correct

Options 1 1
2 2
3 3
4 4

Question Type : MCQ
Question ID : 432449250
Option 1 ID : 432449973
Option 2 ID : 432449974
Option 3 ID : 432449975
Option 4 ID : 432449976
Status : Answered
Chosen Option : 3

Q72 Which among the following best represents the formula for calculation of Kappa Statistic :

- (1)
$$\frac{\left[\frac{\text{Percent agreement observed}}{100\%} - \frac{\text{Percent agreement expected by chance alone}}{100\%} \right]}{\left[\frac{\text{Percent agreement expected by chance alone}}{100\%} \right]}$$
- (2)
$$\frac{\left[\frac{\text{Percent agreement observed}}{100\%} - \frac{\text{Percent agreement expected by chance alone}}{100\%} \right]}{100\%}$$
- (3)
$$\frac{\left[\frac{\text{Percent agreement expected by chance alone}}{100\%} - \frac{\text{Percent agreement observed}}{100\%} \right]}{\left[\frac{\text{Percent agreement observed}}{100\%} \right]}$$
- (4)
$$\frac{\left[\frac{\text{Percent agreement expected by chance alone}}{100\%} - \frac{\text{Percent agreement observed}}{100\%} \right]}{100\%}$$

- Options 1 1
2 2
3 3
4 4

Question Type : MCQ
Question ID : 432449246
Option 1 ID : 432449957
Option 2 ID : 432449958
Option 3 ID : 432449959
Option 4 ID : 432449960
Status : Answered
Chosen Option : 2

Q73 Match List - I with List - II.

- | List - I | List - II |
|-----------------------------|--|
| M-Health mobile application | Important feature |
| A. Anmol | I. Providing information about healthy lifestyle, disease symptoms and treatment options |
| B. Aarogya Setu | II. For facilitating the working of ANMs |
| C. Swasth Bharat | III. For monitoring personal health parameters |
| D. M-Swasthya | IV. Self assessment test for Covid-19 |
- Choose the correct answer from the options given below :
- (1) A-I, B-IV, C-II, D-III
- (2) A-II, B-I, C-III, D-IV
- (3) A-I, B-III, C-IV, D-II
- (4) A-II, B-IV, C-I, D-III

- Options 1 1
2 2
3 3
4 4

Question Type : MCQ
Question ID : 432449287
Option 1 ID : 4324491121
Option 2 ID : 4324491122
Option 3 ID : 4324491123
Option 4 ID : 4324491124
Status : Answered
Chosen Option : 4

- Q74** Which among the following statements are **correct** regarding the National Air Quality Index of India ?
- A. The measurement of air quality is based on six pollutants
 - B. It has six categories of air quality
 - C. The highest (worst) category of air quality is 'Very Poor'
 - D. It was developed by Central Pollution Control Board (CPCB) in consultation with IIT Kanpur
- Choose the **correct** answer from the options given below :
- (1) A and C only
 - (2) B and D only
 - (3) A and B only
 - (4) C and D only

Options **1 1**
2 2
3 3
4 4

Question Type : MCQ
Question ID : 432449277
Option 1 ID : 4324491081
Option 2 ID : 4324491082
Option 3 ID : 4324491083
Option 4 ID : 4324491084
Status : Answered
Chosen Option : 2

- Q75** Match List - I with List - II.
- | List - I | List - II |
|--|---|
| Chemical test for fitness of milk | Purpose of the test |
| A. Gerber's test | I. For total solids |
| B. Methylene blue test | II. For efficiency of pasteurization |
| C. Evaporation of whole milk in a water bath and then weighing the dried residue | III. For estimation of fat |
| D. Phosphatase test | IV. For bacterial contamination of the milk |
- Choose the **correct** answer from the options given below :
- (1) A-I, B-III, C-II, D-IV
 - (2) A-II, B-I, C-IV, D-III
 - (3) A-III, B-IV, C-I, D-II
 - (4) A-IV, B-II, C-III, D-I

Options **1 1**
2 2
3 3
4 4

Question Type : MCQ
Question ID : 432449282
Option 1 ID : 4324491101
Option 2 ID : 4324491102
Option 3 ID : 4324491103
Option 4 ID : 4324491104
Status : Answered
Chosen Option : 2

- Q76** Which among the following best represents the formula for calculation of “Risk Ratio” ?
- (1) Ratio of the incidence of the disease among exposed and the incidence among non-exposed.
 - (2) Ratio of the incidence of the disease among non-exposed and the incidence among exposed.
 - (3) Difference of the incidence of the disease among exposed and the incidence among non-exposed.
 - (4) Ratio of odds of disease among exposed and the odds of disease among non-exposed

Options 1 1
2 2
3 3
4 4

Question Type : MCQ
Question ID : 432449210
Option 1 ID : 432449813
Option 2 ID : 432449814
Option 3 ID : 432449815
Option 4 ID : 432449816
Status : Answered
Chosen Option : 2

- Q77** Arrange the following health legislations from the oldest to the most recent according to year of first promulgation :
- A. National Disaster Management Act
 - B. Drugs and Cosmetics Act
 - C. Medical Termination of Pregnancy Act
 - D. The Transplantation of Human Organs Act (THOA)
- Choose the **correct** answer from the options given below :
- (1) A, D, B, C
 - (2) C, B, A, D
 - (3) B, C, D, A
 - (4) A, C, D, B

Options 1 1
2 2
3 3
4 4

Question Type : MCQ
Question ID : 432449262
Option 1 ID : 4324491021
Option 2 ID : 4324491022
Option 3 ID : 4324491023
Option 4 ID : 4324491024
Status : Answered
Chosen Option : 2

Q78 Which among the following are cultural barriers of communication in health education ?

- A. Difficulties in hearing
- B. Emotional disturbances
- C. Illiteracy
- D. Social class differences

Choose the correct answer from the options given below :

- (1) A and B only
- (2) C and D only
- (3) A, B and C only
- (4) B, C and D only

Options 1 1
2 2
3 3
4 4

Question Type : MCQ
Question ID : 432449281
Option 1 ID : 4324491097
Option 2 ID : 4324491098
Option 3 ID : 4324491099
Option 4 ID : 4324491100
Status : Answered
Chosen Option : 2

Q79 Philippines is a member country of which WHO region ?

- (1) South East Asia
- (2) Western Pacific
- (3) Eastern Mediterranean
- (4) Africa

Options 1 1
2 2
3 3
4 4

Question Type : MCQ
Question ID : 432449237
Option 1 ID : 432449921
Option 2 ID : 432449922
Option 3 ID : 432449923
Option 4 ID : 432449924
Status : Answered
Chosen Option : 1

- Q80** Among the given options, which best describes the aim of UJJAWALA scheme ?
- (1) Addressing the needs of self development, nutrition and health status of adolescent girls
 - (2) Cash transfer to pregnant and lactating mothers in order to improve their nutritional and health status
 - (3) Creation of creches for children of working mothers
 - (4) Prevention, rescue, rehabilitation, reintegration and repatriation of victims trafficked for commercial sexual exploitation

Options 1 1
2 2
3 3
4 4

Question Type : MCQ
Question ID : 432449227
Option 1 ID : 432449881
Option 2 ID : 432449882
Option 3 ID : 432449883
Option 4 ID : 432449884
Status : Answered
Chosen Option : 2

- Q81** Which of the following statements best represents the objective of Pradhan Mantri Matru Vandana Yojana (PMMVY) ?
- (1) Provide referral transport services for high risk pregnant women
 - (2) Cash incentive to provide partial wage compensation for women during pregnancy and after child birth
 - (3) Provide high quality and timely antenatal care for all pregnant women
 - (4) Cash assistance for delivery in private hospitals

Options 1 1
2 2
3 3
4 4

Question Type : MCQ
Question ID : 432449230
Option 1 ID : 432449893
Option 2 ID : 432449894
Option 3 ID : 432449895
Option 4 ID : 432449896
Status : Answered
Chosen Option : 2

- Q82** Among the given options of sexually transmitted diseases which is **not** considered a part of "classical" venereal diseases ?
- (1) Chancroid
 - (2) Lymphogranuloma venereum
 - (3) Donovanosis
 - (4) Molluscum contagiosum

Options 1 1
2 2
3 3
4 4

Question Type : MCQ
Question ID : 432449215
Option 1 ID : 432449833
Option 2 ID : 432449834
Option 3 ID : 432449835
Option 4 ID : 432449836
Status : Answered
Chosen Option : 1

- Q83** The process through which a majority group and a minority group combine to form a new group is best defined by which term ?
- (1) Amalgamation
 - (2) Racial profiling
 - (3) Assimilation
 - (4) Pluralism

Options 1 1
2 2
3 3
4 4

Question Type : MCQ
Question ID : 432449229
Option 1 ID : 432449889
Option 2 ID : 432449890
Option 3 ID : 432449891
Option 4 ID : 432449892
Status : Answered
Chosen Option : 2

- Q84** Arrange the following clinical features seen in syphilis from earliest to last :
- A. Chancre
 - B. Gumma
 - C. Hard chancre
 - D. Snail track ulcer

Choose the **correct** answer from the options given below :

- (1) C, D, A, B
- (2) A, D, C, B
- (3) A, C, D, B
- (4) B, A, D, C

Options 1 1
2 2
3 3
4 4

Question Type : MCQ
Question ID : 432449270
Option 1 ID : 4324491053
Option 2 ID : 4324491054
Option 3 ID : 4324491055
Option 4 ID : 4324491056
Status : Answered
Chosen Option : 3

- Q.85** An outbreak of cases of nausea, vomiting, giddiness was reported from an area where bajra is consumed as a staple food. Some of the cases also presented with peripheral gangrene. Which of the following is most likely to be **incorrect** regarding this outbreak ?
- (1) Caused by aflatoxins produced by growth of fungi *Aspergillus flavus* and *A. parasiticus*
 - (2) Infested grains can be separated by floating in 20% salt water
 - (3) High yielding varieties of Bajra are more susceptible to infestation
 - (4) It is caused by a field fungus

- Options**
- 1. 1
 - 2. 2
 - 3. 3
 - 4. 4

Question Type : MCQ

Question ID : 432449220

Option 1 ID : 432449853

Option 2 ID : 432449854

Option 3 ID : 432449855

Option 4 ID : 432449856

Status : Answered

Chosen Option : 2

- Q.86** All of the following are a part of the definition of safe and wholesome water, except :
- (1) Free from harmful chemical substances
 - (2) Pleasant to the taste
 - (3) Available at comfortable temperature
 - (4) Free from pathogenic agents

- Options**
- 1. 1
 - 2. 2
 - 3. 3
 - 4. 4

Question Type : MCQ

Question ID : 432449212

Option 1 ID : 432449821

Option 2 ID : 432449822

Option 3 ID : 432449823

Option 4 ID : 432449824

Status : Answered

Chosen Option : 2

- Q.87** Which among the following are **correct** measures for improvement of water quality of tanks ?
- A. The edges of the tank should be depressed to allow for surface washings to wash away
 - B. The tank should be cleaned at the end of the dry season
 - C. There should be a lowered platform from where people can draw water
 - D. There should be a fence around the tank to prevent access to animals
- Choose the **correct** answer from the options given below :
- (1) B and C only
 - (2) B and D only
 - (3) A and C only
 - (4) A and D only

- Options**
- 1. 1
 - 2. 2
 - 3. 3
 - 4. 4

Question Type : MCQ

Question ID : 432449279

Option 1 ID : 4324491089

Option 2 ID : 4324491090

Option 3 ID : 4324491091

Option 4 ID : 4324491092

Status : Answered

Chosen Option : 3

Q88

Match List - I with List - II.	
List - I	List - II
Scheme	Objective
A. Janani Suraksha Yojana	I. Free and no expense delivery for all pregnant women delivering in public health institutions
B. Janani Shishu Suraksha Karyakram	II. Promotion of optimum infant and young child feeding practices (IYCF)
C. LaQshya Programme	III. Reducing Maternal and neonatal mortality through encouraging delivery at health institutions
D. Mother's Absolute Affection (MAA) Programme	IV. Improve quality of care in labour room and maternity OT's in public health facilities

Choose the **correct** answer from the options given below :

(1)

A-III, B-II, C-I, D-IV

(2)

A-I, B-III, C-IV, D-II

(3)

A-I, B-IV, C-II, D-III

(4)

A-III, B-I, C-IV, D-II

- Options
- 1 1
- 2 2
- 3 3
- 4 4

Question Type : MCQ

Question ID : 432449295

Option 1 ID : 4324491153

Option 2 ID : 4324491154

Option 3 ID : 4324491155

Option 4 ID : 4324491156

Status : Answered

Chosen Option : 2

Q89

Arrange the following nutritional deficiencies as per their descending order (from highest to lowest) of prevalence in the 1-4 years age group children in India, as given in the ICMR-NIN Dietary Guidelines for Indians 2024 document ?	
A. Vitamin B12 deficiency	
B. Zinc deficiency	
C. Iron deficiency	
D. Folate deficiency	

Choose the **correct** answer from the options given below :

(1)

A, B, C, D

(2)

B, A, D, C

(3)

C, D, B, A

(4)

D, C, A, B

- Options
- 1 1
- 2 2
- 3 3
- 4 4

Question Type : MCQ

Question ID : 432449264

Option 1 ID : 4324491029

Option 2 ID : 4324491030

Option 3 ID : 4324491031

Option 4 ID : 4324491032

Status : Answered

Chosen Option : 3

- Q90** The Ayushman Bharat Digital Mission is one of the largest e-Health projects anywhere in the world. As part of it, a 14-digit number is issued that will uniquely identify each citizen of our country. Which among the following best represents this 14-digit number ?
- (1) AADHAAR ID
 - (2) ABHA ID
 - (3) ASHA ID
 - (4) NIKSHAY ID

- Options**
- 1 1
 - 2 2
 - 3 3
 - 4 4

Question Type : MCQ
Question ID : 432449236
Option 1 ID : 432449917
Option 2 ID : 432449918
Option 3 ID : 432449919
Option 4 ID : 432449920
Status : Answered
Chosen Option : 2

- Q91** Match List - I with List - II.
- | List - I
Terminology | List - II
Definition |
|------------------------------|---|
| A. Serial Interval | I. Duration between entry of pathogen to the maximum communicability |
| B. Period of communicability | II. The gap in time between the onset of the primary case and the secondary case |
| C. Generation time | III. Time period from the entry of the infectious agent into the human body to the point when earliest clinical manifestation of the disease appear |
| D. Incubation period | IV. Time period during which the host sheds the agent |
- Choose the **correct** answer from the options given below :
- (1) A-II, B-I, C-IV, D-III
 - (2) A-III, B-IV, C-II, D-I
 - (3) A-II, B-III, C-I, D-IV
 - (4) A-II, B-IV, C-I, D-III

- Options**
- 1 1
 - 2 2
 - 3 3
 - 4 4

Question Type : MCQ
Question ID : 432449294
Option 1 ID : 4324491149
Option 2 ID : 4324491150
Option 3 ID : 4324491151
Option 4 ID : 4324491152
Status : Answered
Chosen Option : 3

- Q92** Which of the following is **not** one of the four criteria for identifying any disease/event as a Public Health Emergency of International Concern (PHEIC) ?
- (1) Does the event have a serious public health impact
 - (2) Is the event usual or expected
 - (3) Is there a risk of the event spreading internationally
 - (4) Does the event carry a risk of causing restrictions on international trade or travel

Options 1 1
2 2
3 3
4 4

Question Type : MCQ
Question ID : 432449242
Option 1 ID : 432449941
Option 2 ID : 432449942
Option 3 ID : 432449943
Option 4 ID : 432449944
Status : Answered
Chosen Option : 3

- Q93** A six month old infant weighing 8 kg was brought to the OPD with complaints of diarrhea for last 3 days. On assessment the child was found to have some/moderate dehydration. How much ORS (in mL) will be given to the child in first 4 hours ?
- (1) 200 - 450
 - (2) 450 - 800
 - (3) 800 - 960
 - (4) 960 - 1600

Options 1 1
2 2
3 3
4 4

Question Type : MCQ
Question ID : 432449224
Option 1 ID : 432449869
Option 2 ID : 432449870
Option 3 ID : 432449871
Option 4 ID : 432449872
Status : Answered
Chosen Option : 2

- Q94 Which among the following are a type of content theory of Motivation ?
- A. Alderfer's ERG theory
 - B. Herzberg's two-factor theory
 - C. Victor Vroom's Expectancy Theory
 - D. Adam's Equity Theory

Choose the **correct** answer from the options given below :

- (1) A and B only
- (2) C and D only
- (3) A and D only
- (4) B and C only

Options 1 1
2 2
3 3
4 4

Question Type : MCQ
Question ID : 432449272
Option 1 ID : 4324491061
Option 2 ID : 4324491062
Option 3 ID : 4324491063
Option 4 ID : 4324491064
Status : Answered
Chosen Option : 2

- Q95 The wheel theory of disease postulates the causation of disease as a wheel with a central hub and a peripheral portion. Which of the following factors are included in the central hub portion ?
- (1) Genetic factors
 - (2) Environmental factors
 - (3) Risk markers
 - (4) Agent factors

Options 1 1
2 2
3 3
4 4

Question Type : MCQ
Question ID : 432449234
Option 1 ID : 432449909
Option 2 ID : 432449910
Option 3 ID : 432449911
Option 4 ID : 432449912
Status : Answered
Chosen Option : 3

- Q96** Which of the following statements are true regarding interventions in All districts under Reproductive and Child Health Programme-I (RCH-I) ?
- A. Child survival interventions i.e. immunisation, Vitamin A, oral rehydration and prevention of deaths due to pneumonia.
 - B. Implementation of Target Free approach
 - C. Screening and treatment of RTI/STD at sub-divisional level
 - D. Facility for safe abortion at PHC's by providing equipment, contractual doctors etc.
- Choose the **correct** answer from the options given below :
- (1) A and B only
 - (2) A, B and C only
 - (3) A, B and D only
 - (4) B and D only

Options 1 1
2 2
3 3
4 4

Question Type : MCQ
Question ID : 432449275
Option 1 ID : 4324491073
Option 2 ID : 4324491074
Option 3 ID : 4324491075
Option 4 ID : 4324491076
Status : Answered
Chosen Option : 2

- Q97** Given below are two statements : one is labelled as **Assertion (A)** and the other is labelled as **Reason (R)**.
- Assertion (A)** : When a subculture conspicuously and deliberately opposes certain aspects of the larger culture, it is known as a counterculture.
- Reason (R)** : Counter cultures typically thrive among the young, who have the least investment in the existing culture.
- In the light of the above statements, choose the **most appropriate answer** from the options given below :
- (1) Both (A) and (R) are correct and (R) is the correct explanation of (A)
 - (2) Both (A) and (R) are correct but (R) is **not** the correct explanation of (A)
 - (3) (A) is correct but (R) is not correct
 - (4) (A) is not correct but (R) is correct

Options 1 1
2 2
3 3
4 4

Question Type : MCQ
Question ID : 432449249
Option 1 ID : 432449969
Option 2 ID : 432449970
Option 3 ID : 432449971
Option 4 ID : 432449972
Status : Answered
Chosen Option : 4

- Q98** Arrange the strategies for improvement of case finding in Tuberculosis as per the year of their initiation, from oldest to newest.
- A. Active case finding
 - B. Population based screening
 - C. Intensified case finding
 - D. Passive case finding
- Choose the **correct** answer from the options given below :
- (1) D, C, A, B
 - (2) B, D, A, C
 - (3) A, B, C, D
 - (4) C, B, D, A

Options 1 1
2 2
3 3
4 4

Question Type : MCQ
Question ID : 432449265
Option 1 ID : 4324491033
Option 2 ID : 4324491034
Option 3 ID : 4324491035
Option 4 ID : 4324491036
Status : Answered
Chosen Option : 2

- Q99** Under “International Health Regulations” all the diseases mentioned below are notified by the national health authority to WHO (World Health Organization) Except ?
- (1) Cholera
 - (2) Tuberculosis
 - (3) Plague
 - (4) Yellow fever

Options 1 1
2 2
3 3
4 4

Question Type : MCQ
Question ID : 432449209
Option 1 ID : 432449809
Option 2 ID : 432449810
Option 3 ID : 432449811
Option 4 ID : 432449812
Status : Answered
Chosen Option : 3

Q100

Match List - I with List - II.

List - I

Approach to Health education

A.

Health education approach

B.

Primary health care approach

C.

Regulatory approach

D.

Service approach

List - II

Characteristic/description

I.

Change in health behaviour through a variety of external controls or laws

II.

Aims at providing all the health services needed by the people at their door steps

III.

Starting from the people with their full participation and active involvement in the planning and delivery of health services

IV.

People must be educated through planned learning experiences what to do and be informed, educated and encouraged to make their own choice for a healthy life

Choose the correct answer from the options given below :

(1)

A-I, B-II, C-IV, D-III

(2)

A-II, B-IV, C-III, D-I

(3)

A-III, B-I, C-II, D-IV

(4)

A-IV, B-III, C-I, D-II

- Options
- 1

2

3

4

Question Type : MCQ

Question ID : 432449293

Option 1 ID : 4324491145

Option 2 ID : 4324491146

Option 3 ID : 4324491147

Option 4 ID : 4324491148

Status : Answered

Chosen Option : 3

Q101

Which one among the following amino acids, is an essential amino acid ?

(1)

Arginine

(2)

Asparagine

(3)

Glycine

(4)

Valine

- Options
- 1

2

3

4

Question Type : MCQ

Question ID : 432449240

Option 1 ID : 432449933

Option 2 ID : 432449934

Option 3 ID : 432449935

Option 4 ID : 432449936

Status : Answered

Chosen Option : 1

Q102 The correct order of steps for scientific method in sociology from beginning of developing research is best given by which among the following options ?

A. Review the literature
B. Define the problem
C. Formulate a hypothesis
D. Select a research design

Choose the **correct** answer from the options given below :

(1) A, B, C, D
(2) C, A, D, B
(3) B, A, C, D
(4) D, A, C, B

Options 1 1
2 2
3 3
4 4

Question Type : MCQ
Question ID : 432449271
Option 1 ID : 4324491057
Option 2 ID : 4324491058
Option 3 ID : 4324491059
Option 4 ID : 4324491060
Status : Answered
Chosen Option : 2

Q103 The Johari window divides an individual's personality into four parts. The part which is known to others, but not to the individual (self) is called :

(1) Arena
(2) Blind
(3) Closed
(4) Dark

Options 1 1
2 2
3 3
4 4

Question Type : MCQ
Question ID : 432449245
Option 1 ID : 432449953
Option 2 ID : 432449954
Option 3 ID : 432449955
Option 4 ID : 432449956
Status : Answered
Chosen Option : 2

Q104 Which of the following study design has population as a unit of study ?

- (1) Ecological
- (2) Cross Sectional
- (3) Case Control
- (4) Randomized Controlled Trial

- Options
- 1 1
 - 2 2
 - 3 3
 - 4 4

Question Type : MCQ
Question ID : 432449241
Option 1 ID : 432449937
Option 2 ID : 432449938
Option 3 ID : 432449939
Option 4 ID : 432449940
Status : Answered
Chosen Option : 1

Q105 The devaluation of workers who seek or who are presumed to need flexible work arrangements is best defined by the term :

- (1) Familismo
- (2) Impression Management
- (3) Machismo
- (4) Flexibility stigma

- Options
- 1 1
 - 2 2
 - 3 3
 - 4 4

Question Type : MCQ
Question ID : 432449239
Option 1 ID : 432449929
Option 2 ID : 432449930
Option 3 ID : 432449931
Option 4 ID : 432449932
Status : Answered
Chosen Option : 4

Q106 Which among the following statements most accurately represents the term 'impairment' ?

- (1) The pathological process and its manifestations, which indicate a departure from the state of perfect health
- (2) The inability to carry out certain functions or activities which are otherwise expected for that age/sex
- (3) The actual loss of or damage to a part of body anatomy or an aberration of the physiological function
- (4) The final disadvantage in life which limits the fulfillment of a role person is required to play in life

- Options
- 1 1
 - 2 2
 - 3 3
 - 4 4

Question Type : MCQ
Question ID : 432449238
Option 1 ID : 432449925
Option 2 ID : 432449926
Option 3 ID : 432449927
Option 4 ID : 432449928
Status : Answered
Chosen Option : 2

Q107

The phenomenon in which the media provide such massive amounts of coverage that the audience becomes numb and fails to act on the information regardless of how compelling the issue, is best called as :

(1) Gate keeping

(2) Hyper consumerism

(3) Hyper-local media

(4) Narcotizing dysfunction

Options

1 1

2 2

3 3

4 4

Question Type : MCQ

Question ID : 432449231

Option 1 ID : 432449897

Option 2 ID : 432449898

Option 3 ID : 432449899

Option 4 ID : 432449900

Status : Answered

Chosen Option : 2

Q108

Arrange the following steps involved in the purification of water by rapid sand filters, from earliest to last :

A. Coagulation

B. Flocculation

C. Rapid mixing

D. Sedimentation

Choose the correct answer from the options given below :

(1) A, B, D, C

(2) A, C, B, D

(3) B, D, C, A

(4) B, A, C, D

Options

1 1

2 2

3 3

4 4

Question Type : MCQ

Question ID : 432449257

Option 1 ID : 4324491001

Option 2 ID : 4324491002

Option 3 ID : 4324491003

Option 4 ID : 4324491004

Status : Answered

Chosen Option : 3

Q109	<p>Flannelgraph is a type of audio-visual aid used for health education. All of the following statements are correct about flannelgraph, Except ?</p> <ul style="list-style-type: none">(1) Provides a background for displaying cut-out pictures, graphs and other illustrations(2) Pieces of sand paper, felt or rough cloth are pasted behind the cut-out pictures and illustrations.(3) A projector is required for display of the contents(4) Pre-arranged sequence of pictures can be displayed one after another	
Options 1 1 2 2 3 3 4 4		
		<div>Question Type : MCQ Question ID : 432449232 Option 1 ID : 432449901 Option 2 ID : 432449902 Option 3 ID : 432449903 Option 4 ID : 432449904 Status : Answered Chosen Option : 2</div>
Q110	<p>Which among the following is a type of non-nucleoside reverse transcriptase inhibitors (NNRTIs) drug used for Anti-retroviral therapy ?</p> <ul style="list-style-type: none">(1) Efavirenz(2) Tenofovir(3) Raltegravir(4) Abacavir	
Options 1 1 2 2 3 3 4 4		
		<div>Question Type : MCQ Question ID : 432449213 Option 1 ID : 432449825 Option 2 ID : 432449826 Option 3 ID : 432449827 Option 4 ID : 432449828 Status : Answered Chosen Option : 3</div>
Q111	<p>Correct regarding range of grace period for injectable MPA (Medroxyprogesterone Acetate) contraception under the Antara Programme ?</p> <ul style="list-style-type: none">(1) One week earlier and 3 weeks later from the scheduled date(2) 2 weeks earlier and 4 weeks later from the scheduled date(3) 3 weeks earlier and 2 weeks later from the scheduled date(4) One week earlier and 2 weeks later from the scheduled date	
Options 1 1 2 2 3 3 4 4		
		<div>Question Type : MCQ Question ID : 432449243 Option 1 ID : 432449945 Option 2 ID : 432449946 Option 3 ID : 432449947 Option 4 ID : 432449948 Status : Answered Chosen Option : 1</div>

Q112 Arrange the following stages in the process of change in health behaviour (as per Motivation Model) from earliest to last :

A. Adoption
B. Decision making
C. Evaluation
D. Interest

Choose the **correct** answer from the options given below :

(1) A, D, B, C
(2) B, C, D, A
(3) C, B, A, D
(4) D, C, B, A

Options 1 1
2 2
3 3
4 4

Question Type : MCQ
Question ID : 432449267
Option 1 ID : 4324491041
Option 2 ID : 4324491042
Option 3 ID : 4324491043
Option 4 ID : 4324491044
Status : Answered
Chosen Option : 3

Q113 Match List - I with List - II.

List - I	List - II
SDG	Indicator/Target
A. 2.2	I. Achieve access to adequate and equitable sanitation and hygiene for all
B. 5.2	II. End all forms of malnutrition
C. 6.2	III. End abuse, trafficking and all forms of violence against and torture of children
D. 16.2	IV. Eliminate all forms of violence against all women and girls in the public and private sphere

Choose the **correct** answer from the options given below :

(1) A-II, B-IV, C-I, D-III
(2) A-II, B-I, C-III, D-IV
(3) A-I, B-IV, C-II, D-III
(4) A-IV, B-II, C-I, D-III

Options 1 1
2 2
3 3
4 4

Question Type : MCQ
Question ID : 432449285
Option 1 ID : 4324491113
Option 2 ID : 4324491114
Option 3 ID : 4324491115
Option 4 ID : 4324491116
Status : Answered
Chosen Option : 1

Q114

Match List - I with List - II.

List - I

ICMR Institute

A. National Institute of Malaria Research

B. National Institute for Research in Tuberculosis

C. National Institute of Traditional Medicine

D. National Institute of Research in Tribal Health

List - II

Headquarters

I. Chennai

II. Jabalpur

III. New Delhi

IV. Belagavi

Choose the correct answer from the options given below :

(1) A-III, B-II, C-IV, D-I

(2) A-IV, B-I, C-III, D-II

(3) A-I, B-II, C-III, D-IV

(4) A-III, B-I, C-IV, D-II

Options 1 1

2 2

3 3

4 4

Question Type : MCQ

Question ID : 432449288

Option 1 ID : 4324491125

Option 2 ID : 4324491126

Option 3 ID : 4324491127

Option 4 ID : 4324491128

Status : Answered

Chosen Option : 2

Q115

Which among the following is not correct regarding strategies of National Policy on Indian Systems of Medicine and Homoeopathy, 2002 ?

(1) Disease oriented clinical drug research following reverse pharmacology approach

(2) Compulsory reorientation training for physicians and teachers for renewal of registration with registering councils

(3) The modern medicine content in course curriculae would be increased

(4) Identification and evaluation of promising and widely accepted practices and skills of traditional healers in rural and tribal areas

Options 1 1

2 2

3 3

4 4

Question Type : MCQ

Question ID : 432449211

Option 1 ID : 432449817

Option 2 ID : 432449818

Option 3 ID : 432449819

Option 4 ID : 432449820

Status : Answered

Chosen Option : 2

Q116

Given below are two statements : one is labelled as **Assertion (A)** and the other is labelled as **Reason (R)**.
Assertion (A) : A risk marker is directly involved in the chain of causation of the disease.
Reason (R) : Development of a transverse crease on the ear lobe has been shown in many studies to indicate an increased risk of Ischemic Heart Disease (IHD). Hence it can be used to identify individuals at higher risk of IHD.
In the light of the above statements, choose the **most appropriate answer** from the options given below :
(1) Both (A) and (R) are correct and (R) is the correct explanation of (A)
(2) Both (A) and (R) are correct but (R) is **not** the correct explanation of (A)
(3) (A) is correct but (R) is not correct
(4) (A) is not correct but (R) is correct

Options

1 1
2 2
3 3
4 4

Question Type : MCQ
Question ID : 432449251
Option 1 ID : 432449977
Option 2 ID : 432449978
Option 3 ID : 432449979
Option 4 ID : 432449980
Status : Answered
Chosen Option : 4

Q117

The methods in health communication are usually grouped into three categories based upon the level or approach. Which among the following is **not** one of the categories of approach in health communication ?
(1) Group approach
(2) Individual approach
(3) Mass approach
(4) Space approach

Options

1 1
2 2
3 3
4 4

Question Type : MCQ
Question ID : 432449225
Option 1 ID : 432449873
Option 2 ID : 432449874
Option 3 ID : 432449875
Option 4 ID : 432449876
Status : Answered
Chosen Option : 4

- Q118** A religious organization that claims to include most or all members of a society and is recognized as the national or official religion is best termed as :
- (1) Ecclesia
 - (2) Liberation theology
 - (3) Cult
 - (4) Quasi-religion

Options 1 1
2 2
3 3
4 4

Question Type : MCQ
Question ID : 432449244
Option 1 ID : 432449949
Option 2 ID : 432449950
Option 3 ID : 432449951
Option 4 ID : 432449952
Status : Answered
Chosen Option : 2

- Q119** As per the taxonomy of learning in Health Education, there are three main domains of learning. Which among the following best represent similar/alternate names for the 'Affective' domain ?
- A. Emotional
 - B. Kinesthetic
 - C. Thinking
 - D. Social
- Choose the **correct** answer from the options given below :
- (1) A and B only
 - (2) B and C only
 - (3) C and D only
 - (4) A and D only

Options 1 1
2 2
3 3
4 4

Question Type : MCQ
Question ID : 432449276
Option 1 ID : 4324491077
Option 2 ID : 4324491078
Option 3 ID : 4324491079
Option 4 ID : 4324491080
Status : Answered
Chosen Option : 2

Q120

Given below are two statements : one is labelled as **Assertion (A)** and the other is labelled as **Reason (R)**.
Assertion (A) : Cohort studies are more suitable for study of rare diseases as compared to case control studies.
Reason (R) : An extremely large study population may be needed in order to observe a sufficient number of individuals in the cohort develop the disease in question.
In the light of the above statements, choose the **most appropriate answer** from the options given below :
(1) Both (A) and (R) are correct and (R) is the correct explanation of (A)
(2) Both (A) and (R) are correct but (R) is **not** the correct explanation of (A)
(3) (A) is correct but (R) is not correct
(4) (A) is not correct but (R) is correct

Options

1 1

2 2

3 3

4 4

Question Type : MCQ

Question ID : 432449248

Option 1 ID : 432449965

Option 2 ID : 432449966

Option 3 ID : 432449967

Option 4 ID : 432449968

Status : Answered

Chosen Option : 3

Q121

Persuasion is the art of winning friends and influencing people, that does not employ force or deliberate manipulation. When persuasive health communication is deliberately employed to manipulate feelings, attitudes and beliefs, it becomes X. Which among the following best describes X ?
(1) Didactic communication
(2) Counselling
(3) Grape-vine communication
(4) Propaganda

Options

1 1

2 2

3 3

4 4

Question Type : MCQ

Question ID : 432449222

Option 1 ID : 432449861

Option 2 ID : 432449862

Option 3 ID : 432449863

Option 4 ID : 432449864

Status : Answered

Chosen Option : 2

Q122

Given below are two statements : one is labelled as **Assertion (A)** and the other is labelled as **Reason (R)**.
Assertion (A) : The water in Impounding Reservoirs is usually clear, but sometimes acquires a brownish coloration.
Reason (R) : This happens if the surrounding hills are covered with peat.
In the light of the above statements, choose the **most appropriate answer** from the options given below :
(1) Both (A) and (R) are correct and (R) is the correct explanation of (A)
(2) Both (A) and (R) are correct but (R) is **not** the correct explanation of (A)
(3) (A) is correct but (R) is not correct
(4) (A) is not correct but (R) is correct

Options

1 1
2 2
3 3
4 4

Question Type : MCQ

Question ID : 432449253

Option 1 ID : 432449985

Option 2 ID : 432449986

Option 3 ID : 432449987

Option 4 ID : 432449988

Status : Answered

Chosen Option : 3

Q123

Which one among the following best represents the ascending order (lowest to highest) of proportion (%) of global population with following environmental parameters, as of year 2020 ?
A. % having access to safely managed drinking water services
B. % having access to safely managed sanitation services
C. % where household waste water was discharged without safe treatment
D. % lacking a basic handwashing facility with water and soap at home
Choose the **correct answer** from the options given below :
(1) A, C, B, D
(2) B, D, A, C
(3) C, A, D, B
(4) D, C, B, A

Options

1 1
2 2
3 3
4 4

Question Type : MCQ

Question ID : 432449261

Option 1 ID : 4324491017

Option 2 ID : 4324491018

Option 3 ID : 4324491019

Option 4 ID : 4324491020

Status : Answered

Chosen Option : 2

Q124 Match List - I with List - II.

List - I	List - II
Method in Health Communication	Feature
A. Group discussion	I. Consists of a series of meetings with emphasis on individual work within the group
B. Panel discussion	II. The recorder prepares a report on the issues discussed and agreements reached
C. Symposium	III. 4 to 8 persons who are qualified to talk about the topic sit and discuss a given problem
D. Workshop	IV. A series of speeches on a selected subject, and there is no discussion among the speakers usually

Choose the **correct** answer from the options given below :

(1) A-I, B-IV, C-II, D-III
(2) A-II, B-III, C-IV, D-I
(3) A-III, B-II, C-I, D-IV
(4) A-II, B-I, C-III, D-IV

- Options 1 1
2 2
3 3
4 4

Question Type : MCQ
Question ID : 432449290
Option 1 ID : 4324491133
Option 2 ID : 4324491134
Option 3 ID : 4324491135
Option 4 ID : 4324491136
Status : Answered
Chosen Option : 3

Q125 The denominator while calculating Proportional Mortality Rate is :

(1) Mid year population in a particular year
(2) Total number of cases due to the same disease in a particular year
(3) Total deaths from all causes in a particular year
(4) Total number of deaths due to the same disease in a particular year

- Options 1 1
2 2
3 3
4 4

Question Type : MCQ
Question ID : 432449228
Option 1 ID : 432449885
Option 2 ID : 432449886
Option 3 ID : 432449887
Option 4 ID : 432449888
Status : Answered
Chosen Option : 4

Q126 Match List - I with List - II.

List - I	List - II
Health Committee	Important Recommendation
A. Shrivastav Committee	I. Development of PHCs for Comprehensive Health Care where each PHC should cover a population of 40000.
B. Mukerji Committee	II. Recommendation for scheme of Urban Health Posts
C. Krishnan Committee	III. Separating the staff for family planning programme and utilising basic health workers for all duties except family planning
D. Bhole Committee	IV. Appointment of Village Health Guides from among members of community itself.

Choose the correct answer from the options given below :

- (1) A-III, B-IV, C-II, D-I
(2) A-IV, B-III, C-II, D-I
(3) A-II, B-III, C-I, D-IV
(4) A-III, B-II, C-IV, D-I

Options 1 1
2 2
3 3
4 4

Question Type : MCQ
Question ID : 432449286
Option 1 ID : 4324491117
Option 2 ID : 4324491118
Option 3 ID : 4324491119
Option 4 ID : 4324491120
Status : Answered
Chosen Option : 2

Q127 Match List - I with List - II.

List - I	List - II
Category of Zoonoses	Disease example
A. Cyclo Zoonoses	I. Rabies
B. Direct Zoonoses	II. Larva migrans
C. Meta Zoonoses	III. Plague
D. Sapro Zoonoses	IV. Echinococcosis

Choose the correct answer from the options given below :

- (1) A-I, B-III, C-II, D-IV
(2) A-II, B-IV, C-I, D-III
(3) A-III, B-II, C-IV, D-I
(4) A-IV, B-I, C-III, D-II

Options 1 1
2 2
3 3
4 4

Question Type : MCQ
Question ID : 432449284
Option 1 ID : 4324491109
Option 2 ID : 4324491110
Option 3 ID : 4324491111
Option 4 ID : 4324491112
Status : Answered
Chosen Option : 2

Q128 Match List - I with List - II.

List - I Measurement	List - II Characteristic
A. DALY	I. Used to estimate disability free life expectancy (DFLE) and disability life expectancy (DLE)
B. QALY	II. Represents the expected number of remaining years of life that are likely to be spent in good health starting from a specific age
C. HALE	III. One lost year of healthy life either due to premature death or living with disability due to diseases
D. Sullivan's Indicator	IV. Measure of health outcome pertaining to disease burden and used to assess value of medical interventions

Choose the **correct** answer from the options given below :

(1) A-II, B-I, C-IV, D-III
(2) A-II, B-III, C-I, D-IV
(3) A-IV, B-I, C-III, D-II
(4) A-III, B-IV, C-II, D-I

Options 1 1
2 2
3 3
4 4

Question Type : MCQ
Question ID : 432449291
Option 1 ID : 4324491137
Option 2 ID : 4324491138
Option 3 ID : 4324491139
Option 4 ID : 4324491140
Status : Answered
Chosen Option : 3

Q129 Arrange the following cancers in India according to decreasing order of age standardised mortality rates (As of 2022) :

A. Lung Cancer
B. Ovarian Cancer
C. Cervical Cancer
D. Breast Cancer

Choose the **correct** answer from the options given below :

(1) D, A, B, C
(2) D, C, A, B
(3) A, D, B, C
(4) C, D, A, B

Options 1 1
2 2
3 3
4 4

Question Type : MCQ
Question ID : 432449268
Option 1 ID : 4324491045
Option 2 ID : 4324491046
Option 3 ID : 4324491047
Option 4 ID : 4324491048
Status : Answered
Chosen Option : 2

Q130 Arrange the following Important Public Health Days/events in a chronological order of a calendar year (from January 1 to December 31) :

- A. World Leprosy Day
- B. World Diabetes Day
- C. World Cancer Day
- D. World Mental Health Day

Choose the **correct** answer from the options given below :

- (1) D, A, B, C
- (2) A, C, D, B
- (3) C, A, B, D
- (4) B, C, D, A

Options 1 1
2 2
3 3
4 4

Question Type : MCQ
Question ID : 432449269
Option 1 ID : 4324491049
Option 2 ID : 4324491050
Option 3 ID : 4324491051
Option 4 ID : 4324491052
Status : Answered
Chosen Option : 3

Q131 Which of the given options are best counted as the merits of Empowerment in Management ?

- A. Speed
- B. Morale
- C. Role conflict
- D. Greater Potential for chaos
- E. Non financial incentives

Choose the **correct** answer from the options given below :

- (1) B, C and D only
- (2) A, C and E only
- (3) B, D and E only
- (4) A, B and E only

Options 1 1
2 2
3 3
4 4

Question Type : MCQ
Question ID : 432449278
Option 1 ID : 4324491085
Option 2 ID : 4324491086
Option 3 ID : 4324491087
Option 4 ID : 4324491088
Status : Answered
Chosen Option : 3

Q132 The denominator while calculating Positive Predictive Value includes :
A. True Positive (TP)
B. False Positive (FP)
C. True Negative (TN)
D. False Negative (FN)
Choose the **correct** answer from the options given below :

- (1) A, B only
(2) A, C only
(3) B, D only
(4) C, D only
- Options** 1 1
2 2
3 3
4 4

Question Type : MCQ
Question ID : 432449273
Option 1 ID : 4324491065
Option 2 ID : 4324491066
Option 3 ID : 4324491067
Option 4 ID : 4324491068
Status : Answered
Chosen Option : 2

Q133 Which of the following disease is transmitted most commonly by Louse ?
(1) Epidemic Typhus
(2) Endemic Typhus
(3) Tick Typhus
(4) Scrub Typhus

- Options** 1 1
2 2
3 3
4 4

Question Type : MCQ
Question ID : 432449218
Option 1 ID : 432449845
Option 2 ID : 432449846
Option 3 ID : 432449847
Option 4 ID : 432449848
Status : Answered
Chosen Option : 3

Q134

All of the following are a type of Time Management (Moments) techniques Except :

(1) Program Evaluation and Review Technique

(2) Economic Order Quantity

(3) Critical Path Management

(4) Gantt Charting

Options

1 1

2 2

3 3

4 4

Question Type : MCQ

Question ID : 432449214

Option 1 ID : 432449829

Option 2 ID : 432449830

Option 3 ID : 432449831

Option 4 ID : 432449832

Status : Answered

Chosen Option : 1

Q135

Which of the following is most accurate regarding aim of Surakshit Matritva Aashwasan (SUMAN) ?

(1) Fixed day, free of cost assured antenatal care on 9th day of every month

(2) Cash incentive for institutional births

(3) Improvement of quality of care in labour room and maternity OTs in public health facilities

(4) Zero preventable maternal and newborn deaths and high quality maternity care delivered with dignity and respect

Options

1 1

2 2

3 3

4 4

Question Type : MCQ

Question ID : 432449219

Option 1 ID : 432449849

Option 2 ID : 432449850

Option 3 ID : 432449851

Option 4 ID : 432449852

Status : Answered

Chosen Option : 3

Q136 Arrange the following causes of neonatal mortality from highest to lowest in terms of percent contribution towards neonatal deaths in 2017 in India (As per MOHFW, GOI Annual Report 2019-20) :

A. Birth asphyxia and birth trauma
B. Diarrhea
C. Neonatal Pneumonia
D. Prematurity and low birth weight

Choose the **correct** answer from the options given below :

(1) D, B, C, A
(2) A, D, B, C
(3) D, A, C, B
(4) A, C, D, B

Options 1 1
2 2
3 3
4 4

Question Type : MCQ
Question ID : 432449259
Option 1 ID : 4324491009
Option 2 ID : 4324491010
Option 3 ID : 4324491011
Option 4 ID : 4324491012
Status : Answered
Chosen Option : 3

Q137 Given below are two statements : one is labelled as **Assertion (A)** and the other is labelled as **Reason (R)**.

Assertion (A) : Intra Uterine Device (IUD) is not a contraceptive method of first choice for nulliparous women.

Reason (R) : The commonest complaint of women fitted with an IUD is increased vaginal bleeding.

In the light of the above statements, choose the **most appropriate answer** from the options given below :

(1) Both (A) and (R) are correct and (R) is the correct explanation of (A)
(2) Both (A) and (R) are correct but (R) is **not** the correct explanation of (A)
(3) (A) is correct but (R) is not correct
(4) (A) is not correct but (R) is correct

Options 1 1
2 2
3 3
4 4

Question Type : MCQ
Question ID : 432449247
Option 1 ID : 432449961
Option 2 ID : 432449962
Option 3 ID : 432449963
Option 4 ID : 432449964
Status : Answered
Chosen Option : 4

Q138

Given below are two statements : one is labelled as **Assertion (A)** and the other is labelled as **Reason (R)**.
Assertion (A) : Neonatal mortality is the most difficult part of Infant mortality to alter.
Reason (R) : Neonatal mortality is majorly influenced by exogenous environmental factors.
In the light of the above statements, choose the **most appropriate answer** from the options given below :
(1) Both (A) and (R) are correct and (R) is the correct explanation of (A)
(2) Both (A) and (R) are correct but (R) is **not** the correct explanation of (A)
(3) (A) is correct but (R) is not correct
(4) (A) is not correct but (R) is correct

Options

1 1
2 2
3 3
4 4

Question Type : MCQ
Question ID : 432449255
Option 1 ID : 432449993
Option 2 ID : 432449994
Option 3 ID : 432449995
Option 4 ID : 432449996
Status : Answered
Chosen Option : 3

Q139

Net effect of using 2 screening test in SERIES (sequential) :
A. Sensitivity increases
B. Sensitivity decreases
C. Specificity increases
D. Specificity decreases
Choose the **correct** answer from the options given below :
(1) A, C only
(2) A, D only
(3) B, C only
(4) B, D only

Options

1 1
2 2
3 3
4 4

Question Type : MCQ
Question ID : 432449280
Option 1 ID : 4324491093
Option 2 ID : 4324491094
Option 3 ID : 4324491095
Option 4 ID : 4324491096
Status : Answered
Chosen Option : 2

- Q140** Match List - I with List - II.
- | List - I | List - II |
|--------------------------------------|--|
| Sociological Perspectives on culture | Culture and society |
| A. Functionalist Perspective | I. Culture reflects society's view of men & women |
| B. Conflict Perspective | II. Culture reflects a society's dominant ideology |
| C. Feminist Perspective | III. A society's core culture is perpetuated through daily social interactions |
| D. Interactionist Perspective | IV. Culture reflects a society's strong central values |
- Choose the **correct** answer from the options given below :
- (1) A-I, B-IV, C-III, D-II
(2) A-I, B-II, C-III, D-IV
(3) A-IV, B-I, C-II, D-III
(4) A-IV, B-II, C-I, D-III

Options 1 1
2 2
3 3
4 4

Question Type : MCQ
Question ID : 432449296
Option 1 ID : 4324491157
Option 2 ID : 4324491158
Option 3 ID : 4324491159
Option 4 ID : 4324491160
Status : Answered
Chosen Option : 3

Comprehension.

Read the following passage and answer the questions :

For a district Y, having a population of 15,00,000 data regarding Anti malarial activities during the year 2024 is mentioned. Considering the whole population under surveillance, the number of blood smear (slides) examined were 1,10,000. The number of slides positive for plasmodium vivax were 2,050. The number of slides positive for plasmodium falciparum were 310. During the same year, the confirmed deaths due to Malaria were two (2). Assume that the district had fully functional and easily accessible microscopy services and all testing and diagnosis for Malaria was done using microscopy only.

SubQuestion No : 141

- Q141** Which among the following best represents the calculation of Annual Parasite Index (API) considering the multiplier as 1000 ?
- (1) $\frac{2050}{1,10,000} \times 1000$
(2) $\frac{2050}{15,00,000} \times 1000$
(3) $\frac{2360}{1,10,000} \times 1000$
(4) $\frac{2360}{15,00,000} \times 1000$

Options 1 1
2 2
3 3
4 4

Question Type : MCQ
Question ID : 432449299
Option 1 ID : 4324491165
Option 2 ID : 4324491166
Option 3 ID : 4324491167
Option 4 ID : 4324491168
Status : Answered
Chosen Option : 2

Comprehension:

Read the following passage and answer the questions :

For a district Y, having a population of 15,00,000 data regarding Anti malarial activities during the year 2024 is mentioned. Considering the whole population under surveillance, the number of blood smear (slides) examined were 1,10,000. The number of slides positive for plasmodium vivax were 2,050. The number of slides positive for plasmodium falciparum were 310. During the same year, the confirmed deaths due to Malaria were two (2). Assume that the district had fully functional and easily accessible microscopy services and all testing and diagnosis for Malaria was done using microscopy only.

SubQuestion No : 142

Q142 Which among the following best represents the calculation of Annual Falciparum Index (AFI) considering the multiplier as 1000 ?

- (1) $\frac{310}{1,10,000} \times 1000$
- (2) $\frac{310}{15,00,000} \times 1000$
- (3) $\frac{2050}{1,10,000} \times 1000$
- (4) $\frac{2360}{15,00,000} \times 1000$

Options

- 1 1
- 2 2
- 3 3
- 4 4

Question Type : MCQ

Question ID : 432449300

Option 1 ID : 4324491169

Option 2 ID : 4324491170

Option 3 ID : 4324491171

Option 4 ID : 4324491172

Status : Answered

Chosen Option : 3



Comprehension:

Read the following passage and answer the questions :

For a district Y, having a population of 15,00,000 data regarding Anti malarial activities during the year 2024 is mentioned. Considering the whole population under surveillance, the number of blood smear (slides) examined were 1,10,000. The number of slides positive for plasmodium vivax were 2,050. The number of slides positive for plasmodium falciparum were 310. During the same year, the confirmed deaths due to Malaria were two (2). Assume that the district had fully functional and easily accessible microscopy services and all testing and diagnosis for Malaria was done using microscopy only.

SubQuestion No : 143

Q143 Which among the following best represents the calculation of Case Fatality Rate (CFR) for Malaria during the year 2024 for district Y, considering multiplier as 100 ?

- (1) $\frac{2}{2360} \times 100$
- (2) $\frac{2}{1,10,000} \times 100$
- (3) $\frac{2}{2050} \times 100$
- (4) $\frac{2}{15,00,000} \times 100$

Options 1 1

2 2

3 3

4 4

Question Type : MCQ

Question ID : 432449302

Option 1 ID : 4324491177


Option 2 ID : 4324491178

Option 3 ID : 4324491179

Option 4 ID : 4324491180

Status : Answered

Chosen Option : 2



Comprehension:

Read the following passage and answer the questions :

For a district Y, having a population of 15,00,000 data regarding Anti malarial activities during the year 2024 is mentioned. Considering the whole population under surveillance, the number of blood smear (slides) examined were 1,10,000. The number of slides positive for plasmodium vivax were 2,050. The number of slides positive for plasmodium falciparum were 310. During the same year, the confirmed deaths due to Malaria were two (2). Assume that the district had fully functional and easily accessible microscopy services and all testing and diagnosis for Malaria was done using microscopy only.

SubQuestion No : 144

Q144 Which among the following best represents the calculation of Slide Positivity Rate (SPR) considering the multiplier as 100 ?

(1) $\frac{2050}{1,10,000} \times 100$

(2) $\frac{310}{1,10,000} \times 100$

(3) $\frac{2360}{1,10,000} \times 100$

(4) $\frac{2360}{15,00,000} \times 100$


Options 1 1

2 2

3 3

4 4

Question Type : MCQ
Question ID : 432449301
Option 1 ID : 4324491173
Option 2 ID : 4324491174
Option 3 ID : 4324491175
Option 4 ID : 4324491176
Status : Answered
Chosen Option : 4



Comprehension:

Read the following passage and answer the questions :

For a district Y, having a population of 15,00,000 data regarding Anti malarial activities during the year 2024 is mentioned. Considering the whole population under surveillance, the number of blood smear (slides) examined were 1,10,000. The number of slides positive for plasmodium vivax were 2,050. The number of slides positive for plasmodium falciparum were 310. During the same year, the confirmed deaths due to Malaria were two (2). Assume that the district had fully functional and easily accessible microscopy services and all testing and diagnosis for Malaria was done using microscopy only.


SubQuestion No : 145

Q145 Which among the following best represents the calculation of Annual Blood Examination Rate (ABER) considering the multiplier as 100 ?

- (1) $\frac{1,10,000}{15,00,000} \times 100$
- (2) $\frac{15,00,000}{1,10,000} \times 100$
- (3) $\frac{2360}{1,10,000} \times 100$
- (4) $\frac{2360}{15,00,000} \times 100$

- Options 1 1
2 2
3 3
4 4

Question Type : MCQ
Question ID : 432449298
Option 1 ID : 4324491161
Option 2 ID : 4324491162
Option 3 ID : 4324491163
Option 4 ID : 4324491164
Status : Answered
Chosen Option : 2



Comprehension:

Read the following passage and answer the questions :

There is a city X in India which had a total mid year population of 2,50,000 in the year 2024. Assuming the reproductive age group to be 15 to 44 years, the total mid year population in the reproductive age group was 1,25,000 in the city X during the year 2024. The table given below shows the details of the population in the reproductive age group. The table depicts the age-group wise mid year population of males, females and total, and the age specific fertility rates in the different age groups given as per 1000 mid year female population of the same age group.

Age group (in class intervals of 10 years)	Mid year Population			Age Specific Fertility Rate (ASFR) per 1000 mid year female population of the age group
	Males (n)	Females (n)	Total (n)	
15-24	27,000	25,000	52,000	100
25-34	22,000	20,000	42,000	80
35-44	16,000	15,000	31,000	60
Total	65,000	60,000	1,25,000	-

SubQuestion No : 146

- Q146 Which one among the following best represents the total number of births in the city X during the year 2024, from the data given above ?
- (1) 1250
 - (2) 2500
 - (3) 5000
 - (4) 14400

- Options 1 1
2 2
3 3
4 4

Question Type : MCQ
Question ID : 432449305
Option 1 ID : 4324491185
Option 2 ID : 4324491186
Option 3 ID : 4324491187
Option 4 ID : 4324491188
Status : Answered
Chosen Option : 2

Comprehension:

Read the following passage and answer the questions :

There is a city X in India which had a total mid year population of 2,50,000 in the year 2024. Assuming the reproductive age group to be 15 to 44 years, the total mid year population in the reproductive age group was 1,25,000 in the city X during the year 2024. The table given below shows the details of the population in the reproductive age group. The table depicts the age-group wise mid year population of males, females and total, and the age specific fertility rates in the different age groups given as per 1000 mid year female population of the same age group.

Age group (in class intervals of 10 years)	Mid year Population			Age Specific Fertility Rate (ASFR) per 1000 mid year female population of the age group
	Males (n)	Females (n)	Total (n)	
15-24	27,000	25,000	52,000	100
25-34	22,000	20,000	42,000	80
35-44	16,000	15,000	31,000	60
Total	65,000	60,000	1,25,000	-

SubQuestion No : 147

- Q147 Which one among the following best represents the denominator in the calculation of the General Fertility Rate (GFR) for the city X during the year 2024 ?
- (1) 60,000
 - (2) 65,000
 - (3) 1,25,000
 - (4) 2,50,000

- Options 1 1
2 2
3 3
4 4

Question Type : MCQ
Question ID : 432449307
Option 1 ID : 4324491193
Option 2 ID : 4324491194
Option 3 ID : 4324491195
Option 4 ID : 4324491196
Status : Answered
Chosen Option : 3

Comprehension:

Read the following passage and answer the questions :

There is a city X in India which had a total mid year population of 2,50,000 in the year 2024. Assuming the reproductive age group to be 15 to 44 years, the total mid year population in the reproductive age group was 1,25,000 in the city X during the year 2024. The table given below shows the details of the population in the reproductive age group. The table depicts the age-group wise mid year population of males, females and total, and the age specific fertility rates in the different age groups given as per 1000 mid year female population of the same age group.

Age group (in class intervals of 10 years)	Mid year Population			Age Specific Fertility Rate (ASFR) per 1000 mid year female population of the age group
	Males (n)	Females (n)	Total (n)	
15-24	27,000	25,000	52,000	100
25-34	22,000	20,000	42,000	80
35-44	16,000	15,000	31,000	60
Total	65,000	60,000	1,25,000	-

SubQuestion No : 148

- Q148 Which one among the following best represents the Total Fertility Rate (TFR) for the city X, assuming that a female were to pass through her reproductive years bearing children at the same rates as the women now in each age group ?
- (1) 1.2
 - (2) 2.0
 - (3) 2.4
 - (4) 4.0

- Options 1 1
2 2
3 3
4 4

Question Type : MCQ
Question ID : 432449308
Option 1 ID : 4324491197
Option 2 ID : 4324491198
Option 3 ID : 4324491199
Option 4 ID : 4324491200
Status : Answered
Chosen Option : 2

Comprehension:

Read the following passage and answer the questions :

There is a city X in India which had a total mid year population of 2,50,000 in the year 2024. Assuming the reproductive age group to be 15 to 44 years, the total mid year population in the reproductive age group was 1,25,000 in the city X during the year 2024. The table given below shows the details of the population in the reproductive age group. The table depicts the age-group wise mid year population of males, females and total, and the age specific fertility rates in the different age groups given as per 1000 mid year female population of the same age group.

Age group (in class intervals of 10 years)	Mid year Population			Age Specific Fertility Rate (ASFR) per 1000 mid year female population of the age group
	Males (n)	Females (n)	Total (n)	
15-24	27,000	25,000	52,000	100
25-34	22,000	20,000	42,000	80
35-44	16,000	15,000	31,000	60
Total	65,000	60,000	1,25,000	-

SubQuestion No : 149

- Q149 Which one among the following best represents the number of births among the females belonging to the age group 25-34 years in the city X during the year 2024 ?
- (1) 900
 - (2) 1600
 - (3) 2500
 - (4) 3360

- Options 1 1
2 2
3 3
4 4

Question Type : MCQ
Question ID : 432449304
Option 1 ID : 4324491181
Option 2 ID : 4324491182
Option 3 ID : 4324491183
Option 4 ID : 4324491184
Status : Answered
Chosen Option : 3

Comprehension:

Read the following passage and answer the questions :

There is a city X in India which had a total mid year population of 2,50,000 in the year 2024. Assuming the reproductive age group to be 15 to 44 years, the total mid year population in the reproductive age group was 1,25,000 in the city X during the year 2024. The table given below shows the details of the population in the reproductive age group. The table depicts the age-group wise mid year population of males, females and total, and the age specific fertility rates in the different age groups given as per 1000 mid year female population of the same age group.

Age group (in class intervals of 10 years)	Mid year Population			Age Specific Fertility Rate (ASFR) per 1000 mid year female population of the age group
	Males (n)	Females (n)	Total (n)	
15-24	27,000	25,000	52,000	100
25-34	22,000	20,000	42,000	80
35-44	16,000	15,000	31,000	60
Total	65,000	60,000	1,25,000	-

SubQuestion No : 150

- Q150 Which one among the following best represents the Crude Birth Rate in the city X during the year 2024, considering the multiplier as per 1,000 ?
- (1) 10
 - (2) 20
 - (3) 30
 - (4) 40

- Options 1 1
2 2
3 3
4 4

Question Type : MCQ
Question ID : 432449306
Option 1 ID : 4324491189
Option 2 ID : 4324491190
Option 3 ID : 4324491191
Option 4 ID : 4324491192
Status : Answered
Chosen Option : 2