

Roll Number	
Candidate Name	
Venue Name	
Exam Date	16/03/2022
Exam Time	12:00 PM - 1:00 PM
Subject	Selection Post Matriculation Level

Section : General Intelligence

Q.1 Select the option that is related to the third number in the same way as the second number is related to the first number and the sixth number is related to the fifth number.

14 : 197 :: 18 : ? :: 16 : 257

- Ans
- 1. 126
 - 2. 526
 - 3. 325
 - 4. 217

Question ID : 65497841633
Status : Answered
Chosen Option : 3

Q.2 Select the correct mirror image of the given combination when the mirror is placed at 'PQ' as shown.

4 5 w E v b |
P
Q

- Ans
- 1. 4 5 w E v b
 - 2. 4 5 w E v b
 - 3. 4 5 w E v b
 - 4. 4 5 w E v b

Question ID : 65497841739
Status : Answered
Chosen Option : 3

Q.3 'A + B' means 'A is the brother of B';
'A = B' means 'A is the daughter of B';
'A @ B' means 'A is the wife of B'.
If 'U + Y = T @ G', then which of the following statements is correct?

- Ans
- 1. G is the father of U.
 - 2. T is the sister of U.
 - 3. G is the paternal uncle of Y.
 - 4. T is the maternal aunt of U.

Question ID : 65497841526
Status : Answered
Chosen Option : 1

**Test
Prime**

By Adda247

ALL EXAMS, ONE SUBSCRIPTION



Test. Analyze. Improve. Repeat.



Don't just *prepare*. *Perform*.

Test Prime — built only for mock tests.



1,50,000+
Mock Tests



25,000+
Previous Year Papers



800+
Exam Covered



500% Refund
on Selection



5 lakh+
Free Quizzes



Daily
Free PDFs



Job Alerts
Stay Updated

- Multilingual
- Detailed Solution
- Strong and Weak Areas



**All India
Rankings**

Compete with lakhs.
Rank. Improve. Repeat.



← Adda247 test prime

Rating ▾

Editors' choice

New



Adda247 Test Prime
Adda Education • Education
Installed



DOWNLOAD THE APP



Q.4 In a certain code language, 'my wish' is written as 'rt bt', 'my fault' is written as 'mt rt', and 'his fault' is written as 'mt kt'. How will 'his wish' be written in that language?

- Ans
- 1. kt rt
 - 2. kt bt
 - 3. kt mt
 - 4. rt mt

Question ID : 65497841621

Status : Answered

Chosen Option : 2

Q.5 In a certain code language, 'USE' is coded as '135', and 'BY' is coded as '54'. How will 'PART' be coded in that language?

- Ans
- 1. 240
 - 2. 220
 - 3. 200
 - 4. 210

Question ID : 65497841725

Status : Not Answered

Chosen Option : --

Q.6 Select the correct option that indicates the arrangement of the given words in the order in which they appear in an English dictionary.

1. Derive
2. Dexterity
3. Deceit
4. Decode
5. Decision

- Ans
- 1. 3, 5, 4, 2, 1
 - 2. 3, 4, 5, 1, 2
 - 3. 5, 3, 4, 1, 2
 - 4. 3, 5, 4, 1, 2

Question ID : 65497841717

Status : Answered

Chosen Option : 4

Q.7 In a certain code language, 'MUSICIAN' is written as 'NTTHDHBM'. How will 'FRUSTATE' be written in that language?

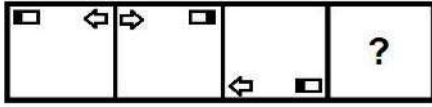
- Ans
- 1. RFSUATET
 - 2. EQTRSZSD
 - 3. GQVRUZUD
 - 4. GSVTUBUF

Question ID : 65497841518

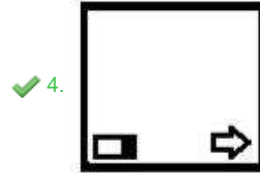
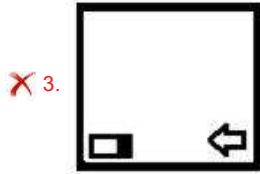
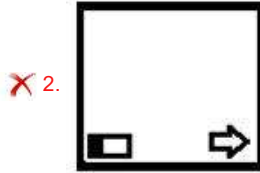
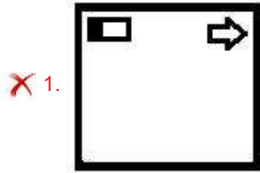
Status : Answered

Chosen Option : 3

Q.8 Select the figure from among the given options that can replace the question mark (?) in the following series.



Ans



Question ID : 65497841635
 Status : Answered
 Chosen Option : 4

Q.9 In a certain code language, 'her name is Smita' is written as 'Ps Bs Ns Rs', 'my name is Ravi' is written as 'Gs Bs Ns Ts', and 'Myself Smita' is written as 'Ds Rs'. How will 'her' be written in that language?

- Ans
- ✓ 1. Ps
 - ✗ 2. Ns
 - ✗ 3. Rs
 - ✗ 4. Bs

Question ID : 65497841722
 Status : Answered
 Chosen Option : 1

Q.10 Select the option that is related to the third term in the same way as the second term is related to the first term.

LODGE : KNCFD :: NEPTUNE : ?

- Ans
- ✓ 1. MDOSTMD
 - ✗ 2. MFORTMD
 - ✗ 3. MDQSVMD
 - ✗ 4. ODOSTOD

Question ID : 65497841613
 Status : Answered
 Chosen Option : 1

Q.11 Read the given statements and conclusions carefully. Assuming that the information given in the statements is true, even if it appears to be at variance with commonly known facts, decide which of the given conclusions logically follow(s) from the statements.

Statements:
Some officers are clerks.
All clerks are workers.

Conclusions:
I. Some workers are officers.
II. No worker is an officer.

- Ans
- 1. Both conclusions I and II follow
 - 2. Only conclusion I follows
 - 3. Either conclusion I or II follows
 - 4. Only conclusion II follows

Question ID : 65497841629
Status : Answered
Chosen Option : 2

Q.12 'A + B' means 'A is the husband of B';
'A = B' means 'A is the daughter of B'.
If 'H + E = M + R', then how is R related to H?

- Ans
- 1. Father
 - 2. Daughter-in-law
 - 3. Mother
 - 4. Mother-in-law

Question ID : 65497841730
Status : Answered
Chosen Option : 3

Q.13 Select the correct option that indicates the arrangement of the following words in a logical and meaningful order.

1. Wrist
2. Nose
3. Forehead
4. Knee
5. Shoulder

- Ans
- 1. 4, 1, 2, 5, 3
 - 2. 3, 1, 5, 2, 4
 - 3. 4, 1, 5, 2, 3
 - 4. 4, 2, 5, 1, 3

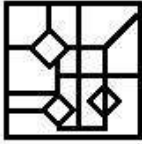
Question ID : 65497841614
Status : Answered
Chosen Option : 3

Q.14 Select the option in which the given figure is embedded (rotation is NOT allowed).

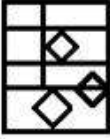


Ans

✓ 1.



✗ 2.



✗ 3.



✗ 4.



Question ID : 65497841636
Status : Answered
Chosen Option : 1

Q.15 Six persons P, Q, R, S, T and U are sitting in a straight line, all facing in the same direction. Q is to the immediate left of P. R is second from the right end. Q is third to the left of R. T is third to the left of S. What is U's position in the line?

Ans

✗ 1. Between Q and S

✓ 2. To the immediate right of R

✗ 3. To the immediate right of P

✗ 4. To the immediate left of S

Question ID : 65497841728
Status : Answered
Chosen Option : 2

Q.16 Select the number from among the given options that can replace the question mark (?) in the following series.

30, 38, 65, 129, 254, ?

Ans

✗ 1. 440

✗ 2. 450

✗ 3. 420

✓ 4. 470

Question ID : 65497841631
Status : Answered
Chosen Option : 4

Q.17 Read the given statements and conclusions carefully. Assuming that the information given in the statements is true, even if it appears to be at variance with commonly known facts, decide which of the given conclusions logically follow(s) from the statements.

Statements:

All chargers are phones.
No phone is a watch.

Conclusions:

I. All phones are chargers.
II. No charger is a watch.
III. No watch is a phone.

- Ans
- 1. Only conclusions I and III follow
 - 2. Only conclusion III follows
 - 3. Only conclusions II and III follow
 - 4. Only conclusions I and II follow

Question ID : 65497841630

Status : Answered

Chosen Option : 2

Q.18 Select the number from among the given options that can replace the question mark (?) in the following series.

55, 59, 68, 84, 109, ?

- Ans
- 1. 175
 - 2. 130
 - 3. 145
 - 4. 160

Question ID : 65497841530

Status : Answered

Chosen Option : 3

Q.19 Which two numbers (not digits) should be interchanged to make the given equation correct?

$70 + 30 \times 16 - 60 \div 6 = 164$

- Ans
- 1. 30 and 6
 - 2. 70 and 30
 - 3. 30 and 60
 - 4. 16 and 60

Question ID : 65497841634

Status : Answered

Chosen Option : 1

Q.20 In a certain code language, 'CAR' is coded as '66', and 'PLOY' is coded as '272'. How will 'CLASS' be coded in that language?

- Ans
- 1. 270
 - 2. 280
 - 3. 250
 - 4. 260

Question ID : 65497841521

Status : Answered

Chosen Option : 1

Q.21 Select the option that is related to the third word in the same way as the second word is related to the first word.

Obsolete : Modern :: Arrogant : ?

- Ans 1. Modest
 2. Miser
 3. Eager
 4. Sceptical

Question ID : 65497841719
Status : Answered
Chosen Option : 1

Q.22 In a certain code language, 'GOLF' is coded as '40', and 'DOSE' is coded as '43'. How will 'FISH' be coded in that language?

- Ans 1. 38
 2. 48
 3. 42
 4. 57

Question ID : 65497841622
Status : Answered
Chosen Option : 3

Q.23 Select the option that is related to the third term in the same way as the second term is related to the first term.

CURSOR : TQUTWE :: MOSTLY : ?

- Ans 1. OMTSYL
 2. OQUVNB
 3. ANVUQO
 4. UPNRKW

Question ID : 65497841618
Status : Answered
Chosen Option : 3

Q.24 Preeti, Umang, Shrina, Palak and Amrita are sitting in a straight line, all facing the north. Palak is sitting at the left corner. Umang is third to the right of Shrina. Preeti is to the immediate left of Amrita. Who is sitting to the immediate left of Umang?

- Ans 1. Palak
 2. Preeti
 3. Amrita
 4. Shrina

Question ID : 65497841523
Status : Answered
Chosen Option : 3

Q.25 Select the combination of letters that when sequentially placed in the blanks of the given series will complete the series.

HY_R_HY_RB_YU_BH_U_B

- Ans
- 1. UBUHRYU
 - 2. UBUHRYB
 - 3. UBURRYR
 - 4. UBUHRYR

Question ID : 65497841514
Status : Answered
Chosen Option : 4

Section : English Language

Q.1 Select the INCORRECTLY spelt word.

- Ans
- 1. Foreign
 - 2. Client
 - 3. Servival
 - 4. Curious

Question ID : 65497841753
Status : Answered
Chosen Option : 3

Q.2 Select the most appropriate meaning of the given idiom.

A house of cards

- Ans
- 1. An insecure situation
 - 2. A lavish lifestyle
 - 3. A gambling casino
 - 4. A dishonest livelihood

Question ID : 65497841749
Status : Answered
Chosen Option : 1

Q.3 Select the most appropriate synonym of the given word.

Conceit

- Ans
- 1. Vanity
 - 2. Humility
 - 3. Modesty
 - 4. Gravity

Question ID : 65497841745
Status : Answered
Chosen Option : 2

Q.4 Select the most appropriate synonym of the given word.

Gloomy

- Ans 1. Dull
 2. Bright
 3. Hopeful
 4. Lively

Question ID : 65497841540
Status : Answered
Chosen Option : 1

Q.5 Select the most appropriate word for the given group of words.

the sound made by a hen

- Ans 1. quack
 2. cluck
 3. squeak
 4. Squawk

Question ID : 65497841648
Status : Answered
Chosen Option : 2

Q.6 Select the most appropriate antonym of the given word.

INDUSTRIOUS

- Ans 1. hardworking
 2. energetic
 3. enthusiastic
 4. inactive

Question ID : 65497841645
Status : Answered
Chosen Option : 4

Q.7 Select the correctly spelt word.

- Ans 1. entrepreneur
 2. entrepreneur
 3. entrepreneur
 4. entrepreneuer

Question ID : 65497841652
Status : Answered
Chosen Option : 1

Q.8 Select the most appropriate antonym of the given word.

TIMID

- Ans 1. humble
 2. fearful
 3. shy
 4. bold

Question ID : 65497841644
Status : Answered
Chosen Option : 4

Q.9 Select the most appropriate option to fill in the blank.

It is their problem. Let _____ solve it themselves.

- Ans
- 1. her
 - 2. it
 - 3. us
 - 4. them

Question ID : 65497841743
Status : Answered
Chosen Option : 4

Q.10 Select the most appropriate option to fill in the blank.

This story has been taken _____ the Arabian Nights.

- Ans
- 1. from
 - 2. of
 - 3. by
 - 4. with

Question ID : 65497841538
Status : Answered
Chosen Option : 1

Q.11 Select the option that expresses the given sentence in passive voice.

The farmers harvested the crops.

- Ans
- 1. The crops were being harvested by the farmers.
 - 2. The crops have been harvested by the farmers.
 - 3. The crops are harvested by the farmers.
 - 4. The crops were harvested by the farmers.

Question ID : 65497841740
Status : Answered
Chosen Option : 4

Q.12 Select the most appropriate meaning of the given idiom.

Take pains

- Ans
- 1. Make a noise
 - 2. Remain true
 - 3. Try hard
 - 4. Follow others

Question ID : 65497841544
Status : Answered
Chosen Option : 3

Q.13 Select the most appropriate indirect form of the given sentence.

Avika said, "I am preparing for my Science test."

- Ans 1. Avika said that she was preparing for her Science test.
 2. Avika said that she is preparing for her Science test.
 3. Avika said that I was preparing for my Science test.
 4. Avika said that I am preparing for my Science test.

Question ID : 65497841639
Status : Answered
Chosen Option : 1

Q.14 Select the most appropriate word for the given group of words.

pictures given in a book to explain things

- Ans 1. demonstration
 2. ornamentation
 3. decoration
 4. illustration

Question ID : 65497841649
Status : Answered
Chosen Option : 1

Q.15 Select the INCORRECTLY spelt word.

- Ans 1. Fortunate
 2. Forword
 3. Fortify
 4. Fossil

Question ID : 65497841549
Status : Answered
Chosen Option : 2

Comprehension:

Read the following passage and answer the questions given after it.

India was one of the first places where human civilization started. Around 5000 years BC this civilization was located around the Indus River. Hence, it is known as Indus Valley civilization. It is also known as Harappan Civilization because records show one of the city's names was Harappa. It was 1 of 1500 cities in the Indus River Valley, another well-known city being Mohenjo-Daro. It wasn't until 1920 that the civilization was discovered at all. There were four known major cities, Harappa, Mohenjo-Daro, Mehrgarh, and Lothal. Mohenjo-daro was not only the largest city of the Indus Valley Civilization but also one of the world's earliest major urban centers. Much of the cities were made from clay bricks baked in a furnace known as a kiln. The cities were advanced for their time, having their own wells and water drainage systems as well as having grid-style roads in the cities. They were also noted for clusters of large, nonresidential buildings. But most people did not live in the urban areas and instead lived in the local farming villages. Though little is known about the Indus Valley people, we do know a little about their farming habits. They had domesticated peas, wheat, melons, dates, sesame seeds, as well as cotton. They had advanced knowledge of the process of drying wheat, and a large granary was discovered, a building whose sole purpose is to hold and dry large amounts of wheat. They also created some large structures, one of the largest being a public pool known as the Great Bath that was 40 feet long, 10 feet deep, and 20 feet wide.

SubQuestion No : 16

Q.16 Which of the following statements shows that the cities of Indus Valley were well planned?

- Ans**
- 1. The structures were made of baked bricks.
 - 2. The cities had grid-style roads and water drainage system.
 - 3. There were clusters of large nonresidential buildings.
 - 4. There were wells for water in the cities.

Question ID : 65497841662

Status : Answered

Chosen Option : 2

Comprehension:

Read the following passage and answer the questions given after it.

India was one of the first places where human civilization started. Around 5000 years BC this civilization was located around the Indus River. Hence, it is known as Indus Valley civilization. It is also known as Harappan Civilization because records show one of the city's names was Harappa. It was 1 of 1500 cities in the Indus River Valley, another well-known city being Mohenjo-Daro. It wasn't until 1920 that the civilization was discovered at all. There were four known major cities, Harappa, Mohenjo-Daro, Mehrgarh, and Lothal. Mohenjo-daro was not only the largest city of the Indus Valley Civilization but also one of the world's earliest major urban centers. Much of the cities were made from clay bricks baked in a furnace known as a kiln. The cities were advanced for their time, having their own wells and water drainage systems as well as having grid-style roads in the cities. They were also noted for clusters of large, nonresidential buildings. But most people did not live in the urban areas and instead lived in the local farming villages. Though little is known about the Indus Valley people, we do know a little about their farming habits. They had domesticated peas, wheat, melons, dates, sesame seeds, as well as cotton. They had advanced knowledge of the process of drying wheat, and a large granary was discovered, a building whose sole purpose is to hold and dry large amounts of wheat. They also created some large structures, one of the largest being a public pool known as the Great Bath that was 40 feet long, 10 feet deep, and 20 feet wide.

SubQuestion No : 17

Q.17 Which was the largest city of the Indus Valley civilization?

- Ans**
- 1. Lothal
 - 2. Harappa
 - 3. Mehrgarh
 - 4. Mohenjo-Daro

Question ID : 65497841661

Status : Answered

Chosen Option : 4

Comprehension:

Read the following passage and answer the questions given after it.

India was one of the first places where human civilization started. Around 5000 years BC this civilization was located around the Indus River. Hence, it is known as Indus Valley civilization. It is also known as Harappan Civilization because records show one of the city's names was Harappa. It was 1 of 1500 cities in the Indus River Valley, another well-known city being Mohenjo-Daro. It wasn't until 1920 that the civilization was discovered at all. There were four known major cities, Harappa, Mohenjo-Daro, Mehrgarh, and Lothal. Mohenjo-daro was not only the largest city of the Indus Valley Civilization but also one of the world's earliest major urban centers. Much of the cities were made from clay bricks baked in a furnace known as a kiln. The cities were advanced for their time, having their own wells and water drainage systems as well as having grid-style roads in the cities. They were also noted for clusters of large, nonresidential buildings. But most people did not live in the urban areas and instead lived in the local farming villages. Though little is known about the Indus Valley people, we do know a little about their farming habits. They had domesticated peas, wheat, melons, dates, sesame seeds, as well as cotton. They had advanced knowledge of the process of drying wheat, and a large granary was discovered, a building whose sole purpose is to hold and dry large amounts of wheat. They also created some large structures, one of the largest being a public pool known as the Great Bath that was 40 feet long, 10 feet deep, and 20 feet wide.

SubQuestion No : 18

Q.18 The passage belongs to the subject area of

- Ans 1. geography
 2. history
 3. civics
 4. architecture

Question ID : 65497841660

Status : Answered

Chosen Option : 2

Comprehension:

Read the following passage and answer the questions given after it.

India was one of the first places where human civilization started. Around 5000 years BC this civilization was located around the Indus River. Hence, it is known as Indus Valley civilization. It is also known as Harappan Civilization because records show one of the city's names was Harappa. It was 1 of 1500 cities in the Indus River Valley, another well-known city being Mohenjo-Daro. It wasn't until 1920 that the civilization was discovered at all. There were four known major cities, Harappa, Mohenjo-Daro, Mehrgarh, and Lothal. Mohenjo-daro was not only the largest city of the Indus Valley Civilization but also one of the world's earliest major urban centers. Much of the cities were made from clay bricks baked in a furnace known as a kiln. The cities were advanced for their time, having their own wells and water drainage systems as well as having grid-style roads in the cities. They were also noted for clusters of large, nonresidential buildings. But most people did not live in the urban areas and instead lived in the local farming villages. Though little is known about the Indus Valley people, we do know a little about their farming habits. They had domesticated peas, wheat, melons, dates, sesame seeds, as well as cotton. They had advanced knowledge of the process of drying wheat, and a large granary was discovered, a building whose sole purpose is to hold and dry large amounts of wheat. They also created some large structures, one of the largest being a public pool known as the Great Bath that was 40 feet long, 10 feet deep, and 20 feet wide.

SubQuestion No : 19

Q.19 Which discovery indicated that people of Indus valley stored large amount of grain?

- Ans 1. the Great Bath
 2. brick houses
 3. the granary
 4. clusters of non residential buildings

Question ID : 65497841663

Status : Answered

Chosen Option : 3

Comprehension:

Read the following passage and answer the questions given after it.

India was one of the first places where human civilization started. Around 5000 years BC this civilization was located around the Indus River. Hence, it is known as Indus Valley civilization. It is also known as Harappan Civilization because records show one of the city's names was Harappa. It was 1 of 1500 cities in the Indus River Valley, another well-known city being Mohenjo-Daro. It wasn't until 1920 that the civilization was discovered at all. There were four known major cities, Harappa, Mohenjo-Daro, Mehrgarh, and Lothal. Mohenjo-daro was not only the largest city of the Indus Valley Civilization but also one of the world's earliest major urban centers. Much of the cities were made from clay bricks baked in a furnace known as a kiln. The cities were advanced for their time, having their own wells and water drainage systems as well as having grid-style roads in the cities. They were also noted for clusters of large, nonresidential buildings. But most people did not live in the urban areas and instead lived in the local farming villages. Though little is known about the Indus Valley people, we do know a little about their farming habits. They had domesticated peas, wheat, melons, dates, sesame seeds, as well as cotton. They had advanced knowledge of the process of drying wheat, and a large granary was discovered, a building whose sole purpose is to hold and dry large amounts of wheat. They also created some large structures, one of the largest being a public pool known as the Great Bath that was 40 feet long, 10 feet deep, and 20 feet wide.

SubQuestion No : 20

Q.20 Which of the following crops were NOT grown by people of Indus Valley?

- Ans
- 1. cotton
 - 2. peas
 - 3. wheat
 - 4. sugarcane

Question ID : 65497841664

Status : Answered

Chosen Option : 4

Comprehension:

In the following passage, some words have been deleted. Read the passage carefully and select the most appropriate option to fill in each blank.

After the Hunga Tonga–Hunga Ha'apai volcano erupted on 15 January, a devastating tsunami (1) _____ Tonga, a Pacific island. Communications were (2) _____ because there was only one undersea cable (3) _____ connected Tonga to the outside world. Meanwhile, several countries (4) _____ ships and flights to the country. Hundreds of volunteers spent days (5) _____ away ash by hand at the airport's runway so that the emergency planes could land.

SubQuestion No : 21

Q.21 Select the most appropriate option to fill in blank no.1.

- Ans
- 1. hit
 - 2. was hitting
 - 3. hitting
 - 4. is hitting

Question ID : 65497841552

Status : Answered

Chosen Option : 1

Comprehension:

In the following passage, some words have been deleted. Read the passage carefully and select the most appropriate option to fill in each blank.

After the Hunga Tonga–Hunga Ha’apai volcano erupted on 15 January, a devastating tsunami (1) _____ Tonga, a Pacific island. Communications were (2) _____ because there was only one undersea cable (3) _____ connected Tonga to the outside world. Meanwhile, several countries (4) _____ ships and flights to the country. Hundreds of volunteers spent days (5) _____ away ash by hand at the airport’s runway so that the emergency planes could land.

SubQuestion No : 22

Q.22 Select the most appropriate option to fill in blank no. 2.

- Ans 1. injured
 2. damaged
 3. polluted
 4. hurt

Question ID : 65497841553
Status : Answered
Chosen Option : 2

Comprehension:

In the following passage, some words have been deleted. Read the passage carefully and select the most appropriate option to fill in each blank.

After the Hunga Tonga–Hunga Ha’apai volcano erupted on 15 January, a devastating tsunami (1) _____ Tonga, a Pacific island. Communications were (2) _____ because there was only one undersea cable (3) _____ connected Tonga to the outside world. Meanwhile, several countries (4) _____ ships and flights to the country. Hundreds of volunteers spent days (5) _____ away ash by hand at the airport’s runway so that the emergency planes could land.

SubQuestion No : 23

Q.23 Select the most appropriate option to fill in blank no. 3.

- Ans 1. who
 2. that
 3. this
 4. what

Question ID : 65497841554
Status : Answered
Chosen Option : 2

Comprehension:

In the following passage, some words have been deleted. Read the passage carefully and select the most appropriate option to fill in each blank.

After the Hunga Tonga–Hunga Ha’apai volcano erupted on 15 January, a devastating tsunami (1) _____ Tonga, a Pacific island. Communications were (2) _____ because there was only one undersea cable (3) _____ connected Tonga to the outside world. Meanwhile, several countries (4) _____ ships and flights to the country. Hundreds of volunteers spent days (5) _____ away ash by hand at the airport’s runway so that the emergency planes could land.

SubQuestion No : 24

Q.24 Select the most appropriate option to fill in blank no. 4.

- Ans 1. sent
 2. drove
 3. dropped
 4. flew

Question ID : 65497841555
Status : Answered
Chosen Option : 1

Comprehension:

In the following passage, some words have been deleted. Read the passage carefully and select the most appropriate option to fill in each blank.

After the Hunga Tonga–Hunga Ha’apai volcano erupted on 15 January, a devastating tsunami (1) _____ Tonga, a Pacific island. Communications were (2) _____ because there was only one undersea cable (3) _____ connected Tonga to the outside world. Meanwhile, several countries (4) _____ ships and flights to the country. Hundreds of volunteers spent days (5) _____ away ash by hand at the airport’s runway so that the emergency planes could land.

SubQuestion No : 25

Q.25 Select the most appropriate option to fill in blank no. 5

- Ans
- 1. cleared
 - 2. clear
 - 3. clears
 - 4. clearing

Question ID : 65497841556
Status : Answered
Chosen Option : 1

Section : Quantitative Aptitude

Q.1 The compound interest on a sum of ₹18,400 at 10% p.a. for a certain period of time, is ₹3,864, interest compounded yearly. What is the simple interest (in ₹) on double the sum, at the same rate for double the time?

- Ans
- 1. 7,360
 - 2. 11,820
 - 3. 14,720
 - 4. 10,785

Question ID : 65497841784
Status : Answered
Chosen Option : 2

Q.2 The amount of a certain sum in $2\frac{3}{4}$ years at 8.4 % p.a. simple interest is ₹2,325 more than the simple interest on the same sum for $7\frac{1}{2}$ years at 16 % p.a. What is the sum (in ₹)?

- Ans
- 1. 78,000
 - 2. 75,000
 - 3. 70,000
 - 4. 80,000

Question ID : 65497841578
Status : Answered
Chosen Option : 2

Q.3 Some toffees are bought at the rate of 11 for ₹10, and another batch of the same number of toffees, at the rate of 5 for ₹6. If the whole lot is sold at ₹2/toffee, then the gain/loss percentage, correct to one decimal place, on the whole transaction is:

- Ans
- 1. 85.5% gain
 - 2. 85.5% loss
 - 3. 89.7% gain
 - 4. 95.2% loss

Question ID : 65497841779
Status : Answered
Chosen Option : 2

Q.4 A man has to cover a distance of 108 km in 9 hours. If he covers $\frac{2}{3}$ of the distance in $\frac{5}{9}$ time, what should be his speed (in km/h) to cover the remaining distance in the time left?

- Ans
- 1. 9
 - 2. 10
 - 3. 8
 - 4. 12

Question ID : 65497841583
Status : Answered
Chosen Option : 1

Q.5 If the 9-digit number 9843x678y is divisible by 72, then what is the value of $(x^2 + y^2 + xy)$?

- Ans
- 1. 29
 - 2. 43
 - 3. 41
 - 4. 61

Question ID : 65497841563
Status : Answered
Chosen Option : 4

Q.6 If $x - y = 4$ and $x^3 - y^3 = 316$, $y > 0$, then the value of $x^2 - y^2$ is:

- Ans
- 1. 24
 - 2. 32
 - 3. 48
 - 4. 40

Question ID : 65497841689
Status : Answered
Chosen Option : 4

Q.7 Akhilesh borrowed ₹50,000 at a certain rate on simple interest and lent the same sum to Rakesh on compound interest, compounded annually at the same rate of interest. At the end of 2 years, Rakesh cleared his loan and then Akhilesh also cleared his loan. In the process, Akhilesh earned ₹180. What was the rate of interest charged per annum?

- Ans
- 1. 8%
 - 2. 6%
 - 3. 7.5%
 - 4. 5%

Question ID : 65497841580
Status : Answered
Chosen Option : 2

Q.8 When $(2^{18} - 1)$ is divided by 9, the remainder is:

- Ans
- 1. 2
 - 2. 0
 - 3. 8
 - 4. 1

Question ID : 65497841768
Status : Answered
Chosen Option : 2

Q.9 When x is added to each of 7, 11, 16, 21, then the numbers so obtained in this order are in proportion. What is the value of x ?

- Ans**
- 1. 29
 - 2. 21
 - 3. 24
 - 4. 31

Question ID : 65497841679
Status : Answered
Chosen Option : 2

Q.10 A person reaches his destination 32 minutes late if his speed is 6 km/h, and reaches 18 minutes before time if his speed is 7 km/h. Find twice the distance (in km) of his destination from his starting point.

- Ans**
- 1. 55
 - 2. 70
 - 3. 60
 - 4. 65

Question ID : 65497841788
Status : Answered
Chosen Option : 2

Q.11 A library has an average of 219 visitors on Saturdays and an average of 281 on other weekdays. The average number of visitors per day in a month of 31 days, beginning with a Friday, is:

- Ans**
- 1. 277
 - 2. 273
 - 3. 271
 - 4. 269

Question ID : 65497841565
Status : Answered
Chosen Option : 2

Q.12 'A' can complete a work in 20 days and 'B' can do $\frac{2}{5}$ of the same work in 16 days. They work together for 10 days. The remaining work was completed by 'C' alone in 12 days. 'C' alone will complete the same work in:

- Ans**
- 1. 48 days
 - 2. 36 days
 - 3. 24 days
 - 4. 40 days

Question ID : 65497841683
Status : Answered
Chosen Option : 1

Q.13 After giving three successive discounts of 15%, 5% and $p\%$, respectively, on the marked price of an article of ₹4,800, it is sold for ₹3,100.80. What is the value of p ?

- Ans**
- 1. 25
 - 2. 18
 - 3. 20
 - 4. 15

Question ID : 65497841671
Status : Answered
Chosen Option : 2

Q.14 When an article is sold for ₹991.20, there is a profit of 12%. To gain 15%, it should be sold (in ₹) for:

- Ans**
- 1. 1107.75
 - 2. 1170.75
 - 3. 1017.75
 - 4. 1701.75

Question ID : 65497841777
Status : Answered
Chosen Option : 2

Q.15 At what price (in ₹) should a shopkeeper mark an article which costs him ₹2,400 so as to gain 16% after allowing a discount of 20%?

- Ans**
- 1. 3,525
 - 2. 3,480
 - 3. 3,275
 - 4. 3,390

Question ID : 65497841670
Status : Answered
Chosen Option : 2

Q.16 The income of Sunita is ₹48,000. She saves 15% of her income. If her expenditure increases by 20% and her income increases by 15%, then what is the increase/decrease in her savings?

- Ans**
- 1. Decrease by ₹960
 - 2. Increase by ₹860
 - 3. Increase by ₹1,000
 - 4. Decrease by ₹1,060

Question ID : 65497841572
Status : Answered
Chosen Option : 2

Q.17 If $a + b + c = 8$ and $ab + bc + ca = 11$, then what is the value of $\left(\frac{a^2 + b^2 + c^2 - 3abc}{4}\right)$?

- Ans
- 1. 56
 - 2. 60
 - 3. 62
 - 4. 65

Question ID : 65497841790
Status : Answered
Chosen Option : 3

Q.18 A, B and C are three numbers. A is 45% more than C, and B is 20% less than the sum of A and C. Approximately by what percentage is A less than B?

- Ans
- 1. 25%
 - 2. 26%
 - 3. 35.2%
 - 4. 25.4%

Question ID : 65497841570
Status : Answered
Chosen Option : 2

Q.19 A and B obtained 488 marks and 376 marks, respectively, in the same test. If A obtained 61% marks, then the percentage of marks obtained by B is:

- Ans
- 1. 48%
 - 2. 49%
 - 3. 51%
 - 4. 47%

Question ID : 65497841776
Status : Not Answered
Chosen Option : --

Q.20 If the cost of x chairs is equal to the selling price of 16 chairs and the profit percentage is 12.5%, then what is the value of x ?

- Ans
- 1. 20
 - 2. 24
 - 3. 22
 - 4. 18

Question ID : 65497841573
Status : Not Answered
Chosen Option : --

Q.21 A park is in a shape of a rectangle with length 180 m and breadth 120 m. At the centre of the park, there is a circular lawn of circumference 502.4 m. The area of the park, excluding the area of lawn, in m^2 , is:

(Take $\pi = 3.14$)

- Ans**
- 1. 1540
 - 2. 1405
 - 3. 1504
 - 4. 1450

Question ID : 65497841687
Status : Not Answered
Chosen Option : --

Q.22 The average weight of a certain number of children in a group was 37 kg. If 12 children of average weight 38.5 kg joined the group, then the average weight of all the children increased by 0.45 kg. The number of children, initially, in the group was:

- Ans**
- 1. 23
 - 2. 28
 - 3. 18
 - 4. 13

Question ID : 65497841771
Status : Not Answered
Chosen Option : --

Q.23 18 men can complete a certain work in 15 days working 8 hours a day. How many men can complete the same work in 12 days working 9 hours a day?

- Ans**
- 1. 15
 - 2. 18
 - 3. 20
 - 4. 25

Question ID : 65497841684
Status : Answered
Chosen Option : 3

Q.24 The ratio of the incomes of A and B are 3 : 7. If the income of A is increased by ₹4,500 and the income of B is decreased by ₹6,750, then the ratio of their incomes become 6 : 11. What is the sum of their present incomes (in ₹)?

- Ans**
- 1. 2,04,000
 - 2. 1,70,000
 - 3. 1,53,000
 - 4. 1,87,000

Question ID : 65497841678
Status : Not Answered
Chosen Option : --

Q.25 The average of x occurring 5 times and y occurring 7 times is 37. Also, the average of x occurring 7 times and y occurring 5 times is 35. The value of $\frac{x}{6}$ is:

- Ans
- 1. 8
 - 2. 5
 - 3. 4
 - 4. 6

Question ID : 65497841769
Status : Not Answered
Chosen Option : --

Section : General awareness

Q.1 Who among the following players won the Australian Open tennis tournament in January 2022?

- Ans
- 1. Daniil Medvedev
 - 2. Rafael Nadal
 - 3. Casper Ruud
 - 4. Alexander Zverev

Question ID : 65497841816
Status : Answered
Chosen Option : 2

Q.2 The Harshacharita, a biography of Harshavardhana, the ruler of Kannauj is composed in which language by his court poet, Banabhatta?

- Ans
- 1. Aramaic
 - 2. Sanskrit
 - 3. Pali
 - 4. Kharosthi

Question ID : 65497841704
Status : Answered
Chosen Option : 2

Q.3 दिल्ली सल्तनत के उस विभाग का क्या नाम था, जिसकी स्थापना साम्राज्य के सैन्य संगठन की देखभाल के लिए की गई थी?

- Ans
- 1. दीवान-ए-इंशा
 - 2. दीवान-ए-रसालत
 - 3. दीवान-ए-अदालत
 - 4. दीवान-ए-अर्ज

Question ID : 65497841807
Status : Answered
Chosen Option : 1

Q.4 The decades _____ are referred to as the period of population explosion in India.

- Ans
- 1. from 1981 to 2001
 - 2. from 1921 to 1951
 - 3. from 1901 to 1921
 - 4. from 1951 to 1981

Question ID : 65497841804
Status : Answered
Chosen Option : 4

Q.5 The construction of the Victoria Memorial Hall at Kolkata as a memorial to the deceased Queen Victoria was envisaged by which of the following Viceroy of British India?

- Ans
- 1. Lord Canning
 - 2. Lord Minto II
 - 3. Lord Curzon
 - 4. Lord Elgin II

Question ID : 65497841692
Status : Answered
Chosen Option : 3

Q.6 The book 'MSD: The Man, The Leader' on cricketer Mahendra Singh Dhoni is written by:

- Ans
- 1. Bharat Sundaresan
 - 2. Biswadeep Ghosh
 - 3. Indanil Rai
 - 4. C Rajshekhar Rao

Question ID : 65497841606
Status : Not Answered
Chosen Option : --

Q.7 Who was the Governor General of Bengal when the Permanent Settlement was introduced there in 1793?

- Ans
- 1. Robert Clive
 - 2. John Cartiers
 - 3. Warren Hastings
 - 4. Charles Cornwallis

Question ID : 65497841706
Status : Answered
Chosen Option : 4

Q.8 Which of the following awards did Sundar Pichai, Chief Executive Officer of Alphabet and Google, receive in January 2022?

- Ans
- 1. Padma Vibhushan
 - 2. Padma Shri
 - 3. Bharat Ratna
 - 4. Padma Bhushan

Question ID : 65497841811
Status : Answered
Chosen Option : 1

Q.9 With which of the following classical dance forms was Vempati Chinna Satyam associated?

- Ans
- 1. Manipuri
 - 2. Kathak
 - 3. Kuchipudi
 - 4. Bharatanatyam

Question ID : 65497841792
Status : Answered
Chosen Option : 4

Q.10 States of the Union of India were reorganised in a major way in 1956 after the enactment of which of the following Constitution Amendment Acts?

- Ans
- 1. Fifth
 - 2. Sixth
 - 3. Eighth
 - 4. Seventh

Question ID : 65497841712
Status : Answered
Chosen Option : 2

Q.11 Which of the following terms refers to the amount of dissolved salts that are present in water?

- Ans
- 1. Salinity
 - 2. Caloricity
 - 3. Crypticity
 - 4. Viscosity

Question ID : 65497841800
Status : Answered
Chosen Option : 1

Q.12 The Swachh Vidyalaya Puraskar has been instituted by the Ministry of Education, Government of India to recognise, inspire and celebrate excellence in sanitation and hygiene practice in schools. This award is categorised at three levels; which of the following is NOT one of these?

- Ans
- 1. Block
 - 2. State
 - 3. District
 - 4. National

Question ID : 65497841592
Status : Not Answered
Chosen Option : --

Q.13 The Technology of production of ultra-high magnetic fields is based on which of the following scientific principles?

- Ans
- 1. Digital logic
 - 2. Light amplification by stimulated emission of radiation
 - 3. Photoelectric effect
 - 4. Superconductivity

Question ID : 65497841594
Status : Answered
Chosen Option : 2

Q.14 Who led a Salt March from Trichinopoly to Vedaranyam on Tanjore coast in Tamil Nadu in support of the Civil Disobedience Movement?

- Ans
- 1. Koyapalli Kelappan
 - 2. P Krishna Pillai
 - 3. Mohandas Karamchand Gandhi
 - 4. Chakravarti Rajagopalachari

Question ID : 65497841605
Status : Not Answered
Chosen Option : --

Q.15 Which of the following festival falls on the first day of the Malayali month of Medam, which occurs on either April 14 or 15 on the Gregorian calendar?

- Ans
- 1. Gochi
 - 2. Nukahai
 - 3. Vishu
 - 4. Gudi Padva

Question ID : 65497841691
Status : Not Answered
Chosen Option : --

Q.16 The News Broadcasters Association (NBA), a private association of different current affairs and news television broadcasters in India, has decided to change its name to:

- Ans
- 1. News Broadcasters Corporation Limited (NBCL)
 - 2. Digital News Broadcasters Association (DNBA)
 - 3. News Broadcasters & Digital Association (NBDA)
 - 4. News Broadcasters Corporation (NBC)

Question ID : 65497841593
Status : Not Answered
Chosen Option : --

Q.17 How many Indian states share land border with Pakistan?

- Ans
- 1. Seven
 - 2. Six
 - 3. Five
 - 4. Four

Question ID : 65497841601
Status : Answered
Chosen Option : 4

Q.18 Saline and alkaline soils are locally known as Thur, Reh, Kallar and _____ soils.

- Ans
- 1. Regur
 - 2. Bhanger
 - 3. Khadar
 - 4. Usar

Question ID : 65497841701
Status : Answered
Chosen Option : 4

Q.19 Typhoid fever could be confirmed by which of the following tests?

- Ans
- 1. Smear Examination
 - 2. Vivax Test
 - 3. Widal Test
 - 4. C Reactive Protein (CRP) Test

Question ID : 65497841699
Status : Answered
Chosen Option : 3

Q.20 Which of the following is an example of the phylum Mollusca?

- Ans 1. Octopus
 2. Scorpion
 3. Locust
 4. Prawn

Question ID : 65497841697
Status : Answered
Chosen Option : 1

Q.21 Which of the following is an initiative of the Ministry of Education (MoE) under Rashtriya Madhyamik Shiksha Abhiyan, to promote arts in education by nurturing and showcasing the artistic talent of school students at the secondary stage in the country?

- Ans 1. Art Mela
 2. Kala and Skill Initiative
 3. Art Promotion and Development
 4. Kala Utsav

Question ID : 65497841796
Status : Answered
Chosen Option : 4

Q.22 In which year did the Constitution (First Amendment) Act come into force in India?

- Ans 1. 1950
 2. 1954
 3. 1951
 4. 1952

Question ID : 65497841611
Status : Answered
Chosen Option : 3

Q.23 The Indira Gandhi Prize for Peace, Disarmament and Development for 2021 was awarded to which civil society organisation for its pioneering work in improving the quality of education for underprivileged children in India and across the world?

- Ans 1. Pratham
 2. Udaan India Foundation
 3. eVidyaloka
 4. KC Mahindra Education Trust

Question ID : 65497841710
Status : Answered
Chosen Option : 1

Q.24 Krishna river meets the sea in the Bay of Bengal in which of the following states?

- Ans 1. Odisha
 2. Tamil Nadu
 3. West Bengal
 4. Andhra Pradesh

Question ID : 65497841700
Status : Answered
Chosen Option : 4

Test

Prime

By Adda247

Previous Year Papers PDF

PRACTICE MORE, SCORE HIGHER!



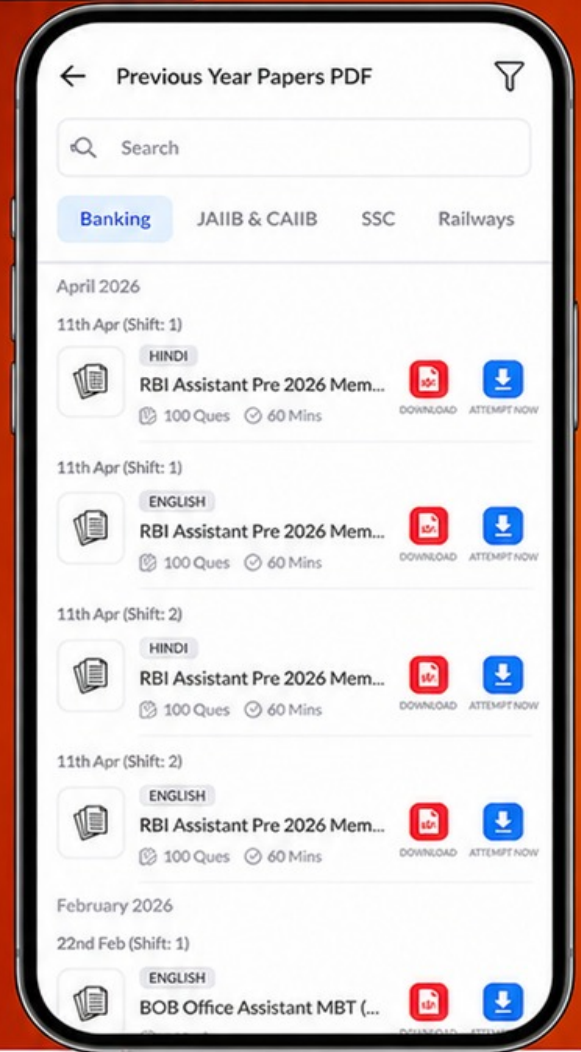
Free
25,000+
PDF's

High-Quality | Exam-Wise | Updated Regularly

ATTEMPT AS
MOCK



Turn PDFs into real exam experience.
Analyze. Improve. Succeed.



Topic-wise & Exam-wise PDFs



Download & Study Offline



Attempt as Mock & Track Score



Smart Analysis & Performance

AVAILABLE IN



Banking



SSC



Railway



Teaching



UGC



Agriculture



Nursing



Bihar



UP



Punjab



WB



Odisha



TN



AP & Telangana



Haryana



DOWNLOAD THE APP



Q.25 Part I of the Constitution of India is related to which of the following?

- Ans
- 1. Preamble
 - 2. Fundamental Rights
 - 3. Citizenship
 - 4. The Union and its Territory

Question ID : 65497841711
Status : Answered
Chosen Option : 4

