

Selection Post Phase IX 2021 Matriculation level

Roll Number	
Candidate Name	
Venue Name	
Exam Date	10/02/2022
Exam Time	9:00 AM - 10:00 AM
Subject	Selection Post Matriculation Level

Section : **General Intelligence**

Q.1 Select the combination of letters that when sequentially placed in the blanks of the given series will complete the series.

A B _ _ K _ _ D E K _ B _ _ K

- Ans
- 1. DEBBAK
 - 2. EDABAED
 - 3. EDBABED
 - 4. DEABADE

Question ID : 65497838291

Status : Not Answered

Chosen Option : --

Q.2 Read the given statements and conclusions carefully. Assuming that the information given in the statements is true, even if it appears to be at variance with commonly known facts, decide which of the given conclusions logically follow from the statements.

Statements:

No bird is a parrot.
Some pigeons are birds.
All crows are parrots.

Conclusions:

I. No bird is a pigeon.
II. All parrots are definitely not birds.

- Ans
- 1. Neither conclusion I nor II follows.
 - 2. Only conclusion I follows.
 - 3. Only conclusion II follows.
 - 4. Both conclusions I and II follow.

Question ID : 65497838309

Status : Answered

Chosen Option : 3

Q.3 In a certain code language, 'SHARP' is written as 'LOATN'. How will 'VAPID' be written in that language?

- Ans
- 1. ERTHE
 - 2. WZPZM
 - 3. ERPHE
 - 4. WZLZM

Question ID : 65497838401

Status : Answered

Chosen Option : 3

**Test
Prime**

By Adda247

ALL EXAMS, ONE SUBSCRIPTION



Test. Analyze. Improve. Repeat.



Don't just *prepare*. *Perform*.

Test Prime — built only for mock tests.



1,50,000+
Mock Tests



25,000+
Previous Year Papers



800+
Exam Covered



500% Refund
on Selection



5 lakh+
Free Quizzes



Daily
Free PDFs



Job Alerts
Stay Updated

- Multilingual
- Detailed Solution
- Strong and Weak Areas



**All India
Rankings**

Compete with lakhs.
Rank. Improve. Repeat.



← Adda247 test prime

Rating ▾

Editors' choice

New



Adda247 Test Prime
Adda Education • Education
Installed



DOWNLOAD THE APP



Q.4 In a certain code language, 'HEADLIGHT' is written as 'JGCFNKIJV'. How will 'INADVISABLE' be written in that language?

- Ans
- 1. KQDEXKUDEOG
 - 2. KPDFXLUCDNG
 - 3. KPCFXKUCDNG
 - 4. KQCFXLUDENG

Question ID : 65497838400
Status : Answered
Chosen Option : 3

Q.5 Select the letter-cluster from among the given options that can replace the question mark (?) in the following series.

OMU, NOT, MQS, LSR, ?

- Ans
- 1. JVP
 - 2. KUQ
 - 3. JUQ
 - 4. KVO

Question ID : 65497838900
Status : Answered
Chosen Option : 2

Q.6 In a certain code language, 'DOME' is coded as '74' and 'PLACE' is coded as '74'. How will 'FLOOD' be coded in that language?

- Ans
- 1. 100
 - 2. 91
 - 3. 104
 - 4. 70

Question ID : 65497839216
Status : Answered
Chosen Option : 3

Q.7 In a certain code language, 'TABLE' is coded as '10177625'. How will 'GLOBAL' be coded in that language?

- Ans
- 1. 1767201712
 - 2. 1267101712
 - 3. 1776021721
 - 4. 2171027671

Question ID : 65497838806
Status : Answered
Chosen Option : 1

Q.8 Select the option that is related to the third number in the same way as the second number is related to the first number and the sixth number is related to the fifth number.

65 : 192 :: 78 : ? :: 93 : 220

- Ans
- 1. 234
 - 2. 198
 - 3. 205
 - 4. 223

Question ID : 65497838307

Status : Not Answered

Chosen Option : --

Q.9 Read the given statements and conclusions carefully. Assuming that the information given in the statements is true, even if it appears to be at variance with commonly known facts, decide which of the given conclusions logically follow(s) from the statements.

Statements:

All players are actors.
Some writers are actors.

Conclusions:

(I) All players are writers.
(II) Some writers are players.

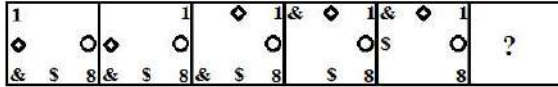
- Ans
- 1. Only conclusion I follows
 - 2. Only conclusion II follows
 - 3. Either conclusion I or II follows
 - 4. Neither conclusion I nor II follows

Question ID : 65497839119

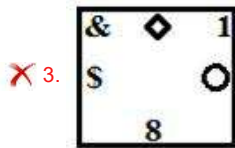
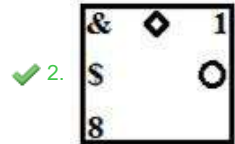
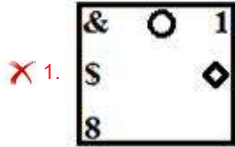
Status : Answered

Chosen Option : 3

Q.10 Select the figure from among the given options that can replace the question mark (?) in the following series.



Ans



Question ID : 65497838922
 Status : Answered
 Chosen Option : 2

Q.11 Select the correct option that indicates the arrangement of the given words in the order in which they appear in an English dictionary.

1. Nutriment
2. Numerable
3. Numerology
4. Nuisance
5. Numerical
6. Nucleolus

- Ans
- ✓ 1. 6, 4, 2, 5, 3, 1
 - ✗ 2. 6, 4, 2, 1, 3, 5
 - ✗ 3. 4, 6, 2, 1, 5, 3
 - ✗ 4. 4, 6, 1, 2, 3, 5

Question ID : 65497838799
 Status : Answered
 Chosen Option : 1

Q.12 Select the number from among the given options that can replace the question mark (?) in the following series.

5, 8, 12, 20, 37, 70, ?

- Ans
- ✗ 1. 183
 - ✗ 2. 138
 - ✗ 3. 182
 - ✓ 4. 128

Question ID : 65497838918
 Status : Answered
 Chosen Option : 4

Q.13 Vinod is the grandfather of Riya. Riya is the daughter of Nikhil. Gauri is the wife of Nikhil. Sohan is the brother of Nikhil. How is Sohan related to Riya?

- Ans
- 1. Father's father
 - 2. Brother
 - 3. Father's brother
 - 4. Son

Question ID : 65497838508

Status : Answered

Chosen Option : 3

Q.14 Sanju has a family of eight members. Binodh is the eldest male member of the family and is married to Narmada. Hayati is the daughter-in-law of Narmada and the sister-in-law of Suvid and Alekya. Apart from Sanju and Binodh, Suvid is the only male member of the family. Alekya is the aunt of Sanju's two daughters, Sarayu and Dakshi. How is Dakshi related to Suvid's brother?

- Ans
- 1. Sister
 - 2. Daughter-in-law
 - 3. Daughter
 - 4. Sister-in-law

Question ID : 65497838814

Status : Not Answered

Chosen Option : --

Q.15 Which two signs need to be interchanged to make the following equation correct?

$$25 - 48 + 6 \div 12 \times 2 = 41$$

- Ans
- 1. - and +
 - 2. \times and \div
 - 3. \div and +
 - 4. + and -

Question ID : 65497839124

Status : Answered

Chosen Option : 3

Q.16 Eight persons A, B, C, D, E, F, G and H are sitting around a circular table, facing towards the centre of the table. A sits to the immediate right of F. D is sitting second to the right of A. C is fourth to the left of D. B is sitting between H and E. E is fourth to the right of G. Who sits second to the left of A?

- Ans
- 1. D
 - 2. E
 - 3. C
 - 4. F

Question ID : 65497838811

Status : Answered

Chosen Option : 4

Q.21 In a certain code language, 'please have food' is coded as '644', 'are you coming' is coded as '336', and 'keep it ready' is coded as '425'. How will 'they were most welcome' be coded in that language?

Ans 1. 4447

2. 3122

3. 3347

4. 4456

Question ID : 65497839217

Status : Answered

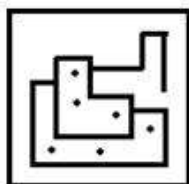
Chosen Option : 1

Q.22 Select the option in which the given figure is embedded (rotation is NOT allowed).

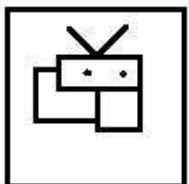


Ans

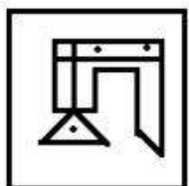
1.



2.



3.



4.



Question ID : 65497838821

Status : Answered

Chosen Option : 4

Q.23 Select the option that is related to the third term in the same way as the second term is related to the first term.

SECURITY : MKCIRUNE :: UNBIASED : ?

Ans 1. AHABISKX

2. OTABISYJ

3. OTBSAIKX

4. OTVOUYJ

Question ID : 65497839109

Status : Marked For Review

Chosen Option : 3

Q.24 Select the option that is related to the third term in the same way as the second term is related to the first term.

SALT : UDFS :: LOCK : ?

- Ans
- 1. NLWL
 - 2. JLWJ
 - 3. NWRJ
 - 4. NRWJ

Question ID : 65497838802

Status : Marked For Review

Chosen Option : 4

Q.25 Four letter-clusters have been given, out of which three are alike in some manner and one is different. Select the letter-cluster that is different.

- Ans
- 1. WXZ
 - 2. GHJ
 - 3. MNP
 - 4. TUV

Question ID : 65497838902

Status : Answered

Chosen Option : 4

Section : English Language

Q.1 Select the option that can be used as a one-word substitute for the given group of words.

The young one of a cow

- Ans
- 1. Foal
 - 2. Lamb
 - 3. Cub
 - 4. Calf

Question ID : 65497838935

Status : Answered

Chosen Option : 4

Q.2 Select the option that expresses the given sentence in passive voice.

His mother is staring at him.

- Ans
- 1. He is being stared at by his mother.
 - 2. He was stared at by his mother.
 - 3. He was being stared by his mother.
 - 4. He is stared at by his mother.

Question ID : 65497838823

Status : Marked For Review

Chosen Option : 1

Q.3 Select the most appropriate option to fill in the blank.

He always had a close _____ with his grandfather.

- Ans 1. affinity
 2. unity
 3. regard
 4. company

Question ID : 65497838826
Status : Answered
Chosen Option : 1

Q.4 Select the most appropriate meaning of the given idiom.

Pain in the neck

- Ans 1. To be unable to deal with someone stronger
 2. Someone or something that is very annoying
 3. To suffer pain because of overexertion of neck muscles
 4. To relieve someone from a painful condition

Question ID : 65497838321
Status : Marked For Review
Chosen Option : 2

Q.5 Select the most appropriate meaning of the given idiom.

Make a bee line

- Ans 1. put the bees in a line
 2. look for freebies
 3. stand in a queue
 4. go straight to

Question ID : 65497838832
Status : Answered
Chosen Option : 4

Q.6 Select the most appropriate synonym of the given word.

Chaos

- Ans 1. Disability
 2. Disagreement
 3. Disharmony
 4. Disappearance

Question ID : 65497838317
Status : Answered
Chosen Option : 3

Q.7 Select the option that expresses the given sentence in indirect speech.

The airport official said, "The daily footfall of passengers has increased significantly since last year."

- Ans
- 1. The airport official said that the daily footfall of passengers has increased significantly since last year.
 - 2. The airport official said that the daily footfall of passengers was increased significantly since last year.
 - 3. The airport official said that the daily footfall of passengers had increased significantly since the previous year.
 - 4. The airport official told that the daily footfall of passengers has increased significantly since the previous year.

Question ID : 65497838926

Status : Marked For Review

Chosen Option : 3

Q.8 Select the option that can be used as a one-word substitute for the given group of words.

A group of people, especially traders or pilgrims, travelling together across a desert

- Ans
- 1. Procession
 - 2. Convoy
 - 3. Parade
 - 4. Caravan

Question ID : 65497839140

Status : Marked For Review

Chosen Option : 4

Q.9 Select the INCORRECTLY spelt word.

- Ans
- 1. Millenium
 - 2. Million
 - 3. Milliner
 - 4. Millipede

Question ID : 65497839143

Status : Marked For Review

Chosen Option : 3

Q.10 Select the most appropriate option to fill in the blank.

It has been _____ a pleasure to meet you!

- Ans
- 1. so
 - 2. such
 - 3. much
 - 4. more

Question ID : 65497838315

Status : Answered

Chosen Option : 2

Q.11 Select the most appropriate synonym of the given word.

Reliable

- Ans
- 1. Dishonest
 - 2. False
 - 3. Stable
 - 4. Weak

Question ID : 65497838828
Status : Answered
Chosen Option : 3

Q.12 Select the INCORRECTLY spelt word.

- Ans
- 1. Welfare
 - 2. Partner
 - 3. Appeal
 - 4. Address

Question ID : 65497838427
Status : Answered
Chosen Option : 1

Q.13 Select the INCORRECTLY spelt word.

- Ans
- 1. Protect
 - 2. Propose
 - 3. Protien
 - 4. Protest

Question ID : 65497839142
Status : Answered
Chosen Option : 3

Q.14 Select the most appropriate ANTONYM of the given word.

Moist

- Ans
- 1. Damp
 - 2. Sweaty
 - 3. Dry
 - 4. Wet

Question ID : 65497838931
Status : Answered
Chosen Option : 3

Q.15 Select the most appropriate ANTONYM of the given word.

Manufacture

- Ans
- 1. Fabricate
 - 2. Produce
 - 3. Destroy
 - 4. Build

Question ID : 65497839136
Status : Answered
Chosen Option : 3

Comprehension:

Read the given passage and answer the questions that follow.

Have you ever failed at something so miserably that the thought of attempting to do it again was the last thing you wanted to do?

If your answer is yes, then you are not a robot. Unlike robots, we human beings have feelings, emotions and dreams. We are all meant to grow and stretch despite our circumstances and our limitations. Flourishing and trying to make our dreams come true is great when life is going our way. But what happens when it's not? What happens when you fail despite all your hard work? Do you stay down and accept the defeat or do you get up again and again until you are satisfied? If you have a tendency to keep going, then you have what experts call grit. Falling down or failing is one of the most agonising, embarrassing and scariest human experiences. But, it is also one of the most educational, empowering and essential parts of living a successful and fulfilling life. Did you know that perseverance is one of the seven qualities that have been described as the keys to personal success and betterment in society? The other six are: curiosity, gratitude, optimism, self-control, social intelligence and zest. Thomas Edison is a model for grit for trying 1,000 plus times to invent the light bulb. If you are reading this with the lights on in your room, you know well he succeeded. When asked why he kept going despite his hundreds of failures, he merely stated that they were not failures. They were hundreds of ways not to create a light bulb. This statement not only revealed his grit but also his optimism for looking at the bright side.

Grit can be learnt to help you become more successful. One of the techniques that help is mindfulness. Mindfulness is a practice that helps the individual stay in the moment by bringing awareness of his or her experience without judgment. This practice has been used to quiet the noise of their fears and doubts. Through the simple practice of mindfulness, individuals have the ability to stop the self-sabotaging downward spiral of hopelessness, despair and frustration.

SubQuestion No : 16

Q.16 Select the word from the passage that means the same as 'grit'.

- Ans** ✓ 1. Perseverance
✗ 2. Gratitude
✗ 3. Curiosity
✗ 4. Optimism

Question ID : 65497839155
Status : Answered
Chosen Option : 1

Comprehension:

Read the given passage and answer the questions that follow.

Have you ever failed at something so miserably that the thought of attempting to do it again was the last thing you wanted to do?

If your answer is yes, then you are not a robot. Unlike robots, we human beings have feelings, emotions and dreams. We are all meant to grow and stretch despite our circumstances and our limitations. Flourishing and trying to make our dreams come true is great when life is going our way. But what happens when it's not? What happens when you fail despite all your hard work? Do you stay down and accept the defeat or do you get up again and again until you are satisfied? If you have a tendency to keep going, then you have what experts call grit. Falling down or failing is one of the most agonising, embarrassing and scariest human experiences. But, it is also one of the most educational, empowering and essential parts of living a successful and fulfilling life. Did you know that perseverance is one of the seven qualities that have been described as the keys to personal success and betterment in society? The other six are: curiosity, gratitude, optimism, self-control, social intelligence and zest. Thomas Edison is a model for grit for trying 1,000 plus times to invent the light bulb. If you are reading this with the lights on in your room, you know well he succeeded. When asked why he kept going despite his hundreds of failures, he merely stated that they were not failures. They were hundreds of ways not to create a light bulb. This statement not only revealed his grit but also his optimism for looking at the bright side.

Grit can be learnt to help you become more successful. One of the techniques that help is mindfulness. Mindfulness is a practice that helps the individual stay in the moment by bringing awareness of his or her experience without judgment. This practice has been used to quiet the noise of their fears and doubts. Through the simple practice of mindfulness, individuals have the ability to stop the self-sabotaging downward spiral of hopelessness, despair and frustration.

SubQuestion No : 17

Q.17 Which of the following qualities would you find in a robot?

- Ans
- 1. Dreams
 - 2. Feelings
 - 3. Emotions
 - 4. Precision

Question ID : 65497839151

Status : Answered

Chosen Option : 4

Comprehension:

Read the given passage and answer the questions that follow.

Have you ever failed at something so miserably that the thought of attempting to do it again was the last thing you wanted to do?

If your answer is yes, then you are not a robot. Unlike robots, we human beings have feelings, emotions and dreams. We are all meant to grow and stretch despite our circumstances and our limitations. Flourishing and trying to make our dreams come true is great when life is going our way. But what happens when it's not? What happens when you fail despite all your hard work? Do you stay down and accept the defeat or do you get up again and again until you are satisfied? If you have a tendency to keep going, then you have what experts call grit. Falling down or failing is one of the most agonising, embarrassing and scariest human experiences. But, it is also one of the most educational, empowering and essential parts of living a successful and fulfilling life. Did you know that perseverance is one of the seven qualities that have been described as the keys to personal success and betterment in society? The other six are: curiosity, gratitude, optimism, self-control, social intelligence and zest. Thomas Edison is a model for grit for trying 1,000 plus times to invent the light bulb. If you are reading this with the lights on in your room, you know well he succeeded. When asked why he kept going despite his hundreds of failures, he merely stated that they were not failures. They were hundreds of ways not to create a light bulb. This statement not only revealed his grit but also his optimism for looking at the bright side.

Grit can be learnt to help you become more successful. One of the techniques that help is mindfulness. Mindfulness is a practice that helps the individual stay in the moment by bringing awareness of his or her experience without judgment. This practice has been used to quiet the noise of their fears and doubts. Through the simple practice of mindfulness, individuals have the ability to stop the self-sabotaging downward spiral of hopelessness, despair and frustration.

SubQuestion No : 18

Q.18 Which of the following statements is NOT true?

- Ans**
- 1. Failing leads to embarrassment.
 - 2. Optimism can help overcome failure.
 - 3. One should give up if one fails repeatedly.
 - 4. Failure empowers and educates.

Question ID : 65497839153

Status : Answered

Chosen Option : 3

Comprehension:

Read the given passage and answer the questions that follow.

Have you ever failed at something so miserably that the thought of attempting to do it again was the last thing you wanted to do?

If your answer is yes, then you are not a robot. Unlike robots, we human beings have feelings, emotions and dreams. We are all meant to grow and stretch despite our circumstances and our limitations. Flourishing and trying to make our dreams come true is great when life is going our way. But what happens when it's not? What happens when you fail despite all your hard work? Do you stay down and accept the defeat or do you get up again and again until you are satisfied? If you have a tendency to keep going, then you have what experts call grit. Falling down or failing is one of the most agonising, embarrassing and scariest human experiences. But, it is also one of the most educational, empowering and essential parts of living a successful and fulfilling life. Did you know that perseverance is one of the seven qualities that have been described as the keys to personal success and betterment in society? The other six are: curiosity, gratitude, optimism, self-control, social intelligence and zest. Thomas Edison is a model for grit for trying 1,000 plus times to invent the light bulb. If you are reading this with the lights on in your room, you know well he succeeded. When asked why he kept going despite his hundreds of failures, he merely stated that they were not failures. They were hundreds of ways not to create a light bulb. This statement not only revealed his grit but also his optimism for looking at the bright side.

Grit can be learnt to help you become more successful. One of the techniques that help is mindfulness. Mindfulness is a practice that helps the individual stay in the moment by bringing awareness of his or her experience without judgment. This practice has been used to quiet the noise of their fears and doubts. Through the simple practice of mindfulness, individuals have the ability to stop the self-sabotaging downward spiral of hopelessness, despair and frustration.

SubQuestion No : 19

Q.19 Thomas Edison is a role model for:

- Ans**
- 1. self-control
 - 2. intelligence
 - 3. despair
 - 4. determination

Question ID : 65497839152

Status : Answered

Chosen Option : 4

Comprehension:

Read the given passage and answer the questions that follow.

Have you ever failed at something so miserably that the thought of attempting to do it again was the last thing you wanted to do? If your answer is yes, then you are not a robot. Unlike robots, we human beings have feelings, emotions and dreams. We are all meant to grow and stretch despite our circumstances and our limitations. Flourishing and trying to make our dreams come true is great when life is going our way. But what happens when it's not? What happens when you fail despite all your hard work? Do you stay down and accept the defeat or do you get up again and again until you are satisfied? If you have a tendency to keep going, then you have what experts call grit. Falling down or failing is one of the most agonising, embarrassing and scariest human experiences. But, it is also one of the most educational, empowering and essential parts of living a successful and fulfilling life. Did you know that perseverance is one of the seven qualities that have been described as the keys to personal success and betterment in society? The other six are: curiosity, gratitude, optimism, self-control, social intelligence and zest. Thomas Edison is a model for grit for trying 1,000 plus times to invent the light bulb. If you are reading this with the lights on in your room, you know well he succeeded. When asked why he kept going despite his hundreds of failures, he merely stated that they were not failures. They were hundreds of ways not to create a light bulb. This statement not only revealed his grit but also his optimism for looking at the bright side. Grit can be learnt to help you become more successful. One of the techniques that help is mindfulness. Mindfulness is a practice that helps the individual stay in the moment by bringing awareness of his or her experience without judgment. This practice has been used to quiet the noise of their fears and doubts. Through the simple practice of mindfulness, individuals have the ability to stop the self-sabotaging downward spiral of hopelessness, despair and frustration.

SubQuestion No : 20

Q.20 What do you understand by 'mindfulness'?

- Ans**
- 1. Awareness of experience without judgment
 - 2. Consciousness of one's fears and doubts
 - 3. Peaceful meditation in quiet surroundings
 - 4. Slipping into despair and frustration

Question ID : 65497839154

Status : Answered

Chosen Option : 1

Comprehension:

In the following passage some words have been deleted. Read the passage carefully and select the most appropriate option to fill in each blank.

Mirabai Chanu, (1)_____ Indian weight lifter who recently set a new world record of 119 kg in April 2021, has improved her (2)_____ best to a total of 205 kg. She has proved that she is stronger (3)_____ mentally and physically. Chanu did not crumble (4)_____ pressure. She is now full of confidence as she now comes within the (5)_____ to take the medal in the Olympics.

SubQuestion No : 21

Q.21 Select the most appropriate option to fill in blank no. 1.

- Ans**
- 1. any
 - 2. the
 - 3. a
 - 4. one

Question ID : 65497838329

Status : Answered

Chosen Option : 3

Comprehension:

In the following passage some words have been deleted. Read the passage carefully and select the most appropriate option to fill in each blank.

Mirabai Chanu, (1)_____ Indian weight lifter who recently set a new world record of 119 kg in April 2021, has improved her (2)_____ best to a total of 205 kg. She has proved that she is stronger (3)_____ mentally and physically. Chanu did not crumble (4)_____ pressure. She is now full of confidence as she now comes within the (5)_____ to take the medal in the Olympics.

SubQuestion No : 22

Q.22 Select the most appropriate option to fill in blank no. 2.

Ans ✓ 1. personal

✗ 2. subjective

✗ 3. private

✗ 4. public

Question ID : 65497838330

Status : Answered

Chosen Option : 1

Comprehension:

In the following passage some words have been deleted. Read the passage carefully and select the most appropriate option to fill in each blank.

Mirabai Chanu, (1)_____ Indian weight lifter who recently set a new world record of 119 kg in April 2021, has improved her (2)_____ best to a total of 205 kg. She has proved that she is stronger (3)_____ mentally and physically. Chanu did not crumble (4)_____ pressure. She is now full of confidence as she now comes within the (5)_____ to take the medal in the Olympics.

SubQuestion No : 23

Q.23 Select the most appropriate option to fill in blank no. 3.

Ans ✓ 1. both

✗ 2. either

✗ 3. every

✗ 4. each

Question ID : 65497838331

Status : Answered

Chosen Option : 1

Comprehension:

In the following passage some words have been deleted. Read the passage carefully and select the most appropriate option to fill in each blank.

Mirabai Chanu, (1)_____ Indian weight lifter who recently set a new world record of 119 kg in April 2021, has improved her (2)_____ best to a total of 205 kg. She has proved that she is stronger (3)_____ mentally and physically. Chanu did not crumble (4)_____ pressure. She is now full of confidence as she now comes within the (5)_____ to take the medal in the Olympics.

SubQuestion No : 24

Q.24 Select the most appropriate option to fill in blank no. 4.

Ans ✓ 1. under

✗ 2. above

✗ 3. between

✗ 4. along

Question ID : 65497838332

Status : Answered

Chosen Option : 1

Comprehension:

In the following passage some words have been deleted. Read the passage carefully and select the most appropriate option to fill in each blank.

Mirabai Chanu, (1)_____ Indian weight lifter who recently set a new world record of 119 kg in April 2021, has improved her (2)_____ best to a total of 205 kg. She has proved that she is stronger (3)_____ mentally and physically. Chanu did not crumble (4)_____ pressure. She is now full of confidence as she now comes within the (5)_____ to take the medal in the Olympics.

SubQuestion No : 25

Q.25 Select the most appropriate option to fill in blank no. 5.

- Ans 1. width
 2. range
 3. extent
 4. extreme

Question ID : 65497838333
Status : Marked For Review
Chosen Option : 2

Section : Quantitative Aptitude

Q.1 The lateral surface area of a cube is 576 cm^2 . What is its volume (in cm^3)?

- Ans 1. $384\sqrt{6}$
 2. 1728
 3. 2744
 4. 4096

Question ID : 65497838974
Status : Answered
Chosen Option : 2

Q.2 If a seven-digit number $7x634y2$ is divisible by 88, then for the largest value of y , what is the difference of the values of x and y ?

- Ans 1. 8
 2. 4
 3. 2
 4. 6

Question ID : 65497838341
Status : Answered
Chosen Option : 3

Q.3 A shop keeper sold two articles. He sold one article at ₹29,337 and got 27% profit. He sold the other article at ₹14,206.50 and got 23% loss. What is his overall gain or loss per cent (correct to nearest integer)?

- Ans 1. 8% gain
 2. 4% loss
 3. 7% loss
 4. 5% gain

Question ID : 65497838352
Status : Answered
Chosen Option : 4

Q.4 Find the greatest 3-digit number divisible by 3, formed using the digits 0, 1, 2, 3, 5 without any repetition.

- Ans
- 1. 513
 - 2. 510
 - 3. 531
 - 4. 532

Question ID : 65497839156
Status : Marked For Review
Chosen Option : 3

Q.5 If two cities A and B on a map of scale 1 : 6000000 are 5 cm apart, what is the actual distance (in km) between A and B?

- Ans
- 1. 300
 - 2. 3000
 - 3. 30
 - 4. 120

Question ID : 65497838966
Status : Not Answered
Chosen Option : --

Q.6 On a certain sum, simple interest for 2 years is ₹9,600 whereas the compound interest compounded annually is ₹10,176. What is the rate of interest per annum?

- Ans
- 1. 9%
 - 2. 12%
 - 3. 10%
 - 4. 15%

Question ID : 65497838153
Status : Marked For Review
Chosen Option : 2

Q.7 A and B together can do a work in 16 days. If A alone can do the same work in 48 days, then in how many days can B alone do the same work?

- Ans
- 1. 20
 - 2. 12
 - 3. 24
 - 4. 16

Question ID : 65497838971
Status : Answered
Chosen Option : 3

Q.8 A table costs ₹2,250, which is 25% below the marked price. If the article is sold at a discount of 18% on the marked price, then what is the profit or loss per cent? (Correct to two decimal places)

- Ans
- 1. Profit of 9.33%
 - 2. Loss of 9.33%
 - 3. Profit of 8.33%
 - 4. Loss of 8.33%

Question ID : 65497838958
Status : Answered
Chosen Option : 1

Q.9 An article is marked at a price of ₹240 and sold for ₹220. What is the percentage discount on the article? (Correct to two decimal places)

- Ans
- 1. 9.09%
 - 2. 9.33%
 - 3. 8.09%
 - 4. 8.33%

Question ID : 65497838855
Status : Answered
Chosen Option : 4

Q.10 In an examination, the average marks of a student per paper were 72. If he had got 25 less marks in Mathematics and 17 more marks in Science, his average marks per paper would have been 71. How many papers were there in the examination?

- Ans
- 1. 10
 - 2. 8
 - 3. 9
 - 4. 6

Question ID : 65497838344
Status : Not Answered
Chosen Option : --

Q.11 The compound interest (in ₹, to the nearest tens) on ₹90,900 for $2\frac{1}{2}$ years at the rate of 10% per annum, compounded annually, is:

- Ans
- 1. 24,460
 - 2. 22,954
 - 3. 24,590
 - 4. 23,634

Question ID : 65497839172
Status : Marked For Review
Chosen Option : 3

Q.12 Rohit sells an article at a certain price. If he sells it at 72% of that price, he incurs a loss of 20%. If he sells it at 20% above its actual selling price, then his profit percentage is:

- Ans
- 1. $33\frac{1}{3}\%$
 - 2. 30%
 - 3. 24%
 - 4. $28\frac{2}{3}\%$

Question ID : 65497838453
Status : Answered
Chosen Option : 1

Q.13 P, Q and R participated in a cycle race of 4000 metres. P cycles twice as fast as Q and R cycles $\frac{1}{2}$ as fast as Q. If R completes the race in 40 minutes, then what is the speed (in km/h) of P?

- Ans
- 1. 24
 - 2. 20
 - 3. 18
 - 4. 30

Question ID : 65497838361
Status : Answered
Chosen Option : 1

Q.14 In a test consisting of 80 questions, Anita answered 60% of the first 55 questions correctly. What per cent of the remaining questions should she answer correctly to obtain 70% in the entire exam?

- Ans
- 1. 85%
 - 2. 92%
 - 3. 80%
 - 4. 78%

Question ID : 65497838145
Status : Answered
Chosen Option : 2

Q.15 The speed of a boat in still water is 15 km/h and the speed of the stream is 3 km/h. How much time (in hours) will the boat take if it goes 36 km downstream?

- Ans
- 1. 1.5
 - 2. 2
 - 3. 2.5
 - 4. 3

Question ID : 65497839176
Status : Answered
Chosen Option : 2

Q.16 The ratio of the number of boys and girls in a class is 3 : 5. The average score in English of all the boys and girls is 67.5. If the average score of the boys is 60, then what is the average score of the girls?

- Ans
- 1. 76
 - 2. 72.5
 - 3. 70.5
 - 4. 72

Question ID : 65497838445
Status : Answered
Chosen Option : 4

Q.17 What is $b : a$, if $(5a + b) : (a + b) = 7 : 5$?

- Ans
- 1. 9 : 1
 - 2. 3 : 5
 - 3. 5 : 3
 - 4. 1 : 9

Question ID : 65497838863
Status : Answered
Chosen Option : 1

Q.18 Anu spends 80% of his income. If his income increases by 12% and the savings decrease by 10% then what is the percent increase in the expenditures?

- Ans
- ✓ 1. 17.5%
 - ✗ 2. 18%
 - ✗ 3. 15%
 - ✗ 4. 12.5%

Question ID : 65497839164
Status : Answered
Chosen Option : 1

Q.19 In a certain number of years T, the simple interest earned on a certain sum at the rate of 9% per annum is nine-sixteenth of the sum. What is the value of T (in years)?

- Ans
- ✓ 1. $6\frac{1}{4}$
 - ✗ 2. $6\frac{1}{2}$
 - ✗ 3. $7\frac{1}{4}$
 - ✗ 4. $7\frac{1}{2}$

Question ID : 65497839171
Status : Answered
Chosen Option : 1

Q.20 If $x^4 + \frac{1}{x^4} = 34$ where $x > 0$, then find the value of $x + \frac{1}{x}$.

- Ans
- ✗ 1. $4\sqrt{2}$
 - ✗ 2. 4.25
 - ✓ 3. $2\sqrt{2}$
 - ✗ 4. 4

Question ID : 65497838874
Status : Answered
Chosen Option : 3

Q.21 If $(x + \frac{1}{2})^3 + (3x + \frac{2}{3})^3 + (x - \frac{1}{6})^3 = \frac{1}{12}(9x + 2)(2x + 1)(6x - 1)$, then what is the value of x ?

- Ans
- ✓ 1. $-\frac{1}{5}$
 - ✗ 2. $-\frac{1}{2}$
 - ✗ 3. $-\frac{1}{4}$
 - ✗ 4. $-\frac{1}{3}$

Question ID : 65497838363
Status : Not Answered
Chosen Option : --

Q.22 P can do a piece of work in 48 days and Q can do half of the same work in 30 days. If they both work together, in how many days can they complete three-eighth of the work?

- Ans
- 1. 24
 - 2. 10
 - 3. 8
 - 4. 12

Question ID : 65497838868

Status : Answered

Chosen Option : 2

Q.23 P sold a camera to Q at 32% profit. However, Q sold it to R at a loss of 20%. If R paid ₹6,464 for the camera, what was the price (in ₹, to the nearest rupee) paid by P for it?

- Ans
- 1. 5,850
 - 2. 8,050
 - 3. 7,080
 - 4. 6,121

Question ID : 65497839269

Status : Answered

Chosen Option : 4

Q.24 A man's monthly salary increases from ₹36,890 to ₹47,980. What is the percentage increase (to the nearest integer) in his monthly salary?

- Ans
- 1. 30%
 - 2. 32%
 - 3. 35%
 - 4. 25%

Question ID : 65497839163

Status : Answered

Chosen Option : 1

Q.25 If the average of 20, 25, $(p + 1)$, $(2p + 5)$ and $(p + 11)$ is 22, then the value of p is:

- Ans
- 1. 8
 - 2. 16
 - 3. 18
 - 4. 12

Question ID : 65497839261

Status : Answered

Chosen Option : 4

Q.1 Who among the following was given the title of 'Khan-e-Khana' by Akbar?

- Ans
- 1. Abul Fazl
 - 2. Faizi
 - 3. Tansen
 - 4. Mirza Abdul Rahim Khan

Question ID : 65497839194
Status : Marked For Review
Chosen Option : 1

Q.2 What is the name of the National Tribal Migration Support Portal that was launched by the Union Minister of Tribal Affairs, Shri Arjun Munda, in January 2021?

- Ans
- 1. Shrambhakti
 - 2. Shakti
 - 3. Shramdaan
 - 4. ShramShakti

Question ID : 65497838389
Status : Not Answered
Chosen Option : --

Q.3 Which of the following does NOT come under the purview of 'paper taxes'?

- Ans
- 1. Gift tax
 - 2. Estate duty
 - 3. Excise tax
 - 4. Wealth tax

Question ID : 65497839184
Status : Not Answered
Chosen Option : --

Q.4 Under which Article of the Constitution of India can the President of India declare National Emergency if he/she feels that there is a grave threat to the security of the country?

- Ans
- 1. 351
 - 2. 348
 - 3. 352
 - 4. 350

Question ID : 65497838995
Status : Answered
Chosen Option : 3

Q.5 Who among the following is the author of 'The Turbulent Years: 1980 - 1996'?

- Ans
- 1. Pranab Mukherjee
 - 2. PV Narasimha Rao
 - 3. Manmohan Singh
 - 4. Kamal Nath

Question ID : 65497838890
Status : Not Answered
Chosen Option : --

Q.6 Which team lost in the final match of the Hero Indian Super League, 2020-2021?

- Ans
- 1. Bengaluru FC
 - 2. ATK Mohun Bagan FC
 - 3. FC Goa
 - 4. Chennaiyin FC

Question ID : 65497838386
Status : Marked For Review
Chosen Option : 2

Q.7 To plan sustainable tourism and healthy coastal management, Ministry of Environment, Forest and Climate Change has conceived an integrated coastal management scheme called BEAMS. What is the full form of BEAMS?

- Ans
- 1. Best Environment and Aesthetics Management Schemes
 - 2. Beach Environment and Aesthetics Management Services
 - 3. Best Environment and Aesthetics Management Services
 - 4. Beach Enrolment and Aesthetics Management Services

Question ID : 65497838372
Status : Not Answered
Chosen Option : --

Q.8 Which of the following states/union territories is NOT touched by the Aravalli Range?

- Ans
- 1. Haryana
 - 2. Delhi
 - 3. Gujarat
 - 4. Punjab

Question ID : 65497838884
Status : Marked For Review
Chosen Option : 4

Q.9 Articles 124 and 217 of the Constitution of India deal with which of the following?

- Ans
- 1. The appointment of the UPSC Chairman
 - 2. The appointment of judges
 - 3. The appointment of the Chief Minister
 - 4. The appointment of the Governor

Question ID : 65497839198
Status : Marked For Review
Chosen Option : 2

Q.10 How many atoms of hydrogen are there in Ammonium Chloride?

- Ans
- 1. Two
 - 2. Three
 - 3. One
 - 4. Four

Question ID : 65497838983
Status : Marked For Review
Chosen Option : 2

Q.11 'Yakshagana' is a popular form of dance-drama of:

- Ans
- 1. Northern India
 - 2. Eastern India
 - 3. Western India
 - 4. Southern India

Question ID : 65497838977
Status : Answered
Chosen Option : 4

Q.12 Who was the Viceroy of India at the time of the Dandi March initiated by Gandhiji?

- Ans
- 1. Lord Willingdon
 - 2. Lord Reading
 - 3. Lord Irwin
 - 4. Lord Linlithgow

Question ID : 65497838889
Status : Marked For Review
Chosen Option : 3

Q.13 The 'Forum for Decarbonizing Transport' was jointly launched by World Resources Institute (WRI), India and _____ in August 2021.

- Ans
- 1. NITI Aayog
 - 2. Department of Science and Technology, Gol
 - 3. Ministry of Transport, Gol
 - 4. Ministry of Environment, Gol

Question ID : 65497838999
Status : Not Answered
Chosen Option : --

Q.14 In which of the following states is the headquarters of NSDL Payments Bank situated?

- Ans
- 1. Tamil Nadu
 - 2. Maharashtra
 - 3. Karnataka
 - 4. Sikkim

Question ID : 65497838367
Status : Not Answered
Chosen Option : --

Q.15 Which of the following Indian states is home to the largest population of the greater one-horned rhinoceros?

- Ans
- 1. Arunachal Pradesh
 - 2. Assam
 - 3. Manipur
 - 4. Meghalaya

Question ID : 65497839186
Status : Answered
Chosen Option : 2

Q.16 In which of the following years was the Battle of Imphal won?

- Ans 1. 1944
 2. 1934
 3. 1956
 4. 1912

Question ID : 65497838376
Status : Not Answered
Chosen Option : --

Q.17 To which of the following persons did Mamata Banerjee lose the Nandigram seat at the Assembly Polls held in March-April 2021?

- Ans 1. Tathagata Roy
 2. Mukul Roy
 3. Dilip Ghosh
 4. Suvendu Adhikari

Question ID : 65497838898
Status : Answered
Chosen Option : 4

Q.18 'Dalkhai' dance is associated with the state of:

- Ans 1. Uttar Pradesh
 2. Punjab
 3. Bihar
 4. Odisha

Question ID : 65497839182
Status : Not Attempted and
Marked For Review
Chosen Option : --

Q.19 After West Bengal, with which of the following Indian states does Bangladesh have the common longest border?

- Ans 1. Meghalaya
 2. Mizoram
 3. Assam
 4. Tripura

Question ID : 65497838987
Status : Marked For Review
Chosen Option : 1

Q.20 Who among the following was appointed as the Chief Minister of Punjab in September 2021?

- Ans 1. Charanjit Singh Channi
 2. OP Soni
 3. Navjot Singh Sidhu
 4. Amarinder Singh

Question ID : 65497838486
Status : Answered
Chosen Option : 1

Test

Prime

By Adda247

Previous Year Papers PDF

PRACTICE MORE, SCORE HIGHER!



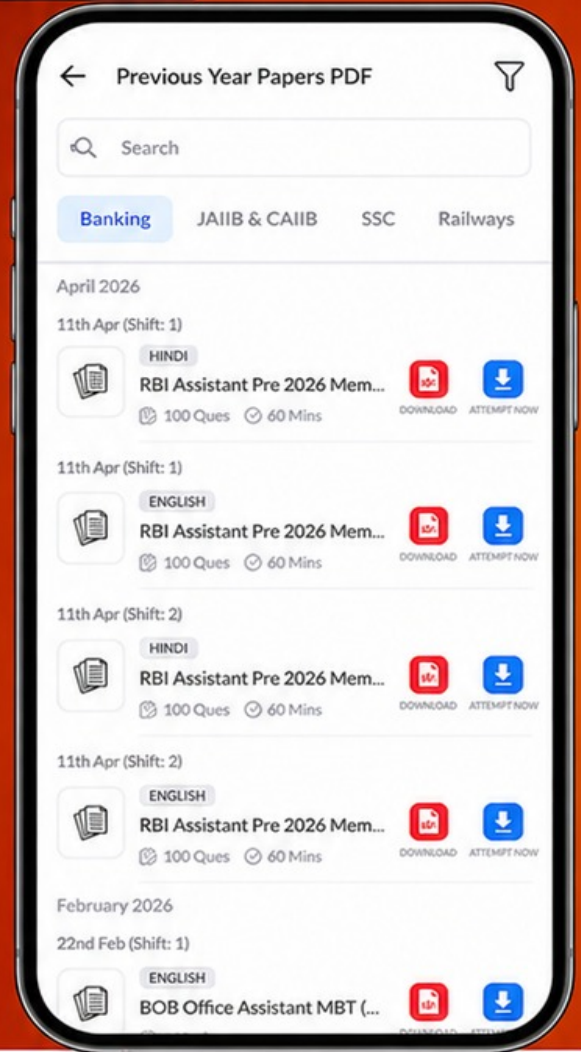
Free
25,000+
PDF's

High-Quality | Exam-Wise | Updated Regularly

ATTEMPT AS
MOCK



Turn PDFs into real exam experience.
Analyze. Improve. Succeed.



Topic-wise &
Exam-wise PDFs



Download &
Study Offline



Attempt as Mock
& Track Score



Smart Analysis
& Performance

AVAILABLE IN



Banking



SSC



Railway



Teaching



UGC



Agriculture



Nursing



Bihar



UP



Punjab



WB



Odisha



TN



AP & Telangana



Haryana



DOWNLOAD THE APP



Q.21 Deomali mountain peak is in:

- Ans 1. Jharkhand
 2. Assam
 3. Odisha
 4. Kerala

Question ID : 65497839189
Status : Not Answered
Chosen Option : --

Q.22 Who among the following is the author of the book 'The Three Khans: And the Emergence of New India'?

- Ans 1. Twinkle Khanna
 2. Kaveree Bamzai
 3. Chetan Bhagat
 4. Uday Bhatia

Question ID : 65497838381
Status : Not Answered
Chosen Option : --

Q.23 ITNS Challan Number _____ is used for payment of Fringe Benefit Tax.

- Ans 1. 284
 2. 281
 3. 282
 4. 283

Question ID : 65497838879
Status : Not Answered
Chosen Option : --

Q.24 As of September 2021, how many times has the Indian Men's Hockey team won a silver medal at the Summer Olympic Games?

- Ans 1. Three
 2. Never
 3. One
 4. Two

Question ID : 65497839201
Status : Answered
Chosen Option : 2

Q.25 _____ was land granted to a Brahmana, who was usually exempted from paying land revenue and other dues to the king, and was often given the right to collect these dues from the local people.

- Ans 1. A dakshina
 2. An agrahara
 3. An ahuti
 4. A namaskaram

Question ID : 65497838989
Status : Not Answered
Chosen Option : --