

Selection Post Phase IX 2021 Higher Secondary level

Roll Number	
Candidate Name	
Venue Name	
Exam Date	08/02/2022
Exam Time	12:00 PM - 1:00 PM
Subject	Selection Post Higher Secondary Level

Section : **General Intelligence**

Q.1 Select the option that is related to the third term in the same way as the second term is related to the first term.

ORDERS : QOFBTP :: FASTEN : ?

- Ans
- 1. HXYQGL
 - 2. HXUQGK
 - 3. GXURGK
 - 4. HWVQGK

Question ID : **65497840163**
Status : **Answered**
Chosen Option : **2**

Q.2 A + B means 'A is the father of B'
A % B means 'A is the husband of B'
A # B means 'A is the daughter of B'
If U + S % M # T, then how is S related to T?

- Ans
- 1. Father
 - 2. Father-in-law
 - 3. Son
 - 4. Son-in-law

Question ID : **65497839769**
Status : **Answered**
Chosen Option : **4**

Q.3 In a certain code language, 'SOAP' is written as '55' and 'FRY' is written as '52'. How will 'CLAN' be written in that language?

- Ans
- 1. 34
 - 2. 44
 - 3. 30
 - 4. 60

Question ID : **65497839764**
Status : **Answered**
Chosen Option : **1**

**Test
Prime**

By Adda247

ALL EXAMS, ONE SUBSCRIPTION



Test. Analyze. Improve. Repeat.



Don't just *prepare*. *Perform*.

Test Prime — built only for mock tests.



1,50,000+
Mock Tests



25,000+
Previous Year Papers



800+
Exam Covered



500% Refund
on Selection



5 lakh+
Free Quizzes



Daily
Free PDFs



Job Alerts
Stay Updated

- Multilingual
- Detailed Solution
- Strong and Weak Areas



**All India
Rankings**

Compete with lakhs.
Rank. Improve. Repeat.



← Adda247 test prime

Rating ▾

Editors' choice

New



Adda247 Test Prime
Adda Education • Education
📌 Installed



DOWNLOAD THE APP



Q.4 Select the correct mirror image of the given combination when the mirror is placed at 'PQ' as shown.

V s w 2 4

P
|
Q

Ans

- 1. 4 2 w e V
- 2. 4 2 w e V
- 3. 4 2 w e V
- 4. 4 2 w s 4

Question ID : 65497839881
Status : Answered
Chosen Option : 2

Q.5 Select the combination of letters, that when sequentially placed in the blanks of the given series, will complete the series.

Z _ S M _ Q _ M Z Q _ M _ Q _ M

Ans

- 1. Q Z S S Z Q
- 2. S Z Q S Z S
- 3. Q Z S S Z S
- 4. Q Z S Q Z S

Question ID : 65497839970
Status : Answered
Chosen Option : 3

Q.6 उस विकल्प का चयन कीजिए, जिसका तीसरे शब्द से वही संबंध है, जो दूसरे शब्द का पहले शब्द से है।

सांड : गाय :: बीजाश्व : ?

Ans

- 1. बछड़ा
- 2. भैंस
- 3. बतख
- 4. घोड़ी

Question ID : 65497839759
Status : Answered
Chosen Option : 4

Q.7 Select the number from among the given options that can replace the question mark (?) in the following series.

24, 30, 39, 51, 66, 84, ?

- Ans
- 1. 96
 - 2. 105
 - 3. 102
 - 4. 112

Question ID : 65497839977
Status : Answered
Chosen Option : 2

Q.8 If Shashank is the son of Pragya's husband Kushal, who is the son of Malini, how is Malini's husband related to Shashank?

- Ans
- 1. Paternal grandfather
 - 2. Father
 - 3. Maternal grandfather
 - 4. Paternal uncle

Question ID : 65497839870
Status : Answered
Chosen Option : 1

Q.9 Six persons A, B, C, D, E and F are sitting around a circular table facing the centre. E is fourth to the left of D, who is to the immediate left of B. A is to the immediate left of C. F is not sitting adjacent to E. Who is sitting second to the right of F?

- Ans
- 1. D
 - 2. A
 - 3. E
 - 4. B

Question ID : 65497839864
Status : Answered
Chosen Option : 4

Q.10 Read the given statements and conclusions carefully. Assuming that the information given in the statements is true, even if it appears to be at variance with commonly known facts, decide which of the given conclusions logically follow(s) from the statements.

Statements:
No city is a country.
All towns are cities.

Conclusions:
I. No town is a country.
II. Some towns are countries.

- Ans
- 1. Both conclusions I and II follow
 - 2. Only conclusion II follows
 - 3. Only conclusion I follows
 - 4. Either conclusion I or II follows

Question ID : 65497839872
Status : Answered
Chosen Option : 3

Q.11 Four letter-clusters have been given, out of which three are alike in some manner and one is different. Select the one that is different.

- Ans
- 1. MQUY
 - 2. TXBF
 - 3. CGKO
 - 4. VYCG

Question ID : 65497839969
Status : Answered
Chosen Option : 4

Q.12 Select the correct option that indicates the arrangement of the given words in the order in which they appear in an English dictionary.

1. Monger
2. Monarchy
3. Monster
4. Monotony
5. Monitor

- Ans
- 1. 2, 1, 3, 5, 4
 - 2. 2, 1, 5, 4, 3
 - 3. 1, 2, 5, 3, 4
 - 4. 2, 1, 5, 3, 4

Question ID : 65497839860
Status : Answered
Chosen Option : 2

Q.13 Which two numbers (not digits) should be interchanged to make the given equation correct?

$$24 \times 6 + 36 - 18 \div 3 = 105$$

- Ans
- 1. 3 and 6
 - 2. 24 and 36
 - 3. 6 and 24
 - 4. 3 and 18

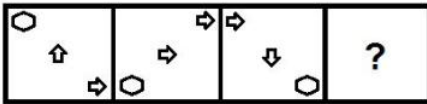
Question ID : 65497839877
Status : Answered
Chosen Option : 1

Q.14 In a certain code language, 'SWEDEN' is written as 'TXDED0', and 'GERMANY' is written as 'HDSNZOZ'. How will 'PORTUGAL' be written in that language?

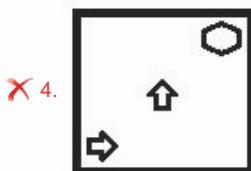
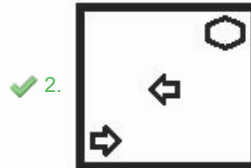
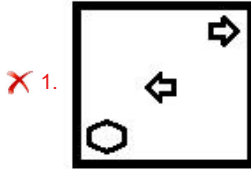
- Ans
- 1. OPSWTHZM
 - 2. QNSUTPBM
 - 3. QNSUTHZM
 - 4. QNSUVHZK

Question ID : 65497839865
Status : Answered
Chosen Option : 4

Q.15 Select the figure from among the given options that can replace the question mark (?) in the following series.



Ans



Question ID : 65497839878
Status : Answered
Chosen Option : 2

Q.16 Four houses A, B, C and D are located in a colony. B is 40 m north of C. A is 20 m east of D. C is 30 m west of D. In which direction is A with reference to C?

- Ans
- ✗ 1. West
 - ✗ 2. North
 - ✓ 3. East
 - ✗ 4. South

Question ID : 65497839965
Status : Answered
Chosen Option : 3

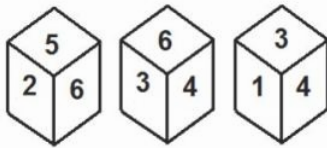
Q.17 Select the option that is related to the third word in the same way as the second word is related to the first word.

Videographer : Camera :: Doctor : ?

- Ans 1. Stethoscope
 2. Treatment
 3. Hospital
 4. Operation

Question ID : 65497839862
 Status : Answered
 Chosen Option : 1

Q.18 Three different positions of the same dice are shown. Select the number that will be on the face opposite to the one having 1.



- Ans 1. 4
 2. 5
 3. 2
 4. 6

Question ID : 65497839777
 Status : Answered
 Chosen Option : 4

Q.19 Select the number from among the given options that can replace the question mark (?) in the following series.

14, 19, 34, 79, ?

- Ans 1. 214
 2. 144
 3. 227
 4. 186

Question ID : 65497839874
 Status : Answered
 Chosen Option : 1

Q.20 Select the option that is related to the third term in the same way as the second term is related to the first term and the sixth term is related to the fifth term.

9 : 87 :: 12 : ? :: 8 : 70

- Ans
- 1. 175
 - 2. 96
 - 3. 112
 - 4. 150

Question ID : 65497839774
Status : Answered
Chosen Option : 4

Q.21 Select the correct option that indicates the arrangement of the following words in a logical and meaningful order.

1. Kolkata
2. India
3. West Bengal
4. Asia
5. Eden Garden

- Ans
- 1. 5, 1, 2, 3, 4
 - 2. 5, 1, 3, 2, 4
 - 3. 1, 5, 3, 2, 4
 - 4. 3, 1, 5, 2, 4

Question ID : 65497839961
Status : Answered
Chosen Option : 2

Q.22 Select the option that is related to the third letter-cluster in the same way as the second letter-cluster is related to the first letter-cluster.

NEPHEW : QFOXFI :: PRIMER : ?

- Ans
- 1. JQOTFN
 - 2. JSRSFL
 - 3. JSQSFN
 - 4. KSQOFN

Question ID : 65497839756
Status : Answered
Chosen Option : 3

Q.23 Select the option in which the given figure is embedded (rotation is NOT allowed).



Ans

✗ 1.



✗ 2.



✗ 3.



✓ 4.



Question ID : 65497839982
Status : Answered
Chosen Option : 4

Q.24 Read the given statements and conclusions carefully. Assuming that the information given in the statements is true, even if it appears to be at variance with commonly known facts, decide which of the given conclusions logically follow(s) from the statements.

Statements:

- All students are enthusiasts.
- No enthusiast is a candidate.
- All leaders are students.

Conclusions:

- I. No leader is a candidate.
- II. No student is a candidate.
- III. No candidate is an enthusiast.

- Ans
- ✗ 1. Only conclusions II and III follow.
 - ✗ 2. Only conclusions I and II follow.
 - ✗ 3. Only conclusions I and III follow.
 - ✓ 4. All conclusions I, II and III follow.

Question ID : 65497840166
Status : Answered
Chosen Option : 4

Q.25 Select the combination of letters that when sequentially placed in the blanks of the given series will complete the series.

u _ p s _ z _ m p _ d _ u _ p s _ z

- Ans
- 1. p d u s m z d
 - 2. m d p s z u d
 - 3. m d u m z m d
 - 4. m d u s z m d

Question ID : 65497839869
Status : Answered
Chosen Option : 4

Section : English Language

Q.1 Select the INCORRECTLY spelt word.

- Ans
- 1. Illiterate
 - 2. Acclimatise
 - 3. Accommodate
 - 4. Illegible

Question ID : 65497839794
Status : Answered
Chosen Option : 3

Q.2 Select the option that will improve the underlined part of the given sentence. In case no improvement is needed, select 'No improvement'.

My friend walking quickly to the market and returned with a bag full of vegetables.

- Ans
- 1. No improvement
 - 2. walk is quick
 - 3. walked quickly
 - 4. walks quickly

Question ID : 65497839989
Status : Answered
Chosen Option : 3

Q.3 Sentences of a paragraph are given below in jumbled order. Arrange the sentences in the correct order to form a meaningful and coherent paragraph.

- A. Then comes a ride over the river in a long, narrow water taxi.
- B. In the town of Delta, motorcycle taxis wait to cover the final 30-minute leg through the jungle into the village in the Amazon rain forest.
- C. To reach the village of Puerto Luz in the Amazon rain forest of southern Peru, the first step is to get to the city of Puerto Maldonado.
- D. The next step is a three-hour drive on the Interoceanic Highway to the banks of the Tambopata River.

- Ans
- 1. C, A, D, B
 - 2. C, D, A, B
 - 3. B, A, D, C
 - 4. B, C, D, A

Question ID : 65497839787
Status : Answered
Chosen Option : 2

Q.4 Select the option that can be used as a one-word substitute for the given group of words.

Scientific study of the human mind and behaviour

- Ans
- 1. Biology
 - 2. Philosophy
 - 3. Psychology
 - 4. Anthropology

Question ID : 65497839894
Status : Answered
Chosen Option : 3

Q.5 Select the most appropriate meaning of the given idiom.

Bite off more than you can chew

- Ans
- 1. Work very hard to accomplish a job
 - 2. Take on more work than you can handle
 - 3. Use all possible tricks to achieve success
 - 4. Try to do something that is very easy

Question ID : 65497839995
Status : Answered
Chosen Option : 2

Q.6 Select the most appropriate synonym of the given word.

Annul

- Ans
- 1. Invalidate
 - 2. Uphold
 - 3. Create
 - 4. Increase

Question ID : 65497839992
Status : Answered
Chosen Option : 1

Q.7 Select the option that can be used as a one-word substitute for the given group of words.

Someone who looks at the brighter side of things

- Ans 1. Optimist
 2. Narcissist
 3. Pessimist
 4. Atheist

Question ID : 65497839793
Status : Answered
Chosen Option : 1

Q.8 Select the most appropriate meaning of the given idiom.

Let the cat out of the bag

- Ans 1. Be funny
 2. Be kind
 3. Reveal a secret
 4. Be very truthful

Question ID : 65497839892
Status : Answered
Chosen Option : 3

Q.9 Parts of the given sentence have been given as options. One of them contains a grammatical error. Select the option that has the error.

My friends whom were preparing to climb Mount Everest have reached the base camp.

- Ans 1. have reached
 2. preparing to
 3. whom were
 4. the base camp

Question ID : 65497839984
Status : Answered
Chosen Option : 3

Q.10 Select the option that expresses the given sentence in indirect speech.

The invigilator said, "Please listen to all the instructions carefully."

- Ans 1. The invigilator warned the students to listen to all the instructions carefully.
 2. The invigilator suggested to the students that they will listen to all the instructions carefully.
 3. The invigilator requested the students to listen to all the instructions carefully.
 4. The invigilator had requested the students that they would please listen to all the instructions carefully.

Question ID : 65497839987
Status : Answered
Chosen Option : 3

Q.11 Select the option that expresses the given sentence in indirect speech.

Rita said, "For the last two months I have been trying to lose weight."

- Ans 1. Rita said that for the last two months she had been trying to lose weight.
2. Rita said for the last two months she had tried to lose weight.
3. Rita told she have been trying for the last two months to lose weight.
4. Rita said that she is trying for the last two months to lose weight.

Question ID : 65497839784
Status : Answered
Chosen Option : 1

Q.12 Select the option that expresses the given sentence in passive voice.

I am creating an app to help COVID patients.

- Ans 1. An app was created by me to help COVID patients.
2. An app will be created by me to help COVID patients.
3. An app is being created by me to help COVID patients.
4. An app had been created by me to help COVID patients.

Question ID : 65497839884
Status : Answered
Chosen Option : 3

Q.13 Select the most appropriate option to fill in the blank.

The secret document was shared with the staff quite _____.

- Ans 1. in accident
2. accidentally
3. accidental
4. with accident

Question ID : 65497839888
Status : Answered
Chosen Option : 2

Q.14 Select the option that expresses the given sentence in passive voice.

The Board approved my leave.

- Ans 1. My leave was being approved by the Board.
2. My leave was approved by the Board.
3. My leave is approved by the Board.
4. My leave had been approved.

Question ID : 65497839883
Status : Answered
Chosen Option : 2

Q.15 Select the most appropriate ANTONYM of the given word.

Hospitable

- Ans 1. Amicable
 2. Efficient
 3. Unfriendly
 4. Caring

Question ID : 65497839891
Status : Answered
Chosen Option : 3

Comprehension:

In the following passage, some words have been deleted. Read the passage carefully and select the most appropriate option to fill in each blank.

The fire season that started in late 2019 in Australia (1)_____ massive devastation and things swiftly got worse before rains finally came and helped contain the (2)_____ fires ever. The smoke released by the fires became (3)_____ disaster. On January 1st, Australia's capital recorded the worst pollution it's ever seen, with an air quality index 23 times higher (4)_____ what's considered 'hazardous'. Smoke in the city crept into birthing rooms, stopped MRI machines from working, and (5)_____ a heart attack in one elderly woman who died soon after she stepped off a plane.

SubQuestion No : 16

Q.16 Select the most appropriate option to fill in blank no. 1.

- Ans 1. caused
 2. faced
 3. wanted
 4. planned

Question ID : 65497839898
Status : Answered
Chosen Option : 1

Comprehension:

In the following passage, some words have been deleted. Read the passage carefully and select the most appropriate option to fill in each blank.

The fire season that started in late 2019 in Australia (1)_____ massive devastation and things swiftly got worse before rains finally came and helped contain the (2)_____ fires ever. The smoke released by the fires became (3)_____ disaster. On January 1st, Australia's capital recorded the worst pollution it's ever seen, with an air quality index 23 times higher (4)_____ what's considered 'hazardous'. Smoke in the city crept into birthing rooms, stopped MRI machines from working, and (5)_____ a heart attack in one elderly woman who died soon after she stepped off a plane.

SubQuestion No : 17

Q.17 Select the most appropriate option to fill in blank no. 2.

- Ans 1. worst
 2. bad
 3. worse
 4. more worse

Question ID : 65497839899
Status : Answered
Chosen Option : 1

Comprehension:

In the following passage, some words have been deleted. Read the passage carefully and select the most appropriate option to fill in each blank.

The fire season that started in late 2019 in Australia (1)_____ massive devastation and things swiftly got worse before rains finally came and helped contain the (2)_____ fires ever. The smoke released by the fires became (3)_____ disaster. On January 1st, Australia's capital recorded the worst pollution it's ever seen, with an air quality index 23 times higher (4)_____ what's considered 'hazardous'. Smoke in the city crept into birthing rooms, stopped MRI machines from working, and (5)_____ a heart attack in one elderly woman who died soon after she stepped off a plane.

SubQuestion No : 18

Q.18 Select the most appropriate option to fill in blank no. 3.

- Ans 1. many
 2. other
 3. another
 4. one

Question ID : 65497839900

Status : Answered

Chosen Option : 3

Comprehension:

In the following passage, some words have been deleted. Read the passage carefully and select the most appropriate option to fill in each blank.

The fire season that started in late 2019 in Australia (1)_____ massive devastation and things swiftly got worse before rains finally came and helped contain the (2)_____ fires ever. The smoke released by the fires became (3)_____ disaster. On January 1st, Australia's capital recorded the worst pollution it's ever seen, with an air quality index 23 times higher (4)_____ what's considered 'hazardous'. Smoke in the city crept into birthing rooms, stopped MRI machines from working, and (5)_____ a heart attack in one elderly woman who died soon after she stepped off a plane.

SubQuestion No : 19

Q.19 Select the most appropriate option to fill in blank no. 4.

- Ans 1. than
 2. by
 3. as
 4. to

Question ID : 65497839901

Status : Answered

Chosen Option : 1

Comprehension:

In the following passage, some words have been deleted. Read the passage carefully and select the most appropriate option to fill in each blank.

The fire season that started in late 2019 in Australia (1)_____ massive devastation and things swiftly got worse before rains finally came and helped contain the (2)_____ fires ever. The smoke released by the fires became (3)_____ disaster. On January 1st, Australia's capital recorded the worst pollution it's ever seen, with an air quality index 23 times higher (4)_____ what's considered 'hazardous'. Smoke in the city crept into birthing rooms, stopped MRI machines from working, and (5)_____ a heart attack in one elderly woman who died soon after she stepped off a plane.

SubQuestion No : 20

Q.20 Select the most appropriate option to fill in blank no. 5.

- Ans 1. triggered
 2. was triggered
 3. has triggered
 4. trigger

Question ID : 65497839902

Status : Answered

Chosen Option : 1

Comprehension:

Read the following passage and answer the questions that follow.

Don't let the past shape your future. Most of the events of your life have been shaped by your thoughts, attitude and expectations. If your life doesn't change and doesn't improve, it means that you are not changing your thoughts, attitude and expectations. It is like playing the same movie in your mind, over and again, and enacting it in your real life, time and again.

There is no reason to cling to thoughts, beliefs, attitude and expectations. You can change them if you really want. If you change them, you will start seeing life in a different way, acting in a different way, and consequently, changing the events and situations in your life.

Even if circumstances do not change, or cannot be changed, your attitude would be different, and therefore, the impact of circumstances on you would be different, milder, or even non-existent.

If your thoughts have always been negative, and you keep repeating them, how do you expect to improve your life?

If you start thinking about success, instead of thinking about failure, and keep this way of thinking, in time, these thoughts would affect your life. Learn to be peaceful inside you, and you won't be troubled by external situations or circumstances, even if you cannot change them.

Have faith in yourself, and you will be in a better position to handle the affairs of your life.

Positive thoughts, about a better life, will sooner or later start affecting the present circumstances and situations of your life, and shape for you, a different, better future.

Live in the present moment, not in the past. The past is past. Don't let it affect your present thoughts and feelings and the situations of your future. Live in the present moment, creating new thoughts about health, happiness, and spirituality.

SubQuestion No : 21

Q.21 The one thing you need in order to change your situation and expectations is:

- Ans 1. to live in the glory or miseries of the past
 2. to cling to precious memories and thoughts
 3. the will to change your beliefs
 4. to change your circumstances

Question ID : 65497839905

Status : Answered

Chosen Option : 3

Comprehension:

Read the following passage and answer the questions that follow.

Don't let the past shape your future. Most of the events of your life have been shaped by your thoughts, attitude and expectations. If your life doesn't change and doesn't improve, it means that you are not changing your thoughts, attitude and expectations. It is like playing the same movie in your mind, over and over again, and enacting it in your real life, time and again.

There is no reason to cling to thoughts, beliefs, attitude and expectations. You can change them if you really want. If you change them, you will start seeing life in a different way, acting in a different way, and consequently, changing the events and situations in your life.

Even if circumstances do not change, or cannot be changed, your attitude would be different, and therefore, the impact of circumstances on you would be different, milder, or even non-existent.

If your thoughts have always been negative, and you keep repeating them, how do you expect to improve your life?

If you start thinking about success, instead of thinking about failure, and keep this way of thinking, in time, these thoughts would affect your life. Learn to be peaceful inside you, and you won't be troubled by external situations or circumstances, even if you cannot change them.

Have faith in yourself, and you will be in a better position to handle the affairs of your life. Positive thoughts, about a better life, will sooner or later start affecting the present circumstances and situations of your life, and shape for you, a different, better future.

Live in the present moment, not in the past. The past is past. Don't let it affect your present thoughts and feelings and the situations of your future. Live in the present moment, creating new thoughts about health, happiness, and spirituality.

SubQuestion No : 22

Q.22 Which of the following are important for improving your life?

- a. Changing your circumstances
- b. Changing your attitude towards the past
- c. Enacting happenings many times in your thoughts
- d. Having faith that better things will happen
- e. Seeing life from a different viewpoint

Ans ✓ 1. b, d, e

✗ 2. c, d, e

✗ 3. a, c, e,

✗ 4. a, b, d

Question ID : 65497839906

Status : Answered

Chosen Option : 1

Comprehension:

Read the following passage and answer the questions that follow.

Don't let the past shape your future. Most of the events of your life have been shaped by your thoughts, attitude and expectations. If your life doesn't change and doesn't improve, it means that you are not changing your thoughts, attitude and expectations. It is like playing the same movie in your mind, over and over again, and enacting it in your real life, time and again.

There is no reason to cling to thoughts, beliefs, attitude and expectations. You can change them if you really want. If you change them, you will start seeing life in a different way, acting in a different way, and consequently, changing the events and situations in your life.

Even if circumstances do not change, or cannot be changed, your attitude would be different, and therefore, the impact of circumstances on you would be different, milder, or even non-existent.

If your thoughts have always been negative, and you keep repeating them, how do you expect to improve your life?

If you start thinking about success, instead of thinking about failure, and keep this way of thinking, in time, these thoughts would affect your life. Learn to be peaceful inside you, and you won't be troubled by external situations or circumstances, even if you cannot change them.

Have faith in yourself, and you will be in a better position to handle the affairs of your life. Positive thoughts, about a better life, will sooner or later start affecting the present circumstances and situations of your life, and shape for you, a different, better future.

Live in the present moment, not in the past. The past is past. Don't let it affect your present thoughts and feelings and the situations of your future. Live in the present moment, creating new thoughts about health, happiness, and spirituality.

SubQuestion No : 23

Q.23 Match the words from the passage with their meanings.

Word Meaning

1. shape (verb) a. the quality of being deeply connected to God
2. enact b. put into practice
3. spirituality c. influence or give form to something

- Ans**
- 1. 1 - b, 2 - a, 3 - c
 - 2. 1 - c, 2 - a, 3 - b
 - 3. 1 - a, 2 - b, 3 - c
 - 4. 1 - c, 2 - b, 3 - a

Question ID : 65497839908

Status : Answered

Chosen Option : 4

Comprehension:

Read the following passage and answer the questions that follow.

Don't let the past shape your future. Most of the events of your life have been shaped by your thoughts, attitude and expectations. If your life doesn't change and doesn't improve, it means that you are not changing your thoughts, attitude and expectations. It is like playing the same movie in your mind, over and over again, and enacting it in your real life, time and again.

There is no reason to cling to thoughts, beliefs, attitude and expectations. You can change them if you really want. If you change them, you will start seeing life in a different way, acting in a different way, and consequently, changing the events and situations in your life.

Even if circumstances do not change, or cannot be changed, your attitude would be different, and therefore, the impact of circumstances on you would be different, milder, or even non-existent.

If your thoughts have always been negative, and you keep repeating them, how do you expect to improve your life?

If you start thinking about success, instead of thinking about failure, and keep this way of thinking, in time, these thoughts would affect your life. Learn to be peaceful inside you, and you won't be troubled by external situations or circumstances, even if you cannot change them.

Have faith in yourself, and you will be in a better position to handle the affairs of your life. Positive thoughts, about a better life, will sooner or later start affecting the present circumstances and situations of your life, and shape for you, a different, better future.

Live in the present moment, not in the past. The past is past. Don't let it affect your present thoughts and feelings and the situations of your future. Live in the present moment, creating new thoughts about health, happiness, and spirituality.

SubQuestion No : 24

Q.24 Thoughts and attitudes that you repeat and relive affect your life as they:

- Ans**
- 1. bring new situations in life
 - 2. impact what happens in your life
 - 3. act like an enjoyable movie
 - 4. bring changes in you

Question ID : 65497839904

Status : Answered

Chosen Option : 2

Comprehension:

Read the following passage and answer the questions that follow.

Don't let the past shape your future. Most of the events of your life have been shaped by your thoughts, attitude and expectations. If your life doesn't change and doesn't improve, it means that you are not changing your thoughts, attitude and expectations. It is like playing the same movie in your mind, over and over again, and enacting it in your real life, time and again.

There is no reason to cling to thoughts, beliefs, attitude and expectations. You can change them if you really want. If you change them, you will start seeing life in a different way, acting in a different way, and consequently, changing the events and situations in your life.

Even if circumstances do not change, or cannot be changed, your attitude would be different, and therefore, the impact of circumstances on you would be different, milder, or even non-existent.

If your thoughts have always been negative, and you keep repeating them, how do you expect to improve your life?

If you start thinking about success, instead of thinking about failure, and keep this way of thinking, in time, these thoughts would affect your life. Learn to be peaceful inside you, and you won't be troubled by external situations or circumstances, even if you cannot change them.

Have faith in yourself, and you will be in a better position to handle the affairs of your life. Positive thoughts, about a better life, will sooner or later start affecting the present circumstances and situations of your life, and shape for you, a different, better future.

Live in the present moment, not in the past. The past is past. Don't let it affect your present thoughts and feelings and the situations of your future. Live in the present moment, creating new thoughts about health, happiness, and spirituality.

SubQuestion No : 25

Q.25 The greatest advantage of thinking about success is that:

- Ans**
- 1. your positive approach wins over thoughts of failure
 - 2. you start expecting miracles to change your situation
 - 3. you can enjoy many movies and be a happy person
 - 4. you become completely dependent upon your circumstances

Question ID : 65497839907

Status : Answered

Chosen Option : 1

Section : Quantitative Aptitude

Q.1 When an article is sold for ₹474, there is a loss of 21%. The cost price of the article (in ₹) is:

- Ans**
- 1. 750
 - 2. 600
 - 3. 675
 - 4. 625

Question ID : 65497839916

Status : Answered

Chosen Option : 2

Q.2 If the radius of a sphere is increased by 11%, then what is the percentage (correct to two decimal places) increase in its volume?

- Ans**
- 1. 30.98%
 - 2. 33.65%
 - 3. 39.85%
 - 4. 36.76%

Question ID : 65497839812

Status : Answered

Chosen Option : 4

Q.3 By reducing the selling price of an article by ₹900, a profit of 25% turns into a loss of 5%. The original selling price of the article (in ₹) is:

- Ans**
- 1. 3,250
 - 2. 3,550
 - 3. 3,750
 - 4. 3,950

Question ID : 65497840019
Status : Answered
Chosen Option : 3

Q.4 In $\triangle ABC$, AB and AC are produced to points D and E, respectively. If the bisectors of $\angle CBD$ and $\angle BCE$ meet at point O, so that $\angle BOC = 76^\circ$, then find the measure of $\angle A$.

- Ans**
- 1. 104°
 - 2. 14°
 - 3. 28°
 - 4. 42°

Question ID : 65497839928
Status : Answered
Chosen Option : 3

Q.5 The average of 33 numbers is 70. The average of the first 17 numbers is 65 and the average of the last 17 numbers is 74. If the 17th number is excluded, what is the average of the remaining numbers (approximate to one decimal place)?

- Ans**
- 1. 67.5
 - 2. 72.5
 - 3. 70.5
 - 4. 69.5

Question ID : 65497839912
Status : Answered
Chosen Option : 3

Q.6 The ratio of the distance between two places A and B to the distance between places B and C is 3 : 5. A man travels from A to B at 30 km/h and from B to C at x km/h. If his average speed for the entire journey is 40 km/h, then what is the value of $(x - 7)$ (in km/h)?

- Ans**
- 1. 43
 - 2. 49
 - 3. 51
 - 4. 47

Question ID : 65497840026
Status : Answered
Chosen Option : 1

Q.7 A can finish a work in 33 days and B can finish the same work in one-third the time taken by A. Working together, what part of the same work can they finish in 5 days?

- Ans**
- 1. $\frac{14}{33}$
 - 2. $\frac{25}{33}$
 - 3. $\frac{20}{33}$
 - 4. $\frac{24}{7}$

Question ID : 65497839820
Status : Answered
Chosen Option : 3

Q.8 A train covers a distance of 225 km in 2.5 hours at a uniform speed. Find the time (in hours) the train will take to cover a distance of 810 km at the same speed.

- Ans**
- 1. 15
 - 2. 9
 - 3. 10
 - 4. 7

Question ID : 65497839923
Status : Answered
Chosen Option : 2

Q.9 The average weight of P, Q and R is 47 kg. If the average weight of Q and R is 50 kg and that of R and P is 49 kg, then the average weight (in kg) of P and Q is:

- Ans**
- 1. 40
 - 2. 42
 - 3. 49
 - 4. 43

Question ID : 65497839911
Status : Answered
Chosen Option : 1

Q.10 Let $\Delta ABC \sim \Delta PQR$ and $\frac{\text{ar}(\Delta ABC)}{\text{ar}(\Delta QPR)} = \frac{25}{169}$. If $AB = 15$ cm, $BC = 7$ cm and $AC = 8$ cm, then PQ (in cm) is equal to:

- Ans**
- 1. 52
 - 2. 39
 - 3. 26
 - 4. 21

Question ID : 65497839827
Status : Answered
Chosen Option : 2

Q.11 If the five-digit number 235xy is divisible by 3, 7 and 11, then what is the value of $(x - y)$?

- Ans
- 1. 5
 - 2. 6
 - 3. 2
 - 4. 4

Question ID : 65497840011
Status : Answered
Chosen Option : 4

Q.12 A text book is marked at ₹480 and is sold for ₹420. What is the percentage of discount?

- Ans
- 1. 10.5%
 - 2. 12.5%
 - 3. 11.7%
 - 4. 13.2%

Question ID : 65497839811
Status : Answered
Chosen Option : 2

Q.13 A number is decreased by 30%, then increased by 27% and then further increased by 20%. What is the net increase/decrease percentage in the number (correct to the nearest integer)?

- Ans
- 1. 3% decrease
 - 2. 5% decrease
 - 3. 7% increase
 - 4. 4% increase

Question ID : 65497839915
Status : Answered
Chosen Option : 3

Q.14 A invested 30% more than B. B invested 40% less than C, who invested ₹8,000. The total amount invested (in ₹) by all of them together is:

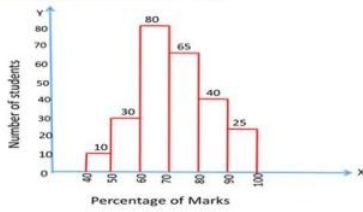
- Ans
- 1. 10,490
 - 2. 10,049
 - 3. 14,900
 - 4. 19,040

Question ID : 65497839817
Status : Answered
Chosen Option : 4

Q.15 Study the given histogram and answer the question that follows.

The histogram represents the percentage of marks scored by a number of students in the class X Board Examination in 2018 in a school.

Total number of students = 250.



The number of students who have secured less than 60% of marks is approximately what percentage more than number of students who have secured 90% marks and above?

- Ans**
- 1. 40%
 - 2. 50%
 - 3. 60%
 - 4. 75%

Question ID : 65497839933
Status : Answered
Chosen Option : 3

Q.16 The area of a circle is 38.5cm^2 . Find its circumference (in cm).

(Use $\pi = \frac{22}{7}$)

- Ans**
- 1. 77
 - 2. 22
 - 3. 11
 - 4. 118

Question ID : 65497840176
Status : Answered
Chosen Option : 2

Q.17 If $x - y + z = 0$, then what is the value of $(x^2 + yz) \div (x^2 + y^2 + z^2)$?

- Ans**
- 1. -1
 - 2. 1
 - 3. $\frac{1}{2}$
 - 4. $-\frac{1}{2}$

Question ID : 65497840180
Status : Answered
Chosen Option : 3

Q.18 Two numbers are 30% and 50%, respectively, more than a third number. The ratio of the second number to the first number is:

- Ans**
- ✓ 1. 15 : 13
 - ✗ 2. 11 : 15
 - ✗ 3. 7 : 15
 - ✗ 4. 11 : 13

Question ID : 65497839918
Status : Answered
Chosen Option : 1

Q.19 If $\cos^2\theta - \sin^2\theta - 3\cos\theta + 2 = 0$, $0^\circ < \theta < 90^\circ$, then what is the value of $5\cos\theta - \frac{\tan\theta}{2}$?

- Ans**
- ✗ 1. $\frac{5+\sqrt{3}}{2}$
 - ✗ 2. $\frac{3-\sqrt{3}}{2}$
 - ✓ 3. $\frac{5-\sqrt{3}}{2}$
 - ✗ 4. $\frac{3+\sqrt{3}}{2}$

Question ID : 65497839930
Status : Answered
Chosen Option : 3

Q.20 If 8A5146B is divisible by 88, then what is the value of A^B ?

- Ans**
- ✓ 1. 81
 - ✗ 2. 64
 - ✗ 3. 90
 - ✗ 4. 121

Question ID : 65497839910
Status : Answered
Chosen Option : 1

Q.21 The simple interest on a certain sum is 50% of the sum in 8 years at a certain rate per cent p.a. What will be the interest (in ₹) on a sum of ₹7,200 at the same rate in $5\frac{2}{3}$ years at simple interest?

- Ans**
- ✗ 1. 1,950
 - ✗ 2. 1,260
 - ✓ 3. 2,550
 - ✗ 4. 1,875

Question ID : 65497840022
Status : Answered
Chosen Option : 3

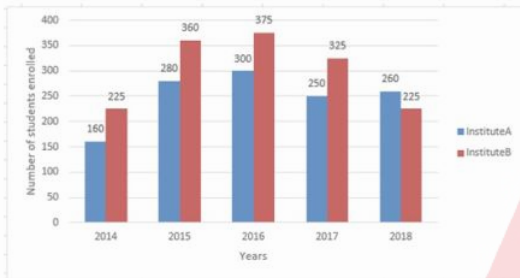
Q.22 The value of $\frac{0.49 - 0.7 \times 0.8 + 0.64}{0.512 + 0.343}$ is:

Ans

- ✓ 1. $\frac{2}{3}$
- ✗ 2. $\frac{10}{3}$
- ✗ 3. $\frac{25}{3}$
- ✗ 4. $\frac{13}{3}$

Question ID : 65497839824
 Status : Answered
 Chosen Option : 1

Q.23 The given bar graph shows the number of students enrolled in institutes A and B during 5 years (2014 to 2018). Study the bar graph and answer the question that follows.



What is the difference between the average number of students enrolled in institute B during the five years and the average number of students enrolled in institute A during the five years?

- Ans
- ✗ 1. 30
 - ✓ 2. 52
 - ✗ 3. 50
 - ✗ 4. 49

Question ID : 65497839829
 Status : Answered
 Chosen Option : 2

Q.24 Study the given table and answer the question that follows.

The table shows the production of different types of cars A, B, C, D and E (in thousands) from 2012 to 2016.

Cars	Years				
	2012	2013	2014	2015	2016
A	46	53	56	58	67
B	50	65	67	66	72
C	43	54	55	47	51
D	47	52	61	65	74
E	48	58	63	64	67

What is the ratio of the total production of type A cars in 2014 and type E cars in 2015 to the total production of type C and D cars in 2012?

- Ans**
- 1. 11 : 12
 - 2. 9 : 11
 - 3. 4 : 3
 - 4. 5 : 6

Question ID : 65497840135
Status : Answered
Chosen Option : 3

Q.25 A can complete a work in 18 days. If B is only 90% efficient as compared to A, then in how many days will B alone complete the same work?

- Ans**
- 1. 21
 - 2. 19
 - 3. 17
 - 4. 20

Question ID : 65497840175
Status : Answered
Chosen Option : 4

Section : **General awareness**

Q.1 In which of the following countries did Indian boxer Amit Panghal win the bronze medal at the Governor's Cup in April 2021?

- Ans**
- 1. Spain
 - 2. Russia
 - 3. Italy
 - 4. India

Question ID : 65497839958
Status : Not Answered
Chosen Option : --

Q.2 Acid rain is caused by the chemical reaction that begins when compounds like sulphur dioxides and _____ are released into the air.

- Ans**
- 1. nitrogen oxides
 - 2. ferric oxides
 - 3. zinc oxides
 - 4. calcium oxides

Question ID : 65497839942
Status : Answered
Chosen Option : 1

Q.3 Which of the following Articles of the Indian Constitution had been amended by the Second Amendment Act, 1952?

- Ans** 1. Article 81
 2. Article 13
 3. Article 144
 4. Article 109

Question ID : **65497840059**
Status : **Not Answered**
Chosen Option : --

Q.4 In which of the following countries was the G20 Tourism Ministers' Meeting held in May 2021, in which Prahlad Singh Patel participated virtually?

- Ans** 1. Germany
 2. Russia
 3. Italy
 4. Canada

Question ID : **65497840041**
Status : **Not Answered**
Chosen Option : --

Q.5 Which of the following is the highest mountain in Myanmar?

- Ans** 1. Hkakabo Razi
 2. Loi Lan
 3. Loi Leng
 4. Hkaru Bum

Question ID : **65497840049**
Status : **Not Answered**
Chosen Option : --

Q.6 Garia Puja of Tripura is celebrated for how many days in April?

- Ans** 1. 2
 2. 12
 3. 7
 4. 9

Question ID : **65497839935**
Status : **Not Answered**
Chosen Option : --

Q.7 A _____ is an electrical device that converts alternating current to direct current which flows only in one direction.

- Ans
- 1. voltmeter
 - 2. ammeter
 - 3. transformer
 - 4. rectifier

Question ID : 65497840042
Status : Answered
Chosen Option : 4

Q.8 Plant and animal communities living together in similar climatic conditions are called _____.

- Ans
- 1. biome
 - 2. environment
 - 3. biosphere
 - 4. habitat

Question ID : 65497839839
Status : Answered
Chosen Option : 1

Q.9 Which of the following is the longest and biggest river in Nagaland?

- Ans
- 1. Dikhu
 - 2. Doyang
 - 3. Dhansiri
 - 4. Tizu

Question ID : 65497839944
Status : Not Answered
Chosen Option : --

Q.10 Who among the following was conferred the Order of Rising Sun, Gold and Silver Rays, by the Japanese Government in April 2021?

- Ans
- 1. Shyamala Ganesh
 - 2. Anamika Mishra
 - 3. Arundhati Subramaniam
 - 4. Sharad Pagare

Question ID : 65497839852
Status : Answered
Chosen Option : 3

Q.11 Who among the following is the head of the state and is the highest formal authority of India?

- Ans
- 1. Vice-President
 - 2. President
 - 3. Prime Minister
 - 4. Chief Minister

Question ID : 65497839955
Status : Answered
Chosen Option : 2

Q.12 To whom among the following is a Bill presented for assent after it has been passed by both the Houses of the Parliament?

- Ans
- 1. Prime Minister
 - 2. President
 - 3. Vice President
 - 4. Chief Justice

Question ID : 65497839854
Status : Answered
Chosen Option : 2

Q.13 In which of the following years did Shah Alam grant the Diwani of Bengal province, i.e. the responsibility of collecting revenue, to the East India Company?

- Ans
- 1. 1809
 - 2. 1765
 - 3. 1846
 - 4. 1723

Question ID : 65497839949
Status : Not Answered
Chosen Option : --

Q.14 Who among the following has written the novel 'Right Under Your Nose'?

- Ans
- 1. Arundhati Roy
 - 2. Shashi Tharoor
 - 3. R Giridharan
 - 4. Ramesh Kandula

Question ID : 65497840054
Status : Not Answered
Chosen Option : --

Q.15 Which of the following crops is NOT suitable to be grown in laterite soils?

- Ans
- 1. Tea
 - 2. Coffee
 - 3. Jute
 - 4. Groundnut

Question ID : 65497839843
Status : Answered
Chosen Option : 3

Q.16 In which of the following years did the British suffer defeat in the Battle of Chinhat?

- Ans
- 1. 1845
 - 2. 1834
 - 3. 1823
 - 4. 1857

Question ID : 65497840053
Status : Not Answered
Chosen Option : --

Q.17 In 1954, in which of the following states did the Indian Government decide to integrate Chandranagar (also called Chandernagore), which was under the rule of the French?

- Ans
- 1. Odisha
 - 2. Madhya Pradesh
 - 3. Tamil Nadu
 - 4. West Bengal

Question ID : 65497839950
Status : Answered
Chosen Option : 1

Q.18 Tapu dance is a tribal dance of which of the following states?

- Ans
- 1. Assam
 - 2. Himachal Pradesh
 - 3. Nagaland
 - 4. Arunachal Pradesh

Question ID : 65497839934
Status : Not Answered
Chosen Option : --

Q.19 Who among the following became the Finance Secretary in April 2021?

- Ans
- 1. MK Jain
 - 2. T Rabi Sankar
 - 3. TV Somanathan
 - 4. Ajay Bhushan Pandey

Question ID : 65497839953
Status : Answered
Chosen Option : 3

Q.20 Which of the following schemes aims to enable Micro Finance Institutions, Non-Banking Financial Institutions/Companies, Small Finance Banks, RBRs, Commercial Banks and Cooperative Banks to provide small loans to non-corporate non-farm micro/small enterprises and individuals engaged in income-generating businesses?

- Ans**
- 1. Pradhan Mantri Jan Dhan Yojana
 - 2. Pradhan Mantri Mudra Yojana
 - 3. Pradhan Mantri Suraksha Bima Yojana
 - 4. Pradhan Mantri Vaya Vandana Yojana

Question ID : 65497839937
Status : Answered
Chosen Option : 2

Q.21 Which of the following parasites are responsible for malaria in humans?

- Ans**
- 1. Plasmodium
 - 2. Ectoparasites
 - 3. Helminths
 - 4. Giardia

Question ID : 65497839943
Status : Answered
Chosen Option : 1

Q.22 In which of the following states is the Parvat Dhara Yojna being implemented in ten districts to rejuvenate and recharge aquifers and conserve natural resources of water as of May 2021?

- Ans**
- 1. Himachal Pradesh
 - 2. Uttar Pradesh
 - 3. Madhya Pradesh
 - 4. Uttarakhand

Question ID : 65497839938
Status : Answered
Chosen Option : 4

Q.23 Which of the following metal traces were found in chemical analyses of both Omani copper and Harappan artefacts suggesting a common origin?

- Ans**
- 1. Iron
 - 2. Nickel
 - 3. Tin
 - 4. Zinc

Question ID : 65497839846
Status : Not Answered
Chosen Option : --

Test

Prime

By Adda247

Previous Year Papers PDF

PRACTICE MORE, SCORE HIGHER!



Free
25,000+
PDF's

High-Quality | Exam-Wise | Updated Regularly

ATTEMPT AS
MOCK



Turn PDFs into real exam experience.
Analyze. Improve. Succeed.



Topic-wise & Exam-wise PDFs



Download & Study Offline



Attempt as Mock & Track Score



Smart Analysis & Performance

AVAILABLE IN



Banking



SSC



Railway



Teaching



UGC



Agriculture



Nursing



Bihar



UP



Punjab



WB



Odisha



TN



AP & Telangana



Haryana



DOWNLOAD THE APP



Q.24 Which of the following forts is located in Karnataka which was built by Sultan Alla-Ud Din Bahman?

- Ans
- 1. Tarkash Mahal
 - 2. Mirjan Fort
 - 3. Allahabad Fort
 - 4. Bidar Fort

Question ID : 65497839834
Status : Not Answered
Chosen Option : --

Q.25 _____ is defined as number of females per thousand males.

- Ans
- 1. Base population
 - 2. Rate of population
 - 3. Sex-ratio
 - 4. Density of population

Question ID : 65497839946
Status : Answered
Chosen Option : 3