

Combined Higher Secondary Level Examination 2020 (Tier-I)

Roll Number	
Candidate Name	
Venue Name	
Exam Date	12/08/2021
Exam Time	3:00 PM - 4:00 PM
Subject	Combined Higher Secondary Level Exam 2020

Section : English Language

Q.1 Select the most appropriate **ANTONYM** of the given word.

Traditional

- Ans
- 1. Earthly
 - 2. Customary
 - 3. Modern
 - 4. Conventional

Question ID : 6549787448
Status : Answered
Chosen Option : 3

Q.2 Select the option which means the same as the group of words given.

A hunting weapon which comes back, used by Australian Aborigines

- Ans
- 1. harpoon
 - 2. cutlass
 - 3. slingshot
 - 4. boomerang

Question ID : 6549788464
Status : Not Answered
Chosen Option : --

Q.3 The following sentence has been split into four segments. Identify the segment that contains a grammatical error.

It would be / more better if / she sang / with an orchestra.

- Ans
- 1. more better if
 - 2. she sang
 - 3. with an orchestra
 - 4. It would be

Question ID : 6549787436
Status : Answered
Chosen Option : 1

**Test
Prime**

By Adda247

ALL EXAMS, ONE SUBSCRIPTION



Test. Analyze. Improve. Repeat.



Don't just *prepare*. *Perform*.

Test Prime — built only for mock tests.



1,50,000+
Mock Tests



25,000+
Previous Year Papers



800+
Exam Covered



500% Refund
on Selection



5 lakh+
Free Quizzes



Daily
Free PDFs



Job Alerts
Stay Updated

- Multilingual
- Detailed Solution
- Strong and Weak Areas



**All India
Rankings**

Compete with lakhs.
Rank. Improve. Repeat.



← Adda247 test prime

Rating ▾

Editors' choice

New



Adda247 Test Prime
Adda Education • Education
📌 Installed



DOWNLOAD THE APP



Q.4 Select the option that expresses the given sentence in reported speech.

"Our teacher returned from Mumbai last month", she said.

- Ans
- 1. She said that her teacher had returned from Mumbai the earlier month.
 - 2. Her teacher returned from Mumbai last month, she said.
 - 3. She said that their teacher had returned from Mumbai the previous month.
 - 4. She said that her teacher had returned from Mumbai the previous month.

Question ID : 6549787435
Status : Answered
Chosen Option : 4

Q.5 Select the correct passive form of the given sentence.

In the evening we water the plants.

- Ans
- 1. The plants will be watered in the evening.
 - 2. The plants are watered in the evening.
 - 3. The plants have been watered in the evening.
 - 4. The plants were watered in the evening.

Question ID : 6549788444
Status : Answered
Chosen Option : 2

Q.6 Select the option that can be used as a one-word substitute for the given group of words.

Causing a strong dislike

- Ans
- 1. Redundant
 - 2. Repulsive
 - 3. Hateful
 - 4. Revealing

Question ID : 6549787455
Status : Answered
Chosen Option : 2

Q.7 Select the most appropriate option to substitute the underlined segment in the given sentence. If there is no need to substitute it, select 'No substitution'.

Mr. Sharma is kind as his father.

- Ans
- 1. as kind as
 - 2. No substitution
 - 3. the kindest as
 - 4. kinder as

Question ID : 6549788456
Status : Answered
Chosen Option : 1

Q.8 Select the most appropriate meaning of the given idiom.

Not one's cup of tea

- Ans
- 1. Not absolutely true
 - 2. Not according to one's interest
 - 3. Beyond one's comprehension
 - 4. Of no concern for someone

Question ID : 6549788461

Status : Answered

Chosen Option : 3

Q.9 Given below are four jumbled sentences. Out of the given options, pick the one that gives their correct order.

- A. The man who had caught me was a dreadful sight.
- B. Suddenly I was picked up, whirled through the air, and made to sit on a tombstone.
- C. He was about forty years old, hard-faced and fierce.
- D. I was only a child, and small for my age.

- Ans
- 1. CBAD
 - 2. BACD
 - 3. DBAC
 - 4. DCBA

Question ID : 6549788455

Status : Answered

Chosen Option : 2

Q.10 Sentences of a paragraph are given below in jumbled order. Arrange the sentences in the right order to form a meaningful and coherent paragraph.

- A. The whole area has been designed like a garden from Alice in Wonderland.
- B. It's about having fun and learning, too; all the activities help to explain the modern world of technology to the young visitors.
- C. But 'The World of Children' isn't just about playing games and having joy rides.
- D. There are several different attractions in this vast area and there is a lot to see and do.

- Ans
- 1. DACB
 - 2. BCDA
 - 3. CBDA
 - 4. ADBC

Question ID : 6549787444

Status : Answered

Chosen Option : 4

Q.11 Select the INCORRECTLY spelt word.

- Ans
- 1. rogue
 - 2. rocket
 - 3. rockiry
 - 4. roaster

Question ID : 6549788462
Status : Answered
Chosen Option : 3

Q.12 Select the most appropriate option to fill in the blank.

Scientists all over the world are engaged in _____ how to find a vaccine for COVID-19.

- Ans
- 1. researching
 - 2. scrutinizing
 - 3. investigating
 - 4. inspecting

Question ID : 6549788469
Status : Answered
Chosen Option : 1

Q.13 Select the most appropriate synonym of the given word.

REPULSIVE

- Ans
- 1. respectable
 - 2. disgusting
 - 3. attractive
 - 4. agreeable

Question ID : 6549788467
Status : Answered
Chosen Option : 2

Q.14 Select the most appropriate option to substitute the underlined segment in the given sentence. If there is no need to substitute it, select 'No substitution required'.

He won't come to the party unless you will invite him personally.

- Ans
- 1. would invite
 - 2. invite
 - 3. No substitution required
 - 4. invited

Question ID : 6549787447
Status : Answered
Chosen Option : 2

Q.15 Select the most appropriate meaning of the idiomatic expression given.

To cross one's mind

- Ans
- 1. To forget something
 - 2. To put a thought away from one's mind
 - 3. To move from one idea to another
 - 4. To think of something

Question ID : 6549787450
Status : Answered
Chosen Option : 4

Q.16 Select the most appropriate word to fill in the blank.

The marking of answer papers is _____ out by the course teacher.

- Ans
- 1. done
 - 2. carried
 - 3. checked
 - 4. crossed

Question ID : 6549787458
Status : Answered
Chosen Option : 3

Q.17 Select the most appropriate ANTONYM of the given word.

BUOYANT

- Ans
- 1. enthusiastic
 - 2. lively
 - 3. weighted
 - 4. bouncy

Question ID : 6549788459
Status : Answered
Chosen Option : 3

Q.18 Select the INCORRECTLY spelt word.

- Ans
- 1. Terrible
 - 2. Uprooted
 - 3. Haunted
 - 4. Tendansy

Question ID : 6549787453
Status : Answered
Chosen Option : 4

Q.19 In the given sentence, identify the segment which contains the grammatical error.

Cyclone Amphan roared into West Bengal on Wednesday leave behind a trail of devastation across a large area of the State.

- Ans
- 1. leave behind
 - 2. a trail of devastation
 - 3. roared into West Bengal
 - 4. across a large area

Question ID : 6549788447
Status : Answered
Chosen Option : 1

Q.20 Select the most appropriate synonym of the given word.

Ban

- Ans
- 1. Ascertain
 - 2. Prohibit
 - 3. Abandon
 - 4. Band

Question ID : 6549787456
Status : Answered
Chosen Option : 2

Comprehension:

In the following passage some words have been deleted. Fill in the blanks with the help of the alternatives given. Select the most appropriate option for each blank.

Every Monday, on his way back from work, Bepin Chaudhury would drop in at KaliCharan's in New Market (1)_____ books. Crime stories, ghost stories, and thrillers. (2)_____ had to buy at least five at a time to last him (3)_____ the week. He lived alone, was not a good mixer, had few (4)_____, and didn't like spending time in idle chat. Today, at KaliCharan's, Bepin Babu had a (5)_____ that somebody was observing him from close quarters.

SubQuestion No : 21

Q.21 Select the most appropriate option for blank no. 1.

- Ans
- 1. buying
 - 2. bought
 - 3. to buy
 - 4. buy

Question ID : 6549788449
Status : Answered
Chosen Option : 3

Comprehension:

In the following passage some words have been deleted. Fill in the blanks with the help of the alternatives given. Select the most appropriate option for each blank.

Every Monday, on his way back from work, Bepin Chaudhury would drop in at KaliCharan's in New Market (1)_____ books. Crime stories, ghost stories, and thrillers. (2)_____ had to buy at least five at a time to last him (3)_____ the week. He lived alone, was not a good mixer, had few (4)_____, and didn't like spending time in idle chat. Today, at KaliCharan's, Bepin Babu had a (5)_____ that somebody was observing him from close quarters.

SubQuestion No : 22

Q.22 Select the most appropriate option for blank no. 2.

- Ans
- 1. They
 - 2. He
 - 3. Him
 - 4. She

Question ID : 6549788450

Status : Answered

Chosen Option : 2

Comprehension:

In the following passage some words have been deleted. Fill in the blanks with the help of the alternatives given. Select the most appropriate option for each blank.

Every Monday, on his way back from work, Bepin Chaudhury would drop in at KaliCharan's in New Market (1)_____ books. Crime stories, ghost stories, and thrillers. (2)_____ had to buy at least five at a time to last him (3)_____ the week. He lived alone, was not a good mixer, had few (4)_____, and didn't like spending time in idle chat. Today, at KaliCharan's, Bepin Babu had a (5)_____ that somebody was observing him from close quarters.

SubQuestion No : 23

Q.23 Select the most appropriate option for blank no. 3.

- Ans
- 1. within
 - 2. through
 - 3. across
 - 4. by

Question ID : 6549788451

Status : Answered

Chosen Option : 1

Comprehension:

In the following passage some words have been deleted. Fill in the blanks with the help of the alternatives given. Select the most appropriate option for each blank.

Every Monday, on his way back from work, Bepin Chaudhury would drop in at KaliCharan's in New Market (1)_____ books. Crime stories, ghost stories, and thrillers. (2)_____ had to buy at least five at a time to last him (3)_____ the week. He lived alone, was not a good mixer, had few (4)_____, and didn't like spending time in idle chat. Today, at KaliCharan's, Bepin Babu had a (5)_____ that somebody was observing him from close quarters.

SubQuestion No : 24

Q.24 Select the most appropriate option for blank no. 4.

- Ans
- 1. friends
 - 2. students
 - 3. servants
 - 4. followers

Question ID : 6549788452

Status : Answered

Chosen Option : 1

Comprehension:

In the following passage some words have been deleted. Fill in the blanks with the help of the alternatives given. Select the most appropriate option for each blank.

Every Monday, on his way back from work, Bepin Chaudhury would drop in at KaliCharan's in New Market (1)_____ books. Crime stories, ghost stories, and thrillers. (2)_____ had to buy at least five at a time to last him (3)_____ the week. He lived alone, was not a good mixer, had few (4)_____, and didn't like spending time in idle chat. Today, at KaliCharan's, Bepin Babu had a (5)_____ that somebody was observing him from close quarters.

SubQuestion No : 25

Q.25 Select the most appropriate option for blank no. 5.

- Ans
- 1. intuition
 - 2. connotation
 - 3. feeling
 - 4. perception

Question ID : 6549788453

Status : Answered

Chosen Option : 1

Q.1 Select the set of classes the relationship among which is best illustrated by the following Venn diagram.



- Ans
- 1. Owls, Mammals, Reptiles
 - 2. Stationery, Pens, Pencils
 - 3. Doctors, Fathers, Brothers
 - 4. Mothers, Engineers, Women

Question ID : 6549787484
 Status : Answered
 Chosen Option : 3

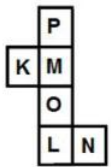
Q.2 Select the option in which the numbers are related in the same way as are the numbers of the following set.

(2, 3, 62)

- Ans
- 1. (8, 5, 225)
 - 2. (7, 4, 226)
 - 3. (5, 9, 288)
 - 4. (6, 4, 122)

Question ID : 6549787464
 Status : Not Answered
 Chosen Option : --

Q.3 A cube is made by folding the given sheet. In the cube so formed, what would be the letter on the opposite side of 'K'?



- Ans
- 1. L
 - 2. P
 - 3. N
 - 4. O

Question ID : 6549787478
 Status : Answered
 Chosen Option : 3

Q.4 Select the option in which the numbers in the set share the same relationship as that shared by the numbers of the given set.

(14, 18, 42)

- Ans 1. (16, 21, 56)
 2. (22, 18, 74)
 3. (20, 15, 100)
 4. (40, 23, 94)

Question ID : 6549788473

Status : Answered

Chosen Option : 1

Q.5 Select the correct combination of mathematical signs to sequentially replace the * signs to balance the following equation.

$40 * 15 * 3 * 72 * 9 = 77$

- Ans 1. $\times, \div, +, -, =$
 2. $+, \div, -, \times, =$
 3. $+, \times, -, \div, =$
 4. $+, \times, \div, -, =$

Question ID : 6549788471

Status : Answered

Chosen Option : 3

Q.6 Three of the following four words are alike in a certain way and one is different. Select the odd one.

- Ans 1. Heart
 2. Lungs
 3. Nose
 4. Liver

Question ID : 6549788486

Status : Answered

Chosen Option : 3

Q.7 Select the correct option that indicates the arrangement of the given words in the order in which they appear in an English dictionary.

1. Industry
2. Indent
3. Indoor
4. Indolent
5. Index

- Ans 1. 2, 1, 3, 5, 4
 2. 2, 5, 4, 3, 1
 3. 2, 4, 5, 3, 1
 4. 1, 2, 3, 5, 4

Question ID : 6549787467

Status : Answered

Chosen Option : 2

Q.8 Select the combination of letters that when sequentially placed in the blanks of the given series will complete the series.

c k _ g k c _ t _ k _ k t g _ c k _ g k

- Ans
- 1. t, k, g, c, k, t
 - 2. t, k, g, c, c, t
 - 3. t, g, k, c, k, t
 - 4. t, k, c, g, k, t

Question ID : 6549786664
Status : Answered
Chosen Option : 1

Q.9 Select the correct mirror image of the given figure when a mirror is placed on the right side of the figure.



- Ans
- 1.
 - 2.
 - 3.
 - 4.



Question ID : 6549788493
Status : Answered
Chosen Option : 4

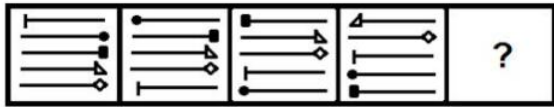
Q.10 Select the option that is related to the fourth number in the same way as the first number is related to the second number and the fifth number is related to the sixth number.

$$127 : 11 :: ? : 16 :: 367 : 19$$

- Ans
- 1. 280
 - 2. 216
 - 3. 262
 - 4. 248

Question ID : 6549787462
Status : Answered
Chosen Option : 3

Q.11 Select the figure from among the given options that can replace the question mark (?) in the following series.



Ans

- 1.
- 2.
- 3.
- 4.

Question ID : 6549787479
Status : Answered
Chosen Option : 1

Q.12 Select the number that can replace the question mark (?) in the following series.

25, 26, 53, 160, 641, ?

- Ans
- 1. 3403
 - 2. 3202
 - 3. 2908
 - 4. 3206

Question ID : 6549788475
Status : Answered
Chosen Option : 4

Q.13 Four letter-clusters have been given, out of which three are alike in some manner and one is different. Select the letter-cluster that is different.

- Ans
- 1. HNTZ
 - 2. AGMS
 - 3. IPVA
 - 4. VBHN

Question ID : 6549787475
Status : Answered
Chosen Option : 3


Q.14 Select the option that is related to the third letter-cluster in the same way as the second letter-cluster is related to the first letter-cluster.

AZW : GFC :: LSM : ?

- Ans
- 1. RXY
 - 2. QOS
 - 3. RYS
 - 4. DMT

Question ID : 6549788480
Status : Answered
Chosen Option : 3

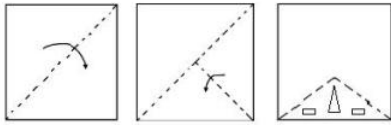
Q.15 How many triangles are there in the given figure?



- Ans
- 1. 15
 - 2. 17
 - 3. 16
 - 4. 14

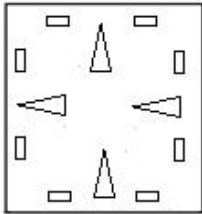
Question ID : 6549787480
Status : Answered
Chosen Option : 1

Q.16 A piece of paper is folded and cut as shown below in the question figures. Select from the option figures, how it will appear when unfolded.

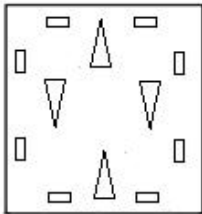


Ans

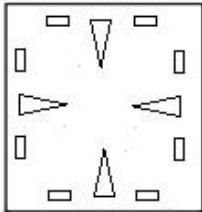
1.



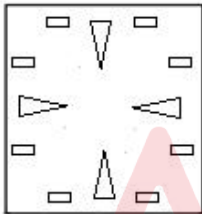
2.



3.



4.



Question ID : 6549788492

Status : Answered

Chosen Option : 3

Q.17 In a certain code language, 'FROZEN' is coded as '504' and 'TONSILS' is coded as '756'. How will 'MARINE' be coded in that language?

Ans 1. 360

2. 652

3. 520

4. 456

Question ID : 6549787469

Status : Answered

Chosen Option : 1

Q.18 In a code language, TOUCH is written as UTOHC. How will PLANT be written in that language?

- Ans
- 1. QMBOU
 - 2. TPANM
 - 3. ALRPT
 - 4. TPNLA

Question ID : 6549788478

Status : Answered

Chosen Option : 4

Q.19 Two statements are given, followed by three conclusions numbered I, II and III. Assuming the statements to be true, even if they seem to be at variance with commonly known facts, decide which of the conclusions logically follow(s) from the statements.

Statements:

No field is a house.

All fields are parks.

Conclusions:

I. No house is a field.

II. Some parks are fields.

III. Some houses are fields.

- Ans
- 1. Only conclusion II follows
 - 2. All the conclusions follow
 - 3. Only conclusions II and III follow
 - 4. Only conclusions I and II follow

Question ID : 6549788487

Status : Answered

Chosen Option : 4

Q.20 Four number-pairs have been given, out of which three are alike in some manner and one is different. Select the number-pair that is different.

- Ans
- 1. 7 : 63
 - 2. 5 : 35
 - 3. 13 : 195
 - 4. 19 : 324

Question ID : 6549787466

Status : Answered

Chosen Option : 4

Q.21 In a class of 68 students, 34 students participated only in Debate and 8 students participated in both Quiz and Debate. If every student of the class has participated in at least one of these two competitions, how many students participated in Quiz?

- Ans
- 1. 26
 - 2. 34
 - 3. 30
 - 4. 22

Question ID : 6549787460
Status : Answered
Chosen Option : 2

Q.22 If 'A & B' means 'A is the father of B' and 'A @ B' means 'A is the sister of B', then which of the following expressions means 'H is the father of M'?

- Ans
- 1. K & H @ P @ M
 - 2. M & K @ P @ H
 - 3. H & K @ P @ M
 - 4. H @ K @ P & M

Question ID : 6549787675
Status : Not Answered
Chosen Option : --

Q.23 Select the option in which the words share the same relationship as that shared by the given pair of words.

Astronomy : Stars

- Ans
- 1. Seismology : Theatre
 - 2. Psychology : Cells
 - 3. Numismatics : Coins
 - 4. Philology : Texture

Question ID : 6549787474
Status : Answered
Chosen Option : 3

Q.24 'East' is related to 'Direction' in the same way as 'Summer' is related to '_____'.

- Ans
- 1. Season
 - 2. Room Cooler
 - 3. Heat
 - 4. Temperature

Question ID : 6549788481
Status : Answered
Chosen Option : 1

Q.25 Select the option figure which contains figure X embedded in it as its part (rotation is NOT allowed).

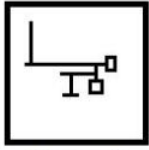
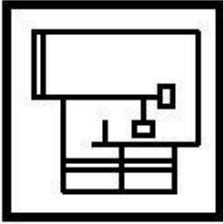


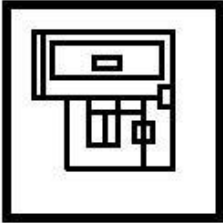
Figure X

Ans

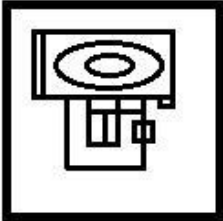
✗ 1.



✓ 2.



✗ 3.



✗ 4.



Question ID : 6549788491
 Status : Not Answered
 Chosen Option : --

Q.1 24% of Reena's salary is equal to 38% of Sunita's salary. Veena's salary is two-third of the total salary of Reena and Sunita. If Veena's salary is ₹62,000, then Sunita's salary is:

- Ans
- 1. ₹35,000
 - 2. ₹32,000
 - 3. ₹38,000
 - 4. ₹36,000

Question ID : 6549787490
Status : Answered
Chosen Option : 4



Q.2 Study the given bar graphs and answer the question that follows.

The bar graphs represent the amount invested in raw materials (in ₹ crore) and the sale of the products, by a textile company in the years 2007– 2012. The X-axis represents the years. The Y-axis represents the amount invested in raw materials (in ₹ crore) in figure 1 and sale of products in figure 2, respectively.

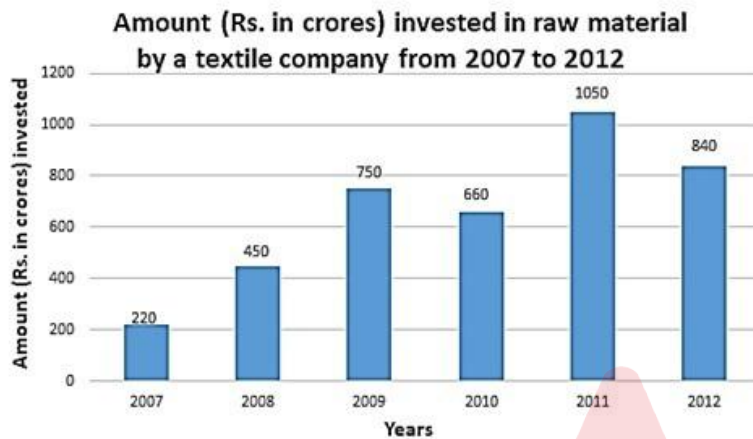


Figure 1



Figure 2

In which year was there a maximum percentage increase in the sales of products as compared to the previous year?

- Ans
- 1. 2008
 - 2. 2010
 - 3. 2009
 - 4. 2011

Question ID : 6549786801
Status : Answered
Chosen Option : 3

Q.3 A man invests an amount of ₹1,05,750 at simple interest in the name of his son, daughter and his wife in such a way that they get the same interest after 3, 4 and 5 years, respectively. If the rate of interest is 5% per annum, then the amount invested for the wife is:

- Ans
- 1. ₹27,000
 - 2. ₹28,000
 - 3. ₹25,000
 - 4. ₹30,000

Question ID : 6549787493
Status : Not Answered
Chosen Option : --

Q.4 If a triangle ABC is right-angled at A, then what is the value of $\sin \frac{B+C}{2} \cos \frac{B+C}{2}$?

- Ans
- 1. $\frac{\sqrt{3}}{4}$
 - 2. $\sqrt{2}$
 - 3. $\frac{1}{4}$
 - 4. $\frac{1}{2}$

Question ID : 6549788513
Status : Answered
Chosen Option : 4

Q.5 The sum of all the three sides of an equilateral triangle is $15\sqrt{3} \text{ cm}$. The height of the triangle is:

- Ans
- 1. 7 cm
 - 2. 8 cm
 - 3. 7.5 cm
 - 4. 9 cm

Question ID : 6549787496
Status : Answered
Chosen Option : 3

Q.6 Anu can complete a piece of work in 22 days. Shama is 60% more efficient than Anu. How many days does Shama alone take to complete the same piece of work?

Ans

1. $36\frac{2}{3}$

2. $35\frac{1}{3}$

3. $13\frac{1}{5}$

4. $13\frac{3}{4}$

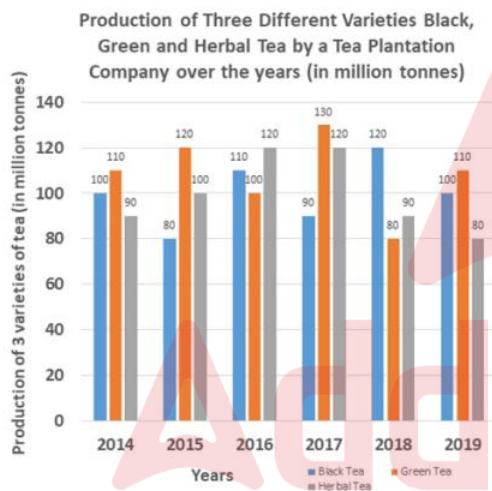
Question ID : 6549788495

Status : Answered

Chosen Option : 4

Q.7 Study the given bar graph and answer the question that follows.

A tea plantation company produces three varieties of tea—black tea, green tea and herbal tea. The production of three varieties (in million tonnes) over a period of six years from 2014 to 2019, has been shown in the bar graph here. The X-axis represents the years and the Y-axis displays the production of the three varieties in million tonnes.



The average production of black tea in 2014, 2015 and 2018 is how much more or less (in million tonnes) than the average production of green tea in 2016, 2017 and 2019?

Ans

1. More, 12.33

2. Less, 12.33

3. Less, 13.33

4. More, 13.33

Question ID : 6549789124

Status : Answered

Chosen Option : 2

Q.8 Two numbers A and B are in the ratio 13 : 17. If A is increased by 15% and B is increased by 30%, then the new ratio of A to B will be:

- Ans**
- 1. 21 : 29
 - 2. 21 : 31
 - 3. 23 : 34
 - 4. 23 : 33

Question ID : 6549787492
Status : Answered
Chosen Option : 3

Q.9 In $\triangle ABC$, $AC = BC$, and the length of the base AB is 10 cm. If $CG = 8$ cm, where G is the centroid, then what is the length of AC?

- Ans**
- 1. 13 cm
 - 2. 15 cm
 - 3. $\sqrt{91}$ cm
 - 4. 12 cm

Question ID : 6549788507
Status : Not Answered
Chosen Option : --

Q.10 A, B, C and D are four positive numbers such that A is $\frac{3}{4}$ times of B, B is $\frac{4}{5}$ times of C, and C is $\frac{3}{8}$ times of D. If the average of 4 times of A and 7 times of D is 316, then the average of all the four numbers A, B, C and D is:

- Ans**
- 1. 36
 - 2. 38
 - 3. 28
 - 4. 34

Question ID : 6549787488
Status : Answered
Chosen Option : 2

Q.11 A car takes 50 minutes to cover a certain distance at a speed of 54 km/h. If the speed is increased by 25%, then how long will it take to cover three-fourth of the same distance?

- Ans**
- 1. 35 minutes
 - 2. 40 minutes
 - 3. 30 minutes
 - 4. 25 minutes

Question ID : 6549787486
Status : Answered
Chosen Option : 3

Q.12 The given pie charts represent the distribution of candidates who enrolled for a bank clerical examination and the candidates (out of those enrolled) who passed the examination, from five different institutes P, Q, R, S and T. Study the pie charts and answer the question that follows.

(i) Total number of candidates who enrolled for the examination from five institutes = 5500

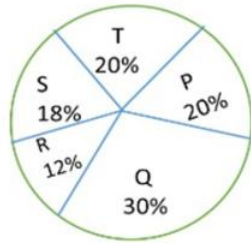


Fig.(i)

(ii) Total number of candidates who passed the examination from five institutes = 3300

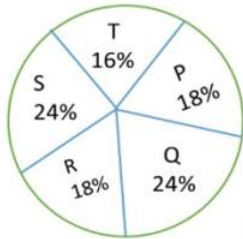


Fig.(ii)

Which institute(s) has/have the highest percentage of candidates passed to the candidates enrolled?

- Ans**
- 1. P
 - 2. S
 - 3. Q and T
 - 4. R

Question ID : 6549787509
Status : Not Answered
Chosen Option : --

Q.13 A rectangle with perimeter 50 cm has its sides in the ratio 1 : 4. What is the perimeter of a square whose area is the same as that of the rectangle?

- Ans**
- 1. 36 cm
 - 2. 50 cm
 - 3. 40 cm
 - 4. 45 cm

Question ID : 6549788497
Status : Answered
Chosen Option : 3

Q.14 If $x^2 + \frac{1}{x^2} = 83$, $x > 0$, then the value of $x^3 - \frac{1}{x^3}$ is:

- Ans
- 1. 756
 - 2. 675
 - 3. 576
 - 4. 746

Question ID : 6549787498
Status : Answered
Chosen Option : 1

Q.15 Two equal circles of radius 8 cm intersect each other such that each passes through the centre of the other. The length of the common chord is:

- Ans
- 1. 8 cm
 - 2. $4\sqrt{3}$ cm
 - 3. $8\sqrt{3}$ cm
 - 4. $8\sqrt{2}$ cm

Question ID : 6549787494
Status : Answered
Chosen Option : 3

Q.16 If $\tan A + \sec A = \frac{3}{2}$ and A is an acute angle, then the value of $\frac{10 \cot A + 13 \cos A}{12 \tan A + 5 \operatorname{cosec} A}$ is:

- Ans
- 1. 5
 - 2. 1
 - 3. 4
 - 4. 2

Question ID : 6549787504
Status : Answered
Chosen Option : 4

Q.17 Two circles with centres O and P and radii 17 cm and 10 cm, respectively, intersect each other at A and B. The length of the common chord AB is 16 cm. What is the perimeter of the triangle OAP (in cm)?

- Ans
- 1. 33
 - 2. 25
 - 3. 48
 - 4. 40

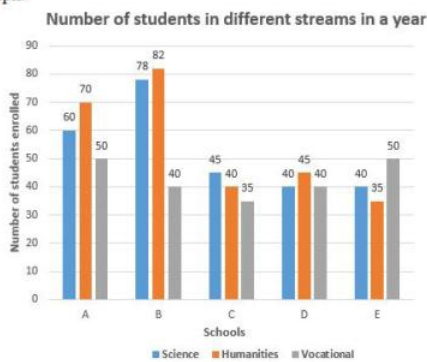
Question ID : 6549788505
Status : Answered
Chosen Option : 3

Q.18 If $x + \frac{1}{x} = \sqrt{13}$, then one of the values of $x^3 - \frac{1}{x^3}$ is :

- Ans
- 1. $4\sqrt{11}$
 - 2. 32
 - 3. $4\sqrt{13}$
 - 4. 36

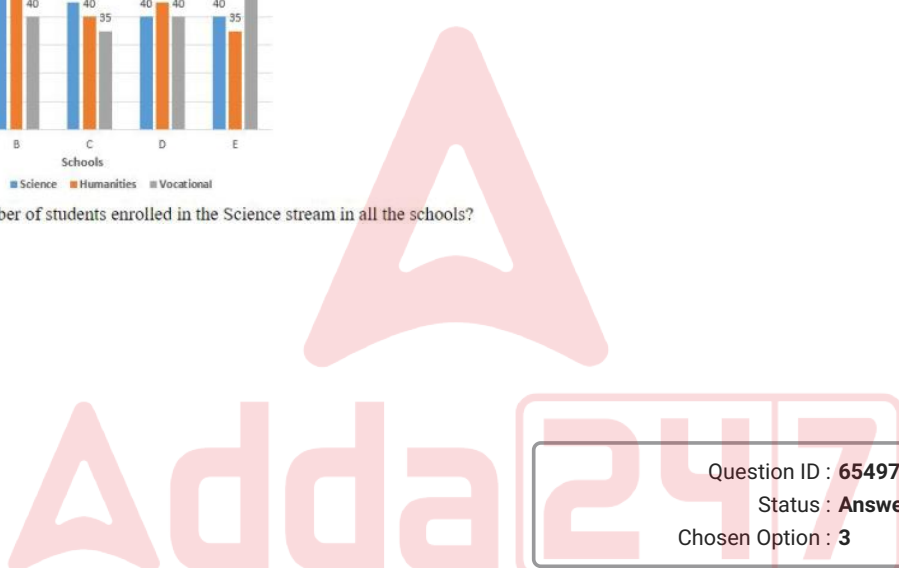
Question ID : 6549788510
 Status : Not Answered
 Chosen Option : --

Q.19 The number of students enrolled in different streams at Senior Secondary level in five schools is shown in the given bar graph.



What is the total number of students enrolled in the Science stream in all the schools?

- Ans
- 1. 267
 - 2. 268
 - 3. 263
 - 4. 257



Question ID : 6549788516
 Status : Answered
 Chosen Option : 3

Q.20 If the nine-digit number '8475639AB' is divisible by 99, then what is the value of A and B?

- Ans
- 1. A = 4, B = 6
 - 2. A = 5, B = 3
 - 3. A = 3, B = 9
 - 4. A = 4, B = 8

Question ID : 6549787501
 Status : Answered
 Chosen Option : 4

Q.21 If $\sec\theta - \operatorname{cosec}\theta = 0$ and θ is an acute angle, then what is the value of $\sec^2\theta + \operatorname{cosec}^2\theta$?

- Ans
- 1. 4
 - 2. 1
 - 3. 2
 - 4. 0

Question ID : 6549788515
Status : Answered
Chosen Option : 1

Q.22 What will be the selling price of an article if two successive discounts of 15% and 12% are offered on its marked price of ₹25,500?

- Ans
- 1. ₹19,074
 - 2. ₹25,041
 - 3. ₹21,165
 - 4. ₹18,615

Question ID : 6549788499
Status : Answered
Chosen Option : 1

Q.23 A shopkeeper sold an article for ₹3,750. If he had charged 24% less, even then he would have earned a profit of 14%. What is the original cost of the article?

- Ans
- 1. ₹2,850
 - 2. ₹2,717
 - 3. ₹3,289
 - 4. ₹2,500

Question ID : 6549788501
Status : Answered
Chosen Option : 4

Q.24 If $x^2 + (4 - \sqrt{3})x - 1 = 0$, then what is the value of $x^2 + \frac{1}{x^2}$?

- Ans
- 1. $9 - 8\sqrt{3}$
 - 2. $21 - 12\sqrt{3}$
 - 3. $21 - 8\sqrt{3}$
 - 4. $17 - 8\sqrt{3}$

Question ID : 6549788509
Status : Answered
Chosen Option : 3

Q.25 Simplify the following expression.

$$5\frac{1}{3} \div \left[7 - 3 \div \left(1 - \frac{1}{4} \right) \times \frac{2}{3} + 1 \right] - 3 \div 1 + 2$$

- Ans
- 1. $\frac{7}{41}$
 - 2. 0
 - 3. 15
 - 4. -4

Question ID : 6549788512
Status : Answered
Chosen Option : 2

Section : General Awareness

Q.1 National Rifle Association of India was founded in:

- Ans
- 1. 1956
 - 2. 1964
 - 3. 1951
 - 4. 1948

Question ID : 6549787532
Status : Answered
Chosen Option : 1

Q.2 Which of the following factors is NOT responsible for soil formation?

- Ans
- 1. Topography
 - 2. Cattle grazing
 - 3. Parent material
 - 4. Biotic agents

Question ID : 6549787524
Status : Answered
Chosen Option : 2

Q.3 Who among the following was NOT included in the ICC Hall of Fame in August 2020?

- Ans
- 1. Graeme Smith
 - 2. Jacques Kallis
 - 3. Zaheer Abbas
 - 4. Lisa Sthalekar

Question ID : 6549787534
Status : Answered
Chosen Option : 4

Q.4 Which of the following Articles of the Constitution of India is related to the oath or affirmation by the President?

- Ans
- 1. Article 57
 - 2. Article 60
 - 3. Article 66
 - 4. Article 54

Question ID : 6549787530
Status : Answered
Chosen Option : 4

Q.5 Rickets and night-blindness are caused by the deficiency of _____ and _____, respectively.

- Ans
- 1. Vitamin D, Vitamin A
 - 2. Vitamin D, Vitamin C
 - 3. Vitamin B1, Vitamin C
 - 4. Vitamin E, Vitamin A

Question ID : 6549787520
Status : Answered
Chosen Option : 1

Q.6 Who among the following foreign travellers is NOT correctly matched with their respective country they hail from?

- Ans
- 1. Marco Polo – Italy
 - 2. Peter Mundy – China
 - 3. Ibn Battuta – Morocco
 - 4. Al-Biruni – Uzbekistan

Question ID : 6549787527
Status : Answered
Chosen Option : 2

Q.7 With which of the following states is the 'Mand' or 'Maand' style of singing associated?

- Ans
- 1. Rajasthan
 - 2. Gujarat
 - 3. Madhya Pradesh
 - 4. Uttar Pradesh

Question ID : 6549787512
Status : Answered
Chosen Option : 1

Q.8 With which country did India hold its 14th Defence Policy Dialogue via video conferencing in August 2020?

- Ans
- 1. The US
 - 2. Japan
 - 3. Singapore
 - 4. China

Question ID : 6549787515
Status : Answered
Chosen Option : 2

Q.9 Which of the following statements is NOT correct about alluvial soil?

- Ans
- 1. Deltas of Mahanadi, the Godavari and the Krishna are made from alluvial soil.
 - 2. Old alluvial is called 'bangar' and new alluvial is called 'khadar'.
 - 3. In the Himalayan region we find alluvial soil.
 - 4. Northern plains are made of alluvial soil.

Question ID : 6549787525
Status : Answered
Chosen Option : 1

Q.10 As of January 2021, GMR Group was associated with which of the following franchises in the Indian Premier League (IPL) cricket tournament?

- Ans
- 1. Delhi Capitals
 - 2. Mumbai Indians
 - 3. Chennai Super Kings
 - 4. Rajasthan Royals

Question ID : 6549788543
Status : Not Answered
Chosen Option : --

Q.11 According to the fundamental rights provided by the Constitution of India, the state is bound to provide free and compulsory education to all children from the age of:

- Ans
- 1. 4 to 15 years
 - 2. 6 to 14 years
 - 3. 4 to 18 years
 - 4. 3 to 18 years

Question ID : 6549788541
Status : Answered
Chosen Option : 2

Q.12 Swollen bluish veins resulting from the valves that do not close properly are called _____.

- Ans
- 1. systemic veins
 - 2. varicose veins
 - 3. deep veins
 - 4. superficial veins

Question ID : 6549788531
Status : Answered
Chosen Option : 2

Q.13 Dogri language is mainly spoken in which of the following states/union territories?

- Ans
- 1. Uttarakhand
 - 2. Jammu and Kashmir
 - 3. Lakshadweep
 - 4. Assam

Question ID : 6549788523
Status : Answered
Chosen Option : 2

Q.14 Which of the following states was popularly known as the 'Land of Gods'? It got a separate identity as a state on 9 November 2000.

- Ans
- 1. Telangana
 - 2. Goa
 - 3. Karnataka
 - 4. Uttarakhand

Question ID : 6549788533
Status : Answered
Chosen Option : 4

Q.15 'Pradhan Mantri Awas Yojana (Urban)-PMAY (U)'s mission is to achieve the goal of Housing for All in urban areas by:

- Ans
- 1. 2020
 - 2. 2023
 - 3. 2022
 - 4. 2021

Question ID : 6549788526
Status : Answered
Chosen Option : 2

Q.16 Which of the following is NOT an example of an optical disk?

- Ans
- 1. Blue Ray Disk
 - 2. PROM
 - 3. CD ROM
 - 4. DVD

Question ID : 6549787510
Status : Answered
Chosen Option : 2

Q.17 A device or program that enables a computer to transmit data over telephone or cable lines is called:

- Ans
- 1. motherboard
 - 2. modem
 - 3. monitor
 - 4. mouse

Question ID : 6549788521
Status : Answered
Chosen Option : 2

Q.18 Where was the Patrika Gate inaugurated by Prime Minister Narendra Modi in September 2020?

- Ans
- 1. Jaipur
 - 2. Ranchi
 - 3. Raipur
 - 4. Bhopal

Question ID : 6549787514
Status : Answered
Chosen Option : 4

Q.19 Who among the following was honoured with the long-overdue record title for 'fastest human computation' by Guinness World Records on 30 July 2020?

- Ans
- 1. Shakuntala Devi
 - 2. Vashishtha Narayan Singh
 - 3. Vijay Kumar Patodi
 - 4. Shreeram Shankar Abhyankar

Question ID : 6549788538
Status : Answered
Chosen Option : 4

Q.20 The mutual funds industry in India is regulated by which of the following organisations?

- Ans
- 1. IRDA and IFCI
 - 2. SEBI and RBI
 - 3. NITI Aayog and IIFCL
 - 4. Ministry of Commerce and SIDBI

Question ID : 6549788528
Status : Answered
Chosen Option : 2

Q.21 Who among the following was responsible for the partition of Bengal in 1905?

- Ans
- 1. Lord Mayo
 - 2. Lord Canning
 - 3. Lord Ripon
 - 4. Lord Curzon

Question ID : 6549788536
Status : Answered
Chosen Option : 4

Q.22 Where is the Sariska Tiger Reserve located?

- Ans
- 1. Rajasthan
 - 2. Haryana
 - 3. Gujarat
 - 4. Karnataka

Question ID : 6549788532
Status : Answered
Chosen Option : 1

Q.23 In September 2020, who was appointed as Executive Director of Asian Development Bank, Manila?

- Ans
- 1. Warotai Kosolpisitkul
 - 2. Jason Chung
 - 3. Sameer Khare
 - 4. Rajesh Khullar

Question ID : 6549787529
Status : Answered
Chosen Option : 4

Test

Prime

By Adda247

Previous Year Papers PDF

PRACTICE MORE, SCORE HIGHER!



Free
25,000+
PDF's

High-Quality | Exam-Wise | Updated Regularly

ATTEMPT AS
MOCK



Turn PDFs into real exam experience.
Analyze. Improve. Succeed.



Topic-wise & Exam-wise PDFs



Download & Study Offline



Attempt as Mock & Track Score



Smart Analysis & Performance

AVAILABLE IN



Banking



SSC



Railway



Teaching



UGC



Agriculture



Nursing



Bihar



UP



Punjab



WB



Odisha



TN



AP & Telangana



Haryana



DOWNLOAD THE APP



Q.24 Which of the following gases is released in the process of photosynthesis?

- Ans
- 1. Nitrous dioxide
 - 2. Carbon dioxide
 - 3. Oxygen
 - 4. Nitrogen

Question ID : 6549788529
Status : Answered
Chosen Option : 3

Q.25 The total liability of the monetary authority of the country, Reserve Bank of India, is called:

- Ans
- 1. Hot money
 - 2. Grey money
 - 3. Cold cash
 - 4. High powered money

Question ID : 6549787517
Status : Answered
Chosen Option : 1