

**Combined Higher Secondary Level Examination 2020 (Tier-I)**

Roll Number	
Candidate Name	
Venue Name	
Exam Date	10/08/2021
Exam Time	3:00 PM - 4:00 PM
Subject	Combined Higher Secondary Level Exam 2020

Section : English Language

Q.1 Select the most appropriate meaning of the given idiom.

Break the ice

- Ans  1. Make a beginning or start something  
 2. Cool the room for everyone  
 3. Arrange for a skating show  
 4. Make things available for a party

Question ID : 6549786036  
Status : Answered  
Chosen Option : 1

Q.2 Select the most appropriate option to substitute the underlined segment in the given sentence. If there is no need to substitute it, select 'No substitution required'.

Regard of whether the students were ready or not the teacher announced the dates of the test.

- Ans  1. Regarding whether  
 2. Regardless of whatsoever  
 3. No substitution required  
 4. Regardless of whether

Question ID : 6549786033  
Status : Answered  
Chosen Option : 1

Q.3 Select the most appropriate synonym of the given word.

Silt

- Ans  1. Cut  
 2. Opening  
 3. Residue  
 4. Incision

Question ID : 6549786042  
Status : Answered  
Chosen Option : 4

**Test  
Prime**

By Adda247

# ALL EXAMS, ONE SUBSCRIPTION



Test. Analyze. Improve. Repeat.



**Don't just prepare. Perform.**

Test Prime — built only for mock tests.



**1,50,000+**  
Mock Tests



**25,000+**  
Previous Year Papers



**800+**  
Exam Covered



**500% Refund**  
on Selection



**5 lakh+**  
Free Quizzes



**Daily**  
Free PDFs



**Job Alerts**  
Stay Updated

- Multilingual
- Detailed Solution
- Strong and Weak Areas



**All India  
Rankings**

Compete with lakhs.  
Rank. Improve. Repeat.



← Adda247 test prime

Rating ▾

Editors' choice

New



Adda247 Test Prime  
Adda Education • Education  
📌 Installed



**DOWNLOAD THE APP**



Q.4 Select the INCORRECTLY spelt word.

- Ans  1. Succeed  
 2. Inherit  
 3. Implant  
 4. Accede

Question ID : 6549787048  
Status : Answered  
Chosen Option : 1

Q.5 Select the option that can be used as a one-word substitute for the given group of words.

The arrangement of events or dates in the order of their occurrence.

- Ans  1. Calendar  
 2. Chronology  
 3. Chronic  
 4. Routine

Question ID : 6549787050  
Status : Answered  
Chosen Option : 2

Q.6 Select the most appropriate synonym of the given word.

Vacillate

- Ans  1. Augment  
 2. Waver  
 3. Strengthen  
 4. Fortify

Question ID : 6549787053  
Status : Answered  
Chosen Option : 3

Q.7 Sentences of a paragraph are given below in jumbled order. Arrange the sentences in the right order to form a meaningful and coherent paragraph.

- A. The country gained admission to the United Nations in 1955.  
B. In 2008, however, after a decade long period of violence and turbulent negotiation with a strong Maoist insurgency, the monarchy was dissolved, and Nepal was declared a democratic republic.  
C. In 1991 the kingdom established a multiparty parliamentary system.  
D. Nepal, long under the rule of hereditary prime ministers favouring a policy of isolation, remained closed to the outside world until a palace revolt in 1950 restored the crown's authority in 1951.

- Ans  1. BCDA  
 2. DACB  
 3. DBAC  
 4. CABD

Question ID : 6549787041  
Status : Answered  
Chosen Option : 2

Q.8 The following sentence has been divided into parts. One of them may contain an error. Select the part that contains the error from the given options. If you don't find any error, mark 'No error' as your answer.

Vidya put on her mask, / sanitise her hands / and walked into the shop.

- Ans
- 1. and walked into the shop
  - 2. No error
  - 3. Vidya put on her mask
  - 4. sanitise her hands

Question ID : 6549786022  
Status : Answered  
Chosen Option : 1

Q.9 Select the most appropriate ANTONYM of the given word.

Rigid

- Ans
- 1. Definite
  - 2. Flexible
  - 3. Adamant
  - 4. Firm

Question ID : 6549786034  
Status : Answered  
Chosen Option : 2

Q.10 Select the option that expresses the given sentence in passive voice.

Ravi drove the car towards the highway for a trial run.

- Ans
- 1. The car was driving towards the highway for a trial run by Ravi.
  - 2. The car had driven towards the highway for a trial run by Ravi.
  - 3. The car had been driven for a trial run by Ravi towards the highway.
  - 4. The car was driven towards the highway for a trial run by Ravi.

Question ID : 6549787030  
Status : Answered  
Chosen Option : 4

Q.11 Sentences of a paragraph are given below in jumbled order. Arrange the sentences in the right order to form a meaningful and coherent paragraph.

- A. First, a new article comes into our offices.
- B. Every article in the Encyclopedia goes through a rigorous editorial process to make sure it's clear, accurate, objective and fair.
- C. The article is first reviewed by a fact checker, who uses a variety of sources to make sure the article is accurate and the facts are correct.
- D. The author may be an editor at the Encyclopedia who knows that subject or a prominent scholar with specialised expertise in that field.

- Ans
- 1. BADC
  - 2. BCAD
  - 3. CDAB
  - 4. CADB

Question ID : 6549786030  
Status : Answered  
Chosen Option : 1

Q.12 Select the most appropriate word to fill in the blank.

As the Principal was busy, she \_\_\_\_\_ a senior teacher to attend the conference on her behalf.

- Ans
- 1. Reserved
  - 2. Declared
  - 3. Deputed
  - 4. Committed

Question ID : 6549787055  
Status : Answered  
Chosen Option : 3

Q.13 Select the most appropriate option to substitute the underlined segment in the given sentence. If there is no need to substitute it, select 'No substitution required'.

If a person tests positive for Covid-19, he have to isolate himself immediately so that he does not infect others.

- Ans
- 1. he must have to isolate
  - 2. he isolated himself
  - 3. he has to isolate himself
  - 4. No substitution required

Question ID : 6549787042  
Status : Answered  
Chosen Option : 1

Q.14 Select the option that expresses the given sentence in direct speech.

The customer asked the bank manager if they were working on the following Saturday.

- Ans
- 1. The customer asked the bank manager, "Are they working on the previous Saturday?"
  - 2. The customer said to the bank manager, "Are you working next Saturday?"
  - 3. The customer asks the bank manager, "If you were working on the following Saturday?"
  - 4. The customer said to the bank manager, "Were they working on the previous Saturday?"

Question ID : 6549786021  
Status : Answered  
Chosen Option : 3

Q.15 Select the INCORRECTLY spelt word.

- Ans
- 1. Preshious
  - 2. Plenary
  - 3. Presentable
  - 4. Peaceful

Question ID : 6549786039  
Status : Answered  
Chosen Option : 1

Q.16 The following sentence has been divided into parts. One of them may contain an error. Select the part that contains the error from the given options. If you don't find any error, mark 'No error' as your answer.

Your advices were timely / and guided me / to take the right decisions.

- Ans
- 1. to take the right decisions
  - 2. No error
  - 3. and guided me
  - 4. Your advices were timely

Question ID : 6549787033  
Status : Answered  
Chosen Option : 4

Q.17 Select the most appropriate ANTONYM of the given word.

Inept

- Ans
- 1. Partial
  - 2. Lacking
  - 3. Competent
  - 4. Useless

Question ID : 6549787045  
Status : Answered  
Chosen Option : 3

Q.18 Select the most appropriate meaning of the given idiom.

A lean patch

- Ans
- 1. Cloth that is beginning to tear
  - 2. A part of hair that is thin
  - 3. Friendship that has ended
  - 4. A period of poor performance

Question ID : 6549787047  
Status : Answered  
Chosen Option : 4

Q.19 Select the option that can be used as a one-word substitute for the given group of words.

A place of ideal perfection especially in laws, government, and social conditions

- Ans
- 1. Paradise
  - 2. Heaven
  - 3. Utopia
  - 4. Aden

Question ID : 6549786041  
Status : Not Answered  
Chosen Option : --

Q.20 Select the most appropriate word to fill in the blank.

Carbohydrates are so called because they \_\_\_\_ carbon, oxygen and hydrogen.

- Ans
- 1. contain
  - 2. cover
  - 3. consist
  - 4. codify

Question ID : 6549786044  
Status : Answered  
Chosen Option : 3

**Comprehension:**

In the following passage, some words have been deleted. Select the most appropriate option to fill in each blank.

Seychelles, one of the world's smallest countries, is (1)\_\_\_\_\_ of two main island groups: the Mahé group of (2)\_\_\_\_\_ than 40 central, mountainous granitic islands and a (3)\_\_\_\_\_ group of more than 70 outer, flat, coralline islands. The islands of the Mahé group are rocky and (4)\_\_\_\_\_ have a narrow coastal strip and a central range of hills. The (5)\_\_\_\_\_ feature of those islands, with their lush tropical vegetation, is that of high hanging gardens overlooking silver-white beaches and clear lagoons.

**SubQuestion No : 21**

**Q.21** Select the most appropriate option to fill in blank no. 1.

- Ans
- 1. Covered
  - 2. Composed
  - 3. Contained
  - 4. Combined

Question ID : 6549787035

Status : Answered

Chosen Option : 2

**Comprehension:**

In the following passage, some words have been deleted. Select the most appropriate option to fill in each blank.

Seychelles, one of the world's smallest countries, is (1)\_\_\_\_\_ of two main island groups: the Mahé group of (2)\_\_\_\_\_ than 40 central, mountainous granitic islands and a (3)\_\_\_\_\_ group of more than 70 outer, flat, coralline islands. The islands of the Mahé group are rocky and (4)\_\_\_\_\_ have a narrow coastal strip and a central range of hills. The (5)\_\_\_\_\_ feature of those islands, with their lush tropical vegetation, is that of high hanging gardens overlooking silver-white beaches and clear lagoons.

**SubQuestion No : 22**

**Q.22** Select the most appropriate option to fill in blank no. 2.

- Ans
- 1. Further
  - 2. Beyond
  - 3. Extra
  - 4. More

Question ID : 6549787036

Status : Answered

Chosen Option : 4

**Comprehension:**

In the following passage, some words have been deleted. Select the most appropriate option to fill in each blank.

Seychelles, one of the world's smallest countries, is (1)\_\_\_\_\_ of two main island groups: the Mahé group of (2)\_\_\_\_\_ than 40 central, mountainous granitic islands and a (3)\_\_\_\_\_ group of more than 70 outer, flat, coralline islands. The islands of the Mahé group are rocky and (4)\_\_\_\_\_ have a narrow coastal strip and a central range of hills. The (5)\_\_\_\_\_ feature of those islands, with their lush tropical vegetation, is that of high hanging gardens overlooking silver-white beaches and clear lagoons.

**SubQuestion No : 23**

**Q.23** Select the most appropriate option to fill in blank no. 3.

- Ans
- 1. Succeeding
  - 2. Next
  - 3. Second
  - 4. Subsequent

Question ID : 6549787037

Status : Answered

Chosen Option : 4

**Comprehension:**

In the following passage, some words have been deleted. Select the most appropriate option to fill in each blank.

Seychelles, one of the world's smallest countries, is (1)\_\_\_\_\_ of two main island groups: the Mahé group of (2)\_\_\_\_\_ than 40 central, mountainous granitic islands and a (3)\_\_\_\_\_ group of more than 70 outer, flat, coralline islands. The islands of the Mahé group are rocky and (4)\_\_\_\_\_ have a narrow coastal strip and a central range of hills. The (5)\_\_\_\_\_ feature of those islands, with their lush tropical vegetation, is that of high hanging gardens overlooking silver-white beaches and clear lagoons.

**SubQuestion No : 24**

**Q.24** Select the most appropriate option to fill in blank no. 4.

- Ans
- 1. Typically
  - 2. Routinely
  - 3. Regularly
  - 4. Habitually

Question ID : 6549787038

Status : Answered

Chosen Option : 1

**Comprehension:**

In the following passage, some words have been deleted. Select the most appropriate option to fill in each blank.

Seychelles, one of the world's smallest countries, is (1)\_\_\_\_\_ of two main island groups: the Mahé group of (2)\_\_\_\_\_ than 40 central, mountainous granitic islands and a (3)\_\_\_\_\_ group of more than 70 outer, flat, coralline islands. The islands of the Mahé group are rocky and (4)\_\_\_\_\_ have a narrow coastal strip and a central range of hills. The (5)\_\_\_\_\_ feature of those islands, with their lush tropical vegetation, is that of high hanging gardens overlooking silver-white beaches and clear lagoons.

**SubQuestion No : 25**

Q.25 Select the most appropriate option to fill in blank no. 5.

- Ans
- 1. Collective
  - 2. Wide
  - 3. Predominant
  - 4. Global

Question ID : 6549787039  
Status : Answered  
Chosen Option : 2

## Section : General Intelligence

Q.1 Select the number from among the given options that can replace the question mark (?) in the following series.

8, 11, 17, 26, 38, ?

- Ans
- 1. 53
  - 2. 56
  - 3. 50
  - 4. 58

Question ID : 6549787061  
Status : Answered  
Chosen Option : 1

Q.2 Select the option in which the numbers share the same relationship as that shared by the given pair of numbers.

56 : 67

- Ans
- 1. 49 : 58
  - 2. 85 : 98
  - 3. 76 : 88
  - 4. 63 : 75

Question ID : 6549786048  
Status : Answered  
Chosen Option : 2

Q.3 Train A, which runs at a speed of 90 km/h, starts from Station Y at 8 a.m. Train B, which runs at a speed of 120 km/h, starts from Station Y on the same route at 8.10 a.m.. If Train B catches up with Train A at 8.40 a.m. at Station Z, then what is the distance between Stations Y and Z?

- Ans
- 1. 54 km
  - 2. 62 km
  - 3. 60 km
  - 4. 50 km

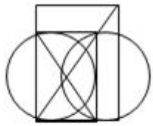
Question ID : 6549786046  
 Status : Marked For Review  
 Chosen Option : 1

Q.4 Sunaina introduced Ritik as the son of the brother of her mother. How is Ritik related to Sunaina?

- Ans
- 1. Son
  - 2. Cousin
  - 3. Uncle
  - 4. Nephew

Question ID : 6549786160  
 Status : Answered  
 Chosen Option : 2

Q.5 Select the option that is embedded in the given figure (rotation is NOT allowed).



Ans

- 1.
- 2.
- 3.
- 4.

Question ID : 6549787077  
 Status : Answered  
 Chosen Option : 3



Q.9 In a certain code language, TRAILER is written as QPXGICO. How will ALMIRAH be written in that language?

- Ans
- 1. XIJFOX E
  - 2. YJKGPYF
  - 3. YIKFPXF
  - 4. XJJGOYE

Question ID : 6549787064  
Status : Answered  
Chosen Option : 1

Q.10 Select the option in which the numbers are related in the same way as are the numbers of the following set.

32 : 63 : 123

- Ans
- 1. 26 : 48 : 92
  - 2. 26 : 51 : 100
  - 3. 35 : 72 : 149
  - 4. 33 : 66 : 130

Question ID : 6549786050  
Status : Not Answered  
Chosen Option : --

Q.11 Select the option that is related to the third word in the same way as the second word is related to the first word.

Hollow : Worthless :: Solid : ?

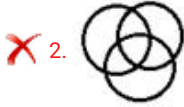
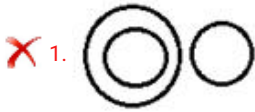
- Ans
- 1. Sound
  - 2. Sincere
  - 3. Acceptance
  - 4. Clear

Question ID : 6549787067  
Status : Answered  
Chosen Option : 3

Q.12 Select the Venn diagram that best represents the relationship between the following classes.

Carnivorous, Frog, Amphibian

Ans



Question ID : 6549786070  
Status : Answered  
Chosen Option : 1

Q.13 Four words have been given, out of which three are alike in some manner and one is different. Select the word that is different.

Ans

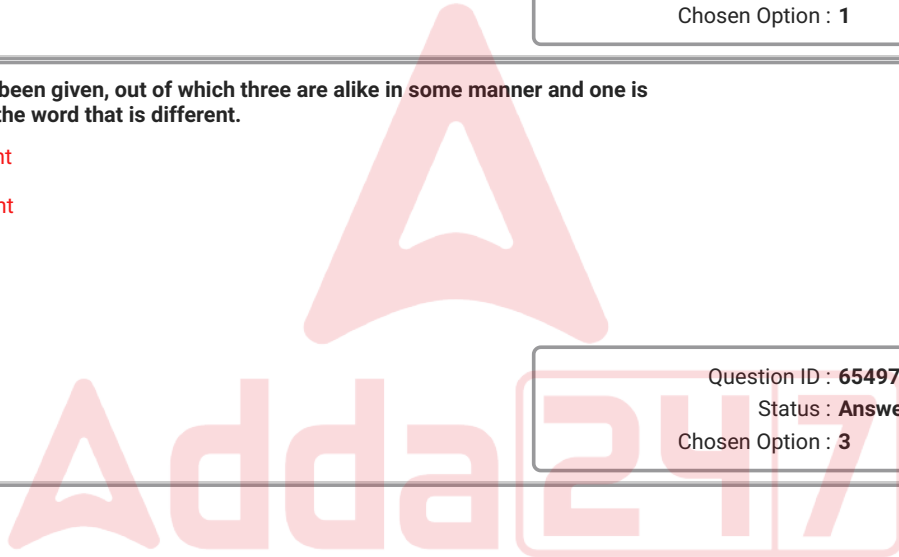
✗ 1. Confident

✗ 2. Intelligent

✓ 3. Coward

✗ 4. Honest

Question ID : 6549787072  
Status : Answered  
Chosen Option : 3

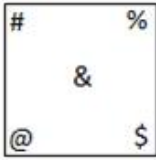


Q.14 Select the figure from among the given options that can replace the question mark (?) in the following series.

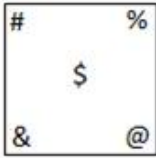


Ans

1.



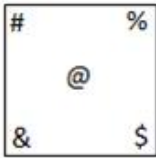
2.



3.



4.



Question ID : 6549786065  
Status : Answered  
Chosen Option : 3

Q.15 Three different positions of the same dice are shown. Select the number that will be on the face opposite to the face having the number 4.



Ans

1. 6

2. 1

3. 3

4. 2

Question ID : 6549786064  
Status : Answered  
Chosen Option : 2

**Q.16** Read the given statements and conclusions carefully. Assuming that the information given in the statements is true, even if it appears to be at variance with commonly known facts, decide which of the given conclusions logically follow(s) from the statements.

**Statements:**  
All bats are sticks.  
All sticks are woods.

**Conclusions:**  
I. Some woods are not bats.  
II. All bats are woods.

- Ans**
- 1. Both conclusions I and II follow.
  - 2. Neither conclusion I nor II follows.
  - 3. Only conclusion II follows.
  - 4. Only conclusion I follows.

Question ID : 6549787073  
Status : Answered  
Chosen Option : 1

**Q.17** The sequence of folding a piece of paper and the manner in which the folded paper has been cut is shown in the following figures. How would this paper look when unfolded?



**Ans**

- 1.
- 2.
- 3.
- 4.

Question ID : 6549787078  
Status : Answered  
Chosen Option : 2

Q.18 Select the correct mirror image of the given figure when the mirror is placed at the right side.



Ans

- 1.
- 2.
- 3.
- 4.

Question ID : 6549787079  
Status : Answered  
Chosen Option : 2

Q.19 Select the option that is related to the third word in the same way as the second word is related to the first word.

Sacred : Profane :: Barren : ?

- 1. Fertile
- 2. Desert
- 3. Empty
- 4. Sterile

Question ID : 6549786060  
Status : Answered  
Chosen Option : 1

Q.20 Select the correct option that indicates the arrangement of the given words in a logical and meaningful order.

1. Beam
2. Canopy
3. Foundation
4. Roof
5. Column

- 1. 3-2-1-5-4
- 2. 3-5-1-4-2
- 3. 1-2-5-3-4
- 4. 5-3-1-2-4

Question ID : 6549786053  
Status : Answered  
Chosen Option : 1

Q.21 Which two digits and two signs need to be interchanged so as to balance the given equation?

$$98 \div 4 - 126 + 96 \times 5 = 266$$

- Ans
- 1. 8 and 2; - and +
  - 2. 5 and 8;  $\times$  and  $\div$
  - 3. 5 and 9; + and  $\div$
  - 4. 6 and 4;  $\times$  and  $\div$

Question ID : 6549787057  
Status : Not Answered  
Chosen Option : --

Q.22 Select the option that is related to the third term in the same way as the second term is related to the first term.

COMPETE : OCETPME :: EXTREME : ?

- Ans
- 1. EMXEERT
  - 2. RTXEEME
  - 3. XEEMRTE
  - 4. XERTMEE

Question ID : 6549787066  
Status : Answered  
Chosen Option : 3

Q.23 Select the option in which the numbers are related in the same way as are the numbers of the following set.

(92, 85, 82)

- Ans
- 1. (28, 23, 21)
  - 2. (71, 65, 62)
  - 3. (83, 78, 77)
  - 4. (69, 66, 62)

Question ID : 6549787059  
Status : Answered  
Chosen Option : 1

Q.24 Four numbers have been given, out of which three are alike in some manner and one is different. Select the number that is different.

- Ans
- 1. 199
  - 2. 139
  - 3. 183
  - 4. 163

Question ID : 6549786052  
Status : Not Answered  
Chosen Option : --

Q.25 Select the combination of letters that when sequentially placed in the blanks of the given series will complete the series.

t \_ f e t c \_ \_ \_ c f e

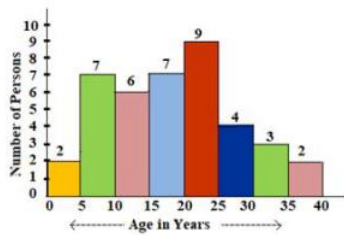
- Ans
- 1. t c f e
  - 2. f e t c
  - 3. e c f t
  - 4. c f e t

Question ID : 6549789763  
Status : Answered  
Chosen Option : 4

Section : Quantitative Aptitude

Q.1 Some families went on an outstation tour. The given histogram shows their ages.

What is the ratio of the number of persons of age less than 15 years to that of persons of age less than 30 years?



- Ans
- 1. 15 : 38
  - 2. 15 : 31
  - 3. 3 : 7
  - 4. 11 : 19

Question ID : 6549788417  
Status : Answered  
Chosen Option : 3

Q.2 When the price of an item was reduced by 20%, its sales increased by x%. If there is an increase of 25% in the receipt of the revenue, then the value of x is :

- Ans
- 1. 53.84%
  - 2. 55.75%
  - 3. 56.25%
  - 4. 61.5%

Question ID : 6549786076  
Status : Not Answered  
Chosen Option : --

Q.3 In a trapezium  $ABCD$ ,  $DC \parallel AB$ ,  $AB = 16 \text{ cm}$  and  $DC = 11.2 \text{ cm}$ . What is the length (in  $\text{cm}$ ) of the line segment joining the mid points of its diagonals?

- Ans
- 1. 2.4
  - 2. 1.8
  - 3. 1.2
  - 4. 2.8

Question ID : 6549787093  
Status : Answered  
Chosen Option : 1

Q.4 In a class of 80 students (boys and girls) there are 60% girls. The average weight of the boys is 58 kg and that of the girls is 52 kg. What is the average weight (in kg) of the whole class?

- Ans
- 1. 56.2
  - 2. 54.4
  - 3. 53.6
  - 4. 55

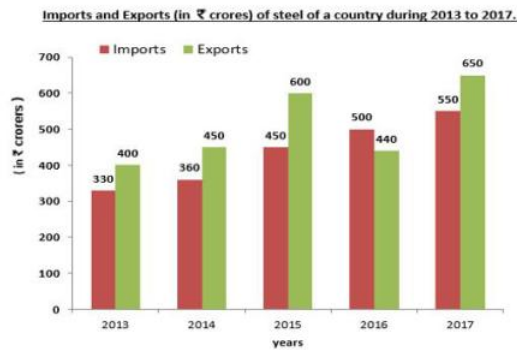
Question ID : 6549786074  
Status : Answered  
Chosen Option : 2

Q.5  $\frac{775 \times 775 \times 775 + 225 \times 225 \times 225}{77.5 \times 77.5 + 22.5 \times 22.5 - 77.5 \times 22.5}$  is equal to:

- Ans
- 1. 100
  - 2. 10000
  - 3. 100000
  - 4. 0.1

Question ID : 6549787098  
Status : Answered  
Chosen Option : 1

Q.6 Study the bar graph which shows the imports and exports (in ₹) of steel of a country during 2013 to 2017 and answer the question that follows.



For how many year(s) were the imports less than 80% of the average exports (per year) of the country during the five years?

- Ans
- 1. 4
  - 2. 1
  - 3. 3
  - 4. 2

Question ID : 6549787102

Status : Answered

Chosen Option : 2

Q.7 If  $a + b + c = 5$ ,  $a^2 + b^2 + c^2 = 27$ , and  $a^3 + b^3 + c^3 = 125$ , then the value of  $\frac{abc}{5}$  is:

- Ans
- 1. -1
  - 2. 5
  - 3. -5
  - 4. 1

Question ID : 6549787095

Status : Not Answered

Chosen Option : --

Q.8 A sum lent at simple interest amounts to ₹6,240.80 in one year and to ₹7,563.20 in 4 years. The sum (in ₹) and the rate of interest per annum, respectively, are:

- Ans
- 1. 6,200, 8.5%
  - 2. 5,800, 8.5%
  - 3. 5,800, 7.6%
  - 4. 6,200, 7.6%

Question ID : 6549786079

Status : Answered

Chosen Option : 2

Q.9 If the 11-digit number  $4y6884805x6$  is divisible by 72, and  $x \neq y$ , then the value of  $\sqrt{xy}$  is:

- Ans
- 1.  $\sqrt{12}$
  - 2.  $\sqrt{6}$
  - 3.  $\sqrt{5}$
  - 4.  $\sqrt{8}$

Question ID : 6549786087  
Status : Answered  
Chosen Option : 3

Q.10 In  $\Delta PQR$ ,  $QT \perp PR$  and  $S$  is a point on  $QR$  such that  $\angle PSQ = p^\circ$ . If  $\angle TQR = 44^\circ$  and  $\angle SPR = 32^\circ$ , then the value of  $p$  is:

- Ans
- 1.  $72^\circ$
  - 2.  $82^\circ$
  - 3.  $76^\circ$
  - 4.  $78^\circ$

Question ID : 6549786082  
Status : Not Answered  
Chosen Option : --

Q.11 Two circles of radii 18 cm and 12 cm intersect each other and the length of their common chord is 16 cm. What is the distance (in cm) between their centres?

- Ans
- 1.  $2\sqrt{5}(2 + \sqrt{13})$
  - 2.  $2\sqrt{5}(4 - \sqrt{13})$
  - 3.  $2\sqrt{5}(4 + \sqrt{13})$
  - 4.  $2\sqrt{5}(-2 + \sqrt{13})$

Question ID : 6549786080  
Status : Not Answered  
Chosen Option : --

Q.12 The value of  $\cot^2 46^\circ - \sec^2 44^\circ + (\sin^2 1^\circ + \sin^2 3^\circ + \sin^2 5^\circ + \dots + \sin^2 89^\circ)$  is:

- Ans
- 1. 23.5
  - 2. 20.5
  - 3. 22.5
  - 4. 21.5

Question ID : 6549787099  
Status : Answered  
Chosen Option : 4

Q.13 If  $(1 + \cot^2 \theta) + (1 + (\cot^2 \theta)^{-1})$  is equal to  $k$ , then  $\sqrt{k} = ?$

- Ans
- 1.  $\sin \theta \sec \theta$
  - 2.  $\operatorname{cosec} \theta \cos \theta$
  - 3.  $\operatorname{cosec} \theta \sec \theta$
  - 4.  $\sin \theta \cos \theta$

Question ID : 6549787101  
Status : Not Answered  
Chosen Option : --

Q.14 The sides  $AB$ ,  $BC$  and  $AC$  of  $\triangle ABC$  are 12 cm, 8 cm and 10 cm, respectively. A circle is inscribed in the triangle touching  $AB$ ,  $BC$  and  $AC$  at  $D$ ,  $E$  and  $F$ , respectively. The ratio of the lengths of  $AD$  to  $CE$  is:

- Ans
- 1. 5 : 7
  - 2. 3 : 5
  - 3. 10 : 7
  - 4. 7 : 3

Question ID : 6549787091  
Status : Answered  
Chosen Option : 4

Q.15 By selling a car for ₹6,32,500, a showroom owner makes a profit of 15%. If he sold the car at ₹8,10,000, then what would be the profit percentage (correct to one decimal place)?

- Ans
- 1. 47.3%
  - 2. 44.8%
  - 3. 41.5%
  - 4. 51.4%

Question ID : 6549787087  
Status : Answered  
Chosen Option : 1

Q.16 If  $(x - 1.5)^3 + (x - 4)^3 + (x - 3.5)^3 = 3(x - 1.5)(x - 4)(x - 3.5)$ , then what is the value of  $x$ ?

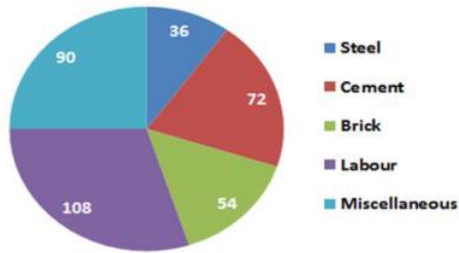
- Ans
- 1. 1
  - 2. 3
  - 3. 6
  - 4. 9

Question ID : 6549786084  
Status : Answered  
Chosen Option : 2

Q.17 Study the pie chart and answer the question that follows.

The given pie chart shows the degree of cost incurred in different expenditure on the construction of a house. The total expenditure is ₹31,50,000.

Degree of cost incurred in different expenditure



What is the percentage of expenditure on cement?

- Ans
- 1. 30%
  - 2. 25%
  - 3. 15%
  - 4. 20%

Question ID : 6549786093  
 Status : Answered  
 Chosen Option : 4

Q.18 A marks her goods 25% above the cost price. She sells 25% of the goods at the marked price, 60% at 25% discount and the remaining at 10% discount. What is her overall gain or loss per cent?

- Ans
- 1. Gain 15.124%
  - 2. Loss 18.175%
  - 3. Loss 3.125%
  - 4. Gain 4.375%

Question ID : 6549787085  
 Status : Not Answered  
 Chosen Option : --

Q.19 Working together A, B and C can complete a piece of work in 3 days. A completes the same work in 24 days and B completes it in 6 days. How many days will C alone take to complete the same work?

- Ans
- 1. 18
  - 2. 8
  - 3. 12
  - 4. 6

Question ID : 6549787081  
 Status : Answered  
 Chosen Option : 2

**Q.20** A man covers  $\frac{5}{12}$  of a total journey by train,  $\frac{7}{18}$  of the journey by bus and the remaining 7 km on foot. His total journey (in km) is:

- Ans**
- 1. 36 km
  - 2. 35 km
  - 3. 32 km
  - 4. 40 km

Question ID : 6549786072  
Status : Answered  
Chosen Option : 1

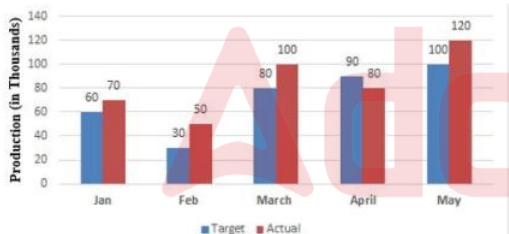
**Q.21** If  $3\cos\theta = 2\sin^2\theta, 0^\circ < \theta < 90^\circ$ , then what is the value of  $(\tan^2\theta + \sec^2\theta - \operatorname{cosec}^2\theta)$ ?

- Ans**
- 1.  $\frac{17}{3}$
  - 2.  $-\frac{7}{3}$
  - 3.  $-\frac{17}{3}$
  - 4.  $\frac{7}{3}$

Question ID : 6549786090  
Status : Answered  
Chosen Option : 4

**Q.22** Study the graph which shows the target and actual production of ACs, (in thousands) of a factory over five months and answer the question that follows.

Target and Actual Production of AC's (in Thousands) of a factory over five months



The total target production of ACs in February, March, April and May is what percent less than the total actual production of ACs over five months? (correct to one decimal place)

- Ans**
- 1. 27.9%
  - 2. 26.8%
  - 3. 29.7%
  - 4. 28.6%

Question ID : 6549786095  
Status : Not Answered  
Chosen Option : --

Q.23 The volume of a right circular cone is  $462 \text{ cm}^3$ . If its height is 12 cm, then the area of its base (in  $\text{cm}^2$ ) is:

- Ans
- 1. 124.5
  - 2. 103.5
  - 3. 115.5
  - 4. 98.5

Question ID : 6549787083  
Status : Answered  
Chosen Option : 3

Q.24 What is the ratio of the mean proportional between 1.2 and 10.8 to the third proportional to 0.2 and 1.2?

- Ans
- 1. 1 : 3
  - 2. 1 : 2
  - 3. 2 : 1
  - 4. 3 : 1

Question ID : 6549786078  
Status : Not Answered  
Chosen Option : --

Q.25 If  $a + b + c = 11$  and  $ab + bc + ca = 15$ , then what is the value of  $a^3 + b^3 + c^3 - 3abc$ ?

- Ans
- 1. 368
  - 2. 836
  - 3. 386
  - 4. 638

Question ID : 6549787096  
Status : Answered  
Chosen Option : 2

Section : General Awareness

Q.1 Who among the following rulers belonged to the Tuluva dynasty?

- Ans
- 1. Pushyamitra Sunga
  - 2. Vishnuvardhana
  - 3. Simha Vishnu
  - 4. Krishnadeva Raya

Question ID : 6549787122  
Status : Answered  
Chosen Option : 4

Q.2 Where was the first hot air balloon wildlife safari launched in India in December 2020?

- Ans
- 1. Palamu Tiger Reserve
  - 2. Ranthambore Tiger Reserve
  - 3. Bandhavgarh Tiger Reserve
  - 4. Pilibhit Tiger Reserve

Question ID : 6549786100  
Status : Answered  
Chosen Option : 3

Q.3 Which of the following quantities is measured using a torsion balance?

- Ans
- 1. Magnetism
  - 2. Charge
  - 3. Pressure
  - 4. Force

Question ID : 6549787115  
Status : Not Answered  
Chosen Option : --

Q.4 Who among the following cricketers won the Sir Garfield Sobers Award for 'ICC Male Cricketer of the Decade' in December 2020?

- Ans
- 1. Steve Smith
  - 2. Mahendra Singh Dhoni
  - 3. Virat Kohli
  - 4. Rashid Khan

Question ID : 6549786120  
Status : Answered  
Chosen Option : 3

Q.5 Who among the following were awarded the Nobel Prize in Chemistry 2020 for their exemplary work in genome editing?

- Ans
- 1. Jennifer A Doudna and Emmanuelle Charpentier
  - 2. George P Smith and Sir Gregory P Winter
  - 3. Gerard Mourou and Donna Strickland
  - 4. James P Allison and Tasuku Honjo

Question ID : 6549786115  
Status : Answered  
Chosen Option : 1

Q.6 Which of the following crops is grown throughout the year in the southern states of India?

- Ans
- 1. Sorghum
  - 2. Maize
  - 3. Finger millet
  - 4. Rice

Question ID : 6549786110  
Status : Answered  
Chosen Option : 1

Q.7 Who among the following travellers came to India from Uzbekistan in the 11th century?

- Ans
- 1. Abdur Razzaq Samarquandi
  - 2. Francois Bernier
  - 3. Ibn Battuta
  - 4. Al-Biruni

Question ID : 6549786113  
Status : Answered  
Chosen Option : 1

Q.8 Which of the following states was NOT formed in the year 2000?

- Ans
- 1. Jharkhand
  - 2. Telangana
  - 3. Uttarakhand
  - 4. Chhattisgarh

Question ID : 6549787127  
Status : Answered  
Chosen Option : 2

Q.9 Which of the following songs do the peasants of Rajasthan sing while working in fields?

- Ans
- 1. Pankhida
  - 2. Pandavani
  - 3. Chhakri
  - 4. Barhamasa

Question ID : 6549787109  
Status : Not Answered  
Chosen Option : --

Q.10 The total population per net cultivated area of a country refers to its \_\_\_\_\_.

- Ans
- 1. physiological density
  - 2. population density
  - 3. agricultural density
  - 4. livestock density

Question ID : 6549786111  
Status : Answered  
Chosen Option : 2

Q.11 Who among the following won a bronze medal at the World Athletics Championship in Paris in 2003?

- Ans
- 1. Krishna Poonia
  - 2. Seema Punia
  - 3. PT Usha
  - 4. Anju Bobby George

Question ID : 6549786118  
Status : Not Answered  
Chosen Option : --

Q.12 Which of the following soils is found in areas of heavy rainfall and high humidity?

- Ans
- 1. Saline soil
  - 2. Peaty soil
  - 3. Red soil
  - 4. Yellow soil

Question ID : 6549787118  
Status : Not Answered  
Chosen Option : --

Q.13 An ambassador of which of the following countries was elected as the President of the United Nations Human Rights Council in January 2021?

- Ans
- 1. Cuba
  - 2. Libya
  - 3. Fiji
  - 4. Ghana

Question ID : 6549787112  
Status : Not Answered  
Chosen Option : --

Q.14 In which of the following states is the Shatrunjaya Hills located?

- Ans  1. Gujarat  
 2. Andhra Pradesh  
 3. Madhya Pradesh  
 4. Karnataka

Question ID : 6549787119  
Status : Not Answered  
Chosen Option : --

Q.15 In which of the following years did the Reserve Bank of India liberalise the licensing policy for Urban Co-operative Banks?

- Ans  1. 1993  
 2. 1998  
 3. 1995  
 4. 2001

Question ID : 6549786103  
Status : Not Answered  
Chosen Option : --

Q.16 The \_\_\_\_\_ is a three or four letter abbreviation that signifies the file type.

- Ans  1. extension  
 2. search  
 3. virus  
 4. name

Question ID : 6549786096  
Status : Answered  
Chosen Option : 1

Q.17 Which of the following books did the famous cricketer Sunil Gavaskar author?

- Ans  1. Democracy's XI: The Great Indian Cricket Story  
 2. Runs 'n Ruins  
 3. Playing It My Way  
 4. Captain Cool

Question ID : 6549787124  
Status : Answered  
Chosen Option : 2

Q.18 As per Union Budget 2020, the Government of India intends to double the country's milk processing capacity by the year \_\_\_\_\_.

- Ans
- 1. 2028
  - 2. 2023
  - 3. 2030
  - 4. 2025

Question ID : 6549787114  
Status : Answered  
Chosen Option : 2

Q.19 Which of the following ports is used to connect a computer to a wired network?

- Ans
- 1. Universal serial bus port
  - 2. Ethernet port
  - 3. Parallel port
  - 4. Super-video port

Question ID : 6549787107  
Status : Answered  
Chosen Option : 2

Q.20 Which of the following is a vector-borne disease?

- Ans
- 1. Pneumonia
  - 2. Malaria
  - 3. Mumps
  - 4. Cholera

Question ID : 6549786106  
Status : Not Answered  
Chosen Option : --

Q.21 Which of the following states launched India's and South-Asia's first blockchain-enabled rooftop solar trading platform in December 2020?

- Ans
- 1. Uttar Pradesh
  - 2. Gujarat
  - 3. Rajasthan
  - 4. Madhya Pradesh

Question ID : 6549786101  
Status : Answered  
Chosen Option : 4

Test

Prime

By Adda247

# Previous Year Papers PDF

PRACTICE MORE, SCORE HIGHER!



Free  
**25,000+**  
PDF's

High-Quality | Exam-Wise | Updated Regularly

ATTEMPT AS  
**MOCK**



Turn PDFs into real exam experience.  
Analyze. Improve. Succeed.



Topic-wise & Exam-wise PDFs



Download & Study Offline



Attempt as Mock & Track Score



Smart Analysis & Performance

AVAILABLE IN



Banking



SSC



Railway



Teaching



UGC



Agriculture



Nursing



Bihar



UP



Punjab



WB



Odisha



TN



AP & Telangana



Haryana



DOWNLOAD THE APP



Q.22 Who is the Governor of the state of Chhattisgarh as of May 2020?

- Ans
- 1. Bhupesh Baghel
  - 2. Anusuiya Uikey
  - 3. Phagu Chauhan
  - 4. Ramesh Bais

Question ID : 6549786116  
Status : Answered  
Chosen Option : 2

Q.23 Which of the following cells is NOT used in watches?

- Ans
- 1. Silver oxide cell
  - 2. Mercury cell
  - 3. Zinc air cell
  - 4. Lead acid cell

Question ID : 6549787117  
Status : Answered  
Chosen Option : 4

Q.24 Where is the Rumi Darwaza located?

- Ans
- 1. Lucknow
  - 2. Gwalior
  - 3. Agra
  - 4. Bhopal

Question ID : 6549786098  
Status : Not Answered  
Chosen Option : --

Q.25 In December 2020, the Chief Minister of \_\_\_\_\_ announced that India's biggest hockey stadium is being set up in the state.

- Ans
- 1. Telangana
  - 2. Odisha
  - 3. West Bengal
  - 4. Andhra Pradesh

Question ID : 6549787129  
Status : Answered  
Chosen Option : 2