

Combined Higher Secondary Level Examination 2020 (Tier-I)

Roll Number	
Candidate Name	
Venue Name	
Exam Date	05/08/2021
Exam Time	9:00 AM - 10:00 AM
Subject	Combined Higher Secondary Level Exam 2020

Section : English Language

Q.1 Select the most appropriate word to fill in the blank.

Today you may not _____ what you hear, but that is the truth and you have to accept it.

- Ans
- 1. answer
 - 2. reply
 - 3. enjoy
 - 4. like

Question ID : 6549787761
Status : Answered
Chosen Option : 4

Q.2 Select the option that can be used as a one-word substitute for the given group of words.

The branch of physics concerned with the properties of sound

- Ans
- 1. Optics
 - 2. Photonics
 - 3. Mechanics
 - 4. Acoustics

Question ID : 6549786343
Status : Answered
Chosen Option : 2

Q.3 Select the most appropriate word to fill in the blank.

His voice was _____ by the sound of the helicopter.

- Ans
- 1. driven
 - 2. drawn
 - 3. dawned
 - 4. drowned

Question ID : 6549786348
Status : Answered
Chosen Option : 1

**Test
Prime**

By Adda247

ALL EXAMS, ONE SUBSCRIPTION



Test. Analyze. Improve. Repeat.



Don't just *prepare*. *Perform*.

Test Prime — built only for mock tests.



1,50,000+
Mock Tests



25,000+
Previous Year Papers



800+
Exam Covered



500% Refund
on Selection



5 lakh+
Free Quizzes



Daily
Free PDFs



Job Alerts
Stay Updated

- Multilingual
- Detailed Solution
- Strong and Weak Areas



**All India
Rankings**

Compete with lakhs.
Rank. Improve. Repeat.



← Adda247 test prime

Rating ▾

Editors' choice

New



Adda247 Test Prime
Adda Education • Education
📌 Installed



DOWNLOAD THE APP



Q.4 Select the INCORRECTLY spelt word.

- Ans
- 1. Resolute
 - 2. Hautily
 - 3. Discussion
 - 4. Evidence

Question ID : 6549787756

Status : Answered

Chosen Option : 2

Q.5 Sentences of a paragraph are given below in jumbled order. Arrange the sentences in the right order to form a meaningful and coherent paragraph.

- A. As a result, he had a debt of 500 million US dollars at the time of his death.
- B. Unfortunately, he began spending lavishly on anything he desired, not what he actually needed.
- C. Michael Jackson, called the 'King of Pop Music', stayed at the top of his career for many years.
- D. He was respected for his work culture; he would spend long nights at the studio to fix a note correctly in a song.

- Ans
- 1. DBAC
 - 2. CDBA
 - 3. BADC
 - 4. ADCB

Question ID : 6549787747

Status : Not Answered

Chosen Option : --

Q.6 Select the most appropriate meaning of the given idiom.

To have eggs on one's face

- Ans
- 1. To be embarrassed because of one's action
 - 2. To apply egg yolk on one's face for making it look beautiful
 - 3. To throw eggs on a speaker's face
 - 4. To buy eggs and break them

Question ID : 6549787753

Status : Answered

Chosen Option : 1

Q.7 Select the option that expresses the given sentence in passive voice.

Sai Kumari gave Akhila a bouquet of lilies on her birthday.

- Ans
- 1. Akhila was given a bouquet of lilies on her birthday by Sai Kumari.
 - 2. Akhila was gave a bouquet of lilies on her birthday by Sai Kumari.
 - 3. Akhila is given a bouquet of lilies on her birthday by Sai Kumari.
 - 4. Akhila gave a bouquet of lilies on her birthday to Sai Kumari.

Question ID : 6549786323

Status : Answered

Chosen Option : 1

Q.8 The following sentence has been divided into parts. One of them may contain an error. Select the part that contains the error from the given options. If you don't find any error, mark 'No error' as your answer.

A probe has been ordered / by the incident / that occurred at the celebrations.

- Ans
- 1. A probe has been ordered
 - 2. that occurred at the celebrations
 - 3. by the incident
 - 4. No error

Question ID : 6549786326
Status : Not Answered
Chosen Option : --

Q.9 Select the most appropriate ANTONYM of the given word.

Disheveled

- Ans
- 1. Untidy
 - 2. Cluttered
 - 3. Ordered
 - 4. Unkempt

Question ID : 6549786338
Status : Answered
Chosen Option : 3

Q.10 Select the most appropriate synonym of the given word.

Despicable

- Ans
- 1. Commendable
 - 2. Laudable
 - 3. Contemptible
 - 4. Desirable

Question ID : 6549786346
Status : Answered
Chosen Option : 3

Q.11 Select the most appropriate option to substitute the underlined segment in the given sentence. If there is no need to substitute it, select 'No substitution required'.

India has identified a nose-based vaccine against Covid-19 that could be a 'game-changer'.

- Ans
- 1. No substitution required
 - 2. a nasal vaccine
 - 3. an aural vaccine
 - 4. a sense-based vaccine

Question ID : 6549787750
Status : Answered
Chosen Option : 2

Q.12 Select the option that can be used as a one-word substitute for the given group of words.

A new project or business activity involving some risk

- Ans
- 1. Entrepreneur
 - 2. Venture (n)
 - 3. Experiment
 - 4. Taboo

Question ID : 6549787758
Status : Answered
Chosen Option : 1

Q.13 Select the most appropriate option to substitute the underlined segment in the given sentence. If there is no need to substitute it, select 'No substitution required'.

Lavanya was happy to see that the tree they had planted the previous year has grow quite taller.

- Ans
- 1. No substitution required
 - 2. had grown quite tall
 - 3. had grow quite taller
 - 4. had grown quite tallest

Question ID : 6549786335
Status : Answered
Chosen Option : 2

Q.14 The following sentence has been split into four segments. Identify the segment that contains a grammatical error.

The sports day events / will be conducted / from 3:30 p.m. and 5:30 p.m. / on Saturday.

- Ans
- 1. The sports day events
 - 2. from 3:30 p.m. and 5:30 p.m.
 - 3. on Saturday
 - 4. will be conducted

Question ID : 6549787739
Status : Answered
Chosen Option : 2

Q.15 Select the option that expresses the given sentence in direct speech.

The students asked the teacher where they could find the information for their project.

- Ans
- 1. The students said to the teacher, "Where can you find the information for our project?"
 - 2. The students asked the teacher, "Where can we find the information for our project?"
 - 3. The teacher said to the students, "Where you can find the information for your project."
 - 4. The teacher said to the students, "I will tell you where you can find the information for your project."

Question ID : 6549787738
Status : Answered
Chosen Option : 2

Q.16 Select the INCORRECTLY spelt word.

- Ans 1. Possesions
 2. Irritation
 3. Invitation
 4. Protection

Question ID : 6549786341
Status : Answered
Chosen Option : 1

Q.17 Select the most appropriate synonym of the given word.

Forbid

- Ans 1. Close
 2. Prohibit
 3. Adieu
 4. Encourage

Question ID : 6549787759
Status : Answered
Chosen Option : 2

Q.18 Select the most appropriate ANTONYM of the given word.

Accustomed

- Ans 1. Terrific
 2. Fabulous
 3. Ordinary
 4. Unusual

Question ID : 6549787751
Status : Answered
Chosen Option : 3

Q.19 Sentences of a paragraph are given below in jumbled order. Arrange the sentences in the right order to form a meaningful and coherent paragraph.

- A. Humans work because they have to; they play because they want to.
B. The most useful definitions are those that clarify the relationship of sports to play, games and contests.
C. "Play," wrote the German theorist Carl Diem, "is purposeless activity, for its own sake, the opposite of work."
D. Sports are part of every culture, past and present, but each culture has its own definition of sports.

- Ans 1. ABCD
 2. DCBA
 3. DBCA
 4. BADC

Question ID : 6549786334
Status : Answered
Chosen Option : 3

Q.20 Select the most appropriate meaning of the given idiom.

Thick as thieves

- Ans
- 1. Having a close friendship
 - 2. Being very dishonest
 - 3. Never helping anyone
 - 4. Telling lies all the time

Question ID : 6549786340

Status : Answered

Chosen Option : 2

Comprehension:

In the following passage, some words have been deleted. Select the most appropriate option to fill in each blank.

Meghalaya, a hilly state of India, is located in the northeastern part of the country. It is (1)_____ by the Indian state of Assam in the north and northeast and (2) _____ Bangladesh in the south and southwest. The state capital is (3) _____ hill town of Shillong, located in east-central Meghalaya. Meghalaya is an upland area formed by a (4)_____ block of the Deccan plateau. Its summits vary in (5) _____ from 4,000 to 6,000 feet (1,220 to 1,830 metres).

SubQuestion No : 21

Q.21 Select the most appropriate option to fill in blank no.1.

- Ans
- 1. bind
 - 2. bonded
 - 3. bounded
 - 4. bounding

Question ID : 6549786328

Status : Answered

Chosen Option : 3

Comprehension:

In the following passage, some words have been deleted. Select the most appropriate option to fill in each blank.

Meghalaya, a hilly state of India, is located in the northeastern part of the country. It is (1)_____ by the Indian state of Assam in the north and northeast and (2) _____ Bangladesh in the south and southwest. The state capital is (3) _____ hill town of Shillong, located in east-central Meghalaya. Meghalaya is an upland area formed by a (4)_____ block of the Deccan plateau. Its summits vary in (5) _____ from 4,000 to 6,000 feet (1,220 to 1,830 metres).

SubQuestion No : 22

Q.22 Select the most appropriate option to fill in blank no.2.

- Ans
- 1. near
 - 2. with
 - 3. beside
 - 4. by

Question ID : 6549786329

Status : Answered

Chosen Option : 4

Comprehension:

In the following passage, some words have been deleted. Select the most appropriate option to fill in each blank.

Meghalaya, a hilly state of India, is located in the northeastern part of the country. It is (1)_____ by the Indian state of Assam in the north and northeast and (2) _____ Bangladesh in the south and southwest. The state capital is (3) _____ hill town of Shillong, located in east-central Meghalaya. Meghalaya is an upland area formed by a (4)_____ block of the Deccan plateau. Its summits vary in (5) _____ from 4,000 to 6,000 feet (1,220 to 1,830 metres).

SubQuestion No : 23

Q.23 Select the most appropriate option to fill in blank no.3.

- Ans
- 1. a
 - 2. one
 - 3. only
 - 4. the

Question ID : 6549786330

Status : Answered

Chosen Option : 4

Comprehension:

In the following passage, some words have been deleted. Select the most appropriate option to fill in each blank.

Meghalaya, a hilly state of India, is located in the northeastern part of the country. It is (1)_____ by the Indian state of Assam in the north and northeast and (2) _____ Bangladesh in the south and southwest. The state capital is (3) _____ hill town of Shillong, located in east-central Meghalaya. Meghalaya is an upland area formed by a (4)_____ block of the Deccan plateau. Its summits vary in (5) _____ from 4,000 to 6,000 feet (1,220 to 1,830 metres).

SubQuestion No : 24

Q.24 Select the most appropriate option to fill in blank no.4.

- Ans
- 1. withdrawn
 - 2. standing
 - 3. removed
 - 4. detached

Question ID : 6549786331

Status : Answered

Chosen Option : 1

Comprehension:

In the following passage, some words have been deleted. Select the most appropriate option to fill in each blank.

Meghalaya, a hilly state of India, is located in the northeastern part of the country. It is (1)_____ by the Indian state of Assam in the north and northeast and (2) _____ Bangladesh in the south and southwest. The state capital is (3) _____ hill town of Shillong, located in east-central Meghalaya. Meghalaya is an upland area formed by a (4)_____ block of the Deccan plateau. Its summits vary in (5) _____ from 4,000 to 6,000 feet (1,220 to 1,830 metres).

SubQuestion No : 25

Q.25 Select the most appropriate option to fill in blank no.5.

- Ans
- 1. distance
 - 2. rise
 - 3. elevation
 - 4. increase

Question ID : 6549786332

Status : Answered

Chosen Option : 3

Section : General Intelligence

Q.1 Ruchi's husband's grandfather is Abhinav, whose grandson's father is Viyan. If Abhinav and his wife have only one son, how is Viyan related to Ruchi's husband?

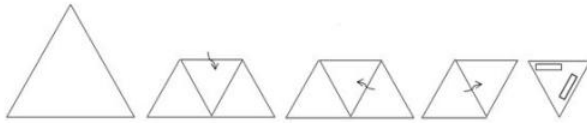
- Ans
- 1. Brother-in-law
 - 2. Uncle
 - 3. Cousin
 - 4. Father

Question ID : 6549789774

Status : Answered

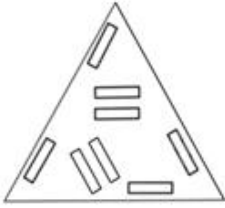
Chosen Option : 4

Q.2 The sequence of folding a piece of paper and the manner in which the folded paper has been cut is shown in the following figures. How would this paper look when unfolded?

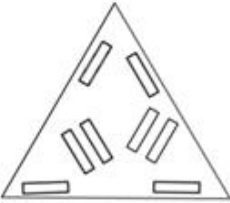


Ans

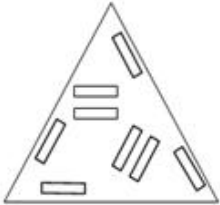
X 1.



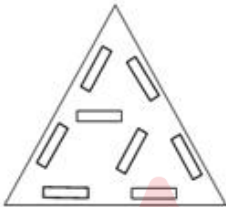
X 2.



✓ 3.



X 4.

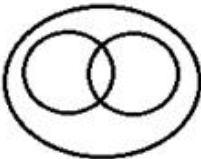
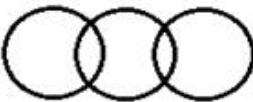




Question ID : 6549786371
Status : Answered
Chosen Option : 1

Q.3 Select the Venn diagram that best represents the relationship between the following classes.

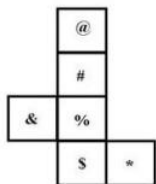
Statisticians, Men, Pathologists

Ans

- 1. 
- 2. 
- 3. 
- 4. 

Question ID : 6549787787
Status : Answered
Chosen Option : 1

Q.4 A cube is made by folding the given sheet. In the cube so formed, what would be the symbol on the opposite side of 'S'?

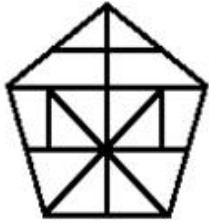


- 1. *
- 2. @
- 3. #
- 4. &



Question ID : 6549787781
Status : Answered
Chosen Option : 3

Q.5 Find the number of triangles in the given figure.



- Ans
- 1. 17
 - 2. 18
 - 3. 16
 - 4. 19

Question ID : 6549787783
 Status : Answered
 Chosen Option : 4

Q.6 Select the correct mirror image of the given figure when the mirror is placed at the right side.



Ans

- 1.
- 2.
- 3.
- 4.



Question ID : 6549786372
 Status : Answered
 Chosen Option : 1

Q.7 Select the correct option that indicates the arrangement of the given words in the order in which they appear in an English dictionary.

1. Inhaler
2. Inimitable
3. Inhabitant
4. Ingenuous
5. Inheritance

- Ans
- 1. 4, 3, 5, 1, 2
 - 2. 4, 5, 2, 1, 3
 - 3. 4, 1, 3, 5, 2
 - 4. 4, 3, 1, 5, 2

Question ID : 6549787770
Status : Answered
Chosen Option : 4

Q.8 Select the number from among the given options that can replace the question mark (?) in the following series.

71, 56, 44, 35, 29, ?

- Ans
- 1. 26
 - 2. 20
 - 3. 29
 - 4. 23

Question ID : 6549786354
Status : Answered
Chosen Option : 1

Q.9 Select the option in which the numbers are related in the same way as are the numbers of the following set.

47 : 58 : 71

- Ans
- 1. 72 : 81 : 90
 - 2. 89 : 98 : 106
 - 3. 76 : 89 : 105
 - 4. 68 : 80 : 88

Question ID : 6549786352
Status : Answered
Chosen Option : 2

Q.10 Four numbers have been given, out of which three are alike in some manner and one is different. Select the number that is different.

- Ans
- 1. 463
 - 2. 308
 - 3. 137
 - 4. 229

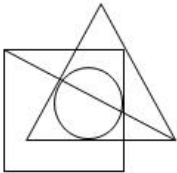
Question ID : 6549787769
Status : Not Answered
Chosen Option : --

Q.11 Four letter-clusters have been given, out of which three are alike in some manner and one is different. Select the letter-cluster that is different.

- Ans
- 1. GKPJ
 - 2. TXBV
 - 3. KOLF
 - 4. QUFZ

Question ID : 6549787778
 Status : Answered
 Chosen Option : 4

Q.12 Select the option that is embedded in the given figure (rotation is NOT allowed).



- Ans
- 1.
 - 2.
 - 3.
 - 4.

Question ID : 6549786370
 Status : Answered
 Chosen Option : 4

Q.13 In a certain code language, VICTORY is coded as 29472435 and HASTY is coded as 2781119. How will SUBLIME be coded in that language?

- Ans
- 1. 2143152558
 - 2. 2134152558
 - 3. 1514131285
 - 4. 1213141585

Question ID : 6549787772
 Status : Not Answered
 Chosen Option : --

Q.14 Read the given statements and conclusions carefully. Assuming that the information given in the statements is true, even if it appears to be at variance with commonly known facts, decide which of the given conclusions logically follow(s) from the statements.

Statements:

Some dogs are bulls.
All bulls are donkeys.

Conclusions:

I. All dogs are donkeys.
II. Some donkeys are dogs.

- Ans
- 1. Both conclusions I and II follow.
 - 2. Only conclusion I follows.
 - 3. Only conclusion II follows.
 - 4. Neither conclusion I nor II follows.

Question ID : 6549786366

Status : Answered

Chosen Option : 3

Q.15 Select the option in which the words share the same relationship as that shared by the given pair of words.

Mosquito : Swarm

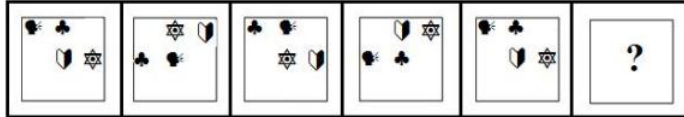
- Ans
- 1. Monkey : Pride
 - 2. Shark : School
 - 3. Snake : Sleuth
 - 4. Cat : Murder

Question ID : 6549787777

Status : Answered

Chosen Option : 2

Q.16 Select the figure from among the given options that can replace the question mark (?) in the following series.



Ans



Question ID : 6549787782
Status : Answered
Chosen Option : 1

Q.17 Select the option that is related to the third number in the same way as the second number is related to the first number.

18 : 163 :: 24 : ?

- Ans
- ✗ 1. 216
 - ✓ 2. 289
 - ✗ 3. 298
 - ✗ 4. 222



Question ID : 6549787765
Status : Answered
Chosen Option : 4

Q.18 Which two digits and signs need to be interchanged so as to balance the given equation?

$65 + 13 - 119 \div 32 \times 8 = 175$

- Ans
- ✗ 1. 8 and 3; \times and \div
 - ✓ 2. 9 and 8; $+$ and \div
 - ✗ 3. 5 and 8; $-$ and \times
 - ✗ 4. 2 and 9; $+$ and \times

Question ID : 6549786350
Status : Answered
Chosen Option : 2

Q.19 The District Transport Authority has started special bus services for college going students. One bus starts from village P. The number of girls in the bus is one-fourth of the number of boys. In village Q, 20 boys leave the bus at their college stop and ten girls enter the bus. Now the number of boys and girls is equal. How many students enter the bus in the beginning?

- Ans
- 1. 60
 - 2. 40
 - 3. 30
 - 4. 50

Question ID : 6549787763
Status : Answered
Chosen Option : 4

Q.20 Select the option that is related to the third term in the same way as the second term is related to the first term.

OUTSTAY : AOSTTUY :: ROUGHLY : ?

- Ans
- 1. GUROHLY
 - 2. ORGULHY
 - 3. GHLOORUY
 - 4. GUORYLH

Question ID : 6549786359
Status : Answered
Chosen Option : 2

Q.21 Four options have been given, out of which three are alike in some manner and one is different. Select the option that is different.

- Ans
- 1. Bangladesh
 - 2. Singapore
 - 3. Indonesia
 - 4. Sri Lanka

Question ID : 6549786365
Status : Answered
Chosen Option : 4

Q.22 Select the option that is related to the third word in the same way as the second word is related to the first word.

Flock : Sheep :: Crowd : ?

- Ans
- 1. Swans
 - 2. Human
 - 3. Fly
 - 4. Fish

Question ID : 6549786360
Status : Answered
Chosen Option : 2

Q.23 Select the combination of letters that when sequentially placed in the blanks of the given letter series will complete the series.

kji_k__ikji_k__i

- Ans
- 1. jkjkjk
 - 2. ijiji
 - 3. kjkij
 - 4. ikjkj

Question ID : 6549786967
Status : Answered
Chosen Option : 2

Q.24 In a certain code language, EXTREME is written as VCGIVNV. How will INITIAL be written in that language?

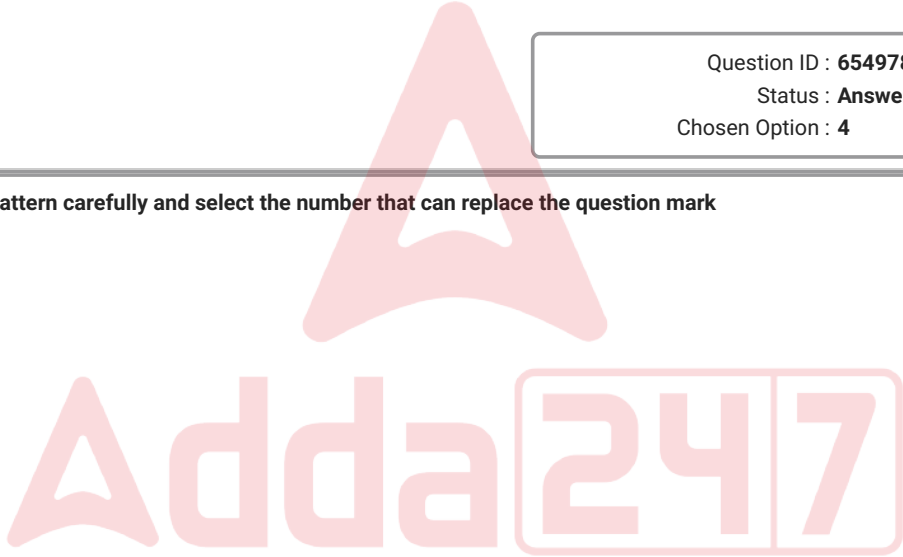
- Ans
- 1. SMSGSZP
 - 2. RMSHRZP
 - 3. SNRGS AO
 - 4. RMRGRZO

Question ID : 6549786357
Status : Answered
Chosen Option : 4

Q.25 Study the given pattern carefully and select the number that can replace the question mark (?) in it.

13 50 8
12 39 5
15 51 ?

- Ans
- 1. 7
 - 2. 10
 - 3. 12
 - 4. 9



Question ID : 6549787767
Status : Not Answered
Chosen Option : --

Q.1 The value of $\frac{5}{4} \times 2\frac{2}{3} \div \frac{5}{9}$ of $1\frac{1}{5} + \frac{2}{25} \times 4\frac{1}{6} \div \frac{2}{7}$ of $2\frac{1}{3}$ is:

- Ans
- 1. $5\frac{1}{2}$
 - 2. $3\frac{1}{2}$
 - 3. $2\frac{1}{2}$
 - 4. $1\frac{1}{2}$

Question ID : 6549786391
Status : Not Answered
Chosen Option : --

Q.2 If $x + y + z = 13$, $x^2 + y^2 + z^2 = 91$ and $xz = y^2$, then the difference between z and x is:

- Ans
- 1. 3
 - 2. 8
 - 3. 5
 - 4. 9

Question ID : 6549786388
Status : Answered
Chosen Option : 3

Q.3 If $\tan x = \cot(48^\circ + 2x)$, and $0^\circ < x < 90^\circ$, then what is the value of x ?

- Ans
- 1. 12°
 - 2. 14°
 - 3. 16°
 - 4. 21°

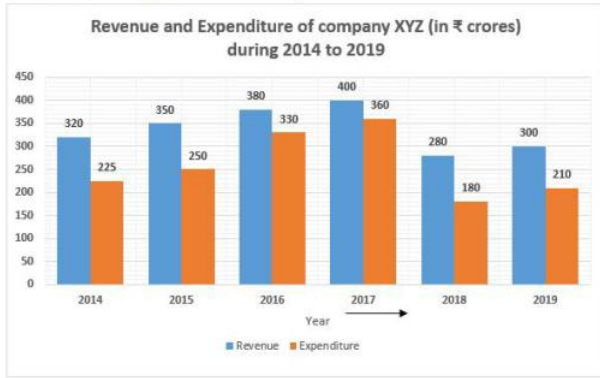
Question ID : 6549786394
Status : Answered
Chosen Option : 2

Q.4 The radius of a sphere is 9 cm. It is melted and drawn into a wire of radius 0.3 cm. The length of the wire is:

- Ans
- 1. 112 m
 - 2. 108 m
 - 3. 118 m
 - 4. 106 m

Question ID : 6549786376
Status : Answered
Chosen Option : 2

Q.5 Study the given graph and answer the question that follows.



The total revenue of the company in 2014, 2016 and 2018 is what percentage of the total expenditure in 2015 to 2017 and 2019 (correct to one decimal place)?

- Ans
- 1. 85.2%
 - 2. 84.3%
 - 3. 83.4%
 - 4. 81.6%

Question ID : 6549787812
 Status : Answered
 Chosen Option : 1

Q.6 If the five-digit number $672xy$ is divisible by 3, 7 and 11, then what is the value of $(6x + 5y)$?

- Ans
- 1. 23
 - 2. 24
 - 3. 16
 - 4. 17

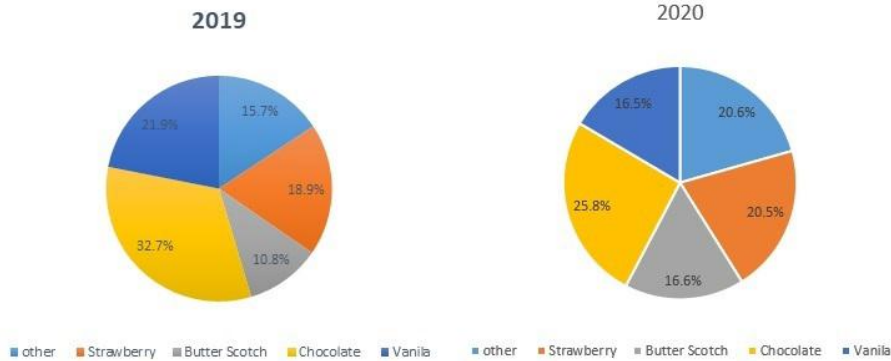
Question ID : 6549787804
 Status : Answered
 Chosen Option : 4

Q.7 In $\triangle XYZ$, P is the midpoint of side XZ and Q is a point on side XY such that QZ bisects PY . If $XQ = 24$ cm, then what is the length (in cm) of QY ?

- Ans
- 1. 6
 - 2. 18
 - 3. 8
 - 4. 12

Question ID : 6549787799
 Status : Answered
 Chosen Option : 4

Q.8 Study the given pie-charts and answer the question that follows.
The pie charts represent the popularity of ice-cream flavours among families in the years 2019 and 2020.



If 1% increase resulted in annual additional sales of ₹10,000, then how much (in ₹), did the combined Strawberry, other and Butterscotch sales increase from 2019 to 2020?

- Ans**
- 1. 1,23,000
 - 2. 1,32,000
 - 3. 3,12,000
 - 4. 2,13,000

Question ID : 6549787002
Status : Not Answered
Chosen Option : --

Q.9 The simple interest on a sum of ₹8,000 at a certain rate per cent per annum for 3 years is ₹3,600. What will be the amount (in ₹) of the same sum after 2 years at the same rate, if the interest is compounded 8-monthly?

- Ans**
- 1. 11,239
 - 2. 10,450
 - 3. 10,580
 - 4. 10,648

Question ID : 6549787796
Status : Answered
Chosen Option : 4

Q.10 Two successive discounts each of $x\%$ on the marked price of an article are equal to a single discount of ₹350. If the marked price of the article is ₹800, then the value of x is:

- Ans**
- 1. 27.5%
 - 2. 20%
 - 3. 25%
 - 4. 22.5%

Question ID : 6549786378
Status : Answered
Chosen Option : 4

Q.11 The speed of a train is 78 km/h . It crosses a tunnel in 45 s and overtakes a person walking at a speed of 6 km/h , in the same direction, in 15 s. The length (in m) of the tunnel is:

- Ans 1. 675
 2. 650
 3. 975
 4. 780

Question ID : 6549787789
 Status : Answered
 Chosen Option : 3

Q.12 A bag contains coins of denomination ₹1, ₹2 and ₹5 in the ratio of 4 : 5 : 8. If the total value of these coins is ₹432, then what is the number of ₹2 coins?

- Ans 1. 40
 2. 30
 3. 50
 4. 60

Question ID : 6549787795
 Status : Answered
 Chosen Option : 1

Q.13 A chord PQ of a circle C_1 of radius 9.25 cm touches another circle C_2 that is concentric to C_1 , and the radius of C_2 is 3 cm . What is the length (in cm) of PQ ?

- Ans 1. 12
 2. 19.5
 3. 17.5
 4. 15

Question ID : 6549787797
 Status : Answered
 Chosen Option : 3

Q.14 In an isosceles triangle ABC , $AB = AC$ and AD is perpendicular to BC . If $AD = 12$ cm and the perimeter of $\triangle ABC$ is 36 cm, then the length of BC (in cm) is:

- Ans 1. 5
 2. 12
 3. 10
 4. 13

Question ID : 6549786386
 Status : Answered
 Chosen Option : 3

Q.15 The price of a commodity increases by 28%. However, the expenditure on it increases by 12%. What is the percentage increase or decrease in its consumption?

- Ans
- 1. 16% Increase
 - 2. 12.5% Decrease
 - 3. 12.5% Increase
 - 4. 16% Decrease

Question ID : 6549787793
Status : Answered
Chosen Option : 2

Q.16 The coefficient of x^3y in $(x - 2y) \times (5x + y)^3$ is:

- Ans
- 1. 75
 - 2. -150
 - 3. 250
 - 4. -175

Question ID : 6549787801
Status : Answered
Chosen Option : 1

Q.17 A can complete a work in 20 days, while B can complete the same work in 25 days. Both worked together for 10 days and then C alone completed the remaining work in 10 days. In how many days will A, B and C together complete the same work?

- Ans
- 1. 10 days
 - 2. 5 days
 - 3. 8 days
 - 4. 12 days

Question ID : 6549786374
Status : Answered
Chosen Option : 1

Q.18 The average height of a certain number of students in a group is 155.6 cm . If 12 students having an average height of 150.5 cm join the group and 7 students having an average height of 159 cm leave the group, the average height of the students in the group will decrease by 34 mm . What is the number of students, initially, in the group?

- Ans
- 1. 30
 - 2. 25
 - 3. 40
 - 4. 20

Question ID : 6549787791
Status : Answered
Chosen Option : 1

Q.19

If $\cos\theta = \frac{\sqrt{3}}{2}$, then the value of $\frac{2-\sin^2\theta}{1-\cot^2\theta} + (\sec^2\theta + \operatorname{cosec}\theta)$ is:

Ans

- 1. $\frac{25}{12}$
- 2. $\frac{59}{24}$
- 3. $-\frac{25}{12}$
- 4. $-\frac{59}{24}$

Question ID : 6549786392

Status : Answered

Chosen Option : 4

Q.20 Study the given graph which shows the number of workers with their daily wages and answer the question that follows.



What is the ratio of the total number of workers whose daily wages are ₹450 or above but less than ₹500 to the total number of workers whose daily wages are ₹650 or above?

Ans

- 1. 9 : 7
- 2. 5 : 2
- 3. 2 : 5
- 4. 7 : 9

Question ID : 6549786395

Status : Not Answered

Chosen Option : --

Q.21 The value of

$$\frac{\tan 50^\circ + \sec 50^\circ}{\cot 40^\circ + \operatorname{cosec} 40^\circ} + \cos^2 65^\circ + \sin 65^\circ \cos 25^\circ + \tan 30^\circ$$
 is:

- Ans
- 1. $\frac{\sqrt{3}(\sqrt{3}+1)}{3}$
 - 2. $2 + \sqrt{3}$
 - 3. $\frac{6 + \sqrt{3}}{3}$
 - 4. $1 + \sqrt{3}$

Question ID : 6549787807
Status : Not Answered
Chosen Option : --

Q.22 In a circle, AB and DC are two chords. When AB and DC are produced, they meet at P. If PC = 2.8 cm, PB = 3.15 cm and AB = 3.85 cm, then CD = ?

- Ans
- 1. 5.075 cm
 - 2. 4.175 cm
 - 3. 6.975 cm
 - 4. 7.875 cm

Question ID : 6549786384
Status : Not Answered
Chosen Option : --

Q.23 The pie chart shows the money spent by Aditya through credit cards of different banks. The total money spent by him through credit cards in a year is ₹3,60,000.



How much more money was spent through Card C as compared to Card D?

- Ans
- 1. ₹2,000
 - 2. ₹40,000
 - 3. ₹20,000
 - 4. ₹1,80,000

Question ID : 6549788113
Status : Not Answered
Chosen Option : --

Q.24 A person sold an article at a loss of 12%. Had he sold it at a gain of 10.5%, he would have got ₹112.50 more. What is the original selling price (in ₹) of the article?

- Ans
- 1. 440.00
 - 2. 560.00
 - 3. 552.50
 - 4. 500.00

Question ID : 6549786380
Status : Answered
Chosen Option : 3

Q.25 If $x^2 + 4y^2 + 3z^2 + \frac{19}{4} = 2\sqrt{3}(x + y + z)$, then the value of $(x - 4y + 3z)$ is:

- Ans
- 1. $\frac{\sqrt{3}}{3}$
 - 2. $2\sqrt{3}$
 - 3. $\sqrt{3}$
 - 4. $\frac{\sqrt{3}}{2}$

Question ID : 6549786389
Status : Not Answered
Chosen Option : --

Section : General Awareness

Q.1 Who among the following was the first Indian Governor of the Reserve Bank of India?

- Ans
- 1. KC Neogy
 - 2. CD Deshmukh
 - 3. Liaquat Ali Khan
 - 4. Morarji Desai

Question ID : 6549787820
Status : Answered
Chosen Option : 1

Q.2 Which of the following hormone is secreted by brain that helps to regulate sleep-wake cycles?

- Ans
- 1. Insulin
 - 2. Melatonin
 - 3. Oxytoxin
 - 4. Aldosterone

Question ID : 6549786408
Status : Answered
Chosen Option : 4

Q.3 Which of the following is one of the file formats used for web graphics?

- Ans
- 1. .gif
 - 2. .exe
 - 3. .txt
 - 4. .docx

Question ID : 6549786400
Status : Answered
Chosen Option : 2

Q.4 In which of the following years did the Prime Minister of India, Narendra Modi, launch Atal Pension Yojana?

- Ans
- 1. 2014
 - 2. 2018
 - 3. 2020
 - 4. 2015

Question ID : 6549786407
Status : Answered
Chosen Option : 4

Q.5 Shanti Swarup Bhatnagar Prize is associated with which of the following disciplines?

- Ans
- 1. Sports
 - 2. Literature
 - 3. Music
 - 4. Science and Technology

Question ID : 6549787832
Status : Not Answered
Chosen Option : --

Q.6 In which year did the Central Government of India appoint the States Reorganisation Commission?

- Ans
- 1. 1958
 - 2. 1953
 - 3. 1950
 - 4. 1951

Question ID : 6549786420
Status : Not Answered
Chosen Option : --

Q.7 In which of the following North Eastern states is the first ever specialised 'Ginger' Processing Plant being revived in December 2020?

- Ans
- 1. Mizoram
 - 2. Assam
 - 3. Sikkim
 - 4. Meghalaya

Question ID : 6549787828
Status : Answered
Chosen Option : 2

Q.8 Dandeli Wildlife Sanctuary is located in which of the following states?

- Ans
- 1. Karnataka
 - 2. Jharkhand
 - 3. Sikkim
 - 4. Kerala

Question ID : 6549787827
Status : Not Answered
Chosen Option : --

Q.9 In which of the following districts was Telangana's first rescue and rehabilitation centre for monkeys, launched in December 2020?

- Ans
- 1. Narayanpet
 - 2. Nirmal
 - 3. Mulugu
 - 4. Adilabad

Question ID : 6549787817
Status : Not Answered
Chosen Option : --

Q.10 Which of the following is a salt-water lake?

- Ans
- 1. Pangong Tso
 - 2. Kolleru
 - 3. Nainital
 - 4. Loktak

Question ID : 6549786411
Status : Not Answered
Chosen Option : --

Q.11 FIFA World Cup 2022 venue, Ahmad Bin Ali Stadium, which was built by Indian construction giant Larsen & Turbo is located in which of the following countries?

- Ans
- 1. Qatar
 - 2. Oman
 - 3. Bahrain
 - 4. Saudi Arabia

Question ID : 6549787837
Status : Answered
Chosen Option : 1

Q.12 Which of the following is a vector quantity?

- Ans
- 1. Electric charge
 - 2. Electric flux
 - 3. Electric field
 - 4. Electric current

Question ID : 6549786410
Status : Answered
Chosen Option : 3

Q.13 According to the Constitution of India a Judge of the Supreme Court cannot be removed from office except by an order of the _____.

- Ans
- 1. Vice President
 - 2. Attorney General
 - 3. Prime Minister
 - 4. President

Question ID : 6549787833
Status : Answered
Chosen Option : 2

Q.14 Who among the following persons was awarded the Padma Shri for social work in 2019?

- Ans
- 1. Narsingh Dev Jamwal
 - 2. Ramaswami Venkataswami
 - 3. Anup Ranjan Pandey
 - 4. Devarapalli Prakash Rao

Question ID : 6549786417
Status : Not Answered
Chosen Option : --

Q.15 Who was appointed as the first Surveyor General of India in 1815?

- Ans
- 1. John Hodgson
 - 2. Thomas Hickey
 - 3. Henry Walpole
 - 4. Colin Mackenzie

Question ID : 6549786415
Status : Answered
Chosen Option : 3

Q.16 Kisan Fasal Rahat Yojana, which will replace (PMFBY) Pradhan Mantri Fasal Bima Yojna, has been launched by which of the following states government in December 2020?

- Ans
- 1. Jharkhand
 - 2. Punjab
 - 3. Andhra Pradesh
 - 4. Chhattisgarh

Question ID : 6549787818
Status : Not Answered
Chosen Option : --

Q.17 Who among the following persons was elected, unopposed, as the President of Hockey India in November 2020?

- Ans
- 1. Gyanendro Ningombam
 - 2. David John
 - 3. Mohd Mushtaque Ahmad
 - 4. Harendra Singh

Question ID : 6549786422
Status : Answered
Chosen Option : 1

Q.18 Where is Mount Diavolo, an important mountain peak in the Andaman and Nicobar Islands, located?

- Ans
- 1. Great Nicobar
 - 2. North Andaman
 - 3. Middle Andaman
 - 4. South Andaman

Question ID : 6549786412
Status : Not Answered
Chosen Option : --

Q.19 Raja Parba is a unique festival celebrating the onset of monsoon and the earth's womanhood. It is celebrated in which of the following states?

- Ans
- 1. Bihar
 - 2. Odisha
 - 3. Meghalaya
 - 4. Uttar Pradesh

Question ID : 6549787815
Status : Answered
Chosen Option : 2

Q.20 Ustad Iqbal Ahmed Khan, a recipient of the Sangeet Natak Academy Award, belongs to the _____ Gharana.

- Ans
- 1. Dilli
 - 2. Jaipur-Atrauli
 - 3. Gwalior
 - 4. Agra

Question ID : 6549786402
Status : Answered
Chosen Option : 1

Q.21 Which country ranked first in the 'Human Development Report 2020' released by the United Nations Development Programme?

- Ans
- 1. Norway
 - 2. Germany
 - 3. Switzerland
 - 4. Hong Kong

Question ID : 6549786405
Status : Answered
Chosen Option : 1

Q.22 _____ is an advanced discipline that teaches students how to analyse and find patterns in large amounts of data.

- Ans
- 1. Computer science
 - 2. Data science
 - 3. Software development
 - 4. Computer programming

Question ID : 6549787813
Status : Answered
Chosen Option : 2

Test

Prime

By Adda247

Previous Year Papers PDF

PRACTICE MORE, SCORE HIGHER!



Free
25,000+
PDF's

High-Quality | Exam-Wise | Updated Regularly

ATTEMPT AS
MOCK



Turn PDFs into real exam experience.
Analyze. Improve. Succeed.



Topic-wise & Exam-wise PDFs



Download & Study Offline



Attempt as Mock & Track Score



Smart Analysis & Performance

AVAILABLE IN



Banking



SSC



Railway



Teaching



UGC



Agriculture



Nursing



Bihar



UP



Punjab



WB



Odisha



TN



AP & Telangana



Haryana



DOWNLOAD THE APP



Q.23 Who among the following sportsmen is the brand ambassador of SBOTOP, which is a global online betting platform?

- Ans
- 1. Bajrang Punia
 - 2. Sushil Kumar
 - 3. Rohit Sharma
 - 4. Dwayne Bravo

Question ID : 6549787835
Status : Not Answered
Chosen Option : --

Q.24 Which of the following parts of the body/glands maintains the body temperature?

- Ans
- 1. Pituitary
 - 2. Adrenal
 - 3. Thyroid
 - 4. Hypothalamus

Question ID : 6549787823
Status : Answered
Chosen Option : 4

Q.25 _____'s foster mother Mahapajapati Gotami was the first woman to be ordained as a bhikkhuni.

- Ans
- 1. Ashoka
 - 2. Buddha
 - 3. Arjuna
 - 4. Bindusara

Question ID : 6549787830
Status : Not Answered
Chosen Option : --