

Combined Higher Secondary Level Examination 2020 (Tier-I)

Roll Number	
Candidate Name	
Venue Name	
Exam Date	04/08/2021
Exam Time	3:00 PM - 4:00 PM
Subject	Combined Higher Secondary Level Exam 2020

Section : English Language

Q.1 In the given sentence identify the segment which contains the grammatical error.

I would have died if he did not dress my wound that day.

- Ans
- 1. if he did not dress
 - 2. that day
 - 3. I would have died
 - 4. my wound

Question ID : 6549787841
Status : Answered
Chosen Option : 3

Q.2 Select the most appropriate word to fill in the blank.

Priya has a very _____ nature and does not accept financial help even from her own parents.

- Ans
- 1. impartial
 - 2. disinterested
 - 3. biased
 - 4. independent

Question ID : 6549787054
Status : Answered
Chosen Option : 4

Q.3 Select the most appropriate synonym of the given word.

Encroach

- Ans
- 1. Disregard
 - 2. Ignore
 - 3. Intrude
 - 4. Forget

Question ID : 6549787052
Status : Answered
Chosen Option : 3

**Test
Prime**

By Adda247

ALL EXAMS, ONE SUBSCRIPTION



Test. Analyze. Improve. Repeat.



Don't just *prepare*. Perform.

Test Prime — built only for mock tests.



1,50,000+
Mock Tests



25,000+
Previous Year Papers



800+
Exam Covered



500% Refund
on Selection



5 lakh+
Free Quizzes



Daily
Free PDFs



Job Alerts
Stay Updated

- Multilingual
- Detailed Solution
- Strong and Weak Areas



**All India
Rankings**

Compete with lakhs.
Rank. Improve. Repeat.



← Adda247 test prime

Rating ▾

Editors' choice

New



Adda247 Test Prime
Adda Education • Education
📌 Installed



DOWNLOAD THE APP



8/20/2021

<https://ssc.digialm.com/per/g27/pub/2207/touchstone/AssessmentQPHTMLMode1//2207O2180/2207O2180S3D90478/1628848177...>

Q.4 Sentences of a paragraph are given below in jumbled order. Arrange the sentences in the right order to form a meaningful and coherent paragraph.

- A. Cheetahs are one of the world's most-recognisable cats, known especially for their speed.
B. Their faces too are distinguished by prominent black lines that curve from the inner corner of each eye to the outer corners of the mouth, like a well-worn trail of inky tears.
C. Cheetahs are covered almost entirely with small black spots on a background of pale yellow and have a white underbelly.
D. They have a long, slender body measuring 1.2 metres (4 feet), with a long tail (65–85 cm [2–3 feet]) that generally ends in a white tuft.

- Ans
- 1. BADC
 - 2. ABDC
 - 3. DABC
 - 4. CADB

Question ID : 6549787040
Status : Answered
Chosen Option : 2

Q.5 Select the most appropriate meaning of the given idiom.

Pull something off

- Ans
- 1. Drag something forcibly
 - 2. Take out the cover or lid
 - 3. Make something happen
 - 4. Make a lot of noise

Question ID : 6549787046
Status : Answered
Chosen Option : 3

Q.6 Select the most appropriate meaning of the given idiom.

Go to the dogs

- Ans
- 1. Fail miserably
 - 2. Deteriorate shockingly
 - 3. Want something badly
 - 4. Go crazy

Question ID : 6549787855
Status : Answered
Chosen Option : 2

Q.7 Select the option that can be used as a one-word substitute for the given group of words.

Fond of company

- Ans
- 1. Cheerful
 - 2. Gracious
 - 3. Gregarious
 - 4. Amiable

Question ID : 6549787051
Status : Answered
Chosen Option : 3

8/20/2021

<https://ssc.digialm.com//per/g27/pub/2207/touchstone/AssessmentQPHTMLMode1//2207O2180/2207O2180S3D90478/1628848177...>

Q.8 Select the most appropriate option to substitute the underlined segment in the given sentence. If there is no need to substitute it, select 'No improvement'.

The child is crying because she can't find her mother.

- Ans
- 1. No improvement
 - 2. A child is crying
 - 3. The child has cried
 - 4. The child were crying

Question ID : 6549787850
Status : Answered
Chosen Option : 2

Q.9 Select the INCORRECTLY spelt word.

- Ans
- 1. Callous
 - 2. Vicious
 - 3. Hienous
 - 4. Vicarious

Question ID : 6549787049
Status : Answered
Chosen Option : 3

Q.10 Select the most appropriate ANTONYM of the given word.

INDIGNANT

- Ans
- 1. Annoyed
 - 2. Pleased
 - 3. Upset
 - 4. Peeved

Question ID : 6549787853
Status : Answered
Chosen Option : 2

Q.11 Select the most appropriate ANTONYM of the given word.

Harrowing

- Ans
- 1. Worrying
 - 2. Repetitive
 - 3. Pleasant
 - 4. Stressful

Question ID : 6549787044
Status : Answered
Chosen Option : 3

Q.12 Select the option that expresses the given sentence in direct speech.

My friends say that many young people are very active on social media now.

- Ans
- 1. My friends say, "Many young people were very active on social media now."
 - 2. My friends said, "Many young people were very active on social media then."
 - 3. My friends say, "Many young people are very active on social media now."
 - 4. My friends are saying, "Many young people are very active on social media then."

Question ID : 6549787031
Status : Answered
Chosen Option : 3

Q.13 Select the most appropriate option to substitute the underlined segment in the given sentence. If there is no need to substitute it, select 'No substitution required'.

The roof is being held up over two stone pillars.

- Ans
- 1. is hold up on
 - 2. No substitution required
 - 3. was held above
 - 4. is held up by

Question ID : 6549787043
Status : Answered
Chosen Option : 4

Q.14 Given below are four jumbled sentences. Out of the given options pick the one that gives their correct order.

- A. He confessed that the only thing he was afraid of was snakes.
- B. On my second visit to West Africa I met a young man on board the ship.
- C. I told him that it was very unlikely that he would see any.
- D. He was going out to take up a job in a banana plantation.

- Ans
- 1. BDAC
 - 2. ADBC
 - 3. BACD
 - 4. DBAC

Question ID : 6549787849
Status : Not Attempted and
Marked For Review
Chosen Option : --

Q.15 Select the INCORRECTLY spelt word.

- Ans
- 1. Entreat
 - 2. Entrust
 - 3. Enveloppe
 - 4. Envoy

Question ID : 6549787856
Status : Answered
Chosen Option : 3

Q.16 Select the word which means the same as the group of words given.

A person who arranges and sells cut flowers

- Ans
- 1. Botanist
 - 2. Anthropologist
 - 3. Horticulturist
 - 4. Florist

Question ID : 6549787858
Status : Answered
Chosen Option : 4

Q.17 Select the correct passive form of the given sentence.

At the last moment, a fireman pulled out Manohar from the burning bus.

- Ans
- 1. At the last moment, Manohar was pulling out of the burning bus by a fireman.
 - 2. At the last moment, Manohar was pulled out of the burning bus by a fireman.
 - 3. At the last moment, Manohar had been pulled out of the burning bus by a fireman.
 - 4. At the last moment, a fireman was pulled out of the burning bus by Manohar.

Question ID : 6549787838
Status : Answered
Chosen Option : 2

Q.18 Select the most appropriate word to fill in the blank in the given sentence.

The passengers waited _____ for the local train to arrive.

- Ans
- 1. hastily
 - 2. meekly
 - 3. patiently
 - 4. considerably

Question ID : 6549787863
Status : Answered
Chosen Option : 3

Q.19 Select the most appropriate synonym of the given word.

APPARENTLY

- Ans
- 1. Seemingly
 - 2. Considerably
 - 3. Unlikely
 - 4. Questionably

Question ID : 6549787861
Status : Answered
Chosen Option : 3

Q.20 The following sentence has been divided into parts. One of them may contain an error. Select the part that contains the error from the given options. If you don't find any error, mark 'No error' as your answer.

At the workshop, / they were taught how to nail / the pieces of wood together to create toys.

- Ans**
- 1. No error
 - 2. they were taught how to nail
 - 3. the pieces of wood together to create toys
 - 4. At the workshop

Question ID : **6549787032**
Status : **Not Answered**
Chosen Option : --

Comprehension:

In the following passage some words have been deleted. Fill in the blanks with the help of the alternatives given. Select the most appropriate option for each blank.

Equiano was born in 1745 in Nigeria. When he (1) _____ about eleven, Equiano was kidnapped and sold to slave traders headed (2) _____ the West Indies. Though he spent a brief (3) _____ in the state of Virginia, much of Equiano's time (4) _____ serving on slave ships and British navy vessels. In his service on these (5) _____, Equiano traveled extensively.

SubQuestion No : 21

Q.21 Select the most appropriate option for blank number1.

- Ans**
- 1. is
 - 2. were
 - 3. are
 - 4. was

Question ID : **6549787843**
Status : **Answered**
Chosen Option : **4**

Comprehension:

In the following passage some words have been deleted. Fill in the blanks with the help of the alternatives given. Select the most appropriate option for each blank.

Equiano was born in 1745 in Nigeria. When he (1) _____ about eleven, Equiano was kidnapped and sold to slave traders headed (2) _____ the West Indies. Though he spent a brief (3) _____ in the state of Virginia, much of Equiano's time (4) _____ serving on slave ships and British navy vessels. In his service on these (5) _____, Equiano traveled extensively.

SubQuestion No : 22

Q.22 Select the most appropriate option for blank number 2.

- Ans**
- 1. on
 - 2. to
 - 3. in
 - 4. about

Question ID : **6549787844**
Status : **Not Answered**
Chosen Option : --

8/20/2021

<https://ssc.digialm.com//per/g27/pub/2207/touchstone/AssessmentQPHTMLMode1//2207O2180/2207O2180S3D90478/1628848177...>**Comprehension:**

In the following passage some words have been deleted. Fill in the blanks with the help of the alternatives given. Select the most appropriate option for each blank.

Equiano was born in 1745 in Nigeria. When he (1) _____ about eleven, Equiano was kidnapped and sold to slave traders headed (2) _____ the West Indies. Though he spent a brief (3) _____ in the state of Virginia, much of Equiano's time (4) _____ serving on slave ships and British navy vessels. In his service on these (5) _____, Equiano traveled extensively.

SubQuestion No : 23**Q.23 Select the most appropriate option for blank number 3.**

- Ans
- 1. era
 - 2. age
 - 3. period
 - 4. life

Question ID : 6549787845
Status : Not Answered
Chosen Option : --

Comprehension:

In the following passage some words have been deleted. Fill in the blanks with the help of the alternatives given. Select the most appropriate option for each blank.

Equiano was born in 1745 in Nigeria. When he (1) _____ about eleven, Equiano was kidnapped and sold to slave traders headed (2) _____ the West Indies. Though he spent a brief (3) _____ in the state of Virginia, much of Equiano's time (4) _____ serving on slave ships and British navy vessels. In his service on these (5) _____, Equiano traveled extensively.

SubQuestion No : 24**Q.24 Select the most appropriate option for blank number 4.**

- Ans
- 1. spent
 - 2. was spent
 - 3. is spent
 - 4. has been spent

Question ID : 6549787846
Status : Not Answered
Chosen Option : --

Comprehension:

In the following passage some words have been deleted. Fill in the blanks with the help of the alternatives given. Select the most appropriate option for each blank.

Equiano was born in 1745 in Nigeria. When he (1) _____ about eleven, Equiano was kidnapped and sold to slave traders headed (2) _____ the West Indies. Though he spent a brief (3) _____ in the state of Virginia, much of Equiano's time (4) _____ serving on slave ships and British navy vessels. In his service on these (5) _____, Equiano traveled extensively.

SubQuestion No : 25**Q.25 Select the most appropriate option for blank number 5.**

- Ans
- 1. liners
 - 2. crafts
 - 3. tankers
 - 4. ships

Question ID : 6549787847
Status : Not Answered
Chosen Option : --

Section : General Intelligence

Q.1 Nirmala introduced Rahul as the son of the sister of her mother. How is Nirmala related to Rahul?

- Ans
- 1. Brother
 - 2. Brother-in-law
 - 3. Cousin
 - 4. Maternal uncle

Question ID : 6549787069
Status : Answered
Chosen Option : 3

Q.2 Which two signs should be interchanged to balance the following equation?

$$646 \div 19 - 746 + 20 \times 34 = 100$$

- Ans
- 1. - and ×
 - 2. × and +
 - 3. - and +
 - 4. × and ÷

Question ID : 6549787865
Status : Answered
Chosen Option : 3

Q.3 Select the correct option that indicates the arrangement of the given words in a logical and meaningful order.

1. Prescription
2. Diagnosis
3. Illness
4. Follow-up
5. Recovery

- Ans
- 1. 3-4-1-2-5
 - 2. 1-2-5-3-4
 - 3. 3-2-1-5-4
 - 4. 2-3-1-4-5

Question ID : 6549787063
Status : Answered
Chosen Option : 4

Q.4 Four letter-clusters have been given, out of which three are alike in some manner and one is different. Select the letter-cluster that is different.

- Ans
- 1. PVBH
 - 2. CIOU
 - 3. SYDJ
 - 4. KQWC

Question ID : 6549787071
Status : Answered
Chosen Option : 3

Q.5 In a certain code language, CANDIDATE is coded as 846292417 and ACTION is coded as 481936. How will DICTATION be coded in that language?

- Ans
- 1. 493212965
 - 2. 298242956
 - 3. 493212975
 - 4. 298141936

Question ID : 6549787065
 Status : Answered
 Chosen Option : 4

Q.6 Select the Venn diagram that best represents the relationship between the following classes.

Teachers, Graduates, Tennis players

- Ans
- 1.
 - 2.
 - 3.
 - 4.

Question ID : 6549787080
 Status : Answered
 Chosen Option : 3

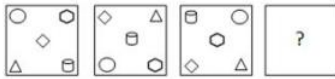
Q.7 Three different positions of the same dice are shown. Select the number that will be on the face opposite to the face having 6.



- Ans
- 1. 2
 - 2. 4
 - 3. 3
 - 4. 1

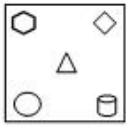
Question ID : 6549787074
 Status : Answered
 Chosen Option : 1

Q.8 Select the figure from among the given options that can replace the question mark (?) in the following series.

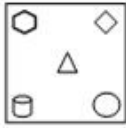


Ans

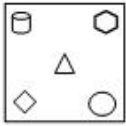
1.



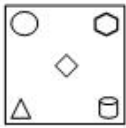
2.



3.



4.



Question ID : 6549787075
 Status : Answered
 Chosen Option : 2

Q.9 Select the option that is related to the third word in the same way as the second word is related to the first word.

Galvanometer : Electric current : : Graphometer : ?

Ans

1. Angles

2. Oscillations

3. Altitudes

4. Humidity

Question ID : 6549787875
 Status : Answered
 Chosen Option : 1

Q.10 In a certain code language, PROUD is written as WYJPK. How will GUILTY be written in that language?

Ans

1. BPBOGT

2. NDPASF

3. NPDSAF

4. BBPGOT

Question ID : 6549787872
 Status : Answered
 Chosen Option : 1

8/20/2021

<https://ssc.digialm.com//per/g27/pub/2207/touchstone/AssessmentQPHTMLMode1//2207O2180/2207O2180S3D90478/1628848177...>

Q.11 From the given options choose the one in which the set of numbers do not follow the same Logic/Rule/Relation as the numbers given in below set.

(32, 16, 96)

- Ans
- 1. (42, 21, 126)
 - 2. (26, 13, 78)
 - 3. (36, 18, 108)
 - 4. (22, 11, 68)

Question ID : 6549787867
Status : Answered
Chosen Option : 2

Q.12 Select the option in which the numbers share the same relationship as that shared by the given pair of numbers.

185 : 199

- Ans
- 1. 139 : 152
 - 2. 174 : 187
 - 3. 126 : 134
 - 4. 89 : 106

Question ID : 6549787058
Status : Not Answered
Chosen Option : --

Q.13 Select the option in which the words share the same relationship as that shared by the given pair of words.

Power : Watt

- Ans
- 1. Current : Volt
 - 2. Force : Pascal
 - 3. Volume : Pound
 - 4. Resistance : Ohm

Question ID : 6549787070
Status : Answered
Chosen Option : 4

Q.14 Select the number from among the given options that can replace the question mark (?) in the following series.

4, 5, 13, 22, 86, 111, ?

- Ans
- 1. 327
 - 2. 427
 - 3. 247
 - 4. 237

Question ID : 6549787869
Status : Answered
Chosen Option : 1

8/20/2021

https://ssc.digialm.com//per/g27/pub/2207/touchstone/AssessmentQPHTMLMode1//2207O2180/2207O2180S3D90478/1628848177...

Q.15 Four numbers have been given, out of which three are alike in some manner and one is different. Select the number that is different.

- Ans 1. 348
 2. 231
 3. 252
 4. 217

Question ID : 6549787062
 Status : Answered
 Chosen Option : 4

Q.16 A driver increases the speed of his vehicle by 5 km/h after every one hour. If the initial speed of the vehicle was 75 km/h, then what was the average speed of the vehicle in a journey of 4 hours?

- Ans 1. 82.5 km/h
 2. 83.75 km/h
 3. 83 km/h
 4. 82km/h

Question ID : 6549787056
 Status : Answered
 Chosen Option : 1

Q.17 Read the given statements and conclusions carefully. Assuming that the information given in the statements is true, even if it appears to be at variance with commonly known facts, decide which of the given conclusions logically follow(s) from the statements.

Statements:

- All plots are flats.
 All flats are hotels.
 Some hotels are restaurants.

Conclusions:

- I. Some restaurants are flats.
 II. Some hotels are plots.
 III. No plot is a restaurant.

- Ans 1. Only conclusion I follows .
 2. Only conclusion II follows .
 3. Both conclusions I and II follow .
 4. Both conclusions II and III follow .

Question ID : 6549787881
 Status : Answered
 Chosen Option : 2

Q.18 Select the option that is related to the third term in the same way as the second term is related to the first term.

AMIDST : AIMDST :: SYNTAX : ?

- Ans 1. SNYATX
 2. NYSTAX
 3. SANYTX
 4. NSYATX

Question ID : 6549787874
 Status : Marked For Review
 Chosen Option : 1

Q.19 The sequence of folding a piece of paper and the manner in which the folded paper has been cut is shown in the following figures. How would this paper look when unfolded?



Ans

- 1.
- 2.
- 3.
- 4.

Question ID : 6549787886
 Status : Answered
 Chosen Option : 4

Q.20 Select the combination of letters that when sequentially placed in the blanks of the given letter series will complete the series.

p l _ p p _ s p _ l s p p l _ p

- 1. s p p l
- 2. s l p s
- 3. l s l p
- 4. p l s p

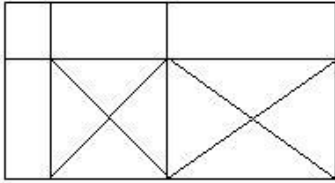
Question ID : 6549786159
 Status : Answered
 Chosen Option : 2

Q.21 Four words have been given, out of which three are alike in some manner and one is different. Select the word that is different.

- 1. Fluster
- 2. Confound
- 3. Agitate
- 4. Calm

Question ID : 6549787880
 Status : Answered
 Chosen Option : 3

Q.22 How many rectangles are there in the given figure?



- Ans
- 1. 18
 - 2. 20
 - 3. 16
 - 4. 19

Question ID : 6549787076
 Status : Answered
 Chosen Option : 4

Q.23 Select the option in which the numbers are related in the same way as are the numbers of the following set.

(2194, 1328, 726)

- Ans
- 1. (1170, 570, 228)
 - 2. (1560, 1131, 551)
 - 3. (1406, 962, 390)
 - 4. (1725, 997, 509)

Question ID : 6549787060
 Status : Not Answered
 Chosen Option : --

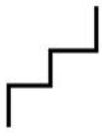
Q.24 Select the correct mirror image of the given combination when the mirror is placed at 'PQ' as shown.

ARISTOCRAT |
 P
 Q

- Ans
- 1. VBI2LOCBVL
 - 2. VBI2LCOBVL
 - 3. TARYOCRTSIRA
 - 4. TARYOCRTSIRA

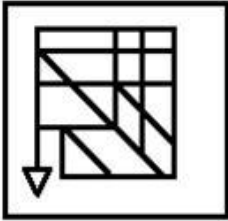
Question ID : 6549787887
 Status : Answered
 Chosen Option : 4

Q.25 Select the option in which the given figure is embedded (rotation is NOT allowed).

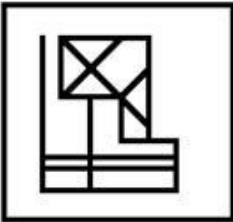


Ans

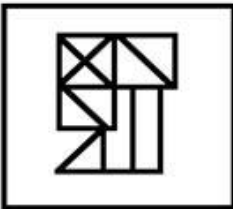
✓ 1.



✗ 2.



✗ 3.



✗ 4.



Question ID : 6549787885
Status : Answered
Chosen Option : 1

Section : Quantitative Aptitude

Q.1 When $(2^{24} - 1)$ is divided by 7, the remainder is:

Ans

✗ 1. 2

✓ 2. 0

✗ 3. 4

✗ 4. 1

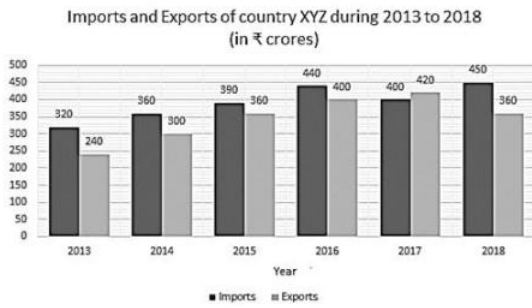
Question ID : 6549787097
Status : Answered
Chosen Option : 2

Q.2 If $a + b + c = 7$ and $a^3 + b^3 + c^3 - 3abc = 301$, then $ab + bc + ca = ?$

- Ans
- 1. -4
 - 2. -2
 - 3. 3
 - 4. 2

Question ID : 6549787904
Status : Answered
Chosen Option : 4

Q.3 Study the given graph and answer the question that follows.



By what percentage is the total exports in 2014 and 2016 less than the total imports in the same two years?

- Ans
- 1. 12.5
 - 2. 12.9
 - 3. 14.3
 - 4. 11.25

Question ID : 6549786599
Status : Answered
Chosen Option : 1

Q.4 In a circle with centre O , chord AB and diameter CD intersect each other at point E , inside the circle. If $\angle AOD = 42^\circ$ and $\angle BOC = 104^\circ$, then what is the measure (in degrees) of $\angle AED$?

- Ans
- 1. 73
 - 2. 62
 - 3. 58
 - 4. 84

Question ID : 6549787899
Status : Answered
Chosen Option : 1

Q.5 If $x^2 - 3\sqrt{2}x + 1 = 0$, then what is the value of $x^3 + \left(\frac{1}{x^3}\right)$?

- Ans
- 1. $30\sqrt{6}$
 - 2. $45\sqrt{2}$
 - 3. $15\sqrt{6}$
 - 4. $30\sqrt{2}$

Question ID : 6549787903
Status : Answered
Chosen Option : 2

Q.6 If $x^2 + 1 - 2x = 0$, $x > 0$, then $x^2(x^2 - 2) =$ _____.

- Ans
- 1. 1
 - 2. $\sqrt{2}$
 - 3. -1
 - 4. 0

Question ID : 6549787094
Status : Answered
Chosen Option : 3

Q.7 Chords AB and CD of a circle intersect externally at P. If CD = 11.6 cm, PD = 6.4 cm and PB = 7.2 cm, then AB (in cm) is equal to:

- Ans
- 1. 12
 - 2. 16
 - 3. 8.8
 - 4. 4.8

Question ID : 6549787090
Status : Answered
Chosen Option : 3

Q.8 If $2\cos^2\theta = 3(1 - \sin\theta)$, $0^\circ < \theta < 90^\circ$, then what is the value of $(\tan 2\theta + \operatorname{cosec} 3\theta - \sec 2\theta)$?

- Ans
- 1. $\sqrt{3} + 1$
 - 2. $\sqrt{3} - 1$
 - 3. $\frac{1+\sqrt{3}}{\sqrt{3}}$
 - 4. $\frac{1-\sqrt{3}}{\sqrt{3}}$

Question ID : 6549787909
Status : Answered
Chosen Option : 2

Q.9 The value of $8 \div 2$ of $3 - [56 \div 4$ of $\{4 \times 3 - (9 - 11) \div (2 \div 4$ of $4)\}$ is:

- Ans
- 1. $\frac{11}{6}$
 - 2. $\frac{5}{6}$
 - 3. $\frac{4}{3}$
 - 4. $\frac{1}{2}$

Question ID : 6549787906
Status : Answered
Chosen Option : 2

Q.10 The perimeters of two similar triangles ABC and PQR are 156 cm and 46.8 cm, respectively. If BC = 19.5 cm and QR = x cm, then the value of x is:

- Ans**
- 1. 5.85 cm
 - 2. 6.75 cm
 - 3. 3.76 cm
 - 4. 4.29 cm

Question ID : 6549787092
Status : Answered
Chosen Option : 1

Q.11 A can complete a certain work in 30 days. He started the work. After 4 days, B joined him and the whole work was completed in 10 days from the beginning. B alone can complete one-third of the same work in:

- Ans**
- 1. 6 days
 - 2. 3 days
 - 3. 4 days
 - 4. 2 days

Question ID : 6549787889
Status : Marked For Review
Chosen Option : 1

Q.12 If the difference between the compound interest compounded annually and the simple interest on a certain sum of money for three years at 10% per annum is ₹279, then the sum (in ₹) is:

- Ans**
- 1. 10,000
 - 2. 8,000
 - 3. 7,500
 - 4. 9,000

Question ID : 6549787089
Status : Answered
Chosen Option : 4

Q.13 In $\triangle ABC$, $\angle A = 90^\circ$, $AB = 20$ cm and $BC = 29$ cm. What is the value of $(\sin B - \cot C)$?

- Ans**
- 1. $-\frac{9}{29}$
 - 2. $-\frac{189}{580}$
 - 3. $\frac{189}{580}$
 - 4. $\frac{9}{29}$

Question ID : 6549787907
Status : Answered
Chosen Option : 2

8/20/2021

<https://ssc.digialm.com//per/g27/pub/2207/touchstone/AssessmentQPHTMLMode1//2207O2180/2207O2180S3D90478/1628848177...>

Q.14 In a constituency, 55% of the total number of voters are males and the rest are females. If 40% of the males are illiterate and 40% of the females are literate, then by what percentage is the number of illiterate females more than that of the illiterate males (correct to one decimal place)?

- Ans**
- 1. 22.7%
 - 2. 16.4%
 - 3. 21.5%
 - 4. 20.8%

Question ID : **6549787086**
Status : **Not Answered**
Chosen Option : --

Q.15 By selling 3 dozen oranges for ₹405, a trader loses 25%. How many oranges should he sell for ₹288 if he needs to earn a profit of 20% in the transaction?

- Ans**
- 1. 18
 - 2. 15
 - 3. 16
 - 4. 12

Question ID : **6549787895**
Status : **Not Answered**
Chosen Option : --

Q.16 X and Y start at the same time to ride from place A to place B, which is 80 km away from A. X travels 4 km per hour slower than Y. Y reaches place B and at once turns back meeting X, 16 km from place B. Y's speed (in km/h) is:

- Ans**
- 1. 9
 - 2. 15
 - 3. 8
 - 4. 12

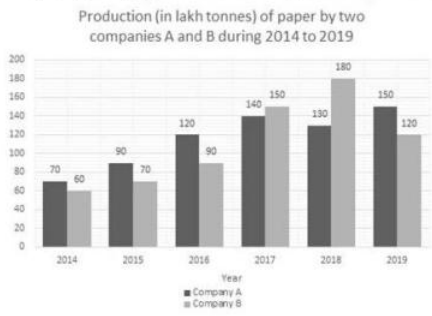
Question ID : **6549787082**
Status : **Answered**
Chosen Option : 4

Q.17 There are three numbers. If the ratio of the first to the second number is 2 : 7 and that of the second to the third number is 5 : 8, then the ratio of the first to the third number is:

- Ans**
- 1. 7 : 8
 - 2. 5 : 28
 - 3. 1 : 4
 - 4. 5 : 7

Question ID : **6549787088**
Status : **Answered**
Chosen Option : 2

Q.18 Study the given graph and answer the question that follows.



What is the ratio of the total production of paper by company A in 2016 and 2019 to the total production of paper by company B in 2014 and 2017?

- Ans**
- 1. 9 : 7
 - 2. 3 : 2
 - 3. 5 : 4
 - 4. 8 : 5

Question ID : **6549787910**
 Status : **Answered**
 Chosen Option : 1

Q.19 BD and CE are the medians of $\triangle ABC$, right angled at A . If $CE = \frac{5\sqrt{13}}{2}$ cm, $BC = 10$ cm, then the length of BD is:

- Ans**
- 1. $3\sqrt{7}$ cm
 - 2. $3\sqrt{5}$ cm
 - 3. $\sqrt{13}$ cm
 - 4. $\frac{5}{2}\sqrt{7}$ cm

Question ID : **6549787901**
 Status : **Answered**
 Chosen Option : 4

Q.20 The following histogram represents the daily earnings of 50 medical stores in a locality.



The difference between the percentage of medical stores whose daily earnings are less than ₹1,000 and the percentage of medical stores whose daily earnings are ₹1,200 and above is:

- Ans**
- 1. 24%
 - 2. 16%
 - 3. 15%
 - 4. 12%

Question ID : **6549787105**
 Status : **Not Answered**
 Chosen Option : --

Q.21 The marked price of an article is ₹480. A person buys it at two successive discounts of 15% and 10%. He sells it at a profit of 25%. What is his profit (in ₹)?

- Ans**
- 1. 95.40
 - 2. 90.60
 - 3. 91.80
 - 4. 93.20

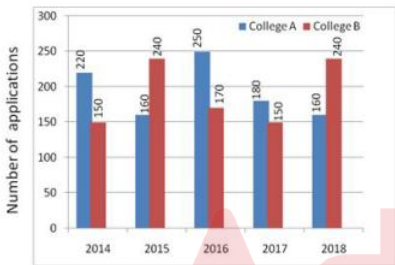
Question ID : 6549787893
 Status : Answered
 Chosen Option : 3

Q.22 The average of 19 numbers is 48. The average of the first 7 numbers is 50.6 and that of the last 13 numbers is 47.6. If the 7th number is excluded, then what is the average of the remaining numbers (correct to one decimal place)?

- Ans**
- 1. 42.4
 - 2. 49.5
 - 3. 39.6
 - 4. 47.3

Question ID : 6549787084
 Status : Answered
 Chosen Option : 4

Q.23 Study the following bar graph and answer the question given below.
 The bar graph represents the total number of applications received for B.Sc. Mathematics by two different colleges A and B in 5 different years.



Find the difference between the average number of applications received by college A from 2014 to 2018 and the average number of applications received by college B from 2014 to 2018?

- Ans**
- 1. 5
 - 2. 4
 - 3. 6
 - 4. 8

Question ID : 6549788821
 Status : Answered
 Chosen Option : 2

8/20/2021

<https://ssc.digialm.com/per/g27/pub/2207/touchstone/AssessmentQPHTMLMode1//2207O2180/2207O2180S3D90478/1628848177...>

Q.24 As observed from the top of a lighthouse, 42 m high above sea-level, the angle of depression of a ship sailing directly towards it changes from 30° to 45° . The distance travelled by the ship during the period of observation is:

- Ans
- 1. $42(1 - \sqrt{3})$
 - 2. $42(\sqrt{3} + 1)$
 - 3. $42(\sqrt{3} - 1)$
 - 4. 42

Question ID : 6549787100
Status : Answered
Chosen Option : 3

Q.25 What is the cost (in ₹) of levelling a triangular park with sides 60 m, 112 m and 164 m at the rate of ₹10.50 per m^2 ?

- Ans
- 1. 21,063
 - 2. 20,160
 - 3. 21,168
 - 4. 21,000

Question ID : 6549787891
Status : Not Answered
Chosen Option : --

Section : General Awareness

Q.1 According to which of the following Schedules to the Constitution provides for allocation of seats to the states and union territories in Rajya Sabha?

- Ans
- 1. Fourth
 - 2. Sixth
 - 3. Seventh
 - 4. Second

Question ID : 6549787935
Status : Answered
Chosen Option : 2

Q.2 Which of the following rivers rises in the west of Rohtang Pass in the Kullu hills of Himachal Pradesh and flows through the Chamba valley of the state?

- Ans
- 1. Satluj
 - 2. Ravi
 - 3. Beas
 - 4. Chenab

Question ID : 6549787121
Status : Answered
Chosen Option : 1

Q.3 How many Rajya Sabha seats come from the state of Assam?

- Ans 1. 7
 2. 15
 3. 9
 4. 18

Question ID : 6549787126
Status : Answered
Chosen Option : 1

Q.4 In which of the following years was the Cornwallis Code enacted?

- Ans 1. 1857
 2. 1793
 3. 1805
 4. 1723

Question ID : 6549787930
Status : Answered
Chosen Option : 2

Q.5 Which of the following is the full form of EBCDIC?

- Ans 1. Extended Binary-Coded-Decimal Interchange Code
 2. Extended Binary-Control-Device Interchange Code
 3. Electronic Binary-Coded-Device Interchange Code
 4. Electronic Binary-Control-Decimal Interchange Code

Question ID : 6549787915
Status : Answered
Chosen Option : 3

Q.6 Which of the following factors is NOT responsible for the loss of fertility of agricultural land?

- Ans 1. Salinisation of soil
 2. Higher cation exchange capacity of soil
 3. Alkalisiation of soil
 4. Waterlogging

Question ID : 6549787120
Status : Answered
Chosen Option : 4

Q.7 Which of the following banks has signed a loan of \$40 million to Northern Arc Capital to support the microfinance borrowers and the MSME sectors in India?

- Ans 1. AIIB
 2. World Bank
 3. IMF
 4. ADB

Question ID : 6549787922
Status : Not Answered
Chosen Option : --

Q.8 Which of the following devices accepts the results produced by the computer in a machine-readable form?

- Ans
- 1. Microphone
 - 2. Printer
 - 3. Graphics tablet
 - 4. Mouse

Question ID : 6549787106
Status : Answered
Chosen Option : 2

Q.9 Kuldeep Handoo has won the Dronacharya Award in 2020. He belongs to which of the following sports?

- Ans
- 1. Wushu
 - 2. Swimming
 - 3. Boxing
 - 4. Wrestling

Question ID : 6549787937
Status : Not Answered
Chosen Option : --

Q.10 Which of the following is one of the basic plant nutrients of fertilizers that are commonly used in agriculture?

- Ans
- 1. Sodium
 - 2. Mercury
 - 3. Arsenic
 - 4. Potassium

Question ID : 6549787923
Status : Answered
Chosen Option : 4

Q.11 Who among the following has written the novel 'The Awasthis of Aamnagri'?

- Ans
- 1. Shubha Sharma
 - 2. Debashish Panigrahi
 - 3. Sarabjit Singh
 - 4. Chetan Bhagat

Question ID : 6549787932
Status : Not Answered
Chosen Option : --

Q.12 The 'SAKSHAM' campaign launched by the Government of India in January 2021 aims to spread awareness about _____.

- Ans
- 1. adoption of cleaner fuels
 - 2. empowerment of women
 - 3. protection of girl child
 - 4. education for children

Question ID : 6549787111
Status : Answered
Chosen Option : 2

8/20/2021

<https://ssc.digialm.com//per/g27/pub/2207/touchstone/AssessmentQPHTMLMode1//2207O2180/2207O2180S3D90478/1628848177...>

Q.13 Who among the following footballers won the 'Best FIFA Men's Player Award' 2020?

- Ans
- 1. Lionel Messi
 - 2. Cristiano Ronaldo
 - 3. Robert Lewandowski
 - 4. Raheem Sterling

Question ID : 6549787128
Status : Answered
Chosen Option : 2

Q.14 Shigmotsav is essentially a festival of the masses, celebrated on the full moon day in the month of Phalguna (March). Which state celebrates this festival?

- Ans
- 1. Haryana
 - 2. Meghalaya
 - 3. Sikkim
 - 4. Goa

Question ID : 6549787917
Status : Answered
Chosen Option : 3

Q.15 India has engaged actively in the multilateral negotiations in the UNFCCC. What is the full form of UNFCCC?

- Ans
- 1. United Nations Framework of Central Climate Change
 - 2. United Nations Fellowship of Central Climate Change
 - 3. United Nations Framework Convention on Climate Change
 - 4. United Nations Fellowship Convention on Climate Change

Question ID : 6549787925
Status : Answered
Chosen Option : 1

Q.16 Suryadhar lake is located in which of the following states?

- Ans
- 1. Himachal Pradesh
 - 2. Arunachal Pradesh
 - 3. Uttarakhand
 - 4. Meghalaya

Question ID : 6549787926
Status : Not Answered
Chosen Option : --

Q.17 Which of the followings sports was added to the Asian Beach Games Program 2021 as of December 2020?

- Ans
- 1. Athletics
 - 2. Aquatics
 - 3. Basketball
 - 4. Coastal Rowing

Question ID : 6549787130
Status : Not Answered
Chosen Option : --

Q.18 In which of the following states is Buxa National Park situated?

- Ans
- 1. Punjab
 - 2. Haryana
 - 3. Karnataka
 - 4. West Bengal

Question ID : 6549787927
Status : Answered
Chosen Option : 4

Q.19 Which of the following states Government has unveiled the 'Farmer Registration and Unified beneficiary Information System' (FRUITS), an e-governance portal, to create a repository of farmland information and farm loan details on a single platform?

- Ans
- 1. Karnataka
 - 2. Tamil Nadu
 - 3. Kerala
 - 4. Chhattisgarh

Question ID : 6549787920
Status : Not Answered
Chosen Option : --

Q.20 In which of the following cities was India's first indigenously designed and developed driverless metro car unveiled in January 2021?

- Ans
- 1. Delhi
 - 2. Chennai
 - 3. Kolkata
 - 4. Bengaluru

Question ID : 6549787110
Status : Answered
Chosen Option : 4

Q.21 Who among the following were awarded the Nobel Prize 2020 in Economics Sciences?

- Ans
- 1. James J Heckman and Daniel L McFadden
 - 2. Paul R Milgrom and Robert B Wilson
 - 3. William Vickrey and James A Mirrlees
 - 4. Robert W Fogel and Douglass C North

Question ID : 6549787125
Status : Not Answered
Chosen Option : --

Q.22 Which of the following battles did Maulvi Ahmadullah Shah fight, defeating the forces under Henry Lawrence?

- Ans
- 1. Battle of Kintoor
 - 2. Battle of Saragarhi
 - 3. Battle of Chinhat
 - 4. Battle of Najafgarh

Question ID : 6549787123
Status : Not Answered
Chosen Option : --

Test

Prime

By Adda247

Previous Year Papers PDF

PRACTICE MORE, SCORE HIGHER!



Free
25,000+
PDF's

High-Quality | Exam-Wise | Updated Regularly

ATTEMPT AS
MOCK



Turn PDFs into real exam experience.
Analyze. Improve. Succeed.



Topic-wise & Exam-wise PDFs



Download & Study Offline



Attempt as Mock & Track Score



Smart Analysis & Performance

AVAILABLE IN



Banking



SSC



Railway



Teaching



UGC



Agriculture



Nursing



Bihar



UP



Punjab



WB



Odisha



TN



AP & Telangana



Haryana



DOWNLOAD THE APP



8/20/2021

<https://ssc.digialm.com//per/g27/pub/2207/touchstone/AssessmentQPHTMLMode1//2207O2180/2207O2180S3D90478/1628848177...>

Q.23 Which of the following is used as a primary means of implementing the monetary policy of the Reserve Bank of India?

Ans

- 1. Repo rate
- 2. Call money
- 3. Mumbai Interbank Offer Rate
- 4. Promissory notes

Question ID : 6549787113
Status : Answered
Chosen Option : 1

Q.24 In which of the following states is Sri Bhramaramba Mallikarjuna Temple located?

Ans

- 1. Andhra Pradesh
- 2. Odisha
- 3. Maharashtra
- 4. Tamil Nadu

Question ID : 6549787108
Status : Not Answered
Chosen Option : --

Q.25 Which of the following diseases is caused by Helicobacter pylori?

Ans

- 1. Gastritis
- 2. Ringworm
- 3. Chikungunya
- 4. Rubella

Question ID : 6549787116
Status : Not Answered
Chosen Option : --