

## Combined Higher Secondary Level (10+2) Examination-2018

Roll No.	www.exammix.com
Registration No.	Exammix
Name	
Test Venue	
Test Time	4:00 PM - 5:00 PM
Test Date	08/07/2019

Section : **General Intelligence**

**Q.1** Arrange the following activities in a logical and meaningful order.

1. Attending classes in college
2. Admission merit list declaration
3. Getting admission in the college
4. Applying for admission to college
5. Annual Examination – Class 12
6. Result declaration – Class 12

- Ans
- 1. 5, 6, 2, 4, 3, 1
  - 2. 5, 6, 4, 2, 3, 1
  - 3. 5, 6, 4, 2, 1, 3
  - 4. 6, 5, 4, 2, 3, 1

Question ID : 98958016881  
Status : **Answered**  
Chosen Option : 2

**Q.2** Which number will replace the question mark (?) in the following series?

77, 92, 125, 178, 253, ?

- Ans
- 1. 350
  - 2. 352
  - 3. 353
  - 4. 351

Question ID : 98958016897  
Status : **Not Answered**  
Chosen Option : --

**Q.3** Select the option in which Figure-X is embedded. (Rotation is not allowed)



**Figure-X**

Ans

Test  
Prime

By Adda247

# ALL EXAMS, ONE SUBSCRIPTION



Test. Analyze. Improve. Repeat.



Don't just **prepare**. **Perform**.

Test Prime — built only for mock tests.



**1,50,000+**  
Mock Tests



**25,000+**  
Previous Year Papers



**800+**  
Exam Covered



**500% Refund**  
on Selection



**5 lakh+**  
Free Quizzes



**Daily**  
Free PDFs



**Job Alerts**  
Stay Updated

- Multilingual
- Detailed Solution
- Strong and Weak Areas



**All India  
Rankings**

Compete with lakhs.  
Rank. Improve. Repeat.



← Adda247 test prime

Rating ▾

Editors' choice

New







Adda247 Test Prime  
Adda Education • Education  
📌 Installed



**DOWNLOAD THE APP**



- ✓ 1. 
- ✗ 2. 
- ✗ 3. 
- ✗ 4. 

Question ID : 98958016902  
 Status : Answered  
 Chosen Option : 1

Q.4 'Tadpole' is related to 'Frog' in the same way as 'Caterpillar' is related to '\_\_\_\_\_'.  
 Ans

- ✓ 1. Butterfly
- ✗ 2. Bat
- ✗ 3. Baboon
- ✗ 4. Boar

Question ID : 98958016885  
 Status : Answered  
 Chosen Option : 3

Q.5 In a code language, ADVISORY is written as GDLYRVBU. How will CHEMICAL be written as in that language?  
 Ans

- ✗ 1. MFOHFLOD
- ✗ 2. KFQHFLPE
- ✗ 3. JFPGFMOD
- ✓ 4. KFPHFLOD

Question ID : 98958016882  
 Status : Answered  
 Chosen Option : 3

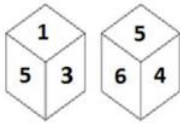
Q.6 Which two numbers should be interchanged in the following equation to make it correct?

$$731 \div 13 + 450 - 25 \times 43 = 142$$

- Ans
- 1. 13 and 25
  - 2. 450 and 25
  - 3. 13 and 43
  - 4. 731 and 450

Question ID : 98958016893  
 Status : Not Answered  
 Chosen Option : --

Q.7 Two different positions of the same dice are shown below, the six faces of which are numbered 1 to 6. Find the number on the face opposite to the one having 5.



- Ans
- 1. 6
  - 2. 4
  - 3. 2
  - 4. 3

Question ID : 98958016899  
 Status : Answered  
 Chosen Option : 3

Q.8 How many triangles are present in the given figure?



- Ans
- 1. 28
  - 2. 32
  - 3. 31
  - 4. 30

Question ID : 98958016901  
 Status : Answered  
 Chosen Option : 4

Q.9 Select the combination of letters that when sequentially placed in the gaps of the given letter series will complete the series.

x \_ \_ y q \_ \_ t x z \_ \_ q s q t x \_ \_ y q s \_ t

- Ans
- 1. zysqyyzyq
  - 2. yysqzyzyq
  - 3. zyqsyzzyq
  - 4. zysqyyzyt

Question ID : 98958016886

Status : Answered  
Chosen Option : 3

Q.10 Select the correct mirror image of the given figure when the mirror is placed to the right of the figure.

B f D e Y 5 3 2

Ans

- ✓ 1. B f D e Y 2 3 5
- ✗ 2. B f D e Y 2 3 5
- ✗ 3. B f D e Y 5 3 2
- ✗ 4. B f D e Y 2 3 2

Question ID : 98958016904  
Status : Answered  
Chosen Option : 1

Q.11 Select the word-pair in which the two words are related in the same way as are the two words in the following word-pair.

Detailed : Meticulous

- Ans
- ✗ 1. Heavy : Light
  - ✗ 2. Hungry : Fulfilled
  - ✓ 3. Fat : Obese
  - ✗ 4. Loud : Loose

Question ID : 98958016888  
Status : Answered  
Chosen Option : 3

Q.12 If DIRECTOR is coded as 49953269, then how will FRIENDLY be coded as?

- Ans
- ✓ 1. 69955437
  - ✗ 2. 69845447
  - ✗ 3. 79954435
  - ✗ 4. 68955438

Question ID : 98958016883  
Status : Answered  
Chosen Option : 1

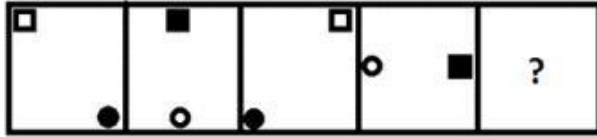
Q.13 Select the number-pair in which the two numbers are related in the same way as are the two numbers of the following number-pair.

2 : 9

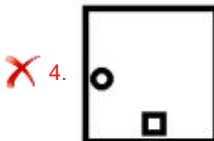
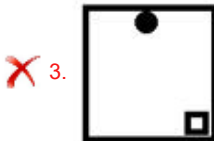
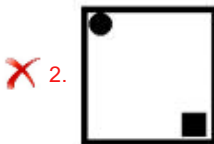
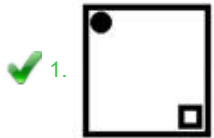
- Ans
- ✗ 1. 8 : 65
  - ✓ 2. 4 : 65
  - ✗ 3. 7 : 50
  - ✗ 4. 3 : 26

Question ID : 98958016894  
 Status : Answered  
 Chosen Option : 2

Q.14 Select the figure that will come next in the following figure series.



Ans



Question ID : 98958016900  
 Status : Answered  
 Chosen Option : 1

Q.15 Select the set in which the numbers are related in the same way as are the numbers of the following set.

(8, 112, 28)

- Ans
- ✗ 1. (16, 282, 36)
  - ✗ 2. (18, 216, 22)
  - ✓ 3. (14, 364, 52)
  - ✗ 4. (12, 216, 34)

Question ID : 98958016895  
 Status : Answered  
 Chosen Option : 1

Q.16 Two statements are given, followed by three conclusions numbered I, II and III. Assuming the statements to be true, even if they seem to be at variance with commonly known facts, decide which of the conclusions logically follow(s) from the statements.

Statements:  
 Some chillies are potatoes.  
 Some potatoes are onions.

Conclusions:

- I. Some onions are chillies.
- II. Some onions are potatoes.
- III. No onion is chilly.

- Ans
- 1. Conclusion II and either conclusion I or III follow.
  - 2. Only conclusions I and II follow.
  - 3. Only conclusions II and III follow.
  - 4. Conclusion I and either conclusion II or III follow.

Question ID : 98958016891  
 Status : Answered  
 Chosen Option : 2

Q.17 A total sum of ₹153 is distributed among three friends A, B and C in such a way that C gets 5 times as much money than A gets and B gets 3 times as much money than A gets. How many rupees does B get?

- Ans
- 1. 65
  - 2. 51
  - 3. 61
  - 4. 66

Question ID : 98958016892  
 Status : Answered  
 Chosen Option : 2

Q.18 Select the Venn diagram that best illustrates the relationship between the following classes.

Food, Lentils, pulses

Ans

- 1.
- 2.
- 3.
- 4.

Question ID : 98958016905  
 Status : Answered  
 Chosen Option : 2

Q.19 Three of the following four numbers are alike in a certain way and one is different. Pick the number that is different from the rest.

- Ans
- 1. 49
  - 2. 64
  - 3. 16
  - 4. 25

Question ID : 98958016898  
 Status : Answered  
 Chosen Option : 2

**Q.20** Three of the following four letter-clusters are alike in a certain way and one is different. Pick the odd one out.

- Ans
- 1. DHLP
  - 2. PTXB
  - 3. RVZD
  - 4. JNRW

Question ID : 98958016889  
 Status : Answered  
 Chosen Option : 4

**Q.21** Select the set in which the numbers are related in the same way as are the numbers of the following set.

(4, 113, 7)

- Ans
- 1. (3, 118, 9)
  - 2. (8, 155, 4)
  - 3. (5, 141, 4)
  - 4. (6, 161, 4)

Question ID : 98958016896  
 Status : Answered  
 Chosen Option : 1

**Q.22** Select the option that is related to the third letter-cluster in the same way as the second letter-cluster is related to the first letter-cluster.

SMKJ : VONL :: DPOA : ?

- Ans
- 1. GSSC
  - 2. GSSD
  - 3. GRRC
  - 4. HRRD

Question ID : 98958016884  
 Status : Answered  
 Chosen Option : 3

**Q.23** Three of the following four words are alike in a certain way and one is different. Pick the odd word out.

- Ans
- 1. Serene
  - 2. Nervous
  - 3. Anxious

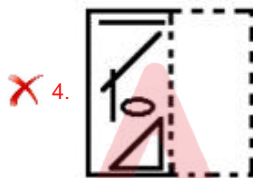
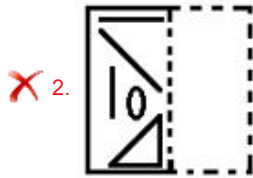
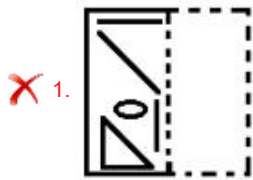
4. Apprehensive

Question ID : 98958016890  
Status : Answered  
Chosen Option : 1

Q.24 A figure of transparent sheet with a pattern is given below. Select the option that shows how the pattern would appear when the transparent sheet is folded at the dotted line.



Ans



Question ID : 98958016903  
Status : Answered  
Chosen Option : 2

Q.25 A + B means 'A is sister of B'  
A - B means 'A is daughter of B'  
A × B means 'A is brother of B'  
A ÷ B means 'A is mother of B'

If  $D + P \div I \times K \div T - R$ , then how is R related to P?

- Ans
- 1. Son
  - 2. Brother
  - 3. Daughter's husband
  - 4. Daughter's son

Question ID : 98958016887  
Status : Not Answered  
Chosen Option : --

Q.1 The \_\_\_\_\_ is the stem-like part of the leaf that joins the blade to the stem.

- Ans
- 1. Stipules
  - 2. Petiole
  - 3. Midrib
  - 4. Vein

Question ID : 98958016559  
Status : Answered  
Chosen Option : 2

Q.2 The famous dancer Chemancheri Kunhiraman Nair is associated with which of the following dance forms?

- Ans
- 1. Sattriya
  - 2. Mohiniyattam
  - 3. Kathakali
  - 4. Manipuri

Question ID : 98958016555  
Status : Not Answered  
Chosen Option : --

Q.3 Which Indian contemporary artist was awarded the 7th Joan Miro Prize 2019?

- Ans
- 1. Nalini Malani
  - 2. Atul Dodiya
  - 3. Arpita Singh
  - 4. Vivan Sundaram

Question ID : 98958016577  
Status : Not Answered  
Chosen Option : --

Q.4 In 2019, radar imaging satellite RISAT-2B was launched successfully by the Sathish Dhawan Space Centre located in \_\_\_\_\_.

- Ans
- 1. Balasore
  - 2. Mumbai
  - 3. Sriharikota
  - 4. Thiruvananthapuram

Question ID : 98958016576  
Status : Not Answered  
Chosen Option : --

Q.5 Which author has been awarded the 27th Vyas Samman of the K.K. Birla Foundation in 2018?

- Ans
- 1. Ashish Chaudhary
  - 2. Yogita Yadav
  - 3. Pankaj Dubey
  - 4. Mamta Kalia

Question ID : 98958016570  
Status : Not Answered  
Chosen Option : --

Q.6 A/an \_\_\_\_\_ stock is the stock of a large, well-established and financially sound company that has operated for many years.

- Ans
- 1. Cyclical
  - 2. Defensive
  - 3. Blue-Chip
  - 4. Income

Question ID : 98958016557  
Status : Not Answered  
Chosen Option : --

Q.7 In Parliamentary proceedings, how many matters per day as per their priority in the ballot are allowed to be raised during 'Zero Hour'?

- Ans
- 1. 21
  - 2. 18
  - 3. 19
  - 4. 20

Question ID : 98958016572  
Status : Not Answered  
Chosen Option : --

Q.8 Flower colours of red, pink, blue and purple come mainly from pigments called \_\_\_\_\_.

- Ans
- 1. Carotenoids
  - 2. Lycopene
  - 3. Chlorophyll
  - 4. Anthocyanins

Question ID : 98958016560  
Status : Not Answered  
Chosen Option : --

Q.9 In 1973, the Project Tiger was started in \_\_\_\_\_ National Park.

- Ans
- 1. Bhitarkanika
  - 2. Sanjay Gandhi
  - 3. Jim Corbett
  - 4. Sunderbans

Question ID : 98958016564  
Status : Not Answered  
Chosen Option : --

Q.10 After the battle of \_\_\_\_\_ in 1757, the British achieved political power in India.

- Ans
- 1. Aliwal
  - 2. Buxar

3. Plassey  
 4. Saragarhi

Question ID : 98958016568  
Status : Answered  
Chosen Option : 3

Q.11 A chain of islands closely scattered in a body of water is called:

- Ans  1. Canyon  
 2. Archipelago  
 3. Strait  
 4. Reef

Question ID : 98958016563  
Status : Answered  
Chosen Option : 2

Q.12 Which Sikh Guru compiled the 'Adi Granth' the holy scripture of Sikhism?

- Ans  1. Guru Hargobind  
 2. Guru Amar Das  
 3. Guru Arjan Dev  
 4. Guru Ram Das

Question ID : 98958016567  
Status : Answered  
Chosen Option : 4

Q.13 As of June 2019, which Indian state has the lowest number of districts?

- Ans  1. Goa  
 2. Telangana  
 3. Sikkim  
 4. Arunachal Pradesh

Question ID : 98958016566  
Status : Answered  
Chosen Option : 1

Q.14 In India the Ursa Major Constellation is also known as:

- Ans  1. Devarshi  
 2. Maharshi  
 3. Saptarshi  
 4. Swadeshi

Question ID : 98958016558  
Status : Answered  
Chosen Option : 3

Q.15 Which one of the following nations will host the FIFA U-17 Women's World Cup in 2020?

Ans

- 1. India
- 2. China
- 3. Nepal
- 4. Bangladesh

Question ID : 98958016574  
Status : Answered  
Chosen Option : 1

Q.16 The Indian movie star Rahul Bose was associated with \_\_\_\_\_ sport of India.

- Ans
- 1. Football
  - 2. Rowing
  - 3. Rugby
  - 4. Squash

Question ID : 98958016575  
Status : Answered  
Chosen Option : 2

Q.17 Who among the following wrote the book 'Wise and Otherwise'?

- Ans
- 1. Gita Piramal
  - 2. Jhumpa Lahiri
  - 3. Arundhati Roy
  - 4. Sudha Murthy

Question ID : 98958016569  
Status : Not Answered  
Chosen Option : --

Q.18 Which process refers to the starting up of a computer and the loading of the required parts of the operating system into the RAM?

- Ans
- 1. Swipping
  - 2. Booting
  - 3. Mapping
  - 4. Tagging

Question ID : 98958016561  
Status : Answered  
Chosen Option : 2

Q.19 Matters, which are not points of order, can be raised by way of Special Mentions under Rule \_\_\_\_\_ of Lok Sabha.

- Ans
- 1. 377
  - 2. 302
  - 3. 223
  - 4. 214

Question ID : 98958016571  
Status : Not Answered

Chosen Option : --

Q.20 Which one of the following is NOT a output device?

- Ans
- 1. Projector
  - 2. Headphones
  - 3. Plotter
  - 4. Joystick

Question ID : 98958016562

Status : Answered

Chosen Option : 4

Q.21 Bumchu' is a unique cultural festival celebrated in the Indian state of:

- Ans
- 1. West Bengal
  - 2. Odisha
  - 3. Assam
  - 4. Sikkim

Question ID : 98958016554

Status : Answered

Chosen Option : 4

Q.22 A/an \_\_\_\_\_ is the wide end of a river that meets the sea.

- Ans
- 1. Creek
  - 2. Estuary
  - 3. Gorge
  - 4. Meander

Question ID : 98958016565

Status : Answered

Chosen Option : 2

Q.23 \_\_\_\_\_ is a type of good for which demand increases as its price rises.

- Ans
- 1. Giffen Good
  - 2. Capital Good
  - 3. Club Good
  - 4. Consumer Good

Question ID : 98958016556

Status : Answered

Chosen Option : 1

Q.24 With which of the following sports is the term 'twiddle' associated?

- Ans
- 1. Table Tennis
  - 2. Cricket
  - 3. Rugby
  - 4. Hockey

Question ID : 98958016573  
 Status : Answered  
 Chosen Option : 3

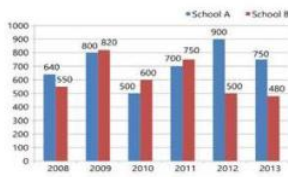
**Q.25** In which state was the second edition of the Indian Open International Boxing Tournament held?

- Ans
- 1. Odisha
  - 2. Assam
  - 3. Karnataka
  - 4. Madhya Pradesh

Question ID : 98958016578  
 Status : Answered  
 Chosen Option : 1

Section : Quantitative Aptitude

**Q.1** The given Bar Graph presents the number of students of two schools for six years.



What is the average (Correct to two decimal places) of total students in schools A and B taken together during the six year period?

- Ans
- 1. 1221.67
  - 2. 1122.57
  - 3. 1331.67
  - 4. 1133.57

Question ID : 98958017279  
 Status : Not Answered  
 Chosen Option : --

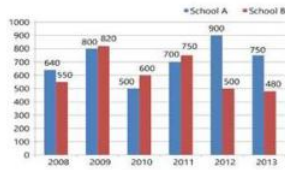
**Q.2** The distance between the centres of two circles of radius 3 cm and 2 cm is 13 cm. The length (in cm) of a transverse common tangent is:

- Ans
- 1. 8
  - 2. 10
  - 3. 12
  - 4. 6

Question ID : 98958017270  
 Status : Answered  
 Chosen Option : 3

**Q.3**

The given Bar Graph presents the number of students of two schools for six years.



What is the ratio of the number of students taken together for the years 2008, 2012 and 2013 in School A to the number of students taken together for the years 2008, 2012 and 2013 in school B?

- Ans
- 1. 229 : 153
  - 2. 101 : 117
  - 3. 153 : 229
  - 4. 117 : 101

Question ID : 98958017278  
Status : Not Answered  
Chosen Option : --

Q.4 If the seven digit number  $54x29y6$  ( $x > y$ ) is divisible by 72, what is the value of  $(2x + 3y)$ ?

- Ans
- 1. 32
  - 2. 13
  - 3. 38
  - 4. 23

Question ID : 98958017265  
Status : Not Answered  
Chosen Option : --

Q.5 In  $\triangle ABC$ , the bisectors of  $\angle B$  and  $\angle C$  meet at  $O$ , inside the triangle. If  $\angle BOC = 106^\circ$ , then the measure of  $\angle A$  is:

- Ans
- 1.  $16^\circ$
  - 2.  $106^\circ$
  - 3.  $32^\circ$
  - 4.  $84^\circ$

Question ID : 98958017272  
Status : Answered  
Chosen Option : 3

Q.6 If  $a^3 + b^3 = 1344$  and  $a + b = 28$ , then  $(a + b)^2 - 3ab$  is equal to:

- Ans
- 1. 24
  - 2. 16
  - 3. 32
  - 4. 48

Question ID : 98958017269  
Status : Not Answered  
Chosen Option : --

Q.7

A dealer buys an article marked at ₹20000 with two successive discounts of 20% and 5%. He spends ₹1800 on repairs and sells it for ₹20000, what is his profit/loss percent (correct to one decimal place)?

- Ans
- 1. 23.46% profit
  - 2. 17.65% profit
  - 3. 17.65% loss
  - 4. 23.64% loss

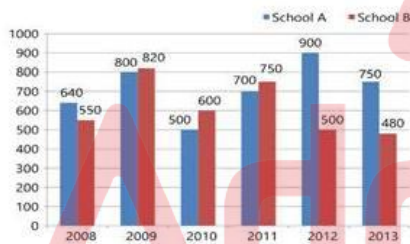
Question ID : 98958017260  
 Status : Answered  
 Chosen Option : 2

Q.8 A and B can complete a piece of work in 15 days and 10 days respectively. They got a contract to complete the work for ₹75000. The share of B (in ₹) in the contracted money will be:

- Ans
- 1. 35,000
  - 2. 40,000
  - 3. 45,000
  - 4. 30,000

Question ID : 98958017256  
 Status : Answered  
 Chosen Option : 4

Q.9 The given Bar Graph presents the number of students of two schools for six years.



In which year the sum of the students in two schools is the highest?

- Ans
- 1. 2009
  - 2. 2012
  - 3. 2011
  - 4. 2008

Question ID : 98958017277  
 Status : Answered  
 Chosen Option : 1

Q.10 PA and PB are the tangents to a circle with centre O, from a point P outside the circle. A and B are the points on the circle. If  $\angle APB = 72^\circ$ , then  $\angle OAB$  is equal to:

- Ans
- 1.  $72^\circ$
  - 2.  $24^\circ$
  - 3.  $18^\circ$
  - 4.  $36^\circ$

Question ID : 98958017271  
Status : Answered  
Chosen Option : 3

Q.11 If  $\cos x = \frac{-\sqrt{3}}{2}$  and  $\pi < x < \frac{3\pi}{2}$ , then the value of  $2\cot^2 x - 3\sec^2 x$  is:

- Ans
- 1. 6
  - 2. 4
  - 3. 8
  - 4. 2

Question ID : 98958017276  
Status : Not Answered  
Chosen Option : --

Q.12 If  $x = 2 + \sqrt{5}$  then the value of  $(x^3 - x^{-3})$  is:

- Ans
- 1. -52
  - 2. 52
  - 3. 76
  - 4. -76

Question ID : 98958017268  
Status : Answered  
Chosen Option : 2

Q.13 Let  $\Delta ABC \sim \Delta QPR$  and  $\frac{\text{ar}(\Delta ABC)}{\text{ar}(\Delta PQR)} = \frac{4}{25}$ . If  $AB = 12$  cm,  $BC = 8$  cm and  $AC = 9$  cm, then  $PR$  is equal to:

- Ans
- 1. 17.5
  - 2. 20
  - 3. 18
  - 4. 15

Question ID : 98958017273  
Status : Answered  
Chosen Option : 1

Q.14 If  $\cot \theta = 5x$  and  $\operatorname{cosec} \theta = \frac{5}{x}$  ( $x \neq 0$ ), then the value of  $5\left(x^2 - \frac{1}{x^2}\right)$  is:

- Ans
- 1.  $\frac{1}{5}$
  - 2.  $\frac{1}{2}$
  - 3.  $-\frac{1}{5}$
  - 4.  $-\frac{1}{4}$

Question ID : 98958017275  
Status : Not Answered  
Chosen Option : --

Q.15 If  $4(\operatorname{cosec}^2 65^\circ - \tan^2 25^\circ) - \sin 90^\circ - \tan^2 63^\circ y \tan^2 27^\circ = \frac{y}{2}$ , then the value of y is:

- Ans
- 1.  $-\frac{1}{2}$
  - 2. 2
  - 3. -1
  - 4. 1

Question ID : 98958017274  
Status : Not Answered  
Chosen Option : --

Q.16 If each side of a rectangle is decreased by 13%, then its area will decrease by:

- Ans
- 1. 26%
  - 2. 21.69%
  - 3. 13%
  - 4. 24.31%

Question ID : 98958017258  
Status : Answered  
Chosen Option : 4

Q.17 A earns ₹640 per day and works for 8 hours. B earns ₹360 per day and works for 6 hours. The ratio of per day wages of A to that of B is:

- Ans
- 1. 5 : 4
  - 2. 9 : 16
  - 3. 16 : 9
  - 4. 4 : 5

Question ID : 98958017263  
Status : Answered  
Chosen Option : 3

Q.18 The average age of fifteen persons is 32 years. If two more persons are added then the average is increased by 3 years. The new persons have an age difference of 9 years between them. The age (in years) of the elder among the new persons is:

- Ans
- 1. 62
  - 2. 50
  - 3. 53
  - 4. 58

Question ID : 98958017259  
Status : Not Answered  
Chosen Option : --

Q.19 If  $x^4 + x^{-4} = 47$ , ( $x > 0$ ), then the value of  $(2x - 3)^2$  is:

- Ans
- 1. 2
  - 2. 3

- 3. 5
- 4. 4

Question ID : 98958017267  
 Status : Not Answered  
 Chosen Option : --

**Q.20** The sum of the salaries of A and B together is ₹45000. A spends 85% of his salary and B, 70% of his salary. If now their savings are the same, what is B's salary (in ₹)?

- Ans
- 1. 30,000
  - 2. 18,000
  - 3. 12,600
  - 4. 15,000

Question ID : 98958017261  
 Status : Answered  
 Chosen Option : 1

**Q.21** The compound interest on a certain sum of money at 21% for 2 years is ₹9,282. Its simple interest (in ₹) at the same rate and for the same period is:

- Ans
- 1. 8,750
  - 2. 8,400
  - 3. 8,000
  - 4. 8,500

Question ID : 98958017264  
 Status : Answered  
 Chosen Option : 3

**Q.22** The simplified value of  $\frac{46 - \frac{3}{4} \text{ of } 32 - 6}{37 - \frac{3}{4} \text{ of } (34 - 6)}$  is:

- Ans
- 1. 2
  - 2.  $\frac{19}{16}$
  - 3.  $\frac{19}{64}$
  - 4. 1

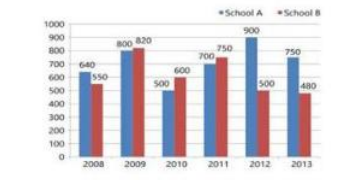
Question ID : 98958017266  
 Status : Not Answered  
 Chosen Option : --

**Q.23** The ratio between the speeds of two trains is 2 : 5. If the first train runs 350 km in 5 h, then the difference between the speeds (in km/h) of both the trains is:

- Ans
- 1. 165
  - 2. 180
  - 3. 350
  - 4. 105

Question ID : 98958017257  
Status : Answered  
Chosen Option : 3

Q.24 The given Bar Graph presents the number of students of two schools for six years.



In which year the percentage increase in the number of total students in schools A and B taken together is the highest in comparison to its previous year?

- Ans
- 1. 2012
  - 2. 2011
  - 3. 2010
  - 4. 2009

Question ID : 98958017280  
Status : Answered  
Chosen Option : 1

Q.25 A man bought three articles for ₹3,000 each. He sold the articles respectively at 10% profit, 5% profit and 15% loss. The total percentage profit/loss he earned is:

- Ans
- 1. 10% loss
  - 2. 5% loss
  - 3. 5% profit
  - 4. No profit no loss

Question ID : 98958017262  
Status : Not Answered  
Chosen Option : --

Section : English Language

Q.1 Identify the most appropriate option to substitute the underlined segment. If no substitution is required, select No substitution.

This was an only the mistake he made.

- Ans
- 1. only the mistake
  - 2. the mistake only
  - 3. the only mistake
  - 4. No substitution

Question ID : 98958016199  
Status : Answered  
Chosen Option : 3

Q.2 Fill in the blank with the most appropriate word.

The landlord is very \_\_\_\_\_ about cleanliness and finds fault with all his tenants.

- Ans
- 1. fabulous
  - 2. fastidious
  - 3. pompous
  - 4. ominous

Question ID : 98958016219  
Status : Answered  
Chosen Option : 3

Q.3 Identify the segment which contains the grammatical error.

Great many students who are good at other subjects perform poorly in English.

- Ans
- 1. perform poorly
  - 2. in English
  - 3. who are good at
  - 4. Great many students

Question ID : 98958016195  
Status : Answered  
Chosen Option : 4

Q.4 Select the most appropriate meaning of the given idiom.

Through thick and thin

- Ans
- 1. to be scared of small dangers
  - 2. passing through a thick forest
  - 3. support under all circumstances
  - 4. to be hard-hearted in times of loss

Question ID : 98958016212  
Status : Answered  
Chosen Option : 3

Q.5 Identify the segment which contains the grammatical error.

Climate change are a greatest threat facing our planet which needs our immediate attention.

- Ans
- 1. our immediate attention
  - 2. are a greatest
  - 3. which needs
  - 4. facing our planet

Question ID : 98958016194  
Status : Answered  
Chosen Option : 2

Q.6 Select the most appropriate synonym of the given word.

DISCOVER

- Ans
- 1. neglect
  - 2. find

- 3. hide
- 4. ignore

Question ID : 98958016208  
Status : Answered  
Chosen Option : 2

Q.7 Select the most appropriate synonym of the given word.

**IGNOMINIOUS**

- Ans
- 1. wonderful
  - 2. disgraceful
  - 3. innocuous
  - 4. generous

Question ID : 98958016209  
Status : Answered  
Chosen Option : 2

Q.8 Identify the most appropriate option to substitute the underlined segment. If no substitution is required, select No substitution.

He is a good singer of the two.

- Ans
- 1. No substitution
  - 2. the best singer
  - 3. the better singer
  - 4. the good singer

Question ID : 98958016198  
Status : Answered  
Chosen Option : 3

Q.9 Select the most appropriate passive form of the given sentence.

Please lock the door.

- Ans
- 1. The door should kindly being locked.
  - 2. You are requested to lock the door.
  - 3. You are being ordered to lock the door.
  - 4. Please let the door be lock.

Question ID : 98958016196  
Status : Answered  
Chosen Option : 2

Q.10 Select the most appropriate word for the group of words.

people who enjoy social company

- Ans
- 1. gregarious
  - 2. unanimous
  - 3. gorgeous
  - 4. herbivorous

Question ID : 98958016215  
Status : Answered  
Chosen Option : 1

Q.11 Select the most appropriate antonym of the given word.

RETALIATION

- Ans  1. reconciliation  
 2. retribution  
 3. retrospection  
 4. regression

Question ID : 98958016211  
Status : Answered  
Chosen Option : 4

Q.12 Given below are four jumbled sentences. Out of the given options pick the one that gives their correct order.

- A. Till quite recently the trend was to go to the west that offered advanced medical facilities.  
B. This is because it has on offer the highest level of services, facilities and professional skills.  
C. But over the last decade the trend has reversed and India is being chosen for medical tourism.  
D. Today, it is not uncommon to travel to a foreign country for medical treatment.

- Ans  1. BCDA  
 2. DACB  
 3. CBDA  
 4. ABCD

Question ID : 98958016207  
Status : Answered  
Chosen Option : 2

Q.13 Select the most appropriate indirect form of the given sentence.

She said to you, "I have a thousand rupees in my purse now."

- Ans  1. She told you that she has a thousand rupees in my purse now.  
 2. She told you that she had a thousand rupees in her purse then.  
 3. She said you that she have a thousand rupees in my purse then.  
 4. She told me that she had a thousand rupees in her purse now.

Question ID : 98958016197  
Status : Answered  
Chosen Option : 2

Q.14 Select the wrongly spelt word.

- Ans  1. eager  
 2. beggar  
 3. vehical  
 4. value

Question ID : 98958016217

Status : **Answered**  
Chosen Option : 3

**Q.15** Given below are four jumbled sentences. Out of the given options pick the one that gives their correct order.

- A. This kindness converted his street into a neighbourhood.
- B. He and his wife were always ready to lend a helping hand.
- C. Mohan was an ideal neighbour in every way.
- D. Whether it was lending tools or watering fields, the couple embodied neighbourly kindness.

- Ans
- 1. DBCA
  - 2. CBDA
  - 3. CDAB
  - 4. BDAC

Question ID : **98958016206**  
Status : **Not Answered**  
Chosen Option : --

**Comprehension:**

In the following passage some words have been deleted. Fill in the blanks with the help of the alternatives given. Select the most appropriate option for each blank.

Each child deserves love and care. The child who is (1) \_\_\_\_\_ for what he is even if he is slow or (2) \_\_\_\_\_, will grow with confidence in himself. He will (3) \_\_\_\_\_ the ability to make the best use of the (4) \_\_\_\_\_ which come his way and make light of any (5) \_\_\_\_\_ that may pose difficulties in his path.

**SubQuestion No : 16**

**Q.16** Select the most appropriate option to fill in blank number 1

- Ans
- 1. appreciated
  - 2. thanked
  - 3. rebuked
  - 4. jeered

Question ID : **98958016201**  
Status : **Answered**  
Chosen Option : 1

**Comprehension:**

In the following passage some words have been deleted. Fill in the blanks with the help of the alternatives given. Select the most appropriate option for each blank.

Each child deserves love and care. The child who is (1) \_\_\_\_\_ for what he is even if he is slow or (2) \_\_\_\_\_, will grow with confidence in himself. He will (3) \_\_\_\_\_ the ability to make the best use of the (4) \_\_\_\_\_ which come his way and make light of any (5) \_\_\_\_\_ that may pose difficulties in his path.

**SubQuestion No : 17**

**Q.17** Select the most appropriate option to fill in blank number 2

- Ans
- 1. clumsy
  - 2. capable
  - 3. clever
  - 4. courteous

Question ID : **98958016202**  
Status : **Answered**

Chosen Option : 3

**Comprehension:**

In the following passage some words have been deleted. Fill in the blanks with the help of the alternatives given. Select the most appropriate option for each blank.

Each child deserves love and care. The child who is (1) \_\_\_\_\_ for what he is even if he is slow or (2) \_\_\_\_\_, will grow with confidence in himself. He will (3) \_\_\_\_\_ the ability to make the best use of the (4) \_\_\_\_\_ which come his way and make light of any (5) \_\_\_\_\_ that may pose difficulties in his path.

**SubQuestion No : 18**

**Q.18 Select the most appropriate option to fill in blank number 3**

- Ans
- 1. maintain
  - 2. develop
  - 3. conceal
  - 4. consider

Question ID : 98958016203

Status : Answered

Chosen Option : 2

**Comprehension:**

In the following passage some words have been deleted. Fill in the blanks with the help of the alternatives given. Select the most appropriate option for each blank.

Each child deserves love and care. The child who is (1) \_\_\_\_\_ for what he is even if he is slow or (2) \_\_\_\_\_, will grow with confidence in himself. He will (3) \_\_\_\_\_ the ability to make the best use of the (4) \_\_\_\_\_ which come his way and make light of any (5) \_\_\_\_\_ that may pose difficulties in his path.

**SubQuestion No : 19**

**Q.19 Select the most appropriate option to fill in blank number 4**

- Ans
- 1. opportunities
  - 2. dreams
  - 3. favours
  - 4. threats

Question ID : 98958016204

Status : Answered

Chosen Option : 1

**Comprehension:**

In the following passage some words have been deleted. Fill in the blanks with the help of the alternatives given. Select the most appropriate option for each blank.

Each child deserves love and care. The child who is (1) \_\_\_\_\_ for what he is even if he is slow or (2) \_\_\_\_\_, will grow with confidence in himself. He will (3) \_\_\_\_\_ the ability to make the best use of the (4) \_\_\_\_\_ which come his way and make light of any (5) \_\_\_\_\_ that may pose difficulties in his path.

**SubQuestion No : 20**

**Q.20 Select the most appropriate option to fill in blank number 5**

- Ans
- 1. consequences
  - 2. intrusions
  - 3. prohibitions
  - 4. handicaps

Question ID : 98958016205  
Status : Answered  
Chosen Option : 1

Q.21 Fill in the blank with the most appropriate word.

We must not lose heart in times of \_\_\_\_\_ .

- Ans
- 1. diversity
  - 2. adversity
  - 3. deformity
  - 4. inactivity

Question ID : 98958016218  
Status : Answered  
Chosen Option : 2

Q.22 Select the most appropriate word for the group of words.

One who eats too much

- Ans
- 1. overweight
  - 2. glutton
  - 3. corpulent
  - 4. obese

Question ID : 98958016214  
Status : Answered  
Chosen Option : 2

Q.23 Select the most appropriate meaning of the given idiom.

Rule the roost

- Ans
- 1. to make all the decisions
  - 2. to be prosperous but generous
  - 3. to frequently pick a quarrel
  - 4. to blindly follow others

Question ID : 98958016213  
Status : Not Answered  
Chosen Option : --

Q.24 Select the correctly spelt word.

- Ans
- 1. genuine
  - 2. genwin
  - 3. genuin
  - 4. genuene

Question ID : 98958016216  
Status : Answered  
Chosen Option : 1

Q.25 Select the most appropriate antonym of the given word.

Test

Prime

By Adda247

# Previous Year Papers PDF

PRACTICE MORE, SCORE HIGHER!



Free  
**25,000+**  
PDF's

High-Quality | Exam-Wise | Updated Regularly

ATTEMPT AS  
**MOCK**



Turn PDFs into real exam experience.  
Analyze. Improve. Succeed.



Topic-wise & Exam-wise PDFs



Download & Study Offline



Attempt as Mock & Track Score



Smart Analysis & Performance

AVAILABLE IN



Banking



SSC



Railway



Teaching



UGC



Agriculture



Nursing



Bihar



UP



Punjab



WB



Odisha



TN



AP & Telangana



Haryana



DOWNLOAD THE APP



LOYALTY

- Ans
- 1. faith
  - 2. treason
  - 3. trust
  - 4. fidelity

Question ID : 98958016210  
Status : Answered  
Chosen Option : 2

