

Combined Higher Secondary Level (10+2) Examination-2018

Roll No.	
Registration No.	
Name	
Test Venue	
Test Time	10:00 AM - 11:00 AM
Test Date	04/07/2019

Section : General Intelligence

Q.1 In a code language, 'POSSIBLE' is written as 'QRUUDKGN'. How will 'FAREWELL' be written as in that language?

- Ans
- 1. BHGUGYNN
 - 2. CIGTGZNN
 - 3. CHGTGYNN
 - 4. CHGTGYMM

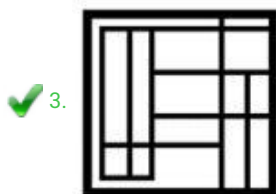
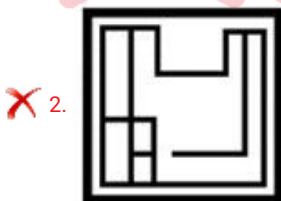
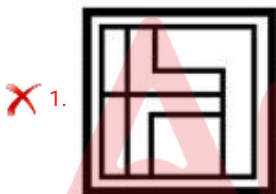
Question ID : 98958015835
 Status : Not Answered
 Chosen Option : --

Q.2 Select the option figure which contains figure X embedded in it as its part. (Rotation is not allowed)



Figure-X

Ans



**Test
Prime**

By Adda247

ALL EXAMS, ONE SUBSCRIPTION



Test. Analyze. Improve. Repeat.



Don't just *prepare*. *Perform*.

Test Prime — built only for mock tests.



1,50,000+
Mock Tests



25,000+
Previous Year Papers



800+
Exam Covered



500% Refund
on Selection



5 lakh+
Free Quizzes



Daily
Free PDFs



Job Alerts
Stay Updated

- Multilingual
- Detailed Solution
- Strong and Weak Areas



**All India
Rankings**

Compete with lakhs.
Rank. Improve. Repeat.



← Adda247 test prime

Rating ▾

Editors' choice

New



Adda247 Test Prime

Adda Education • Education

📌 Installed



DOWNLOAD THE APP



✗ 4.



Question ID : 98958015855
Status : Answered
Chosen Option : 3

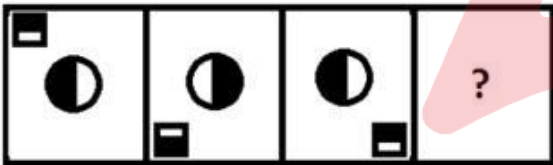
Q.3 Select the word-pair in which the two words are related in the same way as are the two words in the following word-pair.

Fossils : Paleontology

- Ans
- ✗ 1. Flowers : Zoology
 - ✗ 2. Rocks : Astronomy
 - ✗ 3. Fungi : Phycology
 - ✓ 4. Plants : Botany

Question ID : 98958015841
Status : Answered
Chosen Option : 3

Q.4 Select the figure that will come next in the following figure series.



Ans

✗ 1.



✗ 2.



✗ 3.



✓ 4.



Question ID : 98958015853
Status : Answered
Chosen Option : 4

Q.5 A + B means 'A is sister of B'
A - B means 'A is son of B'
A × B means 'A is husband of B'
A ÷ B means 'A is mother of B'

If $P+Q \div C - D - L \times J$, then how is J related to Q?

- Ans
- 1. Mother
 - 2. Daughter
 - 3. Mother-in-law
 - 4. Father-in-law

Question ID : 98958015840
Status : Answered
Chosen Option : 3

Q.6 If 'REGIONAL' is coded as '185791514112', then how will 'PICTURES' be coded in the same language?

- Ans
- 1. 1693202118519
 - 2. 1693192117523
 - 3. 1793202118520
 - 4. 1693202219520

Question ID : 98958015836
Status : Answered
Chosen Option : 1

Q.7 Three of the following four numbers are alike in a certain way and one is different. Pick the number that is different from the rest.

- Ans
- 1. 317
 - 2. 319
 - 3. 349
 - 4. 347

Question ID : 98958015851
Status : Not Answered
Chosen Option : --

Q.8 Select the number-pair in which the two numbers are related in the same way as are the two numbers of the following number-pair.

53 : 477

- Ans
- 1. 55 : 525
 - 2. 43 : 367
 - 3. 45 : 460
 - 4. 39 : 351

Question ID : 98958015847
Status : Answered
Chosen Option : 4

Q.9 Three of the following four letter-clusters are alike in a certain way and one is different.
Pick the odd one out.

- Ans
- 1. DJMG
 - 2. JPSM
 - 3. UADX
 - 4. RXBU

Question ID : 98958015842
Status : Answered
Chosen Option : 3

Q.10 'Hard work' is related to 'Success' in the same way as 'Crime' is related to '_____'.
Pick the odd one out.

- Ans
- 1. Punishment
 - 2. Society
 - 3. Police
 - 4. Reward

Question ID : 98958015838
Status : Answered
Chosen Option : 1


Q.11 Select the combination of letters that when sequentially placed in the gaps of the given letter series will complete the series.

T C _ M B C _ N T _ Q M _ C D _ T _ Q M B _ D N

- Ans
- 1. TDCBNCD
 - 2. QDBCCN
 - 3. QDCBNCC
 - 4. QBCDNNC

Question ID : 98958015839
Status : Answered
Chosen Option : 3

Q.12 Three different positions of the same dice, which has one to six dots on its six faces, are shown below. When one dot is at the bottom the number of dots on the top will be:



- Ans
- 1. 4
 - 2. 2
 - 3. 3
 - 4. 5

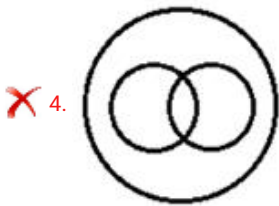
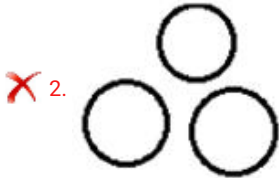
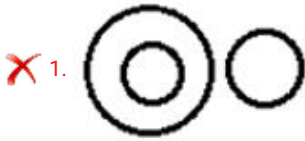
Question ID : 98958015852
Status : Answered
Chosen Option : 3

Q.13

Select the Venn diagram that best illustrates the relationship between the following classes.

Cucumber, Spices, Food

Ans



Question ID : 98958015858
Status : Answered
Chosen Option : 3

Q.14 Which two signs should be interchanged in the following equation to make it correct?

$$207 \times 9 + 13 \div 26 - 301 = 60$$

- Ans
- 1. + and ×
 - 2. + and -
 - 3. × and ÷
 - 4. + and ÷

Question ID : 98958015846
Status : Answered
Chosen Option : 3

Q.15 Select the correct alternative to indicate the arrangement of the following phrases in a logical and meaningful order.

1. Vacant post in organization
2. Receiving Applications
3. Conducting written test and interviews
4. Inviting applications for post
5. Job offer to selected candidates
6. Joining and on-the-job training

- Ans
- 1. 1, 4, 2, 3, 5, 6
 - 2. 1, 4, 3, 2, 5, 6
 - 3. 4, 1, 5, 2, 6, 3

- Ans
- 1. 10, 11, 121
 - 2. 6, 8, 104
 - 3. 7, 8, 117
 - 4. 6, 7, 85

Question ID : 98958015848
 Status : Answered
 Chosen Option : 4

Q.20 Two statements are given followed by three conclusions numbered I, II and III. Assuming the statements to be true, even if they seem to be at variance with commonly known facts, decide which of the conclusions logically follow(s) from the statements.

Statements:
 Some ants are bats.
 Some ants are crabs.

Conclusions:
 I. Some bats are crabs.
 II. No crab is ant.
 III. No bat is crab.

- Ans
- 1. Only conclusions I and III follow.
 - 2. Only conclusions I and II follow.
 - 3. Either conclusion I or III follow.
 - 4. Either conclusion I or II follow.

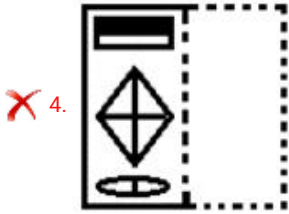
Question ID : 98958015844
 Status : Answered
 Chosen Option : 3

Q.21 A figure of transparent sheet with a pattern is given below. Figure out from amongst the four options as to how the pattern would appear when the transparent sheet is folded at the dotted line.



Ans

- 1.
- 2.
- 3.



Question ID : 98958015856
Status : Answered
Chosen Option : 1

Q.22 Select the option that is related to the third letter-cluster in the same way as the second letter-cluster is related to the first letter-cluster.

RDPC : NHLG :: SKDG : ?

- Ans
- 1. NOYK
 - 2. OOKY
 - 3. OOKZ
 - 4. OPZK

Question ID : 98958015837
Status : Answered
Chosen Option : 3

Q.23 Three persons A, B and C have different amount of rupees with them. If A gives ₹11 to C, A will have equal amount as B has. A and B together have total ₹245. How many rupees does B have?

- Ans
- 1. 116
 - 2. 118
 - 3. 117
 - 4. 119

Question ID : 98958015845
Status : Answered
Chosen Option : 3

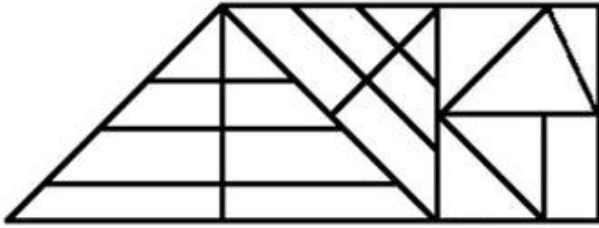
Q.24 Three of the following four words are alike in a certain way and one is different. Pick the odd word out.

- Ans
- 1. Farmer
 - 2. Worker
 - 3. Carpenter
 - 4. Tailor

Question ID : 98958015843
Status : Answered
Chosen Option : 2

Q.25

How many triangles are there in the figure given below?



- Ans
- 1. 27
 - 2. 25
 - 3. 28
 - 4. 26

Question ID : 98958015854
 Status : Not Answered
 Chosen Option : --

Section : General Awareness

Q.1 All the four rivers mentioned below are rivers of Kerala. Which of these is the southern most river of the state?

- Ans
- 1. Neyyar River
 - 2. Periyar River
 - 3. Kuppam River
 - 4. Chaliyar River

Question ID : 98958015201
 Status : Answered
 Chosen Option : 2

Q.2 The First Health Minister of Independent India was _____.

- Ans
- 1. Maulana Abdul Kalam Azad
 - 2. Sardar Vallabhbhai Patel
 - 3. Vijayalakshmi Pandit
 - 4. Rajkumari Amrit Kaur

Question ID : 98958015207
 Status : Answered
 Chosen Option : 4

Q.3 Who among the following was killed by Chhatrapati Shivaji in the Battle of Pratapgarh?

- Ans
- 1. Afzal Khan
 - 2. Asghar Khan
 - 3. Shaista Khan
 - 4. Shuja Khan

Question ID : 98958015203
 Status : Not Answered
 Chosen Option : --

Q.4 According to Indian Bureau of Mines, which of the following states has the largest reserve of silver in India in 2018?

- Ans
- 1. Maharashtra
 - 2. Rajasthan
 - 3. Gujarat
 - 4. Bihar

Question ID : 98958015199
Status : Not Answered
Chosen Option : --

Q.5 Who defeated India's Sourav Kothari in final to win the 2019 Pacific International Billiards Championship?

- Ans
- 1. Joe Davis
 - 2. Peter Gilchrist
 - 3. Michael Phelan
 - 4. William Cook

Question ID : 98958015210
Status : Not Answered
Chosen Option : --

Q.6 As of June 2019, who among the following is the chairman of the 15th Finance Commission of India?

- Ans
- 1. Shaktikanta Das
 - 2. Arvind Panagariya
 - 3. N K Singh
 - 4. Y V Reddy

Question ID : 98958015191
Status : Answered
Chosen Option : 1

Q.7 Which of the following books was NOT written by the great Indian poet and dramatist Mahakavi Kalidas?

- Ans
- 1. Shakuntala
 - 2. Ritusamhara
 - 3. Malatimadhava
 - 4. Malavikagnimitram

Question ID : 98958015202
Status : Answered
Chosen Option : 3

Q.8 Who among the following was the first Indian Cricketer to hit a century in the very first session of a Test match?

- Ans
- 1. Shikhar Dhawan
 - 2. Rishabh Pant
 - 3. Prithvi Shaw

4. Virat Kohli

Question ID : 98958015209
Status : Not Answered
Chosen Option : --

Q.9 In May 2019, which one of the following organisations was banned by the government of India?

- Ans 1. Jamaat-ul-Mujahideen Bangladesh
 2. Harkat-Ul-Mujahideen
 3. Al Badr
 4. Deendar Anjuman

Question ID : 98958015212
Status : Not Answered
Chosen Option : --

Q.10 Who among the following pioneered binary logic and arithmetic in computers programming?

- Ans 1. Noam Chomsky
 2. Leslie Lamport
 3. John Backus
 4. Claude Shannon

Question ID : 98958015196
Status : Not Answered
Chosen Option : --

Q.11 Which of the following is NOT a water borne disease?

- Ans 1. Typhoid
 2. Mumps
 3. Hepatitis
 4. Cholera

Question ID : 98958015193
Status : Answered
Chosen Option : 3

Q.12 In May 2019, who among the following became the only mountaineer in the world to hold the record for most summits on Mount Everest?

- Ans 1. Phurba Tashi
 2. Andrew Irvine
 3. Phu Dorjee
 4. Kami Rita Sherpa

Question ID : 98958015204
Status : Answered
Chosen Option : 1

Q.13 Which mountains are on India's eastern border with Myanmar?

Ans

- 1. Satpura
- 2. Vindhya
- 3. Karakoram
- 4. Purvanchal

Question ID : 98958015198
Status : Not Answered
Chosen Option : --

Q.14 Where was the second Shanghai Cooperation Organization Mass Media Forum held from 23-26 May 2019?

- Ans
- 1. Beijing
 - 2. Kyrgyzstan
 - 3. India
 - 4. Uzbekistan

Question ID : 98958015211
Status : Answered
Chosen Option : 2

Q.15 Who is the author of the autobiography 'Playing It My Way'?

- Ans
- 1. Sachin Tendulkar
 - 2. Mahesh Bhupathi
 - 3. Kapil Dev
 - 4. Leander Paes

Question ID : 98958015208
Status : Answered
Chosen Option : 1

Q.16 Desktop computers, laptop computers, tablets and smartphones are different types of_____.

- Ans
- 1. supercomputers
 - 2. mainframe computers
 - 3. microcomputers
 - 4. minicomputers

Question ID : 98958015197
Status : Not Answered
Chosen Option : --

Q.17 The Cheriyal Scrolls is a dying art form of India practised by one family called the Nakashi family for many generations. Name the modern day state which owns this art form.

- Ans
- 1. Tamil Nadu
 - 2. Karnataka
 - 3. West Bengal
 - 4. Telangana

Question ID : 98958015189

Status : **Not Answered**
Chosen Option : --

Q.18 Which one of the following is defined as "the proportion of highly liquid assets held by financial institutions, to ensure their ongoing ability to meet short-term obligations"?

- Ans 1. Liquidity Coverage Ratio
 2. Base Rate
 3. Statutory Liquidity Ratio
 4. Cash Reserve Ratio

Question ID : **98958015192**
Status : **Not Answered**
Chosen Option : --

Q.19 What is India's rank among the 180 countries on the 'Environmental Performance Index 2018', according to the biennial report by Yale and Columbia Universities along with the World Economic Forum?

- Ans 1. 157
 2. 177
 3. 147
 4. 167

Question ID : **98958015200**
Status : **Not Answered**
Chosen Option : --

Q.20 What is the SI unit of pressure?

- Ans 1. Ohm
 2. Pascal
 3. Volt
 4. Ampere

Question ID : **98958015194**
Status : **Answered**
Chosen Option : 2

Q.21 Which former judge of the Supreme Court of India was appointed as the Chairperson of the News Broadcasting Standards Authority in May 2019?

- Ans 1. R V Raveendran
 2. Ranjan Gogoi
 3. A K Sikri
 4. Arun Mishra

Question ID : **98958015205**
Status : **Not Answered**
Chosen Option : --

Q.22 Who among the following was elected and sworn in as the 6th President of Ukraine in April-May 2019?

- Ans 1. Stepan Kubiv

- 2. Oleksandr Turchynov
- 3. Volodymyr Zelensky
- 4. Petro Poroshenko

Question ID : 98958015213
Status : Not Answered
Chosen Option : --

Q.23 Which of the following are flowerless plants that produce cones and seeds in which seeds are not encased within an ovary?

- Ans
- 1. Gymnosperms
 - 2. Angiosperms
 - 3. Bryophytes
 - 4. Hydrophytes

Question ID : 98958015195
Status : Answered
Chosen Option : 1

Q.24 As per the Constitution of India, the President may resign his office by writing under his hand addressed to:

- Ans
- 1. Chief Election Commissioner
 - 2. The Chairman of Rajya Sabha
 - 3. The Chief Justice of India
 - 4. The Vice President

Question ID : 98958015206
Status : Answered
Chosen Option : 4

Q.25 To which state does the noted Padma Shri awardee and Sufi saint Ibrahim Sutar belong?

- Ans
- 1. Karnataka
 - 2. Telangana
 - 3. Kerala
 - 4. Andhra Pradesh

Question ID : 98958015190
Status : Not Answered
Chosen Option : --

Section : Quantitative Aptitude

Q.1 The average of n numbers is 36. If each of 75% of the numbers is increased by 6 and each of the remaining numbers is decreased by 9, then the new average of the numbers is:

- Ans
- 1. 37.125
 - 2. 33.75
 - 3. 38.25
 - 4. 36.25

Question ID : 98958015940

Status : **Answered**
Chosen Option : 1

Q.2 If $x^2 - 6x + 1 = 0$, then the value of $(x^4 + \frac{1}{x^2}) \div (x^2 + 1)$ is:

- Ans
- 1. 39
 - 2. 33
 - 3. 35
 - 4. 36

Question ID : 98958015949
Status : **Not Answered**
Chosen Option : --

Q.3 For θ being an acute angle, if $\operatorname{cosec}\theta = 1.25$, then the value of

$\frac{4\tan\theta - 5\cos\theta}{\sec\theta + 4\cot\theta}$ is equal to:

- Ans
- 1. $\frac{3}{7}$
 - 2. $\frac{4}{7}$
 - 3. $\frac{1}{4}$
 - 4. $\frac{1}{2}$

Question ID : 98958015955
Status : **Not Answered**
Chosen Option : --

Q.4 Three articles are bought at ₹200 each. One of them is sold at a loss of 10%. If the other two articles are sold so as to gain 20% on the whole transaction, then what is the gain percent on the two articles?

- Ans
- 1. 28
 - 2. 32
 - 3. 35
 - 4. 30

Question ID : 98958015943
Status : **Not Answered**
Chosen Option : --

Q.5 ABCD is a cyclic quadrilateral such that its sides AD and BC produced meet at P and sides AB and DC produced meet at Q. If $\angle A = 62^\circ$ and $\angle ABC = 74^\circ$, then the difference between $\angle P$ and $\angle Q$ is:

- Ans
- 1. 44°
 - 2. 23°
 - 3. 32°
 - 4. 38°

Question ID : 98958015951
Status : **Not Answered**

Chosen Option : --

Q.6 A can do 40% of a work in 6 days and B can do 30% of the same work in 3 days. They started the work together but B left after 2 days and A continued to work. In how many days was the entire work completed?

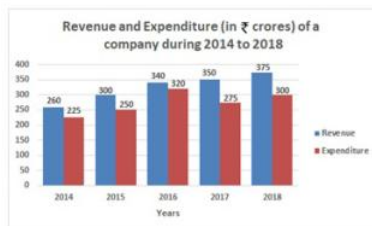
- Ans**
- 1. 10
 - 2. 12
 - 3. 9
 - 4. 15

Question ID : 98958015937

Status : Not Answered

Chosen Option : --

Q.7 The given Bar Graph presents the Revenue and Expenditure (in crores of Rupees) of a company during the five year period, 2014 – 2018.



What is the ratio of the total revenue of the company in 2015 and 2018 to that of its expenditure in 2014 and 2018?

- Ans**
- 1. 5 : 4
 - 2. 7 : 5
 - 3. 9 : 7
 - 4. 13 : 10

Question ID : 98958015958

Status : Answered

Chosen Option : 3

Q.8 If $x + y + z = 3$ and $xy + yz + zx = -18$, then what is the value of $x^3 + y^3 + z^3 - 3xyz = ?$

- Ans**
- 1. 187
 - 2. 217
 - 3. 191
 - 4. 189

Question ID : 98958015950

Status : Not Answered

Chosen Option : --

Q.9 If a 10-digit number 75y97405x2 is divisible by 72, then the value of $(2x-y)$, for the greatest value of x , is:

- Ans**
- 1. 24
 - 2. 21
 - 3. 12
 - 4. 18

Question ID : 98958015946

Status : Not Answered

Chosen Option : --

Q.10 For $0^\circ < \theta < 90^\circ$, if $2\cos^2\theta = 3\sin\theta$, then the value of $(\operatorname{cosec}^2\theta - \cot^2\theta + \cos^2\theta)$ is equal to:

- Ans
- 1. $1\frac{1}{2}$
 - 2. $2\frac{3}{4}$
 - 3. $1\frac{3}{4}$
 - 4. $2\frac{1}{4}$

Question ID : 98958015957

Status : Answered

Chosen Option : 1

Q.11 Sudha decided to donate 12% of her monthly income to an orphanage. On the day of donation, she changed her decision and donated a sum of ₹4800 which was equal to 80% of what she had decided earlier. What is 27% of her monthly income?

- Ans
- 1. ₹13959
 - 2. ₹11934
 - 3. ₹14040
 - 4. ₹13500

Question ID : 98958015942

Status : Not Answered

Chosen Option : --

Q.12 In $\triangle ABC$, D is a point on BC such that $\angle BAD = \frac{1}{2}\angle ADC$, $\angle BAC = 87^\circ$ and $\angle C = 42^\circ$. What is the measure of $\angle ADB$?

- Ans
- 1. 94°
 - 2. 68°
 - 3. 102°
 - 4. 78°

Question ID : 98958015953

Status : Answered

Chosen Option : 3

Q.13 For $0^\circ < \theta < 90^\circ$, if $\frac{\sec\theta(1-\sin\theta)(\sec\theta+\tan\theta)}{(\sec\theta-\tan\theta)^2} = \frac{1+k}{1-k}$, then k is equal to:

- Ans
- 1. $\operatorname{cosec} \theta$
 - 2. $\cos \theta$
 - 3. $\sec \theta$
 - 4. $\sin \theta$

Question ID : 98958015956

Status : **Not Answered**
Chosen Option : --

Q.14 Incomes of A and B are in the ratio 5 : 3 and their expenditures are in the ratio 9 : 5. If income of A is twice the expenditure of B, then what is the ratio of savings of A and B?

- Ans
- 1. 2 : 3
 - 2. 1 : 1
 - 3. 3 : 2
 - 4. 3 : 4

Question ID : **98958015944**
Status : **Not Answered**
Chosen Option : --

Q.15 The given Bar Graph presents the Revenue and Expenditure (in crores of Rupees) of a company during the five year period, 2014 – 2018.



The expenditure of the company in 2017 is what percentage less than the average revenue (per year) in 2014, 2015 and 2016?

- Ans
- 1. $11\frac{2}{9}$
 - 2. $11\frac{1}{9}$
 - 3. $8\frac{1}{3}$
 - 4. $12\frac{1}{3}$

Question ID : **98958015959**
Status : **Answered**
Chosen Option : 2

Q.16 The parallel sides of a trapezium are 20 cm and 10 cm and its non-parallel sides are equal to each other. If its area is 180 cm^2 , then what is the length (in cm) of each non-parallel side?

- Ans
- 1. 11
 - 2. 13
 - 3. 12
 - 4. 15

Question ID : **98958015939**
Status : **Answered**
Chosen Option : 4

Q.17 In a circle with centre O, AB is a diameter. Points C, D and E are on the circle on one side of AB such that ABEDC is a pentagon. The sum of angles ACD and DEB is:

- Ans
- 1. 240°
 - 2. 225°

3. 270°

4. 180°

Question ID : 98958015952

Status : Not Answered

Chosen Option : --

Q.18 ΔABC is a triangle, where $\angle B$ is obtuse. AD is perpendicular on CB produced at D . If $AB = 8\text{cm}$, $BC = 7\text{cm}$ and $BD = 4\text{cm}$, then AC is equal to:

Ans 1. 14cm

2. 13cm

3. 15cm

4. 12cm

Question ID : 98958015954

Status : Not Answered

Chosen Option : --

Q.19 A shopkeeper marks his goods at 25% above the cost price. He sells three-fourth of the goods at the marked price and the remaining at 40% discount on the marked price. His gain/loss percent is:

Ans 1. Loss, 8.75%

2. Loss, 12.5%

3. Gain 10.5%

4. Gain 12.5%

Question ID : 98958015941

Status : Not Answered

Chosen Option : --

Q.20 A sum invested at 8% p.a. amounts to ₹20280 at the end of one year, when the interest is compounded half yearly. What will be the simple interest on the same sum for $4\frac{3}{5}$ years at double the earlier rate of interest?

Ans 1. ₹13500

2. ₹13800

3. ₹14200

4. ₹14500

Question ID : 98958015945

Status : Not Answered

Chosen Option : --

Q.21 The simplified value of $3 \times 6 \div 4$ of $6 - 6 \div 2 \times (4 - 6) + 4 - 2 \times 3 \div 6$ of $\frac{1}{3}$ is:

Ans 1. $1\frac{3}{4}$

2. $7\frac{3}{4}$

3. $13\frac{3}{4}$

4. $8\frac{1}{3}$

Question ID : 98958015947

Status : Answered

Chosen Option : 2

Q.22 If $8(a + b)^3 + (a - b)^3 = (3a + b)(Aa^2 + Bab + Cb^2)$, then what is the value of $(A + B - C)$?

- Ans
- 1. 2
 - 2. 4
 - 3. 10
 - 4. 11

Question ID : 98958015948

Status : Not Answered

Chosen Option : --

Q.23 The given Bar Graph presents the Revenue and Expenditure (in crores of Rupees) of a company during the five year period, 2014 – 2018.



The total expenditure of the company from 2016 to 2018 is what percentage (nearest to an integer) of the total revenue for the five year period?

- Ans
- 1. 56
 - 2. 55
 - 3. 54
 - 4. 53

Question ID : 98958015961

Status : Not Answered

Chosen Option : --

Q.24 A train covers a certain distance in 45 minutes. If its speed is reduced by 5 km/h, it takes 3 minutes more to cover the same distance. The distance (in km) is:

- Ans
- 1. 64
 - 2. 60
 - 3. 54
 - 4. 80

Question ID : 98958015938

Status : Answered

Chosen Option : 2

Q.25

The given Bar Graph presents the Revenue and Expenditure (in crores of Rupees) of a company during the five year period, 2014 – 2018.



In which year the percentage increase in the revenue as compared to that in its preceding year is between 5% and 8% ?

- Ans
- 1. 2015
 - 2. 2017
 - 3. 2016
 - 4. 2018

Question ID : 98958015960
 Status : Not Answered
 Chosen Option : --

Section : English Language

Q.1 Select the word which means the same as the group of words given.

A person who can speak only two languages

- Ans
- 1. monolingual
 - 2. multilingual
 - 3. linguist
 - 4. bilingual

Question ID : 98958015931
 Status : Answered
 Chosen Option : 4

Q.2 Given below are four jumbled sentences. Out of the given options pick the one that gives their correct order.

- A. On the morning of April 12, Gopal rose at 5.30 am.
- B. Then he drove to the Joggers Park which was four km away.
- C. There he met his group of walking enthusiasts.
- D. He put on his track suit and walking shoes.

- Ans
- 1. CBAD
 - 2. ADBC
 - 3. DCAB
 - 4. ACBD

Question ID : 98958015923
 Status : Answered
 Chosen Option : 1

Q.3 Select the word which means the same as the group of words given.

guide the course of a ship especially by using instruments or maps

- Ans
- 1. anchor
 - 2. sail

- 3. travel
- 4. navigate

Question ID : 98958015932
 Status : Not Answered
 Chosen Option : --

Q.4 Select the most appropriate meaning of the given idiom.

feather your own nest

- Ans
- 1. make money unfairly
 - 2. win a competition
 - 3. be in a comfortable position
 - 4. disturb others in their work

Question ID : 98958015930
 Status : Not Answered
 Chosen Option : --

Q.5 Select the most appropriate option to substitute the underlined segment in the given sentence. If there is no need to substitute it, select No improvement.

The government has ordered that all the coaching centres without fire safety arrangements housing above the fourth floor be shut down immediately.

- Ans
- 1. house up to the fourth floor
 - 2. housed above the fourth floor
 - 3. No improvement
 - 4. housed over a fourth floor

Question ID : 98958015915
 Status : Not Answered
 Chosen Option : --

Comprehension:

In the following passage some words have been deleted. Fill in the blanks with the help of the alternatives given. Select the most appropriate option for each blank.

In one of the most high-profile localities in the capital, hundreds of (1) _____ walk across an unmanned railway track (2) _____ day to get to school. Lakshman (3) _____ his way down the rocky steps (4) _____ lead to the railway track behind his settlement. He (5) _____ in the affirmative when asked if the track scares him. "I have fallen down these steps so many times during the monsoon. But there is no other way to walk to school," he says.

SubQuestion No : 6

Q.6 Select the most appropriate option for blank No. 1.

- Ans
- 1. men
 - 2. people
 - 3. women
 - 4. children

Question ID : 98958015918
 Status : Not Answered
 Chosen Option : --

Comprehension:

In the following passage some words have been deleted. Fill in the blanks with the help of the alternatives given. Select the most appropriate option for each blank.

In one of the most high-profile localities in the capital, hundreds of (1) _____ walk across an unmanned railway track (2) _____ day to get to school. Lakshman (3) _____ his way down the rocky steps (4) _____ lead to the railway track behind his settlement. He (5) _____ in the affirmative when asked if the track scares him. "I have fallen down these steps so many times during the monsoon. But there is no other way to walk to school," he says.

SubQuestion No : 7

Q.7 Select the most appropriate option for blank No. 2.

- Ans
- 1. some
 - 2. all
 - 3. every
 - 4. whole

Question ID : 98958015919

Status : Not Answered

Chosen Option : --

Comprehension:

In the following passage some words have been deleted. Fill in the blanks with the help of the alternatives given. Select the most appropriate option for each blank.

In one of the most high-profile localities in the capital, hundreds of (1) _____ walk across an unmanned railway track (2) _____ day to get to school. Lakshman (3) _____ his way down the rocky steps (4) _____ lead to the railway track behind his settlement. He (5) _____ in the affirmative when asked if the track scares him. "I have fallen down these steps so many times during the monsoon. But there is no other way to walk to school," he says.

SubQuestion No : 8

Q.8 Select the most appropriate option for blank No. 3.

- Ans
- 1. had made
 - 2. makes
 - 3. was making
 - 4. make

Question ID : 98958015920

Status : Not Answered

Chosen Option : --

Comprehension:

In the following passage some words have been deleted. Fill in the blanks with the help of the alternatives given. Select the most appropriate option for each blank.

In one of the most high-profile localities in the capital, hundreds of (1) _____ walk across an unmanned railway track (2) _____ day to get to school. Lakshman (3) _____ his way down the rocky steps (4) _____ lead to the railway track behind his settlement. He (5) _____ in the affirmative when asked if the track scares him. "I have fallen down these steps so many times during the monsoon. But there is no other way to walk to school," he says.

SubQuestion No : 9

Q.9 Select the most appropriate option for blank No. 4.

- Ans
- 1. whom
 - 2. what
 - 3. who
 - 4. which

Question ID : 98958015921

Status : **Not Answered**
Chosen Option : --

Comprehension:

In the following passage some words have been deleted. Fill in the blanks with the help of the alternatives given. Select the most appropriate option for each blank.

In one of the most high-profile localities in the capital, hundreds of (1) _____ walk across an unmanned railway track (2) _____ day to get to school. Lakshman (3) _____ his way down the rocky steps (4) _____ lead to the railway track behind his settlement. He (5) _____ in the affirmative when asked if the track scares him. "I have fallen down these steps so many times during the monsoon. But there is no other way to walk to school," he says.

SubQuestion No : 10

Q.10 Select the most appropriate option for blank No. 5.

- Ans
- 1. shakes
 - 2. salutes
 - 3. nods
 - 4. winks

Question ID : **98958015922**
Status : **Not Answered**
Chosen Option : --

Q.11 Select the wrongly spelt word.

- Ans
- 1. neither
 - 2. nibble
 - 3. nightingale
 - 4. nineteenth

Question ID : **98958015934**
Status : **Answered**
Chosen Option : 3

Q.12 Select the most appropriate synonym of the given word.

AVENGE

- Ans
- 1. punish
 - 2. cheer
 - 3. encourage
 - 4. comfort

Question ID : **98958015926**
Status : **Not Answered**
Chosen Option : --

Q.13 Select the most appropriate antonym of the given word.

HASTY

- Ans
- 1. sudden
 - 2. cautious
 - 3. reckless
 - 4. urgent

Question ID : 98958015927
Status : Not Answered
Chosen Option : --

Q.14 In the sentence identify the segment which contains the grammatical error.

The blue lotus is one of the most beautiful flowers which grows in her garden.

- Ans
- 1. is one of the most beautiful flowers
 - 2. in her garden
 - 3. The blue lotus
 - 4. which grows

Question ID : 98958015911
Status : Answered
Chosen Option : 1

Q.15 In the sentence identify the segment which contains the grammatical error.

On Saturday Rahul visited his professor to whom he had an appointment.

- Ans
- 1. to whom he had
 - 2. Rahul visited his professor
 - 3. an appointment
 - 4. On Saturday

Question ID : 98958015912
Status : Not Answered
Chosen Option : --

Q.16 Select the correct indirect form of the given sentence.

The stranger said to me, "Can you tell me the way to the River Bank Colony?"

- Ans
- 1. The stranger asked me can you tell me the way to the River Bank Colony.
 - 2. The stranger asked me if you could tell him the way to the River Bank Colony.
 - 3. The stranger asked me if I could tell him the way to the River Bank Colony.
 - 4. The stranger told me that I could tell him the way to the River Bank Colony.

Question ID : 98958015914
Status : Answered
Chosen Option : 2

Q.17 Select the most appropriate option to substitute the underlined segment in the given sentence. If there is no need to substitute it, select No improvement.

The ceremony will following by tea and refreshments for the guests.

- Ans
- 1. No improvement
 - 2. will followed by
 - 3. will be followed by
 - 4. will follow with

Question ID : 98958015916
Status : Answered
Chosen Option : 3

Q.18 Given below are four jumbled sentences. Out of the given options pick the one that gives their correct order.

- A. He meets me in the same frank friendly way as always without mentioning it.
- B. He has owed it to me for twelve months now.
- C. I can realise whenever I meet him that he has forgotten that he owes me a dollar.
- D. My friend Todd owes me a dollar.

- Ans
- 1. CBAD
 - 2. CBDA
 - 3. ADBC
 - 4. DBCA

Question ID : 98958015924
Status : Answered
Chosen Option : 4

Q.19 Select the most appropriate synonym of the given word.

SCRAP

- Ans
- 1. hoard
 - 2. save
 - 3. store
 - 4. reject

Question ID : 98958015925
Status : Answered
Chosen Option : 3

Q.20 Select the most appropriate antonym of the given word.

ACCESSIBLE

- Ans
- 1. reachable
 - 2. stressed
 - 3. attainable
 - 4. restricted

Question ID : 98958015928
Status : Answered
Chosen Option : 4

Q.21 Select the most appropriate meaning of the given idiom.

Be an old hat

- Ans
- 1. be superstitious
 - 2. be outdated
 - 3. be crazy
 - 4. be foolish

Question ID : 98958015929
Status : Not Answered
Chosen Option : --

Test

Prime

By Adda247

Previous Year Papers PDF

PRACTICE MORE, SCORE HIGHER!



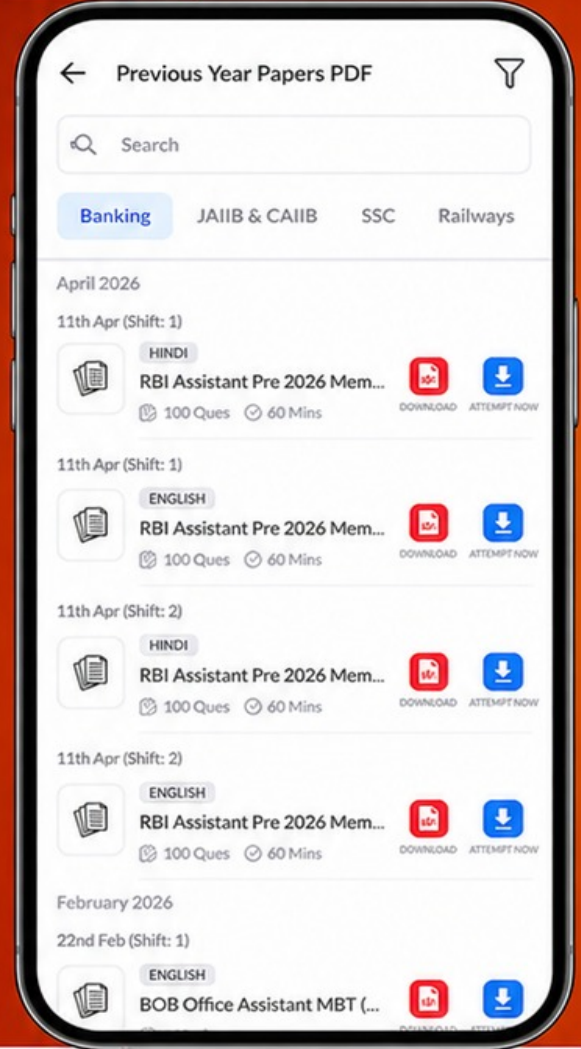
Free
25,000+
PDF's

High-Quality | Exam-Wise | Updated Regularly

ATTEMPT AS
MOCK



Turn PDFs into real exam experience.
Analyze. Improve. Succeed.



Topic-wise & Exam-wise PDFs



Download & Study Offline



Attempt as Mock & Track Score



Smart Analysis & Performance

AVAILABLE IN



Banking



SSC



Railway



Teaching



UGC



Agriculture



Nursing



Bihar



UP



Punjab



WB



Odisha



TN



AP & Telangana



Haryana



DOWNLOAD THE APP



Q.22 Select the most appropriate word to fill in the blank.

Leopards have learned to _____ to semi-urban living near Mumbai and Gurugram.

- Ans
- 1. adapt
 - 2. adopt
 - 3. change
 - 4. prepare

Question ID : 98958015935
Status : Not Answered
Chosen Option : --

Q.23 Select the wrongly spelt word.

- Ans
- 1. scenary
 - 2. scarce
 - 3. scheme
 - 4. scanty

Question ID : 98958015933
Status : Answered
Chosen Option : 2

Q.24 Select the most appropriate word to fill in the blank.

Darkness _____ over the forest increasing the danger of wild animals.

- Ans
- 1. collapsed
 - 2. descended
 - 3. grounded
 - 4. declined

Question ID : 98958015936
Status : Not Answered
Chosen Option : --

Q.25 Select the correct passive form of the given sentence.

The mechanic repaired my car quite satisfactorily.

- Ans
- 1. My car repaired quite satisfactorily by the mechanic.
 - 2. The mechanic was repaired quite satisfactorily by my car.
 - 3. My car was repaired quite satisfactorily by the mechanic.
 - 4. My car is repaired quite satisfactorily by the mechanic.

Question ID : 98958015913
Status : Answered
Chosen Option : 3