

Combined Higher Secondary Level (10+2) Examination-2018

Roll No.	
Registration No.	
Name	
Test Venue	
Test Time	4:00 PM - 5:00 PM
Test Date	04/07/2019

Section : General Intelligence

Q.1

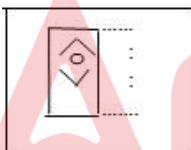
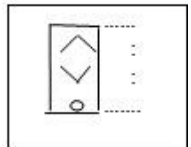
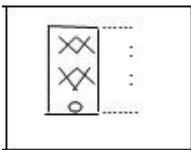
Ans

✓ 1.

✗ 2.

✗ 3.

✗ 4.

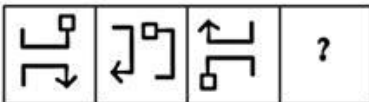


Question ID : 98958016701

Status : Answered

Chosen Option : 1

Q.2 Select the figure that will come next in the following figure series.


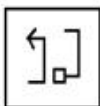


Ans

✗ 1.

✗ 2.

✗ 3.



**Test
Prime**

By Adda247

ALL EXAMS, ONE SUBSCRIPTION



Test. Analyze. Improve. Repeat.



Don't just *prepare*. Perform.

Test Prime — built only for mock tests.



1,50,000+
Mock Tests



25,000+
Previous Year Papers



800+
Exam Covered



500% Refund
on Selection



5 lakh+
Free Quizzes



Daily
Free PDFs



Job Alerts
Stay Updated

- Multilingual
- Detailed Solution
- Strong and Weak Areas



**All India
Rankings**

Compete with lakhs.
Rank. Improve. Repeat.



← Adda247 test prime

Rating ▾

Editors' choice

New



Adda247 Test Prime
Adda Education • Education
Installed



DOWNLOAD THE APP





Question ID : 98958016698
Status : Answered
Chosen Option : 4

Q.3 Vikarm is twice as old as his brother Ajay. 5 years ago, Vikram was 3 times as old as Ajay. How old is Vikram now?

- Ans
- 1. 20
 - 2. 22
 - 3. 18
 - 4. 17

Question ID : 98958016690
Status : Answered
Chosen Option : 1

Q.4

Ans

- 1.
- 2.
- 3.
- 4.

Question ID : 98958016700
Status : Answered
Chosen Option : 3

Q.5 Select the option that is related to the third letter-cluster in the same way as the second letter-cluster is related to the first letter-cluster.

DFHJ : MOQS :: CGGK : _____




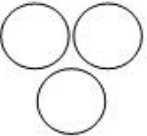
- Ans
- 1. NQQT
 - 2. LQQT
 - 3. LPPT
 - 4. NPPT

Question ID : 98958016682
 Status : Answered
 Chosen Option : 4

Q.6 Select the Venn diagram that best illustrates the relationship between the following classes.

Moon, Venus, Universe

Ans

- ✓ 1. 
- ✗ 2. 
- ✗ 3. 
- ✗ 4. 

Question ID : 98958016703
 Status : Answered
 Chosen Option : 1

Q.7 If R = 36 and BIN = 50, then how will you code 'TALE'?


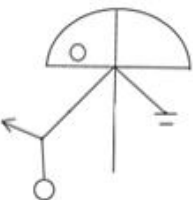
Ans

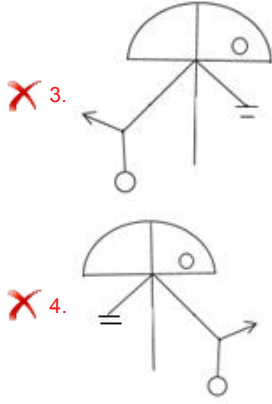
- ✗ 1. 19
- ✗ 2. 110
- ✓ 3. 76
- ✗ 4. 54

Question ID : 98958015529
 Status : Answered
 Chosen Option : 3

Q.8

Ans

- ✗ 1. 
- ✓ 2. 



Question ID : 98958016702
Status : Answered
Chosen Option : 2

Q.9 उस शब्द-युग्म को चुनें जिसमें दो शब्द उसी तरह संबंधित हैं जैसे निम्नलिखित शब्द-युग्म में दो शब्द संबंधित हैं।

भूकंप विज्ञान : भूकंप :: _____ : _____

- Ans
- 1. कीटविज्ञान : पौधे
 - 2. पक्षीविज्ञान : पक्षी
 - 3. फाइकोलॉजी : कवक
 - 4. वृक्क विज्ञान : नसें

Question ID : 98958016686
Status : Answered
Chosen Option : 2

Q.10 'Man' is related to 'Mammal' in the same way as 'Rat' is related to '_____':

- Ans
- 1. Mice
 - 2. Rodent
 - 3. Burrow
 - 4. Reptile

Question ID : 98958016683
Status : Answered
Chosen Option : 2

Q.11 निम्नलिखित चार शब्दों में से तीन शब्द एक निश्चित तरीके से एक जैसे हैं और एक अलग है। उस अलग शब्द को चुनें।

- Ans
- 1. नोक
 - 2. पिच
 - 3. स्केटिंग रिंग
 - 4. अखाड़ा

Question ID : 98958016688
Status : Answered
Chosen Option : 1

Q.12 Three of the following four letter-clusters are alike in a certain way and one is different. Pick the odd one out.

- Ans
- 1. OQTX
 - 2. EGJN

- 3. IKNQ
- 4. ACFJ

Question ID : 98958016687
 Status : Answered
 Chosen Option : 3

Q.13 Three different positions of the same dice are shown. Which alphabet will appear on the opposite surface on which alphabet P appears?



- Ans
- 1. Z
 - 2. S
 - 3. T
 - 4. X

Question ID : 98958016697
 Status : Answered
 Chosen Option : 1

Q.14 Rohit's age is 10 years less than half of his mother's age who is 5 years younger than Rohit's father. If Rohit's father is 47 years old, what is Rohit's age?

- Ans
- 1. 10 years
 - 2. 11 years
 - 3. 14 years
 - 4. 21 years

Question ID : 98958015532
 Status : Answered
 Chosen Option : 2

Q.15 Three of the following four numbers are alike in a certain way and one is different. Pick the number that is different from the rest.

- Ans
- 1. 313
 - 2. 323
 - 3. 353
 - 4. 373

Question ID : 98958016696
 Status : Answered
 Chosen Option : 2

Q.16 Mayank's father has a brother, Prakash, whose daughter, Ritu is Kavita's mother. Sonu is Ritu's only brother. How is Sonu related to Mayank?

- Ans
- 1. Brother
 - 2. Cousin
 - 3. Nephew
 - 4. Son

Question ID : 98958015531
 Status : Answered
 Chosen Option : 3

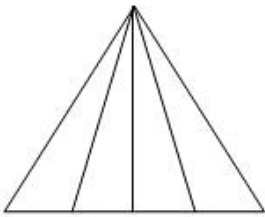
Q.17 Select the set in which the numbers are related in the same way as are the numbers of the following set.

(6, 36, 1296)

- Ans
- 1. (7, 49, 2409)
 - 2. (4, 16, 64)
 - 3. (3, 9, 81)
 - 4. (10, 100, 5000)

Question ID : 98958016693
Status : Answered
Chosen Option : 3

Q.18 How many triangles are there in the following figure?



- Ans
- 1. 9
 - 2. 10
 - 3.
 - 4. 6

Question ID : 98958016699
Status : Answered
Chosen Option : 2

Q.19 Select the number that will come next in the following series.

2, 6, 14, 30, 62, ?

- Ans
- 1. 122
 - 2. 98
 - 3. 134
 - 4. 126

Question ID : 98958015534
Status : Answered
Chosen Option : 4

Q.20 Which number will replace the question mark (?) in the following series?

4, 16, 36, 64, 100, 144, 196, ?

- Ans
- 1. 256
 - 2. 284
 - 3. 225
 - 4. 246

Question ID : 98958016695
Status : Answered
Chosen Option : 1

Q.21 M is the brother of N. N is the brother of P. Q is the father of M. Based on these statements, which of the following statements cannot be definitely true?

- Ans
- 1. P is the brother of M

- 2. M is the brother of P
- 3. N is the son of Q
- 4. N is the brother of M

Question ID : 98958016685
Status : Answered
Chosen Option : 2

Q.22 Select the letter cluster that will come next in the following series.

LVD, OTF, RRH, ?, XNL

- Ans
- 1. UQI
 - 2. TPJ
 - 3. TQJ
 - 4. UPJ

Question ID : 98958015530
Status : Answered
Chosen Option : 4

Q.23 Two statements are given followed by three conclusions numbered I, II and III. Assuming the statements to be true, even if they seem to be at variance with commonly known facts, decide which of the conclusions logically follow(s) from the statements.

Statements:
No ball is pen. All pens are boxes.

Conclusions:
I. Some boxes are pens.
II. Some boxes are balls. III. No box is ball.

- Ans
- 1. Either conclusion II or III follows
 - 2. Conclusion I and either II or III follows
 - 3. All conclusions follow
 - 4. Only conclusion I follows

Question ID : 98958016689
Status : Answered
Chosen Option : 4

Q.24 Which two signs should be interchanged in the following equation to make it correct?

$$5 \times 15 \div 7 - 20 + 4 = 77$$

- Ans
- 1. (+ and +)
 - 2. (+ and -)
 - 3. (+ and ×)
 - 4. (- and ×)

Question ID : 98958016691
Status : Answered
Chosen Option : 1

Q.25 Select the set in which the numbers are related in the same way as are the numbers of the following set.

(3, 5, 34)

- Ans
- 1. (9, 10, 190)
 - 2. (4, 7, 65)
 - 3. (6, 7, 89)

4. (1, 2, 12)

Question ID : 98958016694
Status : Answered
Chosen Option : 2

Section : General Awareness

Q.1 Select the option that does NOT have the correct pair of state and its chief minister?

- Ans 1. Arunachal Pradesh – Gegong Apang
 2. Odisha – Naveen Patnaik
 3. Sikkim – P S Golay
 4. Andhra Pradesh – Jaganmohan Reddy

Question ID : 98958015255
Status : Marked For Review
Chosen Option : 1

Q.2 Which one of the following is a degenerative disorder of the brain and one of several conditions that cause dementia, a progressive decline of mental functions resulting in memory loss and confusion?

- Ans 1. Schizophrenia
 2. Alzheimer's disease
 3. Amnesia
 4. Concussion

Question ID : 98958015244
Status : Answered
Chosen Option : 2

Q.3 In May 2019, _____ became the first judge from the Indian apex court to be appointed to the Supreme Court of Fiji's non-resident panel for a period of three years.

- Ans 1. Justice Madan Lokur
 2. Justice A K Sikri
 3. Justice H L Dattu
 4. Justice A K Goel

Question ID : 98958015254
Status : Answered
Chosen Option : 1

Q.4 Which of the following states won the maximum number of medals in the inaugural 2018 edition of the 'Khelo India School Games'?

- Ans 1. Jharkhand
 2. Delhi
 3. Haryana
 4. Maharashtra

Question ID : 98958015258
Status : Answered
Chosen Option : 3

Q.5 India is a federal republic with 29 states and _____ union territories.

- Ans 1. six
 2. four

- 3. five
- 4. seven

Question ID : 98958015256
Status : Answered
Chosen Option : 4

Q.6 According to the Constitution of India, how many members from the Anglo-Indian community can be nominated to the Lok Sabha by the President?

- Ans
- 1. Five
 - 2. Two
 - 3. Three
 - 4. Four

Question ID : 98958015257
Status : Answered
Chosen Option : 2

Q.7 According to Indian Bureau of Mines Report 2018, which among the following is the largest mica producing state in India?

- Ans
- 1. Bihar
 - 2. Odisha
 - 3. Punjab
 - 4. Andhra Pradesh

Question ID : 98958015248
Status : Marked For Review
Chosen Option : 2

Q.8 As a part of SIMBEX-2019, held from 16 to 22 May 2019, Indian naval ships INS Kolkata and INS Shakti participated in the annual bilateral naval exercise between India and _____.

- Ans
- 1. Japan
 - 2. US
 - 3. Russia
 - 4. Singapore

Question ID : 98958015263
Status : Answered
Chosen Option : 4

Q.9 Which of the following mountain ranges is home to the second highest peak of the world, K2?

- Ans
- 1. Pir Panjal Range
 - 2. East Karakoram Range
 - 3. Ladakh Range
 - 4. Zaskar Range

Question ID : 98958015251
Status : Answered
Chosen Option : 2

Q.10 At NASA's annual Human Exploration Rover Challenge, a team from _____ in India won the 'AIAA Neil Armstrong Best Design Award' in April 2019.

- Ans
- 1. Indian Institute of Technology, Delhi
 - 2. Lovely Professional University, Phagwara

3. Mukesh Patel School of Technology Management and Engineering, Mumbai
4. KIET Group of Institutions, Ghaziabad

Question ID : 98958015245
Status : Not Answered
Chosen Option : --

Q.11 Marmagao Port is located in _____.

- Ans 1. Odisha
2. West Bangal
3. Gujarat
4. Goa

Question ID : 98958015249
Status : Answered
Chosen Option : 1

Q.12 In which state are the Dilwara Jain Temples situated?

- Ans 1. Rajasthan
2. Bihar
3. Maharashtra
4. Madhya Pradesh

Question ID : 98958015239
Status : Answered
Chosen Option : 1

Q.13 Who among the following was elected the President of South Africa in May 2019?

- Ans 1. Thabo Mbeki
2. Jacob Zuma
3. Cyril Ramaphosa
4. F W de Klerk

Question ID : 98958015262
Status : Answered
Chosen Option : 3

Q.14 As of May 2019, Vidarbha has won _____ Ranji Trophy tournaments.

- Ans 1. 3
2. 8
3. 5
4. 2

Question ID : 98958015260
Status : Answered
Chosen Option : 2

Q.15 Who is the author of the famous book 'Kamayani'?

- Ans 1. Sumitranandan Pant
2. Mahadevi Verma
3. Jaishankar Prasad
4. Maithili Sharan Gupt

Question ID : 98958015240

Status : Answered
Chosen Option : 1

Q.16 Name the Nobel Prize winning American economist whose report to the US Congress titled "National Income, 1929-35" paved the way for the calculation of Gross Domestic Product (GDP) as the ultimate measure of a country's overall welfare.

- Ans
- 1. Paul Samuelson
 - 2. John Maynard Keynes
 - 3. Simon Kuznets
 - 4. Kenneth Arrow

Question ID : 98958015241
Status : Answered
Chosen Option : 2

Q.17 Which one of the following allows the user to store, organise, calculate and manipulate the available data in a tabular format?

- Ans
- 1. Microsoft Powerpoint
 - 2. Notepad
 - 3. Microsoft Excel
 - 4. Microsoft Word

Question ID : 98958015247
Status : Answered
Chosen Option : 3

Q.18 Who is the current Chief of the Army Staff of India as of May 2019?

- Ans
- 1. General Devraj Anbu
 - 2. General Dalbir Singh Suhag
 - 3. General Bikram Singh
 - 4. General Bipin Rawat

Question ID : 98958015261
Status : Answered
Chosen Option : 4

Q.19 Which one of the following is defined as "a set of instructions, data or programs used to operate computers and execute specific tasks"?

- Ans
- 1. Processor
 - 2. Hardware
 - 3. Malware
 - 4. Software

Question ID : 98958015246
Status : Answered
Chosen Option : 4

Q.20 Which one of the following is a Japanese word that means 'harbour wave',?

- Ans
- 1. Gneiss
 - 2. Jishin
 - 3. Volcano
 - 4. Tsunami

Question ID : 98958015243
Status : Answered

Chosen Option : 4

Q.21 Who among the following authored the book 'Poverty and Un-British Rule in India'?

- Ans
- 1. Rajagopalachari
 - 2. Dadabhai Naoroji
 - 3. Bal Gangadhar Tilak
 - 4. Raja Ram Mohan Roy

Question ID : 98958015252

Status : Answered

Chosen Option : 2

Q.22 The responsibility of regulating and supervising primary (urban) cooperative banks, which are popularly known as Urban Cooperative Banks (UCBs) is vested with which one of the following?

- Ans
- 1. The Department of Non-Banking Supervision of the Reserve Bank of India
 - 2. The Urban Banks Department of the Reserve Bank of India
 - 3. State Co-operative Banks
 - 4. The Department of Corporate Services of the Reserve Bank of India

Question ID : 98958015242

Status : Marked For Review

Chosen Option : 3

Q.23 Which of the following at 23°30' N divides India into almost two halves?

- Ans
- 1. Equator
 - 2. Tropic of Capricorn
 - 3. Prime Meridian
 - 4. Tropic of Cancer

Question ID : 98958015250

Status : Answered

Chosen Option : 4

Q.24 Srirangapatnam Fort is located in _____.

- Ans
- 1. Kerala
 - 2. Karnataka
 - 3. Telangana
 - 4. Tamil Nadu

Question ID : 98958015253

Status : Answered

Chosen Option : 2

Q.25 After winning 'Australian Open 2018', the total number of Grand Slam Men's singles titles won by Roger Federer is:

- Ans
- 1. 18
 - 2. 20
 - 3. 21
 - 4. 24

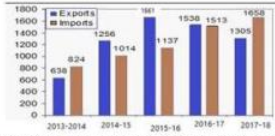
Question ID : 98958015259

Status : Marked For Review

Chosen Option : 1

Section : Quantitative Aptitude

Q.1 The given Bar Graph presents the Imports and Exports of an item (in tonnes) manufactured by a company for the five financial years, 2013-2014 to 2017-2018.



What is the average of Import (in tonnes) during the five financial years?

- Ans**
- 1. 1229.5
 - 2. 1552.4
 - 3. 1229.2
 - 4. 1335.9

Question ID : 98958017129
 Status : Answered
 Chosen Option : 3

Q.2

- Ans**
- 1. 9
 - 2. 8.1
 - 3.
 - 4. 9.2

Question ID : 98958017114
 Status : Not Answered
 Chosen Option : --

Q.3 If $\cos\theta = \frac{2p}{p^2+1}$, ($p \neq 0$) then $\tan \theta$ is equal to:

- Ans**
- 1.
 - 2.
 - 3.
 - 4.

Question ID : 98958017124
 Status : Answered
 Chosen Option : 2

Q.4 If $(3x - 7)^3 + (3x - 8)^3 + (3x + 6)^3 = 3(3x - 7)(3x - 8)(3x + 6)$, then what is the value of x?

- Ans**
- 1. 3
 - 2. 1
 - 3. 4
 - 4. 2

Question ID : 98958017119
 Status : Answered
 Chosen Option : 2

Q.5 What is the area of a rhombus (in cm^2) whose side is 13 cm and the smaller diagonal is 10 cm?

- Ans
- 1. 192
 - 2.
 - 3. 120
 - 4.

Question ID : 98958017108
Status : Answered
Chosen Option : 3

Q.6 Two circles of radii 7 cm and 9 cm intersect at the points A and B. If $AB = 6$ cm, and the distance between the centres of the circles is x cm, then the value of x (to the closest integer) is:

- Ans
- 1. 10
 - 2. 15
 - 3. 14
 - 4. 12

Question ID : 98958017121
Status : Answered
Chosen Option : 2

Q.7 Three numbers are in the ratio $1/2 : 2/3 : 3/4$. The difference between the greatest and the smallest number is 27. The smallest number is:

- Ans
- 1.
 - 2.
 - 3. 72
 - 4. 54

Question ID : 98958017113
Status : Answered
Chosen Option : 4

Q.8

- Ans
- 1. 3199 : 3073
 - 2. 4175 : 4011
 - 3. 3073 : 3199
 - 4.

Question ID : 98958017128
Status : Answered
Chosen Option : 1

Q.9

- Ans
- 1. 9 cm
 - 2. 12 cm
 - 3. 8 cm
 - 4. 24 cm

Question ID : 98958015732
Status : Answered
Chosen Option : 4

Q.10 A, B and C can complete a piece of work in 4, 28 and 56 days respectively. Working together, they can complete the same work in how many days?

Ans

- 1.
- 2. $3\frac{1}{17}$
- 3.
- 4.

Question ID : 98958017106
Status : Answered
Chosen Option : 4

Q.11 A circle is inscribed in a triangle ABC. It touches sides AB, BC and AC at the points P, Q and R respectively. If BP = 8.5 cm, CQ = 6.5 cm and AR = 4.5 cm, then the perimeter (in cm) of the ΔABC is:

Ans

- 1. 35
- 2.
- 3. 39
- 4. 33

Question ID : 98958017120
Status : Answered
Chosen Option : 3

Q.12

Ans

- 1. 33 : 49
- 2. 49 : 40
- 3. 40 : 49
- 4. 49 : 33

Question ID : 98958017123
Status : Answered
Chosen Option : 2

Q.13

Ans

- 1.
- 2. 18%
- 3. 15%
- 4. 20%

Question ID : 98958017112
Status : Answered
Chosen Option : 3

Q.14

- Ans
- 1.
 - 2.
 - 3.
 - 4. 2016-2017

Question ID : 98958017127
Status : Answered
Chosen Option : 3

Q.15

- Ans
- 1.
 - 2. 1000
 - 3. 800
 - 4. 925

Question ID : 98958017110
Status : Answered
Chosen Option : 2

Q.16

- Ans
- 1.
 - 2. 360
 - 3. 660
 - 4. 500

Question ID : 98958015730
Status : Answered
Chosen Option : 3

Q.17 If $x^4 + x^{-4} = 1442$, ($x > 0$) then the value of $x + x^{-1}$ is:

- Ans
- 1. 7
 - 2.
 - 3. 6
 - 4. 15

Question ID : 98958017118
Status : Answered
Chosen Option : 3

Q.18 If $2 \sin^2 \theta + 5 \cos \theta - 4 = 0$, $0^\circ < \theta < 90^\circ$, then the value of $\tan \theta + \sin \theta$ is:

- Ans
- 1.
 - 2. $\frac{\sqrt{3}}{2}$

3. $\frac{2}{\sqrt{3}}$

4.

Question ID : 98958017126
Status : Answered
Chosen Option : 4

Q.19 9 years ago, the average age of a family of five members was 33 years. Now, three new members join whose ages are in ascending order with consecutive gaps of 8 years. If the present average age of the family is the same as it was 9 years ago, what is the age (in years) of the youngest new member?

Ans 1. 15

2.

3. 10

4. 9

Question ID : 98958017109
Status : Answered
Chosen Option : 3

Q.20 If $x + \frac{1}{x} = 10$, then $x^3 + \frac{1}{x^3}$ is equal to:

Ans 1. 970

2. 1030

3. 1000

4. 1100

Question ID : 98958015731
Status : Answered
Chosen Option : 1

Q.21

Ans 1. 1250

2. 968

3. 1100

4. 1080

Question ID : 98958017117
Status : Answered
Chosen Option : 2

Q.22

Ans 1. $\angle A = 2(90^\circ - \angle BOC)$

2. $\angle A = 180^\circ - \angle BOC$

3. $\angle A = 90^\circ + \angle BOC$

4. $\angle A = 2(\angle BOC - 90^\circ)$

Question ID : 98958017122
Status : Answered
Chosen Option : 1

Q.23

- Ans 1. 4
 2. 2.5
 3. 3
 4.

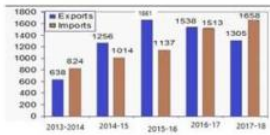
Question ID : 98958017107
 Status : Answered
 Chosen Option : 1

Q.24

- Ans 1.
 2. 19% decrease
 3. 19% increase
 4. 18% decrease

Question ID : 98958017111
 Status : Answered
 Chosen Option : 4

Q.25 The given Bar Graph presents the Imports and Exports of an item (in tonnes) manufactured by a company for the five financial years, 2013-2014 to 2017-2018.



In which financial year the percentage increase in Imports and Exports taken together is the highest in comparison to its previous financial year?

- Ans 1. 2016-2017
 2.
 3.
 4.

Question ID : 98958017130
 Status : Answered
 Chosen Option : 4

Section : English Language

Q.1 Given below are four jumbled sentences. Out of the given options pick the one that gives their correct order.

- A. They had come from different parts of the city.
- B. Men, tall and skinny, short and fat gathered in Dubai.
- C. They were all named Mohammad!
- D. But, all of them had one thing in common.

- Ans 1. BADC
 2. BDAC
 3. ADCB
 4. ABCD

Question ID : 98958016051
 Status : Answered
 Chosen Option : 1

Q.2 Identify the segment which contains the grammatical error.

The ambulance have arrived on time, the accident victim was taken to the hospital.

- Ans
- 1. the accident victim
 - 2. have arrived on time
 - 3. The ambulance
 - 4. was taken to the hospital

Question ID : 98958016039
Status : Answered
Chosen Option : 2

Q.3 Identify the segment which contains the grammatical error.

The Principal requested to the Chief Guest to inaugurate the sports meet.

- Ans
- 1. The Principal requested
 - 2. the sports meet
 - 3. to the Chief Guest
 - 4. to inaugurate

Question ID : 98958016038
Status : Answered
Chosen Option : 3

Q.4 Given below are four jumbled sentences. Out of the given options pick the one that gives their correct order.

- A. Practicing hard, she hoped to win an Olympic medal some day.
- B. As she sped down the slope she had a terrible accident.
- C. But, she didn't know it would be her last run ever.
- D. Ann Thompson was going to make her practice ski run before lunch.

- Ans
- 1. DCBA
 - 2. BCDA
 - 3. DACB
 - 4. ACDB

Question ID : 98958016050
Status : Answered
Chosen Option : 3

Q.5 Select the wrongly spelt word.

- Ans
- 1. missionary
 - 2. jewellery
 - 3. elementery
 - 4. hereditary

Question ID : 98958016061
Status : Answered
Chosen Option : 3

Q.6 Identify the most appropriate option to substitute the underlined segment. If no substitution is required, select No substitution.

Of Rama and Usha the later is the most responsible.

- Ans
- 1. the later is more
 - 2. the latter is the more
 - 3. the latter is most
 - 4. No substitution.

Question ID : 98958016042

Status : Answered
Chosen Option : 2

Q.7 Select the most appropriate meaning of the given idiom.

To grease the palm

- Ans
- 1. to give support
 - 2. to bribe someone
 - 3. to cheat someone
 - 4. to give a massage

Question ID : 98958016057
Status : Answered
Chosen Option : 2

Q.8 Select the most appropriate indirect form of the given sentence.

The lawyer said to the accused, "Where were you at the time of the burglary?"

- Ans
- 1. The lawyer asked the burglar where he was at the time of burglary.
 - 2. The lawyer asked the burglar that where was he at the time of burglary.
 - 3. The lawyer asked the burglar if he was there at the time of burglary.
 - 4. The lawyer asked the burglar where were you at the time of burglary.

Question ID : 98958016041
Status : Answered
Chosen Option : 1

Q.9 Select the most appropriate passive form of the given sentence.

Have you paid your outstanding bills?

- Ans
- 1. Have your outstanding bills been paid?
 - 2. Are your outstanding bills being paid?
 - 3. Have your outstanding bills being paid?
 - 4. Will your outstanding bills be paid?

Question ID : 98958016040
Status : Answered
Chosen Option : 1

Q.10 Select the correctly spelt word.

- Ans
- 1. compitition
 - 2. distruction
 - 3. contruction
 - 4. repetition

Question ID : 98958016060
Status : Answered
Chosen Option : 4

Q.11 Fill in the blank with the most appropriate word.

The _____ appears to be rather rough today for the ships to sail.

- Ans
- 1. environment
 - 2. climate
 - 3. atmosphere
 - 4. weather

Question ID : 98958016062
Status : Answered
Chosen Option : 4

Q.12 Select the most appropriate antonym of the given word.

SPARSE

- Ans 1. dense
 2. strong
 3. thin
 4. weak

Question ID : 98958016054
Status : Answered
Chosen Option : 1

Q.13 Select the most appropriate word for the group of words.

One whose hobby is stamp collection

- Ans 1. phonologist
 2. philanthropist
 3. philatelist
 4. panegyrist

Question ID : 98958016059
Status : Answered
Chosen Option : 3

Comprehension:

In the following passage some words have been deleted. Fill in the blanks with the help of the alternatives given. Select the most appropriate option for each blank.

"Tenzing and Hillary have done it! Mount Everest has been conquered!" This news evoked (1) _____ reactions. Somehow, there was a sense of disappointment (2) _____ the fact that the great mountain had been (3) _____. It would have been nice to (4) _____ the Everest as an (5) _____ part of the Earth.

SubQuestion No : 14

Q.14 Select the most appropriate option to fill in blank number 1

- Ans 1. intruding
 2. intimate
 3. interesting
 4. inspired

Question ID : 98958016045
Status : Answered
Chosen Option : 3

Comprehension:

In the following passage some words have been deleted. Fill in the blanks with the help of the alternatives given. Select the most appropriate option for each blank.

"Tenzing and Hillary have done it! Mount Everest has been conquered!" This news evoked (1) _____ reactions. Somehow, there was a sense of disappointment (2) _____ the fact that the great mountain had been (3) _____. It would have been nice to (4) _____ the Everest as an (5) _____ part of the Earth.

SubQuestion No : 15

Q.15 Select the most appropriate option to fill in blank number 2

- Ans 1. on
 2. of

- 3. at
- 4. for

Question ID : 98958016046
Status : Answered
Chosen Option : 3

Comprehension:

In the following passage some words have been deleted. Fill in the blanks with the help of the alternatives given. Select the most appropriate option for each blank.

"Tenzing and Hillary have done it! Mount Everest has been conquered!" This news evoked (1) _____ reactions. Somehow, there was a sense of disappointment (2) _____ the fact that the great mountain had been (3) _____. It would have been nice to (4) _____ the Everest as an (5) _____ part of the Earth.

SubQuestion No : 16

Q.16 Select the most appropriate option to fill in blank number 3

- Ans
- 1. invaded
 - 2. challenged
 - 3. occupied
 - 4. conquered

Question ID : 98958016047
Status : Answered
Chosen Option : 4

Comprehension:

In the following passage some words have been deleted. Fill in the blanks with the help of the alternatives given. Select the most appropriate option for each blank.

"Tenzing and Hillary have done it! Mount Everest has been conquered!" This news evoked (1) _____ reactions. Somehow, there was a sense of disappointment (2) _____ the fact that the great mountain had been (3) _____. It would have been nice to (4) _____ the Everest as an (5) _____ part of the Earth.

SubQuestion No : 17

Q.17 Select the most appropriate option to fill in blank number 4

- Ans
- 1. be leaving
 - 2. left
 - 3. had left
 - 4. have left

Question ID : 98958016048
Status : Answered
Chosen Option : 4

Comprehension:

In the following passage some words have been deleted. Fill in the blanks with the help of the alternatives given. Select the most appropriate option for each blank.

"Tenzing and Hillary have done it! Mount Everest has been conquered!" This news evoked (1) _____ reactions. Somehow, there was a sense of disappointment (2) _____ the fact that the great mountain had been (3) _____. It would have been nice to (4) _____ the Everest as an (5) _____ part of the Earth.

SubQuestion No : 18

Q.18 Select the most appropriate option to fill in blank number 5

- Ans
- 1. unavailed
 - 2. unusual
 - 3. unassailable
 - 4. unruly

Question ID : 98958016049
Status : Answered
Chosen Option : 3

Q.19 Select the most appropriate synonym of the given word.

OPPORTUNE

- Ans
- 1. rarely
 - 2. likely
 - 3. timely
 - 4. barely

Question ID : 98958016053
Status : Answered
Chosen Option : 2

Q.20 Select the most appropriate word for the group of words.

One who is in charge of a museum or art gallery

- Ans
- 1. monitor
 - 2. curator
 - 3. instructor
 - 4. collector

Question ID : 98958016058
Status : Answered
Chosen Option : 2

Q.21 Select the most appropriate antonym of the given word.

INFERIOR

- Ans
- 1. ulterior
 - 2. exterior
 - 3. interior
 - 4. superior

Question ID : 98958016055
Status : Answered
Chosen Option : 4

Q.22 Identify the most appropriate option to substitute the underlined segment. If no substitution is required, select No substitution.

By next week I will have been made all the reservations for the trip to Europe.

- Ans
- 1. will had make
 - 2. will have been making
 - 3. will have made
 - 4. No substitution.

Question ID : 98958016043
Status : Answered
Chosen Option : 3

Q.23 Select the most appropriate synonym of the given word.

PATHETIC

- Ans
- 1. powerful

Test

Prime

By Adda247

Previous Year Papers PDF

PRACTICE MORE, SCORE HIGHER!



Free
25,000+
PDF's

High-Quality | Exam-Wise | Updated Regularly

ATTEMPT AS
MOCK



Turn PDFs into real exam experience.
Analyze. Improve. Succeed.



Topic-wise &
Exam-wise PDFs



Download &
Study Offline



Attempt as Mock
& Track Score



Smart Analysis
& Performance

AVAILABLE IN



Banking



SSC



Railway



Teaching



UGC



Agriculture



Nursing



Bihar



UP



Punjab



WB



Odisha



TN



AP & Telangana



Haryana



DOWNLOAD THE APP



- 2. plentiful
- 3. purposeful
- 4. pitiful

Question ID : 98958016052
Status : Answered
Chosen Option : 4

Q.24 Select the most appropriate meaning of the given idiom.

To bark up the wrong tree

- Ans 1. to be wrong about the reason for something
- 2. to bury money under a tree and forget the place
 - 3. to be mistaken about the name of a tree
 - 4. to eat an unpalatable fruit by mistake

Question ID : 98958016056
Status : Answered
Chosen Option : 1

Q.25 Fill in the blank with the most appropriate word.

The archaeologist made a _____ discovery.

- Ans 1. senile
- 2. sensational
 - 3. sensible
 - 4. sensitive

Question ID : 98958016063
Status : Answered
Chosen Option : 2