

DDA MTS

Previous Year Paper

19 Dec, 2025 Shift 3



Adda247

Test Prime

ALL EXAMS, ONE SUBSCRIPTION



1,00,000+
Mock Tests



**Personalised
Report Card**



**Unlimited
Re-Attempt**



600+
Exam Covered



25,000+ Previous
Year Papers



500%
Refund



ATTEMPT FREE MOCK NOW



DELHI DEVELOPMENT AUTHORITY
RECRUITMENT CELL

VIKAS SADAN, I.N.A, NEW DELHI-110023.

Recruitment Advertisement No. 09/2025/Rectt. Cell/Pers./DDA
DIRECT RECRUITMENT IN VARIOUS CATEGORIES

Participant ID	
Participant Name	
Test Center Name	
Test Date	19/12/2025
Test Time	5:00 PM - 7:00 PM
Subject	MTS

Section : Numerical and Mathematical Ability

Q.1	What is the mean proportional between 0.09 and 16?
Ans	<div><div><div><div><div></div></div></div><div>A. 0.9</div></div></div>
	<div><div><div><div><div></div></div></div><div>B. 1.2</div></div></div>
	<div><div><div><div><div></div></div></div><div>C. 1.44</div></div></div>
	<div><div><div><div><div></div></div></div><div>D. 0.8</div></div></div>

Question ID :	4410091425561
Option 1 ID :	4410095630858
Option 2 ID :	4410095630856
Option 3 ID :	4410095630855
Option 4 ID :	4410095630857
Status :	Not Answered
Chosen Option :	--

Q.2 The average runs scored by a batsman in 20 matches is 45. In the next 10 matches the batsman scored an average of 16 runs. Find his average runs (rounded off to two decimals) in all the 30 matches.

- Ans ☒ A. 36.33
- ☒ B. 35.33
- ☒ C. 34.33
- ☒ D. 37.33

Question ID :	441009516412
Option 1 ID :	4410092021069
Option 2 ID :	4410092021067
Option 3 ID :	4410092021068
Option 4 ID :	4410092021070
Status :	Answered
Chosen Option :	B

Q.3 A sailor rows to a point 36 km away and returns in a total time of 9 hours. He can row 2 km downstream in the same time it takes him to row 1 km upstream. Find the speed of the stream.

- Ans ☒ A. 2 km/hr
- ☒ B. 4 km/hr
- ☒ C. 1 km/hr
- ☒ D. 3 km/hr

Question ID :	4410091468034
Option 1 ID :	4410095799990
Option 2 ID :	4410095799992
Option 3 ID :	4410095799989
Option 4 ID :	4410095799991
Status :	Not Answered
Chosen Option :	--

Q.4 Sumanth covers a certain distance by car driving at 33 km/hr and he returns to the starting point riding on a scooter with a speed of 28 km/hr. Find the average speed for the whole journey. (Rounded up to one decimal places.)

- Ans ☒ A. 22.2 km/hr
- ☒ B. 30.3 km/hr
- ☒ C. 20.2 km/hr
- ☒ D. 33.3 km/hr

Question ID :	4410091420593
Option 1 ID :	4410095611291
Option 2 ID :	4410095611290
Option 3 ID :	4410095611289
Option 4 ID :	4410095611292
Status :	Answered
Chosen Option :	B

Q.5	Simplify the expression: $\frac{2^3 \times 4^2}{8}$
Ans	<input checked="" type="checkbox"/> A. 4
	<input checked="" type="checkbox"/> B. 32
	<input checked="" type="checkbox"/> C. 16
	<input checked="" type="checkbox"/> D. 8

Question ID :	4410091463943
Option 1 ID :	4410095783918
Option 2 ID :	4410095783921
Option 3 ID :	4410095783920
Option 4 ID :	4410095783919
Status :	Answered
Chosen Option :	C

Q.6	Two taps can fill a cistern in 2 hours and 4 hours respectively. A third tap can empty it in 2 hours. How long (in hours) will it take to fill one-fourth of the empty cistern, if all of them are opened together?
Ans	<input checked="" type="checkbox"/> A. 3
	<input checked="" type="checkbox"/> B. 2
	<input checked="" type="checkbox"/> C. 1
	<input checked="" type="checkbox"/> D. 4

Question ID :	441009518299
Option 1 ID :	4410092028617
Option 2 ID :	4410092028616
Option 3 ID :	4410092028615
Option 4 ID :	4410092028618
Status :	Answered
Chosen Option :	C

Q.7	Ramu bought a watch for ₹1,856 and sold it for ₹2,320. Find his profit percentage.
Ans	<input checked="" type="checkbox"/> A. 23%
	<input checked="" type="checkbox"/> B. 25%
	<input checked="" type="checkbox"/> C. 20%
	<input checked="" type="checkbox"/> D. 18%

Question ID :	4410091430559
Option 1 ID :	4410095650382
Option 2 ID :	4410095650383
Option 3 ID :	4410095650381
Option 4 ID :	4410095650380
Status :	Answered
Chosen Option :	B

Q.8	In what time (in years) will ₹2000 fetch an interest of ₹900 at 9% per year simple interest?
Ans	<input checked="" type="checkbox"/> A. 6
	<input checked="" type="checkbox"/> B. 7
	<input checked="" type="checkbox"/> C. 8
	<input checked="" type="checkbox"/> D. 5

Question ID :	441009853194
Option 1 ID :	4410093365749
Option 2 ID :	4410093365750
Option 3 ID :	4410093365751
Option 4 ID :	4410093365748
Status :	Answered
Chosen Option :	D

Q.9	A grocer has 31 kg rice, a part of which he sells at 23% profit and the remaining at 54% profit. He gains 53% on the whole. What is the quantity of rice sold at 54% profit?
Ans	<input checked="" type="checkbox"/> A. 28 kg
	<input checked="" type="checkbox"/> B. 31 kg
	<input checked="" type="checkbox"/> C. 30 kg
	<input checked="" type="checkbox"/> D. 29 kg

Question ID :	441009545862
Option 1 ID :	4410092138845
Option 2 ID :	4410092138846
Option 3 ID :	4410092138844
Option 4 ID :	4410092138847
Status :	Answered
Chosen Option :	C

Q.10	By selling an article at $\frac{4}{14}$ of its actual selling price, Akash incurs a loss of 20%. If he sells it at 60% of its actual selling price, then the profit percentage is
Ans	<input checked="" type="checkbox"/> A. 70.4%
	<input checked="" type="checkbox"/> B. 69.7%
	<input checked="" type="checkbox"/> C. 69.1%
	<input checked="" type="checkbox"/> D. 70.1%

Question ID :	441009914973
Option 1 ID :	4410093614146
Option 2 ID :	4410093614144
Option 3 ID :	4410093614145
Option 4 ID :	4410093614143
Status :	Not Answered
Chosen Option :	--

Q.1	What is the largest four-digit number that is exactly divisible by the HCF of 24 and 36?
1	
Ans	<input checked="" type="checkbox"/> A. 9996
	<input type="checkbox"/> B. 9979
	<input type="checkbox"/> C. 9886
	<input type="checkbox"/> D. 9999

Question ID :	4410091470301
Option 1 ID :	4410095809131
Option 2 ID :	4410095809133
Option 3 ID :	4410095809132
Option 4 ID :	4410095809130
Status :	Answered
Chosen Option :	A

Q.1	Subtracting 46% of X from X is the same as multiplying X by:
2	
Ans	<input type="checkbox"/> A. 0.046
	<input type="checkbox"/> B. 0.5
	<input type="checkbox"/> C. 0.46
	<input checked="" type="checkbox"/> D. 0.54

Question ID :	441009516682
Option 1 ID :	4410092022150
Option 2 ID :	4410092022149
Option 3 ID :	4410092022148
Option 4 ID :	4410092022147
Status :	Answered
Chosen Option :	D

Q.1	A sum of ₹8,000 is invested at 10% per annum compound interest for one and a half year, with half-yearly compounding. Find the total amount at the end of the period.
3	
Ans	<input type="checkbox"/> A. ₹9,351
	<input type="checkbox"/> B. ₹9,435
	<input checked="" type="checkbox"/> C. ₹9,261
	<input type="checkbox"/> D. ₹9,542

Question ID :	4410091420973
Option 1 ID :	4410095612825
Option 2 ID :	4410095612827
Option 3 ID :	4410095612824
Option 4 ID :	4410095612826
Status :	Answered
Chosen Option :	C

Q.14

A cylindrical rod has an outer curved surface area of 5100 cm^2 . If the length of the rod is 56 cm , then the outer radius (in cm) of the rod, correct to two places of decimal, is _____.

$$\text{Take } \pi = \frac{22}{7}^{1638}$$

Ans

A. 16.15

B. 13.79

C. 14.49

D. 14.43

Question ID :	441009622203
Option 1 ID :	4410092442945
Option 2 ID :	4410092442946
Option 3 ID :	4410092442944
Option 4 ID :	4410092442947
Status :	Answered
Chosen Option :	C

Q.15

Find the ratio between the fourth proportional of 6, 30, and 15 to the fourth proportional of 8, 32, and 24.

Ans

A. 22 : 27

B. 16 : 19

C. 25 : 32

D. 19 : 22

Question ID :	4410091430626
Option 1 ID :	4410095650650
Option 2 ID :	4410095650648
Option 3 ID :	4410095650651
Option 4 ID :	4410095650649
Status :	Answered
Chosen Option :	C

Q.16

A shopkeeper buys an article for ₹250 and sells it for ₹300. What is his percentage profit?

Ans

A. 15%

B. 30%

C. 20%

D. 25%

Question ID :	4410091463992
Option 1 ID :	4410095784118
Option 2 ID :	4410095784121
Option 3 ID :	4410095784119
Option 4 ID :	4410095784120
Status :	Answered
Chosen Option :	C

Q.1 7 Pipe A fills a tank in 8 hours, Pipe B fills it in 12 hours and a waste pipe C can empty the full tank in 24 hours. If all three are opened together, how long will it take to fill the tank?

- Ans ☒ A. 6 hours
- ☐ B. 4 hours
- ☐ C. 5 hours
- ☐ D. 8 hours

Question ID :	4410091422559
Option 1 ID :	4410095619146
Option 2 ID :	4410095619144
Option 3 ID :	4410095619145
Option 4 ID :	4410095619147
Status :	Answered
Chosen Option :	A

Q.1 8 A solid metallic cuboid of dimensions 60 cm × 22 cm × 30 cm is melted and recast into hollow cylindrical pipes of external radius 4 cm, internal radius 3 cm, and length 30 cm. How many such pipes can be made? $\left(\text{Use } \pi = \frac{22}{7} \right)$

- Ans ☒ A. 60
- ☐ B. 48
- ☐ C. 54
- ☐ D. 66

Question ID :	4410091462433
Option 1 ID :	4410095777844
Option 2 ID :	4410095777842
Option 3 ID :	4410095777843
Option 4 ID :	4410095777845
Status :	Answered
Chosen Option :	A

Q.1 9 A can do a work in 15 days and B in 23 days. If they work on it together for 6 days, then what fraction of the work is left?

- Ans ☒ A. $\frac{39}{115}$
- ☐ B. $\frac{34}{115}$
- ☐ C. $\frac{43}{115}$
- ☐ D. $\frac{47}{115}$

Question ID :	441009914018
Option 1 ID :	4410093610323
Option 2 ID :	4410093610326
Option 3 ID :	4410093610324
Option 4 ID :	4410093610325
Status :	Answered
Chosen Option :	A

Q.2 A starts business with ₹32,000 and after 3 months, B joins with A as his partner. After a year, the profit is divided in the ratio 2 : 3. What is B's contribution in the capital?

- Ans ☒ A. ₹65,595
- ☒ B. ₹63,595
- ☒ C. ₹63,105
- ☒ D. ₹64,000

Question ID : 441009547857

Option 1 ID : 4410092146827

Option 2 ID : 4410092146825

Option 3 ID : 4410092146826

Option 4 ID : 4410092146824

Status : Answered

Chosen Option : D

Q.2 What will be the total amount payable on a sum of ₹5000 after two years time at a rate of 14% per annum, if the interest is compounded annually?

- Ans ☒ A. ₹6430
- ☒ B. ₹6498
- ☒ C. ₹6323
- ☒ D. ₹7492

Question ID : 441009897862

Option 1 ID : 4410093545520

Option 2 ID : 4410093545518

Option 3 ID : 4410093545519

Option 4 ID : 4410093545521

Status : Answered

Chosen Option : B

Q.2 A shopkeeper sells an item for ₹953.7 after giving two successive discounts of 49% and 75% on its marked price. Had he not given any discount, he would have earned a profit of 10%. What is the cost price (in ₹) of the item?

- Ans ☒ A. 6,794
- ☒ B. 6,796
- ☒ C. 6,800
- ☒ D. 6,763

Question ID : 441009915835

Option 1 ID : 4410093617594

Option 2 ID : 4410093617593

Option 3 ID : 4410093617591

Option 4 ID : 4410093617592

Status : Answered

Chosen Option : C

Q.2	If the ratio of two numbers is 5 : 6, and their HCF is 5, then their LCM is:
3	
Ans	<input checked="" type="checkbox"/> A. 153
	<input checked="" type="checkbox"/> B. 150
	<input checked="" type="checkbox"/> C. 191
	<input checked="" type="checkbox"/> D. 181

Question ID :	441009525673
Option 1 ID :	4410092058112
Option 2 ID :	4410092058111
Option 3 ID :	4410092058113
Option 4 ID :	4410092058114
Status :	Answered
Chosen Option :	B

Q.2	Ram and Shyam travel the same distance at the rate of 40 km/hr and 50 km/hr, respectively. If Ram takes 54 minutes longer than Shyam, the distance travelled by each is:
4	
Ans	<input checked="" type="checkbox"/> A. 174 km
	<input checked="" type="checkbox"/> B. 173 km
	<input checked="" type="checkbox"/> C. 180 km
	<input checked="" type="checkbox"/> D. 170 km

Question ID :	441009549125
Option 1 ID :	4410092151899
Option 2 ID :	4410092151898
Option 3 ID :	4410092151896
Option 4 ID :	4410092151897
Status :	Answered
Chosen Option :	C

Q.2	The price of fuel decreases by 55%, 55%, and 55% in three successive months, but increases by 65% in the fourth month. What is the percentage increase/decrease (rounded off to two decimal places) in the price of fuel in the fourth month, as compared to its original price?
5	
Ans	<input checked="" type="checkbox"/> A. Increases by 80.47%
	<input checked="" type="checkbox"/> B. Increases by 89.44%
	<input checked="" type="checkbox"/> C. Decreases by 82.18%
	<input checked="" type="checkbox"/> D. Decreases by 84.96%

Question ID :	441009859949
Option 1 ID :	4410093392769
Option 2 ID :	4410093392771
Option 3 ID :	4410093392770
Option 4 ID :	4410093392768
Status :	Not Answered
Chosen Option :	--

Q.1 Refer to the following letter series and answer the question that follows. Counting to be done from left to right only.

(Left) L T V O K N E X H A I C W M U B Y Z R Q P (Right)

How many such consonants are there which are immediately preceded by a vowel and also immediately followed by a vowel?

- Ans ☒ A. One
- ☒ B. Three
- ☒ C. Two
- ☒ D. None

Question ID :	441009796911
Option 1 ID :	4410093141644
Option 2 ID :	4410093141646
Option 3 ID :	4410093141645
Option 4 ID :	4410093141643
Status :	Answered
Chosen Option :	D

Q.2 Based on the English alphabetical order, three of the following four letter-cluster pairs are alike in a certain way and thus form a group. Which letter-cluster pair DOES NOT belong to that group?

(Note: The odd one out is not based on the number of consonants/vowels or their position in the letter-cluster.)

- Ans ☒ A. SP-ZE
- ☒ B. PN-WB
- ☒ C. VS-CH
- ☒ D. HE-OT

Question ID :	441009796020
Option 1 ID :	4410093138082
Option 2 ID :	4410093138080
Option 3 ID :	4410093138079
Option 4 ID :	4410093138081
Status :	Answered
Chosen Option :	B

Q.3 Six boxes D, E, F, G, X and Y are kept one over the other but not necessarily in the same order. Only E is kept above Y. Only G is kept between Y and D. X is kept at some position below F. How many boxes are kept between D and X?

- Ans ☒ A. Two
- ☒ B. Three
- ☒ C. Four
- ☒ D. One

Question ID :	4410091432265
Option 1 ID :	4410095657395
Option 2 ID :	4410095657396
Option 3 ID :	4410095657397
Option 4 ID :	4410095657394
Status :	Answered
Chosen Option :	D

Q.4 What should come in place of the question mark (?) in the given series based on the English alphabetical order?

NER LHT JKV HNX ?

- Ans ☒ A. TRE
- ☒ B. VGF
- ☒ C. FQZ
- ☒ D. NHY

Question ID : 4410091435296

Option 1 ID : 4410095669718

Option 2 ID : 4410095669719

Option 3 ID : 4410095669716

Option 4 ID : 4410095669717

Status : Answered

Chosen Option : C

Q.5 Select the pair which follows the same pattern as that followed by the two pairs given below. Both pairs follow the same pattern.

MKH : OHJ
IOL : KLN

- Ans ☒ A. INM : KKN
- ☒ B. FKH : HGJ
- ☒ C. GIG : IFH
- ☒ D. LPM : NMO

Question ID : 441009788502

Option 1 ID : 4410093108010

Option 2 ID : 4410093108009

Option 3 ID : 4410093108008

Option 4 ID : 4410093108007

Status : Answered

Chosen Option : D

Q.6 What should come in place of the question mark (?) in the given series?

3 13 48 203 1028 ?

- Ans ☒ A. 6283
- ☒ B. 6273
- ☒ C. 6182
- ☒ D. 6183

Question ID : 4410091413446

Option 1 ID : 4410095582798

Option 2 ID : 4410095582797

Option 3 ID : 4410095582795

Option 4 ID : 4410095582796

Status : Not Answered

Chosen Option : --

Q.7	What should come in place of the question mark (?) in the given series based on the English alphabetical order? MEO JFM GGK ? AIG
Ans	<input checked="" type="checkbox"/> A. MJH
	<input checked="" type="checkbox"/> B. DHI
	<input checked="" type="checkbox"/> C. LOP
	<input checked="" type="checkbox"/> D. OIY

Question ID :	4410091432429
Option 1 ID :	4410095658079
Option 2 ID :	4410095658078
Option 3 ID :	4410095658080
Option 4 ID :	4410095658077
Status :	Answered
Chosen Option :	B

Q.8	Eight friends R, S, T, U, V, W, X, and Y are sitting around a circular table, facing the centre. T sits third to the left of V. S sits third to the right of V. U sits third to the left of W. X sits to the immediate left of R. W sits to the immediate left of T. What is the position of X with respect to Y?
Ans	<input checked="" type="checkbox"/> A. Second to the right
	<input checked="" type="checkbox"/> B. Fourth to the right
	<input checked="" type="checkbox"/> C. Immediate left
	<input checked="" type="checkbox"/> D. Third to the left

Question ID :	441009791167
Option 1 ID :	4410093118667
Option 2 ID :	4410093118669
Option 3 ID :	4410093118670
Option 4 ID :	4410093118668
Status :	Answered
Chosen Option :	B

Q.9	Select the pair that follows the same pattern as that followed by the two set of pairs given below. Both pairs follow the same pattern. OKN : RIQ HGP : KES
Ans	<input checked="" type="checkbox"/> A. NPS : QNU
	<input checked="" type="checkbox"/> B. SLL : VIO
	<input checked="" type="checkbox"/> C. NMK : QKM
	<input checked="" type="checkbox"/> D. OFW : RDZ

Question ID :	4410091432377
Option 1 ID :	4410095657833
Option 2 ID :	4410095657834
Option 3 ID :	4410095657836
Option 4 ID :	4410095657835
Status :	Answered
Chosen Option :	D

Q.1 In a certain code language, 'ivy wine mop' is coded as 'fu tp kp' and 'mud ivy arch' is coded as 'tp dv em'. How is 'ivy' coded in the given language? (All codes are two-letter codes.)

- Ans ☒ A. tp
- ☐ B. kp
- ☐ C. fu
- ☐ D. dv

Question ID :	4410091411310
Option 1 ID :	4410095574265
Option 2 ID :	4410095574267
Option 3 ID :	4410095574266
Option 4 ID :	4410095574268
Status :	Answered
Chosen Option :	A

Q.1 If 'X' stands for '+', 'Y' stands for '+', 'Z' stands for '-', and 'W' stands for 'x', what will come in place of the question mark (?) in the following equation?

25 X 5 W 2 Y 6 Z 3 = ?

- Ans ☐ A. 12
- ☐ B. 14
- ☒ C. 13
- ☐ D. 11

Question ID :	441009554791
Option 1 ID :	4410092174481
Option 2 ID :	4410092174480
Option 3 ID :	4410092174479
Option 4 ID :	4410092174478
Status :	Answered
Chosen Option :	C

Q.1 There are 7 persons in a family, J, K, L, M, N, O and P. There are 2 married couples among them. J is the wife of K. K has two sons M and L. M is the father of N and P. N is the daughter of O. How is J related to P?

- Ans ☒ A. Father's mother
- ☐ B. Mother's mother
- ☐ C. Daughter
- ☐ D. Mother

Question ID :	4410091412184
Option 1 ID :	4410095577773
Option 2 ID :	4410095577774
Option 3 ID :	4410095577772
Option 4 ID :	4410095577775
Status :	Answered
Chosen Option :	A

Q.1 3 Six friends D, E, F, G, X and Y are sitting around a circular table facing the centre of the table. Y sits third to the left of F. D sits second to the left of Y. Only F sits between X and D. E is not an immediate neighbour of X. How many people sit between G and D when counted from the right of G?

- Ans
- ☒ A. Four
 - ☒ B. One
 - ☒ C. Three
 - ☒ D. Two

Question ID :	4410091432220
Option 1 ID :	4410095657217
Option 2 ID :	4410095657214
Option 3 ID :	4410095657216
Option 4 ID :	4410095657215
Status :	Answered
Chosen Option :	D

Q.1 4 Each of G, H, I, J, L, M, and N has a holiday on a different day of the week, starting from Monday and ending on Sunday of the same week. No one has a holiday after I. Only three people have a holiday between L and I. Only one person has a holiday between N and H. M has a holiday immediately the day before J. G doesn't have a holiday on Friday. Only three people have holiday after N. How many people have a holiday after G?

- Ans
- ☒ A. Two
 - ☒ B. Four
 - ☒ C. Six
 - ☒ D. Five

Question ID :	4410091435115
Option 1 ID :	4410095668995
Option 2 ID :	4410095668994
Option 3 ID :	4410095668993
Option 4 ID :	4410095668992
Status :	Answered
Chosen Option :	C

Q.1 5 Based on the English alphabetical order, three of the following four letter-clusters are alike in a certain way and thus form a group. Which letter-cluster DOES NOT belong to that group?
(Note: The odd one out is not based on the number of consonants/vowels or their position in the letter-cluster.)

- Ans
- ☒ A. RTZ
 - ☒ B. NQV
 - ☒ C. PSX
 - ☒ D. DGL

Question ID :	441009790574
Option 1 ID :	4410093116298
Option 2 ID :	4410093116296
Option 3 ID :	4410093116297
Option 4 ID :	4410093116295
Status :	Answered
Chosen Option :	A

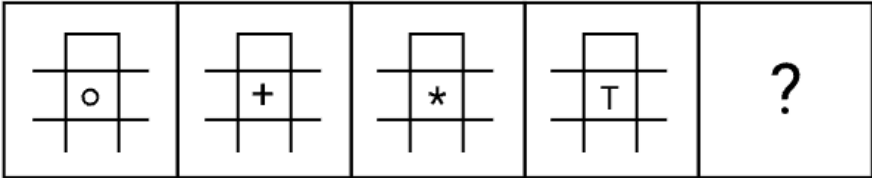
Q.1 Each letter in the word DEFROCK is changed to the letter immediately following it in the English alphabetical order, and then all the letters thus formed are arranged in the English alphabetical order. Which of the following letters will be fourth from the right in the new group of letters thus formed?

- Ans ☒ A. E
- ☒ B. G
- ☒ C. L
- ☒ D. F

Question ID :	441009796551
Option 1 ID :	4410093140203
Option 2 ID :	4410093140205
Option 3 ID :	4410093140206
Option 4 ID :	4410093140204
Status :	Answered
Chosen Option :	B

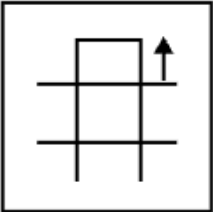


Q.1 Identify the figure given in the options which when put in place of the question mark (?) will logically complete the series.

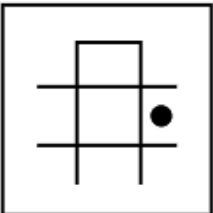


Ans

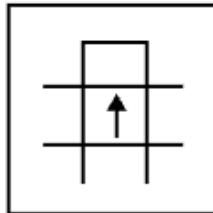
✗ A.



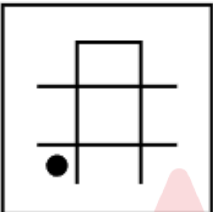
✗ B.



✓ C.



✗ D.



Question ID :	4410091425270
Option 1 ID :	4410095664134
Option 2 ID :	4410095664132
Option 3 ID :	4410095664131
Option 4 ID :	4410095664133
Status :	Answered
Chosen Option :	C

Q.1 8 Six friends D, E, F, G, X and Y are sitting in a straight line facing north. Only two people sit to the left of Y. Only two people sit between Y and G. Only one person sits between G and D. X sits to the immediate left of E. How many people sit to the right of F?

- Ans ☒ A. Two
- ☒ B. One
- ☒ C. Three
- ☒ D. Four

Question ID :	4410091432236
Option 1 ID :	4410095657279
Option 2 ID :	4410095657278
Option 3 ID :	4410095657280
Option 4 ID :	4410095657281
Status :	Answered
Chosen Option :	B

Q.1 9 Refer to the following letter series and answer the question that follows. Counting to be done from left to right only.

(Left) S J O B H M E I J P M A K C M F E K W A D B (Right)

How many such vowels are there, each of which is immediately preceded by a consonant and also immediately followed by a consonant?

- Ans ☒ A. 3
- ☒ B. 5
- ☒ C. 6
- ☒ D. 4

Question ID :	441009790827
Option 1 ID :	4410093117309
Option 2 ID :	4410093117308
Option 3 ID :	4410093117310
Option 4 ID :	4410093117307
Status :	Answered
Chosen Option :	D

Q.2 0 What should come in place of the question mark (?) in the given series?
13 20 34 55 ? 118

- Ans ☒ A. 93
- ☒ B. 91
- ☒ C. 81
- ☒ D. 83

Question ID :	441009590731
Option 1 ID :	4410092318040
Option 2 ID :	4410092318039
Option 3 ID :	4410092318037
Option 4 ID :	4410092318038
Status :	Answered
Chosen Option :	D

Q.2 1 ROCK is related to AXLT in a certain way, based on the English alphabetical order. In the same way, GROW is related to PAXF. To which of the given options is LAMP related, following the same logic?6109

- Ans ☒ A. UJVVY
- ☐ B. UKWY
- ☐ C. VKWZ
- ☐ D. TIUX

Question ID :	441009792169
Option 1 ID :	4410093122677
Option 2 ID :	4410093122675
Option 3 ID :	4410093122678
Option 4 ID :	4410093122676
Status :	Answered
Chosen Option :	A

Q.2 2 If 1 is added to each odd digit and 2 is subtracted from each even digit in the number 8534176, then which of the following digits will be third from the left in the new number thus formed?

- Ans ☐ A. 2
- ☒ B. 4
- ☐ C. 6
- ☐ D. 8

Question ID :	441009552909
Option 1 ID :	4410092166951
Option 2 ID :	4410092166950
Option 3 ID :	4410092166952
Option 4 ID :	4410092166953
Status :	Answered
Chosen Option :	B

Q.2 3 G, H, J, K, L, and P live on six different floors of the same building. The lowermost floor in the building is numbered 1, the floor above it is numbered 2, and so on, till the topmost floor is numbered 6. Only two people live between H and K. Only P lives above G. J lives on an even-numbered floor. H lives on the lowermost floor. How many people live between L and P?

- Ans ☐ A. Three
- ☐ B. Four
- ☐ C. One
- ☒ D. Two

Question ID :	441009814130
Option 1 ID :	4410093210645
Option 2 ID :	4410093210646
Option 3 ID :	4410093210643
Option 4 ID :	4410093210644
Status :	Answered
Chosen Option :	D

Q.2 4 Mr. Dawa starts from Point A and drives 23 km towards the west. He then takes a left turn, drives 11 km, then turns right and drives 15 km. Next, he takes a right turn and drives 31 km. He then takes a right turn, drives 9 km, then turns right and drives 16 km. He takes a final left turn, drives 29 km, and stops at Point P. How far (shortest distance) and towards which direction should he drive in order to reach Point A again? (All turns are 90-degree turns only, unless specified.)

- Ans
- ☒ A. 4 km towards the north
 - ☒ B. 15 km towards the west
 - ☒ C. 4 km towards the south
 - ☒ D. 16 km towards the east

Question ID :	441009761123
Option 1 ID :	4410092998485
Option 2 ID :	4410092998487
Option 3 ID :	4410092998486
Option 4 ID :	4410092998488
Status :	Answered
Chosen Option :	C

Q.2 5 Seven boxes G, H, I, J, L, M and N are kept one over the other but not necessarily in the same order. Only three boxes are kept below J. Only two boxes are kept between J and G. Only I is kept above N. H is kept at some place below L and at some place above M. Which box is kept at the second position from the bottom?

- Ans
- ☒ A. H
 - ☒ B. G
 - ☒ C. M
 - ☒ D. L

Question ID :	4410091435079
Option 1 ID :	4410095668850
Option 2 ID :	4410095668851
Option 3 ID :	4410095668849
Option 4 ID :	4410095668848
Status :	Answered
Chosen Option :	C

Section : General Awareness

Q.1 What is the unit of work in the International System of Units (SI)?

- Ans
- ☒ A. Joule
 - ☒ B. Pascal
 - ☒ C. Newton-metre
 - ☒ D. Watt

Question ID :	441009624090
Option 1 ID :	4410092450493
Option 2 ID :	4410092450495
Option 3 ID :	4410092450492
Option 4 ID :	4410092450494
Status :	Answered
Chosen Option :	A

Q.2	Article 39A mandates that the State shall secure that the operation of the legal system promotes which central concept?
Ans	<input checked="" type="checkbox"/> A. Rapid economic growth
	<input checked="" type="checkbox"/> B. Political stability and security
	<input checked="" type="checkbox"/> C. Justice, on a basis of equal opportunity
	<input checked="" type="checkbox"/> D. Social and religious harmony

Question ID :	4410091515008
Option 1 ID :	4410095983449
Option 2 ID :	4410095983450
Option 3 ID :	4410095983451
Option 4 ID :	4410095983448
Status :	Answered
Chosen Option :	C

Q.3	The 'Lotia' folk song and festival tradition is associated with which Indian state?
Ans	<input checked="" type="checkbox"/> A. Rajasthan
	<input checked="" type="checkbox"/> B. Gujarat
	<input checked="" type="checkbox"/> C. Uttar Pradesh
	<input checked="" type="checkbox"/> D. Madhya Pradesh

Question ID :	4410091513134
Option 1 ID :	4410095976566
Option 2 ID :	4410095976567
Option 3 ID :	4410095976569
Option 4 ID :	4410095976568
Status :	Not Answered
Chosen Option :	--

Q.4	In most parts of India, which months mark the hot weather season just before the onset of the southwest monsoon?
Ans	<input checked="" type="checkbox"/> A. January to March
	<input checked="" type="checkbox"/> B. March to May
	<input checked="" type="checkbox"/> C. September to November
	<input checked="" type="checkbox"/> D. June to August

Question ID :	4410091511232
Option 1 ID :	4410095968978
Option 2 ID :	4410095968979
Option 3 ID :	4410095968981
Option 4 ID :	4410095968980
Status :	Answered
Chosen Option :	B

Q.5	A major river system in Assam frequently changes its course after recurring floods, leading to the formation of several river islands. The largest among them, covering about 1,250 square kilometres is known as:
Ans	<div><div><div><div><div><div></div></div></div><div>A. Umananda</div></div></div><div><div><div><div><div><div></div></div></div><div>B. Majuli</div></div></div><div><div><div><div><div><div></div></div></div><div>C. Dibang Island</div></div></div><div><div><div><div><div><div></div></div></div><div>D. Sivasagar Island</div></div></div></div></div></div></div>

Question ID :	4410091517547
Option 1 ID :	4410095993555
Option 2 ID :	4410095993553
Option 3 ID :	4410095993556
Option 4 ID :	4410095993554
Status :	Answered
Chosen Option :	B

Q.6	Which instrument is native to Odisha and is used in Odissi classical music?
Ans	<div><div><div><div><div><div></div></div></div><div>A. Mardala</div></div></div><div><div><div><div><div><div></div></div></div><div>B. Shehnai</div></div></div><div><div><div><div><div><div></div></div></div><div>C. Violins</div></div></div><div><div><div><div><div><div></div></div></div><div>D. Sitar</div></div></div></div></div></div></div>

Question ID :	4410091515396
Option 1 ID :	4410095984990
Option 2 ID :	4410095984992
Option 3 ID :	4410095984991
Option 4 ID :	4410095984989
Status :	Not Answered
Chosen Option :	--

Q.7	What term is used for transferring the use of an asset to a private party for a fixed duration?
Ans	<div><div><div><div><div><div></div></div></div><div>A. Liquidation</div></div></div><div><div><div><div><div><div></div></div></div><div>B. Joint venture</div></div></div><div><div><div><div><div><div></div></div></div><div>C. Leasing</div></div></div><div><div><div><div><div><div></div></div></div><div>D. Merger</div></div></div></div></div></div></div>

Question ID :	4410091518357
Option 1 ID :	4410095996658
Option 2 ID :	4410095996661
Option 3 ID :	4410095996659
Option 4 ID :	4410095996660
Status :	Answered
Chosen Option :	C

Q.8	In which of the following states was India's inaugural oil well successfully bored, marking the onset of the country's crude oil exploration and production activities?
Ans	<input checked="" type="checkbox"/> A. Assam
	<input type="checkbox"/> B. Maharashtra
	<input type="checkbox"/> C. Gujarat
	<input type="checkbox"/> D. Rajasthan

Question ID :	4410091502789
Option 1 ID :	4410095935448
Option 2 ID :	4410095935450
Option 3 ID :	4410095935449
Option 4 ID :	4410095935451
Status :	Answered
Chosen Option :	A

Q.9	Which of the following is the unit of pressure?
Ans	<input type="checkbox"/> A. Newton
	<input type="checkbox"/> B. Watt
	<input type="checkbox"/> C. Joule
	<input checked="" type="checkbox"/> D. Pascal

Question ID :	441009625160
Option 1 ID :	4410092454774
Option 2 ID :	4410092454775
Option 3 ID :	4410092454773
Option 4 ID :	4410092454772
Status :	Answered
Chosen Option :	D

Q.10	A government budget is generally separated into which two major parts?
Ans	<input checked="" type="checkbox"/> A. Revenue Budget and Capital Budget
	<input type="checkbox"/> B. Gross and Net Budget
	<input type="checkbox"/> C. Plan and Non-Plan Budget
	<input type="checkbox"/> D. Direct Budget and Indirect Budget

Question ID :	4410091518770
Option 1 ID :	4410095998351
Option 2 ID :	4410095998350
Option 3 ID :	4410095998353
Option 4 ID :	4410095998352
Status :	Answered
Chosen Option :	A

Q.1	Who launched the Pradhan Mantri Jeevan Jyoti Bima Yojana?
1	
Ans	<input checked="" type="checkbox"/> A. Nirmala Sitharaman
	<input checked="" type="checkbox"/> B. Rajnath Singh
	<input checked="" type="checkbox"/> C. Amit Shah
	<input checked="" type="checkbox"/> D. Narendra Modi

Question ID :	441009638857
Option 1 ID :	4410092509574
Option 2 ID :	4410092509571
Option 3 ID :	4410092509573
Option 4 ID :	4410092509572
Status :	Answered
Chosen Option :	D

Q.1	Which of the following is NOT an example of an element?
2	
Ans	<input checked="" type="checkbox"/> A. Hydrogen
	<input checked="" type="checkbox"/> B. Oxygen
	<input checked="" type="checkbox"/> C. Water
	<input checked="" type="checkbox"/> D. Iron

Question ID :	4410091515651
Option 1 ID :	4410095986006
Option 2 ID :	4410095986005
Option 3 ID :	4410095986008
Option 4 ID :	4410095986007
Status :	Answered
Chosen Option :	C

Q.1	Where are the headquarters of both the Ramakrishna Mission and the Ramakrishna Math located?
3	
Ans	<input checked="" type="checkbox"/> A. Vivekananda House in Chennai
	<input checked="" type="checkbox"/> B. Gaudiya Math in West Bengal
	<input checked="" type="checkbox"/> C. Belur Math in West Bengal
	<input checked="" type="checkbox"/> D. Dakshineswar Kali Temple in West Bengal

Question ID :	4410091514561
Option 1 ID :	4410095981912
Option 2 ID :	4410095981913
Option 3 ID :	4410095981911
Option 4 ID :	4410095981910
Status :	Answered
Chosen Option :	C

Q.1 4	A citizen's duty to uphold and protect the nation covers which three core concepts as one of the fundamental duties of citizens, as specified in Article 51A(c) of the Indian Constitution?
Ans	<div><div><input checked="" type="checkbox"/></div><div>A. Poverty, inequality, and illiteracy</div></div>
	<div><div><input checked="" type="checkbox"/></div><div>B. Sovereignty, unity, and integrity of India</div></div>
	<div><div><input checked="" type="checkbox"/></div><div>C. Economy, development, and commerce</div></div>
	<div><div><input checked="" type="checkbox"/></div><div>D. Peace, justice, and liberty</div></div>

Question ID :	4410091515057
Option 1 ID :	4410095983637
Option 2 ID :	4410095983636
Option 3 ID :	4410095983638
Option 4 ID :	4410095983639
Status :	Answered
Chosen Option :	B

Q.1 5	Which river is identified as the only large river flowing through the Indian Desert?
Ans	<div><div><input checked="" type="checkbox"/></div><div>A. Sutlej</div></div>
	<div><div><input checked="" type="checkbox"/></div><div>B. Sabarmati</div></div>
	<div><div><input checked="" type="checkbox"/></div><div>C. Ghaggar</div></div>
	<div><div><input checked="" type="checkbox"/></div><div>D. Luni</div></div>

Question ID :	4410091509038
Option 1 ID :	4410095960821
Option 2 ID :	4410095960820
Option 3 ID :	4410095960818
Option 4 ID :	4410095960819
Status :	Answered
Chosen Option :	D

Q.1 6	According to Kautilya's Arthashastra, why did post-Gupta rulers formed alliances (mitra) with neighbouring kingdoms?
Ans	<div><div><input checked="" type="checkbox"/></div><div>A. To control maritime trade</div></div>
	<div><div><input checked="" type="checkbox"/></div><div>B. To promote cultural exchange</div></div>
	<div><div><input checked="" type="checkbox"/></div><div>C. To gain military aid and maintain political balance</div></div>
	<div><div><input checked="" type="checkbox"/></div><div>D. To reduce taxation on peasants</div></div>

Question ID :	4410091498944
Option 1 ID :	4410095920674
Option 2 ID :	4410095920673
Option 3 ID :	4410095920672
Option 4 ID :	4410095920675
Status :	Answered
Chosen Option :	C

Q.1 7	As the final interpreter of the Constitution of India, which power enables the judiciary to nullify unconstitutional laws?
Ans	<input checked="" type="checkbox"/> A. Concurrent power
	<input checked="" type="checkbox"/> B. Judicial review
	<input checked="" type="checkbox"/> C. Ordinance-making power
	<input checked="" type="checkbox"/> D. Executive oversight

Question ID :	4410091517421
Option 1 ID :	4410095993054
Option 2 ID :	4410095993053
Option 3 ID :	4410095993055
Option 4 ID :	4410095993056
Status :	Answered
Chosen Option :	B

Q.1 8	The 105 th Amendment Act of the Indian Constitution was enacted in which year?
Ans	<input checked="" type="checkbox"/> A. 2020
	<input checked="" type="checkbox"/> B. 2021
	<input checked="" type="checkbox"/> C. 2022
	<input checked="" type="checkbox"/> D. 2018

Question ID :	4410091515224
Option 1 ID :	4410095984297
Option 2 ID :	4410095984298
Option 3 ID :	4410095984299
Option 4 ID :	4410095984296
Status :	Not Answered
Chosen Option :	--

Q.1 9	Who presided over the Second Session of the Indian National Congress in 1886?
Ans	<input checked="" type="checkbox"/> A. Badruddin Tyabji
	<input checked="" type="checkbox"/> B. A. O. Hume
	<input checked="" type="checkbox"/> C. Dadabhai Naoroji
	<input checked="" type="checkbox"/> D. W. C. Bonnerjee

Question ID :	4410091514464
Option 1 ID :	4410095981700
Option 2 ID :	4410095981701
Option 3 ID :	4410095981698
Option 4 ID :	4410095981699
Status :	Answered
Chosen Option :	C

Q.20	What title did the Gupta rulers adopt to emphasize their supremacy over earlier Indian kings?
Ans	<div><div><input type="checkbox"/></div><div>A. Rājan</div></div>
	<div><div><input type="checkbox"/></div><div>B. Prabhupati</div></div>
	<div><div><input type="checkbox"/></div><div>C. Mahārāja</div></div>
	<div><div><input checked="" type="checkbox"/></div><div>D. Mahārājadhirāja</div></div>

Question ID :	4410091498827
Option 1 ID :	4410095920233
Option 2 ID :	4410095920235
Option 3 ID :	4410095920232
Option 4 ID :	4410095920234
Status :	Answered
Chosen Option :	D

Q.21	Which of the following individuals can apply for Indian citizenship under Section 5(1)(g) of the Citizenship Act, 1955?
Ans	<div><div><input type="checkbox"/></div><div>A. Any foreign national working in India</div></div>
	<div><div><input type="checkbox"/></div><div>B. Any tourist visiting India</div></div>
	<div><div><input type="checkbox"/></div><div>C. A foreign student enrolled in an Indian university</div></div>
	<div><div><input checked="" type="checkbox"/></div><div>D. An OCI cardholder seeking full Indian citizenship</div></div>

Question ID :	4410091509471
Option 1 ID :	4410095962545
Option 2 ID :	4410095962544
Option 3 ID :	4410095962547
Option 4 ID :	4410095962546
Status :	Not Answered
Chosen Option :	--

Q.22	A key outcome of the classical language recognition is the facilitation of efforts toward:
Ans	<div><div><input type="checkbox"/></div><div>A. Integrating it as an official language of the United Nations</div></div>
	<div><div><input type="checkbox"/></div><div>B. Modernising the language's script and grammar</div></div>
	<div><div><input checked="" type="checkbox"/></div><div>C. Its promotion, preservation and further research</div></div>
	<div><div><input type="checkbox"/></div><div>D. Mandating its teaching in all primary schools nationwide</div></div>

Question ID :	4410091509887
Option 1 ID :	4410095964232
Option 2 ID :	4410095964233
Option 3 ID :	4410095964235
Option 4 ID :	4410095964234
Status :	Answered
Chosen Option :	D

Q.2 3	Which specific Article of the Constitution of India requires the State to endeavour to promote international peace and security?
Ans	<input checked="" type="checkbox"/> A. Article 48A
	<input checked="" type="checkbox"/> B. Article 48
	<input checked="" type="checkbox"/> C. Article 51
	<input checked="" type="checkbox"/> D. Article 49

Question ID :	4410091515031
Option 1 ID :	4410095983537
Option 2 ID :	4410095983536
Option 3 ID :	4410095983539
Option 4 ID :	4410095983538
Status :	Answered
Chosen Option :	C

Q.2 4	Which of the following years saw the final split between the Moderates and Extremists at the Surat Session of the Indian National Congress?
Ans	<input checked="" type="checkbox"/> A. 1905
	<input checked="" type="checkbox"/> B. 1907
	<input checked="" type="checkbox"/> C. 1908
	<input checked="" type="checkbox"/> D. 1906

Question ID :	4410091502589
Option 1 ID :	4410095934686
Option 2 ID :	4410095934688
Option 3 ID :	4410095934689
Option 4 ID :	4410095934687
Status :	Answered
Chosen Option :	B

Q.2 5	How did the Green Revolution impact the use of land in agriculture?
Ans	<input checked="" type="checkbox"/> A. It resulted in more efficient use of existing agricultural land.
	<input checked="" type="checkbox"/> B. It increased the focus on urban farming.
	<input checked="" type="checkbox"/> C. It led to a decrease in the amount of land under cultivation.
	<input checked="" type="checkbox"/> D. It promoted the abandonment of arable land.

Question ID :	441009609885
Option 1 ID :	4410092394658
Option 2 ID :	4410092394659
Option 3 ID :	4410092394657
Option 4 ID :	4410092394660
Status :	Answered
Chosen Option :	A

Q.1	Select the INCORRECTLY spelt word.
Ans	<input checked="" type="checkbox"/> A. Scripture
	<input checked="" type="checkbox"/> B. Vacuum
	<input checked="" type="checkbox"/> C. Rationale
	<input checked="" type="checkbox"/> D. Concieve

Question ID :	4410091400648
Option 1 ID :	4410095532275
Option 2 ID :	4410095532273
Option 3 ID :	4410095532274
Option 4 ID :	4410095532272
Status :	Answered
Chosen Option :	C

Q.2	Parts of a sentence are given below. Arrange the parts in the correct order to form a meaningful and coherent sentence. A. so calculated B. lay an emotional duplicity C. beneath the syntactic polish D. it disguised its own artificiality
Ans	<input checked="" type="checkbox"/> A. ACBD
	<input checked="" type="checkbox"/> B. CBAD
	<input checked="" type="checkbox"/> C. BACD
	<input checked="" type="checkbox"/> D. BCAD

Question ID :	4410091370587
Option 1 ID :	4410095413793
Option 2 ID :	4410095413795
Option 3 ID :	4410095413794
Option 4 ID :	4410095413792
Status :	Not Answered
Chosen Option :	--

Q.3	Select the most appropriate options to fill in the blanks. I went _____ the room _____ the window.
Ans	<input checked="" type="checkbox"/> A. under; by
	<input checked="" type="checkbox"/> B. into; through
	<input checked="" type="checkbox"/> C. on; from
	<input checked="" type="checkbox"/> D. in; on

Question ID :	4410091378657
Option 1 ID :	4410095446109
Option 2 ID :	4410095446107
Option 3 ID :	4410095446108
Option 4 ID :	4410095446106
Status :	Answered
Chosen Option :	B

Q.4

Select the most appropriate option to fill in the blanks.

The carpenter carefully selected the wood for _____ Vasant Vihar project, ensuring that a plank with an even grain would fit perfectly into _____ door frame.

Ans

A. a, the

B. the, the

C. the, a

D. an, the

Question ID :	4410091386621
Option 1 ID :	4410095477167
Option 2 ID :	4410095477169
Option 3 ID :	4410095477168
Option 4 ID :	4410095477170
Status :	Answered
Chosen Option :	B

Q.5

Select the most appropriate ANTONYM of the underlined word in the given sentence.

The ancient manuscript was pristine, preserved without a single blemish despite centuries of handling.

Ans

A. Unspoiled

B. Flawless

C. Immaculate

D. Tarnished

Question ID :	4410091361796
Option 1 ID :	4410095379237
Option 2 ID :	4410095379235
Option 3 ID :	4410095379234
Option 4 ID :	4410095379236
Status :	Answered
Chosen Option :	D

Q.6

Select the most appropriate article to fill in the blanks. If no article is needed, select 'No article needed'.

My daughter goes to _____ school every day to learn, but yesterday I went to _____ school to have a brief appointment with _____ principal about her progress and upcoming activities.

Ans

A. the, the, no article needed

B. the, no article needed, the

C. no article needed, the, the

D. the, the, the

Question ID :	4410091401398
Option 1 ID :	4410095534906
Option 2 ID :	4410095534904
Option 3 ID :	4410095534905
Option 4 ID :	4410095534903
Status :	Answered
Chosen Option :	D

Q.7	Select the most appropriate option to fill in the blank. He wandered from country to country, never staying long enough to establish roots, embracing the uncertainties of life like a true _____.
Ans	<input checked="" type="checkbox"/> A. vagabond
	<input type="checkbox"/> B. cosmopolitan
	<input type="checkbox"/> C. emigrant
	<input type="checkbox"/> D. exile

Question ID :	4410091370597
Option 1 ID :	4410095413833
Option 2 ID :	4410095413832
Option 3 ID :	4410095413835
Option 4 ID :	4410095413834
Status :	Answered
Chosen Option :	A

Q.8	Select the most appropriate option that rectifies the grammatical error in the given sentence. The ethnomusicological research was conducted notwithstanding to the region's complex geopolitical dynamics.
Ans	<input type="checkbox"/> A. The ethnomusicological research was conducted notwithstanding with the region's complex geopolitical dynamics.
	<input type="checkbox"/> B. The ethnomusicological research was conducted notwithstanding despite the region's complex geopolitical dynamics.
	<input type="checkbox"/> C. The ethnomusicological research was conducted notwithstanding of the region's complex geopolitical dynamics.
	<input checked="" type="checkbox"/> D. The ethnomusicological research was conducted notwithstanding the region's complex geopolitical dynamics.

Question ID :	4410091370452
Option 1 ID :	4410095413254
Option 2 ID :	4410095413255
Option 3 ID :	4410095413253
Option 4 ID :	4410095413252
Status :	Answered
Chosen Option :	B

Q.9	Parts of a sentence are given below. While the first part is in the correct place, the remaining parts (labelled P, Q, R and S) are jumbled up. Arrange the parts in the correct order to form a meaningful and coherent sentence. Life is judged / (P) and not by / (Q) of work done / (R) the longevity of years / (S) by the quality
Ans	<input type="checkbox"/> A. SQRP
	<input checked="" type="checkbox"/> B. SQPR
	<input type="checkbox"/> C. QSRP
	<input type="checkbox"/> D. QSPR

Question ID :	4410091370238
Option 1 ID :	4410095412401
Option 2 ID :	4410095412403
Option 3 ID :	4410095412402
Option 4 ID :	4410095412400
Status :	Answered
Chosen Option :	B

Q.10

Select the most appropriate ANTONYM of the underlined word in the context of the given sentence.

The movie was so dull that many people left before it ended.

Ans

☐ A. Short

☐ B. Simple

☒ C. Interesting

☐ D. Bright

Question ID :	4410091365424
Option 1 ID :	4410095393290
Option 2 ID :	4410095393291
Option 3 ID :	4410095393289
Option 4 ID :	4410095393288
Status :	Answered
Chosen Option :	C

Q.11

Select the most appropriate proverb/idiom that can substitute the underlined segment in the given sentence.

Trying to please everyone, Kiran realised that someone who is a friend to all may have no true friends.

Ans

☐ A. Birds of a feather flock together

☐ B. A friend in need is a friend indeed

☐ C. Actions speak louder than words

☒ D. A friend to all is a friend to none

Question ID :	4410091379504
Option 1 ID :	4410095449298
Option 2 ID :	4410095449296
Option 3 ID :	4410095449299
Option 4 ID :	4410095449297
Status :	Answered
Chosen Option :	D

Q.12

Select the option that rectifies the preposition usage error in the given sentence.

The children were playing happily for the garden while their parents were sitting on the bench.

Ans

☒ A. The children were playing happily in the garden while their parents were sitting on the bench.

☐ B. The children were playing happily under the garden while their parents were sitting on the bench.

☐ C. The children were playing happily without the garden while their parents were sitting on the bench.

☐ D. The children were playing happily on the garden while their parents were sitting on the bench.

Question ID :	4410091378795
Option 1 ID :	4410095446657
Option 2 ID :	4410095446658
Option 3 ID :	4410095446659
Option 4 ID :	4410095446656
Status :	Answered
Chosen Option :	A

Q.1
3

Parts of a sentence are given below. Arrange the parts in the correct order to form a meaningful and coherent sentence.

(A) includes not only
(B) and emotional development
(C) a well-rounded education
(D) academic but also social

Ans

✗ A. ABCD

✓ B. CADB

✗ C. ABDC

✗ D. CABD

Question ID :	441009433968
Option 1 ID :	4410091695392
Option 2 ID :	4410091695390
Option 3 ID :	4410091695393
Option 4 ID :	4410091695391
Status :	Answered
Chosen Option :	B

Q.1
4

Select the INCORRECTLY spelt word.

Ans

✗ A. Pictorial

✗ B. Envious

✗ C. Chancellor

✓ D. Embarrass

Question ID :	4410091372668
Option 1 ID :	4410095422109
Option 2 ID :	4410095422106
Option 3 ID :	4410095422108
Option 4 ID :	4410095422107
Status :	Answered
Chosen Option :	C

Q.1
5

Select the option that can be used as a one-word substitute for the highlighted word segment in the given sentence.

The captain's skill in finding the **correct route to reach a destination while travelling by sea** ensured the ship arrived safely.

Ans

✗ A. Exploration

✗ B. Journey

✓ C. Navigation

✗ D. Travel

Question ID :	4410091379238
Option 1 ID :	4410095448427
Option 2 ID :	4410095448428
Option 3 ID :	4410095448425
Option 4 ID :	4410095448426
Status :	Answered
Chosen Option :	C

Q.1 Select the most appropriate ANTONYM of the underlined word in the given sentence.
6

The engineer promised to rectify the errors in the report.

- Ans
- ☒ A. Amend
 - ☒ B. Correct
 - ☒ C. Worsen
 - ☒ D. Improve

Question ID :	4410091372706
Option 1 ID :	4410095422259
Option 2 ID :	4410095422258
Option 3 ID :	4410095422261
Option 4 ID :	4410095422260
Status :	Answered
Chosen Option :	C

Q.1 Select the most appropriate option that rectifies the underlined incorrect word segment
7 in the given sentence.

Peter Parker is a teenager who sadly gains superhuman power as Spider-Man - something he had never experienced before.

- Ans
- ☒ A. who lovingly gains superhuman power
 - ☒ B. who willingly gains superhuman power
 - ☒ C. who unexpectedly gains superhuman power
 - ☒ D. who hesitatingly gains superhuman power

Question ID :	4410091386182
Option 1 ID :	4410095475434
Option 2 ID :	4410095475433
Option 3 ID :	4410095475431
Option 4 ID :	4410095475432
Status :	Answered
Chosen Option :	C

Q.1 Select the most appropriate option that conveys the meaning of the given sentence to
8 fill in the blank.

Although he held no official title, his subtle influence on policy decisions and quiet persuasion behind the scenes earned him the nickname of a _____.

- Ans
- ☒ A. kingmaker
 - ☒ B. delegate
 - ☒ C. shadow
 - ☒ D. bureaucrat

Question ID :	4410091370613
Option 1 ID :	4410095413898
Option 2 ID :	4410095413899
Option 3 ID :	4410095413896
Option 4 ID :	4410095413897
Status :	Answered
Chosen Option :	A

Q.1
9

Select the most appropriate proverb that can substitute the underlined segment in the given sentence.

Despite tripping over the loose stone, Ravi continued carefully, because a minor setback can help avoid a bigger disaster.

Ans

☒ A. a stumble may prevent a fall

☐ B. one should look before they leap

☐ C. haste makes waste

☐ D. Rome was not built in a day

Question ID :	4410091379519
Option 1 ID :	4410095449359
Option 2 ID :	4410095449357
Option 3 ID :	4410095449356
Option 4 ID :	4410095449358
Status :	Answered
Chosen Option :	A

Q.2
0

Select the most appropriate idiom that can substitute the highlighted text in the given sentence.

She revealed the secret and **disclosed everything** to the team.

Ans

☐ A. beat around the bush

☒ B. spilled the beans

☐ C. jumped the gun

☐ D. hit the sack

Question ID :	4410091371509
Option 1 ID :	4410095417430
Option 2 ID :	4410095417428
Option 3 ID :	4410095417431
Option 4 ID :	4410095417429
Status :	Answered
Chosen Option :	B

Comprehension:

Read the passage and answer the questions that follow.

Corbett Tiger Reserve is more than a tourist destination; it is a testament to dedicated wildlife conservation. Home to the world's highest density of tigers, the reserve demonstrates the success achievable through timely and effective intervention. Beyond its stunning landscapes and rich biodiversity, Corbett showcases how committed efforts preserve the delicate balance of nature. Each visit reminds us of the vital importance of protecting our natural world for future generations.
At Corbett, the Veterinary Unit and Quick Response Team work tirelessly to safeguard both wild and captive animals. State-of-the-art facilities and trained professionals provide comprehensive healthcare, conduct rescue operations, and manage human-wildlife conflicts. Committed to conservation and coexistence, the reserve ensures the well-being of wildlife while promoting the safety of surrounding communities.

SubQuestion No : 21

Q.2 Select the most appropriate title for the passage.

1

Ans

A. Adventure Tourism in India

B. Corbett: India's Largest Desert Habitat

C. Urban Development Initiatives in Corbett City

D. Corbett Tiger Reserve: A Model of Wildlife Conservation

Question ID :	4410091363995
Option 1 ID :	4410095387909
Option 2 ID :	4410095387906
Option 3 ID :	4410095387908
Option 4 ID :	4410095387907
Status :	Answered
Chosen Option :	D

Comprehension:

Read the passage and answer the questions that follow.

Corbett Tiger Reserve is more than a tourist destination; it is a testament to dedicated wildlife conservation. Home to the world's highest density of tigers, the reserve demonstrates the success achievable through timely and effective intervention. Beyond its stunning landscapes and rich biodiversity, Corbett showcases how committed efforts preserve the delicate balance of nature. Each visit reminds us of the vital importance of protecting our natural world for future generations.
At Corbett, the Veterinary Unit and Quick Response Team work tirelessly to safeguard both wild and captive animals. State-of-the-art facilities and trained professionals provide comprehensive healthcare, conduct rescue operations, and manage human-wildlife conflicts. Committed to conservation and coexistence, the reserve ensures the well-being of wildlife while promoting the safety of surrounding communities.

SubQuestion No : 22

Q.2 Which of the following can be inferred from the passage?

2

Ans

A. Tigers are no longer endangered due to Corbett's efforts.

B. Conservation at Corbett requires trained staff and proper facilities.

C. The reserve focuses only on tourism and leisure activities.

D. Human-wildlife conflicts do not occur at the reserve.

Question ID :	4410091363996
Option 1 ID :	4410095387913
Option 2 ID :	4410095387911
Option 3 ID :	4410095387910
Option 4 ID :	4410095387912
Status :	Answered
Chosen Option :	D

Comprehension:

Read the passage and answer the questions that follow.

Corbett Tiger Reserve is more than a tourist destination; it is a testament to dedicated wildlife conservation. Home to the world's highest density of tigers, the reserve demonstrates the success achievable through timely and effective intervention. Beyond its stunning landscapes and rich biodiversity, Corbett showcases how committed efforts preserve the delicate balance of nature. Each visit reminds us of the vital importance of protecting our natural world for future generations.
At Corbett, the Veterinary Unit and Quick Response Team work tirelessly to safeguard both wild and captive animals. State-of-the-art facilities and trained professionals provide comprehensive healthcare, conduct rescue operations, and manage human-wildlife conflicts. Committed to conservation and coexistence, the reserve ensures the well-being of wildlife while promoting the safety of surrounding communities.

SubQuestion No : 23

Q.2 Which real-life action is most appropriate based on the passage?

3

Ans

A. Building houses or resorts inside protected areas.

B. Visiting Corbett responsibly to support wildlife conservation.

C. Ignoring forest rules and disturbing wild animals nearby.

D. Hunting or capturing wild animals for personal use.

Question ID :	4410091363997
Option 1 ID :	4410095387917
Option 2 ID :	4410095387914
Option 3 ID :	4410095387915
Option 4 ID :	4410095387916
Status :	Answered
Chosen Option :	B

Comprehension:

Read the passage and answer the questions that follow.

Corbett Tiger Reserve is more than a tourist destination; it is a testament to dedicated wildlife conservation. Home to the world's highest density of tigers, the reserve demonstrates the success achievable through timely and effective intervention. Beyond its stunning landscapes and rich biodiversity, Corbett showcases how committed efforts preserve the delicate balance of nature. Each visit reminds us of the vital importance of protecting our natural world for future generations.
At Corbett, the Veterinary Unit and Quick Response Team work tirelessly to safeguard both wild and captive animals. State-of-the-art facilities and trained professionals provide comprehensive healthcare, conduct rescue operations, and manage human-wildlife conflicts. Committed to conservation and coexistence, the reserve ensures the well-being of wildlife while promoting the safety of surrounding communities.

SubQuestion No : 24

Q.2 Select the most appropriate synonym of the given word as used in the passage.

4

Dedicated

Ans

A. Faltering

B. Committed

C. Impetuous

D. Chuffed

Question ID :	4410091363998
Option 1 ID :	4410095387921
Option 2 ID :	4410095387920
Option 3 ID :	4410095387918
Option 4 ID :	4410095387919
Status :	Answered
Chosen Option :	B

Comprehension:

Read the passage and answer the questions that follow.

Corbett Tiger Reserve is more than a tourist destination; it is a testament to dedicated wildlife conservation. Home to the world's highest density of tigers, the reserve demonstrates the success achievable through timely and effective intervention. Beyond its stunning landscapes and rich biodiversity, Corbett showcases how committed efforts preserve the delicate balance of nature. Each visit reminds us of the vital importance of protecting our natural world for future generations.
At Corbett, the Veterinary Unit and Quick Response Team work tirelessly to safeguard both wild and captive animals. State-of-the-art facilities and trained professionals provide comprehensive healthcare, conduct rescue operations, and manage human-wildlife conflicts. Committed to conservation and coexistence, the reserve ensures the well-being of wildlife while promoting the safety of surrounding communities.

SubQuestion No : 25

Q.2 Which of the following is a fact stated in the passage?
5

Ans

A. Corbett guarantees that human-wildlife conflicts never occur.

B. Visitors can freely interact with tigers in the reserve.

C. Tigers no longer require protection from natural threats.

D. Corbett has the world's highest density of tigers.

Question ID :	4410091363999
Option 1 ID :	4410095387924
Option 2 ID :	4410095387923
Option 3 ID :	4410095387925
Option 4 ID :	4410095387922
Status :	Answered
Chosen Option :	D

Section : Computer Knowledge

Q.1 Which characteristic of the CPU determines the number of instructions it can process per second?

Ans

A. Number of Registers

B. Clock Speed

C. Cache Size

D. Power Consumption

Question ID :	44100966448
Option 1 ID :	441009264676
Option 2 ID :	441009264674
Option 3 ID :	441009264675
Option 4 ID :	441009264677
Status :	Answered
Chosen Option :	B

Q.2	Which statement is True or False regarding Wide Area Networks? (i) All data transmitted over a WAN must pass through a central server for routing. (ii) WAN infrastructure is typically owned and operated solely by a single private organisation.
Ans	<div><div><input checked="" type="checkbox"/></div><div>A. (i) True, (ii) True</div></div> <div><div><input checked="" type="checkbox"/></div><div>B. (i) False, (ii) False</div></div> <div><div><input checked="" type="checkbox"/></div><div>C. (i) True, (ii) False</div></div> <div><div><input checked="" type="checkbox"/></div><div>D. (i) False, (ii) True</div></div>

Question ID :	441009878100
Option 1 ID :	4410093466042
Option 2 ID :	4410093466045
Option 3 ID :	4410093466043
Option 4 ID :	4410093466044
Status :	Answered
Chosen Option :	C

Q.3	Which of the following is NOT a text formatting option?
Ans	<div><div><input checked="" type="checkbox"/></div><div>A. Font color</div></div> <div><div><input checked="" type="checkbox"/></div><div>B. Line spacing</div></div> <div><div><input checked="" type="checkbox"/></div><div>C. Font size</div></div> <div><div><input checked="" type="checkbox"/></div><div>D. Font style</div></div>

Question ID :	441009673568
Option 1 ID :	4410092648384
Option 2 ID :	4410092648381
Option 3 ID :	4410092648382
Option 4 ID :	4410092648383
Status :	Answered
Chosen Option :	B

Q.4	How does one force Excel to treat a number as text (e.g., entering a leading zero)?
Ans	<div><div><input checked="" type="checkbox"/></div><div>A. Format the cell as text before entering</div></div> <div><div><input checked="" type="checkbox"/></div><div>B. Put the number in quotes</div></div> <div><div><input checked="" type="checkbox"/></div><div>C. Type an apostrophe (') before the number</div></div> <div><div><input checked="" type="checkbox"/></div><div>D. Use the TEXT function</div></div>

Question ID :	4410091028908
Option 1 ID :	4410094067288
Option 2 ID :	4410094067286
Option 3 ID :	4410094067287
Option 4 ID :	4410094067289
Status :	Answered
Chosen Option :	B

Q.5 Which of the following is an example of a system software, and which is an example of an application software?

- Ans ☒ A. MS Word (System Software), Windows OS (Application Software)
- ☒ B. Windows OS (System Software), MS Excel (Application Software)
- ☒ C. Antivirus Software (Application Software), MS PowerPoint (System Software)
- ☒ D. Google Chrome (System Software), Linux OS (Application Software)

Question ID :	44100960863
Option 1 ID :	441009242408
Option 2 ID :	441009242409
Option 3 ID :	441009242411
Option 4 ID :	441009242410
Status :	Answered
Chosen Option :	B

Q.6 What do you mean by LAN in computers?

- Ans ☒ A. Least Area Network
- ☒ B. Last Area Network
- ☒ C. Local Area Network
- ☒ D. Local Acoustic Node

Question ID :	441009394574
Option 1 ID :	4410091543813
Option 2 ID :	4410091543814
Option 3 ID :	4410091543812
Option 4 ID :	4410091543815
Status :	Answered
Chosen Option :	C

Q.7 Which feature helps you rehearse and automatically record slide timings for a presentation?

- Ans ☒ A. Record Narration
- ☒ B. Slide Sorter
- ☒ C. Set Up Slide Show
- ☒ D. Rehearse Timings

Question ID :	44100968168
Option 1 ID :	441009271489
Option 2 ID :	441009271488
Option 3 ID :	441009271487
Option 4 ID :	441009271486
Status :	Not Answered
Chosen Option :	--

Q.8	After selecting Custom Slide Show, what do you click to start creating a new custom show?
Ans	<input checked="" type="checkbox"/> A. Delete
	<input checked="" type="checkbox"/> B. Edit
	<input checked="" type="checkbox"/> C. New
	<input checked="" type="checkbox"/> D. Rename

Question ID :	441009750734
Option 1 ID :	4410092956819
Option 2 ID :	4410092956818
Option 3 ID :	4410092956817
Option 4 ID :	4410092956820
Status :	Answered
Chosen Option :	C

Q.9	What is the default file extension for Microsoft Excel 2007 spreadsheets?
Ans	<input checked="" type="checkbox"/> A. .rtf
	<input checked="" type="checkbox"/> B. .docx
	<input checked="" type="checkbox"/> C. .xlsx
	<input checked="" type="checkbox"/> D. .txt

Question ID :	441009910003
Option 1 ID :	4410093593978
Option 2 ID :	4410093593975
Option 3 ID :	4410093593977
Option 4 ID :	4410093593976
Status :	Not Answered
Chosen Option :	--

Q.10	Which of the following statements about Compact Discs (CDs) is NOT true?
Ans	<input checked="" type="checkbox"/> A. CDs are capable of storing around 700 MB of information.
	<input checked="" type="checkbox"/> B. A laser beam is used to access data stored on CDs.
	<input checked="" type="checkbox"/> C. CDs operate using magnetic recording methods.
	<input checked="" type="checkbox"/> D. CDs use laser technology for reading and writing data.

Question ID :	441009397482
Option 1 ID :	4410091555365
Option 2 ID :	4410091555367
Option 3 ID :	4410091555366
Option 4 ID :	4410091555364
Status :	Answered
Chosen Option :	C

Q.1	Which device is essential for connecting different networks over WAN?
1	
Ans	<input checked="" type="checkbox"/> A. Switch
	<input checked="" type="checkbox"/> B. Modem
	<input checked="" type="checkbox"/> C. Hub
	<input checked="" type="checkbox"/> D. Router

Question ID :	441009882543
Option 1 ID :	4410093483842
Option 2 ID :	4410093483841
Option 3 ID :	4410093483839
Option 4 ID :	4410093483840
Status :	Not Answered
Chosen Option :	--

Q.1	When grammar check flags a "Fragment (consider revising)" warning for the phrase
2	"While working on the report", what is the most likely issue?
Ans	<input checked="" type="checkbox"/> A. Missing capital letter
	<input checked="" type="checkbox"/> B. Absence of a main clause
	<input checked="" type="checkbox"/> C. Incorrect verb tense
	<input checked="" type="checkbox"/> D. Overuse of prepositions

Question ID :	441009679088
Option 1 ID :	4410092670546
Option 2 ID :	4410092670547
Option 3 ID :	4410092670548
Option 4 ID :	4410092670549
Status :	Not Answered
Chosen Option :	--

Q.1	In Microsoft Word, when should you prefer using a numbered list instead of a bulleted
3	list?
Ans	<input checked="" type="checkbox"/> A. When listing random facts
	<input checked="" type="checkbox"/> B. When steps must be followed in sequence
	<input checked="" type="checkbox"/> C. When the order of items does not matter
	<input checked="" type="checkbox"/> D. When decorating the text

Question ID :	441009672894
Option 1 ID :	4410092645690
Option 2 ID :	4410092645693
Option 3 ID :	4410092645691
Option 4 ID :	4410092645692
Status :	Answered
Chosen Option :	B

Q.1	Which of the following is NOT a valid method to change column width?
4	
Ans	<input checked="" type="checkbox"/> A. Dragging the column boundary
	<input checked="" type="checkbox"/> B. Using "Insert Function" dialog
	<input checked="" type="checkbox"/> C. Using "Format" option from the Home tab
	<input checked="" type="checkbox"/> D. Double-clicking the column header border

Question ID :	441009929910
Option 1 ID :	4410093673597
Option 2 ID :	4410093673598
Option 3 ID :	4410093673596
Option 4 ID :	4410093673599
Status :	Answered
Chosen Option :	B

Q.1	Which of the following statements correctly differentiates system software and application software?
5	
Ans	<input checked="" type="checkbox"/> A. System software provides the platform for running application software.
	<input checked="" type="checkbox"/> B. System software is optional, whereas application software is mandatory.
	<input checked="" type="checkbox"/> C. Application software includes BIOS and drivers.
	<input checked="" type="checkbox"/> D. Application software directly manages hardware resources.

Question ID :	441009846035
Option 1 ID :	4410093337023
Option 2 ID :	4410093337021
Option 3 ID :	4410093337024
Option 4 ID :	4410093337022
Status :	Answered
Chosen Option :	A

Q.1	How do you make all cells in a table row the same height in MS Word 2021?
6	
Ans	<input checked="" type="checkbox"/> A. Use the 'Table Tools Layout' tab and click 'Distribute Rows'
	<input checked="" type="checkbox"/> B. Click 'Table Properties' and select 'Equal Height'
	<input checked="" type="checkbox"/> C. Right-click the row and select 'Equal Height'
	<input checked="" type="checkbox"/> D. Click 'Resize Table'

Question ID :	441009882874
Option 1 ID :	4410093485319
Option 2 ID :	4410093485320
Option 3 ID :	4410093485318
Option 4 ID :	4410093485321
Status :	Answered
Chosen Option :	C

Q.1	What is the full form of BIOS used in computers to initialise the hardware?
7	
Ans	<input checked="" type="checkbox"/> A. Bus Input/Output System
	<input checked="" type="checkbox"/> B. Basic Input/Output System
	<input checked="" type="checkbox"/> C. Base Inside/Outside System
	<input checked="" type="checkbox"/> D. Basic Inside/Outside Source

Question ID :	441009398275
Option 1 ID :	4410091558549
Option 2 ID :	4410091558548
Option 3 ID :	4410091558546
Option 4 ID :	4410091558547
Status :	Answered
Chosen Option :	B

Q.1	Which statements are True or False regarding viewing a presentation in Microsoft PowerPoint 2016?
8	
	(i) Slide Sorter View prevents reordering of slides.
	(ii) Outline View allows direct editing of text content but not formatting.
Ans	<input checked="" type="checkbox"/> A. (i) True, (ii) True
	<input checked="" type="checkbox"/> B. (i) False, (ii) False
	<input checked="" type="checkbox"/> C. (i) False, (ii) True
	<input checked="" type="checkbox"/> D. (i) True, (ii) False

Question ID :	441009877943
Option 1 ID :	4410093465411
Option 2 ID :	4410093465414
Option 3 ID :	4410093465413
Option 4 ID :	4410093465412
Status :	Not Answered
Chosen Option :	--

Q.1	Which component is responsible for temporarily storing data that the CPU actively uses during processing?
9	
Ans	<input checked="" type="checkbox"/> A. ROM
	<input checked="" type="checkbox"/> B. RAM
	<input checked="" type="checkbox"/> C. PCB
	<input checked="" type="checkbox"/> D. CPU

Question ID :	441009686847
Option 1 ID :	4410092701410
Option 2 ID :	4410092701411
Option 3 ID :	4410092701409
Option 4 ID :	4410092701408
Status :	Answered
Chosen Option :	B

Q.2 0	Which keyboard shortcut facilitates the insertion of a new row within an Excel worksheet?
Ans	<input type="radio"/> A. Ctrl + R
	<input type="radio"/> B. Alt + Enter
	<input checked="" type="radio"/> C. Ctrl + Shift + +
	<input type="radio"/> D. F12 + I

Question ID :	441009687056
Option 1 ID :	4410092702244
Option 2 ID :	4410092702246
Option 3 ID :	4410092702245
Option 4 ID :	4410092702247
Status :	Answered
Chosen Option :	B

