

DDA MTS

Previous Year Paper
17 Dec, 2025 Shift 2



Adda247

Test Prime

ALL EXAMS, ONE SUBSCRIPTION



1,00,000+
Mock Tests



**Personalised
Report Card**



**Unlimited
Re-Attempt**



600+
Exam Covered



25,000+ Previous
Year Papers



500%
Refund



ATTEMPT FREE MOCK NOW



DELHI DEVELOPMENT AUTHORITY
RECRUITMENT CELL

VIKAS SADAN, I.N.A, NEW DELHI-110023.

Recruitment Advertisement No. 09/2025/Rectt. Cell/Pers./DDA
DIRECT RECRUITMENT IN VARIOUS CATEGORIES

Participant ID	
Participant Name	
Test Center Name	
Test Date	17/12/2025
Test Time	1:00 PM - 3:00 PM
Subject	MTS

Section : Numerical and Mathematical Ability

Q.1	The number 746776 is divisible by:
Ans	<input checked="" type="checkbox"/> A. 22
	<input checked="" type="checkbox"/> B. 39
	<input checked="" type="checkbox"/> C. 38
	<input checked="" type="checkbox"/> D. 51

Question ID :	441009911397
Option 1 ID :	4410093599841
Option 2 ID :	4410093599840
Option 3 ID :	4410093599839
Option 4 ID :	4410093599842
Status :	Answered
Chosen Option :	A

Q.2	The amount on a sum of ₹5,500 at 20% per annum compound interest, compounded annually, in 2 years will be:
Ans	<input checked="" type="checkbox"/> A. ₹7,920
	<input checked="" type="checkbox"/> B. ₹7,507
	<input checked="" type="checkbox"/> C. ₹8,843
	<input checked="" type="checkbox"/> D. ₹6,968

Question ID :	441009897865
Option 1 ID :	4410093545530
Option 2 ID :	4410093545532
Option 3 ID :	4410093545533
Option 4 ID :	4410093545531
Status :	Not Answered
Chosen Option :	--

Q.3	The largest four-digit number which when divided by 6, 12 and 10 leaves remainder 4 in each case is:
Ans	<input checked="" type="checkbox"/> A. 9739
	<input checked="" type="checkbox"/> B. 9998
	<input checked="" type="checkbox"/> C. 9631
	<input checked="" type="checkbox"/> D. 9964

Question ID :	441009525560
Option 1 ID :	4410092057661
Option 2 ID :	4410092057662
Option 3 ID :	4410092057660
Option 4 ID :	4410092057659
Status :	Not Answered
Chosen Option :	--

Q.4	A starts business with ₹24,000 and after 7 months, B joins with A as his partner. After a year, the profit is divided in the ratio 9 : 8. What is B's contribution in the capital?
Ans	<input checked="" type="checkbox"/> A. ₹50,730
	<input checked="" type="checkbox"/> B. ₹50,975
	<input checked="" type="checkbox"/> C. ₹51,200
	<input checked="" type="checkbox"/> D. ₹49,460

Question ID :	441009547856
Option 1 ID :	4410092146823
Option 2 ID :	4410092146822
Option 3 ID :	4410092146820
Option 4 ID :	4410092146821
Status :	Not Answered
Chosen Option :	--

Q.5 In how many years will ₹2,000 fetch an interest of ₹800 at 8% per year simple interest?

- Ans ☒ A. 8
- ☒ B. 5
- ☒ C. 6
- ☒ D. 7

Question ID :	441009853197
Option 1 ID :	4410093365763
Option 2 ID :	4410093365760
Option 3 ID :	4410093365761
Option 4 ID :	4410093365762
Status :	Answered
Chosen Option :	B

Q.6 A retailer buys 1000 books for ₹70 each. He sells 300 books at profit of 30% and the remaining 700 books at a profit of 5%. What is the total profit (in ₹)?

- Ans ☒ A. 8850
- ☒ B. 8770
- ☒ C. 8550
- ☒ D. 8750

Question ID :	441009897611
Option 1 ID :	4410093544517
Option 2 ID :	4410093544514
Option 3 ID :	4410093544515
Option 4 ID :	4410093544516
Status :	Not Attempted and Marked For Review
Chosen Option :	--

Q.7 A shopkeeper sells an item for ₹3,120 and incurs a loss of 35%. What was the cost price of the item (in ₹)?

- Ans ☒ A. 6,240
- ☒ B. 2,028
- ☒ C. 4,080
- ☒ D. 4,800

Question ID :	4410091419899
Option 1 ID :	4410095608513
Option 2 ID :	4410095608510
Option 3 ID :	4410095608511
Option 4 ID :	4410095608512
Status :	Answered
Chosen Option :	D

Q.8	A car travels for 2 hours at 50 km/hr and then for 3 hours at 60 km/hr. Find the average speed for the total journey.
Ans	<input checked="" type="checkbox"/> A. 56 km/hr
	<input type="checkbox"/> B. 52 km/hr
	<input type="checkbox"/> C. 58 km/hr
	<input type="checkbox"/> D. 48 km/hr

Question ID :	4410091422586
Option 1 ID :	4410095619252
Option 2 ID :	4410095619253
Option 3 ID :	4410095619254
Option 4 ID :	4410095619255
Status :	Answered
Chosen Option :	A

Q.9	Find the compound interest on a sum of ₹10,000 for one year at 4% rate of interest per annum, compounded half-yearly .
Ans	<input type="checkbox"/> A. ₹424
	<input checked="" type="checkbox"/> B. ₹404
	<input type="checkbox"/> C. ₹398
	<input type="checkbox"/> D. ₹436

Question ID :	4410091409738
Option 1 ID :	4410095567880
Option 2 ID :	4410095567879
Option 3 ID :	4410095567882
Option 4 ID :	4410095567881
Status :	Not Answered
Chosen Option :	--

Q.10	The cost of a washing machine is 25% less than the cost of a TV. If the cost of the washing machine increases by 38% and that of the TV decreases by 10%, then what is the percentage change in the total cost of 4 washing machines and 6 TVs?
Ans	<input type="checkbox"/> A. Decrease by 7%
	<input checked="" type="checkbox"/> B. Increase by 6%
	<input type="checkbox"/> C. Increase by 3%
	<input type="checkbox"/> D. Decrease by 4%

Question ID :	441009537076
Option 1 ID :	4410092103703
Option 2 ID :	4410092103700
Option 3 ID :	4410092103702
Option 4 ID :	4410092103701
Status :	Not Answered
Chosen Option :	--

Q.1
1

The sum of the present ages of Ram and Krishna is 50 years. Four years ago from now their ages were in the ratio of 3 : 4. Find the age of Ram after 4 years from now.

Ans

A. 22 years

B. 20 years

C. 28 years

D. 26 years

Question ID :	4410091430616
Option 1 ID :	4410095650609
Option 2 ID :	4410095650608
Option 3 ID :	4410095650611
Option 4 ID :	4410095650610
Status :	Not Answered
Chosen Option :	--

Q.1
2

A 226 m long train running at a speed of 108 km/hr passes a platform in 37 seconds. Find the length of the platform (in m).

Ans

A. 883

B. 884

C. 887

D. 886

Question ID :	441009545484
Option 1 ID :	4410092137334
Option 2 ID :	4410092137332
Option 3 ID :	4410092137335
Option 4 ID :	4410092137333
Status :	Not Answered
Chosen Option :	--

Q.1
3

If the diagonal of a cube is 12 cm, then its surface area is:

Ans

A. 278 cm2

B. 198 cm2

C. 288 cm2

D. 192 cm2

Question ID :	441009621199
Option 1 ID :	4410092438931
Option 2 ID :	4410092438930
Option 3 ID :	4410092438929
Option 4 ID :	4410092438928
Status :	Not Answered
Chosen Option :	--

Q.1	Subtracting 44% of X from X is the same as multiplying X by:
4	
Ans	<input checked="" type="checkbox"/> A. 0.44
	<input checked="" type="checkbox"/> B. 0.5
	<input checked="" type="checkbox"/> C. 0.044
	<input checked="" type="checkbox"/> D. 0.56

Question ID :	441009516680
Option 1 ID :	4410092022140
Option 2 ID :	4410092022141
Option 3 ID :	4410092022142
Option 4 ID :	4410092022139
Status :	Not Answered
Chosen Option :	--

Q.1	A spherical ball is perfectly enclosed inside a cube such that it just touches all six faces of the cube. If the side of the cube is 14 cm, what is the volume of the sphere?
5	$\left(\text{Use } \pi = \frac{22}{7}, \text{ round off your answer to two decimal places} \right)$
Ans	<input checked="" type="checkbox"/> A. 1,437.33 cm³
	<input checked="" type="checkbox"/> B. 1,347.33 cm³
	<input checked="" type="checkbox"/> C. 1,436.33 cm³
	<input checked="" type="checkbox"/> D. 1,473.33 cm³

Question ID :	4410091463623
Option 1 ID :	4410095782624
Option 2 ID :	4410095782622
Option 3 ID :	4410095782623
Option 4 ID :	4410095782625
Status :	Not Answered
Chosen Option :	--

Q.1	Two taps can fill a cistern in 2 hours and 17 hours respectively. A third tap can empty it in 17 hours. How long (in hours) will it take to fill half of the empty cistern, if all of them are opened together?
6	
Ans	<input checked="" type="checkbox"/> A. 3
	<input checked="" type="checkbox"/> B. 4
	<input checked="" type="checkbox"/> C. 2
	<input checked="" type="checkbox"/> D. 1

Question ID :	441009518297
Option 1 ID :	4410092028609
Option 2 ID :	4410092028610
Option 3 ID :	4410092028608
Option 4 ID :	4410092028607
Status :	Not Answered
Chosen Option :	--

Q.1 7	The product of two prime numbers is 8051. One of them is 83. Find the difference between the two numbers.
Ans	<input checked="" type="checkbox"/> A. 12
	<input checked="" type="checkbox"/> B. 18
	<input checked="" type="checkbox"/> C. 16
	<input checked="" type="checkbox"/> D. 14

Question ID :	4410091426376
Option 1 ID :	4410095634083
Option 2 ID :	4410095634086
Option 3 ID :	4410095634085
Option 4 ID :	4410095634084
Status :	Not Answered
Chosen Option :	--

Q.1 8	Two pipes A and B can fill a tank in 15 hours and 20 hours, respectively. If both are opened together, and after 4 hours, pipe B is closed, how much more time will pipe A take to fill the tank?
Ans	<input checked="" type="checkbox"/> A. 9 hours
	<input checked="" type="checkbox"/> B. 10 hours
	<input checked="" type="checkbox"/> C. 8 hours
	<input checked="" type="checkbox"/> D. 7 hours

Question ID :	4410091426356
Option 1 ID :	4410095634004
Option 2 ID :	4410095634006
Option 3 ID :	4410095634003
Option 4 ID :	4410095634005
Status :	Answered
Chosen Option :	C

Q.1 9	P sells a laptop to Q at a loss of 25%, and Q sells the laptop to R at a profit of 36%. If R purchased the laptop for ₹3,468, then what was the cost (in ₹) of the laptop for P?
Ans	<input checked="" type="checkbox"/> A. 3,550
	<input checked="" type="checkbox"/> B. 3,400
	<input checked="" type="checkbox"/> C. 3,322
	<input checked="" type="checkbox"/> D. 3,325

Question ID :	441009566170
Option 1 ID :	4410092219803
Option 2 ID :	4410092219800
Option 3 ID :	4410092219802
Option 4 ID :	4410092219801
Status :	Not Answered
Chosen Option :	--

Q.2 The average runs scored by a batsman in 20 matches is 45. In the next 10 matches, the
0 batsman scored an average of 14 runs. Find his average runs (rounded off to two
decimals) in all the 30 matches.

- Ans ☒ A. 33.67
- ☒ B. 34.67
- ☒ C. 35.67
- ☒ D. 36.67

Question ID :	441009516410
Option 1 ID :	4410092021060
Option 2 ID :	4410092021059
Option 3 ID :	4410092021061
Option 4 ID :	4410092021062
Status :	Not Answered
Chosen Option :	--

Q.2 Four numbers are in the proportion of 5 : 2 : 4 : 3, respectively. If the 3rd number is 500
1 more than the 4th number, then the 2nd number is:

- Ans ☒ A. 1200
- ☒ B. 500
- ☒ C. 1000
- ☒ D. 800

Question ID :	4410091470418
Option 1 ID :	4410095809595
Option 2 ID :	4410095809596
Option 3 ID :	4410095809598
Option 4 ID :	4410095809597
Status :	Answered
Chosen Option :	C

Q.2 A grocer has 57 kg rice, a part of which he sells at 23% profit and the remaining at 61%
2 profit. He gains 53% on the whole. What is the quantity of rice sold at 61% profit?

- Ans ☒ A. 48 kg
- ☒ B. 43 kg
- ☒ C. 45 kg
- ☒ D. 44 kg

Question ID :	441009545866
Option 1 ID :	4410092138862
Option 2 ID :	4410092138861
Option 3 ID :	4410092138860
Option 4 ID :	4410092138863
Status :	Not Answered
Chosen Option :	--

Q.2 3	A can do a work in 12 days, and B can do it in 25 days. If they work on it together for 2 days, then what fraction of the work is left?
Ans	<div><div><div>✖ A.</div><div>$\frac{109}{150}$</div></div><div><div>✖ B.</div><div>$\frac{121}{150}$</div></div><div><div>✔ C.</div><div>$\frac{113}{150}$</div></div><div><div>✖ D.</div><div>$\frac{117}{150}$</div></div></div>

Question ID :	441009914021
Option 1 ID :	4410093610337
Option 2 ID :	4410093610336
Option 3 ID :	4410093610335
Option 4 ID :	4410093610338
Status :	Answered
Chosen Option :	C

Q.2 4	A man goes from city A to city B at 15 km/hr and returns at 35 km/hr. What is his average speed for the whole journey (in km/hr)?
Ans	<div><div><div>✖ A. 22</div></div><div><div>✔ B. 21</div></div><div><div>✖ C. 27</div></div><div><div>✖ D. 25</div></div></div>

Question ID :	4410091419769
Option 1 ID :	4410095607999
Option 2 ID :	4410095607998
Option 3 ID :	4410095608001
Option 4 ID :	4410095608000
Status :	Answered
Chosen Option :	D

Q.2 5	A shopkeeper sells an item for ₹300.3 after giving two successive discounts of 16% and 74% on its marked price. Had he not given any discount, he would have earned a profit of 10%. What is the cost price (in ₹) of the item?
Ans	<div><div><div>✔ A. 1,250</div></div><div><div>✖ B. 1,297</div></div><div><div>✖ C. 1,238</div></div><div><div>✖ D. 1,249</div></div></div>

Question ID :	441009915834
Option 1 ID :	4410093617587
Option 2 ID :	4410093617589
Option 3 ID :	4410093617588
Option 4 ID :	4410093617590
Status :	Not Answered
Chosen Option :	--

Q.1 Seven boxes G, H, I, J, L, M and N are kept one over the other but not necessarily in the same order. Only G is kept above J. Only two boxes are kept between J and I. Only M is kept below H. L is not kept immediately above I. How many boxes are kept between N and M?

- Ans ☒ A. Four
- ☒ B. Two
- ☒ C. One
- ☒ D. Three

Question ID :	4410091435068
Option 1 ID :	4410095668804
Option 2 ID :	4410095668806
Option 3 ID :	4410095668807
Option 4 ID :	4410095668805
Status :	Answered
Chosen Option :	D

Q.2 G is the sister of H. I is the brother of H. I is the son of J. J is married to K. K is the daughter of L. K has only one daughter. O is the brother of H. M is married to O. If P is the daughter of M, then how is H related to P?

- Ans ☒ A. Father's brother
- ☒ B. Brother
- ☒ C. Mother's brother
- ☒ D. Father

Question ID :	4410091412152
Option 1 ID :	4410095577637
Option 2 ID :	4410095577636
Option 3 ID :	4410095577639
Option 4 ID :	4410095577638
Status :	Answered
Chosen Option :	A

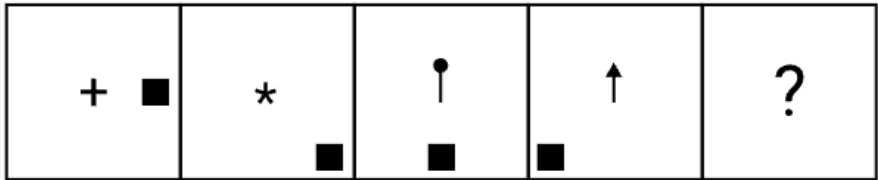
Q.3 What should come in place of the question mark (?) in the given series based on the English alphabetical order?

TCT PFR LIP HLN ?

- Ans ☒ A. DOL
- ☒ B. TYH
- ☒ C. JHY
- ☒ D. HGF

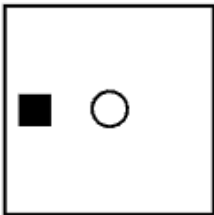
Question ID :	4410091432444
Option 1 ID :	4410095658147
Option 2 ID :	4410095658145
Option 3 ID :	4410095658148
Option 4 ID :	4410095658146
Status :	Answered
Chosen Option :	A

Q.4 Identify the figure given in the options which when put in place of the question mark (?) will logically complete the series.

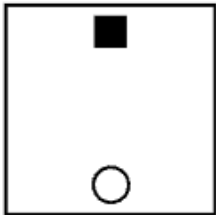


Ans

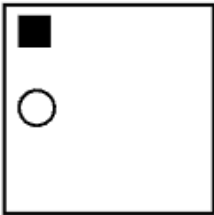
✓ A.



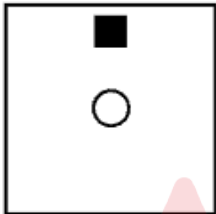
✗ B.



✗ C.



✗ D.



Question ID :	4410091425268
Option 1 ID :	4410095664863
Option 2 ID :	4410095664866
Option 3 ID :	4410095664864
Option 4 ID :	4410095664865
Status :	Answered
Chosen Option :	A

Q.5	What should come in place of the question mark (?) in the given series? 951 822 693 564 435 ?
Ans	<div><div>✓</div>A. 306</div>
	<div><div>✗</div>B. 348</div>
	<div><div>✗</div>C. 334</div>
	<div><div>✗</div>D. 342</div>

Question ID :	4410091432464
Option 1 ID :	4410095658242
Option 2 ID :	4410095658243
Option 3 ID :	4410095658244
Option 4 ID :	4410095658241
Status :	Answered
Chosen Option :	A

Q.6	Each vowel in the word FACTOID is changed to the letter immediately following it in the English alphabetical order, and each consonant is changed to the letter immediately preceding it in the English alphabetical order. How many letters will appear exactly twice in the group of letters thus formed?
Ans	<div><div>✗</div>A. Three</div>
	<div><div>✗</div>B. Two</div>
	<div><div>✓</div>C. One</div>
	<div><div>✗</div>D. None</div>

Question ID :	441009796550
Option 1 ID :	4410093140202
Option 2 ID :	4410093140201
Option 3 ID :	4410093140200
Option 4 ID :	4410093140199
Status :	Answered
Chosen Option :	C

Q.7	In a certain code language, 'uncle paper post' is coded as 'xy wp zn' and 'ocean post melon' is coded as 'qu on wp'. How is 'post' coded in the given language? (All codes are two-letter codes only.)
Ans	<div><div>✗</div>A. qu</div>
	<div><div>✗</div>B. xy</div>
	<div><div>✓</div>C. wp</div>
	<div><div>✗</div>D. zn</div>

Question ID :	4410091411312
Option 1 ID :	4410095574276
Option 2 ID :	4410095574274
Option 3 ID :	4410095574273
Option 4 ID :	4410095574275
Status :	Answered
Chosen Option :	C

Q.8 Each of A, B, C, D, E, F and G has exam on a different day of the week starting from Monday and ending on Sunday of the same week.
A has exam on Tuesday. F has exam immediately after A. Only one person has exam between F and B. C has exam immediately after B. D has exam immediately after C. No one has exam before G.
On which day does E have exam?

- Ans
- ☒ A. Monday
 - ☒ B. Wednesday
 - ☒ C. Thursday
 - ☒ D. Friday

Question ID :	441009813874
Option 1 ID :	4410093209621
Option 2 ID :	4410093209622
Option 3 ID :	4410093209619
Option 4 ID :	4410093209620
Status :	Answered
Chosen Option :	C

Q.9 DOCK is related to MXLT in a certain way based on the English alphabetical order. In the same way, WEAR is related to FNJA. To which of the given options is TRUE related, following the same logic?6108

- Ans
- ☒ A. CBEM
 - ☒ B. DBEO
 - ☒ C. CADN
 - ☒ D. BZCM

Question ID :	441009792168
Option 1 ID :	4410093122674
Option 2 ID :	4410093122671
Option 3 ID :	4410093122672
Option 4 ID :	4410093122673
Status :	Answered
Chosen Option :	C

Q.1 Six friends D, E, F, G, X and Y are sitting around a circular table facing the centre of the table. Only two people sit between D and F when counted from the right of D. Only two people sit between X and Y. Only three people sit between D and X when counted from the right of X. G sits to the immediate left of X. How many people sit between G and E when counted from the right of G?

- Ans
- ☒ A. Four
 - ☒ B. Three
 - ☒ C. One
 - ☒ D. Two

Question ID :	4410091432223
Option 1 ID :	4410095657229
Option 2 ID :	4410095657228
Option 3 ID :	4410095657226
Option 4 ID :	4410095657227
Status :	Answered
Chosen Option :	D

Q.1

1

If 'P' stands for '-', 'Q' stands for 'x', 'R' stands for '÷', and 'S' stands for '+', what will come in place of the question mark '?' in the following equation?

15 Q 4 R 2 P 6 S 8 = ?

Ans

A. 34

B. 28

C. 32

D. 30

Question ID :	441009554792
Option 1 ID :	4410092174485
Option 2 ID :	4410092174482
Option 3 ID :	4410092174483
Option 4 ID :	4410092174484
Status :	Answered
Chosen Option :	C

Q.1

2

Select the pair which follows the same pattern as that followed by the two pairs given below. Both pairs follow the same pattern.

UNT : VLW
CTU : DRX

Ans

A. QSQ : RQS

B. GPR : HNT

C. HOP : IMS

D. LRR : MOU

Question ID :	441009787749
Option 1 ID :	4410093104997
Option 2 ID :	4410093104995
Option 3 ID :	4410093104998
Option 4 ID :	4410093104996
Status :	Answered
Chosen Option :	C

Q.1

3

Select the pair that follows the same pattern as that followed by the two set of pairs given below. Both pairs follow the same pattern.

RGO : PJL
TKN : RNK

Ans

A. SOS : QRP

B. FKG : DNC

C. KLT : INQ

D. HGR : FJN

Question ID :	4410091432382
Option 1 ID :	4410095657863
Option 2 ID :	4410095657864
Option 3 ID :	4410095657862
Option 4 ID :	4410095657861
Status :	Answered
Chosen Option :	A

Q.1 4 Based on the English alphabetical order, three of the following four letter-cluster pairs are alike in a certain way and thus form a group. Which letter-cluster pair DOES NOT belong to that group?
(Note: The odd one out is not based on the number of consonants/vowels or their position in the letter-cluster.)

- Ans
- ☒ A. QL – UJ
 - ☒ B. KP – ON
 - ☒ C. RD – VB
 - ☒ D. BM – FJ

Question ID :	441009795247
Option 1 ID :	4410093134990
Option 2 ID :	4410093134989
Option 3 ID :	4410093134988
Option 4 ID :	4410093134987
Status :	Answered
Chosen Option :	D

Q.1 5 Refer to the following number series and answer the question that follows (all numbers are single-digit numbers only). Counting to be done from left to right only.

(Left) 4 6 1 6 2 7 4 8 4 9 1 6 7 2 5 4 8 9 8 4 7 2 5 6 8 3 4 (Right)

How many such odd digits are there, each of which is immediately preceded by an even digit and also immediately followed by an odd digit?

- Ans
- ☒ A. Three
 - ☒ B. One
 - ☒ C. Two
 - ☒ D. None

Question ID :	441009796890
Option 1 ID :	4410093141562
Option 2 ID :	4410093141560
Option 3 ID :	4410093141561
Option 4 ID :	4410093141559
Status :	Answered
Chosen Option :	B

Q.1 6 Refer to the following letter series and answer the question that follows. Counting to be done from left to right only.

(Left) S G A J H L Y A M C C A Y R J I U Y V A T Q (Right)

How many such consonants are there, each of which is immediately preceded by a consonant and also immediately followed by a vowel?

- Ans
- ☒ A. 6
 - ☒ B. 5
 - ☒ C. 7
 - ☒ D. 4

Question ID :	441009790826
Option 1 ID :	4410093117304
Option 2 ID :	4410093117303
Option 3 ID :	4410093117306
Option 4 ID :	4410093117305
Status :	Answered
Chosen Option :	B

Q.1 Each of G, H, I, J, L, M and N has a holiday on a different day of a week, starting from
7 Monday and ending on Sunday of the same week. M has a holiday on Thursday. H has a holiday immediately before J. N has a holiday on one of the days after I. L has a holiday immediately after J. Only one person has a holiday after G. How many people have a holiday between N and L?

- Ans
- ☒ A. One
 - ☒ B. Four
 - ☒ C. Three
 - ☒ D. Two

Question ID :	4410091435105
Option 1 ID :	4410095668955
Option 2 ID :	4410095668952
Option 3 ID :	4410095668953
Option 4 ID :	4410095668954
Status :	Answered
Chosen Option :	C

Q.1 Based on the English alphabetical order, three of the following four letter-cluster pairs
8 are alike in a certain way and thus form a group. Which letter-cluster pair DOES NOT belong to that group?
(Note: The odd one out is not based on the number of consonants/vowels or their position in the letter-cluster.)

- Ans
- ☒ A. DFC - EGD
 - ☒ B. SUR - TUS
 - ☒ C. MOL - NPM
 - ☒ D. HJG - IKH

Question ID :	441009789583
Option 1 ID :	4410093112331
Option 2 ID :	4410093112334
Option 3 ID :	4410093112333
Option 4 ID :	4410093112332
Status :	Answered
Chosen Option :	B

Q.1 If 1 is added to each odd digit and 2 is subtracted from each even digit in the number
9 8476135, then what will be the difference between the highest and lowest digits in the number thus formed?

- Ans
- ☒ A. 1
 - ☒ B. 5
 - ☒ C. 4
 - ☒ D. 6

Question ID :	441009552907
Option 1 ID :	4410092166942
Option 2 ID :	4410092166945
Option 3 ID :	4410092166943
Option 4 ID :	4410092166944
Status :	Answered
Chosen Option :	D

Q.2	What should come in place of the question mark (?) in the given series based on the English alphabetical order?
0	ILN KJO MHP ? QDR
Ans	<input checked="" type="checkbox"/> A. OFU
	<input checked="" type="checkbox"/> B. OGK
	<input checked="" type="checkbox"/> C. OFQ
	<input checked="" type="checkbox"/> D. OGY

Question ID :	4410091432403
Option 1 ID :	4410095657953
Option 2 ID :	4410095657955
Option 3 ID :	4410095657954
Option 4 ID :	4410095657956
Status :	Answered
Chosen Option :	C

Q.2	Seven friends G, H, I, J, L, M and N are sitting in a straight line facing north. H sits to the immediate left of N. Only two people sit to the left of L. Only three people sit between L and M. Only one person sits between M and I. J is not an immediate neighbour of M. How many people sit to the right of G?
1	
Ans	<input checked="" type="checkbox"/> A. Three
	<input checked="" type="checkbox"/> B. Four
	<input checked="" type="checkbox"/> C. One
	<input checked="" type="checkbox"/> D. Two

Question ID :	4410091435045
Option 1 ID :	4410095668714
Option 2 ID :	4410095668713
Option 3 ID :	4410095668716
Option 4 ID :	4410095668715
Status :	Answered
Chosen Option :	C

Q.2	Seven people, B, D, E, P, S, T, and W, are sitting in a row, facing the north.
2	No one sits to the left of P. Only four people sit between P and D. Only three people sit to the right of T. S sits to the immediate left of W. B is not an immediate neighbour of T. Who sits third to the left of B?
Ans	<input checked="" type="checkbox"/> A. T
	<input checked="" type="checkbox"/> B. W
	<input checked="" type="checkbox"/> C. D
	<input checked="" type="checkbox"/> D. S

Question ID :	441009796037
Option 1 ID :	4410093138147
Option 2 ID :	4410093138150
Option 3 ID :	4410093138149
Option 4 ID :	4410093138148
Status :	Answered
Chosen Option :	A

Q.2	What should come in place of the question mark (?) in the given series?
3	1 3 6 10 ? 21
Ans	<input checked="" type="checkbox"/> A. 17
	<input checked="" type="checkbox"/> B. 19
	<input checked="" type="checkbox"/> C. 12
	<input checked="" type="checkbox"/> D. 15

Question ID :	441009590734
Option 1 ID :	4410092318051
Option 2 ID :	4410092318052
Option 3 ID :	4410092318049
Option 4 ID :	4410092318050
Status :	Answered
Chosen Option :	D

Q.2	Mr. Opq ranked 113 th from the top and 231 st from the bottom in his class. How many students are there in his class?
4	
Ans	<input checked="" type="checkbox"/> A. 332
	<input checked="" type="checkbox"/> B. 432
	<input checked="" type="checkbox"/> C. 343
	<input checked="" type="checkbox"/> D. 321

Question ID :	4410091435178
Option 1 ID :	4410095669245
Option 2 ID :	4410095669244
Option 3 ID :	4410095669246
Option 4 ID :	4410095669247
Status :	Answered
Chosen Option :	C

Q.2	In a certain code language, 'DASH' is coded as '8465' and 'HADE' is coded as '5862'. What is the code for 'E' in the given code language?
5	
Ans	<input checked="" type="checkbox"/> A. 8
	<input checked="" type="checkbox"/> B. 5
	<input checked="" type="checkbox"/> C. 2
	<input checked="" type="checkbox"/> D. 6

Question ID :	441009797138
Option 1 ID :	4410093142552
Option 2 ID :	4410093142551
Option 3 ID :	4410093142554
Option 4 ID :	4410093142553
Status :	Answered
Chosen Option :	C

Q.1	Which nationalist leader declared that Swaraj was a “birth right” and not something dependent on British assurances?
Ans	<div><div><input checked="" type="checkbox"/></div>A. Lokmanya Tilak</div>
	<div><div><input type="checkbox"/></div>B. Bipin Chandra Pal</div>
	<div><div><input type="checkbox"/></div>C. Aurobindo Ghose</div>
	<div><div><input type="checkbox"/></div>D. Gopal Krishna Gokhale</div>

Question ID :	4410091516890
Option 1 ID :	4410095990949
Option 2 ID :	4410095990950
Option 3 ID :	4410095990952
Option 4 ID :	4410095990951
Status :	Answered
Chosen Option :	A

Q.2	Which officer was responsible for maintaining land records and collecting agricultural revenue in the Mauryan Empire?
Ans	<div><div><input type="checkbox"/></div>A. Dhamma Mahamatra</div>
	<div><div><input type="checkbox"/></div>B. Amatya</div>
	<div><div><input checked="" type="checkbox"/></div>C. Rajuka</div>
	<div><div><input type="checkbox"/></div>D. Yukta</div>

Question ID :	4410091498154
Option 1 ID :	4410095917657
Option 2 ID :	4410095917654
Option 3 ID :	4410095917655
Option 4 ID :	4410095917656
Status :	Answered
Chosen Option :	C

Q.3	Which Constitutional Schedule lists many of India’s official languages, including non-classical ones?
Ans	<div><div><input type="checkbox"/></div>A. Twelfth Schedule</div>
	<div><div><input checked="" type="checkbox"/></div>B. Eighth Schedule</div>
	<div><div><input type="checkbox"/></div>C. Tenth Schedule</div>
	<div><div><input type="checkbox"/></div>D. First Schedule</div>

Question ID :	4410091512752
Option 1 ID :	4410095975053
Option 2 ID :	4410095975051
Option 3 ID :	4410095975052
Option 4 ID :	4410095975050
Status :	Answered
Chosen Option :	B

Q.4	In which city was the Second Session of the Indian National Congress held?
Ans	<input checked="" type="checkbox"/> A. Calcutta (Kolkata)
	<input checked="" type="checkbox"/> B. Madras (Chennai)
	<input checked="" type="checkbox"/> C. Bombay (Mumbai)
	<input checked="" type="checkbox"/> D. Allahabad (Prayagraj)

Question ID :	4410091514481
Option 1 ID :	4410095981745
Option 2 ID :	4410095981744
Option 3 ID :	4410095981746
Option 4 ID :	4410095981743
Status :	Answered
Chosen Option :	A

Q.5	Which island in India is noted for having the country's only active volcano?
Ans	<input checked="" type="checkbox"/> A. Minicoy
	<input checked="" type="checkbox"/> B. Kavaratti
	<input checked="" type="checkbox"/> C. Little Andaman
	<input checked="" type="checkbox"/> D. Barren Island

Question ID :	4410091508663
Option 1 ID :	4410095959288
Option 2 ID :	4410095959289
Option 3 ID :	4410095959291
Option 4 ID :	4410095959290
Status :	Answered
Chosen Option :	D

Q.6	In 2020, India was the second largest producer of which crop, with about 14.14% share of the world's total production?
Ans	<input checked="" type="checkbox"/> A. Pulses
	<input checked="" type="checkbox"/> B. Mustard
	<input checked="" type="checkbox"/> C. Wheat
	<input checked="" type="checkbox"/> D. Maize

Question ID :	441009609849
Option 1 ID :	4410092394515
Option 2 ID :	4410092394513
Option 3 ID :	4410092394516
Option 4 ID :	4410092394514
Status :	Not Answered
Chosen Option :	--

Q.7 A person of mass 60 kg runs up a staircase of 35 steps in 7 seconds, with 20 kg weight on his head. If the height of each step is 20 cm, which of the following will be the power exerted by the person?
($g = 10\text{m/s}^2$)

- Ans
- ☒ A. 5600 watts
- ☒ B. 80 watts
- ☒ C. 800 watts
- ☒ D. 114.3 watts

Question ID :	441009623867
Option 1 ID :	4410092449600
Option 2 ID :	4410092449603
Option 3 ID :	4410092449601
Option 4 ID :	4410092449602
Status :	Not Answered
Chosen Option :	--

Q.8 In whom is the Executive power of the Union vested, to be exercised either directly or through subordinate officers?

- Ans
- ☒ A. The Chief Justice of India
- ☒ B. The President
- ☒ C. The Speaker of the Lok Sabha
- ☒ D. The Prime Minister

Question ID :	4410091514943
Option 1 ID :	4410095983195
Option 2 ID :	4410095983192
Option 3 ID :	4410095983193
Option 4 ID :	4410095983194
Status :	Answered
Chosen Option :	B

Q.9 Which of the following best describes the primary objective of the National Rural Livelihood Mission (NRLM), also known as Aajeevika?

- Ans
- ☒ A. Providing public works-based relief in urban drought-affected areas
- ☒ B. Ensuring compulsory procurement of crops at minimum support prices
- ☒ C. Creating urban wage employment through municipal-level projects
- ☒ D. Promoting self-employment through SHGs supported by bank credit and subsidies

Question ID :	4410091518045
Option 1 ID :	4410095995421
Option 2 ID :	4410095995420
Option 3 ID :	4410095995418
Option 4 ID :	4410095995419
Status :	Answered
Chosen Option :	C

Q.1 0 Which Constitutional guardian, empowered by Article 324, holds absolute command over the entire electoral process — from voter registration to the declaration of results — for Parliament, State Assemblies, and the offices of President and Vice-President?

- Ans
- ☒ A. Chief Electoral Overseer of India
 - ☐ B. Federal Revenue Allocator
 - ☐ C. Civil Services Recruitment Authority
 - ☐ D. National Financial Auditor

Question ID :	4410091502917
Option 1 ID :	4410095935933
Option 2 ID :	4410095935935
Option 3 ID :	4410095935932
Option 4 ID :	4410095935934
Status :	Answered
Chosen Option :	A

Q.1 1 The government deprives a person of citizenship due to fraudulent documents. What is this action called?

- Ans
- ☒ A. Deprivation
 - ☐ B. Renunciation
 - ☐ C. Termination
 - ☐ D. Suspension

Question ID :	4410091506072
Option 1 ID :	4410095948670
Option 2 ID :	4410095948667
Option 3 ID :	4410095948668
Option 4 ID :	4410095948669
Status :	Answered
Chosen Option :	B

Q.1 2 Fats and oils belong to which class of biomolecules?

- Ans
- ☐ A. Carbohydrates
 - ☒ B. Lipids
 - ☐ C. Vitamins
 - ☐ D. Proteins

Question ID :	4410091515474
Option 1 ID :	4410095985297
Option 2 ID :	4410095985298
Option 3 ID :	4410095985300
Option 4 ID :	4410095985299
Status :	Answered
Chosen Option :	B

Q.1	Select the correct statement.
3	
Ans	<input checked="" type="checkbox"/> A. Light year is the number of photons absorbed by the earth in one year.
	<input checked="" type="checkbox"/> B. Light year is the unit of time.
	<input checked="" type="checkbox"/> C. Light year is the distance travelled by light in one year.
	<input checked="" type="checkbox"/> D. Light year is the unit of light energy.

Question ID :	441009625161
Option 1 ID :	4410092454779
Option 2 ID :	4410092454776
Option 3 ID :	4410092454777
Option 4 ID :	4410092454778
Status :	Answered
Chosen Option :	C

Q.1	According to Multidimensional Poverty Index: A Progress Review 2023, which of the following states has the lowest percentage of multidimensional poor?
4	
Ans	<input checked="" type="checkbox"/> A. Karnataka
	<input checked="" type="checkbox"/> B. Sikkim
	<input checked="" type="checkbox"/> C. Odisha
	<input checked="" type="checkbox"/> D. Manipur

Question ID :	441009638847
Option 1 ID :	4410092509534
Option 2 ID :	4410092509533
Option 3 ID :	4410092509532
Option 4 ID :	4410092509531
Status :	Answered
Chosen Option :	B

Q.1	Which of the following is NOT a part of the Great Indian Plains?
5	
Ans	<input checked="" type="checkbox"/> A. Western Ghats
	<input checked="" type="checkbox"/> B. Terai
	<input checked="" type="checkbox"/> C. Bhabar
	<input checked="" type="checkbox"/> D. Khadar

Question ID :	4410091514811
Option 1 ID :	4410095982675
Option 2 ID :	4410095982674
Option 3 ID :	4410095982672
Option 4 ID :	4410095982673
Status :	Answered
Chosen Option :	A

Q.1	Which Supreme Court case raised concerns about State monopoly conflicting with Article 301, prompting clarification of Article 305?
6	
Ans	<input checked="" type="checkbox"/> A. Golaknath v. State of Punjab
	<input checked="" type="checkbox"/> B. Saghir Ahmed v. State of U.P.
	<input checked="" type="checkbox"/> C. Minerva Mills v. Union of India
	<input checked="" type="checkbox"/> D. Kesavananda Bharati v. State of Kerala

Question ID :	4410091509466
Option 1 ID :	4410095962525
Option 2 ID :	4410095962526
Option 3 ID :	4410095962527
Option 4 ID :	4410095962524
Status :	Answered
Chosen Option :	D

Q.1	Which of the following is a UNESCO World Heritage Site in India?
7	
Ans	<input checked="" type="checkbox"/> A. Charminar Bazaar
	<input checked="" type="checkbox"/> B. Charminar
	<input checked="" type="checkbox"/> C. Kakatiya Kala Thoranam
	<input checked="" type="checkbox"/> D. Pattadakal temples

Question ID :	4410091512700
Option 1 ID :	4410095974849
Option 2 ID :	4410095974847
Option 3 ID :	4410095974846
Option 4 ID :	4410095974848
Status :	Answered
Chosen Option :	B

Q.1	Which of the following revenue systems was introduced by Akbar based on land measurement and classification?
8	
Ans	<input checked="" type="checkbox"/> A. Ryotwari System
	<input checked="" type="checkbox"/> B. Mahalwari System
	<input checked="" type="checkbox"/> C. Zabti or Dahsala System
	<input checked="" type="checkbox"/> D. Iqta System

Question ID :	4410091502716
Option 1 ID :	4410095935154
Option 2 ID :	4410095935155
Option 3 ID :	4410095935152
Option 4 ID :	4410095935153
Status :	Answered
Chosen Option :	D

Q.1	Which of the following expresses the formula for primary deficit?
9	
Ans	<input checked="" type="checkbox"/> A. Capital expenditure – revenue receipts
	<input checked="" type="checkbox"/> B. Total deficit – borrowing
	<input checked="" type="checkbox"/> C. Revenue deficit – capital receipts
	<input checked="" type="checkbox"/> D. Fiscal deficit – interest payments

Question ID :	4410091518779
Option 1 ID :	4410095998389
Option 2 ID :	4410095998386
Option 3 ID :	4410095998388
Option 4 ID :	4410095998387
Status :	Not Answered
Chosen Option :	--

Q.2	Which of the following indicates the correct number of main regional styles of the classical Chhau dance?
0	
Ans	<input checked="" type="checkbox"/> A. 4
	<input checked="" type="checkbox"/> B. 3
	<input checked="" type="checkbox"/> C. 2
	<input checked="" type="checkbox"/> D. 1

Question ID :	4410091512792
Option 1 ID :	4410095975205
Option 2 ID :	4410095975204
Option 3 ID :	4410095975203
Option 4 ID :	4410095975202
Status :	Not Answered
Chosen Option :	--

Q.2	Which Directive Principle is classified under “Principles Promoting Social and Economic Equality”?
1	
Ans	<input checked="" type="checkbox"/> A. Maintaining peace with neighbouring states
	<input checked="" type="checkbox"/> B. Protecting forests and wildlife
	<input checked="" type="checkbox"/> C. Promoting Panchayats with authority
	<input checked="" type="checkbox"/> D. Ensuring workers are not economically exploited

Question ID :	4410091504714
Option 1 ID :	4410095943310
Option 2 ID :	4410095943309
Option 3 ID :	4410095943311
Option 4 ID :	4410095943312
Status :	Answered
Chosen Option :	D

Q.2	Which mountain range in India is discontinuous because major rivers, such as the Mahanadi, Godavari, Krishna, Pennar and Kaveri, have dissected it at several places?
2	
Ans	<input checked="" type="checkbox"/> A. Western Ghats
	<input checked="" type="checkbox"/> B. Eastern Ghats
	<input checked="" type="checkbox"/> C. Aravali Range
	<input checked="" type="checkbox"/> D. Vindhya Range

Question ID :	4410091517534
Option 1 ID :	4410095993502
Option 2 ID :	4410095993501
Option 3 ID :	4410095993503
Option 4 ID :	4410095993504
Status :	Answered
Chosen Option :	B

Q.2	Which of the following network components is utilized to expand or divide networks by transmitting data packets between logical networks?
3	
Ans	<input checked="" type="checkbox"/> A. Motherboard
	<input checked="" type="checkbox"/> B. Plotter
	<input checked="" type="checkbox"/> C. Joy Stick
	<input checked="" type="checkbox"/> D. Router

Question ID :	4410091502736
Option 1 ID :	4410095935230
Option 2 ID :	4410095935231
Option 3 ID :	4410095935229
Option 4 ID :	4410095935228
Status :	Answered
Chosen Option :	D

Q.2	Raja Rammohan Roy believed the practice of Sati was due to what underlying social factor?
4	
Ans	<input checked="" type="checkbox"/> A. The extremely low position of Hindu women
	<input checked="" type="checkbox"/> B. Influence of foreign religious practices
	<input checked="" type="checkbox"/> C. Lack of proper education for men
	<input checked="" type="checkbox"/> D. Economic hardship faced by families

Question ID :	4410091514654
Option 1 ID :	4410095982046
Option 2 ID :	4410095982044
Option 3 ID :	4410095982047
Option 4 ID :	4410095982045
Status :	Answered
Chosen Option :	A

Q.2	Which mechanism helps prevent conflicts between Centre and States when both pass laws on a Concurrent List subject in India?
5	
Ans	<div><div><div><div></div></div><div>A. Referral to the Finance Commission</div></div></div>
	<div><div><div><div></div></div><div>B. Preference given to the Central law unless the State law receives Presidential assent</div></div></div>
	<div><div><div><div></div></div><div>C. Returning the matter to the Election Commission</div></div></div>
	<div><div><div><div></div></div><div>D. Judicial review by the Supreme Court</div></div></div>

Question ID :	4410091501414
Option 1 ID :	4410095930077
Option 2 ID :	4410095930078
Option 3 ID :	4410095930079
Option 4 ID :	4410095930076
Status :	Answered
Chosen Option :	B

Section : English Language and Comprehension

Q.1	Select the option that can be used as a one-word substitute for the underlined group of words in the given sentence. The professor's lecture was filled with <u>jargon and complex</u> theories that most students found difficult to understand.
Ans	<div><div><div><div></div></div><div>A. abstract</div></div></div>
	<div><div><div><div></div></div><div>B. unintelligible</div></div></div>
	<div><div><div><div></div></div><div>C. ambiguous</div></div></div>
	<div><div><div><div></div></div><div>D. confusing</div></div></div>

Question ID :	4410091370630
Option 1 ID :	4410095413967
Option 2 ID :	4410095413965
Option 3 ID :	4410095413964
Option 4 ID :	4410095413966
Status :	Answered
Chosen Option :	D

Q.2	Select the option that corrects the following sentence. She runs very quick.
Ans	<div><div><div><div></div></div><div>A. She runs very more quickly.</div></div></div>
	<div><div><div><div></div></div><div>B. She runs very quickly.</div></div></div>
	<div><div><div><div></div></div><div>C. She runs quick.</div></div></div>
	<div><div><div><div></div></div><div>D. She quickly runs very.</div></div></div>

Question ID :	4410091363914
Option 1 ID :	4410095387585
Option 2 ID :	4410095387582
Option 3 ID :	4410095387584
Option 4 ID :	4410095387583
Status :	Answered
Chosen Option :	B

Q.3 Select the most appropriate ANTONYM of the underlined word in the given sentence.

She remained adamant about her decision despite repeated requests.

- Ans ☒ A. Yielding
- ☐ B. Stubborn
- ☐ C. Determined
- ☐ D. Firm

Question ID :	4410091372713
Option 1 ID :	4410095422286
Option 2 ID :	4410095422287
Option 3 ID :	4410095422289
Option 4 ID :	4410095422288
Status :	Answered
Chosen Option :	D

Q.4 Select the most appropriate ANTONYM of the highlighted word in the given sentence.

Although the witness seemed confident, his statement was later revealed to be spurious, leading the jury to distrust him.

- Ans ☐ A. Fake
- ☐ B. False
- ☒ C. Genuine
- ☐ D. Deceptive

Question ID :	4410091370774
Option 1 ID :	4410095414534
Option 2 ID :	4410095414533
Option 3 ID :	4410095414535
Option 4 ID :	4410095414536
Status :	Answered
Chosen Option :	C

Q.5 Select the option that rectifies the underlined incorrectly spelt word in the given sentence.

The duty conferred upon a vetinerarian by the licensing authority to ensure the welfare of animals committed to his or her care requires different obligations to those of a human sports medicine doctor.

- Ans ☐ A. vetiranenian
- ☐ B. vetenararian
- ☒ C. veterinarian
- ☐ D. vetinararian

Question ID :	4410091401001
Option 1 ID :	4410095533587
Option 2 ID :	4410095533585
Option 3 ID :	4410095533588
Option 4 ID :	4410095533586
Status :	Answered
Chosen Option :	B

Q.6 Select the most appropriate idiom that can substitute the underlined segment in the given sentence.

Even though he made a mistake in the meeting, Arjun apologised quickly to avoid embarrassment and maintain his dignity.

- Ans
- ☒ A. to keep the ball in his court
 - ☒ B. to bark up the wrong tree
 - ☒ C. at the drop of a hat
 - ☒ D. to save his face

Question ID :	4410091372759
Option 1 ID :	4410095422473
Option 2 ID :	4410095422472
Option 3 ID :	4410095422471
Option 4 ID :	4410095422470
Status :	Answered
Chosen Option :	D

Q.7 Parts of a sentence are given below. Arrange the parts in the correct order to form a meaningful and coherent sentence.

- A. like a ghost she couldn't explain away
- B. but the syntax — clipped, parenthetical, evasive —
- C. that undid her composure
- D. it wasn't the content of the note

- Ans
- ☒ A. ABDC
 - ☒ B. DABC
 - ☒ C. ACBD
 - ☒ D. DBCA

Question ID :	4410091370575
Option 1 ID :	4410095413750
Option 2 ID :	4410095413751
Option 3 ID :	4410095413749
Option 4 ID :	4410095413748
Status :	Answered
Chosen Option :	D

Q.8 Select the most appropriate option to fill in the blanks.

As a child grows out of their helplessness, and displays _____ infantile traits, a family's love may remain unconditional, but the strong, emotional response that stokes a desire to provide _____ care fades.

- Ans
- ☒ A. fewer and fewer, constant
 - ☒ B. lesser and lesser, obvious
 - ☒ C. more and more, constant
 - ☒ D. higher and higher, consistent

Question ID :	4410091386160
Option 1 ID :	4410095475345
Option 2 ID :	4410095475343
Option 3 ID :	4410095475344
Option 4 ID :	4410095475346
Status :	Answered
Chosen Option :	A

Q.9

Select the most appropriate option to fill in the blank.

Despite the sudden downpour, the children continued to play _____, oblivious to the mud and water around them.

Ans

☒ A. gleefully

☐ B. anxiously

☐ C. reluctantly

☐ D. cautiously

Question ID :	4410091370344
Option 1 ID :	4410095412824
Option 2 ID :	4410095412827
Option 3 ID :	4410095412825
Option 4 ID :	4410095412826
Status :	Answered
Chosen Option :	A

Q.10

Select the most appropriate proverb/idiom that can substitute the underlined segment in the given sentence.

A wise and intelligent person can achieve great influence, because a person with intelligence, wisdom, or strong character can command respect and achieve great influence.

Ans

☐ A. Rome was not built in a day

☐ B. Actions speak louder than words

☐ C. Knowledge is power

☒ D. A good mind possesses a kingdom

Question ID :	4410091379506
Option 1 ID :	4410095449306
Option 2 ID :	4410095449305
Option 3 ID :	4410095449304
Option 4 ID :	4410095449307
Status :	Answered
Chosen Option :	C

Q.11

Select the most appropriate idiom that can substitute the highlighted text in the given sentence.

The negotiator cautioned the team not to **act prematurely without preparation**.

Ans

☒ A. jump the gun

☐ B. hit the nail on the head

☐ C. smell a rat

☐ D. turn the tables

Question ID :	4410091370801
Option 1 ID :	4410095414637
Option 2 ID :	4410095414638
Option 3 ID :	4410095414640
Option 4 ID :	4410095414639
Status :	Answered
Chosen Option :	A

Q.1
2

Select the option that can be used as a one-word substitute for the highlighted phrase in the given sentence.

Ravi reached the **highest point of a mountain** after years of successful trekking experience.

Ans

✗ A. peak

✗ B. base

✓ C. summit

✗ D. ridge

Question ID :	4410091370698
Option 1 ID :	4410095414235
Option 2 ID :	4410095414237
Option 3 ID :	4410095414234
Option 4 ID :	4410095414236
Status :	Answered
Chosen Option :	C

Q.1
3

Parts of a sentence are given below in jumbled order. Arrange the parts in the correct order to form a meaningful sentence.

P. The old library
Q. Stood quietly at the corner of the street
R. Housing thousands of ancient manuscripts
S. Covered in ivy and moss
T. Whispering stories of the past
U. Awaiting curious minds to explore its treasures

Ans

✗ A. PRSQTU

✗ B. PQRSTU

✓ C. PQSRTU

✗ D. PTRSQU

Question ID :	4410091368398
Option 1 ID :	4410095405027
Option 2 ID :	4410095405030
Option 3 ID :	4410095405029
Option 4 ID :	4410095405028
Status :	Answered
Chosen Option :	A

Q.1
4

Select the most appropriate option that rectifies the underlined incorrect word segments in the given sentence.

In spite the heavy rain, the volunteers carried food supplies beyond the flooded streets to help the stranded families on the other side of the river.

Ans

✗ A. In spite of the heavy rain, supplies above the flooded streets

✗ B. Instead of the heavy rain, supplies over the flooded streets

✓ C. Despite the heavy rain, supplies across the flooded streets

✗ D. Despite of the heavy rain, supplies over the flooded streets

Question ID :	4410091386351
Option 1 ID :	4410095476104
Option 2 ID :	4410095476103
Option 3 ID :	4410095476106
Option 4 ID :	4410095476105
Status :	Answered
Chosen Option :	C

Q.1 5	Select the most appropriate article to fill in the blank. If no article is required, select 'No article required'. _____ bus has picked up the children for school.
Ans	<div><div><div>✖</div><div>A. An</div></div></div>
	<div><div><div>✔</div><div>B. The</div></div></div>
	<div><div><div>✖</div><div>C. A</div></div></div>
	<div><div><div>✖</div><div>D. No article required</div></div></div>

Question ID :	4410091376164
Option 1 ID :	4410095436217
Option 2 ID :	4410095436218
Option 3 ID :	4410095436216
Option 4 ID :	4410095436219
Status :	Answered
Chosen Option :	B

Q.1 6	Select the INCORRECTLY spelt word.
Ans	<div><div><div>✔</div><div>A. accummulate</div></div></div>
	<div><div><div>✖</div><div>B. argument</div></div></div>
	<div><div><div>✖</div><div>C. accommodate</div></div></div>
	<div><div><div>✖</div><div>D. acreage</div></div></div>

Question ID :	4410091386053
Option 1 ID :	4410095474915
Option 2 ID :	4410095474917
Option 3 ID :	4410095474916
Option 4 ID :	4410095474918
Status :	Answered
Chosen Option :	A

Q.1 7	Select the option that can be used as a one-word substitute for the highlighted word segment in the given sentence. The contract was considered legally acceptable and reasonable by all parties involved .
Ans	<div><div><div>✖</div><div>A. Illegal</div></div></div>
	<div><div><div>✔</div><div>B. Valid</div></div></div>
	<div><div><div>✖</div><div>C. Wrong</div></div></div>
	<div><div><div>✖</div><div>D. Invalid</div></div></div>

Question ID :	4410091379210
Option 1 ID :	4410095448314
Option 2 ID :	4410095448313
Option 3 ID :	4410095448316
Option 4 ID :	4410095448315
Status :	Answered
Chosen Option :	B

Q.1
8

Select the most appropriate option to fill in the blanks.

In the gallery, I admired _____ landscape painting and _____ abstract piece, then noticed a still life while the curator explained each work.

Ans

☒ A. an, a

☒ B. a, an

☒ C. an, an

☒ D. no article needed, a

Question ID :	4410091401406
Option 1 ID :	4410095534936
Option 2 ID :	4410095534935
Option 3 ID :	4410095534938
Option 4 ID :	4410095534937
Status :	Answered
Chosen Option :	B

Q.1
9

Select the most appropriate ANTONYM for the highlighted word.

The manager found the employee's excuse **genuine** and accepted it.

Ans

☒ A. Real

☒ B. False

☒ C. Honest

☒ D. True

Question ID :	4410091365428
Option 1 ID :	4410095393304
Option 2 ID :	4410095393306
Option 3 ID :	4410095393305
Option 4 ID :	4410095393307
Status :	Answered
Chosen Option :	B

Q.2
0

Parts of a sentence are given below in jumbled order. Arrange the parts in the correct order to form a meaningful sentence.

provided these methods are used (O)/ managing conflict effectively can be (P)/ respectfully to avoid further escalating the situation (Q)/ which can help ease tension and create a sense of connection (R)/ achieved by incorporating humour and playfulness (S)

Ans

☒ A. SRPOQ

☒ B. PSRQO

☒ C. SPROQ

☒ D. PSROQ

Question ID :	441009433979
Option 1 ID :	4410091695437
Option 2 ID :	4410091695435
Option 3 ID :	4410091695436
Option 4 ID :	4410091695434
Status :	Answered
Chosen Option :	D

Comprehension:	
Read the given passage carefully and answer the questions that follow.	
In today's fast-paced world, the importance of reading is often overlooked. Many students prefer spending hours on social media rather than opening a book. Yet, research shows that regular reading not only improves vocabulary and language skills but also strengthens concentration and critical thinking. Unlike scrolling through short online posts, reading books and articles requires focus and patience, qualities that are essential in academics and professional life. Reading also exposes individuals to diverse cultures, ideas, and perspectives, helping them develop empathy and creativity. Unfortunately, the habit of deep reading is declining, especially among younger generations. Schools and parents play a vital role in reviving this practice by encouraging library visits, book clubs, and discussions. In the end, reading is not just a leisure activity; it is a powerful tool that shapes minds, broadens horizons, and builds a foundation for lifelong learning.	
SubQuestion No : 21	
Q.2	What is the most suitable title for the passage?
1	
Ans	<div><div><div>✖</div><div>A. The Decline of Libraries</div></div><div><div>✖</div><div>B. How to Improve Vocabulary Quickly</div></div><div><div>✔</div><div>C. The Value of Reading in Modern Life</div></div><div><div>✖</div><div>D. Social Media and Entertainment</div></div></div>

Question ID :	4410091365254
Option 1 ID :	4410095392608
Option 2 ID :	4410095392611
Option 3 ID :	4410095392609
Option 4 ID :	4410095392610
Status :	Answered
Chosen Option :	C

Comprehension:	
Read the given passage carefully and answer the questions that follow.	
In today's fast-paced world, the importance of reading is often overlooked. Many students prefer spending hours on social media rather than opening a book. Yet, research shows that regular reading not only improves vocabulary and language skills but also strengthens concentration and critical thinking. Unlike scrolling through short online posts, reading books and articles requires focus and patience, qualities that are essential in academics and professional life. Reading also exposes individuals to diverse cultures, ideas, and perspectives, helping them develop empathy and creativity. Unfortunately, the habit of deep reading is declining, especially among younger generations. Schools and parents play a vital role in reviving this practice by encouraging library visits, book clubs, and discussions. In the end, reading is not just a leisure activity; it is a powerful tool that shapes minds, broadens horizons, and builds a foundation for lifelong learning.	
SubQuestion No : 22	
Q.2	What is the central theme of the passage?
2	
Ans	<div><div><div>✖</div><div>A. Social media is more important than books.</div></div><div><div>✖</div><div>B. Reading is only useful for examinations.</div></div><div><div>✖</div><div>C. Parents should stop students from using technology.</div></div><div><div>✔</div><div>D. Reading is essential for intellectual and personal growth.</div></div></div>

Question ID :	4410091365255
Option 1 ID :	4410095392613
Option 2 ID :	4410095392615
Option 3 ID :	4410095392614
Option 4 ID :	4410095392612
Status :	Answered
Chosen Option :	D

Comprehension:

Read the given passage carefully and answer the questions that follow.

In today's fast-paced world, the importance of reading is often overlooked. Many students prefer spending hours on social media rather than opening a book. Yet, research shows that regular reading not only improves vocabulary and language skills but also strengthens concentration and critical thinking. Unlike scrolling through short online posts, reading books and articles requires focus and patience, qualities that are essential in academics and professional life. Reading also exposes individuals to diverse cultures, ideas, and perspectives, helping them develop empathy and creativity. Unfortunately, the habit of deep reading is declining, especially among younger generations. Schools and parents play a vital role in reviving this practice by encouraging library visits, book clubs, and discussions. In the end, reading is not just a leisure activity; it is a powerful tool that shapes minds, broadens horizons, and builds a foundation for lifelong learning.

SubQuestion No : 23

Q.2 Which fact is directly mentioned in the passage?

3

Ans

A. Reading makes students more successful in sports.

B. Reading habits are increasing among teenagers.

C. Reading is less effective than online videos.

D. Reading strengthens concentration and critical thinking.

Question ID :	4410091365256
Option 1 ID :	4410095392617
Option 2 ID :	4410095392619
Option 3 ID :	4410095392618
Option 4 ID :	4410095392616
Status :	Answered
Chosen Option :	D

Comprehension:

Read the given passage carefully and answer the questions that follow.

In today's fast-paced world, the importance of reading is often overlooked. Many students prefer spending hours on social media rather than opening a book. Yet, research shows that regular reading not only improves vocabulary and language skills but also strengthens concentration and critical thinking. Unlike scrolling through short online posts, reading books and articles requires focus and patience, qualities that are essential in academics and professional life. Reading also exposes individuals to diverse cultures, ideas, and perspectives, helping them develop empathy and creativity. Unfortunately, the habit of deep reading is declining, especially among younger generations. Schools and parents play a vital role in reviving this practice by encouraging library visits, book clubs, and discussions. In the end, reading is not just a leisure activity; it is a powerful tool that shapes minds, broadens horizons, and builds a foundation for lifelong learning.

SubQuestion No : 24

Q.2 What is the tone of the passage?

4

Ans

A. Neutral and descriptive

B. Persuasive and reflective

C. Humorous and casual

D. Angry and critical

Question ID :	4410091365257
Option 1 ID :	4410095392623
Option 2 ID :	4410095392621
Option 3 ID :	4410095392620
Option 4 ID :	4410095392622
Status :	Answered
Chosen Option :	A

Comprehension:

Read the given passage carefully and answer the questions that follow.

In today's fast-paced world, the importance of reading is often overlooked. Many students prefer spending hours on social media rather than opening a book. Yet, research shows that regular reading not only improves vocabulary and language skills but also strengthens concentration and critical thinking. Unlike scrolling through short online posts, reading books and articles requires focus and patience, qualities that are essential in academics and professional life. Reading also exposes individuals to diverse cultures, ideas, and perspectives, helping them develop empathy and creativity. Unfortunately, the habit of deep reading is declining, especially among younger generations. Schools and parents play a vital role in reviving this practice by encouraging library visits, book clubs, and discussions. In the end, reading is not just a leisure activity; it is a powerful tool that shapes minds, broadens horizons, and builds a foundation for lifelong learning.

SubQuestion No : 25

Q.2 What inference can be drawn from the passage?

5

Ans

A. Social media will completely replace books.

B. Reading is only for people with a lot of free time.

C. Encouraging reading habits can positively shape future generations.

D. Students should avoid technology completely.

Question ID :	4410091365258
Option 1 ID :	4410095392625
Option 2 ID :	4410095392626
Option 3 ID :	4410095392624
Option 4 ID :	4410095392627
Status :	Answered
Chosen Option :	C

Section : Computer Knowledge

Q.1 Which of the following methods allows you to insert a new slide in MS-PowerPoint?

Ans

A. Slide Show → Custom Slide Show

B. Design → Slide Layout

C. Review → Compare

D. Home → New Slide

Question ID :	441009848722
Option 1 ID :	4410093347714
Option 2 ID :	4410093347715
Option 3 ID :	4410093347716
Option 4 ID :	4410093347713
Status :	Answered
Chosen Option :	D

Q.2	Which Excel function returns the current date?
Ans	<input checked="" type="checkbox"/> A. =TIME()
	<input checked="" type="checkbox"/> B. =DATE()
	<input checked="" type="checkbox"/> C. =TODAY()
	<input checked="" type="checkbox"/> D. =WEEKDAY()

Question ID :	441009750548
Option 1 ID :	4410092956060
Option 2 ID :	4410092956062
Option 3 ID :	4410092956063
Option 4 ID :	4410092956061
Status :	Answered
Chosen Option :	B

Q.3	What is the difference between borders and shading in table formatting?
Ans	<input checked="" type="checkbox"/> A. Borders are colored lines; shading is background color
	<input checked="" type="checkbox"/> B. Borders are inside cells; shading is outside cells
	<input checked="" type="checkbox"/> C. Borders are thick lines; shading is thin lines
	<input checked="" type="checkbox"/> D. There is no difference

Question ID :	4410091030007
Option 1 ID :	4410094071706
Option 2 ID :	4410094071708
Option 3 ID :	4410094071707
Option 4 ID :	4410094071709
Status :	Answered
Chosen Option :	C

Q.4	Which part of the computer controls the execution of instructions?
Ans	<input checked="" type="checkbox"/> A. Input Device
	<input checked="" type="checkbox"/> B. Control Unit
	<input checked="" type="checkbox"/> C. ALU
	<input checked="" type="checkbox"/> D. Memory

Question ID :	441009464023
Option 1 ID :	4410091814680
Option 2 ID :	4410091814677
Option 3 ID :	4410091814678
Option 4 ID :	4410091814679
Status :	Answered
Chosen Option :	C

Q.5 Which method allows you to automatically adjust column width to fit the content?

- Ans ☒ A. Double-click the column border
- ☒ B. Use Format → Column → AutoFit
- ☒ C. Drag the column border to the right
- ☒ D. Right-click and select "Fit to Content"

Question ID :	4410091023088
Option 1 ID :	4410094043871
Option 2 ID :	4410094043874
Option 3 ID :	4410094043873
Option 4 ID :	4410094043872
Status :	Answered
Chosen Option :	C

Q.6 What is the purpose of setting a negative indent (outdent) for a paragraph's first line?

- Ans ☒ A. To visually separate the first line for emphasis, often used in resumes, bibliographies, or legal documents
- ☒ B. To create a hanging indent, where the first line extends further left than the rest of the paragraph
- ☒ C. To make the paragraph stand out from surrounding text
- ☒ D. To align the paragraph with the page margin, ignoring any previous indentation

Question ID :	441009679036
Option 1 ID :	4410092670349
Option 2 ID :	4410092670347
Option 3 ID :	4410092670346
Option 4 ID :	4410092670348
Status :	Not Answered
Chosen Option :	--

Q.7 Which of the following application softwares is used to interact with system software for performing specific tasks?

- Ans ☒ A. Adobe Photoshop
- ☒ B. Linux Kernel
- ☒ C. Device Drivers
- ☒ D. Microsoft Windows

Question ID :	44100964035
Option 1 ID :	441009255148
Option 2 ID :	441009255149
Option 3 ID :	441009255150
Option 4 ID :	441009255147
Status :	Not Answered
Chosen Option :	--

Q.8	What is the starting page of a website usually called?
Ans	<input checked="" type="checkbox"/> A. End page
	<input checked="" type="checkbox"/> B. Search page
	<input checked="" type="checkbox"/> C. Home page
	<input checked="" type="checkbox"/> D. Web address

Question ID :	441009882532
Option 1 ID :	4410093483796
Option 2 ID :	4410093483795
Option 3 ID :	4410093483798
Option 4 ID :	4410093483797
Status :	Answered
Chosen Option :	C

Q.9	In the formula =IF(A1>10,"High","Low"), what will be displayed if cell A1 contains the value 5?
Ans	<input checked="" type="checkbox"/> A. High
	<input checked="" type="checkbox"/> B. 5
	<input checked="" type="checkbox"/> C. Error
	<input checked="" type="checkbox"/> D. Low

Question ID :	4410091028762
Option 1 ID :	4410094066702
Option 2 ID :	4410094066704
Option 3 ID :	4410094066705
Option 4 ID :	4410094066703
Status :	Answered
Chosen Option :	D

Q.1	What do you mean by P in the CPU?
0	
Ans	<input checked="" type="checkbox"/> A. Processing
	<input checked="" type="checkbox"/> B. Pulse
	<input checked="" type="checkbox"/> C. Pooled
	<input checked="" type="checkbox"/> D. Pieced

Question ID :	441009395057
Option 1 ID :	4410091545738
Option 2 ID :	4410091545736
Option 3 ID :	4410091545737
Option 4 ID :	4410091545739
Status :	Answered
Chosen Option :	A

Q.1	What does the abbreviation CPU stand for?
1	
Ans	<input checked="" type="checkbox"/> A. Computer Processing Utility
	<input checked="" type="checkbox"/> B. Computer Processing Unit
	<input checked="" type="checkbox"/> C. Central Processing Unit
	<input checked="" type="checkbox"/> D. Control Processing Unit

Question ID :	441009643329
Option 1 ID :	4410092527487
Option 2 ID :	4410092527489
Option 3 ID :	4410092527488
Option 4 ID :	4410092527486
Status :	Answered
Chosen Option :	C

Q.1	What is the difference between line spacing and paragraph spacing?
2	
Ans	<input checked="" type="checkbox"/> A. Line spacing affects paragraphs; paragraph spacing affects lines
	<input checked="" type="checkbox"/> B. Line spacing is for single lines; paragraph spacing is for multiple lines
	<input checked="" type="checkbox"/> C. Both affect the same spacing
	<input checked="" type="checkbox"/> D. Line spacing affects space between lines within a paragraph; paragraph spacing affects space between paragraphs

Question ID :	4410091029435
Option 1 ID :	4410094069411
Option 2 ID :	4410094069413
Option 3 ID :	4410094069412
Option 4 ID :	4410094069410
Status :	Answered
Chosen Option :	D

Q.1	Which of the following tabs allows you to apply a new template or theme to your presentation in MS PowerPoint?
3	
Ans	<input checked="" type="checkbox"/> A. Design
	<input checked="" type="checkbox"/> B. Insert
	<input checked="" type="checkbox"/> C. Review
	<input checked="" type="checkbox"/> D. View

Question ID :	4410091001935
Option 1 ID :	4410093959447
Option 2 ID :	4410093959446
Option 3 ID :	4410093959448
Option 4 ID :	4410093959449
Status :	Answered
Chosen Option :	A

Q.1 Which statements are true regarding attaching files to an email?
4

(i) The 'Attach file' icon typically looks like a paperclip.
(ii) There are no size limits for files attached to emails.
(iii) Multiple files can be attached to a single email.

- Ans
- ☒ A. (i), (ii) and (iii)
 - ☒ B. (ii) and (iii) only
 - ☒ C. (i) and (ii) only
 - ☒ D. (i) and (iii) only

Question ID :	441009878019
Option 1 ID :	4410093465721
Option 2 ID :	4410093465719
Option 3 ID :	4410093465718
Option 4 ID :	4410093465720
Status :	Answered
Chosen Option :	D

Q.1 To save a document for the first time, which of the following shortcut keys is used?
5

- Ans
- ☒ A. Ctrl + O
 - ☒ B. Ctrl + X
 - ☒ C. Ctrl + S
 - ☒ D. Ctrl + P

Question ID :	441009929675
Option 1 ID :	4410093672649
Option 2 ID :	4410093672652
Option 3 ID :	4410093672651
Option 4 ID :	4410093672650
Status :	Answered
Chosen Option :	C

Q.1 Which of the following best describes a LAN?
6

- Ans
- ☒ A. A global network connecting computers worldwide
 - ☒ B. A storage device for computer data
 - ☒ C. A network connecting devices within a limited area, like an office
 - ☒ D. A protocol for encoding text characters

Question ID :	441009686806
Option 1 ID :	4410092701241
Option 2 ID :	4410092701242
Option 3 ID :	4410092701240
Option 4 ID :	4410092701243
Status :	Answered
Chosen Option :	C

Q.1	The formula =ROUND(12.789, 1) returns the value _____.
7	
Ans	<input checked="" type="checkbox"/> A. 13
	<input checked="" type="checkbox"/> B. 12.7
	<input checked="" type="checkbox"/> C. 12.79
	<input checked="" type="checkbox"/> D. 12.8

Question ID :	441009910192
Option 1 ID :	4410093594913
Option 2 ID :	4410093594914
Option 3 ID :	4410093594912
Option 4 ID :	4410093594911
Status :	Answered
Chosen Option :	A

Q.1	Which of the following statements regarding the abbreviations ASCII, CD, and LAN are true?
8	
	1. ASCII uses 7 bits to represent standard characters.
	2. A CD typically stores data using magnetic encoding.
	3. LAN is generally limited to a small geographical area such as a building or campus.
	4. ASCII includes encoding for multimedia files like images and audio.
Ans	<input checked="" type="checkbox"/> A. Only 1 and 2 are true.
	<input checked="" type="checkbox"/> B. Only 1 and 3 are true.
	<input checked="" type="checkbox"/> C. Only 2 and 4 are true.
	<input checked="" type="checkbox"/> D. Only 3 and 4 are true.

Question ID :	441009643171
Option 1 ID :	4410092526850
Option 2 ID :	4410092526853
Option 3 ID :	4410092526851
Option 4 ID :	4410092526852
Status :	Answered
Chosen Option :	B

Q.1	Which characteristic of computers refers to their ability to perform millions of operations without human intervention?
9	
Ans	<input checked="" type="checkbox"/> A. Diligence
	<input checked="" type="checkbox"/> B. Accuracy
	<input checked="" type="checkbox"/> C. Versatility
	<input checked="" type="checkbox"/> D. Speed

Question ID :	441009674798
Option 1 ID :	4410092653344
Option 2 ID :	4410092653343
Option 3 ID :	4410092653342
Option 4 ID :	4410092653345
Status :	Answered
Chosen Option :	D

Q.20	While starting PowerPoint, which feature allows a user to quickly begin with a pre-designed slide set suitable for a particular purpose?
Ans	<div><div><div><div></div></div><div>A. Click Insert > Template</div></div><div><div><div></div></div><div>B. Choose a template from the Start screen</div></div><div><div><div></div></div><div>C. Use Save As and select a format</div></div><div><div><div></div></div><div>D. Select a theme from the Design tab</div></div></div>

Question ID :	441009751799
Option 1 ID :	4410092961108
Option 2 ID :	4410092961106
Option 3 ID :	4410092961109
Option 4 ID :	4410092961107
Status :	Answered
Chosen Option :	D

