

# **DDA MTS**

**Previous Year Paper  
17 Dec, 2025 Shift 1**



Adda247

# Test Prime

**ALL EXAMS, ONE SUBSCRIPTION**



**1,00,000+**  
Mock Tests



**Personalised  
Report Card**



**Unlimited  
Re-Attempt**



**600+**  
Exam Covered



**25,000+** Previous  
Year Papers



**500%**  
Refund



**ATTEMPT FREE MOCK NOW**



DELHI DEVELOPMENT AUTHORITY  
RECRUITMENT CELL

VIKAS SADAN, I.N.A, NEW DELHI-110023.

Recruitment Advertisement No. 09/2025/Rectt. Cell/Pers./DDA  
DIRECT RECRUITMENT IN VARIOUS CATEGORIES

Participant ID	
Participant Name	
Test Center Name	
Test Date	17/12/2025
Test Time	9:00 AM - 11:00 AM
Subject	MTS

Section : Numerical and Mathematical Ability

Q.1 The largest four-digit number, which when divided by 8, 10 and 5 leaves remainder 3 in each case, is:

- Ans ☒ A. 9691  
☒ B. 9875  
☒ C. 9998  
☒ D. 9963

Question ID : 441009525558  
Option 1 ID : 4410092057652  
Option 2 ID : 4410092057653  
Option 3 ID : 4410092057654  
Option 4 ID : 4410092057651  
Status : Answered  
Chosen Option : D

Q.2 A shopkeeper sells an item for ₹583.2 after giving two successive discounts of 25% and 40% on its marked price. Had he not given any discount, he would have earned a profit of 62%. What is the cost price (in ₹) of the item?

- Ans ☒ A. 800
- ☒ B. 824
- ☒ C. 838
- ☒ D. 831

Question ID : 441009915837  
Option 1 ID : 4410093617599  
Option 2 ID : 4410093617601  
Option 3 ID : 4410093617600  
Option 4 ID : 4410093617602  
Status : Answered  
Chosen Option : A

Q.3 The cost of a washing machine is 25% less than the cost of a TV. If the cost of the washing machine increases by 66% and that of the TV decreases by 40%, then what is the percentage change in the total cost of 7 washing machines and 8 TVs?

- Ans ☒ A. Decrease by 3%
- ☒ B. Increase by 2%
- ☒ C. Decrease by 6%
- ☒ D. Increase by 1%

Question ID : 441009537075  
Option 1 ID : 4410092103697  
Option 2 ID : 4410092103696  
Option 3 ID : 4410092103699  
Option 4 ID : 4410092103698  
Status : Answered  
Chosen Option : B

Q.4 Two taps can fill a cistern in 2 hours and 16 hours, respectively. A third tap can empty it in 16 hours. How long (in hours) will it take to fill half of the empty cistern, if all of them are opened together?

- Ans ☒ A. 1
- ☒ B. 4
- ☒ C. 3
- ☒ D. 2

Question ID : 441009518296  
Option 1 ID : 4410092028603  
Option 2 ID : 4410092028606  
Option 3 ID : 4410092028605  
Option 4 ID : 4410092028604  
Status : Answered  
Chosen Option : A

Q.5 The population of a town is growing at a rate of 16% per year. At this rate, if the current population is 31250, then what will the town's population be 2 years from now?

- Ans ☒ A. 42678  
☒ B. 42050  
☒ C. 43150  
☒ D. 40180

Question ID : 4410091409758  
Option 1 ID : 4410095567942  
Option 2 ID : 4410095567939  
Option 3 ID : 4410095567940  
Option 4 ID : 4410095567941  
Status : Answered  
Chosen Option : B

Q.6 A shopkeeper buys a watch for ₹500. He sells it at a profit of 20% to a retailer, who then sells it at a profit of 10% to a customer. What is the final selling price?

- Ans ☒ A. ₹660  
☒ B. ₹600  
☒ C. ₹640  
☒ D. ₹680

Question ID : 4410091422142  
Option 1 ID : 4410095617461  
Option 2 ID : 4410095617458  
Option 3 ID : 4410095617459  
Option 4 ID : 4410095617460  
Status : Answered  
Chosen Option : A

Q.7 In how many years will ₹2,000 fetch an interest of ₹800 at 5% per year simple interest?

- Ans ☒ A. 10  
☒ B. 11  
☒ C. 9  
☒ D. 8

Question ID : 441009853198  
Option 1 ID : 4410093365766  
Option 2 ID : 4410093365767  
Option 3 ID : 4410093365765  
Option 4 ID : 4410093365764  
Status : Answered  
Chosen Option : D

Q.8 Two trains 165 m and 150 m long are running in opposite directions on parallel tracks, the first at 90 km/hr and the other at 72 km/hr. How long (in seconds) will they take to cross each other?

- Ans ☒ A. 10  
☒ B. 8  
☒ C. 9  
☒ D. 7

Question ID : 4410091468114

Option 1 ID : 4410095800322

Option 2 ID : 4410095800323

Option 3 ID : 4410095800324

Option 4 ID : 4410095800321

Status : Answered

Chosen Option : D

Q.9 The amount on a sum of ₹2500 at 16% per annum compound interest, compounded annually, in 2 years, will be:

- Ans ☒ A. ₹3364  
☒ B. ₹4302  
☒ C. ₹2978  
☒ D. ₹2622

Question ID : 441009897864

Option 1 ID : 4410093545526

Option 2 ID : 4410093545529

Option 3 ID : 4410093545527

Option 4 ID : 4410093545528

Status : Answered

Chosen Option : A

Q.10 The area of a square is  $4356 \text{ cm}^2$ . Its perimeter is equal to the perimeter of a regular hexagon. What is the area (in  $\text{cm}^2$ ) of the hexagon?

- Ans ☒ A. 2862  
☒ B.  $2904\sqrt{3}$   
☒ C. 2934  
☒ D.  $2880\sqrt{3}$

Question ID : 441009621867

Option 1 ID : 4410092441601

Option 2 ID : 4410092441600

Option 3 ID : 4410092441603

Option 4 ID : 4410092441602

Status : Answered

Chosen Option : B

Q.11 A container holds 36 litres of a milk–water mixture in the ratio 7 : 2. How many litres of water must be added to make the ratio 5 : 3?

Ans ☒ A. 8.5

☒ B. 9.2

☒ C. 8.2

☒ D. 8.8

Question ID : 4410091425541

Option 1 ID : 4410095630776

Option 2 ID : 4410095630778

Option 3 ID : 4410095630775

Option 4 ID : 4410095630777

Status : Answered

Chosen Option : D

Q.12 A starts business with ₹24,000 and after 5 months, B joins with A as his partner. After a year, the profit is divided in the ratio 6 : 7. What is B's contribution in the capital?

Ans ☒ A. ₹46,030

☒ B. ₹49,505

☒ C. ₹48,000

☒ D. ₹49,205

Question ID : 441009547855

Option 1 ID : 4410092146818

Option 2 ID : 4410092146817

Option 3 ID : 4410092146816

Option 4 ID : 4410092146819

Status : Answered

Chosen Option : C

Q.13 The perimeter of the base of a right circular cone is 176 cm. If the height of the cone is 21 cm, then what is the total surface area (in sq. cm) of the cone? (Use  $\pi = \frac{22}{7}$ )

Ans ☒ A. 4,158

☒ B. 5,544

☒ C. 5,390

☒ D. 6,930

Question ID : 4410091473985

Option 1 ID : 4410095823544

Option 2 ID : 4410095823543

Option 3 ID : 4410095823545

Option 4 ID : 4410095823546

Status : Answered

Chosen Option : B

Q.14 A 369 m long train running at a speed of 72 km/hr passes a platform in 52 seconds. Find the length of the platform (in m).

- Ans ☒ A. 673  
☒ B. 674  
☒ C. 671  
☒ D. 670

Question ID : 441009545485  
Option 1 ID : 4410092137337  
Option 2 ID : 4410092137338  
Option 3 ID : 4410092137336  
Option 4 ID : 4410092137339  
Status : Answered  
Chosen Option : C

Q.15 A can do a work in 15 days and B in 20 days. If they work on it together for 4 days, then what fraction of the work is left?

- Ans ☒ A.  $\frac{13}{15}$   
☒ B.  $\frac{8}{15}$   
☒ C.  $\frac{11}{15}$   
☒ D.  $\frac{14}{15}$

Question ID : 441009914017  
Option 1 ID : 4410093610321  
Option 2 ID : 4410093610319  
Option 3 ID : 4410093610320  
Option 4 ID : 4410093610322  
Status : Answered  
Chosen Option : B

Q.16 A man travels 50 km at 10 km/hr, 80 km at 16 km/hr and 140 km at 28 km/hr. What is his average speed (in km/hr)?

- Ans ☒ A. 17  
☒ B. 18  
☒ C. 16  
☒ D. 20

Question ID : 4410091419779  
Option 1 ID : 4410095608039  
Option 2 ID : 4410095608040  
Option 3 ID : 4410095608038  
Option 4 ID : 4410095608041  
Status : Answered  
Chosen Option : B



Q.17 Inlets A, B and C can fill a tank in 10 hours, 8 hours, and 12 hours, respectively. Initially, inlet A was opened and operated alone for 2 hours before being closed. Then, inlet B was opened and ran alone for 1 hour. Finally, inlets B and C were opened together to fill the remaining portion of the tank. What was the total time taken to fill the tank completely?

- Ans ☒ A. 6 hours
- ☒ B. 6.24 hours
- ☒ C. 7.2 hours
- ☒ D. 6.86 hours

Question ID : 4410091426580  
Option 1 ID : 4410095634895  
Option 2 ID : 4410095634896  
Option 3 ID : 4410095634898  
Option 4 ID : 4410095634897  
Status : Answered  
Chosen Option : B

Q.18 The average runs scored by a batsman in 20 matches is 45. In the next 10 matches, the batsman scored an average of 13 runs. Find his average runs (rounded off to two decimals) in all the 30 matches.

- Ans ☒ A. 35.33
- ☒ B. 34.33
- ☒ C. 33.33
- ☒ D. 36.33

Question ID : 441009516409  
Option 1 ID : 4410092021057  
Option 2 ID : 4410092021055  
Option 3 ID : 4410092021056  
Option 4 ID : 4410092021058  
Status : Answered  
Chosen Option : B

Q.19 Subtracting 47% of X from X is the same as multiplying X by:

- Ans ☒ A. 0.53
- ☒ B. 0.047
- ☒ C. 0.47
- ☒ D. 0.5

Question ID : 441009516683  
Option 1 ID : 4410092022151  
Option 2 ID : 4410092022154  
Option 3 ID : 4410092022152  
Option 4 ID : 4410092022153  
Status : Answered  
Chosen Option : A

Q.20 Which of the following pairs are co-prime numbers?

- Ans ☒ A. (9,27)  
☒ B. (14,21)  
☒ C. (8,15)  
☒ D. (25,35)

Question ID : 4410091421051  
Option 1 ID : 4410095613134  
Option 2 ID : 4410095613133  
Option 3 ID : 4410095613132  
Option 4 ID : 4410095613135  
Status : Answered  
Chosen Option : C

Q.21 A shopkeeper purchased 38 dozens of articles at the rate of ₹600 per dozen. He sold each one of them at the rate of ₹62. What percentage profit did he make?

- Ans ☒ A. 25%  
☒ B. 23%  
☒ C. 22%  
☒ D. 24%

Question ID : 441009577835  
Option 1 ID : 4410092266469  
Option 2 ID : 4410092266468  
Option 3 ID : 4410092266467  
Option 4 ID : 4410092266466  
Status : Answered  
Chosen Option : D

Q.22 By selling an article at  $\frac{4}{10}$  of its actual selling price, Nirbhay incurs a l

If he sells it at 64% of its actual selling price, then the profit percentag

- Ans ☒ A. 12.7%  
☒ B. 15.7%  
☒ C. 13.6%  
☒ D. 13.5%

Question ID : 441009914975  
Option 1 ID : 4410093614153  
Option 2 ID : 4410093614152  
Option 3 ID : 4410093614151  
Option 4 ID : 4410093614154  
Status : Answered  
Chosen Option : C

Q.23 The number 292263 is divisible by:

- Ans ☒ A. 47  
☒ B. 21  
☒ C. 37  
☒ D. 48

Question ID : 441009911396  
Option 1 ID : 4410093599838  
Option 2 ID : 4410093599836  
Option 3 ID : 4410093599835  
Option 4 ID : 4410093599837  
Status : Answered  
Chosen Option : C

Q.24 A grocer has 55 kg rice, a part of which he sells at 20% profit and the remaining at 75% profit. He gains 26% on the whole. What is the quantity of rice sold at 75% profit?

- Ans ☒ A. 9 kg  
☒ B. 3 kg  
☒ C. 5 kg  
☒ D. 6 kg

Question ID : 441009545861  
Option 1 ID : 4410092138841  
Option 2 ID : 4410092138843  
Option 3 ID : 4410092138842  
Option 4 ID : 4410092138840  
Status : Answered  
Chosen Option : D

Q.25 Two numbers are in the ratio 7 : 9. If 5 is subtracted from each, the new ratio becomes 4 : 5. What is the larger number?

- Ans ☒ A. -45  
☒ B. 35  
☒ C. -35  
☒ D. 45

Question ID : 4410091463736  
Option 1 ID : 4410095783080  
Option 2 ID : 4410095783078  
Option 3 ID : 4410095783079  
Option 4 ID : 4410095783081  
Status : Answered  
Chosen Option : A

Q.1 Seven people, B, D, E, P, S, T and W are sitting in a row, facing north.  
Only three people sit between B and E. S sits to the immediate left of E. No one sits to the right of T. Only two people sit between T and S. P sits to the immediate right of D.  
How many people sit between W and P?

- Ans ☒ A. Four
- ☒ B. Two
- ☒ C. Three
- ☒ D. One

Question ID : 441009796038  
Option 1 ID : 4410093138154  
Option 2 ID : 4410093138152  
Option 3 ID : 4410093138153  
Option 4 ID : 4410093138151  
Status : Answered  
Chosen Option : B

Q.2 Seven boxes G, H, I, J, L, M and N are kept one over the other but not necessarily in the same order. Only three boxes are kept above I. Only one box is kept between L and I. Only three boxes are kept between L and M. M is kept at some place above I. J is kept immediately below M. H is kept at one of the places above N. G is not kept immediately above or below L. Which box is kept at the lowermost position?

- Ans ☒ A. L
- ☒ B. I
- ☒ C. G
- ☒ D. N

Question ID : 4410091435085  
Option 1 ID : 4410095668872  
Option 2 ID : 4410095668874  
Option 3 ID : 4410095668875  
Option 4 ID : 4410095668873  
Status : Answered  
Chosen Option : D

Q.3 Based on the English alphabetical order, three of the following four letter-cluster pairs are alike in a certain way and thus form a group. Which letter-cluster pair DOES NOT belong to that group?  
(Note: The odd one out is not based on the number of consonants/vowels or their position in the letter-cluster.)

- Ans ☒ A. IKM - JLN
- ☒ B. TVX - UWX
- ☒ C. OQS - PRT
- ☒ D. DFH - EGI

Question ID : 441009789586  
Option 1 ID : 4410093112344  
Option 2 ID : 4410093112346  
Option 3 ID : 4410093112345  
Option 4 ID : 4410093112343  
Status : Answered  
Chosen Option : B

Q.4 Each of G, H, I, J, L, M and N has holiday on a different day of a week starting from Monday and ending on Sunday of the same week. J has holiday on Thursday. I has holiday on one of the days after M and on one of the days before L. N has holiday on one of the days after H but on one of the days before G. H has holiday on one of the days after J. How many people have holiday between N and I?

- Ans ☒ A. Two  
☒ B. Three  
☒ C. Four  
☒ D. One

Question ID : 4410091435099  
Option 1 ID : 4410095668930  
Option 2 ID : 4410095668929  
Option 3 ID : 4410095668928  
Option 4 ID : 4410095668931  
Status : Answered  
Chosen Option : B

Q.5 Refer to the following letter series and answer the question that follows. Counting to be done from left to right only.

(Left) Z Q A X P I Q U R O O A X S T P U J Y I C N (Right)

How many such vowels are there, each of which is immediately preceded by a consonant and also immediately followed by a consonant?

- Ans ☒ A. 6  
☒ B. 4  
☒ C. 7  
☒ D. 5

Question ID : 441009790824  
Option 1 ID : 4410093117296  
Option 2 ID : 4410093117297  
Option 3 ID : 4410093117298  
Option 4 ID : 4410093117295  
Status : Answered  
Chosen Option : D

Q.6 What should come in place of the question mark (?) in the given series?

63, 67, 75, 87, 103, ?

- Ans ☒ A. 134  
☒ B. 120  
☒ C. 123  
☒ D. 114

Question ID : 441009590733  
Option 1 ID : 4410092318048  
Option 2 ID : 4410092318045  
Option 3 ID : 4410092318046  
Option 4 ID : 4410092318047  
Status : Answered  
Chosen Option : C

Q.7 D is the mother of E. E is the sister of F. G is the father of X. X is the son of F. How is D related to X?

- Ans ☒ A. Mother's mother
- ☐ B. Sister
- ☐ C. Sister's daughter's daughter
- ☐ D. Daughter

Question ID : 4410091432330  
Option 1 ID : 4410095657651  
Option 2 ID : 4410095657649  
Option 3 ID : 4410095657652  
Option 4 ID : 4410095657650  
Status : Answered  
Chosen Option : A

Q.8 In a certain code language, 'elk visit moon' is coded as 'ad cj su' and 'moon bonus data' is coded as 'bs ad ye'. How is 'moon' coded in the given language? (All codes are two-letter codes.)

- Ans ☐ A. bs
- ☐ B. su
- ☒ C. ad
- ☐ D. cj

Question ID : 4410091411309  
Option 1 ID : 4410095574264  
Option 2 ID : 4410095574263  
Option 3 ID : 4410095574261  
Option 4 ID : 4410095574262  
Status : Answered  
Chosen Option : C

Q.9 Seven boxes I, J, K, Q, R, S and T are kept one over the other but not necessarily in the same order. Only three boxes are kept below I. Only one box is kept between J and I. Only three boxes are kept between J and T, where T is kept at some place above J. R is kept immediately below T. Q is kept at one of the places above K. S is not kept immediately above or below J. How many boxes are kept between S and J?

- Ans ☒ A. Four
- ☐ B. One
- ☐ C. Three
- ☐ D. Two

Question ID : 441009819322  
Option 1 ID : 4410093231411  
Option 2 ID : 4410093231414  
Option 3 ID : 4410093231412  
Option 4 ID : 4410093231413  
Status : Answered  
Chosen Option : A

Q.10 Select the pair which follows the same pattern as that followed by the two pairs given below. Both pairs follow the same pattern.

QMM : SJK  
DQQ : FNO

- Ans ☒ A. MNH : OKE  
☒ B. RML : TJI  
☒ C. PJV : RGT  
☒ D. IJK : KFI

Question ID : 441009788505  
Option 1 ID : 4410093108020  
Option 2 ID : 4410093108022  
Option 3 ID : 4410093108019  
Option 4 ID : 4410093108021  
Status : Answered  
Chosen Option : C

Q.11 Based on the English alphabetical order, three of the following four letter-clusters are alike in a certain way and thus form a group. Which letter-cluster DOES NOT belong to that group?  
(Note: The odd one out is not based on the number of consonants/vowels or their position in the letter-cluster.)

- Ans ☒ A. PUN  
☒ B. HMF  
☒ C. NSL  
☒ D. RWO

Question ID : 441009782879  
Option 1 ID : 4410093085522  
Option 2 ID : 4410093085520  
Option 3 ID : 4410093085519  
Option 4 ID : 4410093085521  
Status : Answered  
Chosen Option : D

Q.12 In a certain code language, 'HAST' is coded as '3586' and 'DAHS' is coded as '6357'.  
What is the code for 'D' in the given code language?

- Ans ☒ A. 3  
☒ B. 6  
☒ C. 7  
☒ D. 5

Question ID : 441009797140  
Option 1 ID : 4410093142560  
Option 2 ID : 4410093142559  
Option 3 ID : 4410093142562  
Option 4 ID : 4410093142561  
Status : Answered  
Chosen Option : C

Q.13 What will come in place of the question mark (?) in the following equation, if '+' and '-' are interchanged and 'x' and '÷' are interchanged?  
 $13 \div 15 \times 3 + 9 - 72 = ?$

- Ans ☒ A. 126  
☒ B. 128  
☒ C. 124  
☒ D. 129

Question ID : 441009555031  
Option 1 ID : 4410092175440  
Option 2 ID : 4410092175438  
Option 3 ID : 4410092175439  
Option 4 ID : 4410092175441  
Status : Answered  
Chosen Option : B

Q.14 What should come in place of the question mark (?) in the given series based on the English alphabetical order?

UYO SVP QSQ ? MMS

- Ans ☒ A. OIN  
☒ B. HUY  
☒ C. OPR  
☒ D. OKU

Question ID : 4410091432433  
Option 1 ID : 4410095658103  
Option 2 ID : 4410095658104  
Option 3 ID : 4410095658101  
Option 4 ID : 4410095658102  
Status : Answered  
Chosen Option : C

Q.15 Each letter in the word ACIFORM is changed to the letter immediately following it in the English alphabetical order, and then all the letters thus obtained are arranged in the English alphabetical order. Which of the following letters will be fourth from the right in the new group of letters thus formed?

- Ans ☒ A. D  
☒ B. N  
☒ C. J  
☒ D. G

Question ID : 441009796549  
Option 1 ID : 4410093140195  
Option 2 ID : 4410093140198  
Option 3 ID : 4410093140197  
Option 4 ID : 4410093140196  
Status : Answered  
Chosen Option : C



Q.16 Refer to the following number series and answer the question that follows. Counting to be done from left to right only. (All numbers are single-digit numbers.)

(Left) 2 7 4 1 6 5 3 9 2 8 7 4 6 3 1 5 9 8 4 2 7 3 6 5 1 8 4 (Right)

How many such odd digits are there which are immediately preceded by an even digit and also immediately followed by an odd digit?

- Ans ☒ A. More than three
- ☐ B. Three
- ☐ C. One
- ☐ D. Two

Question ID : 441009796892

Option 1 ID : 4410093141567

Option 2 ID : 4410093141570

Option 3 ID : 4410093141568

Option 4 ID : 4410093141569

Status : Answered

Chosen Option : A

Q.17 Select the pair which follows the same pattern as that followed by the two pairs given below. Both pairs follow the same pattern.

GPI : IMK  
NQJ : PNL

- Ans ☐ A. SRL : UOM
- ☒ B. CZS : EWU
- ☐ C. KKE : MHF
- ☐ D. AVU : CRW

Question ID : 441009788503

Option 1 ID : 4410093108011

Option 2 ID : 4410093108014

Option 3 ID : 4410093108013

Option 4 ID : 4410093108012

Status : Answered

Chosen Option : B

Q.18 Select the pair which follows the same pattern as that followed by the two set of pairs given below. Both pairs follow the same pattern.  
TGX : WEZ  
HDS : KBU

- Ans ☐ A. MCN : PAO
- ☒ B. GGV : JEX
- ☐ C. ONY : RLZ
- ☐ D. RFT : UCV

Question ID : 4410091435232

Option 1 ID : 4410095669463

Option 2 ID : 4410095669460

Option 3 ID : 4410095669461

Option 4 ID : 4410095669462

Status : Answered

Chosen Option : B

Q.19 If 1 is added to each odd digit and 2 is subtracted from each even digit in the number 8746135, then which of the following digits will be second from the left in the new number thus formed?

- Ans ☒ A. 2  
☒ B. 6  
☒ C. 4  
☒ D. 8

Question ID : 441009552908  
Option 1 ID : 4410092166948  
Option 2 ID : 4410092166949  
Option 3 ID : 4410092166947  
Option 4 ID : 4410092166946  
Status : Answered  
Chosen Option : D

Q.20 Seven boxes G, H, I, J, L, M and N are kept one over the other but not necessarily in the same order. Only two boxes are kept between L and N. Only G is kept above M. No box is kept below N. I is kept at some place below H but at some place above J. Which box is kept third above J?

- Ans ☒ A. N  
☒ B. G  
☒ C. L  
☒ D. H

Question ID : 4410091435072  
Option 1 ID : 4410095668823  
Option 2 ID : 4410095668820  
Option 3 ID : 4410095668822  
Option 4 ID : 4410095668821  
Status : Answered  
Chosen Option : D

Q.21 Seven friends G, H, I, J, L, M and N are sitting around a circular table, facing the centre of the table. I sits second to the left of J. Only two people sit between J and M when counted from the left of M. L sits third to the left of H. I sits to the immediate right of H. G is not an immediate neighbour of L. Who sits third to the right of N?

- Ans ☒ A. M  
☒ B. I  
☒ C. G  
☒ D. L

Question ID : 4410091433866  
Option 1 ID : 4410095663997  
Option 2 ID : 4410095663996  
Option 3 ID : 4410095663998  
Option 4 ID : 4410095663995  
Status : Answered  
Chosen Option : B

Q.22 What should come in place of the question mark (?) in the given series?

117 238 361 486 ? 742

- Ans ☒ A. 613
- ☒ B. 654
- ☒ C. 666
- ☒ D. 675

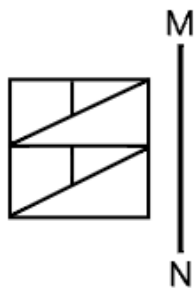
Question ID : 4410091432455  
Option 1 ID : 4410095658200  
Option 2 ID : 4410095658197  
Option 3 ID : 4410095658199  
Option 4 ID : 4410095658198  
Status : Answered  
Chosen Option : A

Q.23 Six friends D, E, F, G, X and Y are sitting in a straight line, facing north. Only three people sit to the right of D. Only X sits to the right of E. F sits at some place to the left of Y but at some place to the right of G. How many people sit between G and Y?

- Ans ☒ A. Four
- ☒ B. Three
- ☒ C. One
- ☒ D. Two

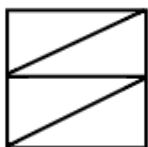
Question ID : 4410091432242  
Option 1 ID : 4410095657305  
Option 2 ID : 4410095657304  
Option 3 ID : 4410095657302  
Option 4 ID : 4410095657303  
Status : Answered  
Chosen Option : D

Q.24 Select the correct mirror image of the given figure when the mirror is placed at MN as shown below.

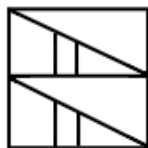


Ans

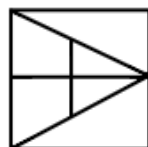
☐ A.



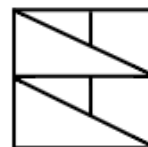
☐ B.



☐ C.



☒ D.



Question ID : 4410091425234

Option 1 ID : 4410095649508

Option 2 ID : 4410095649511

Option 3 ID : 4410095649510

Option 4 ID : 4410095649509

Status : Answered

Chosen Option : D

Q.25 What should come in place of the question mark (?) in the given series based on the English alphabetical order?

DVP GTO JRN ? PNL

Ans ☐ A. NOM

☐ B. MPL

☐ C. NOL

☒ D. MPM

Question ID : 4410091432415

Option 1 ID : 4410095658008

Option 2 ID : 4410095658005

Option 3 ID : 4410095658007

Option 4 ID : 4410095658006

Status : Answered

Chosen Option : D

Q.1 Which of the following is an example of a compound?

- Ans ☒ A. Hydrogen gas (H<sub>2</sub>)
- ☒ B. Iron (Fe)
- ☒ C. Oxygen gas (O<sub>2</sub>)
- ☒ D. Carbon dioxide (CO<sub>2</sub>)

Question ID : 4410091515656  
Option 1 ID : 4410095986028  
Option 2 ID : 4410095986026  
Option 3 ID : 4410095986025  
Option 4 ID : 4410095986027  
Status : Answered  
Chosen Option : D

Q.2 Which of the following is NOT typically a “folk music” style (in the Indian context)?

- Ans ☒ A. Birha
- ☒ B. Dhrupad
- ☒ C. Ankiya Na
- ☒ D. Baul

Question ID : 4410091515347  
Option 1 ID : 4410095984793  
Option 2 ID : 4410095984795  
Option 3 ID : 4410095984796  
Option 4 ID : 4410095984794  
Status : Answered  
Chosen Option : C

Q.3 Which of the following courts in India handles serious criminal cases like murder at the district level?

- Ans ☒ A. Family Court
- ☒ B. Sessions Court
- ☒ C. Small Causes Court
- ☒ D. Panchayat Court

Question ID : 4410091509445  
Option 1 ID : 4410095962442  
Option 2 ID : 4410095962441  
Option 3 ID : 4410095962440  
Option 4 ID : 4410095962443  
Status : Answered  
Chosen Option : B

Q.4 Which among the following are at the second trophic level of the food chain?

- Ans ☒ A. Autotrophs
- ☒ B. Herbivores
- ☒ C. Omnivores
- ☒ D. Carnivores

Question ID : 441009624205  
Option 1 ID : 4410092450955  
Option 2 ID : 4410092450952  
Option 3 ID : 4410092450954  
Option 4 ID : 4410092450953  
Status : Answered  
Chosen Option : B

Q.5 Which of following nationalist leaders worked for education through the Servants of India Society?

- Ans ☒ A. Gopal Krishna Gokhale
- ☒ B. Bipin Chandra Pal
- ☒ C. Lala Lajpat Rai
- ☒ D. Bal Gangadhar Tilak

Question ID : 4410091493302  
Option 1 ID : 4410095898870  
Option 2 ID : 4410095898871  
Option 3 ID : 4410095898868  
Option 4 ID : 4410095898869  
Status : Answered  
Chosen Option : A

Q.6 What official post, meaning 'Master of Ceremonies', was Alauddin Khalji appointed to initially, under Jalaluddin Khalji?

- Ans ☒ A. Arizi-i-Mumalik
- ☒ B. Wazir-i-Mumalik
- ☒ C. Amir-i-Tuzuk
- ☒ D. Sadr-us-Sudur

Question ID : 4410091514791  
Option 1 ID : 4410095982595  
Option 2 ID : 4410095982592  
Option 3 ID : 4410095982594  
Option 4 ID : 4410095982593  
Status : Answered  
Chosen Option : C

Q.7 Which of the following states is the place of origin of the classical dance form Sattriya?

- Ans ☒ A. Kerala
- ☒ B. Odisha
- ☒ C. Manipur
- ☒ D. Assam

Question ID : 4410091512804  
Option 1 ID : 4410095975250  
Option 2 ID : 4410095975253  
Option 3 ID : 4410095975251  
Option 4 ID : 4410095975252  
Status : Answered  
Chosen Option : D

Q.8 Which of the following natural resources is often referred to as 'liquid gold' due to its high value and versatile uses?

- Ans ☒ A. Water
- ☒ B. Liquid nitrogen
- ☒ C. Alcohol
- ☒ D. Petroleum

Question ID : 4410091502786  
Option 1 ID : 4410095935436  
Option 2 ID : 4410095935439  
Option 3 ID : 4410095935438  
Option 4 ID : 4410095935437  
Status : Answered  
Chosen Option : D

Q.9 Which of the following is the correct formula for total credit creation by banks in India?

- Ans ☒ A. Total Credit = Cash Reserve Ratio × Loan Amount
- ☒ B. Total Credit = Initial Deposit – Cash Reserve Ratio
- ☒ C. Total Credit = Loan Amount – Initial Deposit
- ☒ D. Total Credit = Initial Deposit × (1 / Cash Reserve Ratio)

Question ID : 4410091518510  
Option 1 ID : 4410095997283  
Option 2 ID : 4410095997285  
Option 3 ID : 4410095997282  
Option 4 ID : 4410095997284  
Status : Answered  
Chosen Option : B

Q.10 Which of the following bodies publishes the 'SDG India Index' to track India's progress towards the Sustainable Development Goals (SDGs)?

- Ans ☒ A. Election Commission of India
- ☒ B. Ministry of Environment, Forest and Climate Change
- ☒ C. Central Pollution Control Board
- ☒ D. NITI Aayog

Question ID : 4410091514814  
Option 1 ID : 4410095982687  
Option 2 ID : 4410095982684  
Option 3 ID : 4410095982686  
Option 4 ID : 4410095982685  
Status : Answered  
Chosen Option : D

Q.11 The RBI earns the title 'lender of last resort' due to which of the following reasons?

- Ans ☒ A. It prints currency
- ☒ B. It lends to commercial banks when they need funds
- ☒ C. It lends to public during crises
- ☒ D. It controls inflation

Question ID : 4410091518752  
Option 1 ID : 4410095998283  
Option 2 ID : 4410095998284  
Option 3 ID : 4410095998282  
Option 4 ID : 4410095998285  
Status : Answered  
Chosen Option : B

Q.12 What is the typical annual rainfall received in the Indian Desert?

- Ans ☒ A. Between 300–400 mm
- ☒ B. Around 600 mm
- ☒ C. About 500 mm
- ☒ D. Below 150 mm

Question ID : 4410091509092  
Option 1 ID : 4410095961031  
Option 2 ID : 4410095961033  
Option 3 ID : 4410095961030  
Option 4 ID : 4410095961032  
Status : Answered  
Chosen Option : D

Q.13 Which of the following is NOT mentioned in the Preamble of the Constitution of India?

- Ans ☒ A. Political Justice  
☒ B. Economic Justice  
☒ C. Cultural Justice  
☒ D. Social Justice

Question ID : 4410091515265  
Option 1 ID : 4410095984462  
Option 2 ID : 4410095984461  
Option 3 ID : 4410095984460  
Option 4 ID : 4410095984463  
Status : Answered  
Chosen Option : C

Q.14 The 13th Amendment Act of 1962, of the Indian Constitution was enacted to grant special provisions to which specific state?

- Ans ☒ A. Nagaland  
☒ B. Arunachal Pradesh  
☒ C. Goa  
☒ D. Assam

Question ID : 4410091515198  
Option 1 ID : 4410095984195  
Option 2 ID : 4410095984192  
Option 3 ID : 4410095984193  
Option 4 ID : 4410095984194  
Status : Answered  
Chosen Option : C

Q.15 Which of the following, if placed in an electric field, moves from a region of lower potential to that of a higher potential?

- Ans ☒ A. Alpha particle  
☒ B. Neutral atom  
☒ C. Proton  
☒ D. Electron

Question ID : 441009625269  
Option 1 ID : 4410092455208  
Option 2 ID : 4410092455210  
Option 3 ID : 4410092455209  
Option 4 ID : 4410092455211  
Status : Answered  
Chosen Option : A

Q.16 From which date was Aatmanirbhar Bharat Rojgar Yojana started?

- Ans ☒ A. 2 October 2022  
☒ B. 1 October 2018  
☒ C. 1 October 2016  
☒ D. 1 October 2020

Question ID : 441009638858  
Option 1 ID : 4410092509576  
Option 2 ID : 4410092509578  
Option 3 ID : 4410092509577  
Option 4 ID : 4410092509575  
Status : Answered  
Chosen Option : D



Q.17 Which tribal leader, born in the Ulihatu village of Jharkhand, led the Ulgulan movement, demanding tribal self-rule and the restoration of Khuntkatti land rights?

Ans ☒ A. Tantya Bhil

☒ B. Birsa Munda

☒ C. Veer Narayan Singh

☒ D. Sidhu Murmu

Question ID : 4410091516879

Option 1 ID : 4410095990911

Option 2 ID : 4410095990909

Option 3 ID : 4410095990912

Option 4 ID : 4410095990910

Status : Answered

Chosen Option : B

Q.18 Which of the following regions was the homeland of the Tamar tribal group?

Ans ☒ A. Western Ghats

☒ B. Chota-Nagpur Plateau

☒ C. Aravalli Hills

☒ D. Nilgiri Hills

Question ID : 4410091502571

Option 1 ID : 4410095934614

Option 2 ID : 4410095934615

Option 3 ID : 4410095934616

Option 4 ID : 4410095934617

Status : Answered

Chosen Option : B

Q.19 Under the RTI Act, which type of information CANNOT be disclosed even if requested by a citizen?

Ans ☒ A. Data about government welfare schemes

☒ B. Information affecting national security

☒ C. Details of public works contracts

☒ D. Status of pending files

Question ID : 4410091501885

Option 1 ID : 4410095931940

Option 2 ID : 4410095931941

Option 3 ID : 4410095931942

Option 4 ID : 4410095931943

Status : Answered

Chosen Option : B

Q.20 Which city was the target of Alauddin's first successful Turkish expedition into southern India in AD 1294?

Ans ☒ A. Devagiri

☒ B. Kara

☒ C. Awadh

☒ D. Bhilsa (Vidisa)

Question ID : 4410091514799

Option 1 ID : 4410095982631

Option 2 ID : 4410095982628

Option 3 ID : 4410095982629

Option 4 ID : 4410095982630

Status : Answered

Chosen Option : A

Q.21 Which Constitutional Amendment added “public order”, “friendly relations with foreign states”, and “incitement to an offence” as grounds for restricting freedom of speech and expression?

- Ans ☒ A. Forty-Fourth Constitutional Amendment Act, 1978
- ☒ B. Sixty-First Constitutional Amendment Act, 1989
- ☒ C. Forty-Second Constitutional Amendment Act, 1976
- ☒ D. First Constitutional Amendment Act, 1951

Question ID : 4410091517446  
Option 1 ID : 4410095993155  
Option 2 ID : 4410095993156  
Option 3 ID : 4410095993154  
Option 4 ID : 4410095993153  
Status : Answered  
Chosen Option : C

Q.22 Which Part of the Indian Constitution did Dr. BR Ambedkar describe as a “Novel Feature” for providing general directions and guidelines to the State?

- Ans ☒ A. Preamble to the Constitution
- ☒ B. Fundamental Duties
- ☒ C. Fundamental Rights
- ☒ D. Directive Principles of State Policy

Question ID : 4410091517426  
Option 1 ID : 4410095993075  
Option 2 ID : 4410095993076  
Option 3 ID : 4410095993074  
Option 4 ID : 4410095993073  
Status : Answered  
Chosen Option : D

Q.23 Which Himalayan river, one of the world’s largest river basins, originates from a glacier near Bokhar Chu in the Kailash range and is known as ‘Singi Khamban’ (Lion’s Mouth) in Tibet?

- Ans ☒ A. Satluj
- ☒ B. Brahmaputra
- ☒ C. Ganga
- ☒ D. Indus

Question ID : 4410091517515  
Option 1 ID : 4410095993428  
Option 2 ID : 4410095993427  
Option 3 ID : 4410095993426  
Option 4 ID : 4410095993425  
Status : Answered  
Chosen Option : D

Q.24 Gajendragad Fort's rocky bastions are described as a gateway to the military past of which Indian State?

- Ans ☒ A. Telangana  
☒ B. Odisha  
☒ C. Goa  
☒ D. Karnataka

Question ID : 4410091509837  
Option 1 ID : 4410095964036  
Option 2 ID : 4410095964039  
Option 3 ID : 4410095964038  
Option 4 ID : 4410095964037  
Status : Answered  
Chosen Option : A

Q.25 The technology used in the Green Revolution was:

- Ans ☒ A. not harmful for the consumers  
☒ B. free from risk  
☒ C. not free from risk  
☒ D. easily available for all the farmers

Question ID : 441009609788  
Option 1 ID : 4410092394271  
Option 2 ID : 4410092394269  
Option 3 ID : 4410092394270  
Option 4 ID : 4410092394272  
Status : Answered  
Chosen Option : A

Section : English Language and Comprehension

Q.1 Parts of a sentence are given below. The first part (1) is in the correct order, while the other parts of the sentence are jumbled up. Arrange the parts in the correct order to form a meaningful and coherent sentence.

1. The scientist carefully examined the specimen,  
P. While noting every minute detail under the microscope  
Q. And recording observations meticulously in her notebook  
R. Occasionally adjusting the lens to get a clearer view  
S. For she was fascinated by the complexity of nature

- Ans ☒ A. RQPS  
☒ B. PSRQ  
☒ C. PQRS  
☒ D. PRQS

Question ID : 4410091368350  
Option 1 ID : 4410095404842  
Option 2 ID : 4410095404841  
Option 3 ID : 4410095404839  
Option 4 ID : 4410095404840  
Status : Answered  
Chosen Option : C

Q.2 Select the most appropriate option to replace the underlined segment and rectify the given sentence.

The journalist worked negligently to finish the article on the author, who was later awarded a literary prize surprisingly for his groundbreaking novels.

- Ans ☒ A. worked unsparingly to finish, awarded a literary prize posthaste
- ☒ B. worked posthaste to finish, awarded a literary prize posthumously
- ☒ C. worked unforgivingly to finish, awarded a literary prize rather
- ☒ D. worked posthumously to finish, awarded a literary prize posthaste

Question ID : 4410091386195

Option 1 ID : 4410095475485

Option 2 ID : 4410095475486

Option 3 ID : 4410095475484

Option 4 ID : 4410095475483

Status : Answered

Chosen Option : A

Q.3 Select the most appropriate ANTONYM of the underlined word in the given sentence.

The lecturer gave an eloquent presentation that moved the audience deeply and sparked insightful discussions.

- Ans ☒ A. Fluent
- ☒ B. Inarticulate
- ☒ C. Persuasive
- ☒ D. Articulate

Question ID : 4410091361795

Option 1 ID : 4410095379230

Option 2 ID : 4410095379232

Option 3 ID : 4410095379233

Option 4 ID : 4410095379231

Status : Answered

Chosen Option : B

Q.4 Select the phrase that conveys the same meaning as the underlined segment in the given sentence.

After his friend cheated him, Rohan decided to take revenge.

- Ans ☒ A. hit the nail on the head
- ☒ B. make ends meet
- ☒ C. call it a day
- ☒ D. get even

Question ID : 4410091365475

Option 1 ID : 4410095393492

Option 2 ID : 4410095393494

Option 3 ID : 4410095393495

Option 4 ID : 4410095393493

Status : Answered

Chosen Option : D

Q.5 Select the most appropriate option to fill in the blanks.

During the retreat, participants \_\_\_\_\_ practiced breathing exercises and asanas to balance energy flow. \_\_\_\_\_, they could spend quiet time in meditation if they preferred a less physically demanding routine.

- Ans ☒ A. alternatively; Alternately  
☒ B. alternately; Alternatively  
☒ C. altruistically; Alternately  
☒ D. alternately; Altruistically

Question ID : 4410091401172  
Option 1 ID : 4410095534100  
Option 2 ID : 4410095534102  
Option 3 ID : 4410095534099  
Option 4 ID : 4410095534101  
Status : Answered  
Chosen Option : A

Q.6 Select the most appropriate proverb that can substitute the underlined segment in the given sentence.

The teacher always reminded the students that maintaining cleanliness is almost as important as being virtuous.

- Ans ☒ A. a soft answer turneth away wrath  
☒ B. a person is known by the company he keeps  
☒ C. cleanliness is next to godliness  
☒ D. health is wealth

Question ID : 4410091372833  
Option 1 ID : 4410095422768  
Option 2 ID : 4410095422769  
Option 3 ID : 4410095422766  
Option 4 ID : 4410095422767  
Status : Answered  
Chosen Option : C

Q.7 Select the INCORRECTLY spelt word.

- Ans ☒ A. embarrassment  
☒ B. harassment  
☒ C. implement  
☒ D. contentment

Question ID : 4410091386062  
Option 1 ID : 4410095474952  
Option 2 ID : 4410095474951  
Option 3 ID : 4410095474954  
Option 4 ID : 4410095474953  
Status : Answered  
Chosen Option : A

Q.8 Select the most appropriate option to fill in the blank. Select 'No article' if no article is required in the blank.

He is \_\_\_\_\_ owner of this building.

- Ans ☒ A. No article  
☒ B. a  
☒ C. the  
☒ D. an

Question ID : 4410091376149  
Option 1 ID : 4410095436159  
Option 2 ID : 4410095436157  
Option 3 ID : 4410095436156  
Option 4 ID : 4410095436158  
Status : Answered  
Chosen Option : C

Q.9 Select the most appropriate option that can substitute the underlined phrase in the given sentence.

The company offered him a chance to regain ownership of his property by paying back the money he owed.

- Ans ☒ A. for retrieval  
☒ B. for recovery  
☒ C. for restitution  
☒ D. for redemption

Question ID : 4410091379244  
Option 1 ID : 4410095448451  
Option 2 ID : 4410095448449  
Option 3 ID : 4410095448450  
Option 4 ID : 4410095448452  
Status : Answered  
Chosen Option : D

Q.10 Parts of a sentence are given below. While the first part is in the correct place, the remaining parts (labelled P, Q, R and S) are jumbled up. Arrange the parts in the correct order to form a meaningful and coherent sentence.

The rainforest is a treasure trove of biodiversity, / (P) with towering trees and dense foliage / (Q) birds of every colour singing from the branches / (R) streams winding through the undergrowth / (S) supporting countless species of plants and animals

- Ans ☒ A. RSPQ  
☒ B. PQRS  
☒ C. PRSQ  
☒ D. PSRQ

Question ID : 4410091368365  
Option 1 ID : 4410095404902  
Option 2 ID : 4410095404899  
Option 3 ID : 4410095404900  
Option 4 ID : 4410095404901  
Status : Answered  
Chosen Option : D

Q.11 Select the most appropriate option to fill in the blank.

Bring me red and \_\_\_\_\_ flowers.

- Ans ☒ A. most white  
☒ B. whitening  
☒ C. whitely  
☒ D. white

Question ID : 4410091372956  
Option 1 ID : 4410095423254  
Option 2 ID : 4410095423255  
Option 3 ID : 4410095423253  
Option 4 ID : 4410095423256  
Status : Answered  
Chosen Option : D

Q.12 Select the most appropriate option that best fits the situation in the given sentence.

Even during the heated debate, she maintained her calm and balanced attitude, not allowing anger to disturb her composure.

- Ans ☒ A. Rationality  
☒ B. Equanimity  
☒ C. Prudence  
☒ D. Serenity

Question ID : 4410091370637  
Option 1 ID : 4410095413996  
Option 2 ID : 4410095413994  
Option 3 ID : 4410095413995  
Option 4 ID : 4410095413997  
Status : Answered  
Chosen Option : D

Q.13 Parts of a sentence are given below in jumbled order. Arrange the parts in the correct order to form a meaningful sentence.

where their popularity is well recognised (O) / they are actually demure and rare in the wild living solitary (P) / while thriving in breeding centres and zoos (Q) / although giant pandas are beloved worldwide for their cutesy appearance, (R) / lives in the remote, mountainous regions of central China, (S)

- Ans ☒ A. RPSQO  
☒ B. RQPOS  
☒ C. RSQPO  
☒ D. PRSQO

Question ID : 441009433980  
Option 1 ID : 4410091695438  
Option 2 ID : 4410091695440  
Option 3 ID : 4410091695439  
Option 4 ID : 4410091695441  
Status : Answered  
Chosen Option : A

Q.14 Select the INCORRECTLY spelt word.

- Ans ☒ A. Vaccination
- ☒ B. Moustache
- ☒ C. Occurrence
- ☒ D. Mosquito

Question ID : 4410091379385  
Option 1 ID : 4410095448984  
Option 2 ID : 4410095448982  
Option 3 ID : 4410095448981  
Option 4 ID : 4410095448983  
Status : Answered  
Chosen Option : C

Q.15 Select the most appropriate option to fill in the blanks.

The teacher asked the students to \_\_\_\_\_ their hands if they were ready to \_\_\_\_\_ the exam, so she could hand out the question papers in an orderly manner.

- Ans ☒ A. raise, give
- ☒ B. raise, take
- ☒ C. arise, took
- ☒ D. rise, gave

Question ID : 4410091386408  
Option 1 ID : 4410095476332  
Option 2 ID : 4410095476334  
Option 3 ID : 4410095476333  
Option 4 ID : 4410095476331  
Status : Answered  
Chosen Option : B

Q.16 Select the most appropriate idiom that can substitute the underlined segment in the given sentence.

The new singer's debut performance was extremely successful and impressed everyone immediately.

- Ans ☒ A. was all bark and no bite
- ☒ B. all in a day's work
- ☒ C. took people by storm
- ☒ D. turned over a new leaf

Question ID : 4410091372750  
Option 1 ID : 4410095422436  
Option 2 ID : 4410095422437  
Option 3 ID : 4410095422434  
Option 4 ID : 4410095422435  
Status : Answered  
Chosen Option : C



Q.17 Select the most appropriate ANTONYM of the underlined word in the given sentence.

Wearing a helmet while riding a bike is mandatory in many cities.

- Ans ☒ A. Essential  
☒ B. Voluntary  
☒ C. Obligatory  
☒ D. Compulsory

Question ID : 4410091372700  
Option 1 ID : 4410095422234  
Option 2 ID : 4410095422236  
Option 3 ID : 4410095422235  
Option 4 ID : 4410095422237  
Status : Answered  
Chosen Option : B

Q.18 Select the most appropriate ANTONYM of the highlighted word in the given sentence.

In a community where generosity was celebrated, his constant **avarice** slowly isolated him from his peers.

- Ans ☒ A. Charity  
☒ B. Wealth  
☒ C. Misery  
☒ D. Greed

Question ID : 4410091370766  
Option 1 ID : 4410095414502  
Option 2 ID : 4410095414501  
Option 3 ID : 4410095414504  
Option 4 ID : 4410095414503  
Status : Answered  
Chosen Option : A

Q.19 Select the option that can be used as a one-word substitute for the given group of words.

One who eats human flesh

- Ans ☒ A. Cannibal  
☒ B. Vegetarian  
☒ C. Carnivore  
☒ D. Omnivore

Question ID : 4410091368588  
Option 1 ID : 4410095405782  
Option 2 ID : 4410095405783  
Option 3 ID : 4410095405784  
Option 4 ID : 4410095405785  
Status : Answered  
Chosen Option : A

Q.20 Select the most appropriate option to fill in the blanks.

He spent five years in \_\_\_\_\_ prison for a crime he didn't commit, and later visited \_\_\_\_\_ prison to speak to \_\_\_\_\_ inmates about justice and reform.

- Ans ☒ A. no article needed, the, the  
☐ B. the, the, no article needed  
☐ C. the, the, the  
☐ D. no article needed, no article needed, the

Question ID : 4410091386670  
Option 1 ID : 4410095477362  
Option 2 ID : 4410095477361  
Option 3 ID : 4410095477359  
Option 4 ID : 4410095477360  
Status : Answered  
Chosen Option : A

Comprehension:

Read the below given passage carefully and answer the questions that follow.

Over the last decade, urban transportation has experienced significant transformation. The introduction of electric vehicles, ride-sharing platforms, and advanced public transport systems has reduced congestion and air pollution in many cities. Smart traffic management, including adaptive signals and real-time navigation, improves commuting efficiency and lowers fuel consumption. Cyclists and pedestrians are increasingly prioritised through dedicated lanes and pedestrian-friendly zones, promoting healthier lifestyles and reducing environmental impact. Governments and private organisations are collaborating to expand sustainable mobility infrastructure, such as charging stations and bike-sharing networks. Despite these improvements, challenges persist, including high costs, maintenance requirements, and unequal access to modern transport options in underprivileged areas. Public awareness campaigns encourage eco-friendly commuting habits, while policymakers emphasise the importance of long-term planning to achieve a balance between urban growth, environmental conservation, and efficient transportation. The shift in urban mobility reflects broader trends towards sustainability and technological integration.

SubQuestion No : 21

Q.21 Identify a suitable title for the passage.

- Ans ☐ A. The Impact of Agriculture on Cities  
☐ B. Traditional Road Systems in Rural Areas  
☐ C. The History of Horse-Drawn Carriages  
☒ D. Transforming Urban Transportation for Sustainability

Question ID : 4410091361857  
Option 1 ID : 4410095379465  
Option 2 ID : 4410095379463  
Option 3 ID : 4410095379464  
Option 4 ID : 4410095379462  
Status : Answered  
Chosen Option : D

Comprehension:

Read the below given passage carefully and answer the questions that follow.

Over the last decade, urban transportation has experienced significant transformation. The introduction of electric vehicles, ride-sharing platforms, and advanced public transport systems has reduced congestion and air pollution in many cities. Smart traffic management, including adaptive signals and real-time navigation, improves commuting efficiency and lowers fuel consumption. Cyclists and pedestrians are increasingly prioritised through dedicated lanes and pedestrian-friendly zones, promoting healthier lifestyles and reducing environmental impact. Governments and private organisations are collaborating to expand sustainable mobility infrastructure, such as charging stations and bike-sharing networks. Despite these improvements, challenges persist, including high costs, maintenance requirements, and unequal access to modern transport options in underprivileged areas. Public awareness campaigns encourage eco-friendly commuting habits, while policymakers emphasise the importance of long-term planning to achieve a balance between urban growth, environmental conservation, and efficient transportation. The shift in urban mobility reflects broader trends towards sustainability and technological integration.

SubQuestion No : 22

Q.22 Select the most appropriate ANTONYM of the given word in the context of the passage.

Sustainable

- Ans ☒ A. Temporary  
☒ B. Eco-friendly  
☒ C. Balanced  
☒ D. Renewable

Question ID : 4410091361858  
Option 1 ID : 4410095379468  
Option 2 ID : 4410095379467  
Option 3 ID : 4410095379469  
Option 4 ID : 4410095379466  
Status : Answered  
Chosen Option : A

Comprehension:

Read the below given passage carefully and answer the questions that follow.

Over the last decade, urban transportation has experienced significant transformation. The introduction of electric vehicles, ride-sharing platforms, and advanced public transport systems has reduced congestion and air pollution in many cities. Smart traffic management, including adaptive signals and real-time navigation, improves commuting efficiency and lowers fuel consumption. Cyclists and pedestrians are increasingly prioritised through dedicated lanes and pedestrian-friendly zones, promoting healthier lifestyles and reducing environmental impact. Governments and private organisations are collaborating to expand sustainable mobility infrastructure, such as charging stations and bike-sharing networks. Despite these improvements, challenges persist, including high costs, maintenance requirements, and unequal access to modern transport options in underprivileged areas. Public awareness campaigns encourage eco-friendly commuting habits, while policymakers emphasise the importance of long-term planning to achieve a balance between urban growth, environmental conservation, and efficient transportation. The shift in urban mobility reflects broader trends towards sustainability and technological integration.

SubQuestion No : 23

Q.23 Identify the fact given in the passage.

- Ans ☒ A. Cities have eliminated all traffic congestion completely.  
☒ B. Pedestrians and cyclists are discouraged in urban areas.  
☒ C. Electric vehicles, ride-sharing, and smart traffic systems improve urban mobility.  
☒ D. Urban transport has no impact on environmental quality.

Question ID : 4410091361860  
Option 1 ID : 4410095379475  
Option 2 ID : 4410095379476  
Option 3 ID : 4410095379474  
Option 4 ID : 4410095379477  
Status : Answered  
Chosen Option : C

Comprehension:

Read the below given passage carefully and answer the questions that follow.

Over the last decade, urban transportation has experienced significant transformation. The introduction of electric vehicles, ride-sharing platforms, and advanced public transport systems has reduced congestion and air pollution in many cities. Smart traffic management, including adaptive signals and real-time navigation, improves commuting efficiency and lowers fuel consumption. Cyclists and pedestrians are increasingly prioritised through dedicated lanes and pedestrian-friendly zones, promoting healthier lifestyles and reducing environmental impact. Governments and private organisations are collaborating to expand sustainable mobility infrastructure, such as charging stations and bike-sharing networks. Despite these improvements, challenges persist, including high costs, maintenance requirements, and unequal access to modern transport options in underprivileged areas. Public awareness campaigns encourage eco-friendly commuting habits, while policymakers emphasise the importance of long-term planning to achieve a balance between urban growth, environmental conservation, and efficient transportation. The shift in urban mobility reflects broader trends towards sustainability and technological integration.

SubQuestion No : 24

Q.24 Identify the main theme of the passage.

- Ans ☒ A. Historical evolution of horse-drawn transport
- ☒ B. Changing agricultural practices and modes affecting rural roads
- ☒ C. The suitability of the decline of public transport in modern cities
- ☒ D. The transformation of urban mobility towards sustainability and technological integration

Question ID : 4410091361861  
Option 1 ID : 4410095379480  
Option 2 ID : 4410095379479  
Option 3 ID : 4410095379481  
Option 4 ID : 4410095379478  
Status : Answered  
Chosen Option : D

Comprehension:

Read the below given passage carefully and answer the questions that follow.

Over the last decade, urban transportation has experienced significant transformation. The introduction of electric vehicles, ride-sharing platforms, and advanced public transport systems has reduced congestion and air pollution in many cities. Smart traffic management, including adaptive signals and real-time navigation, improves commuting efficiency and lowers fuel consumption. Cyclists and pedestrians are increasingly prioritised through dedicated lanes and pedestrian-friendly zones, promoting healthier lifestyles and reducing environmental impact. Governments and private organisations are collaborating to expand sustainable mobility infrastructure, such as charging stations and bike-sharing networks. Despite these improvements, challenges persist, including high costs, maintenance requirements, and unequal access to modern transport options in underprivileged areas. Public awareness campaigns encourage eco-friendly commuting habits, while policymakers emphasise the importance of long-term planning to achieve a balance between urban growth, environmental conservation, and efficient transportation. The shift in urban mobility reflects broader trends towards sustainability and technological integration.

SubQuestion No : 25

Q.25 What is the passage based on?

- Ans ☒ A. Advances and challenges in modern urban transportation systems
- ☒ B. Traditional vehicle manufacturing in the nineteenth century
- ☒ C. Natural disasters affecting urban roads
- ☒ D. The history of rural transport infrastructure

Question ID : 4410091361862  
Option 1 ID : 4410095379483  
Option 2 ID : 4410095379484  
Option 3 ID : 4410095379485  
Option 4 ID : 4410095379482  
Status : Answered  
Chosen Option : A

Q.1 What is the full form of Wi-Fi that provides network connection for devices?

- Ans ☒ A. Windows File
- ☒ B. Wireless Fidelity
- ☒ C. Wireless First
- ☒ D. Wide Frequency

Question ID : 441009398343  
Option 1 ID : 4410091558830  
Option 2 ID : 4410091558833  
Option 3 ID : 4410091558832  
Option 4 ID : 4410091558831  
Status : Answered  
Chosen Option : B

Q.2 Which keyboard shortcut opens the "Save As" dialog box in MS Excel?

- Ans ☒ A. F12
- ☒ B. Alt+F2
- ☒ C. Ctrl+S
- ☒ D. Ctrl+Shift+S

Question ID : 4410091022994  
Option 1 ID : 4410094043500  
Option 2 ID : 4410094043502  
Option 3 ID : 4410094043499  
Option 4 ID : 4410094043501  
Status : Answered  
Chosen Option : A

Q.3 What is the difference between pressing Delete and pressing Backspace when editing cell content?

- Ans ☒ A. Both do the same thing
- ☒ B. Delete clears content, Backspace removes characters one by one
- ☒ C. Delete removes the entire cell, Backspace removes content
- ☒ D. Delete moves content left, Backspace moves content right

Question ID : 4410091028898  
Option 1 ID : 4410094067248  
Option 2 ID : 4410094067247  
Option 3 ID : 4410094067246  
Option 4 ID : 4410094067249  
Status : Answered  
Chosen Option : B

Q.4 What is the full form of ALU used to perform arithmetic and logic operations in a computer?

- Ans ☒ A. Artificial Logic Unit
- ☒ B. Arithmetic Logic Unit
- ☒ C. Application Logic Unit
- ☒ D. Algorithmic Logic Unit

Question ID : 441009400119  
Option 1 ID : 4410091565935  
Option 2 ID : 4410091565934  
Option 3 ID : 4410091565936  
Option 4 ID : 4410091565937  
Status : Answered  
Chosen Option : B

Q.5 What type of memory is used to store permanent data and instructions?

- Ans ☒ A. ROM
- ☒ B. Virtual Memory
- ☒ C. Cache
- ☒ D. RAM

Question ID : 441009749346  
Option 1 ID : 4410092951216  
Option 2 ID : 4410092951217  
Option 3 ID : 4410092951215  
Option 4 ID : 4410092951214  
Status : Answered  
Chosen Option : A

Q.6 What is the primary function of system software in a computer?

- Ans ☒ A. To manage hardware and provide a platform for application software
- ☒ B. To perform specific tasks like word processing and web browsing
- ☒ C. To develop new software applications
- ☒ D. To create and edit multimedia content

Question ID : 44100960814  
Option 1 ID : 441009242218  
Option 2 ID : 441009242217  
Option 3 ID : 441009242220  
Option 4 ID : 441009242219  
Status : Answered  
Chosen Option : A

Q.7 Which statements are true about the functionality of popular search engines?

- (i) Search engines use algorithms to rank search results by relevance.
- (ii) Most popular search engines offer features like news, maps and video search.
- (iii) Search engines provide results only from websites you have previously visited.

- Ans ☒ A. (i), (ii) and (iii)
- ☒ B. (ii) and (iii) only
- ☒ C. (i) and (ii) only
- ☒ D. (i) and (iii) only

Question ID : 441009878045  
Option 1 ID : 4410093465825  
Option 2 ID : 4410093465823  
Option 3 ID : 4410093465822  
Option 4 ID : 4410093465824  
Status : Answered  
Chosen Option : C

Q.8 In the formula =SUM(A1:A10), what does the colon (:) represent?

- Ans ☒ A. Range operator
- ☒ B. Comparison operator
- ☒ C. Concatenation operator
- ☒ D. Division operator

Question ID : 4410091023069  
Option 1 ID : 4410094043796  
Option 2 ID : 4410094043798  
Option 3 ID : 4410094043797  
Option 4 ID : 4410094043795  
Status : Answered  
Chosen Option : A

Q.9 Select the statement that is NOT true regarding the functional capabilities of the 'Undo' feature in MS Word.

- Ans ☒ A. The Undo feature can reverse changes after the document is closed and reopened.
- ☒ B. The Undo feature can reverse multiple actions in the order they were performed.
- ☒ C. The Undo feature can reverse the most recent action performed in a document.
- ☒ D. The Undo feature can be activated using the keyboard shortcut Ctrl + Z.

Question ID : 441009883137  
Option 1 ID : 4410093486529  
Option 2 ID : 4410093486527  
Option 3 ID : 4410093486526  
Option 4 ID : 4410093486528  
Status : Answered  
Chosen Option : A

Q.10 Which of the following statements is true about RAM?

- Ans ☒ A. RAM retains data even after the computer is turned off.
- ☒ B. RAM temporarily stores data and instructions currently in use.
- ☒ C. RAM is used only for storing graphics.
- ☒ D. RAM is a type of permanent memory.

Question ID : 441009675148  
Option 1 ID : 4410092654773  
Option 2 ID : 4410092654775  
Option 3 ID : 4410092654774  
Option 4 ID : 4410092654776  
Status : Answered  
Chosen Option : B

Q.11 What does the abbreviation ASCII stand for?

- Ans ☒ A. Advanced System for Coded Internet Integration
- ☒ B. American Standard Code for Information Interchange
- ☒ C. American Standard Code for International Interactions
- ☒ D. Automated System for Computing and Internet Interface

Question ID : 441009671852  
Option 1 ID : 4410092641505  
Option 2 ID : 4410092641504  
Option 3 ID : 4410092641502  
Option 4 ID : 4410092641503  
Status : Answered  
Chosen Option : B

Q.12 What effect does changing a cell reference from "C5" to "\$C5" have, when a formula is copied to another cell?

Ans ☒ A. Both the column and row references remain relative

☒ B. Both the column and row references become absolute

☒ C. The column reference is absolute, but the row is relative

☒ D. The row reference is absolute, but the column is relative

Question ID : 441009398660

Option 1 ID : 4410091560101

Option 2 ID : 4410091560098

Option 3 ID : 4410091560099

Option 4 ID : 4410091560100

Status : Answered

Chosen Option : C

Q.13 When a router operating within a Wide Area Network (WAN) is required to connect two dissimilar networks such as those using different communication protocols, what crucial task must it perform to enable seamless data exchange?

Ans ☒ A. Protocol conversion

☒ B. Port security

☒ C. IP-MAC translation

☒ D. VLAN tagging

Question ID : 441009927078

Option 1 ID : 4410093662384

Option 2 ID : 4410093662382

Option 3 ID : 4410093662383

Option 4 ID : 4410093662385

Status : Answered

Chosen Option : A

Q.14 Which alignment option creates even margins on both left and right sides?

Ans ☒ A. Center align

☒ B. Left align

☒ C. Right align

☒ D. Justify

Question ID : 4410091033880

Option 1 ID : 4410094087172

Option 2 ID : 4410094087170

Option 3 ID : 4410094087171

Option 4 ID : 4410094087173

Status : Answered

Chosen Option : A



Q.15 Which method permanently removes text from its original location when transferring it to another place?

- Ans ☒ A. Copy and Paste
- ☒ B. Cut and Paste
- ☒ C. Drop
- ☒ D. Drag

Question ID : 4410091029423  
Option 1 ID : 4410094069366  
Option 2 ID : 4410094069367  
Option 3 ID : 4410094069369  
Option 4 ID : 4410094069368  
Status : Answered  
Chosen Option : B

Q.16 What is the default page orientation when you create a new document in MS-Word ?

- Ans ☒ A. Square
- ☒ B. Portrait
- ☒ C. Landscape
- ☒ D. Custom

Question ID : 4410091029461  
Option 1 ID : 4410094069540  
Option 2 ID : 4410094069539  
Option 3 ID : 4410094069538  
Option 4 ID : 4410094069541  
Status : Answered  
Chosen Option : B

Q.17 In Microsoft Windows 10, which type of interface, such as Cortana, is best suited for users with mobility impairments who are unable to use a keyboard or mouse?

- Ans ☒ A. Voice-based Interface
- ☒ B. Command Line Interface
- ☒ C. Task Manager Interface
- ☒ D. File Management Interface

Question ID : 441009748756  
Option 1 ID : 4410092948842  
Option 2 ID : 4410092948840  
Option 3 ID : 4410092948843  
Option 4 ID : 4410092948841  
Status : Answered  
Chosen Option : A

Q.18 Which statements are True or False regarding enhancing text presentation in Microsoft PowerPoint 2016?

- (i) Text direction can only be set to horizontal or vertical stacking.
- (ii) Text effects such as shadow or reflection applied to text convert it to a graphic object.

- Ans
- ☒ A. (i) True, (ii) False
  - ☒ B. (i) False, (ii) True
  - ☒ C. (i) False, (ii) False
  - ☒ D. (i) True, (ii) True

Question ID : 441009877984  
Option 1 ID : 4410093465580  
Option 2 ID : 4410093465581  
Option 3 ID : 4410093465582  
Option 4 ID : 4410093465579  
Status : Answered  
Chosen Option : C

Q.19 When saving a PowerPoint file with macros, which file format should one choose?

- Ans
- ☒ A. .potx
  - ☒ B. .pptm
  - ☒ C. .pdf
  - ☒ D. .pptx

Question ID : 4410091001919  
Option 1 ID : 4410093959385  
Option 2 ID : 4410093959383  
Option 3 ID : 4410093959384  
Option 4 ID : 4410093959382  
Status : Answered  
Chosen Option : B

Q.20 What is the default file extension of latest PowerPoint presentation?

- Ans
- ☒ A. .xlsx
  - ☒ B. .pdf
  - ☒ C. .docx
  - ☒ D. .pptx

Question ID : 441009929973  
Option 1 ID : 4410093673841  
Option 2 ID : 4410093673843  
Option 3 ID : 4410093673840  
Option 4 ID : 4410093673842  
Status : Answered  
Chosen Option : D