

DDA MTS

Previous Year Paper
16 Dec, 2025 Shift 2



Adda247

Test Prime

ALL EXAMS, ONE SUBSCRIPTION



1,00,000+
Mock Tests



**Personalised
Report Card**



**Unlimited
Re-Attempt**



600+
Exam Covered



25,000+ Previous
Year Papers



500%
Refund



ATTEMPT FREE MOCK NOW



DELHI DEVELOPMENT AUTHORITY
RECRUITMENT CELL

VIKAS SADAN, I.N.A, NEW DELHI-110023.

Recruitment Advertisement No. 09/2025/Rectt. Cell/Pers./DDA
DIRECT RECRUITMENT IN VARIOUS CATEGORIES

Participant ID	
Participant Name	
Test Center Name	
Test Date	16/12/2025
Test Time	1:00 PM - 3:00 PM
Subject	MTS

Section : Numerical and Mathematical Ability

Q.1 A wooden cuboid of dimensions 60 cm × 45 cm × 30 cm is cut into smaller cubes, each of side 5 cm. Then, the outer surfaces of all the cubes are painted. What is the total area painted?

- Ans
- ☒ A. 92,200 cm²
 - ☒ B. 97,000 cm²
 - ☒ C. 97,200 cm²
 - ☒ D. 92,700 cm²

Question ID : 4410091462361

Option 1 ID : 4410095777557

Option 2 ID : 4410095777556

Option 3 ID : 4410095777554

Option 4 ID : 4410095777555

Status : Answered

Chosen Option : C

Q.2 A cyclist covers 72 km in 2 hours. He returns the same distance at a speed of 18 km/hr. What is his average speed for the entire journey?

- Ans
- ☒ A. 28 km/hr
 - ☒ B. 24 km/hr
 - ☒ C. 30 km/hr
 - ☒ D. 32 km/hr

Question ID :	4410091464225
Option 1 ID :	4410095785128
Option 2 ID :	4410095785127
Option 3 ID :	4410095785126
Option 4 ID :	4410095785129
Status :	Answered
Chosen Option :	A

Q.3 The difference between a compound interest, compounded annually, and a simple interest for 3 years at the rate of 20% per annum, is ₹608. What is the principal lent?

- Ans
- ☒ A. ₹4770
 - ☒ B. ₹4760
 - ☒ C. ₹4750
 - ☒ D. ₹4740

Question ID :	4410091413408
Option 1 ID :	4410095582646
Option 2 ID :	4410095582645
Option 3 ID :	4410095582644
Option 4 ID :	4410095582643
Status :	Answered
Chosen Option :	C

Q.4 A train 250 metres long passes a pole in 25 seconds. How long will it take to pass a platform 650 metres long?

- Ans
- ☒ A. 85 seconds
 - ☒ B. 66 seconds
 - ☒ C. 74 seconds
 - ☒ D. 90 seconds

Question ID :	4410091413844
Option 1 ID :	4410095584400
Option 2 ID :	4410095584402
Option 3 ID :	4410095584401
Option 4 ID :	4410095584399
Status :	Answered
Chosen Option :	D

Q.5	The largest four-digit number which when divided by 14, 9 and 8 leaves remainder 2 in each case is:
Ans	<input checked="" type="checkbox"/> A. 9234
	<input checked="" type="checkbox"/> B. 9584
	<input checked="" type="checkbox"/> C. 9578
	<input checked="" type="checkbox"/> D. 9964

Question ID :	441009525561
Option 1 ID :	4410092057664
Option 2 ID :	4410092057665
Option 3 ID :	4410092057663
Option 4 ID :	4410092057666
Status :	Answered
Chosen Option :	B

Q.6	Goutam has a cube whose each side is 80 cm long. If he wants to cut identical smaller cubes out of it, each having 5 cm as the length of each side, then how many such smaller cubes will he get?
Ans	<input checked="" type="checkbox"/> A. 256
	<input checked="" type="checkbox"/> B. 4096
	<input checked="" type="checkbox"/> C. 400
	<input checked="" type="checkbox"/> D. 1280

Question ID :	441009601211
Option 1 ID :	4410092359961
Option 2 ID :	4410092359964
Option 3 ID :	4410092359962
Option 4 ID :	4410092359963
Status :	Answered
Chosen Option :	B

Q.7	A and B started a partnership business investing some amount in the ratio of 9 : 8. C joined then after six months with an amount equal to that of B. In what proportion should the profit at the end of one year be distributed among A, B and C?
Ans	<input checked="" type="checkbox"/> A. 7 : 11 : 9
	<input checked="" type="checkbox"/> B. 8 : 11 : 5
	<input checked="" type="checkbox"/> C. 9 : 8 : 4
	<input checked="" type="checkbox"/> D. 4 : 13 : 8

Question ID :	441009547874
Option 1 ID :	4410092146894
Option 2 ID :	4410092146895
Option 3 ID :	4410092146892
Option 4 ID :	4410092146893
Status :	Answered
Chosen Option :	C

Q.8 A shopkeeper sells an item for ₹855.4 after giving two successive discounts of 90% and 75% on its marked price. Had he not given any discount, he would have earned a profit of 40%. What is the cost price (in ₹) of the item?

- Ans
- ☒ A. 24,427
 - ☒ B. 24,400
 - ☒ C. 24,471
 - ☒ D. 24,440

Question ID :	441009915839
Option 1 ID :	4410093617609
Option 2 ID :	4410093617610
Option 3 ID :	4410093617608
Option 4 ID :	4410093617607
Status :	Not Answered
Chosen Option :	--

Q.9 A shopkeeper buys a shirt for ₹600 but is forced to sell it for ₹540 due to a clearance sale. What is his percentage loss?

- Ans
- ☒ A. 10%
 - ☒ B. 9%
 - ☒ C. 8%
 - ☒ D. 12%

Question ID :	4410091464009
Option 1 ID :	4410095784196
Option 2 ID :	4410095784195
Option 3 ID :	4410095784194
Option 4 ID :	4410095784197
Status :	Answered
Chosen Option :	A

Q.1 Pipe A can fill a tank in 20 minutes, Pipe B in 30 minutes, and Pipe C can empty it in 40 minutes. All three pipes are opened together. After 10 minutes, Pipe C is closed. How much total time will it take to fill the tank?

- Ans
- ☒ A. 12 minutes
 - ☒ B. 25 minutes
 - ☒ C. 15 minutes
 - ☒ D. 30 minutes

Question ID :	4410091444304
Option 1 ID :	4410095705843
Option 2 ID :	4410095705842
Option 3 ID :	4410095705841
Option 4 ID :	4410095705844
Status :	Answered
Chosen Option :	C

Q.1	If the interest on a sum of ₹y at 10% per annum compounded annually for 2 years is
1	₹966, then the total amount payable at the end of the two-year period will be _____.
Ans	<input checked="" type="checkbox"/> A. ₹5,581
	<input checked="" type="checkbox"/> B. ₹5,566
	<input checked="" type="checkbox"/> C. ₹5,125
	<input checked="" type="checkbox"/> D. ₹5,682

Question ID :	441009897868
Option 1 ID :	4410093545544
Option 2 ID :	4410093545542
Option 3 ID :	4410093545545
Option 4 ID :	4410093545543
Status :	Answered
Chosen Option :	B

Q.1	In an election between two candidates 80% of the registered voters cast their vote and
2	10% of the votes polled were found invalid. Winning candidate got 51% of the valid votes and won the election by a margin of 324 votes. How many voters were registered?
Ans	<input checked="" type="checkbox"/> A. 25,003
	<input checked="" type="checkbox"/> B. 22,499
	<input checked="" type="checkbox"/> C. 22,498
	<input checked="" type="checkbox"/> D. 22,500

Question ID :	441009853303
Option 1 ID :	4410093366185
Option 2 ID :	4410093366187
Option 3 ID :	4410093366186
Option 4 ID :	4410093366184
Status :	Answered
Chosen Option :	D

Q.1	A man has invested ₹50,000 at a rate of 6% per annum simple interest for 4 years. Find
3	the amount (in ₹) that he will receive after 4 years.
Ans	<input checked="" type="checkbox"/> A. 63,000
	<input checked="" type="checkbox"/> B. 12,000
	<input checked="" type="checkbox"/> C. 13,000
	<input checked="" type="checkbox"/> D. 62,000

Question ID :	441009516898
Option 1 ID :	4410092023013
Option 2 ID :	4410092023012
Option 3 ID :	4410092023014
Option 4 ID :	4410092023011
Status :	Answered
Chosen Option :	D

Q.1	Find the fourth proportional.
4	
	$6 : 8 :: 15 : x$
Ans	<input checked="" type="checkbox"/> A. 20
	<input checked="" type="checkbox"/> B. 12
	<input checked="" type="checkbox"/> C. 18
	<input checked="" type="checkbox"/> D. 10

Question ID :	4410091463687
Option 1 ID :	4410095782877
Option 2 ID :	4410095782874
Option 3 ID :	4410095782876
Option 4 ID :	4410095782875
Status :	Answered
Chosen Option :	A

Q.1	An article is sold at a profit of 47%. If the cost price is increased by ₹24 and the selling price is reduced by ₹42, then the profit would be 12.5%. What is the original cost price (in ₹) of the article?
5	
Ans	<input checked="" type="checkbox"/> A. 500
	<input checked="" type="checkbox"/> B. 100
	<input checked="" type="checkbox"/> C. 200
	<input checked="" type="checkbox"/> D. 300

Question ID :	441009916181
Option 1 ID :	4410093618976
Option 2 ID :	4410093618977
Option 3 ID :	4410093618975
Option 4 ID :	4410093618978
Status :	Answered
Chosen Option :	D

Q.1	Two taps can fill a cistern in 2 hours and 16 hours, respectively. A third tap can empty it in 2 hours. How long (in hours) will it take to fill one-fourth of the empty cistern, if all of them are opened together?
6	
Ans	<input checked="" type="checkbox"/> A. 8
	<input checked="" type="checkbox"/> B. 4
	<input checked="" type="checkbox"/> C. 16
	<input checked="" type="checkbox"/> D. 12

Question ID :	441009518301
Option 1 ID :	4410092028624
Option 2 ID :	4410092028623
Option 3 ID :	4410092028626
Option 4 ID :	4410092028625
Status :	Answered
Chosen Option :	C

Q.1
7 If $A : B = \frac{1}{2} : \frac{3}{8}$, $B : C = \frac{1}{3} : \frac{5}{9}$ and $C : D = \frac{5}{6} : \frac{3}{4}$, then the ratio

- Ans
- ☒ A. 8 : 5 : 9 : 10
 - ☒ B. 8 : 5 : 10 : 9
 - ☒ C. 8 : 6 : 10 : 7
 - ☒ D. 8 : 6 : 10 : 9

Question ID :	4410091410388
Option 1 ID :	4410095570578
Option 2 ID :	4410095570577
Option 3 ID :	4410095570576
Option 4 ID :	4410095570575
Status :	Answered
Chosen Option :	D

Q.1
8 Subtracting 52% of X from X is the same as multiplying X by:

- Ans
- ☒ A. 0.052
 - ☒ B. 0.5
 - ☒ C. 0.48
 - ☒ D. 0.52

Question ID :	441009516688
Option 1 ID :	4410092022174
Option 2 ID :	4410092022173
Option 3 ID :	4410092022171
Option 4 ID :	4410092022172
Status :	Answered
Chosen Option :	C

Q.1
9 The average runs scored by a batsman in 21 matches is 41. In the next 15 matches the batsman scored an average of 13 runs. Find his average runs (rounded off to two decimals) in all the 36 matches.

- Ans
- ☒ A. 29.33
 - ☒ B. 30.33
 - ☒ C. 31.33
 - ☒ D. 28.33

Question ID :	441009516416
Option 1 ID :	4410092021083
Option 2 ID :	4410092021085
Option 3 ID :	4410092021086
Option 4 ID :	4410092021084
Status :	Answered
Chosen Option :	A

Q.2 0 Two traffic lights at an intersection blink at regular intervals. The first blinks every 36 seconds, and the second every 48 seconds. If both blink together at 8:00 a.m., in how many seconds will they blink together again?

- Ans ☒ A. 144 seconds
- ☐ B. 14 seconds
- ☐ C. 140 seconds
- ☐ D. 12 seconds

Question ID :	4410091463907
Option 1 ID :	4410095783768
Option 2 ID :	4410095783769
Option 3 ID :	4410095783766
Option 4 ID :	4410095783767
Status :	Answered
Chosen Option :	A

Q.2 1 A car travels from City A to City B, a distance of 120 km. It covers the first 60 km at a speed of 40 km/hr and the next 60 km at 60 km/hr. What is the average speed of the car for the entire journey?

- Ans ☐ A. 50 km/hr
- ☒ B. 48 km/hr
- ☐ C. 40 km/hr
- ☐ D. 58 km/hr

Question ID :	4410091444506
Option 1 ID :	4410095706640
Option 2 ID :	4410095706639
Option 3 ID :	4410095706638
Option 4 ID :	4410095706637
Status :	Answered
Chosen Option :	B

Q.2 2 A batsman, in his 9th innings, scores 90 runs and thereby increases his average by 1. What is his average after the 9th innings?

- Ans ☐ A. 85
- ☐ B. 93
- ☐ C. 90
- ☒ D. 82

Question ID :	441009516366
Option 1 ID :	4410092020884
Option 2 ID :	4410092020886
Option 3 ID :	4410092020885
Option 4 ID :	4410092020883
Status :	Answered
Chosen Option :	D

Q.2
3

Find the value of $\frac{\sqrt{112} \times \sqrt{126} \times \sqrt{32}}{\sqrt{196} \times \sqrt{36}}$.

Ans

☒ A. 8

☐ B. 7

☐ C. 4

☐ D. 12

Question ID :	4410091430540
Option 1 ID :	4410095650302
Option 2 ID :	4410095650301
Option 3 ID :	4410095650300
Option 4 ID :	4410095650303
Status :	Answered
Chosen Option :	A

Q.2
4

By selling a fan for ₹2,337, Amit earned a profit of 14%. Find the cost price of the fan for Amit.

Ans

☒ A. ₹2,050

☐ B. ₹1,860

☐ C. ₹2,090

☐ D. ₹2,100

Question ID :	4410091430564
Option 1 ID :	4410095650409
Option 2 ID :	4410095650408
Option 3 ID :	4410095650410
Option 4 ID :	4410095650411
Status :	Answered
Chosen Option :	A

Q.2
5

A can do a piece of work in 11 days and B in 20 days. If they work on it together for 5 days, then what fraction of the work is left?

Ans

☒ A. $\frac{13}{44}$

☐ B. $\frac{9}{44}$

☐ C. $\frac{19}{44}$

☐ D. $\frac{17}{44}$

Question ID :	441009914023
Option 1 ID :	4410093610343
Option 2 ID :	4410093610345
Option 3 ID :	4410093610344
Option 4 ID :	4410093610346
Status :	Answered
Chosen Option :	A

Q.1 In the following triads, each group of letters is related to the subsequent one following a certain logic. Select from the given options, the one which follows the same logic.

DART - TDAR - RTDA
MUSE - EMUS - SEMU

- Ans ☒ A. RACK - KARC - CKRA
- ☒ B. RACK - KRAC - CKRA
- ☒ C. RACK - KARC - CRKA
- ☒ D. RACK - KRAC - CRKA

Question ID :	441009789222
Option 1 ID :	4410093110887
Option 2 ID :	4410093110889
Option 3 ID :	4410093110890
Option 4 ID :	4410093110888
Status :	Answered
Chosen Option :	B

Q.2 Mr. Zamyang starts from Point A and drives 29 km towards East. He then takes a left turn, drives 11 km, turns left and drives 47 km. He then takes a left turn and drives 27 km. He then takes a left turn, drives 12 km, turns left and drives 9 km. He takes a final right turn, drives 6 km and stops at Point P. How far (shortest distance) and towards which direction should he drive in order to reach Point A again? (All turns are 90° turns only unless specified.) 6914

- Ans ☒ A. 12 km to the East
- ☒ B. 5 km to the South
- ☒ C. 7 km to the North
- ☒ D. 29 km to the West

Question ID :	441009761124
Option 1 ID :	4410092998491
Option 2 ID :	4410092998490
Option 3 ID :	4410092998489
Option 4 ID :	4410092998492
Status :	Answered
Chosen Option :	C

Q.3 D is the mother of E. E is the sister of F. G is the father of X. X is the husband of F. How is G related to D?

- Ans ☒ A. Mother's brother
- ☒ B. Father's brother
- ☒ C. Daughter's husband's father
- ☒ D. Wife's brother

Question ID :	4410091432340
Option 1 ID :	4410095657690
Option 2 ID :	4410095657691
Option 3 ID :	4410095657692
Option 4 ID :	4410095657689
Status :	Answered
Chosen Option :	C

Q.4 Refer to the following letter series and answer the question that follows. Counting to be done from left to right only.

(Left) S U I Y P U M U F F F I Y M R D A C E U Y G (Right)

How many such consonants are there each of which is immediately preceded by a consonant and also immediately followed by a consonant?

- Ans ☒ A. 3
- ☐ B. 4
- ☐ C. 5
- ☐ D. 2

Question ID :	441009792283
Option 1 ID :	4410093123131
Option 2 ID :	4410093123132
Option 3 ID :	4410093123134
Option 4 ID :	4410093123133
Status :	Answered
Chosen Option :	D

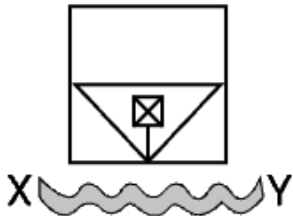
Q.5 What should come in place of the question mark (?) in the given series based on the English alphabetical order?

IMH KJJ MGL ? QAP

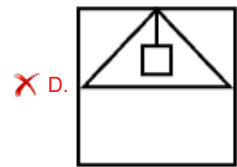
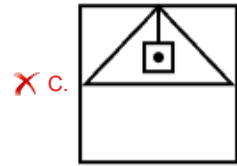
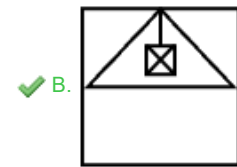
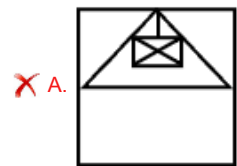
- Ans ☐ A. HGT
- ☒ B. ODN
- ☐ C. UYT
- ☐ D. KJU

Question ID :	4410091435292
Option 1 ID :	4410095669702
Option 2 ID :	4410095669701
Option 3 ID :	4410095669703
Option 4 ID :	4410095669700
Status :	Answered
Chosen Option :	B

Q.6 If the water source is placed along X-Y, as shown in the given figure, which of the given options will be the water reflection of the given figure?



Ans



Question ID : 4410091425251

Option 1 ID : 4410095665242

Option 2 ID : 4410095665239

Option 3 ID : 4410095665241

Option 4 ID : 4410095665240

Status : Answered

Chosen Option : B

Q.7 In a certain code language, 'old is gold' is coded as 'ra mn lb' and 'they are old' is coded as 'mn gt kp'. How is 'old' coded in the given language? (All codes are two-letter codes only.)

Ans ✗ A. lb

✗ B. gt

✗ C. ra

✓ D. mn

Question ID : 4410091412105

Option 1 ID : 4410095577451

Option 2 ID : 4410095577450

Option 3 ID : 4410095577449

Option 4 ID : 4410095577448

Status : Answered

Chosen Option : D

Q.8 CK 34 is related to BL 68 in a certain way. In the same way, HP 42 is related to GQ 84. To which of the given options is NV 23 related, following the same logic?

- Ans ☒ A. OW 46
- ☒ B. MW 48
- ☒ C. MW 46
- ☒ D. OU 44

Question ID : 441009792225

Option 1 ID : 4410093122902

Option 2 ID : 4410093122900

Option 3 ID : 4410093122899

Option 4 ID : 4410093122901

Status : Answered

Chosen Option : C

Q.9 Select the pair which follows the same pattern as that followed by the two set of pairs given below. Both pairs follow the same pattern.

TFS : VCU
MTU : QW

- Ans ☒ A. XEN : ZAP
- ☒ B. SKV : UHW
- ☒ C. WOT : YLV
- ☒ D. UHN : WEO

Question ID : 4410091435246

Option 1 ID : 4410095669517

Option 2 ID : 4410095669516

Option 3 ID : 4410095669519

Option 4 ID : 4410095669518

Status : Answered

Chosen Option : D

Q.1 What should come in place of the question mark (?) in the given series?

6 12 20 ? 42 56 71 4

- Ans ☒ A. 40
- ☒ B. 24
- ☒ C. 35
- ☒ D. 30

Question ID : 441009590736

Option 1 ID : 4410092318060

Option 2 ID : 4410092318057

Option 3 ID : 4410092318059

Option 4 ID : 4410092318058

Status : Answered

Chosen Option : D

Q.1 Seven friends G, H, I, J, L, M and N are sitting around a circular table facing the center of the table. N sits to the immediate right of I. Only three people sit between L and M when counted from the left of L. Only three people sit between I and J when counted from the right of J. G is an immediate neighbour of J as well as M. Who sits second to the left of H?

- Ans
- ☒ A. L
 - ☒ B. I
 - ☒ C. G
 - ☒ D. N

Question ID :	4410091433878
Option 1 ID :	4410095664046
Option 2 ID :	4410095664044
Option 3 ID :	4410095664043
Option 4 ID :	4410095664045
Status :	Answered
Chosen Option :	C

Q.1 What should come in place of the question mark (?) in the given series?
2
196 215 253 310 386 ?

- Ans
- ☒ A. 443
 - ☒ B. 543
 - ☒ C. 545
 - ☒ D. 481

Question ID :	4410091432477
Option 1 ID :	4410095658295
Option 2 ID :	4410095658296
Option 3 ID :	4410095658293
Option 4 ID :	4410095658294
Status :	Answered
Chosen Option :	D

Q.1 Refer to the following series and answer the question that follows. Counting to be done from left to right only. (All numbers are single-digit numbers only.)
3
(Left) 7 6 8 7 5 3 5 4 7 5 7 5 1 6 4 5 5 9 5 7 7 2 4 (Right)
How many such even digits are there each of which is immediately preceded by an even digit and also immediately followed by an even digit?

- Ans
- ☒ A. Three
 - ☒ B. None
 - ☒ C. Two
 - ☒ D. One

Question ID :	441009797157
Option 1 ID :	4410093142630
Option 2 ID :	4410093142627
Option 3 ID :	4410093142629
Option 4 ID :	4410093142628
Status :	Answered
Chosen Option :	B

Q.1 4	What should come in place of the question mark (?) in the given series based on the English alphabetical order? SCQ PEP MGO ? GKM
Ans	<div><div><input checked="" type="checkbox"/></div>A. GTR</div> <div><input checked="" type="checkbox"/></div> B. JIN

☒☒

Question ID :	4410091435307
Option 1 ID :	4410095669762
Option 2 ID :	4410095669761
Option 3 ID :	4410095669763
Option 4 ID :	4410095669760
Status :	Answered
Chosen Option :	B

Q.1 5	Seven people E, F, G, H, W, X and Y are sitting around a circular table facing the centre of the table. E sits fourth to the left of X. Only two people sit between H and G when counted from the left of H. F sits third to the left of Y. W is an immediate neighbour of Y and G. Who sits fourth to the right of W?
Ans	<div><div><input checked="" type="checkbox"/></div>A. E</div> <div><input checked="" type="checkbox"/></div> B. F

☒☒

Question ID :	441009794993
Option 1 ID :	4410093133971
Option 2 ID :	4410093133972
Option 3 ID :	4410093133974
Option 4 ID :	4410093133973
Status :	Answered
Chosen Option :	C

Q.1 6	Seven friends G, H, I, J, L, M and N are sitting in a straight line facing north. Only three people sit between N and G. Only three people sit to the left of J. Only H sits to the right of N. I sits at some place to the left of L but at some place to the right of M. How many people sit between M and L?
Ans	<div><div><input checked="" type="checkbox"/></div>A. Four</div> <div><input checked="" type="checkbox"/></div> B. Three

☒☒

Question ID :	4410091435047
Option 1 ID :	4410095668721
Option 2 ID :	4410095668722
Option 3 ID :	4410095668724
Option 4 ID :	4410095668723
Status :	Answered
Chosen Option :	A

Q.1 7 Based on the English alphabetical order, three of the following four letter-cluster pairs are alike in a certain way and thus form a group. Which letter-cluster pair DOES NOT belong to that group?
(Note: The odd one out is not based on the number of consonants/vowels or their position in the letter-cluster.)

- Ans ☒ A. XO-UA
- ☒ B. VM-SY
- ☒ C. WN-TZ
- ☒ D. PG-NS

Question ID :	441009796022
Option 1 ID :	4410093138090
Option 2 ID :	4410093138087
Option 3 ID :	4410093138089
Option 4 ID :	4410093138088
Status :	Answered
Chosen Option :	D

Q.1 8 Each vowel in the word DEFACER is changed to the letter immediately following it in the English alphabetical order, and each consonant is changed to the letter immediately preceding it in the English alphabetical order. How many letters will appear exactly twice in the group of letters thus formed?

- Ans ☒ A. 3
- ☒ B. 2
- ☒ C. 1
- ☒ D. 0

Question ID :	441009796552
Option 1 ID :	4410093140210
Option 2 ID :	4410093140209
Option 3 ID :	4410093140208
Option 4 ID :	4410093140207
Status :	Answered
Chosen Option :	C

Q.1 9 What will come in the place of the question mark (?) in the following equation, if '+' and '-' are interchanged and 'x' and '÷' are interchanged?
 $88 - 12 \div 114 \times 19 + 117 = ?$ 4568

- Ans ☒ A. 54
- ☒ B. 49
- ☒ C. 43
- ☒ D. 45

Question ID :	441009555033
Option 1 ID :	4410092175446
Option 2 ID :	4410092175449
Option 3 ID :	4410092175448
Option 4 ID :	4410092175447
Status :	Answered
Chosen Option :	C

Q.2 0 Based on the English alphabetical order, three of the following four letter-cluster pairs are alike in a certain way and thus form a group. Which letter-cluster pair DOES NOT belong to that group?
(Note: The odd one out is not based on the number of consonants/vowels or their position in the letter-cluster.)

- Ans
- ☒ A. QM - SO
 - ☒ B. HE - KF
 - ☒ C. AW - CY
 - ☒ D. PL - RN

Question ID :	441009790410
Option 1 ID :	4410093115639
Option 2 ID :	4410093115642
Option 3 ID :	4410093115641
Option 4 ID :	4410093115640
Status :	Answered
Chosen Option :	B

Q.2 1 If 1 is added to each odd digit and 1 is subtracted from each even digit in the number 87532416, what will be the difference of the maximum and minimum digits of the number so formed?2547

- Ans
- ☒ A. 8
 - ☒ B. 6
 - ☒ C. 5
 - ☒ D. 7

Question ID :	441009553012
Option 1 ID :	4410092167363
Option 2 ID :	4410092167364
Option 3 ID :	4410092167365
Option 4 ID :	4410092167362
Status :	Answered
Chosen Option :	D

Q.2 2 Each of G, H, I, J, L, M and N has holiday on a different day of a week starting from Monday and ending on Sunday of the same week. Only G has holiday before I. Only three people have holiday between N and I. Only three people have holiday between H and L. M has holiday on some day before L and on some day after J. How many people have holiday after H?

- Ans
- ☒ A. One
 - ☒ B. Three
 - ☒ C. Two
 - ☒ D. Four

Question ID :	4410091435122
Option 1 ID :	4410095669023
Option 2 ID :	4410095669021
Option 3 ID :	4410095669022
Option 4 ID :	4410095669020
Status :	Answered
Chosen Option :	D

Q.2 3 Seven boxes I, J, K, Q, R, S and T are kept one over the other but not necessarily in the same order. T is kept immediately above S. J is kept immediately above K. Only Q is kept above I. Only one box is kept between Q and T. J is not kept at the third position from the bottom.
How many boxes are kept between R and Q?

- Ans
- ☒ A. Three
 - ☐ B. Two
 - ☐ C. One
 - ☐ D. Four

Question ID :	441009819337
Option 1 ID :	4410093231472
Option 2 ID :	4410093231473
Option 3 ID :	4410093231474
Option 4 ID :	4410093231471
Status :	Answered
Chosen Option :	A

Q.2 4 Seven boxes G, H, I, J, L, M and N are kept one over the other but not necessarily in the same order. Only four boxes are kept between J and I. Only H is kept above J. Only two boxes are kept between L and M. N is kept immediately above G. M is not kept immediately above N. Which box is kept fourth from the top?

- Ans
- ☐ A. I
 - ☐ B. M
 - ☒ C. N
 - ☐ D. L

Question ID :	4410091435091
Option 1 ID :	4410095668899
Option 2 ID :	4410095668897
Option 3 ID :	4410095668898
Option 4 ID :	4410095668896
Status :	Answered
Chosen Option :	C

Q.2 5 I, J, K, U, V, and W live on six different floors of the same building. The lowermost floor in the building is numbered 1, the floor above it is numbered 2, and so on, till the topmost floor is numbered 6. Only V lives above W. J lives immediately below W. Only K lives below U. Who lives on floor number 3?

- Ans
- ☐ A. K
 - ☐ B. U
 - ☐ C. W
 - ☒ D. I

Question ID :	4410091395406
Option 1 ID :	4410095511273
Option 2 ID :	4410095511274
Option 3 ID :	4410095511275
Option 4 ID :	4410095511272
Status :	Answered
Chosen Option :	D

Q.1 The Rihand Power Station, situated at Pipri in the Sonebhadra district of Uttar Pradesh, is linked to which reservoir created by the construction of the Rihand Dam?

Ans ☒ A. Govind Ballabh Pant Sagar

☐ B. Gandhi Sagar

☐ C. Nagarjuna Sagar

☐ D. Hirakud Reservoir

Question ID : 4410091502761

Option 1 ID : 4410095935332

Option 2 ID : 4410095935334

Option 3 ID : 4410095935335

Option 4 ID : 4410095935333

Status : Answered

Chosen Option : A

Q.2 Which lake in Jammu and Kashmir originated from tectonic movements that created a natural depression?

Ans ☐ A. Chilika Lake

☐ B. Loktak Lake

☐ C. Sambhar Lake

☒ D. Wular Lake

Question ID : 4410091508382

Option 1 ID : 4410095958135

Option 2 ID : 4410095958134

Option 3 ID : 4410095958133

Option 4 ID : 4410095958136

Status : Answered

Chosen Option : D

Q.3 Which of the following disputes is NOT generally taken up by Lok Adalats in India?

Ans ☐ A. Motor accident claim cases

☒ B. Serious criminal offences

☐ C. Bank recovery cases

☐ D. Matrimonial disputes

Question ID : 4410091509441

Option 1 ID : 4410095962424

Option 2 ID : 4410095962426

Option 3 ID : 4410095962427

Option 4 ID : 4410095962425

Status : Answered

Chosen Option : B

Q.4	Which of the following categories of individuals is eligible for registration as a citizen under Section 5(1)(f) of the Citizenship Act, 1955?
Ans	<input checked="" type="checkbox"/> A. A person whose parent was a citizen of India at the time of independence
	<input checked="" type="checkbox"/> B. A person holding a foreign diplomatic passport
	<input checked="" type="checkbox"/> C. A person who has resided in India for 30 years
	<input checked="" type="checkbox"/> D. A person employed in Indian embassies abroad

Question ID :	4410091509470
Option 1 ID :	4410095962540
Option 2 ID :	4410095962542
Option 3 ID :	4410095962541
Option 4 ID :	4410095962543
Status :	Answered
Chosen Option :	C

Q.5	The Lakshadweep Islands of India are primarily composed of which type of geological formation?
Ans	<input checked="" type="checkbox"/> A. Riverine islands made of alluvium
	<input checked="" type="checkbox"/> B. Volcanic islands made of basalt
	<input checked="" type="checkbox"/> C. Coral islands formed on the Arabian Sea shelf
	<input checked="" type="checkbox"/> D. Fold mountains with rocky peaks

Question ID :	4410091511374
Option 1 ID :	4410095969553
Option 2 ID :	4410095969550
Option 3 ID :	4410095969552
Option 4 ID :	4410095969551
Status :	Answered
Chosen Option :	C

Q.6	Which of the following factors did NOT contribute to the success of the Green Revolution?
Ans	<input checked="" type="checkbox"/> A. The introduction of high-yielding varieties of seeds (HYVs)
	<input checked="" type="checkbox"/> B. The adoption of modern agricultural practices such as irrigation and chemical fertilisers
	<input checked="" type="checkbox"/> C. The expansion of agricultural land and the intensification of farming practices
	<input checked="" type="checkbox"/> D. The widespread adoption of traditional agricultural practices, such as organic farming

Question ID :	441009609889
Option 1 ID :	4410092394673
Option 2 ID :	4410092394674
Option 3 ID :	4410092394676
Option 4 ID :	4410092394675
Status :	Answered
Chosen Option :	D

Q.7 Which of the following Constitutional Amendments originally inserted Articles 31A and 31B into the Indian Constitution?

- Ans ☒ A. First Amendment
- ☒ B. Second Amendment
- ☒ C. Third Amendment
- ☒ D. Seventh Amendment

Question ID : 4410091509467

Option 1 ID : 4410095962529

Option 2 ID : 4410095962528

Option 3 ID : 4410095962530

Option 4 ID : 4410095962531

Status : Not Answered

Chosen Option : --

Q.8 Which of the following expressions marks the opening declaration of popular sovereignty in the Preamble of the Indian Constitution?

- Ans ☒ A. We, the Citizens
- ☒ B. We, the Indian People
- ☒ C. We, the People of India
- ☒ D. We, the Citizen of India

Question ID : 4410091509475

Option 1 ID : 4410095962561

Option 2 ID : 4410095962560

Option 3 ID : 4410095962562

Option 4 ID : 4410095962563

Status : Answered

Chosen Option : C

Q.9 Which slogan best represents the philosophy of Swami Dayanand Saraswati?

- Ans ☒ A. "Do or Die"
- ☒ B. "Vande Mataram"
- ☒ C. "Go Back to the Vedas"
- ☒ D. "Inquilab Zindabad"

Question ID : 4410091494145

Option 1 ID : 4410095902202

Option 2 ID : 4410095902201

Option 3 ID : 4410095902203

Option 4 ID : 4410095902200

Status : Answered

Chosen Option : C

Q.1 0	The Paika Dance may be performed during a 'Shobha Yatra,' which translates to what kind of event?
Ans	<div><div><div><div></div></div><div>A. A marriage ceremony</div></div></div>
	<div><div><div><div></div></div><div>B. A religious procession</div></div></div>
	<div><div><div><div></div></div><div>C. A folk music competition</div></div></div>
	<div><div><div><div></div></div><div>D. A harvest festival dinner</div></div></div>

Question ID :	4410091513032
Option 1 ID :	4410095976160
Option 2 ID :	4410095976159
Option 3 ID :	4410095976158
Option 4 ID :	4410095976161
Status :	Answered
Chosen Option :	B

Q.1 1	Which of the following statements is correct about the time averaged inter-molecular force of attraction (F) and molecular kinetic energy (KE) when water is heated?
Ans	<div><div><div><div></div></div><div>A. KE increases and F decreases.</div></div></div>
	<div><div><div><div></div></div><div>B. F increases and KE decreases.</div></div></div>
	<div><div><div><div></div></div><div>C. Both F and KE increase.</div></div></div>
	<div><div><div><div></div></div><div>D. Both F and KE decrease.</div></div></div>

Question ID :	441009185412
Option 1 ID :	441009732971
Option 2 ID :	441009732970
Option 3 ID :	441009732968
Option 4 ID :	441009732969
Status :	Not Answered
Chosen Option :	--

Q.1 2	How many Indian languages have the 'Classical Language' status, as of October 2025?
Ans	<div><div><div><div></div></div><div>A. 8</div></div></div>
	<div><div><div><div></div></div><div>B. 10</div></div></div>
	<div><div><div><div></div></div><div>C. 11</div></div></div>
	<div><div><div><div></div></div><div>D. 6</div></div></div>

Question ID :	4410091512724
Option 1 ID :	4410095974939
Option 2 ID :	4410095974940
Option 3 ID :	4410095974941
Option 4 ID :	4410095974938
Status :	Not Answered
Chosen Option :	--

Q.1	Which of the following Indian bodies organises National Lok Adalats across India?
3	
Ans	<input checked="" type="checkbox"/> A. Election Commission
	<input checked="" type="checkbox"/> B. Legal Services Authorities
	<input checked="" type="checkbox"/> C. Ministry of Defence
	<input checked="" type="checkbox"/> D. NITI Aayog

Question ID :	4410091509444
Option 1 ID :	4410095962436
Option 2 ID :	4410095962438
Option 3 ID :	4410095962439
Option 4 ID :	4410095962437
Status :	Answered
Chosen Option :	B

Q.1	Since Nitrogen has a valency of 3 and that of hydrogen is 1, they can combine to form
4	Ammonia (NH ₃) which is a neutral compound. But if NH ₃ combines with another hydrogen cation, how is the valency of the new compound affected?
Ans	<input checked="" type="checkbox"/> A. NH ₄ ⁻ is formed with a valency of -1
	<input checked="" type="checkbox"/> B. NH ₂ ⁻ is formed with a valency of -7
	<input checked="" type="checkbox"/> C. NH ₄ ⁺ is formed with a valency of +1
	<input checked="" type="checkbox"/> D. NH ₂ ⁺ is formed with a valency of +7

Question ID :	441009625215
Option 1 ID :	4410092454994
Option 2 ID :	4410092454995
Option 3 ID :	4410092454993
Option 4 ID :	4410092454992
Status :	Not Answered
Chosen Option :	--

Q.1	Which Amendment of the Indian Constitution removed 'Right to Property' from the list of Fundamental Rights?
5	
Ans	<input checked="" type="checkbox"/> A. 44th Amendment
	<input checked="" type="checkbox"/> B. 86th Amendment
	<input checked="" type="checkbox"/> C. 61st Amendment
	<input checked="" type="checkbox"/> D. 24th Amendment

Question ID :	4410091505927
Option 1 ID :	4410095948102
Option 2 ID :	4410095948101
Option 3 ID :	4410095948100
Option 4 ID :	4410095948099
Status :	Answered
Chosen Option :	D

Q.1 6	What distinguished the work of Pandita Ramabai from that of other social reformers of her time?
Ans	<div><div><div><div></div></div><div>A. She focused on economic reform for peasants</div></div></div>
	<div><div><div><div></div></div><div>B. She organised armed resistance against the British</div></div></div>
	<div><div><div><div></div></div><div>C. She worked specifically for widows and women's education</div></div></div>
	<div><div><div><div></div></div><div>D. She led a religious reform sect</div></div></div>

Question ID :	4410091494187
Option 1 ID :	4410095902365
Option 2 ID :	4410095902366
Option 3 ID :	4410095902364
Option 4 ID :	4410095902367
Status :	Answered
Chosen Option :	C

Q.1 7	Which key agricultural strategy became central during the Green Revolution?
Ans	<div><div><div><div></div></div><div>A. Small-scale industries</div></div></div>
	<div><div><div><div></div></div><div>B. Rainfed crops</div></div></div>
	<div><div><div><div></div></div><div>C. Plantation crops</div></div></div>
	<div><div><div><div></div></div><div>D. High-Yielding Variety (HYV) seeds</div></div></div>

Question ID :	4410091504786
Option 1 ID :	4410095943607
Option 2 ID :	4410095943606
Option 3 ID :	4410095943608
Option 4 ID :	4410095943605
Status :	Answered
Chosen Option :	D

Q.1 8	The historic Tosham Fort dates back to the early medieval period and is located in which state?
Ans	<div><div><div><div></div></div><div>A. Uttar Pradesh</div></div></div>
	<div><div><div><div></div></div><div>B. Rajasthan</div></div></div>
	<div><div><div><div></div></div><div>C. Punjab</div></div></div>
	<div><div><div><div></div></div><div>D. Haryana</div></div></div>

Question ID :	4410091509809
Option 1 ID :	4410095963926
Option 2 ID :	4410095963925
Option 3 ID :	4410095963924
Option 4 ID :	4410095963927
Status :	Not Answered
Chosen Option :	--

Q.1	पश्चिमी घाट जैव विविधता हॉटस्पॉट का हिस्सा दांडेली वन (Dandeli Forest), किस भारतीय राज्य में स्थित है?
9	
Ans	<input checked="" type="checkbox"/> A. केरल
	<input checked="" type="checkbox"/> B. महाराष्ट्र
	<input checked="" type="checkbox"/> C. कर्नाटक
	<input checked="" type="checkbox"/> D. गोवा

Question ID :	4410091517501
Option 1 ID :	4410095993370
Option 2 ID :	4410095993371
Option 3 ID :	4410095993369
Option 4 ID :	4410095993372
Status :	Answered
Chosen Option :	B

Q.2	What is the correct dimensional formula of force?
0	
Ans	<input checked="" type="checkbox"/> A. M ¹ L ¹ T ²
	<input checked="" type="checkbox"/> B. M ¹ L ¹ T ¹
	<input checked="" type="checkbox"/> C. M ¹ L ¹ T ⁻¹
	<input checked="" type="checkbox"/> D. M ¹ L ¹ T ⁻²

Question ID :	4410091520728
Option 1 ID :	4410096006126
Option 2 ID :	4410096006127
Option 3 ID :	4410096006125
Option 4 ID :	4410096006124
Status :	Not Answered
Chosen Option :	--

Q.2	Which of the following leaders is correctly matched with the Ahom Revolt (1828-1833)?
1	
Ans	<input checked="" type="checkbox"/> A. Gomadhar Konwar – Ahom Revolt
	<input checked="" type="checkbox"/> B. U Tirot Singh – Khasi Uprising
	<input checked="" type="checkbox"/> C. Budhu Bhagat – Kol Uprising
	<input checked="" type="checkbox"/> D. Chittur Singh – Ramosi Uprising

Question ID :	4410091502568
Option 1 ID :	4410095934603
Option 2 ID :	4410095934602
Option 3 ID :	4410095934605
Option 4 ID :	4410095934604
Status :	Answered
Chosen Option :	B

Q.2 The Garib Kalyan Rojgar Abhiyaan (GKRA) was a _____ day Abhiyan launched by the Government of India in the year 2020.

- Ans ☒ A. 125
- ☐ B. 120
- ☐ C. 140
- ☐ D. 100

Question ID :	441009638871
Option 1 ID :	4410092509628
Option 2 ID :	4410092509630
Option 3 ID :	4410092509629
Option 4 ID :	4410092509627
Status :	Answered
Chosen Option :	D

Q.2 Which of the following rulers is known for his patronage of Kalidasa and other scholars in his court?

- Ans ☒ A. Chandragupta II
- ☐ B. Chandragupta I
- ☐ C. Kumaragupta I
- ☐ D. Samudragupta

Question ID :	4410091502650
Option 1 ID :	4410095934916
Option 2 ID :	4410095934914
Option 3 ID :	4410095934917
Option 4 ID :	4410095934915
Status :	Not Answered
Chosen Option :	--

Q.2 Which of the following is an example of capital expenditure in the Indian Economy?

- Ans ☐ A. Interest payments on past government borrowings
- ☐ B. Short-term subsidies for consumer price stabilisation
- ☐ C. Routine salaries and administrative running costs
- ☒ D. Purchase of machinery that creates physical assets

Question ID :	4410091518580
Option 1 ID :	4410095997589
Option 2 ID :	4410095997586
Option 3 ID :	4410095997588
Option 4 ID :	4410095997587
Status :	Answered
Chosen Option :	D

Q.2	Which of the following cities is known for the Great Bath, suggesting ritualistic cleansing practices during the Indus Valley Civilisation?
5	
Ans	<input checked="" type="checkbox"/> A. Kalibangan
	<input checked="" type="checkbox"/> B. Mohenjo-Daro
	<input checked="" type="checkbox"/> C. Dholavira
	<input checked="" type="checkbox"/> D. Lothal

Question ID :	4410091502655
Option 1 ID :	4410095934935
Option 2 ID :	4410095934936
Option 3 ID :	4410095934937
Option 4 ID :	4410095934934
Status :	Answered
Chosen Option :	B

Section : English Language and Comprehension

Q.1	Select the most appropriate option that can substitute the underlined word segments to rectify the given sentence. Provided that the results have been announced, the candidates may request a re-evaluation, even though they submit the request within five days.
Ans	<input checked="" type="checkbox"/> A. Whereas the results have been announced; now that they submit the request
	<input checked="" type="checkbox"/> B. Provided that the results have been announced; now that they submit the request
	<input checked="" type="checkbox"/> C. Now that the results have been announced; provided that they submit the request
	<input checked="" type="checkbox"/> D. Insofar as the results have been announced; because that they submit the request

Question ID :	4410091386295
Option 1 ID :	4410095475885
Option 2 ID :	4410095475884
Option 3 ID :	4410095475886
Option 4 ID :	4410095475883
Status :	Answered
Chosen Option :	C

Q.2	Select the most appropriate option that can substitute the highlighted words in the given sentence. The company filed a lawsuit against the website for illegally copying and selling its software without permission.
Ans	<input checked="" type="checkbox"/> A. Plagiarism
	<input checked="" type="checkbox"/> B. Fraud
	<input checked="" type="checkbox"/> C. Theft
	<input checked="" type="checkbox"/> D. Piracy

Question ID :	4410091379227
Option 1 ID :	4410095448383
Option 2 ID :	4410095448381
Option 3 ID :	4410095448382
Option 4 ID :	4410095448384
Status :	Answered
Chosen Option :	D

Q.3

Select the most appropriate option that can substitute the highlighted segment in the given sentence.

She received an attractive **large, arranged bunch of flowers** on her birthday.

Ans

☒ A. Posy

☒ B. Wreath

☒ C. Bouquet

☒ D. Garland

Question ID :	4410091379271
Option 1 ID :	4410095448556
Option 2 ID :	4410095448554
Option 3 ID :	4410095448553
Option 4 ID :	4410095448555
Status :	Answered
Chosen Option :	C

Q.4

Select the most appropriate ANTONYM of the highlighted word in the given sentence.

The snake's bite released deadly **venom** into its prey.

Ans

☒ A. Toxin

☒ B. Harm

☒ C. Antidote

☒ D. Poison

Question ID :	4410091379411
Option 1 ID :	4410095449064
Option 2 ID :	4410095449065
Option 3 ID :	4410095449062
Option 4 ID :	4410095449063
Status :	Answered
Chosen Option :	C

Q.5

Select the most appropriate ANTONYM of the underlined word in the given sentence.

Tolentino agreed, noting that functional medicine's role is to treat the whole woman, not just her lab results.

Ans

☒ A. useless

☒ B. efficient

☒ C. clueless

☒ D. tactless

Question ID :	4410091400510
Option 1 ID :	4410095531732
Option 2 ID :	4410095531735
Option 3 ID :	4410095531733
Option 4 ID :	4410095531734
Status :	Answered
Chosen Option :	A

Q.6 Parts of a sentence are given below in jumbled order. Arrange the parts in the correct order to form a meaningful sentence.

when they were held up by bandits (A) / a man (B) / were driving through (C) / a desert area (D) / and his daughter (E)

- Ans ☒ A. DACBE
- ☒ B. ACBDE
- ☒ C. ABCDE
- ☒ D. BECDA

Question ID :	4410091379186
Option 1 ID :	4410095448222
Option 2 ID :	4410095448224
Option 3 ID :	4410095448221
Option 4 ID :	4410095448223
Status :	Answered
Chosen Option :	D

Q.7 Select the most appropriate option to fill in the blank.

After comparing the facilities and membership fees, she couldn't decide _____ the two gyms, as both offered excellent equipment and flexible schedules.

- Ans ☒ A. among
- ☒ B. across
- ☒ C. between
- ☒ D. along

Question ID :	4410091386363
Option 1 ID :	4410095476154
Option 2 ID :	4410095476151
Option 3 ID :	4410095476152
Option 4 ID :	4410095476153
Status :	Answered
Chosen Option :	C

Q.8 Select the most appropriate option to fill in the blanks.

While watching _____ latest National Geographic documentary, I saw a rare owl, and the narrator explained an intricate hunting technique that helps _____ owl survive in the desert.

- Ans ☒ A. no article needed, the
- ☒ B. the, an
- ☒ C. the, the
- ☒ D. the, no article needed

Question ID :	4410091401377
Option 1 ID :	4410095534821
Option 2 ID :	4410095534819
Option 3 ID :	4410095534820
Option 4 ID :	4410095534822
Status :	Answered
Chosen Option :	C

Q.9	Select the most appropriate ANTONYM of the highlighted word in the given sentence. The sudden earthquake was a terrible calamity for the entire region.
Ans	<input checked="" type="checkbox"/> A. Catastrophe
	<input checked="" type="checkbox"/> B. Disaster
	<input checked="" type="checkbox"/> C. Blessing
	<input checked="" type="checkbox"/> D. Misfortune

Question ID :	4410091372720
Option 1 ID :	4410095422315
Option 2 ID :	4410095422314
Option 3 ID :	4410095422317
Option 4 ID :	4410095422316
Status :	Answered
Chosen Option :	C

Q.10	Select the most appropriate idiom that can substitute the highlighted segment in the given sentence. By carefully listening to her words , Ravi was able to understand the hidden meaning that was not directly stated.
Ans	<input checked="" type="checkbox"/> A. Changing your tune
	<input checked="" type="checkbox"/> B. Cat on a hot in roof
	<input checked="" type="checkbox"/> C. Reading between the lines
	<input checked="" type="checkbox"/> D. Saving one's face

Question ID :	4410091372773
Option 1 ID :	4410095422527
Option 2 ID :	4410095422528
Option 3 ID :	4410095422526
Option 4 ID :	4410095422529
Status :	Answered
Chosen Option :	C

Q.11	Select the most appropriate idiom that can substitute the underlined segment in the given sentence. In order to resolve the stalemate, the chairman suggested that they <u>initiate conversation in a friendly way</u> .
Ans	<input checked="" type="checkbox"/> A. keep their backs to the wall
	<input checked="" type="checkbox"/> B. break the ice
	<input checked="" type="checkbox"/> C. hit below the belt
	<input checked="" type="checkbox"/> D. keep their cards close

Question ID :	4410091361814
Option 1 ID :	4410095379309
Option 2 ID :	4410095379306
Option 3 ID :	4410095379308
Option 4 ID :	4410095379307
Status :	Answered
Chosen Option :	B

Q.1
2

Select the most appropriate option to fill in the blanks.

The museum displayed letters _____ 1850, _____ the life and achievements of the famous scientist.

Ans

☒ A. beside, apropos

☒ B. apropos, circa

☒ C. circa, beside

☒ D. circa, apropos

Question ID :	4410091386374
Option 1 ID :	4410095476197
Option 2 ID :	4410095476195
Option 3 ID :	4410095476196
Option 4 ID :	4410095476198
Status :	Answered
Chosen Option :	D

Q.1
3

Parts of a sentence are given below. The first part (1) is in the correct order, while the other parts of the sentence are jumbled up. Arrange the parts in the correct order to form a meaningful and coherent sentence.

With six of its neighbours (1)/ there is a renewed warning for India (P)/ and safeguard its own strategic interests (Q)/ ranking high on the global roster of failed states (R)/ to reassess its policy towards them (S)

Ans

☒ A. RPQS

☒ B. PRQS

☒ C. RPSQ

☒ D. PRSQ

Question ID :	4410091378886
Option 1 ID :	4410095447021
Option 2 ID :	4410095447022
Option 3 ID :	4410095447023
Option 4 ID :	4410095447020
Status :	Answered
Chosen Option :	C

Q.1
4

Select the option that rectifies the underlined incorrectly spelt word in the given sentence.

Prince George is decked out in a comoflage shirt while his younger siblings match in blue attire.

Ans

☒ A. camuflage

☒ B. camoflage

☒ C. chamoflage

☒ D. camouflage

Question ID :	4410091400970
Option 1 ID :	4410095533458
Option 2 ID :	4410095533456
Option 3 ID :	4410095533455
Option 4 ID :	4410095533457
Status :	Answered
Chosen Option :	B

Q.1 Select the most appropriate option to fill in the blanks.
5 We planned a weekend picnic by the lake, hoping we would have ___ nice weather, so I packed ___ blanket for sitting on the grass, ___ umbrella in case of rain, and some snacks for everyone to enjoy.

- Ans ☒ A. no article needed, an, a
- ☒ B. a, a, no article needed
- ☒ C. no article needed, a, an
- ☒ D. a, no article needed, an

Question ID :	4410091401430
Option 1 ID :	4410095535032
Option 2 ID :	4410095535031
Option 3 ID :	4410095535033
Option 4 ID :	4410095535034
Status :	Answered
Chosen Option :	C

Q.1 One of the four underlined words in the given sentence is incorrectly spelt. Identify the
6 INCORRECTLY spelt word.
As the liaison between the local clinic and the schools, she worked conscentitiously to inoculate children against preventable diseases, relying on her perseverance to overcome bureaucratic hurdles.

- Ans ☒ A. conscentitiously
- ☒ B. liaison
- ☒ C. inoculate
- ☒ D. perseverance

Question ID :	4410091386074
Option 1 ID :	4410095475000
Option 2 ID :	4410095474999
Option 3 ID :	4410095475001
Option 4 ID :	4410095475002
Status :	Not Answered
Chosen Option :	--

Q.1 Select the most appropriate option to fill in the blank.
7 He completed the complex project _____ despite the lack of resources.

- Ans ☒ A. lazily
- ☒ B. quickly
- ☒ C. efficiently
- ☒ D. carelessly

Question ID :	4410091368225
Option 1 ID :	4410095404355
Option 2 ID :	4410095404354
Option 3 ID :	4410095404353
Option 4 ID :	4410095404356
Status :	Answered
Chosen Option :	C

Q.1
8

Parts of a sentence are given below in jumbled order. Arrange the parts in the correct order to form a meaningful sentence.

(O) the only known planet to host life, with its abundant and diverse
(P) once deemed the centre of the universe
(Q) lifeforms thriving in extreme environments shortly after its formation
(R) planets in the Milky Way, yet it remains unique as
(S) Earth has been demoted to just one of trillions of
6327

Ans

☒ A. PRSOQ

☐ B. RSPOQ

☐ C. PSROQ

☐ D. SRPQO

Question ID :	441009433983
Option 1 ID :	4410091695450
Option 2 ID :	4410091695453
Option 3 ID :	4410091695452
Option 4 ID :	4410091695451
Status :	Answered
Chosen Option :	C

Q.1
9

Select the most appropriate idiom that can substitute the highlighted segment in the given sentence.

During the office meeting, Rohan, with his careless remarks and rough approach, acted like **a clumsy person in a delicate situation** and upset everyone around him.

Ans

☐ A. a loose cannon

☒ B. a bull in a china shop

☐ C. a fish out of water

☐ D. an elephant in the room

Question ID :	4410091466115
Option 1 ID :	4410095792398
Option 2 ID :	4410095792397
Option 3 ID :	4410095792399
Option 4 ID :	4410095792400
Status :	Answered
Chosen Option :	B

Q.2
0

Select the most appropriate option that can substitute the highlighted segment in the given sentence.

The professor's **period of service or official position** at the university is highly respected by colleagues.

Ans

☐ A. Appointment

☐ B. Service

☒ C. Tenure

☐ D. Term

Question ID :	4410091379257
Option 1 ID :	4410095448500
Option 2 ID :	4410095448498
Option 3 ID :	4410095448499
Option 4 ID :	4410095448497
Status :	Answered
Chosen Option :	C

Comprehension:	
Read the given passage carefully and answer the questions that follow.	
<p>In recent years, urban gardening has gained significant popularity as a sustainable practice. Individuals and communities are transforming small spaces such as balconies, rooftops, and vacant lots into productive gardens. This movement promotes environmental benefits, including reduced carbon footprints, improved air quality, and enhanced biodiversity in cities. Urban gardening also encourages healthy lifestyles by providing access to fresh fruits and vegetables and opportunities for physical activity. Additionally, these green spaces foster social cohesion as neighbours collaborate and share resources. Despite the advantages, urban gardening faces challenges such as limited space, soil contamination, and the need for consistent maintenance. Governments and local authorities are increasingly supporting such initiatives by providing guidance, subsidies, and community programmes. Overall, urban gardening reflects a broader societal shift towards sustainability, self-sufficiency, and environmental responsibility, encouraging urban residents to reconnect with nature and adopt eco-friendly practices in their daily lives.</p>	
SubQuestion No : 21	
Q.2	Identify a suitable title for the passage.
1	
Ans	<div><div><div>✗ A. Transportation and Pollution in Cities</div><div>✗ B. The Challenges of Urban Life</div><div>✗ C. Modern Architecture and City Planning</div><div>✓ D. Urban Gardening: A Sustainable Trend</div></div></div>

Question ID :	4410091361831
Option 1 ID :	4410095379373
Option 2 ID :	4410095379370
Option 3 ID :	4410095379372
Option 4 ID :	4410095379371
Status :	Answered
Chosen Option :	D

Comprehension:	
Read the given passage carefully and answer the questions that follow.	
<p>In recent years, urban gardening has gained significant popularity as a sustainable practice. Individuals and communities are transforming small spaces such as balconies, rooftops, and vacant lots into productive gardens. This movement promotes environmental benefits, including reduced carbon footprints, improved air quality, and enhanced biodiversity in cities. Urban gardening also encourages healthy lifestyles by providing access to fresh fruits and vegetables and opportunities for physical activity. Additionally, these green spaces foster social cohesion as neighbours collaborate and share resources. Despite the advantages, urban gardening faces challenges such as limited space, soil contamination, and the need for consistent maintenance. Governments and local authorities are increasingly supporting such initiatives by providing guidance, subsidies, and community programmes. Overall, urban gardening reflects a broader societal shift towards sustainability, self-sufficiency, and environmental responsibility, encouraging urban residents to reconnect with nature and adopt eco-friendly practices in their daily lives.</p>	
SubQuestion No : 22	
Q.2	Identify the facts given in the passage.
2	
Ans	<div><div><div>✗ A. Urban gardens eliminate the need for supermarkets entirely.</div><div>✗ B. Most urban residents avoid gardening due to high costs.</div><div>✓ C. Urban gardening improves air quality and supports biodiversity.</div><div>✗ D. Gardening in cities is impossible on rooftops.</div></div></div>

Question ID :	4410091361832
Option 1 ID :	4410095379376
Option 2 ID :	4410095379375
Option 3 ID :	4410095379374
Option 4 ID :	4410095379377
Status :	Answered
Chosen Option :	C

Comprehension:	
Read the given passage carefully and answer the questions that follow.	
<p>In recent years, urban gardening has gained significant popularity as a sustainable practice. Individuals and communities are transforming small spaces such as balconies, rooftops, and vacant lots into productive gardens. This movement promotes environmental benefits, including reduced carbon footprints, improved air quality, and enhanced biodiversity in cities. Urban gardening also encourages healthy lifestyles by providing access to fresh fruits and vegetables and opportunities for physical activity. Additionally, these green spaces foster social cohesion as neighbours collaborate and share resources. Despite the advantages, urban gardening faces challenges such as limited space, soil contamination, and the need for consistent maintenance. Governments and local authorities are increasingly supporting such initiatives by providing guidance, subsidies, and community programmes. Overall, urban gardening reflects a broader societal shift towards sustainability, self-sufficiency, and environmental responsibility, encouraging urban residents to reconnect with nature and adopt eco-friendly practices in their daily lives.</p>	
SubQuestion No : 23	
Q.2	Identify the inferences drawn from the passage.
3	
Ans	<div><div>✓</div>A. Urban gardening encourages community engagement and healthy living.</div>
	<div><div>✗</div>B. Cities should ban construction to make space for gardens.</div>
	<div><div>✗</div>C. Gardening in cities is simple and requires no effort.</div>
	<div><div>✗</div>D. Urban gardening guarantees financial independence for residents.</div>

Question ID :	4410091361833
Option 1 ID :	4410095379378
Option 2 ID :	4410095379380
Option 3 ID :	4410095379381
Option 4 ID :	4410095379379
Status :	Answered
Chosen Option :	A

Comprehension:	
Read the given passage carefully and answer the questions that follow.	
<p>In recent years, urban gardening has gained significant popularity as a sustainable practice. Individuals and communities are transforming small spaces such as balconies, rooftops, and vacant lots into productive gardens. This movement promotes environmental benefits, including reduced carbon footprints, improved air quality, and enhanced biodiversity in cities. Urban gardening also encourages healthy lifestyles by providing access to fresh fruits and vegetables and opportunities for physical activity. Additionally, these green spaces foster social cohesion as neighbours collaborate and share resources. Despite the advantages, urban gardening faces challenges such as limited space, soil contamination, and the need for consistent maintenance. Governments and local authorities are increasingly supporting such initiatives by providing guidance, subsidies, and community programmes. Overall, urban gardening reflects a broader societal shift towards sustainability, self-sufficiency, and environmental responsibility, encouraging urban residents to reconnect with nature and adopt eco-friendly practices in their daily lives.</p>	
SubQuestion No : 24	
Q.2	What is the passage based upon?
4	
Ans	<div><div>✗</div>A. Advances in public transportation systems</div>
	<div><div>✓</div>B. Sustainable urban practices and gardening initiatives</div>
	<div><div>✗</div>C. Modern art and landscape architecture</div>
	<div><div>✗</div>D. Government policies for industrial growth</div>

Question ID :	4410091361834
Option 1 ID :	4410095379383
Option 2 ID :	4410095379385
Option 3 ID :	4410095379382
Option 4 ID :	4410095379384
Status :	Answered
Chosen Option :	B

Comprehension:

Read the given passage carefully and answer the questions that follow.

In recent years, urban gardening has gained significant popularity as a sustainable practice. Individuals and communities are transforming small spaces such as balconies, rooftops, and vacant lots into productive gardens. This movement promotes environmental benefits, including reduced carbon footprints, improved air quality, and enhanced biodiversity in cities. Urban gardening also encourages healthy lifestyles by providing access to fresh fruits and vegetables and opportunities for physical activity. Additionally, these green spaces foster social cohesion as neighbours collaborate and share resources. Despite the advantages, urban gardening faces challenges such as limited space, soil contamination, and the need for consistent maintenance. Governments and local authorities are increasingly supporting such initiatives by providing guidance, subsidies, and community programmes. Overall, urban gardening reflects a broader societal shift towards sustainability, self-sufficiency, and environmental responsibility, encouraging urban residents to reconnect with nature and adopt eco-friendly practices in their daily lives.

SubQuestion No : 25

Q.2 Select the most appropriate ANTONYM of “sustainable” in the context of the passage.

5

Ans

✗ A. Responsible

✓ B. Temporary

✗ C. Renewable

✗ D. Eco-friendly

Question ID :	4410091361835
Option 1 ID :	4410095379389
Option 2 ID :	4410095379386
Option 3 ID :	4410095379387
Option 4 ID :	4410095379388
Status :	Answered
Chosen Option :	B

Section : Computer Knowledge

Q.1 In MS Excel, which of the following is the correct syntax of the SUM function?

Ans

✗ A. 10

✗ B. SUM = A1 to A5

✗ C. 4

✓ D. SUM(A1:A5)

Question ID :	441009900861
Option 1 ID :	4410093557511
Option 2 ID :	4410093557512
Option 3 ID :	4410093557513
Option 4 ID :	4410093557510
Status :	Answered
Chosen Option :	D

Q.2	You want to create a presentation using a professionally designed template. Where should you go?
Ans	<div><div><input checked="" type="checkbox"/></div><div>A. File → New → Choose a Template</div></div> <div><div><input type="checkbox"/></div><div>B. File → Open → Templates</div></div> <div><div><input type="checkbox"/></div><div>C. Design → Format Background</div></div> <div><div><input type="checkbox"/></div><div>D. Insert → Templates</div></div>

Question ID :	4410091001970
Option 1 ID :	4410093959588
Option 2 ID :	4410093959586
Option 3 ID :	4410093959589
Option 4 ID :	4410093959587
Status :	Answered
Chosen Option :	A

Q.3	How can you apply copied formatting to multiple places using Format Painter?
Ans	<div><div><input type="checkbox"/></div><div>A. Click Format Painter once</div></div> <div><div><input type="checkbox"/></div><div>B. Use the Paste Special tool</div></div> <div><div><input type="checkbox"/></div><div>C. Press Ctrl+C repeatedly</div></div> <div><div><input checked="" type="checkbox"/></div><div>D. Double-click the Format Painter icon</div></div>

Question ID :	441009749867
Option 1 ID :	4410092953331
Option 2 ID :	4410092953333
Option 3 ID :	4410092953330
Option 4 ID :	4410092953332
Status :	Answered
Chosen Option :	D

Q.4	What does RAM mean?
Ans	<div><div><input type="checkbox"/></div><div>A. Read and Modify</div></div> <div><div><input type="checkbox"/></div><div>B. Remote Access Machine</div></div> <div><div><input checked="" type="checkbox"/></div><div>C. Random Access Memory</div></div> <div><div><input type="checkbox"/></div><div>D. Remote Access Memory</div></div>

Question ID :	441009643347
Option 1 ID :	4410092527567
Option 2 ID :	4410092527566
Option 3 ID :	4410092527568
Option 4 ID :	4410092527569
Status :	Answered
Chosen Option :	C

Q.5	What will the formula =IF(A1>10, "High", IF(A1>5, "Medium", "Low")) return if A1 contains the value 8?
Ans	<input checked="" type="checkbox"/> A. Medium
	<input type="checkbox"/> B. Error
	<input type="checkbox"/> C. High
	<input type="checkbox"/> D. Low

Question ID :	4410091023048
Option 1 ID :	4410094043712
Option 2 ID :	4410094043714
Option 3 ID :	4410094043711
Option 4 ID :	4410094043713
Status :	Answered
Chosen Option :	B

Q.6	Which of the following is NOT a valid type of user interface provided by modern operating systems like Windows?
Ans	<input type="checkbox"/> A. Command-based Interface
	<input type="checkbox"/> B. Voice-based Interface
	<input checked="" type="checkbox"/> C. Magnetic-based Interface
	<input type="checkbox"/> D. Graphical User Interface

Question ID :	441009748744
Option 1 ID :	4410092948792
Option 2 ID :	4410092948795
Option 3 ID :	4410092948794
Option 4 ID :	4410092948793
Status :	Answered
Chosen Option :	B

Q.7	What is the correct way to open an existing document in MS Word?
Ans	<input type="checkbox"/> A. Insert tab > Open
	<input type="checkbox"/> B. Review tab > Open
	<input checked="" type="checkbox"/> C. File tab > Open
	<input type="checkbox"/> D. Home tab > Open

Question ID :	441009717303
Option 1 ID :	4410092823184
Option 2 ID :	4410092823185
Option 3 ID :	4410092823186
Option 4 ID :	4410092823183
Status :	Answered
Chosen Option :	C

Q.8	Which of the following is a valid example of a website address (URL)?
Ans	<div><div><div><div></div></div><div>A. files\newsite</div></div></div>
	<div><div><div><div></div></div><div>B. http://www.learn.com</div></div></div>
	<div><div><div><div></div></div><div>C. wwwgooglecom</div></div></div>
	<div><div><div><div></div></div><div>D. www.books@library</div></div></div>

Question ID :	441009930176
Option 1 ID :	4410093674584
Option 2 ID :	4410093674583
Option 3 ID :	4410093674585
Option 4 ID :	4410093674582
Status :	Answered
Chosen Option :	B

Q.9	Which type of file contains editable text and has no special formatting?
Ans	<div><div><div><div></div></div><div>A. .txt</div></div></div>
	<div><div><div><div></div></div><div>B. .mp3</div></div></div>
	<div><div><div><div></div></div><div>C. .exe</div></div></div>
	<div><div><div><div></div></div><div>D. .jpg</div></div></div>

Question ID :	441009674930
Option 1 ID :	4410092653899
Option 2 ID :	4410092653901
Option 3 ID :	4410092653898
Option 4 ID :	4410092653900
Status :	Answered
Chosen Option :	A

Q.10	Which option accurately describes a Local Area Network (LAN)?
Ans	<div><div><div><div></div></div><div>A. A web-based communication model for satellites</div></div></div>
	<div><div><div><div></div></div><div>B. A network designed to connect mobile devices only</div></div></div>
	<div><div><div><div></div></div><div>C. A wireless system that spans global regions</div></div></div>
	<div><div><div><div></div></div><div>D. A network that links devices within a confined area, like an office or school</div></div></div>

Question ID :	441009397478
Option 1 ID :	4410091555350
Option 2 ID :	4410091555351
Option 3 ID :	4410091555348
Option 4 ID :	4410091555349
Status :	Answered
Chosen Option :	D

Q.1	What do you mean by ROM?
1	
Ans	<input checked="" type="checkbox"/> A. Read-Only Memory
	<input checked="" type="checkbox"/> B. Random-On Mask
	<input checked="" type="checkbox"/> C. Read-Only Mask
	<input checked="" type="checkbox"/> D. Random-Only Memory

Question ID :	441009395035
Option 1 ID :	4410091545648
Option 2 ID :	4410091545651
Option 3 ID :	4410091545650
Option 4 ID :	4410091545649
Status :	Answered
Chosen Option :	A

Q.1	When opening a new MS-Excel workbook, what is the default cell reference format and active cell position?
2	
Ans	<input checked="" type="checkbox"/> A. Cell A0 is selected, using zero-based indexing similar to programming arrays
	<input checked="" type="checkbox"/> B. Cell R1C1 is selected, using R1C1 reference style with both rows and columns numbered sequentially
	<input checked="" type="checkbox"/> C. Cell \$A\$1 is selected, with absolute referencing as the default to prevent accidental changes
	<input checked="" type="checkbox"/> D. Cell A1 is selected, using A1 reference style with columns labeled A-Z and rows numbered 1-1048576

Question ID :	4410091023015
Option 1 ID :	4410094043581
Option 2 ID :	4410094043580
Option 3 ID :	4410094043582
Option 4 ID :	4410094043579
Status :	Not Answered
Chosen Option :	--

Q.1	In MS-Excel to print only the selected range of cells instead of the entire worksheet, you should:
3	
Ans	<input checked="" type="checkbox"/> A. Use Page Break Preview
	<input checked="" type="checkbox"/> B. Set the Print Area before printing
	<input checked="" type="checkbox"/> C. Use Print Preview to select the area
	<input checked="" type="checkbox"/> D. Change the print orientation

Question ID :	4410091021428
Option 1 ID :	4410094037229
Option 2 ID :	4410094037228
Option 3 ID :	4410094037227
Option 4 ID :	4410094037230
Status :	Answered
Chosen Option :	D

Q.1	Which of the following statements about system software is correct?
4	
Ans	<input checked="" type="checkbox"/> A. System software is optional, and a computer can function without it.
	<input checked="" type="checkbox"/> B. System software includes both, operating systems and application software.
	<input checked="" type="checkbox"/> C. Antivirus software is a type of system software that manages hardware resources.
	<input checked="" type="checkbox"/> D. The operating system acts as an interface between hardware and application software.

Question ID :	44100960819
Option 1 ID :	441009242239
Option 2 ID :	441009242237
Option 3 ID :	441009242240
Option 4 ID :	441009242238
Status :	Answered
Chosen Option :	D

Q.1	In an email, which field is used to send a copy to other recipients apart from the main addressee?
5	
Ans	<input checked="" type="checkbox"/> A. To
	<input checked="" type="checkbox"/> B. CC
	<input checked="" type="checkbox"/> C. BCC
	<input checked="" type="checkbox"/> D. Subject

Question ID :	441009399909
Option 1 ID :	4410091565083
Option 2 ID :	4410091565084
Option 3 ID :	4410091565085
Option 4 ID :	4410091565082
Status :	Answered
Chosen Option :	C

Q.1	What is the default file extension for documents created in the latest MS-Word?
6	
Ans	<input checked="" type="checkbox"/> A. .docx
	<input checked="" type="checkbox"/> B. .txt
	<input checked="" type="checkbox"/> C. .doc
	<input checked="" type="checkbox"/> D. .pdf

Question ID :	441009929668
Option 1 ID :	4410093672624
Option 2 ID :	4410093672621
Option 3 ID :	4410093672622
Option 4 ID :	4410093672623
Status :	Answered
Chosen Option :	A

Q.1	In MS-PowerPoint, what does a 'Slide' represent?
7	
Ans	<input checked="" type="checkbox"/> A. A spreadsheet
	<input checked="" type="checkbox"/> B. A page of the presentation
	<input checked="" type="checkbox"/> C. A data table
	<input checked="" type="checkbox"/> D. A formula

Question ID :	441009930001
Option 1 ID :	4410093673952
Option 2 ID :	4410093673953
Option 3 ID :	4410093673954
Option 4 ID :	4410093673955
Status :	Answered
Chosen Option :	B

Q.1	In MS Word 2021, tabs are used to separate columns and paragraph marks to indicate new rows. To create a table that adjusts both to screen width and content size, which settings should be chosen?
8	
Ans	<input checked="" type="checkbox"/> A. Fixed column width and separator as Paragraphs
	<input checked="" type="checkbox"/> B. AutoFit to contents and separator as Tabs
	<input checked="" type="checkbox"/> C. AutoFit to window and separator as Tabs
	<input checked="" type="checkbox"/> D. AutoFit to contents and separator as Commas

Question ID :	441009927920
Option 1 ID :	4410093665703
Option 2 ID :	4410093665702
Option 3 ID :	4410093665705
Option 4 ID :	4410093665704
Status :	Not Answered
Chosen Option :	--

Q.1	How can you start a slide show from the current slide in MS PowerPoint?
9	
Ans	<input checked="" type="checkbox"/> A. F5
	<input checked="" type="checkbox"/> B. Ctrl + Enter
	<input checked="" type="checkbox"/> C. Alt + F5
	<input checked="" type="checkbox"/> D. Shift + F5

Question ID :	441009901689
Option 1 ID :	4410093560801
Option 2 ID :	4410093560803
Option 3 ID :	4410093560800
Option 4 ID :	4410093560802
Status :	Not Answered
Chosen Option :	--

Q.2	Under which category does RAM fall in the memory?
0	
Ans	<input checked="" type="checkbox"/> A. Secondary Memory
	<input checked="" type="checkbox"/> B. External Memory
	<input checked="" type="checkbox"/> C. Auxiliary Memory
	<input checked="" type="checkbox"/> D. Primary Memory

Question ID :	441009395045
Option 1 ID :	4410091545689
Option 2 ID :	4410091545691
Option 3 ID :	4410091545690
Option 4 ID :	4410091545688
Status :	Answered
Chosen Option :	A

