

DDA MTS

Previous Year Paper

16 Dec, 2025 Shift 1



Adda247

Test Prime

ALL EXAMS, ONE SUBSCRIPTION



1,00,000+
Mock Tests



**Personalised
Report Card**



**Unlimited
Re-Attempt**



600+
Exam Covered



25,000+ Previous
Year Papers



500%
Refund



ATTEMPT FREE MOCK NOW



DELHI DEVELOPMENT AUTHORITY
RECRUITMENT CELL

VIKAS SADAN, I.N.A, NEW DELHI-110023.

Recruitment Advertisement No. 09/2025/Rectt. Cell/Pers./DDA
DIRECT RECRUITMENT IN VARIOUS CATEGORIES

Participant ID	
Participant Name	
Test Center Name	
Test Date	16/12/2025
Test Time	9:00 AM - 11:00 AM
Subject	MTS

Section : Numerical and Mathematical Ability

Q.1 Simplify:

$$\frac{\left(\frac{16}{27}\right)}{\left(\frac{16}{5}\right)} \div \left(\frac{4}{6} \times \frac{12}{12} + \frac{2}{9}\right) + \frac{5}{8} \div \frac{24}{13} \text{ of } \frac{13}{8}$$

Ans

☒ A. $\frac{8}{9}$

☒ B. $\frac{3}{7}$

☒ C. $\frac{11}{17}$

☒ D. $\frac{5}{12}$

Question ID : 441009912380

Option 1 ID : 4410093603772

Option 2 ID : 4410093603773

Option 3 ID : 4410093603774

Option 4 ID : 4410093603771

Status : Answered

Chosen Option : D

Q.2 An article is sold at a profit of 55%. If the cost price is increased by ₹50 and the selling price is reduced by ₹16, then the profit would be 51.6%. What is the original cost price (in ₹) of the article?

- Ans
- ☒ A. 2,600
 - ☒ B. 2,400
 - ☒ C. 2,900
 - ☒ D. 2,700

Question ID :	441009916179
Option 1 ID :	4410093618968
Option 2 ID :	4410093618969
Option 3 ID :	4410093618970
Option 4 ID :	4410093618967
Status :	Answered
Chosen Option :	D

Q.3 A and B started a partnership business investing some amount in the ratio of 7 : 6. C joined then after six months with an amount equal to that of B. In what proportion should the profit at the end of one year be distributed among A, B and C?

- Ans
- ☒ A. 9 : 10 : 1
 - ☒ B. 11 : 8 : 8
 - ☒ C. 7 : 6 : 3
 - ☒ D. 13 : 7 : 3

Question ID :	441009547873
Option 1 ID :	4410092146889
Option 2 ID :	4410092146891
Option 3 ID :	4410092146888
Option 4 ID :	4410092146890
Status :	Answered
Chosen Option :	C

Q.4 A grocer has 96 kg rice, a part of which he sells at 22% profit and the remaining at 58% profit. He gains 46% on the whole. What is the quantity of rice sold at 58% profit?

- Ans
- ☒ A. 65 kg
 - ☒ B. 64 kg
 - ☒ C. 63 kg
 - ☒ D. 61 kg

Question ID :	441009545867
Option 1 ID :	4410092138866
Option 2 ID :	4410092138864
Option 3 ID :	4410092138865
Option 4 ID :	4410092138867
Status :	Answered
Chosen Option :	B

Q.5 In an election between two candidates 80% of the registered voters cast their vote and 16% of the votes polled were found invalid. Winning candidate got 55% of the valid votes and won the election by a margin of 336 votes. How many voters were registered?

- Ans ☒ A. 6240
- ☒ B. 5000
- ☒ C. 5003
- ☒ D. 5002

Question ID :	441009853304
Option 1 ID :	4410093366189
Option 2 ID :	4410093366188
Option 3 ID :	4410093366191
Option 4 ID :	4410093366190
Status :	Answered
Chosen Option :	B

Q.6 A car travels the first 50 km at a speed of 20 km/hr, the next 50 km at 30 km/hr and the last 50 km at 60 km/hr. The average speed of the car for the whole journey is:

- Ans ☒ A. 50 km/hr
- ☒ B. 35 km/hr
- ☒ C. 30 km/hr
- ☒ D. 40 km/hr

Question ID :	4410091467965
Option 1 ID :	4410095799690
Option 2 ID :	4410095799692
Option 3 ID :	4410095799691
Option 4 ID :	4410095799689
Status :	Answered
Chosen Option :	C

Q.7 A train running at a speed of 72 km/hr passes a man standing on a platform in 15 seconds and completely crosses the platform in 24 seconds. Find the length of the platform.

- Ans ☒ A. 180 m
- ☒ B. 130 m
- ☒ C. 140 m
- ☒ D. 150 m

Question ID :	4410091474109
Option 1 ID :	4410095824045
Option 2 ID :	4410095824043
Option 3 ID :	4410095824046
Option 4 ID :	4410095824044
Status :	Answered
Chosen Option :	A

Q.8	A can do a piece of work in 9 days and B in 18 days. If they work on it together for 3 days, then what fraction of the work is left?
Ans	<div><div><div><div></div></div><div>A.</div></div><div>$\frac{1}{4}$</div></div>
	<div><div><div><div></div></div><div>B.</div></div><div>$\frac{1}{3}$</div></div>
	<div><div><div><div></div></div><div>C.</div></div><div>$\frac{1}{6}$</div></div>
	<div><div><div><div></div></div><div>D.</div></div><div>$\frac{1}{2}$</div></div>

Question ID :	441009914024
Option 1 ID :	4410093610349
Option 2 ID :	4410093610348
Option 3 ID :	4410093610350
Option 4 ID :	4410093610347
Status :	Answered
Chosen Option :	D

Q.9	A shopkeeper sells an item for ₹960.4 after giving two successive discounts of 30% and 80% on its marked price. Had he not given any discount, he would have earned a profit of 40%. What is the cost price (in ₹) of the item?
Ans	<div><div><div><div></div></div><div>A.</div></div><div>4,931</div></div>
	<div><div><div><div></div></div><div>B.</div></div><div>4,920</div></div>
	<div><div><div><div></div></div><div>C.</div></div><div>4,908</div></div>
	<div><div><div><div></div></div><div>D.</div></div><div>4,900</div></div>

Question ID :	441009915838
Option 1 ID :	4410093617604
Option 2 ID :	4410093617606
Option 3 ID :	4410093617605
Option 4 ID :	4410093617603
Status :	Answered
Chosen Option :	D

Q.10	A man has invested ₹50,000 at a rate of 8% per annum simple interest for 2 years. Find the amount (in ₹) that he will receive after 2 years.
Ans	<div><div><div><div></div></div><div>A.</div></div><div>9,000</div></div>
	<div><div><div><div></div></div><div>B.</div></div><div>58,000</div></div>
	<div><div><div><div></div></div><div>C.</div></div><div>59,000</div></div>
	<div><div><div><div></div></div><div>D.</div></div><div>8,000</div></div>

Question ID :	441009516899
Option 1 ID :	4410092023018
Option 2 ID :	4410092023015
Option 3 ID :	4410092023017
Option 4 ID :	4410092023016
Status :	Answered
Chosen Option :	B

Q.1	A trader marks his goods 25% above the cost price and allows a discount of 10% on the marked price. What is his percentage profit?
1	
Ans	<input checked="" type="checkbox"/> A. 15%
	<input checked="" type="checkbox"/> B. 12.5%
	<input checked="" type="checkbox"/> C. 10%
	<input checked="" type="checkbox"/> D. 20%

Question ID :	4410091464036
Option 1 ID :	4410095784299
Option 2 ID :	4410095784298
Option 3 ID :	4410095784300
Option 4 ID :	4410095784301
Status :	Answered
Chosen Option :	B

Q.1	Subtracting 51% of X from X is the same as multiplying X by:
2	
Ans	<input checked="" type="checkbox"/> A. 0.051
	<input checked="" type="checkbox"/> B. 0.49
	<input checked="" type="checkbox"/> C. 0.51
	<input checked="" type="checkbox"/> D. 0.5

Question ID :	441009516687
Option 1 ID :	4410092022170
Option 2 ID :	4410092022167
Option 3 ID :	4410092022168
Option 4 ID :	4410092022169
Status :	Answered
Chosen Option :	B

Q.1	If $x + \frac{1}{x} = \sqrt{7}$, then the positive value of $x - \frac{1}{x}$ is equal to:
3	
Ans	<input checked="" type="checkbox"/> A. $\sqrt{3}$
	<input checked="" type="checkbox"/> B. 5
	<input checked="" type="checkbox"/> C. $\sqrt{7}$
	<input checked="" type="checkbox"/> D. 11

Question ID :	4410091425482
Option 1 ID :	4410095630531
Option 2 ID :	4410095630533
Option 3 ID :	4410095630532
Option 4 ID :	4410095630534
Status :	Answered
Chosen Option :	A

Q.1 4	A train travels 180 km at a speed of 60 km/hr and then another 120 km at a speed of 40 km/hr. What is the total time taken for the journey?
Ans	<input checked="" type="checkbox"/> A. 5 hours
	<input checked="" type="checkbox"/> B. 8 hours
	<input checked="" type="checkbox"/> C. 6 hours
	<input checked="" type="checkbox"/> D. 4 hours

Question ID :	4410091464207
Option 1 ID :	4410095785047
Option 2 ID :	4410095785049
Option 3 ID :	4410095785048
Option 4 ID :	4410095785046
Status :	Answered
Chosen Option :	C

Q.1 5	At what rate per cent per annum will a certain sum of money multiply itself by 43 times in 2 years, the interest being compounded annually? [Give your answer correct to 1 decimal place.]
Ans	<input checked="" type="checkbox"/> A. 560.7
	<input checked="" type="checkbox"/> B. 550.7
	<input checked="" type="checkbox"/> C. 566.3
	<input checked="" type="checkbox"/> D. 555.7

Question ID :	441009897870
Option 1 ID :	4410093545551
Option 2 ID :	4410093545552
Option 3 ID :	4410093545553
Option 4 ID :	4410093545550
Status :	Answered
Chosen Option :	C

Q.1 6	A merchant sells 28 kg of rice at ₹52 per kg and 20 kg of sugar at ₹46 per kg. The cost of production is ₹910 for the rice and ₹860 for the sugar. What is the overall profit percentage? (Rounded off to two decimal places)
Ans	<input checked="" type="checkbox"/> A. 33.42%
	<input checked="" type="checkbox"/> B. 35.16%
	<input checked="" type="checkbox"/> C. 34.08%
	<input checked="" type="checkbox"/> D. 34.24%

Question ID :	4410091425532
Option 1 ID :	4410095630731
Option 2 ID :	4410095630734
Option 3 ID :	4410095630732
Option 4 ID :	4410095630733
Status :	Answered
Chosen Option :	D

Q.1 7	The average runs scored by a batsman in 21 matches is 40. In the next 15 matches the batsman scored an average of 16 runs. Find his average runs in all the 36 matches.
Ans	<div><div><div>✗ A. 29</div></div></div>
	<div><div><div>✗ B. 32</div></div></div>
	<div><div><div>✗ C. 31</div></div></div>
	<div><div><div>✓ D. 30</div></div></div>

Question ID :	441009516415
Option 1 ID :	4410092021080
Option 2 ID :	4410092021082
Option 3 ID :	4410092021081
Option 4 ID :	4410092021079
Status :	Answered
Chosen Option :	D

Q.1 8	Find the volume of a cuboid 19.4 m long, 15 m broad and 6.6 m high.
Ans	<div><div><div>✗ A. 1930.7 m3</div></div></div>
	<div><div><div>✗ B. 1910.5 m3</div></div></div>
	<div><div><div>✓ C. 1920.6 m3</div></div></div>
	<div><div><div>✗ D. 1940.8 m3</div></div></div>

Question ID :	4410091434612
Option 1 ID :	4410095667004
Option 2 ID :	4410095667002
Option 3 ID :	4410095667003
Option 4 ID :	4410095667005
Status :	Answered
Chosen Option :	C

Q.1 9	The area of a square is 4761 cm ² . Its perimeter is equal to the perimeter of a regular hexagon. What is the area (in cm ²) of the hexagon?
Ans	<div><div><div>✗ A. 3166</div></div></div>
	<div><div><div>✗ B. 3194</div></div></div>
	<div><div><div>✗ C. 3150√3</div></div></div>
	<div><div><div>✓ D. 3174√3</div></div></div>

Question ID :	441009621868
Option 1 ID :	4410092441607
Option 2 ID :	4410092441605
Option 3 ID :	4410092441606
Option 4 ID :	4410092441604
Status :	Answered
Chosen Option :	D

Q.2 0	The sum of three numbers is 245. If the ratio of the first to second is 2 : 3 and that of the second to the third is 5 : 8, then the third number is:
Ans	<input checked="" type="checkbox"/> A. 120
	<input type="checkbox"/> B. 140
	<input type="checkbox"/> C. 80
	<input type="checkbox"/> D. 100

Question ID :	4410091470421
Option 1 ID :	4410095809609
Option 2 ID :	4410095809610
Option 3 ID :	4410095809608
Option 4 ID :	4410095809607
Status :	Answered
Chosen Option :	A

Q.2 1	What must be added to each term in the ratio 7 : 11 so as to make it equal to 3 : 4?
Ans	<input type="checkbox"/> A. 4
	<input type="checkbox"/> B. 9
	<input checked="" type="checkbox"/> C. 5
	<input type="checkbox"/> D. 7

Question ID :	4410091410411
Option 1 ID :	4410095570673
Option 2 ID :	4410095570674
Option 3 ID :	4410095570671
Option 4 ID :	4410095570672
Status :	Answered
Chosen Option :	C

Q.2 2	<div>Simplify the expression: $\frac{0.6 + \frac{3}{5}}{1.2 - \frac{2}{5}}$</div>
Ans	<input type="checkbox"/> A. $\frac{12}{7}$
	<input type="checkbox"/> B. $\frac{9}{10}$
	<input checked="" type="checkbox"/> C. $\frac{3}{2}$
	<input type="checkbox"/> D. $\frac{6}{5}$

Question ID :	4410091463866
Option 1 ID :	4410095783593
Option 2 ID :	4410095783590
Option 3 ID :	4410095783591
Option 4 ID :	4410095783592
Status :	Answered
Chosen Option :	C

Q.2	A sum of ₹10,000 is invested at compound interest rate of 10% per annum, compounded annually. What will be the compound interest earned at the end of 3 years?
3	
Ans	<input checked="" type="checkbox"/> A. ₹3,100
	<input checked="" type="checkbox"/> B. ₹3,310
	<input checked="" type="checkbox"/> C. ₹3,720
	<input checked="" type="checkbox"/> D. ₹3,630

Question ID :	4410091444169
Option 1 ID :	4410095705285
Option 2 ID :	4410095705286
Option 3 ID :	4410095705288
Option 4 ID :	4410095705287
Status :	Answered
Chosen Option :	B

Q.2	Three pipes X, Y and Z can fill a tank in 6, 8 and 24 hours, respectively. Y and Z are opened for half an hour, then X is also opened. The time taken by the three pipes together to fill the remaining part of the tank is:
4	
Ans	<input checked="" type="checkbox"/> A. 2 hours
	<input checked="" type="checkbox"/> B. $3\frac{1}{4}$ hours
	<input checked="" type="checkbox"/> C. $2\frac{3}{4}$ hours
	<input checked="" type="checkbox"/> D. 3 hours

Question ID :	4410091467894
Option 1 ID :	4410095799375
Option 2 ID :	4410095799374
Option 3 ID :	4410095799376
Option 4 ID :	4410095799373
Status :	Answered
Chosen Option :	C

Q.2	Two taps can fill a cistern in 2 hours and 32 hours, respectively. A third tap can empty it in 2 hours. How long (in hours) will it take to fill one-fourth of the empty cistern, if all of them are opened together?
5	
Ans	<input checked="" type="checkbox"/> A. 24
	<input checked="" type="checkbox"/> B. 16
	<input checked="" type="checkbox"/> C. 32
	<input checked="" type="checkbox"/> D. 8

Question ID :	441009518302
Option 1 ID :	4410092028629
Option 2 ID :	4410092028628
Option 3 ID :	4410092028630
Option 4 ID :	4410092028627
Status :	Answered
Chosen Option :	D

Q.1 In a certain code language, 'smoking is not good habit' is coded as 'ar by nm zs qj' and 'they are very good boys' is coded as 'by tg lo kp cd'. How is 'good' coded in the given language? (All codes are two-letter codes only.)

- Ans ☒ A. qj
- ☒ B. lo
- ☒ C. by
- ☒ D. tg

Question ID :	4410091412117
Option 1 ID :	4410095577497
Option 2 ID :	4410095577496
Option 3 ID :	4410095577498
Option 4 ID :	4410095577499
Status :	Answered
Chosen Option :	C

Q.2 Select the pair which follows the same pattern as that followed by the two set of pairs given below. Both pairs follow the same pattern.

QIM : PKK
SML : ROJ

- Ans ☒ A. EMD : DOA
- ☒ B. GIO : FKL
- ☒ C. RQQ : QSO
- ☒ D. JMR : INP

Question ID :	4410091435242
Option 1 ID :	4410095669502
Option 2 ID :	4410095669500
Option 3 ID :	4410095669503
Option 4 ID :	4410095669501
Status :	Answered
Chosen Option :	C

Q.3 Each of E, T, H, N, I, C and S has a holiday on a different day of the week, starting from Monday and ending on Sunday of the same week. Only one person has a holiday before H. Only one person has a holiday between H and S. Only four people have holidays between I and H. E has a holiday on one of the days after H. C has a holiday on the day immediately before N. How many people have holidays between N and E?

- Ans ☒ A. One
- ☒ B. Two
- ☒ C. Three
- ☒ D. Zero

Question ID :	441009814170
Option 1 ID :	4410093210804
Option 2 ID :	4410093210805
Option 3 ID :	4410093210806
Option 4 ID :	4410093210803
Status :	Answered
Chosen Option :	B

Q.4 Seven friends G, H, I, J, L, M and N are sitting in a straight line facing north. Only two people sit between L and G. Only two people sit to the left of J. Only three people sit between J and M. L sits second to the right of J. N sits at some place to the right of H but at some place to the left of I. How many people sit to the right of N?

- Ans ☒ A. Four
- ☒ B. One
- ☒ C. Three
- ☒ D. Two

Question ID :	4410091435056
Option 1 ID :	4410095668756
Option 2 ID :	4410095668759
Option 3 ID :	4410095668757
Option 4 ID :	4410095668758
Status :	Answered
Chosen Option :	C

Q.5 Each of G, H, I, J, L, M and N has holiday on a different day of a week starting from Monday and ending on Sunday of the same week. Only J has holiday after L. Only three people have holiday between H and L. Only three people have holiday between M and J. G has holiday on some day before N and on some day after I. How many people have holiday after H?

- Ans ☒ A. Two
- ☒ B. Four
- ☒ C. Three
- ☒ D. Five

Question ID :	4410091435117
Option 1 ID :	4410095669003
Option 2 ID :	4410095669000
Option 3 ID :	4410095669002
Option 4 ID :	4410095669001
Status :	Answered
Chosen Option :	D

Q.6 Based on the English alphabetical order, three of the following four letter-cluster pairs are alike in a certain way and thus form a group. Which letter-cluster pair DOES NOT belong to that group?
(Note: The odd one out is not based on the number of consonants/vowels or their position in the letter-cluster.)

- Ans ☒ A. PH - MJ
- ☒ B. GY - DA
- ☒ C. SQ - US
- ☒ D. UM - RO

Question ID :	441009790409
Option 1 ID :	4410093115635
Option 2 ID :	4410093115638
Option 3 ID :	4410093115637
Option 4 ID :	4410093115636
Status :	Answered
Chosen Option :	C

Q.7 Based on the English alphabetical order, three of the following four letter-cluster pairs are alike in a certain way and thus form a group. Which letter-cluster pair DOES NOT belong to that group?
(Note: The odd one out is not based on the number of consonants/vowels or their position in the letter-cluster.)

- Ans
- ☒ A. AY-DY
 - ☒ B. SQ-VQ
 - ☒ C. QO-TO
 - ☒ D. US-ZS

Question ID :	441009796023
Option 1 ID :	4410093138091
Option 2 ID :	4410093138093
Option 3 ID :	4410093138094
Option 4 ID :	4410093138092
Status :	Answered
Chosen Option :	D

Q.8 Each vowel in the word REPLACE is changed to the letter immediately following it in the English alphabetical order, and each consonant is changed to the letter immediately preceding it. Which of the following letters will appear exactly twice in the group of letters thus formed?

- Ans
- ☒ A. S
 - ☒ B. M
 - ☒ C. Q
 - ☒ D. B

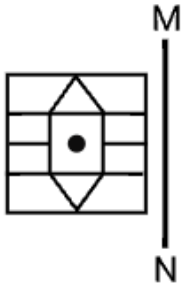
Question ID :	441009791915
Option 1 ID :	4410093121662
Option 2 ID :	4410093121661
Option 3 ID :	4410093121659
Option 4 ID :	4410093121660
Status :	Answered
Chosen Option :	D

Q.9 In a certain code language, 'SHAM' is coded as '4956' and 'ASHY' is coded as '3645'. What is the code for 'Y' in the given code language?

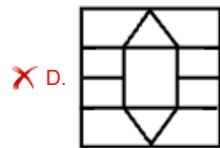
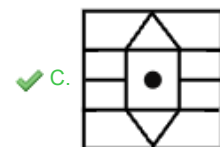
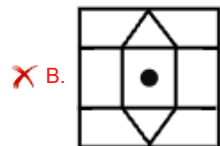
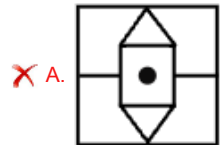
- Ans
- ☒ A. 6
 - ☒ B. 5
 - ☒ C. 3
 - ☒ D. 4

Question ID :	441009797142
Option 1 ID :	4410093142568
Option 2 ID :	4410093142570
Option 3 ID :	4410093142567
Option 4 ID :	4410093142569
Status :	Answered
Chosen Option :	C

Q.1 Select the correct mirror image of the given figure when the mirror is placed at MN as shown below.



Ans



Question ID : 4410091425236

Option 1 ID : 4410095649479

Option 2 ID : 4410095649477

Option 3 ID : 4410095649476

Option 4 ID : 4410095649478

Status : Answered

Chosen Option : C

Q.1 What should come in place of the question mark (?) in the given series?

1
0 1 1 2 3 ? 7 13

Ans ✗ A. 3

✗ B. 4

✗ C. 2

✓ D. 5

Question ID : 441009590735

Option 1 ID : 4410092318054

Option 2 ID : 4410092318053

Option 3 ID : 4410092318056

Option 4 ID : 4410092318055

Status : Answered

Chosen Option : B

Q.1 Seven friends G, H, I, J, L, M and N are sitting around a circular table facing the center
2 of the table. Only two people sit between H and M when counted from the right of H. Only one person sits between J and I when counted from the right of J. Only one person sits between I and M when counted from the left of M. Only one person sits between J and N when counted from the right of N. Only one person sits between G and N when counted from the right of G. Who sits third to the right of L?

- Ans
- ☒ A. G
 - ☒ B. H
 - ☒ C. I
 - ☒ D. N

Question ID :	4410091433876
Option 1 ID :	4410095664036
Option 2 ID :	4410095664037
Option 3 ID :	4410095664035
Option 4 ID :	4410095664038
Status :	Answered
Chosen Option :	A

Q.1 What should come in place of the question mark (?) in the given series based on the
3 English alphabetical order?

RWQ OUS LSU IQW ?

- Ans
- ☒ A. TFR
 - ☒ B. NHG
 - ☒ C. FOY
 - ☒ D. HYT

Question ID :	4410091435304
Option 1 ID :	4410095669751
Option 2 ID :	4410095669748
Option 3 ID :	4410095669750
Option 4 ID :	4410095669749
Status :	Answered
Chosen Option :	C

Q.1 Seven people, B, D, E, P, S, T and W are sitting in a row, facing north.
4 Only two people sit to the right of S. Only two people sit between S and T. Only two people sit between W and P. P sits to the immediate left of S. E sits to the immediate right of D. Who sits at third position from the left end of the line?¹⁰⁰⁵⁵

- Ans
- ☒ A. B
 - ☒ B. E
 - ☒ C. D
 - ☒ D. W

Question ID :	441009796039
Option 1 ID :	4410093138155
Option 2 ID :	4410093138157
Option 3 ID :	4410093138158
Option 4 ID :	4410093138156
Status :	Answered
Chosen Option :	A

Q.1 AD 24 is related to BE 12 in a certain way. In the same way, KN 68 is related to LO 34. To
5 which of the given options is HK 42 related, following the same logic?

- Ans ☒ A. JL 31
- ☒ B. IL 21
- ☒ C. JM 33
- ☒ D. IM 21

Question ID :	441009792223
Option 1 ID :	4410093122893
Option 2 ID :	4410093122891
Option 3 ID :	4410093122894
Option 4 ID :	4410093122892
Status :	Answered
Chosen Option :	B

Q.1 What should come in place of the question mark (?) in the given series based on the
6 English alphabetical order?

FSN HPL JMJ LJH ?

- Ans ☒ A. NGF
- ☒ B. HGT
- ☒ C. NHY
- ☒ D. TRE

Question ID :	4410091435287
Option 1 ID :	4410095669681
Option 2 ID :	4410095669682
Option 3 ID :	4410095669680
Option 4 ID :	4410095669683
Status :	Answered
Chosen Option :	A

Q.1 Seven boxes G, H, I, J, L, M and N are kept one over the other but not necessarily in the
7 same order. No box is kept above J. Only three boxes are kept between J and L. Only one box is kept between I and M. M is kept immediately above L. Only four boxes are kept between I and H. G is kept at some place above N. Which box is kept second below G?

- Ans ☒ A. N
- ☒ B. M
- ☒ C. L
- ☒ D. G

Question ID :	4410091435094
Option 1 ID :	4410095668910
Option 2 ID :	4410095668909
Option 3 ID :	4410095668908
Option 4 ID :	4410095668911
Status :	Answered
Chosen Option :	C

Q.1	If 1 is added to each even digit and 1 is subtracted from each odd digit in the number
8	23168947, what will be the sum of all digits of the number so formed?2548
Ans	<input checked="" type="checkbox"/> A. 36
	<input checked="" type="checkbox"/> B. 37
	<input checked="" type="checkbox"/> C. 40
	<input checked="" type="checkbox"/> D. 38

Question ID :	441009553013
Option 1 ID :	4410092167369
Option 2 ID :	4410092167368
Option 3 ID :	4410092167366
Option 4 ID :	4410092167367
Status :	Answered
Chosen Option :	C

Q.1	In the following triads, each group of letters is related to the subsequent one following
9	a certain logic. Select from the given options, the one which follows the same logic.
	MIKE - EMIK - KEMI
	NERD - DNER - RDNE3097
Ans	<input checked="" type="checkbox"/> A. FUSE - EFUS - SFEU
	<input checked="" type="checkbox"/> B. FUSE - EUFS - SEFU
	<input checked="" type="checkbox"/> C. FUSE - EUFS - SFEU
	<input checked="" type="checkbox"/> D. FUSE - EFUS - SEFU

Question ID :	441009789221
Option 1 ID :	4410093110884
Option 2 ID :	4410093110883
Option 3 ID :	4410093110886
Option 4 ID :	4410093110885
Status :	Answered
Chosen Option :	D

Q.2	What should come in place of the question mark (?) in the given series?
0	101 230 361 494 ? 766
Ans	<input checked="" type="checkbox"/> A. 876
	<input checked="" type="checkbox"/> B. 765
	<input checked="" type="checkbox"/> C. 629
	<input checked="" type="checkbox"/> D. 987

Question ID :	4410091432468
Option 1 ID :	4410095658258
Option 2 ID :	4410095658259
Option 3 ID :	4410095658257
Option 4 ID :	4410095658260
Status :	Answered
Chosen Option :	C

Q.2 If 'L' stands for '+', 'M' stands for 'x', 'N' stands for '+' and 'O' stands for '-', then what will come in place of question mark (?) in the following equation?

12 M 3 L 6 O 4 N 5 = ?4330

- Ans ☒ A. 12
- ☒ B. 9
- ☒ C. 15
- ☒ D. 7

Question ID :	441009554795
Option 1 ID :	4410092174494
Option 2 ID :	4410092174497
Option 3 ID :	4410092174495
Option 4 ID :	4410092174496
Status :	Answered
Chosen Option :	D

Q.2 Each vowel in the word EXTOLLINGLY is changed to the letter immediately following it in the English alphabetical order, and each consonant is changed to the second letter preceding it in the English alphabetical order. Which of the following letters will appear more than twice in the group of letters thus formed?

- Ans ☒ A. E
- ☒ B. R
- ☒ C. P
- ☒ D. J

Question ID :	441009796625
Option 1 ID :	4410093140500
Option 2 ID :	4410093140501
Option 3 ID :	4410093140502
Option 4 ID :	4410093140499
Status :	Answered
Chosen Option :	D

Q.2 I, J, K, U, V, and W live on six different floors of the same building. The lowermost floor in the building is numbered 1, the floor above it is numbered 2, and so on, till the topmost floor is numbered 6.
W lives on an even numbered floor but not on floor number 4. Only two people live between W and U. V lives on an odd numbered floor but not on the lowermost floor. Only two people live between V and I. K lives immediately below V. How many people live between J and K?

- Ans ☒ A. Three
- ☒ B. One
- ☒ C. Two
- ☒ D. Four

Question ID :	4410091395411
Option 1 ID :	4410095511302
Option 2 ID :	4410095511300
Option 3 ID :	4410095511301
Option 4 ID :	4410095511303
Status :	Answered
Chosen Option :	C

Q.2 4	D is the father of E. E is the son of F. G is the brother of X. X is the son of F. How is D related to X?
Ans	<div><div><input checked="" type="checkbox"/></div>A. Father</div>
	<div><div><input type="checkbox"/></div>B. Brother</div>
	<div><div><input type="checkbox"/></div>C. Son</div>
	<div><div><input type="checkbox"/></div>D. Husband</div>

Question ID :	4410091432335
Option 1 ID :	4410095657669
Option 2 ID :	4410095657672
Option 3 ID :	4410095657671
Option 4 ID :	4410095657670
Status :	Answered
Chosen Option :	A

Q.2 5	Each vowel in the word CYLINDERING is changed to the second letter following it in the English alphabetical order, and each consonant is changed to the second letter preceding it in the English alphabetical order. How many letters will appear exactly twice in the group of letters thus formed?
Ans	<div><div><input type="checkbox"/></div>A. One</div>
	<div><div><input checked="" type="checkbox"/></div>B. Two</div>
	<div><div><input type="checkbox"/></div>C. Three</div>
	<div><div><input type="checkbox"/></div>D. Four</div>

Question ID :	441009796624
Option 1 ID :	4410093140495
Option 2 ID :	4410093140496
Option 3 ID :	4410093140497
Option 4 ID :	4410093140498
Status :	Answered
Chosen Option :	B

Section : General Awareness

Q.1	Which of the following south Indian dynasties was known for its naval dominance in the Indian Ocean?
Ans	<div><div><input checked="" type="checkbox"/></div>A. Cholas</div>
	<div><div><input type="checkbox"/></div>B. Pandyas</div>
	<div><div><input type="checkbox"/></div>C. Pallavas</div>
	<div><div><input type="checkbox"/></div>D. Cheras</div>

Question ID :	4410091502670
Option 1 ID :	4410095934996
Option 2 ID :	4410095934995
Option 3 ID :	4410095934994
Option 4 ID :	4410095934997
Status :	Answered
Chosen Option :	A

Q.2	Which organisation played a key role in advancing the Green Revolution?
Ans	<input checked="" type="checkbox"/> A. United Nations
	<input checked="" type="checkbox"/> B. Food and Agriculture Organization
	<input checked="" type="checkbox"/> C. World Health Organization
	<input checked="" type="checkbox"/> D. International Maize and Wheat Improvement Center (CIMMYT)

Question ID :	441009609886
Option 1 ID :	4410092394661
Option 2 ID :	4410092394664
Option 3 ID :	4410092394662
Option 4 ID :	4410092394663
Status :	Marked For Review
Chosen Option :	D

Q.3	Ellora is situated about 15 miles north-west of which major city?
Ans	<input checked="" type="checkbox"/> A. Hyderabad
	<input checked="" type="checkbox"/> B. Aurangabad
	<input checked="" type="checkbox"/> C. Mumbai
	<input checked="" type="checkbox"/> D. Pune

Question ID :	4410091509813
Option 1 ID :	4410095963943
Option 2 ID :	4410095963942
Option 3 ID :	4410095963940
Option 4 ID :	4410095963941
Status :	Marked For Review
Chosen Option :	C

Q.4	When copper powder in a china dish is heated, the surface of the copper powder is coated with a black substance. This is due to the formation of:
Ans	<input checked="" type="checkbox"/> A. CuO
	<input checked="" type="checkbox"/> B. Cu2O
	<input checked="" type="checkbox"/> C. Cu (OH)2
	<input checked="" type="checkbox"/> D. CuCO3

Question ID :	44100985664
Option 1 ID :	441009340372
Option 2 ID :	441009340373
Option 3 ID :	441009340374
Option 4 ID :	441009340375
Status :	Not Answered
Chosen Option :	--

Q.5	Which doctrine was launched in Mauritius in March 2025 to promote Mutual and Holistic Advancement for Security and Growth Across Regions?
Ans	<input checked="" type="checkbox"/> A. MAHASAGAR doctrine
	<input type="checkbox"/> B. Indian Ocean Outreach Policy
	<input type="checkbox"/> C. Regional Growth Partnership Framework
	<input type="checkbox"/> D. SAGAR doctrine

Question ID :	4410091517505
Option 1 ID :	4410095993385
Option 2 ID :	4410095993387
Option 3 ID :	4410095993388
Option 4 ID :	4410095993386
Status :	Marked For Review
Chosen Option :	A

Q.6	Which of the following was NOT among the original six classical languages recognised by the Government of India (before 2024)?
Ans	<input type="checkbox"/> A. Kannada
	<input type="checkbox"/> B. Malayalam
	<input checked="" type="checkbox"/> C. Marathi
	<input type="checkbox"/> D. Sanskrit

Question ID :	4410091512728
Option 1 ID :	4410095974955
Option 2 ID :	4410095974957
Option 3 ID :	4410095974956
Option 4 ID :	4410095974954
Status :	Marked For Review
Chosen Option :	C

Q.7	Which of the following is an example of revenue expenditure in the Indian Economy?
Ans	<input checked="" type="checkbox"/> A. Payments for government salaries and interest liabilities
	<input type="checkbox"/> B. Acquisition of land for national infrastructure project
	<input type="checkbox"/> C. Purchase of machinery for a public hospital project
	<input type="checkbox"/> D. Loans given by central government to state governments

Question ID :	4410091518584
Option 1 ID :	4410095997602
Option 2 ID :	4410095997605
Option 3 ID :	4410095997603
Option 4 ID :	4410095997604
Status :	Answered
Chosen Option :	A

Q.8	Income tax falls under which category of taxation?
Ans	<input checked="" type="checkbox"/> A. Indirect tax
	<input checked="" type="checkbox"/> B. Progressive subsidy
	<input checked="" type="checkbox"/> C. Capital receipt
	<input checked="" type="checkbox"/> D. Direct tax

Question ID :	4410091518783
Option 1 ID :	4410095998411
Option 2 ID :	4410095998412
Option 3 ID :	4410095998413
Option 4 ID :	4410095998410
Status :	Answered
Chosen Option :	D

Q.9	Which statement correctly describes coral reefs found near the Lakshadweep and Andaman Islands?
Ans	<input checked="" type="checkbox"/> A. They are formed through volcanic activity.
	<input checked="" type="checkbox"/> B. They are built from skeletal remains of tiny marine organisms.
	<input checked="" type="checkbox"/> C. They form only barrier reefs in India.
	<input checked="" type="checkbox"/> D. They require cold ocean water to develop.

Question ID :	4410091508694
Option 1 ID :	4410095959422
Option 2 ID :	4410095959423
Option 3 ID :	4410095959420
Option 4 ID :	4410095959421
Status :	Marked For Review
Chosen Option :	B

Q.10	Which of the following leaders proposed entering the legislative councils to expose them as 'sham parliaments'?
Ans	<input checked="" type="checkbox"/> A. Motilal Nehru and CR Das
	<input checked="" type="checkbox"/> B. Jawaharlal Nehru and Subhas Chandra Bose
	<input checked="" type="checkbox"/> C. Mahatma Gandhi and C Rajagopalachari
	<input checked="" type="checkbox"/> D. Vallabhbhai Patel and Rajendra Prasad

Question ID :	4410091502623
Option 1 ID :	4410095934811
Option 2 ID :	4410095934812
Option 3 ID :	4410095934813
Option 4 ID :	4410095934810
Status :	Marked For Review
Chosen Option :	A

Q.1	During rusting, iron combines with oxygen in the presence water. What type of reaction is this?
1	
Ans	

✓ A. Oxidation

✗ B. Combustion

✗ C. Hydrolysis

✗ D. Reduction

Question ID : 441009624261

Option 1 ID : 4410092451177

Option 2 ID : 4410092451176

Option 3 ID : 4410092451179

Option 4 ID : 4410092451178

Status : Marked For Review

Chosen Option : A

Q.1 2 Which of the following Chola rulers built the Brihadeshwara Temple at Thanjavur?

Ans ✓ A. Raja Raja I

✗ B. Kulottunga I

✗ C. Aditya I

✗ D. Rajendra I

Question ID : 4410091502687

Option 1 ID : 4410095935059

Option 2 ID : 4410095935061

Option 3 ID : 4410095935060

Option 4 ID : 4410095935058

Status : Answered

Chosen Option : A

Q.1 3 Which of the following Congress sessions saw the proposal of the council-entry programme by CR Das and Motilal Nehru?

Ans ✗ A. Kanpur Session, 1925

✗ B. Calcutta Session, 1906

✗ C. Nagpur Session, 1920

✓ D. Gaya Session, 1922

Question ID : 4410091502616

Option 1 ID : 4410095934789

Option 2 ID : 4410095934787

Option 3 ID : 4410095934786

Option 4 ID : 4410095934788

Status : Not Answered

Chosen Option : --

Q.1 4	Which of the following rights is protected under Article 19(1)(a) of the India Constitution?
Ans	<input checked="" type="checkbox"/> A. Right to form cooperative societies
	<input checked="" type="checkbox"/> B. Right to equality of opportunity
	<input checked="" type="checkbox"/> C. Right to constitutional remedies
	<input checked="" type="checkbox"/> D. Right to freedom of speech and expression

Question ID :	4410091509462
Option 1 ID :	4410095962508
Option 2 ID :	4410095962511
Option 3 ID :	4410095962509
Option 4 ID :	4410095962510
Status :	Answered
Chosen Option :	D

Q.1 5	The Andaman and Nicobar Islands are located in which water body?
Ans	<input checked="" type="checkbox"/> A. Arabian Sea
	<input checked="" type="checkbox"/> B. Gulf of Mannar
	<input checked="" type="checkbox"/> C. Bay of Bengal
	<input checked="" type="checkbox"/> D. Indian Ocean

Question ID :	4410091511370
Option 1 ID :	4410095969534
Option 2 ID :	4410095969537
Option 3 ID :	4410095969535
Option 4 ID :	4410095969536
Status :	Answered
Chosen Option :	C

Q.1 6	Which of the following authorities exercises administrative control and judicial supervision over the subordinate courts of India within a state?
Ans	<input checked="" type="checkbox"/> A. High Court
	<input checked="" type="checkbox"/> B. President
	<input checked="" type="checkbox"/> C. Lok Sabha
	<input checked="" type="checkbox"/> D. Governor

Question ID :	4410091509447
Option 1 ID :	4410095962450
Option 2 ID :	4410095962451
Option 3 ID :	4410095962448
Option 4 ID :	4410095962449
Status :	Answered
Chosen Option :	A

Q.1 7	Which of the following is NOT a required step in the online Indian citizenship application process?
Ans	<input checked="" type="checkbox"/> A. Uploading necessary documents
	<input checked="" type="checkbox"/> B. Filling the appropriate form online
	<input checked="" type="checkbox"/> C. Paying the prescribed fee
	<input checked="" type="checkbox"/> D. Attending a written citizenship examination

Question ID :	4410091509472
Option 1 ID :	4410095962549
Option 2 ID :	4410095962548
Option 3 ID :	4410095962550
Option 4 ID :	4410095962551
Status :	Answered
Chosen Option :	D

Q.1 8	Which of the following states is NOT listed as a region where Carnatic music is confined?
Ans	<input checked="" type="checkbox"/> A. Kerala
	<input checked="" type="checkbox"/> B. Odisha
	<input checked="" type="checkbox"/> C. Tamil Nadu
	<input checked="" type="checkbox"/> D. Andhra Pradesh

Question ID :	4410091513088
Option 1 ID :	4410095976385
Option 2 ID :	4410095976382
Option 3 ID :	4410095976383
Option 4 ID :	4410095976384
Status :	Marked For Review
Chosen Option :	B

Q.1 9	The Employment Assurance Scheme (EAS) was launched by the Government of India in the year _____.
Ans	<input checked="" type="checkbox"/> A. 1993
	<input checked="" type="checkbox"/> B. 1991
	<input checked="" type="checkbox"/> C. 1985
	<input checked="" type="checkbox"/> D. 1980

Question ID :	441009638892
Option 1 ID :	4410092509711
Option 2 ID :	4410092509712
Option 3 ID :	4410092509713
Option 4 ID :	4410092509714
Status :	Not Answered
Chosen Option :	--

Q.20	Which of the following is prohibited under Article 17 of the Indian Constitution?
Ans	<input checked="" type="checkbox"/> A. Forced religious conversion
	<input checked="" type="checkbox"/> B. Child marriage
	<input checked="" type="checkbox"/> C. Dowry practices
	<input checked="" type="checkbox"/> D. Untouchability in any form

Question ID :	4410091509461
Option 1 ID :	4410095962506
Option 2 ID :	4410095962504
Option 3 ID :	4410095962507
Option 4 ID :	4410095962505
Status :	Answered
Chosen Option :	D

Q.21	Which Fundamental Right ensures that people can move freely anywhere in India?
Ans	<input checked="" type="checkbox"/> A. Right to Remedies
	<input checked="" type="checkbox"/> B. Right to Equality
	<input checked="" type="checkbox"/> C. Right to Freedom
	<input checked="" type="checkbox"/> D. Cultural Rights

Question ID :	4410091505112
Option 1 ID :	4410095944804
Option 2 ID :	4410095944801
Option 3 ID :	4410095944802
Option 4 ID :	4410095944803
Status :	Answered
Chosen Option :	C

Q.22	Which of the following case types can only be heard by the Supreme Court of India under original jurisdiction?
Ans	<input checked="" type="checkbox"/> A. Disputes between states
	<input checked="" type="checkbox"/> B. Criminal appeals
	<input checked="" type="checkbox"/> C. Property disputes
	<input checked="" type="checkbox"/> D. Election appeals

Question ID :	4410091509449
Option 1 ID :	4410095962458
Option 2 ID :	4410095962459
Option 3 ID :	4410095962456
Option 4 ID :	4410095962457
Status :	Marked For Review
Chosen Option :	A

Q.2 3	Tehri, counted among India's highest and most intricate hydroelectric projects situated in Uttarakhand, is constructed over which river?
Ans	<div><div><div><div><div><div></div></div></div><div><div><div></div></div></div></div><div>A. Alaknanda River</div></div></div>
	<div><div><div><div><div><div></div></div></div><div><div><div></div></div></div></div><div>B. Bhagirathi River</div></div></div>
	<div><div><div><div><div><div></div></div></div><div><div><div></div></div></div></div><div>C. Yamuna River</div></div></div>
	<div><div><div><div><div><div></div></div></div><div><div><div></div></div></div></div><div>D. Mandakini River</div></div></div>

Question ID :	4410091502750
Option 1 ID :	4410095935293
Option 2 ID :	4410095935292
Option 3 ID :	4410095935295
Option 4 ID :	4410095935294
Status :	Answered
Chosen Option :	B

Q.2 4	Which of the following British officials initiated discussions with the Moderate leadership of the Congress in 1906 regarding reforms in the Legislative Councils?
Ans	<div><div><div><div><div><div></div></div></div><div><div><div></div></div></div></div><div>A. Lord Ripon</div></div></div>
	<div><div><div><div><div><div></div></div></div><div><div><div></div></div></div></div><div>B. John Morley</div></div></div>
	<div><div><div><div><div><div></div></div></div><div><div><div></div></div></div></div><div>C. Lord Hardinge</div></div></div>
	<div><div><div><div><div><div></div></div></div><div><div><div></div></div></div></div><div>D. Lord Curzon</div></div></div>

Question ID :	4410091502604
Option 1 ID :	4410095934744
Option 2 ID :	4410095934743
Option 3 ID :	4410095934745
Option 4 ID :	4410095934742
Status :	Answered
Chosen Option :	D

Q.2 5	What causes the faster movement of particles in an object on heating?
Ans	<div><div><div><div><div><div></div></div></div><div><div><div></div></div></div></div><div>A. Increase in kinetic energy</div></div></div>
	<div><div><div><div><div><div></div></div></div><div><div><div></div></div></div></div><div>B. Decrease in kinetic energy</div></div></div>
	<div><div><div><div><div><div></div></div></div><div><div><div></div></div></div></div><div>C. Increase in pressure</div></div></div>
	<div><div><div><div><div><div></div></div></div><div><div><div></div></div></div></div><div>D. Decrease in pressure</div></div></div>

Question ID :	441009185413
Option 1 ID :	441009732973
Option 2 ID :	441009732975
Option 3 ID :	441009732972
Option 4 ID :	441009732974
Status :	Answered
Chosen Option :	A

Q.1	Select the most appropriate ANTONYM of the highlighted word in the given sentence. Despite the quarrel, he bore no grudge against his friend.
Ans	<input checked="" type="checkbox"/> A. Hostility
	<input checked="" type="checkbox"/> B. Resentment
	<input checked="" type="checkbox"/> C. Friendship
	<input checked="" type="checkbox"/> D. Bitterness

Question ID :	4410091379414
Option 1 ID :	4410095449074
Option 2 ID :	4410095449077
Option 3 ID :	4410095449075
Option 4 ID :	4410095449076
Status :	Answered
Chosen Option :	C

Q.2	Select the most appropriate option that rectifies the grammatical error in the given sentence. If there is no error, select 'No correction required'. The faculty members found his lecture more preferable to the previous one, though it still lacked clarity.
Ans	<input checked="" type="checkbox"/> A. preferable
	<input checked="" type="checkbox"/> B. highly preferable
	<input checked="" type="checkbox"/> C. most preferable
	<input checked="" type="checkbox"/> D. No correction required

Question ID :	4410091370412
Option 1 ID :	4410095413098
Option 2 ID :	4410095413100
Option 3 ID :	4410095413099
Option 4 ID :	4410095413097
Status :	Answered
Chosen Option :	A

Q.3	Parts of a sentence are given below. The first part (1) is in the correct order, while the other parts of the sentence are jumbled up. Arrange the parts in the correct order to form a meaningful and coherent sentence. The pronouns (1) / persons or things (P) / individually rather than collectively (Q) / which refer to (R) / are known as distributive pronouns(S)
Ans	<input checked="" type="checkbox"/> A. PQRS
	<input checked="" type="checkbox"/> B. RPQS
	<input checked="" type="checkbox"/> C. RSPQ
	<input checked="" type="checkbox"/> D. PSQR

Question ID :	4410091378873
Option 1 ID :	4410095446969
Option 2 ID :	4410095446968
Option 3 ID :	4410095446970
Option 4 ID :	4410095446971
Status :	Answered
Chosen Option :	B

Q.4	Parts of a sentence are given below in jumbled order. Arrange the parts in the correct order to form a meaningful sentence. (B) office employees were very (C) the postmaster and post (E) to the act of charity (D) generous as they contributed
Ans	<input checked="" type="checkbox"/> A. DCBE
	<input checked="" type="checkbox"/> B. EBDC
	<input checked="" type="checkbox"/> C. CBDE
	<input checked="" type="checkbox"/> D. BCDE

Question ID :	441009433876
Option 1 ID :	4410091695023
Option 2 ID :	4410091695024
Option 3 ID :	4410091695025
Option 4 ID :	4410091695022
Status :	Answered
Chosen Option :	C

Q.5	Select the most appropriate option that rectifies the grammatical error(s) in the given sentence. I wanted to go for a walk, because it was raining heavily.
Ans	<input checked="" type="checkbox"/> A. I wanted to go for a walk, as it was raining heavily.
	<input checked="" type="checkbox"/> B. I wanted to go for a walk, unless it was raining heavily.
	<input checked="" type="checkbox"/> C. I wanted to go for a walk, but it was raining heavily.
	<input checked="" type="checkbox"/> D. I wanted to go for a walk, therefore it was raining heavily.

Question ID :	4410091363943
Option 1 ID :	4410095387699
Option 2 ID :	4410095387701
Option 3 ID :	4410095387698
Option 4 ID :	4410095387700
Status :	Answered
Chosen Option :	C

Q.6	Select the most appropriate option that can substitute the underlined word segment to rectify the given sentence. The durable plastic of floppy disks, popular from the 1970s to the 1990s, <u>may seem more accurate than</u> fragile manuscripts.
Ans	<input checked="" type="checkbox"/> A. may seem more obscure than
	<input checked="" type="checkbox"/> B. may seem more unsure than
	<input checked="" type="checkbox"/> C. may seem more brittle than
	<input checked="" type="checkbox"/> D. may seem more secure than

Question ID :	4410091386142
Option 1 ID :	4410095475271
Option 2 ID :	4410095475273
Option 3 ID :	4410095475274
Option 4 ID :	4410095475272
Status :	Answered
Chosen Option :	D

Q.7 One of the four underlined words in the given sentence is incorrectly spelt. Identify the INCORRECTLY spelt word.

The phlegm from his asthama made it difficult to breathe, but he had to acquiesce to the maintenance treatments the doctor prescribed.

- Ans
- ☒ A. acquiesce
 - ☒ B. asthama
 - ☒ C. maintenance
 - ☒ D. phlegm

Question ID :	4410091400668
Option 1 ID :	4410095532350
Option 2 ID :	4410095532349
Option 3 ID :	4410095532351
Option 4 ID :	4410095532348
Status :	Answered
Chosen Option :	D

Q.8 Select the most appropriate proverb that can substitute the underlined segment in the given sentence.

During the review meeting, everyone noticed a few unexpected errors in the final draft, and the senior editor just shrugged, saying that even the most skilled people can occasionally make mistakes.

- Ans
- ☒ A. Homer sometimes nods
 - ☒ B. he who sups with the devil should have a long spoon
 - ☒ C. a nod is as good as a wink
 - ☒ D. the cobbler's children have no shoes

Question ID :	4410091400496
Option 1 ID :	4410095531677
Option 2 ID :	4410095531679
Option 3 ID :	4410095531676
Option 4 ID :	4410095531678
Status :	Answered
Chosen Option :	B

Q.9 Select the most appropriate option to fill in the blanks.

During the seminar, the speaker shared ___ wisdom he had gained over decades and also offered ___ piece of ___ wisdom that could help young researchers avoid common mistakes.

- Ans
- ☒ A. a, a, the
 - ☒ B. an, no article needed, the
 - ☒ C. no article needed, an, a
 - ☒ D. no article needed, a, no article needed

Question ID :	4410091386713
Option 1 ID :	4410095477535
Option 2 ID :	4410095477537
Option 3 ID :	4410095477536
Option 4 ID :	4410095477538
Status :	Answered
Chosen Option :	A

Q.1 0	Select the most appropriate option that can substitute the highlighted segment in the given sentence. For the festival, they hung a/an arrangement of leaves, flowers, fruits, etc., in the shape of a circle that is used for decoration on the door.
Ans	<div><div><div><div></div></div><div>A. Garland</div></div></div>
	<div><div><div><div></div></div><div>B. Wreath</div></div></div>
	<div><div><div><div></div></div><div>C. Bouquet</div></div></div>
	<div><div><div><div></div></div><div>D. Crown</div></div></div>

Question ID :	4410091379265
Option 1 ID :	4410095448529
Option 2 ID :	4410095448532
Option 3 ID :	4410095448530
Option 4 ID :	4410095448531
Status :	Answered
Chosen Option :	A

Q.1 1	Select the most appropriate proverb that can substitute the underlined segment in the given sentence. Although the competition was tough, Nikhil decided to take the risk and present his bold idea to the judges, knowing that <u>one has to make a lot of effort to achieve something difficult</u> .
Ans	<div><div><div><div></div></div><div>A. one swallow doesn't make a summer</div></div></div>
	<div><div><div><div></div></div><div>B. one good turn deserves another</div></div></div>
	<div><div><div><div></div></div><div>C. the squeaky wheel gets the grease</div></div></div>
	<div><div><div><div></div></div><div>D. faint heart never won fair maiden</div></div></div>

Question ID :	4410091400486
Option 1 ID :	4410095531636
Option 2 ID :	4410095531638
Option 3 ID :	4410095531639
Option 4 ID :	4410095531637
Status :	Answered
Chosen Option :	A

Q.1 2	Select the most appropriate option to fill in the blanks. In the newly decorated room, I chose ____ soft blue for the walls, added ____ accent of yellow, and placed a patterned rug while the designer suggested final touches.
Ans	<div><div><div><div></div></div><div>A. an, a</div></div></div>
	<div><div><div><div></div></div><div>B. a, a</div></div></div>
	<div><div><div><div></div></div><div>C. an, an</div></div></div>
	<div><div><div><div></div></div><div>D. a, an</div></div></div>

Question ID :	4410091401411
Option 1 ID :	4410095534957
Option 2 ID :	4410095534955
Option 3 ID :	4410095534956
Option 4 ID :	4410095534958
Status :	Answered
Chosen Option :	D

Q.1
3

Select the most appropriate option that can substitute the highlighted words in the given sentence.

The specialist spent considerable time **determining the nature of the disease** through careful examination.

Ans

☒ A. Treatment

☒ B. Therapy

☒ C. Diagnosis

☒ D. Prescription

Question ID :	4410091379225
Option 1 ID :	4410095448373
Option 2 ID :	4410095448375
Option 3 ID :	4410095448374
Option 4 ID :	4410095448376
Status :	Answered
Chosen Option :	C

Q.1
4

Select the option that rectifies the underlined incorrectly spelt word in the given sentence.

The philospher who kick-started that debate was Hilary Putnam, who went on to make groundbreaking advances in philosophy of language and philosophy of mind.

Ans

☒ A. philosopher

☒ B. phelosopher

☒ C. philosopher

☒ D. phelospher

Question ID :	4410091386110
Option 1 ID :	4410095475146
Option 2 ID :	4410095475145
Option 3 ID :	4410095475144
Option 4 ID :	4410095475143
Status :	Answered
Chosen Option :	C

Q.1
5

Select the most appropriate idiom that can substitute the underlined segment in the given sentence.

Completing the project in just one day was a task that was very difficult to accomplish.

Ans

☒ A. To turn over a new leaf

☒ B. To read between the lines

☒ C. To take the bull by the horns

☒ D. A tall order

Question ID :	4410091379467
Option 1 ID :	4410095449219
Option 2 ID :	4410095449220
Option 3 ID :	4410095449218
Option 4 ID :	4410095449217
Status :	Answered
Chosen Option :	C

Q.1 Select the most appropriate ANTONYM of the underlined word in the given sentence.
6 Even after facing several injuries, the instructor remained sanguine about her recovery and return to teaching yoga.

- Ans ☒ A. cognisant
- ☒ B. morose
- ☒ C. optimistic
- ☒ D. ominous

Question ID :	4410091385949
Option 1 ID :	4410095474504
Option 2 ID :	4410095474505
Option 3 ID :	4410095474503
Option 4 ID :	4410095474506
Status :	Answered
Chosen Option :	B

Q.1 Parts of a sentence are given below. The first part (1) is in the correct order, while the
7 other parts of the sentence are jumbled up. Arrange the parts in the correct order to form a meaningful and coherent sentence.

It is not good (1) / of the wicked persons (P)/ to overthrow (Q)/ to accept the help (R)/ the righteous persons (S)

- Ans ☒ A. RPQS
- ☒ B. RSQP
- ☒ C. QSRP
- ☒ D. QPRS

Question ID :	4410091378894
Option 1 ID :	4410095447054
Option 2 ID :	4410095447052
Option 3 ID :	4410095447053
Option 4 ID :	4410095447055
Status :	Answered
Chosen Option :	C

Q.1 Select the most appropriate ANTONYM of the underlined word in the given sentence.
8 As a speaker and an interviewer, Klein is exceedingly intelligent, fluid, and, if not conflict-averse, exactly, then polite.

- Ans ☒ A. rude
- ☒ B. courteous
- ☒ C. impossible
- ☒ D. relevant

Question ID :	4410091400523
Option 1 ID :	4410095531781
Option 2 ID :	4410095531780
Option 3 ID :	4410095531782
Option 4 ID :	4410095531783
Status :	Answered
Chosen Option :	A

Q.1 9	Select the most appropriate option that can substitute the underlined words in the given sentence. After retirement, he received a <u>regular payment from the company for his past service</u> .
Ans	<input checked="" type="checkbox"/> A. Stipend
	<input checked="" type="checkbox"/> B. Fee
	<input checked="" type="checkbox"/> C. Salary
	<input checked="" type="checkbox"/> D. Pension

Question ID :	4410091379248
Option 1 ID :	4410095448467
Option 2 ID :	4410095448468
Option 3 ID :	4410095448465
Option 4 ID :	4410095448466
Status :	Answered
Chosen Option :	D

Q.2 0	Identify the adjective usage error in the following sentence and select the option that rectifies it. The movie was so <u>boresome</u> that we walked out halfway through it.
Ans	<input checked="" type="checkbox"/> A. The movie was so boring that we walked out halfway through it.
	<input checked="" type="checkbox"/> B. The movie was so bored that we walked out halfway through it.
	<input checked="" type="checkbox"/> C. The movie was so boringly that we walked out halfway through it.
	<input checked="" type="checkbox"/> D. The movie was so bore that we walked out halfway through it.

Question ID :	4410091378752
Option 1 ID :	4410095446488
Option 2 ID :	4410095446486
Option 3 ID :	4410095446487
Option 4 ID :	4410095446489
Status :	Answered
Chosen Option :	A

Comprehension:	
Read the passage carefully and answer the questions that follow.	
<p>The rise of renewable energy sources has transformed the global approach to power generation. Solar, wind, and hydroelectric systems provide sustainable alternatives to fossil fuels, reducing greenhouse gas emissions and mitigating climate change. Many countries are investing heavily in research and infrastructure to increase efficiency and reliability of these technologies. Communities benefit through lower energy costs, improved air quality, and the creation of green jobs. However, the transition to renewables is not without challenges. Intermittency, storage limitations, and high initial costs require innovative solutions and government support. Public awareness campaigns are also essential to encourage energy conservation and responsible consumption. As technology advances, hybrid systems combining multiple energy sources are emerging, ensuring consistent supply while maintaining environmental benefits. The shift to renewable energy reflects a broader commitment to sustainable development, balancing economic growth with ecological responsibility and social well-being for current and future generations.</p>	
SubQuestion No : 21	
Q.2	Which of the following is the best summary of the passage?
1	
Ans	<div><div><div><div></div></div></div><div>A. Fossil fuels remain the only reliable source of energy worldwide.</div></div>
	<div><div><div><div></div></div></div><div>B. Renewable energy is unnecessary and costly for all countries.</div></div>
	<div><div><div><div></div></div></div><div>C. Energy conservation has no impact on society or the environment.</div></div>
	<div><div><div><div></div></div></div><div>D. Renewable energy is transforming power generation by offering sustainable solutions.</div></div>

Question ID :	4410091361848
Option 1 ID :	4410095379431
Option 2 ID :	4410095379432
Option 3 ID :	4410095379433
Option 4 ID :	4410095379430
Status :	Answered
Chosen Option :	D

Comprehension:	
Read the passage carefully and answer the questions that follow.	
<p>The rise of renewable energy sources has transformed the global approach to power generation. Solar, wind, and hydroelectric systems provide sustainable alternatives to fossil fuels, reducing greenhouse gas emissions and mitigating climate change. Many countries are investing heavily in research and infrastructure to increase efficiency and reliability of these technologies. Communities benefit through lower energy costs, improved air quality, and the creation of green jobs. However, the transition to renewables is not without challenges. Intermittency, storage limitations, and high initial costs require innovative solutions and government support. Public awareness campaigns are also essential to encourage energy conservation and responsible consumption. As technology advances, hybrid systems combining multiple energy sources are emerging, ensuring consistent supply while maintaining environmental benefits. The shift to renewable energy reflects a broader commitment to sustainable development, balancing economic growth with ecological responsibility and social well-being for current and future generations.</p>	
SubQuestion No : 22	
Q.2	Which is the most appropriate connection to real-life situations?
2	
Ans	<div><div><div><div></div></div></div><div>A. People prefer fossil fuels because they are pollution-free.</div></div>
	<div><div><div><div></div></div></div><div>B. Communities worldwide are investing in and adopting renewable energy solutions.</div></div>
	<div><div><div><div></div></div></div><div>C. Renewable energy is exclusively used in isolated laboratory experiments.</div></div>
	<div><div><div><div></div></div></div><div>D. Most cities avoid environmental policies to reduce costs.</div></div>

Question ID :	4410091361849
Option 1 ID :	4410095379435
Option 2 ID :	4410095379436
Option 3 ID :	4410095379437
Option 4 ID :	4410095379434
Status :	Answered
Chosen Option :	B

Comprehension:	
Read the passage carefully and answer the questions that follow.	
<p>The rise of renewable energy sources has transformed the global approach to power generation. Solar, wind, and hydroelectric systems provide sustainable alternatives to fossil fuels, reducing greenhouse gas emissions and mitigating climate change. Many countries are investing heavily in research and infrastructure to increase efficiency and reliability of these technologies. Communities benefit through lower energy costs, improved air quality, and the creation of green jobs. However, the transition to renewables is not without challenges. Intermittency, storage limitations, and high initial costs require innovative solutions and government support. Public awareness campaigns are also essential to encourage energy conservation and responsible consumption. As technology advances, hybrid systems combining multiple energy sources are emerging, ensuring consistent supply while maintaining environmental benefits. The shift to renewable energy reflects a broader commitment to sustainable development, balancing economic growth with ecological responsibility and social well-being for current and future generations.</p>	
SubQuestion No : 23	
Q.2	Identify the tone of the passage.
3	
Ans	<div><div><div>✖</div><div>A. Humorous and sarcastic</div></div><div><div>✖</div><div>B. Critical and hostile</div></div><div><div>✖</div><div>C. Emotional and nostalgic</div></div><div><div>✔</div><div>D. Informative and balanced</div></div></div>

Question ID :	4410091361850
Option 1 ID :	4410095379440
Option 2 ID :	4410095379438
Option 3 ID :	4410095379439
Option 4 ID :	4410095379441
Status :	Answered
Chosen Option :	D

Comprehension:	
Read the passage carefully and answer the questions that follow.	
<p>The rise of renewable energy sources has transformed the global approach to power generation. Solar, wind, and hydroelectric systems provide sustainable alternatives to fossil fuels, reducing greenhouse gas emissions and mitigating climate change. Many countries are investing heavily in research and infrastructure to increase efficiency and reliability of these technologies. Communities benefit through lower energy costs, improved air quality, and the creation of green jobs. However, the transition to renewables is not without challenges. Intermittency, storage limitations, and high initial costs require innovative solutions and government support. Public awareness campaigns are also essential to encourage energy conservation and responsible consumption. As technology advances, hybrid systems combining multiple energy sources are emerging, ensuring consistent supply while maintaining environmental benefits. The shift to renewable energy reflects a broader commitment to sustainable development, balancing economic growth with ecological responsibility and social well-being for current and future generations.</p>	
SubQuestion No : 24	
Q.2	What is the ANTONYM of 'sustainable', in the context of the passage?
4	
Ans	<div><div><div>✖</div><div>A. Reliable</div></div><div><div>✔</div><div>B. Temporary</div></div><div><div>✖</div><div>C. Renewable</div></div><div><div>✖</div><div>D. Stable</div></div></div>

Question ID :	4410091361851
Option 1 ID :	4410095379445
Option 2 ID :	4410095379442
Option 3 ID :	4410095379443
Option 4 ID :	4410095379444
Status :	Answered
Chosen Option :	B

	Comprehension:
	Read the passage carefully and answer the questions that follow.
	The rise of renewable energy sources has transformed the global approach to power generation. Solar, wind, and hydroelectric systems provide sustainable alternatives to fossil fuels, reducing greenhouse gas emissions and mitigating climate change. Many countries are investing heavily in research and infrastructure to increase efficiency and reliability of these technologies. Communities benefit through lower energy costs, improved air quality, and the creation of green jobs. However, the transition to renewables is not without challenges. Intermittency, storage limitations, and high initial costs require innovative solutions and government support. Public awareness campaigns are also essential to encourage energy conservation and responsible consumption. As technology advances, hybrid systems combining multiple energy sources are emerging, ensuring consistent supply while maintaining environmental benefits. The shift to renewable energy reflects a broader commitment to sustainable development, balancing economic growth with ecological responsibility and social well-being for current and future generations.
	SubQuestion No : 25
Q.2	Select an appropriate title for the passage.
5	
Ans	<div><div><div>✖</div><div>A. Fossil Fuels and Industrial Pollution</div></div></div>
	<div><div><div>✔</div><div>B. The Global Shift to Renewable Energy</div></div></div>
	<div><div><div>✖</div><div>C. The History of Coal and Oil</div></div></div>
	<div><div><div>✖</div><div>D. Energy Wastage in Urban Communities</div></div></div>

Question ID :	4410091361852
Option 1 ID :	4410095379447
Option 2 ID :	4410095379446
Option 3 ID :	4410095379449
Option 4 ID :	4410095379448
Status :	Answered
Chosen Option :	B

Section : Computer Knowledge

Q.1	Which view is best for rearranging the order of slides?
Ans	<div><div><div>✔</div><div>A. Slide Sorter View</div></div></div>
	<div><div><div>✖</div><div>B. Outline View</div></div></div>
	<div><div><div>✖</div><div>C. Reading View</div></div></div>
	<div><div><div>✖</div><div>D. Normal View</div></div></div>

Question ID :	4410091021344
Option 1 ID :	4410094036900
Option 2 ID :	4410094036902
Option 3 ID :	4410094036901
Option 4 ID :	4410094036899
Status :	Not Answered
Chosen Option :	--

Q.2	In Microsoft Word, what happens to the original text when you use the "Cut" command followed by "Paste" in a different location within the same document?
Ans	<input checked="" type="checkbox"/> A. The original text remains in its location and a copy appears in the new location.
	<input checked="" type="checkbox"/> B. Both the original and new locations will contain the text until you save the document.
	<input checked="" type="checkbox"/> C. The original text is deleted permanently and cannot be retrieved.
	<input checked="" type="checkbox"/> D. The original text is removed from its location and appears only in the new location.

Question ID :	4410091033905
Option 1 ID :	4410094087270
Option 2 ID :	4410094087273
Option 3 ID :	4410094087272
Option 4 ID :	4410094087271
Status :	Answered
Chosen Option :	B

Q.3	What is the full form of GPU in a computer?
Ans	<input checked="" type="checkbox"/> A. Graphics Provider Unit
	<input checked="" type="checkbox"/> B. General Protocol Unit
	<input checked="" type="checkbox"/> C. Geographical Processing Unit
	<input checked="" type="checkbox"/> D. Graphics Processing unit

Question ID :	441009400122
Option 1 ID :	4410091565946
Option 2 ID :	4410091565947
Option 3 ID :	4410091565949
Option 4 ID :	4410091565948
Status :	Marked For Review
Chosen Option :	D

Q.4	If a user types 3/4 into a cell in an MS-Excel spreadsheet in Microsoft 365, which result is most likely to appear by default?
Ans	<input checked="" type="checkbox"/> A. 3:04
	<input checked="" type="checkbox"/> B. 03-Apr
	<input checked="" type="checkbox"/> C. 3 divided by 4
	<input checked="" type="checkbox"/> D. 0.75

Question ID :	441009848650
Option 1 ID :	4410093347428
Option 2 ID :	4410093347426
Option 3 ID :	4410093347427
Option 4 ID :	4410093347425
Status :	Answered
Chosen Option :	D

Q.5 Among the following, in which does GIMP (GNU Image Manipulation Program) fall?

- Ans ☒ A. Application Software
- ☐ B. Operating System
- ☐ C. System Utility
- ☐ D. System Software

Question ID :	441009395645
Option 1 ID :	4410091548064
Option 2 ID :	4410091548066
Option 3 ID :	4410091548067
Option 4 ID :	4410091548065
Status :	Answered
Chosen Option :	A

Q.6 While preparing a draft for review, the author wants all tracked insertions, deletions and reviewer comments to be included in the printed version. Which print-related setting in Word ensures this output?

- Ans ☐ A. Print Background Colors
- ☒ B. Print Markup
- ☐ C. Print Hidden Text
- ☐ D. Print Document Properties

Question ID :	441009873492
Option 1 ID :	4410093447382
Option 2 ID :	4410093447379
Option 3 ID :	4410093447381
Option 4 ID :	4410093447380
Status :	Marked For Review
Chosen Option :	D

Q.7 The principle 'Garbage In, Garbage Out' (GIGO) means what?

- Ans ☐ A. Computers can correct any wrong input automatically.
- ☐ B. Computers learn from past data.
- ☐ C. Computers have high intelligence.
- ☒ D. Incorrect input will produce incorrect output.

Question ID :	441009749377
Option 1 ID :	4410092951338
Option 2 ID :	4410092951340
Option 3 ID :	4410092951341
Option 4 ID :	4410092951339
Status :	Answered
Chosen Option :	D

Q.8	Among the following, which is called the heart of the computer system?
Ans	<input checked="" type="checkbox"/> A. CPU
	<input type="checkbox"/> B. Joystick
	<input type="checkbox"/> C. RAM
	<input type="checkbox"/> D. ROM

Question ID :	441009395452
Option 1 ID :	4410091547319
Option 2 ID :	4410091547316
Option 3 ID :	4410091547317
Option 4 ID :	4410091547318
Status :	Answered
Chosen Option :	A

Q.9	What is the approximate default column width setting in Microsoft Excel?
Ans	<input checked="" type="checkbox"/> A. 8.43 characters
	<input type="checkbox"/> B. 10.00 points
	<input type="checkbox"/> C. 20.00 pixels
	<input type="checkbox"/> D. 12.75 points

Question ID :	441009910198
Option 1 ID :	4410093594935
Option 2 ID :	4410093594936
Option 3 ID :	4410093594938
Option 4 ID :	4410093594937
Status :	Answered
Chosen Option :	A

Q.10	What is the main use of WAN in Business and Education Networking?
Ans	<input type="checkbox"/> A. Connecting multiple devices locally
	<input checked="" type="checkbox"/> B. Linking branches in different cities or countries
	<input type="checkbox"/> C. Playing offline games
	<input type="checkbox"/> D. Reducing hardware usage

Question ID :	441009930192
Option 1 ID :	4410093674643
Option 2 ID :	4410093674645
Option 3 ID :	4410093674642
Option 4 ID :	4410093674644
Status :	Answered
Chosen Option :	B

Q.1	Which feature / keyboard shortcut in Microsoft Excel allows you to search for and replace a specific word or value across the entire worksheet?
1	
Ans	<input checked="" type="checkbox"/> A. Filter
	<input checked="" type="checkbox"/> B. Ctrl + C
	<input checked="" type="checkbox"/> C. Ctrl + H
	<input checked="" type="checkbox"/> D. Data Validation

Question ID :	441009910204
Option 1 ID :	4410093594959
Option 2 ID :	4410093594961
Option 3 ID :	4410093594960
Option 4 ID :	4410093594962
Status :	Answered
Chosen Option :	C

Q.1	What does CD stand for in Optical storage medium?
2	
Ans	<input checked="" type="checkbox"/> A. Central Data
	<input checked="" type="checkbox"/> B. Computer Drive
	<input checked="" type="checkbox"/> C. Control Device
	<input checked="" type="checkbox"/> D. Compact Disc

Question ID :	441009643132
Option 1 ID :	4410092526700
Option 2 ID :	4410092526701
Option 3 ID :	4410092526698
Option 4 ID :	4410092526699
Status :	Answered
Chosen Option :	D

Q.1	What is the main purpose of an application software?
3	
Ans	<input checked="" type="checkbox"/> A. To manage hardware resources of a computer
	<input checked="" type="checkbox"/> B. To allow users to perform specific tasks such as word processing or web browsing
	<input checked="" type="checkbox"/> C. To establish communication between hardware and software
	<input checked="" type="checkbox"/> D. To control the functioning of an operating system

Question ID :	44100960828
Option 1 ID :	441009242273
Option 2 ID :	441009242274
Option 3 ID :	441009242276
Option 4 ID :	441009242275
Status :	Answered
Chosen Option :	B

Q.1 4	To resize an object without keeping the proportions, you should drag the:
Ans	<input checked="" type="checkbox"/> A. Corner handle while holding Shift
	<input checked="" type="checkbox"/> B. Side handle
	<input checked="" type="checkbox"/> C. Top border
	<input checked="" type="checkbox"/> D. Rotate handle

Question ID :	441009930072
Option 1 ID :	4410093674233
Option 2 ID :	4410093674232
Option 3 ID :	4410093674235
Option 4 ID :	4410093674234
Status :	Answered
Chosen Option :	A

Q.1 5	Which statement is True or FALSE regarding adding pictures in Microsoft PowerPoint 2016? (i) Online pictures are stored locally within your presentation file after insertion. (ii) Image Alt Text is automatically generated for inserted pictures.
Ans	<input checked="" type="checkbox"/> A. (i) False, (ii) False
	<input checked="" type="checkbox"/> B. (i) True, (ii) True
	<input checked="" type="checkbox"/> C. (i) False, (ii) True
	<input checked="" type="checkbox"/> D. (i) True, (ii) False

Question ID :	441009876159
Option 1 ID :	4410093458250
Option 2 ID :	4410093458247
Option 3 ID :	4410093458249
Option 4 ID :	4410093458248
Status :	Answered
Chosen Option :	B

Q.1 6	What is the purpose of the 'Hide' feature for rows and columns in MS Excel?
Ans	<input checked="" type="checkbox"/> A. To temporarily remove rows and columns from view
	<input checked="" type="checkbox"/> B. To insert new rows and columns
	<input checked="" type="checkbox"/> C. To delete rows and columns
	<input checked="" type="checkbox"/> D. To change the font style

Question ID :	44100967393
Option 1 ID :	441009268332
Option 2 ID :	441009268331
Option 3 ID :	441009268333
Option 4 ID :	441009268330
Status :	Answered
Chosen Option :	A

Q.1 7	A user needs to format an MS Word document for professional printing with 1-inch margins on all sides. Where should they go to make this change?
Ans	<div><div><div><div></div></div><div>A. Review tab > Margins</div></div></div>
	<div><div><div><div></div></div><div>B. Home tab > Margins</div></div></div>
	<div><div><div><div></div></div><div>C. Layout tab > Margins</div></div></div>
	<div><div><div><div></div></div><div>D. Insert tab > Margins</div></div></div>

Question ID :	441009705223
Option 1 ID :	4410092774922
Option 2 ID :	4410092774924
Option 3 ID :	4410092774925
Option 4 ID :	4410092774923
Status :	Marked For Review
Chosen Option :	C

Q.1 8	What happens when you press Enter at the end of a bulleted list item in MS-Word?
Ans	<div><div><div><div></div></div><div>A. A new bullet point is automatically created.</div></div></div>
	<div><div><div><div></div></div><div>B. A numbered list starts instead.</div></div></div>
	<div><div><div><div></div></div><div>C. The bullet formatting is removed.</div></div></div>
	<div><div><div><div></div></div><div>D. The text moves to the next page.</div></div></div>

Question ID :	4410091029417
Option 1 ID :	4410094069327
Option 2 ID :	4410094069329
Option 3 ID :	4410094069326
Option 4 ID :	4410094069328
Status :	Answered
Chosen Option :	A

Q.1 9	What is the main purpose of a search engine?
Ans	<div><div><div><div></div></div><div>A. Send emails</div></div></div>
	<div><div><div><div></div></div><div>B. Retrieve information</div></div></div>
	<div><div><div><div></div></div><div>C. Download software</div></div></div>
	<div><div><div><div></div></div><div>D. Create websites</div></div></div>

Question ID :	441009882551
Option 1 ID :	4410093483871
Option 2 ID :	4410093483873
Option 3 ID :	4410093483874
Option 4 ID :	4410093483872
Status :	Answered
Chosen Option :	B

Q.20	What is a key distinction between ROM and RAM?
Ans	<div><div><div><div><div></div></div><div>A. ROM performs faster than RAM.</div></div><div><div><div></div></div><div>B. RAM holds temporary data, while ROM contains permanent system code.</div></div><div><div><div></div></div><div>C. RAM retains data after the system shuts down, unlike ROM.</div></div><div><div><div></div></div><div>D. ROM is used for multitasking, while RAM stores boot instructions.</div></div></div></div>

Question ID :	441009397487
Option 1 ID :	4410091555390
Option 2 ID :	4410091555389
Option 3 ID :	4410091555391
Option 4 ID :	4410091555388
Status :	Answered
Chosen Option :	B

