
	DELHI DEVELOPMENT AUTHORITY RECRUITMENT CELL VIKAS SADAN, INA, NEW DELHI - 110023 https://www.dda.gov.in
	Advertisement No. 02/2023/Recrtt. Cell/Pers./DDA
Test Date	26/09/2023
Test Time	5:30 PM - 6:30 PM
Subject	Assistant Section Officer (ASO)

Section : General Intelligence and Reasoning

Q.1 Select the option that is related to the third word in the same way as the second word is related to the first word.
SMILE : LAUGHTER :: LUKEWARM : ?

- Ans**
- ☒ 1. FREEZING
 - ☒ 2. BOILING
 - ☒ 3. COLD
 - ☒ 4. WARM

Question ID : 630680384695
 Option 1 ID : 6306801499666
 Option 2 ID : 6306801499667
 Option 3 ID : 6306801499669
 Option 4 ID : 6306801499668

Status : Answered
 Chosen Option : 2

Q.2 In the question, a statement is given, followed by two conclusions, I and II. You have to consider the statement to be true even if it seems to be at variance from commonly known facts. You have to decide which of the given conclusions, if any, follows from the given statement.

Statement:

Whole numbers are the set of natural numbers along with 0.

Conclusion:

Conclusion I: All natural numbers are whole numbers.

Conclusion II: All whole numbers are not natural numbers.

- Ans**
- ☒ 1. Only I follows
 - ☒ 2. Only II follows
 - ☒ 3. Both I and II follows
 - ☒ 4. Neither I nor II follows

Question ID : 630680384684
 Option 1 ID : 6306801499622
 Option 2 ID : 6306801499623
 Option 3 ID : 6306801499624
 Option 4 ID : 6306801499625

Status : Answered
 Chosen Option : 3

Test Prime

**ALL EXAMS,
ONE SUBSCRIPTION**



70,000+
Mock Tests



**Personalised
Report Card**



**Unlimited
Re-Attempt**



600+
Exam Covered



**Previous Year
Papers**



**500%
Refund**



ATTEMPT FREE MOCK NOW

Q.3 Find out the wrong term in the given series.

DI, EH, GF, JC, NY, TS

- Ans
- ☒ 1. GF
 - ☒ 2. NY
 - ☒ 3. TS
 - ☒ 4. EH

Question ID : 630680384721

Option 1 ID : 6306801499771

Option 2 ID : 6306801499772

Option 3 ID : 6306801499773

Option 4 ID : 6306801499770

Status : Answered

Chosen Option : 3

Q.4 The positions of how many alphabets will remain unchanged, if each of the alphabets in the word 'CHAMPION' is arranged in alphabetical order from left to right?

- Ans
- ☒ 1. One
 - ☒ 2. Three
 - ☒ 3. More than three
 - ☒ 4. Two

Question ID : 630680386158

Option 1 ID : 6306801505343

Option 2 ID : 6306801505344

Option 3 ID : 6306801505345

Option 4 ID : 6306801505342

Status : Answered

Chosen Option : 1

Q.5 Which of the following option follows the same relation as shown below?

D-4-Z-6-T-2-R, P-3-M-4-I-3-F

- Ans
- ☒ 1. N-3-Q-4-U-2-W
 - ☒ 2. W-2-U-3-Q-4-O
 - ☒ 3. V-5-Q-3-N-4-J
 - ☒ 4. D-4-I-1-J-5-O

Question ID : 630680384595

Option 1 ID : 6306801499267

Option 2 ID : 6306801499266

Option 3 ID : 6306801499268

Option 4 ID : 6306801499269

Status : Answered

Chosen Option : 1

Q.6 In the following triad, each group of letters is related to the subsequent one following a certain logic.

GSMB – THNY - UIOZ

Which of the following option follows the same logic?

- Ans** ✓ 1. LRWT – OIDG - PJEH
 ✗ 2. JKMS – QPNG - RQPJ
 ✗ 3. JKMS – QPOI - RQPJ
 ✗ 4. LRWT – ORDG - PSEH

Question ID : 630680384596

Option 1 ID : 6306801499271

Option 2 ID : 6306801499272

Option 3 ID : 6306801499270

Option 4 ID : 6306801499273

Status : Answered

Chosen Option : 1

Q.7 Select the odd number in the following number series:

37, 74, 121, 148, 185

- Ans** ✓ 1. 121
 ✗ 2. 148
 ✗ 3. 185
 ✗ 4. 74

Question ID : 630680384502

Option 1 ID : 6306801498895

Option 2 ID : 6306801498896

Option 3 ID : 6306801498897

Option 4 ID : 6306801498894

Status : Answered

Chosen Option : 1

Q.8 Four word pairs have been given, out of which three are alike in some manner and one is different. Select the odd word pair.

- Ans** ✓ 1. CAPABLE : COMPETENT
 ✗ 2. ASCEND : DECLINE
 ✗ 3. ALLY : ENEMY
 ✗ 4. ASLEEP : AWAKE

Question ID : 630680384707

Option 1 ID : 6306801499717

Option 2 ID : 6306801499714

Option 3 ID : 6306801499716

Option 4 ID : 6306801499715

Status : Answered

Chosen Option : 1

Q.9 How many symbols are there in the given series that are immediately preceded by a letter and immediately followed by a symbol?

V ^ # L D @ B < O - ? E O ! = Y A # > T (S S X R

- Ans**
- ☒ 1. Three
 - ☒ 2. Two
 - ☒ 3. One
 - ☒ 4. Four

Question ID : 630680386162

Option 1 ID : 6306801505359

Option 2 ID : 6306801505360

Option 3 ID : 6306801505358

Option 4 ID : 6306801505361

Status : Answered

Chosen Option : 4

Q.10 Select the odd number in the following number series.

108, 135, 162, 188, 216, 243

- Ans**
- ☒ 1. 216
 - ☒ 2. 108
 - ☒ 3. 188
 - ☒ 4. 162

Question ID : 630680384666

Option 1 ID : 6306801499553

Option 2 ID : 6306801499550

Option 3 ID : 6306801499552

Option 4 ID : 6306801499551

Status : Answered

Chosen Option : 3

Q.11 Which of the following letter will replace the question mark (?) in the given series?

U, R, ?, L, I, F

- Ans**
- ☒ 1. L
 - ☒ 2. M
 - ☒ 3. K
 - ☒ 4. O

Question ID : 630680384526

Option 1 ID : 6306801498991

Option 2 ID : 6306801498992

Option 3 ID : 6306801498990

Option 4 ID : 6306801498993

Status : Answered

Chosen Option : 4

Q.12 Which one of the four interchanges in signs and numbers would make the given equation correct?

$$2 - 7 + 5 = 10$$

Ans ☒ 1. Equation is already balanced

☒ 2. + and -, 7 and 5

☒ 3. + and -, 2 and 7

☒ 4. + and -, 2 and 5

Question ID : 630680386164

Option 1 ID : 6306801505369

Option 2 ID : 6306801505366

Option 3 ID : 6306801505368

Option 4 ID : 6306801505367

Status : Answered

Chosen Option : 4

Q.13 Consider the following table where each letter is denoted by a symbol or a digit as shown.

Read the given conditions carefully and identify combinations that correctly represents 'HMYT' based on the following coding system and the conditions that follow.

Conditions:

(i) If the first letter is a vowel and the last letter is a consonant, both are to be coded as the code of vowel

(ii) If both first and last letters are consonants, both are to be coded as 'S'

(iii) If first letter is a consonant and last letter is a vowel, the codes for first and last letters are to be interchanged.

Digit / Symbol	%	2	*	6	1	!	@	3	8	\$	9	5	?
Letter	A	H	I	F	H	V	M	D	X	M	L	S	W

Ans ☒ 1. 2!@*

☒ 2. 2@!*

☒ 3. *@!2

☒ 4. *!@2

Question ID : 630680384779

Option 1 ID : 6306801500002

Option 2 ID : 6306801500004

Option 3 ID : 6306801500005

Option 4 ID : 6306801500003

Status : Answered

Chosen Option : 3

Q.14 How many pairs of letters are there in the word "SQUARED" that have as many letters between them as in the alphabetical order?

Ans ☒ 1. 3

☒ 2. 1

☒ 3. 4

☒ 4. 2

Question ID : 630680384647

Option 1 ID : 6306801499477

Option 2 ID : 6306801499475

Option 3 ID : 6306801499474

Option 4 ID : 6306801499476

Status : Answered

Chosen Option : 4

Q.15 Three Statements are given followed by two conclusions numbered I and II. Assuming the statements to be true, even if they seem to be at variance with commonly known facts, decide which of the conclusions logically follow(s) from the statements.

Statement:

Statement I: Some windows are not doors.

Statement II: Some doors are fans.

Statement III: No fan is a bulb.

Conclusion:

Conclusion I: All bulbs being doors is a possibility.

Conclusion II: All doors being windows is a possibility.

Ans ☒ 1. Both conclusions I and II follow

☐ 2. Only conclusion I follows

☐ 3. Only conclusion II follows

☐ 4. Neither conclusion I nor II follows

Question ID : 630680384734

Option 1 ID : 6306801499824

Option 2 ID : 6306801499822

Option 3 ID : 6306801499823

Option 4 ID : 6306801499825

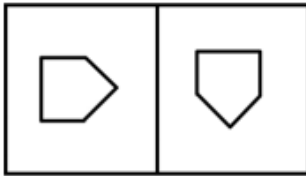
Status : Answered

Chosen Option : 2

Q.16 Identify the odd figure pair.

Ans

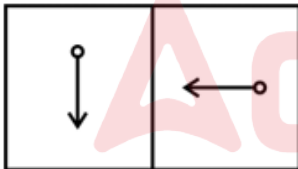
☐ 1.



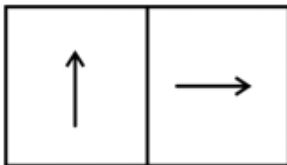
☒ 2.



☐ 3.



☐ 4.



Question ID : 630680384843

Option 1 ID : 6306801500261

Option 2 ID : 6306801500258

Option 3 ID : 6306801500260

Option 4 ID : 6306801500259

Status : Answered

Chosen Option : 2

Q.17 In the following question three statements are given, followed by two conclusions numbered I and II. Assume three given statements to be true even if they seem to be at variance with commonly known facts and then decide which of the given conclusion logically follows from the two statements disregarding commonly known facts.

Statement:

I. Only a few red are yellow.

II. No yellow is blue.

III. All blue are green.

Conclusions:

I: Some green are not yellow.

II: All red being yellow is not a possibility.

- Ans**
- ☒ 1. Neither conclusion I nor II follows
 - ☒ 2. Only conclusion I follows
 - ☒ 3. Only conclusion II follows
 - ☒ 4. Both conclusions I and II follow

Question ID : 630680386214

Option 1 ID : 6306801505569

Option 2 ID : 6306801505566

Option 3 ID : 6306801505567

Option 4 ID : 6306801505568

Status : Answered

Chosen Option : 4

Q.18 Eight boxes B1, B2, B3, B4, B5, B6, B7 and B8 are placed one above another. Only three boxes are placed between boxes B4 and B6. Box B2 is placed immediately below box B5. Two boxes are placed between B2 and B3. Only one box is placed between boxes B4 and B1 which is above B4. Box B6 is placed above box B7 which is placed at the bottom. Box B8 is neither placed at the top nor below box B1.

How many boxes are in between box B5 and box B7?

- Ans**
- ☒ 1. 4
 - ☒ 2. 3
 - ☒ 3. 2
 - ☒ 4. 1

Question ID : 630680384814

Option 1 ID : 6306801500145

Option 2 ID : 6306801500142

Option 3 ID : 6306801500144

Option 4 ID : 6306801500143

Status : Answered

Chosen Option : 2

Q.19 James said to David, "That boy playing with the football is the younger of the two brothers of the daughter of my father's wife." How is the boy playing football related to James ?

- Ans**
- ☒ 1. Brother's son
 - ☒ 2. Brother-in-law
 - ☒ 3. Brother
 - ☒ 4. Son

Question ID : 630680384574

Option 1 ID : 6306801499185

Option 2 ID : 6306801499184

Option 3 ID : 6306801499182

Option 4 ID : 6306801499183

Status : Marked For Review

Chosen Option : 3

- Q.20** Consider the following table where each letter is denoted by a symbol or a digit as shown.
Read the given conditions carefully and identify combinations that correctly represents '7#6\$?2' based on the following coding system and the conditions that follow.
Conditions:
(i) If the first element is an even digit and the last element is a symbol, both are to be coded as the code for the even digit.
(ii) If the first element is a symbol and the last element is an odd digit, their codes are to be interchanged.
(iii) If the first element is an odd digit and the last element is an even digit, both are to be coded as the code for the odd digit.

Digit / Symbol	6	\$	2	#	^	1	7	?	9	5	@	4	%
Letter	S	G	I	B	E	O	P	D	Q	J	C	Z	A

- Ans**
- ☒ 1. PBGSDI
 - ☒ 2. PBSGDP
 - ☒ 3. PBSGDI
 - ☒ 4. PBSDGP

Question ID : 630680384781
Option 1 ID : 6306801500012
Option 2 ID : 6306801500011
Option 3 ID : 6306801500010
Option 4 ID : 6306801500013
Status : Answered
Chosen Option : 2

- Q.21** Six friends namely Anish, Bijay, Madan, Damini, Pinki and Imran are sitting on a bench facing north. Bijay sits to the immediate right of Anish. Anish and Imran sit at the corners. Damini sits in between Madan and Pinki. Who sits fourth to the left of Imran?

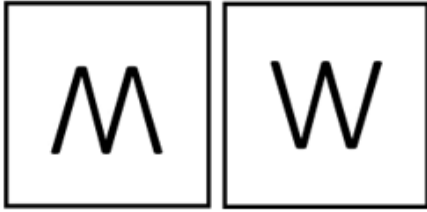
- Ans**
- ☒ 1. Madan
 - ☒ 2. Damini
 - ☒ 3. Bijay
 - ☒ 4. Anish

Question ID : 630680384519
Option 1 ID : 6306801498963
Option 2 ID : 6306801498965
Option 3 ID : 6306801498964
Option 4 ID : 6306801498962
Status : Answered
Chosen Option : 3

Q.22 Choose the figure pair which is different from the rest.

Ans

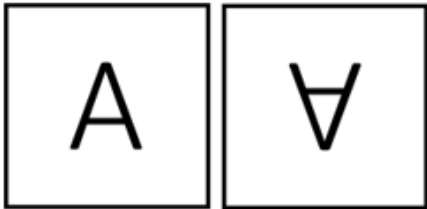
✗ 1.



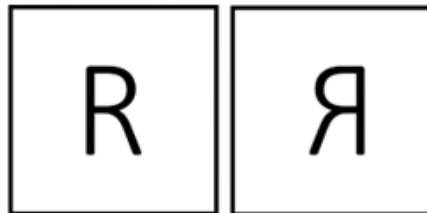
✗ 2.



✗ 3.



✓ 4.



Question ID : 630680384746

Option 1 ID : 6306801499870

Option 2 ID : 6306801499871

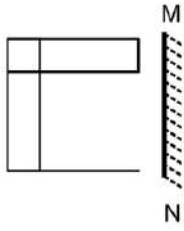
Option 3 ID : 6306801499872

Option 4 ID : 6306801499873

Status : Answered

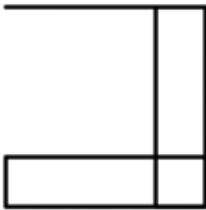
Chosen Option : 4

Q.23 Select the correct mirror image of the given figure when the mirror MN is placed to the right side of the figure.

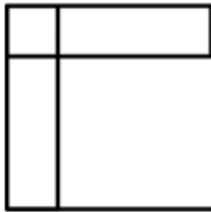


Ans

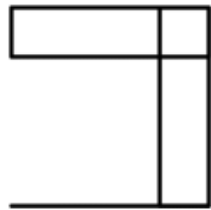
✗ 1.



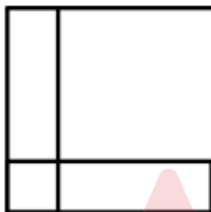
✗ 2.



✓ 3.



✗ 4.



Question ID : 630680384737

Option 1 ID : 6306801499834

Option 2 ID : 6306801499837

Option 3 ID : 6306801499835

Option 4 ID : 6306801499836

Status : Answered

Chosen Option : 3

Q.24 If 'X × Y' means 'X is the sister of Y'.
If 'X + Y' means 'X is the brother of Y'.
If 'X ÷ Y' means 'X is the son of Y'.
If 'X – Y' means 'X is the daughter of Y'.
How is H related to I in the expression 'H × K - J ÷ I'?

- Ans
- ☒ 1. Daughter
 - ☒ 2. Son's daughter
 - ☒ 3. Sister
 - ☒ 4. Mother

Question ID : 630680384669
Option 1 ID : 6306801499562
Option 2 ID : 6306801499565
Option 3 ID : 6306801499563
Option 4 ID : 6306801499564
Status : Answered
Chosen Option : 2

Q.25 Four letter-clusters have been given, out of which three are alike in some manner and one is different. Select the odd letter-cluster.

- Ans
- ☒ 1. QPNK
 - ☒ 2. LKIF
 - ☒ 3. GFDA
 - ☒ 4. ZYWS

Question ID : 630680384703
Option 1 ID : 6306801499700
Option 2 ID : 6306801499699
Option 3 ID : 6306801499698
Option 4 ID : 6306801499701
Status : Answered
Chosen Option : 4

Section : General Awareness

Q.1 Choose the odd one out (Hint: Indian Classical Language):

- Ans
- ☒ 1. Pali, Sanskrit, Kannada, Hindi, Malayalam, Odia.
 - ☒ 2. Tamil, Sanskrit, Kannada, Telugu, Malayalam, Odia.
 - ☒ 3. Pali, Sanskrit, Kannada, Telugu, Malayalam, Odia.
 - ☒ 4. Tamil, Sanskrit, Kannada, Hindi, Malayalam, Odia.

Question ID : 630680384175
Option 1 ID : 6306801497592
Option 2 ID : 6306801497591
Option 3 ID : 6306801497593
Option 4 ID : 6306801497590
Status : Answered
Chosen Option : 2

Q.2 What is the name of the nationwide survey undertaken by the Ministry of Social Justice and Empowerment to enumerate all people engaged in hazardous cleaning of sewers and septic tanks?

Ans ✓ 1. NAMASTE: National Action for Mechanised Sanitation Ecosystem

✗ 2. Aashwasan

✗ 3. Paalan

✗ 4. Pradhan Mantri Vaya Vandana Yojana

Question ID : 630680384249

Option 1 ID : 6306801497884

Option 2 ID : 6306801497883

Option 3 ID : 6306801497885

Option 4 ID : 6306801497882

Status : Answered

Chosen Option : 1

Q.3 Which state in India has highest literacy rate as per 2011 census data?

Ans ✗ 1. Karnataka

✓ 2. Kerala

✗ 3. Bengal

✗ 4. Gujarat

Question ID : 630680386469

Option 1 ID : 6306801506589

Option 2 ID : 6306801506586

Option 3 ID : 6306801506587

Option 4 ID : 6306801506588

Status : Answered

Chosen Option : 2

Q.4 Which of the following is the northern part of the western coast?

Ans ✗ 1. Coromandel coast

✗ 2. Malabar coast

✗ 3. Kannad plain

✓ 4. Konkan

Question ID : 630680384307

Option 1 ID : 6306801498116

Option 2 ID : 6306801498117

Option 3 ID : 6306801498114

Option 4 ID : 6306801498115

Status : Answered

Chosen Option : 1

Q.5 Which Mughal emperor built the Taj Mahal as a mausoleum for his wife?

Ans ✗ 1. Akbar

✓ 2. Shah Jahan

✗ 3. Aurangzeb

✗ 4. Jahangir

Question ID : 630680386478

Option 1 ID : 6306801506625

Option 2 ID : 6306801506624

Option 3 ID : 6306801506623

Option 4 ID : 6306801506622

Status : Answered

Chosen Option : 2

Q.6 Which national park in India is known for its population of endangered one-horned rhinoceros?

- Ans**
- ☒ 1. Sundarbans National Park
 - ☒ 2. Kaziranga National Park
 - ☒ 3. Jim Corbett National Park
 - ☒ 4. Gir Forest National Park

Question ID : 630680384423
 Option 1 ID : 6306801498580
 Option 2 ID : 6306801498579
 Option 3 ID : 6306801498578
 Option 4 ID : 6306801498581
 Status : Answered
 Chosen Option : 2

Q.7 In which year was the Planning Commission set up in India?

- Ans**
- ☒ 1. 1950
 - ☒ 2. 1933
 - ☒ 3. 1947
 - ☒ 4. 1956

Question ID : 630680384297
 Option 1 ID : 6306801498076
 Option 2 ID : 6306801498077
 Option 3 ID : 6306801498075
 Option 4 ID : 6306801498074
 Status : Answered
 Chosen Option : 1

Q.8 Which of the following is a dance form of Assam?

- Ans**
- ☒ 1. Jhumur
 - ☒ 2. Kuchipudi
 - ☒ 3. Mohiniyattam
 - ☒ 4. Odissi

Question ID : 630680384064
 Option 1 ID : 6306801497146
 Option 2 ID : 6306801497149
 Option 3 ID : 6306801497147
 Option 4 ID : 6306801497148
 Status : Answered
 Chosen Option : 1

Q.9 In which of the following states of India is the Puli Kali local festival celebrated?

- Ans**
- ☒ 1. Kerala
 - ☒ 2. Manipur
 - ☒ 3. Chennai
 - ☒ 4. Assam

Question ID : 630680384068
 Option 1 ID : 6306801497162
 Option 2 ID : 6306801497164
 Option 3 ID : 6306801497165
 Option 4 ID : 6306801497163
 Status : Answered
 Chosen Option : 4

Q.10 In terms of crime against woman, which state has reported highest rape cases?

- Ans
- ☒ 1. Uttar Pradesh
 - ☒ 2. West Bengal
 - ☒ 3. Assam
 - ☒ 4. Rajasthan

Question ID : 630680384384
 Option 1 ID : 6306801498425
 Option 2 ID : 6306801498423
 Option 3 ID : 6306801498424
 Option 4 ID : 6306801498422
 Status : Answered
 Chosen Option : 1

Q.11 What is the range of Marginal Propensity to Consume (MPC)?

- Ans
- ☒ 1. 0-1
 - ☒ 2. 0-2
 - ☒ 3. 0-3
 - ☒ 4. 0-5

Question ID : 630680384283
 Option 1 ID : 6306801498019
 Option 2 ID : 6306801498021
 Option 3 ID : 6306801498018
 Option 4 ID : 6306801498020
 Status : Not Answered
 Chosen Option : --

Q.12 Which of the following is the highest Literary Award for prominent authors given in India?

- Ans
- ☒ 1. Saraswati Samman
 - ☒ 2. Sahitya Akademi Award
 - ☒ 3. Jnanpith Award
 - ☒ 4. Yuva Puraskar

Question ID : 630680384264
 Option 1 ID : 6306801497945
 Option 2 ID : 6306801497943
 Option 3 ID : 6306801497942
 Option 4 ID : 6306801497944
 Status : Answered
 Chosen Option : 1

Q.13 Which Indian city has the longest metro network in the country?

- Ans
- ☒ 1. Chennai
 - ☒ 2. Kolkata
 - ☒ 3. Mumbai
 - ☒ 4. Delhi

Question ID : 630680384420
 Option 1 ID : 6306801498569
 Option 2 ID : 6306801498568
 Option 3 ID : 6306801498567
 Option 4 ID : 6306801498566
 Status : Answered
 Chosen Option : 4

Q.14 What is the fifth incarnation of Vishnu known as?

- Ans ☒ 1. Vamana
☒ 2. Narasimha
☒ 3. Krishna
☒ 4. Varah

Question ID : 630680384314
 Option 1 ID : 6306801498142
 Option 2 ID : 6306801498145
 Option 3 ID : 6306801498143
 Option 4 ID : 6306801498144
 Status : Not Answered
 Chosen Option : --

Q.15 Which of the following technologies is taken to be adopted by the Department of Science and Technology (DST) and the Centre for Science and Environment (CSE) together in November 2022?

- Ans ☒ 1. Machine Learning (ML)
☒ 2. Electric vehicle (EV) batteries
☒ 3. Internet of Things
☒ 4. Artificial Intelligence (AI)

Question ID : 630680384240
 Option 1 ID : 6306801497849
 Option 2 ID : 6306801497846
 Option 3 ID : 6306801497847
 Option 4 ID : 6306801497848
 Status : Answered
 Chosen Option : 4

Q.16 Who among the following was the General Secretary of Indian National Congress in the year 1928?

- Ans ☒ 1. Jawaharlal Nehru
☒ 2. Dr B.R. Ambedkar
☒ 3. Dr Rajendra Prasad
☒ 4. Dadabhai Naoroji

Question ID : 630680384133
 Option 1 ID : 6306801497422
 Option 2 ID : 6306801497424
 Option 3 ID : 6306801497423
 Option 4 ID : 6306801497425
 Status : Not Answered
 Chosen Option : --

Q.17

The "Kala Ghoda Arts Festival" is an annual multicultural festival held in which Indian city, featuring various art forms, music, dance, and heritage walks?

Ans

1. Assam

2. Delhi

3. Pune

4. Mumbai

Question ID : 630680384171

Option 1 ID : 6306801497577

Option 2 ID : 6306801497575

Option 3 ID : 6306801497576

Option 4 ID : 6306801497574

Status : Answered

Chosen Option : 2

Q.18

Which of the following is an autonomous constitutional body responsible for conducting free and fair elections in India?

Ans

1. Reserve Bank of India

2. Supreme Court of India

3. Planning Commission of India

4. Election Commission of India

Question ID : 630680386480

Option 1 ID : 6306801506632

Option 2 ID : 6306801506630

Option 3 ID : 6306801506633

Option 4 ID : 6306801506631

Status : Answered

Chosen Option : 4

Q.19

In the Human Development Index (HDI), the value ranges from 0 to 1. A higher HDI value indicates:

Ans

1. The same level of human development as other countries

2. No significant impact on human development

3. Higher human development and well-being

4. Lower human development and well-being

Question ID : 630680384189

Option 1 ID : 6306801497648

Option 2 ID : 6306801497649

Option 3 ID : 6306801497647

Option 4 ID : 6306801497646

Status : Answered

Chosen Option : 3

Q.20 In which of the following places in India will the Hero Asian Champions Trophy be held?

- Ans ☒ 1. Rajasthan
☒ 2. Chennai
☒ 3. Gujrat
☒ 4. Assam

Question ID : 630680384259
 Option 1 ID : 6306801497925
 Option 2 ID : 6306801497922
 Option 3 ID : 6306801497923
 Option 4 ID : 6306801497924
 Status : Not Answered
 Chosen Option : --

Q.21 The "Chauri Chaura Incident" of 1922 preceded which major movement of the Indian freedom struggle?

- Ans ☒ 1. Civil Disobedience Movement
☒ 2. Quit India Movement
☒ 3. Khilafat Movement
☒ 4. Non-Cooperation Movement

Question ID : 630680384227
 Option 1 ID : 6306801497799
 Option 2 ID : 6306801497800
 Option 3 ID : 6306801497801
 Option 4 ID : 6306801497798
 Status : Answered
 Chosen Option : 1

Q.22 In which of the following states in India will the Men's Hockey World Cup be held?

- Ans ☒ 1. Assam
☒ 2. Odisha
☒ 3. Kerala
☒ 4. Gujrat

Question ID : 630680384257
 Option 1 ID : 6306801497914
 Option 2 ID : 6306801497916
 Option 3 ID : 6306801497915
 Option 4 ID : 6306801497917
 Status : Answered
 Chosen Option : 2

Q.23 Which nation is second largest mobile phone manufacturer in the world in 2022?

- Ans ☒ 1. China
☒ 2. India
☒ 3. USA
☒ 4. Korea

Question ID : 630680384377
 Option 1 ID : 6306801498396
 Option 2 ID : 6306801498394
 Option 3 ID : 6306801498395
 Option 4 ID : 6306801498397
 Status : Not Answered
 Chosen Option : --

Q.24 Who started and popularised microfinance in India?

- Ans ☒ 1. Self-Employed Women's Association (SEWA)
☒ 2. SKS Microfinance (now Bharat Financial Inclusion Limited)
☒ 3. Small Industries Development Bank of India (SIDBI)
☒ 4. Reserve Bank of India

Question ID : 630680384185
 Option 1 ID : 6306801497631
 Option 2 ID : 6306801497633
 Option 3 ID : 6306801497630
 Option 4 ID : 6306801497632
 Status : Answered
 Chosen Option : 3

Q.25 During the period from 800 AD to 1200 AD, which dynasty ruled over a significant part of northern India and is known for its cultural and architectural achievements, including the construction of the famous temples at Khajuraho?

- Ans ☒ 1. Chandela Dynasty
☒ 2. Rashtrakuta Dynasty
☒ 3. Chola Dynasty
☒ 4. Pala Dynasty

Question ID : 630680386471
 Option 1 ID : 6306801506597
 Option 2 ID : 6306801506594
 Option 3 ID : 6306801506595
 Option 4 ID : 6306801506596
 Status : Answered
 Chosen Option : 2

Section : Quantitative Aptitude

Q.1 Find the value of:

$$\frac{7}{11} \times \frac{45}{12} \div \frac{5}{44} - \frac{1}{3} + \frac{7}{3}$$

- Ans ☒ 1. 19
☒ 2. 21
☒ 3. 23
☒ 4. 17

Question ID : 630680384899
 Option 1 ID : 6306801500484
 Option 2 ID : 6306801500482
 Option 3 ID : 6306801500483
 Option 4 ID : 6306801500485
 Status : Answered
 Chosen Option : 3

Q.2 The table shows the number of students who like 3 different sports in 4 different schools. The number of students who like Chess in school D is what per cent of the number of people who like Badminton in school A?

School	Chess	Badminton	Tennis
A	40	80	55
B	30	65	40
C	25	5	35
D	10	15	20

- Ans**
- ☐ 1. 8%
- ☐ 2. 22.5%
- ☐ 3. 10%
- ☒ 4. 12.5%

Question ID : 630680385133

Option 1 ID : 6306801501420

Option 2 ID : 6306801501418

Option 3 ID : 6306801501421

Option 4 ID : 6306801501419

Status : Answered

Chosen Option : 4

Q.3 In the income statement of Vikas and Raju, the ratio of their income in the year 2020 was 5 : 4. The ratio of Vikas' income in the year 2021 to that in 2020 is 3 : 5 and the ratio of Raju's income in the year 2021 to that in 2020 is 3 : 2. If ₹ 10242 is the sum of the income of Vikas and Raju in the year 2021, then find the income of Raju in the year 2020?

- Ans**
- ☒ 1. ₹4552
- ☐ 2. ₹4565
- ☐ 3. ₹4675
- ☐ 4. ₹4685

Question ID : 630680385033

Option 1 ID : 6306801501018

Option 2 ID : 6306801501019

Option 3 ID : 6306801501020

Option 4 ID : 6306801501021

Status : Not Answered

Chosen Option : --

Q.4 The radius of two concentric circles are 7 cm and 25 cm. If the chord of the greater circle be a tangent to the smaller circle, then the length of that chord is _____.

- Ans**
- ☐ 1. 36 cm
- ☐ 2. 24 cm
- ☐ 3. 12 cm
- ☒ 4. 48 cm

Question ID : 630680385828

Option 1 ID : 6306801504032

Option 2 ID : 6306801504031

Option 3 ID : 6306801504030

Option 4 ID : 6306801504033

Status : Answered

Chosen Option : 4

Q.5 $\tan \theta + \cot \theta = 7$ then $\tan^2 \theta + \cot^2 \theta = ?$

- Ans
- ☒ 1. 48
 - ☒ 2. 46
 - ☒ 3. 45
 - ☒ 4. 47

Question ID : 630680385864

Option 1 ID : 6306801504177

Option 2 ID : 6306801504175

Option 3 ID : 6306801504174

Option 4 ID : 6306801504176

Status : Answered

Chosen Option : 4

Q.6 Find the lateral surface area of a cuboid whose length is 12 cm, breadth is 18 cm and volume is 2160 cm³.

- Ans
- ☒ 1. 600 cm²
 - ☒ 2. 516 cm²
 - ☒ 3. 784 cm²
 - ☒ 4. 1032 cm²

Question ID : 630680385152

Option 1 ID : 6306801501496

Option 2 ID : 6306801501495

Option 3 ID : 6306801501497

Option 4 ID : 6306801501494

Status : Answered

Chosen Option : 1

Q.7 After getting two successive discounts Celine got a watch at ₹500 whose marked price is ₹1000. If the second discount is 20% find the first discount.

- Ans
- ☒ 1. 37.5%
 - ☒ 2. 32%
 - ☒ 3. 45%
 - ☒ 4. 25.5%

Question ID : 630680385022

Option 1 ID : 6306801500975

Option 2 ID : 6306801500976

Option 3 ID : 6306801500977

Option 4 ID : 6306801500974

Status : Answered

Chosen Option : 1

Q.8 Simplify:

$$\frac{(m^2 - n^2)^2}{(1 - m^2)(n^2 - 1)} + \frac{(1 - m^2)^2}{(m^2 - n^2)(n^2 - 1)} + \frac{(n^2 - 1)^2}{(m^2 - n^2)(n^2 - 1)} = ?$$

Ans ☒ 1. 3

☐ 2. 0

☐ 3. 2

☐ 4. 1

Question ID : 630680385775

Option 1 ID : 6306801503821

Option 2 ID : 6306801503818

Option 3 ID : 6306801503820

Option 4 ID : 6306801503819

Status : Answered

Chosen Option : 2

Q.9 A solid cylinder of copper 9 m high and 8 m in diameter is melted and recast into a cone of diameter 16 m. Find the height of the cone.

Ans ☐ 1. 6.55 m

☒ 2. 6.75 m

☐ 3. 6.45 m

☐ 4. 6.25 m

Question ID : 630680384984

Option 1 ID : 6306801500824

Option 2 ID : 6306801500825

Option 3 ID : 6306801500823

Option 4 ID : 6306801500822

Status : Answered

Chosen Option : 2

Q.10 Which of the following numbers will completely divide $(36^{23} - 1)$?

Ans ☐ 1. 13

☒ 2. 7

☐ 3. 46

☐ 4. 50

Question ID : 630680384994

Option 1 ID : 6306801500863

Option 2 ID : 6306801500862

Option 3 ID : 6306801500865

Option 4 ID : 6306801500864

Status : Answered

Chosen Option : 2

Q.11 The external angle of a regular octagon is equal to an angle of the Rhombus. The side of the rhombus is 14 cm. Find the area of the Rhombus.

- Ans**
- ✓ 1. $98\sqrt{2}$ cm²
 - ✗ 2. $59\sqrt{2}$ cm²
 - ✗ 3. $75\sqrt{2}$ cm²
 - ✗ 4. $32\sqrt{2}$ cm²

Question ID : 630680385832

Option 1 ID : 6306801504049

Option 2 ID : 6306801504047

Option 3 ID : 6306801504048

Option 4 ID : 6306801504046

Status : Answered

Chosen Option : 1

Q.12 Arjun is five times as efficient as Arvind. Arjun takes 24 days less than Arvind to complete a work. If they work together, in how many days, will the work be completed?

- Ans**
- ✗ 1. 4 days
 - ✗ 2. 6 days
 - ✗ 3. 8 days
 - ✓ 4. 5 days

Question ID : 630680385036

Option 1 ID : 6306801501030

Option 2 ID : 6306801501032

Option 3 ID : 6306801501033

Option 4 ID : 6306801501031

Status : Answered

Chosen Option : 2

Q.13 Surface area of a sphere is 2464 sq.cm. Find the diameter of the largest circle lying on the surface of the same sphere. (Take $\pi = \frac{22}{7}$)

- Ans**
- ✗ 1. 14 cm
 - ✗ 2. 21 cm
 - ✓ 3. 28 cm
 - ✗ 4. 7 cm

Question ID : 630680384979

Option 1 ID : 6306801500803

Option 2 ID : 6306801500804

Option 3 ID : 6306801500805

Option 4 ID : 6306801500802

Status : Answered

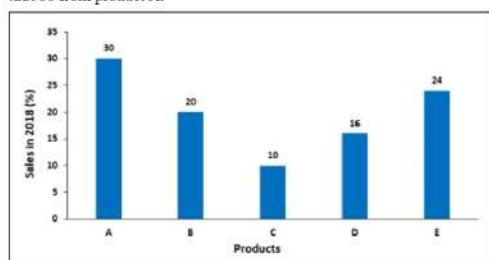
Chosen Option : 3

Q.14 Find the value of: $18^3 + 13^3 - 31^3$.

- Ans ☒ 1. - 21762
☒ 2. - 18342
☒ 3. - 18432
☒ 4. - 29276

Question ID : 630680385119
Option 1 ID : 6306801501364
Option 2 ID : 6306801501365
Option 3 ID : 6306801501363
Option 4 ID : 6306801501362
Status : Answered
Chosen Option : 1

Q.15 The following graph shows the percentage break-up of sales of units of different products in 2018. The shopkeeper made ₹37 profit on each unit of product B. How much profit did the shopkeeper make? The product A is sold at ₹ 25/unit. The shopkeeper earns ₹22500 from product A.



- Ans ☒ 1. ₹ 22200
☒ 2. ₹ 25640
☒ 3. ₹36985
☒ 4. ₹ 35641

Question ID : 630680384975
Option 1 ID : 6306801500786
Option 2 ID : 6306801500787
Option 3 ID : 6306801500789
Option 4 ID : 6306801500788
Status : Not Answered
Chosen Option : --

Q.16 In a triangle SPQ, $SP + PQ = 35$ cm, $PQ + QS = 28$ cm and $QS + SP = 25$ cm. Find the radius of the circle (in cm) which has the same perimeter as the triangle.

- Ans ☒ 1. 11 cm
☒ 2. 4.5 cm
☒ 3. 9 cm
☒ 4. 7 cm

Question ID : 630680385835
Option 1 ID : 6306801504061
Option 2 ID : 6306801504058
Option 3 ID : 6306801504060
Option 4 ID : 6306801504059
Status : Answered
Chosen Option : 2

Q.17 Find the value of x , if the average of 21, x , 37, 43 and 65 is 39.

- Ans**
- ☒ 1. 35
 - ☒ 2. 29
 - ☒ 3. 32
 - ☒ 4. 26

Question ID : 630680385125
 Option 1 ID : 6306801501388
 Option 2 ID : 6306801501387
 Option 3 ID : 6306801501389
 Option 4 ID : 6306801501386
 Status : Answered
 Chosen Option : 2

Q.18 A furniture seller marks his goods at 25% above its cost price and allows a discount of 12% for purchase in cash. What profit per cent does he make?

- Ans**
- ☒ 1. 15%
 - ☒ 2. 10%
 - ☒ 3. 8%
 - ☒ 4. 12%

Question ID : 630680385004
 Option 1 ID : 6306801500905
 Option 2 ID : 6306801500903
 Option 3 ID : 6306801500902
 Option 4 ID : 6306801500904
 Status : Answered
 Chosen Option : 2

Q.19 Out of 15 numbers, the average of the first eight numbers is 80 and that of the last eight numbers is 75. Find the value of the eighth number if the average of all the numbers is 88.

- Ans**
- ☒ 1. 82
 - ☒ 2. 73
 - ☒ 3. 78
 - ☒ 4. 80

Question ID : 630680385126
 Option 1 ID : 6306801501392
 Option 2 ID : 6306801501393
 Option 3 ID : 6306801501390
 Option 4 ID : 6306801501391
 Status : Answered
 Chosen Option : 4

Q.20 An election was contested between two candidates Ramesh and Suresh, 85% of the voters casted their votes, out of which 4% of the votes were declared invalid. Ramesh got 15912 votes which were 65% of the valid votes. Find the total number of votes enrolled in that election.

- Ans**
- ☒ 1. 40000
 - ☒ 2. 30000
 - ☒ 3. 36520
 - ☒ 4. 25300

Question ID : 630680385002

Option 1 ID : 6306801500897

Option 2 ID : 6306801500895

Option 3 ID : 6306801500896

Option 4 ID : 6306801500894

Status : Answered

Chosen Option : 2

Q.21 If the value of $a + b = 17$ and $a^2 - b^2 = 85$, find the value of $a - b$.

- Ans**
- ☒ 1. 7
 - ☒ 2. 11
 - ☒ 3. 5
 - ☒ 4. 9

Question ID : 630680385117

Option 1 ID : 6306801501354

Option 2 ID : 6306801501357

Option 3 ID : 6306801501355

Option 4 ID : 6306801501356

Status : Answered

Chosen Option : 3

Q.22 Vijay had 25 paise, 50 paise and 75 paise coins in the ratio of 15 : 8 : 11 respectively. After giving ₹44 his father he has ₹100. How many 25 paise coins did he have in the beginning?

- Ans**
- ☒ 1. 135
 - ☒ 2. 78
 - ☒ 3. 25
 - ☒ 4. 150

Question ID : 630680385028

Option 1 ID : 6306801501000

Option 2 ID : 6306801500999

Option 3 ID : 6306801500998

Option 4 ID : 6306801501001

Status : Answered

Chosen Option : 1

Q.23 Two pipes A and B can fill a tank in 20 and 15 minutes respectively and a pipe C can empty 3 liters per minute. All the three pipes working together can fill the tank in 10 minutes. The capacity of the tank is:

- Ans** ☒ 1. 180 litres
☒ 2. 120 litres
☒ 3. 240 litres
☒ 4. 60 litres

Question ID : 630680385043

Option 1 ID : 6306801501060

Option 2 ID : 6306801501059

Option 3 ID : 6306801501061

Option 4 ID : 6306801501058

Status : Answered

Chosen Option : 1

Q.24 Sridevi dealing in curtains allows 12% discount on the marked price. What price must be marked on a curtain that cost ₹760 so as to make a profit of 10%?

- Ans** ☒ 1. ₹ 836
☒ 2. ₹ 896
☒ 3. ₹ 950
☒ 4. ₹ 1126

Question ID : 630680385026

Option 1 ID : 6306801500990

Option 2 ID : 6306801500992

Option 3 ID : 6306801500993

Option 4 ID : 6306801500991

Status : Answered

Chosen Option : 3

Q.25 A solid metallic sphere of diameter 48 cm is melted and recasted into spheres of radius 6 cm each. How many such spheres can be made ?

- Ans** ☒ 1. 81
☒ 2. 64
☒ 3. 125
☒ 4. 27

Question ID : 630680385797

Option 1 ID : 6306801503908

Option 2 ID : 6306801503907

Option 3 ID : 6306801503909

Option 4 ID : 6306801503906

Status : Answered

Chosen Option : 2

Q.1 Fill in the blank with the most appropriate option.
'Oh, very well, very well!... But where's the supper? _____, here it is,' he said.

- Ans ☒ 1. Ah
☐ 2. Nah
☐ 3. Ay
☐ 4. Urgh

Question ID : 630680385573
Option 1 ID : 6306801503071
Option 2 ID : 6306801503070
Option 3 ID : 6306801503073
Option 4 ID : 6306801503072
Status : Answered
Chosen Option : 1

Q.2 The sentence given below contains an idiom. Identify the idiom and choose its correct meaning from the given options.
I know Aunt Jean isn't your favourite person, but she gave you that beautiful sweater as a present, so don't look a gift horse in the mouth!

- Ans ☐ 1. To be very calm.
☒ 2. Take what you get without criticism.
☐ 3. To have something to complain about.
☐ 4. Take great care over details.

Question ID : 630680385636
Option 1 ID : 6306801503302
Option 2 ID : 6306801503303
Option 3 ID : 6306801503305
Option 4 ID : 6306801503304
Status : Answered
Chosen Option : 2

Comprehension:

Read the given passage carefully and select the most appropriate answer to the questions that follow.

The apartment was on the top floor-a small living room, a small dining room, a small bedroom and a bath. The living room was crowded to the doors with a set of tapestried furniture entirely too large for it so that to move about was to stumble continually over scenes of ladies swinging in the gardens of Versailles. The only picture was an over-enlarged photograph, apparently a hen sitting on a blurred rock. Looked at from a distance however the hen resolved itself into a bonnet and the countenance of a stout old lady beamed down into the room. Several old copies of 'Town Tattle' lay on the table together with a copy of 'Simon Called Peter' and some of the small scandal magazines of Broadway. Mrs. Wilson was first concerned with the dog. A reluctant elevator boy went for a box full of straw and some milk to which he added on his own initiative a tin of large hard dog biscuits - one of which decomposed apathetically in the saucer of milk all afternoon.

SubQuestion No : 3

Q.3 Which of the following statements is not true with respect to the passage.

- Ans ☒ 1. The bedroom was crowded with furniture too large for the space.
☐ 2. The boy wasn't Mrs. Wilson's son.
☐ 3. The living room had a large picture.
☐ 4. The elevator boy had with him a saucer of milk in which was a dog biscuit.

Question ID : 630680385441
Option 1 ID : 6306801502579
Option 2 ID : 6306801502580
Option 3 ID : 6306801502581
Option 4 ID : 6306801502578
Status : Answered
Chosen Option : 2

Comprehension:

Read the given passage carefully and select the most appropriate answer to the questions that follow.

The apartment was on the top floor-a small living room, a small dining room, a small bedroom and a bath. The living room was crowded to the doors with a set of tapestried furniture entirely too large for it so that to move about was to stumble continually over scenes of ladies swinging in the gardens of Versailles. The only picture was an over-enlarged photograph, apparently a hen sitting on a blurred rock. Looked at from a distance however the hen resolved itself into a bonnet and the countenance of a stout old lady beamed down into the room. Several old copies of 'Town Tattle' lay on the table together with a copy of 'Simon Called Peter' and some of the small scandal magazines of Broadway. Mrs. Wilson was first concerned with the dog. A reluctant elevator boy went for a box full of straw and some milk to which he added on his own initiative a tin of large hard dog biscuits - one of which decomposed apathetically in the saucer of milk all afternoon.

SubQuestion No : 4

Q.4 Select the options the most appropriate meaning of the bracketed word given in the sentence below.

‘...into a bonnet and the (countenance) of a stout old lady...’

- Ans

✗

1. acceptance

✗

2. absence

✗

3. counter

✓

4. appearance

Question ID : 630680385443

Option 1 ID : 6306801502586

Option 2 ID : 6306801502587

Option 3 ID : 6306801502589

Option 4 ID : 6306801502588

Status : Answered

Chosen Option : 4

Comprehension:

Read the given passage carefully and select the most appropriate answer to the questions that follow.

The apartment was on the top floor-a small living room, a small dining room, a small bedroom and a bath. The living room was crowded to the doors with a set of tapestried furniture entirely too large for it so that to move about was to stumble continually over scenes of ladies swinging in the gardens of Versailles. The only picture was an over-enlarged photograph, apparently a hen sitting on a blurred rock. Looked at from a distance however the hen resolved itself into a bonnet and the countenance of a stout old lady beamed down into the room. Several old copies of 'Town Tattle' lay on the table together with a copy of 'Simon Called Peter' and some of the small scandal magazines of Broadway. Mrs. Wilson was first concerned with the dog. A reluctant elevator boy went for a box full of straw and some milk to which he added on his own initiative a tin of large hard dog biscuits - one of which decomposed apathetically in the saucer of milk all afternoon.

SubQuestion No : 5

Q.5 From the given options, identify the suitable title for the passage.

- Ans

✓

1. The Tiny Apartment

✗

2. Simon Called Peter

✗

3. Saucer of Milk

✗

4. Town Tattle

Question ID : 630680385440

Option 1 ID : 6306801502577

Option 2 ID : 6306801502575

Option 3 ID : 6306801502574

Option 4 ID : 6306801502576

Status : Answered

Chosen Option : 1

Comprehension:

Read the given passage carefully and select the most appropriate answer to the questions that follow.

The apartment was on the top floor-a small living room, a small dining room, a small bedroom and a bath. The living room was crowded to the doors with a set of tapestried furniture entirely too large for it so that to move about was to stumble continually over scenes of ladies swinging in the gardens of Versailles. The only picture was an over-enlarged photograph, apparently a hen sitting on a blurred rock. Looked at from a distance however the hen resolved itself into a bonnet and the countenance of a stout old lady beamed down into the room. Several old copies of 'Town Tattle' lay on the table together with a copy of 'Simon Called Peter' and some of the small scandal magazines of Broadway. Mrs. Wilson was first concerned with the dog. A reluctant elevator boy went for a box full of straw and some milk to which he added on his own initiative a tin of large hard dog biscuits - one of which decomposed apathetically in the saucer of milk all afternoon.

SubQuestion No : 6

Q.6 Identify the correct inference that can be drawn from the passage.

- Ans ☒ 1. The elevator boy was also the house help at the apartment.
- ☒ 2. The apartment belonged to a writer.
- ☒ 3. Mrs. Wilson wanted to sell the house.
- ☒ 4. The tiny house was overly decorated and crowded.

Question ID : 630680385442

Option 1 ID : 6306801502585

Option 2 ID : 6306801502584

Option 3 ID : 6306801502583

Option 4 ID : 6306801502582

Status : Answered

Chosen Option : 4

Q.7 The sentences given below are all part of a paragraph but do not necessarily fall in the order that they are in. The first and the last sentences of the paragraph are given. Choose the option that arranges these sentences to form a meaningful paragraph. On opening the little door, two hairy monsters flew at my throat, bearing me down, and extinguishing the

- A. masters pleased to deliver me: then, hatless and trembling with wrath, I ordered the miscreants to let me out –
- B. Fortunately, the beasts seemed more bent on stretching their paws, and yawning, and flourishing their tails,
- C. light; while a mingled guffaw from Heathcliff and Hareton put the copestone on my rage and humiliation.
- D. than devouring me alive; but they would suffer no resurrection, and I was forced to lie till their malignant on their peril to keep me one minute longer - with several incoherent threats of retaliation that, in their indefinite depth of virulency, smacked of King Lear.

- Ans ☒ 1. CBDA
- ☒ 2. BACD
- ☒ 3. ADBC
- ☒ 4. DBCA

Question ID : 630680385362

Option 1 ID : 6306801502298

Option 2 ID : 6306801502301

Option 3 ID : 6306801502299

Option 4 ID : 6306801502300

Status : Answered

Chosen Option : 1

Q.8 Arrange the following sentences in the correct order to form a coherent paragraph:

The band members had practiced diligently for months to ensure a flawless performance.

A. This was the final leg of their tour and it seemed like a grand success, with thousands of fans in attendance.

B. With their fans in sight the lead singer displayed his powerful vocals and the band's electrifying energy mesmerized the audience.

C. They were excited as this performance was being held in the largest stadium in the country.

D. The concert showcased a perfect blend of new songs and all-time fan favourites.

At the end of the show, the band expressed their gratitude to the fans for their unwavering support.

- Ans
- ☒ 1. ABCD
 - ☒ 2. DBAC
 - ☒ 3. CABD
 - ☒ 4. BCAD

Question ID : 630680385690

Option 1 ID : 6306801503502

Option 2 ID : 6306801503504

Option 3 ID : 6306801503503

Option 4 ID : 6306801503505

Status : Answered

Chosen Option : 1

Q.9 Please select the most suitable phrasal verb from the options provided to fill in the blank.

The company had to _____ some employees due to financial constraints.

- Ans
- ☒ 1. cut in
 - ☒ 2. cut off
 - ☒ 3. cut out
 - ☒ 4. cut down

Question ID : 630680385455

Option 1 ID : 6306801502635

Option 2 ID : 6306801502634

Option 3 ID : 6306801502637

Option 4 ID : 6306801502636

Status : Answered

Chosen Option : 4

Q.10 Fill in the blank with the most appropriate option.

The impacts of climate change are not evenly distributed. _____, developing countries are often more vulnerable to the effects of climate change due to limited resources and infrastructure.

- Ans
- ☒ 1. Similarly
 - ☒ 2. Moreover
 - ☒ 3. Likewise
 - ☒ 4. For instance

Question ID : 630680385462

Option 1 ID : 6306801502664

Option 2 ID : 6306801502663

Option 3 ID : 6306801502662

Option 4 ID : 6306801502665

Status : Answered

Chosen Option : 4

Q.11

Select the most appropriate antonym of the given word.

Disinclination

Ans

✔

1. Propensity

✖

2. Rise

✖

3. Aggressive

✖

4. Unbiased

Question ID : 630680385414

Option 1 ID : 6306801502487

Option 2 ID : 6306801502488

Option 3 ID : 6306801502486

Option 4 ID : 6306801502489

Status : Answered

Chosen Option : 1

Q.12

Select the most appropriate synonym to substitute the bracketed word in the given sentence.

The autonomous vehicle smoothly navigated through traffic without any human (intervention).

Ans

✔

1. Intrusion

✖

2. Obstruct

✖

3. Occlude

✖

4. Unanimous

Question ID : 630680385536

Option 1 ID : 6306801502941

Option 2 ID : 6306801502938

Option 3 ID : 6306801502940

Option 4 ID : 6306801502939

Status : Answered

Chosen Option : 1

Q.13

Determine the meaning of the bracketed idiom from the statement given below.

John is known for his healthy lifestyle. He religiously follows the saying (An apple a day keeps the doctor away).

Ans

✖

1. John believes in superstitions and eats apples for good luck.

✖

2. John dislikes doctors and prefers to keep his distance.

✔

3. John eats apples daily to stay fit and avoid getting sick.

✖

4. John enjoys gardening and grows apple trees in his backyard.

Question ID : 630680385520

Option 1 ID : 6306801502877

Option 2 ID : 6306801502875

Option 3 ID : 6306801502874

Option 4 ID : 6306801502876

Status : Answered

Chosen Option : 3

Comprehension:

In the following passage some words have been deleted. Fill in the blanks with the help of the alternatives given. Select the most appropriate option for each number.

Ben Rogers said he couldn't (1) _____ out much, only Sundays, and so he (2) _____ to begin next Sunday; but all the boys (3) _____ it would be wicked to do it on Sunday, and that settled the thing.

SubQuestion No : 14

Q.14 Select the most appropriate option to fill in the blank No. 2.

- Ans
- ☒ 1. inquired
 - ☒ 2. moved
 - ☒ 3. ask
 - ☒ 4. wanted

Question ID : 630680385374
Option 1 ID : 6306801502334
Option 2 ID : 6306801502335
Option 3 ID : 6306801502337
Option 4 ID : 6306801502336
Status : Answered
Chosen Option : 4

Comprehension:

In the following passage some words have been deleted. Fill in the blanks with the help of the alternatives given. Select the most appropriate option for each number.

Ben Rogers said he couldn't (1) _____ out much, only Sundays, and so he (2) _____ to begin next Sunday; but all the boys (3) _____ it would be wicked to do it on Sunday, and that settled the thing.

SubQuestion No : 15

Q.15 Select the most appropriate option to fill in the blank No. 1.

- Ans
- ☒ 1. arrive
 - ☒ 2. get
 - ☒ 3. push
 - ☒ 4. move

Question ID : 630680385373
Option 1 ID : 6306801502332
Option 2 ID : 6306801502330
Option 3 ID : 6306801502333
Option 4 ID : 6306801502331
Status : Answered
Chosen Option : 2

Comprehension:

In the following passage some words have been deleted. Fill in the blanks with the help of the alternatives given. Select the most appropriate option for each number.

Ben Rogers said he couldn't (1) _____ out much, only Sundays, and so he (2) _____ to begin next Sunday; but all the boys (3) _____ it would be wicked to do it on Sunday, and that settled the thing.

SubQuestion No : 16

Q.16 Select the most appropriate option to fill in the blank No. 3.

- Ans ☒ 1. regrated
☒ 2. said
☒ 3. are saying
☒ 4. have said

Question ID : 630680385375
 Option 1 ID : 6306801502340
 Option 2 ID : 6306801502339
 Option 3 ID : 6306801502338
 Option 4 ID : 6306801502341
 Status : Answered
 Chosen Option : 2

Q.17 Arrange the following sentences in the correct order to form a coherent paragraph:

From its humble beginnings as a small startup, the company has now grown into a market leader.

- A. The company's dedication to quality is evident in the positive feedback from its customers.
 B. This feat can be attributed to its customer-centric approach and continuous quality improvement initiatives.
 C. Besides focusing on customers, the management team has a vision to empower its employees and foster a culture of innovation.
 D. The company's mission is to provide innovative good quality products that enrich the lives of its customers.
 This commitment to excellence has earned the company a strong reputation in the industry.

- Ans ☒ 1. ABCD
☒ 2. ABDC
☒ 3. BACD
☒ 4. CDBA

Question ID : 630680385469
 Option 1 ID : 6306801502691
 Option 2 ID : 6306801502693
 Option 3 ID : 6306801502692
 Option 4 ID : 6306801502690
 Status : Answered
 Chosen Option : 3

Q.18 Select the most appropriate word for the given phrase.

A doctrine which identifies God with the universe.

- Ans ☒ 1. Pantheism
☒ 2. Pedantic
☒ 3. Crusade
☒ 4. Regalia

Question ID : 630680385398
 Option 1 ID : 6306801502423
 Option 2 ID : 6306801502422
 Option 3 ID : 6306801502425
 Option 4 ID : 6306801502424
 Status : Answered

Q.19 Select the word segment that substitutes (replaces) the bracketed word segment correctly and completes the sentence meaningfully. Select the option 'no correction required' if the sentence is correct as given.

When I had (grabbed the age of seventeen my parents understood) that I should become a student at the university of Ingolstadt.

- Ans ☒ 1. become the age of seventeen my parents tried
☒ 2. attained the age of seventeen my parents resolved
☒ 3. No correction required
☒ 4. got the age of seventeen my parents assured

Question ID : 630680385387
 Option 1 ID : 6306801502380
 Option 2 ID : 6306801502378
 Option 3 ID : 6306801502381
 Option 4 ID : 6306801502379
 Status : Answered
 Chosen Option : 2

Q.20 Select the most appropriate synonym of the given word.
 Unprecedented

- Ans ☒ 1. Unsparing
☒ 2. Prodigal
☒ 3. Unrivalled
☒ 4. Parallel

Question ID : 630680385535
 Option 1 ID : 6306801502937
 Option 2 ID : 6306801502936
 Option 3 ID : 6306801502934
 Option 4 ID : 6306801502935
 Status : Answered
 Chosen Option : 3

Q.21 Select the most appropriate word for the given phrase.
 A self-governing country or region.

- Ans ☒ 1. Autocracy
☒ 2. Oligarchy
☒ 3. Autonomy
☒ 4. Neocracy

Question ID : 630680385394
 Option 1 ID : 6306801502408
 Option 2 ID : 6306801502406
 Option 3 ID : 6306801502409
 Option 4 ID : 6306801502407
 Status : Answered
 Chosen Option : 1

Q.22 Fill in the blank with the most appropriate option.
This was her recipe, _____?

- Ans ☒ 1. isn't it
☒ 2. is it
☒ 3. was it
☒ 4. wasn't it

Question ID : 630680385345
Option 1 ID : 6306801502230
Option 2 ID : 6306801502233
Option 3 ID : 6306801502232
Option 4 ID : 6306801502231
Status : Answered
Chosen Option : 4

Q.23 Select the most appropriate missing sentence to complete the paragraph meaningfully.
The stories had little or no meaning for me then; but the mere spelling of the strange words was sufficient to amuse a little child who could do almost nothing to amuse herself; and although I do not recall a single circumstance connected with the reading of the stories, _____.

- Ans ☒ 1. yet they closed me in at one corner of the field.
☒ 2. yet the old man blew vigorously upon some instrument.
☒ 3. yet I cannot help thinking that I made a great effort to remember the words.
☒ 4. yet he saw out of the window how she went up to her brother.

Question ID : 630680385591
Option 1 ID : 6306801503142
Option 2 ID : 6306801503144
Option 3 ID : 6306801503143
Option 4 ID : 6306801503145
Status : Answered
Chosen Option : 3

Q.24 Which of the following is the correct antonym for the word "Pernicious"?

- Ans ☒ 1. Beneficial
☒ 2. Innocuous
☒ 3. Malevolent
☒ 4. Bombard

Question ID : 630680385734
Option 1 ID : 6306801503666
Option 2 ID : 6306801503667
Option 3 ID : 6306801503668
Option 4 ID : 6306801503669
Status : Answered
Chosen Option : 1

Q.25 Select the word segment that substitutes (replaces) the bracketed word segment correctly and completes the sentence meaningfully. Select the option 'no correction required' if the sentence is correct as given.
(Night fastly shut out), but to my extreme wonder, I found that the cottagers had a means of prolonging light.

- Ans**
- ☒ 1. Night hasten shut of
 - ☒ 2. No correction required
 - ☒ 3. Night speedily shut off
 - ☒ 4. Night quickly shut in

Question ID : **630680385395**

Option 1 ID : **6306801502411**

Option 2 ID : **6306801502413**

Option 3 ID : **6306801502410**

Option 4 ID : **6306801502412**

Status : **Answered**

Chosen Option : **4**

