
	<b>DELHI DEVELOPMENT AUTHORITY</b> <b>RECRUITMENT CELL</b> <b>VIKAS SADAN, INA, NEW DELHI - 110023</b> ( <a href="https://www.dda.gov.in">https://www.dda.gov.in</a> )
	Advertisement No. 02/2023/Recrtt. Cell/Pers./DDA
Test Date	26/09/2023
Test Time	2:30 PM - 3:30 PM
Subject	Assistant Section Officer (ASO)

Section : General Intelligence and Reasoning

**Q.1** Meera is mother-in-law of Jyoti who is sister-in law of Ram. Mohan is father of Nishant the only brother of Ram. How is Meera related to Ram?

- Ans** ☒ 1. Mother  
☐ 2. Wife  
☐ 3. Mother-in-law  
☐ 4. Cousin

Question ID : 630680384773  
Option 1 ID : 6306801499980  
Option 2 ID : 6306801499979  
Option 3 ID : 6306801499981  
Option 4 ID : 6306801499978  
Status : Answered  
Chosen Option : 1

**Q.2** Which of the following letter cluster will replace the question mark (?) in the given series?  
AIM, CHO, ?, GFS, IEU

- Ans** ☒ 1. EGQ  
☐ 2. EHP  
☐ 3. FGQ  
☐ 4. HER

Question ID : 630680384722  
Option 1 ID : 6306801499774  
Option 2 ID : 6306801499777  
Option 3 ID : 6306801499775  
Option 4 ID : 6306801499776  
Status : Answered  
Chosen Option : 1

# Test Prime

**ALL EXAMS,  
ONE SUBSCRIPTION**



**70,000+**  
Mock Tests



**Personalised  
Report Card**



**Unlimited  
Re-Attempt**



**600+**  
Exam Covered



**Previous Year  
Papers**



**500%  
Refund**



**ATTEMPT FREE MOCK NOW**

Q.3 Choose the alternative which closely resembles the embedded figure of the given question figure below.

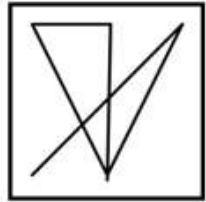


Ans

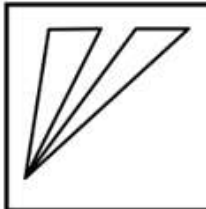
✗ 1.



✓ 2.



✗ 3.



✗ 4.



Question ID : 630680384837

Option 1 ID : 6306801500235

Option 2 ID : 6306801500236

Option 3 ID : 6306801500234

Option 4 ID : 6306801500237

Status : Answered

Chosen Option : 2

Q.4 If brush is called stapler, stapler is called eraser, eraser is called pen, pen is called pencil, pencil is called highlighter, highlighter is called notes which is used to remove marks from a paper ?

Ans

✓ 1. pen

✗ 2. eraser

✗ 3. notes

✗ 4. highlighter

Question ID : 630680384776

Option 1 ID : 6306801499990

Option 2 ID : 6306801499991

Option 3 ID : 6306801499993

Option 4 ID : 6306801499992

Status : Answered

Chosen Option : 1

**Q.5** In a certain code language, 'winter is not pleasant always' is written as 'ru me tic su na', 'delightful season is autumn' is written as 'ter ni nic ru', 'always likes autumn' is written as 'phi su nic', and 'cold winter season' is written as 'tic ga ter'. The code for 'not' is given in the options. Which of the following is the code for 'not' ?

- Ans**
- ☒ 1. ru
  - ☒ 2. tic
  - ☒ 3. na
  - ☒ 4. su

Question ID : 630680384782

Option 1 ID : 6306801500014

Option 2 ID : 6306801500016

Option 3 ID : 6306801500017

Option 4 ID : 6306801500015

Status : Answered

Chosen Option : 3

**Q.6** Eleven students, Aman, Beena, Chandan, Dheeraj, Era, Farah, Geetanshu, Himanshu, Isha, Jatin and Kashish are sitting in the first row of the class facing the teacher.  
Dheeraj who is to the immediate left of Farah is second to the right of Chandan.  
Aman is second to the right of Era, who is at one of the ends.  
Jatin is the immediate neighbour of Aman and Beena and third to the left of Geetanshu.  
Himanshu is to the immediate left of Dheeraj and third to the right of Isha.  
Who is sitting in the middle of the row ?

- Ans**
- ☒ 1. Chandan
  - ☒ 2. Isha
  - ☒ 3. Geetanshu
  - ☒ 4. Beena

Question ID : 630680386206

Option 1 ID : 6306801505536

Option 2 ID : 6306801505535

Option 3 ID : 6306801505534

Option 4 ID : 6306801505537

Status : Answered

Chosen Option : 2

**Q.7** In the question, two statements are given I and II. These statements may be either independent causes or may be effects of independent causes or a common cause. One of these statements may be the effect of the other statements. Read both statements and decide which of the following answer choice correctly depicts the relationship between these two statements.  
Statement:  
Statement I: The sale of air conditioners have risen this summer.  
Statement II: The temperature has crossed all records this summer.

- Ans**
- ☒ 1. Statement II is the cause and statement I is its effect
  - ☒ 2. Both the statements I and II are effects of some common cause
  - ☒ 3. Statement I is the cause and statement II is its effect
  - ☒ 4. Both statements I and II are independent causes

Question ID : 630680384683

Option 1 ID : 6306801499619

Option 2 ID : 6306801499621

Option 3 ID : 6306801499618

Option 4 ID : 6306801499620

Status : Answered

Chosen Option : 1

**Q.8** If '+' stands for 'division', '\*' stands for 'addition', '-' stands for 'multiplication' and '-' stands for 'subtraction', then solve the following expression:

$$36 - 6 \div 3 * 5 \div 3$$

- Ans**
- ☒ 1. 78
  - ☒ 2. 72
  - ☒ 3. 76
  - ☒ 4. 74

Question ID : 630680386163

Option 1 ID : 6306801505365

Option 2 ID : 6306801505362

Option 3 ID : 6306801505364

Option 4 ID : 6306801505363

Status : Answered

Chosen Option : 4

**Q.9** Find out the wrong term in the given series.

EC, FG, HZ, KW, OS, TN

- Ans**
- ☒ 1. KW
  - ☒ 2. OS
  - ☒ 3. HZ
  - ☒ 4. FG

Question ID : 630680384525

Option 1 ID : 6306801498989

Option 2 ID : 6306801498988

Option 3 ID : 6306801498987

Option 4 ID : 6306801498986

Status : Answered

Chosen Option : 4

**Q.10** Which of the following option follows the same relation between the pair as shown below?

BD, CI, DP

- Ans**
- ☒ 1. EO
  - ☒ 2. EZ
  - ☒ 3. EY
  - ☒ 4. EV

Question ID : 630680384589

Option 1 ID : 6306801499244

Option 2 ID : 6306801499245

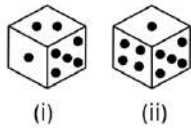
Option 3 ID : 6306801499242

Option 4 ID : 6306801499243

Status : Answered

Chosen Option : 3

**Q.11** Two positions of a block are shown in the figure below. What is the total number of dots on the faces that are opposite to the face with four dots?



- Ans**
- ☒ 1. 3
  - ☒ 2. 2
  - ☒ 3. 6
  - ☒ 4. 1

Question ID : 630680384636

Option 1 ID : 6306801499431

Option 2 ID : 6306801499432

Option 3 ID : 6306801499430

Option 4 ID : 6306801499433

Status : Answered

Chosen Option : 2

**Q.12** Five friends M, N, O, P, and Q live in a five-floored building, each floor having only one apartment. The bottommost floor is numbered as 1 and the floor immediately above it is numbered as 2 and so on. P lives on an even-numbered floor. There are two floors between the floors of P and M. N lives on the topmost floor. Who lives on the bottom-most floor?

- Ans**
- ☒ 1. O
  - ☒ 2. Cannot be determined
  - ☒ 3. Q
  - ☒ 4. M

Question ID : 630680384712

Option 1 ID : 6306801499735

Option 2 ID : 6306801499737

Option 3 ID : 6306801499736

Option 4 ID : 6306801499734

Status : Not Attempted and Marked For Review

Chosen Option : --

**Q.13** Select the option that is related to the third word in the same way as the second word is related to the first word.  
DEMOLISH : BREAK :: TRANQUIL : ?

- Ans**
- ☒ 1. UPSET
  - ☒ 2. STORMY
  - ☒ 3. CALM
  - ☒ 4. ANXIOUS

Question ID : 630680384490

Option 1 ID : 6306801498846

Option 2 ID : 6306801498847

Option 3 ID : 6306801498849

Option 4 ID : 6306801498848

Status : Answered

Chosen Option : 3

**Q.14** If 'C \* D' means 'C is the sister of D', 'C + D' means 'D is the daughter of C' and 'C ÷ D' means 'C is the mother of D', then how will 'M is the aunt of N' be denoted?

- Ans**
- ✓ 1.  $M * L \div N$
  - ✗ 2.  $N \div L + M$
  - ✗ 3.  $L * M \div N$
  - ✗ 4.  $N + L * M$

Question ID : 630680384768

Option 1 ID : 6306801499958

Option 2 ID : 6306801499959

Option 3 ID : 6306801499960

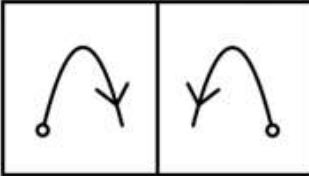
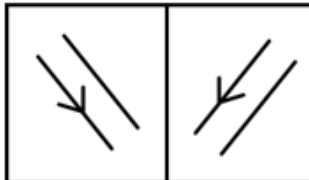
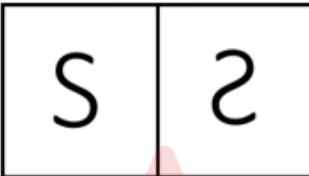
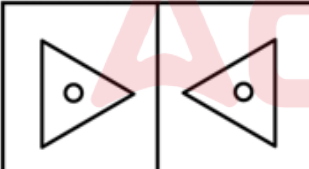
Option 4 ID : 6306801499961

Status : Answered

Chosen Option : 1

**Q.15** Identify the odd figure pair.

**Ans**

- ✗ 1. 
- ✓ 2. 
- ✗ 3. 
- ✗ 4. 

Question ID : 630680384847

Option 1 ID : 6306801500274

Option 2 ID : 6306801500277

Option 3 ID : 6306801500275

Option 4 ID : 6306801500276

Status : Answered

Chosen Option : 2



**Q.16** In the given question certain pairs of words are given, out of which the words in all pairs except one bear a certain common relationship. Identify the pair in which the words are differently related than other three pairs.

- Ans
- ☒ 1. (JQU, KTZ)
  - ☒ 2. (RST, SVX)
  - ☒ 3. (DKS, ENX)
  - ☒ 4. (HLB, IOG)

Question ID : 630680386200

Option 1 ID : 6306801505511

Option 2 ID : 6306801505513

Option 3 ID : 6306801505512

Option 4 ID : 6306801505510

Status : Answered

Chosen Option : 2

**Q.17** In the following question three statements are given, followed by two conclusions numbered I and II. Assume three given statements to be true even if they seem to be at variance with commonly known facts and then decide which of the given conclusion logically follows from the two statements disregarding commonly known facts.

Statements:

- I. All books are papers.
- II. All novels are papers.
- III. Some papers are not covers.

Conclusions:

- I. Some books are not novels.
- II. Some covers may not be papers.

- Ans
- ☒ 1. Only conclusion II follows
  - ☒ 2. Only conclusion I follows
  - ☒ 3. Neither conclusion I nor II follows
  - ☒ 4. Both conclusions I and II follow

Question ID : 630680386216

Option 1 ID : 6306801505575

Option 2 ID : 6306801505574

Option 3 ID : 6306801505577

Option 4 ID : 6306801505576

Status : Answered

Chosen Option : 1

**Q.18** How many pairs of letters are there in the word "IMAGINE" that have as many letters between as in the alphabetical order?

- Ans
- ☒ 1. 2
  - ☒ 2. 1
  - ☒ 3. 4
  - ☒ 4. 3

Question ID : 630680384654

Option 1 ID : 6306801499502

Option 2 ID : 6306801499504

Option 3 ID : 6306801499505

Option 4 ID : 6306801499503

Status : Answered

Chosen Option : 1



Q.19 Find the wrong number in the series:

5, 84, 540, 2725, 10900, 32757

- Ans
- ☒ 1. 32757
  - ☒ 2. 10900
  - ☒ 3. 2725
  - ☒ 4. 540

Question ID : 630680386195

Option 1 ID : 6306801505493

Option 2 ID : 6306801505492

Option 3 ID : 6306801505491

Option 4 ID : 6306801505490

Status : Not Attempted and  
Marked For Review

Chosen Option : --

Q.20 If digits within each number are arranged in decreasing order, which of the following will be the sum of the largest number and the smallest number?

345 189 296 718 205

- Ans
- ☒ 1. 1501
  - ☒ 2. 1471
  - ☒ 3. 1322
  - ☒ 4. 1742

Question ID : 630680384651

Option 1 ID : 6306801499491

Option 2 ID : 6306801499492

Option 3 ID : 6306801499490

Option 4 ID : 6306801499493

Status : Answered

Chosen Option : 1

Q.21 A series is given with one term missing. Select the correct alternative from the given ones that will complete the series.

3, 15, 35, 63, \_\_

- Ans
- ☒ 1. 100
  - ☒ 2. 98
  - ☒ 3. 101
  - ☒ 4. 99

Question ID : 630680384799

Option 1 ID : 6306801500082

Option 2 ID : 6306801500083

Option 3 ID : 6306801500084

Option 4 ID : 6306801500085

Status : Answered

Chosen Option : 4

**Q.22** Four letter-clusters pairs have been given, out of which three are alike in some manner and one is different. Select the odd letter-cluster pair.

- Ans ☒ 1. MI : OF  
☒ 2. HI : JH  
☒ 3. DJ : FG  
☒ 4. TA : VX

Question ID : 630680384506  
 Option 1 ID : 6306801498912  
 Option 2 ID : 6306801498911  
 Option 3 ID : 6306801498910  
 Option 4 ID : 6306801498913  
 Status : Answered  
 Chosen Option : 2

**Q.23** Which of the following numbers will replace the question mark (?) in the given series?  
 256, 128, 384, ?, 576, 288, 864

- Ans ☒ 1. 212  
☒ 2. 228  
☒ 3. 192  
☒ 4. 184

Question ID : 630680384464  
 Option 1 ID : 6306801498744  
 Option 2 ID : 6306801498745  
 Option 3 ID : 6306801498743  
 Option 4 ID : 6306801498742  
 Status : Answered  
 Chosen Option : 3

**Q.24** How many numbers are there in the given series that are immediately preceded by a vowel and immediately followed by a consonant?

Z 2 E 5 A G 3 H 1 0 A S 2 I I D 9 5 S 2 Q 4 M U 6 D 3 F I

- Ans ☒ 1. 2  
☒ 2. 1  
☒ 3. 4  
☒ 4. 3

Question ID : 630680384658  
 Option 1 ID : 6306801499519  
 Option 2 ID : 6306801499520  
 Option 3 ID : 6306801499521  
 Option 4 ID : 6306801499518  
 Status : Answered  
 Chosen Option : 1

**Q.25** Three Statements are given followed by two conclusions numbered I and II. Assuming the statements to be true, even if they seem to be at variance with commonly known facts, decide which of the conclusions logically follow(s) from the statements.  
Statement:  
Statement I: Only a few rocks are seas.  
Statement II: All seas are lands.  
Statement III: Some lands are rivers.  
Conclusion:  
Conclusion I: All rocks being seas is a possibility.  
Conclusion II: All rocks being land is a possibility.

- Ans** ☒ 1. Only conclusion II follows  
☐ 2. Only conclusion I follows  
☐ 3. Both conclusions I and II follow  
☐ 4. Neither conclusion I nor II follows

Question ID : 630680384732  
Option 1 ID : 6306801499815  
Option 2 ID : 6306801499814  
Option 3 ID : 6306801499816  
Option 4 ID : 6306801499817  
Status : Answered  
Chosen Option : 1

Section : General Awareness

**Q.1** Who among the following founded the Arya Samaj in the year 1875?

- Ans** ☐ 1. Swami Vivekananda  
☐ 2. Dadabhai Naoroji  
☒ 3. Swami Dayananda Saraswati  
☐ 4. Raja Ram Mohan Roy

Question ID : 630680384134  
Option 1 ID : 6306801497426  
Option 2 ID : 6306801497428  
Option 3 ID : 6306801497429  
Option 4 ID : 6306801497427  
Status : Answered  
Chosen Option : 3

**Q.2** Which organization publishes the Human Development Index (HDI) annually?

- Ans** ☐ 1. World Bank  
☐ 2. World Health Organization  
☒ 3. United Nations Development Programme  
☐ 4. International Monetary Fund

Question ID : 630680384414  
Option 1 ID : 6306801498543  
Option 2 ID : 6306801498545  
Option 3 ID : 6306801498542  
Option 4 ID : 6306801498544  
Status : Answered  
Chosen Option : 3

Q.3 Which government initiative in India aims to improve the infrastructure sector and boost economic growth through the development of smart cities?

- Ans ☒ 1. Make in India  
☒ 2. Smart Cities Mission  
☒ 3. Pradhan Mantri Awas Yojana  
☒ 4. Swachh Bharat Abhiyan

Question ID : 630680386451  
 Option 1 ID : 6306801506515  
 Option 2 ID : 6306801506516  
 Option 3 ID : 6306801506517  
 Option 4 ID : 6306801506514  
 Status : Answered  
 Chosen Option : 2

Q.4 Which of the following is included in the calculation of Gross Domestic Product (GDP) as part of national income accounting?

- Ans ☒ 1. Value of imported goods and services  
☒ 2. Transfer payments from the government to individuals  
☒ 3. Private savings and investments  
☒ 4. Personal income taxes collected by the government

Question ID : 630680386438  
 Option 1 ID : 6306801506464  
 Option 2 ID : 6306801506462  
 Option 3 ID : 6306801506463  
 Option 4 ID : 6306801506465  
 Status : Answered  
 Chosen Option : 1

Q.5 The "Hindustan Socialist Republican Association" (HSRA) was a revolutionary organization involved in various acts of protest and armed struggle against British colonial rule. Who was one of the prominent leaders of HSRA?

- Ans ☒ 1. Bipin Chandra Pal  
☒ 2. Gopal Krishna Gokhale  
☒ 3. Ram Prasad Bismil  
☒ 4. Dadabhai Naorji

Question ID : 630680384228  
 Option 1 ID : 6306801497803  
 Option 2 ID : 6306801497802  
 Option 3 ID : 6306801497804  
 Option 4 ID : 6306801497805  
 Status : Answered  
 Chosen Option : 3

Q.6 Which state hosted the 2022 National Games of India?

- Ans
- ☒ 1. Rajasthan
  - ☒ 2. Bihar
  - ☒ 3. Gujarat
  - ☒ 4. Kerala

Question ID : 630680384153  
 Option 1 ID : 6306801497504  
 Option 2 ID : 6306801497505  
 Option 3 ID : 6306801497503  
 Option 4 ID : 6306801497502  
 Status : Answered  
 Chosen Option : 1

Q.7 Name the autobiography written by Dalai Lama.

- Ans
- ☒ 1. A Life Less Ordinary
  - ☒ 2. Freedom in Exile
  - ☒ 3. My Early Life
  - ☒ 4. Open

Question ID : 630680384162  
 Option 1 ID : 6306801497541  
 Option 2 ID : 6306801497539  
 Option 3 ID : 6306801497540  
 Option 4 ID : 6306801497538  
 Status : Answered  
 Chosen Option : 2

Q.8 Who among the following received the first Yuva Puraskar for literary works?

- Ans
- ☒ 1. Sagar Nazir
  - ☒ 2. Nisar Azam
  - ☒ 3. Razi Tahir Bhagat
  - ☒ 4. Shaista Khan

Question ID : 630680384267  
 Option 1 ID : 6306801497955  
 Option 2 ID : 6306801497956  
 Option 3 ID : 6306801497957  
 Option 4 ID : 6306801497954  
 Status : Not Answered  
 Chosen Option : --

Q.9 From where does the Ganges originate?

- Ans
- ☒ 1. Kailash
  - ☒ 2. Mansarovar
  - ☒ 3. Yamunotri
  - ☒ 4. Gangotri

Question ID : 630680384100  
 Option 1 ID : 6306801497293  
 Option 2 ID : 6306801497292  
 Option 3 ID : 6306801497290  
 Option 4 ID : 6306801497291  
 Status : Answered  
 Chosen Option : 4

**Q.10** Who among the following participated in all the Three Round Table Conferences and signed the Poona Pact with Gandhiji in 1932?

- Ans ☒ 1. Dadabhai Naoroji  
☒ 2. Dr B.R. Ambedkar  
☒ 3. Dr Zakir Hussain  
☒ 4. Dr Rajendra Prasad

Question ID : 630680384125  
 Option 1 ID : 6306801497390  
 Option 2 ID : 6306801497391  
 Option 3 ID : 6306801497393  
 Option 4 ID : 6306801497392  
 Status : Answered  
 Chosen Option : 2

**Q.11** "Population Pyramid" is a graphical representation of the age and sex distribution of a population. Which type of the population pyramid indicates a stable population with a roughly equal number of individuals in each age group?

- Ans ☒ 1. Stationary pyramid  
☒ 2. Expansive pyramid  
☒ 3. Proportional pyramid  
☒ 4. Constrictive pyramid

Question ID : 630680384208  
 Option 1 ID : 6306801497724  
 Option 2 ID : 6306801497722  
 Option 3 ID : 6306801497725  
 Option 4 ID : 6306801497723  
 Status : Not Answered  
 Chosen Option : --

**Q.12** Which among the following are the most widespread forests in India?

- Ans ☒ 1. Semi Evergreen Forest  
☒ 2. Mangrove Forest  
☒ 3. Coniferous Forest  
☒ 4. Tropical Deciduous Forest

Question ID : 630680384105  
 Option 1 ID : 6306801497313  
 Option 2 ID : 6306801497311  
 Option 3 ID : 6306801497312  
 Option 4 ID : 6306801497310  
 Status : Answered  
 Chosen Option : 4

**Q.13** Who among the following defeated the Afghan Ruler Sultan Mohammad Ghori?

- Ans ☒ 1. Vijayalaya  
☒ 2. Prithviraj I  
☒ 3. Prithviraj III  
☒ 4. Prithviraj II

Question ID : 630680384323  
 Option 1 ID : 6306801498181  
 Option 2 ID : 6306801498178  
 Option 3 ID : 6306801498180  
 Option 4 ID : 6306801498179  
 Status : Answered

Q.14 Which of the following languages is mostly spoken in India?

- Ans
- ☒ 1. Marathi
  - ☒ 2. English
  - ☒ 3. Hindi
  - ☒ 4. Bengali

Question ID : 630680384078  
 Option 1 ID : 6306801497204  
 Option 2 ID : 6306801497202  
 Option 3 ID : 6306801497203  
 Option 4 ID : 6306801497205  
 Status : Answered  
 Chosen Option : 3

Q.15 Where does the President of India pay tribute to the Indian martyred soldiers on Republic Day?

- Ans
- ☒ 1. Red Fort
  - ☒ 2. Gateway Of India
  - ☒ 3. Charminar
  - ☒ 4. India Gate

Question ID : 630680384273  
 Option 1 ID : 6306801497979  
 Option 2 ID : 6306801497978  
 Option 3 ID : 6306801497981  
 Option 4 ID : 6306801497980  
 Status : Answered  
 Chosen Option : 4

Q.16 In which year was Raziya Sultana removed from the throne during the Delhi Sultanate period?

- Ans
- ☒ 1. 1240
  - ☒ 2. 1256
  - ☒ 3. 1266
  - ☒ 4. 1263

Question ID : 630680384320  
 Option 1 ID : 6306801498167  
 Option 2 ID : 6306801498168  
 Option 3 ID : 6306801498166  
 Option 4 ID : 6306801498169  
 Status : Answered  
 Chosen Option : 1

Q.17 The violence that began May 2023 in Manipur where due to clashes between which communities?

- Ans
- ☒ 1. Kukis and Nagas
  - ☒ 2. Meiteis and Garos
  - ☒ 3. Kukis and Meiteis
  - ☒ 4. Bodos and Nagas

Question ID : 630680384145  
 Option 1 ID : 6306801497470  
 Option 2 ID : 6306801497471  
 Option 3 ID : 6306801497473  
 Option 4 ID : 6306801497472  
 Status : Answered



Q.18 On which date Pradhan Mantri Garib Kalyan Ann Yojana was launched?

- Ans ☒ 1. 1st Jan 2023  
☒ 2. 1st Apr 2022  
☒ 3. 1st Jun 2022  
☒ 4. 3rd May 2023

Question ID : 630680386403  
 Option 1 ID : 6306801506322  
 Option 2 ID : 6306801506324  
 Option 3 ID : 6306801506323  
 Option 4 ID : 6306801506325  
 Status : Not Answered  
 Chosen Option : --

Q.19 When was the first complete census taken in India?

- Ans ☒ 1. 1883  
☒ 2. 1834  
☒ 3. 1880  
☒ 4. 1881

Question ID : 630680384315  
 Option 1 ID : 6306801498147  
 Option 2 ID : 6306801498149  
 Option 3 ID : 6306801498148  
 Option 4 ID : 6306801498146  
 Status : Answered  
 Chosen Option : 4

Q.20 What is the mission of 'National Biotechnology Development Strategy 2021-2025'?

- Ans ☒ 1. To promote the use of biotechnology in the textile industry and boost exports by 2025.  
☒ 2. To establish India as a global leader in pharmaceutical manufacturing by 2025.  
☒ 3. To make India globally competitive in biotechnology research, innovation, translation, entrepreneurship and industrial growth and be a USD 150 billion Bioeconomy by 2025.  
☒ 4. To develop sustainable agricultural practices and achieve food security in India by 2025.

Question ID : 630680384136  
 Option 1 ID : 6306801497434  
 Option 2 ID : 6306801497437  
 Option 3 ID : 6306801497435  
 Option 4 ID : 6306801497436  
 Status : Answered  
 Chosen Option : 3

Q.21 Which of the following best describes microfinance institutions (MFIs) in India?

- Ans ☒ 1. Non-profit organizations providing free financial literacy programs  
☒ 2. Stock exchanges facilitating trading of microcap stocks  
☒ 3. Government-run banks providing loans to large corporations  
☒ 4. Financial institutions that offer small loans to low-income individuals and groups

Question ID : 630680386441  
 Option 1 ID : 6306801506477  
 Option 2 ID : 6306801506476  
 Option 3 ID : 6306801506474  
 Option 4 ID : 6306801506475  
 Status : Answered  
 Chosen Option : 4

Q.22 "Make in India" campaign was launched with the aim of:

- Ans ☒ 1. Enhancing agricultural productivity and rural development  
☒ 2. Improving the education system and literacy rate in India  
☒ 3. Encouraging domestic manufacturing and promoting foreign direct investment  
☒ 4. Promoting tourism and cultural exchange

Question ID : 630680384193  
 Option 1 ID : 6306801497664  
 Option 2 ID : 6306801497665  
 Option 3 ID : 6306801497663  
 Option 4 ID : 6306801497662  
 Status : Answered  
 Chosen Option : 3

Q.23 In which of the following states in India is the local festival Bathukamma celebrated?

- Ans ☒ 1. Jharkhand  
☒ 2. Telangana  
☒ 3. Himachal Pradesh  
☒ 4. Gujrat

Question ID : 630680384276  
 Option 1 ID : 6306801497993  
 Option 2 ID : 6306801497990  
 Option 3 ID : 6306801497991  
 Option 4 ID : 6306801497992  
 Status : Answered  
 Chosen Option : 2

Q.24 In 2023, who is current Minister of State (Independent Charge) for the Ministry of Science and Technology?

- Ans ☒ 1. Shri Srivari Chandrasekhar  
☒ 2. Dr. Jitendra Singh  
☒ 3. Shri Kiran Rijju  
☒ 4. Dharmendra Pradhan

Question ID : 630680386398  
 Option 1 ID : 6306801506303  
 Option 2 ID : 6306801506304  
 Option 3 ID : 6306801506305  
 Option 4 ID : 6306801506302  
 Status : Answered  
 Chosen Option : 4

Q.25 Who among the following played for Chandigarh before joining the Punjab Cricket Team?

- Ans ☒ 1. Harmanpreet Kaur  
☒ 2. Mithali Raj  
☒ 3. Amanjot Kaur  
☒ 4. Smriti Mandhana

Question ID : 630680384155  
 Option 1 ID : 6306801497510  
 Option 2 ID : 6306801497511  
 Option 3 ID : 6306801497512  
 Option 4 ID : 6306801497513  
 Status : Not Answered  
 Chosen Option : --

Section : Quantitative Aptitude

**Q.1** Two successive price increases of 20% and 25% of an article are equivalent to a single price increase of \_\_\_\_\_.

- Ans**
- ✓ 1. 50%
  - ✗ 2. 25%
  - ✗ 3. 35%
  - ✗ 4. 45%

Question ID : 630680385001  
 Option 1 ID : 6306801500893  
 Option 2 ID : 6306801500890  
 Option 3 ID : 6306801500891  
 Option 4 ID : 6306801500892  
 Status : Answered  
 Chosen Option : 1

**Q.2** Find the ratio of the volume of a cone to the volume of a cylinder of the same base radius and the height of the cone being 3 times the height of the cylinder.

- Ans**
- ✗ 1. 1 : 2
  - ✗ 2. 3 : 1
  - ✗ 3. 1 : 3
  - ✓ 4. 1 : 1

Question ID : 630680385147  
 Option 1 ID : 6306801501474  
 Option 2 ID : 6306801501475  
 Option 3 ID : 6306801501476  
 Option 4 ID : 6306801501477  
 Status : Answered  
 Chosen Option : 4

**Q.3** The average marks obtained by 50 students of a class is 78. If the 5 highest marks are removed, the average reduces by two mark. The average marks of the top 5 students is

- Ans**
- ✗ 1. 94
  - ✗ 2. 100
  - ✗ 3. 98
  - ✓ 4. 96

Question ID : 630680384966  
 Option 1 ID : 6306801500750  
 Option 2 ID : 6306801500753  
 Option 3 ID : 6306801500752  
 Option 4 ID : 6306801500751  
 Status : Answered  
 Chosen Option : 4

- Q.4** The table shows the number of books sold by 5 different stores on 5 different weekdays.  
If the average number of books sold by store C on Saturday, Wednesday and Thursday is 90 and the average number of books sold by store C on Saturday, Sunday and Monday is 94, Find the ratio of the number of books sold by store C on Saturday to that of Sunday.

Store / Weekdays	Monday	Tuesday	Wednesday	Thursday	Friday
A	92	80	75	104	110
B	108	74	60	88	92
C	102	82	112	95	125
D	98	81	92	115	72
E	70	98	105	84	78

- Ans
- ☒ 1. 4:3
  - ☒ 2. 19:23
  - ☒ 3. 63:61
  - ☒ 4. 7:13

Question ID : 630680384972  
 Option 1 ID : 6306801500774  
 Option 2 ID : 6306801500777  
 Option 3 ID : 6306801500775  
 Option 4 ID : 6306801500776  
 Status : Answered  
 Chosen Option : 4

- Q.5** If  $t + \frac{1}{t} = 4$ , find the value of  $t^2 + \left(\frac{1}{t^2}\right)$ .

- Ans
- ☒ 1. 14
  - ☒ 2. 18
  - ☒ 3. 20
  - ☒ 4. 16

Question ID : 630680385113  
 Option 1 ID : 6306801501339  
 Option 2 ID : 6306801501340  
 Option 3 ID : 6306801501341  
 Option 4 ID : 6306801501338  
 Status : Answered  
 Chosen Option : 1

- Q.6** Find the value of  $h^3 + i^3 + z^3 - 3hiz$  if  $h + i + z = 0$

- Ans
- ☒ 1. 0
  - ☒ 2. Cannot be determined
  - ☒ 3. 1
  - ☒ 4. -1

Question ID : 630680385115  
 Option 1 ID : 6306801501346  
 Option 2 ID : 6306801501349  
 Option 3 ID : 6306801501347  
 Option 4 ID : 6306801501348  
 Status : Answered  
 Chosen Option : 1

**Q.7** Abhijeet spends 15% of his monthly income in travelling. He spends 31% of his monthly income on household expenses and spends 33% of his monthly income on families medical expenses. He has remaining amount of ₹12306 as cash with him. What is Abhijeet's annual income ?

- Ans** ☒ 1. ₹ 58600  
☐ 2. ₹ 856900  
☐ 3. ₹ 703200  
☐ 4. ₹ 632560

Question ID : 630680385007  
Option 1 ID : 6306801500914  
Option 2 ID : 6306801500917  
Option 3 ID : 6306801500916  
Option 4 ID : 6306801500915  
Status : Answered  
Chosen Option : 1

**Q.8** Ashok can do 50% of a work in 15 days, whereas Bob can do 30% of the same work in 18 days. Both works together for 12 days. Catherine completes the remaining work alone in 12 days. Ashok, Bob and Catherine together will complete 25% of the same work in:

- Ans** ☐ 1. 4 days  
☐ 2. 1 day  
☒ 3. 3 days  
☐ 4. 2 days

Question ID : 630680385040  
Option 1 ID : 6306801501049  
Option 2 ID : 6306801501046  
Option 3 ID : 6306801501048  
Option 4 ID : 6306801501047  
Status : Answered  
Chosen Option : 3

**Q.9** A trader sells his goods at 30% profit. Had he bought it at 20% more and sold it for ₹140 more, he would have earned a profit of 25%. Find the cost price of the goods.

- Ans** ☐ 1. ₹500  
☐ 2. ₹ 550  
☒ 3. ₹ 700  
☐ 4. ₹ 675

Question ID : 630680385024  
Option 1 ID : 6306801500982  
Option 2 ID : 6306801500983  
Option 3 ID : 6306801500985  
Option 4 ID : 6306801500984  
Status : Answered  
Chosen Option : 3

**Q.10** The side of a square is 26 cm and the side of an equilateral triangle is 24 cm. The sum of perimeter of a square and an equilateral triangle is equal to the circumference of a circle. Find the area of the circle.

- Ans** ✓ 1. 2464 cm<sup>2</sup>  
 ✗ 2. 14 cm<sup>2</sup>  
 ✗ 3. 88 cm<sup>2</sup>  
 ✗ 4. 616 cm<sup>2</sup>

Question ID : 630680384977  
 Option 1 ID : 6306801500797  
 Option 2 ID : 6306801500794  
 Option 3 ID : 6306801500795  
 Option 4 ID : 6306801500796  
 Status : Answered  
 Chosen Option : 1

**Q.11** If two supplementary angles differ by 36°, then one of the angle is :

- Ans** ✓ 1. 72°  
 ✗ 2. 102°  
 ✗ 3. 56°  
 ✗ 4. 36°

Question ID : 630680385830  
 Option 1 ID : 6306801504041  
 Option 2 ID : 6306801504040  
 Option 3 ID : 6306801504039  
 Option 4 ID : 6306801504038  
 Status : Answered  
 Chosen Option : 1

**Q.12** The line graph shows the data related to the number of Jeans sold of two different brands; Allen Solly and Lee Cooper during five months.

If the total number of jeans sold of both brands together in December is 25% less than that in April, then what is the total number of jeans sold of both brands together in December?



- Ans** ✗ 1. 725  
 ✗ 2. 786  
 ✓ 3. 654  
 ✗ 4. 688

Question ID : 630680384970  
 Option 1 ID : 6306801500768  
 Option 2 ID : 6306801500769  
 Option 3 ID : 6306801500766  
 Option 4 ID : 6306801500767  
 Status : Answered  
 Chosen Option : 3

**Q.13** Aman can do a work in 20 days. If Aman and Basil together can do the work in 15 days. In how many days Basil alone can complete the work?

- Ans**
- ✓ 1. 60 days
  - ✗ 2. 45 days
  - ✗ 3. 5 days
  - ✗ 4. 24 days

Question ID : 630680385038  
 Option 1 ID : 6306801501041  
 Option 2 ID : 6306801501040  
 Option 3 ID : 6306801501038  
 Option 4 ID : 6306801501039  
 Status : Answered  
 Chosen Option : 1

**Q.14** Brass is 18 times as heavy as water and Aluminium is 6 times as heavy as water. In what ratio should these metals be mixed respectively so that the mixture may be 15 times as heavy as water?

- Ans**
- ✗ 1. 1 : 2
  - ✗ 2. 5 : 3
  - ✓ 3. 3 : 1
  - ✗ 4. 3 : 2

Question ID : 630680385034  
 Option 1 ID : 6306801501022  
 Option 2 ID : 6306801501025  
 Option 3 ID : 6306801501023  
 Option 4 ID : 6306801501024  
 Status : Answered  
 Chosen Option : 3

**Q.15** Rakesh sold an washing machine for ₹ 6,575 and incurred a loss of 25%. At what price should he have sold the machine to have gained a profit of 32% ?

- Ans**
- ✗ 1. ₹9895
  - ✗ 2. ₹10586
  - ✓ 3. ₹11572
  - ✗ 4. ₹12468

Question ID : 630680385021  
 Option 1 ID : 6306801500973  
 Option 2 ID : 6306801500971  
 Option 3 ID : 6306801500970  
 Option 4 ID : 6306801500972  
 Status : Answered  
 Chosen Option : 3



**Q.16** A man travels a distance of 36 km at 5 kmph. Another distance of 18 km at 6 kmph and a third distance of 28 km at 7 kmph. His approximate average speed for the whole journey (in kmph) is \_\_\_\_\_.

- Ans
- ✓ 1. 5.77 kmph
  - ✗ 2. 6.2 kmph
  - ✗ 3. 4.65 kmph
  - ✗ 4. 5.28 kmph

Question ID : 630680384967  
 Option 1 ID : 6306801500756  
 Option 2 ID : 6306801500757  
 Option 3 ID : 6306801500754  
 Option 4 ID : 6306801500755  
 Status : Answered  
 Chosen Option : 1

**Q.17** A solid metallic right circular cylindrical block of radius 8 cm and height 14 cm is melted and small cubes of 0.4 cm are made from it. Find the number of cubes that can be made from the block.

- Ans
- ✗ 1. 20,000
  - ✗ 2. 65,000
  - ✗ 3. 21,000
  - ✓ 4. 44,000

Question ID : 630680384886  
 Option 1 ID : 6306801500433  
 Option 2 ID : 6306801500432  
 Option 3 ID : 6306801500430  
 Option 4 ID : 6306801500431  
 Status : Answered  
 Chosen Option : 4

**Q.18** In  $\triangle RST$ ,  $RS = RT$  and D is a point on RT such that  $ST^2 = RT \times TD$ . Then :

- Ans
- ✗ 1.  $SD = DT$
  - ✗ 2.  $SD = RS$
  - ✓ 3.  $SD = ST$
  - ✗ 4.  $SD = RD$

Question ID : 630680385834  
 Option 1 ID : 6306801504054  
 Option 2 ID : 6306801504056  
 Option 3 ID : 6306801504055  
 Option 4 ID : 6306801504057  
 Status : Not Attempted and Marked For Review  
 Chosen Option : --

Q.19 Find the value of :

$$\left(\frac{273}{3}\right) - 19 \times 7 + \sqrt[3]{2197} = ?$$

- Ans
- ✓ 1. -29
  - ✗ 2. 42
  - ✗ 3. -54
  - ✗ 4. 76

Question ID : 630680384995  
 Option 1 ID : 6306801500867  
 Option 2 ID : 6306801500868  
 Option 3 ID : 6306801500866  
 Option 4 ID : 6306801500869  
 Status : Answered  
 Chosen Option : 1

Q.20 If  $6y2y03$  is divisible by 11, then find the value of y.

- Ans
- ✗ 1. 2
  - ✓ 2. 8
  - ✗ 3. 3
  - ✗ 4. 4

Question ID : 630680384898  
 Option 1 ID : 6306801500478  
 Option 2 ID : 6306801500479  
 Option 3 ID : 6306801500481  
 Option 4 ID : 6306801500480  
 Status : Answered  
 Chosen Option : 2

Q.21 If  $s^2 - 5\sqrt{2}s + 1 = 0$ , find the value of  $s^3 + \left(\frac{1}{s^3}\right)$ .

- Ans
- ✗ 1.  $310\sqrt{2}$
  - ✓ 2.  $235\sqrt{2}$
  - ✗ 3.  $54\sqrt{2}$
  - ✗ 4.  $250\sqrt{2}$

Question ID : 630680385773  
 Option 1 ID : 6306801503813  
 Option 2 ID : 6306801503811  
 Option 3 ID : 6306801503810  
 Option 4 ID : 6306801503812  
 Status : Answered  
 Chosen Option : 2

**Q.22** Avinash, Bipin, Charu invest ₹75,000 for a business. Avinash invests ₹8000 more than Bipin and Bipin invests ₹5000 more than Charu. Out of a total profit of ₹45,000, A receives:

- Ans** ☒ 1. ₹19200  
☒ 2. ₹18750  
☒ 3. ₹20500  
☒ 4. ₹18500

Question ID : 630680385029  
 Option 1 ID : 6306801501004  
 Option 2 ID : 6306801501003  
 Option 3 ID : 6306801501005  
 Option 4 ID : 6306801501002  
 Status : Answered  
 Chosen Option : 1

**Q.23** The maximum number of common tangents to two circles who do not touch each other are:

- Ans** ☒ 1. 2  
☒ 2. 3  
☒ 3. 1  
☒ 4. 4

Question ID : 630680385174  
 Option 1 ID : 6306801501584  
 Option 2 ID : 6306801501582  
 Option 3 ID : 6306801501585  
 Option 4 ID : 6306801501583  
 Status : Answered  
 Chosen Option : 4

**Q.24** Water flows into a tank  $300\text{ m} \times 250\text{ m}$  through a rectangular pipe  $2.5\text{ m} \times 1.2\text{ m}$  at  $15\text{ kmph}$ . In what time (in minutes) will the water rise by 4 meters?

- Ans** ☒ 1. 400 min  
☒ 2. 450 min  
☒ 3. 260 min  
☒ 4. 590 min

Question ID : 630680384990  
 Option 1 ID : 6306801500847  
 Option 2 ID : 6306801500848  
 Option 3 ID : 6306801500846  
 Option 4 ID : 6306801500849  
 Status : Not Answered  
 Chosen Option : --

Q.25 Find The Value Of:

$$\operatorname{cosec}60^\circ \times \sec30^\circ + \cot60^\circ \times \tan30^\circ = ?$$

Ans

✓ 1.  $\frac{5}{3}$

✗ 2. 1

✗ 3.  $\frac{4}{3}$

✗ 4.  $\frac{2}{3}$

Question ID : 630680385862

Option 1 ID : 6306801504169

Option 2 ID : 6306801504167

Option 3 ID : 6306801504168

Option 4 ID : 6306801504166

Status : Answered

Chosen Option : 1

Section : English Comprehension

Q.1 The sentences given below are all part of a paragraph but do not necessarily fall in the order that they are in. The first and the last sentences of the paragraph are given.

Choose the option that arranges these sentences to form a meaningful paragraph.

'You're mistaken, Mrs. Linton,' said I. 'They humour you: I know what there

A. desires. You may, however, fall out, at last, over something of equal

B. their passing whims as long as their business is to anticipate all your

C. consequence to both sides; and then those you term weak are very

D. would be to do if they did not. You can well afford to indulge  
capable of being as obstinate as you.'

Ans ✗ 1. BDCA

✗ 2. CADB

✗ 3. ABCD

✓ 4. DBAC

Question ID : 630680385348

Option 1 ID : 6306801502245

Option 2 ID : 6306801502242

Option 3 ID : 6306801502244

Option 4 ID : 6306801502243

Status : Not Attempted and  
Marked For Review

Chosen Option : --

Q.2 Use positive question tag for statement given below.  
"He didn't eat dinner, \_\_\_\_\_?"

- Ans
- ☒ 1. isn't he?
  - ☒ 2. didn't he?
  - ☒ 3. did he?
  - ☒ 4. does he?

Question ID : 630680385458

Option 1 ID : 6306801502646

Option 2 ID : 6306801502648

Option 3 ID : 6306801502647

Option 4 ID : 6306801502649

Status : Answered

Chosen Option : 3

Q.3 Select the word from the options which is exactly opposite in meaning to the bracketed word given in the sentence below.  
After the Shivang (elucidated) the problem and hinted at some solution, the director, I figured, might be able to expand.

- Ans
- ☒ 1. Decode
  - ☒ 2. Complicate
  - ☒ 3. Raucous
  - ☒ 4. Insinuate

Question ID : 630680385647

Option 1 ID : 6306801503346

Option 2 ID : 6306801503349

Option 3 ID : 6306801503347

Option 4 ID : 6306801503348

Status : Answered

Chosen Option : 2

Q.4 Select the most appropriate missing sentence to complete the paragraph meaningfully.  
In the evening a wind from the northeast sprang up, and the flakes rushed hither and thither in furious melee. Around the great fire we sat and told merry tales, and frolicked, and quite forgot that we were in the midst of a desolate solitude, shut in from all communication with the outside world. But during the night \_\_\_\_\_.

- Ans
- ☒ 1. he evidently remembered he was engaged to me, as he ran back to hug me.
  - ☒ 2. we can send black puddings and pettitoes without giving them a flavour of our own egoism.
  - ☒ 3. the fury of the wind increased to such a degree that it thrilled us with a vague terror.
  - ☒ 4. that was a feeble evasion, but Godfrey was not fond of lying.

Question ID : 630680385587

Option 1 ID : 6306801503127

Option 2 ID : 6306801503129

Option 3 ID : 6306801503128

Option 4 ID : 6306801503126

Status : Answered

Chosen Option : 3

Q.5 Fill in the blank with the most appropriate option.  
Crab took the opportunity of saying to her daughter '\_\_\_\_\_, my dear! Let this be a lesson to you never to lose your temper!'

Ans ☒ 1. Ah

☐ 2. Hurray

☐ 3. Aye

☐ 4. Boo

Question ID : 630680385337

Option 1 ID : 6306801502199

Option 2 ID : 6306801502201

Option 3 ID : 6306801502198

Option 4 ID : 6306801502200

Status : Answered

Chosen Option : 1

Q.6 Determine the meaning of the bracketed idiom from the statement given below.  
The celebrity's glamorous lifestyle may seem perfect on social media, but (all that glitters is not gold), and it's crucial to recognize that everyone has their struggles and challenges.

Ans ☐ 1. Everything that shines is made of gold

☒ 2. Appearances can be deceiving

☐ 3. Social media is a reliable source of information

☐ 4. Celebrities always have a perfect life

Question ID : 630680385518

Option 1 ID : 6306801502866

Option 2 ID : 6306801502867

Option 3 ID : 6306801502869

Option 4 ID : 6306801502868

Status : Answered

Chosen Option : 2

Q.7 Arrange the following sentences in the correct order to form a coherent paragraph:  
The company identified a gap in the market for innovative home products.  
A.The team conducted thorough research to gather data and insights.  
B.With a clear vision in mind, the company started developing new ideas.  
C.After months of hard work, the company launched its line of smart home devices.  
D.The products received rave reviews from tech enthusiasts and consumers.  
The company's commitment to excellence and customer satisfaction drove its success.

Ans ☒ 1. ABCD

☐ 2. BCAD

☐ 3. CADB

☐ 4. DBAC

Question ID : 630680385696

Option 1 ID : 6306801503526

Option 2 ID : 6306801503529

Option 3 ID : 6306801503527

Option 4 ID : 6306801503528

Status : Answered

Chosen Option : 1

Q.8 Determine the meaning of the underlined idiom from the statement given below.  
After accidentally spilling her drink on her friend's new dress, Emily quickly realized she had (added insult to injury) when she accidentally stepped on her friend's foot as well.

- Ans
- ☒ 1. To apologize sincerely for a mistake
  - ☒ 2. To avoid admitting fault and pretend nothing happened
  - ☒ 3. To unintentionally cause additional harm or offense after a previous mistake or injury
  - ☒ 4. To try to make amends for a wrong action

Question ID : 630680385515

Option 1 ID : 6306801502854

Option 2 ID : 6306801502857

Option 3 ID : 6306801502855

Option 4 ID : 6306801502856

Status : Answered

Chosen Option : 3

Q.9 Select the most appropriate synonym to substitute the bracketed word in the given sentence.  
Taking medication can help (alleviate) the symptoms of a headache.

- Ans
- ☒ 1. Falter
  - ☒ 2. Altruistic
  - ☒ 3. Diminish
  - ☒ 4. Aggravate

Question ID : 630680385532

Option 1 ID : 6306801502923

Option 2 ID : 6306801502922

Option 3 ID : 6306801502924

Option 4 ID : 6306801502925

Status : Answered

Chosen Option : 3

Q.10 Arrange the following sentences in the correct order to form a coherent paragraph:

The event was organized by a local art society to promote and celebrate local talent.

A. The art exhibition featured a diverse collection of paintings, sculptures, and photographs.

B. Many renowned artists from different parts of the country participated in the exhibition.

C. The exhibition hall buzzed with excitement as art enthusiasts explored the artworks.

D. Several workshops and interactive sessions were also conducted to engage the visitors.

Visitors were impressed by the creativity and skill displayed by the artists.

- Ans
- ☒ 1. BDCA
  - ☒ 2. ABCD
  - ☒ 3. ABDC
  - ☒ 4. BACD

Question ID : 630680385467

Option 1 ID : 6306801502684

Option 2 ID : 6306801502683

Option 3 ID : 6306801502685

Option 4 ID : 6306801502682

Status : Answered

Chosen Option : 3



**Q.11** Select the missing sentence that would logically fill in the blank:  
Computers have become an integral part of our lives. They assist us in various tasks, from simple calculations to complex data analysis. The internet, a vast network of interconnected computers, has revolutionized the way we communicate and access information. \_\_\_\_\_. However, it is the same technology that has also brought about concerns regarding data privacy and security.

- Ans**
- ☒ 1. People now prefer using smartphones instead of computers.
  - ☒ 2. Bill Gates is the founder of Microsoft Corporation.
  - ☒ 3. It has opened an array of options which almost seems like a new world, indeed the technology is a true revolution.
  - ☒ 4. Computers have evolved significantly since their invention.

Question ID : 630680385691  
Option 1 ID : 6306801503507  
Option 2 ID : 6306801503506  
Option 3 ID : 6306801503509  
Option 4 ID : 6306801503508  
Status : Answered  
Chosen Option : 3

**Q.12** Please select the most suitable phrasal verb from the options provided to fill in the blank.  
The student was struggling to understand the complex math concepts, but with the help of a tutor, he was able to \_\_\_\_\_ them and improve his grades.

- Ans**
- ☒ 1. pick on
  - ☒ 2. pick out
  - ☒ 3. pick up
  - ☒ 4. pick off

Question ID : 630680385453  
Option 1 ID : 6306801502629  
Option 2 ID : 6306801502628  
Option 3 ID : 6306801502627  
Option 4 ID : 6306801502626  
Status : Answered  
Chosen Option : 3

**Q.13** Select the word segment that substitutes (replaces) the bracketed word segment correctly and completes the sentence meaningfully. Select the option 'no correction required' if the sentence is correct as given.  
He was pale and there were dark signs of (sleeplessness beneath) his eyes.

- Ans**
- ☒ 1. sleeplessness surround
  - ☒ 2. sleeplessness besides
  - ☒ 3. sleeplessness beyond
  - ☒ 4. No correction required

Question ID : 630680385399  
Option 1 ID : 6306801502428  
Option 2 ID : 6306801502427  
Option 3 ID : 6306801502426  
Option 4 ID : 6306801502429  
Status : Answered  
Chosen Option : 4

Q.14 Select the most appropriate synonym of the given word.  
Vantage

- Ans ☒ 1. Unfrock  
☒ 2. Outlook  
☒ 3. Vengeance  
☒ 4. Vital

Question ID : 630680385531  
Option 1 ID : 6306801502919  
Option 2 ID : 6306801502918  
Option 3 ID : 6306801502920  
Option 4 ID : 6306801502921  
Status : Not Attempted and  
Marked For Review  
Chosen Option : --

Q.15 Select the most appropriate word for the given phrase.  
A small kitchen or room at the back of a house used for washing dishes and another  
dirty household work.

- Ans ☒ 1. Convent  
☒ 2. Scullery  
☒ 3. Out house  
☒ 4. Granary

Question ID : 630680385386  
Option 1 ID : 6306801502374  
Option 2 ID : 6306801502375  
Option 3 ID : 6306801502377  
Option 4 ID : 6306801502376  
Status : Answered  
Chosen Option : 2

Q.16 Select the most appropriate word for the given phrase.  
A stoppered glass container into which wine or spirit is poured.

- Ans ☒ 1. Decanter  
☒ 2. Infirmary  
☒ 3. Dray  
☒ 4. Hutch

Question ID : 630680385392  
Option 1 ID : 6306801502398  
Option 2 ID : 6306801502401  
Option 3 ID : 6306801502399  
Option 4 ID : 6306801502400  
Status : Answered  
Chosen Option : 1

Q.17 Identify the word that is the opposite in meaning to the given word.  
Opaque

- Ans ☒ 1. Uncertain  
☒ 2. Evasive  
☒ 3. Confusing  
☒ 4. Clear

Question ID : 630680385525

Option 1 ID : 6306801502897

Option 2 ID : 6306801502896

Option 3 ID : 6306801502895

Option 4 ID : 6306801502894

Status : Answered

Chosen Option : 4

### Comprehension:

Read the given passage carefully and select the most appropriate answer to the questions that follow.

It was fifteen years since Silas Marner had first come to Raveloe; he was then simply a pallid young man, with prominent short-sighted brown eyes, whose appearance would have had nothing strange for people of average culture and experience, but for the villagers near whom he had come to settle it had mysterious peculiarities which corresponded with the exceptional nature of his occupation, and his advent from an unknown region called "North'-ard." So had his way of life: - he invited no comers to step across his door-sill, and he never strolled into the village to drink a pint at the Rainbow, or to gossip at the Wheelwright's: he sought no man or woman, save for the purposes of his calling, or in order to supply himself with necessaries; and it was soon clear to the Raveloe lasses that he would never urge one of them to accept him against her will - quite as if he had heard them declare that they would never marry a dead man come to life again.

SubQuestion No : 18

Q.18 From the given options, identify the suitable title for the passage.

- Ans ☒ 1. The Wheelwright  
☒ 2. Raveloe  
☒ 3. Raveloe Lasses  
☒ 4. Silas Marner

Question ID : 630680385435

Option 1 ID : 6306801502560

Option 2 ID : 6306801502561

Option 3 ID : 6306801502559

Option 4 ID : 6306801502558

Status : Not Answered

Chosen Option : --

**Comprehension:**

Read the given passage carefully and select the most appropriate answer to the questions that follow.

It was fifteen years since Silas Marner had first come to Raveloe; he was then simply a pallid young man, with prominent short-sighted brown eyes, whose appearance would have had nothing strange for people of average culture and experience, but for the villagers near whom he had come to settle it had mysterious peculiarities which corresponded with the exceptional nature of his occupation, and his advent from an unknown region called "North'-ard." So had his way of life: - he invited no comer to step across his door-sill, and he never strolled into the village to drink a pint at the Rainbow, or to gossip at the Wheelwright's: he sought no man or woman, save for the purposes of his calling, or in order to supply himself with necessities; and it was soon clear to the Raveloe lasses that he would never urge one of them to accept him against her will - quite as if he had heard them declare that they would never marry a dead man come to life again.

**SubQuestion No : 19**

**Q.19 Identify the correct inference that can be drawn from the passage.**

- Ans** ☒ 1. Silas Marner was a strange man, who had no friends in town, he didn't interact with anyone.
- ☐ 2. When Silas first came to town he was just 5 years old.
- ☐ 3. All the people of Raveloe like Silas for his true nature.
- ☐ 4. Silas gelled well with the crowd.

Question ID : 630680385437  
Option 1 ID : 6306801502567  
Option 2 ID : 6306801502566  
Option 3 ID : 6306801502568  
Option 4 ID : 6306801502569  
Status : Not Answered  
Chosen Option : --

**Comprehension:**

Read the given passage carefully and select the most appropriate answer to the questions that follow.

It was fifteen years since Silas Marner had first come to Raveloe; he was then simply a pallid young man, with prominent short-sighted brown eyes, whose appearance would have had nothing strange for people of average culture and experience, but for the villagers near whom he had come to settle it had mysterious peculiarities which corresponded with the exceptional nature of his occupation, and his advent from an unknown region called "North'-ard." So had his way of life: - he invited no comer to step across his door-sill, and he never strolled into the village to drink a pint at the Rainbow, or to gossip at the Wheelwright's: he sought no man or woman, save for the purposes of his calling, or in order to supply himself with necessities; and it was soon clear to the Raveloe lasses that he would never urge one of them to accept him against her will - quite as if he had heard them declare that they would never marry a dead man come to life again.

**SubQuestion No : 20**

**Q.20 Which of the following statements is not true with respect to the passage.**

- Ans** ☐ 1. At first when Silas came to Raveloe he seemed to be a pallid young man.
- ☐ 2. Silas Marner wasn't a social butterfly.
- ☐ 3. Silas Marner first came to the town 15 years ago.
- ☒ 4. All the young women in Raveloe liked Silas and wanted to marry him.

Question ID : 630680385436  
Option 1 ID : 6306801502562  
Option 2 ID : 6306801502564  
Option 3 ID : 6306801502563  
Option 4 ID : 6306801502565  
Status : Not Answered  
Chosen Option : --

Comprehension:

Read the given passage carefully and select the most appropriate answer to the questions that follow.

It was fifteen years since Silas Marner had first come to Raveloe; he was then simply a pallid young man, with prominent short-sighted brown eyes, whose appearance would have had nothing strange for people of average culture and experience, but for the villagers near whom he had come to settle it had mysterious peculiarities which corresponded with the exceptional nature of his occupation, and his advent from an unknown region called "North'-ard." So had his way of life: - he invited no comer to step across his door-sill, and he never strolled into the village to drink a pint at the Rainbow, or to gossip at the Wheelwright's: he sought no man or woman, save for the purposes of his calling, or in order to supply himself with necessities; and it was soon clear to the Raveloe lasses that he would never urge one of them to accept him against her will - quite as if he had heard them declare that they would never marry a dead man come to life again.

SubQuestion No : 21

Q.21 Select the options the most appropriate meaning of the bracketed word given in the sentence below.

'...soon clear to the Raveloe (lasses) that he...'

- Ans

 1. elders

 2. young women

 3. country people

 4. children

Question ID : 630680385438

Option 1 ID : 6306801502573

Option 2 ID : 6306801502572

Option 3 ID : 6306801502570

Option 4 ID : 6306801502571

Status : Not Answered

Chosen Option : --

Q.22 Select the word segment that substitutes (replaces) the bracketed word segment correctly and completes the sentence meaningfully. Select the option 'no correction required' if the sentence is correct as given.

After Gatsby's death the East was haunted for me like that, (distorted after my) eyes' power of correction.

- Ans

 1. distorted besides my

 2. No correction required

 3. distorted beyond my

 4. distorted alongside my

Question ID : 630680385393

Option 1 ID : 6306801502403

Option 2 ID : 6306801502405

Option 3 ID : 6306801502402

Option 4 ID : 6306801502404

Status : Answered

Chosen Option : 3

Comprehension:

In the following passage some words have been deleted. Fill in the blanks with the help of the alternatives given. Select the most appropriate option for each number.

There seemed to be no use in waiting (1) \_\_\_\_\_ the little door, so she went back to the table, half (2) \_\_\_\_\_ she might find another key on it, (3) \_\_\_\_\_ at any rate a book of rules for shutting people up like telescopes.

SubQuestion No : 23

Q.23 Select the most appropriate option to fill in the blank No. 1.

- Ans
- ☒ 1. on
  - ☒ 2. in
  - ☒ 3. front of
  - ☒ 4. by

Question ID : 630680385369  
Option 1 ID : 6306801502319  
Option 2 ID : 6306801502320  
Option 3 ID : 6306801502318  
Option 4 ID : 6306801502321  
Status : Answered  
Chosen Option : 3

Comprehension:

In the following passage some words have been deleted. Fill in the blanks with the help of the alternatives given. Select the most appropriate option for each number.

There seemed to be no use in waiting (1) \_\_\_\_\_ the little door, so she went back to the table, half (2) \_\_\_\_\_ she might find another key on it, (3) \_\_\_\_\_ at any rate a book of rules for shutting people up like telescopes.

SubQuestion No : 24

Q.24 Select the most appropriate option to fill in the blank No. 2.

- Ans
- ☒ 1. thinking
  - ☒ 2. hopping
  - ☒ 3. hoping
  - ☒ 4. concerned

Question ID : 630680385370  
Option 1 ID : 6306801502325  
Option 2 ID : 6306801502322  
Option 3 ID : 6306801502324  
Option 4 ID : 6306801502323  
Status : Answered  
Chosen Option : 3

### Comprehension:


In the following passage some words have been deleted. Fill in the blanks with the help of the alternatives given. Select the most appropriate option for each number.

There seemed to be no use in waiting (1) \_\_\_\_\_ the little door, so she went back to the table, half (2) \_\_\_\_\_ she might find another key on it, (3) \_\_\_\_\_ at any rate a book of rules for shutting people up like telescopes.

### SubQuestion No : 25

Q.25 Select the most appropriate option to fill in the blank No. 3.

Ans  1. or

 2. either

 3. neither

 4. nor

Question ID : 630680385371

Option 1 ID : 6306801502326

Option 2 ID : 6306801502329

Option 3 ID : 6306801502327

Option 4 ID : 6306801502328

Status : Answered

Chosen Option : 1

