
	<b>DELHI DEVELOPMENT AUTHORITY</b> <b>RECRUITMENT CELL</b> <b>VIKAS SADAN, INA, NEW DELHI - 110023</b> <a href="https://www.dda.gov.in">https://www.dda.gov.in</a>
	Advertisement No. 02/2023/Recrtt. Cell/Pers./DDA
Test Date	25/09/2023
Test Time	5:30 PM - 6:30 PM
Subject	Assistant Section Officer (ASO)

Section : General Intelligence and Reasoning

**Q.1** A series is given with one term missing (?). Select the correct alternative from the given ones that will complete the series.  
3C, 6D, 11F, 11S, ?

- Ans**
- ☒ 1. K26
  - ☒ 2. M27
  - ☒ 3. M25
  - ☒ 4. L27

Question ID : 630680386209  
 Option 1 ID : 6306801505548  
 Option 2 ID : 6306801505549  
 Option 3 ID : 6306801505546  
 Option 4 ID : 6306801505547  
 Status : Answered  
 Chosen Option : 2

**Q.2** Read the following information carefully and answer the given question.

L + M means L is the daughter of M  
 L - M means L is the husband of M  
 L × M means L is the brother of M  
 If A + B - C, which of the following is true ?

- Ans**
- ☒ 1. C is the sister-in-law of A
  - ☒ 2. C is the mother-in-law of A
  - ☒ 3. C is the mother's sister of A
  - ☒ 4. C is the mother of A

Question ID : 630680384569  
 Option 1 ID : 6306801499162  
 Option 2 ID : 6306801499165  
 Option 3 ID : 6306801499164  
 Option 4 ID : 6306801499163  
 Status : Answered  
 Chosen Option : 4

# Test Prime

**ALL EXAMS,  
ONE SUBSCRIPTION**



**70,000+**  
Mock Tests



**Personalised  
Report Card**



**Unlimited  
Re-Attempt**



**600+**  
Exam Covered



**Previous Year  
Papers**



**500%  
Refund**



**ATTEMPT FREE MOCK NOW**

**Q.3** How many E's are there in the following series which are immediately followed by A but not immediately preceded by B?

B E C A B E A N B G E A A E H B V E A Z E A

- Ans
- ☒ 1. 1
  - ☒ 2. 4
  - ☒ 3. 3
  - ☒ 4. 2

Question ID : 630680384560

Option 1 ID : 6306801499126

Option 2 ID : 6306801499129

Option 3 ID : 6306801499128

Option 4 ID : 6306801499127

Status : Answered

Chosen Option : 3

**Q.4** In a certain code language, if MANAGE is coded as 35, TIME is coded as 43, then what will MANIFEST be coded as?

- Ans
- ☒ 1. 82
  - ☒ 2. 73
  - ☒ 3. 87
  - ☒ 4. 79

Question ID : 630680384482

Option 1 ID : 6306801498817

Option 2 ID : 6306801498816

Option 3 ID : 6306801498814

Option 4 ID : 6306801498815

Status : Answered

Chosen Option : 4

**Q.5** If '\*' stands for 'addition', '<' for 'subtraction', '+' stands for 'division', '>' for 'multiplication', '=' stands for 'equal to', and '=' stands for 'less than', then solve the following expression:

$8 > 8 + 8 \times 8 < 8$

- Ans
- ☒ 1. 10
  - ☒ 2. 0
  - ☒ 3. 8
  - ☒ 4. 16

Question ID : 630680384563

Option 1 ID : 6306801499141

Option 2 ID : 6306801499139

Option 3 ID : 6306801499138

Option 4 ID : 6306801499140

Status : Answered

Chosen Option : 3

**Q.6** If the position of second and the third digits within each number are interchanged, what will be the sum of the first and third digit of the third highest number?

1234 1987 1680 1888 1281

- Ans**
- ☐ 1. 17
- ☐ 2. 6
- ☒ 3. 7
- ☐ 4. 14

Question ID : 630680384752

Option 1 ID : 6306801499895

Option 2 ID : 6306801499897

Option 3 ID : 6306801499896

Option 4 ID : 6306801499894

Status : Answered

Chosen Option : 3

**Q.7** In the following question three statements are given, followed by two conclusions numbered I and II. Assume three given statements to be true even if they seem to be at variance with commonly known facts and then decide which of the given conclusion logically follows from the two statements disregarding commonly known facts.

Statements:

I. All watches are time.

II. Some time are minutes.

III. All minutes are hours.

Conclusions:

I. Some hours are time.

II. Some minutes are watches.

- Ans**
- ☐ 1. Only conclusion II follows
- ☐ 2. Both conclusions I and II follow
- ☒ 3. Only conclusion I follows
- ☐ 4. Neither conclusion I nor II follows

Question ID : 630680386217

Option 1 ID : 6306801505579

Option 2 ID : 6306801505580

Option 3 ID : 6306801505578

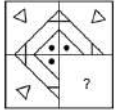
Option 4 ID : 6306801505581

Status : Answered

Chosen Option : 3

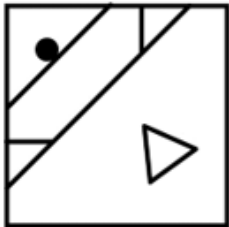
Q.8 Following question has four alternatives, among which one completes the figures. Select the answer figure from the given options.

Question Figure:

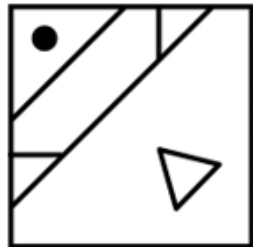


Ans

✗ 1.



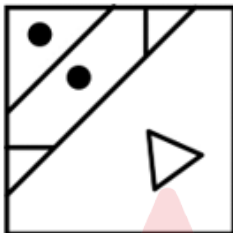
✓ 2.



✗ 3.



✗ 4.



Question ID : 630680384639

Option 1 ID : 6306801499442

Option 2 ID : 6306801499445

Option 3 ID : 6306801499444

Option 4 ID : 6306801499443

Status : Answered

Chosen Option : 2

Q.9 There is some relationship between the two terms (letter clusters) on the left of the sign (:). The same relationship exists between the two terms on the right of the sign (: ) of which one is missing. Find the missing one from the four alternatives.

XRT : DJH :: MOP : ?

Ans ✓ 1. OML

✗ 2. MKJ

✗ 3. LMO

✗ 4. NLK

Question ID : 630680386201

Option 1 ID : 6306801505514

Option 2 ID : 6306801505516

Option 3 ID : 6306801505517

Option 4 ID : 6306801505515

Status : Answered

**Q.10** Three Statements are given followed by two conclusions numbered I and II. Assuming the statements to be true, even if they seem to be at variance with commonly known facts, decide which of the conclusions logically follow(s) from the statements.  
Statement:  
Statement I: Some oils are syrups.  
Statement II: All syrups are powders.  
Statement III: No powder is a tablet.  
Conclusion  
Conclusion I: Some oils are powders.  
Conclusion II: Some tablets are oils.

- Ans**
- ☒ 1. Neither conclusion I nor II follows
  - ☒ 2. Both conclusions I and II follow
  - ☒ 3. Only conclusion I follows
  - ☒ 4. Only conclusion II follows

Question ID : 630680384730  
Option 1 ID : 6306801499809  
Option 2 ID : 6306801499808  
Option 3 ID : 6306801499806  
Option 4 ID : 6306801499807  
Status : Answered  
Chosen Option : 3

**Q.11** In the given question certain pairs of words are given, out of which the words in all pairs except one bear a certain common relationship. Identify the pair in which the words are differently related than other three pairs.

- Ans**
- ☒ 1. Teacher, Student, Book
  - ☒ 2. Apple, Banana, Orange
  - ☒ 3. Sun, Moon, Star
  - ☒ 4. Car, Bicycle, Train

Question ID : 630680386197  
Option 1 ID : 6306801505500  
Option 2 ID : 6306801505501  
Option 3 ID : 6306801505498  
Option 4 ID : 6306801505499  
Status : Answered  
Chosen Option : 3

**Q.12** A statement is given followed by two conclusions numbered I and II. Consider the statement to be true and answer which one of the conclusions logically follows from the statements.  
Statement:  
When it rains, usually Sonal does not go out. Sonal has gone out.  
Conclusions:  
I. Sonal has some urgent business to attend.  
II. It is not raining.

- Ans**
- ☒ 1. if only conclusion II follows
  - ☒ 2. if both I and II follow
  - ☒ 3. if neither I nor II follows
  - ☒ 4. if only conclusion I follows

Question ID : 630680386183  
Option 1 ID : 6306801505443  
Option 2 ID : 6306801505444  
Option 3 ID : 6306801505445  
Option 4 ID : 6306801505442  
Status : Not Answered  
Chosen Option : --

**Q.13** How many pairs of letters in the word "BANDWIDTH" have the same number of letters between them as in the English alphabet (both forward and backward)?

- Ans**
- ☒ 1. 1
  - ☒ 2. 3
  - ☒ 3. 0
  - ☒ 4. 2

Question ID : 630680384755  
 Option 1 ID : 6306801499908  
 Option 2 ID : 6306801499906  
 Option 3 ID : 6306801499909  
 Option 4 ID : 6306801499907  
 Status : Answered  
 Chosen Option : 2

**Q.14** In a certain code language, if PLANT is coded as QMZOU, TRAIN is coded as USZHO, then what will HANGER be coded as?

- Ans**
- ☒ 1. IZOFES
  - ☒ 2. IZOHDS
  - ☒ 3. IZOFDS
  - ☒ 4. IBOFDS

Question ID : 630680384476  
 Option 1 ID : 6306801498792  
 Option 2 ID : 6306801498790  
 Option 3 ID : 6306801498791  
 Option 4 ID : 6306801498793  
 Status : Answered  
 Chosen Option : 2

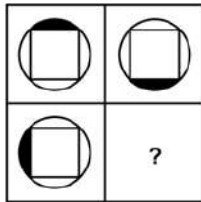
**Q.15** If 'C + B' means C is brother of B; 'C - B' means C is sister of B; 'C × B' means C is wife of B and 'C ÷ B' means C is father of B then which of the following option indicates 'A is son of B'?

- Ans**
- ☒ 1.  $B \times Q \div A - R + T$
  - ☒ 2.  $B \times Q \div R - A + T$
  - ☒ 3.  $B \times Q \div A - T + R$
  - ☒ 4.  $B \times Q \div R + A - T$

Question ID : 630680386173  
 Option 1 ID : 6306801505403  
 Option 2 ID : 6306801505404  
 Option 3 ID : 6306801505402  
 Option 4 ID : 6306801505405  
 Status : Answered  
 Chosen Option : 2

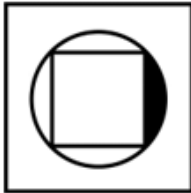


Q.16 Select the alternative from the given options that correctly completes the figures in the question.



Ans

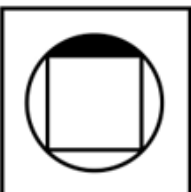
✓ 1.



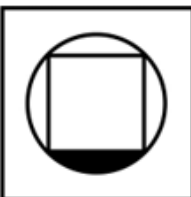
✗ 2.



✗ 3.



✗ 4.



Question ID : 630680384839

Option 1 ID : 6306801500243

Option 2 ID : 6306801500244

Option 3 ID : 6306801500242

Option 4 ID : 6306801500245

Status : Answered

Chosen Option : 1

Q.17 There are 50 boxes kept one above the other. What will be the position of the box from the bottom whose position from the top is 23?

Ans ✗ 1. 27

✗ 2. 25

✗ 3. 26

✓ 4. 28

Question ID : 630680384514

Option 1 ID : 6306801498944

Option 2 ID : 6306801498942

Option 3 ID : 6306801498943

Option 4 ID : 6306801498945

Status : Answered

Chosen Option : 4



Q.18 Find the missing element in the given set to make them equal.

A = {Letters of the word BLUEBIRD}

B = {BD, LR, UI, ?}

- Ans
- ☒ 1. UB
  - ☒ 2. EB
  - ☒ 3. LE
  - ☒ 4. BE

Question ID : 630680386189  
Option 1 ID : 6306801505468  
Option 2 ID : 6306801505469  
Option 3 ID : 6306801505466  
Option 4 ID : 6306801505467  
Status : Answered  
Chosen Option : 2

Q.19 In the following question, a number series is given with one term missing. Choose the correct alternative that will continue the same pattern and fill in the blank spaces.  
4, 9, 25, 49, 121, \_\_\_\_

- Ans
- ☒ 1. 81
  - ☒ 2. 169
  - ☒ 3. 100
  - ☒ 4. 196

Question ID : 630680384760  
Option 1 ID : 6306801499929  
Option 2 ID : 6306801499928  
Option 3 ID : 6306801499926  
Option 4 ID : 6306801499927  
Status : Answered  
Chosen Option : 2

Q.20 Select the option that is related to the third number-letter cluster in the same way as the second number-letter cluster is related to the first number-letter cluster.  
NICK : I37 :: LEFT : ?

- Ans
- ☒ 1. F23
  - ☒ 2. L43
  - ☒ 3. E43
  - ☒ 4. T20

Question ID : 630680384488  
Option 1 ID : 6306801498840  
Option 2 ID : 6306801498841  
Option 3 ID : 6306801498839  
Option 4 ID : 6306801498838  
Status : Answered  
Chosen Option : 3

Q.21 Find the missing term in the given series.

2U1, 2V2, ?, 2X4, 2Y5

Ans ☒ 1. 2W3

☐ 2. 3W2

☐ 3. 2W6

☐ 4. 6W2

Question ID : 630680384624

Option 1 ID : 6306801499384

Option 2 ID : 6306801499382

Option 3 ID : 6306801499385

Option 4 ID : 6306801499383

Status : Answered

Chosen Option : 1

Q.22 In the following question, a number series is given with one term missing. Choose the correct alternative that will continue the same pattern and fill in the blank spaces.

2, 5, 12, 27, 58, 121, \_\_\_\_

Ans ☐ 1. 196

☒ 2. 248

☐ 3. 242

☐ 4. 156

Question ID : 630680386194

Option 1 ID : 6306801505488

Option 2 ID : 6306801505487

Option 3 ID : 6306801505489

Option 4 ID : 6306801505486

Status : Answered

Chosen Option : 2

Q.23 Which of the following numbers will replace the question mark (?) in the given series?

432, 216, ?, 324, 972, 486

Ans ☒ 1. 648

☐ 2. 226

☐ 3. 562

☐ 4. 484

Question ID : 630680384663

Option 1 ID : 6306801499539

Option 2 ID : 6306801499540

Option 3 ID : 6306801499538

Option 4 ID : 6306801499541

Status : Answered

Chosen Option : 1

**Q.24** M, N, O, P, Q and R are sitting in a circle facing the centre. M is third to the left of R and to the immediate right of O. N is second to the left of Q, who is not an immediate neighbour of P. Who is to the immediate right of N?

- Ans
- ☒ 1. Q
  - ☒ 2. R
  - ☒ 3. O
  - ☒ 4. P

Question ID : 630680386205

Option 1 ID : 6306801505530

Option 2 ID : 6306801505532

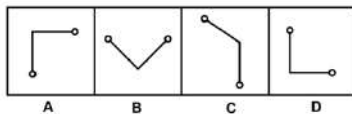
Option 3 ID : 6306801505533

Option 4 ID : 6306801505531

Status : Answered

Chosen Option : 2

**Q.25** Out of the four figures marked (A), (B), (C), and (D), three are similar in a certain manner and one figure is not like the other three. Identify the figure which is different from the rest.



- Ans
- ☒ 1. B
  - ☒ 2. A
  - ☒ 3. D
  - ☒ 4. C

Question ID : 630680384846

Option 1 ID : 6306801500271

Option 2 ID : 6306801500270

Option 3 ID : 6306801500273

Option 4 ID : 6306801500272

Status : Marked For Review

Chosen Option : 4

Section : General Awareness

**Q.1** As per United Nations Population Funds 2023 report, what is the population of India?

- Ans
- ☒ 1. 163 crore
  - ☒ 2. 142.86 crore
  - ☒ 3. 125 crore
  - ☒ 4. 154.26 crore

Question ID : 630680384112

Option 1 ID : 6306801497340

Option 2 ID : 6306801497338

Option 3 ID : 6306801497341

Option 4 ID : 6306801497339

Status : Not Answered

Chosen Option : --

Q.2 Which of the following is the second highest civilian award of India?

- Ans
- ☒ 1. Bharat Ratna
  - ☒ 2. Padma Shri
  - ☒ 3. Padma Bhushan
  - ☒ 4. Padma Vibhushan

Question ID : 630680384066  
 Option 1 ID : 6306801497155  
 Option 2 ID : 6306801497157  
 Option 3 ID : 6306801497156  
 Option 4 ID : 6306801497154  
 Status : Not Answered  
 Chosen Option : --

Q.3 Which among the following is a microfinance institution in India?

- Ans
- ☒ 1. State Bank Of India
  - ☒ 2. Election Commission Of India
  - ☒ 3. Union Public Service Commission
  - ☒ 4. Medical Council of India

Question ID : 630680384080  
 Option 1 ID : 6306801497210  
 Option 2 ID : 6306801497211  
 Option 3 ID : 6306801497213  
 Option 4 ID : 6306801497212  
 Status : Answered  
 Chosen Option : 1

Q.4 What is the rank awarded to India among 180 countries of the world in terms of corruption by the Corruption Perception Index, 2021?

- Ans
- ☒ 1. 85
  - ☒ 2. 80
  - ☒ 3. 90
  - ☒ 4. 95

Question ID : 630680384247  
 Option 1 ID : 6306801497876  
 Option 2 ID : 6306801497875  
 Option 3 ID : 6306801497874  
 Option 4 ID : 6306801497877  
 Status : Not Answered  
 Chosen Option : --

Q.5 What is the type of unemployment among the following in which people are willing to work at the existing wage rate but do not get a job?

- Ans
- ☒ 1. Involuntary unemployment
  - ☒ 2. Voluntary unemployment
  - ☒ 3. Frictional unemployment
  - ☒ 4. Disguised unemployment

Question ID : 630680384084  
 Option 1 ID : 6306801497227  
 Option 2 ID : 6306801497228  
 Option 3 ID : 6306801497226  
 Option 4 ID : 6306801497229  
 Status : Not Answered  
 Chosen Option : --

Q.6 Which country to Host Asian Games 2023 from Spet'23 to Oct'23?

- Ans ☒ 1. Indonesia  
☒ 2. India  
☒ 3. China  
☒ 4. Japan

Question ID : 630680384390  
 Option 1 ID : 6306801498446  
 Option 2 ID : 6306801498447  
 Option 3 ID : 6306801498449  
 Option 4 ID : 6306801498448  
 Status : Answered  
 Chosen Option : 3

Q.7 Which festival of India is celebrated with the flying of colorful kites, feasting, and family gatherings?

- Ans ☒ 1. Makar Sankranti  
☒ 2. Navratri  
☒ 3. Diwali  
☒ 4. Pongal

Question ID : 630680386427  
 Option 1 ID : 6306801506421  
 Option 2 ID : 6306801506419  
 Option 3 ID : 6306801506418  
 Option 4 ID : 6306801506420  
 Status : Answered  
 Chosen Option : 1

Q.8 Who was the ruler of the Delhi Sultanate known for his market reforms, irrigation systems, and construction of the Hauz Khas complex in Delhi?

- Ans ☒ 1. Balban  
☒ 2. Alauddin Khilji  
☒ 3. Muhammad bin Tughlaq  
☒ 4. Firoz Shah Tughlaq

Question ID : 630680384437  
 Option 1 ID : 6306801498634  
 Option 2 ID : 6306801498635  
 Option 3 ID : 6306801498636  
 Option 4 ID : 6306801498637  
 Status : Not Answered  
 Chosen Option : --

Q.9 Which city in India experiences the highest average annual rainfall?

- Ans ☒ 1. Cochin  
☒ 2. Mumbai  
☒ 3. Kolkata  
☒ 4. Mawsynram

Question ID : 630680384424  
 Option 1 ID : 6306801498584  
 Option 2 ID : 6306801498582  
 Option 3 ID : 6306801498583  
 Option 4 ID : 6306801498585  
 Status : Answered  
 Chosen Option : 4

Q.10 Which event marked the official beginning of the Indian independence movement?

- Ans ☒ 1. Quit India Movement  
☒ 2. Sepoy Mutiny of 1857  
☒ 3. Non-Cooperation Movement  
☒ 4. Swadeshi Movement

Question ID : 630680384439  
 Option 1 ID : 6306801498645  
 Option 2 ID : 6306801498642  
 Option 3 ID : 6306801498643  
 Option 4 ID : 6306801498644  
 Status : Answered  
 Chosen Option : 2

Q.11 Which country is famous for the traditional dance form called "Bharatanatyam"?

- Ans ☒ 1. China  
☒ 2. India  
☒ 3. Brazil  
☒ 4. Egypt

Question ID : 630680384393  
 Option 1 ID : 6306801498458  
 Option 2 ID : 6306801498459  
 Option 3 ID : 6306801498460  
 Option 4 ID : 6306801498461  
 Status : Answered  
 Chosen Option : 2

Q.12 Which of the following states in India has launched the first AI News Presenter?

- Ans ☒ 1. Gujrat  
☒ 2. Odisha  
☒ 3. Rajasthan  
☒ 4. Kerala

Question ID : 630680384241  
 Option 1 ID : 6306801497850  
 Option 2 ID : 6306801497852  
 Option 3 ID : 6306801497853  
 Option 4 ID : 6306801497851  
 Status : Answered  
 Chosen Option : 4

Q.13 Which country has consistently ranked in top 3 on the Human Development Index (HDI) from 2018 to 2021?

- Ans ☒ 1. Norway  
☒ 2. Switzerland  
☒ 3. Singapore  
☒ 4. Sweden

Question ID : 630680384419  
 Option 1 ID : 6306801498562  
 Option 2 ID : 6306801498563  
 Option 3 ID : 6306801498564  
 Option 4 ID : 6306801498565  
 Status : Answered  
 Chosen Option : 1

Q.14 How many official languages are there in India?

- Ans
- ☒ 1. 26
  - ☒ 2. 25
  - ☒ 3. 22
  - ☒ 4. 34

Question ID : 630680384077  
 Option 1 ID : 6306801497201  
 Option 2 ID : 6306801497198  
 Option 3 ID : 6306801497200  
 Option 4 ID : 6306801497199  
 Status : Answered  
 Chosen Option : 3

Q.15 "Lai Haraoba" is a traditional festival celebrated in which northeastern Indian state, particularly by the Meitei community?

- Ans
- ☒ 1. Mizoram
  - ☒ 2. Sikkim
  - ☒ 3. Tripura
  - ☒ 4. Manipur

Question ID : 630680384168  
 Option 1 ID : 6306801497562  
 Option 2 ID : 6306801497564  
 Option 3 ID : 6306801497563  
 Option 4 ID : 6306801497565  
 Status : Answered  
 Chosen Option : 4

Q.16 When was National Digital Health Mission was announced?

- Ans
- ☒ 1. 75th Independence Day
  - ☒ 2. 70th Independence Day
  - ☒ 3. 74th Independence Day
  - ☒ 4. 73rd Independence Day

Question ID : 630680384382  
 Option 1 ID : 6306801498415  
 Option 2 ID : 6306801498416  
 Option 3 ID : 6306801498414  
 Option 4 ID : 6306801498417  
 Status : Not Answered  
 Chosen Option : --

Q.17 "Rani Lakshmibai of Jhansi," a brave warrior and key figure of the Indian Rebellion of 1857, is often remembered for her courage in leading the resistance against the British. In which city did she fight her last battle?

- Ans
- ☒ 1. Gwalior
  - ☒ 2. Jhansi
  - ☒ 3. Bundelkhand
  - ☒ 4. Allahabad

Question ID : 630680384229  
 Option 1 ID : 6306801497809  
 Option 2 ID : 6306801497808  
 Option 3 ID : 6306801497806  
 Option 4 ID : 6306801497807  
 Status : Answered



Q.18 Which is the highest peak in the Western Ghats mountain range?

- Ans ☒ 1. Mount Everest  
☒ 2. Kanchenjunga  
☒ 3. Anamudi  
☒ 4. Nanda Devi

Question ID : 630680384421  
Option 1 ID : 6306801498573  
Option 2 ID : 6306801498571  
Option 3 ID : 6306801498570  
Option 4 ID : 6306801498572  
Status : Answered  
Chosen Option : 3

Q.19 Where was the headquarters of Arya Samaj shifted to in 1877?

- Ans ☒ 1. Bombay  
☒ 2. Delhi  
☒ 3. Lahore  
☒ 4. Kolkata

Question ID : 630680384232  
Option 1 ID : 6306801497818  
Option 2 ID : 6306801497820  
Option 3 ID : 6306801497819  
Option 4 ID : 6306801497821  
Status : Answered  
Chosen Option : 1

Q.20 The first modern census in India was conducted in which year?

- Ans ☒ 1. 1981  
☒ 2. 1881  
☒ 3. 1991  
☒ 4. 1891

Question ID : 630680384207  
Option 1 ID : 6306801497720  
Option 2 ID : 6306801497718  
Option 3 ID : 6306801497721  
Option 4 ID : 6306801497719  
Status : Answered  
Chosen Option : 2

Q.21 Which of the following is a fellowship program launched by the Government of India to foster collaboration and knowledge-sharing between the Indian diaspora scientists and academic institutions?

- Ans ☒ 1. Science For Equity Empowerment and Development (SEED)  
☒ 2. State Science & Technology Programme  
☒ 3. Scheme for Young Scientists and Technologists (SYST)  
☒ 4. VAIBHAV (Vaishvik Bhartiya Vaigyanik)

Question ID : 630680384040  
Option 1 ID : 6306801497052  
Option 2 ID : 6306801497051  
Option 3 ID : 6306801497053  
Option 4 ID : 6306801497050  
Status : Not Answered  
Chosen Option : --

Q.22 Which of the following is a consequence of Global Warming?

- Ans
- ☒ 1. Afforestation
  - ☒ 2. Deforestation
  - ☒ 3. Rise in sea level
  - ☒ 4. Landslide

Question ID : 630680384291  
 Option 1 ID : 6306801498053  
 Option 2 ID : 6306801498051  
 Option 3 ID : 6306801498050  
 Option 4 ID : 6306801498052  
 Status : Answered  
 Chosen Option : 3

Q.23 Which famous kingdom emerged in South India during the 9th century AD, known for its architectural marvels such as the Brihadeeswarar Temple?

- Ans
- ☒ 1. Chola Empire
  - ☒ 2. Vijayanagara Empire
  - ☒ 3. Pallava Dynasty
  - ☒ 4. Rashtrakuta Empire

Question ID : 630680384433  
 Option 1 ID : 6306801498618  
 Option 2 ID : 6306801498619  
 Option 3 ID : 6306801498620  
 Option 4 ID : 6306801498621  
 Status : Answered  
 Chosen Option : 1

Q.24 The "Look East Policy" of India aims to strengthen economic and diplomatic relations with countries in which region?

- Ans
- ☒ 1. Japan
  - ☒ 2. Australia
  - ☒ 3. Southeast Asia
  - ☒ 4. Middle East

Question ID : 630680384191  
 Option 1 ID : 6306801497654  
 Option 2 ID : 6306801497655  
 Option 3 ID : 6306801497657  
 Option 4 ID : 6306801497656  
 Status : Answered  
 Chosen Option : 3

Q.25 Who among the following won the Major Dhyan Chand Khel Ratna Award in the National Sports Awards, 2022 for Table Tennis?

- Ans
- ☒ 1. Amit Panghal
  - ☒ 2. Sharath Kamal
  - ☒ 3. HS Prannoy
  - ☒ 4. Lakshya Sen

Question ID : 630680384255  
 Option 1 ID : 6306801497906  
 Option 2 ID : 6306801497907  
 Option 3 ID : 6306801497909  
 Option 4 ID : 6306801497908  
 Status : Answered

Section : Quantitative Aptitude

Q.1 What should be the least value of 'p' so that the number 254p96 is divisible by 9?

- Ans
- ☒ 1. 2
  - ☒ 2. 1
  - ☒ 3. 4
  - ☒ 4. 3

Question ID : 630680384894

Option 1 ID : 6306801500463

Option 2 ID : 6306801500464

Option 3 ID : 6306801500465

Option 4 ID : 6306801500462

Status : Answered

Chosen Option : 2

Q.2 If  $u^2 + \left(\frac{1}{u^2}\right) = \frac{31}{9}$  and  $u > 0$ , then what is the value of  $u^3 + \left(\frac{1}{u^3}\right)$  ?

- Ans
- ☒ 1.  $\frac{164}{121}$
  - ☒ 2.  $\frac{154}{27}$
  - ☒ 3.  $\frac{18}{53}$
  - ☒ 4.  $\frac{68}{42}$

Question ID : 630680384999

Option 1 ID : 6306801500885

Option 2 ID : 6306801500884

Option 3 ID : 6306801500883

Option 4 ID : 6306801500882

Status : Answered

Chosen Option : 2

Q.3 By selling an article for ₹ 7560 more, Kiran would have made 6% profit on her sale instead of a 15% loss. What was her cost price?

- Ans
- ☒ 1. ₹ 42,000
  - ☒ 2. ₹ 33,000
  - ☒ 3. ₹ 45,000
  - ☒ 4. ₹ 36,000

Question ID : 630680384927

Option 1 ID : 6306801500595

Option 2 ID : 6306801500594

Option 3 ID : 6306801500596

Option 4 ID : 6306801500597

Status : Answered

Chosen Option : 4

Q.4 Raman spends 27% of his salary on rent, 21% on food, 9% on entertainment and 13% on transport. If his saving is ₹ 3600. Find his monthly salary.

- Ans ☒ 1. ₹ 12,000  
☒ 2. ₹ 25,000  
☒ 3. ₹ 90,000  
☒ 4. ₹ 1,44,000

Question ID : 630680384907  
Option 1 ID : 6306801500514  
Option 2 ID : 6306801500516  
Option 3 ID : 6306801500517  
Option 4 ID : 6306801500515  
Status : Answered  
Chosen Option : 1

Q.5  $a:b = 9 : 13$  and  $b:c = 1 : 4$ . If  $a = 45$ , then find the value of  $c$ .

- Ans ☒ 1. 120  
☒ 2. 220  
☒ 3. 210  
☒ 4. 260

Question ID : 630680384930  
Option 1 ID : 6306801500606  
Option 2 ID : 6306801500609  
Option 3 ID : 6306801500608  
Option 4 ID : 6306801500607  
Status : Answered  
Chosen Option : 4

Q.6 Find the volume of a sphere whose radius is 6.3 cm.

- Ans ☒ 1. 11554.5 cm<sup>3</sup>  
☒ 2. 1047.8 cm<sup>3</sup>  
☒ 3. 2334.5 cm<sup>3</sup>  
☒ 4. 1266.7 cm<sup>3</sup>

Question ID : 630680384878  
Option 1 ID : 6306801500401  
Option 2 ID : 6306801500398  
Option 3 ID : 6306801500400  
Option 4 ID : 6306801500399  
Status : Answered  
Chosen Option : 2

**Q.7** The sum of length, breadth and height of a cuboid is 35 cm and its diagonal is  $\sqrt{459}$  cm. Find the surface area of the cuboid.

- Ans**
- ☒ 1. 804 cm<sup>2</sup>
  - ☒ 2. 888 cm<sup>2</sup>
  - ☒ 3. 766 cm<sup>2</sup>
  - ☒ 4. 756 cm<sup>2</sup>

Question ID : 630680384888

Option 1 ID : 6306801500439

Option 2 ID : 6306801500440

Option 3 ID : 6306801500438

Option 4 ID : 6306801500441

Status : Answered

Chosen Option : 3

**Q.8** Pipe A can fill an empty tank in 33 hours and pipe B in 36 hours. If both the pipes are opened together, find the part of the tank filled in 12 hours.

- Ans**
- ☒ 1.  $\frac{29}{396}$
  - ☒ 2.  $\frac{19}{33}$
  - ☒ 3.  $\frac{23}{33}$
  - ☒ 4.  $\frac{25}{396}$

Question ID : 630680384943

Option 1 ID : 6306801500660

Option 2 ID : 6306801500661

Option 3 ID : 6306801500659

Option 4 ID : 6306801500658

Status : Answered

Chosen Option : 3

**Q.9** If Ashish takes 7 hours to complete a work and Bipin takes 11 hours to complete the same work, then find the time taken to complete the work if they work together.

- Ans**
- ☒ 1.  $\frac{7}{11}$  hours
  - ☒ 2.  $\frac{18}{77}$  hours
  - ☒ 3.  $\frac{77}{18}$  hours
  - ☒ 4.  $\frac{18}{11}$  hours

Question ID : 630680384938

Option 1 ID : 6306801500641

Option 2 ID : 6306801500638

Option 3 ID : 6306801500640

Option 4 ID : 6306801500639

Status : Answered

Chosen Option : 3

Q.10 Find the value of each exterior angle of a regular nonagon.

- Ans
- ☒ 1.  $80^\circ$
  - ☒ 2.  $360^\circ$
  - ☒ 3.  $120^\circ$
  - ☒ 4.  $40^\circ$

Question ID : 630680385180  
Option 1 ID : 6306801501606  
Option 2 ID : 6306801501609  
Option 3 ID : 6306801501607  
Option 4 ID : 6306801501608  
Status : Answered  
Chosen Option : 4

Q.11 The angle formed between a line drawn from the centre of a circle to bisect a chord, and the chord is equal to

- Ans
- ☒ 1.  $180^\circ$
  - ☒ 2.  $90^\circ$
  - ☒ 3.  $0^\circ$
  - ☒ 4.  $45^\circ$

Question ID : 630680385173  
Option 1 ID : 6306801501579  
Option 2 ID : 6306801501580  
Option 3 ID : 6306801501578  
Option 4 ID : 6306801501581  
Status : Answered  
Chosen Option : 2

Q.12 Out of eleven men, 10 men spent ₹ 50 each for their meals. The eleventh one spent ₹ 25 more than the average expenditure of all the nine. The total money spent by all of them was \_\_\_\_\_.

- Ans
- ☒ 1. ₹550.5
  - ☒ 2. ₹565
  - ☒ 3. ₹577.5
  - ☒ 4. ₹500

Question ID : 630680384963  
Option 1 ID : 6306801500739  
Option 2 ID : 6306801500740  
Option 3 ID : 6306801500741  
Option 4 ID : 6306801500738  
Status : Not Answered  
Chosen Option : --

**Q.13** The price of an item was increased by 14%. This reduced the monthly total sales by 25%. Find the overall changed percentage.

- Ans
- ☒ 1. 14.5% increase
  - ☒ 2. 12.5% decrease
  - ☒ 3. 14.5% decrease
  - ☒ 4. 12.5% increase

Question ID : 630680384901

Option 1 ID : 6306801500491

Option 2 ID : 6306801500492

Option 3 ID : 6306801500493

Option 4 ID : 6306801500490

Status : Answered

Chosen Option : 3

**Q.14** Find the value of  $\sin(64^\circ + \theta) - \cos(26^\circ - \theta)$

- Ans
- ☒ 1. 2
  - ☒ 2. 1
  - ☒ 3. -1
  - ☒ 4. 0

Question ID : 630680385861

Option 1 ID : 6306801504165

Option 2 ID : 6306801504163

Option 3 ID : 6306801504164

Option 4 ID : 6306801504162

Status : Answered

Chosen Option : 4

**Q.15** If  $p + q = 9$  and  $p^2 + q^2 = 30$ , find the value of  $\left(\frac{1}{p}\right) + \left(\frac{1}{q}\right)$ .

- Ans
- ☒ 1.  $\frac{1}{9}$
  - ☒ 2.  $\frac{11}{7}$
  - ☒ 3.  $\frac{6}{17}$
  - ☒ 4.  $\frac{18}{5}$

Question ID : 630680384956

Option 1 ID : 6306801500710

Option 2 ID : 6306801500713

Option 3 ID : 6306801500712

Option 4 ID : 6306801500711

Status : Answered

Chosen Option : 3



Q.16 What is the quantity of cloth required to roll up to form a right circular tent whose base is of radius 15 m and height 20 m? (Take  $\pi = \frac{22}{7}$ )

- Ans
- ✓ 1. 1178.6 m<sup>2</sup>
  - ✗ 2. 1523.8 m<sup>2</sup>
  - ✗ 3. 1237.42 m<sup>2</sup>
  - ✗ 4. 1047.5 m<sup>2</sup>

Question ID : 630680384982

Option 1 ID : 6306801500814

Option 2 ID : 6306801500816

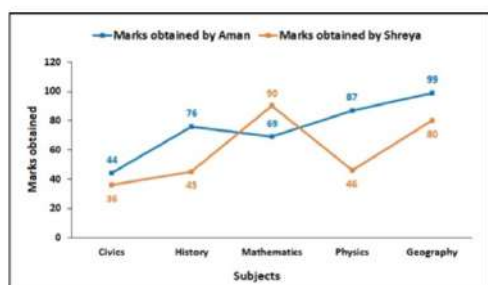
Option 3 ID : 6306801500817

Option 4 ID : 6306801500815

Status : Answered

Chosen Option : 1

Q.17 The line graph shows the marks of Aman and Shreya in 5 different subjects. Find the average number of marks obtained by Shreya.



- Ans
- ✓ 1. 59.4
  - ✗ 2. 44.9
  - ✗ 3. 50.4
  - ✗ 4. 55.6

Question ID : 630680384870

Option 1 ID : 6306801500369

Option 2 ID : 6306801500366

Option 3 ID : 6306801500367

Option 4 ID : 6306801500368

Status : Answered

Chosen Option : 1

Q.18 If the value of  $(a) + \frac{1}{a} = 21$ , then find the value of  $(a^2) + (\frac{1}{a^2})$ .

- Ans
- ✗ 1. 450
  - ✗ 2. 444
  - ✗ 3. 465
  - ✓ 4. 439

Question ID : 630680384849

Option 1 ID : 6306801500282

Option 2 ID : 6306801500283

Option 3 ID : 6306801500285

Option 4 ID : 6306801500284

Status : Answered

Chosen Option : 4

Q.19 If  $(a - b) = 10$  and  $(ab) = 551$ , then find the value of  $a^2 - b^2$ .

- Ans
- ☒ 1. 510
  - ☒ 2. 240
  - ☒ 3. 480
  - ☒ 4. 440

Question ID : 630680384851  
 Option 1 ID : 6306801500290  
 Option 2 ID : 6306801500293  
 Option 3 ID : 6306801500291  
 Option 4 ID : 6306801500292  
 Status : Marked For Review  
 Chosen Option : 3

Q.20 16 notebooks and 36 textbooks altogether were purchased for ₹ 1408. If the average price of a notebook was ₹ 16, what was the average price of a pen ?

- Ans
- ☒ 1. ₹32
  - ☒ 2. ₹36
  - ☒ 3. ₹30
  - ☒ 4. ₹28

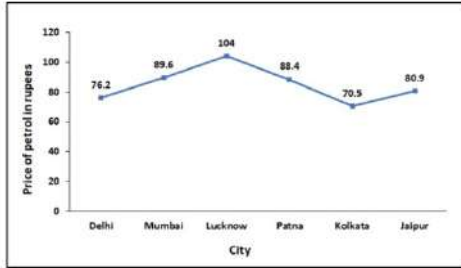
Question ID : 630680384964  
 Option 1 ID : 6306801500744  
 Option 2 ID : 6306801500745  
 Option 3 ID : 6306801500743  
 Option 4 ID : 6306801500742  
 Status : Answered  
 Chosen Option : 1

Q.21 A person distributes ₹ 8127 among A, B, and C. The ratio of the amount of A to that of B is 4 : 7 and the ratio of the amount of C to that of B is 3 : 2. What amount does C get?

- Ans
- ☒ 1. ₹ 4224
  - ☒ 2. ₹ 3644
  - ☒ 3. ₹ 3969
  - ☒ 4. ₹ 5300

Question ID : 630680384935  
 Option 1 ID : 6306801500628  
 Option 2 ID : 6306801500626  
 Option 3 ID : 6306801500627  
 Option 4 ID : 6306801500629  
 Status : Answered  
 Chosen Option : 3

**Q.22** The line graph shows the price of petrol in six different cities. The price of petrol in Patna is how much percentage of price of petrol in Lucknow?



- Ans**
- ☒ 1. 66%
  - ☒ 2. 85%
  - ☒ 3. 92%
  - ☒ 4. 87%

Question ID : 630680384874

Option 1 ID : 6306801500382

Option 2 ID : 6306801500384

Option 3 ID : 6306801500385

Option 4 ID : 6306801500383

Status : Answered

Chosen Option : 2

**Q.23** Find the number of spherical balls of radius 10 cm which can be made by melting a larger spherical ball of radius 30 cm.

- Ans**
- ☒ 1. 81
  - ☒ 2. 9
  - ☒ 3. 27
  - ☒ 4. 64

Question ID : 630680385144

Option 1 ID : 6306801501462

Option 2 ID : 6306801501463

Option 3 ID : 6306801501464

Option 4 ID : 6306801501465

Status : Answered

Chosen Option : 3

**Q.24** 22 books were sold for ₹4800 thereby gaining a cost price of 10 books. Find the cost price of a book.

- Ans**
- ☒ 1. ₹420
  - ☒ 2. ₹150
  - ☒ 3. ₹100
  - ☒ 4. ₹120

Question ID : 630680384922

Option 1 ID : 6306801500574

Option 2 ID : 6306801500577

Option 3 ID : 6306801500576

Option 4 ID : 6306801500575

Status : Not Answered

Chosen Option : --

**Q.25** Find the number of pairs of alternate interior angles formed when two parallel lines are intersected by a transversal.

- Ans ☒ 1. 3  
☒ 2. 2  
☒ 3. 4  
☒ 4. 1

Question ID : 630680384912  
 Option 1 ID : 6306801500536  
 Option 2 ID : 6306801500535  
 Option 3 ID : 6306801500537  
 Option 4 ID : 6306801500534  
 Status : Answered  
 Chosen Option : 2

Section : English Comprehension

**Q.1** Fill in the blank with the most appropriate option.  
 He did not keep the key under the mat, or \_\_\_\_\_?

- Ans ☒ 1. can't he  
☒ 2. didn't he  
☒ 3. can he  
☒ 4. did he

Question ID : 630680385346  
 Option 1 ID : 6306801502237  
 Option 2 ID : 6306801502234  
 Option 3 ID : 6306801502235  
 Option 4 ID : 6306801502236  
 Status : Answered  
 Chosen Option : 4

**Q.2** Select the option that best represents the meaning of the idiom used in the given situation  
 Your colleague says, "Don't count your chickens before they hatch" when discussing a potential promotion. What does this expression imply?

- Ans ☒ 1. We should not make assumptions or predictions before the outcome is certain  
☒ 2. We should set realistic goals and expectations  
☒ 3. We should be cautious and avoid taking risks  
☒ 4. We should be patient and wait for the right opportunity

Question ID : 630680385295  
 Option 1 ID : 6306801502046  
 Option 2 ID : 6306801502048  
 Option 3 ID : 6306801502047  
 Option 4 ID : 6306801502049  
 Status : Answered  
 Chosen Option : 1

Q.3 Select the word segment that substitutes the bracketed segment correctly and completes the sentence meaningfully.  
 He spoke with [confidence and assert], convincing the jury of his innocence.

- Ans
 

✗ 1. confidently and assertively

✗ 2. confidence and assertive

✓ 3. confidence and assertiveness

✗ 4. no correction required

Question ID : 630680385294  
 Option 1 ID : 6306801502043  
 Option 2 ID : 6306801502042  
 Option 3 ID : 6306801502044  
 Option 4 ID : 6306801502045  
 Status : Answered  
 Chosen Option : 3

Comprehension:

Based on the following cloze passage answer the question given below:

Critical thinking is a valuable skill that allows individuals to analyse, evaluate, and make informed decisions. It involves (1) \_\_\_\_\_ evidence, considering multiple perspectives, and drawing logical conclusions.

To develop strong critical thinking skills, it is important to ask (2) \_\_\_\_\_ questions and challenge assumptions. This helps in exploring different angles and uncovering hidden biases. Additionally, being open to new ideas and (3) \_\_\_\_\_ enhances one's ability to think critically.

SubQuestion No : 4

Q.4 Fill in the blank (3) with the appropriate word from the options below:

- Ans
 

✓ 1. perspectives

✗ 2. biases

✗ 3. arguments

✗ 4. opinions

Question ID : 630680385270  
 Option 1 ID : 6306801501954  
 Option 2 ID : 6306801501955  
 Option 3 ID : 6306801501957  
 Option 4 ID : 6306801501956  
 Status : Answered  
 Chosen Option : 1

Comprehension:

Based on the following cloze passage answer the question given below:

Critical thinking is a valuable skill that allows individuals to analyse, evaluate, and make informed decisions. It involves (1) \_\_\_\_\_ evidence, considering multiple perspectives, and drawing logical conclusions.

To develop strong critical thinking skills, it is important to ask (2) \_\_\_\_\_ questions and challenge assumptions. This helps in exploring different angles and uncovering hidden biases. Additionally, being open to new ideas and (3) \_\_\_\_\_ enhances one's ability to think critically.

SubQuestion No : 5

Q.5 Fill in the blank (1) with the appropriate word from the options below:

- Ans

✗ 1. ignoring

✓ 2. examining

✗ 3. dismissing

✗ 4. overlooking

Question ID : 630680385268

Option 1 ID : 6306801501947

Option 2 ID : 6306801501946

Option 3 ID : 6306801501948

Option 4 ID : 6306801501949

Status : Answered

Chosen Option : 2

Comprehension:

Based on the following cloze passage answer the question given below:

Critical thinking is a valuable skill that allows individuals to analyse, evaluate, and make informed decisions. It involves (1) \_\_\_\_\_ evidence, considering multiple perspectives, and drawing logical conclusions.

To develop strong critical thinking skills, it is important to ask (2) \_\_\_\_\_ questions and challenge assumptions. This helps in exploring different angles and uncovering hidden biases. Additionally, being open to new ideas and (3) \_\_\_\_\_ enhances one's ability to think critically.

SubQuestion No : 6

Q.6 Fill in the blank (2) with the appropriate word from the options below:

- Ans

✗ 1. simple

✓ 2. probing

✗ 3. complex

✗ 4. superficial

Question ID : 630680385269

Option 1 ID : 6306801501952

Option 2 ID : 6306801501950

Option 3 ID : 6306801501953

Option 4 ID : 6306801501951

Status : Answered

Chosen Option : 3

Q.7 Select the most appropriate missing sentence to complete the paragraph meaningfully.  
That ain't all, nuther. The law backs that old Judge Thatcher up and helps him to keep me out of my property. Here's what the law does: The law takes a man worth six thousand dollars upwards, and jams him into an old trap of a cabin like this, and lets him go around in clothes that ain't fitting for a hog. \_\_\_\_\_.

- Ans
- ☒ 1. Either the well was very deep, or she fell very slowly.
  - ☒ 2. I got so full of it I didn't notice how long I was staying.
  - ☒ 3. They call that government!
  - ☒ 4. The effort of resolution necessary to the achievement of this purpose.

Question ID : 630680385351

Option 1 ID : 6306801502257

Option 2 ID : 6306801502254

Option 3 ID : 6306801502255

Option 4 ID : 6306801502256

Status : Not Answered

Chosen Option : --

Q.8 Arrange the following sentences in the correct order to form a coherent paragraph.

- A)The researcher carefully analysed the data, looking for patterns and correlations.
- B)The experiment yielded promising results, indicating a breakthrough in the field.
- C)The findings were published in a prestigious scientific journal, garnering attention from the scientific community.
- D)Colleagues praised the researcher's meticulous work and groundbreaking discovery.
- E)The implications of the research could potentially revolutionize the industry.

- Ans
- ☒ 1. ADBCE
  - ☒ 2. DABEC
  - ☒ 3. ABDCE
  - ☒ 4. ACEDB

Question ID : 630680385253

Option 1 ID : 6306801501901

Option 2 ID : 6306801501899

Option 3 ID : 6306801501898

Option 4 ID : 6306801501900

Status : Answered

Chosen Option : 3

Q.9 Select the word segment that substitutes the bracketed segment correctly and completes the sentence meaningfully.

She greeted her friends [warm and friendly], hugging each one tightly.

- Ans
- ☒ 1. with warmth and friendliness
  - ☒ 2. warmly and friendly
  - ☒ 3. no correction required
  - ☒ 4. warmth and friendly

Question ID : 630680385288

Option 1 ID : 6306801502019

Option 2 ID : 6306801502018

Option 3 ID : 6306801502021

Option 4 ID : 6306801502020

Status : Answered

Chosen Option : 2



Q.10 Select the most appropriate missing sentence to complete the paragraph meaningfully.  
Our cottage was a sort of rough camp, beautifully situated on the top of the mountain among oaks and pines. The small rooms were arranged on each side of a long open hall. Around the house was a wide piazza, where the mountain winds blew, sweet with all wood-scents. \_\_\_\_\_.

- Ans
- ☒ 1. They walked home in the evening.
  - ☒ 2. The sudden alarm pushed him on to take the next step.
  - ☒ 3. She is very clever and gentle and extremely pretty.
  - ☒ 4. We lived on the piazza most of the time-there we worked, ate and played.

Question ID : 630680385583  
Option 1 ID : 6306801503113  
Option 2 ID : 6306801503111  
Option 3 ID : 6306801503110  
Option 4 ID : 6306801503112  
Status : Answered  
Chosen Option : 4

Q.11 Identify the synonym for the word "exquisite" in the following sentence  
The chef prepared an exquisite meal with flavourful spices and delicate presentation.

- Ans
- ☒ 1. Delicious
  - ☒ 2. Tasty
  - ☒ 3. Bland
  - ☒ 4. Ordinary

Question ID : 630680385310  
Option 1 ID : 6306801502106  
Option 2 ID : 6306801502108  
Option 3 ID : 6306801502109  
Option 4 ID : 6306801502107  
Status : Marked For Review  
Chosen Option : 3

Q.12 Choose the option that best completes the following proverb:  
"Where there's smoke, \_\_\_\_\_."

- Ans
- ☒ 1. there's fire
  - ☒ 2. there's light
  - ☒ 3. there's confusion
  - ☒ 4. there's danger

Question ID : 630680385300  
Option 1 ID : 6306801502066  
Option 2 ID : 6306801502068  
Option 3 ID : 6306801502069  
Option 4 ID : 6306801502067  
Status : Answered  
Chosen Option : 1

**Q.13** Select the word from the options which is exactly opposite in meaning to the bracketed word given in the sentence below.  
Chicago police officer, was charming and (curt).

- Ans** ☒ 1. supportive  
☒ 2. tactful  
☒ 3. devoted  
☒ 4. blessed

Question ID : 630680385411  
Option 1 ID : 6306801502474  
Option 2 ID : 6306801502475  
Option 3 ID : 6306801502477  
Option 4 ID : 6306801502476  
Status : Answered  
Chosen Option : 2

**Q.14** Identify the one-word substitution in the following sentence:  
What is the term for "a person who travels to a foreign country for pleasure or cultural exchange"?

- Ans** ☒ 1. Tour guide  
☒ 2. Tourist  
☒ 3. Adventurer  
☒ 4. Traveller

Question ID : 630680385287  
Option 1 ID : 6306801502017  
Option 2 ID : 6306801502014  
Option 3 ID : 6306801502016  
Option 4 ID : 6306801502015  
Status : Answered  
Chosen Option : 4

### Comprehension:

Read the passage carefully and choose the best answer to each question out of the four alternatives

Social media's revolutionary impact on communication, connection, and information sharing has transformed our lives. Platforms like Facebook, Twitter, and Instagram enable instant global connectivity, breaking down barriers and fostering cross-cultural exchanges. It empowers activists to mobilize support and raise awareness for social and political causes. However, the widespread use of social media also presents challenges. Privacy and data security concerns arise due to the vast amounts of personal information shared. Misinformation spreads rapidly, influencing public opinion and contributing to a polarized information environment.

Furthermore, the addictive nature of social media raises mental health concerns, as constant connectivity and pressure to maintain an idealized online image can lead to anxiety.

Balancing the benefits with the drawbacks is crucial. Social media's impact on society requires thoughtful regulation and ongoing assessment. While it opens up unparalleled opportunities, it demands responsible use to foster positive change and minimize negative consequences. As social media continues to evolve, its role in our lives and the world will remain a subject of exploration and adaptation.

### SubQuestion No : 15

**Q.15 How does the passage connect to the world?**

- Ans** ☒ 1. By analysing the impact of social media on business marketing
- ☒ 2. By examining the psychological effects of social media usage
- ☒ 3. By discussing the role of social media in political movements
- ☒ 4. By exploring the history of social media platforms

Question ID : 630680385327

Option 1 ID : 6306801502164

Option 2 ID : 6306801502163

Option 3 ID : 6306801502162

Option 4 ID : 6306801502165

Status : Answered

Chosen Option : 4

### Comprehension:

Read the passage carefully and choose the best answer to each question out of the four alternatives

Social media's revolutionary impact on communication, connection, and information sharing has transformed our lives. Platforms like Facebook, Twitter, and Instagram enable instant global connectivity, breaking down barriers and fostering cross-cultural exchanges. It empowers activists to mobilize support and raise awareness for social and political causes. However, the widespread use of social media also presents challenges. Privacy and data security concerns arise due to the vast amounts of personal information shared. Misinformation spreads rapidly, influencing public opinion and contributing to a polarized information environment.

Furthermore, the addictive nature of social media raises mental health concerns, as constant connectivity and pressure to maintain an idealized online image can lead to anxiety.

Balancing the benefits with the drawbacks is crucial. Social media's impact on society requires thoughtful regulation and ongoing assessment. While it opens up unparalleled opportunities, it demands responsible use to foster positive change and minimize negative consequences. As social media continues to evolve, its role in our lives and the world will remain a subject of exploration and adaptation.

### SubQuestion No : 16

**Q.16 Which inference can be drawn from the passage?**

- Ans** ☒ 1. Society should be aware of the potential consequences of social media usage
- ☐ 2. Online communication is inherently dangerous and harmful
- ☐ 3. Social media has no impact on society and daily life
- ☐ 4. Social media is solely responsible for the breakdown of personal relationships

Question ID : 630680385329

Option 1 ID : 6306801502172

Option 2 ID : 6306801502171

Option 3 ID : 6306801502173

Option 4 ID : 6306801502170

Status : Answered

Chosen Option : 1

### Comprehension:

Read the passage carefully and choose the best answer to each question out of the four alternatives

Social media's revolutionary impact on communication, connection, and information sharing has transformed our lives. Platforms like Facebook, Twitter, and Instagram enable instant global connectivity, breaking down barriers and fostering cross-cultural exchanges. It empowers activists to mobilize support and raise awareness for social and political causes. However, the widespread use of social media also presents challenges. Privacy and data security concerns arise due to the vast amounts of personal information shared. Misinformation spreads rapidly, influencing public opinion and contributing to a polarized information environment.

Furthermore, the addictive nature of social media raises mental health concerns, as constant connectivity and pressure to maintain an idealized online image can lead to anxiety.

Balancing the benefits with the drawbacks is crucial. Social media's impact on society requires thoughtful regulation and ongoing assessment. While it opens up unparalleled opportunities, it demands responsible use to foster positive change and minimize negative consequences. As social media continues to evolve, its role in our lives and the world will remain a subject of exploration and adaptation.

### SubQuestion No : 17

Q.17 Which title best represents the passage?

- Ans
- ☒ 1. The Effects of Social Media on Personal Relationships
  - ☒ 2. The Rise of Social Media Platforms
  - ☒ 3. The Dangers of Online Communication
  - ☒ 4. The Impact of Social Media on Society

Question ID : 630680385326

Option 1 ID : 6306801502160

Option 2 ID : 6306801502158

Option 3 ID : 6306801502159

Option 4 ID : 6306801502161

Status : Answered

Chosen Option : 4

### Comprehension:

Read the passage carefully and choose the best answer to each question out of the four alternatives

Social media's revolutionary impact on communication, connection, and information sharing has transformed our lives. Platforms like Facebook, Twitter, and Instagram enable instant global connectivity, breaking down barriers and fostering cross-cultural exchanges. It empowers activists to mobilize support and raise awareness for social and political causes. However, the widespread use of social media also presents challenges. Privacy and data security concerns arise due to the vast amounts of personal information shared. Misinformation spreads rapidly, influencing public opinion and contributing to a polarized information environment.

Furthermore, the addictive nature of social media raises mental health concerns, as constant connectivity and pressure to maintain an idealized online image can lead to anxiety.

Balancing the benefits with the drawbacks is crucial. Social media's impact on society requires thoughtful regulation and ongoing assessment. While it opens up unparalleled opportunities, it demands responsible use to foster positive change and minimize negative consequences. As social media continues to evolve, its role in our lives and the world will remain a subject of exploration and adaptation.

### SubQuestion No : 18

**Q.18 What is the tone of the passage?**

- Ans** ☒ 1. Balanced and objective  
☒ 2. Alarmist and exaggerated  
☒ 3. Optimistic and celebratory  
☒ 4. Cynical and dismissive

Question ID : 630680385328

Option 1 ID : 6306801502168

Option 2 ID : 6306801502169

Option 3 ID : 6306801502166

Option 4 ID : 6306801502167

Status : Answered

Chosen Option : 1

**Q.19 Fill in the blank with the appropriate preposition:**

Sheila is interested \_\_\_\_\_ astronomy and spends hours stargazing.

- Ans** ☒ 1. in  
☒ 2. for  
☒ 3. at  
☒ 4. on

Question ID : 630680385680

Option 1 ID : 6306801503464

Option 2 ID : 6306801503462

Option 3 ID : 6306801503465

Option 4 ID : 6306801503463

Status : Answered

Chosen Option : 1

Q.20 Arrange the following sentences in the correct order to form a coherent paragraph.  
A) She unpacked the flowers and meticulously arranged the flowers in a vase, creating a beautiful centrepiece.  
B) Emanating from the centrepiece, the fragrance of the flowers filled the room, bringing a sense of freshness and tranquillity.  
C) The vibrant colours and delicate petals uplifted her spirits, brightening up her day.  
D) As she had a deep appreciation for the beauty of nature and found solace in its simplicity, she decided to buy flowers.  
E) From that day, every day she bought and arranged flowers and when she looked at the floral arrangement, it reminded her of the joy and beauty in life.

Ans ☒ 1. ABDEC  
☒ 2. DABEC  
☒ 3. ACDBE  
☒ 4. DCABE

Question ID : 630680385258  
Option 1 ID : 6306801501920  
Option 2 ID : 6306801501921  
Option 3 ID : 6306801501919  
Option 4 ID : 6306801501918  
Status : Answered  
Chosen Option : 4

Q.21 Choose the correct phrasal verb to complete the sentence:  
I need to \_\_\_\_\_ the meeting because of a scheduling conflict.

Ans ☒ 1. look into  
☒ 2. make up  
☒ 3. break down  
☒ 4. call off

Question ID : 630680385235  
Option 1 ID : 6306801501829  
Option 2 ID : 6306801501827  
Option 3 ID : 6306801501828  
Option 4 ID : 6306801501826  
Status : Answered  
Chosen Option : 4

Q.22 Which of the following words is an antonym of "brave"?

Ans ☒ 1. Courageous  
☒ 2. Bold  
☒ 3. Valiant  
☒ 4. Fearful

Question ID : 630680385306  
Option 1 ID : 6306801502090  
Option 2 ID : 6306801502092  
Option 3 ID : 6306801502093  
Option 4 ID : 6306801502091  
Status : Answered  
Chosen Option : 4



**Q.23** Select the missing sentence that would logically follow the paragraph:  
The human brain is a remarkable organ that controls our thoughts, emotions, and bodily functions. It consists of billions of neurons that form complex networks and transmit electrical signals. During sleep, the brain undergoes essential processes that consolidate memories and repair damaged neurons. \_\_\_\_\_. These stages play a crucial role in ensuring restorative rest and overall well-being.

- Ans** ☒ 1. Scientists are still exploring the mysteries of the human brain.  
☒ 2. Adequate sleep is essential for optimal brain functioning.  
☒ 3. The brain consumes a significant amount of energy during the day.  
☒ 4. Dreams are a result of random brain activity during sleep.

Question ID : 630680385695  
Option 1 ID : 6306801503525  
Option 2 ID : 6306801503523  
Option 3 ID : 6306801503524  
Option 4 ID : 6306801503522  
Status : Answered  
Chosen Option : 2

**Q.24** Which of the following words is a synonym for "picturesque"?

- Ans** ☒ 1. Mundane  
☒ 2. Ordinary  
☒ 3. Scenic  
☒ 4. Drab

Question ID : 630680385309  
Option 1 ID : 6306801502103  
Option 2 ID : 6306801502105  
Option 3 ID : 6306801502104  
Option 4 ID : 6306801502102  
Status : Answered  
Chosen Option : 3

**Q.25** Identify the one-word substitution in the following sentence:  
What is the term for "a person who loves and is strongly attracted to books"?

- Ans** ☒ 1. Philanthropist  
☒ 2. Bibliophile  
☒ 3. Philosopher  
☒ 4. Bibliographer

Question ID : 630680385281  
Option 1 ID : 6306801501991  
Option 2 ID : 6306801501990  
Option 3 ID : 6306801501992  
Option 4 ID : 6306801501993  
Status : Answered  
Chosen Option : 4