

Test Date

Test Time

Subject

06/10/2023

2:30 PM - 3:30 PM

Assistant Section Officer (ASO)



DELHI DEVELOPMENT AUTHORITY
RECRUITMENT CELL
VIKAS SADAN, INA, NEW DELHI - 110023
(<https://www.dda.gov.in>)

Advertisement No. 02/2023/Recrtt. Cell/Pers./DDA

Section : General Intelligence and Reasoning



Test Prime

**ALL EXAMS,
ONE SUBSCRIPTION**



70,000+
Mock Tests



**Personalised
Report Card**



**Unlimited
Re-Attempt**



600+
Exam Covered



**Previous Year
Papers**

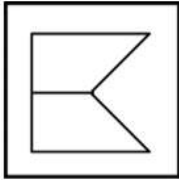


**500%
Refund**



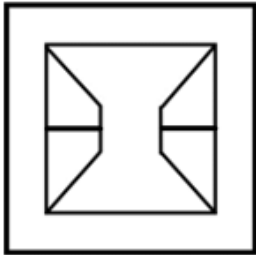
ATTEMPT FREE MOCK NOW

Q.1 From the given answer figures, select the one in which the question figure is embedded.

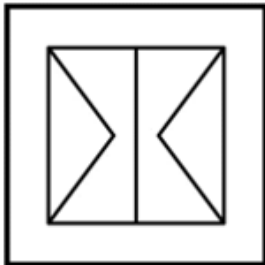


Ans

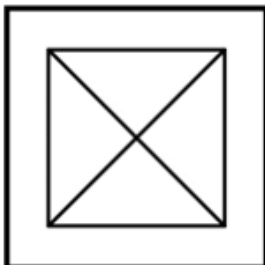
✗ 1.



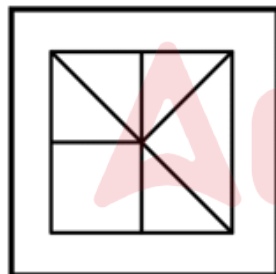
✗ 2.



✗ 3.



✓ 4.



Question ID : 630680384736

Option 1 ID : 6306801499833

Option 2 ID : 6306801499830

Option 3 ID : 6306801499831

Option 4 ID : 6306801499832

Status : Answered

Chosen Option : 4

Q.2 How many letters are there in the given series that are immediately preceded as well as followed by a symbol?

Y U G # H \$ J K ! Q @ L M + & D W

- Ans**
- ☒ 1. 3
 - ☒ 2. 1
 - ☒ 3. 4
 - ☒ 4. 2

Question ID : 630680384453

Option 1 ID : 6306801498699

Option 2 ID : 6306801498698

Option 3 ID : 6306801498700

Option 4 ID : 6306801498701

Status : Answered

Chosen Option : 4

Q.3 Out of the five figures marked (A), (B), (C), and (D), three are similar in a certain manner and one figure is not like the other three. Identify the figure which is different from the rest.

A	B	C	D

- Ans**
- ☒ 1. D
 - ☒ 2. C
 - ☒ 3. B
 - ☒ 4. A

Question ID : 630680384642

Option 1 ID : 6306801499455

Option 2 ID : 6306801499456

Option 3 ID : 6306801499454

Option 4 ID : 6306801499457

Status : Answered

Chosen Option : 3

Q.4 Five persons Anna, Bob, Cam, Donna and Era are sitting in a row facing south such that Dona is on the left of Cam and Bob is on the right of Era. Anna is on the right of Cam and Bob is on the left of Donna. If Era occupies a corner position, then who is sitting in the middle ?

- Ans**
- ☒ 1. Cam
 - ☒ 2. Anna
 - ☒ 3. Donna
 - ☒ 4. Bob

Question ID : 630680384819

Option 1 ID : 6306801500162

Option 2 ID : 6306801500164

Option 3 ID : 6306801500165

Option 4 ID : 6306801500163

Status : Answered

Chosen Option : 3

Q.5 In a certain code language, MASTER is coded as 517249 and STREAM is coded as 729415. Which of the following represents 'MATTERS' in that code language?

- Ans**
- ☒ 1. 2217645
 - ☒ 2. 2253497
 - ☒ 3. 5122497
 - ☒ 4. 5112497

Question ID : 630680384778
 Option 1 ID : 6306801500001
 Option 2 ID : 6306801500000
 Option 3 ID : 6306801499999
 Option 4 ID : 6306801499998
 Status : Answered
 Chosen Option : 3

Q.6 Select the option that is related to the fifth word in the same way as the fourth word is related to the third word and the second word is related to the first word.

MEGHALAYA : SHILLONG :: UTTARAKHAND : DEHRADUN :: UTTAR PRADESH : ?

- Ans**
- ☒ 1. LUCKNOW
 - ☒ 2. KANPUR
 - ☒ 3. VARANASI
 - ☒ 4. AGRA

Question ID : 630680384492
 Option 1 ID : 6306801498856
 Option 2 ID : 6306801498854
 Option 3 ID : 6306801498855
 Option 4 ID : 6306801498857
 Status : Answered
 Chosen Option : 1

Q.7 Three Statements are given followed by two conclusions numbered I and II. Assuming the statements to be true, even if they seem to be at variance with commonly known facts, decide which of the conclusions logically follow(s) from the statements.

Statement:

Statement I: Few pens are staplers.

Statement II: No stapler is a pencil.

Statement III: All pencils are sharpeners.

Conclusion:

Conclusion I: No stapler is a sharpener.

Conclusion II: Some pens being pencils is a possibility.

- Ans**
- ☒ 1. Only conclusion II follows
 - ☒ 2. Neither conclusion I nor II follows
 - ☒ 3. Only conclusion I follows
 - ☒ 4. Both conclusions I and II follow

Question ID : 630680384530
 Option 1 ID : 6306801499007
 Option 2 ID : 6306801499009
 Option 3 ID : 6306801499006
 Option 4 ID : 6306801499008
 Status : Answered
 Chosen Option : 1

Q.8 Select the option that is related to the fifth word in the same way as the fourth word is related to the third word and the second word is related to the first word.

COLLEGE : STUDY :: GYM : WORKOUT :: TEMPLE : ?

- Ans
- ☐ 1. SLEEP
 - ☐ 2. SING
 - ☐ 3. PLAY
 - ☒ 4. PRAY

Question ID : 630680384489

Option 1 ID : 6306801498845

Option 2 ID : 6306801498844

Option 3 ID : 6306801498843

Option 4 ID : 6306801498842

Status : Answered

Chosen Option : 4

Q.9 Select the odd number in the following number series

11, 22, 66, 254, 1320, 7920

- Ans
- ☐ 1. 1320
 - ☒ 2. 254
 - ☐ 3. 66
 - ☐ 4. 22

Question ID : 630680384500

Option 1 ID : 6306801498887

Option 2 ID : 6306801498889

Option 3 ID : 6306801498886

Option 4 ID : 6306801498888

Status : Answered

Chosen Option : 2

Q.10 Read the following information carefully and answer the given question.

L + M means L is the daughter of M

L - M means L is the husband of M

L × M means L is the brother of M

If $A + B \times C$, which of the following is true ?

- Ans
- ☐ 1. A is the daughter-in-law of C
 - ☒ 2. A is the brother's daughter of C
 - ☐ 3. A is the daughter of C
 - ☐ 4. A is the wife of C

Question ID : 630680384571

Option 1 ID : 6306801499171

Option 2 ID : 6306801499172

Option 3 ID : 6306801499170

Option 4 ID : 6306801499173

Status : Answered

Chosen Option : 2

Q.11 Find out the wrong term in the given series.

ED9, GF13, IH16, KJ21, ML25, ON29

Ans ☒ 1. KJ21

☒ 2. IH16

☒ 3. GF13

☒ 4. ON29

Question ID : 630680384726

Option 1 ID : 6306801499792

Option 2 ID : 6306801499793

Option 3 ID : 6306801499790

Option 4 ID : 6306801499791

Status : Answered

Chosen Option : 2

Q.12 Which of the following letter will replace the question mark (?) in the given series?

O, N, L, I, E, ?

Ans ☒ 1. D

☒ 2. Z

☒ 3. A

☒ 4. F

Question ID : 630680384520

Option 1 ID : 6306801498966

Option 2 ID : 6306801498968

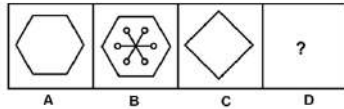
Option 3 ID : 6306801498967

Option 4 ID : 6306801498969

Status : Answered

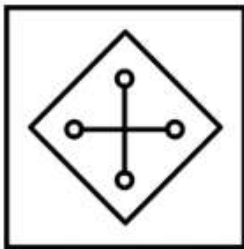
Chosen Option : 2

Q.13 Figure A and B are related in a particular way or manner. Establish the same relationship between C and D choosing from the given options.

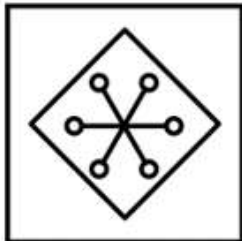


Ans

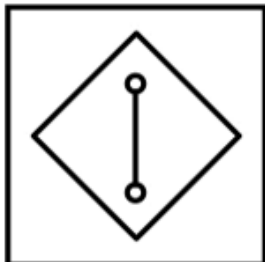
✓ 1.



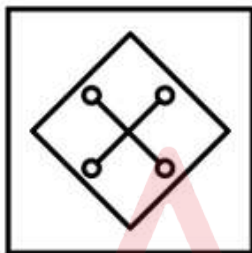
✗ 2.



✗ 3.



✗ 4.



Question ID : 630680384845

Option 1 ID : 6306801500267

Option 2 ID : 6306801500266

Option 3 ID : 6306801500269

Option 4 ID : 6306801500268

Status : Answered

Chosen Option : 1

Q.14 Four letter-clusters have been given, out of which three are alike in some manner and one is different. Select the odd letter-cluster.

- Ans
- ☒ 1. HGI
 - ☒ 2. QOP
 - ☒ 3. VUW
 - ☒ 4. XWY

Question ID : 630680384510
 Option 1 ID : 6306801498929
 Option 2 ID : 6306801498926
 Option 3 ID : 6306801498927
 Option 4 ID : 6306801498928
 Status : Answered
 Chosen Option : 2

Q.15 Identify the odd letter cluster triad from the given options.

- Ans
- ☒ 1. (CJK, HOP, MTU)
 - ☒ 2. (BFH, GKM, LPR)
 - ☒ 3. (IDP, NIU, SNZ)
 - ☒ 4. (EOS, JTX, NWZ)

Question ID : 630680384605
 Option 1 ID : 6306801499306
 Option 2 ID : 6306801499308
 Option 3 ID : 6306801499309
 Option 4 ID : 6306801499307
 Status : Answered
 Chosen Option : 4

Q.16 Rearranging the given words in ascending alphabetical order, identify the word that appears in the middle.

Leprosy Lessen Lesson Language Languid

- Ans
- ☒ 1. Languid
 - ☒ 2. Lessen
 - ☒ 3. Lesson
 - ☒ 4. Leprosy

Question ID : 630680384557
 Option 1 ID : 6306801499116
 Option 2 ID : 6306801499114
 Option 3 ID : 6306801499115
 Option 4 ID : 6306801499117
 Status : Answered
 Chosen Option : 4

Q.17 If all the letters within each letter-clusters are arranged alphabetically, in how many letter-clusters will the first letter be a vowel?
DRUM LEFT MAIN JUNK DEAL

- Ans**
- ☒ 1. 2
 - ☒ 2. 3
 - ☒ 3. 4
 - ☒ 4. 1

Question ID : 630680384451
Option 1 ID : 6306801498690
Option 2 ID : 6306801498691
Option 3 ID : 6306801498693
Option 4 ID : 6306801498692
Status : Answered
Chosen Option : 2

Q.18 In a certain code language, 'mok fin rol' means 'food is tasty'; 'rol jaz fin' means 'tasty is delicious'; and 'jaz mok fin' means 'delicious is food'. Which of the following represents 'delicious' in that code language?

- Ans**
- ☒ 1. rol
 - ☒ 2. jaz
 - ☒ 3. fin
 - ☒ 4. wiz

Question ID : 630680384581
Option 1 ID : 6306801499213
Option 2 ID : 6306801499211
Option 3 ID : 6306801499210
Option 4 ID : 6306801499212
Status : Answered
Chosen Option : 2

Q.19 If \times stands for $-$, \div stands for $+$, $+$ stands for $+$ and $-$ stands for \times , which one of the following equations is correct?

- Ans**
- ☒ 1. $15 - 3 \div 3 - 7 * 2 = 24$
 - ☒ 2. $10 - 2 \div 5 - 3 * 4 = 16$
 - ☒ 3. $10 + 2 \div 5 - 3 * 4 = 16$
 - ☒ 4. $15 + 3 \div 3 - 7 \div 2 = 24$

Question ID : 630680386165
Option 1 ID : 6306801505371
Option 2 ID : 6306801505370
Option 3 ID : 6306801505372
Option 4 ID : 6306801505373
Status : Answered
Chosen Option : 3

Q.20 Pointing towards a woman in the photograph, Golu said, "She is the wife of the only son of my father's mother". How is the woman related to Golu?

- Ans**
- ☒ 1. Sister
 - ☒ 2. Daughter-in-law
 - ☒ 3. Father's sister
 - ☒ 4. Mother

Question ID : 630680384674
Option 1 ID : 6306801499583
Option 2 ID : 6306801499585
Option 3 ID : 6306801499584
Option 4 ID : 6306801499582

Status : Answered

Chosen Option : 4

Q.21 In the question, a statement is given, followed by two conclusions, I and II. You have to consider the statement to be true even if it seems to be at variance from commonly known facts. You have to decide which of the given conclusions, if any, follows from the given statement.

Statement: All toppers are good at maths. Ram is good at maths.

Conclusion:

Conclusion I: Ram is a topper.

Conclusion II: Some people who are good at maths might not be toppers.

- Ans**
- ☒ 1. Only conclusion II follows
 - ☒ 2. Neither conclusion I nor II follows
 - ☒ 3. Only conclusion I follows
 - ☒ 4. Both conclusions I and II follow

Question ID : 630680384485
Option 1 ID : 6306801498827
Option 2 ID : 6306801498829
Option 3 ID : 6306801498826
Option 4 ID : 6306801498828

Status : Answered

Chosen Option : 1

Q.22 Three Statements are given followed by three conclusions numbered I, II and III. Assuming the statements to be true, even if they seem to be at variance with commonly known facts, decide which of the conclusions logically follow(s) from the statements.

Statement:

Statement I: All carbon are silver.

Statement II: Some silver are gold.

Statement III: Some gold are bronze.

Conclusion:

Conclusion I: All gold are carbons.

Conclusion II: Some bronze are carbons.

Conclusion III: Some bronze are silver.

- Ans**
- ☒ 1. Only III follows
 - ☒ 2. Only I and II follows
 - ☒ 3. None of the conclusions follow
 - ☒ 4. Only I follows

Question ID : 630680384534
Option 1 ID : 6306801499024
Option 2 ID : 6306801499023
Option 3 ID : 6306801499025
Option 4 ID : 6306801499022

Status : Answered

Chosen Option : 3

Q.23 In a row of girls facing north, Mansi is standing at 7th position from the left and Versha is 12th from the right. If they interchange their positions, Mansi becomes 22nd from the left. How many girls are there in the row?

- Ans
- ☒ 1. 32
 - ☒ 2. 33
 - ☒ 3. 31
 - ☒ 4. 34

Question ID : 630680384615
 Option 1 ID : 6306801499347
 Option 2 ID : 6306801499348
 Option 3 ID : 6306801499346
 Option 4 ID : 6306801499349
 Status : Answered
 Chosen Option : 2

Q.24 'QWJK' is related to 'UZLL' in the same way as 'HGFE' is related to

- Ans
- ☒ 1. LKJI
 - ☒ 2. LJHF
 - ☒ 3. LJIH
 - ☒ 4. LIHG

Question ID : 630680384788
 Option 1 ID : 6306801500038
 Option 2 ID : 6306801500039
 Option 3 ID : 6306801500040
 Option 4 ID : 6306801500041
 Status : Answered
 Chosen Option : 2

Q.25 Find the wrong number in the series:

124, 126, 122, 128, 124, 130, 118

- Ans
- ☒ 1. 130
 - ☒ 2. 122
 - ☒ 3. 118
 - ☒ 4. 124

Question ID : 630680384564
 Option 1 ID : 6306801499145
 Option 2 ID : 6306801499142
 Option 3 ID : 6306801499143
 Option 4 ID : 6306801499144
 Status : Answered
 Chosen Option : 4

Q.1 Who has debuted for India in Jul'23 as a Wicket Keeper against West Indies in a cricket test match?

- Ans**
- ☒ 1. Yashasvi Jaiswal
 - ☒ 2. KS Bharat
 - ☒ 3. Sanju Samson
 - ☒ 4. Ishan Kishan

Question ID : 630680384388
 Option 1 ID : 6306801498441
 Option 2 ID : 6306801498439
 Option 3 ID : 6306801498440
 Option 4 ID : 6306801498438
 Status : Answered
 Chosen Option : 4

Q.2 Which of the following place is also called the Cyclone Capital of India?

- Ans**
- ☒ 1. Gujrat
 - ☒ 2. Chennai
 - ☒ 3. Kerala
 - ☒ 4. Sundarbans

Question ID : 630680384306
 Option 1 ID : 6306801498113
 Option 2 ID : 6306801498110
 Option 3 ID : 6306801498111
 Option 4 ID : 6306801498112
 Status : Answered
 Chosen Option : 2

Q.3 In which year was the Arya Samaj founded in India?

- Ans**
- ☒ 1. 1887
 - ☒ 2. 1875
 - ☒ 3. 1885
 - ☒ 4. 1867

Question ID : 630680384338
 Option 1 ID : 6306801498240
 Option 2 ID : 6306801498238
 Option 3 ID : 6306801498239
 Option 4 ID : 6306801498241
 Status : Answered
 Chosen Option : 2

Q.4 Which state in India experiences a tropical monsoon climate throughout the year?

- Ans**
- ☒ 1. Gujarat
 - ☒ 2. Kerala
 - ☒ 3. Rajasthan
 - ☒ 4. Punjab

Question ID : 630680384428
 Option 1 ID : 6306801498600
 Option 2 ID : 6306801498598
 Option 3 ID : 6306801498599
 Option 4 ID : 6306801498601
 Status : Answered
 Chosen Option : 2

Q.5 Which government initiative in India aims to provide universal access to banking services and promote financial inclusion among the unbanked population?

- Ans ☒ 1. Make in India
☒ 2. Digital India
☒ 3. Pradhan Mantri Jan Dhan Yojana (PMJDY)
☒ 4. Swachh Bharat Abhiyan

Question ID : 630680386444
 Option 1 ID : 6306801506488
 Option 2 ID : 6306801506489
 Option 3 ID : 6306801506487
 Option 4 ID : 6306801506486
 Status : Answered
 Chosen Option : 1

Q.6 During which period did Qutbuddin Aibak rule?

- Ans ☒ 1. 1266-1287
☒ 2. 1206-1210
☒ 3. 1210-1236
☒ 4. 1236-1240

Question ID : 630680384324
 Option 1 ID : 6306801498185
 Option 2 ID : 6306801498183
 Option 3 ID : 6306801498182
 Option 4 ID : 6306801498184
 Status : Answered
 Chosen Option : 2

Q.7 Which Government of the following states has announced free travel for women on government-run buses, 200-unit free electricity, and Rs 2,000 for women belonging to the below poverty line category or holding Antyodaya cards?

- Ans ☒ 1. Gujrat
☒ 2. Karnataka
☒ 3. Chandigarh
☒ 4. Jharkhand

Question ID : 630680384251
 Option 1 ID : 6306801497890
 Option 2 ID : 6306801497891
 Option 3 ID : 6306801497893
 Option 4 ID : 6306801497892
 Status : Answered
 Chosen Option : 2

Q.8 Which of the following issues are being promoted by the United Nations Development Programme (UNDP) and the Deendayal Antyodaya Yojana-National Urban Livelihoods Mission (DAY-NULM) through a collaborative partnership?

- Ans
- ☒ 1. Startup
 - ☒ 2. Inequality removal
 - ☒ 3. Women Entrepreneurship
 - ☒ 4. Poverty removal

Question ID : 630680384248
 Option 1 ID : 6306801497880
 Option 2 ID : 6306801497881
 Option 3 ID : 6306801497878
 Option 4 ID : 6306801497879
 Status : Answered
 Chosen Option : 3

Q.9 "Gender Gap in Literacy" refers to the difference in literacy rates between males and females in a population. Which region of India has traditionally recorded a significant gender gap in literacy?

- Ans
- ☒ 1. Rajasthan
 - ☒ 2. Haryana
 - ☒ 3. Goa
 - ☒ 4. Odisha

Question ID : 630680384213
 Option 1 ID : 6306801497743
 Option 2 ID : 6306801497744
 Option 3 ID : 6306801497742
 Option 4 ID : 6306801497745
 Status : Answered
 Chosen Option : 1

Q.10 Which festival is celebrated nationwide in India to mark the birth anniversary of Mahatma Gandhi, the Father of the Nation?

- Ans
- ☒ 1. Holi
 - ☒ 2. Diwali
 - ☒ 3. Durga Puja
 - ☒ 4. Gandhi Jayanti

Question ID : 630680386425
 Option 1 ID : 6306801506411
 Option 2 ID : 6306801506410
 Option 3 ID : 6306801506412
 Option 4 ID : 6306801506413
 Status : Answered
 Chosen Option : 4

Q.11 What is the Parliament of China Called?

- Ans
- ☒ 1. National Assembly
 - ☒ 2. Assembly of the Union
 - ☒ 3. National People's Congress
 - ☒ 4. Union of People

Question ID : 630680384300
 Option 1 ID : 6306801498087
 Option 2 ID : 6306801498086
 Option 3 ID : 6306801498089
 Option 4 ID : 6306801498088
 Status : Answered
 Chosen Option : 3

Q.12 Who is leading Chandrayaan 3 mission?

- Ans
- ☒ 1. Aditi Pant
 - ☒ 2. Indira Hinduja
 - ☒ 3. Ritu Karidhal Shrivastava
 - ☒ 4. Soumya Swaminathan

Question ID : 630680384378
 Option 1 ID : 6306801498400
 Option 2 ID : 6306801498399
 Option 3 ID : 6306801498398
 Option 4 ID : 6306801498401
 Status : Answered
 Chosen Option : 4

Q.13 Who wrote the recently released sports book "A History of Basketball in Fifteen Sneakers"?

- Ans
- ☒ 1. Joe Posnanski
 - ☒ 2. Russ Bengtson
 - ☒ 3. Paul Volponi
 - ☒ 4. Guenther Steiner

Question ID : 630680384256
 Option 1 ID : 6306801497913
 Option 2 ID : 6306801497911
 Option 3 ID : 6306801497910
 Option 4 ID : 6306801497912
 Status : Not Answered
 Chosen Option : --

Q.14 Which microfinance institution is known for pioneering microcredit and empowering rural women through its "Self-Help Group" model in India?

- Ans
- ☒ 1. National Bank for Agriculture and Rural Development
 - ☒ 2. Ujjivan Small Finance Bank
 - ☒ 3. Saraswat Bank
 - ☒ 4. Bandhan Bank

Question ID : 630680384180
 Option 1 ID : 6306801497613
 Option 2 ID : 6306801497610
 Option 3 ID : 6306801497612
 Option 4 ID : 6306801497611
 Status : Answered
 Chosen Option : 1

Q.15 In which of the following states in India is Malayalam mostly spoken?

- Ans ☒ 1. Punjab
☒ 2. Kerala
☒ 3. Gujrat
☒ 4. Assam

Question ID : 630680384279
 Option 1 ID : 6306801498005
 Option 2 ID : 6306801498003
 Option 3 ID : 6306801498004
 Option 4 ID : 6306801498002
 Status : Answered
 Chosen Option : 2

Q.16 Which classical dance form of India is characterized by its intricate footwork, hand gestures, facial expressions, and vibrant costumes?

- Ans ☒ 1. Odissi
☒ 2. Bharatanatyam
☒ 3. Kathakali
☒ 4. Kuchipudi

Question ID : 630680386417
 Option 1 ID : 6306801506381
 Option 2 ID : 6306801506378
 Option 3 ID : 6306801506379
 Option 4 ID : 6306801506380
 Status : Answered
 Chosen Option : 3

Q.17 Which organization is responsible for the regulation and development of India's securities market?

- Ans ☒ 1. Reserve Bank of India (RBI)
☒ 2. National Stock Exchange of India (NSE)
☒ 3. Institute of Chartered Accountants of India (ICAI)
☒ 4. Securities and Exchange Board of India (SEBI)

Question ID : 630680386484
 Option 1 ID : 6306801506647
 Option 2 ID : 6306801506649
 Option 3 ID : 6306801506648
 Option 4 ID : 6306801506646
 Status : Answered
 Chosen Option : 4

Q.18 In the short run, which of the following costs remains constant regardless of the level of output?

- Ans ☒ 1. Variable Costs
☒ 2. Total Costs
☒ 3. Marginal Costs
☒ 4. Fixed Costs

Question ID : 630680384410
 Option 1 ID : 6306801498526
 Option 2 ID : 6306801498528
 Option 3 ID : 6306801498527
 Option 4 ID : 6306801498529
 Status : Answered

Q.19 Which of the river systems is the longest in India?

- Ans ☒ 1. Ganges
☒ 2. Brahmaputra
☒ 3. Indus
☒ 4. Yamuna

Question ID : 630680384104
 Option 1 ID : 6306801497306
 Option 2 ID : 6306801497309
 Option 3 ID : 6306801497308
 Option 4 ID : 6306801497307
 Status : Answered
 Chosen Option : 1

Q.20 During which festival do devotees participate in the ritualistic act of bathing in the holy Ganges River to cleanse their sins?

- Ans ☒ 1. Karva Chauth
☒ 2. Kumbh Mela
☒ 3. Janmashtami
☒ 4. Maha Shivaratri

Question ID : 630680384400
 Option 1 ID : 6306801498489
 Option 2 ID : 6306801498486
 Option 3 ID : 6306801498487
 Option 4 ID : 6306801498488
 Status : Answered
 Chosen Option : 2

Q.21 The "Quit India Movement" was launched in response to which historic event that occurred during World War II?

- Ans ☒ 1. Failure of the Cripps Mission
☒ 2. Partition of Bengal
☒ 3. Dandi March
☒ 4. Bengal Famine of 1943

Question ID : 630680384223
 Option 1 ID : 6306801497785
 Option 2 ID : 6306801497783
 Option 3 ID : 6306801497782
 Option 4 ID : 6306801497784
 Status : Answered
 Chosen Option : 1

Q.22 The "Multidimensional Poverty Index" (MPI) measures poverty based on which factors?

- Ans ☒ 1. Health, education and living standards
☒ 2. Food security, water availability, and shelter
☒ 3. Access to clean energy, sanitation, and education
☒ 4. Agricultural productivity, access to credit, and land ownership

Question ID : 630680384194
 Option 1 ID : 6306801497666
 Option 2 ID : 6306801497667
 Option 3 ID : 6306801497668
 Option 4 ID : 6306801497669
 Status : Answered

Q.23 Which among the following Agriculture Universities of India has developed a new variety of wheat called the PBW RS1?

- Ans**
- ☒ 1. Jawaharlal Nehru Krishi Vishwa Vidyalaya
 - ☒ 2. Anand Agriculture University
 - ☒ 3. G. B. Pant University of Agriculture and Technology
 - ☒ 4. Punjab Agriculture University

Question ID : 630680384239
 Option 1 ID : 6306801497844
 Option 2 ID : 6306801497842
 Option 3 ID : 6306801497845
 Option 4 ID : 6306801497843
 Status : Not Answered
 Chosen Option : --

Q.24 Who won the Nobel Prize in Literature in 2016 for having created new poetic expressions within the great American song tradition?

- Ans**
- ☒ 1. José Saramago
 - ☒ 2. Margaret Atwood
 - ☒ 3. Bob Dylan
 - ☒ 4. Toni Morrison

Question ID : 630680384166
 Option 1 ID : 6306801497555
 Option 2 ID : 6306801497554
 Option 3 ID : 6306801497556
 Option 4 ID : 6306801497557
 Status : Not Answered
 Chosen Option : --

Q.25 Who among the following is the most popular ruler of the Mughal Dynasty?

- Ans**
- ☒ 1. Babur
 - ☒ 2. Jahangir
 - ☒ 3. Shahjahan
 - ☒ 4. Akbar

Question ID : 630680384322
 Option 1 ID : 6306801498177
 Option 2 ID : 6306801498174
 Option 3 ID : 6306801498175
 Option 4 ID : 6306801498176
 Status : Answered
 Chosen Option : 4

Q.1 What is the arithmetic mean of first 25 odd natural numbers?

- Ans
- ☒ 1. 23.5
 - ☒ 2. 25
 - ☒ 3. 20.5
 - ☒ 4. 24.5

Question ID : 630680385783
Option 1 ID : 6306801503851
Option 2 ID : 6306801503853
Option 3 ID : 6306801503850
Option 4 ID : 6306801503852
Status : Answered
Chosen Option : 2

Q.2 A solid cube having volume 57344 cm^3 is cut into 14 cubes of equal volume. The surface area (in cm^2) of the smaller cubes is:

- Ans
- ☒ 1. 1606 cm^2
 - ☒ 2. 1589 cm^2
 - ☒ 3. 1536 cm^2
 - ☒ 4. 1550 cm^2

Question ID : 630680385805
Option 1 ID : 6306801503941
Option 2 ID : 6306801503940
Option 3 ID : 6306801503938
Option 4 ID : 6306801503939
Status : Answered
Chosen Option : 3

Q.3 Dhruvanjay makes a profit of 24% on cost price by selling a water heater for ₹7440. If the cost price of the water heater is increased by 5% and he wants to earn the same profit, what will be the approximate new profit percent?

- Ans
- ☒ 1. 22.8%
 - ☒ 2. 18%
 - ☒ 3. 17.5%
 - ☒ 4. 19.2%

Question ID : 630680385844
Option 1 ID : 6306801504097
Option 2 ID : 6306801504095
Option 3 ID : 6306801504094
Option 4 ID : 6306801504096
Status : Answered
Chosen Option : 2

Q.4 A cistern can be filled in 8 hours through an inlet pipe. It takes two more hours to fill the same cistern due to a leak in its bottom. How much time will the leak take to empty the cistern if its completely full?

- Ans**
- ☒ 1. 24 hours
 - ☒ 2. 45 hours
 - ☒ 3. 36 hours
 - ☒ 4. 40 hours

Question ID : 630680385860
 Option 1 ID : 6306801504158
 Option 2 ID : 6306801504161
 Option 3 ID : 6306801504159
 Option 4 ID : 6306801504160
 Status : Answered
 Chosen Option : 4

Q.5 Which of the following numbers will completely divide $(49^{43} - 1)$?

- Ans**
- ☒ 1. 86
 - ☒ 2. 13
 - ☒ 3. 43
 - ☒ 4. 8

Question ID : 630680385811
 Option 1 ID : 6306801503965
 Option 2 ID : 6306801503963
 Option 3 ID : 6306801503964
 Option 4 ID : 6306801503962
 Status : Answered
 Chosen Option : 4

Q.6 The average of 5 consecutive integers starting with 'i' is j. What is the average of 8 consecutive integers starting with $(i + 2)$?

- Ans**
- ☒ 1. $\frac{(2i + 7)}{2}$
 - ☒ 2. $\frac{(2i + 11)}{2}$
 - ☒ 3. $\frac{(2i + 13)}{2}$
 - ☒ 4. $\frac{(2i + 5)}{2}$

Question ID : 630680385784
 Option 1 ID : 6306801503854
 Option 2 ID : 6306801503855
 Option 3 ID : 6306801503857
 Option 4 ID : 6306801503856
 Status : Answered
 Chosen Option : 3

Q.7 If two complementary angles are in the ratio 7 :11, then the angles are:

- Ans ☒ 1. 35° and 55°
☒ 2. 70° and 110°
☒ 3. 77° and 121°
☒ 4. 140° and 40°

Question ID : 630680385177

Option 1 ID : 6306801501595

Option 2 ID : 6306801501594

Option 3 ID : 6306801501597

Option 4 ID : 6306801501596

Status : Answered

Chosen Option : 1

Q.8 If $p+q = 11$ and $p^2+q^2 = 21$, find the value of $\left(\frac{1}{p}\right) + \left(\frac{1}{q}\right)$.

- Ans ☒ 1. $\frac{11}{50}$
☒ 2. $\frac{6}{17}$
☒ 3. $\frac{18}{5}$
☒ 4. $\frac{1}{9}$

Question ID : 630680385774

Option 1 ID : 6306801503815

Option 2 ID : 6306801503816

Option 3 ID : 6306801503817

Option 4 ID : 6306801503814

Status : Answered

Chosen Option : 1

Q.9 M and N are two numbers such that the sum of 7% of M and 5% of N is two-third of the sum of 7% of M and 9% of N. Find the ratio of M:N is _____.

- Ans ☒ 1. 3:7
☒ 2. 7:3
☒ 3. 5:3
☒ 4. 3:5

Question ID : 630680385847

Option 1 ID : 6306801504106

Option 2 ID : 6306801504107

Option 3 ID : 6306801504108

Option 4 ID : 6306801504109

Status : Answered

Chosen Option : 1

Q.10 A cylindrical tank 42 m in diameter, contains water to a depth of 6.5 m. What is the total area of wetted surface?

- Ans ☒ 1. 2244 sq.m
☒ 2. 2305 sq.m
☒ 3. 2284 sq.m
☒ 4. 2052 sq.m

Question ID : 630680385802

Option 1 ID : 6306801503927

Option 2 ID : 6306801503929

Option 3 ID : 6306801503928

Option 4 ID : 6306801503926

Status : Answered

Chosen Option : 1

Q.11 If $\left(x^2 + \frac{1}{x^2}\right) = 79$, $\left(x + \frac{1}{x}\right)$ is equal to :

- Ans ☒ 1. +8, -8
☒ 2. +7, -7
☒ 3. +6, -6
☒ 4. +9, -9

Question ID : 630680385765

Option 1 ID : 6306801503780

Option 2 ID : 6306801503779

Option 3 ID : 6306801503778

Option 4 ID : 6306801503781

Status : Answered

Chosen Option : 4

Q.12 Find the volume of a sphere of radius 21cm? Take $\pi = \frac{22}{7}$.

- Ans ☒ 1. 38808 cm³
☒ 2. 38888 cm³
☒ 3. 38880 cm³
☒ 4. 38088 cm³

Question ID : 630680385795

Option 1 ID : 6306801503898

Option 2 ID : 6306801503899

Option 3 ID : 6306801503900

Option 4 ID : 6306801503901

Status : Answered

Chosen Option : 1

Q.13 In a equilateral triangle DEF, if $DX \perp EF$, then : (Where DX is the median)

Ans ✓ 1. $3 DE^2 = 4 DX^2$

✗ 2. $4 DE^2 = 3 DX^2$

✗ 3. $2 DE^2 = 3 DX^2$

✗ 4. $DE^2 = 4 DX^2$

Question ID : 630680385018

Option 1 ID : 6306801500960

Option 2 ID : 6306801500959

Option 3 ID : 6306801500958

Option 4 ID : 6306801500961

Status : Answered

Chosen Option : 1

Q.14 Dipam completes a sketch in 15 days. Yash complete the same sketch in 20 days. Dipam started working alone on the sketch. Yash joined him after a day and both worked together. How many day will they now take together to complete the remaining work?

Ans ✗ 1. 10 days

✗ 2. 15 days

✓ 3. 8 days

✗ 4. 12 days

Question ID : 630680385855

Option 1 ID : 6306801504139

Option 2 ID : 6306801504141

Option 3 ID : 6306801504138

Option 4 ID : 6306801504140

Status : Answered

Chosen Option : 3

Q.15 The price of an article is successively increased by 35%,48% and 56% respectively. What is the approximate net percentage increase?

Ans ✗ 1. 210.69%

✗ 2. 208.98%

✓ 3. 211.69%

✗ 4. 200.57%

Question ID : 630680385822

Option 1 ID : 6306801504008

Option 2 ID : 6306801504007

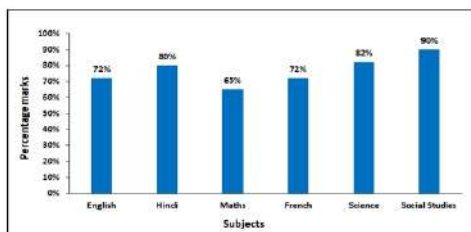
Option 3 ID : 6306801504009

Option 4 ID : 6306801504006

Status : Answered

Chosen Option : 3

Q.16 The chart given below shows the percentage marks of a student in five different subjects. The maximum marks in each subject are 150. What is the aggregate percentage score of all the subjects combined?



- Ans**
- ☐ 1. 78.42%
 - ☐ 2. 72.89%
 - ☒ 3. 76.83%
 - ☐ 4. 79.75%

Question ID : 630680385788
Option 1 ID : 6306801503872
Option 2 ID : 6306801503870
Option 3 ID : 6306801503871
Option 4 ID : 6306801503873

Status : Answered

Chosen Option : 3

Q.17 Find the value of: $\sin 30^\circ \times \cos 60^\circ + \sin 60^\circ \times \cos 30^\circ = ?$

- Ans**
- ☐ 1. 2
 - ☐ 2. 1.5
 - ☒ 3. 1
 - ☐ 4. 0

Question ID : 630680385045
Option 1 ID : 6306801501066
Option 2 ID : 6306801501067
Option 3 ID : 6306801501068
Option 4 ID : 6306801501069

Status : Answered

Chosen Option : 3

Q.18 Arjun sold a bat at ₹405, but incurs a loss of 10%. What is the gain or loss percentage if he sells the same bat at ₹465?

- Ans**
- ☐ 1. loss of 6%
 - ☐ 2. loss of 4.53%
 - ☒ 3. profit of 3.33%
 - ☐ 4. profit of 5%

Question ID : 630680385840
Option 1 ID : 6306801504081
Option 2 ID : 6306801504079
Option 3 ID : 6306801504080
Option 4 ID : 6306801504078

Status : Answered

Chosen Option : 3

Q.19 The income of Omkar, Kunal, and Pratik in the ratio of 10 : 11 : 9 and their spendings are in the ratio 16 : 12 : 9. If Omkar saves 20% of his income. What is the ratio of the savings of Omkar, Kunal and Pratik?

- Ans** ✓ 1. 4:10:9
 ✗ 2. 9:10:4
 ✗ 3. 10:4:9
 ✗ 4. 4:9:10

Question ID : 630680385852

Option 1 ID : 6306801504129

Option 2 ID : 6306801504128

Option 3 ID : 6306801504127

Option 4 ID : 6306801504126

Status : Answered

Chosen Option : 1

Q.20 The length of common tangents MN for two circles touching externally is 12 cm. If the radius of the bigger circle is 9 cm, find the radius of the smaller circle.

- Ans** ✗ 1. 5 cm
 ✓ 2. 4 cm
 ✗ 3. 6 cm
 ✗ 4. 8 cm

Question ID : 630680384910

Option 1 ID : 6306801500529

Option 2 ID : 6306801500527

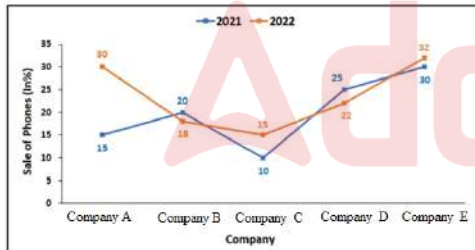
Option 3 ID : 6306801500526

Option 4 ID : 6306801500528

Status : Answered

Chosen Option : 3

Q.21 The percentage of 5 different types of mobile phones sold by a Store in 2021 and 2022. If 20% of Company E mobiles sold during 2021 and 2022 were returned by the customers due to some defects, then how many Company E mobiles sold by the store were non-defective? Total number of mobile phones sold in 2021 = 3,50,000. Total number of mobile phones sold in 2022 = 4,20,000



- Ans** ✗ 1. 191620
 ✓ 2. 191520
 ✗ 3. 191528
 ✗ 4. 192520

Question ID : 630680385791

Option 1 ID : 6306801503882

Option 2 ID : 6306801503885

Option 3 ID : 6306801503884

Option 4 ID : 6306801503883

Status : Answered

Chosen Option : 2

Q.22

Simplify:

$$(273 \div 3) - 2(19 \times 7 + 258 - 56) + 35 \sqrt[3]{2744} + 354 \div 3 = ?$$

Ans

✗ 1. 19

✗ 2. 85

✗ 3. 0

✓ 4. 29

Question ID : 630680385814

Option 1 ID : 6306801503975

Option 2 ID : 6306801503977

Option 3 ID : 6306801503974

Option 4 ID : 6306801503976

Status : Answered

Chosen Option : 4

Q.23

Simplify:

$$\frac{(888 \times 888 \times 888) + (789 \times 789 \times 789)}{(888 \times 888) - (888 \times 789) + (789 \times 789)} \times \frac{1}{(75 - 36)}$$

Ans

✗ 1. 39

✗ 2. 52

✓ 3. 43

✗ 4. 41

Question ID : 630680385767

Option 1 ID : 6306801503786

Option 2 ID : 6306801503789

Option 3 ID : 6306801503788

Option 4 ID : 6306801503787

Status : Answered

Chosen Option : 3

Q.24 Jayesh secures 58% of the votes in a college election, and is elected by majority of 224 votes. The total number of votes polled is?

Ans

✗ 1. 1378

✗ 2. 1250

✗ 3. 1568

✓ 4. 1400

Question ID : 630680385819

Option 1 ID : 6306801503995

Option 2 ID : 6306801503994

Option 3 ID : 6306801503997

Option 4 ID : 6306801503996

Status : Answered

Chosen Option : 4

Q.25 The top circular end of a bucket is having a diameter of 56 cm and the bottom circular end has a diameter of 14 cm. Find the volume of the bucket if the height of the bucket is 36 cm.

- Ans
- ☒ 1. 38828 cm³
 - ☒ 2. 38898 cm³
 - ☒ 3. 38818 cm³
 - ☒ 4. 38808 cm³

Question ID : 630680385798
Option 1 ID : 6306801503913
Option 2 ID : 6306801503911
Option 3 ID : 6306801503912
Option 4 ID : 6306801503910
Status : Answered
Chosen Option : 4

Section : English Comprehension

Q.1 Select the word segment that substitutes (replaces) the bracketed word segment correctly and completes the sentence meaningfully. Select the option 'no correction required' if the sentence is correct as given.
And having (duly disposed off) Anna's friend, the Princess Myakaya got up, and together with the ambassador's wife, joined the group at the table.

- Ans
- ☒ 1. No correction required.
 - ☒ 2. duly disposed
 - ☒ 3. duly disposed of
 - ☒ 4. duly disposed at

Question ID : 630680385635
Option 1 ID : 6306801503301
Option 2 ID : 6306801503300
Option 3 ID : 6306801503299
Option 4 ID : 6306801503298
Status : Answered
Chosen Option : 1

Q.2 Select the most appropriate missing sentence to complete the paragraph meaningfully.
The effort of resolution necessary to the achievement of this purpose, I found to be quite awful. It was as if I had to make up my mind to leap from the top of a high house, or _____.

- Ans
- ☒ 1. allow yourself to eat.
 - ☒ 2. plunge into a great depth of water.
 - ☒ 3. or any one else aggravate my anger at present.
 - ☒ 4. 'now, perhaps you'll mention what's the matter,' said my sister.

Question ID : 630680385357
Option 1 ID : 6306801502279
Option 2 ID : 6306801502281
Option 3 ID : 6306801502280
Option 4 ID : 6306801502278
Status : Answered
Chosen Option : 2

Q.3 Fill in the blanks with the appropriate conjunctions:
She had studied hard _____ couldn't pass the exam, _____ she was determined to try again.

- Ans ☒ 1. so / yet
☒ 2. but / so
☒ 3. yet / and
☒ 4. and / but

Question ID : 630680385681
Option 1 ID : 6306801503468
Option 2 ID : 6306801503466
Option 3 ID : 6306801503469
Option 4 ID : 6306801503467
Status : Answered
Chosen Option : 2

Q.4 The sentences given below are all part of a paragraph but do not necessarily fall in the order that they are in. The first and the last sentences of the paragraph are given.
Choose the option that arranges these sentences to form a meaningful paragraph.
Very soon after Heidi had gone up, before it was quite dark,
A. morning with the sun, which rose early over the
B. mountainside in those summer days. It was a wild,
C. stormy night; the hut was shaking in the gusts
D. the old man also sought his bed. He was always up in the
and all the boards were creaking.

- Ans ☒ 1. ADCB
☒ 2. CABD
☒ 3. BDAC
☒ 4. DABC

Question ID : 630680385592
Option 1 ID : 6306801503149
Option 2 ID : 6306801503147
Option 3 ID : 6306801503146
Option 4 ID : 6306801503148
Status : Answered
Chosen Option : 4

Q.5 Fill in the blank with the most appropriate option.
No, I've _____ my mind about it; if I'm Mabel, I'll stay down here!

- Ans ☒ 1. made up
☒ 2. let on
☒ 3. make up
☒ 4. decided

Question ID : 630680385341
Option 1 ID : 6306801502215
Option 2 ID : 6306801502216
Option 3 ID : 6306801502217
Option 4 ID : 6306801502214
Status : Answered
Chosen Option : 1

Q.6 Select the most appropriate missing sentence to complete the following paragraph:
After a long day of hiking, the explorers set up camp and gathered around the campfire. They roasted marshmallows and shared stories of their adventures. Suddenly, a _____.

- Ans**
- ✓ 1. bear emerged from the woods, causing a momentary scare.
 - ✗ 2. herd of unicorns appeared, granting wishes to everyone present.
 - ✗ 3. volcano erupted nearby, spewing hot lava and causing panic.
 - ✗ 4. rainbow formed overhead, creating a magical ambiance.

Question ID : 630680385244

Option 1 ID : 6306801501863

Option 2 ID : 6306801501862

Option 3 ID : 6306801501865

Option 4 ID : 6306801501864

Status : Answered

Chosen Option : 1

Q.7 Choose the word that is the antonym of the bracketed word in the sentence:
Despite facing numerous obstacles, she remained (undeterred) and determined to achieve her goals.

- Ans**
- ✗ 1. Certain
 - ✓ 2. Doubtful
 - ✗ 3. Resolute
 - ✗ 4. Hinder

Question ID : 630680385528

Option 1 ID : 6306801502909

Option 2 ID : 6306801502908

Option 3 ID : 6306801502907

Option 4 ID : 6306801502906

Status : Answered

Chosen Option : 2

Q.8 Choose the negative question tag from the options given below:
Which of the following planets is closest to the Sun?

- Ans**
- ✗ 1. Mercury, is it?
 - ✗ 2. Mercury, doesn't it?
 - ✗ 3. Mercury, does it?
 - ✓ 4. Mercury, isn't it?

Question ID : 630680385688

Option 1 ID : 6306801503496

Option 2 ID : 6306801503495

Option 3 ID : 6306801503497

Option 4 ID : 6306801503494

Status : Answered

Chosen Option : 4

Q.9 Select the most appropriate word for the given phrase.
The killing of a king.

- Ans**
- ☒ 1. Patricide
 - ☒ 2. Genocide
 - ☒ 3. Regicide
 - ☒ 4. Homicide

Question ID : 630680385622

Option 1 ID : 6306801503248

Option 2 ID : 6306801503249

Option 3 ID : 6306801503247

Option 4 ID : 6306801503246

Status : Answered

Chosen Option : 3

Comprehension:

Read the given passage carefully and select the most appropriate answer to the questions that follow.

Now, dear Victor, I dare say you wish to be indulged in a little gossip concerning the good people of Geneva. The pretty Miss Mansfield has already received the congratulatory visits on her approaching marriage with a young Englishman, John Melbourne, Esq. Her ugly sister, Manon, married M. Duvillard, the rich banker, last autumn. Your favourite schoolfellow, Louis Manoir, has suffered several misfortunes since the departure of Clerval from Geneva. But he has already recovered his spirits, and is reported to be on the point of marrying a very lively, pretty Frenchwoman, Madame Tavernier. She is a widow, and much older than Manoir, but she is very much admired and a favourite with everybody. I have written myself into better spirits, dear cousin; but my anxiety returns upon me as I conclude. Write, dearest Victor - one line - one word will be a blessing to us. Ten thousand thanks to Henry for his kindness, his affection, and his many letters; we are sincerely grateful. Adieu! My cousin, take care of yourself, and, I entreat you, write! Your cousin Elizabeth.

SubQuestion No : 10

Q.10 From the given options, identify the suitable title for the passage.

- Ans**
- ☒ 1. The Letter
 - ☒ 2. Mr Victor
 - ☒ 3. The Cousin
 - ☒ 4. The Ugly Sister

Question ID : 630680385671

Option 1 ID : 6306801503431

Option 2 ID : 6306801503430

Option 3 ID : 6306801503433

Option 4 ID : 6306801503432

Status : Answered

Chosen Option : 1

Comprehension:

Read the given passage carefully and select the most appropriate answer to the questions that follow.

Now, dear Victor, I dare say you wish to be indulged in a little gossip concerning the good people of Geneva. The pretty Miss Mansfield has already received the congratulatory visits on her approaching marriage with a young Englishman, John Melbourne, Esq. Her ugly sister, Manon, married M. Duillard, the rich banker, last autumn. Your favourite schoolfellow, Louis Manoir, has suffered several misfortunes since the departure of Clerval from Geneva. But he has already recovered his spirits, and is reported to be on the point of marrying a very lively, pretty Frenchwoman, Madame Tavernier. She is a widow, and much older than Manoir, but she is very much admired and a favourite with everybody. I have written myself into better spirits, dear cousin; but my anxiety returns upon me as I conclude. Write, dearest Victor - one line - one word will be a blessing to us. Ten thousand thanks to Henry for his kindness, his affection, and his many letters; we are sincerely grateful. Adieu! My cousin, take care of yourself, and, I entreat you, write!Your cousin Elizabeth.

SubQuestion No : 11

Q.11 Select the options the most appropriate meaning of the bracketed word given in the sentence below.

'...I dare say you wish to be (indulged) in a little gossip...'

- Ans

✓ 1. entertained

✗ 2. materialised

✗ 3. civilized

✗ 4. reasonable

Question ID : 630680385674

Option 1 ID : 6306801503444

Option 2 ID : 6306801503443

Option 3 ID : 6306801503442

Option 4 ID : 6306801503445

Status : Answered

Chosen Option : 1

Comprehension:

Read the given passage carefully and select the most appropriate answer to the questions that follow.

Now, dear Victor, I dare say you wish to be indulged in a little gossip concerning the good people of Geneva. The pretty Miss Mansfield has already received the congratulatory visits on her approaching marriage with a young Englishman, John Melbourne, Esq. Her ugly sister, Manon, married M. Duillard, the rich banker, last autumn. Your favourite schoolfellow, Louis Manoir, has suffered several misfortunes since the departure of Clerval from Geneva. But he has already recovered his spirits, and is reported to be on the point of marrying a very lively, pretty Frenchwoman, Madame Tavernier. She is a widow, and much older than Manoir, but she is very much admired and a favourite with everybody. I have written myself into better spirits, dear cousin; but my anxiety returns upon me as I conclude. Write, dearest Victor - one line - one word will be a blessing to us. Ten thousand thanks to Henry for his kindness, his affection, and his many letters; we are sincerely grateful. Adieu! My cousin, take care of yourself, and, I entreat you, write!Your cousin Elizabeth.

SubQuestion No : 12

Q.12 Identify the correct inference that can be drawn from the passage.

- Ans

✗ 1. Victor has left his house and Elizabeth has written to him ask about his whereabouts.

✗ 2. Elizabeth is Victor's mother and has written to him to know of his whereabouts.

✗ 3. Elizabeth is a misinformed woman and she likes to talk ill of people.

✓ 4. Elizabeth has written a letter to Victor, as she is concerned about him and also gossips about the people of Geneva.

Question ID : 630680385673

Option 1 ID : 6306801503440

Option 2 ID : 6306801503438

Option 3 ID : 6306801503441

Option 4 ID : 6306801503439

Status : Answered

Chosen Option : 4

Comprehension:

Read the given passage carefully and select the most appropriate answer to the questions that follow.

Now, dear Victor, I dare say you wish to be indulged in a little gossip concerning the good people of Geneva. The pretty Miss Mansfield has already received the congratulatory visits on her approaching marriage with a young Englishman, John Melbourne, Esq. Her ugly sister, Manon, married M. Duvillard, the rich banker, last autumn. Your favourite schoolfellow, Louis Manoir, has suffered several misfortunes since the departure of Clerval from Geneva. But he has already recovered his spirits, and is reported to be on the point of marrying a very lively, pretty Frenchwoman, Madame Tavernier. She is a widow, and much older than Manoir, but she is very much admired and a favourite with everybody. I have written myself into better spirits, dear cousin; but my anxiety returns upon me as I conclude. Write, dearest Victor - one line - one word will be a blessing to us. Ten thousand thanks to Henry for his kindness, his affection, and his many letters; we are sincerely grateful. Adieu! My cousin, take care of yourself, and, I entreat you, write! Your cousin Elizabeth.

SubQuestion No : 13

Q.13 Which of the following statements is not true with respect to the passage.

- Ans ☒ 1. Manoir is older than Madame Tavernier.
- ☐ 2. Miss Mansfield is getting married to John Melbourne.
- ☐ 3. Louis Manoir is Victor's schoolfellow.
- ☐ 4. Madame Tavernier is a pretty French woman who is a widow.

Question ID : 630680385672

Option 1 ID : 6306801503436

Option 2 ID : 6306801503434

Option 3 ID : 6306801503437

Option 4 ID : 6306801503435

Status : Answered

Chosen Option : 1

Q.14 Select the word from the options which is the same in meaning to the bracketed word given in the sentence below.

All the excitement of her (rabble) rousing had been suitably extinguished.

- Ans ☐ 1. solitude
- ☒ 2. commonality
- ☐ 3. credulity
- ☐ 4. isolated

Question ID : 630680385421

Option 1 ID : 6306801502514

Option 2 ID : 6306801502517

Option 3 ID : 6306801502516

Option 4 ID : 6306801502515

Status : Not Answered

Chosen Option : --

Q.15 Determine the meaning of the underlined idiom from the statement given below.

During the team meeting, the manager asked if anyone had any feedback on the new project proposal. Instead of giving a direct answer, Sarah started to beat around the bush.

- Ans ☐ 1. To speak clearly and concisely
- ☒ 2. To avoid answering a question directly
- ☐ 3. To share new ideas and suggestions
- ☐ 4. To give constructive feedback

Question ID : 630680385519

Option 1 ID : 6306801502872

Option 2 ID : 6306801502870

Option 3 ID : 6306801502873

Option 4 ID : 6306801502871

Status : Answered

Q.16 From the options select the most suitable proverb for the sentence given below.
There is no room for rest. After a victory get down to work.

- Ans ☒ 1. A jack of all trades is master of none.
☒ 2. After victory, tighten your helmet chord.
☒ 3. A good listener is a silent flatterer.
☒ 4. A happy heart is better than a full purse.

Question ID : 630680385403
Option 1 ID : 6306801502445
Option 2 ID : 6306801502442
Option 3 ID : 6306801502443
Option 4 ID : 6306801502444
Status : Answered
Chosen Option : 1

Comprehension:

Based on the following cloze passage answer the question given below:

The old mansion on the hill had a mysterious and eerie (1) _____ surrounding it. Many locals believed it to be haunted and avoided going near it, especially after (2) _____. The creaky doors and windows would sometimes open and close on their own, adding to the (3) _____ atmosphere.

SubQuestion No : 17

Q.17 Fill in the blank (2) with the appropriate word from the options below:

- Ans ☒ 1. summers
☒ 2. sunrise
☒ 3. midnight
☒ 4. noon

Question ID : 630680385495
Option 1 ID : 6306801502775
Option 2 ID : 6306801502774
Option 3 ID : 6306801502776
Option 4 ID : 6306801502777
Status : Answered
Chosen Option : 3

Comprehension:

Based on the following cloze passage answer the question given below:

The old mansion on the hill had a mysterious and eerie (1) _____ surrounding it. Many locals believed it to be haunted and avoided going near it, especially after (2) _____. The creaky doors and windows would sometimes open and close on their own, adding to the (3) _____ atmosphere.

SubQuestion No : 18

Q.18 Fill in the blank (1) with the appropriate word from the options below:

- Ans ☒ 1. serenity
☒ 2. ambiance
☒ 3. tranquillity
☒ 4. charm

Question ID : 630680385494
Option 1 ID : 6306801502771
Option 2 ID : 6306801502770
Option 3 ID : 6306801502773
Option 4 ID : 6306801502772
Status : Answered
Chosen Option : 1

Comprehension:

Based on the following cloze passage answer the question given below:

The old mansion on the hill had a mysterious and eerie (1) _____ surrounding it. Many locals believed it to be haunted and avoided going near it, especially after (2) _____. The creaky doors and windows would sometimes open and close on their own, adding to the (3) _____ atmosphere.

SubQuestion No : 19

Q.19 Fill in the blank (3) with the appropriate word from the options below:

- Ans ☒ 1. enchanting
☒ 2. spooky
☒ 3. cheerful
☒ 4. jovial

Question ID : 630680385496
 Option 1 ID : 6306801502781
 Option 2 ID : 6306801502779
 Option 3 ID : 6306801502780
 Option 4 ID : 6306801502778
 Status : Answered
 Chosen Option : 1

**Q.20 Identify the word that is the opposite in meaning to the given word.
 Tenacious**

- Ans ☒ 1. Resilient
☒ 2. Irresolute
☒ 3. Relentless
☒ 4. Persistent

Question ID : 630680385523
 Option 1 ID : 6306801502887
 Option 2 ID : 6306801502889
 Option 3 ID : 6306801502888
 Option 4 ID : 6306801502886
 Status : Answered
 Chosen Option : 2

Q.21 Fill in the blank:
 The concert was sold out, but luckily I managed to get a ticket _____ at the last minute.

- Ans ☒ 1. regularly
☒ 2. separately
☒ 3. unexpectedly
☒ 4. scarcely

Question ID : 630680385476
 Option 1 ID : 6306801502721
 Option 2 ID : 6306801502718
 Option 3 ID : 6306801502720
 Option 4 ID : 6306801502719
 Status : Answered
 Chosen Option : 3

Q.22 Select the missing sentence that would logically fill in the blank:

Photosynthesis is a fundamental process that occurs in green plants and some microorganisms. It is the process by which plants convert light energy into chemical energy, producing glucose and oxygen from carbon dioxide and water. _____. The glucose thus produced serves as a source of energy for the plant, while the released oxygen is essential for the survival of many organisms. This process also helps in regulating the Earth's atmospheric composition.

- Ans ☒ 1. During photosynthesis, chlorophyll produces glucose by absorbing energy from blue- and red-light waves.
- ☒ 2. Photosynthesis is more efficient in tropical climates compared to cold climates.
- ☒ 3. Within the thylakoid membranes of the chloroplast is a light-absorbing pigment called chlorophyll.
- ☒ 4. Plants with variegated leaves have a lower rate of photosynthesis.

Question ID : 630680385699

Option 1 ID : 6306801503538

Option 2 ID : 6306801503539

Option 3 ID : 6306801503540

Option 4 ID : 6306801503541

Status : Answered

Chosen Option : 1

Q.23 Select the most appropriate synonym of the given word.
Embezzle

- Ans ☒ 1. Shiny
- ☒ 2. Abstract
- ☒ 3. Merciless
- ☒ 4. Proof

Question ID : 630680385420

Option 1 ID : 6306801502511

Option 2 ID : 6306801502513

Option 3 ID : 6306801502510

Option 4 ID : 6306801502512

Status : Answered

Chosen Option : 2

Q.24 Select the most appropriate word for the given phrase.
The school or college one attends.

- Ans ☒ 1. Alchemy
- ☒ 2. Thearchy
- ☒ 3. Remiss
- ☒ 4. Alma Mater

Question ID : 630680385624

Option 1 ID : 6306801503254

Option 2 ID : 6306801503256

Option 3 ID : 6306801503255

Option 4 ID : 6306801503257

Status : Answered

Chosen Option : 4

Q.25 Select the word segment that substitutes (replaces) the bracketed word segment correctly and completes the sentence meaningfully. Select the option 'no correction required' if the sentence is correct as given.
Such were the lessons of my father, but to me (the reminding of the threat) returned.

- Ans
- ☒ 1. the memorising of the threat
 - ☒ 2. No correction required.
 - ☒ 3. the remembrance of the threat
 - ☒ 4. the remembering of the threat

Question ID : 630680385625

Option 1 ID : 6306801503258

Option 2 ID : 6306801503261

Option 3 ID : 6306801503260

Option 4 ID : 6306801503259

Status : Answered

Chosen Option : 3

