 
	DELHI DEVELOPMENT AUTHORITY RECRUITMENT CELL VIKAS SADAN, INA, NEW DELHI - 110023 (https://www.dda.gov.in)
	Advertisement No. 02/2023/Recrtt. Cell/Pers./DDA
Test Date	29/09/2023
Test Time	5:30 PM - 6:30 PM
Subject	Assistant Section Officer (ASO)

Section : General Intelligence and Reasoning

Q.1 In the given options four letter-cluster have been given, out of which three are alike in some manner, while one is different. Select the odd one from the given options.

- Ans**
- ☒ 1. HIKN
 - ☒ 2. LMOQ
 - ☒ 3. CDFI
 - ☒ 4. QRTW

Question ID : 630680386196
Option 1 ID : 6306801505494
Option 2 ID : 6306801505495
Option 3 ID : 6306801505496
Option 4 ID : 6306801505497
Status : Answered
Chosen Option : 2

Test Prime

**ALL EXAMS,
ONE SUBSCRIPTION**



70,000+
Mock Tests



**Personalised
Report Card**



**Unlimited
Re-Attempt**



600+
Exam Covered



**Previous Year
Papers**

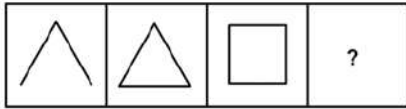


500%
Refund



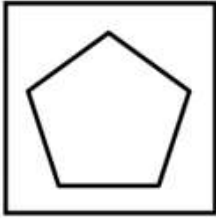
ATTEMPT FREE MOCK NOW

Q.2 Find out the next series from the option figures that follows the sequence of the question figure.

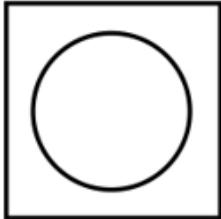


Ans

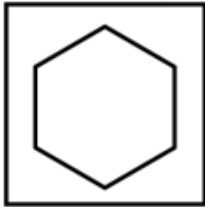
✓ 1.



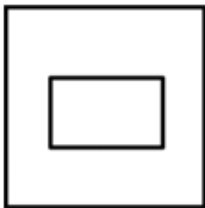
✗ 2.



✗ 3.



✗ 4.



Question ID : 630680384840

Option 1 ID : 6306801500247

Option 2 ID : 6306801500246

Option 3 ID : 6306801500248

Option 4 ID : 6306801500249

Status : Answered

Chosen Option : 1

Q.3 Which of the following letter cluster will replace the question mark (?) in the given series?

EMT, GKV, IIX, KGZ, MEB, ?

Ans

✓ 1. OCD

✗ 2. PDC

✗ 3. GUV

✗ 4. MQR

Question ID : 630680384523

Option 1 ID : 6306801498978

Option 2 ID : 6306801498980

Option 3 ID : 6306801498979

Option 4 ID : 6306801498981

Status : Answered

Chosen Option : 1

Q.4 Find out the wrong term in the given series.

LM, MK, NJ, OI, PH, QG

- Ans ☒ 1. LM
☒ 2. MK
☒ 3. OI
☒ 4. PH

Question ID : 630680384724

Option 1 ID : 6306801499782

Option 2 ID : 6306801499783

Option 3 ID : 6306801499784

Option 4 ID : 6306801499785

Status : Not Attempted and
Marked For Review

Chosen Option : --

Q.5 If 'MANGO' is coded as 41576, then what will be the code for 'BANANA' in that code language?

- Ans ☒ 1. 215511
☒ 2. 215115
☒ 3. 215151
☒ 4. 251511

Question ID : 630680384483

Option 1 ID : 6306801498819

Option 2 ID : 6306801498821

Option 3 ID : 6306801498818

Option 4 ID : 6306801498820

Status : Answered

Chosen Option : 3

Q.6 Find wrong number in the series:

1240, 1321, 1404, 1489, 1579, 1665, 1756

- Ans ☒ 1. 1756
☒ 2. 1321
☒ 3. 1489
☒ 4. 1579

Question ID : 630680384602

Option 1 ID : 6306801499297

Option 2 ID : 6306801499294

Option 3 ID : 6306801499296

Option 4 ID : 6306801499295

Status : Not Answered

Chosen Option : --

Q.7 In the following questions, a statement is given followed by three courses of action numbered I, II, and III. Identify and answer which course(s) of action logically follows.
Statement: Increasing environmental regulations incentivize waste producers to seek more cost-effective methods of disposal.
Courses of Action:
I. The government should further raise disposal costs.
II. The government should explore ways to reduce disposal costs.
III. A dedicated task force should be established to thoroughly analyze the situation.

- Ans**
- ☒ 1. Only I follows
 - ☒ 2. Only I and II follow
 - ☒ 3. Only II and III follow
 - ☒ 4. I, II, and III follows

Question ID : 630680384588
Option 1 ID : 6306801499238
Option 2 ID : 6306801499239
Option 3 ID : 6306801499240
Option 4 ID : 6306801499241
Status : Not Attempted and Marked For Review
Chosen Option : --

Q.8 In the following triad, each group of letters is related to the subsequent one following a certain logic.
AFKPU – EJOTY - JEOYT
Which of the following option follows the same logic?

- Ans**
- ☒ 1. CHMQV – FKPTY - KFPYT
 - ☒ 2. CGNRW - HMRVA - MHRVAV
 - ☒ 3. CGNRW – GQLUZ - MHRVAV
 - ☒ 4. CHMQV – GLQUZ - LGQZU

Question ID : 630680384590
Option 1 ID : 6306801499246
Option 2 ID : 6306801499247
Option 3 ID : 6306801499249
Option 4 ID : 6306801499248
Status : Answered
Chosen Option : 4

Q.9 Identify the odd letter cluster triad from the given options.

- Ans**
- ☒ 1. (AFQ, CHS, BGR)
 - ☒ 2. (HNR, JPT, IOS)
 - ☒ 3. (JWE, LYG, KZF)
 - ☒ 4. (SPT, URV, TQU)

Question ID : 630680384611
Option 1 ID : 6306801499332
Option 2 ID : 6306801499330
Option 3 ID : 6306801499333
Option 4 ID : 6306801499331
Status : Answered
Chosen Option : 3

Q.10 If $S * T$ means "S is husband of T",
 $S \div T$ means "S is mother of T",
 $S + T$ means "S is brother of T", and
 $S - T$ means "S is father of T",
 which of the following represent F is grandfather of H?

- Ans ☒ 1. $F \div A - H + B$
☒ 2. $F - B * A \div H$
☒ 3. $F + A - H * B$
☒ 4. $F \times A + H * B$

Question ID : 630680384774

Option 1 ID : 6306801499983

Option 2 ID : 6306801499985

Option 3 ID : 6306801499982

Option 4 ID : 6306801499984

Status : Not Attempted and
Marked For Review

Chosen Option : --

Q.11 Which of the following numbers will replace the question mark (?) in the given series?
 48, 24, 24, 36, ?, 180

- Ans ☒ 1. 64
☒ 2. 81
☒ 3. 120
☒ 4. 72

Question ID : 630680384499

Option 1 ID : 6306801498882

Option 2 ID : 6306801498884

Option 3 ID : 6306801498883

Option 4 ID : 6306801498885

Status : Answered

Chosen Option : 4

Q.12 In the following question three statements are given, followed by two conclusions numbered I and II. Assume three given statements to be true even if they seem to be at variance with commonly known facts and then decide which of the given conclusion logically follows from the two statements disregarding commonly known facts.

Statements :

No dog is cat.

No cat is rat.

Some dogs are rats.

Conclusions :

I. No rat is dog.

II. No rat is cat.

- Ans**
- ☒ 1. Only I follows
 - ☒ 2. Only II follows
 - ☒ 3. Both I and II follows
 - ☒ 4. Neither conclusion I nor II follows

Question ID : 630680384629

Option 1 ID : 6306801499402

Option 2 ID : 6306801499403

Option 3 ID : 6306801499404

Option 4 ID : 6306801499405

Status : Answered

Chosen Option : 2

Q.13 In a class of 60 students, where boys are twice in number as compared to girls, Ravina ranked 16th from the top. If there are 9 boys above Ravina, how many girls are after her in the rank?

- Ans**
- ☒ 1. 14
 - ☒ 2. 13
 - ☒ 3. 12
 - ☒ 4. 10

Question ID : 630680384815

Option 1 ID : 6306801500146

Option 2 ID : 6306801500147

Option 3 ID : 6306801500148

Option 4 ID : 6306801500149

Status : Answered

Chosen Option : 2

Q.14 Select the option that is related to the third number-letter cluster in the same way as the second number-letter cluster is related to the first number-letter cluster.

RED : QSD FCE :: BLUE : ?

- Ans**
- ☒ 1. CMVFAKTD
 - ☒ 2. ACKMTVDF
 - ☒ 3. HDJSKAO
 - ☒ 4. FFFJDJKS

Question ID : 630680384693

Option 1 ID : 6306801499659

Option 2 ID : 6306801499658

Option 3 ID : 6306801499660

Option 4 ID : 6306801499661

Status : Answered

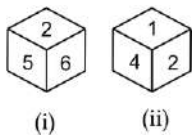
Chosen Option : 2

Q.15 In a certain code language, if NURSERY is called SCHOOL, SCHOOL is called COLLEGE, COLLEGE is called POOL, POOL is called PLAYGROUND, and PLAYGROUND is called CAFETERIA then where do the kids swim?

- Ans ☒ 1. **PLAYGROUND**
- ☐ 2. **CAFETERIA**
- ☐ 3. **POOL**
- ☐ 4. **COLLEGE**

Question ID : **630680384676**
 Option 1 ID : **6306801499593**
 Option 2 ID : **6306801499592**
 Option 3 ID : **6306801499591**
 Option 4 ID : **6306801499590**
 Status : **Answered**
 Chosen Option : **1**

Q.16 Two positions of a dice are shown below. Which number will appear on the face opposite to the face with the number 6?



- Ans ☐ 1. **1**
- ☐ 2. **2**
- ☐ 3. **5**
- ☒ 4. **4**

Question ID : **630680386220**
 Option 1 ID : **6306801505590**
 Option 2 ID : **6306801505593**
 Option 3 ID : **6306801505592**
 Option 4 ID : **6306801505591**
 Status : **Answered**
 Chosen Option : **1**

Q.17 If the position of first and the third digits within each number are interchanged, which of the following will be the third digit of the fourth highest number?
 1274 5678 2468 8073 1357 9876

- Ans ☐ 1. **5**
- ☐ 2. **9**
- ☒ 3. **8**
- ☐ 4. **2**

Question ID : **630680384757**
 Option 1 ID : **6306801499916**
 Option 2 ID : **6306801499915**
 Option 3 ID : **6306801499914**
 Option 4 ID : **6306801499917**
 Status : **Not Attempted and Marked For Review**
 Chosen Option : **--**

Q.18 Select the odd number in the following number series:

2.99, 2.92, 2.78, 2.53, 2.29, 1.94

Ans ☒ 1. 2.53

☐ 2. 2.78

☐ 3. 1.94

☐ 4. 2.29

Question ID : 630680384463

Option 1 ID : 6306801498740

Option 2 ID : 6306801498738

Option 3 ID : 6306801498739

Option 4 ID : 6306801498741

Status : Not Attempted and
Marked For Review

Chosen Option : --

Q.19 How many symbols are there in the given series that are preceded by a number and immediately followed by a symbol?

1 & 8 * 2 # 4 @ 9 % ^ 7 ! 5 2 +

Ans ☐ 1. 3

☐ 2. 0

☐ 3. 2

☒ 4. 1

Question ID : 630680384555

Option 1 ID : 6306801499107

Option 2 ID : 6306801499108

Option 3 ID : 6306801499106

Option 4 ID : 6306801499109

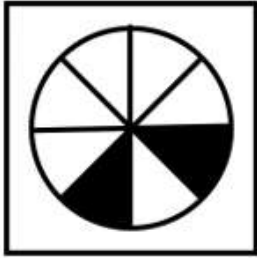
Status : Answered

Chosen Option : 4

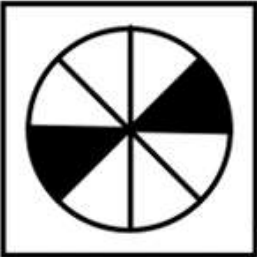
Q.20 Choose the figure which is different from the rest.

Ans


✓ 1.



✗ 2.



✗ 3.



✗ 4.



Question ID : 630680384745

Option 1 ID : 6306801499868

Option 2 ID : 6306801499866

Option 3 ID : 6306801499867

Option 4 ID : 6306801499869

Status : Answered

Chosen Option : 1

Q.21 Six friends X, Y, Z, A, B, and C are sitting around a circular table facing each other. Z is exactly in between C and Y. A is exactly in between X and B. B sits to the immediate right of C. Who sits to the immediate left of Y?

Ans

✗ 1. A

✗ 2. Z

✗ 3. C

✓ 4. X

Question ID : 630680384516

Option 1 ID : 6306801498951

Option 2 ID : 6306801498950

Option 3 ID : 6306801498953

Option 4 ID : 6306801498952

Status : Answered

Chosen Option : 4

Q.22 Find the wrong number in the series:

4250, 2125, 680, 272, 108.8

- Ans
- ☒ 1. 680
 - ☒ 2. 272
 - ☒ 3. 108.8
 - ☒ 4. 2125

Question ID : 630680384767

Option 1 ID : 6306801499954

Option 2 ID : 6306801499956

Option 3 ID : 6306801499957

Option 4 ID : 6306801499955

Status : Not Attempted and
Marked For Review

Chosen Option : --

Q.23 If Shreya is the daughter of Babli, Babli is the wife of Santosh, Santosh is the son of Hari, and Hari is the father of Shailja's father, then how is Shreya related to Shailja?

- Ans
- ☒ 1. Sister
 - ☒ 2. Mother
 - ☒ 3. Father's sister
 - ☒ 4. Father's mother

Question ID : 630680384668

Option 1 ID : 6306801499561

Option 2 ID : 6306801499559

Option 3 ID : 6306801499560

Option 4 ID : 6306801499558

Status : Answered

Chosen Option : 1

Q.24 How many symbols are there in the given series that are immediately preceded by a number and immediately followed by a symbol?

@ 6 * 7 # 4 \$ 1 % 9 & 3 % * 5 @ 8 2

- Ans
- ☒ 1. 3
 - ☒ 2. 2
 - ☒ 3. 1
 - ☒ 4. 0

Question ID : 630680384454

Option 1 ID : 6306801498703

Option 2 ID : 6306801498702

Option 3 ID : 6306801498704

Option 4 ID : 6306801498705

Status : Answered

Chosen Option : 3

Q.25 In the following question three statements are given, followed by two conclusions numbered I and II. Assume three given statements to be true even if they seem to be at variance with commonly known facts and then decide which of the given conclusion logically follows from the two statements disregarding commonly known facts.

Statements:
Some days are nights.
Some nights are noons.
All noons are evenings.

Conclusions:
I. Some evenings are days.
II. Some evenings are nights.

- Ans** ☒ 1. If conclusion I follow
☒ 2. If conclusion II follows
☒ 3. If neither conclusion I nor II follows
☒ 4. If both conclusion I and II follows

Question ID : 630680384832
Option 1 ID : 6306801500214
Option 2 ID : 6306801500215
Option 3 ID : 6306801500217
Option 4 ID : 6306801500216
Status : Answered
Chosen Option : 2

Section : General Awareness

Q.1 Which scheme encourages leadership development in Women belonging to Minority community?

- Ans** ☒ 1. Naya Savera
☒ 2. Seekho Aur Kamao
☒ 3. Nai Roshni
☒ 4. Nai Udaan

Question ID : 630680386406
Option 1 ID : 6306801506336
Option 2 ID : 6306801506335
Option 3 ID : 6306801506337
Option 4 ID : 6306801506334
Status : Not Answered
Chosen Option : --

Q.2 Which of the following schemes is initiated by the Government of India to facilitate investment, foster innovation, enhance skill development, protect intellectual property & build best in class manufacturing infrastructure?

- Ans** ☒ 1. Pradhan Mantri Mudra Yojana
☒ 2. Make In India
☒ 3. Pradhan Mantri Jan Dhan Yojana
☒ 4. Startup India

Question ID : 630680384093
Option 1 ID : 6306801497262
Option 2 ID : 6306801497264
Option 3 ID : 6306801497263
Option 4 ID : 6306801497265
Status : Answered
Chosen Option : 2

Q.3 When was the first war of Indian independence fought?

Ans ☒ 1. 1857

☐ 2. 1888

☐ 3. 1867

☐ 4. 1887

Question ID : 630680384327

Option 1 ID : 6306801498195

Option 2 ID : 6306801498194

Option 3 ID : 6306801498196

Option 4 ID : 6306801498197

Status : Answered

Chosen Option : 1

Q.4 Which among the following is the most populous state of India as per 2011 Census?

Ans ☐ 1. Gujrat

☐ 2. Uttarakhand

☒ 3. Uttar Pradesh

☐ 4. Kerala

Question ID : 630680384311

Option 1 ID : 6306801498130

Option 2 ID : 6306801498131

Option 3 ID : 6306801498132

Option 4 ID : 6306801498133

Status : Answered

Chosen Option : 3

Q.5 Who has won Major Dhyan Chand Khel Ratna for outstanding achievements in Table Tennis during National Sports Awards 2022?

Ans ☐ 1. Amit Panghal

☐ 2. Lakshya Sen

☐ 3. Avinash Sable

☒ 4. Sharath Kamal

Question ID : 630680386407

Option 1 ID : 6306801506340

Option 2 ID : 6306801506339

Option 3 ID : 6306801506341

Option 4 ID : 6306801506338

Status : Not Answered

Chosen Option : --

Q.6 The "Luni River" is a notable example of an inland drainage system. In which state does it mostly flow?

Ans ☐ 1. Haryana

☒ 2. Rajasthan

☐ 3. Gujarat

☐ 4. Punjab

Question ID : 630680384204

Option 1 ID : 6306801497707

Option 2 ID : 6306801497706

Option 3 ID : 6306801497708

Option 4 ID : 6306801497709

Status : Not Answered

Chosen Option : --

Q.7 When is National Unity Day celebrated in India?

- Ans ☒ 1. 31st October
- ☒ 2. 11th November
- ☒ 3. 2nd October
- ☒ 4. 31st January

Question ID : 630680384277
 Option 1 ID : 6306801497995
 Option 2 ID : 6306801497996
 Option 3 ID : 6306801497997
 Option 4 ID : 6306801497994
 Status : Not Answered
 Chosen Option : --

Q.8 Which language is one of the official languages of the Indian government?

- Ans ☒ 1. Hindi and English
- ☒ 2. Gujarati
- ☒ 3. Marathi
- ☒ 4. Punjabi

Question ID : 630680386433
 Option 1 ID : 6306801506442
 Option 2 ID : 6306801506443
 Option 3 ID : 6306801506444
 Option 4 ID : 6306801506445
 Status : Answered
 Chosen Option : 1

Q.9 "Baisakhi," also known as Vaisakhi, is a religious festival celebrated by Sikhs. It also marks the New Year in which calendar system?

- Ans ☒ 1. Nanakshahi
- ☒ 2. Vikram Samvat
- ☒ 3. Gregorian
- ☒ 4. Hijri

Question ID : 630680384170
 Option 1 ID : 6306801497571
 Option 2 ID : 6306801497572
 Option 3 ID : 6306801497573
 Option 4 ID : 6306801497570
 Status : Answered
 Chosen Option : 1

Q.10 According to the 2022 Corruption Perceptions Index reported by Transparency International, what is the rank of India in Corruption?

- Ans ☒ 1. 89
- ☒ 2. 85
- ☒ 3. 65
- ☒ 4. 93

Question ID : 630680386399
 Option 1 ID : 6306801506307
 Option 2 ID : 6306801506306
 Option 3 ID : 6306801506309
 Option 4 ID : 6306801506308
 Status : Not Answered
 Chosen Option : --

Q.11 Who was the last ruler of the Delhi Sultanate before the arrival of the Mughals?

- Ans
- ☒ 1. Alauddin Alam Shah
 - ☒ 2. Bahlul Lodi
 - ☒ 3. Ibrahim Lodi
 - ☒ 4. Sikandar Lodi

Question ID : 630680384220
 Option 1 ID : 6306801497771
 Option 2 ID : 6306801497770
 Option 3 ID : 6306801497772
 Option 4 ID : 6306801497773
 Status : Answered
 Chosen Option : 3

Q.12 Which of the following is the AI based framework developed by the Researchers of IIT Guwahati?

- Ans
- ☒ 1. Osteo HRNet
 - ☒ 2. XGBoost
 - ☒ 3. OpenCV
 - ☒ 4. Scikit learn

Question ID : 630680384243
 Option 1 ID : 6306801497860
 Option 2 ID : 6306801497861
 Option 3 ID : 6306801497859
 Option 4 ID : 6306801497858
 Status : Not Answered
 Chosen Option : --

Q.13 Who among the following cricketers of India wrote the book "Believe"?

- Ans
- ☒ 1. Virat Kohli
 - ☒ 2. Sachin Tendulkar
 - ☒ 3. Suresh Raina
 - ☒ 4. Saurav Ganguly

Question ID : 630680384261
 Option 1 ID : 6306801497930
 Option 2 ID : 6306801497933
 Option 3 ID : 6306801497931
 Option 4 ID : 6306801497932
 Status : Answered
 Chosen Option : 3

Q.14 When did the word Sustainable Development come into existence?

- Ans
- ☒ 1. 1965
 - ☒ 2. 1980
 - ☒ 3. 1987
 - ☒ 4. 1957

Question ID : 630680384087
 Option 1 ID : 6306801497240
 Option 2 ID : 6306801497241
 Option 3 ID : 6306801497239
 Option 4 ID : 6306801497238
 Status : Not Answered
 Chosen Option : --

Q.15 "The Shadow Lines" is a novel that weaves together the personal and historical events in India and Bangladesh. Who is the author of this book?

- Ans ☒ 1. Amitav Ghosh
☒ 2. Kiran Desai
☒ 3. Vikram Seth
☒ 4. Jhumpa Lahiri

Question ID : 630680384165
 Option 1 ID : 6306801497551
 Option 2 ID : 6306801497552
 Option 3 ID : 6306801497553
 Option 4 ID : 6306801497550
 Status : Not Answered
 Chosen Option : --

Q.16 Which organization was founded by Sir Syed Ahmed Khan to promote education and uplift the Muslim community in India?

- Ans ☒ 1. Indian National Congress
☒ 2. Theosophical Society
☒ 3. Arya Samaj
☒ 4. All India Muhammadan Educational Conference

Question ID : 630680384444
 Option 1 ID : 6306801498662
 Option 2 ID : 6306801498664
 Option 3 ID : 6306801498663
 Option 4 ID : 6306801498665
 Status : Answered
 Chosen Option : 4

Q.17 Which of the following is the oldest and traditional form of exchange?

- Ans ☒ 1. Market Exchange
☒ 2. Biconomy Exchange
☒ 3. Money Exchange
☒ 4. Barter Exchange

Question ID : 630680384086
 Option 1 ID : 6306801497236
 Option 2 ID : 6306801497237
 Option 3 ID : 6306801497234
 Option 4 ID : 6306801497235
 Status : Answered
 Chosen Option : 4

Q.18 The "Chola Dynasty" reached its zenith during the reign of which ruler, who was known for his naval expeditions and extensive trade with Southeast Asia?

- Ans ☒ 1. Rajaraja Narendra
☒ 2. Kulottunga Chola I
☒ 3. Rajendra Chola I
☒ 4. Raja Raja Chola I

Question ID : 630680384215
 Option 1 ID : 6306801497752
 Option 2 ID : 6306801497751
 Option 3 ID : 6306801497753
 Option 4 ID : 6306801497750
 Status : Answered

Q.19 Which of the following countries has the highest Human Development Index (HDI) in the world?

- Ans ☒ 1. India
☒ 2. Australia
☒ 3. China
☒ 4. Switzerland

Question ID : 630680384098
 Option 1 ID : 6306801497284
 Option 2 ID : 6306801497283
 Option 3 ID : 6306801497282
 Option 4 ID : 6306801497285
 Status : Not Answered
 Chosen Option : --

Q.20 "Sardar Vallabhbhai Patel," popularly known as the "Iron Man of India," played a key role in the integration of princely states into the Indian Union after independence. He served as the first Deputy Prime Minister and the first Minister of which important ministry in independent India?

- Ans ☒ 1. Ministry of Home Affairs
☒ 2. Ministry of External Affairs
☒ 3. Ministry of Defense
☒ 4. Ministry of Finance

Question ID : 630680384233
 Option 1 ID : 6306801497825
 Option 2 ID : 6306801497823
 Option 3 ID : 6306801497824
 Option 4 ID : 6306801497822
 Status : Answered
 Chosen Option : 1

Q.21 On which date Jammu and Kashmir ceased to be state of India and became Union Territory?

- Ans ☒ 1. October 31, 2020
☒ 2. October 31, 2019
☒ 3. October 31, 2016
☒ 4. October 31, 2018

Question ID : 630680386468
 Option 1 ID : 6306801506584
 Option 2 ID : 6306801506585
 Option 3 ID : 6306801506583
 Option 4 ID : 6306801506582
 Status : Answered
 Chosen Option : 2

Q.22 In which of the following cities is the "Elephant Festival" celebrated in India?

- Ans ☒ 1. Jaipur
☒ 2. Pune
☒ 3. Vishakhapatnam
☒ 4. Surat

Question ID : 630680384061
 Option 1 ID : 6306801497136
 Option 2 ID : 6306801497137
 Option 3 ID : 6306801497134
 Option 4 ID : 6306801497135
 Status : Not Attempted and
 Marked For Review
 Chosen Option : --

Q.23 Which of the following is not a technological innovation?

- Ans ☒ 1. Cloud Computing
☒ 2. Artificial Intelligence
☒ 3. Metaverse
☒ 4. Management Science

Question ID : 630680386393
 Option 1 ID : 6306801506284
 Option 2 ID : 6306801506282
 Option 3 ID : 6306801506283
 Option 4 ID : 6306801506285
 Status : Answered
 Chosen Option : 4

Q.24 The "Sundarbans Mangrove Forests," known for their unique ecosystem, are located in which Indian state?

- Ans ☒ 1. Kerala
☒ 2. West Bengal
☒ 3. Odisha
☒ 4. Andhra Pradesh

Question ID : 630680384201
 Option 1 ID : 6306801497697
 Option 2 ID : 6306801497696
 Option 3 ID : 6306801497694
 Option 4 ID : 6306801497695
 Status : Answered
 Chosen Option : 2

Q.25 Which of the following measures represents the level of economic activity in a country, focusing on the total market value of all final goods and services produced within a specific time period?

- Ans**
- ☒ 1. Unemployment Rate
 - ☒ 2. Gross Domestic Product (GDP)
 - ☒ 3. Consumer Price Index (CPI)
 - ☒ 4. Inflation Rate

Question ID : 630680386435
 Option 1 ID : 6306801506452
 Option 2 ID : 6306801506450
 Option 3 ID : 6306801506451
 Option 4 ID : 6306801506453
 Status : Answered
 Chosen Option : 2

Section : Quantitative Aptitude

Q.1 If a man were to sell his clock for ₹1250, he would lose 20%. What price must he sell to gain 24%?

- Ans**
- ☒ 1. ₹1856.56
 - ☒ 2. ₹1937.5
 - ☒ 3. ₹1745.4
 - ☒ 4. ₹1948.5

Question ID : 630680385837
 Option 1 ID : 6306801504067
 Option 2 ID : 6306801504066
 Option 3 ID : 6306801504068
 Option 4 ID : 6306801504069
 Status : Answered
 Chosen Option : 2

Q.2 Mohit and Ramesh entered a partnership by investing ₹5000 each. After 4 months Mohit doubles his investment. Find the ratio of Profit shared by them after a year.

- Ans**
- ☒ 1. 5 : 3
 - ☒ 2. 2 : 3
 - ☒ 3. 4 : 3
 - ☒ 4. 1 : 2

Question ID : 630680385195
 Option 1 ID : 6306801501668
 Option 2 ID : 6306801501667
 Option 3 ID : 6306801501666
 Option 4 ID : 6306801501669
 Status : Answered
 Chosen Option : 1

Q.3 Vikram is six times as efficient as Vivek. Vikram takes 25 days less than Vivek to complete a work. If they work together, in how many days, will the work be completed?

Ans

✗ 1. $\frac{11}{25}$ days

✗ 2. $\frac{7}{30}$ days

✓ 3. $\frac{30}{7}$ days

✗ 4. $\frac{17}{19}$ days

Question ID : 630680385853

Option 1 ID : 6306801504132

Option 2 ID : 6306801504131

Option 3 ID : 6306801504130

Option 4 ID : 6306801504133

Status : Answered

Chosen Option : 3

Q.4 If O be the circumcentre of a triangle ABC and $\angle BOC = 110^\circ$, $\angle OAC = 25^\circ$, then the measure of $\angle ACB$ is _____.

Ans

✗ 1. 90°

✓ 2. 60°

✗ 3. 30°

✗ 4. 45°

Question ID : 630680385013

Option 1 ID : 6306801500941

Option 2 ID : 6306801500940

Option 3 ID : 6306801500938

Option 4 ID : 6306801500939

Status : Answered

Chosen Option : 2

Q.5 Find the volume of a hollow cylinder whose outer radius is 18 cm and inner radius is 12 cm and height is 14 cm.

Ans

✗ 1. 8140 cm^3

✗ 2. 6400 cm^3

✓ 3. 7920 cm^3

✗ 4. 8960 cm^3

Question ID : 630680385150

Option 1 ID : 6306801501489

Option 2 ID : 6306801501486

Option 3 ID : 6306801501487

Option 4 ID : 6306801501488

Status : Answered

Chosen Option : 3

Q.6 Two similar triangles XYZ and DEF having perimeter 144 cm and 72 cm respectively. If the length of YZ is 24 cm and the length of EF is x cm, find the value of x in cm.

- Ans**
- ✗ 1. 11
- ✓ 2. 12
- ✗ 3. 9
- ✗ 4. 10

Question ID : 630680385019
Option 1 ID : 6306801500964
Option 2 ID : 6306801500965
Option 3 ID : 6306801500962
Option 4 ID : 6306801500963
Status : Answered
Chosen Option : 2

Q.7 Find the length of the longest rod that can be kept in a room of length 20 m, breadth 20 m and height 10 m.

- Ans**
- ✗ 1. 22 m
- ✗ 2. 25 m
- ✗ 3. 27 m
- ✓ 4. 30 m

Question ID : 630680385153
Option 1 ID : 6306801501498
Option 2 ID : 6306801501500
Option 3 ID : 6306801501499
Option 4 ID : 6306801501501
Status : Answered
Chosen Option : 4

Q.8 Table shows the classification of 80 students based on the marks obtained by them in three different subjects – Maths, Biology and English. Number of students who got 40 marks and above in English is what percentage of the number of students who got less than 60 marks in Maths?

Marks→	80 and above marks	60 and above marks	40 and above marks	20 and above marks	0 and above marks
Subjects↓					
Maths	4	12	70	75	80
Biology	3	18	40	75	80
English	7	15	35	60	80

- Ans**
- ✓ 1. 51.47%
- ✗ 2. 53.87%
- ✗ 3. 50.52%
- ✗ 4. 52.56%

Question ID : 630680385785
Option 1 ID : 6306801503858
Option 2 ID : 6306801503861
Option 3 ID : 6306801503859
Option 4 ID : 6306801503860
Status : Answered
Chosen Option : 1

Q.9 Pipe M can fill a reservoir in 12 minutes and Pipe N can fill it in 15 minutes. Pipe O can empty it in 6 minutes. Pipe M and N are kept open for 6 minutes in the beginning and pipe O is also opened at the end of 6 mins. In what time the reservoir be emptied?

- Ans**
- ☒ 1. 50 mins
 - ☒ 2. 54 mins
 - ☒ 3. 45 mins
 - ☒ 4. 58 mins

Question ID : 630680385858

Option 1 ID : 6306801504151

Option 2 ID : 6306801504152

Option 3 ID : 6306801504150

Option 4 ID : 6306801504153

Status : Not Answered

Chosen Option : --

Q.10 If the surface area of a sphere is $1296\pi \text{ cm}^2$, then find the volume of the sphere.

- Ans**
- ☒ 1. $4312\pi \text{ cm}^3$
 - ☒ 2. $6532\pi \text{ cm}^3$
 - ☒ 3. $1456\pi \text{ cm}^3$
 - ☒ 4. $7776\pi \text{ cm}^3$

Question ID : 630680385143

Option 1 ID : 6306801501459

Option 2 ID : 6306801501460

Option 3 ID : 6306801501458

Option 4 ID : 6306801501461

Status : Answered

Chosen Option : 4

Q.11 A car travels for 200 km at the speed of 40 km/hr and 300 km at the speed of 60 km/hr. Find his average speed for the complete journey.

- Ans**
- ☒ 1. 45 km/hr
 - ☒ 2. 50 km/hr
 - ☒ 3. 55 km/hr
 - ☒ 4. 48 km/hr

Question ID : 630680385130

Option 1 ID : 6306801501406

Option 2 ID : 6306801501409

Option 3 ID : 6306801501407

Option 4 ID : 6306801501408

Status : Answered

Chosen Option : 2

Q.12 Find the value of: $5.1 \div 0.3 \times 2.9 - 32.7 + 12.07$

- Ans
- ☒ 1. 24.81
 - ☒ 2. 28.67
 - ☒ 3. 19.33
 - ☒ 4. 13.46

Question ID : 630680385159
 Option 1 ID : 6306801501524
 Option 2 ID : 6306801501525
 Option 3 ID : 6306801501523
 Option 4 ID : 6306801501522
 Status : Not Attempted and Marked For Review
 Chosen Option : --

Q.13 If the length of a rectangle is increased by 15% and its breadth is increased by 12%, then find the percentage increase in its area.

- Ans
- ☒ 1. 27%
 - ☒ 2. 17.5%
 - ☒ 3. 180%
 - ☒ 4. 28.8%

Question ID : 630680385168
 Option 1 ID : 6306801501558
 Option 2 ID : 6306801501560
 Option 3 ID : 6306801501559
 Option 4 ID : 6306801501561
 Status : Answered
 Chosen Option : 4

Q.14 The ratio between the number of boys and girls in a school is 10 : 7. If 50 more girls joined the school, the ratio changes to 5 : 4. Find the initial number of boys present.

- Ans
- ☒ 1. 400
 - ☒ 2. 500
 - ☒ 3. 700
 - ☒ 4. 350

Question ID : 630680385196
 Option 1 ID : 6306801501672
 Option 2 ID : 6306801501671
 Option 3 ID : 6306801501673
 Option 4 ID : 6306801501670
 Status : Answered
 Chosen Option : 2

Q.15 Two parallel chords PQ and RS of a circle are on the same side of the centre. They are at a distance of 3 cm. The length of PQ is 10 cm and the length of RS is 4 cm. Find the diameter of the circle.

- Ans
- ☒ 1. $\sqrt{29}$ cm
 - ☒ 2. 16 cm
 - ☒ 3. $2\sqrt{29}$ cm
 - ☒ 4. 25 cm

Question ID : 630680385011
Option 1 ID : 6306801500931
Option 2 ID : 6306801500933
Option 3 ID : 6306801500930
Option 4 ID : 6306801500932

Status : Answered

Chosen Option : 3

Q.16 If $3m + 9y = 39$ and $mn = 14$, then find the value of $27m^3 + 729n^3$.

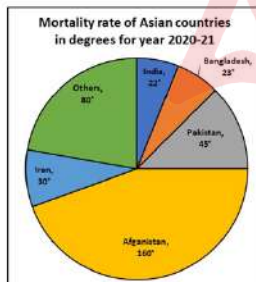
- Ans
- ☒ 1. 23153
 - ☒ 2. 11243
 - ☒ 3. 16793
 - ☒ 4. 15093

Question ID : 630680385118
Option 1 ID : 6306801501361
Option 2 ID : 6306801501359
Option 3 ID : 6306801501360
Option 4 ID : 6306801501358

Status : Not Attempted and Marked For Review

Chosen Option : --

Q.17 The following pie-chart represents the child mortality for children below five years of age in Asia in the year 2020-2021. From 2019-20 to 2020-21, child mortality rate increased by 20% in India and 8% in Asia. How many children below five years of age approximately died in 2019-20 in the rest of Asia (outside India)? Child Mortality (below five years) for Asia in 2020-2021 = 36 lakhs



- Ans
- ☒ 1. 33.9 lakhs
 - ☒ 2. 32.8 lakhs
 - ☒ 3. 30.56 lakhs
 - ☒ 4. 31.5 lakhs

Question ID : 630680385790
Option 1 ID : 6306801503880
Option 2 ID : 6306801503881
Option 3 ID : 6306801503879
Option 4 ID : 6306801503878

Status : Not Attempted and Marked For Review

Chosen Option : --

Q.18 Find the value of : $\sin^2 35^\circ + \sin^2 55^\circ = ?$

- Ans
- ☒ 1. 0
 - ☒ 2. 0.5
 - ☒ 3. 1
 - ☒ 4. 2

Question ID : 630680385046
 Option 1 ID : 6306801501070
 Option 2 ID : 6306801501072
 Option 3 ID : 6306801501071
 Option 4 ID : 6306801501073
 Status : Answered
 Chosen Option : 3

Q.19 Two successive price increases of 22% and 28% of a toy are equivalent to a single price increase of _____.

- Ans
- ☒ 1. 54.29%
 - ☒ 2. 58.72%
 - ☒ 3. 56.16%
 - ☒ 4. 58.54%

Question ID : 630680385818
 Option 1 ID : 6306801503990
 Option 2 ID : 6306801503993
 Option 3 ID : 6306801503991
 Option 4 ID : 6306801503992
 Status : Answered
 Chosen Option : 3

Q.20 If $p^2 - 3\sqrt{2}p + 1 = 0$, find the value of $\left(p^3 + \frac{1}{p^3}\right)$.

- Ans
- ☒ 1. $15\sqrt{6}$
 - ☒ 2. $45\sqrt{2}$
 - ☒ 3. $30\sqrt{3}$
 - ☒ 4. $30\sqrt{6}$

Question ID : 630680384959
 Option 1 ID : 6306801500722
 Option 2 ID : 6306801500725
 Option 3 ID : 6306801500724
 Option 4 ID : 6306801500723
 Status : Answered
 Chosen Option : 2

Q.21 Find the length of canvas 22 m wide required to build a conical camp of base radius 21 metres and height 20 metres. (Take $\pi = \frac{22}{7}$)

- Ans**
- ☒ 1. 94 m
 - ☒ 2. 72 m
 - ☒ 3. 65 m
 - ☒ 4. 87 m

Question ID : 630680384983

Option 1 ID : 6306801500821

Option 2 ID : 6306801500819

Option 3 ID : 6306801500818

Option 4 ID : 6306801500820

Status : Answered

Chosen Option : 4

Q.22 If 789X563520Y, is divisible by 11, what can be the possible value of Y-X?

- Ans**
- ☒ 1. 2
 - ☒ 2. 4
 - ☒ 3. 1
 - ☒ 4. 3

Question ID : 630680385162

Option 1 ID : 6306801501536

Option 2 ID : 6306801501535

Option 3 ID : 6306801501537

Option 4 ID : 6306801501534

Status : Answered

Chosen Option : 2

Q.23 The average weight of 14 boxes is 120 kg. If 18 new boxes are added, the new average increase by 6 kg. What will be the approximate average weight of the 18 new boxes?

- Ans**
- ☒ 1. 131 kg
 - ☒ 2. 125 kg
 - ☒ 3. 142 kg
 - ☒ 4. 137 kg

Question ID : 630680385782

Option 1 ID : 6306801503847

Option 2 ID : 6306801503846

Option 3 ID : 6306801503849

Option 4 ID : 6306801503848

Status : Not Answered

Chosen Option : --

Q.24 If $a - b = 6$ and $a^3 - b^3 = 1260$, then find the value of ab .

- Ans
- ☒ 1. 37
 - ☒ 2. 64
 - ☒ 3. 49
 - ☒ 4. 58

Question ID : 630680385116
 Option 1 ID : 6306801501351
 Option 2 ID : 6306801501353
 Option 3 ID : 6306801501350
 Option 4 ID : 6306801501352
 Status : Answered
 Chosen Option : 4

Q.25 Utkarsh sold a chair for ₹6000 earning a profit of 20%. If he wanted to earn a profit of 30%, at what price should he have sold the chair?

- Ans
- ☒ 1. ₹7200
 - ☒ 2. ₹6700
 - ☒ 3. ₹6250
 - ☒ 4. ₹6500

Question ID : 630680385187
 Option 1 ID : 6306801501635
 Option 2 ID : 6306801501636
 Option 3 ID : 6306801501634
 Option 4 ID : 6306801501637
 Status : Answered
 Chosen Option : 4

Section : English Comprehension

Q.1 Choose the correct phrasal verb to complete the sentence:
 The company had to _____ some of its employees due to financial difficulties.

- Ans
- ☒ 1. get over
 - ☒ 2. lay off
 - ☒ 3. bring up
 - ☒ 4. put off

Question ID : 630680385234
 Option 1 ID : 6306801501825
 Option 2 ID : 6306801501822
 Option 3 ID : 6306801501824
 Option 4 ID : 6306801501823
 Status : Answered
 Chosen Option : 2

Q.2 Fill in the blank with the most appropriate option.
Climate change is one of the most pressing challenges facing the world today.
_____, the consequences of climate change are far-reaching and have serious implications for the environment, human health, and economies.

- Ans**
- ☒ 1. Nevertheless
 - ☒ 2. Otherwise
 - ☒ 3. Else
 - ☒ 4. Consequently

Question ID : 630680385460

Option 1 ID : 6306801502655

Option 2 ID : 6306801502656

Option 3 ID : 6306801502654

Option 4 ID : 6306801502657

Status : Answered

Chosen Option : 4

Q.3 Identify the synonym for the word "teeming" in the following sentence
The market was teeming with a myriad of vendors selling their goods.

- Ans**
- ☒ 1. Empty
 - ☒ 2. Busy
 - ☒ 3. Noisy
 - ☒ 4. Quiet

Question ID : 630680385308

Option 1 ID : 6306801502099

Option 2 ID : 6306801502098

Option 3 ID : 6306801502101

Option 4 ID : 6306801502100

Status : Answered

Chosen Option : 3

Comprehension:

Read the passage carefully and choose the best answer to each question out of the four alternatives.

Nokia, a Finnish multinational corporation, has had a remarkable journey of innovation in the world of telecommunications. Founded in 1865 as a pulp mill, Nokia's transformation into a technology giant began in the 1960s when it ventured into the electronics industry. In the early 1980s, Nokia made its mark in the mobile phone market, producing some of the first handheld mobile devices.

Throughout the 1990s and early 2000s, Nokia dominated the mobile phone industry, earning a reputation for producing reliable and durable handsets. Its iconic "Nokia tune" became synonymous with mobile communication worldwide. Nokia's Symbian operating system was a pioneer in smartphone technology during this period. However, with the rise of smartphones like Apple's iPhone and Android devices in the late 2000s, Nokia faced stiff competition. Its reluctance to adopt touchscreen technology and a modern app ecosystem led to a decline in market share. In 2014, Nokia's Devices and Services division was acquired by Microsoft. In recent years, Nokia has reinvented itself as a leader in telecommunications infrastructure, focusing on 5G technology, Internet of Things (IoT), and network services. The company's rich history and spirit of innovation continue to drive its endeavours, making it a significant player in shaping the future of communication technology.

SubQuestion No : 4

Q.4 What can be inferred about Nokia's current position in the telecommunications industry?

- Ans**
- ☒ 1. Nokia's innovation in mobile phone technology has regained its market dominance.
 - ☒ 2. Nokia's struggle to compete with Apple's iPhone has led to its downfall.
 - ☒ 3. Nokia is no longer a relevant player in the industry.
 - ☒ 4. Nokia's focus on 5G technology and network services has helped it stay competitive.

Question ID : 630680385556

Option 1 ID : 6306801503004

Option 2 ID : 6306801503005

Option 3 ID : 6306801503002

Option 4 ID : 6306801503003

Status : Answered

Chosen Option : 4

Comprehension:

Read the passage carefully and choose the best answer to each question out of the four alternatives.

Nokia, a Finnish multinational corporation, has had a remarkable journey of innovation in the world of telecommunications. Founded in 1865 as a pulp mill, Nokia's transformation into a technology giant began in the 1960s when it ventured into the electronics industry. In the early 1980s, Nokia made its mark in the mobile phone market, producing some of the first handheld mobile devices.

Throughout the 1990s and early 2000s, Nokia dominated the mobile phone industry, earning a reputation for producing reliable and durable handsets. Its iconic "Nokia tune" became synonymous with mobile communication worldwide. Nokia's Symbian operating system was a pioneer in smartphone technology during this period. However, with the rise of smartphones like Apple's iPhone and Android devices in the late 2000s, Nokia faced stiff competition. Its reluctance to adopt touchscreen technology and a modern app ecosystem led to a decline in market share. In 2014, Nokia's Devices and Services division was acquired by Microsoft. In recent years, Nokia has reinvented itself as a leader in telecommunications infrastructure, focusing on 5G technology, Internet of Things (IoT), and network services. The company's rich history and spirit of innovation continue to drive its endeavours, making it a significant player in shaping the future of communication technology.

SubQuestion No : 5

Q.5 Which statement is supported by the information in the passage?

- Ans**
- ☒ 1. Nokia's acquisition by Microsoft happened in the early 2000s.
 - ☒ 2. Nokia's Symbian operating system was a failure in the smartphone market.
 - ☒ 3. Nokia's decline in the mobile phone market was due to its reluctance to adopt touchscreen technology.
 - ☒ 4. Nokia was founded in the 1960s as a telecommunications company.

Question ID : 630680385555

Option 1 ID : 6306801503001

Option 2 ID : 6306801502999

Option 3 ID : 6306801503000

Option 4 ID : 6306801502998

Status : Answered

Chosen Option : 3

Comprehension:

Read the passage carefully and choose the best answer to each question out of the four alternatives.

Nokia, a Finnish multinational corporation, has had a remarkable journey of innovation in the world of telecommunications. Founded in 1865 as a pulp mill, Nokia's transformation into a technology giant began in the 1960s when it ventured into the electronics industry. In the early 1980s, Nokia made its mark in the mobile phone market, producing some of the first handheld mobile devices.

Throughout the 1990s and early 2000s, Nokia dominated the mobile phone industry, earning a reputation for producing reliable and durable handsets. Its iconic "Nokia tune" became synonymous with mobile communication worldwide. Nokia's Symbian operating system was a pioneer in smartphone technology during this period. However, with the rise of smartphones like Apple's iPhone and Android devices in the late 2000s, Nokia faced stiff competition. Its reluctance to adopt touchscreen technology and a modern app ecosystem led to a decline in market share. In 2014, Nokia's Devices and Services division was acquired by Microsoft. In recent years, Nokia has reinvented itself as a leader in telecommunications infrastructure, focusing on 5G technology, Internet of Things (IoT), and network services. The company's rich history and spirit of innovation continue to drive its endeavours, making it a significant player in shaping the future of communication technology.

SubQuestion No : 6

Q.6 What is the main theme of the passage?

- Ans** ☒ 1. Nokia's current focus on 5G technology and network services
- ☒ 2. Nokia's struggles to compete with modern smartphone technology
- ☒ 3. The dominance of Nokia in the mobile phone market
- ☒ 4. Nokia's transformation from a pulp mill to a technology leader

Question ID : 630680385554

Option 1 ID : 6306801502997

Option 2 ID : 6306801502995

Option 3 ID : 6306801502994

Option 4 ID : 6306801502996

Status : Answered

Chosen Option : 4

Comprehension:

Read the passage carefully and choose the best answer to each question out of the four alternatives.

Nokia, a Finnish multinational corporation, has had a remarkable journey of innovation in the world of telecommunications. Founded in 1865 as a pulp mill, Nokia's transformation into a technology giant began in the 1960s when it ventured into the electronics industry. In the early 1980s, Nokia made its mark in the mobile phone market, producing some of the first handheld mobile devices.

Throughout the 1990s and early 2000s, Nokia dominated the mobile phone industry, earning a reputation for producing reliable and durable handsets. Its iconic "Nokia tune" became synonymous with mobile communication worldwide. Nokia's Symbian operating system was a pioneer in smartphone technology during this period. However, with the rise of smartphones like Apple's iPhone and Android devices in the late 2000s, Nokia faced stiff competition. Its reluctance to adopt touchscreen technology and a modern app ecosystem led to a decline in market share. In 2014, Nokia's Devices and Services division was acquired by Microsoft. In recent years, Nokia has reinvented itself as a leader in telecommunications infrastructure, focusing on 5G technology, Internet of Things (IoT), and network services. The company's rich history and spirit of innovation continue to drive its endeavours, making it a significant player in shaping the future of communication technology.

SubQuestion No : 7

Q.7 Which title best fits the passage?

- Ans

✗ 1. The Evolution of Nokia from Pulp Mill to Tech Giant

✗ 2. Nokia: Pioneering Telecommunications Innovations

✓ 3. Nokia: A Journey of Challenges and Triumphs

✗ 4. The Rise and Fall of Nokia in the Mobile Industry

Question ID : 630680385553

Option 1 ID : 6306801502993

Option 2 ID : 6306801502992

Option 3 ID : 6306801502990

Option 4 ID : 6306801502991

Status : Not Answered

Chosen Option : --

Q.8 Select the most appropriate word for the given group of words.
Impossible to deny or disapprove

- Ans

✓ 1. Incontrovertible

✗ 2. Frangible

✗ 3. Assailable

✗ 4. Dubitable

Question ID : 630680385511

Option 1 ID : 6306801502839

Option 2 ID : 6306801502841

Option 3 ID : 6306801502838

Option 4 ID : 6306801502840

Status : Answered

Chosen Option : 1

Q.9 Fill in the blank with the most appropriate option.
I thought then that I was "making up a story," as children say, and I _____ sat down to write it before the ideas should slip from me.

- Ans ☒ 1. eagerly
☐ 2. consistently
☐ 3. seemingly
☐ 4. roughly

Question ID : 630680385571
Option 1 ID : 6306801503065
Option 2 ID : 6306801503062
Option 3 ID : 6306801503063
Option 4 ID : 6306801503064
Status : Answered
Chosen Option : 1

Q.10 Select the most appropriate word for the given group of words.
A person who believes that the existence of God is unknowable

- Ans ☐ 1. Atheist
☒ 2. Agnostic
☐ 3. Theist
☐ 4. Sceptic

Question ID : 630680385507
Option 1 ID : 6306801502824
Option 2 ID : 6306801502823
Option 3 ID : 6306801502822
Option 4 ID : 6306801502825
Status : Answered
Chosen Option : 2

Q.11 Select the word segment that substitutes the bracketed word segment correctly and completes the sentence meaningfully.
The new employee's lack of experience was evident from his _____ in handling the complicated machinery.

- Ans ☐ 1. proficiency
☐ 2. expertise
☒ 3. ineptitude
☐ 4. competence

Question ID : 630680385508
Option 1 ID : 6306801502827
Option 2 ID : 6306801502826
Option 3 ID : 6306801502828
Option 4 ID : 6306801502829
Status : Answered
Chosen Option : 3

Q.12 Which of the following words is a synonym for "ephemeral"?

- Ans ☒ 1. Eternal
☒ 2. Transitory
☒ 3. Permanent
☒ 4. Enduring

Question ID : 630680385307
 Option 1 ID : 6306801502097
 Option 2 ID : 6306801502094
 Option 3 ID : 6306801502096
 Option 4 ID : 6306801502095
 Status : Answered
 Chosen Option : 2

Q.13 The sentence given below contains an idiom. Identify the idiom and choose its correct meaning from the given options.
 The plans to cut funding are penny wise pound foolish.

- Ans ☒ 1. A sudden stopping of any habit.
☒ 2. Careful about spending small amounts but not about large amounts.
☒ 3. A sarcastic response to a foolish statement.
☒ 4. So abundant or common as to hold little or no value.

Question ID : 630680385404
 Option 1 ID : 6306801502449
 Option 2 ID : 6306801502447
 Option 3 ID : 6306801502446
 Option 4 ID : 6306801502448
 Status : Answered
 Chosen Option : 2

Q.14 Choose the correct option to fill in the blank that completes the idioms used in the given situation
 John decided to accept the job offer he received, realizing that a bird in the hand is worth _____, and it was better to have a secure job now rather than risk waiting for uncertain opportunities in the future.

- Ans ☒ 1. two in the bush
☒ 2. one on the ground
☒ 3. none in the nest
☒ 4. a hundred in the sky

Question ID : 630680385296
 Option 1 ID : 6306801502050
 Option 2 ID : 6306801502052
 Option 3 ID : 6306801502053
 Option 4 ID : 6306801502051
 Status : Answered
 Chosen Option : 4

Comprehension:

Based on the following cloze passage answer the question given below:

John was a (1)_____ student who always worked hard to achieve his goals. He had a great passion for learning and was known for his (2)_____ curiosity. He would often spend hours in the library, (3)_____ reading and exploring various subjects. His dedication to his studies and his optimistic attitude made him stand out among his peers.

SubQuestion No : 15

Q.15 Fill in the blank (1) with the appropriate word from the options below:

- Ans ☒ 1. careless
☒ 2. delicate
☒ 3. friendly
☒ 4. diligent

Question ID : 630680385482

Option 1 ID : 6306801502736

Option 2 ID : 6306801502734

Option 3 ID : 6306801502737

Option 4 ID : 6306801502735

Status : Answered

Chosen Option : 4

Comprehension:

Based on the following cloze passage answer the question given below:

John was a (1)_____ student who always worked hard to achieve his goals. He had a great passion for learning and was known for his (2)_____ curiosity. He would often spend hours in the library, (3)_____ reading and exploring various subjects. His dedication to his studies and his optimistic attitude made him stand out among his peers.

SubQuestion No : 16

Q.16 Fill in the blank (3) with the appropriate word from the options below:

- Ans ☒ 1. randomly
☒ 2. leisurely
☒ 3. diligently
☒ 4. lazily

Question ID : 630680385484

Option 1 ID : 6306801502745

Option 2 ID : 6306801502742

Option 3 ID : 6306801502744

Option 4 ID : 6306801502743

Status : Answered

Chosen Option : 2

Comprehension:

Based on the following cloze passage answer the question given below:

John was a (1)_____ student who always worked hard to achieve his goals. He had a great passion for learning and was known for his (2)_____ curiosity. He would often spend hours in the library, (3)_____ reading and exploring various subjects. His dedication to his studies and his optimistic attitude made him stand out among his peers.

SubQuestion No : 17

Q.17 Fill in the blank (2) with the appropriate word from the options below:

- Ans** ☒ 1. indifferent
☒ 2. culinary
☒ 3. insatiable
☒ 4. bored

Question ID : 630680385483

Option 1 ID : 6306801502740

Option 2 ID : 6306801502739

Option 3 ID : 6306801502738

Option 4 ID : 6306801502741

Status : Answered

Chosen Option : 3

Q.18 Select the most appropriate antonym of the given word.
Copious

- Ans** ☒ 1. Tactile
☒ 2. Tangible
☒ 3. Liberal
☒ 4. Meagre

Q.19 Select the most appropriate missing sentence to complete the paragraph meaningfully.
Mrs. Winthrop was one of these: she was in all respects a woman of scrupulous conscience, so eager for duties that life seemed to offer them too scantily unless she rose at half-past four, though this threw a scarcity of work over the more advanced hours of the morning, _____.

- Ans** ☒ 1. after you gave my assistant two hundred roubles.
☒ 2. as it was worst when we had to stand by the hour waiting.
☒ 3. as the third bout was a stubborn match.
☒ 4. which it was a constant problem with her to remove.

Question ID : 630680385593

Option 1 ID : 6306801503150

Option 2 ID : 6306801503151

Option 3 ID : 6306801503152

Option 4 ID : 6306801503153

Status : Not Attempted and
 Marked For Review

Chosen Option : --

Q.20 Fill in the blank with the most appropriate option.
This time the landing will be successful, _____?

- Ans ☒ 1. can't it.
☒ 2. shan't it
☒ 3. will it
☒ 4. won't it

Question ID : 630680385343
Option 1 ID : 6306801502225
Option 2 ID : 6306801502223
Option 3 ID : 6306801502222
Option 4 ID : 6306801502224
Status : Answered
Chosen Option : 4

Q.21 Select the word from the options which is exactly opposite in meaning to the bracketed word given in the sentence below.
The third and fourth sets I just served and couldn't do much on the (return).

- Ans ☒ 1. offer
☒ 2. before
☒ 3. rebound
☒ 4. escape

Question ID : 630680385413
Option 1 ID : 6306801502485
Option 2 ID : 6306801502484
Option 3 ID : 6306801502483
Option 4 ID : 6306801502482
Status : Answered
Chosen Option : 4

Q.22 Select the word segment that substitutes the bracketed word segment correctly and completes the sentence meaningfully.
The new restaurant in town offers a wide (assortment) of delicious cuisines from different countries.

- Ans ☒ 1. supply
☒ 2. scarcity
☒ 3. collection
☒ 4. variety

Question ID : 630680385500
Option 1 ID : 6306801502796
Option 2 ID : 6306801502795
Option 3 ID : 6306801502797
Option 4 ID : 6306801502794
Status : Answered
Chosen Option : 4

Q.23 The sentences given below are all part of a paragraph but do not necessarily fall in the order that they are in. The first and the last sentences of the paragraph are given. Choose the option that arranges these sentences to form a meaningful paragraph.
From this time a new spirit of life animated the decaying frame of the stranger.
A. promised that someone should watch for him and give him instant
B. for he is far too weak to sustain the rawness of the atmosphere. I have
C. which had before appeared; but I have persuaded him to remain in the cabin,
D. He manifested the greatest eagerness to be upon deck to watch for the sledge notice if any new object should appear in sight.

Ans ✓ 1. DCBA

✗ 2. BADC

✗ 3. ABDC

✗ 4. ACDB

Question ID : 630680385354

Option 1 ID : 6306801502267

Option 2 ID : 6306801502269

Option 3 ID : 6306801502268

Option 4 ID : 6306801502266

Status : Answered

Chosen Option : 1

Q.24 Select the most appropriate missing sentence to complete the following paragraph:
As the magician waved his wand, colourful sparks flew through the air, and the audience gasped in awe. He performed incredible illusions, making objects vanish and reappear. The grand finale involved the magician _____.

Ans ✗ 1. transforming into a majestic unicorn.

✗ 2. revealing the secrets of his tricks.

✓ 3. levitating above the stage.

✗ 4. distributing free pizza to everyone in the theatre.

Question ID : 630680385248

Option 1 ID : 6306801501881

Option 2 ID : 6306801501879

Option 3 ID : 6306801501878

Option 4 ID : 6306801501880

Status : Answered

Chosen Option : 2

Q.25 Fill in the blank with the most appropriate option
To address climate change, it is essential to take collective action at the global level. _____, countries must work together to reduce greenhouse gas emissions and transition to renewable energy sources.

Ans ✓ 1. Furthermore

✗ 2. Conversely

✗ 3. In contrast

✗ 4. Subsequently

Question ID : 630680385463

Option 1 ID : 6306801502669

Option 2 ID : 6306801502668

Option 3 ID : 6306801502667

Option 4 ID : 6306801502666

Status : Answered

Chosen Option : 1