

	  
	DELHI DEVELOPMENT AUTHORITY RECRUITMENT CELL VIKAS SADAN, INA, NEW DELHI - 110023 <small>(https://www.dda.gov.in)</small>
	Advertisement No. 02/2023/Recrtt. Cell/Pers./DDA
Test Date	29/09/2023
Test Time	2:30 PM - 3:30 PM
Subject	Assistant Section Officer (ASO)

Section : General Intelligence and Reasoning

Q.1 If * stands for 'addition', < for 'subtraction', + stands for 'division', > for 'multiplication', - stands for 'equal to', and ÷ stands for 'less than', which of the following expression is true ?

- Ans**
- ☒ 1. $8 * 3 > 6 + 2 < 4 \div 12$
 - ☒ 2. $9 > 4 * 15 + 3 < 9 - 35$
 - ☒ 3. $9 > 4 * 15 + 3 < 9 \div 35$
 - ☒ 4. $8 * 3 > 6 - 4 > 8 < 12$

Question ID : 630680386167
 Option 1 ID : 6306801505378
 Option 2 ID : 6306801505380
 Option 3 ID : 6306801505381
 Option 4 ID : 6306801505379

Status : Answered

Chosen Option : 3

Q.2 Select the option that is related to the third word in the same way as the second word is related to the first word.
 MOUSE : COMPUTER :: COMPRESSOR :: ?

- Ans**
- ☒ 1. TELEVESION
 - ☒ 2. AIR CONDITIONER
 - ☒ 3. CHANDELIER
 - ☒ 4. FAN

Question ID : 630680384496
 Option 1 ID : 6306801498871
 Option 2 ID : 6306801498870
 Option 3 ID : 6306801498872
 Option 4 ID : 6306801498873

Status : Answered

Chosen Option : 2

Test Prime

**ALL EXAMS,
ONE SUBSCRIPTION**



70,000+
Mock Tests



**Personalised
Report Card**



**Unlimited
Re-Attempt**



600+
Exam Covered



**Previous Year
Papers**



**500%
Refund**



ATTEMPT FREE MOCK NOW

Q.3 Referring to a woman, Mehul said, "She is the daughter of my wife's father's father's only child." How is the woman related to Mehul?

- Ans**
- ☒ 1. Sister
 - ☒ 2. Wife
 - ☒ 3. Daughter
 - ☒ 4. Data inadequate

Question ID : 630680384769
 Option 1 ID : 6306801499963
 Option 2 ID : 6306801499962
 Option 3 ID : 6306801499964
 Option 4 ID : 6306801499965
 Status : Answered
 Chosen Option : 3

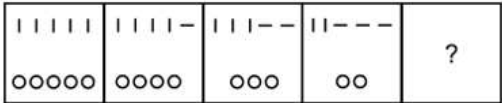
Q.4 If the first and middle digits within each number are exchanged, which of the following will be the sum of the smallest and largest number thus formed?

871 534 921 625 351

- Ans**
- ☒ 1. 1156
 - ☒ 2. 1326
 - ☒ 3. 1123
 - ☒ 4. 1046

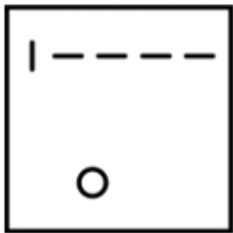
Question ID : 630680384457
 Option 1 ID : 6306801498716
 Option 2 ID : 6306801498717
 Option 3 ID : 6306801498714
 Option 4 ID : 6306801498715
 Status : Answered
 Chosen Option : 4

Q.5 Select the figure that will replace the question mark (?) in the following figure series.

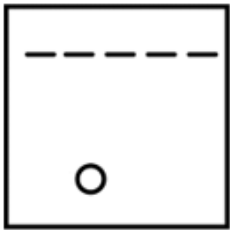


Ans

✓ 1.



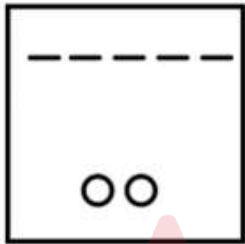
✗ 2.



✗ 3.



✗ 4.



Question ID : 630680384739
Option 1 ID : 6306801499844
Option 2 ID : 6306801499843
Option 3 ID : 6306801499842
Option 4 ID : 6306801499845
Status : Answered
Chosen Option : 1

Q.6 A statement is given followed by two conclusions numbered I and II. Consider the statement to be true and answer which one of the conclusions logically follows from the statements.
Statement: Increased investment in education leads to higher literacy rates in a society.
Conclusion I: Illiteracy rates can be reduced through adequate investment in education.
Conclusion II: Education is directly correlated with economic development.

- Ans** ☒ 1. Both conclusion I and II follow
☒ 2. Only conclusion II follows
☒ 3. Only conclusion I follows
☒ 4. Neither conclusion I nor II follows

Question ID : 630680384586
Option 1 ID : 6306801499232
Option 2 ID : 6306801499231
Option 3 ID : 6306801499230
Option 4 ID : 6306801499233
Status : Answered
Chosen Option : 2

Q.7 In a certain code language, if MAN is coded as '1', PEARL is coded as 2, then what will 'TEACHER' be coded as?

- Ans** ☒ 1. 3
☒ 2. 4
☒ 3. 1
☒ 4. 2

Question ID : 630680384478
Option 1 ID : 6306801498800
Option 2 ID : 6306801498801
Option 3 ID : 6306801498798
Option 4 ID : 6306801498799
Status : Answered
Chosen Option : 1

Q.8 How many pairs of letters in the word "TRANSPORT" have the same number of letters between them as in the English alphabet (both forward and backward)?

- Ans** ☒ 1. 1
☒ 2. 3
☒ 3. 4
☒ 4. 2

Question ID : 630680384748
Option 1 ID : 6306801499880
Option 2 ID : 6306801499878
Option 3 ID : 6306801499881
Option 4 ID : 6306801499879
Status : Answered
Chosen Option : 4

Q.9 In the following question, certain pairs of words are given out of which the words in all pairs except one bear a certain common relationship. Identify the pair in which the words are differently related.

- Ans
- ✗ 1. Paper : Pulp
 - ✗ 2. Chair : Wood
 - ✗ 3. Wine : Grapes
 - ✓ 4. Maize : Crop

Question ID : 630680384805

Option 1 ID : 6306801500107

Option 2 ID : 6306801500109

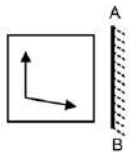
Option 3 ID : 6306801500108

Option 4 ID : 6306801500106

Status : Answered

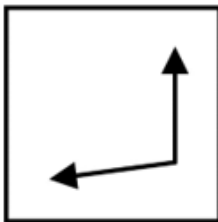
Chosen Option : 4

Q.10 Choose the correct alternative which closely resembles the mirror image of the given figure, If the mirror is placed vertically as shown.

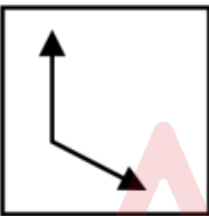


Ans

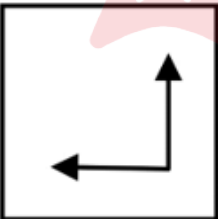
✓ 1.



✗ 2.



✗ 3.



✗ 4.



Question ID : 630680384638

Option 1 ID : 6306801499439

Option 2 ID : 6306801499438

Option 3 ID : 6306801499441

Option 4 ID : 6306801499440

Status : Answered

Chosen Option : 1

Q.11 In a certain code language, if MIGHTY is coded as NKJYTH, LOVELY is coded as MQYYLE, then what will GERMAN be coded as?

- Ans
- ☒ 1. HFTNAM
 - ☒ 2. HGUNAM
 - ☒ 3. HFSNAM
 - ☒ 4. HGSNBO

Question ID : 630680384679
Option 1 ID : 6306801499603
Option 2 ID : 6306801499605
Option 3 ID : 6306801499602
Option 4 ID : 6306801499604
Status : Answered
Chosen Option : 2

Q.12 Figure A and B are related in a particular way or manner. Establish the same relationship between C and D choosing from the given options:

LEFT	LEFT	PEAR	?
A	B	C	D

- Ans
- ☒ 1. REAP
 - ☒ 2. REAR
 - ☒ 3. REAR
 - ☒ 4. REAP

Question ID : 630680384844
Option 1 ID : 6306801500263
Option 2 ID : 6306801500265
Option 3 ID : 6306801500264
Option 4 ID : 6306801500262
Status : Answered
Chosen Option : 3

Q.13 Select the option that is related to the third number-letter cluster in the same way as the second number-letter cluster is related to the first number-letter cluster.

SHILLONG : IO96 :: UTTARAKHAND : ?

- Ans
- ☒ 1. UAAA119
 - ☒ 2. UAAA99
 - ☒ 3. IO99
 - ☒ 4. U119

Question ID : 630680384687
Option 1 ID : 6306801499635
Option 2 ID : 6306801499634
Option 3 ID : 6306801499637
Option 4 ID : 6306801499636
Status : Answered
Chosen Option : 1

- Q.14 If ' $M \times N$ ' means 'M is the husband of N'.
 If ' $M + N$ ' means 'M is the wife of N'.
 If ' $M \div N$ ' means 'M is the son of N'.
 If ' $M - N$ ' means 'M is the brother of N'.

How is P related to S in the expression ' $P \div Q + R - S$ '?

- Ans ☐ 1. Wife's brother
☐ 2. Son
☒ 3. Brother's son
☐ 4. Brother

Question ID : 630680384474

Option 1 ID : 6306801498784

Option 2 ID : 6306801498782

Option 3 ID : 6306801498783

Option 4 ID : 6306801498785

Status : Answered

Chosen Option : 3

- Q.15 In the following question three statements are given, followed by two conclusions numbered I and II. Assume three given statements to be true even if they seem to be at variance with commonly known facts and then decide which of the given conclusion logically follows from the two statements disregarding commonly known facts.
 Statement:

Some rats are ants.
 Some ants are cats.
 All cats are dogs.
 Some dogs are birds.

Conclusions:

- I. Some birds are ants.
 II. Some dogs are rat.
 III. Some dogs are ants.
 IV. Some birds are rats

- Ans ☐ 1. Only II follows
☐ 2. Only II & IV follow
☒ 3. Only III follows
☐ 4. Only I & III follows

Question ID : 630680384834

Option 1 ID : 6306801500223

Option 2 ID : 6306801500225

Option 3 ID : 6306801500222

Option 4 ID : 6306801500224

Status : Answered

Chosen Option : 3

Q.16 How many letters are there in the given series that are immediately preceded as well as followed by a symbol?

U @ T % R ! A * K # X S \$ F +

- Ans**
- ✓ 1. 4
 - ✗ 2. 0
 - ✗ 3. 5
 - ✗ 4. 2

Question ID : 630680384753

Option 1 ID : 6306801499900

Option 2 ID : 6306801499899

Option 3 ID : 6306801499901

Option 4 ID : 6306801499898

Status : Answered

Chosen Option : 1

Q.17 Find the wrong number in the series:

55, 56, 112, 113, 225, 227

- Ans**
- ✓ 1. 225
 - ✗ 2. 227
 - ✗ 3. 56
 - ✗ 4. 113

Question ID : 630680384568

Option 1 ID : 6306801499160

Option 2 ID : 6306801499161

Option 3 ID : 6306801499158

Option 4 ID : 6306801499159

Status : Answered

Chosen Option : 1

Q.18 Identify the term which does not follow the pattern within each pair in the given clusters.

Q6, V0, R9, S8, O4

- Ans**
- ✗ 1. S8
 - ✗ 2. V0
 - ✓ 3. R9
 - ✗ 4. Q6

Question ID : 630680384627

Option 1 ID : 6306801499396

Option 2 ID : 6306801499394

Option 3 ID : 6306801499395

Option 4 ID : 6306801499397

Status : Answered

Chosen Option : 3

Q.19 A series is given with one term missing. Select the correct alternative from the given ones that will complete the series.
20, 30, 45, 67.5, 101.25, ____

- Ans** ☒ 1. 151.875
☒ 2. 150
☒ 3. 126.5625
☒ 4. 141.875

Question ID : **630680384762**
 Option 1 ID : **6306801499934**
 Option 2 ID : **6306801499937**
 Option 3 ID : **6306801499935**
 Option 4 ID : **6306801499936**
 Status : **Answered**
 Chosen Option : **1**

Q.20 Which of the following letter-number cluster will replace the question mark (?) in the given series?
BEH5, CGK7, ?, EKQ11, FMT13

- Ans** ☒ 1. DIM9
☒ 2. DJN10
☒ 3. DJN9
☒ 4. DIN9

Question ID : **630680384720**
 Option 1 ID : **6306801499768**
 Option 2 ID : **6306801499769**
 Option 3 ID : **6306801499766**
 Option 4 ID : **6306801499767**
 Status : **Answered**
 Chosen Option : **4**

Q.21 Tanvi watches movies on different platforms namely Netflix, Hotstar, Voot, Zee, and Jio cinema on five different days of a week from Tuesday to Saturday. She watches Hotstar a day before she watches Zee. She watches Jio cinema two days before she watches Voot. She watches Netflix on Friday. On which day does she watch Hotstar?

- Ans** ☒ 1. Thursday
☒ 2. Saturday
☒ 3. Tuesday
☒ 4. Wednesday

Question ID : **630680384711**
 Option 1 ID : **6306801499733**
 Option 2 ID : **6306801499731**
 Option 3 ID : **6306801499732**
 Option 4 ID : **6306801499730**
 Status : **Answered**
 Chosen Option : **3**

Q.22 Find the wrong number in the series:

745, 732, 706, 669, 615, 550, 472

- Ans
- ☒ 1. 550
 - ☒ 2. 732
 - ☒ 3. 472
 - ☒ 4. 669

Question ID : 630680384798

Option 1 ID : 6306801500081

Option 2 ID : 6306801500079

Option 3 ID : 6306801500080

Option 4 ID : 6306801500078

Status : Answered

Chosen Option : 4

Q.23 Six individuals Mary, Noah, Olivia, Paul, Quinn, and Rachel are sitting in a row facing towards the North. Olivia is seated between Mary and Quinn. Quinn is not at either end. Noah is seated immediately to the right of Quinn. Rachel is not at the right end. Paul is seated immediately left of Mary. Who is sitting to the left of Paul?

- Ans
- ☒ 1. Quinn
 - ☒ 2. Rachel
 - ☒ 3. Olivia
 - ☒ 4. Marry

Question ID : 630680384619

Option 1 ID : 6306801499364

Option 2 ID : 6306801499363

Option 3 ID : 6306801499362

Option 4 ID : 6306801499365

Status : Answered

Chosen Option : 2

Q.24 In the following question, four pairs of letter-cluster have been given out of which three are alike in some manner, while one is different. Select the odd pair from the given options.

- Ans
- ☒ 1. YCHN - MXSB
 - ☒ 2. DPJT - GQKW
 - ☒ 3. CNLE - VOMX
 - ☒ 4. FSPR - IKHU

Question ID : 630680384610

Option 1 ID : 6306801499328

Option 2 ID : 6306801499327

Option 3 ID : 6306801499329

Option 4 ID : 6306801499326

Status : Answered

Chosen Option : 1

Q.25 In the following question three statements are given, followed by two conclusions numbered I and II. Assume three given statements to be true even if they seem to be at variance with commonly known facts and then decide which of the given conclusion logically follows from the two statements disregarding commonly known facts.

Statements:

All mirrors are balloons

All balloons are rooms.

All rooms are chair.

Conclusions:

I. Some chair are mirrors.

II. Some rooms are mirrors.

- Ans**
- ☒ 1. Only conclusion II follows
 - ☒ 2. Both conclusion I and II follow
 - ☒ 3. Neither conclusion I nor II follows
 - ☒ 4. Only conclusion I follows

Question ID : 630680384631

Option 1 ID : 6306801499411

Option 2 ID : 6306801499412

Option 3 ID : 6306801499413

Option 4 ID : 6306801499410

Status : Answered

Chosen Option : 2

Section : General Awareness

Q.1 Name the chief guest to India's 74th Republic Day?

- Ans**
- ☒ 1. United States President Barack Obama
 - ☒ 2. Egypt's President Abdel Fattah El-Sisi
 - ☒ 3. France's President François Hollande
 - ☒ 4. Brazil's President Jair Bolsonaro

Question ID : 630680384173

Option 1 ID : 6306801497584

Option 2 ID : 6306801497582

Option 3 ID : 6306801497585

Option 4 ID : 6306801497583

Status : Answered

Chosen Option : 4

Q.2 In which of following cyber attacks is a computing device hijacked and its resources are used to illicitly mine cryptocurrency?

- Ans**
- ☒ 1. Cryptohacking
 - ☒ 2. Cryptojacking
 - ☒ 3. Cyberhacking
 - ☒ 4. Hijacking

Question ID : 630680384037

Option 1 ID : 6306801497040

Option 2 ID : 6306801497039

Option 3 ID : 6306801497041

Option 4 ID : 6306801497038

Status : Answered

Chosen Option : 1

Q.3 Who is the author of the book JOURNEY OF A NATION: 75 YEARS OF INDIAN SPORTS Game, Guts, Glory?

- Ans
- ☒ 1. Kapil Dev
 - ☐ 2. Harsha Bhogle
 - ☐ 3. Laxman Sivaramakrishnan
 - ☒ 4. Chandresh Narayanan

Question ID : 630680384157
 Option 1 ID : 6306801497518
 Option 2 ID : 6306801497519
 Option 3 ID : 6306801497521
 Option 4 ID : 6306801497520
 Status : Not Attempted and Marked For Review
 Chosen Option : --

Q.4 Who among the following founded the National Library of India in 1903?

- Ans
- ☒ 1. Lord Curzon
 - ☐ 2. Lord Canning
 - ☐ 3. Asutosh Mukherjee
 - ☐ 4. Abanindranath Tagore

Question ID : 630680384128
 Option 1 ID : 6306801497402
 Option 2 ID : 6306801497405
 Option 3 ID : 6306801497403
 Option 4 ID : 6306801497404
 Status : Answered
 Chosen Option : 1

Q.5 Who among the following authors has been awarded the prestigious German Peace Prize for his/her outstanding contributions?

- Ans
- ☐ 1. J.K Rowling
 - ☐ 2. Dan Brown
 - ☒ 3. Salman Rushdie
 - ☐ 4. Stephen King

Question ID : 630680384060
 Option 1 ID : 6306801497132
 Option 2 ID : 6306801497133
 Option 3 ID : 6306801497131
 Option 4 ID : 6306801497130
 Status : Not Answered
 Chosen Option : --

Q.6

Which social reformer worked towards the eradication of untouchability and founded the Self-Respect Movement in Tamil Nadu?

Ans

✖

1. Swami Dayananda Saraswati

✖

2. Jyotirao Phule

✖

3. Annie Besant

✔

4. Periyar E. V. Ramasamy

Question ID : 630680384447

Option 1 ID : 6306801498676

Option 2 ID : 6306801498675

Option 3 ID : 6306801498677

Option 4 ID : 6306801498674

Status : Answered

Chosen Option : 4

Q.7

Which African-American civil rights activist wrote the autobiography "I Know Why the Caged Bird Sings"?

Ans

✖

1. Angela Davis

✔

2. Maya Angelou

✖

3. Harriet Tubman

✖

4. Rosa Parks

Question ID : 630680384394

Option 1 ID : 6306801498465

Option 2 ID : 6306801498462

Option 3 ID : 6306801498464

Option 4 ID : 6306801498463

Status : Not Answered

Chosen Option : --

Q.8

Which of the following challenges is commonly faced in the development of infrastructure in India?

Ans

✖

1. Insufficient funding and investment

✖

2. Lack of skilled workforce

✔

3. All of the above

✖

4. Inadequate regulatory framework

Question ID : 630680386446

Option 1 ID : 6306801506494

Option 2 ID : 6306801506495

Option 3 ID : 6306801506497

Option 4 ID : 6306801506496

Status : Answered

Chosen Option : 3

Q.9 The Central Statistical Office (CSO) in India is responsible for estimating and publishing the national income and GDP figures. Which ministry is the CSO under?

- Ans ☒ 1. Ministry of Finance
☒ 2. Ministry of Statistics and Programme Implementation
☒ 3. Ministry of Home Affairs
☒ 4. Ministry of Commerce and Industry

Question ID : 630680384182
 Option 1 ID : 6306801497620
 Option 2 ID : 6306801497619
 Option 3 ID : 6306801497618
 Option 4 ID : 6306801497621
 Status : Answered
 Chosen Option : 2

Q.10 What is the outermost range of the Himalayas called?

- Ans ☒ 1. Shiwaliks
☒ 2. Dhaula Dhar
☒ 3. Pir Panjal
☒ 4. Mahabharat

Question ID : 630680384099
 Option 1 ID : 6306801497288
 Option 2 ID : 6306801497286
 Option 3 ID : 6306801497289
 Option 4 ID : 6306801497287
 Status : Answered
 Chosen Option : 4

Q.11 The first ruler of the Delhi Sultanate, who defeated Prithviraj Chauhan in the Second Battle of Tarain and established the Slave Dynasty, was:

- Ans ☒ 1. Balban
☒ 2. Qutb-ud-din Aibak
☒ 3. Muhammad bin Tughlaq
☒ 4. Alauddin Khalji

Question ID : 630680384216
 Option 1 ID : 6306801497757
 Option 2 ID : 6306801497755
 Option 3 ID : 6306801497756
 Option 4 ID : 6306801497754
 Status : Answered
 Chosen Option : 2

Q.12 What is the sex ratio in India as per 2021 Census? (No. of females per 1000 males)

- Ans ☒ 1. 950
☒ 2. 941
☒ 3. 943
☒ 4. 948

Question ID : 630680384312
 Option 1 ID : 6306801498137
 Option 2 ID : 6306801498134
 Option 3 ID : 6306801498135
 Option 4 ID : 6306801498136
 Status : Answered
 Chosen Option : 4

Q.13 _____ introduced India's First Regional Navigation Satellite System based Device to provide precise directions for various infrastructure projects.

- Ans ☒ 1. Elena Geo Systems
☒ 2. Teemsun Technology
☒ 3. National Aeronautics and Space Administration
☒ 4. Indian Space Research Organisation

Question ID : 630680384139
 Option 1 ID : 6306801497446
 Option 2 ID : 6306801497447
 Option 3 ID : 6306801497449
 Option 4 ID : 6306801497448
 Status : Answered
 Chosen Option : 4

Q.14 Who among the following sportsperson of India was awarded with the Major Dhyan Chand Khel Ratna Award 2022 for Table Tennis?

- Ans ☒ 1. Ms Deep Grace Ekka
☒ 2. Shri R Praggnanandhaa
☒ 3. Ms Nayan Moni Saikia
☒ 4. Shri Sharath Kamal Achanta

Question ID : 630680384051
 Option 1 ID : 6306801497096
 Option 2 ID : 6306801497095
 Option 3 ID : 6306801497097
 Option 4 ID : 6306801497094
 Status : Not Attempted and Marked For Review
 Chosen Option : --

Q.15 In which year was the Gandhi-Irwin pact signed?

- Ans ☒ 1. 1931
☒ 2. 1943
☒ 3. 1921
☒ 4. 1941

Question ID : 630680384123
 Option 1 ID : 6306801497383
 Option 2 ID : 6306801497382
 Option 3 ID : 6306801497384
 Option 4 ID : 6306801497385
 Status : Answered
 Chosen Option : 1

Q.16 Which religious festival of India symbolises the spiritual victory of light over darkness, good over evil and knowledge over ignorance?

- Ans
- ☒ 1. Makar Sankranti
 - ☒ 2. Holi
 - ☒ 3. Ganesh Chaturthi
 - ☒ 4. Diwali

Question ID : 630680384274

Option 1 ID : 6306801497984

Option 2 ID : 6306801497982

Option 3 ID : 6306801497985

Option 4 ID : 6306801497983

Status : Answered

Chosen Option : 4

Q.17 In the census, what is the term used to refer to the process of counting the entire population of a country or a specified area?

- Ans
- ☒ 1. Sampling
 - ☒ 2. Survey
 - ☒ 3. Enumeration
 - ☒ 4. Tabulation

Question ID : 630680384211

Option 1 ID : 6306801497734

Option 2 ID : 6306801497735

Option 3 ID : 6306801497736

Option 4 ID : 6306801497737

Status : Answered

Chosen Option : 2

Q.18 Which of the following is a Government initiative to provide access to financial services such as savings and deposit accounts, remittance, credit, insurance, pension, etc. at affordable rates?

- Ans
- ☒ 1. Pradhan Mantri Jan Dhan Yojana
 - ☒ 2. Pradhan Mantri Mudra Yojana
 - ☒ 3. Rashtriya Swasthya Bima Yojana
 - ☒ 4. National Social Assistance Scheme

Question ID : 630680384097

Option 1 ID : 6306801497279

Option 2 ID : 6306801497280

Option 3 ID : 6306801497278

Option 4 ID : 6306801497281

Status : Answered

Chosen Option : 1

Q.19 Which river in India is known as the "Sorrow of Bihar" due to its frequent flooding and the devastation it causes?

- Ans** ☒ 1. Kosi River
☒ 2. Yamuna River
☒ 3. Godavari River
☒ 4. Brahmaputra River

Question ID : 630680386460
 Option 1 ID : 6306801506553
 Option 2 ID : 6306801506551
 Option 3 ID : 6306801506552
 Option 4 ID : 6306801506550
 Status : Answered
 Chosen Option : 1

Q.20 Which international environmental agreement aims to combat climate change by reducing greenhouse gas emissions and fostering global cooperation?

- Ans** ☒ 1. Montreal Protocol
☒ 2. Kyoto Protocol
☒ 3. Basel Convention
☒ 4. Paris Agreement

Question ID : 630680386448
 Option 1 ID : 6306801506504
 Option 2 ID : 6306801506503
 Option 3 ID : 6306801506505
 Option 4 ID : 6306801506502
 Status : Answered
 Chosen Option : 4

Q.21 The famous "Kailash Temple" at Ellora, which is dedicated to Lord Shiva and considered one of the architectural marvels of India, was built during the rule of which dynasty?

- Ans** ☒ 1. Rashtrakuta Dynasty
☒ 2. Pallava Dynasty
☒ 3. Chalukya Dynasty
☒ 4. Gupta Dynasty

Question ID : 630680384219
 Option 1 ID : 6306801497769
 Option 2 ID : 6306801497768
 Option 3 ID : 6306801497766
 Option 4 ID : 6306801497767
 Status : Answered
 Chosen Option : 4

Q.22 Which among the following countries recently imposed one of the world's strictest anti-tobacco laws, setting in force a total ban on smoking in public places, including hotels, beaches, and parks?

- Ans**
- ☒ 1. India
 - ☒ 2. Germany
 - ☒ 3. China
 - ☒ 4. Mexico

Question ID : 630680384043
 Option 1 ID : 6306801497063
 Option 2 ID : 6306801497062
 Option 3 ID : 6306801497064
 Option 4 ID : 6306801497065
 Status : Answered
 Chosen Option : 4

Q.23 What was India's Gini Coefficient at the end of 2021?

- Ans**
- ☒ 1. 66.2
 - ☒ 2. 82.3
 - ☒ 3. 75.1
 - ☒ 4. 50.3

Question ID : 630680384184
 Option 1 ID : 6306801497628
 Option 2 ID : 6306801497627
 Option 3 ID : 6306801497626
 Option 4 ID : 6306801497629
 Status : Not Answered
 Chosen Option : --

Q.24 Which Indian language is widely spoken in the northern states and is written in the Shahmukhi script?

- Ans**
- ☒ 1. Pali
 - ☒ 2. Sanskrit
 - ☒ 3. Hindi
 - ☒ 4. Punjabi

Question ID : 630680384178
 Option 1 ID : 6306801497604
 Option 2 ID : 6306801497605
 Option 3 ID : 6306801497603
 Option 4 ID : 6306801497602
 Status : Answered
 Chosen Option : 3

Q.25 Who among the following are the beneficiaries of 'PM SVANidhi' scheme?

- Ans**
- ☒ 1. School children
 - ☒ 2. Farmers
 - ☒ 3. Senior Citizens
 - ☒ 4. Street Vendors

Question ID : 630680384050
 Option 1 ID : 6306801497090
 Option 2 ID : 6306801497093
 Option 3 ID : 6306801497092
 Option 4 ID : 6306801497091
 Status : Answered

Section : Quantitative Aptitude

Q.1 A shopkeeper marks his goods 25% above the cost price and allows a discount of 8% on it. Find the profit or loss percentage of the shopkeeper.

- Ans**
- ☒ 1. 18% profit
 - ☒ 2. 15% profit
 - ☒ 3. 18% loss
 - ☒ 4. 12% loss

Question ID : 630680385188

Option 1 ID : 6306801501640

Option 2 ID : 6306801501639

Option 3 ID : 6306801501641

Option 4 ID : 6306801501638

Status : Answered

Chosen Option : 2

Q.2 Rishav buys an item for ₹10000 and sells it to Poonam at 10% profit. Poonam then sells the same items to Ravi at 15% profit. Ravi broke the item and then sold it to Kiran at 30% loss. Find the amount paid by Kiran.

- Ans**
- ☒ 1. ₹9321
 - ☒ 2. ₹7865
 - ☒ 3. ₹8124
 - ☒ 4. ₹8855

Question ID : 630680385186

Option 1 ID : 6306801501632

Option 2 ID : 6306801501633

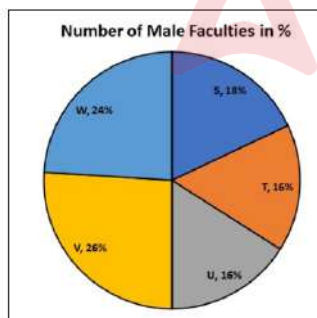
Option 3 ID : 6306801501630

Option 4 ID : 6306801501631

Status : Answered

Chosen Option : 4

Q.3 Pie chart given below shows the percentage distribution of total number of male faculties in five different schools. Total male faculties in all schools together = 6600
If total number of faculties in school S is 1560. The number of female faculties in school T is 128 more than female faculties in school S. Calculate the approximate value of the female faculties in school T is what percentage of male faculties in school S?



- Ans**
- ☒ 1. 42.09%
 - ☒ 2. 33.56%
 - ☒ 3. 47.84%
 - ☒ 4. 25.38%

Question ID : 630680384969

Option 1 ID : 6306801500764

Option 2 ID : 6306801500763

Option 3 ID : 6306801500765

Option 4 ID : 6306801500762

Status : Not Attempted and
Marked For Review

Q.4 If $h - \frac{1}{h} = 8$, find the value of $h^3 - \left(\frac{1}{h^3}\right)$

- Ans ☒ 1. 536
☒ 2. 524
☒ 3. 488
☒ 4. 546

Question ID : 630680385114
Option 1 ID : 6306801501344
Option 2 ID : 6306801501342
Option 3 ID : 6306801501343
Option 4 ID : 6306801501345
Status : Answered
Chosen Option : 1

Q.5 A and B started a business by investing ₹15000 and ₹18000. After 5 months C joined by investing ₹27000 and B withdrew ₹1000. If the profit at the end of the year is ₹173400, find the profit of C.

- Ans ☒ 1. ₹76500
☒ 2. ₹56700
☒ 3. ₹65700
☒ 4. ₹75600

Question ID : 630680385199
Option 1 ID : 6306801501683
Option 2 ID : 6306801501684
Option 3 ID : 6306801501682
Option 4 ID : 6306801501685
Status : Answered
Chosen Option : 2

Q.6 Which of the following is not true about rectangles?

- Ans ☒ 1. Diagonals are equal in length.
☒ 2. Diagonals bisect each other at right angles.
☒ 3. The sides are perpendicular to each other.
☒ 4. Opposite sides are parallel and equal to each other.

Question ID : 630680385178
Option 1 ID : 6306801501599
Option 2 ID : 6306801501601
Option 3 ID : 6306801501598
Option 4 ID : 6306801501600
Status : Answered
Chosen Option : 2

Q.7 In an election between two candidates A and B, A got 62% votes and won by a majority of 4800 votes. Find the number of votes B got.

- Ans**
- ☒ 1. 14400
 - ☒ 2. 12000
 - ☒ 3. 8400
 - ☒ 4. 7600

Question ID : 630680385166

Option 1 ID : 6306801501553

Option 2 ID : 6306801501550

Option 3 ID : 6306801501551

Option 4 ID : 6306801501552

Status : Answered

Chosen Option : 4

Q.8 Find the value of :

$$\frac{12}{7} \text{ of } \frac{14}{3} + \left(\frac{1}{6} - \frac{1}{9} \right)$$

- Ans**
- ☒ 1. $\frac{133}{18}$
 - ☒ 2. $\frac{179}{18}$
 - ☒ 3. $\frac{127}{18}$
 - ☒ 4. $\frac{145}{18}$

Question ID : 630680385163

Option 1 ID : 6306801501538

Option 2 ID : 6306801501541

Option 3 ID : 6306801501539

Option 4 ID : 6306801501540

Status : Answered

Chosen Option : 4

Q.9 If the angle between two radii of a circle is 75° , find the angle between the tangents at the ends of the radii.

- Ans**
- ☒ 1. 110°
 - ☒ 2. 95°
 - ☒ 3. 105°
 - ☒ 4. 115°

Question ID : 630680384911

Option 1 ID : 6306801500533

Option 2 ID : 6306801500532

Option 3 ID : 6306801500531

Option 4 ID : 6306801500530

Status : Answered

Chosen Option : 3

Q.10 Deepak goes to a place on bicycle at speed of 18 km/hr and comes back at lower speed. If the average speed is 6.4 km/hr in total journey, then the return speed (in km/hr) is :

- Ans
- ☒ 1. 5.79 kmph
 - ☒ 2. 6.53 kmph
 - ☒ 3. 3.89 kmph
 - ☒ 4. 3.57 kmph

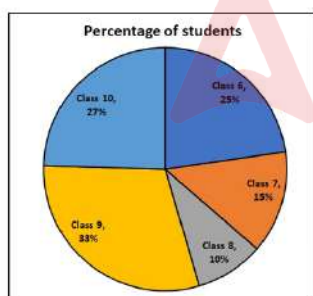
Question ID : 630680384962
Option 1 ID : 6306801500734
Option 2 ID : 6306801500736
Option 3 ID : 6306801500735
Option 4 ID : 6306801500737
Status : Marked For Review
Chosen Option : 3

Q.11 The curved surface area and the volume of a cylindrical pole are 288 m² and 72 m³ respectively. What is the approximate height(in metres) of the pole?

- Ans
- ☒ 1. 103 m
 - ☒ 2. 67 m
 - ☒ 3. 92 m
 - ☒ 4. 85 m

Question ID : 630680384885
Option 1 ID : 6306801500429
Option 2 ID : 6306801500428
Option 3 ID : 6306801500426
Option 4 ID : 6306801500427
Status : Answered
Chosen Option : 3

Q.12 The pie chart shows the percentage of students of different classes in a coaching centre. The total number of students in class 8 is 30. Find the difference in the number of students in classes 9 and 10.



- Ans
- ☒ 1. 18
 - ☒ 2. 21
 - ☒ 3. 6
 - ☒ 4. 12

Question ID : 630680385137
Option 1 ID : 6306801501436
Option 2 ID : 6306801501437
Option 3 ID : 6306801501435
Option 4 ID : 6306801501434
Status : Answered
Chosen Option : 2

Q.13 Amit can finish his homework in 4 hours. Along with Bharti, he can finish it in 2 hours. Find the time in which Bharati alone can finish the homework.

- Ans
- ☒ 1. 8 hours
 - ☒ 2. 3 hours
 - ☒ 3. 2 hours
 - ☒ 4. 4 hours

Question ID : 630680385202
Option 1 ID : 6306801501697
Option 2 ID : 6306801501696
Option 3 ID : 6306801501695
Option 4 ID : 6306801501694
Status : Answered
Chosen Option : 4

Q.14 If $p - \frac{1}{p} = \sqrt{5}$ then $\sqrt{p} (\sqrt{p} - 1) = ?$

- Ans
- ☒ 1. 4
 - ☒ 2. 0
 - ☒ 3. 1
 - ☒ 4. 2

Question ID : 630680385772
Option 1 ID : 6306801503809
Option 2 ID : 6306801503806
Option 3 ID : 6306801503807
Option 4 ID : 6306801503808
Status : Not Attempted and Marked For Review
Chosen Option : --

Q.15 if the ratio of the area of two similar triangles is 121: 100, then find the ratio of the perimeter of the two triangles.

- Ans
- ☒ 1. 10:11
 - ☒ 2. 100:121
 - ☒ 3. 1331:1000
 - ☒ 4. 11:10

Question ID : 630680384919
Option 1 ID : 6306801500563
Option 2 ID : 6306801500562
Option 3 ID : 6306801500565
Option 4 ID : 6306801500564
Status : Answered
Chosen Option : 4

Q.16 If $5A = 8B = 10C$, then find the value of $A : B : C$.

- Ans**
- ✓ 1. $8 : 5 : 4$
 - ✗ 2. $4 : 5 : 8$
 - ✗ 3. $8 : 5 : 10$
 - ✗ 4. $5 : 8 : 10$

Question ID : **630680385194**
 Option 1 ID : **6306801501664**
 Option 2 ID : **6306801501662**
 Option 3 ID : **6306801501665**
 Option 4 ID : **6306801501663**
 Status : **Answered**
 Chosen Option : **1**

Q.17 An inlet pipe can fill a tank in 10 hours and an outlet pipe can empty it in 8 hours. Initially the tank was empty and only the inlet pipe was open for 4 hours and then the outlet pipe was also opened. Find the time taken to empty the tank again.

- Ans**
- ✗ 1. 20 hours
 - ✗ 2. 18 hours
 - ✗ 3. 40 hours
 - ✓ 4. 16 hours

Question ID : **630680385205**
 Option 1 ID : **6306801501708**
 Option 2 ID : **6306801501709**
 Option 3 ID : **6306801501706**
 Option 4 ID : **6306801501707**
 Status : **Answered**
 Chosen Option : **4**

Q.18 The average weight of a group of children is 30 kg. If two children each of weight 40 kg are added to the group, the new average becomes 32 kg. Find the total weight of the original group.

- Ans**
- ✓ 1. 240 kg
 - ✗ 2. 360 kg
 - ✗ 3. 180 kg
 - ✗ 4. 120 kg

Question ID : **630680385129**
 Option 1 ID : **6306801501403**
 Option 2 ID : **6306801501404**
 Option 3 ID : **6306801501405**
 Option 4 ID : **6306801501402**
 Status : **Answered**
 Chosen Option : **1**

Q.19 Find the approximate volume of a sphere whose radius is 14.7 cm.

- Ans
- ☒ 1. 56881 cm³
 - ☒ 2. 13311 cm³
 - ☒ 3. 12314 cm³
 - ☒ 4. 14567 cm³

Question ID : 630680385142
 Option 1 ID : 6306801501456
 Option 2 ID : 6306801501457
 Option 3 ID : 6306801501455
 Option 4 ID : 6306801501454
 Status : Answered
 Chosen Option : 2

Q.20 Find the value of : $\sin(55^\circ + \theta) - \cos(35^\circ - \theta)$

- Ans
- ☒ 1. -1
 - ☒ 2. 1
 - ☒ 3. 0
 - ☒ 4. 2

Question ID : 630680385044
 Option 1 ID : 6306801501064
 Option 2 ID : 6306801501063
 Option 3 ID : 6306801501062
 Option 4 ID : 6306801501065
 Status : Answered
 Chosen Option : 3

Q.21 Which of the given numbers is divisible by 12?

- Ans
- ☒ 1. 5736387120
 - ☒ 2. 54353762719
 - ☒ 3. 52542571825
 - ☒ 4. 6757868921

Question ID : 630680385158
 Option 1 ID : 6306801501521
 Option 2 ID : 6306801501520
 Option 3 ID : 6306801501518
 Option 4 ID : 6306801501519
 Status : Answered
 Chosen Option : 1

Q.22 If the salary of Subham is first decreased by 22% and then increased by 22%, find the overall % change in his salary.

- Ans
- ☒ 1. 44% increase
 - ☒ 2. 2.2 % decrease
 - ☒ 3. No change
 - ☒ 4. 4.84% decrease

Question ID : 630680385169
Option 1 ID : 6306801501562
Option 2 ID : 6306801501563
Option 3 ID : 6306801501564
Option 4 ID : 6306801501565
Status : Answered
Chosen Option : 4

Q.23 Find the value of $\frac{(0.75)^3 - (0.1)^3}{(0.75)^2 + 0.075 + (0.1)^2}$.

- Ans
- ☒ 1. 0.65
 - ☒ 2. 0.85
 - ☒ 3. 0.75
 - ☒ 4. 0.55

Question ID : 630680384957
Option 1 ID : 6306801500715
Option 2 ID : 6306801500717
Option 3 ID : 6306801500716
Option 4 ID : 6306801500714
Status : Answered
Chosen Option : 1

Q.24 A solid cube having volume 63869 cm³ is cut into 13 cubes of equal volume. The surface area (in cm²) of the smaller cubes is:

- Ans
- ☒ 1. 1774 cm²
 - ☒ 2. 1714 cm²
 - ☒ 3. 1894 cm²
 - ☒ 4. 1734 cm²

Question ID : 630680384988
Option 1 ID : 6306801500840
Option 2 ID : 6306801500838
Option 3 ID : 6306801500841
Option 4 ID : 6306801500839
Status : Answered
Chosen Option : 4

Q.25 The material of a solid cone is converted into the shape of a solid cylinder of equal radius. If the height of the cylinder is 21.24 cm, what is the height of the cone?

- Ans
- ☒ 1. 54.56 cm
 - ☒ 2. 45.64 cm
 - ☒ 3. 71.22 cm
 - ☒ 4. 63.72 cm

Question ID : 630680385800
 Option 1 ID : 6306801503919
 Option 2 ID : 6306801503918
 Option 3 ID : 6306801503921
 Option 4 ID : 6306801503920
 Status : Answered
 Chosen Option : 4

Section : English Comprehension

Q.1 Select the most appropriate word for the given group of words.
 A person who makes or sells candles

- Ans
- ☒ 1. Luminary
 - ☒ 2. Illuminator
 - ☒ 3. Chandler
 - ☒ 4. Waxman

Question ID : 630680385505
 Option 1 ID : 6306801502816
 Option 2 ID : 6306801502817
 Option 3 ID : 6306801502814
 Option 4 ID : 6306801502815
 Status : Answered
 Chosen Option : 2

Q.2 Which of the following words is an antonym of "vast"?

- Ans
- ☒ 1. Enormous
 - ☒ 2. Spacious
 - ☒ 3. Small
 - ☒ 4. Wide

Question ID : 630680385304
 Option 1 ID : 6306801502084
 Option 2 ID : 6306801502085
 Option 3 ID : 6306801502082
 Option 4 ID : 6306801502083
 Status : Answered
 Chosen Option : 3

Q.3 Identify the antonym for the bracketed word in the sentence
The teacher's [acerbic] remarks made the students uneasy.

- Ans ☒ 1. acrimonious
☒ 2. biting
☒ 3. sweet
☒ 4. mordant

Question ID : 630680385739
Option 1 ID : 6306801503689
Option 2 ID : 6306801503687
Option 3 ID : 6306801503686
Option 4 ID : 6306801503688
Status : Answered
Chosen Option : 1

Q.4 Select the correct question tag for the following statement:
"You don't mind, _____?"

- Ans ☒ 1. will you?
☒ 2. did you?
☒ 3. aren't you?
☒ 4. do you?

Question ID : 630680385238
Option 1 ID : 6306801501841
Option 2 ID : 6306801501840
Option 3 ID : 6306801501839
Option 4 ID : 6306801501838
Status : Answered
Chosen Option : 4

Q.5 Select the missing sentence that would logically fill in the blank:
In sociology, social institutions play a critical role in shaping societies and influencing individual behaviors. _____ Over time, as societies evolve, these institutions can change or adapt to better fit the needs and values of the populace. For instance, the traditional nuclear family structure has transformed in many cultures due to changing social norms and economic factors. Consequently, sociologists study these shifts to understand the dynamic interplay between individual agency and broader societal structures.

- Ans ☒ 1. Sociologists analyze social patterns, behaviors, and institutions to understand how societies function and how they shape individual lives.
☒ 2. A joint family system comprises multiple generations living under one roof, often fostering a strong sense of unity, shared responsibilities, and collective decision-making.
☒ 3. The nuclear family, typically consisting of parents and their dependent children, is often viewed as a central unit in many societies for socialization and support.
☒ 4. These institutions, which include family, education, religion, and the economy, act as guiding structures that provide stability and order to communities.

Question ID : 630680385703
Option 1 ID : 6306801503554
Option 2 ID : 6306801503557
Option 3 ID : 6306801503555
Option 4 ID : 6306801503556
Status : Not Attempted and Marked For Review
Chosen Option : --

Q.6 Select the word segment that substitutes the bracketed word segment correctly and completes the sentence meaningfully.
The fashion show showcased a stunning (array) of designer outfits and accessories.

- Ans ☒ 1. collection
☒ 2. selection
☒ 3. arrangement
☒ 4. combination

Question ID : 630680385506
Option 1 ID : 6306801502818
Option 2 ID : 6306801502819
Option 3 ID : 6306801502820
Option 4 ID : 6306801502821
Status : Answered
Chosen Option : 1

Q.7 The sentences given below are all part of a paragraph but do not necessarily fall in the order that they are in. The first and the last sentences of the paragraph are given.
Choose the option that arranges these sentences to form a meaningful paragraph.
No sooner did that idea cross my imagination, than I became
A. shape could have destroyed the fair child.
B. forced to lean against a tree for support. The figure passed
C. convinced of its truth; my teeth chattered, and I was
D. me quickly, and I lost it in the gloom. Nothing in human
He was the murderer! I could not doubt it.

- Ans ☒ 1. CBDA
☒ 2. DCBA
☒ 3. CABD
☒ 4. ACBD

Question ID : 630680385598
Option 1 ID : 6306801503173
Option 2 ID : 6306801503171
Option 3 ID : 6306801503172
Option 4 ID : 6306801503170
Status : Answered
Chosen Option : 1

Q.8 Fill in the blank with the most appropriate option.
The marathon runner felt a surge of _____ as he approached the finish line.

- Ans ☒ 1. euphoria
☒ 2. frustration
☒ 3. exhaustion
☒ 4. anxiety

Question ID : 630680385474
Option 1 ID : 6306801502711
Option 2 ID : 6306801502713
Option 3 ID : 6306801502710
Option 4 ID : 6306801502712
Status : Answered
Chosen Option : 3

Q.9 Select the most appropriate word for the given group of words.
The study or collection of coins, currency, and medals

- Ans
- ☒ 1. Archaeology
 - ☒ 2. Philately
 - ☒ 3. Anthropology
 - ☒ 4. Numismatics

Question ID : 630680385499
Option 1 ID : 6306801502793
Option 2 ID : 6306801502791
Option 3 ID : 6306801502792
Option 4 ID : 6306801502790
Status : Answered
Chosen Option : 4

Q.10 Identify the synonym for the bracketed word in the sentence:
His [effulgent] smile brightened up the entire room.

- Ans
- ☒ 1. dim
 - ☒ 2. effusive
 - ☒ 3. radiant
 - ☒ 4. scintillating

Question ID : 630680385743
Option 1 ID : 6306801503703
Option 2 ID : 6306801503705
Option 3 ID : 6306801503702
Option 4 ID : 6306801503704
Status : Answered
Chosen Option : 2

Q.11 "The detective carefully examined the _____ left at the crime scene to gather clues
about the suspect."

- Ans
- ☒ 1. allegations
 - ☒ 2. debris
 - ☒ 3. testimonies
 - ☒ 4. fingerprints

Question ID : 630680385473
Option 1 ID : 6306801502709
Option 2 ID : 6306801502707
Option 3 ID : 6306801502708
Option 4 ID : 6306801502706
Status : Answered
Chosen Option : 4

Q.12 Fill in the blank with the most appropriate phrasal verb:
 Lucy _____ her fear of heights and successfully climbed the tall mountain during her vacation.

- Ans
- ☒

1. make up
- ☒

2. check out
- ☒

3. put off
- ☒

4. got over

Question ID : 630680385684

Option 1 ID : 6306801503480

Option 2 ID : 6306801503481

Option 3 ID : 6306801503478

Option 4 ID : 6306801503479

Status : Answered

Chosen Option : 3

Q.13 Select the word segment that completes the sentence meaningfully.
 Despite facing several challenges, the young entrepreneur's _____ led to the growth of her startup.

- Ans
- ☒

1. tenacity
- ☒

2. negligence
- ☒

3. complacency
- ☒

4. lethargy

Question ID : 630680385512

Option 1 ID : 6306801502842

Option 2 ID : 6306801502844

Option 3 ID : 6306801502843

Option 4 ID : 6306801502845

Status : Answered

Chosen Option : 3

Q.14 Select the option that best represents the meaning of the idioms used in the given situation
 Your colleague mentions, "Don't put all your eggs in one basket," when discussing investment strategies. What does this expression imply?

- Ans
- ☒

1. We should prioritize short-term gains over long-term stability.
- ☒

2. We should focus on one investment option for maximum returns.
- ☒

3. We should diversify our investments to mitigate risks.
- ☒

4. We should avoid investing altogether and keep our money safe.

Question ID : 630680385301

Option 1 ID : 6306801502072

Option 2 ID : 6306801502071

Option 3 ID : 6306801502070

Option 4 ID : 6306801502073

Status : Answered

Chosen Option : 4

Comprehension:

Based on the following cloze passage answer the question given below:

The sun was shining brightly as Sarah took a walk in the park. She enjoyed the (1) _____ of the trees and the fragrance of the flowers. The park was (2) _____ with families having picnics, children playing on the swings, and dogs chasing after balls. As Sarah walked along the path, she (3) _____ across an old friend she hadn't seen in years. They stopped to chat and reminisce about their school days.

SubQuestion No : 15

Q.15 Fill in the blank (2) with the appropriate word from the options below:

- Ans

 1. deserted

 2. empty

 3. bustling

 4. serene

Question ID : 630680385479

Option 1 ID : 6306801502729

Option 2 ID : 6306801502727

Option 3 ID : 6306801502726

Option 4 ID : 6306801502728

Status : Answered

Chosen Option : 3

Comprehension:

Based on the following cloze passage answer the question given below:

The sun was shining brightly as Sarah took a walk in the park. She enjoyed the (1) _____ of the trees and the fragrance of the flowers. The park was (2) _____ with families having picnics, children playing on the swings, and dogs chasing after balls. As Sarah walked along the path, she (3) _____ across an old friend she hadn't seen in years. They stopped to chat and reminisce about their school days.

SubQuestion No : 16

Q.16 Fill in the blank (3) with the appropriate word from the options below:

- Ans

 1. stumbled

 2. bumped

 3. ran

 4. came

Question ID : 630680385480

Option 1 ID : 6306801502730

Option 2 ID : 6306801502731

Option 3 ID : 6306801502732

Option 4 ID : 6306801502733

Status : Answered

Chosen Option : 2

Comprehension:

Based on the following cloze passage answer the question given below:

The sun was shining brightly as Sarah took a walk in the park. She enjoyed the (1) _____ of the trees and the fragrance of the flowers. The park was (2) _____ with families having picnics, children playing on the swings, and dogs chasing after balls. As Sarah walked along the path, she (3) _____ across an old friend she hadn't seen in years. They stopped to chat and reminisce about their school days.

SubQuestion No : 17

Q.17 Fill in the blank (1) with the appropriate word from the options below:

- Ans ☒ 1. blossoming
☒ 2. swaying
☒ 3. rustling
☒ 4. chirping

Question ID : 630680385478

Option 1 ID : 6306801502725

Option 2 ID : 6306801502724

Option 3 ID : 6306801502722

Option 4 ID : 6306801502723

Status : Answered

Chosen Option : 2

Comprehension:

Read the passage carefully and choose the best answer to each question out of the four alternatives

Jawaharlal Nehru, born on November 14, 1889, was India's first Prime Minister and a key figure in the Indian independence movement. He was an ardent supporter of the Indian National Congress and actively participated in civil disobedience against British rule.

As the first Prime Minister after India gained independence in 1947, Nehru worked to shape the nation's future through progressive policies. He focused on economic and social reforms to uplift the masses, emphasized industrialization, and implemented educational advancements.

Nehru's vision for India emphasized secularism and unity in diversity, promoting a pluralistic society that celebrated its cultural heritage. He played a pivotal role in drafting India's Constitution, which enshrined democratic principles and social justice.

Under Nehru's leadership, India pursued a policy of non-alignment during the Cold War, maintaining independence from major power blocs. He also contributed to the founding of the Non-Aligned Movement, advocating for global peace and cooperation.

Nehru's contributions to India's growth and development are deeply cherished, and his legacy as the "Architect of Modern India" continues to inspire generations. His dedication to democracy, secularism, and social justice has left a lasting impact on the nation's history.

SubQuestion No : 18

Q.18 What title best suits the passage?

- Ans ☒ 1. Jawaharlal Nehru's Political Career
☒ 2. The Life of Jawaharlal Nehru
☒ 3. India's Struggle for Independence
☒ 4. Jawaharlal Nehru - Architect of Modern India

Question ID : 630680385548

Option 1 ID : 6306801502976

Option 2 ID : 6306801502974

Option 3 ID : 6306801502975

Option 4 ID : 6306801502977

Status : Answered

Chosen Option : 4

Comprehension:

Read the passage carefully and choose the best answer to each question out of the four alternatives

Jawaharlal Nehru, born on November 14, 1889, was India's first Prime Minister and a key figure in the Indian independence movement. He was an ardent supporter of the Indian National Congress and actively participated in civil disobedience against British rule.

As the first Prime Minister after India gained independence in 1947, Nehru worked to shape the nation's future through progressive policies. He focused on economic and social reforms to uplift the masses, emphasized industrialization, and implemented educational advancements.

Nehru's vision for India emphasized secularism and unity in diversity, promoting a pluralistic society that celebrated its cultural heritage. He played a pivotal role in drafting India's Constitution, which enshrined democratic principles and social justice.

Under Nehru's leadership, India pursued a policy of non-alignment during the Cold War, maintaining independence from major power blocs. He also contributed to the founding of the Non-Aligned Movement, advocating for global peace and cooperation.

Nehru's contributions to India's growth and development are deeply cherished, and his legacy as the "Architect of Modern India" continues to inspire generations. His dedication to democracy, secularism, and social justice has left a lasting impact on the nation's history.

SubQuestion No : 19

Q.19 What progressive policies did Nehru emphasize during his tenure as Prime Minister?

- Ans**
- ☒ 1. Agrarian land redistribution and wealth tax
 - ☒ 2. Economic liberalization and privatization
 - ☒ 3. Industrialization and educational reforms
 - ☒ 4. Military expansion and nuclear armament

Question ID : 630680385550

Option 1 ID : 6306801502985

Option 2 ID : 6306801502982

Option 3 ID : 6306801502984

Option 4 ID : 6306801502983

Status : Answered

Chosen Option : 3

Comprehension:

Read the passage carefully and choose the best answer to each question out of the four alternatives

Jawaharlal Nehru, born on November 14, 1889, was India's first Prime Minister and a key figure in the Indian independence movement. He was an ardent supporter of the Indian National Congress and actively participated in civil disobedience against British rule.

As the first Prime Minister after India gained independence in 1947, Nehru worked to shape the nation's future through progressive policies. He focused on economic and social reforms to uplift the masses, emphasized industrialization, and implemented educational advancements.

Nehru's vision for India emphasized secularism and unity in diversity, promoting a pluralistic society that celebrated its cultural heritage. He played a pivotal role in drafting India's Constitution, which enshrined democratic principles and social justice.

Under Nehru's leadership, India pursued a policy of non-alignment during the Cold War, maintaining independence from major power blocs. He also contributed to the founding of the Non-Aligned Movement, advocating for global peace and cooperation.

Nehru's contributions to India's growth and development are deeply cherished, and his legacy as the "Architect of Modern India" continues to inspire generations. His dedication to democracy, secularism, and social justice has left a lasting impact on the nation's history.

SubQuestion No : 20

Q.20 What can be inferred about Nehru's political ideology based on the passage?

- Ans**
- ☒ 1. He supported a policy of military aggression.
 - ☒ 2. He was indifferent to India's economic development.
 - ☒ 3. He believed in the importance of secularism and social equality.
 - ☒ 4. He was a staunch advocate of religious fundamentalism.

Question ID : 630680385551

Option 1 ID : 6306801502987

Option 2 ID : 6306801502989

Option 3 ID : 6306801502988

Option 4 ID : 6306801502986

Status : Answered

Chosen Option : 3

Comprehension:

Read the passage carefully and choose the best answer to each question out of the four alternatives

Jawaharlal Nehru, born on November 14, 1889, was India's first Prime Minister and a key figure in the Indian independence movement. He was an ardent supporter of the Indian National Congress and actively participated in civil disobedience against British rule.

As the first Prime Minister after India gained independence in 1947, Nehru worked to shape the nation's future through progressive policies. He focused on economic and social reforms to uplift the masses, emphasized industrialization, and implemented educational advancements.

Nehru's vision for India emphasized secularism and unity in diversity, promoting a pluralistic society that celebrated its cultural heritage. He played a pivotal role in drafting India's Constitution, which enshrined democratic principles and social justice.

Under Nehru's leadership, India pursued a policy of non-alignment during the Cold War, maintaining independence from major power blocs. He also contributed to the founding of the Non-Aligned Movement, advocating for global peace and cooperation.

Nehru's contributions to India's growth and development are deeply cherished, and his legacy as the "Architect of Modern India" continues to inspire generations. His dedication to democracy, secularism, and social justice has left a lasting impact on the nation's history.

SubQuestion No : 21

Q.21 What is the central theme of the passage?

- Ans
- ☒ 1. Jawaharlal Nehru's Childhood and Education
 - ☒ 2. India's Economic and Social Reforms
 - ☒ 3. India's Struggle for Independence
 - ☒ 4. The Legacy of Jawaharlal Nehru

Question ID : 630680385549

Option 1 ID : 6306801502979

Option 2 ID : 6306801502981

Option 3 ID : 6306801502978

Option 4 ID : 6306801502980

Status : Answered

Chosen Option : 4

Q.22 Based on the situation given below choose the appropriate proverb from the given options:

Emily was known for her careless spending habits. She would frequently splurge on unnecessary items, often leading to financial difficulties. One day, her friend Sarah noticed Emily shopping for expensive designer clothes even though she was already in debt and struggling to pay her bills. Concerned for her friend's financial well-being, Sarah decided to have a candid conversation with Emily about her spending habits. Which proverb best summarizes the advice Sarah gave to Emily during their conversation?

- Ans
- ☒ 1. All that glitters is not gold
 - ☒ 2. Actions speak louder than words
 - ☒ 3. Don't cry over spilled milk
 - ☒ 4. A penny saved is a penny earned

Question ID : 630680385729

Option 1 ID : 6306801503649

Option 2 ID : 6306801503648

Option 3 ID : 6306801503647

Option 4 ID : 6306801503646

Status : Answered

Chosen Option : 4

Q.23 Arrange the following sentences in the correct order to form a coherent paragraph.
 Their journey to the finals was not an easy one, but they never lost hope.
 A. The team celebrated their hard-earned victory with joy and excitement.
 B. Despite facing numerous challenges, they persevered with unwavering determination.
 C. The coach's strategic guidance played a crucial role in their success.
 D. Throughout the season, the team consistently demonstrated their exceptional skills.
 This triumphant moment marked the culmination of their efforts and teamwork.

- Ans ☒ 1. DBAC
☒ 2. CDBA
☒ 3. BDCA
☒ 4. BACD

Question ID : 630680385251
 Option 1 ID : 6306801501892
 Option 2 ID : 6306801501893
 Option 3 ID : 6306801501891
 Option 4 ID : 6306801501890
 Status : Answered
 Chosen Option : 3

Q.24 Fill in the blank with the most appropriate option.
 Then Miss Skiffins and John both tumbled open together, and _____ shut up together.

- Ans ☒ 1. completely
☒ 2. at last
☒ 3. secretly
☒ 4. finally

Question ID : 630680385335
 Option 1 ID : 6306801502191
 Option 2 ID : 6306801502193
 Option 3 ID : 6306801502190
 Option 4 ID : 6306801502192
 Status : Answered
 Chosen Option : 4

Q.25 Which of the following is a synonym for the word "Obdurate"?

- Ans ☒ 1. Pliable
☒ 2. Vacillating
☒ 3. Intractable
☒ 4. Placid

Question ID : 630680385742
 Option 1 ID : 6306801503701
 Option 2 ID : 6306801503698
 Option 3 ID : 6306801503700
 Option 4 ID : 6306801503699
 Status : Not Answered
 Chosen Option : --