
	<p align="center">DELHI DEVELOPMENT AUTHORITY RECRUITMENT CELL VIKAS SADAN, INA, NEW DELHI - 110023 https://www.dda.gov.in</p>
	Advertisement No. 02/2023/Recrtt. Cell/Pers./DDA
Test Center Name	iON Digital Zone Ganga Nagar Meerut
Test Date	29/09/2023
Test Time	11:30 AM - 12:30 PM
Subject	Assistant Section Officer (ASO)

Section : General Intelligence and Reasoning

Q.1 In the following question three statements are given, followed by two conclusions numbered I and II. Assume three given statements to be true even if they seem to be at variance with commonly known facts and then decide which of the given conclusion logically follows from the two statements disregarding commonly known facts.

Statements :

- Some pens are notes.
- No paper is pen.
- Some notes are papers

Conclusions :

- I. Some notes are not pens.
- II. Some notes are pens

- Ans**
- ✓ 1. Both I and II follows
 - ✗ 2. Neither conclusion I nor II follows
 - ✗ 3. Only II follows
 - ✗ 4. Only I follows

Question ID : 630680384628
 Option 1 ID : 6306801499400
 Option 2 ID : 6306801499401
 Option 3 ID : 6306801499399
 Option 4 ID : 6306801499398

Status : Answered
 Chosen Option : 1

Q.2 In the following question, certain pairs of words are given out of which the words in all pairs except one bear a certain common relationship. Identify the pair in which the words are differently related.

- Ans**
- ✗ 1. Sun - Daylight
 - ✓ 2. Book - Reading
 - ✗ 3. Fire - Heat
 - ✗ 4. Bee - Honey

Question ID : 630680384811
 Option 1 ID : 6306801500130
 Option 2 ID : 6306801500131
 Option 3 ID : 6306801500133
 Option 4 ID : 6306801500132

Status : Answered
 Chosen Option : 2

Test Prime

**ALL EXAMS,
ONE SUBSCRIPTION**



70,000+
Mock Tests



**Personalised
Report Card**



**Unlimited
Re-Attempt**



600+
Exam Covered



**Previous Year
Papers**



**500%
Refund**



ATTEMPT FREE MOCK NOW

Q.3 Given a number series, which alternative should be chosen to continue the same pattern and fill in the blank space.

0, 3, 8, 15, ____

Ans ☒ 1. 24

☒ 2. 26

☒ 3. 21

☒ 4. 20

Question ID : 630680384764

Option 1 ID : 6306801499945

Option 2 ID : 6306801499944

Option 3 ID : 6306801499942

Option 4 ID : 6306801499943

Status : Answered

Chosen Option : 1

Q.4 Identify the term which does not follow the pattern in the given series.

L2, M3, K1, N5, J0

Ans ☒ 1. N5

☒ 2. M3

☒ 3. K1

☒ 4. J0

Question ID : 630680384625

Option 1 ID : 6306801499388

Option 2 ID : 6306801499386

Option 3 ID : 6306801499389

Option 4 ID : 6306801499387

Status : Answered

Chosen Option : 1

Q.5 How many symbols are there in the given series that are immediately preceded by a number and immediately followed by a symbol?

4 @ 9) < 6 1 + 3 = 9 ? ! 7 2 ^ * 5 1 1 % - 2 0 # > 0 - < I = 8 7 " \$ + 5 1

Ans ☒ 1. Seven

☒ 2. Five

☒ 3. Four

☒ 4. Six

Question ID : 630680386160

Option 1 ID : 6306801505350

Option 2 ID : 6306801505353

Option 3 ID : 6306801505351

Option 4 ID : 6306801505352

Status : Answered

Chosen Option : 1

Q.6 In the following question three statements are given, followed by two conclusions numbered I and II. Assume three given statements to be true even if they seem to be at variance with commonly known facts and then decide which of the given conclusion logically follows from the two statements disregarding commonly known facts.
Statement:

Some pots are grass.
Some grass are plants.
All plants are trees.
All trees are forests.
Conclusions:

I. Some forests are pots.
II. Some trees are pots.
III. Some forests are plants
IV. Some trees are grass.

- Ans**
- ☒ 1. Only I and III follow
 - ☒ 2. Only III and IV follow
 - ☒ 3. Only I, II and III follow
 - ☒ 4. Only II, III and IV follow

Question ID : 630680384835

Option 1 ID : 6306801500226

Option 2 ID : 6306801500228

Option 3 ID : 6306801500227

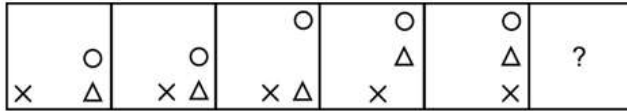
Option 4 ID : 6306801500229

Status : Answered

Chosen Option : 2

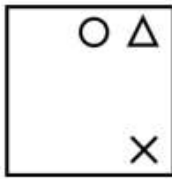


Q.7 Select the figure that will replace the question mark (?) in the following figure series.

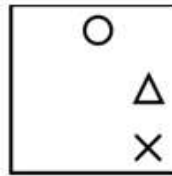


Ans

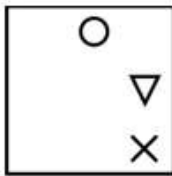
✗ 1.



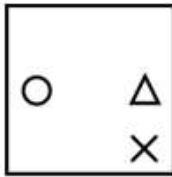
✓ 2.



✗ 3.



✗ 4.



Question ID : 630680384540

Option 1 ID : 6306801499049

Option 2 ID : 6306801499047

Option 3 ID : 6306801499048

Option 4 ID : 6306801499046

Status : Not Answered

Chosen Option : --

Q.8 Four letter-clusters have been given, out of which three are alike in some manner and one is different. Select the odd letter-cluster.

Ans ✗ 1. GILP

✗ 2. HJMQ

✓ 3. SUXA

✗ 4. CEHL

Question ID : 630680384504

Option 1 ID : 6306801498905

Option 2 ID : 6306801498903

Option 3 ID : 6306801498904

Option 4 ID : 6306801498902

Status : Answered

Chosen Option : 3

Q.9 Which of the following letter-number cluster will replace the question mark (?) in the given series?
AGK7, EHM8, ?, MJQ10, QKS11, ULU12

- Ans**
- ☒ 1. IOM10
 - ☒ 2. IIO9
 - ☒ 3. IJO10
 - ☒ 4. JIO9

Question ID : 630680384521

Option 1 ID : 6306801498971

Option 2 ID : 6306801498970

Option 3 ID : 6306801498972

Option 4 ID : 6306801498973

Status : Answered

Chosen Option : 2

Q.10 In the following question, a statement is given followed by three courses of action numbered I, II and III. Identify and answer which course(s) of action logically follows.

Statement: A catastrophic flood has inundated the city, resulting in the loss of hundreds of lives and leaving numerous individuals without homes.

Course of action:

I. Restrict the entry of all individuals from outside the city.

II. The civic department should immediately arrange temporary housing options for the victims.

III. The affected individuals should be immediately relocated to a place that offers greater safety.

- Ans**
- ☒ 1. Only I follows
 - ☒ 2. Either II or III follows
 - ☒ 3. Only II and III follows
 - ☒ 4. Only III follows

Question ID : 630680384787

Option 1 ID : 6306801500034

Option 2 ID : 6306801500037

Option 3 ID : 6306801500036

Option 4 ID : 6306801500035

Status : Answered

Chosen Option : 3

Q.11 Introducing a boy, a girl said, "His sister is the only daughter of my mother." How is that boy related to the girl?

- Ans**
- ☒ 1. Father
 - ☒ 2. Brother
 - ☒ 3. Son
 - ☒ 4. Husband

Question ID : 630680384471

Option 1 ID : 6306801498770

Option 2 ID : 6306801498772

Option 3 ID : 6306801498773

Option 4 ID : 6306801498771

Status : Answered

Chosen Option : 2

Q.12 Find the wrong number in the series:

482, 494, 470, 506, 460, 518

- Ans
- ☒ 1. 506
 - ☒ 2. 460
 - ☒ 3. 518
 - ☒ 4. 494

Question ID : 630680384802

Option 1 ID : 6306801500096

Option 2 ID : 6306801500095

Option 3 ID : 6306801500097

Option 4 ID : 6306801500094

Status : Answered

Chosen Option : 1

Q.13 In a certain code language 'is at on' means 'Trains are fast', 'of an on' means 'Trains and platforms' and 'to go of' means 'Platform is long'. What is the code for 'and'?

- Ans
- ☒ 1. on
 - ☒ 2. an
 - ☒ 3. of
 - ☒ 4. to

Question ID : 630680384477

Option 1 ID : 6306801498796

Option 2 ID : 6306801498794

Option 3 ID : 6306801498795

Option 4 ID : 6306801498797

Status : Answered

Chosen Option : 2

Q.14 Six persons Alice, Bob, Carol, David, Emily, and Frank are sitting in two rows, three in each. Read the following information.

Emily is not at the end of any row.

David is second to the left of Frank.

Carol, the neighbour of Emily, is sitting diagonally opposite to David.

Bob is the neighbour of Frank.

After interchanging seat with Emily, who will be the neighbours of David in the new position ?

- Ans
- ☒ 1. Alice and Carol
 - ☒ 2. Bob and Frank
 - ☒ 3. Alice and Frank
 - ☒ 4. Carol and Bob

Question ID : 630680384617

Option 1 ID : 6306801499354

Option 2 ID : 6306801499357

Option 3 ID : 6306801499355

Option 4 ID : 6306801499356

Status : Answered

Chosen Option : 1

Q.15 If $A + B$ means A is the husband of B, $A - B$ means A is the sister of B and $A \times B$ means A is the son of B, which of the following shows P is the daughter of Q ?

- Ans**
- ☒ 1. $P \times Q - M$
 - ☒ 2. $P - M \times Q$
 - ☒ 3. $P \times M \times Q$
 - ☒ 4. $P + M \times Q$

Question ID : 630680384575

Option 1 ID : 6306801499188

Option 2 ID : 6306801499189

Option 3 ID : 6306801499186

Option 4 ID : 6306801499187

Status : Answered

Chosen Option : 2

Q.16 Select the option that is related to the third number-letter cluster in the same way as the second number-letter cluster is related to the first number-letter cluster.

MOUSE : ESOMU :: DESKTOP : ?

- Ans**
- ☒ 1. POTKSED
 - ☒ 2. POTSEDK
 - ☒ 3. POTEKSD
 - ☒ 4. POSTEDK

Question ID : 630680384491

Option 1 ID : 6306801498852

Option 2 ID : 6306801498850

Option 3 ID : 6306801498853

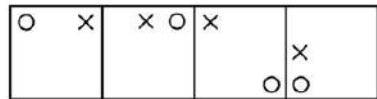
Option 4 ID : 6306801498851

Status : Answered

Chosen Option : 2

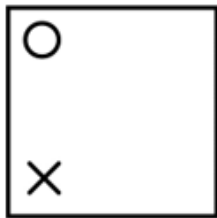
Q.17 Find out the next series from the figures given in the options that follows the sequence of the questions figure.

Question figure:

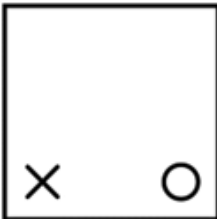


Ans

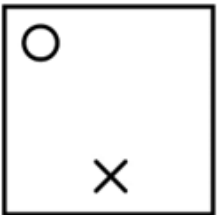
✓ 1.



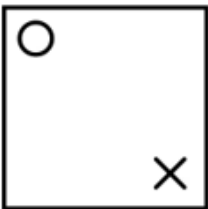
✗ 2.



✗ 3.



✗ 4.



Question ID : 630680384640
Option 1 ID : 6306801499447
Option 2 ID : 6306801499449
Option 3 ID : 6306801499448
Option 4 ID : 6306801499446

Status : Not Answered
Chosen Option : --

Q.18 If the digits within each number are arranged in ascending order, which of the following will be the last digit of the lowest number?

871 534 921 625 351

Ans ✓ 1. 9

✗ 2. 1

✗ 3. 5

✗ 4. 3

Question ID : 630680384452
Option 1 ID : 6306801498696
Option 2 ID : 6306801498694
Option 3 ID : 6306801498697
Option 4 ID : 6306801498695

Status : Answered
Chosen Option : 1

Q.19 Which of the following numbers will replace the question mark (?) in the given series?

7, 8, 12, ?, 37, 62

Ans ✓ 1. 21

✗ 2. 24

✗ 3. 32

✗ 4. 18

Question ID : 630680384696

Option 1 ID : 6306801499671

Option 2 ID : 6306801499672

Option 3 ID : 6306801499673

Option 4 ID : 6306801499670

Status : Answered

Chosen Option : 1

Q.20 There are 89 boxes kept one above the other. What will be the position of the box from the top whose position from the bottom is 44th?

Ans ✓ 1. 46th

✗ 2. 43rd

✗ 3. 44th

✗ 4. 45th

Question ID : 630680384713

Option 1 ID : 6306801499740

Option 2 ID : 6306801499741

Option 3 ID : 6306801499738

Option 4 ID : 6306801499739

Status : Answered

Chosen Option : 1

Q.21 Rearranging the given words in ascending alphabetical order, identify the word that appears at the third place.
Serendipity Serene Spectacular Silhouette Sumptuous Surreal Serenade

Ans ✗ 1. Serendipity

✓ 2. Serene

✗ 3. Serenade

✗ 4. Silhouette

Question ID : 630680386155

Option 1 ID : 6306801505332

Option 2 ID : 6306801505331

Option 3 ID : 6306801505330

Option 4 ID : 6306801505333

Status : Answered

Chosen Option : 2

Q.22 Consider the following table where each digit or symbol is denoted by letters as shown.
Read the given conditions carefully and identify combinations that correctly represents '7\$16#>52' based on the given table and the conditions that follow.
Conditions:
(i) If the first element is an even digit and the last element is a symbol, both are to be coded as the code for the even digit.
(ii) If the first element is a symbol and the last element is an odd digit, their codes are to be interchanged.
(iii) If the first element is an odd digit and the last element is an even digit, both are to be coded as the code for the odd digit.

Digit / Symbol	2	*	6	\$	5	#	@	1	1	7	7	3	>
Letter	K	S	U	D	N	V	E	P	H	F	L	Q	X

- Ans ✗ 1. KDPUVXNK
✗ 2. FDPUVXNF
✓ 3. FDHUVXNF
✗ 4. KDHUVXNK

Question ID : 630680386180
Option 1 ID : 6306801505430
Option 2 ID : 6306801505432
Option 3 ID : 6306801505433
Option 4 ID : 6306801505431
Status : Not Answered
Chosen Option : --

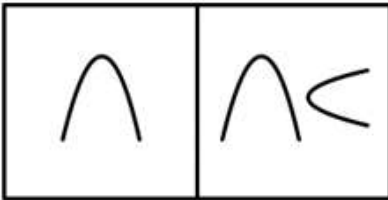


Q.23 Choose a pair similar to the pair in the question figure.

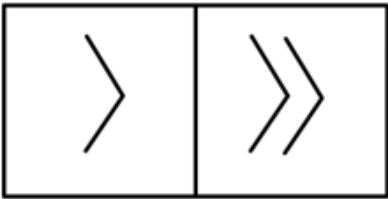


Ans

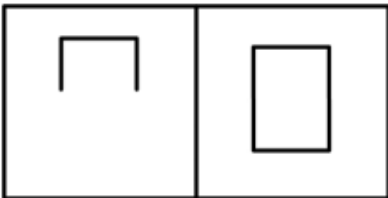
✗ 1.



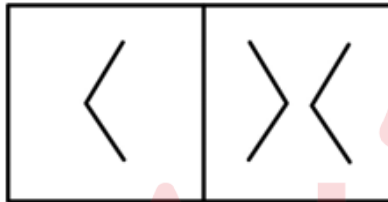
✗ 2.



✗ 3.



✓ 4.



Question ID : 630680384744

Option 1 ID : 6306801499863

Option 2 ID : 6306801499862

Option 3 ID : 6306801499865

Option 4 ID : 6306801499864

Status : Answered

Chosen Option : 3

Q.24 Which of the following numbers will replace the question mark (?) in the given series?

181, 184, 190, ?, 226, 274

Ans

✗ 1. 225

✗ 2. 200

✓ 3. 202

✗ 4. 195

Question ID : 630680384661

Option 1 ID : 6306801499533

Option 2 ID : 6306801499531

Option 3 ID : 6306801499532

Option 4 ID : 6306801499530

Status : Answered

Chosen Option : 3

Q.25 Find the missing element in the given set to make them equal.

A = {Letters of the word MOMENTUM}

B = {MM, NU, OE, ?}

- Ans
- ☒ 1. MT
 - ☒ 2. TM
 - ☒ 3. ET
 - ☒ 4. TE

Question ID : 630680386186

Option 1 ID : 6306801505457

Option 2 ID : 6306801505454

Option 3 ID : 6306801505455

Option 4 ID : 6306801505456

Status : Answered

Chosen Option : 2

Section : General Awareness

Q.1 As per census data of 2011, what is the literacy rate in India?

- Ans
- ☒ 1. 60%
 - ☒ 2. 91%
 - ☒ 3. 84%
 - ☒ 4. 74.04%

Question ID : 630680386465

Option 1 ID : 6306801506573

Option 2 ID : 6306801506572

Option 3 ID : 6306801506571

Option 4 ID : 6306801506570

Status : Answered

Chosen Option : 4

Q.2 The "Chola Dynasty" reached its peak under which ruler, who was a great patron of arts and is known for building the "Brihadeeswara Temple" in Thanjavur?

- Ans
- ☒ 1. Rajendra Chola I
 - ☒ 2. Rajendra Chola II
 - ☒ 3. Kulottunga Chola I
 - ☒ 4. Rajaraja Chola I

Question ID : 630680384217

Option 1 ID : 6306801497758

Option 2 ID : 6306801497761

Option 3 ID : 6306801497760

Option 4 ID : 6306801497759

Status : Answered

Chosen Option : 1

Q.3 Which of the following languages was NOT included to the Eighth Schedule of the Indian Constitution?

- Ans**
- ☒ 1. Maithili
 - ☒ 2. Nepali
 - ☒ 3. Prakrit
 - ☒ 4. Manipuri

Question ID : 630680384177
 Option 1 ID : 6306801497601
 Option 2 ID : 6306801497599
 Option 3 ID : 6306801497600
 Option 4 ID : 6306801497598
 Status : Answered
 Chosen Option : 3

Q.4 The _____ is the headquarters of Ramakrishna Mission.

- Ans**
- ☒ 1. Ramakrishna Ashrama, Rajkot
 - ☒ 2. Baranagar Math, Baranagore
 - ☒ 3. Belur Math, West Bengal
 - ☒ 4. Ramakrishna Kutir, Almora

Question ID : 630680384234
 Option 1 ID : 6306801497827
 Option 2 ID : 6306801497829
 Option 3 ID : 6306801497828
 Option 4 ID : 6306801497826
 Status : Answered
 Chosen Option : 3

Q.5 Who is known as the "Rocket Women of India" who led the Chandrayaan 3 mission?

- Ans**
- ☒ 1. Dr. Ritu Karidhal Srivastava
 - ☒ 2. Dr. Indira Hinduja
 - ☒ 3. Dr. Aditi Pant
 - ☒ 4. Moumita Dutta

Question ID : 630680384242
 Option 1 ID : 6306801497855
 Option 2 ID : 6306801497856
 Option 3 ID : 6306801497854
 Option 4 ID : 6306801497857
 Status : Answered
 Chosen Option : 1

Q.6 During which festival do devotees take part in the ritual of "Char Dham Yatra," visiting the four holy shrines in Uttarakhand?

- Ans**
- ☒ 1. Akshaya Tritiya
 - ☒ 2. Guru Nanak Jayanti
 - ☒ 3. Navratri
 - ☒ 4. Jagannath Rath Yatra

Question ID : 630680384401
 Option 1 ID : 6306801498490
 Option 2 ID : 6306801498492
 Option 3 ID : 6306801498491
 Option 4 ID : 6306801498493
 Status : Answered
 Chosen Option : 3

Q.7 Which of the following states has the largest area under forest cover?

- Ans
- ☒ 1. Jharkhand
 - ☒ 2. Rajasthan
 - ☒ 3. Kerala
 - ☒ 4. Madhya Pradesh

Question ID : 630680384101
 Option 1 ID : 6306801497295
 Option 2 ID : 6306801497294
 Option 3 ID : 6306801497297
 Option 4 ID : 6306801497296
 Status : Answered
 Chosen Option : 4

Q.8 Which film won the Academy Award for Best Picture in 2021?

- Ans
- ☒ 1. The Trial of the Chicago 7
 - ☒ 2. Minari
 - ☒ 3. Nomad land
 - ☒ 4. Sound of Metal

Question ID : 630680384395
 Option 1 ID : 6306801498467
 Option 2 ID : 6306801498468
 Option 3 ID : 6306801498466
 Option 4 ID : 6306801498469
 Status : Answered
 Chosen Option : 3

Q.9 Which of the following is an Economic Infrastructure?

- Ans
- ☒ 1. Housing
 - ☒ 2. Education
 - ☒ 3. Irrigation
 - ☒ 4. Water Supply

Question ID : 630680384090
 Option 1 ID : 6306801497250
 Option 2 ID : 6306801497251
 Option 3 ID : 6306801497252
 Option 4 ID : 6306801497253
 Status : Answered
 Chosen Option : 3

Q.10 Which among the following states in India has the highest per capita income as per 2021 census?

- Ans
- ☒ 1. Mumbai
 - ☒ 2. Gujrat
 - ☒ 3. Kerala
 - ☒ 4. Goa

Question ID : 630680384286
 Option 1 ID : 6306801498031
 Option 2 ID : 6306801498033
 Option 3 ID : 6306801498030
 Option 4 ID : 6306801498032
 Status : Answered
 Chosen Option : 4

Q.11 Which government initiative in India focuses on skill development and vocational training to enhance employability and entrepreneurship among the youth?

- Ans
- ☒ 1. Pradhan Mantri Fasal Bima Yojana
 - ☒ 2. Atal Pension Yojana
 - ☒ 3. Ujjwala Yojana
 - ☒ 4. Pradhan Mantri Kaushal Vikas Yojana

Question ID : 630680386449
 Option 1 ID : 6306801506506
 Option 2 ID : 6306801506507
 Option 3 ID : 6306801506509
 Option 4 ID : 6306801506508
 Status : Answered
 Chosen Option : 4

Q.12 Which Government of the following states has launched the One Stop Centre initiative, which provides legal and counselling services to women who have experienced violence?

- Ans
- ☒ 1. Punjab
 - ☒ 2. Mumbai
 - ☒ 3. Karnataka
 - ☒ 4. Delhi

Question ID : 630680384252
 Option 1 ID : 6306801497895
 Option 2 ID : 6306801497896
 Option 3 ID : 6306801497894
 Option 4 ID : 6306801497897
 Status : Answered
 Chosen Option : 3

Q.13 Who among the following won gold medal in Javelin Throw in the World Para Athletics Competition held in Paris 2023?

- Ans
- ☒ 1. Avani Lekhara
 - ☒ 2. Sachin Sarjerao Khilari
 - ☒ 3. Ajeet Singh
 - ☒ 4. Devendra Jhajharia

Question ID : 630680384258
 Option 1 ID : 6306801497921
 Option 2 ID : 6306801497918
 Option 3 ID : 6306801497919
 Option 4 ID : 6306801497920
 Status : Answered
 Chosen Option : 2

Q.14 Which of the following is the first state in India to use Robotic Manhole Cleaners?

- Ans
- ☒ 1. Gujrat
 - ☒ 2. Assam
 - ☒ 3. Kerala
 - ☒ 4. Jharkhand

Question ID : 630680384245
 Option 1 ID : 6306801497866
 Option 2 ID : 6306801497867
 Option 3 ID : 6306801497868
 Option 4 ID : 6306801497869
 Status : Answered
 Chosen Option : 1

Q.15 Which country does not share a land border with India?

- Ans
- ☒ 1. Myanmar
 - ☒ 2. Sri Lanka
 - ☒ 3. Nepal
 - ☒ 4. Bangladesh

Question ID : 630680386452
 Option 1 ID : 6306801506521
 Option 2 ID : 6306801506519
 Option 3 ID : 6306801506518
 Option 4 ID : 6306801506520
 Status : Answered
 Chosen Option : 2

Q.16 Which of the following factors can contribute to an increase in the unemployment rate in India?

- Ans
- ☒ 1. Increase in government spending on infrastructure projects
 - ☒ 2. Implementation of labor market reforms
 - ☒ 3. Expansionary monetary policy by the central bank
 - ☒ 4. Technological advancements leading to automation

Question ID : 630680386440
 Option 1 ID : 6306801506472
 Option 2 ID : 6306801506470
 Option 3 ID : 6306801506473
 Option 4 ID : 6306801506471
 Status : Answered
 Chosen Option : 4

Q.17 In which of the following states does the monsoon arrive first?

- Ans
- ☒ 1. Kerala
 - ☒ 2. Gujrat
 - ☒ 3. Maharashtra
 - ☒ 4. Assam

Question ID : 630680384106
 Option 1 ID : 6306801497315
 Option 2 ID : 6306801497314
 Option 3 ID : 6306801497317
 Option 4 ID : 6306801497316
 Status : Answered
 Chosen Option : 1

Q.18 Who is the author of the autobiography "Wings of Fire," which tells the inspiring life story of a renowned Indian scientist and former President of India?

- Ans
- ☒ 1. Amartya Sen
 - ☒ 2. R.K. Narayan
 - ☒ 3. Arundhati Roy
 - ☒ 4. A.P.J. Abdul Kalam

Question ID : 630680386418
 Option 1 ID : 6306801506385
 Option 2 ID : 6306801506383
 Option 3 ID : 6306801506384
 Option 4 ID : 6306801506382
 Status : Answered
 Chosen Option : 4

Q.19 Which of the following was not built by Shah Jahan?

- Ans
- ☒ 1. Red Fort of Agra
 - ☒ 2. The Pearl Mosque at Agra
 - ☒ 3. Red Fort of Delhi
 - ☒ 4. Jama Masjid of Delhi

Question ID : 630680384222
 Option 1 ID : 6306801497781
 Option 2 ID : 6306801497779
 Option 3 ID : 6306801497780
 Option 4 ID : 6306801497778
 Status : Answered
 Chosen Option : 2

Q.20 "Bhagat Singh," a revolutionary freedom fighter, was executed by the British colonial government for his involvement in the Saunders murder case. In which year was Bhagat Singh executed?

- Ans
- ☒ 1. 1947
 - ☒ 2. 1950
 - ☒ 3. 1942
 - ☒ 4. 1931

Question ID : 630680384225
 Option 1 ID : 6306801497791
 Option 2 ID : 6306801497790
 Option 3 ID : 6306801497792
 Option 4 ID : 6306801497793
 Status : Answered
 Chosen Option : 4

Q.21 Which of the following is a Government Initiative for the development of leadership of women belonging to minority communities?

- Ans ☒ 1. Seekho Aur Kamao
☒ 2. Nai Udaan
☒ 3. Nai Roshni
☒ 4. Jiyo Parsi

Question ID : 630680384250
 Option 1 ID : 6306801497886
 Option 2 ID : 6306801497889
 Option 3 ID : 6306801497887
 Option 4 ID : 6306801497888
 Status : Answered
 Chosen Option : 3

Q.22 Who has won Dronacharya Award (Lifetime) for Cricket during National Sports Awards 2022?

- Ans ☒ 1. Raj Singh
☒ 2. Suma Siddharth Shirur
☒ 3. Jiwanjot Singh Teja
☒ 4. Dinesh Jawahar Lad

Question ID : 630680386412
 Option 1 ID : 6306801506358
 Option 2 ID : 6306801506360
 Option 3 ID : 6306801506361
 Option 4 ID : 6306801506359
 Status : Answered
 Chosen Option : 2

Q.23 Which river forms the largest delta in India?

- Ans ☒ 1. Godavari River
☒ 2. Krishna River
☒ 3. Brahmaputra River
☒ 4. Ganges River

Question ID : 630680384430
 Option 1 ID : 6306801498607
 Option 2 ID : 6306801498608
 Option 3 ID : 6306801498609
 Option 4 ID : 6306801498606
 Status : Answered
 Chosen Option : 4

Q.24 Which festival of India celebrates the victory of good over evil and is known for its grand processions, music, and dance performances?

- Ans ☒ 1. Navratri
☒ 2. Holi
☒ 3. Diwali
☒ 4. Durga Puja

Question ID : 630680386423
 Option 1 ID : 6306801506405
 Option 2 ID : 6306801506403
 Option 3 ID : 6306801506402
 Option 4 ID : 6306801506404
 Status : Answered

Q.25 Which event marked the beginning of the Indian independence movement?

- Ans** ✓ 1. Indian Rebellion of 1857
 ✗ 2. Jallianwala Bagh Massacre
 ✗ 3. Partition of Bengal
 ✗ 4. Quit India Movement

Question ID : 630680386483
 Option 1 ID : 6306801506644
 Option 2 ID : 6306801506643
 Option 3 ID : 6306801506645
 Option 4 ID : 6306801506642
 Status : Answered
 Chosen Option : 1

Section : Quantitative Aptitude

Q.1 If on selling 44 items, a shopkeeper gains the selling price of 11 items, find the profit percentage.

- Ans** ✓ 1. 33.33%
 ✗ 2. 12%
 ✗ 3. 27.77%
 ✗ 4. 50%

Question ID : 630680385191
 Option 1 ID : 6306801501652
 Option 2 ID : 6306801501650
 Option 3 ID : 6306801501653
 Option 4 ID : 6306801501651
 Status : Answered
 Chosen Option : 1

Q.2 If $A : B : C = 1 : 5 : 9$ and $A - 2B + 5C = 72$, then find the value of C

- Ans** ✗ 1. 9
 ✓ 2. 18
 ✗ 3. 27
 ✗ 4. 81

Question ID : 630680385198
 Option 1 ID : 6306801501679
 Option 2 ID : 6306801501678
 Option 3 ID : 6306801501680
 Option 4 ID : 6306801501681
 Status : Answered
 Chosen Option : 2

Q.3 The volume of a cube is 2197 cm^3 . Find the surface area of the cube.

- Ans
- ☒ 1. 1044 cm^2
 - ☒ 2. 1022 cm^2
 - ☒ 3. 1024 cm^2
 - ☒ 4. 1014 cm^2

Question ID : 630680384887
Option 1 ID : 6306801500435
Option 2 ID : 6306801500437
Option 3 ID : 6306801500434
Option 4 ID : 6306801500436
Status : Answered
Chosen Option : 4

Q.4 A person who spends 42% of his income is able to save ₹ 40600 per month. Find his monthly income.

- Ans
- ☒ 1. ₹81000
 - ☒ 2. ₹70000
 - ☒ 3. ₹67000
 - ☒ 4. ₹54000

Question ID : 630680385171
Option 1 ID : 6306801501573
Option 2 ID : 6306801501571
Option 3 ID : 6306801501572
Option 4 ID : 6306801501570
Status : Answered
Chosen Option : 2

Q.5 If A, B, and C can do a certain work in 10, 20, and 30 days respectively, then find the time taken by them to do half of the work together.

- Ans
- ☒ 1. $\frac{45}{11}$ days
 - ☒ 2. $\frac{15}{11}$ days
 - ☒ 3. $\frac{60}{11}$ days
 - ☒ 4. $\frac{30}{11}$ days

Question ID : 630680385206
Option 1 ID : 6306801501710
Option 2 ID : 6306801501713
Option 3 ID : 6306801501712
Option 4 ID : 6306801501711
Status : Answered
Chosen Option : 4

Q.6 What is the approximate quantity of paper required to roll up a right circular cone whose base is of diameter 40 m and height 21 m?

(Take $\pi = \frac{22}{7}$)

- Ans**
- ☒ 1. 1878.86 m²
 - ☒ 2. 1855.86 m²
 - ☒ 3. 1822.86 m²
 - ☒ 4. 1922.86 m²

Question ID : 630680385799

Option 1 ID : 6306801503916

Option 2 ID : 6306801503915

Option 3 ID : 6306801503914

Option 4 ID : 6306801503917

Status : Not Answered

Chosen Option : --

Q.7 The value of $1 - \operatorname{cosec}^2 A + \cot^2 A$ is equal to:

- Ans**
- ☒ 1. Infinite
 - ☒ 2. 1
 - ☒ 3. 2
 - ☒ 4. 0

Question ID : 630680384946

Option 1 ID : 6306801500673

Option 2 ID : 6306801500672

Option 3 ID : 6306801500671

Option 4 ID : 6306801500670

Status : Answered

Chosen Option : 4

Q.8 Find the average speed of a car for the whole journey when it travels from A to B at the speed of 40 km/hr and B to A at the speed of 60 km/hr.

- Ans**
- ☒ 1. 48 km/hr
 - ☒ 2. 50 km/hr
 - ☒ 3. 45 km/hr
 - ☒ 4. 54 km/hr

Question ID : 630680385127

Option 1 ID : 6306801501396

Option 2 ID : 6306801501395

Option 3 ID : 6306801501394

Option 4 ID : 6306801501397

Status : Answered

Chosen Option : 1

Q.9 The complement angle of 56° is _____.

Ans

☒ 1. $\frac{18\pi}{19}$

☒ 2. $\frac{17\pi}{90}$

☒ 3. $\frac{15\pi}{32}$

☒ 4. $\frac{17\pi}{180}$

Question ID : 630680385831

Option 1 ID : 6306801504045

Option 2 ID : 6306801504043

Option 3 ID : 6306801504042

Option 4 ID : 6306801504044

Status : Not Answered

Chosen Option : --

Q.10 If 16534A209, is divisible by 9, what will be the minimum value of A?

Ans

☒ 1. 6

☒ 2. 3

☒ 3. 4

☒ 4. 2

Question ID : 630680385160

Option 1 ID : 6306801501528

Option 2 ID : 6306801501529

Option 3 ID : 6306801501526

Option 4 ID : 6306801501527

Status : Answered

Chosen Option : 1

Q.11 Find the length of the chord KN of a circle with centre X. KM and NO are two diameters perpendicular to each other.

Ans

☒ 1. $\frac{1}{\sqrt{2}}$ KM

☒ 2. 1 KM

☒ 3. $\frac{2}{3}$ KM

☒ 4. $\frac{1}{2}$ KM

Question ID : 630680385009

Option 1 ID : 6306801500923

Option 2 ID : 6306801500925

Option 3 ID : 6306801500922

Option 4 ID : 6306801500924

Status : Answered

Chosen Option : 1

Q.12 Subham and Sourav entered a partnership by investing ₹10000 and ₹25000 respectively. After 6 months Sashi joins by investing ₹45000. Find the ratio of profit shared by them after a year.

- Ans
- ☒ 1. 8 : 17 : 15
 - ☒ 2. 5 : 9 : 7
 - ☒ 3. 4 : 10 : 9
 - ☒ 4. 7 : 11 : 13

Question ID : 630680385193

Option 1 ID : 6306801501660

Option 2 ID : 6306801501661

Option 3 ID : 6306801501659

Option 4 ID : 6306801501658

Status : Answered

Chosen Option : 3

Q.13 The average of ten observations was 90. If each number is added by 9, find the new average.

- Ans
- ☒ 1. 99.9
 - ☒ 2. 99
 - ☒ 3. 81
 - ☒ 4. 90

Question ID : 630680385131

Option 1 ID : 6306801501411

Option 2 ID : 6306801501410

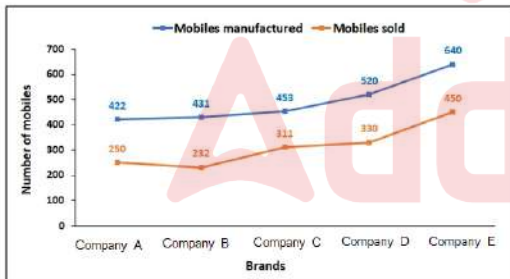
Option 3 ID : 6306801501413

Option 4 ID : 6306801501412

Status : Answered

Chosen Option : 2

Q.14 The line graph shows the number of mobiles manufactured and the number of mobiles sold by five different brands. Find the difference between the number of mobiles unsold by Company D and Company A.



- Ans
- ☒ 1. 18
 - ☒ 2. 11
 - ☒ 3. 22
 - ☒ 4. 34

Question ID : 630680385138

Option 1 ID : 6306801501441

Option 2 ID : 6306801501440

Option 3 ID : 6306801501438

Option 4 ID : 6306801501439

Status : Answered

Chosen Option : 1

Q.15 A shopkeeper bought some pens at ₹5 each. He sold $\frac{3}{5}$ th of the pens at 20% profit and the remaining pens at 15% loss. Find the overall profit or loss %.

- Ans**
- ☒ 1. 8% profit
 - ☒ 2. 6% loss
 - ☒ 3. 6% profit
 - ☒ 4. 8% loss

Question ID : 630680385185
 Option 1 ID : 6306801501628
 Option 2 ID : 6306801501626
 Option 3 ID : 6306801501629
 Option 4 ID : 6306801501627
 Status : Answered
 Chosen Option : 3

Q.16 If two triangles MNQ and XYZ where $\angle N = \angle Y = 90^\circ$, $NQ = YZ$ and $MQ = XZ$, then they are congruent by which rule?

- Ans**
- ☒ 1. RHS
 - ☒ 2. SSS
 - ☒ 3. SAS
 - ☒ 4. AAS

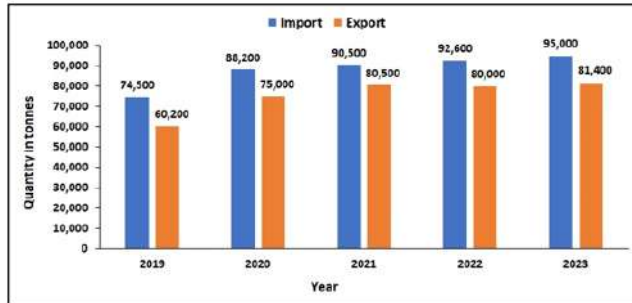
Question ID : 630680384917
 Option 1 ID : 6306801500556
 Option 2 ID : 6306801500557
 Option 3 ID : 6306801500555
 Option 4 ID : 6306801500554
 Status : Answered
 Chosen Option : 1

Q.17 If $3i + j = 12$ and $ij = 9$, then the value of $(3i - j)$ is:

- Ans**
- ☒ 1. 6
 - ☒ 2. 9
 - ☒ 3. 0
 - ☒ 4. 3

Question ID : 630680384955
 Option 1 ID : 6306801500708
 Option 2 ID : 6306801500709
 Option 3 ID : 6306801500706
 Option 4 ID : 6306801500707
 Status : Answered
 Chosen Option : 4

Q.18 The bar graph shows the import and export of wheat of a country over five years (in tonnes).
Find the difference in the total export and import done by the country over the given years (in tonnes).



- Ans
- ☒ 1. 64300
 - ☒ 2. 43600
 - ☒ 3. 63700
 - ☒ 4. 76300

Question ID : 630680385135

Option 1 ID : 6306801501426

Option 2 ID : 6306801501428

Option 3 ID : 6306801501427

Option 4 ID : 6306801501429

Status : Answered

Chosen Option : 3

Q.19 If Pipe A can fill a tank in 8 hours, pipe B can fill in 12 hours and pipe C can empty it in 10 hours, find the time taken to fill the tank when all three pipes are opened simultaneously.

- Ans
- ☒ 1. $\frac{110}{17}$ hours
 - ☒ 2. $\frac{120}{11}$ hours
 - ☒ 3. $\frac{110}{19}$ hours
 - ☒ 4. $\frac{120}{13}$ hours

Question ID : 630680385207

Option 1 ID : 6306801501716

Option 2 ID : 6306801501714

Option 3 ID : 6306801501717

Option 4 ID : 6306801501715

Status : Answered

Chosen Option : 4

Q.20 Find the value of $0.7 \times 3.3 - 2.2 \div 0.4 + 3.22$

- Ans
- ☒ 1. 0.03
 - ☒ 2. 0.13
 - ☒ 3. 0.23
 - ☒ 4. 0.33

Question ID : 630680385157

Option 1 ID : 6306801501515

Option 2 ID : 6306801501514

Option 3 ID : 6306801501516

Option 4 ID : 6306801501517

Status : Answered

Q.21 Find the area of four walls and ceiling of a room having length 90 cm, breadth 80 cm and height 60 cm.

- Ans**
- ☒ 1. 20400 cm²
 - ☒ 2. 7200 cm²
 - ☒ 3. 27600 cm²
 - ☒ 4. 14440 cm²

Question ID : 630680385155

Option 1 ID : 6306801501507

Option 2 ID : 6306801501506

Option 3 ID : 6306801501509

Option 4 ID : 6306801501508

Status : Answered

Chosen Option : 1

Q.22 If savings of Abhinav is 20% more than his expenditure, find the amount saved by him monthly, if his annual income is ₹ 66000.

- Ans**
- ☒ 1. ₹ 1200
 - ☒ 2. ₹ 3000
 - ☒ 3. ₹ 3600
 - ☒ 4. ₹ 2500

Question ID : 630680385167

Option 1 ID : 6306801501557

Option 2 ID : 6306801501555

Option 3 ID : 6306801501554

Option 4 ID : 6306801501556

Status : Answered

Chosen Option : 3

Q.23 If $2x + 5y = 19$ and $xy = 6$, then find the value of $8x^3 + 125y^3$.

- Ans**
- ☒ 1. 3499
 - ☒ 2. 3439
 - ☒ 3. 2455
 - ☒ 4. 3433

Question ID : 630680384859

Option 1 ID : 6306801500323

Option 2 ID : 6306801500324

Option 3 ID : 6306801500325

Option 4 ID : 6306801500322

Status : Answered

Chosen Option : 1

Q.24 Find the circumference of a circle whose diameter is 42 cm.

- Ans
- ☒ 1. 127 cm
 - ☒ 2. 121 cm
 - ☒ 3. 122 cm
 - ☒ 4. 132 cm

Question ID : 630680385141
Option 1 ID : 6306801501453
Option 2 ID : 6306801501452
Option 3 ID : 6306801501450
Option 4 ID : 6306801501451
Status : Answered
Chosen Option : 4

Q.25 If $s + 2t = 19$ and $s^3 + 8t^3 = 361$, then st is equal to:

- Ans
- ☒ 1. 63
 - ☒ 2. 57
 - ☒ 3. 43
 - ☒ 4. 71

Question ID : 630680384953
Option 1 ID : 6306801500700
Option 2 ID : 6306801500699
Option 3 ID : 6306801500698
Option 4 ID : 6306801500701
Status : Not Answered
Chosen Option : --

Section : English Comprehension

Q.1 The sentences given below are all part of a paragraph but do not necessarily fall in the order that they are in. The first and the last sentences of the paragraph are given. Choose the option that arranges these sentences to form a meaningful paragraph.
Before this I was not unacquainted with the more obvious
A. laws of electricity. On this occasion a man of great
B. this catastrophe, he entered on the explanation of a theory
C. research in natural philosophy was with us, and excited by
D. which he had formed on the subject of electricity and galvanism, which was at once new and astonishing to me.

- Ans
- ☒ 1. ACBD
 - ☒ 2. BACD
 - ☒ 3. CABD
 - ☒ 4. DABC

Question ID : 630680385363
Option 1 ID : 6306801502305
Option 2 ID : 6306801502303
Option 3 ID : 6306801502302
Option 4 ID : 6306801502304
Status : Answered
Chosen Option : 1

Q.2 Fill in the blank with the most appropriate option.
The trainer asked him to _____ to the rope a little longer in order to pass the test.

- Ans** ☒ 1. hold on
☐ 2. turn around
☐ 3. move on
☐ 4. put back

Question ID : 630680385578
Option 1 ID : 6306801503091
Option 2 ID : 6306801503092
Option 3 ID : 6306801503090
Option 4 ID : 6306801503093
Status : Answered
Chosen Option : 1

Q.3 Select the word segment that substitutes the bracketed word segment correctly and completes the sentence meaningfully.
The old building was (dilapidate) and in urgent need of repair.

- Ans** ☐ 1. renovated
☐ 2. modern
☒ 3. deteriorated
☐ 4. functional

Question ID : 630680385504
Option 1 ID : 6306801502812
Option 2 ID : 6306801502810
Option 3 ID : 6306801502811
Option 4 ID : 6306801502813
Status : Answered
Chosen Option : 3

Q.4 Select the most appropriate word for the given group of words.
A person who is indifferent to pleasure or pain

- Ans** ☒ 1. Stoic
☐ 2. Altruist
☐ 3. Hedonist
☐ 4. Egotist

Question ID : 630680385503
Option 1 ID : 6306801502807
Option 2 ID : 6306801502806
Option 3 ID : 6306801502808
Option 4 ID : 6306801502809
Status : Answered
Chosen Option : 1

Q.5 Select the word from the options which is the same in meaning to the bracketed word given in the sentence below.
The moral (obloquy) for that choice falls on those who make it, not on those who react to it.

- Ans** ☒ 1. abuse
☒ 2. rookie
☒ 3. insight
☒ 4. approval

Question ID : 630680385659
Option 1 ID : 6306801503395
Option 2 ID : 6306801503397
Option 3 ID : 6306801503396
Option 4 ID : 6306801503394
Status : Answered
Chosen Option : 3

Q.6 Choose the negative question tag from the options given below:
What is the capital city of France?

- Ans** ☒ 1. Paris, isn't it?
☒ 2. Paris, aren't they?
☒ 3. Paris, is it?
☒ 4. Paris, are they?

Question ID : 630680385686
Option 1 ID : 6306801503486
Option 2 ID : 6306801503487
Option 3 ID : 6306801503488
Option 4 ID : 6306801503489
Status : Answered
Chosen Option : 1

Q.7 Select the most appropriate word for the given group of words.
To forbid something, especially by law

- Ans** ☒ 1. Propound
☒ 2. Quench
☒ 3. Proscribe
☒ 4. Quarantine

Question ID : 630680385509
Option 1 ID : 6306801502832
Option 2 ID : 6306801502831
Option 3 ID : 6306801502833
Option 4 ID : 6306801502830
Status : Answered
Chosen Option : 3

Comprehension:

In the following passage some words have been deleted. Fill in the blanks with the help of the alternatives given. Select the most appropriate option for each number.

The interior was unprosperous and (1) _____; the only car visible was the dust-covered (2) _____ of a Ford which crouched in a dim (3) _____.

SubQuestion No : 8

Q.8 Select the most appropriate option to fill in the blank No. 2.

- Ans ☒ 1. wreck
☐ 2. profile
☐ 3. outline
☐ 4. silhouette

Question ID : 630680385382
Option 1 ID : 6306801502359
Option 2 ID : 6306801502360
Option 3 ID : 6306801502358
Option 4 ID : 6306801502361
Status : Answered
Chosen Option : 1

Comprehension:

In the following passage some words have been deleted. Fill in the blanks with the help of the alternatives given. Select the most appropriate option for each number.

The interior was unprosperous and (1) _____; the only car visible was the dust-covered (2) _____ of a Ford which crouched in a dim (3) _____.

SubQuestion No : 9

Q.9 Select the most appropriate option to fill in the blank No. 3.

- Ans ☒ 1. corner
☐ 2. point
☐ 3. edge
☐ 4. side

Question ID : 630680385383
Option 1 ID : 6306801502364
Option 2 ID : 6306801502363
Option 3 ID : 6306801502362
Option 4 ID : 6306801502365
Status : Answered
Chosen Option : 3

Comprehension:

In the following passage some words have been deleted. Fill in the blanks with the help of the alternatives given. Select the most appropriate option for each number.

The interior was unprosperous and (1) _____; the only car visible was the dust-covered (2) _____ of a Ford which crouched in a dim (3) _____.

SubQuestion No : 10

Q.10 Select the most appropriate option to fill in the blank No. 1.

- Ans
- ☒ 1. beer
 - ☒ 2. bear
 - ☒ 3. baire
 - ☒ 4. bare

Question ID : 630680385381
Option 1 ID : 6306801502355
Option 2 ID : 6306801502354
Option 3 ID : 6306801502356
Option 4 ID : 6306801502357
Status : Answered
Chosen Option : 3

Q.11 Arrange the following sentences in the correct order to form a coherent paragraph:

The funding for the research was provided by a prestigious scientific foundation.
A. The scientist presented the research findings at an international conference.
B. The team conducted experiments and analyzed data for several months.
C. The research project aimed to explore potential applications in the field of medicine.
D. The audience was impressed by the significance of the discoveries made.
The scientific community praised the team's contributions to the field.

- Ans
- ☒ 1. CADB
 - ☒ 2. BCAD
 - ☒ 3. DACB
 - ☒ 4. DBAC

Question ID : 630680385702
Option 1 ID : 6306801503551
Option 2 ID : 6306801503553
Option 3 ID : 6306801503550
Option 4 ID : 6306801503552
Status : Answered
Chosen Option : 2

Q.12 Select the missing sentence that would logically follow the paragraph:

The Industrial Revolution, which began in the late 18th century, brought significant changes to society. It marked a shift from agrarian and manual labour-based economies to industrialized and mechanized production. Factories emerged, and mass production led to an abundance of goods. Although it revolutionised the way goods were produced, it also brought challenges like poor working conditions and income inequality. _____.

- Ans
- ☒ 1. Steam engines played a crucial role in powering factories during this era.
 - ☒ 2. Child labour was the worst of them as it till date also affects the modern society.
 - ☒ 3. The textile industry was one of the first to undergo mechanization.
 - ☒ 4. The Industrial Revolution resulted in the decline of traditional craftsmanship.

Question ID : 630680385697
Option 1 ID : 6306801503532
Option 2 ID : 6306801503533
Option 3 ID : 6306801503530
Option 4 ID : 6306801503531
Status : Answered
Chosen Option : 2

Q.13 Fill in the blank with the most appropriate option.

He threw down the cigar, understanding her, and departed _____ the doorway.

Ans ☒ 1. beyond

☒ 2. through

☒ 3. against

☒ 4. besides

Question ID : 630680385574

Option 1 ID : 6306801503077

Option 2 ID : 6306801503076

Option 3 ID : 6306801503075

Option 4 ID : 6306801503074

Status : Answered

Chosen Option : 2

Comprehension:

Read the passage carefully and choose the best answer to each question out of the four alternatives.

Colonialism, a system where one country extends its control over another region or territory, has had a profound impact on the world's history and development. During the age of exploration, powerful European nations embarked on voyages, seeking new lands and resources to expand their empires.

The consequences of colonialism were far-reaching. Indigenous cultures and societies in colonized regions often faced exploitation, oppression, and forced assimilation into European norms. Economic exploitation was rampant, as resources were extracted to enrich the colonizers at the expense of the colonized.

Colonialism also had a significant impact on social and political structures. The imposition of foreign laws and governance disrupted traditional systems, leading to power struggles and conflicts within the colonized territories.

Moreover, the legacies of colonialism continue to shape the world today. Former colonies still grapple with the aftermath of their colonial past, including issues of identity, economic disparities, and social inequalities. Additionally, colonial boundaries have often resulted in ethnic and tribal tensions, impacting post-colonial nations' stability.

Despite the negative aspects, colonialism also facilitated the exchange of knowledge, technology, and cultures between different parts of the world. It led to the spread of language, religion, and trade, creating networks that connected diverse regions.

In contemporary times, the impacts of colonialism remain a subject of debate and analysis. Acknowledging the historical injustices and striving for equitable global relations is essential in understanding and addressing the complexities left behind by centuries of colonial rule.

SubQuestion No : 14

Q.14 What can be inferred about the author's perspective on colonialism from the passage?

Ans ☒ 1. The author believes that colonialism had only negative consequences.

☒ 2. The author emphasizes the benefits of colonialism for global development.

☒ 3. The author acknowledges both the positive and negative aspects of colonialism.

☒ 4. The author takes a neutral stance on the impact of colonialism.

Question ID : 630680385546

Option 1 ID : 6306801502970

Option 2 ID : 6306801502971

Option 3 ID : 6306801502973

Option 4 ID : 6306801502972

Status : Not Answered

Chosen Option : --

Comprehension:

Read the passage carefully and choose the best answer to each question out of the four alternatives.

Colonialism, a system where one country extends its control over another region or territory, has had a profound impact on the world's history and development. During the age of exploration, powerful European nations embarked on voyages, seeking new lands and resources to expand their empires.

The consequences of colonialism were far-reaching. Indigenous cultures and societies in colonized regions often faced exploitation, oppression, and forced assimilation into European norms. Economic exploitation was rampant, as resources were extracted to enrich the colonizers at the expense of the colonized.

Colonialism also had a significant impact on social and political structures. The imposition of foreign laws and governance disrupted traditional systems, leading to power struggles and conflicts within the colonized territories.





Moreover, the legacies of colonialism continue to shape the world today. Former colonies still grapple with the aftermath of their colonial past, including issues of identity, economic disparities, and social inequalities. Additionally, colonial boundaries have often resulted in ethnic and tribal tensions, impacting post-colonial nations' stability.

Despite the negative aspects, colonialism also facilitated the exchange of knowledge, technology, and cultures between different parts of the world. It led to the spread of language, religion, and trade, creating networks that connected diverse regions.

In contemporary times, the impacts of colonialism remain a subject of debate and analysis. Acknowledging the historical injustices and striving for equitable global relations is essential in understanding and addressing the complexities left behind by centuries of colonial rule.

SubQuestion No : 15

Q.15 What does the passage state about colonialism's impact on indigenous cultures?

- Ans  1. Indigenous cultures faced exploitation, oppression, and forced assimilation.
-  2. Colonialism promoted the preservation of traditional indigenous practices.
-  3. Indigenous cultures experienced rapid modernization under colonial rule.
-  4. Colonialism led to the complete eradication of indigenous languages.

Question ID : 630680385545

Option 1 ID : 6306801502968

Option 2 ID : 6306801502967

Option 3 ID : 6306801502966

Option 4 ID : 6306801502969

Status : Not Answered

Chosen Option : --

Comprehension:

Read the passage carefully and choose the best answer to each question out of the four alternatives.

Colonialism, a system where one country extends its control over another region or territory, has had a profound impact on the world's history and development. During the age of exploration, powerful European nations embarked on voyages, seeking new lands and resources to expand their empires.

The consequences of colonialism were far-reaching. Indigenous cultures and societies in colonized regions often faced exploitation, oppression, and forced assimilation into European norms. Economic exploitation was rampant, as resources were extracted to enrich the colonizers at the expense of the colonized.

Colonialism also had a significant impact on social and political structures. The imposition of foreign laws and governance disrupted traditional systems, leading to power struggles and conflicts within the colonized territories.

Moreover, the legacies of colonialism continue to shape the world today. Former colonies still grapple with the aftermath of their colonial past, including issues of identity, economic disparities, and social inequalities. Additionally, colonial boundaries have often resulted in ethnic and tribal tensions, impacting post-colonial nations' stability.

Despite the negative aspects, colonialism also facilitated the exchange of knowledge, technology, and cultures between different parts of the world. It led to the spread of language, religion, and trade, creating networks that connected diverse regions.


In contemporary times, the impacts of colonialism remain a subject of debate and analysis. Acknowledging the historical injustices and striving for equitable global relations is essential in understanding and addressing the complexities left behind by centuries of colonial rule.

SubQuestion No : 16

Q.16 What is the central theme of the passage?

Ans  1. The enduring impact and complexities of colonialism in the present

 2. The economic exploitation of colonies by European nations

 3. The positive contributions of colonialism to global development

 4. The cultural assimilation of indigenous societies by colonizers

Question ID : 630680385544

Option 1 ID : 6306801502964

Option 2 ID : 6306801502962

Option 3 ID : 6306801502963

Option 4 ID : 6306801502965

Status : Not Answered

Chosen Option : --

Comprehension:

Read the passage carefully and choose the best answer to each question out of the four alternatives.

Colonialism, a system where one country extends its control over another region or territory, has had a profound impact on the world's history and development. During the age of exploration, powerful European nations embarked on voyages, seeking new lands and resources to expand their empires.

The consequences of colonialism were far-reaching. Indigenous cultures and societies in colonized regions often faced exploitation, oppression, and forced assimilation into European norms. Economic exploitation was rampant, as resources were extracted to enrich the colonizers at the expense of the colonized.

Colonialism also had a significant impact on social and political structures. The imposition of foreign laws and governance disrupted traditional systems, leading to power struggles and conflicts within the colonized territories.

Moreover, the legacies of colonialism continue to shape the world today. Former colonies still grapple with the aftermath of their colonial past, including issues of identity, economic disparities, and social inequalities. Additionally, colonial boundaries have often resulted in ethnic and tribal tensions, impacting post-colonial nations' stability.

Despite the negative aspects, colonialism also facilitated the exchange of knowledge, technology, and cultures between different parts of the world. It led to the spread of language, religion, and trade, creating networks that connected diverse regions.

In contemporary times, the impacts of colonialism remain a subject of debate and analysis.

Acknowledging the historical injustices and striving for equitable global relations is essential in understanding and addressing the complexities left behind by centuries of colonial rule.

SubQuestion No : 17

Q.17 Which title best represents the content and structure of the passage?

Ans ✓ 1. The Legacy of Colonialism in Modern Times

✗ 2. The Rise and Fall of Colonial Empires

✗ 3. The Advantages and Disadvantages of Colonial Rule

✗ 4. The Global Impact of Colonialism

Question ID : 630680385543

Option 1 ID : 6306801502959

Option 2 ID : 6306801502958

Option 3 ID : 6306801502960

Option 4 ID : 6306801502961

Status : Not Answered

Chosen Option : --

**Q.18 Select the most appropriate synonym of the given word.
Relinquish**

Ans ✓ 1. Abdicate

✗ 2. Tasteful

✗ 3. Maintain

✗ 4. Captive

Question ID : 630680385658

Option 1 ID : 6306801503392

Option 2 ID : 6306801503393

Option 3 ID : 6306801503390

Option 4 ID : 6306801503391

Status : Answered

Chosen Option : 1

Q.19 Select the word segment that substitutes the bracketed word segment correctly and completes the sentence meaningfully.
The professor gave an (intriguing) lecture that captured the attention of all the students.

- Ans**
- ☒ 1. enlightening
 - ☒ 2. challenging
 - ☒ 3. interesting
 - ☒ 4. boring

Question ID : 630680385498

Option 1 ID : 6306801502787

Option 2 ID : 6306801502789

Option 3 ID : 6306801502786

Option 4 ID : 6306801502788

Status : Answered

Chosen Option : 3

Q.20 The sentences given below are all part of a paragraph but do not necessarily fall in the order that they are in. The first and the last sentences of the paragraph are given.
Choose the option that arranges these sentences to form a meaningful paragraph.

- I remained two days at Lausanne, in this painful state
- A. all around was calm; and the snowy mountains, 'the
 - B. calm and heavenly scene restored me,
 - C. palaces of nature,' were not changed. By degrees the
 - D. of mind. I contemplated the lake: the waters were placid; and I continued my journey towards Geneva.

- Ans**
- ☒ 1. BCDA
 - ☒ 2. CADB
 - ☒ 3. ABCD
 - ☒ 4. DACB

Question ID : 630680385590

Option 1 ID : 6306801503139

Option 2 ID : 6306801503140

Option 3 ID : 6306801503138

Option 4 ID : 6306801503141

Status : Answered

Chosen Option : 4

Q.21 Which of the following words is an antonym of "joyful"?

- Ans**
- ☒ 1. Delighted
 - ☒ 2. Excited
 - ☒ 3. Happy
 - ☒ 4. Sad

Question ID : 630680385303

Option 1 ID : 6306801502081

Option 2 ID : 6306801502079

Option 3 ID : 6306801502080

Option 4 ID : 6306801502078

Status : Answered

Chosen Option : 4

Q.22 Select the most appropriate missing sentence to complete the paragraph meaningfully.
"Steady, steady, my boy," he would say; "wait a bit, and we will have a good swing, and soon get the tickle out of your feet." Then as soon as we were out of the village, he would give me a few miles at a spanking trot, and then bring me back _____.

- Ans
- ✓ 1. as fresh as before, only clear of the fidgets, as he called them.
 - ✗ 2. as he was recollecting that his mother was waiting for him.
 - ✗ 3. as something was moving beneath him.
 - ✗ 4. as it was bald: all the feathers had been knocked off its head in a series of fights.

Question ID : 630680385585

Option 1 ID : 6306801503121

Option 2 ID : 6306801503119

Option 3 ID : 6306801503118

Option 4 ID : 6306801503120

Status : Not Answered

Chosen Option : --

Q.23 From the options select the most suitable proverb for the sentence given below.
I've come early for the season-ending sale so that I can choose from a wider selection and get a better piece.

- Ans
- ✗ 1. Every cloud has a silver lining.
 - ✗ 2. Work hard play hard.
 - ✗ 3. Every dog has his day.
 - ✓ 4. Early bird catches the worm.

Question ID : 630680385643

Option 1 ID : 6306801503330

Option 2 ID : 6306801503333

Option 3 ID : 6306801503331

Option 4 ID : 6306801503332

Status : Answered

Chosen Option : 3

Q.24 Identify the antonym for the bracketed word in the sentence:
His [laconic] responses in the interview left the reporters dissatisfied.

- Ans
- ✗ 1. concise
 - ✗ 2. curt
 - ✓ 3. verbose
 - ✗ 4. expansive

Question ID : 630680385737

Option 1 ID : 6306801503679

Option 2 ID : 6306801503680

Option 3 ID : 6306801503678

Option 4 ID : 6306801503681

Status : Answered

Chosen Option : 3

Q.25 Select the option that best represents the meaning of the idioms used in the given situation

Your mentor tells you, "Actions speak louder than words," when discussing the importance of demonstrating your abilities. What does this expression imply?

- Ans**
- ☒ 1. We should prioritize verbal communication over non-verbal cues.
 - ☒ 2. We should focus on our achievements and let them speak for themselves.
 - ☒ 3. Our words should be carefully chosen to convey our intentions.
 - ☒ 4. We should express ourselves boldly and confidently.

Question ID : **630680385299**

Option 1 ID : **6306801502063**

Option 2 ID : **6306801502064**

Option 3 ID : **6306801502062**

Option 4 ID : **6306801502065**

Status : **Answered**

Chosen Option : **2**

