

				
		<b>DELHI DEVELOPMENT AUTHORITY</b> <b>RECRUITMENT CELL</b> <b>VIKAS SADAN, INA, NEW DELHI - 110023</b> ( <a href="https://www.dda.gov.in">https://www.dda.gov.in</a> )		
		Advertisement No. 02/2023/Recrtt. Cell/Pers./DDA		
Test Date	29/09/2023			
Test Time	8:30 AM - 9:30 AM			
Subject	Assistant Section Officer (ASO)			

Section : General Intelligence and Reasoning

**Q.1** If the positions of the first and the third digits within each number are interchanged, which of the following will be the unit's digit of the second-lowest number?  
534   879   218   903   175

- Ans
- ☒ 1. 8
  - ☒ 2. 2
  - ☒ 3. 1
  - ☒ 4. 5

Question ID : 630680384649  
Option 1 ID : 6306801499482  
Option 2 ID : 6306801499483  
Option 3 ID : 6306801499485  
Option 4 ID : 6306801499484  
Status : Answered  
Chosen Option : 1

**Q.2** Given a number series, which alternative should be chosen to continue the same pattern and fill in the blank space?  
14, 14, 56, 126, 224 \_\_\_\_

- Ans
- ☒ 1. 350
  - ☒ 2. 336
  - ☒ 3. 252
  - ☒ 4. 238

Question ID : 630680384601  
Option 1 ID : 6306801499293  
Option 2 ID : 6306801499292  
Option 3 ID : 6306801499290  
Option 4 ID : 6306801499291  
Status : Not Answered  
Chosen Option : --

# Test Prime

**ALL EXAMS,  
ONE SUBSCRIPTION**



**70,000+**  
Mock Tests



**Personalised  
Report Card**



**Unlimited  
Re-Attempt**



**600+**  
Exam Covered



**Previous Year  
Papers**



**500%  
Refund**



**ATTEMPT FREE MOCK NOW**

Q.3 If 'M × N' means 'M is the Son of N'.  
If 'M + N' means 'M is the brother of N'.  
If 'M ÷ N' means 'M is the father of N'.  
If 'M – N' means 'M is the husband of N'.  
How is D related to A in the expression 'A + B × C - D'?

- Ans ☒ 1. Mother  
☒ 2. Wife  
☒ 3. Daughter  
☒ 4. Sister

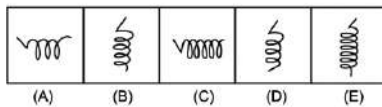
Question ID : 630680384673  
Option 1 ID : 6306801499579  
Option 2 ID : 6306801499578  
Option 3 ID : 6306801499580  
Option 4 ID : 6306801499581  
Status : Answered  
Chosen Option : 1

Q.4 If  $75 + 42 = 4$ ,  $60 + 51 = 10$ , then  $63 + 84 = ?$

- Ans ☒ 1. 5  
☒ 2. 7  
☒ 3. 18  
☒ 4. 9

Question ID : 630680386177  
Option 1 ID : 6306801505420  
Option 2 ID : 6306801505418  
Option 3 ID : 6306801505419  
Option 4 ID : 6306801505421  
Status : Not Attempted and Marked For Review  
Chosen Option : --

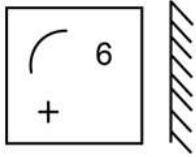
Q.5 Out of the five figures marked (A), (B), (C), (D) and (E), four are following a certain pattern and one figure is not. Identify the figure which is different from the rest.



- Ans ☒ 1. D  
☒ 2. B  
☒ 3. E  
☒ 4. C

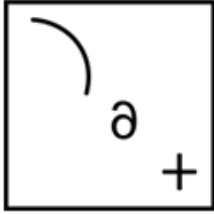
Question ID : 630680384646  
Option 1 ID : 6306801499472  
Option 2 ID : 6306801499470  
Option 3 ID : 6306801499471  
Option 4 ID : 6306801499473  
Status : Answered  
Chosen Option : 1

Q.6 Which of the following options is exactly the mirror image of the given question figure'?

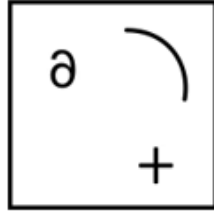


Ans

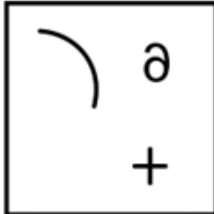
✗ 1.



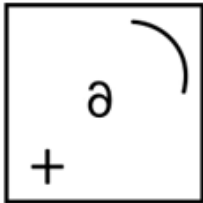
✓ 2.



✗ 3.



✗ 4.



Question ID : 630680386222

Option 1 ID : 6306801505599

Option 2 ID : 6306801505601

Option 3 ID : 6306801505598

Option 4 ID : 6306801505600

Status : Answered

Chosen Option : 2

Q.7 Which of the following numbers will replace the question mark (?) in the given series?

131, 133, 137, ?, 161, 193

Ans

✗ 1. 151

✗ 2. 153

✗ 3. 149

✓ 4. 145

Question ID : 630680384462

Option 1 ID : 6306801498737

Option 2 ID : 6306801498734

Option 3 ID : 6306801498736

Option 4 ID : 6306801498735

Status : Answered

Chosen Option : 4

**Q.8** In this question, a statement has been given followed by two courses of action numbered I and II. Assuming that all information in the statement is true, analyse the actions together and determine whether any of them logically and definitely follow(s) from the information given in the statement.

Statement: The state of Himachal Pradesh has been affected by a severe flood resulting in a huge amount of loss of life and property.

Courses of Action:

I) The Government must immediately send aid to the areas severely affected.

II) People throughout the country must donate to help the victims.

- Ans**
- ☒ 1. Only I follows
  - ☒ 2. Neither I nor II follows
  - ☒ 3. Both I and II follows
  - ☒ 4. Only II follows

Question ID : 630680384487

Option 1 ID : 6306801498834

Option 2 ID : 6306801498837

Option 3 ID : 6306801498836

Option 4 ID : 6306801498835

Status : Answered

Chosen Option : 3

**Q.9** Four word pairs have been given, out of which three are alike in some manner and one is different. Select the odd word pair.

- Ans**
- ☒ 1. APPROVAL : DENIAL
  - ☒ 2. ADMIT : EXPEL
  - ☒ 3. DECEASED : ALIVE
  - ☒ 4. RESIST : OBJECT

Question ID : 630680384511

Option 1 ID : 6306801498932

Option 2 ID : 6306801498933

Option 3 ID : 6306801498930

Option 4 ID : 6306801498931

Status : Answered

Chosen Option : 4

**Q.10** Select the option that is related to the fifth word in the same way as the fourth word is related to the third word and the second word is related to the first word.

PINK CITY : JAIPUR :: COAL CAPITAL : DHANBAD :: STEEL CITY : ?

- Ans**
- ☒ 1. MIDNAPORE
  - ☒ 2. NAGPUR
  - ☒ 3. JAMSHEDPUR
  - ☒ 4. MUSSOORIE

Question ID : 630680384694

Option 1 ID : 6306801499664

Option 2 ID : 6306801499665

Option 3 ID : 6306801499663

Option 4 ID : 6306801499662

Status : Answered

Chosen Option : 3

**Q.11** Six friends M, N, O, P, Q, and R on a row facing south. Q sits to the left of R. N sits to the immediate left of P. M sits third to the right of O who sits on one end. Q is the neighbour of R. Who sits to the immediate left of M?

- Ans
- ☒ 1. P
  - ☒ 2. N
  - ☒ 3. R
  - ☒ 4. Q

Question ID : 630680384718  
 Option 1 ID : 6306801499760  
 Option 2 ID : 6306801499758  
 Option 3 ID : 6306801499759  
 Option 4 ID : 6306801499761  
 Status : Marked For Review  
 Chosen Option : 3

**Q.12** Identify the term which does not follow the pattern in the given series.  
 B2, E3, H5, K8, N15, Q17, T23

- Ans
- ☒ 1. K8
  - ☒ 2. H5
  - ☒ 3. N15
  - ☒ 4. T23

Question ID : 630680384827  
 Option 1 ID : 6306801500195  
 Option 2 ID : 6306801500194  
 Option 3 ID : 6306801500196  
 Option 4 ID : 6306801500197  
 Status : Answered  
 Chosen Option : 3

**Q.13** Find the missing element in the given set to make them equal.

A = {Letters of the word HARMONIOUS}

B = {HS, RO, ?, IM, UA}

- Ans
- ☒ 1. AR
  - ☒ 2. OM
  - ☒ 3. IN
  - ☒ 4. ON

Question ID : 630680384796  
 Option 1 ID : 6306801500072  
 Option 2 ID : 6306801500071  
 Option 3 ID : 6306801500073  
 Option 4 ID : 6306801500070  
 Status : Answered  
 Chosen Option : 4

**Q.14** How many vowels are there in the given series that are immediately preceded by a symbol and immediately followed by a consonant?

HU@M@JK\*ITU!@AEN+OF&!UV

**Ans** ☒ 1. 3

☒ 2. 2

☒ 3. 4

☒ 4. 5

Question ID : 630680384657

Option 1 ID : 6306801499517

Option 2 ID : 6306801499514

Option 3 ID : 6306801499516

Option 4 ID : 6306801499515

Status : Answered

Chosen Option : 4

**Q.15** Four letter-clusters have been given, out of which three are alike in some manner and one is different. Select the odd letter-cluster.

**Ans** ☒ 1. VXY

☒ 2. IKM

☒ 3. OQS

☒ 4. ACE

Question ID : 630680384706

Option 1 ID : 6306801499713

Option 2 ID : 6306801499711

Option 3 ID : 6306801499712

Option 4 ID : 6306801499710

Status : Answered

Chosen Option : 1

**Q.16** Given a number series, which alternative should be chosen to continue the same pattern and fill in the blank space.

6, 13, 27, 55, 111, \_\_\_\_

**Ans** ☒ 1. 224

☒ 2. 223

☒ 3. 222

☒ 4. 221

Question ID : 630680384766

Option 1 ID : 6306801499953

Option 2 ID : 6306801499951

Option 3 ID : 6306801499952

Option 4 ID : 6306801499950

Status : Answered

Chosen Option : 2



Q.17 ZOK' is related to '440' in the same way as 'QPL' is related to

- Ans
- ☒ 1. 873
  - ☒ 2. 653
  - ☒ 3. 871
  - ☒ 4. 651

Question ID : 630680386187  
 Option 1 ID : 6306801505460  
 Option 2 ID : 6306801505459  
 Option 3 ID : 6306801505461  
 Option 4 ID : 6306801505458  
 Status : Not Attempted and Marked For Review  
 Chosen Option : --

Q.18 In a certain code language, if INSIST is coded as ZXMPVPI, then what will DRYING be coded as?

- Ans
- ☒ 1. MRNBTE
  - ☒ 2. NRNBTE
  - ☒ 3. NMRTBE
  - ☒ 4. MSMBTE

Question ID : 630680384480  
 Option 1 ID : 6306801498807  
 Option 2 ID : 6306801498806  
 Option 3 ID : 6306801498809  
 Option 4 ID : 6306801498808  
 Status : Answered  
 Chosen Option : 4

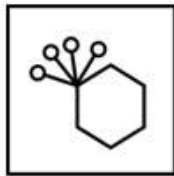
Q.19 Pointing towards a woman in the photograph, Ram said, "She is the daughter of the only son of my grandfather". How is the woman related to Ram?

- Ans
- ☒ 1. Wife
  - ☒ 2. Mother
  - ☒ 3. Daughter
  - ☒ 4. Sister

Question ID : 630680384469  
 Option 1 ID : 6306801498764  
 Option 2 ID : 6306801498765  
 Option 3 ID : 6306801498762  
 Option 4 ID : 6306801498763  
 Status : Answered  
 Chosen Option : 4

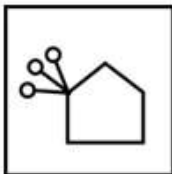


Q.20 Choose the figure similar to the question figure.

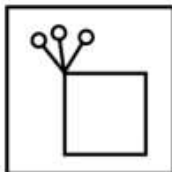


Ans


✓ 1.



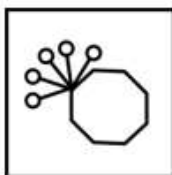
✗ 2.



✗ 3.



✗ 4.



Question ID : 630680384544

Option 1 ID : 6306801499064

Option 2 ID : 6306801499062

Option 3 ID : 6306801499063

Option 4 ID : 6306801499065

Status : Not Attempted and  
Marked For Review

Chosen Option : --

**Q.21** In the following question three statements are given, followed by two conclusions numbered I and II. Assume three given statements to be true even if they seem to be at variance with commonly known facts and then decide which of the given conclusion logically follows from the two statements disregarding commonly known facts.

Statements:

Some petals are roses.

Some roses are flowers.

All flowers are thorns.

Conclusions:

I. Some thorns are roses.

II. Some thorns are petals.

- Ans**
- ☒ 1. Only conclusion II follows
  - ☒ 2. Neither conclusion I nor II follows
  - ☒ 3. Only conclusion I follows
  - ☒ 4. Both conclusion I and II follow

Question ID : 630680384630

Option 1 ID : 6306801499407

Option 2 ID : 6306801499409

Option 3 ID : 6306801499406

Option 4 ID : 6306801499408

Status : Answered

Chosen Option : 3

**Q.22** In the following question three statements are given, followed by two conclusions numbered I and II. Assume three given statements to be true even if they seem to be at variance with commonly known facts and then decide which of the given conclusion logically follows from the two statements disregarding commonly known facts.

Statement:

All computers are keyboards.

No keyboard is scanner.

Some scanners are mouse.

Conclusions:

I. Some scanners are computers.

II. Some keyboards are computers.

III. Some mouse are keyboards.

- Ans**
- ☒ 1. Only II follow
  - ☒ 2. Only I and III follow
  - ☒ 3. Only I follow
  - ☒ 4. Only III follow

Question ID : 630680384833

Option 1 ID : 6306801500219

Option 2 ID : 6306801500221

Option 3 ID : 6306801500218

Option 4 ID : 6306801500220

Status : Answered

Chosen Option : 1

**Q.23** Five people A, B, C, D and E live in a five floor building. The lowermost floor is numbered 1 and topmost is numbered 5. No one lives between D and C. Person A lives above C but below B. The number of people living below B is the same as the number of people living above E. How many people are living above C?

- Ans**
- ☒ 1. 1
  - ☒ 2. 3
  - ☒ 3. 4
  - ☒ 4. 2

Question ID : **630680384613**  
 Option 1 ID : **6306801499341**  
 Option 2 ID : **6306801499339**  
 Option 3 ID : **6306801499338**  
 Option 4 ID : **6306801499340**  
 Status : **Not Answered**  
 Chosen Option : --

**Q.24** How many pairs of letters are there in the word "STARVE" that have as many letters between as in the alphabetical order?

- Ans**
- ☒ 1. 1
  - ☒ 2. 2
  - ☒ 3. 3
  - ☒ 4. 4

Question ID : **630680384455**  
 Option 1 ID : **6306801498708**  
 Option 2 ID : **6306801498706**  
 Option 3 ID : **6306801498707**  
 Option 4 ID : **6306801498709**  
 Status : **Not Answered**  
 Chosen Option : --

**Q.25** Identify the pair which does not follow the pattern in the given series.

DE, GI, JL, MO, PQ

- Ans**
- ☒ 1. MO
  - ☒ 2. JL
  - ☒ 3. PQ
  - ☒ 4. GI

Question ID : **630680384622**  
 Option 1 ID : **6306801499377**  
 Option 2 ID : **6306801499375**  
 Option 3 ID : **6306801499374**  
 Option 4 ID : **6306801499376**  
 Status : **Answered**  
 Chosen Option : **3**

**Q.1** Which book won the Pulitzer Prize for Fiction in 2015, and it tells the story of a Chinese-American family and their struggles with cultural identity?

- Ans**
- ☒ 1. "All the Light We Cannot See" by Anthony Doerr
  - ☒ 2. "The Underground Railroad" by Colson Whitehead
  - ☒ 3. "The Sympathizer" by Viet Thanh Nguyen
  - ☒ 4. "The Goldfinch" by Donna Tartt

Question ID : 630680384163  
 Option 1 ID : 6306801497542  
 Option 2 ID : 6306801497543  
 Option 3 ID : 6306801497544  
 Option 4 ID : 6306801497545  
 Status : Not Answered  
 Chosen Option : --

**Q.2** Which if the following is not Microfinance Institution of India?

- Ans**
- ☒ 1. India Power
  - ☒ 2. Share Microfin Ltd
  - ☒ 3. Bandhan Financial Services
  - ☒ 4. Ujjivan Financial Services

Question ID : 630680386436  
 Option 1 ID : 6306801506457  
 Option 2 ID : 6306801506456  
 Option 3 ID : 6306801506455  
 Option 4 ID : 6306801506454  
 Status : Answered  
 Chosen Option : 1

**Q.3** Which country does not share a land border with India?

- Ans**
- ☒ 1. Bangladesh
  - ☒ 2. Nepal
  - ☒ 3. Myanmar
  - ☒ 4. Sri Lanka

Question ID : 630680384416  
 Option 1 ID : 6306801498550  
 Option 2 ID : 6306801498552  
 Option 3 ID : 6306801498553  
 Option 4 ID : 6306801498551  
 Status : Answered  
 Chosen Option : 4

**Q.4** Which religious festival in India celebrates the birth of Lord Krishna and is characterized by playful activities like breaking pots filled with butter and curd?

- Ans**
- ☒ 1. Holi
  - ☒ 2. Navratri
  - ☒ 3. Diwali
  - ☒ 4. Janmashtami

Question ID : 630680386420  
 Option 1 ID : 6306801506391  
 Option 2 ID : 6306801506392  
 Option 3 ID : 6306801506390  
 Option 4 ID : 6306801506393  
 Status : Answered  
 Chosen Option : 4

Q.5 Who was the founder of the Mughal Empire in Northern India?

- Ans ☒ 1. Shah Jahan  
☒ 2. Babur  
☒ 3. Aurangzeb  
☒ 4. Akbar

Question ID : 630680386474  
 Option 1 ID : 6306801506609  
 Option 2 ID : 6306801506607  
 Option 3 ID : 6306801506606  
 Option 4 ID : 6306801506608  
 Status : Not Attempted and  
 Marked For Review  
 Chosen Option : --

Q.6 Name the Outgoing Wrestling Federation of India (WFI) President who was charged in sexual harassment case in 2023?

- Ans ☒ 1. Mohan Kumar Verma  
☒ 2. Rakesh Sharma  
☒ 3. Rajesh Gupta  
☒ 4. Brij Bhushan Sharan Singh

Question ID : 630680384148  
 Option 1 ID : 6306801497483  
 Option 2 ID : 6306801497485  
 Option 3 ID : 6306801497484  
 Option 4 ID : 6306801497482  
 Status : Answered  
 Chosen Option : 4

Q.7 The "Western Disturbances" play a significant role in India's winter climate. These are:

- Ans ☒ 1. High-pressure systems that bring heavy rainfall to the western coast  
☒ 2. Extra-tropical storms originating in the Mediterranean region  
☒ 3. Tropical cyclones originating in the Bay of Bengal  
☒ 4. Monsoon winds that cause widespread flooding during summer

Question ID : 630680384202  
 Option 1 ID : 6306801497699  
 Option 2 ID : 6306801497700  
 Option 3 ID : 6306801497698  
 Option 4 ID : 6306801497701  
 Status : Not Attempted and  
 Marked For Review  
 Chosen Option : --

**Q.8 Who led the Salt March, also known as the Dandi March, as a symbol of resistance against the British salt monopoly?**

- Ans** ☒ 1. Sardar Vallabhbhai Patel  
☒ 2. Mahatma Gandhi  
☒ 3. Subhash Chandra Bose  
☒ 4. Jawaharlal Nehru

Question ID : 630680386487  
 Option 1 ID : 6306801506659  
 Option 2 ID : 6306801506660  
 Option 3 ID : 6306801506658  
 Option 4 ID : 6306801506661  
 Status : Answered  
 Chosen Option : 2

**Q.9 On 19th July, 2023 ISRO successfully tested which mission at ISRO Propulsion Complex (IPRC) in Mahendragiri, Tamil Nadu?**

- Ans** ☒ 1. Chandrayaan-3  
☒ 2. Gaganyaan Human Spaceflight Mission  
☒ 3. Mangalyaan Mars Mission  
☒ 4. Aditya-L1 Solar Mission

Question ID : 630680384141  
 Option 1 ID : 6306801497457  
 Option 2 ID : 6306801497454  
 Option 3 ID : 6306801497456  
 Option 4 ID : 6306801497455  
 Status : Answered  
 Chosen Option : 1

**Q.10 Which of the following states in India has the highest literacy rate?**

- Ans** ☒ 1. Bihar  
☒ 2. Kerala  
☒ 3. Rajasthan  
☒ 4. Assam

Question ID : 630680384109  
 Option 1 ID : 6306801497329  
 Option 2 ID : 6306801497328  
 Option 3 ID : 6306801497326  
 Option 4 ID : 6306801497327  
 Status : Answered  
 Chosen Option : 2

**Q.11 Which of the following religions is mostly followed in India?**

- Ans** ☒ 1. Hinduism  
☒ 2. Islamism  
☒ 3. Christianity  
☒ 4. Jainism

Question ID : 630680384114  
 Option 1 ID : 6306801497349  
 Option 2 ID : 6306801497347  
 Option 3 ID : 6306801497346  
 Option 4 ID : 6306801497348  
 Status : Answered  
 Chosen Option : 1

Q.12 What is the Change in Savings due to change in Income called?

- Ans
- ☒ 1. Average Propensity to Save (APS)
  - ☒ 2. Average Propensity to Consume (APC)
  - ☒ 3. Marginal Propensity to Consume (MPC)
  - ☒ 4. Marginal Propensity to Save (MPS)

Question ID : 630680384288  
 Option 1 ID : 6306801498041  
 Option 2 ID : 6306801498038  
 Option 3 ID : 6306801498040  
 Option 4 ID : 6306801498039  
 Status : Not Attempted and  
 Marked For Review  
 Chosen Option : --

Q.13 Where did Neeraj Chopra break his own record in 2022?

- Ans
- ☒ 1. Asian Games
  - ☒ 2. Tokyo Olympics
  - ☒ 3. Commonwealth Games
  - ☒ 4. Diamond League

Question ID : 630680384154  
 Option 1 ID : 6306801497506  
 Option 2 ID : 6306801497508  
 Option 3 ID : 6306801497507  
 Option 4 ID : 6306801497509  
 Status : Marked For Review  
 Chosen Option : 4

Q.14 In which year was the first Human Development report launched by the United Nations Development Programme?

- Ans
- ☒ 1. 1994
  - ☒ 2. 1990
  - ☒ 3. 1998
  - ☒ 4. 1997

Question ID : 630680384293  
 Option 1 ID : 6306801498060  
 Option 2 ID : 6306801498061  
 Option 3 ID : 6306801498058  
 Option 4 ID : 6306801498059  
 Status : Not Attempted and  
 Marked For Review  
 Chosen Option : --



**Q.15** Which festival is celebrated with immense zeal and fervour, featuring colourful processions, traditional music, and dance performances in the state of West Bengal?

- Ans** ☒ 1. Durga Puja  
☒ 2. Pongal  
☒ 3. Onam  
☒ 4. Ganesh Chaturthi

Question ID : 630680384402  
 Option 1 ID : 6306801498497  
 Option 2 ID : 6306801498494  
 Option 3 ID : 6306801498495  
 Option 4 ID : 6306801498496  
 Status : Answered  
 Chosen Option : 1

**Q.16** The "Kendriya Hindi Sansthan" is an educational institution for Hindi language established in which Indian city?

- Ans** ☒ 1. Jhansi  
☒ 2. Allahabad  
☒ 3. Agra  
☒ 4. Bundelkhand

Question ID : 630680384176  
 Option 1 ID : 6306801497594  
 Option 2 ID : 6306801497597  
 Option 3 ID : 6306801497596  
 Option 4 ID : 6306801497595  
 Status : Not Answered  
 Chosen Option : --

**Q.17** In which of the following places was the Kashi Vidyapith established?

- Ans** ☒ 1. Varanasi  
☒ 2. Delhi  
☒ 3. Kolkata  
☒ 4. Aligarh

Question ID : 630680384124  
 Option 1 ID : 6306801497388  
 Option 2 ID : 6306801497389  
 Option 3 ID : 6306801497387  
 Option 4 ID : 6306801497386  
 Status : Marked For Review  
 Chosen Option : 1

**Q.18** Which festival is widely celebrated in the state of Kerala, featuring elaborate boat races, traditional dances, and music performances?

- Ans** ☒ 1. Baisakhi  
☒ 2. Holi  
☒ 3. Diwali  
☒ 4. Onam

Question ID : 630680386424  
 Option 1 ID : 6306801506409  
 Option 2 ID : 6306801506407  
 Option 3 ID : 6306801506406  
 Option 4 ID : 6306801506408  
 Status : Answered

Q.19 Which of the following is a kingdom of South India during the medieval period 700 AD to 1857 AD?

- Ans ☒ 1. Pandyas  
☒ 2. Bhamini  
☒ 3. Chola  
☒ 4. Chera

Question ID : 630680384325

Option 1 ID : 6306801498189

Option 2 ID : 6306801498186

Option 3 ID : 6306801498187

Option 4 ID : 6306801498188

Status : Answered

Chosen Option : 3

Q.20 "SAARC" (South Asian Association for Regional Cooperation) is an organization comprising eight member countries from South Asia. Which country is NOT a member of SAARC?

- Ans ☒ 1. Myanmar  
☒ 2. Pakistan  
☒ 3. Maldives  
☒ 4. Afghanistan

Q.21 The "Darul Uloom Deoband," an influential Islamic seminary, was founded in 1866. In which state is Deoband located?

- Ans ☒ 1. Uttar Pradesh  
☒ 2. Rajasthan  
☒ 3. Hyderabad  
☒ 4. Bihar

Question ID : 630680384230

Option 1 ID : 6306801497810

Option 2 ID : 6306801497813

Option 3 ID : 6306801497812

Option 4 ID : 6306801497811

Status : Not Answered

Chosen Option : --

Q.22 Where did the 2023 Aadi Mahotsav take place?

- Ans ☒ 1. Talkatora Indoor
- ☒ 2. Major Dhyan Chand National Stadium
- ☒ 3. Jawaharlal Nehru Stadium
- ☒ 4. Feroz Shah Kotla Stadium

Question ID : 630680384146  
Option 1 ID : 6306801497476  
Option 2 ID : 6306801497474  
Option 3 ID : 6306801497475  
Option 4 ID : 6306801497477  
Status : Not Answered  
Chosen Option : --

Q.23 How many national parks are there in India?

- Ans ☒ 1. 106
- ☒ 2. 111
- ☒ 3. 109
- ☒ 4. 102

Question ID : 630680384103  
Option 1 ID : 6306801497303  
Option 2 ID : 6306801497305  
Option 3 ID : 6306801497304  
Option 4 ID : 6306801497302  
Status : Not Answered  
Chosen Option : --

Q.24 Who headed the Chandrayaan -3 mission?

- Ans ☒ 1. Sreedhara Panicker Somanath
- ☒ 2. Nandini HarinathScientist
- ☒ 3. Ritu Karidhal
- ☒ 4. Tessy Thomas

Question ID : 630680384138  
Option 1 ID : 6306801497442  
Option 2 ID : 6306801497443  
Option 3 ID : 6306801497444  
Option 4 ID : 6306801497445  
Status : Not Answered  
Chosen Option : --

Q.25 Who among the following won the Arjuna Award 2022 for Badminton?

- Ans ☒ 1. PV Sindhu
- ☒ 2. Shri Lakshya Sen
- ☒ 3. Neha Pandit
- ☒ 4. Saina Nehwal

Question ID : 630680384056  
Option 1 ID : 6306801497115  
Option 2 ID : 6306801497114  
Option 3 ID : 6306801497117  
Option 4 ID : 6306801497116  
Status : Not Answered  
Chosen Option : --

Q.1 If  $x^2 + y^2 + z^2 = 38$  and  $xy + yz + zx = 31$ , then find the value of  $(x + y + z)$ .

- Ans ☒ 1. 10  
☒ 2. 9  
☒ 3. 6  
☒ 4. 15

Question ID : 630680384857  
Option 1 ID : 6306801500315  
Option 2 ID : 6306801500316  
Option 3 ID : 6306801500314  
Option 4 ID : 6306801500317  
Status : Answered  
Chosen Option : 1

Q.2 Find a single discount equivalent to two successive discounts of 12% and 15%

- Ans ☒ 1. 25.2%  
☒ 2. 20%  
☒ 3. 27%  
☒ 4. 22.4%

Question ID : 630680385190  
Option 1 ID : 6306801501648  
Option 2 ID : 6306801501649  
Option 3 ID : 6306801501647  
Option 4 ID : 6306801501646  
Status : Answered  
Chosen Option : 1

Q.3 Find the area of a rectangle whose one side is 25 cm and perimeter is 72 cm.

- Ans ☒ 1. 275 cm<sup>2</sup>  
☒ 2. 225 cm<sup>2</sup>  
☒ 3. 125 cm<sup>2</sup>  
☒ 4. 250 cm<sup>2</sup>

Question ID : 630680385140  
Option 1 ID : 6306801501446  
Option 2 ID : 6306801501449  
Option 3 ID : 6306801501447  
Option 4 ID : 6306801501448  
Status : Answered  
Chosen Option : 1

**Q.4** The external dimensions of an open box are 52 cm, 45 cm and 26 cm. Its thickness is 4 cm. If a cubic cm of metal used in the box weighs 0.8 gms, Find the approximate weight of the box.

- Ans**
- ☒ 1. 10 kg
  - ☒ 2. 20 kg
  - ☒ 3. 18 kg
  - ☒ 4. 22 kg

Question ID : 630680385807  
Option 1 ID : 6306801503946  
Option 2 ID : 6306801503948  
Option 3 ID : 6306801503947  
Option 4 ID : 6306801503949  
Status : Not Answered  
Chosen Option : --

**Q.5** Find the volume of a cube whose surface area is 1734 cm<sup>2</sup>.

- Ans**
- ☒ 1. 4079 cm<sup>3</sup>
  - ☒ 2. 3421 cm<sup>3</sup>
  - ☒ 3. 2313 cm<sup>3</sup>
  - ☒ 4. 4913 cm<sup>3</sup>

Question ID : 630680385151  
Option 1 ID : 6306801501492  
Option 2 ID : 6306801501491  
Option 3 ID : 6306801501490  
Option 4 ID : 6306801501493  
Status : Answered  
Chosen Option : 4

**Q.6** A and B entered a partnership by investing ₹12000 and ₹18000. After 5 months, A withdrew his investment. Find the profit share of A if the total profit at the end of the year is ₹46000.

- Ans**
- ☒ 1. ₹22000
  - ☒ 2. ₹10000
  - ☒ 3. ₹36000
  - ☒ 4. ₹8000

Question ID : 630680385197  
Option 1 ID : 6306801501676  
Option 2 ID : 6306801501675  
Option 3 ID : 6306801501674  
Option 4 ID : 6306801501677  
Status : Answered  
Chosen Option : 2

**Q.7** Pipe A and B can fill a tank in 2 hours and 3 hours respectively. Pipe C can empty the tank in 45 minutes. Find the time taken to empty the tank when all the pipes are opened simultaneously if it was initially filled to  $\frac{3}{4}$  th of its capacity.

- Ans** ☒ 1. 90 minutes  
☒ 2. 50 minutes  
☒ 3. 120 minutes  
☒ 4. 75 minutes

Question ID : 630680385203  
Option 1 ID : 6306801501700  
Option 2 ID : 6306801501699  
Option 3 ID : 6306801501701  
Option 4 ID : 6306801501698  
Status : Answered  
Chosen Option : 1

**Q.8** The average of 5 consecutive even numbers is 18. Find the largest number.

- Ans** ☒ 1. 24  
☒ 2. 20  
☒ 3. 22  
☒ 4. 18

Question ID : 630680385128  
Option 1 ID : 6306801501400  
Option 2 ID : 6306801501398  
Option 3 ID : 6306801501399  
Option 4 ID : 6306801501401  
Status : Answered  
Chosen Option : 2

**Q.9** If the value of a product is first increased by 40% and then again reduced by 40%, what will be the overall percentage change in its value?

- Ans** ☒ 1. 0% change  
☒ 2. 16% decrease  
☒ 3. 16% increase  
☒ 4. 20% increase

Question ID : 630680385165  
Option 1 ID : 6306801501548  
Option 2 ID : 6306801501547  
Option 3 ID : 6306801501546  
Option 4 ID : 6306801501549  
Status : Answered  
Chosen Option : 2

**Q.10** A constant distance from Mumbai to Pune is covered by train at 115 km/hr. If it returns to the same distance at 101 km/hr, then the approximate average speed during the whole journey is \_\_\_\_\_.

- Ans
- ☒ 1. 112 kmph
  - ☒ 2. 105.5 kmph
  - ☒ 3. 100.5 kmph
  - ☒ 4. 107.5 kmph

Question ID : 630680384965

Option 1 ID : 6306801500749

Option 2 ID : 6306801500747

Option 3 ID : 6306801500746

Option 4 ID : 6306801500748

Status : Answered

Chosen Option : 3

**Q.11** The line graph shows the earning (in rupees) of two shops A and B in 5 different months. Find the ratio of the amount earned by shop A in the months of February and March to the amount earned by shop B in the months of January and April.



- Ans
- ☒ 1. 33: 37
  - ☒ 2. 47: 37
  - ☒ 3. 63: 53
  - ☒ 4. 76: 23

Question ID : 630680385134

Option 1 ID : 6306801501425

Option 2 ID : 6306801501424

Option 3 ID : 6306801501423

Option 4 ID : 6306801501422

Status : Answered

Chosen Option : 3

**Q.12** In an election between two candidates A and B, 20% of the votes were invalid. A got 65% of the valid votes. If the valid votes received by B were 7000, find the total number of votes polled.

- Ans
- ☒ 1. 21000
  - ☒ 2. 20000
  - ☒ 3. 25000
  - ☒ 4. 22000

Question ID : 630680385170

Option 1 ID : 6306801501569

Option 2 ID : 6306801501567

Option 3 ID : 6306801501566

Option 4 ID : 6306801501568

Status : Answered

Chosen Option : 2



**Q.13** Two similar triangles MNO and PQR, having perimeter 136 cm and 68 cm respectively. If the length of NO is 18 cm and the length of QR is x cm, find the value of x in cm.

- Ans
- ☒ 1. 12
  - ☒ 2. 11
  - ☒ 3. 9
  - ☒ 4. 10

Question ID : 630680385836

Option 1 ID : 6306801504065

Option 2 ID : 6306801504064

Option 3 ID : 6306801504062

Option 4 ID : 6306801504063

Status : Answered

Chosen Option : 3

**Q.14** If sin of an angle is  $\frac{3}{7}$ , then find the value of the cosec of that angle.

- Ans
- ☒ 1.  $\frac{3}{7}$
  - ☒ 2.  $\frac{7}{3}$
  - ☒ 3.  $\frac{3}{4}$
  - ☒ 4.  $\frac{4}{7}$

Question ID : 630680384944

Option 1 ID : 6306801500663

Option 2 ID : 6306801500662

Option 3 ID : 6306801500664

Option 4 ID : 6306801500665

Status : Answered

Chosen Option : 2

**Q.15** U and V are centers of two circles. They have a direct common tangent LM. The radius of the two circle are 15 cm and 3 cm respectively. If UV is 37 cm, what will be the length of LM?

- Ans
- ☒ 1. 18 cm
  - ☒ 2. 28 cm
  - ☒ 3. 20 cm
  - ☒ 4. 35 cm

Question ID : 630680385826

Option 1 ID : 6306801504022

Option 2 ID : 6306801504024

Option 3 ID : 6306801504023

Option 4 ID : 6306801504025

Status : Not Attempted and  
Marked For Review

Chosen Option : --

Q.16 Simplify:

$$\frac{(555 \times 555 \times 555) - (523 \times 523 \times 523)}{(555 \times 555) + (555 \times 523) + (523 \times 523)} \times \frac{1}{(81-73)}$$

- Ans
- ☒ 1. 1
  - ☒ 2. 3
  - ☒ 3. 2
  - ☒ 4. 4

Question ID : 630680384951  
Option 1 ID : 6306801500690  
Option 2 ID : 6306801500692  
Option 3 ID : 6306801500691  
Option 4 ID : 6306801500693  
Status : Answered  
Chosen Option : 4

Q.17 The sum of any two adjacent angles of a parallelogram is equal to:

- Ans
- ☒ 1. 360°
  - ☒ 2. 90°
  - ☒ 3. 270°
  - ☒ 4. 180°

Question ID : 630680385179  
Option 1 ID : 6306801501603  
Option 2 ID : 6306801501602  
Option 3 ID : 6306801501605  
Option 4 ID : 6306801501604  
Status : Answered  
Chosen Option : 4

Q.18 Which of the given numbers is divisible by 8?

- Ans
- ☒ 1. 57489737820
  - ☒ 2. 345672390
  - ☒ 3. 5436725600
  - ☒ 4. 32309809210

Question ID : 630680385156  
Option 1 ID : 6306801501511  
Option 2 ID : 6306801501510  
Option 3 ID : 6306801501512  
Option 4 ID : 6306801501513  
Status : Answered  
Chosen Option : 3

**Q.19** The following table shows the number of students from a college who have been selected or rejected by companies over five years.  
Find the difference between the average number of people rejected and the average number of people selected over the given years.

Years	Selected	Rejected
2018	820	120
2019	450	990
2020	650	950
2021	340	500
2022	220	300

- Ans
- ☒ 1. 82
  - ☒ 2. 72
  - ☒ 3. 76
  - ☒ 4. 80

Question ID : 630680385136

Option 1 ID : 6306801501431

Option 2 ID : 6306801501430

Option 3 ID : 6306801501432

Option 4 ID : 6306801501433

Status : Not Answered

Chosen Option : --

**Q.20** If A and B can do a certain work in 12 and 15 days respectively, then find the time taken by them to do twice the work, working together.

- Ans
- ☒ 1. 20 days
  - ☒ 2.  $\frac{20}{3}$  days
  - ☒ 3. 18 days
  - ☒ 4.  $\frac{40}{3}$  days

Question ID : 630680385200

Option 1 ID : 6306801501686

Option 2 ID : 6306801501687

Option 3 ID : 6306801501689

Option 4 ID : 6306801501688

Status : Answered

Chosen Option : 4

**Q.21** A solid sphere of radius 9 cm is melted to form a hollow right circular cylindrical tube of length 12 cm and external radius 15 cm.  
The thickness of the tube in m is \_\_\_\_\_. (Take  $\pi = \frac{22}{7}$ )

- Ans
- ☒ 1. 30 m
  - ☒ 2. 3 m
  - ☒ 3. 0.03 m
  - ☒ 4. 0.3 m

Question ID : 630680384980

Option 1 ID : 6306801500809

Option 2 ID : 6306801500808

Option 3 ID : 6306801500806

Option 4 ID : 6306801500807

Status : Answered

Chosen Option : 3

Q.22 If  $A : B = 3 : 4$  and  $B : C = 12 : 19$ , then find the value of  $A : C$

- Ans
- ☒ 1.  $3 : 19$
  - ☒ 2.  $9 : 13$
  - ☒ 3.  $9 : 19$
  - ☒ 4.  $3 : 22$

Question ID : 630680385192

Option 1 ID : 6306801501655

Option 2 ID : 6306801501654

Option 3 ID : 6306801501656

Option 4 ID : 6306801501657

Status : Answered

Chosen Option : 3

Q.23 Find the value of  $1.77777\dots$  in fraction.

- Ans
- ☒ 1.  $\frac{9}{7}$
  - ☒ 2.  $\frac{13}{4}$
  - ☒ 3.  $\frac{19}{16}$
  - ☒ 4.  $\frac{16}{9}$

Question ID : 630680385161

Option 1 ID : 6306801501531

Option 2 ID : 6306801501530

Option 3 ID : 6306801501532

Option 4 ID : 6306801501533

Status : Answered

Chosen Option : 4

Q.24 If  $x(x + y + z) = 287$ ,  $y(x + y + z) = 327$  and  $z(x + y + z) = 115$ , find the value of  $x + y + z$ .

- Ans
- ☒ 1. 23
  - ☒ 2. 29
  - ☒ 3. 27
  - ☒ 4. 21

Question ID : 630680384949

Option 1 ID : 6306801500683

Option 2 ID : 6306801500685

Option 3 ID : 6306801500684

Option 4 ID : 6306801500682

Status : Not Answered

Chosen Option : --

**Q.25** If the cost price of 7 pens is the same as the selling price of 10 pens, find the profit/loss percentage.

- Ans**
- ☒ 1. 30% profit
  - ☒ 2. 30% loss
  - ☒ 3. 70% profit
  - ☒ 4. 70% loss

Question ID : 630680385184  
 Option 1 ID : 6306801501623  
 Option 2 ID : 6306801501624  
 Option 3 ID : 6306801501622  
 Option 4 ID : 6306801501625  
 Status : Not Answered  
 Chosen Option : --

Section : English Comprehension

**Q.1** Select the most appropriate antonym of the given word.  
 Vacillate

- Ans**
- ☒ 1. Persist
  - ☒ 2. Generous
  - ☒ 3. Unforeseen
  - ☒ 4. Decode

Question ID : 630680385650  
 Option 1 ID : 6306801503358  
 Option 2 ID : 6306801503359  
 Option 3 ID : 6306801503361  
 Option 4 ID : 6306801503360  
 Status : Not Answered  
 Chosen Option : --

### Comprehension:

Read the passage carefully and choose the best answer to each question out of the four alternatives

In 1947, India achieved its long-awaited independence from British rule, marking a historic milestone in the country's history. The struggle for freedom was marked by relentless efforts, non-violent protests, and unwavering determination.

The journey towards independence began with the formation of the Indian National Congress in 1885, which united Indians from various backgrounds and regions. Mahatma Gandhi emerged as the prominent leader of the freedom movement, advocating for non-violent civil disobedience and passive resistance against British oppression.

Through peaceful protests like the Salt March and the Quit India Movement, millions of Indians voiced their demands for self-governance and an end to colonial exploitation. The resilience of the Indian people and the international support they garnered compelled the British to accept the inevitability of India's independence.

On August 15, 1947, India finally gained its freedom, but it came at a price - the partition of the subcontinent into India and Pakistan. The partition led to communal violence and mass migrations, leaving scars that are still felt today.

Despite the challenges faced, India's independence marked the beginning of a new era. The country adopted a democratic constitution, enshrining fundamental rights and principles. It embarked on a journey of progress, development, and inclusivity.

Today, India celebrates its independence with pride, remembering the sacrifices made by its freedom fighters. The struggle for independence remains an enduring symbol of courage, unity, and the power of collective action.

### SubQuestion No : 2

Q.2 What did India gain on August 15, 1947?

- Ans
- ☒ 1. Its first democratic elections
  - ☒ 2. Economic prosperity
  - ☒ 3. Independence from British rule
  - ☒ 4. International support for its freedom movement

Question ID : 630680385540

Option 1 ID : 6306801502950

Option 2 ID : 6306801502951

Option 3 ID : 6306801502952

Option 4 ID : 6306801502953

Status : Not Answered

Chosen Option : --

### Comprehension:

Read the passage carefully and choose the best answer to each question out of the four alternatives

In 1947, India achieved its long-awaited independence from British rule, marking a historic milestone in the country's history. The struggle for freedom was marked by relentless efforts, non-violent protests, and unwavering determination.

The journey towards independence began with the formation of the Indian National Congress in 1885, which united Indians from various backgrounds and regions. Mahatma Gandhi emerged as the prominent leader of the freedom movement, advocating for non-violent civil disobedience and passive resistance against British oppression.

Through peaceful protests like the Salt March and the Quit India Movement, millions of Indians voiced their demands for self-governance and an end to colonial exploitation. The resilience of the Indian people and the international support they garnered compelled the British to accept the inevitability of India's independence.

On August 15, 1947, India finally gained its freedom, but it came at a price - the partition of the subcontinent into India and Pakistan. The partition led to communal violence and mass migrations, leaving scars that are still felt today.

Despite the challenges faced, India's independence marked the beginning of a new era. The country adopted a democratic constitution, enshrining fundamental rights and principles. It embarked on a journey of progress, development, and inclusivity.

Today, India celebrates its independence with pride, remembering the sacrifices made by its freedom fighters. The struggle for independence remains an enduring symbol of courage, unity, and the power of collective action.

### SubQuestion No : 3

Q.3 What is the central theme of the passage?

- Ans
- ☒ 1. Mahatma Gandhi's non-violent protests in India
  - ☒ 2. India's economic development after independence
  - ☒ 3. The impact of British rule on Indian culture
  - ☒ 4. The struggle for India's independence from British rule

Question ID : 630680385539

Option 1 ID : 6306801502949

Option 2 ID : 6306801502946

Option 3 ID : 6306801502947

Option 4 ID : 6306801502948

Status : Not Answered

Chosen Option : --



### Comprehension:

Read the passage carefully and choose the best answer to each question out of the four alternatives

In 1947, India achieved its long-awaited independence from British rule, marking a historic milestone in the country's history. The struggle for freedom was marked by relentless efforts, non-violent protests, and unwavering determination.

The journey towards independence began with the formation of the Indian National Congress in 1885, which united Indians from various backgrounds and regions. Mahatma Gandhi emerged as the prominent leader of the freedom movement, advocating for non-violent civil disobedience and passive resistance against British oppression.

Through peaceful protests like the Salt March and the Quit India Movement, millions of Indians voiced their demands for self-governance and an end to colonial exploitation. The resilience of the Indian people and the international support they garnered compelled the British to accept the inevitability of India's independence.

On August 15, 1947, India finally gained its freedom, but it came at a price - the partition of the subcontinent into India and Pakistan. The partition led to communal violence and mass migrations, leaving scars that are still felt today.

Despite the challenges faced, India's independence marked the beginning of a new era. The country adopted a democratic constitution, enshrining fundamental rights and principles. It embarked on a journey of progress, development, and inclusivity.

Today, India celebrates its independence with pride, remembering the sacrifices made by its freedom fighters. The struggle for independence remains an enduring symbol of courage, unity, and the power of collective action.

### SubQuestion No : 4

Q.4 What can be inferred about India's struggle for independence from the passage?

Ans ☒ 1. The freedom movement was characterized by unity and determination.

☐ 2. The British were unwilling to negotiate with Indian leaders.

☐ 3. The struggle was violent and filled with armed conflicts.

☐ 4. India's independence was achieved through military warfare.

Question ID : 630680385541

Option 1 ID : 6306801502956

Option 2 ID : 6306801502955

Option 3 ID : 6306801502954

Option 4 ID : 6306801502957

Status : Not Answered

Chosen Option : --

### Comprehension:

Read the passage carefully and choose the best answer to each question out of the four alternatives

In 1947, India achieved its long-awaited independence from British rule, marking a historic milestone in the country's history. The struggle for freedom was marked by relentless efforts, non-violent protests, and unwavering determination.

The journey towards independence began with the formation of the Indian National Congress in 1885, which united Indians from various backgrounds and regions. Mahatma Gandhi emerged as the prominent leader of the freedom movement, advocating for non-violent civil disobedience and passive resistance against British oppression.

Through peaceful protests like the Salt March and the Quit India Movement, millions of Indians voiced their demands for self-governance and an end to colonial exploitation. The resilience of the Indian people and the international support they garnered compelled the British to accept the inevitability of India's independence.

On August 15, 1947, India finally gained its freedom, but it came at a price - the partition of the subcontinent into India and Pakistan. The partition led to communal violence and mass migrations, leaving scars that are still felt today.

Despite the challenges faced, India's independence marked the beginning of a new era. The country adopted a democratic constitution, enshrining fundamental rights and principles. It embarked on a journey of progress, development, and inclusivity.

Today, India celebrates its independence with pride, remembering the sacrifices made by its freedom fighters. The struggle for independence remains an enduring symbol of courage, unity, and the power of collective action.

### SubQuestion No : 5

Q.5 Which title best represents the content of the passage?

- Ans ☒ 1. The Struggle for Freedom in India
- ☐ 2. Gandhi's Leadership in India's Independence
- ☐ 3. The Impact of India's Independence
- ☐ 4. The British Colonial Rule in India

Question ID : 630680385538

Option 1 ID : 6306801502942

Option 2 ID : 6306801502944

Option 3 ID : 6306801502945

Option 4 ID : 6306801502943

Status : Not Answered

Chosen Option : --

Q.6 Based on the situation given below choose the appropriate idiom from the given options:

Mary had been preparing for an important job interview for weeks. She had researched the company thoroughly, practiced her answers, and was feeling confident. However, on the day of the interview, she woke up with a severe headache and a sore throat. Despite feeling unwell, she decided to go ahead with the interview, hoping that her preparation would carry her through.

In this situation, which idiom best describes Mary's determination to proceed with the interview despite feeling unwell?

- Ans ☐ 1. Butterflies in her stomach
- ☒ 2. Bite the bullet
- ☐ 3. A piece of cake
- ☐ 4. Spill the beans

Question ID : 630680385732

Option 1 ID : 6306801503660

Option 2 ID : 6306801503658

Option 3 ID : 6306801503659

Option 4 ID : 6306801503661

Status : Marked For Review

Chosen Option : 2

Q.7 Select the missing sentence that would logically fill in the blank:  
Climate change is a pressing global issue that requires immediate attention. The burning of fossil fuels releases greenhouse gases, such as carbon dioxide, into the atmosphere, trapping heat and causing a rise in temperatures. This phenomenon leads to various consequences, such as melting ice caps, extreme weather events, and rising sea levels. \_\_\_\_\_.

- Ans
- ☒ 1. Renewable energy sources, like solar and wind, are gaining popularity.
  - ☒ 2. The ozone layer depletion is a separate environmental concern.
  - ☒ 3. Governments worldwide are implementing measures to reduce emissions.
  - ☒ 4. Many animal species have gone extinct due to climate change.

Question ID : 630680385693  
Option 1 ID : 6306801503515  
Option 2 ID : 6306801503516  
Option 3 ID : 6306801503517  
Option 4 ID : 6306801503514  
Status : Answered  
Chosen Option : 4

Q.8 Select the correct question tag for the following statement:  
"We can go now, \_\_\_\_\_?"

- Ans
- ☒ 1. can't we?
  - ☒ 2. don't we?
  - ☒ 3. should we?
  - ☒ 4. won't we?

Question ID : 630680385240  
Option 1 ID : 6306801501846  
Option 2 ID : 6306801501848  
Option 3 ID : 6306801501849  
Option 4 ID : 6306801501847  
Status : Answered  
Chosen Option : 1

Q.9 The sentences given below are all part of a paragraph but do not necessarily fall in the order that they are in. The first and the last sentences of the paragraph are given. Choose the option that arranges these sentences to form a meaningful paragraph.  
They did not give me a chance to know what they  
A. wanted. I was high bred and had a great deal of  
B. to be shut up in a stall day after day instead of having my liberty,  
C. I dare say, plenty of trouble, but then it was dreadful  
D. spirit, and was very wild, no doubt, and gave them,  
and I fretted and pined and wanted to get loose.

- Ans
- ☒ 1. DBCA
  - ☒ 2. CBDA
  - ☒ 3. ADCB
  - ☒ 4. BDCA

Question ID : 630680385588  
Option 1 ID : 6306801503131  
Option 2 ID : 6306801503133  
Option 3 ID : 6306801503132  
Option 4 ID : 6306801503130  
Status : Answered  
Chosen Option : 3

Q.10 Select the word segment that completes the sentence meaningfully.  
The project's success was attributed to the team's \_\_\_\_\_ and relentless efforts.

- Ans ☒ 1. apathy  
☒ 2. indifference  
☒ 3. perseverance  
☒ 4. lethargy

Question ID : 630680385510  
Option 1 ID : 6306801502835  
Option 2 ID : 6306801502836  
Option 3 ID : 6306801502834  
Option 4 ID : 6306801502837  
Status : Answered  
Chosen Option : 3

Q.11 Fill in the blank with the most appropriate option.  
And two days after that, Bertrand \_\_\_\_\_ to kill and be killed.

- Ans ☒ 1. set out  
☒ 2. bring in  
☒ 3. turn off  
☒ 4. set about

Question ID : 630680385576  
Option 1 ID : 6306801503082  
Option 2 ID : 6306801503085  
Option 3 ID : 6306801503083  
Option 4 ID : 6306801503084  
Status : Not Answered  
Chosen Option : --

Q.12 Fill in the blank with the most appropriate option.  
One of the papers said they thought the rain would stop \_\_\_\_\_ four.

- Ans ☒ 1. below  
☒ 2. over  
☒ 3. about  
☒ 4. beyond

Question ID : 630680385338  
Option 1 ID : 6306801502205  
Option 2 ID : 6306801502203  
Option 3 ID : 6306801502202  
Option 4 ID : 6306801502204  
Status : Answered  
Chosen Option : 3

Q.13 Which of the following is the correct antonym for the word "Obfuscate"?

- Ans ☒ 1. Perplex  
☒ 2. Befuddle  
☒ 3. Insane  
☒ 4. Clarify

Question ID : 630680385736  
Option 1 ID : 6306801503675  
Option 2 ID : 6306801503677  
Option 3 ID : 6306801503674  
Option 4 ID : 6306801503676  
Status : Answered

Q.14 From the options select the most suitable proverb for the sentence given below.  
To serve them a Royal India cuisine is pointless because they don't have the taste for it.

- Ans ☒ 1. Don't judge a book by its cover.  
☒ 2. Eagles don't catch flies.  
☒ 3. Don't empty the water jar until the rain falls.  
☒ 4. Don't cast pearls before swine.

Question ID : 630680385641  
Option 1 ID : 6306801503322  
Option 2 ID : 6306801503324  
Option 3 ID : 6306801503323  
Option 4 ID : 6306801503325  
Status : Marked For Review  
Chosen Option : 1

Q.15 Select the most appropriate word for the given group of words.  
A person who pretends to have virtues, moral, or religious beliefs that they do not actually possess .

- Ans ☒ 1. Imposter  
☒ 2. Hypocrite  
☒ 3. Charlatan  
☒ 4. Fraud

Question ID : 630680385501  
Option 1 ID : 6306801502798  
Option 2 ID : 6306801502799  
Option 3 ID : 6306801502800  
Option 4 ID : 6306801502801  
Status : Answered  
Chosen Option : 2

Q.16 Select the word from the options which is the same in meaning to the bracketed word given in the sentence below.  
He also believed, as a matter of political (prudence), that the commercials had to be defensible on matters of fact.

- Ans ☒ 1. beguile  
☒ 2. diligence  
☒ 3. disgrace  
☒ 4. control

Question ID : 630680385655  
Option 1 ID : 6306801503381  
Option 2 ID : 6306801503380  
Option 3 ID : 6306801503379  
Option 4 ID : 6306801503378  
Status : Answered  
Chosen Option : 2

**Q.17** Select the word segment that substitutes the bracketed word segment correctly and completes the sentence meaningfully.  
The company's profits have (plummeted) in the last quarter due to the economic downturn.

- Ans**
- ☒ 1. expanded
  - ☒ 2. increased
  - ☒ 3. declined
  - ☒ 4. stabilized

Question ID : 630680385502

Option 1 ID : 6306801502805

Option 2 ID : 6306801502802

Option 3 ID : 6306801502803

Option 4 ID : 6306801502804

Status : Answered

Chosen Option : 3

#### Comprehension:

In the following passage some words have been deleted. Fill in the blanks with the help of the alternatives given. Select the most appropriate option for each number.

Being (1) \_\_\_\_\_ to remove the chain, I jumped over, and, running up the flagged causeway bordered (2) \_\_\_\_\_ straggling gooseberry-bushes, knocked (3) \_\_\_\_\_ for admittance, till my knuckles tingled and the dogs howled.

**SubQuestion No : 18**

**Q.18** Select the most appropriate option to fill in the blank No. 1.

- Ans**
- ☒ 1. intolerant
  - ☒ 2. abled
  - ☒ 3. prepare
  - ☒ 4. unable

Question ID : 630680385377

Option 1 ID : 6306801502344

Option 2 ID : 6306801502345

Option 3 ID : 6306801502342

Option 4 ID : 6306801502343

Status : Not Answered

Chosen Option : --

#### Comprehension:

In the following passage some words have been deleted. Fill in the blanks with the help of the alternatives given. Select the most appropriate option for each number.

Being (1) \_\_\_\_\_ to remove the chain, I jumped over, and, running up the flagged causeway bordered (2) \_\_\_\_\_ straggling gooseberry-bushes, knocked (3) \_\_\_\_\_ for admittance, till my knuckles tingled and the dogs howled.

**SubQuestion No : 19**

**Q.19** Select the most appropriate option to fill in the blank No. 2.

- Ans**
- ☒ 1. with
  - ☒ 2. about
  - ☒ 3. at
  - ☒ 4. against

Question ID : 630680385378

Option 1 ID : 6306801502349

Option 2 ID : 6306801502346

Option 3 ID : 6306801502347

Option 4 ID : 6306801502348

Status : Not Answered

Chosen Option : --

### Comprehension:

In the following passage some words have been deleted. Fill in the blanks with the help of the alternatives given. Select the most appropriate option for each number.

Being (1) \_\_\_\_\_ to remove the chain, I jumped over, and, running up the flagged causeway bordered (2) \_\_\_\_\_ straggling gooseberry-bushes, knocked (3) \_\_\_\_\_ for admittance, till my knuckles tingled and the dogs howled.

### SubQuestion No : 20

Q.20 Select the most appropriate option to fill in the blank No. 3.

- Ans ☒ 1. lucratively  
☒ 2. passionately  
☒ 3. gainfully  
☒ 4. vainly

Question ID : 630680385379

Option 1 ID : 6306801502353

Option 2 ID : 6306801502351

Option 3 ID : 6306801502352

Option 4 ID : 6306801502350

Status : Not Answered

Chosen Option : --

Q.21 The sentences given below are all part of a paragraph but do not necessarily fall in the order that they are in. The first and the last sentences of the paragraph are given.

Choose the option that arranges these sentences to form a meaningful paragraph.

My sister had a trenchant way of cutting our bread-and butter for us, that never varied.

A. First, with her left hand she jammed the loaf hard and fast against her bib – where it

B. the loaf, in an apothecary kind of way, as if she were making a plaister - using both

C. our mouths. Then she took some butter (not too much) on a knife and spread it on

D. sometimes got a pin into it, and sometimes a needle, which we afterwards got into

sides of the knife with a slapping dexterity, and trimming and moulding the butter off

round the crust.

- Ans ☒ 1. ADBC  
☒ 2. DCAB  
☒ 3. BCDA  
☒ 4. ADCB

Question ID : 630680385350

Option 1 ID : 6306801502252

Option 2 ID : 6306801502253

Option 3 ID : 6306801502251

Option 4 ID : 6306801502250

Status : Not Attempted and  
Marked For Review

Chosen Option : --



**Q.22** Arrange the following sentences in the correct order to form a coherent paragraph:  
The team faced various challenges along the way, but they remained resilient and determined.  
A. The team members collaborated seamlessly, leveraging each other's strengths.  
B. The project's success was celebrated, and the team received accolades from management.  
C. The project was completed ahead of schedule and exceeded all expectations.  
D. The project manager provided strong leadership and guidance throughout the process.  
The team's commitment to excellence and hard work was evident in the final outcome.

- Ans** ☒ 1. DACB  
☒ 2. CADB  
☒ 3. DBAC  
☒ 4. BCAD

Question ID : 630680385700  
Option 1 ID : 6306801503542  
Option 2 ID : 6306801503543  
Option 3 ID : 6306801503544  
Option 4 ID : 6306801503545  
Status : Answered  
Chosen Option : 1

**Q.23** Select the most appropriate word for the given group of words.  
A person who is excessively fond of eating and drinking .

- Ans** ☒ 1. Omnivore  
☒ 2. Vegetarian  
☒ 3. Connoisseur  
☒ 4. Gourmand

Question ID : 630680385497  
Option 1 ID : 6306801502782  
Option 2 ID : 6306801502784  
Option 3 ID : 6306801502785  
Option 4 ID : 6306801502783  
Status : Answered  
Chosen Option : 3

**Q.24** Select the most appropriate synonym of the given word.  
Nefarious

- Ans** ☒ 1. Comfortable  
☒ 2. Heinous  
☒ 3. Virtuous  
☒ 4. Compulsory

Question ID : 630680385654  
Option 1 ID : 6306801503374  
Option 2 ID : 6306801503376  
Option 3 ID : 6306801503377  
Option 4 ID : 6306801503375  
Status : Answered  
Chosen Option : 2

**Q.25** Select the most appropriate missing sentence to complete the following paragraph:  
As the plane touched down on the runway, the passengers felt a sense of relief, knowing they had safely arrived at their destination. The flight attendants announced that they had reached the final destination and thanked the passengers for choosing their airline. Passengers began gathering their belongings from the overhead compartments and making their way toward the exit. \_\_\_\_\_

- Ans**
- ☒ 1. The pilot's voice came over the intercom, reciting a poetry about the beauty of the destination
  - ☒ 2. A group of penguins waddled across the runway, causing a momentary delay in disembarking from the plane.
  - ☒ 3. The airport staff stood ready to perform a choreographed dance routine to welcome the passengers.
  - ☒ 4. The airport terminal was bustling with people, creating a vibrant and lively atmosphere.

Question ID : 630680385242

Option 1 ID : 6306801501854

Option 2 ID : 6306801501857

Option 3 ID : 6306801501856

Option 4 ID : 6306801501855

Status : Answered

Chosen Option : 1

