

	  
	<p align="center">DELHI DEVELOPMENT AUTHORITY RECRUITMENT CELL VIKAS SADAN, INA, NEW DELHI - 110023 https://www.dda.gov.in</p>
	Advertisement No. 02/2023/Recrtt. Cell/Pers./DDA
Test Date	26/09/2023
Test Time	11:30 AM - 12:30 PM
Subject	Assistant Section Officer (ASO)

Section : General Intelligence and Reasoning

Q.1 Four letter-clusters have been given, out of which three are alike in some manner and one is different. Select the odd letter-cluster.

- Ans
- ☒ 1. AZB
 - ☒ 2. FED
 - ☒ 3. RQS
 - ☒ 4. KJL

Question ID : 630680384709
 Option 1 ID : 6306801499725
 Option 2 ID : 6306801499722
 Option 3 ID : 6306801499724
 Option 4 ID : 6306801499723

Status : Answered

Chosen Option : 2

Q.2 Manish's sister Sikha is the wife of Tarun. Tarun is the brother of Deepak. Akash, the son of Mona, has a sister Ritu who is the daughter of Deepak. Ritu's father's mother is Prachi. How is Prachi related to Sikha?

- Ans
- ☒ 1. Sister
 - ☒ 2. Daughter
 - ☒ 3. Mother
 - ☒ 4. Mother-in-law

Question ID : 630680384473
 Option 1 ID : 6306801498779
 Option 2 ID : 6306801498781
 Option 3 ID : 6306801498778
 Option 4 ID : 6306801498780

Status : Answered

Chosen Option : 4

Test Prime

**ALL EXAMS,
ONE SUBSCRIPTION**



70,000+
Mock Tests



**Personalised
Report Card**



**Unlimited
Re-Attempt**



600+
Exam Covered



**Previous Year
Papers**



**500%
Refund**

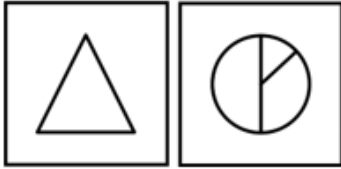


ATTEMPT FREE MOCK NOW

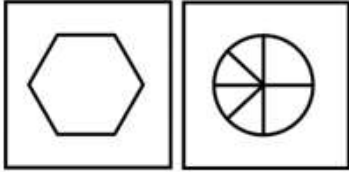
Q.3 Identify the odd figure pair.

Ans

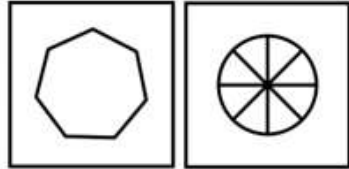
✗ 1.



✗ 2.



✓ 3.



✗ 4.



Question ID : 630680386226

Option 1 ID : 6306801505616

Option 2 ID : 6306801505615

Option 3 ID : 6306801505617

Option 4 ID : 6306801505614

Status : Answered

Chosen Option : 3

Q.4 Arrange the given words in the alphabetical order.

1. LIGHT
2. LITTLE
3. LEAVE
4. LIST
5. LISTEN

Ans

✗ 1. 31245

✗ 2. 32451

✗ 3. 31425

✓ 4. 31452

Question ID : 630680384449

Option 1 ID : 6306801498683

Option 2 ID : 6306801498682

Option 3 ID : 6306801498685

Option 4 ID : 6306801498684

Status : Answered

Chosen Option : 4

Q.5 उस विकल्प का चयन करें जो पाँचवें शब्द से उसी प्रकार से संबंधित है जिस प्रकार से चौथा शब्द तीसरे शब्द से संबंधित है और दूसरा शब्द पहले शब्द से संबंधित है।
घरेलू : अंतर्राष्ट्रीय :: प्रवेश : विकास :: आर्द्र : ?

- Ans
- ✗ 1. चिपचिपा
 - ✗ 2. उमसदार
 - ✗ 3. मैला
 - ✓ 4. शुष्क

Question ID : 630680384688

Option 1 ID : 6306801499640

Option 2 ID : 6306801499639

Option 3 ID : 6306801499638

Option 4 ID : 6306801499641

Status : Answered

Chosen Option : 4

Q.6 Choose the figure pair which is different from the rest.

Ans

- ✗ 1.
- ✓ 2.
- ✗ 3.
- ✗ 4.

Question ID : 630680384543

Option 1 ID : 6306801499058

Option 2 ID : 6306801499061

Option 3 ID : 6306801499060

Option 4 ID : 6306801499059

Status : Answered

Chosen Option : 2

Q.7 In a certain code language 'MANGO IS DELICIOUS' means 'ra li su', 'GOOD YELLOW MANGO' means 'su thyo gyo' and 'YELLOW IS COLOUR' means 'mai li gyo'. What is the code for 'COLOUR'?

- Ans**
- ✓ 1. mai
 - ✗ 2. gyo
 - ✗ 3. su
 - ✗ 4. li

Question ID : 630680384680

Option 1 ID : 6306801499609

Option 2 ID : 6306801499608


Option 3 ID : 6306801499606

Option 4 ID : 6306801499607

Status : Answered

Chosen Option : 1

Q.8 From the given answer figures, select the one in which the question figure is embedded.



Ans

- ✗ 1.
- ✓ 2.
- ✗ 3.
- ✗ 4.

Question ID : 630680384537

Option 1 ID : 6306801499036

Option 2 ID : 6306801499035

Option 3 ID : 6306801499037

Option 4 ID : 6306801499034

Status : Answered

Chosen Option : 2

Q.9 Four letter-clusters pairs have been given, out of which three are alike in some manner and one is different. Select the odd letter-cluster pair.

- Ans ☒ 1. QST : RRS
☒ 2. ABC : BAD
☒ 3. HIJ : IHK
☒ 4. MOP : NNQ

Question ID : 630680384705

Option 1 ID : 6306801499708

Option 2 ID : 6306801499706

Option 3 ID : 6306801499707

Option 4 ID : 6306801499709

Status : Answered

Chosen Option : 1

Q.10 Eight friends, Alex, Ben, Chloe, David, Emily, Fiona, George, and Henry, are sitting in a circle facing the centre. Ben is sitting between George and David. Henry is the third person to the left of Ben and the second person to the right of Alex. Chloe is sitting between Alex and George, and Ben and Emily are not sitting opposite to each other. Who is sitting third to the left of David?

- Ans ☒ 1. Gerg
☒ 2. Fiona
☒ 3. Emily
☒ 4. Choe

Question ID : 630680384818

Option 1 ID : 6306801500161

Option 2 ID : 6306801500160

Option 3 ID : 6306801500158

Option 4 ID : 6306801500159

Status : Not Answered

Chosen Option : --

Q.11 In the following series, count each L which is immediately followed by Y but Y is not immediately followed by J. How many such L's are there?

LYLJQILYJIYLYCLQILLYQLYJYLAIYLYI

- Ans ☒ 1. 7
☒ 2. 6
☒ 3. 2
☒ 4. 4

Question ID : 630680386161

Option 1 ID : 6306801505356

Option 2 ID : 6306801505357

Option 3 ID : 6306801505354

Option 4 ID : 6306801505355

Status : Answered

Chosen Option : 4

- Q.12 If ' $M \times N$ ' means 'M is the father of N'.
 If ' $M + N$ ' means 'M is the wife of N'.
 If ' $M \div N$ ' means 'M is the daughter of N'.
 If ' $M - N$ ' means 'M is the brother of N'.

How is A related to C in the expression ' $A \div B + C$ ' ?

- Ans ☒ 1. Wife
☒ 2. Mother
☒ 3. Sister
☒ 4. Daughter

- Q.13 Select the odd number in the following number series:
 3321, 3177, 3056, 2086, 2875

- Ans ☒ 1. 3177
☒ 2. 2086
☒ 3. 3056
☒ 4. 2875

Question ID : 630680384465

Option 1 ID : 6306801498746

Option 2 ID : 6306801498748

Option 3 ID : 6306801498747

Option 4 ID : 6306801498749

Status : Answered

Chosen Option : 2

- Q.14 If '+' stands for 'division', '*' stands for 'addition', 'x' stands for 'multiplication' and '-' stands for 'subtraction', then solve the following expression:

$$36 \times 6 + 3 \div 16 - 1$$

- Ans ☒ 1. 24
☒ 2. 22
☒ 3. 15
☒ 4. 34

Question ID : 630680384561

Option 1 ID : 6306801499130

Option 2 ID : 6306801499131

Option 3 ID : 6306801499133

Option 4 ID : 6306801499132

Status : Answered

Chosen Option : 2

Q.15 Find wrong number in the series.

22, 28, 40, 64, 111, 208, 400

Ans ☒ 1. 111

☒ 2. 40

☒ 3. 28

☒ 4. 64

Question ID : 630680384803

Option 1 ID : 6306801500098

Option 2 ID : 6306801500100

Option 3 ID : 6306801500101

Option 4 ID : 6306801500099

Status : Answered

Chosen Option : 1

Q.16 In the following questions, a statement is given followed by three courses of action numbered I, II, and III. Identify and answer which course(s) of action logically follows.

Situation: If the flight crew members also go on strike, then there is going to be a serious problem.

Courses of Action:

I. The airline management should engage in negotiations with the flight crew members to prevent the strike.

II. The airline management should launch new offers to attract more customers.

III. The airline management should not worry about the such concerns.

Ans ☒ 1. Only I follows

☒ 2. I, II, and III follows

☒ 3. Only I and II follow

☒ 4. Only II and III follow

Question ID : 630680384587

Option 1 ID : 6306801499234

Option 2 ID : 6306801499237

Option 3 ID : 6306801499235

Option 4 ID : 6306801499236

Status : Answered

Chosen Option : 1

Q.17 Find the missing term in the given series.

C6F, D8H, E10J, F12L, ?

Ans ☒ 1. G7N

☒ 2. H16O

☒ 3. N14A

☒ 4. G14N

Question ID : 630680384621

Option 1 ID : 6306801499373

Option 2 ID : 6306801499371

Option 3 ID : 6306801499372

Option 4 ID : 6306801499370

Status : Answered

Chosen Option : 4

Q.18 Find the wrong number in the series:

4632, 2316, 1158, 578, 289.5

- Ans ☒ 1. 578
☒ 2. 289.5
☒ 3. 2316
☒ 4. 1158

Question ID : 630680384761

Option 1 ID : 6306801499932

Option 2 ID : 6306801499930

Option 3 ID : 6306801499933

Option 4 ID : 6306801499931

Status : Answered

Chosen Option : 1

Q.19 Find the missing element in the given set to make them equal.

A = {Letters of the word SUNSHINE}

B = {SN, US, HN, ?}

- Ans ☒ 1. NE
☒ 2. IE
☒ 3. NI
☒ 4. EI

Question ID : 630680384790

Option 1 ID : 6306801500047

Option 2 ID : 6306801500048

Option 3 ID : 6306801500049

Option 4 ID : 6306801500046

Status : Answered

Chosen Option : 2

Q.20 If all the letters within each letter-clusters are arranged alphabetically, in how many letter-clusters will the first letter will be a vowel?
 IPC GUE SPO YZU OHL NFI

- Ans ☒ 1. 6
☒ 2. 2
☒ 3. 3
☒ 4. 4

Question ID : 630680386157

Option 1 ID : 6306801505339

Option 2 ID : 6306801505341

Option 3 ID : 6306801505338

Option 4 ID : 6306801505340

Status : Answered

Chosen Option : 4

Q.21 In a certain code language 'I am Riya' means '123', 'Riya is good' means '345' and 'I do good' means '175'. What is the code for 'is'?

- Ans**
- ☒ 1. 7
 - ☒ 2. 3
 - ☒ 3. 5
 - ☒ 4. 4

Question ID : 630680384678

Option 1 ID : 6306801499601

Option 2 ID : 6306801499598

Option 3 ID : 6306801499600

Option 4 ID : 6306801499599

Status : Answered

Chosen Option : 4

Q.22 Three Statements are given followed by two conclusions numbered I and II. Assuming the statements to be true, even if they seem to be at variance with commonly known facts, decide which of the conclusions logically follow(s) from the statements.

Statement:

Statement I: All wines are whiskeys.

Statement II: Some whiskeys are beers.

Statement III: Some beers are not vodkas.

Conclusion:

Conclusion I: Some beers are vodkas.

Conclusion II: All whiskeys being vodkas is a possibility.

- Ans**
- ☒ 1. Only conclusion II follows
 - ☒ 2. Both conclusions I and II follow
 - ☒ 3. Only conclusion I follows
 - ☒ 4. Neither conclusion I nor II follows

Question ID : 630680384529

Option 1 ID : 6306801499003

Option 2 ID : 6306801499004

Option 3 ID : 6306801499002

Option 4 ID : 6306801499005

Status : Answered

Chosen Option : 1

Q.23 Three Statements are given followed by three conclusions numbered I, II and III. Assuming the statements to be true, even if they seem to be at variance with commonly known facts, decide which of the conclusions logically follow(s) from the statements.

Statement:

Statement I: Only a few grasses are green.

Statement II: Some grasses are not brown.

Statement III: No brown is white.

Conclusion:

Conclusion I: All grasses being green is a possibility.

Conclusion II: Some grasses are white.

Conclusion III: Some green are brown

- Ans**
- ☒ 1. Only II follows
 - ☒ 2. None of the conclusions follow
 - ☒ 3. Only I and II follows
 - ☒ 4. Only I and III follows

Question ID : 630680384535

Option 1 ID : 6306801499028

Option 2 ID : 6306801499029

Option 3 ID : 6306801499027

Option 4 ID : 6306801499026

Status : Answered

Chosen Option : 2

Q.24 In a class of 133 students, Sehwag's rank is 57th from the bottom and Sachin is 12 ranks below Sehwag, then what is the rank of Sachin from the top?

- Ans**
- ☒ 1. 90
 - ☒ 2. 87
 - ☒ 3. 89
 - ☒ 4. 88

Question ID : 630680384515
 Option 1 ID : 6306801498949
 Option 2 ID : 6306801498946
 Option 3 ID : 6306801498947
 Option 4 ID : 6306801498948
 Status : Answered
 Chosen Option : 3

Q.25 In the following letter series some of the letters are missing which are given in that order as one of the alternatives below it. Select the correct alternative.
 a _ bbba _ b _ a _ bba _ aab

- Ans**
- ☒ 1. bbbaaa
 - ☒ 2. babaaa
 - ☒ 3. bababa
 - ☒ 4. bbaaaa

Question ID : 630680384826
 Option 1 ID : 6306801500191
 Option 2 ID : 6306801500190
 Option 3 ID : 6306801500193
 Option 4 ID : 6306801500192
 Status : Answered
 Chosen Option : 3

Section : General Awareness

Q.1 Who among the following founded first independent Turkish Kingdom in India and assumed the title 'Sultan'?

- Ans**
- ☒ 1. Ulugh Khan
 - ☒ 2. Qutub-ud-din-Aibak
 - ☒ 3. Alam Shah
 - ☒ 4. Iltutmish

Question ID : 630680384116
 Option 1 ID : 6306801497354
 Option 2 ID : 6306801497356
 Option 3 ID : 6306801497355
 Option 4 ID : 6306801497357
 Status : Answered
 Chosen Option : 2

Q.2 Who has won cricket Duleep Trophy 2023 concluded in Jul'23?

- Ans ☒ 1. West Zone
☒ 2. North Zone
☒ 3. South Zone
☒ 4. East Zone

Question ID : 630680384389
 Option 1 ID : 6306801498443
 Option 2 ID : 6306801498444
 Option 3 ID : 6306801498442
 Option 4 ID : 6306801498445
 Status : Answered
 Chosen Option : 3

Q.3 Which five year plan in the Indian Economy was based on the Harrod Domar Model?

- Ans ☒ 1. Second Five Year Plan
☒ 2. First Five Year Plan
☒ 3. Third Five Year Plan
☒ 4. Fourth Five Year Plan

Question ID : 630680384292
 Option 1 ID : 6306801498056
 Option 2 ID : 6306801498055
 Option 3 ID : 6306801498057
 Option 4 ID : 6306801498054
 Status : Answered
 Chosen Option : 2

Q.4 "The White Tiger" is a novel that explores the societal issues in modern India. Who is the author of this book?

- Ans ☒ 1. Jhumpa Lahiri
☒ 2. Salman Rushdie
☒ 3. Arundhati Roy
☒ 4. Aravind Adiga

Question ID : 630680384161
 Option 1 ID : 6306801497534
 Option 2 ID : 6306801497537
 Option 3 ID : 6306801497535
 Option 4 ID : 6306801497536
 Status : Answered
 Chosen Option : 4

Q.5 In which of the following states of India is the famous Hornbill festival celebrated?

- Ans ☒ 1. Nagaland
☒ 2. Jharkhand
☒ 3. Mumbai
☒ 4. Assam

Question ID : 630680384067
 Option 1 ID : 6306801497160
 Option 2 ID : 6306801497161
 Option 3 ID : 6306801497159
 Option 4 ID : 6306801497158
 Status : Answered
 Chosen Option : 1

Q.6 Who among the following is the first Arab woman to venture into space?

- Ans
- ☒ 1. Svetlana Savitskaya
 - ☒ 2. Virgil Grissom
 - ☒ 3. Shannon Lucid
 - ☒ 4. Rayyanah Barnawi

Question ID : 630680384042
 Option 1 ID : 6306801497059
 Option 2 ID : 6306801497058
 Option 3 ID : 6306801497061
 Option 4 ID : 6306801497060
 Status : Answered
 Chosen Option : 4

Q.7 Which of the following social security scheme has completed seven years of their launch in India?

- Ans
- ☒ 1. Varishtha Pension Bima Yojana
 - ☒ 2. Pradhan Mantri Vaya Vandana Yojana(PMVVY)
 - ☒ 3. Life Cover under Pradhan Mantri Jan Dhan Yojana (PMJDY)
 - ☒ 4. Pradhan Mantri Jeevan Jyoti Bima Yojana (PMJJBY)

Question ID : 630680384047
 Option 1 ID : 6306801497079
 Option 2 ID : 6306801497080
 Option 3 ID : 6306801497081
 Option 4 ID : 6306801497078
 Status : Answered
 Chosen Option : 4

Q.8 Who was the youngest Prime Minister of India?

- Ans
- ☒ 1. Jawaharlal Nehru
 - ☒ 2. Mahatma Gandhi
 - ☒ 3. Rajiv Gandhi
 - ☒ 4. Vallabhbhai Patel

Question ID : 630680386479
 Option 1 ID : 6306801506626
 Option 2 ID : 6306801506627
 Option 3 ID : 6306801506629
 Option 4 ID : 6306801506628
 Status : Answered
 Chosen Option : 3

Q.9 Which award in India is given annually to the best English-language debut novel or first book of a fiction writer?

- Ans
- ☒ 1. Crossword Book Award
 - ☒ 2. Janpath Award
 - ☒ 3. Booker Prize
 - ☒ 4. Sahitya Akademi Award

Question ID : 630680386419
 Option 1 ID : 6306801506389
 Option 2 ID : 6306801506387
 Option 3 ID : 6306801506386
 Option 4 ID : 6306801506388
 Status : Answered
 Chosen Option : 3

Q.10 The "Hemis Festival" is a major local celebration of which Indian state, known for its vibrant masked dances and religious rituals?

- Ans
- ☒ 1. Arunachal Pradesh
 - ☒ 2. Himachal Pradesh
 - ☒ 3. Sikkim
 - ☒ 4. Ladakh (Jammu and Kashmir)

Question ID : 630680384172
 Option 1 ID : 6306801497580
 Option 2 ID : 6306801497578
 Option 3 ID : 6306801497579
 Option 4 ID : 6306801497581
 Status : Answered
 Chosen Option : 4

Q.11 "Chilika Lake," the largest brackish water lake in India, is located in which state?

- Ans
- ☒ 1. Odisha
 - ☒ 2. Maharashtra
 - ☒ 3. Karnataka
 - ☒ 4. Kerala

Question ID : 630680384203
 Option 1 ID : 6306801497703
 Option 2 ID : 6306801497704
 Option 3 ID : 6306801497705
 Option 4 ID : 6306801497702
 Status : Answered
 Chosen Option : 1

Q.12 Which river is known as the "Lifeline of South India" and is the second-longest river in India?

- Ans
- ☒ 1. Brahmaputra River
 - ☒ 2. Ganges River
 - ☒ 3. Godavari River
 - ☒ 4. Yamuna River

Question ID : 630680386456
 Option 1 ID : 6306801506535
 Option 2 ID : 6306801506534
 Option 3 ID : 6306801506537
 Option 4 ID : 6306801506536
 Status : Answered
 Chosen Option : 3

Q.13 When was the National Infrastructure Pipeline (NIP) introduced in India?

- Ans
- ☒ 1. 2009
 - ☒ 2. 2020
 - ☒ 3. 2019
 - ☒ 4. 2013

Question ID : 630680384095
 Option 1 ID : 6306801497273
 Option 2 ID : 6306801497271
 Option 3 ID : 6306801497272
 Option 4 ID : 6306801497270
 Status : Not Answered
 Chosen Option : --

Q.14 What is the rate at which one product is transformed into another called?

- Ans ☒ 1. Marginal rate of transformation
☒ 2. Marginal output
☒ 3. Marginal rate of substitution
☒ 4. Production Possibility Curve (PPC)

Question ID : 630680384083
 Option 1 ID : 6306801497222
 Option 2 ID : 6306801497224
 Option 3 ID : 6306801497223
 Option 4 ID : 6306801497225
 Status : Answered
 Chosen Option : 1

Q.15 What is the rank of India in Human Development Index 2023 out of 191 countries?

- Ans ☒ 1. 154
☒ 2. 111
☒ 3. 132
☒ 4. 176

Question ID : 630680384094
 Option 1 ID : 6306801497267
 Option 2 ID : 6306801497268
 Option 3 ID : 6306801497266
 Option 4 ID : 6306801497269
 Status : Answered
 Chosen Option : 3

Q.16 When was the Aligarh Movement started in India?

- Ans ☒ 1. 1888
☒ 2. 1875
☒ 3. 1899
☒ 4. 1845

Question ID : 630680384334
 Option 1 ID : 6306801498222
 Option 2 ID : 6306801498224
 Option 3 ID : 6306801498223
 Option 4 ID : 6306801498225
 Status : Not Answered
 Chosen Option : --

Q.17 Which medieval kingdom of South India was known for its architectural marvels, including the UNESCO World Heritage Sites of Brihadeeswarar Temple and Airavatesvara Temple?

- Ans ☒ 1. Kakatiya Kingdom
☒ 2. Vijayanagara Empire
☒ 3. Hoysala Empire
☒ 4. Chola Kingdom

Question ID : 630680386477
 Option 1 ID : 6306801506621
 Option 2 ID : 6306801506619
 Option 3 ID : 6306801506620
 Option 4 ID : 6306801506618
 Status : Answered
 Chosen Option : 4

Q.18 Who among the following is known as the father of National Income in India?

- Ans ☒ 1. Dadabhai Naoroji
- ☐ 2. CV Raman
- ☐ 3. Mahatma Gandhi
- ☐ 4. B.R. Ambedkar

Question ID : 630680384082
 Option 1 ID : 6306801497219
 Option 2 ID : 6306801497221
 Option 3 ID : 6306801497220
 Option 4 ID : 6306801497218
 Status : Answered
 Chosen Option : 1

Q.19 Which of the following states in India has the lowest literacy rate as per 2021 Census?

- Ans ☐ 1. Assam
- ☐ 2. Sikkim
- ☒ 3. Bihar
- ☐ 4. Kerala

Question ID : 630680384113
 Option 1 ID : 6306801497344
 Option 2 ID : 6306801497345
 Option 3 ID : 6306801497342
 Option 4 ID : 6306801497343
 Status : Answered
 Chosen Option : 3

Q.20 When was the first census conducted in India?

- Ans ☒ 1. 1872
- ☐ 2. 1892
- ☐ 3. 1888
- ☐ 4. 1875

Question ID : 630680384107
 Option 1 ID : 6306801497319
 Option 2 ID : 6306801497321
 Option 3 ID : 6306801497320
 Option 4 ID : 6306801497318
 Status : Answered
 Chosen Option : 1

Q.21 How many Regional Language Centres are there in India?

- Ans ☐ 1. Twenty
- ☐ 2. Ten
- ☐ 3. Three
- ☒ 4. Seven

Question ID : 630680384076
 Option 1 ID : 6306801497195
 Option 2 ID : 6306801497194
 Option 3 ID : 6306801497196
 Option 4 ID : 6306801497197
 Status : Answered
 Chosen Option : 3

Q.22 When is Grand Prix of India 2023 scheduled?

- Ans
- ☒ 1. Dec'2023
 - ☒ 2. Jan'2024
 - ☒ 3. Oct'2023
 - ☒ 4. Sept'2023

Question ID : 630680384387
 Option 1 ID : 6306801498436
 Option 2 ID : 6306801498437
 Option 3 ID : 6306801498435
 Option 4 ID : 6306801498434
 Status : Not Answered
 Chosen Option : --

Q.23 Which program directs to improve nutritional outcomes for children and Pregnant woman?

- Ans
- ☒ 1. Pradhan Mantri Kaushal Vikas Yojna
 - ☒ 2. Poshan Abhiyaan
 - ☒ 3. Rashtriya Poshan Maah
 - ☒ 4. Mantri Matru Vandana Yojna

Question ID : 630680384381
 Option 1 ID : 6306801498413
 Option 2 ID : 6306801498410
 Option 3 ID : 6306801498412
 Option 4 ID : 6306801498411
 Status : Answered
 Chosen Option : 4

Q.24 Which ministry helps in promotion of e-governance, e-commerce, e-infrastructure etc. in India?

- Ans
- ☒ 1. Ministry of Education
 - ☒ 2. Ministry of Defense
 - ☒ 3. Ministry of Finance
 - ☒ 4. Ministry of Electronics and Information Technology

Question ID : 630680384374
 Option 1 ID : 6306801498384
 Option 2 ID : 6306801498383
 Option 3 ID : 6306801498385
 Option 4 ID : 6306801498382
 Status : Answered
 Chosen Option : 4

Q.25 By what name is Rabindranath Tagore known as?

- Ans
- ☒ 1. Gurudev
 - ☒ 2. Punjab Kesari
 - ☒ 3. Sardar
 - ☒ 4. Lokhitwadi

Question ID : 630680384337
 Option 1 ID : 6306801498237
 Option 2 ID : 6306801498235
 Option 3 ID : 6306801498234
 Option 4 ID : 6306801498236
 Status : Answered
 Chosen Option : 1

Section : Quantitative Aptitude

Q.1 Afzal, Bipin and Charan can do a job in 12, 15 and 18 days respectively if they worked alone. Afzal leaves after they have worked together for 4 days. In how many days Charan and Bipin do the rest of the job?

- Ans**
- ☒ 1. $\frac{21}{16}$ days
- ☒ 2. $\frac{16}{11}$ days
- ☒ 3. $\frac{14}{11}$ days
- ☒ 4. $\frac{11}{16}$ days

Question ID : 630680385042

Option 1 ID : 6306801501057

Option 2 ID : 6306801501054

Option 3 ID : 6306801501056

Option 4 ID : 6306801501055

Status : Answered

Chosen Option : 2

Q.2 The table shows the number of Salesmen (in thousand) who joined five different companies during six different years. The total number of salesmen joining Company B in the year 2017, 2018 and 2019 together was approximately what per cent of the total number of Salesmen joining Company C over all the years together?

Year	Company				
	Company A	Company B	Company C	Company D	Company E
2016	3.5	0.8	0.6	4.1	4.1
2017	1.7	4.1	5.8	3.9	4.7
2018	2.9	4.7	7.7	3.4	5.2
2019	1.3	5.2	5.1	4.3	6.4
2020	4.7	6.4	6.5	5.7	6.1
2021	5.5	6.1	4.3	6.5	2.9

- Ans**
- ☒ 1. 58.96%
- ☒ 2. 37.85%
- ☒ 3. 62.35%
- ☒ 4. 46.67%

Question ID : 630680384968

Option 1 ID : 6306801500760

Option 2 ID : 6306801500758

Option 3 ID : 6306801500761

Option 4 ID : 6306801500759

Status : Answered

Chosen Option : 4

Q.3 Find the distance between the two centres is if the radii of two circles be 8 cm and 5 cm and the length of transverse common tangent be 10 cm?

- Ans
- ☒ 1. $\sqrt{179}$ cm
 - ☒ 2. $\sqrt{269}$ cm
 - ☒ 3. $\sqrt{351}$ cm
 - ☒ 4. $\sqrt{8}$ cm

Question ID : 630680385827

Option 1 ID : 6306801504027

Option 2 ID : 6306801504028

Option 3 ID : 6306801504029

Option 4 ID : 6306801504026

Status : Answered

Chosen Option : 2

Q.4 If $m - n = 12$ and $mn = 1408$, find the value of $m + n$.

- Ans
- ☒ 1. 76
 - ☒ 2. 84
 - ☒ 3. 56
 - ☒ 4. 64

Question ID : 630680385123

Option 1 ID : 6306801501381

Option 2 ID : 6306801501380

Option 3 ID : 6306801501379

Option 4 ID : 6306801501378

Status : Answered

Chosen Option : 1

Q.5 The volume of a right circular cone is equal to that of a sphere, whose radius is $\frac{5}{6}$ of the radius of the base of the cone. What is the ratio of the radius of the base to the height of the cone?

- Ans
- ☒ 1. 122 : 54
 - ☒ 2. 125 : 122
 - ☒ 3. 54 : 155
 - ☒ 4. 54 : 125

Question ID : 630680384883

Option 1 ID : 6306801500418

Option 2 ID : 6306801500421

Option 3 ID : 6306801500419

Option 4 ID : 6306801500420

Status : Answered

Chosen Option : 4

Q.6 If $u + v = 27$ and $u^2 + v^2 = 425$, then the value of $(u - v)^2$ will be _____.

- Ans
- ☒ 1. 36
 - ☒ 2. 25
 - ☒ 3. 81
 - ☒ 4. 121

Question ID : 630680384954
 Option 1 ID : 6306801500703
 Option 2 ID : 6306801500702
 Option 3 ID : 6306801500704
 Option 4 ID : 6306801500705
 Status : Answered
 Chosen Option : 4

Q.7 Anand, Brijesh and Chaitanya invested ₹8000, ₹4000 and ₹8000 respectively in a business. Anand left after six months. If after eight months, there was a gain of ₹4005, then what will be the share of Brijesh?

- Ans
- ☒ 1. ₹850
 - ☒ 2. ₹790
 - ☒ 3. ₹700
 - ☒ 4. ₹890

Question ID : 630680385031
 Option 1 ID : 6306801501012
 Option 2 ID : 6306801501011
 Option 3 ID : 6306801501010
 Option 4 ID : 6306801501013
 Status : Answered
 Chosen Option : 4

Q.8 Three solid of cubes of sides 6cm, 8cm and 10 cm are melted to form a new cube. Find the total surface area of the cube so formed.

- Ans
- ☒ 1. 975 cm².
 - ☒ 2. 864 cm².
 - ☒ 3. 756 cm².
 - ☒ 4. 542 cm².

Question ID : 630680384991
 Option 1 ID : 6306801500853
 Option 2 ID : 6306801500851
 Option 3 ID : 6306801500852
 Option 4 ID : 6306801500850
 Status : Answered
 Chosen Option : 2

Q.9 When the price of book was reduced by 25% its sale increased by 85%. What was the net effect on the revenue?

- Ans ☒ 1. 38.75% decrease
☒ 2. 38.75% increase
☒ 3. 37.75% increase
☒ 4. 37.75% decrease

Question ID : 630680385000

Option 1 ID : 6306801500888

Option 2 ID : 6306801500886

Option 3 ID : 6306801500887

Option 4 ID : 6306801500889

Status : Answered

Chosen Option : 2

Q.10 In a right-angled triangle ABC, right-angled at B, find the value of $\sin B$ if AB is 7 cm and AC 25 cm and angle A = 30° .

- Ans ☒ 1. 1
☒ 2. $\frac{1}{7}$
☒ 3. $\frac{7}{25}$
☒ 4. $\frac{1}{\sqrt{2}}$

Question ID : 630680385211

Option 1 ID : 6306801501731

Option 2 ID : 6306801501733

Option 3 ID : 6306801501732

Option 4 ID : 6306801501730

Status : Answered

Chosen Option : 1

Q.11 After getting two successive discounts Vineeta got a shirt at ₹175 whose marked price is ₹350. If the second discount is 20% find the first discount.

- Ans ☒ 1. 37.5%
☒ 2. 25%
☒ 3. 15%
☒ 4. 42.5%

Question ID : 630680385025

Option 1 ID : 6306801500988

Option 2 ID : 6306801500987

Option 3 ID : 6306801500986

Option 4 ID : 6306801500989

Status : Answered

Chosen Option : 1

Q.12 Find the curved surface area of a cone whose height is 24 cm and radius is 7 cm.

- Ans
- ☒ 1. 780 cm²
 - ☒ 2. 630 cm²
 - ☒ 3. 550 cm²
 - ☒ 4. 220 cm²

Question ID : 630680385146
 Option 1 ID : 6306801501472
 Option 2 ID : 6306801501473
 Option 3 ID : 6306801501471
 Option 4 ID : 6306801501470
 Status : Answered
 Chosen Option : 3

Q.13 What will be the greatest four digit number which can be completely divided by 12, 15, 20 and 35?

- Ans
- ☒ 1. 9970
 - ☒ 2. 9540
 - ☒ 3. 9800
 - ☒ 4. 9660

Question ID : 630680384992
 Option 1 ID : 6306801500854
 Option 2 ID : 6306801500857
 Option 3 ID : 6306801500856
 Option 4 ID : 6306801500855
 Status : Answered
 Chosen Option : 4

Q.14 The average age of 24 boys and their teacher's age is 21 years. If the teacher's age is excluded, the average reduces by 1. What is the teacher's age?

- Ans
- ☒ 1. 45 years
 - ☒ 2. 40 years
 - ☒ 3. 35 years
 - ☒ 4. 29 years

Question ID : 630680384960
 Option 1 ID : 6306801500729
 Option 2 ID : 6306801500728
 Option 3 ID : 6306801500727
 Option 4 ID : 6306801500726
 Status : Answered
 Chosen Option : 1

Q.15 Two parallel lines SB and TD are intersected by a transversal line XY at U and V respectively. The lines UP and VP are the bisectors of the interior angles $\angle BUV$ and $\angle DVU$ on the same side of the transversal. Then, $\angle UPV$ is equal to _____.

- Ans
- ☒ 1. 135°
 - ☒ 2. 90°
 - ☒ 3. 45°
 - ☒ 4. 60°

Question ID : 630680385012
 Option 1 ID : 6306801500937
 Option 2 ID : 6306801500936
 Option 3 ID : 6306801500934
 Option 4 ID : 6306801500935
 Status : Not Answered
 Chosen Option : --

Q.16 The average weight of 14 tables is 120 kg. If 18 new tables are added, the new average increase by 6 kg. What will be the approximate average weight of the 18 new tables?

- Ans
- ☒ 1. 142 kg
 - ☒ 2. 137 kg
 - ☒ 3. 131 kg
 - ☒ 4. 125 kg

Question ID : 630680384961
 Option 1 ID : 6306801500733
 Option 2 ID : 6306801500732
 Option 3 ID : 6306801500731
 Option 4 ID : 6306801500730
 Status : Answered
 Chosen Option : 3

Q.17 10 pumps working 5 hours a day can empty a completely filled reservoir in 13 days. How many such pumps working 13 hours a day will empty the same reservoir in 5 days ?

- Ans
- ☒ 1. 15
 - ☒ 2. 5
 - ☒ 3. 20
 - ☒ 4. 10

Question ID : 630680385037
 Option 1 ID : 6306801501036
 Option 2 ID : 6306801501034
 Option 3 ID : 6306801501037
 Option 4 ID : 6306801501035
 Status : Answered
 Chosen Option : 4

Q.18 If the surface area of a sphere is 324π sq cm, what is its approximate volume? (Take $\pi = \frac{22}{7}$)

- Ans
- ☒ 1. 3216 cm^3
 - ☒ 2. 3154 cm^3
 - ☒ 3. 3125 cm^3
 - ☒ 4. 3055 cm^3

Question ID : 630680384978

Option 1 ID : 6306801500801

Option 2 ID : 6306801500800

Option 3 ID : 6306801500799

Option 4 ID : 6306801500798

Status : Answered

Chosen Option : 4

Q.19 The intersection point of the medians of a triangle is:

- Ans
- ☒ 1. Incentre
 - ☒ 2. Excentre
 - ☒ 3. Centroid
 - ☒ 4. Orthocentre

Question ID : 630680385182

Option 1 ID : 6306801501616

Option 2 ID : 6306801501617

Option 3 ID : 6306801501615

Option 4 ID : 6306801501614

Status : Answered

Chosen Option : 3

Q.20 If $s + t = p$, $st = q$, then $(s^4 + t^4)$ is equal to:

- Ans
- ☒ 1. $p^4 - 4p^2q + 2q^2$
 - ☒ 2. $p^4 - 4p^2q^2 + 2q^2$
 - ☒ 3. $p^4 - 2p^2q^2 + q^2$
 - ☒ 4. $p^4 - 4p^2q + q^2$

Question ID : 630680384952

Option 1 ID : 6306801500697

Option 2 ID : 6306801500695

Option 3 ID : 6306801500696

Option 4 ID : 6306801500694

Status : Answered

Chosen Option : 1

Q.21 Find the value of:

$$6543.44 + 543.44 - 98.66 - 5.6$$

- Ans
- ☐ 1. 7844.62
 - ☐ 2. 5422.62
 - ☐ 3. 6011.62
 - ☒ 4. 6982.62

Question ID : 630680384897

Option 1 ID : 6306801500475

Option 2 ID : 6306801500477

Option 3 ID : 6306801500476

Option 4 ID : 6306801500474

Status : Answered

Chosen Option : 4

Q.22 Raghu has certain number of coins of different denominations. If he has the ratio of the number of ₹1 coins to ₹2 coins is 5 : 7, respectively and the ratio of number of ₹2 coins to ₹5 coins is 7 : 6 respectively. Find the total value of the ₹5 coins, if the total value of the ₹1 coins that Raghu has is ₹15.

- Ans
- ☐ 1. ₹135
 - ☒ 2. ₹90
 - ☐ 3. ₹45
 - ☐ 4. ₹150

Question ID : 630680385032

Option 1 ID : 6306801501016

Option 2 ID : 6306801501015

Option 3 ID : 6306801501014

Option 4 ID : 6306801501017

Status : Not Answered

Chosen Option : --

Q.23 Viraj sold a table at a loss of 25%. If he had sold it for ₹180 more, he would have made a profit of 20%. The cost price of the table is:

- Ans
- ☐ 1. ₹100
 - ☐ 2. ₹200
 - ☐ 3. ₹300
 - ☒ 4. ₹400

Question ID : 630680385020

Option 1 ID : 6306801500966

Option 2 ID : 6306801500967

Option 3 ID : 6306801500968

Option 4 ID : 6306801500969

Status : Answered

Chosen Option : 4

Q.24 In an election of 3 candidates , Mangesh, Rohit and Amar. Mangesh gets 35% more votes than Rohit . Mangesh also beats Amar by 62000 votes. If it is known that Rohit gets 20% more votes than Amar, find the number of voters on the voting list (given 80% of the voters on the voting list voted and no votes were illegal)

- Ans**
- ☒ 1. 487500
 - ☒ 2. 477500
 - ☒ 3. 477600
 - ☒ 4. 478500

Question ID : 630680385006

Option 1 ID : 6306801500913

Option 2 ID : 6306801500911

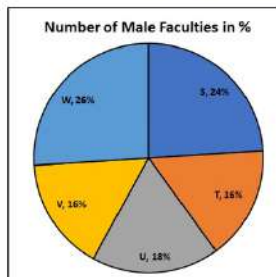
Option 3 ID : 6306801500910

Option 4 ID : 6306801500912

Status : Not Answered

Chosen Option : --

Q.25 Pie chart given below shows the percentage distribution of total number of male faculties in five different schools. Total male faculties in all schools together = 7500
The number of female faculties in schools S and T both is 15% more than male faculties . The number of female faculties in school U is 40% more than male faculties. Then calculate total number of female faculties in school S, T and U?



- Ans**
- ☒ 1. 3564
 - ☒ 2. 5428
 - ☒ 3. 5340
 - ☒ 4. 6852

Question ID : 630680384973

Option 1 ID : 6306801500781

Option 2 ID : 6306801500778

Option 3 ID : 6306801500780

Option 4 ID : 6306801500779

Status : Not Answered

Chosen Option : --

Q.1 Arrange the following sentences in the correct order to form a coherent paragraph.
A) The city's skyline glittered with shimmering lights, creating a breathtaking sight.
B) People gathered in anticipation, eagerly waiting for the fireworks display to begin.
C) The countdown commenced, and the crowd cheered in excitement.
D) The sky erupted in a dazzling array of colours as the fireworks soared into the night.
E) The symphony of explosions filled the air, accompanied by oohs and aahs from the spectators.

Ans ☒ 1. DACEB
☒ 2. BDACE
☒ 3. CEDBA
☒ 4. ADBCE

Question ID : 630680385257
Option 1 ID : 6306801501917
Option 2 ID : 6306801501916
Option 3 ID : 6306801501915
Option 4 ID : 6306801501914
Status : Answered
Chosen Option : 2

Q.2 Select the word segment that substitutes (replaces) the bracketed word segment correctly and completes the sentence meaningfully. Select the option 'no correction required' if the sentence is correct as given.
Had Edgar never gathered our conversation, (he can ever had been the) worse for it.

Ans ☒ 1. he could never had been the
☒ 2. he would never have been the
☒ 3. No correction required
☒ 4. he can never have been the

Question ID : 630680385385
Option 1 ID : 6306801502370
Option 2 ID : 6306801502372
Option 3 ID : 6306801502373
Option 4 ID : 6306801502371
Status : Answered
Chosen Option : 2

Q.3 Select the most appropriate word for the given phrase.
An annual calendar containing important dates and statistical information.

Ans ☒ 1. Axiom
☒ 2. Almanac
☒ 3. Utopia
☒ 4. Panacea

Question ID : 630680385396
Option 1 ID : 6306801502417
Option 2 ID : 6306801502415
Option 3 ID : 6306801502416
Option 4 ID : 6306801502414
Status : Answered
Chosen Option : 2

Q.4 Select the word from the options which is exactly opposite in meaning to the bracketed word given in the sentence below.
Tropical storms Teddy and Vicky are still out in the (middle) of the Atlantic.

- Ans
- ☒ 1. Strident
 - ☒ 2. Callow
 - ☒ 3. Malign
 - ☒ 4. Aside

Question ID : 630680385645
Option 1 ID : 6306801503340
Option 2 ID : 6306801503338
Option 3 ID : 6306801503341
Option 4 ID : 6306801503339
Status : Answered
Chosen Option : 4

Q.5 Fill in the blank with the most appropriate option.
A man with the gout in his right hand - and everywhere else - can't expect to _____ a Double Gloucester without hurting himself.

- Ans
- ☒ 1. get through
 - ☒ 2. dress up
 - ☒ 3. move on
 - ☒ 4. hold on

Question ID : 630680385342
Option 1 ID : 6306801502218
Option 2 ID : 6306801502221
Option 3 ID : 6306801502219
Option 4 ID : 6306801502220
Status : Answered
Chosen Option : 1

Q.6 Select the most appropriate synonym of the given word.
Turpitude

- Ans
- ☒ 1. Harsh
 - ☒ 2. Devoid
 - ☒ 3. Portly
 - ☒ 4. Corruption

Question ID : 630680385422
Option 1 ID : 6306801502521
Option 2 ID : 6306801502518
Option 3 ID : 6306801502520
Option 4 ID : 6306801502519
Status : Answered
Chosen Option : 1

Q.7 From the options select the most suitable proverb for the sentence given below.
Although I didn't need them but because of the 30% discount, I bought five shoes and four shirts.

- Ans ☒ 1. Half a loaf is better than none.
☒ 2. Hope for the best, but prepare for the worst.
☒ 3. Good bargains empty the purse.
☒ 4. Grief divided is made lighter.

Question ID : 630680385407
Option 1 ID : 6306801502459
Option 2 ID : 6306801502461
Option 3 ID : 6306801502460
Option 4 ID : 6306801502458
Status : Answered
Chosen Option : 3

Q.8 Fill in the blank with the most appropriate option.
The traffic was heavy. _____, he arrived late for the appointment.

- Ans ☒ 1. Moreover
☒ 2. Therefore
☒ 3. Likewise
☒ 4. However

Question ID : 630680385468
Option 1 ID : 6306801502689
Option 2 ID : 6306801502687
Option 3 ID : 6306801502686
Option 4 ID : 6306801502688
Status : Answered
Chosen Option : 2

Q.9 Arrange the following sentences in the correct order to form a coherent paragraph:
The chef carefully selected the freshest ingredients for the special dish.

- A. The aroma of the dish filled the restaurant, enticing everyone's taste buds.
B. The chef's culinary skills were highly praised by food critics and patrons alike.
C. The restaurant's ambiance added to the delightful dining experience, as the chef got to work.
D. As the plates were served, the customers' faces lit up with delight.
The dish soon became the restaurant's signature item, drawing in more customers.

- Ans ☒ 1. BCAD
☒ 2. CADB
☒ 3. DBAC
☒ 4. ABCD

Question ID : 630680385694
Option 1 ID : 6306801503521
Option 2 ID : 6306801503519
Option 3 ID : 6306801503520
Option 4 ID : 6306801503518
Status : Answered
Chosen Option : 3

Q.10 The statement below has been given with bracketed text. Select the option with correct Idiom for the bracketed text.
"Well, (I am about to drink this!)" Lilly said before taking her cough medicine.

- Ans
- ☒ 1. clip your wings!
 - ☒ 2. easy as a pie!
 - ☒ 3. chill out!
 - ☒ 4. down the hatch!

Question ID : 630680385402
Option 1 ID : 6306801502441
Option 2 ID : 6306801502438
Option 3 ID : 6306801502439
Option 4 ID : 6306801502440
Status : Answered
Chosen Option : 3

Q.11 Fill in the blank with the appropriate interjection:
_____ ! what an amazing performance by the acrobats.

- Ans
- ☒ 1. Hmm
 - ☒ 2. Wow
 - ☒ 3. Ouch
 - ☒ 4. Oops

Question ID : 630680385682
Option 1 ID : 6306801503472
Option 2 ID : 6306801503471
Option 3 ID : 6306801503470
Option 4 ID : 6306801503473
Status : Answered
Chosen Option : 2

Q.12 Select the most appropriate word for the given phrase.
One who can use either hand with ease.

- Ans
- ☒ 1. Apostate
 - ☒ 2. Agnostic
 - ☒ 3. Arbitrator
 - ☒ 4. Ambidextrous

Question ID : 630680385390
Option 1 ID : 6306801502390
Option 2 ID : 6306801502392
Option 3 ID : 6306801502391
Option 4 ID : 6306801502393
Status : Answered
Chosen Option : 4

Q.13 Identify the word that is the opposite in meaning to the given word.
Composure

- Ans

☒

1. Tranquil
- ☒

2. Calm
- ☒

3. Agitated
- ☒

4. Serene

Question ID : 630680385527

Option 1 ID : 6306801502904

Option 2 ID : 6306801502903

Option 3 ID : 6306801502902

Option 4 ID : 6306801502905

Status : Answered

Chosen Option : 3

Comprehension:

In the following passage some words have been deleted. Fill in the blanks with the help of the alternatives given. Select the most appropriate option for each number.

The only light in the room was the (1) _____ glow from the fire— which lit his eyes like adverse railway signals, but (2) _____ his downcast face in darkness—and the scanty vestiges of the day that came in (3) _____ the open door.

SubQuestion No : 14

Q.14 Select the most appropriate option to fill in the blank No. 2.

- Ans

☒

1. right
- ☒

2. left
- ☒

3. loft
- ☒

4. lift

Question ID : 630680385366

Option 1 ID : 6306801502310

Option 2 ID : 6306801502313

Option 3 ID : 6306801502311

Option 4 ID : 6306801502312

Status : Answered

Chosen Option : 3

Comprehension:

In the following passage some words have been deleted. Fill in the blanks with the help of the alternatives given. Select the most appropriate option for each number.

The only light in the room was the (1) _____ glow from the fire— which lit his eyes like adverse railway signals, but (2) _____ his downcast face in darkness—and the scanty vestiges of the day that came in (3) _____ the open door.

SubQuestion No : 15

Q.15 Select the most appropriate option to fill in the blank No. 1.

- Ans

☒

1. blunt
- ☒

2. red
- ☒

3. tidy
- ☒

4. numerous

Question ID : 630680385365

Option 1 ID : 6306801502306

Option 2 ID : 6306801502307

Option 3 ID : 6306801502308

Option 4 ID : 6306801502309

Status : Answered

Chosen Option : 1

Comprehension:

In the following passage some words have been deleted. Fill in the blanks with the help of the alternatives given. Select the most appropriate option for each number.

The only light in the room was the (1) _____ glow from the fire— which lit his eyes like adverse railway signals, but (2) _____ his downcast face in darkness—and the scanty vestiges of the day that came in (3) _____ the open door.

SubQuestion No : 16

Q.16 Select the most appropriate option to fill in the blank No. 3.

- Ans ☒ 1. throughout
☒ 2. thought
☒ 3. through
☒ 4. tough

Question ID : 630680385367
 Option 1 ID : 6306801502315
 Option 2 ID : 6306801502317
 Option 3 ID : 6306801502314
 Option 4 ID : 6306801502316
 Status : Answered
 Chosen Option : 3

Q.17 Select the word from the options which is the same in meaning to the bracketed word given in the sentence below.
 Earlier this year, I gave a (tepid) recommendation to Mortal Kombat's latest theatrical reboot.

- Ans ☒ 1. sliding
☒ 2. faux
☒ 3. appraising
☒ 4. dull

Question ID : 630680385423
 Option 1 ID : 6306801502524
 Option 2 ID : 6306801502523
 Option 3 ID : 6306801502525
 Option 4 ID : 6306801502522
 Status : Answered
 Chosen Option : 4

Q.18 Select the word segment that substitutes (replaces) the bracketed word segment correctly and completes the sentence meaningfully. Select the option 'no correction required' if the sentence is correct as given.
 This hovel however, joined a cottage of a neat and pleasant appearance, but (after my late dearly bought) experience, I dared not enter it.

- Ans ☒ 1. after my late dearly throughout
☒ 2. after my late dearly consider
☒ 3. No correction required
☒ 4. later my late dearly brought

Question ID : 630680385391
 Option 1 ID : 6306801502395
 Option 2 ID : 6306801502396
 Option 3 ID : 6306801502397
 Option 4 ID : 6306801502394
 Status : Answered
 Chosen Option : 3

Q.19 Fill in the blank with the most appropriate option.
We must get rid of the evidence, _____ we?

- Ans ☒ 1. shan't
☒ 2. shouldn't
☒ 3. can't
☒ 4. mustn't

Question ID : 630680385581
Option 1 ID : 6306801503104
Option 2 ID : 6306801503103
Option 3 ID : 6306801503105
Option 4 ID : 6306801503102
Status : Answered
Chosen Option : 4

Q.20 Select the most appropriate missing sentence to complete the paragraph meaningfully.
'He explained it,' she replied. 'I wonder as much as you. He said he called to gather information concerning me from you, supposing you resided there still; and Joseph told Billy, who came out and fell to questioning him of what he had been doing, _____.'

- Ans ☒ 1. but there wasn't a window to it big enough for a dog to get through.
☒ 2. and Joe was evidently made uncomfortable by what he supposed to be my loss of appetite.
☒ 3. and the fact that gossip had published the banns was one of the reasons I had come east.
☒ 4. and how he had been living; and finally, desired him to walk in.

Question ID : 630680385349
Option 1 ID : 6306801502246
Option 2 ID : 6306801502249
Option 3 ID : 6306801502247
Option 4 ID : 6306801502248
Status : Not Answered
Chosen Option : --

Q.21 The sentences given below are all part of a paragraph but do not necessarily fall in the order that they are in. The first and the last sentences of the paragraph are given. Choose the option that arranges these sentences to form a meaningful paragraph. Besides, in drawing the picture of my early days, I also record those
A. ignoble and almost forgotten sources; but, swelling as it proceeded,
B. Events which led, by insensible steps, to my after tale of misery, for
C. afterward ruled my destiny I find it arise, like a mountain river, from
D. when I would account to myself for the birth of that passion which it became the torrent which, in its course, has swept away all my hopes and joys.

- Ans ☒ 1. BDCA
☒ 2. ACBD
☒ 3. DBAC
☒ 4. CDAB

Question ID : 630680385358
Option 1 ID : 6306801502282
Option 2 ID : 6306801502283
Option 3 ID : 6306801502284
Option 4 ID : 6306801502285
Status : Answered
Chosen Option : 1

Comprehension:

Read the given passage carefully and select the most appropriate answer to the questions that follow.

After Mrs. Hall had left the room, he remained standing in front of the fire, glaring, so Mr. Henfrey puts it, at the clock-mending. Mr. Henfrey not only took off the hands of the clock, and the face, but extracted the works; and he tried to work in as slow and quiet and unassuming a manner as possible. He worked with the lamp close to him, and the green shade threw a brilliant light upon his hands, and upon the frame and wheels, and left the rest of the room shadowy. When he looked up, coloured patches swam in his eyes. Being constitutionally of a curious nature, he had removed the works-a quite unnecessary proceeding-with the idea of delaying his departure and perhaps falling into conversation with the stranger. But the stranger stood there, perfectly silent and still. So still, it got on Henfrey's nerves. He felt alone in the room and looked up, and there, grey and dim, was the bandaged head and huge blue lenses staring fixedly, with a mist of green spots drifting in front of them. It was so uncanny to Henfrey that for a minute they remained staring blankly at one another.

SubQuestion No : 22

Q.22 Select the options the most appropriate meaning of the bracketed word given in the sentence below.

'It was so (uncanny) to Henfrey that for a minute...'

- Ans
- ☒ 1. obvious
 - ☒ 2. usual
 - ☒ 3. astonishing
 - ☒ 4. painful

Question ID : 630680385433
 Option 1 ID : 6306801502554
 Option 2 ID : 6306801502557
 Option 3 ID : 6306801502555
 Option 4 ID : 6306801502556
 Status : Answered
 Chosen Option : 3

Comprehension:

Read the given passage carefully and select the most appropriate answer to the questions that follow.

After Mrs. Hall had left the room, he remained standing in front of the fire, glaring, so Mr. Henfrey puts it, at the clock-mending. Mr. Henfrey not only took off the hands of the clock, and the face, but extracted the works; and he tried to work in as slow and quiet and unassuming a manner as possible. He worked with the lamp close to him, and the green shade threw a brilliant light upon his hands, and upon the frame and wheels, and left the rest of the room shadowy. When he looked up, coloured patches swam in his eyes. Being constitutionally of a curious nature, he had removed the works-a quite unnecessary proceeding-with the idea of delaying his departure and perhaps falling into conversation with the stranger. But the stranger stood there, perfectly silent and still. So still, it got on Henfrey's nerves. He felt alone in the room and looked up, and there, grey and dim, was the bandaged head and huge blue lenses staring fixedly, with a mist of green spots drifting in front of them. It was so uncanny to Henfrey that for a minute they remained staring blankly at one another.

SubQuestion No : 23

Q.23 Identify the correct inference that can be drawn from the passage.

- Ans
- ☒ 1. The stranger was assisting Mr Henfrey with repairing the clock.
 - ☒ 2. Mr Henfrey was repairing the watch he had broken.
 - ☒ 3. Mr Henfrey had a dull and incurious nature.
 - ☒ 4. Mr Henfrey was a clock smith.

Question ID : 630680385432
 Option 1 ID : 6306801502553
 Option 2 ID : 6306801502551
 Option 3 ID : 6306801502550
 Option 4 ID : 6306801502552
 Status : Answered
 Chosen Option : 2

Comprehension:

Read the given passage carefully and select the most appropriate answer to the questions that follow.

After Mrs. Hall had left the room, he remained standing in front of the fire, glaring, so Mr. Henfrey puts it, at the clock-mending. Mr. Henfrey not only took off the hands of the clock, and the face, but extracted the works; and he tried to work in as slow and quiet and unassuming a manner as possible. He worked with the lamp close to him, and the green shade threw a brilliant light upon his hands, and upon the frame and wheels, and left the rest of the room shadowy. When he looked up, coloured patches swam in his eyes. Being constitutionally of a curious nature, he had removed the works-a quite unnecessary proceeding-with the idea of delaying his departure and perhaps falling into conversation with the stranger. But the stranger stood there, perfectly silent and still. So still, it got on Henfrey's nerves. He felt alone in the room and looked up, and there, grey and dim, was the bandaged head and huge blue lenses staring fixedly, with a mist of green spots drifting in front of them. It was so uncanny to Henfrey that for a minute they remained staring blankly at one another.

SubQuestion No : 24

Q.24 From the given options, identify the suitable title for the passage.

- Ans
- ☒ 1. Uncanny curiosity
 - ☒ 2. Coloured Patches
 - ☒ 3. The clock smith
 - ☒ 4. Glowing Light

Question ID : 630680385430
 Option 1 ID : 6306801502543
 Option 2 ID : 6306801502545
 Option 3 ID : 6306801502542
 Option 4 ID : 6306801502544
 Status : Answered
 Chosen Option : 1

Comprehension:

Read the given passage carefully and select the most appropriate answer to the questions that follow.

After Mrs. Hall had left the room, he remained standing in front of the fire, glaring, so Mr. Henfrey puts it, at the clock-mending. Mr. Henfrey not only took off the hands of the clock, and the face, but extracted the works; and he tried to work in as slow and quiet and unassuming a manner as possible. He worked with the lamp close to him, and the green shade threw a brilliant light upon his hands, and upon the frame and wheels, and left the rest of the room shadowy. When he looked up, coloured patches swam in his eyes. Being constitutionally of a curious nature, he had removed the works-a quite unnecessary proceeding-with the idea of delaying his departure and perhaps falling into conversation with the stranger. But the stranger stood there, perfectly silent and still. So still, it got on Henfrey's nerves. He felt alone in the room and looked up, and there, grey and dim, was the bandaged head and huge blue lenses staring fixedly, with a mist of green spots drifting in front of them. It was so uncanny to Henfrey that for a minute they remained staring blankly at one another.

SubQuestion No : 25

Q.25 Which of the following statements is not true with respect to the passage.

- Ans
- ☒ 1. Mr Henfrey wanted to have a conversation with the stranger.
 - ☒ 2. Mr Henfrey saw the clock and started working on it.
 - ☒ 3. Mr Henfrey was getting irritated because of the silence in the room.
 - ☒ 4. Mrs Hall was the stranger's mother.

Question ID : 630680385431
 Option 1 ID : 6306801502547
 Option 2 ID : 6306801502548
 Option 3 ID : 6306801502546
 Option 4 ID : 6306801502549
 Status : Answered
 Chosen Option : 4