

Test Date

Test Time

Subject

25/09/2023

11:30 AM - 12:30 PM

Assistant Section Officer (ASO)



DELHI DEVELOPMENT AUTHORITY
RECRUITMENT CELL
VIKAS SADAN, INA, NEW DELHI - 110023
(<https://www.dda.gov.in>)

Advertisement No. 02/2023/Recrtt. Cell/Pers./DDA

Section : General Intelligence and Reasoning



Test Prime

**ALL EXAMS,
ONE SUBSCRIPTION**



70,000+
Mock Tests



**Personalised
Report Card**



**Unlimited
Re-Attempt**



600+
Exam Covered



**Previous Year
Papers**



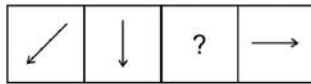
**500%
Refund**



ATTEMPT FREE MOCK NOW

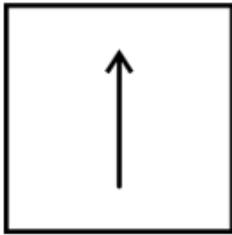
Q.1 The given figure consists of a series with a question mark. Find out the alternative for the question mark that completes the series from the given options.

Question figure:

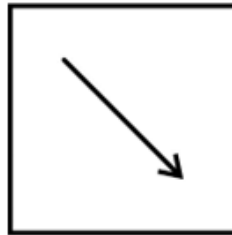


Ans

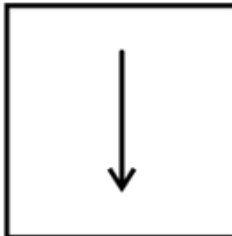
✗ 1.



✓ 2.



✗ 3.



✗ 4.



Question ID : 630680384641

Option 1 ID : 6306801499451

Option 2 ID : 6306801499450

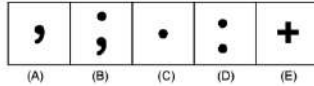
Option 3 ID : 6306801499453

Option 4 ID : 6306801499452

Status : Answered

Chosen Option : 2

Q.2 Out of the five figures marked (A), (B), (C), (D) and (E), four are similar in a certain manner and one figure is not like the other four. Identify the figure which is different from the rest.



- Ans**
- ☒ 1. B
 - ☒ 2. E
 - ☒ 3. D
 - ☒ 4. A

Question ID : 630680384643
 Option 1 ID : 6306801499459
 Option 2 ID : 6306801499458
 Option 3 ID : 6306801499460
 Option 4 ID : 6306801499461
 Status : Not Answered
 Chosen Option : --

Q.3 If the position of first and the third digits within each number are interchanged, which of the following will be the third digit of the fourth highest number?

8621 3457 2510 6564 9627 2583

- Ans**
- ☒ 1. 7
 - ☒ 2. 9
 - ☒ 3. 6
 - ☒ 4. 3

Question ID : 630680384553
 Option 1 ID : 6306801499099
 Option 2 ID : 6306801499098
 Option 3 ID : 6306801499101
 Option 4 ID : 6306801499100
 Status : Answered
 Chosen Option : 2

Q.4 Identify the odd letter cluster triad from the given options.

- Ans**
- ☒ 1. (BFT, FIV, JLX)
 - ☒ 2. (OWA, SYC, WAE)
 - ☒ 3. (JSL, NVN, RYP)
 - ☒ 4. (DSP, HVR, LYT)

Question ID : 630680384608
 Option 1 ID : 6306801499320
 Option 2 ID : 6306801499318
 Option 3 ID : 6306801499321
 Option 4 ID : 6306801499319
 Status : Answered
 Chosen Option : 2

Q.5 Select the odd number in the following number series.

3.03, 3.16, 3.22, 3.31, 3.43, 3.58

- Ans
- ☒ 1. 3.58
 - ☒ 2. 3.31
 - ☒ 3. 3.22
 - ☒ 4. 3.03

Question ID : 630680384702

Option 1 ID : 6306801499697

Option 2 ID : 6306801499696

Option 3 ID : 6306801499695

Option 4 ID : 6306801499694

Status : Answered

Chosen Option : 4

Q.6 If '+' stands for 'division', '%' stands for 'addition', '*' stands for 'multiplication' and '-' stands for 'subtraction', then solve the following expression:

$15 - 2 \div 6 \times 4 + 2$

- Ans
- ☒ 1. 24
 - ☒ 2. 22
 - ☒ 3. 26
 - ☒ 4. 28

Question ID : 630680384565

Option 1 ID : 6306801499147

Option 2 ID : 6306801499149

Option 3 ID : 6306801499148

Option 4 ID : 6306801499146

Status : Answered

Chosen Option : 3

Q.7 Carlos said, "This girl is the wife of the son's son of my mother." Who is Carlos to the girl ?

- Ans
- ☒ 1. Father
 - ☒ 2. Paternal grandfather
 - ☒ 3. Father-in-law
 - ☒ 4. Husband

Question ID : 630680386172

Option 1 ID : 6306801505398

Option 2 ID : 6306801505399

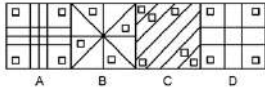
Option 3 ID : 6306801505400

Option 4 ID : 6306801505401

Status : Answered

Chosen Option : 3

Q.8 Out of the four figures marked (A), (B), (C), and (D), three are similar in a certain manner and one figure is not like the other three. Identify the figure which is different from the rest.



- Ans
- ☒ 1. A
 - ☒ 2. B
 - ☒ 3. D
 - ☒ 4. C

Question ID : 630680386225

Option 1 ID : 6306801505610

Option 2 ID : 6306801505611

Option 3 ID : 6306801505613

Option 4 ID : 6306801505612

Status : Answered

Chosen Option : 4

Q.9 Find the missing element in the given set to make them equal.

A = {Letters of the word DELICATE}

B = {DL, CT, ?, AE}

- Ans
- ☒ 1. TC
 - ☒ 2. EI
 - ☒ 3. EL
 - ☒ 4. IA

Question ID : 630680384597

Option 1 ID : 6306801499275

Option 2 ID : 6306801499276

Option 3 ID : 6306801499277

Option 4 ID : 6306801499274

Status : Answered

Chosen Option : 2

Q.10 Which of the following letter will replace the question mark (?) in the given series?

L, I, F, C, Z, ?

- Ans
- ☒ 1. A
 - ☒ 2. D
 - ☒ 3. C
 - ☒ 4. W

Question ID : 630680384725

Option 1 ID : 6306801499787

Option 2 ID : 6306801499789

Option 3 ID : 6306801499788

Option 4 ID : 6306801499786

Status : Answered

Chosen Option : 4

Q.11 Consider the following table where each letter is denoted by a symbol or a digit as shown.
Read the given conditions carefully and identify combinations that correctly represents 'KOUSAWSXW' based on the following coding system and the conditions that follow.

Conditions:

(i) If the first letter is a vowel and the last letter is a consonant, both are to be coded as the code of vowel

(ii) If both first and last letters are consonants, both are to be coded as 'S'

(iii) If first letter is a consonant and last letter is a vowel, the codes for first and last letters are to be interchanged

Digit / Symbol	0	1	2	+	\$	3	1	7	4	8	?	6	^
Letter	O	J	D	F	S	K	I	L	U	E	W	X	A

- Ans**
- ☒ 1. S04^S?S6S
 - ☒ 2. S04S^SS6S
 - ☒ 3. S048^SS6S
 - ☒ 4. S04S^?S6S

Question ID : 630680386176

Option 1 ID : 6306801505417

Option 2 ID : 6306801505415

Option 3 ID : 6306801505414

Option 4 ID : 6306801505416

Status : Answered

Chosen Option : 4

Q.12 In the following question two statements numbered I and II are given. There may be cause-and-effect relationship between the two statements. These two statements may be the effect of the same cause or independent causes. These statements may be independent cause without having any relationship. Read both the statements carefully and choose the most appropriate option.

Statements:

I. The city administration has announced a special tax relief package for the new manufacturing industries to be set up in the area.

II. Last year the city administration hiked the taxes for all industrial activities in the area.

- Ans**
- ☒ 1. if both the statements (I) and (II) are independent causes
 - ☒ 2. if both the statements (I) and (II) are effects of independent causes
 - ☒ 3. if statement (II) is the cause and statement (I) is its effect
 - ☒ 4. if statement (I) is the cause and statement (II) is its effect

Question ID : 630680386182

Option 1 ID : 6306801505440

Option 2 ID : 6306801505441

Option 3 ID : 6306801505439

Option 4 ID : 6306801505438

Status : Answered

Chosen Option : 2

Q.13 Replace the question mark (?) in the following series with suitable option:
YMBR, XNCP, WODN, ?

- Ans**
- ☒ 1. MLOL
 - ☒ 2. VPDM
 - ☒ 3. WPDN
 - ☒ 4. VPEL

Question ID : 630680384620

Option 1 ID : 6306801499368

Option 2 ID : 6306801499366

Option 3 ID : 6306801499369

Option 4 ID : 6306801499367

Status : Answered

Chosen Option : 4

- Q.14 If 'M × N' means 'M is the father of N'.
If 'M + N' means 'M is the mother of N'.
If 'M ÷ N' means 'M is the sister of N'.
If 'M – N' means 'M is the brother of N'.

How is T related to S in the expression 'T + U × C - S' ?

- Ans ☒ 1. Mother
☒ 2. Sister
☒ 3. Grandmother
☒ 4. Daughter

Question ID : 630680384468
Option 1 ID : 6306801498758
Option 2 ID : 6306801498759
Option 3 ID : 6306801498761
Option 4 ID : 6306801498760
Status : Answered
Chosen Option : 3

- Q.15 Arman, Bhavya, Chahel, Dheeraj, Era and Farah are seated in a circle facing the centre. Dheeraj is between Farah and Bhavya.
Arman is second to the left of Dheeraj and second to the right of Era. Who is sitting opposite to Dheeraj?

- Ans ☒ 1. Arman
☒ 2. Era
☒ 3. Bhavya
☒ 4. Chahel

Question ID : 630680384618
Option 1 ID : 6306801499358
Option 2 ID : 6306801499359
Option 3 ID : 6306801499361
Option 4 ID : 6306801499360
Status : Answered
Chosen Option : 4

- Q.16 If the unit's digits of each number are increased by 2 and the hundred's digit is decreased by 2, then which of the following will be the least number thus formed?
432 573 715 346 604

- Ans ☒ 1. 148
☒ 2. 268
☒ 3. 234
☒ 4. 124

Question ID : 630680384656
Option 1 ID : 6306801499510
Option 2 ID : 6306801499513
Option 3 ID : 6306801499511
Option 4 ID : 6306801499512
Status : Answered
Chosen Option : 1

Q.17 Which of the following numbers will replace the question mark (?) in the given series?

29, 63, 36, 68, 43, ?

- Ans
- ☒ 1. 50
 - ☒ 2. 48
 - ☒ 3. 69
 - ☒ 4. 73

Question ID : 630680384659

Option 1 ID : 6306801499524

Option 2 ID : 6306801499523

Option 3 ID : 6306801499525

Option 4 ID : 6306801499522

Status : Answered

Chosen Option : 4

Q.18 Which of the following option follows the same relation within each alphanumeric cluster as shown below?

[L3][O6][T2][Y7]

- Ans
- ☒ 1. [U3][F6][Q7][T8]
 - ☒ 2. [W5][K2][P5][H9]
 - ☒ 3. [O6][P7][E5][N5]
 - ☒ 4. [B3][K8][S4][G7]

Question ID : 630680384592

Option 1 ID : 6306801499254

Option 2 ID : 6306801499255

Option 3 ID : 6306801499257

Option 4 ID : 6306801499256

Status : Answered

Chosen Option : 3

Q.19 In the following question three statements are given, followed by two conclusions numbered I and II. Assume three given statements to be true even if they seem to be at variance with commonly known facts and then decide which of the given conclusion logically follows from the two statements disregarding commonly known facts.

Statement:

Some stars are planets.
Some planets are moons.
Some moons are suns.

Conclusions:

I. Some suns are stars.
II. Some suns are planets.

- Ans
- ☒ 1. If conclusion II follows
 - ☒ 2. If neither conclusion I nor II follows
 - ☒ 3. If conclusion I follow
 - ☒ 4. If both conclusion I and II follows

Question ID : 630680384829

Option 1 ID : 6306801500203

Option 2 ID : 6306801500205

Option 3 ID : 6306801500202

Option 4 ID : 6306801500204

Status : Answered

Chosen Option : 2

Q.20 Consider the following table where each letter is denoted by a symbol or a digit as shown.
Read the given conditions carefully and identify combinations that correctly represents 'KIRLAGU' based on the following coding system and the conditions that follow.

Conditions:

- (i) If the first letter is a vowel and the last letter is a consonant, both are to be coded as the code of vowel
(ii) If both first and last letters are consonants, both are to be coded as 'I'
(iii) If first letter is a consonant and last letter is a vowel, the codes for first and last letters are to be interchanged

Digit / Symbol	1	5	*	6	9	2	!	3	7	%	4	8	?
Letter	R	G	W	D	K	B	I	P	U	E	V	A	L

Ans ☒ 1. 7!1?859

☒ 2. 9!1?857

☒ 3. 7!1?859

☒ 4. !!1?85!

Question ID : 630680386178

Option 1 ID : 6306801505422

Option 2 ID : 6306801505423

Option 3 ID : 6306801505425

Option 4 ID : 6306801505424

Status : Answered

Chosen Option : 1

Q.21 How many symbols are there in the given series that are immediately preceded by a number and immediately followed by a symbol?
5 * 7 ? 1 > 6 & 5 ^ 4 ! 1 8 @ 3 6 # ! 9 2 * 5 # 4 ? 2 / 9 % 3 + 4 @ * 8 & 1 6 - 7 + 8

Ans ☒ 1. 4

☒ 2. 1

☒ 3. 2

☒ 4. 3

Question ID : 630680384754

Option 1 ID : 6306801499905

Option 2 ID : 6306801499902

Option 3 ID : 6306801499903

Option 4 ID : 6306801499904

Status : Answered

Chosen Option : 3

Q.22 In the following question three statements are given, followed by two conclusions numbered I and II. Assume three given statements to be true even if they seem to be at variance with commonly known facts and then decide which of the given conclusion logically follows from the two statements disregarding commonly known facts.

Statements:

All rings are pots.

No pot is paint.

Some paints are bangles.

Conclusions:

I. Some bangles are rings.

II. Some bangles are pots

Ans ☒ 1. Neither conclusion I nor II follows

☒ 2. Both conclusion I and II follow

☒ 3. Only conclusion I follows

☒ 4. Only conclusion II follows

Question ID : 630680384634

Option 1 ID : 6306801499425

Option 2 ID : 6306801499424

Option 3 ID : 6306801499422

Option 4 ID : 6306801499423

Status : Answered

Chosen Option : 1

Q.23 Which of the following numbers will replace the question mark (?) in the given series?

350, 360, ?, 361, 348, 362

- Ans**
- ☒ 1. 363
 - ☒ 2. 349
 - ☒ 3. 369
 - ☒ 4. 353

Question ID : **630680384698**
 Option 1 ID : **6306801499679**
 Option 2 ID : **6306801499678**
 Option 3 ID : **6306801499681**
 Option 4 ID : **6306801499680**
 Status : **Answered**
 Chosen Option : **2**

Q.24 In the following question, four pairs of letter-cluster have been given out of which three are alike in some manner, while one is different. Select the odd pair from the given options.

- Ans**
- ☒ 1. LDS - OAV
 - ☒ 2. HOP - KLR
 - ☒ 3. HMU - KJX
 - ☒ 4. MJR - PGU

Question ID : **630680384604**
 Option 1 ID : **6306801499304**
 Option 2 ID : **6306801499303**
 Option 3 ID : **6306801499302**
 Option 4 ID : **6306801499305**
 Status : **Answered**
 Chosen Option : **2**

Q.25 There are five boxes labelled as P, Q, R, S, and T in a vertical arrangement. P is placed below Q but above T. R is at the top of the arrangement. S is below Q but above P. Which box is placed below R but above S?

- Ans**
- ☒ 1. Q
 - ☒ 2. T
 - ☒ 3. P
 - ☒ 4. Data inadequate

Question ID : **630680384614**
 Option 1 ID : **6306801499342**
 Option 2 ID : **6306801499343**
 Option 3 ID : **6306801499344**
 Option 4 ID : **6306801499345**
 Status : **Answered**
 Chosen Option : **1**

Q.1 The "National Rural Employment Guarantee Act" (NREGA) guarantees a minimum number of days of wage employment to rural households. How many days of wage employment is guaranteed under this act?

- Ans**
- ☒ 1. 1000
 - ☒ 2. 180
 - ☒ 3. 100
 - ☒ 4. 365

Question ID : 630680384179
 Option 1 ID : 6306801497607
 Option 2 ID : 6306801497606
 Option 3 ID : 6306801497608
 Option 4 ID : 6306801497609
 Status : Answered
 Chosen Option : 3

Q.2 In which of the following states in India is Gurupurab celebrated?

- Ans**
- ☒ 1. Arunachal Pradesh
 - ☒ 2. Gujrat
 - ☒ 3. Punjab
 - ☒ 4. Assam

Question ID : 630680384278
 Option 1 ID : 6306801498001
 Option 2 ID : 6306801497998
 Option 3 ID : 6306801497999
 Option 4 ID : 6306801498000
 Status : Answered
 Chosen Option : 3

Q.3 "The Namesake" is a novel that delves into themes of identity, culture, and belonging. Who is the author of this book?

- Ans**
- ☒ 1. Jhumpa Lahiri
 - ☒ 2. Salman Rushdie
 - ☒ 3. Amitav Ghosh
 - ☒ 4. Arundhati Roy

Question ID : 630680384164
 Option 1 ID : 6306801497548
 Option 2 ID : 6306801497546
 Option 3 ID : 6306801497549
 Option 4 ID : 6306801497547
 Status : Answered
 Chosen Option : 1

Q.4 Who was the fifth President of India?

- Ans**
- ☒ 1. Fakhruddin Ali Ahmed
 - ☒ 2. B.R. Ambedkar
 - ☒ 3. Mahatma Gandhi
 - ☒ 4. Jawaharlal Nehru

Question ID : 630680384441
 Option 1 ID : 6306801498651
 Option 2 ID : 6306801498653
 Option 3 ID : 6306801498652
 Option 4 ID : 6306801498650
 Status : Answered

Q.5 Who was the founder of the Brahmo Samaj, a socio-religious reform movement in 19th-century India?

- Ans**
- ☒ 1. Ramakrishna Paramahansa
 - ☒ 2. Dayananda Saraswati
 - ☒ 3. Raja Ram Mohan Roy
 - ☒ 4. Swami Vivekananda

Question ID : 630680384442
 Option 1 ID : 6306801498657
 Option 2 ID : 6306801498656
 Option 3 ID : 6306801498655
 Option 4 ID : 6306801498654
 Status : Answered
 Chosen Option : 3

Q.6 In which year first synchronous Census took place in India?

- Ans**
- ☒ 1. 1986
 - ☒ 2. 1881
 - ☒ 3. 1980
 - ☒ 4. 1880

Question ID : 630680386467
 Option 1 ID : 6306801506581
 Option 2 ID : 6306801506580
 Option 3 ID : 6306801506579
 Option 4 ID : 6306801506578
 Status : Answered
 Chosen Option : 2

Q.7 Which prestigious literary award is given annually to the author of the best original novel written in English and published in the United Kingdom?

- Ans**
- ☒ 1. Nobel Prize in Literature
 - ☒ 2. Pulitzer Prize
 - ☒ 3. National Book Award
 - ☒ 4. Man Booker Prize

Question ID : 630680384392
 Option 1 ID : 6306801498456
 Option 2 ID : 6306801498454
 Option 3 ID : 6306801498457
 Option 4 ID : 6306801498455
 Status : Answered
 Chosen Option : 2

Q.8 Which is India's most polluted city in 2023?

- Ans**
- ☒ 1. Asopur
 - ☒ 2. Bhiwadi
 - ☒ 3. Patna
 - ☒ 4. New Delhi

Question ID : 630680386405
 Option 1 ID : 6306801506333
 Option 2 ID : 6306801506330
 Option 3 ID : 6306801506332
 Option 4 ID : 6306801506331
 Status : Answered
 Chosen Option : 4

Q.9 In 2023, India launched its first-ever indigenously developed operating system for smartphones and other devices. What is the name of this OS?

- Ans**
- ☒ 1. BharatOS
 - ☒ 2. BharOS
 - ☒ 3. DeshOS
 - ☒ 4. IndiOS

Question ID : 630680384137
 Option 1 ID : 6306801497440
 Option 2 ID : 6306801497438
 Option 3 ID : 6306801497441
 Option 4 ID : 6306801497439
 Status : Answered
 Chosen Option : 2

Q.10 As per the Central Bureau Investigation (CBI), in July 2023 corruption cases were registered against officers of the _____ in Madhya Pradesh's Jabalpur.

- Ans**
- ☒ 1. Indian Administrative Service
 - ☒ 2. Indian Revenue Service
 - ☒ 3. Military Engineering Services
 - ☒ 4. Indian Police Service

Question ID : 630680384143
 Option 1 ID : 6306801497465
 Option 2 ID : 6306801497462
 Option 3 ID : 6306801497464
 Option 4 ID : 6306801497463
 Status : Not Answered
 Chosen Option : --

Q.11 Which region of India experiences heavy rainfall during the monsoon season, typically lasting from June to September?

- Ans**
- ☒ 1. Himalayan region
 - ☒ 2. Western Ghats
 - ☒ 3. Thar Desert
 - ☒ 4. Deccan Plateau

Question ID : 630680386458
 Option 1 ID : 6306801506542
 Option 2 ID : 6306801506544
 Option 3 ID : 6306801506543
 Option 4 ID : 6306801506545
 Status : Answered
 Chosen Option : 1

Q.12 Which of the following microfinance institutions is also known as the Universal Bank?

- Ans**
- ☒ 1. NABARD
 - ☒ 2. Fusion Microfinance
 - ☒ 3. Arohan Financial Services Ltd.
 - ☒ 4. Bandhan Financial Services Private Ltd.

Question ID : 630680384289
 Option 1 ID : 6306801498045
 Option 2 ID : 6306801498043
 Option 3 ID : 6306801498042
 Option 4 ID : 6306801498044
 Status : Answered

Q.13 Who founded the Banaras Hindu University in the year 1916?

- Ans
- ☒ 1. Jagdish Chandra Bose
 - ☒ 2. Rabindranath Tagore
 - ☒ 3. Madan Mohan Malaviya
 - ☒ 4. Raja Ram Mohan Roy

Question ID : 630680384132
 Option 1 ID : 6306801497420
 Option 2 ID : 6306801497421
 Option 3 ID : 6306801497419
 Option 4 ID : 6306801497418
 Status : Answered
 Chosen Option : 3

Q.14 The "Green India Mission" launched by the Indian government aims to:

- Ans
- ☒ 1. Implement renewable energy projects across the country
 - ☒ 2. Reduce carbon emissions from industries and vehicles
 - ☒ 3. Promote organic farming and reduce the use of chemical fertilizers
 - ☒ 4. Enhance afforestation and forest conservation

Question ID : 630680384187
 Option 1 ID : 6306801497640
 Option 2 ID : 6306801497641
 Option 3 ID : 6306801497638
 Option 4 ID : 6306801497639
 Status : Answered
 Chosen Option : 1

Q.15 Who won the Major Dhyan Chand Khel Ratna award in 2022?

- Ans
- ☒ 1. Sharath Kamal
 - ☒ 2. Eldhose Paul
 - ☒ 3. Seema Punia
 - ☒ 4. Avinash Sable

Question ID : 630680384151
 Option 1 ID : 6306801497495
 Option 2 ID : 6306801497497
 Option 3 ID : 6306801497496
 Option 4 ID : 6306801497494
 Status : Not Answered
 Chosen Option : --

Q.16 Who among the following releases the Multidimensional Poverty Index (MPI)?

- Ans
- ☒ 1. WHO
 - ☒ 2. World Bank
 - ☒ 3. UNESCO
 - ☒ 4. UNDP

Question ID : 630680384298
 Option 1 ID : 6306801498080
 Option 2 ID : 6306801498078
 Option 3 ID : 6306801498081
 Option 4 ID : 6306801498079
 Status : Answered
 Chosen Option : 4

Q.17 Which river forms the famous Jog Falls, the second-highest plunge waterfall in India?

- Ans ☒ 1. Godavari River
☒ 2. Cauvery River
☒ 3. Sharavati River
☒ 4. Tapti River

Question ID : 630680384426
 Option 1 ID : 6306801498590
 Option 2 ID : 6306801498591
 Option 3 ID : 6306801498593
 Option 4 ID : 6306801498592
 Status : Answered
 Chosen Option : 3

Q.18 Which foreign invader, originally from Central Asia, invaded and established a prominent Islamic empire in northern India during the 12th century?

- Ans ☒ 1. Muhammad Ghori
☒ 2. Mahmud of Ghazni
☒ 3. Mohammed Bin Qasim
☒ 4. Alauddin Khilji

Question ID : 630680386475
 Option 1 ID : 6306801506611
 Option 2 ID : 6306801506610
 Option 3 ID : 6306801506613
 Option 4 ID : 6306801506612
 Status : Answered
 Chosen Option : 1

Q.19 Who is the author of the book LeBron Life Lessons from the King published in March 2023?

- Ans ☒ 1. Gilang Bogy
☒ 2. Jeff Benedict
☒ 3. Nelson Pena
☒ 4. Brian Boone

Question ID : 630680386413
 Option 1 ID : 6306801506365
 Option 2 ID : 6306801506364
 Option 3 ID : 6306801506362
 Option 4 ID : 6306801506363
 Status : Not Answered
 Chosen Option : --

Q.20 Which government initiative in India focuses on promoting the adoption of clean energy sources and reducing the dependence on fossil fuels for a sustainable future?

- Ans ☒ 1. Ujjwala Yojana
☒ 2. Pradhan Mantri Awas Yojana
☒ 3. National Solar Mission
☒ 4. Atal Mission for Rejuvenation and Urban Transformation

Question ID : 630680386453
 Option 1 ID : 6306801506522
 Option 2 ID : 6306801506523
 Option 3 ID : 6306801506525
 Option 4 ID : 6306801506524
 Status : Answered

Q.21 Which state has the highest population in India as per census 2011?

- Ans ☒ 1. West Bengal
☒ 2. Maharashtra
☒ 3. Uttar Pradesh
☒ 4. Tamil Nadu

Question ID : 630680386464
 Option 1 ID : 6306801506567
 Option 2 ID : 6306801506569
 Option 3 ID : 6306801506566
 Option 4 ID : 6306801506568
 Status : Answered
 Chosen Option : 3

Q.22 Which institution in India is responsible for conducting national-level entrance examinations for admission to engineering colleges?

- Ans ☒ 1. National Testing Agency
☒ 2. Indian Institutes of Technology
☒ 3. National Institute of Technology
☒ 4. All India Institute of Medical Sciences

Question ID : 630680384404
 Option 1 ID : 6306801498505
 Option 2 ID : 6306801498502
 Option 3 ID : 6306801498504
 Option 4 ID : 6306801498503
 Status : Answered
 Chosen Option : 1

Q.23 Which festival is known for its mesmerizing display of classical dance performances in the temple town of Thanjavur?

- Ans ☒ 1. Pushkar Fair
☒ 2. Navratri
☒ 3. Natyanjali Dance Festival
☒ 4. Thrissur Pooram

Question ID : 630680384397
 Option 1 ID : 6306801498477
 Option 2 ID : 6306801498474
 Option 3 ID : 6306801498476
 Option 4 ID : 6306801498475
 Status : Answered
 Chosen Option : 3

Q.24 Chandrayaan-3 was launched on which date?

- Ans ☒ 1. 16th Jul 2023
☒ 2. 14th Jul 2023
☒ 3. 4th Jul 2023
☒ 4. 14th Jul 2024

Question ID : 630680386395
 Option 1 ID : 6306801506291
 Option 2 ID : 6306801506290
 Option 3 ID : 6306801506293
 Option 4 ID : 6306801506292
 Status : Answered
 Chosen Option : 2

Q.25 Which of the following dynasties ruled over the Delhi Sultanate during the reign of Muhammad bin Tughluq?

- Ans
- ☒ 1. Sayyid dynasty
 - ☒ 2. Khilji dynasty
 - ☒ 3. Slave dynasty
 - ☒ 4. Tughlaq dynasty

Question ID : 630680386472
Option 1 ID : 6306801506601
Option 2 ID : 6306801506600
Option 3 ID : 6306801506598
Option 4 ID : 6306801506599
Status : Answered
Chosen Option : 4

Section : Quantitative Aptitude

Q.1 If the value of $(2x) + \left(\frac{2}{x}\right) = 5$, then find value of $(x^2) + \left(\frac{1}{x^2}\right)$.

- Ans
- ☒ 1. $\frac{11}{5}$
 - ☒ 2. $\frac{17}{5}$
 - ☒ 3. $\frac{17}{4}$
 - ☒ 4. $\frac{11}{4}$

Question ID : 630680384852
Option 1 ID : 6306801500297
Option 2 ID : 6306801500294
Option 3 ID : 6306801500296
Option 4 ID : 6306801500295
Status : Answered
Chosen Option : 3

Q.2 By selling an article for ₹ 5767, a man gains ₹ 625. At what price he must sell the article to get ₹ 6744 profit?

- Ans
- ☒ 1. ₹ 11,886
 - ☒ 2. ₹ 15,666
 - ☒ 3. ₹ 14,222
 - ☒ 4. ₹ 12,526

Question ID : 630680384921
Option 1 ID : 6306801500570
Option 2 ID : 6306801500573
Option 3 ID : 6306801500572
Option 4 ID : 6306801500571
Status : Answered
Chosen Option : 1

Q.3 Find the value of:

$$7.5 \div 1.5 \times 0.7 + 4.2$$

- Ans
- ☒ 1. 6.5
 - ☒ 2. 7.7
 - ☒ 3. 8.2
 - ☒ 4. 3.4

Question ID : 630680384893

Option 1 ID : 6306801500459

Option 2 ID : 6306801500460

Option 3 ID : 6306801500461

Option 4 ID : 6306801500458

Status : Answered

Chosen Option : 2

Q.4 If the value of $\operatorname{cosec}^2 M = \frac{4}{3}$, M being an acute angle, find the value of $\sin^2 M + \left(\frac{\cot^2 M}{\operatorname{cosec}^2 M} \right)$

- Ans
- ☒ 1. $\frac{1}{4}$
 - ☒ 2. 1
 - ☒ 3. 0
 - ☒ 4. $\frac{2}{3}$

Question ID : 630680385210

Option 1 ID : 6306801501726

Option 2 ID : 6306801501728

Option 3 ID : 6306801501729

Option 4 ID : 6306801501727

Status : Answered

Chosen Option : 2

Q.5 The average of 5 consecutive odd numbers is 21. Find the smallest number.

- Ans
- ☒ 1. 17
 - ☒ 2. 13
 - ☒ 3. 15
 - ☒ 4. 20

Question ID : 630680384863

Option 1 ID : 6306801500338

Option 2 ID : 6306801500341

Option 3 ID : 6306801500340

Option 4 ID : 6306801500339

Status : Answered

Chosen Option : 1

Q.6 The radius of the base of a right circular cone is 17 cm and its slant height is 35 cm. Find the curved surface area of the cone.

- Ans**
- ☒ 1. 1884 cm²
 - ☒ 2. 1620 cm²
 - ☒ 3. 1870 cm²
 - ☒ 4. 1771 cm²

Question ID : 630680384882

Option 1 ID : 6306801500416

Option 2 ID : 6306801500414

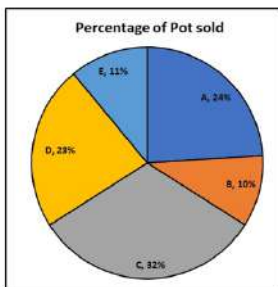
Option 3 ID : 6306801500417

Option 4 ID : 6306801500415

Status : Answered

Chosen Option : 3

Q.7 The pie chart shows the percentage of pots sold by 5 different shops. Find the average number of pots sold if the pots sold by shop E is 187.



- Ans**
- ☒ 1. 210
 - ☒ 2. 220
 - ☒ 3. 340
 - ☒ 4. 330

Question ID : 630680384869

Option 1 ID : 6306801500363

Option 2 ID : 6306801500362

Option 3 ID : 6306801500364

Option 4 ID : 6306801500365

Status : Answered

Chosen Option : 3

Q.8 A, B, and C invested in a bank scheme in the ratio 4: 7: 8 and the time of their investment are in the ratio 5: 4: 2. Find the ratio of their profit.

- Ans**
- ☒ 1. 4: 7: 8
 - ☒ 2. 5: 4: 2
 - ☒ 3. 5: 7: 4
 - ☒ 4. 20: 28: 24

Question ID : 630680384929

Option 1 ID : 6306801500602

Option 2 ID : 6306801500603

Option 3 ID : 6306801500605

Option 4 ID : 6306801500604

Status : Answered

Chosen Option : 3

Q.9 If $A : B : C = 2 : 7 : 11$ and $3A - 3B + 3C = 36$, then find the value of B.

- Ans
- ☒ 1. 21
 - ☒ 2. 7
 - ☒ 3. 35
 - ☒ 4. 14

Question ID : 630680384932

Option 1 ID : 6306801500615

Option 2 ID : 6306801500616

Option 3 ID : 6306801500617

Option 4 ID : 6306801500614

Status : Answered

Chosen Option : 4

Q.10 Find the area of a sector of arc length 66 cm which subtends an angle of 60° on the centre?

- Ans
- ☒ 1. 2136 cm²
 - ☒ 2. 2079 cm²
 - ☒ 3. 2129 cm²
 - ☒ 4. 2561 cm²

Question ID : 630680385008

Option 1 ID : 6306801500921

Option 2 ID : 6306801500919

Option 3 ID : 6306801500920

Option 4 ID : 6306801500918

Status : Answered

Chosen Option : 2

Q.11 Find the lateral surface area and total surface area of a cuboid of length 70 cm, breadth 33 cm and height 25 cm.

- Ans
- ☒ 1. 5150 cm² and 8750 cm²
 - ☒ 2. 5124 cm² and 9770 cm²
 - ☒ 3. 5150 cm² and 9770 cm²
 - ☒ 4. 5124 cm² and 8750 cm²

Question ID : 630680384891

Option 1 ID : 6306801500451

Option 2 ID : 6306801500452

Option 3 ID : 6306801500453

Option 4 ID : 6306801500450

Status : Answered

Chosen Option : 3

Q.12 If the sum of the squares of two numbers is 313 and the square of the sum of the numbers is 625, then find the product of the numbers.

- Ans**
- ☒ 1. 194
 - ☒ 2. 169
 - ☒ 3. 156
 - ☒ 4. 144

Question ID : 630680384854
 Option 1 ID : 6306801500305
 Option 2 ID : 6306801500303
 Option 3 ID : 6306801500304
 Option 4 ID : 6306801500302
 Status : Answered
 Chosen Option : 3

Q.13 The sum of two numbers is 960. If the smaller number is increased by 10% and the bigger number is decreased by 50%, then the numbers obtained are equal. Find the numbers.

- Ans**
- ☒ 1. 360 and 600
 - ☒ 2. 420 and 540
 - ☒ 3. 300 and 660
 - ☒ 4. 400 and 560

Question ID : 630680384904
 Option 1 ID : 6306801500503
 Option 2 ID : 6306801500504
 Option 3 ID : 6306801500502
 Option 4 ID : 6306801500505
 Status : Answered
 Chosen Option : 3

Q.14 In a division sum, the divisor is 7 times the quotient and 5 times the remainder. If the remainder is 56, what is the dividend ?

- Ans**
- ☒ 1. 12658
 - ☒ 2. 12578
 - ☒ 3. 10258
 - ☒ 4. 11256

Question ID : 630680384996
 Option 1 ID : 6306801500873
 Option 2 ID : 6306801500872
 Option 3 ID : 6306801500870
 Option 4 ID : 6306801500871
 Status : Answered
 Chosen Option : 4

Q.15 The perimeters of 2 squares are 104 cm and 88 cm. Find the perimeter of a third square whose area is the difference of the area of the two squares.

- Ans
- ☒ 1. $44\sqrt{3}$ cm
 - ☒ 2. 32 cm
 - ☒ 3. $22\sqrt{2}$ cm
 - ☒ 4. $32\sqrt{3}$ cm

Question ID : 630680384877

Option 1 ID : 6306801500395

Option 2 ID : 6306801500396

Option 3 ID : 6306801500397

Option 4 ID : 6306801500394

Status : Answered

Chosen Option : 4

Q.16 A, B, and C working separately can do a piece of work in 12, 10, and 15 days respectively, If they work for a day alternately, A beginning, in how many days, the work will be completed?

- Ans
- ☒ 1. 15 days
 - ☒ 2. 9 days
 - ☒ 3. 7 days
 - ☒ 4. 12 days

Question ID : 630680384940

Option 1 ID : 6306801500647

Option 2 ID : 6306801500649

Option 3 ID : 6306801500648

Option 4 ID : 6306801500646

Status : Answered

Chosen Option : 4

Q.17 The given table shows the number of goats, cows and buffaloes in five different farms. Find the average number of goats.

Farms	Number of Goats	Number of Cows	Number of Buffaloes
A	226	98	204
B	232	87	222
C	134	65	200
D	165	104	250
E	188	99	240

- Ans
- ☒ 1. 189
 - ☒ 2. 204
 - ☒ 3. 188
 - ☒ 4. 140

Question ID : 630680384872

Option 1 ID : 6306801500377

Option 2 ID : 6306801500376

Option 3 ID : 6306801500375

Option 4 ID : 6306801500374

Status : Answered

Chosen Option : 1

Q.18 In an election, there are two candidates. A got 44% of the votes and he lost by 2040 votes. Find the total number of votes.

- Ans**
- ☒ 1. 21,000
 - ☒ 2. 20,000
 - ☒ 3. 17,000
 - ☒ 4. 15,000

Question ID : 630680384902
 Option 1 ID : 6306801500496
 Option 2 ID : 6306801500497
 Option 3 ID : 6306801500495
 Option 4 ID : 6306801500494
 Status : Answered
 Chosen Option : 3

Q.19 A man sold an article at a gain of 15%. Had he sold it for ₹422 more, he would have gained 17%. Find the cost price of the article.

- Ans**
- ☒ 1. ₹ 21,400
 - ☒ 2. ₹ 21,100
 - ☒ 3. ₹ 24,100
 - ☒ 4. ₹ 24,500

Question ID : 630680384924
 Option 1 ID : 6306801500582
 Option 2 ID : 6306801500585
 Option 3 ID : 6306801500584
 Option 4 ID : 6306801500583
 Status : Answered
 Chosen Option : 2

Q.20 The number of sides of a regular polygon named 'A' is equal to $(s-1)$ and the number of sides of a regular polygon named 'B' is equal to $(s-2)$. The difference in their exterior angle is 6° . Find the value of s .

- Ans**
- ☒ 1. 11
 - ☒ 2. 17
 - ☒ 3. 15
 - ☒ 4. 13

Question ID : 630680385016
 Option 1 ID : 6306801500950
 Option 2 ID : 6306801500953
 Option 3 ID : 6306801500952
 Option 4 ID : 6306801500951
 Status : Answered
 Chosen Option : 4

Q.21 The average of 19 numbers is 32.50. If five numbers of average X are added to them, the average of all the numbers increases by 2. Find the value of X.

- Ans**
- ☒ 1. 44.2
 - ☒ 2. 45.3
 - ☒ 3. 42.1
 - ☒ 4. 40.5

Question ID : 630680384864
Option 1 ID : 6306801500342
Option 2 ID : 6306801500344
Option 3 ID : 6306801500343
Option 4 ID : 6306801500345
Status : Answered
Chosen Option : 3

Q.22 If a pipe fills a tank in 17 hours, then what part of the tank will the pipe fill in 300 minutes?

- Ans**
- ☒ 1. $\frac{3}{17}$
 - ☒ 2. $\frac{5}{17}$
 - ☒ 3. $\frac{2}{15}$
 - ☒ 4. $\frac{6}{17}$

Question ID : 630680384937
Option 1 ID : 6306801500637
Option 2 ID : 6306801500634
Option 3 ID : 6306801500635
Option 4 ID : 6306801500636
Status : Answered
Chosen Option : 2

Q.23 If the value of $(a) + (\frac{1}{a}) = 7$, then find the value of $(a^3) + (\frac{1}{a^3})$.

- Ans**
- ☒ 1. 320
 - ☒ 2. 322
 - ☒ 3. 325
 - ☒ 4. 321

Question ID : 630680384858
Option 1 ID : 6306801500319
Option 2 ID : 6306801500321
Option 3 ID : 6306801500320
Option 4 ID : 6306801500318
Status : Answered
Chosen Option : 2

Q.24 If two lines which are parallel are intersected by a transversal then the pair of alternate interior angles will be:

- Ans
- ☒ 1. Not equal
 - ☒ 2. Supplementary
 - ☒ 3. Complementary
 - ☒ 4. Equal

Question ID : 630680384913

Option 1 ID : 6306801500541

Option 2 ID : 6306801500540

Option 3 ID : 6306801500539

Option 4 ID : 6306801500538

Status : Answered

Chosen Option : 4

Q.25 How many copper rods, each of length 14 m and diameter 10 cm can be made out of 1.65 cubic metre of copper. (Take $\pi = \frac{22}{7}$)

- Ans
- ☒ 1. 15
 - ☒ 2. 9
 - ☒ 3. 5
 - ☒ 4. 23

Question ID : 630680384986

Option 1 ID : 6306801500832

Option 2 ID : 6306801500831

Option 3 ID : 6306801500830

Option 4 ID : 6306801500833

Status : Answered

Chosen Option : 1

Section : English Comprehension

Q.1 Select the word from the options which is exactly opposite in meaning to the bracketed word given in the sentence below.
April is often windy and (muddy) in Maine, but May and June are lambs.

- Ans
- ☒ 1. confuse
 - ☒ 2. vivacious
 - ☒ 3. perplexity
 - ☒ 4. concur

Question ID : 630680385409

Option 1 ID : 6306801502466

Option 2 ID : 6306801502469

Option 3 ID : 6306801502467

Option 4 ID : 6306801502468

Status : Answered

Chosen Option : 2

Q.2 Select the word segment that substitutes the bracketed segment correctly and completes the sentence meaningfully.
He handled the situation [careless], causing further complications.

- Ans** ☒ 1. carelessly
☒ 2. no correction required
☒ 3. carelessness
☒ 4. careless

Question ID : 630680385286
Option 1 ID : 6306801502011
Option 2 ID : 6306801502013
Option 3 ID : 6306801502012
Option 4 ID : 6306801502010
Status : Answered
Chosen Option : 1

Q.3 Which of the following words is an antonym of "swift"?

- Ans** ☒ 1. Slow
☒ 2. Rapid
☒ 3. Silo
☒ 4. Quick

Question ID : 630680385305
Option 1 ID : 6306801502087
Option 2 ID : 6306801502088
Option 3 ID : 6306801502089
Option 4 ID : 6306801502086
Status : Answered
Chosen Option : 1

Q.4 Identify the one-word substitution in the following sentence:
What is the term for "a person who speaks more than one language fluently"?

- Ans** ☒ 1. Multilingual
☒ 2. Polyglot
☒ 3. Linguist
☒ 4. Bilingual

Question ID : 630680385291
Option 1 ID : 6306801502031
Option 2 ID : 6306801502032
Option 3 ID : 6306801502033
Option 4 ID : 6306801502030
Status : Answered
Chosen Option : 2

Q.5 Identify the one-word substitution in the following sentence:
What is the term for "a person who pretends to be someone they are not in order to deceive others"?

- Ans**
- ☒ 1. Deceiver
 - ☒ 2. Fraud
 - ☒ 3. Imposter
 - ☒ 4. Swindler

Question ID : 630680385285

Option 1 ID : 6306801502008

Option 2 ID : 6306801502007

Option 3 ID : 6306801502006

Option 4 ID : 6306801502009

Status : Answered

Chosen Option : 3

Q.6 Based on the situation given below choose the appropriate idiom from the given options:

John had been procrastinating on his assignment for weeks, and the deadline was fast approaching. He finally realized that he needed to start working on it seriously to complete it on time. However, he found it challenging to concentrate, and every time he sat down to work, he would get distracted by his phone, social media, or random thoughts.

In this situation, which idiom best describes John's struggle to stay focused and avoid distractions?

- Ans**
- ☒ 1. Monkey on his back
 - ☒ 2. A piece of cake
 - ☒ 3. Spill the beans
 - ☒ 4. Burn bridges

Question ID : 630680385730

Option 1 ID : 6306801503653

Option 2 ID : 6306801503652

Option 3 ID : 6306801503651

Option 4 ID : 6306801503650

Status : Answered

Chosen Option : 1

Comprehension:

Based on the following cloze passage answer the question given below:

Effective communication is essential for building strong relationships and achieving success in various aspects of life. It involves the exchange of ideas, thoughts, and information between individuals or groups. Good communication skills can (1) _____ understanding, resolve conflicts, and foster collaboration.

In order to communicate effectively, it is important to listen actively and (2) _____ to others' perspectives. This helps in gaining insights and promoting open dialogue. Additionally, using appropriate body language, tone of voice, and (3) _____ can enhance the clarity and impact of our messages.

SubQuestion No : 7

Q.7 Fill in the blank (2) with the appropriate word from the options below:

Ans ✓ 1. empathize

✗ 2. respond

✗ 3. adapt

✗ 4. convey

Question ID : 630680385265

Option 1 ID : 6306801501940

Option 2 ID : 6306801501939

Option 3 ID : 6306801501938

Option 4 ID : 6306801501941

Status : Answered

Chosen Option : 2

Comprehension:

Based on the following cloze passage answer the question given below:

Effective communication is essential for building strong relationships and achieving success in various aspects of life. It involves the exchange of ideas, thoughts, and information between individuals or groups. Good communication skills can (1) _____ understanding, resolve conflicts, and foster collaboration.

In order to communicate effectively, it is important to listen actively and (2) _____ to others' perspectives. This helps in gaining insights and promoting open dialogue. Additionally, using appropriate body language, tone of voice, and (3) _____ can enhance the clarity and impact of our messages.

SubQuestion No : 8

Q.8 Fill in the blank (3) with the appropriate word from the options below:

Ans ✗ 1. gestures

✗ 2. expressions

✗ 3. postures

✓ 4. words

Question ID : 630680385266

Option 1 ID : 6306801501942

Option 2 ID : 6306801501943

Option 3 ID : 6306801501945

Option 4 ID : 6306801501944

Status : Answered

Chosen Option : 1

Comprehension:

Based on the following cloze passage answer the question given below:

Effective communication is essential for building strong relationships and achieving success in various aspects of life. It involves the exchange of ideas, thoughts, and information between individuals or groups. Good communication skills can (1) _____ understanding, resolve conflicts, and foster collaboration.

In order to communicate effectively, it is important to listen actively and (2) _____ to others' perspectives. This helps in gaining insights and promoting open dialogue. Additionally, using appropriate body language, tone of voice, and (3) _____ can enhance the clarity and impact of our messages.

SubQuestion No : 9

Q.9 Fill in the blank (1) with the appropriate word from the options below:

- Ans ☒ 1. expedite
☒ 2. facilitate
☒ 3. hinder
☒ 4. impede

Question ID : 630680385264

Option 1 ID : 6306801501937

Option 2 ID : 6306801501934

Option 3 ID : 6306801501935

Option 4 ID : 6306801501936

Status : Answered

Chosen Option : 1

Comprehension:

Read the passage carefully and choose the best answer to each question out of the four alternatives

Technology has transformed the way we live and interact with the world. From the invention of the wheel to the advancements in artificial intelligence, technology continues to shape and influence our society. While it has brought numerous benefits and conveniences, it also presents challenges and implications that need to be carefully considered.

SubQuestion No : 10

Q.10 Which inference can be drawn from the passage?

- Ans ☒ 1. Technological advancements have no impact on our daily lives
☒ 2. Society should be cautious about the implications of technology
☒ 3. The development of technology is stagnant and unimportant
☒ 4. Technology has only brought positive changes to society

Question ID : 630680385324

Option 1 ID : 6306801502155

Option 2 ID : 6306801502156

Option 3 ID : 6306801502157

Option 4 ID : 6306801502154

Status : Answered

Chosen Option : 2

Comprehension:

Read the passage carefully and choose the best answer to each question out of the four alternatives

Technology has transformed the way we live and interact with the world. From the invention of the wheel to the advancements in artificial intelligence, technology continues to shape and influence our society. While it has brought numerous benefits and conveniences, it also presents challenges and implications that need to be carefully considered.

SubQuestion No : 11

Q.11 How does the passage connect to the world?

- Ans
- ☒

1. By analysing the impact of technology on job markets
- ☒

2. By exploring the historical development of technology
- ☐

3. By discussing the global adoption of digital devices
- ☐

4. By examining the ethical dilemmas of artificial intelligence

Question ID : 630680385322

Option 1 ID : 6306801502148

Option 2 ID : 6306801502149

Option 3 ID : 6306801502146

Option 4 ID : 6306801502147

Status : Answered

Chosen Option : 3

Comprehension:

Read the passage carefully and choose the best answer to each question out of the four alternatives

Technology has transformed the way we live and interact with the world. From the invention of the wheel to the advancements in artificial intelligence, technology continues to shape and influence our society. While it has brought numerous benefits and conveniences, it also presents challenges and implications that need to be carefully considered.

SubQuestion No : 12

Q.12 Which title best represents the passage?

- Ans
- ☐

1. The Benefits of Technological Advancements
- ☐

2. The devolution of technology
- ☐

3. The Negative Effects of Technological Innovation
- ☒

4. The Impact of Technology on Society

Question ID : 630680385321

Option 1 ID : 6306801502143

Option 2 ID : 6306801502142

Option 3 ID : 6306801502144

Option 4 ID : 6306801502145

Status : Answered

Chosen Option : 4

Comprehension:

Read the passage carefully and choose the best answer to each question out of the four alternatives

Technology has transformed the way we live and interact with the world. From the invention of the wheel to the advancements in artificial intelligence, technology continues to shape and influence our society. While it has brought numerous benefits and conveniences, it also presents challenges and implications that need to be carefully considered.

SubQuestion No : 13

Q.13 What is the tone of the passage?

- Ans ☒ 1. Optimistic and enthusiastic
☒ 2. Critical and cautionary
☒ 3. Pessimistic and dismissive
☒ 4. Partial and informative

Question ID : 630680385323

Option 1 ID : 6306801502151

Option 2 ID : 6306801502152

Option 3 ID : 6306801502153

Option 4 ID : 6306801502150

Status : Answered

Chosen Option : 2

Q.14 Use negative question tag for statement given below:
 "They can swim well, _____?"

- Ans ☒ 1. do they?
☒ 2. can they?
☒ 3. can't it?
☒ 4. can't they?

Question ID : 630680385459

Option 1 ID : 6306801502652

Option 2 ID : 6306801502651

Option 3 ID : 6306801502653

Option 4 ID : 6306801502650

Status : Answered

Chosen Option : 4

Q.15 Arrange the following sentences in the correct order to form a coherent paragraph.

- A)The sun dipped below the horizon, painting the sky in hues of orange and pink.
 B)They set up a cozy picnic spot, complete with a blanket and a basket of delicious treats.
 C)The couple enjoyed the serenity of the beach, the sound of crashing waves providing a soothing backdrop.
 D)Hand in hand, they strolled along the shore, leaving footprints in the soft sand.
 E)It was a perfect evening, filled with love and the beauty of nature.

- Ans ☒ 1. DABEC
☒ 2. ACD BE
☒ 3. ACEDB
☒ 4. ABDCE

Question ID : 630680385255

Option 1 ID : 6306801501908

Option 2 ID : 6306801501906

Option 3 ID : 6306801501909

Option 4 ID : 6306801501907

Status : Answered

Chosen Option : 2

Q.16 Which of the following is a synonym for the word "Ineffable"?

- Ans ☒ 1. Unutterable
☒ 2. Mundane
☒ 3. Perfunctory
☒ 4. Ephemeral

Question ID : 630680385744
 Option 1 ID : 6306801503707
 Option 2 ID : 6306801503708
 Option 3 ID : 6306801503709
 Option 4 ID : 6306801503706
 Status : Not Answered
 Chosen Option : --

Q.17 Select the word segment that substitutes the bracketed word segment correctly and completes the sentence meaningfully.
 The new employee was [nervously], trying to make a good impression on their first day.

- Ans ☒ 1. no correction required
☒ 2. diligently
☒ 3. boldly
☒ 4. anxiously

Question ID : 630680385280
 Option 1 ID : 6306801501989
 Option 2 ID : 6306801501988
 Option 3 ID : 6306801501987
 Option 4 ID : 6306801501986
 Status : Answered
 Chosen Option : 4

Q.18 Arrange the following sentences in the correct order to form a coherent paragraph.

- A) He spent hours meticulously planning every detail of his upcoming trip.
 B) The adventure awaited him with a promise of new experiences and unforgettable memories.
 C) As he boarded the plane, excitement and anticipation coursed through his veins.
 D) Exploring the vibrant markets, trying local cuisine, and immersing himself in the culture filled him with joy.
 E) He stepped foot in the foreign land, ready to embrace the journey that lay ahead.

- Ans ☒ 1. CEDBA
☒ 2. ADBCE
☒ 3. ACEDB
☒ 4. BDACE

Question ID : 630680385249
 Option 1 ID : 6306801501884
 Option 2 ID : 6306801501883
 Option 3 ID : 6306801501882
 Option 4 ID : 6306801501885
 Status : Answered
 Chosen Option : 1

Q.19 Identify the synonym for the bracketed word in the sentence:
The [serendipitous] encounter led to a fortuitous business opportunity.

- Ans ☒ 1. fortuitous
☒ 2. accidental
☒ 3. incidental
☒ 4. premeditated

Question ID : 630680385745
Option 1 ID : 6306801503712
Option 2 ID : 6306801503710
Option 3 ID : 6306801503713
Option 4 ID : 6306801503711
Status : Answered
Chosen Option : 2

Q.20 Select the most appropriate missing sentence to complete the following paragraph:
The chef prepared a gourmet feast for the guests, carefully crafting each dish with precision. The aromas wafted through the air, tempting everyone's taste buds. As the guests took their first bites, _____.

- Ans ☒ 1. the sound of fireworks erupted nearby, adding to the festive ambiance.
☒ 2. a waiter accidentally spilled a tray of drinks, causing a momentary distraction.
☒ 3. the guests couldn't help but compliment the chef's culinary skills.
☒ 4. the chef emerged from the kitchen, personally greeting each guest.

Question ID : 630680385250
Option 1 ID : 6306801501887
Option 2 ID : 6306801501886
Option 3 ID : 6306801501889
Option 4 ID : 6306801501888
Status : Answered
Chosen Option : 3

Q.21 Fill in the blank with the most appropriate phrasal verb:
Tom didn't have much time to pack for his trip, so he had to quickly _____ his clothes into the suitcase.

- Ans ☒ 1. sort out
☒ 2. cram in
☒ 3. put away
☒ 4. throw away

Question ID : 630680385685
Option 1 ID : 6306801503482
Option 2 ID : 6306801503485
Option 3 ID : 6306801503483
Option 4 ID : 6306801503484
Status : Answered
Chosen Option : 3

Q.22 Select the most appropriate missing sentence to complete the following paragraph:
The engineer meticulously designed the bridge, ensuring its structural integrity and safety. Construction was underway, and workers diligently carried out their tasks. Suddenly, a _____.

- Ans**
- ☒ 1. new safety regulation was issued, requiring additional inspections.
 - ☒ 2. news crew arrived to document the progress of the engineering project.
 - ☒ 3. group of local residents protested against the bridge construction.
 - ☒ 4. heavy rain shower passed, causing a temporary delay in construction.

Question ID : 630680385256

Option 1 ID : 6306801501913

Option 2 ID : 6306801501912

Option 3 ID : 6306801501911

Option 4 ID : 6306801501910

Status : Answered

Chosen Option : 4

Q.23 Fill in the blank with the appropriate adverb:
She spoke _____ during the interview, answering every question with confidence and clarity.

- Ans**
- ☒ 1. eloquently
 - ☒ 2. loudly
 - ☒ 3. silently
 - ☒ 4. gently

Question ID : 630680385448

Option 1 ID : 6306801502609

Option 2 ID : 6306801502607

Option 3 ID : 6306801502606

Option 4 ID : 6306801502608

Status : Answered

Chosen Option : 1

Q.24 Based on the situation given below choose the appropriate idiom from the given options:
In a small village, two neighbouring families, the Smiths and the Browns, had been friends for generations. However, a misunderstanding occurred between their children during a local festival, leading to a heated argument. The elders of both families decided to intervene and resolve the dispute.
Which proverb best reflects the approach taken by the elders to resolve the misunderstanding between the Smiths and the Browns?

- Ans**
- ☒ 1. A bird in the hand is worth two in the bush
 - ☒ 2. Don't count your chickens before they hatch
 - ☒ 3. Don't make a mountain out of a molehill
 - ☒ 4. Too many cooks spoil the broth

Question ID : 630680385733

Option 1 ID : 6306801503662

Option 2 ID : 6306801503663

Option 3 ID : 6306801503664

Option 4 ID : 6306801503665

Status : Answered

Chosen Option : 3

Q.25 Select the missing sentence that would logically fill in the blank:

Globalization refers to the increased interconnectedness and interdependence of countries worldwide. It involves the exchange of goods, services, ideas, and cultures across borders, facilitated by advances in transportation and communication. Globalization has both positive and negative impacts on economies, societies, and the environment. _____.

- Ans
- ☒ 1. Many people enjoy international cuisine due to globalization.
 - ☒ 2. The United Nations promotes global cooperation and peace.
 - ☒ 3. Some countries have imposed tariffs to protect their local industries as this is seen one of the major challenges with globalization.
 - ☒ 4. Multinational corporations have headquarters in different countries.

Question ID : 630680385701

Option 1 ID : 6306801503546

Option 2 ID : 6306801503547

Option 3 ID : 6306801503549

Option 4 ID : 6306801503548

Status : Answered

Chosen Option : 3

