

	  
	<p align="center">DELHI DEVELOPMENT AUTHORITY RECRUITMENT CELL VIKAS SADAN, INA, NEW DELHI - 110023 https://www.dda.gov.in</p>
	Advertisement No. 02/2023/Recrtt. Cell/Pers./DDA
Test Date	25/09/2023
Test Time	8:30 AM - 9:30 AM
Subject	Assistant Section Officer (ASO)

Section : General Intelligence and Reasoning

Q.1 Find the missing element in the given set to make them equal.

A = {Letters of the word MONUMENT}

B = {MN, MN, OU, ?}

- Ans
- ☒ 1. MN
 - ☒ 2. ET
 - ☒ 3. MT
 - ☒ 4. EN

Question ID : 630680384591
 Option 1 ID : 6306801499250
 Option 2 ID : 6306801499251
 Option 3 ID : 6306801499253
 Option 4 ID : 6306801499252
 Status : Answered
 Chosen Option : 2

Q.2 In the following question two statements numbered I and II are given. There may be cause-and-effect relationship between the two statements. These two statements may be the effect of the same cause or independent causes. These statements may be independent cause without having any relationship. Read both the statements carefully and choose the most appropriate option.

Statement

- I. The traffic police increased patrolling on highways.
 II. The number of road accidents has significantly reduced.

- Ans
- ☒ 1. If statement II is the effect of statement I
 - ☒ 2. If statement I is the effect of statement II
 - ☒ 3. If both the statements I and II are effects of the same cause
 - ☒ 4. If both the statements I and II are independent causes

Question ID : 630680384585
 Option 1 ID : 6306801499226
 Option 2 ID : 6306801499227
 Option 3 ID : 6306801499228
 Option 4 ID : 6306801499229
 Status : Answered
 Chosen Option : 1

Test Prime

**ALL EXAMS,
ONE SUBSCRIPTION**



70,000+
Mock Tests



**Personalised
Report Card**



**Unlimited
Re-Attempt**



600+
Exam Covered



**Previous Year
Papers**



**500%
Refund**



ATTEMPT FREE MOCK NOW

Q.3 Read the following information carefully and answer the given question.

$P + Q$ means P is the father of Q

$P - Q$ means P is the wife of Q

$P * Q$ means P is the brother of Q

$P \div Q$ means P is the daughter of Q

If $X * Y + Z$, which of the following is true ?

- Ans
- ☐ 1. X is the brother-in-law of Z
 - ☐ 2. X is the paternal grandfather of Z
 - ☒ 3. X is the father's brother of Z
 - ☐ 4. X is the father of Z

Question ID : 630680384573

Option 1 ID : 6306801499180

Option 2 ID : 6306801499181

Option 3 ID : 6306801499178

Option 4 ID : 6306801499179

Status : Answered

Chosen Option : 3

Q.4 Replace the blanks () in the following series with suitable option:

c _ bbb _ abb _ ca _ bb _ abbb

- Ans
- ☐ 1. acbbb
 - ☐ 2. cbbba
 - ☒ 3. acbbc
 - ☐ 4. cabbb

Question ID : 630680384626

Option 1 ID : 6306801499391

Option 2 ID : 6306801499393

Option 3 ID : 6306801499390

Option 4 ID : 6306801499392

Status : Answered

Chosen Option : 3

Q.5 If '+' stands for 'addition', '-' for 'subtraction', '÷' stands for 'division', '>' for 'multiplication', '<' stands for 'equal to', and '=' stands for 'less than', then solve the following expression:

$$9 + 9 \times 9 < 9 > 9$$

- Ans
- ☐ 1. 9
 - ☐ 2. 1
 - ☒ 3. -71
 - ☐ 4. -54

Question ID : 630680384567

Option 1 ID : 6306801499155

Option 2 ID : 6306801499154

Option 3 ID : 6306801499157

Option 4 ID : 6306801499156

Status : Answered

Chosen Option : 3

Q.6 In certain code language 'rik nom whi' means 'rising sun shines', 're zhi whi suk' means 'warm light shines beautifully', and 'sur zhi re sue' means 'bright light is warm' What is the code used for the word warm?

- Ans**
- ☒ 1. suk
 - ☐ 2. re
 - ☐ 3. whi
 - ☐ 4. sur

Question ID : 630680386179
 Option 1 ID : 6306801505429
 Option 2 ID : 6306801505428
 Option 3 ID : 6306801505427
 Option 4 ID : 6306801505426
 Status : Answered
 Chosen Option : 2

Q.7 Which of the following numbers will replace the question mark (?) in the given series?
 210, 220, 209, 221, 208, ?

- Ans**
- ☒ 1. 222
 - ☐ 2. 225
 - ☐ 3. 207
 - ☐ 4. 205

Question ID : 630680384501
 Option 1 ID : 6306801498891
 Option 2 ID : 6306801498890
 Option 3 ID : 6306801498892
 Option 4 ID : 6306801498893
 Status : Answered
 Chosen Option : 1

Q.8 In the following question, four pairs of letter-cluster have been given out of which three are alike in some manner, while one is different. Select the odd pair from the given options.

- Ans**
- ☒ 1. CTRE - XGJU
 - ☐ 2. HNKI - SMPO
 - ☐ 3. WMLG - DNOT
 - ☐ 4. FUPI - UFKR

Question ID : 630680384607
 Option 1 ID : 6306801499314
 Option 2 ID : 6306801499317
 Option 3 ID : 6306801499315
 Option 4 ID : 6306801499316
 Status : Answered
 Chosen Option : 1

Q.9 Which of the following numbers will replace the question mark (?) in the given series?

53, 62, 67, 76, 81, ?

- Ans**
- ☒ 1. 95
 - ☒ 2. 87
 - ☒ 3. 90
 - ☒ 4. 93

Question ID : 630680384460

Option 1 ID : 6306801498726

Option 2 ID : 6306801498728

Option 3 ID : 6306801498727

Option 4 ID : 6306801498729

Status : Answered

Chosen Option : 3

Q.10 A series is given with one term missing (?). Select the correct alternative from the given ones that will complete the series.

Jx, Kv, Lt, Mr, ?

- Ans**
- ☒ 1. No
 - ☒ 2. Nq
 - ☒ 3. Np
 - ☒ 4. Ns

Question ID : 630680386208

Option 1 ID : 6306801505545

Option 2 ID : 6306801505543

Option 3 ID : 6306801505544

Option 4 ID : 6306801505542

Status : Answered

Chosen Option : 3

Q.11 How many letters are there in the given series that are immediately preceded as well as followed by a symbol?

P O * I ! T * S S G ? F > E X 0 Z % C +

- Ans**
- ☒ 1. Three
 - ☒ 2. Six
 - ☒ 3. Seven
 - ☒ 4. Four

Question ID : 630680386159

Option 1 ID : 6306801505349

Option 2 ID : 6306801505347

Option 3 ID : 6306801505348

Option 4 ID : 6306801505346

Status : Answered

Chosen Option : 4

Q.12 If the position of second and the third digits within each number are interchanged, what will be the sum of the first and third digit of the third highest number?

2157 2243 3293 3263 3879 3054

- Ans**
- ☒ 1. 5
 - ☐ 2. 11
 - ☐ 3. 7
 - ☐ 4. 6

Question ID : 630680384558

Option 1 ID : 6306801499120

Option 2 ID : 6306801499119

Option 3 ID : 6306801499121

Option 4 ID : 6306801499118

Status : Answered

Chosen Option : 1

Q.13 Find the wrong number in the series:

4, 9, 25, 49, 121, 169, 225

- Ans**
- ☐ 1. 169
 - ☐ 2. 121
 - ☒ 3. 225
 - ☐ 4. 4

Question ID : 630680386191

Option 1 ID : 6306801505477

Option 2 ID : 6306801505476

Option 3 ID : 6306801505475

Option 4 ID : 6306801505474

Status : Answered

Chosen Option : 3

Q.14 In a certain code language, 'RELATING' is coded as 5134&!72 and 'INTEGRAL' is coded as !7&12543. Which of the following represents 'TRIANGLE' in that code language?

- Ans**
- ☐ 1. &5!74231
 - ☒ 2. &5!47231
 - ☐ 3. !5&47321
 - ☐ 4. &5!47321

Question ID : 630680386175

Option 1 ID : 6306801505412

Option 2 ID : 6306801505413

Option 3 ID : 6306801505411

Option 4 ID : 6306801505410

Status : Answered

Chosen Option : 2

Q.15 A group of eight members sit in a circle facing the center. Following information is given regarding their seating arrangement.
David is between Alice and Frank and is opposite to Grace.
Emily is to the right of Alice but on the left of Claire, whose right-hand neighbour is Grace.
Brian enjoys having Harry to his left and Frank to his right.
Who is sitting second to the left of David?

- Ans**
- ☒ 1. Harry
 - ☒ 2. Brian
 - ☒ 3. Emily
 - ☒ 4. Alice

Question ID : 630680384616
Option 1 ID : 6306801499351
Option 2 ID : 6306801499353
Option 3 ID : 6306801499350
Option 4 ID : 6306801499352
Status : Answered
Chosen Option : 2

Q.16 Six classes of subject- Biology, Physics, Maths, Chemistry, English, and Computer are to be delivered in a week. Maths lecture can't be delivered on Friday. Biology class is delivered immediately after Chemistry. There should be a gap of two days between the lecture of Physics and Computers. Sunday is a holiday. Computer class is delivered on the next day of holiday. English lecture is delivered on Wednesday and it is not immediately followed by computer. On which day chemistry class can be delivered?

- Ans**
- ☒ 1. Friday
 - ☒ 2. Tuesday
 - ☒ 3. Wednesday
 - ☒ 4. Monday

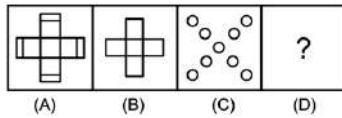
Question ID : 630680384612
Option 1 ID : 6306801499334
Option 2 ID : 6306801499337
Option 3 ID : 6306801499335
Option 4 ID : 6306801499336
Status : Answered
Chosen Option : 1

Q.17 FMV is related to 'CKU' in the same way as 'LIR' is related to

- Ans**
- ☒ 1. IFQ
 - ☒ 2. HFP
 - ☒ 3. IGQ
 - ☒ 4. HGP

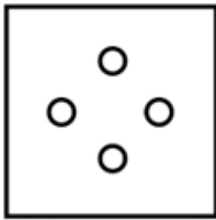
Question ID : 630680386184
Option 1 ID : 6306801505449
Option 2 ID : 6306801505448
Option 3 ID : 6306801505447
Option 4 ID : 6306801505446
Status : Answered
Chosen Option : 3

Q.18 Figure A and B are related in a particular way or manner. Establish the same relationship between C and D choosing from the given options.

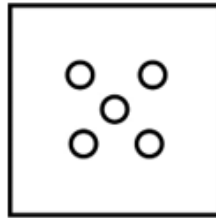


Ans

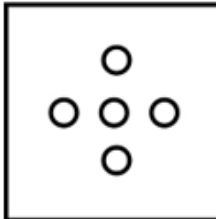
✗ 1.



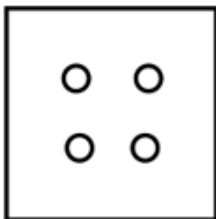
✓ 2.



✗ 3.



✗ 4.



Question ID : 630680384644

Option 1 ID : 6306801499464

Option 2 ID : 6306801499463

Option 3 ID : 6306801499465

Option 4 ID : 6306801499462

Status : Answered

Chosen Option : 2

Q.19 In the following question three statements are given, followed by two conclusions numbered I and II. Assume three given statements to be true even if they seem to be at variance with commonly known facts and then decide which of the given conclusion logically follows from the two statements disregarding commonly known facts.

Statement:

Some bananas are apples.

All apples are tomatoes.

Some tomatoes are potatoes.

Conclusions:

I. Some potatoes are apples.

II. Some tomatoes are bananas.

- Ans**
- ☒ 1. If conclusion I follow
 - ☒ 2. If neither conclusion I nor II follows
 - ☒ 3. If both conclusion I and II follows
 - ☒ 4. If conclusion II follows

Question ID : 630680384831

Option 1 ID : 6306801500210

Option 2 ID : 6306801500213

Option 3 ID : 6306801500212

Option 4 ID : 6306801500211

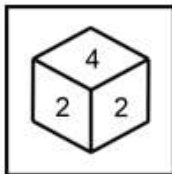
Status : Answered

Chosen Option : 4

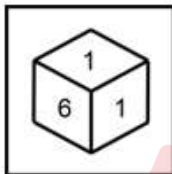
Q.20 Choose the figure which is different from the rest.

Ans

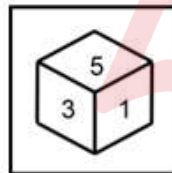
☒ 1.



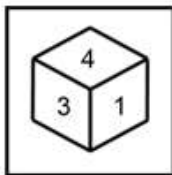
☒ 2.



☒ 3.



☒ 4.



Question ID : 630680384546

Option 1 ID : 6306801499070

Option 2 ID : 6306801499071

Option 3 ID : 6306801499072

Option 4 ID : 6306801499073

Status : Answered

Chosen Option : 3

Q.21 In the following question three statements are given, followed by two conclusions numbered I and II. Assume three given statements to be true even if they seem to be at variance with commonly known facts and then decide which of the given conclusion logically follows from the two statements disregarding commonly known facts.

Statements:

Some forests are mountains.

All mountains are rivers.

All rivers are deserts.

Conclusions:

I. Some deserts are forests.

II. Some rivers are mountains.

- Ans**
- ☒ 1. Only conclusion II follows
 - ☒ 2. Neither conclusion I nor II follows
 - ☒ 3. Both conclusion I and II follow
 - ☒ 4. Only conclusion I follows

Question ID : 630680384632

Option 1 ID : 6306801499415

Option 2 ID : 6306801499417

Option 3 ID : 6306801499416

Option 4 ID : 6306801499414

Status : Answered

Chosen Option : 3

Q.22 There is some relationship between the two terms (letter clusters) on the left of the sign (:). The same relationship exists between the two terms on the right of the sign (:). Find the missing one from the four alternatives.

HJIKJ : KHLIM :: LMNKO : ?

- Ans**
- ☒ 1. OQRSP
 - ☒ 2. OKRIQ
 - ☒ 3. OPQNR
 - ☒ 4. OKQIR

Question ID : 630680384609

Option 1 ID : 6306801499323

Option 2 ID : 6306801499324

Option 3 ID : 6306801499322

Option 4 ID : 6306801499325

Status : Answered

Chosen Option : 4

Q.23 If 'A - B' means A is the wife of B, 'A + B' means A is the daughter of B and 'A ÷ B' means A is the son of B, what will W + I ÷ L means ?

- Ans**
- ☒ 1. L' is the father of 'W'
 - ☒ 2. L' and 'W' are brothers
 - ☒ 3. W' is the daughter of son of L
 - ☒ 4. W' is wife of 'L'

Question ID : 630680386169

Option 1 ID : 6306801505388

Option 2 ID : 6306801505386

Option 3 ID : 6306801505389


Option 4 ID : 6306801505387

Status : Answered

Chosen Option : 3

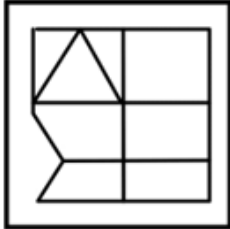
Q.24 Find out that answer figure from the given options in which the question figure is embedded.

Question Figure:

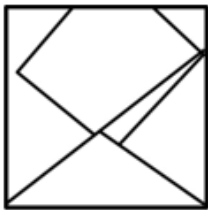


Ans

✗ 1.



✗ 2.



✓ 3.



✗ 4.



Question ID : 630680384637

Option 1 ID : 6306801499436

Option 2 ID : 6306801499435

Option 3 ID : 6306801499434

Option 4 ID : 6306801499437

Status : Answered

Chosen Option : 3

Q.25 How many pairs of letters are there in the word "TRIANGLE" that have as many letters between as in the alphabetical order?

Ans ✗ 1. 2

✗ 2. 1

✓ 3. 3

✗ 4. 4

Question ID : 630680384448

Option 1 ID : 6306801498678

Option 2 ID : 6306801498681

Option 3 ID : 6306801498679

Option 4 ID : 6306801498680

Status : Answered

Chosen Option : 2

Section : General Awareness

Q.1 Which government initiative focuses on providing healthcare services to rural areas of India?

- Ans** ☒ 1. Ayushman Bharat - Pradhan Mantri Jan Arogya Yojana
☒ 2. Skill India
☒ 3. Digital India
☒ 4. Pradhan Mantri Awas Yojana

Question ID : 630680384418
 Option 1 ID : 6306801498558
 Option 2 ID : 6306801498560
 Option 3 ID : 6306801498559
 Option 4 ID : 6306801498561
 Status : Answered
 Chosen Option : 1

Q.2 Which of the following states receive the least rainfall in India?

- Ans** ☒ 1. Jharkhand
☒ 2. Rajasthan
☒ 3. Mumbai
☒ 4. Assam

Question ID : 630680384102
 Option 1 ID : 6306801497299
 Option 2 ID : 6306801497298
 Option 3 ID : 6306801497301
 Option 4 ID : 6306801497300
 Status : Answered
 Chosen Option : 2

Q.3 Which festival celebrated in Himachal Pradesh involves locals carrying flaming torches and performing traditional dances to ward off evil spirits?

- Ans** ☒ 1. Losar Festival
☒ 2. Baisakhi
☒ 3. Kinnaur Festival
☒ 4. Hornbill Festival

Question ID : 630680384398
 Option 1 ID : 6306801498478
 Option 2 ID : 6306801498479
 Option 3 ID : 6306801498481
 Option 4 ID : 6306801498480
 Status : Answered
 Chosen Option : 3

Q.4 Which among the following is the first Regional Rural Bank to be set up in India?

- Ans
- ☒ 1. Dakshin Bihar Gramin Bank
 - ☒ 2. Aryavart Bank
 - ☒ 3. Paschim Banga Gramin Bank
 - ☒ 4. Pratham Bank

Question ID : 630680384085
 Option 1 ID : 6306801497233
 Option 2 ID : 6306801497232
 Option 3 ID : 6306801497231
 Option 4 ID : 6306801497230
 Status : Answered
 Chosen Option : 3

Q.5 Who among the following has issued a slew of directions for protection of people hailing from north-eastern states from facing racial violence and hate crimes?

- Ans
- ☒ 1. Supreme Court
 - ☒ 2. High Court
 - ☒ 3. Union Minister
 - ☒ 4. Prime Minister

Question ID : 630680384049
 Option 1 ID : 6306801497087
 Option 2 ID : 6306801497086
 Option 3 ID : 6306801497089
 Option 4 ID : 6306801497088
 Status : Not Answered
 Chosen Option : --

Q.6 Which desert is located in the northwest region of India?

- Ans
- ☒ 1. Deccan Plateau
 - ☒ 2. Rann of Kutch
 - ☒ 3. Thar Desert
 - ☒ 4. Aravalli Range

Question ID : 630680384425
 Option 1 ID : 6306801498588
 Option 2 ID : 6306801498587
 Option 3 ID : 6306801498586
 Option 4 ID : 6306801498589
 Status : Answered
 Chosen Option : 3

Q.7 Which organization was founded by A.O. Hume and played a crucial role in the Indian independence movement?

- Ans
- ☒ 1. Hindu Mahasabha
 - ☒ 2. Revolutionary Socialist Party
 - ☒ 3. All India Muslim League
 - ☒ 4. Indian National Congress

Question ID : 630680384440
 Option 1 ID : 6306801498649
 Option 2 ID : 6306801498648
 Option 3 ID : 6306801498647
 Option 4 ID : 6306801498646
 Status : Answered
 Chosen Option : 4

Q.8 What was the name of Hindu general who commanded the Ghaznavid armies in which Hindu soldiers were also recruited?

- Ans ☒ 1. Tilak
☒ 2. Bijji Rai
☒ 3. Vijaypal
☒ 4. Pandit

Question ID : 630680384119
 Option 1 ID : 6306801497368
 Option 2 ID : 6306801497366
 Option 3 ID : 6306801497367
 Option 4 ID : 6306801497369
 Status : Not Answered
 Chosen Option : --

Q.9 Which of the following states in India has the highest birth rate in rural areas?

- Ans ☒ 1. Sikkim
☒ 2. Uttar Pradesh
☒ 3. Bihar
☒ 4. Assam

Question ID : 630680384108
 Option 1 ID : 6306801497322
 Option 2 ID : 6306801497325
 Option 3 ID : 6306801497323
 Option 4 ID : 6306801497324
 Status : Answered
 Chosen Option : 3

Q.10 Which international agreement aims to combat climate change and limit global warming to well below 2 degrees Celsius?

- Ans ☒ 1. Kyoto Protocol
☒ 2. Copenhagen Accord
☒ 3. Paris Agreement
☒ 4. Montreal Protocol

Question ID : 630680384412
 Option 1 ID : 6306801498535
 Option 2 ID : 6306801498537
 Option 3 ID : 6306801498534
 Option 4 ID : 6306801498536
 Status : Not Answered
 Chosen Option : --

Q.11 Which country is renowned for the traditional martial art form called "Kendo"?

- Ans ☒ 1. Mexico
☒ 2. France
☒ 3. Japan
☒ 4. Russia

Question ID : 630680384396
 Option 1 ID : 6306801498473
 Option 2 ID : 6306801498471
 Option 3 ID : 6306801498470
 Option 4 ID : 6306801498472
 Status : Not Answered
 Chosen Option : --

Q.12 When was new generation of network connectivity was inaugurated by Prime Minister of India?

- Ans** ☒ 1. Jul 1, 2022
☒ 2. October 1, 2022
☒ 3. October 1, 2021
☒ 4. Jan 1, 2023

Question ID : 630680384375
 Option 1 ID : 6306801498388
 Option 2 ID : 6306801498386
 Option 3 ID : 6306801498387
 Option 4 ID : 6306801498389
 Status : Not Answered
 Chosen Option : --

Q.13 Which among the following is a Sports Book?

- Ans** ☒ 1. The Catcher in the Rye
☒ 2. Peter Pan
☒ 3. The Master: The Brilliant Career of Roger Federer
☒ 4. Pride and Prejudice

Question ID : 630680384057
 Option 1 ID : 6306801497119
 Option 2 ID : 6306801497121
 Option 3 ID : 6306801497118
 Option 4 ID : 6306801497120
 Status : Answered
 Chosen Option : 3

Q.14 Who founded the Indian National Congress?

- Ans** ☒ 1. Joseph Hume
☒ 2. Allan Octavian Hume
☒ 3. Pandit Madan Mohan Malaviya
☒ 4. Dadabhai Naoroji

Question ID : 630680384131
 Option 1 ID : 6306801497416
 Option 2 ID : 6306801497417
 Option 3 ID : 6306801497415
 Option 4 ID : 6306801497414
 Status : Answered
 Chosen Option : 2

Q.15 Delhi Chief Minister Arvind Kejriwal was summoned by the CBI in connection with which scam in April,2023?

- Ans** ☒ 1. Electricity Scam
☒ 2. Liquor Scam
☒ 3. Bribe Scam
☒ 4. Chara Scam

Question ID : 630680384379
 Option 1 ID : 6306801498405
 Option 2 ID : 6306801498402
 Option 3 ID : 6306801498404
 Option 4 ID : 6306801498403
 Status : Not Answered
 Chosen Option : --

Q.16 Which of the following languages is recognized as a classical language in India?

- Ans
- ☒ 1. Urdu
 - ☒ 2. Bengali
 - ☒ 3. Tamil
 - ☒ 4. Hindi

Question ID : 630680384403
 Option 1 ID : 6306801498501
 Option 2 ID : 6306801498500
 Option 3 ID : 6306801498499
 Option 4 ID : 6306801498498
 Status : Answered
 Chosen Option : 3

Q.17 What was the sex ratio of India as per 2011 Census? (out of 1000 males)

- Ans
- ☒ 1. 978 females
 - ☒ 2. 943 females
 - ☒ 3. 976 females
 - ☒ 4. 945 females

Question ID : 630680384111
 Option 1 ID : 6306801497334
 Option 2 ID : 6306801497335
 Option 3 ID : 6306801497336
 Option 4 ID : 6306801497337
 Status : Not Answered
 Chosen Option : --

Q.18 Which of the following measures the total value of goods and services produced within a country's borders in a given period?

- Ans
- ☒ 1. Net National Product
 - ☒ 2. National Income
 - ☒ 3. Gross National Product
 - ☒ 4. Gross Domestic Product

Question ID : 630680384406
 Option 1 ID : 6306801498513
 Option 2 ID : 6306801498512
 Option 3 ID : 6306801498511
 Option 4 ID : 6306801498510
 Status : Answered
 Chosen Option : 4

Q.19 Which state in India is the first to inaugurate an Apple store in the country?

- Ans
- ☒ 1. Bangalore
 - ☒ 2. Chennai
 - ☒ 3. New Delhi
 - ☒ 4. Mumbai

Question ID : 630680384039
 Option 1 ID : 6306801497046
 Option 2 ID : 6306801497049
 Option 3 ID : 6306801497047
 Option 4 ID : 6306801497048
 Status : Answered
 Chosen Option : 4

Q.20 Who wrote the autobiography "The Diary of a Young Girl," which documents her experiences during World War II?

- Ans**
- ☒ 1. Nelson Mandela
 - ☒ 2. Anne Frank
 - ☒ 3. Maya Angelou
 - ☒ 4. Malala Yousafzai

Question ID : 630680384391
 Option 1 ID : 6306801498453
 Option 2 ID : 6306801498451
 Option 3 ID : 6306801498450
 Option 4 ID : 6306801498452
 Status : Not Answered
 Chosen Option : --

Q.21 Who among the following was the first President of Republic India?

- Ans**
- ☒ 1. Dr B.R. Ambedkar
 - ☒ 2. SarvaPalli Radhakrishnan
 - ☒ 3. Dr Rajendra Prasad
 - ☒ 4. Dr Manmohan Singh

Question ID : 630680384129
 Option 1 ID : 6306801497408
 Option 2 ID : 6306801497409
 Option 3 ID : 6306801497406
 Option 4 ID : 6306801497407
 Status : Answered
 Chosen Option : 3

Q.22 In which of the following states is the Pushkar Mela celebrated?

- Ans**
- ☒ 1. Nagaland
 - ☒ 2. Tamil Nadu
 - ☒ 3. Rajasthan
 - ☒ 4. Assam

Question ID : 630680384071
 Option 1 ID : 6306801497176
 Option 2 ID : 6306801497174
 Option 3 ID : 6306801497177
 Option 4 ID : 6306801497175
 Status : Answered
 Chosen Option : 3

Q.23 Who was the founder of the Delhi Sultanate in India?

- Ans**
- ☒ 1. Qutub-ud-din Aibak
 - ☒ 2. Muhammad bin Tughlaq
 - ☒ 3. Balban
 - ☒ 4. Alauddin Khilji

Question ID : 630680384434
 Option 1 ID : 6306801498625
 Option 2 ID : 6306801498622
 Option 3 ID : 6306801498624
 Option 4 ID : 6306801498623
 Status : Answered
 Chosen Option : 1

Q.24 Which of the following factors are considered in the calculation of the Human Development Index (HDI)?

- Ans**
- ☒ 1. Mean years of schooling
 - ☒ 2. Gross Domestic Product (GDP) per capita
 - ☒ 3. All the given options
 - ☒ 4. Life expectancy at birth

Question ID : 630680386450

Option 1 ID : 6306801506512

Option 2 ID : 6306801506511

Option 3 ID : 6306801506513

Option 4 ID : 6306801506510

Status : Answered

Chosen Option : 2

Q.25 Which Indian debutant was awarded Man of the Match in test cricket for scoring 171 against West Indies in Jul'23?

- Ans**
- ☒ 1. Ishan Kishan
 - ☒ 2. Subham Gill
 - ☒ 3. Yashasvi Jaiswal
 - ☒ 4. Mukesh Chowdhury

Question ID : 630680384385

Option 1 ID : 6306801498427

Option 2 ID : 6306801498426

Option 3 ID : 6306801498428

Option 4 ID : 6306801498429

Status : Not Answered

Chosen Option : --

Section : Quantitative Aptitude

Q.1 A tank has a leak which would empty it in 8 hours. A tap is turned on which fills 5 litres a minute into the tank and it is now emptied in 32 hours. How many liters does the tank hold?

- Ans**
- ☒ 1. 3200 litres
 - ☒ 2. 1170 litres
 - ☒ 3. 3300 litres
 - ☒ 4. 2300 litres

Question ID : 630680384941

Option 1 ID : 6306801500652

Option 2 ID : 6306801500653

Option 3 ID : 6306801500650

Option 4 ID : 6306801500651

Status : Not Answered

Chosen Option : --

Q.2 Aman sells a book to Shreya at a profit of 7% and Shreya sells it to Kiran at a profit of 11%. If Kiran pays ₹11,877 for it. Find the cost price for Aman.

- Ans**
- ☒ 1. ₹9000
 - ☒ 2. ₹11,000
 - ☒ 3. ₹10,000
 - ☒ 4. ₹12,000

Question ID : 630680384925

Option 1 ID : 6306801500589

Option 2 ID : 6306801500588

Option 3 ID : 6306801500587

Option 4 ID : 6306801500586

Status : Answered

Chosen Option : 3

Q.3 27 men take 33 days to complete a job working 16 hours a day. Find the number of hours a day that 24 men should work to complete the job in 54 days.

- Ans**
- ☒ 1. 23 hours
 - ☒ 2. 11 hours
 - ☒ 3. 15 hours
 - ☒ 4. 14 hours

Question ID : 630680384936

Option 1 ID : 6306801500632

Option 2 ID : 6306801500631

Option 3 ID : 6306801500633

Option 4 ID : 6306801500630

Status : Answered

Chosen Option : 2

Q.4 If $x + y = 13$ and $x^3 + y^3 = 559$, find the value of xy .

- Ans**
- ☒ 1. 130
 - ☒ 2. 42
 - ☒ 3. 40
 - ☒ 4. 56

Question ID : 630680384850

Option 1 ID : 6306801500287

Option 2 ID : 6306801500289

Option 3 ID : 6306801500288

Option 4 ID : 6306801500286

Status : Answered

Chosen Option : 2

Q.5 If $3 \tan^2 A = 1$, and A is an acute angle, find the value of cosec A.

Ans

☐ 1. $-\frac{1}{2}$

☐ 2. $\frac{1}{2}$

☐ 3. -2

☒ 4. 2

Question ID : 630680385208

Option 1 ID : 6306801501718

Option 2 ID : 6306801501719

Option 3 ID : 6306801501720

Option 4 ID : 6306801501721

Status : Answered

Chosen Option : 4

Q.6 The price of a commodity is increased by ₹8400 to ₹ 14,616. Find the percentage increase.

Ans

☐ 1. 72%

☐ 2. 66%

☒ 3. 74%

☐ 4. 67%

Question ID : 630680384900

Option 1 ID : 6306801500487

Option 2 ID : 6306801500486

Option 3 ID : 6306801500489

Option 4 ID : 6306801500488

Status : Answered

Chosen Option : 3

Q.7 If $A = \frac{7}{4}$ of B and $B = \frac{8}{5}$ of C, then find the value of A: B: C.

Ans

☐ 1. 7: 4: 5

☐ 2. 14: 4: 5

☐ 3. 13: 11: 10

☒ 4. 14: 8: 5

Question ID : 630680384928

Option 1 ID : 6306801500601

Option 2 ID : 6306801500599

Option 3 ID : 6306801500600

Option 4 ID : 6306801500598

Status : Answered

Chosen Option : 4

Q.8 A shopkeeper buys pens at ₹ 80 per dozen and sells them at ₹20 per piece. What is the profit percentage?

- Ans**
- ✓ 1. 200%
 - ✗ 2. 160%
 - ✗ 3. 150%
 - ✗ 4. 180%

Question ID : 630680384920

Option 1 ID : 6306801500568

Option 2 ID : 6306801500569

Option 3 ID : 6306801500566

Option 4 ID : 6306801500567

Status : Answered

Chosen Option : 1

Q.9 Find the total surface area of a cylinder of height 2 cm and radius 3.5 cm. (Take $\pi = \frac{22}{7}$)

- Ans**
- ✗ 1. 91 cm²
 - ✗ 2. 98 cm²
 - ✗ 3. 84 cm²
 - ✓ 4. 121 cm²

Question ID : 630680384985

Option 1 ID : 6306801500827

Option 2 ID : 6306801500828

Option 3 ID : 6306801500826

Option 4 ID : 6306801500829

Status : Answered

Chosen Option : 4

Q.10 In an election, there are 3 candidates. The winning candidate got 65% votes and the candidate in the third got 3% of the votes. If the winning candidate got 6000 more votes than the combined votes obtained by second and third candidate, find the total number of votes.

- Ans**
- ✓ 1. 20,000
 - ✗ 2. 18,000
 - ✗ 3. 22,000
 - ✗ 4. 19,000

Question ID : 630680384906

Option 1 ID : 6306801500512

Option 2 ID : 6306801500510

Option 3 ID : 6306801500511

Option 4 ID : 6306801500513

Status : Answered

Chosen Option : 1

Q.11 A, B, and C started a business in the ratio of investment 1: 16: 11. After every 3 months, A doubles his investment, B halves his investment and C's investment remains unchanged. If the total profit of C is ₹ 54,735. Find the share of C's profit.

- Ans**
- ☒ 1. ₹ 24,320
 - ☒ 2. ₹ 24,590
 - ☒ 3. ₹ 27,060
 - ☒ 4. ₹ 27,505

Question ID : 630680384933

Option 1 ID : 6306801500621

Option 2 ID : 6306801500619

Option 3 ID : 6306801500618

Option 4 ID : 6306801500620

Status : Not Answered

Chosen Option : --

Q.12 Which of the following is not a criterion of congruency?

- Ans**
- ☒ 1. RHS
 - ☒ 2. SAS
 - ☒ 3. SSA
 - ☒ 4. ASA

Question ID : 630680385181

Option 1 ID : 6306801501610

Option 2 ID : 6306801501613

Option 3 ID : 6306801501611

Option 4 ID : 6306801501612

Status : Answered

Chosen Option : 3

Q.13 The average Pocket money of Aman and Amit is ₹ 4000 and that of Bicky, Binod, and Isha is ₹ 6000. Find the average pocket money of all five people.

- Ans**
- ☒ 1. ₹ 4400
 - ☒ 2. ₹ 5200
 - ☒ 3. ₹ 4800
 - ☒ 4. ₹ 5000

Question ID : 630680384860

Option 1 ID : 6306801500326

Option 2 ID : 6306801500327

Option 3 ID : 6306801500328

Option 4 ID : 6306801500329

Status : Answered

Chosen Option : 2

Q.14 The difference in volumes of two cubes is 2716 cm^3 . The sum and difference of their edges are 30 cm and 4 cm. Find the product of their edges.

- Ans
- ☒ 1. 204 cm^2
 - ☒ 2. 211 cm^2
 - ☒ 3. 207 cm^2
 - ☒ 4. 221 cm^2

Question ID : 630680384890
Option 1 ID : 6306801500446
Option 2 ID : 6306801500449
Option 3 ID : 6306801500448
Option 4 ID : 6306801500447
Status : Answered
Chosen Option : 4

Q.15 The slant height of a cone is 30 cm. If the diameter of the base of the cone is 42 cm, then find the volume of the cone.

- Ans
- ☒ 1. $1122\sqrt{51} \text{ cm}^3$
 - ☒ 2. $1442\sqrt{51} \text{ cm}^3$
 - ☒ 3. $1386\sqrt{51} \text{ cm}^3$
 - ☒ 4. $1622\sqrt{51} \text{ cm}^3$

Question ID : 630680384881
Option 1 ID : 6306801500411
Option 2 ID : 6306801500410
Option 3 ID : 6306801500413
Option 4 ID : 6306801500412
Status : Answered
Chosen Option : 3

Q.16 Point M is 17 cm from the centre of a circle of radius 15 cm. A tangent is drawn from M to touch the circle at N. Find the length of MN.

- Ans
- ☒ 1. 10 cm
 - ☒ 2. 8 cm
 - ☒ 3. 12 cm
 - ☒ 4. 14 cm

Question ID : 630680385175
Option 1 ID : 6306801501587
Option 2 ID : 6306801501588
Option 3 ID : 6306801501586
Option 4 ID : 6306801501589
Status : Answered
Chosen Option : 2

Q.17 If $a = 177$, $b = 178$, $c = 179$ then find the value of $2a^3 + 2b^3 + 2c^3 - 6abc$.

- Ans
- ☒ 1. 2706
 - ☒ 2. 3221
 - ☒ 3. 3204
 - ☒ 4. 2205

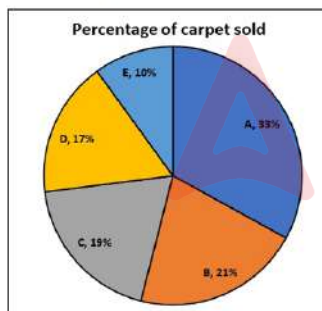
Question ID : 630680384856
Option 1 ID : 6306801500311
Option 2 ID : 6306801500313
Option 3 ID : 6306801500312
Option 4 ID : 6306801500310
Status : Answered
Chosen Option : 3

Q.18 The number 5387382 is divisible by which of the given numbers?

- Ans
- ☒ 1. 5
 - ☒ 2. 8
 - ☒ 3. 6
 - ☒ 4. 4

Question ID : 630680384892
Option 1 ID : 6306801500456
Option 2 ID : 6306801500457
Option 3 ID : 6306801500455
Option 4 ID : 6306801500454
Status : Answered
Chosen Option : 3

Q.19 The pie chart shows the percentage of carpets sold out of the total number of carpets sold by 5 different shops together. Find the number of carpets sold by shops B and E if the carpet sold by shop A is 759.



- Ans
- ☒ 1. 708
 - ☒ 2. 802
 - ☒ 3. 622
 - ☒ 4. 713

Question ID : 630680384873
Option 1 ID : 6306801500379
Option 2 ID : 6306801500381
Option 3 ID : 6306801500378
Option 4 ID : 6306801500380
Status : Answered
Chosen Option : 4

Q.20 The average weight of 7 persons in a group is 43 kg. When a new person joins the group, the average weight is increased by 3 kg. What is the weight of the new person?

- Ans**
- ☒ 1. 66 kg
 - ☒ 2. 62 kg
 - ☒ 3. 64 kg
 - ☒ 4. 67 kg

Question ID : 630680384861
Option 1 ID : 6306801500331
Option 2 ID : 6306801500332
Option 3 ID : 6306801500330
Option 4 ID : 6306801500333

Status : Answered

Chosen Option : 3

Q.21 In a class $\frac{1}{2}$ of the students do not know either Sanskrit or French. But $\frac{1}{6}$ th of the students know Sanskrit. How much students know both Sanskrit and French if students who know French are $\frac{1}{8}$ th of total students in the class?

- Ans**
- ☒ 1. $\frac{7}{15}$
 - ☒ 2. $\frac{9}{11}$
 - ☒ 3. $\frac{6}{17}$
 - ☒ 4. $\frac{5}{24}$

Question ID : 630680384997
Option 1 ID : 6306801500874
Option 2 ID : 6306801500877
Option 3 ID : 6306801500875
Option 4 ID : 6306801500876

Status : Answered

Chosen Option : 4

Q.22 If the value of $m + n = 19$ and the value of $mn = 78$, then find the value of $m^3 + n^3$.

- Ans**
- ☒ 1. 2433
 - ☒ 2. 2413
 - ☒ 3. 1722
 - ☒ 4. 1641

Question ID : 630680384848
Option 1 ID : 6306801500281
Option 2 ID : 6306801500278
Option 3 ID : 6306801500279
Option 4 ID : 6306801500280

Status : Answered

Chosen Option : 2

Q.23 The table given below shows the numbers of smartwatches sold by three different brands in a city in 5 years. What is the difference between the total number of smartwatches sold by all three brands in 2022 and 2020?

Year	Apple	Boat	One Plus
2019	1140	990	600
2020	1100	1000	1200
2021	1000	800	2200
2022	2100	1200	1700
2023	2000	1500	1900

Ans ✓ 1. 1700

✗ 2. 1100

✗ 3. 1600

✗ 4. 1500

Question ID : 630680384868

Option 1 ID : 6306801500361

Option 2 ID : 6306801500358

Option 3 ID : 6306801500360

Option 4 ID : 6306801500359

Status : Answered

Chosen Option : 1

Q.24 An interior angle of a regular polygon is 7 times its exterior angle. Then the number of sides of the polygon is _____.

Ans ✓ 1. 16

✗ 2. 12

✗ 3. 18

✗ 4. 10

Question ID : 630680385829

Option 1 ID : 6306801504036

Option 2 ID : 6306801504035

Option 3 ID : 6306801504037

Option 4 ID : 6306801504034

Status : Answered

Chosen Option : 1

Q.25 The diagonals of two squares are in the ratio 7 : 13. Find the ratio of their areas.

Ans ✗ 1. 2 : 5

✗ 2. 7 : 13

✓ 3. 49 : 169

✗ 4. 144 : 49

Question ID : 630680384876

Option 1 ID : 6306801500391

Option 2 ID : 6306801500392

Option 3 ID : 6306801500393

Option 4 ID : 6306801500390

Status : Answered

Chosen Option : 3

Comprehension:

Based on the following cloze passage answer the question given below:

In today's fast-paced world, effective time management is crucial for success. By prioritizing tasks, individuals can (1) _____ their productivity and achieve their goals. It is important to (2) _____ a schedule and allocate time to different activities based on their importance. Additionally, avoiding (3) _____ and distractions can help maintain focus and make the most of available time.

SubQuestion No : 1

Q.1 Fill in the blank (3) with the appropriate word from the options below:

- Ans** ☒ 1. interruptions
☒ 2. achievements
☒ 3. accomplishments
☒ 4. opportunities

Question ID : 630680385262

Option 1 ID : 6306801501930

Option 2 ID : 6306801501933

Option 3 ID : 6306801501931

Option 4 ID : 6306801501932

Status : Answered

Chosen Option : 1

Comprehension:

Based on the following cloze passage answer the question given below:

In today's fast-paced world, effective time management is crucial for success. By prioritizing tasks, individuals can (1) _____ their productivity and achieve their goals. It is important to (2) _____ a schedule and allocate time to different activities based on their importance. Additionally, avoiding (3) _____ and distractions can help maintain focus and make the most of available time.

SubQuestion No : 2

Q.2 Fill in the blank (1) with the appropriate word from the options below:

- Ans** ☒ 1. enhance
☒ 2. diminish
☒ 3. hinder
☒ 4. ignore

Question ID : 630680385260

Option 1 ID : 6306801501922

Option 2 ID : 6306801501924

Option 3 ID : 6306801501923

Option 4 ID : 6306801501925

Status : Answered

Chosen Option : 1

Comprehension:

Based on the following cloze passage answer the question given below:

In today's fast-paced world, effective time management is crucial for success. By prioritizing tasks, individuals can (1) _____ their productivity and achieve their goals. It is important to (2) _____ a schedule and allocate time to different activities based on their importance. Additionally, avoiding (3) _____ and distractions can help maintain focus and make the most of available time.

SubQuestion No : 3

Q.3 Fill in the blank (2) with the appropriate word from the options below:

Ans ✓ 1. follow

✗ 2. neglect

✗ 3. modify

✗ 4. create

Question ID : 630680385261

Option 1 ID : 6306801501927

Option 2 ID : 6306801501929

Option 3 ID : 6306801501928

Option 4 ID : 6306801501926

Status : Answered

Chosen Option : 4

Q.4 Choose the correct word to complete the sentence:

The scientist conducted a series of experiments and made a groundbreaking discovery. Her findings were so incredible that they were published in a prestigious journal and even caught the attention of _____.

Ans ✗ 1. ancient aliens from a distant planet.

✗ 2. a mischievous leprechaun hiding in her laboratory.

✗ 3. a secret society of wizards.

✓ 4. renowned experts in the field.

Question ID : 630680385246

Option 1 ID : 6306801501872

Option 2 ID : 6306801501871

Option 3 ID : 6306801501873

Option 4 ID : 6306801501870

Status : Answered

Chosen Option : 4

Q.5 Arrange the following sentences in the correct order to form a coherent paragraph.

A) The team celebrated their victory with jubilant cheers and high-fives.

B) Right from the start the game was intense, with both teams displaying exceptional skills.

C) These skills were the result of the coach's strategic guidance, training and motivation fuelled their performance.

D)The audience erupted in applause as the start whistle blew.

E) Though it was a hard-fought match, the well trained team emerged victorious.

Ans ✗ 1. BDACE

✗ 2. EDABC

✓ 3. DBCEA

✗ 4. CEDBA

Question ID : 630680385247

Option 1 ID : 6306801501876

Option 2 ID : 6306801501877

Option 3 ID : 6306801501874

Option 4 ID : 6306801501875

Status : Answered

Chosen Option : 3

Q.6 Fill in the blank with the most appropriate option.
These aren't your bills, _____ they?

- Ans ☒ 1. should
☒ 2. are
☒ 3. must
☒ 4. can

Question ID : 630680385582
Option 1 ID : 6306801503108
Option 2 ID : 6306801503109
Option 3 ID : 6306801503107
Option 4 ID : 6306801503106
Status : Answered
Chosen Option : 2

Q.7 Which of the following is a synonym for the word "Sagacious"?

- Ans ☒ 1. Insipid
☒ 2. Quixotic
☒ 3. Astute
☒ 4. Prosaic

Question ID : 630680385740
Option 1 ID : 6306801503692
Option 2 ID : 6306801503693
Option 3 ID : 6306801503690
Option 4 ID : 6306801503691
Status : Answered
Chosen Option : 3

Q.8 Arrange the following sentences in the correct order to form a coherent paragraph.

The company announced a new policy to promote environmental sustainability.

A. Employees were encouraged to participate in recycling and energy-saving initiatives.

B. The CEO emphasized the company's commitment to reducing its carbon footprint.

C. Several eco-friendly initiatives were already implemented within the office premises.

D. The company also partnered with local environmental organizations for tree-planting campaigns.

The employees welcomed the company's efforts and pledged their support.

- Ans ☒ 1. CDBA
☒ 2. BACD
☒ 3. DBAC
☒ 4. BCAD

Question ID : 630680385243
Option 1 ID : 6306801501861
Option 2 ID : 6306801501858
Option 3 ID : 6306801501860
Option 4 ID : 6306801501859
Status : Not Answered
Chosen Option : --

Q.9 Arrange the following sentences in the correct order to form a coherent paragraph:
 The art exhibition showcased a diverse collection of paintings and sculptures.
 A. The artist spent countless hours perfecting each brushstroke on the canvas.
 B. Visitors were captivated by the artist's use of colour and attention to detail.
 C. The artist's unique style and creative expression were evident in every artwork.
 D. The opening night of the exhibition was attended by art enthusiasts and critics.
 The curator of the gallery praised the artist's talent and dedication.

Ans ✓ 1. DACB

✗ 2. BCAD

✗ 3. CADB

✗ 4. DBAC

Question ID : 630680385698

Option 1 ID : 6306801503534

Option 2 ID : 6306801503537

Option 3 ID : 6306801503535

Option 4 ID : 6306801503536

Status : Answered

Chosen Option : 1

Comprehension:

Read the passage carefully and choose the best answer to each question out of the four alternatives

In today's world, environmental conservation has become increasingly crucial. With the rapid depletion of natural resources and the devastating impact of human activities on the planet, it is essential that we prioritize sustainable practices to protect our environment for future generations. Environmental conservation encompasses a wide range of efforts, including biodiversity preservation, waste reduction, renewable energy adoption, and responsible land and water management.

SubQuestion No : 10

Q.10 What is the tone of the passage?

Ans ✗ 1. Critical and sceptical

✗ 2. Informative and neutral

✓ 3. Optimistic and urgent

✗ 4. Pessimistic and fatalistic

Question ID : 630680385318

Option 1 ID : 6306801502137

Option 2 ID : 6306801502136

Option 3 ID : 6306801502134

Option 4 ID : 6306801502135

Status : Answered

Chosen Option : 3

Comprehension:

Read the passage carefully and choose the best answer to each question out of the four alternatives

In today's world, environmental conservation has become increasingly crucial. With the rapid depletion of natural resources and the devastating impact of human activities on the planet, it is essential that we prioritize sustainable practices to protect our environment for future generations. Environmental conservation encompasses a wide range of efforts, including biodiversity preservation, waste reduction, renewable energy adoption, and responsible land and water management.

SubQuestion No : 11

Q.11 Which title best represents the passage?

- Ans
1. Human Impact on the Environment
2. The Importance of Environmental Conservation
3. The Significance of Renewable Energy
4. The Effects of Climate Change

Question ID : 630680385316

Option 1 ID : 6306801502127

Option 2 ID : 6306801502129

Option 3 ID : 6306801502126

Option 4 ID : 6306801502128

Status : Answered

Chosen Option : 2

Comprehension:

Read the passage carefully and choose the best answer to each question out of the four alternatives

In today's world, environmental conservation has become increasingly crucial. With the rapid depletion of natural resources and the devastating impact of human activities on the planet, it is essential that we prioritize sustainable practices to protect our environment for future generations. Environmental conservation encompasses a wide range of efforts, including biodiversity preservation, waste reduction, renewable energy adoption, and responsible land and water management.

SubQuestion No : 12

Q.12 Which inference can be drawn from the passage?

- Ans
1. Environmental conservation only focuses on waste reduction.
2. Human activities have no impact on the planet's ecosystems.
3. Sustainable practices are necessary to protect the environment.
4. The depletion of natural resources is irreversible.

Question ID : 630680385319

Option 1 ID : 6306801502139

Option 2 ID : 6306801502141

Option 3 ID : 6306801502140

Option 4 ID : 6306801502138

Status : Answered

Chosen Option : 3

Comprehension:

Read the passage carefully and choose the best answer to each question out of the four alternatives

In today's world, environmental conservation has become increasingly crucial. With the rapid depletion of natural resources and the devastating impact of human activities on the planet, it is essential that we prioritize sustainable practices to protect our environment for future generations. Environmental conservation encompasses a wide range of efforts, including biodiversity preservation, waste reduction, renewable energy adoption, and responsible land and water management.

SubQuestion No : 13

Q.13 How does the passage connect to the world?

- Ans
- ☒ 1. By discussing the impact of environmental conservation on wildlife
 - ☒ 2. By examining the consequences of pollution on human health
 - ☒ 3. By analysing the global efforts to combat climate change
 - ☒ 4. By highlighting the depletion of natural resources worldwide

Question ID : 630680385317

Option 1 ID : 6306801502131

Option 2 ID : 6306801502132

Option 3 ID : 6306801502133

Option 4 ID : 6306801502130

Status : Answered

Chosen Option : 4

Q.14 Based on the situation given below choose the appropriate proverb from the given options:

Mike and Tom were both competing for the top position in the upcoming swimming competition. They had been training rigorously for months, and their performances were expected to be exceptional. As the competition day approached, both of them felt nervous and anxious about the outcome. In this situation, which proverb best describes the feelings of Mike and Tom before the swimming competition?

- Ans
- ☒ 1. Every cloud has a silver lining
 - ☒ 2. When in Rome, do as the Romans do
 - ☒ 3. Butterflies in one's stomach.
 - ☒ 4. Too many cooks spoil the broth

Question ID : 630680385731

Option 1 ID : 6306801503657

Option 2 ID : 6306801503655

Option 3 ID : 6306801503654

Option 4 ID : 6306801503656

Status : Answered

Chosen Option : 3

Q.15 Select the most appropriate missing sentence to complete the paragraph meaningfully. It was a rimy morning, and very damp. I had seen the damp lying on the outside of my little window, as if some goblin had been crying there all night, and using the window for a pocket-handkerchief. Now, I saw the damp lying on the bare hedges and spare grass, like a coarser sort of spiders' webs; _____.

- Ans
- ☒ 1. and I shall have to go and live in that poky little house.
 - ☒ 2. like four times five is twelve, and four times six is thirteen.
 - ☒ 3. hanging itself from twig to twig and blade to blade.
 - ☒ 4. I can go back by railway,' she said to herself.

Question ID : 630680385359

Option 1 ID : 6306801502287

Option 2 ID : 6306801502286

Option 3 ID : 6306801502288

Option 4 ID : 6306801502289

Status : Answered

Q.16 Which of the following is the correct antonym for the word "Munificent"?

- Ans ☒ 1. Magnanimous
☒ 2. Parsimonious
☒ 3. Bountiful
☒ 4. Prodigal

Question ID : 630680385738
 Option 1 ID : 6306801503683
 Option 2 ID : 6306801503682
 Option 3 ID : 6306801503684
 Option 4 ID : 6306801503685
 Status : Answered
 Chosen Option : 2

Q.17 Select the word segment that substitutes the bracketed segment correctly and completes the sentence meaningfully.
 She was [running quick] to catch the bus before it departed.

- Ans ☒ 1. running quickly
☒ 2. run quick
☒ 3. no correction required
☒ 4. running quickness

Question ID : 630680385284
 Option 1 ID : 6306801502002
 Option 2 ID : 6306801502004
 Option 3 ID : 6306801502005
 Option 4 ID : 6306801502003
 Status : Answered
 Chosen Option : 1

Q.18 Identify the synonym for the bracketed word in the sentence:
 The beauty of the painting lay in its [transcendent] depiction of nature's grandeur.

- Ans ☒ 1. banal
☒ 2. transient
☒ 3. celestial
☒ 4. earthly

Question ID : 630680385741
 Option 1 ID : 6306801503696
 Option 2 ID : 6306801503697
 Option 3 ID : 6306801503695
 Option 4 ID : 6306801503694
 Status : Answered
 Chosen Option : 3

Q.19 Fill in the blank with the correct part of speech.
The detective examined the crime scene _____, looking for any clues that could help solve the mystery.

- Ans
- ☒ 1. melodramatically
 - ☒ 2. sporadically
 - ☒ 3. meticulously
 - ☒ 4. inadvertently

Question ID : 630680385230
Option 1 ID : 6306801501809
Option 2 ID : 6306801501808
Option 3 ID : 6306801501806
Option 4 ID : 6306801501807
Status : Answered
Chosen Option : 3

Q.20 Select the word segment that substitutes the bracketed segment correctly and completes the sentence meaningfully.
The concert ended [sudden], leaving the audience wanting more.

- Ans
- ☒ 1. suddenness
 - ☒ 2. suddennesses
 - ☒ 3. suddenly
 - ☒ 4. no correction required

Question ID : 630680385292
Option 1 ID : 6306801502035
Option 2 ID : 6306801502036
Option 3 ID : 6306801502034
Option 4 ID : 6306801502037
Status : Answered
Chosen Option : 3

Q.21 Fill in the blank with the most appropriate phrasal verb:
After a long day at work, I like to _____ by reading a good book and sipping on a cup of tea.

- Ans
- ☒ 1. wind up
 - ☒ 2. take off
 - ☒ 3. settle down
 - ☒ 4. look after

Question ID : 630680385683
Option 1 ID : 6306801503474
Option 2 ID : 6306801503475
Option 3 ID : 6306801503477
Option 4 ID : 6306801503476
Status : Not Answered
Chosen Option : --

Q.22 Based on the situation given below choose the appropriate idiom from the given options:
Alex and Sarah were participating in a team-building workshop. During one of the activities, they were given a challenging task that required them to work together to solve a complex problem. However, they had different approaches to the problem and were struggling to find common ground.
In this situation, which idiom best describes Alex and Sarah's difficulty in reaching an agreement?

- Ans**
- ☒ 1. Burning the midnight oil
 - ☒ 2. Two peas in a pod
 - ☒ 3. Walking on eggshells
 - ☒ 4. Butting heads

Question ID : 630680385728
Option 1 ID : 6306801503643
Option 2 ID : 6306801503642
Option 3 ID : 6306801503644
Option 4 ID : 6306801503645
Status : Not Answered
Chosen Option : --

Q.23 Identify the one-word substitution in the following sentence:
What is the term for "the study of the origin and history of words"?

- Ans**
- ☒ 1. Philology
 - ☒ 2. Etymology
 - ☒ 3. Lexicography
 - ☒ 4. Linguistics

Question ID : 630680385279
Option 1 ID : 6306801501983
Option 2 ID : 6306801501982
Option 3 ID : 6306801501985
Option 4 ID : 6306801501984
Status : Answered
Chosen Option : 2

Q.24 Identify the antonym for the bracketed word in the sentence
The [esoteric] concept was challenging for most students to comprehend.

- Ans**
- ☒ 1. straightforward
 - ☒ 2. abstruse
 - ☒ 3. enigmatic
 - ☒ 4. obscure

Question ID : 630680385735
Option 1 ID : 6306801503671
Option 2 ID : 6306801503673
Option 3 ID : 6306801503672
Option 4 ID : 6306801503670
Status : Answered
Chosen Option : 1

Q.25 Identify the one-word substitution in the following sentence:
What is the term for "a person who is new to a field or activity"?

- Ans ☒ 1. Novice
☐ 2. Professional
☐ 3. Expert
☐ 4. Veteran

Question ID : 630680385283

Option 1 ID : 6306801501998

Option 2 ID : 6306801502000

Option 3 ID : 6306801501999

Option 4 ID : 6306801502001

Status : Answered

Chosen Option : 1

