




Test Date

Test Time

Subject



DELHI DEVELOPMENT AUTHORITY
RECRUITMENT CELL
VIKAS SADAN, INA, NEW DELHI - 110023
<https://www.dda.gov.in>

Advertisement No. 02/2023/Recrtt. Cell/Pers./DDA

Test Date	06/10/2023
Test Time	5:30 PM - 6:30 PM
Subject	Assistant Section Officer (ASO)

Section : General Intelligence and Reasoning



Test Prime

**ALL EXAMS,
ONE SUBSCRIPTION**



70,000+
Mock Tests



**Personalised
Report Card**



**Unlimited
Re-Attempt**



600+
Exam Covered



**Previous Year
Papers**




**500%
Refund**



ATTEMPT FREE MOCK NOW

Q.1 The given figure consists of a series with a question mark. Find out the alternative for the question mark that completes the series from the given options.

Question figure:



Ans

✗ 1.



✗ 2.



✗ 3.



✓ 4.



Question ID : 630680384841

Option 1 ID : 6306801500253

Option 2 ID : 6306801500252

Option 3 ID : 6306801500250

Option 4 ID : 6306801500251

Status : Answered

Chosen Option : 4

Q.2 Select the option that is related to the fifth word in the same way as the fourth word is related to the third word and the second word is related to the first word.

VIRTUOUS : SINFUL :: ACTIVE : IDLE :: KEEP : ?

Ans ✗ 1. REMAIN

✗ 2. SUPPORT

✓ 3. ABANDON

✗ 4. STAY

Question ID : 630680384495

Option 1 ID : 6306801498869

Option 2 ID : 6306801498868

Option 3 ID : 6306801498866

Option 4 ID : 6306801498867

Status : Answered

Chosen Option : 3

Q.3 Which of the following letter-number cluster will replace the question mark (?) in the given series?
AEI9, EIM13, IMQ17, MQU21, QUY25, UYC3, ?

- Ans**
- ✓ 1. YCG7
 - ✗ 2. YCG11
 - ✗ 3. YCF7
 - ✗ 4. YCC9

Question ID : 630680384723
Option 1 ID : 6306801499779
Option 2 ID : 6306801499780
Option 3 ID : 6306801499781
Option 4 ID : 6306801499778
Status : Answered
Chosen Option : 1

Q.4 Three Statements are given followed by two conclusions numbered I and II. Assuming the statements to be true, even if they seem to be at variance with commonly known facts, decide which of the conclusions logically follow(s) from the statements.
Statement:
Statement I: Some cis are trans.
Statement II: Some trans are phi.
Statement III: Some phi are chi.
Conclusion:
Conclusion I: Some cis are chi.
Conclusion II: Some chi are trans.

- Ans**
- ✗ 1. Only conclusion I follows
 - ✗ 2. Both conclusions I and II follow
 - ✗ 3. Only conclusion II follows
 - ✓ 4. Neither conclusion I nor II follows

Question ID : 630680384727
Option 1 ID : 6306801499794
Option 2 ID : 6306801499796
Option 3 ID : 6306801499795
Option 4 ID : 6306801499797
Status : Answered
Chosen Option : 4

Q.5 Find out the wrong term in the given series.
GI, HH, IJ, JF, KE, LD

- Ans**
- ✗ 1. JF
 - ✗ 2. HH
 - ✓ 3. IJ
 - ✗ 4. LD

Question ID : 630680384522
Option 1 ID : 6306801498975
Option 2 ID : 6306801498974
Option 3 ID : 6306801498976
Option 4 ID : 6306801498977
Status : Answered
Chosen Option : 3

Q.6 How many letters are there in the given series that are immediately preceded by a number and immediately followed by a vowel?
A 5 B H 2 D 3 6 K S 2 1 G 9 5 M 3 Q 4 E U 6 3 F I

- Ans
- ☒ 1. 3
 - ☒ 2. 2
 - ☒ 3. 4
 - ☒ 4. 1

Question ID : 630680384459
Option 1 ID : 6306801498724
Option 2 ID : 6306801498725
Option 3 ID : 6306801498722
Option 4 ID : 6306801498723
Status : Answered
Chosen Option : 2

Q.7 How many letters are there in the given series that are immediately preceded as well as followed by a symbol?
S S P R @ L ! M B # A @ Q + T

- Ans
- ☒ 1. 1
 - ☒ 2. 3
 - ☒ 3. 4
 - ☒ 4. 2

Question ID : 630680384554
Option 1 ID : 6306801499102
Option 2 ID : 6306801499103
Option 3 ID : 6306801499104
Option 4 ID : 6306801499105
Status : Answered
Chosen Option : 2

Q.8 Five people X, Y, Z, W, and A are sitting on a bench facing north. Z sits immediately between A and Y. Only one person sits to the right of Y. A is not an immediate neighbour of X. Who sits to the immediate right of W?

- Ans
- ☒ 1. X
 - ☒ 2. A
 - ☒ 3. Z
 - ☒ 4. Y

Question ID : 630680384716
Option 1 ID : 6306801499750
Option 2 ID : 6306801499751
Option 3 ID : 6306801499753
Option 4 ID : 6306801499752
Status : Answered
Chosen Option : 2

- Q.9** Three Statements are given followed by three conclusions numbered I, II, and III. Assuming the statements to be true, even if they seem to be at variance with commonly known facts, decide which of the conclusions logically follow(s) from the statements.
- Statement:
Statement I: All radios are mobiles.
Statement II: All mobiles are tape recorders.
Statement III: All tape recorders are walkman.
Conclusion:
Conclusion I: All radios are walkman.
Conclusion II: All tape recorders are radios.
Conclusion III: Some walkman are mobiles.

Ans ☒ 1. None of the conclusions follow
☒ 2. Only II follows
☒ 3. Only I and II follows
☒ 4. Only I and III follows

Question ID : 630680384532
Option 1 ID : 6306801499017
Option 2 ID : 6306801499014
Option 3 ID : 6306801499015
Option 4 ID : 6306801499016
Status : Answered
Chosen Option : 4

- Q.10** Rajeev's rank in a test was 12th from the top and 23rd from the bottom. Find the number of students who gave the test.

Ans ☒ 1. 33
☒ 2. 34
☒ 3. 35
☒ 4. 36

Question ID : 630680384714
Option 1 ID : 6306801499745
Option 2 ID : 6306801499743
Option 3 ID : 6306801499742
Option 4 ID : 6306801499744
Status : Answered
Chosen Option : 2

- Q.11** Consider the following table where each letter is denoted by a symbol or a digit as shown. Read the given conditions carefully and identify combinations that correctly represents 'EAGLQ' based on the coding system given in the table and the conditions that follow.
- Conditions:
(i) If the first letter is a vowel and the last letter is a consonant, both are to be coded as the code of vowel
(ii) If both first and last letters are consonants, both are to coded as 'o'
(iii) If first letter is a consonant and last letter is a vowel, the codes for first and last letters are to be interchanged

Digit / Symbol	7	@	*	5	8	#	3	8	%	2	9
Letter	D	L	E	G	W	F	I	A	Q	B	R

Ans ☒ 1. *85@*
☒ 2. %#5*%
☒ 3. %85#%
☒ 4. #58%#

Question ID : 630680384578
Option 1 ID : 6306801499198
Option 2 ID : 6306801499201
Option 3 ID : 6306801499199
Option 4 ID : 6306801499200
Status : Answered
Chosen Option : 1

Q.12 Select the odd number in the following number series.

824, 504, 348, 264, 224, 204

- Ans
- ☒ 1. 204
 - ☒ 2. 348
 - ☒ 3. 264
 - ☒ 4. 824

Question ID : 630680384699

Option 1 ID : 6306801499685

Option 2 ID : 6306801499683

Option 3 ID : 6306801499684

Option 4 ID : 6306801499682

Status : Not Answered

Chosen Option : --

Q.13 In the following question, four pairs of letter-cluster have been given out of which three are alike in some manner, while one is different. Select the odd pair from the given options.

- Ans
- ☒ 1. EIKM - NPRV
 - ☒ 2. LDRT - GIWO
 - ☒ 3. YBNV - EMYB
 - ☒ 4. JQXF - UCQJ

Question ID : 630680384810

Option 1 ID : 6306801500128

Option 2 ID : 6306801500127

Option 3 ID : 6306801500129

Option 4 ID : 6306801500126

Status : Not Answered

Chosen Option : --

Q.14 There is some relationship between the two terms (letter clusters) on the left of the sign (:). The same relationship exists between the two terms on the right of the sign (:), of which one is missing. Find the missing one from the four alternatives.

CGKP : FJNS :: MQBS : ?

- Ans
- ☒ 1. PTEV
 - ☒ 2. PSEV
 - ☒ 3. OTEV
 - ☒ 4. OTVE

Question ID : 630680384806

Option 1 ID : 6306801500110

Option 2 ID : 6306801500111

Option 3 ID : 6306801500113

Option 4 ID : 6306801500112

Status : Answered

Chosen Option : 1

Q.15 Which one of the given interchange in signs would make the given equation correct?

$$20 + 5 \times 6 - 2 \div 10 = 25$$

- Ans ☒ 1. * and -
☒ 2. - and ÷
☒ 3. - and +
☒ 4. ÷ and *

Question ID : 630680386166

Option 1 ID : 6306801505377

Option 2 ID : 6306801505374

Option 3 ID : 6306801505375

Option 4 ID : 6306801505376

Status : Answered

Chosen Option : 2

Q.16 In the following question, a number series is given with one term missing. Choose the correct alternative that will continue the same pattern and fill in the blank spaces.

37, 42, 40, 45, 43, 48, 46, ____

- Ans ☒ 1. 48
☒ 2. 50
☒ 3. 47
☒ 4. 51

Question ID : 630680386192

Option 1 ID : 6306801505480

Option 2 ID : 6306801505479

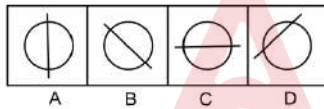
Option 3 ID : 6306801505481

Option 4 ID : 6306801505478

Status : Answered

Chosen Option : 4

Q.17 Out of the four figures marked (A), (B), (C), and (D), three are similar in a certain manner and one figure is not like the other three. Identify the figure which is different from the rest.



- Ans ☒ 1. C
☒ 2. A
☒ 3. D
☒ 4. B

Question ID : 630680384842

Option 1 ID : 6306801500256

Option 2 ID : 6306801500254

Option 3 ID : 6306801500257

Option 4 ID : 6306801500255

Status : Answered

Chosen Option : 3

Q.18 Consider the following table where each letter is denoted by a symbol or a digit as shown.
Read the given conditions carefully and identify combinations that correctly represents '15*14+9' based on the following coding system and the conditions that follow.

Conditions:

- (i) If the first element is an even digit and the last element is a symbol, both are to be coded as the code for the even digit.
(ii) If the first element is a symbol and the last element is an odd digit, their codes are to be interchanged.
(iii) If the first element is an odd digit and the last element is an even digit, both are to be coded as the code for the odd digit.

Digit / Symbol	?	*	4	+	2	#	9	-	5	%	!	1	8
Letter	J	D	A	V	M	I	Q	C	O	L	W	U	Y

Ans ☒ 1. QODUAVW

☒ 2. WODUAVQ

☒ 3. QODUAVQ

☒ 4. WODUAVW

Question ID : 630680384783

Option 1 ID : 6306801500019

Option 2 ID : 6306801500018

Option 3 ID : 6306801500021

Option 4 ID : 6306801500020

Status : Answered

Chosen Option : 1

Q.19 If 'S S T' means T is father of S, 'S # T' means T is mother of S, 'S * T' means T is sister of S and 'S @ T' means T is husband of S, then which of the following option indicates the relationship 'D is paternal grandmother of A'?

Ans ☒ 1. A*Q#MSD

☒ 2. A@QSM#D

☒ 3. A#QSD*M

☒ 4. A#Q@M#D

Question ID : 630680386171

Option 1 ID : 6306801505394

Option 2 ID : 6306801505397

Option 3 ID : 6306801505396

Option 4 ID : 6306801505395

Status : Answered

Chosen Option : 4

Q.20 A statement is given followed by two conclusions numbered I and II. Consider the statement to be true and answer which one of the conclusions logically follows from the statements.

Statement: Morning exercises are good for health.

Conclusions:

I. All healthy people do morning exercise.

II. Evening exercises are harmful.

Ans ☒ 1. If both I and II follow

☒ 2. If only conclusion II follows

☒ 3. If neither I nor II follows

☒ 4. If only conclusion I follows

Question ID : 630680384785

Option 1 ID : 6306801500028

Option 2 ID : 6306801500027

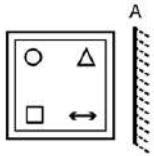
Option 3 ID : 6306801500029

Option 4 ID : 6306801500026

Status : Answered

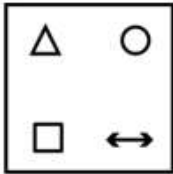
Chosen Option : 4

Q.21 Select the correct mirror image of the given figure when the mirror MN is placed to the right side of the figure.

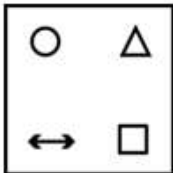


Ans

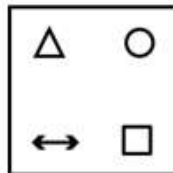
✗ 1.



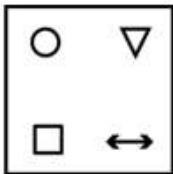
✗ 2.



✓ 3.



✗ 4.



Question ID : 630680384538

Option 1 ID : 6306801499039

Option 2 ID : 6306801499038

Option 3 ID : 6306801499041

Option 4 ID : 6306801499040

Status : Answered

Chosen Option : 3

Q.22 Which of the following numbers will replace the question mark (?) in the given series?

23, 24, 48, 49, 98, 99, ?

Ans

✗ 1.

100

✗ 2.

196

✓ 3.

198

✗ 4.

199

Question ID : 630680384466

Option 1 ID : 6306801498753

Option 2 ID : 6306801498751

Option 3 ID : 6306801498752

Option 4 ID : 6306801498750

Status : Answered

Chosen Option : 3

Q.23 Find the missing element in the given set to make them equal.

A = {Letters of the word UNIVERSE}

B = {NU, VI, ?, ES}

Ans ☒ 1. RE

☐ 2. ER

☐ 3. RI

☐ 4. UN

Question ID : 630680384793

Option 1 ID : 6306801500061

Option 2 ID : 6306801500058

Option 3 ID : 6306801500059

Option 4 ID : 6306801500060

Status : Answered

Chosen Option : 2

Q.24 M is father of O and P is son of N. Q is brother of M. If O is sister of P, Who is N to Q ?

Ans ☐ 1. Husband's brother

☒ 2. Brother's wife

☐ 3. Daughter

☐ 4. Husband

Question ID : 630680386174

Option 1 ID : 6306801505406

Option 2 ID : 6306801505409

Option 3 ID : 6306801505408

Option 4 ID : 6306801505407

Status : Answered

Chosen Option : 2

Q.25 How many pairs of letters in the word "PORTRAYAL" have the same number of letters between them as in the English alphabet (both forward and backward)?

Ans ☐ 1. Zero

☐ 2. Four

☒ 3. Three

☐ 4. Two

Question ID : 630680386154

Option 1 ID : 6306801505329

Option 2 ID : 6306801505327

Option 3 ID : 6306801505328

Option 4 ID : 6306801505326

Status : Answered

Chosen Option : 2

Q.1 What is the range of Human Development Index?

- Ans
- ☒ 1. 0-100
 - ☐ 2. 0-5
 - ☐ 3. 0-15
 - ☒ 4. 0-1

Question ID : 630680384089
 Option 1 ID : 6306801497248
 Option 2 ID : 6306801497246
 Option 3 ID : 6306801497249
 Option 4 ID : 6306801497247
 Status : Answered
 Chosen Option : 1

Q.2 In which of the following states in India is the local festival Namkhan celebrated?

- Ans
- ☒ 1. Himachal Pradesh
 - ☐ 2. Gujrat
 - ☐ 3. Jharkhand
 - ☐ 4. Assam

Question ID : 630680384272
 Option 1 ID : 6306801497974
 Option 2 ID : 6306801497975
 Option 3 ID : 6306801497977
 Option 4 ID : 6306801497976
 Status : Answered
 Chosen Option : 2

Q.3 Who is the Co-Founder and CEO of Skyroot Aerospace, the leading domestic aerospace company credited with launching India's first privately developed rocket?

- Ans
- ☐ 1. Ritu Karidhal
 - ☐ 2. Dr. Sushmita Chatterjee
 - ☐ 3. Dr. Vikram Singh
 - ☒ 4. Pawan Chandana

Question ID : 630680384142
 Option 1 ID : 6306801497461
 Option 2 ID : 6306801497460
 Option 3 ID : 6306801497459
 Option 4 ID : 6306801497458
 Status : Answered
 Chosen Option : 2

Q.4 How many prominent kingdoms of South India were there during the medieval period 700 AD to 1857 AD?

- Ans
- ☐ 1. Three
 - ☒ 2. Two
 - ☐ 3. Ten
 - ☐ 4. Four

Question ID : 630680384321
 Option 1 ID : 6306801498170
 Option 2 ID : 6306801498172
 Option 3 ID : 6306801498173
 Option 4 ID : 6306801498171
 Status : Answered
 Chosen Option : 2

Q.5 Which is the second most prominent language in India?

- Ans ☒ 1. Marathi
☒ 2. Bengali
☒ 3. Assamese
☒ 4. Hindi

Question ID : 630680384282
 Option 1 ID : 6306801498016
 Option 2 ID : 6306801498015
 Option 3 ID : 6306801498017
 Option 4 ID : 6306801498014
 Status : Answered
 Chosen Option : 4

Q.6 Who founded the Ramakrishna Mission and was a disciple of Ramakrishna Paramahansa?

- Ans ☒ 1. Raja Ram Mohan Roy
☒ 2. Swami Vivekananda
☒ 3. Swami Prabhupada
☒ 4. Dayananda Saraswati

Question ID : 630680384446
 Option 1 ID : 6306801498671
 Option 2 ID : 6306801498670
 Option 3 ID : 6306801498673
 Option 4 ID : 6306801498672
 Status : Answered
 Chosen Option : 2

Q.7 Who among the following defeated Humayun?

- Ans ☒ 1. Amar Singh
☒ 2. Sher Khan
☒ 3. Safavid Shah
☒ 4. Khan Jahan Lodi

Question ID : 630680384326
 Option 1 ID : 6306801498192
 Option 2 ID : 6306801498190
 Option 3 ID : 6306801498191
 Option 4 ID : 6306801498193
 Status : Answered
 Chosen Option : 2

Q.8 Which among the following states' police forces have started two women safety squad?

- Ans ☒ 1. Kerala
☒ 2. Chennai
☒ 3. Jharkhand
☒ 4. Jammu and Kashmir

Question ID : 630680384048
 Option 1 ID : 6306801497083
 Option 2 ID : 6306801497082
 Option 3 ID : 6306801497085
 Option 4 ID : 6306801497084
 Status : Answered
 Chosen Option : 1

Q.9 The Chief Minister of which of the following states has launched two initiatives to leverage the power of Artificial Intelligence (AI) in the state?

- Ans ☒ 1. Gujrat
☒ 2. Karnataka
☒ 3. Mumbai
☒ 4. Odisha

Question ID : 630680384036
 Option 1 ID : 6306801497037
 Option 2 ID : 6306801497034
 Option 3 ID : 6306801497035
 Option 4 ID : 6306801497036
 Status : Answered
 Chosen Option : 1

Q.10 Which of the following states of India hosted the Squash World Cup recently?

- Ans ☒ 1. Kerala
☒ 2. Rajasthan
☒ 3. Meghalaya
☒ 4. Chennai

Question ID : 630680384053
 Option 1 ID : 6306801497105
 Option 2 ID : 6306801497104
 Option 3 ID : 6306801497103
 Option 4 ID : 6306801497102
 Status : Answered
 Chosen Option : 4

Q.11 In which year did the Partition of Bengal take place?

- Ans ☒ 1. 1902
☒ 2. 1908
☒ 3. 1900
☒ 4. 1905

Question ID : 630680384331
 Option 1 ID : 6306801498212
 Option 2 ID : 6306801498210
 Option 3 ID : 6306801498213
 Option 4 ID : 6306801498211
 Status : Answered
 Chosen Option : 1

Q.12 Which of the following initiatives in undertaken by the Union Government of India to enumerate all people engaged in hazardous cleaning of sewers and septic tanks?

- Ans ☒ 1. Mission Karmayogi
☒ 2. Savya Shiksha Abhiyaan
☒ 3. National Action Plan for Mechanised Sanitation Ecosystem (NAMASTE).
☒ 4. Aashwasan Campaign

Question ID : 630680384045
 Option 1 ID : 6306801497070
 Option 2 ID : 6306801497073
 Option 3 ID : 6306801497071
 Option 4 ID : 6306801497072
 Status : Answered
 Chosen Option : 3

Q.13 Which of the following is a religious festival of India?

- Ans ☒ 1. Gandhi Jayanti
☒ 2. Dussehra
☒ 3. Republic Day
☒ 4. Hornbill festival

Question ID : 630680384074
 Option 1 ID : 6306801497188
 Option 2 ID : 6306801497187
 Option 3 ID : 6306801497186
 Option 4 ID : 6306801497189
 Status : Answered
 Chosen Option : 2

Q.14 In which of the following states of India is the shortest river system located?

- Ans ☒ 1. Mumbai
☒ 2. Rajasthan
☒ 3. Assam
☒ 4. Gujrat

Question ID : 630680384304
 Option 1 ID : 6306801498102
 Option 2 ID : 6306801498104
 Option 3 ID : 6306801498105
 Option 4 ID : 6306801498103
 Status : Answered
 Chosen Option : 2

Q.15 Which if the following is a cause of Global Warming?

- Ans ☒ 1. Soil Erosion
☒ 2. Rain
☒ 3. Deforestation
☒ 4. Afforestation

Question ID : 630680384092
 Option 1 ID : 6306801497259
 Option 2 ID : 6306801497258
 Option 3 ID : 6306801497260
 Option 4 ID : 6306801497261
 Status : Answered
 Chosen Option : 3

Q.16 Which of the following states in India is the largest producer of Bamboo?

- Ans ☒ 1. Jharkhand
☒ 2. Goa
☒ 3. Assam
☒ 4. Gujrat

Question ID : 630680384309
 Option 1 ID : 6306801498124
 Option 2 ID : 6306801498125
 Option 3 ID : 6306801498122
 Option 4 ID : 6306801498123
 Status : Not Answered
 Chosen Option : --

Q.17 The "Dependency Ratio" is a demographic indicator that measures the proportion of the dependent population (children and elderly) to the working-age population. A high dependency ratio indicates:

- Ans
- ☒ 1. An aging population with fewer dependents
 - ☒ 2. A declining birth rate
 - ☒ 3. A large working-age population
 - ☒ 4. A heavy burden on the working-age population to support dependents

Question ID : 630680384212
 Option 1 ID : 6306801497739
 Option 2 ID : 6306801497740
 Option 3 ID : 6306801497738
 Option 4 ID : 6306801497741
 Status : Answered
 Chosen Option : 4

Q.18 Which is the highest peak in the Eastern Ghats mountain range?

- Ans
- ☒ 1. Kanchenjunga
 - ☒ 2. Arma Konda
 - ☒ 3. Kasi
 - ☒ 4. Mahendragiri

Question ID : 630680384429
 Option 1 ID : 6306801498604
 Option 2 ID : 6306801498605
 Option 3 ID : 6306801498603
 Option 4 ID : 6306801498602
 Status : Answered
 Chosen Option : 4

Q.19 The autobiography "Unfinished" is written by which Indian actress and former Miss World?

- Ans
- ☒ 1. Diana Hayden
 - ☒ 2. Manushi Chhillar
 - ☒ 3. Yukta Mookhey
 - ☒ 4. Priyanka Chopra Jonas

Question ID : 630680384159
 Option 1 ID : 6306801497527
 Option 2 ID : 6306801497528
 Option 3 ID : 6306801497529
 Option 4 ID : 6306801497526
 Status : Not Answered
 Chosen Option : --

Q.20 Name the investment trading strategy that deals with a particular action in the stock market due declining price speculation

- Ans** ☒ 1. Short selling of stock
☒ 2. Margin money
☒ 3. Cash purchase of stock
☒ 4. Long position

Question ID : 630680384408
 Option 1 ID : 6306801498518
 Option 2 ID : 6306801498520
 Option 3 ID : 6306801498519
 Option 4 ID : 6306801498521
 Status : Answered
 Chosen Option : 1

Q.21 Which state of India has the highest steel producing capacity?

- Ans** ☒ 1. Odisha
☒ 2. Rajasthan
☒ 3. Assam
☒ 4. Kerala

Question ID : 630680384299
 Option 1 ID : 6306801498084
 Option 2 ID : 6306801498082
 Option 3 ID : 6306801498085
 Option 4 ID : 6306801498083
 Status : Not Answered
 Chosen Option : --

Q.22 What is the output per unit of variable input called?

- Ans** ☒ 1. Average cost
☒ 2. Total Product
☒ 3. Average Product
☒ 4. Marginal Product

Question ID : 630680384287
 Option 1 ID : 6306801498034
 Option 2 ID : 6306801498036
 Option 3 ID : 6306801498035
 Option 4 ID : 6306801498037
 Status : Answered
 Chosen Option : 1

Q.23 Which literary award in India is considered the highest literary recognition and is given annually for outstanding contribution to Indian literature?

- Ans** ☒ 1. Booker Prize
☒ 2. Padma Vibhushan
☒ 3. Jnanpith Award
☒ 4. Sahitya Akademi Award

Question ID : 630680386422
 Option 1 ID : 6306801506399
 Option 2 ID : 6306801506401
 Option 3 ID : 6306801506400
 Option 4 ID : 6306801506398
 Status : Answered
 Chosen Option : 4

Q.24 Who was the first female Prime Minister of India?

- Ans ☒ 1. Sarojini Naidu
☒ 2. Indira Gandhi
☒ 3. Pratibha Patil
☒ 4. Jayalalithaa

Question ID : 630680386481
 Option 1 ID : 6306801506634
 Option 2 ID : 6306801506635
 Option 3 ID : 6306801506637
 Option 4 ID : 6306801506636
 Status : Answered
 Chosen Option : 2

Q.25 In which of the following states of India was the 2023 edition of the SAFF Championship held in June 2023?

- Ans ☒ 1. Chennai
☒ 2. Kolkata
☒ 3. Mumbai
☒ 4. Bangalore

Question ID : 630680384055
 Option 1 ID : 6306801497113
 Option 2 ID : 6306801497112
 Option 3 ID : 6306801497111
 Option 4 ID : 6306801497110
 Status : Answered
 Chosen Option : 4

Section : Quantitative Aptitude

Q.1 The average runs of Selhwag and Sachin in a cricket match was 85, the average runs of Sachin and Virat were 72 and the average runs of Virat and Selhwag were 65.
 Find the runs scored by Sachin in the match.

- Ans ☒ 1. 75
☒ 2. 92
☒ 3. 82
☒ 4. 87

Question ID : 630680385132
 Option 1 ID : 6306801501416
 Option 2 ID : 6306801501417
 Option 3 ID : 6306801501415
 Option 4 ID : 6306801501414
 Status : Answered
 Chosen Option : 2

Q.2 Choose the correct option.

Ans ☒ 1.

Alternate angles are angles that occur on same sides of the transversal line and the different size.

☒ 2.

Alternate angles are angles that occur on same sides of the transversal line and the same size.

☒ 3.

Alternate angles are angles that occur on opposite sides of the transversal line and the different size.

☒ 4.

Alternate angles are angles that occur on opposite sides of the transversal line and the same size.

Question ID : 630680401824

Option 1 ID : 6306801567069

Option 2 ID : 6306801567068

Option 3 ID : 6306801567067

Option 4 ID : 6306801567066

Status : Answered

Chosen Option : 4

Q.3 Two tubes "White" and "Blue" are required to fill a container. The white tube takes 12 minutes to fill the container and the blue tube takes 14 minutes to fill the same container. The container can be emptied by a third tube yellow in 8 minutes. If all the tubes are opened at the same moment, what part of the container will remain unfilled at the end of 7 minutes?

Ans

☒ 1. $\frac{7}{24}$

☒ 2. $\frac{5}{24}$

☒ 3. $\frac{19}{24}$

☒ 4. $\frac{17}{24}$

Question ID : 630680385856

Option 1 ID : 6306801504143

Option 2 ID : 6306801504142

Option 3 ID : 6306801504145

Option 4 ID : 6306801504144

Status : Not Answered

Chosen Option : --

Q.4 Solve:

$$\frac{(675 + 269)^2 + (675 - 269)^2}{(675 \times 675) + (269 \times 269)}$$

Ans ☒ 1. 1

☒ 2. -1

☒ 3. 2

☒ 4. 0

Question ID : 630680385769

Option 1 ID : 6306801503796

Option 2 ID : 6306801503794

Option 3 ID : 6306801503797

Option 4 ID : 6306801503795

Status : Answered

Chosen Option : 3

Q.5 Ramesh earns an average of ₹320 per week during a 40 hours week. He increases his rates in final week of the month by 75%. Find the commission he earns in that week, if he puts in 50 hours during that final week?

- Ans**
- ☒ 1. ₹750
 - ☒ 2. ₹700
 - ☒ 3. ₹500
 - ☒ 4. ₹250

Question ID : 630680385824
Option 1 ID : 6306801504017
Option 2 ID : 6306801504016
Option 3 ID : 6306801504015
Option 4 ID : 6306801504014
Status : Not Answered
Chosen Option : --

Q.6 If $\operatorname{cosec}^2 A = 2$, and A is an acute angle, then find the value of $\cos A$.

- Ans**
- ☒ 1. 2
 - ☒ 2. $\frac{1}{\sqrt{2}}$
 - ☒ 3. $\sqrt{2}$
 - ☒ 4. 1

Question ID : 630680384947
Option 1 ID : 6306801500677
Option 2 ID : 6306801500676
Option 3 ID : 6306801500674
Option 4 ID : 6306801500675
Status : Answered
Chosen Option : 2

Q.7 ₹2525 are distributed among Shekar, Dixon and Divya . If money given to them is decreased by ₹27, ₹45 and ₹21 respectively, then they have money in the ratio of 8:13:11. What is the amount given to Dixon?

- Ans**
- ☒ 1. ₹1185
 - ☒ 2. ₹1225
 - ☒ 3. ₹956
 - ☒ 4. ₹1033

Question ID : 630680385851
Option 1 ID : 6306801504125
Option 2 ID : 6306801504124
Option 3 ID : 6306801504123
Option 4 ID : 6306801504122
Status : Not Attempted and Marked For Review
Chosen Option : --

Q.8 If $a = \sqrt{3} + \sqrt{4} + \sqrt{5}$ then $a^4 - 8a^3 + 8a^2 + 32a = ?$

- Ans
- ☒ 1. 15
 - ☒ 2. 1
 - ☒ 3. 44
 - ☒ 4. 0

Question ID : 630680385776
 Option 1 ID : 6306801503824
 Option 2 ID : 6306801503823
 Option 3 ID : 6306801503825
 Option 4 ID : 6306801503822
 Status : Not Answered
 Chosen Option : --

Q.9 After getting two successive discounts Mayur got a shirt at ₹153 whose marked price is ₹765. If the second discount is 25% find the first discount.

- Ans
- ☒ 1. 77.33%
 - ☒ 2. 76.83%
 - ☒ 3. 73.33%
 - ☒ 4. 75%

Question ID : 630680385842
 Option 1 ID : 6306801504089
 Option 2 ID : 6306801504088
 Option 3 ID : 6306801504086
 Option 4 ID : 6306801504087
 Status : Answered
 Chosen Option : 3

Q.10 If $\frac{(m^{28} + 1)}{m^{14}} = 23$ then $\frac{(m^{42} + 1)}{m^{21}} = ?$

- Ans
- ☒ 1. 48
 - ☒ 2. 78
 - ☒ 3. 110
 - ☒ 4. 25

Question ID : 630680385771
 Option 1 ID : 6306801503803
 Option 2 ID : 6306801503804
 Option 3 ID : 6306801503805
 Option 4 ID : 6306801503802
 Status : Not Answered
 Chosen Option : --

Q.11 The price of an article is successively increased by 25%, 40% and 45% respectively. What is the net percentage increase?

- Ans**
- ☒ 1. 135.75%
 - ☒ 2. 153.75%
 - ☐ 3. 110%
 - ☐ 4. 75%

Question ID : 630680385005
 Option 1 ID : 6306801500907
 Option 2 ID : 6306801500909
 Option 3 ID : 6306801500906
 Option 4 ID : 6306801500908
 Status : Not Answered
 Chosen Option : --

Q.12 A room has a length of 2 m, breadth of 14 m and a height of 23 m. Find the length of the longest pole that can be placed in the room.

- Ans**
- ☒ 1. 27 m
 - ☐ 2. 31 m
 - ☐ 3. 17 m
 - ☐ 4. 33 m

Question ID : 630680385806
 Option 1 ID : 6306801503943
 Option 2 ID : 6306801503944
 Option 3 ID : 6306801503942
 Option 4 ID : 6306801503945
 Status : Not Answered
 Chosen Option : --

Q.13 Find the volume of a cone whose height is 21 cm and radius is 14 cm.

- Ans**
- ☐ 1. 5421 cm³
 - ☐ 2. 2278 cm³
 - ☒ 3. 4312 cm³
 - ☐ 4. 3413 cm³

Question ID : 630680385145
 Option 1 ID : 6306801501469
 Option 2 ID : 6306801501468
 Option 3 ID : 6306801501466
 Option 4 ID : 6306801501467
 Status : Answered
 Chosen Option : 3

Q.14 If $x = \sqrt{5} + \sqrt{6}$, then the value of $(x + \frac{1}{x})$ is _____.

- Ans
- ☒ 1. $\sqrt{24}$
 - ☒ 2. $2\sqrt{5}$
 - ☒ 3. $\sqrt{11}$
 - ☒ 4. $2\sqrt{6}$

Question ID : 630680385812

Option 1 ID : 6306801503967

Option 2 ID : 6306801503966

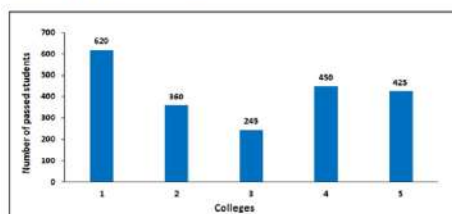
Option 3 ID : 6306801503968

Option 4 ID : 6306801503969

Status : Answered

Chosen Option : 4

Q.15 Given bar graph shows the number of students passed in B.E. final year from six different colleges. Failed students of college 1 is 100 more than that of college 4. If ratio between total strength of college 1 to college 4 is 3 : 2, then find total number of failed students from both colleges together?



- Ans
- ☒ 1. 120
 - ☒ 2. 175
 - ☒ 3. 245
 - ☒ 4. 280

Question ID : 630680385792

Option 1 ID : 6306801503886

Option 2 ID : 6306801503887

Option 3 ID : 6306801503888

Option 4 ID : 6306801503889

Status : Not Answered

Chosen Option : --

Q.16 Vikrant makes a profit of 23% on cost price by selling a fridge for ₹6150. If the cost price of the fridge is increased by 5% and he wants to earn the same profit, what will be the approximate new profit percent on selling price?

- Ans
- ☒ 1. 25%
 - ☒ 2. 18%
 - ☒ 3. 20%
 - ☒ 4. 15%

Question ID : 630680385027

Option 1 ID : 6306801500997

Option 2 ID : 6306801500995

Option 3 ID : 6306801500996

Option 4 ID : 6306801500994

Status : Not Answered

Chosen Option : --

Q.17 If two angles of a quadrilateral are 70° and 100° . Find the sum of other two angles.

- Ans
- ☒ 1. 160°
 - ☒ 2. 180°
 - ☒ 3. 170°
 - ☒ 4. 190°

Question ID : 630680401827
 Option 1 ID : 6306801567081
 Option 2 ID : 6306801567079
 Option 3 ID : 6306801567080
 Option 4 ID : 6306801567078
 Status : Answered
 Chosen Option : 4

Q.18 If the radius of a sphere is increased by 20% then the volume will be increased by:

- Ans
- ☒ 1. 64.64%
 - ☒ 2. 85.4%
 - ☒ 3. 72.8%
 - ☒ 4. 68%

Question ID : 630680385796
 Option 1 ID : 6306801503904
 Option 2 ID : 6306801503903
 Option 3 ID : 6306801503902
 Option 4 ID : 6306801503905
 Status : Answered
 Chosen Option : 3

Q.19 Vivek goes to a place on bicycle at speed of 18 km/hr and comes back at lower speed. If the average speed is 6.4 km/hr in total journey, then the return speed (in km/hr) is :

- Ans
- ☒ 1. 3.89 kmph
 - ☒ 2. 4.86 kmph
 - ☒ 3. 3.92 kmph
 - ☒ 4. 3.57 kmph

Question ID : 630680385779
 Option 1 ID : 6306801503835
 Option 2 ID : 6306801503834
 Option 3 ID : 6306801503836
 Option 4 ID : 6306801503837
 Status : Answered
 Chosen Option : 1

Q.20 Akash, Vikram and Rishab are painters. Akash can paint a wall in 12 days, Vikram can paint the same wall in 8 days and Rishab can do the same job in $\frac{4}{5}$ th time required by both Akash and Vikram. Akash and Vikram work together for 3 days, and the remaining work was done by Rishab. Find the number of full days Rishab worked for?

- Ans**
- ☒ 1. 4 days
 - ☒ 2. 2 days
 - ☒ 3. 1 day
 - ☒ 4. 6 days

Question ID : 630680385859

Option 1 ID : 6306801504156

Option 2 ID : 6306801504155

Option 3 ID : 6306801504154

Option 4 ID : 6306801504157

Status : Not Answered

Chosen Option : --

Q.21 The diagonal of a cube is $12\sqrt{3}$ cm. Find its volume.

- Ans**
- ☒ 1. 2744 cm³
 - ☒ 2. 1728 cm³
 - ☒ 3. 4096 cm³
 - ☒ 4. 2197 cm³

Question ID : 630680384987

Option 1 ID : 6306801500836

Option 2 ID : 6306801500834

Option 3 ID : 6306801500837

Option 4 ID : 6306801500835

Status : Answered

Chosen Option : 2

Q.22 ₹600 are divided among Aman, Bhuj and Chopra such that ₹40 more than $\frac{2}{5}$ th of Aman's share, ₹20 more than $\frac{2}{7}$ th of Bhuj's Share and ₹10 more than $\frac{9}{17}$ th of Chopra's share, all are equal. What is Bhuj's share ?

- Ans**
- ☒ 1. ₹300
 - ☒ 2. ₹290
 - ☒ 3. ₹280
 - ☒ 4. ₹250

Question ID : 630680385848

Option 1 ID : 6306801504113

Option 2 ID : 6306801504112

Option 3 ID : 6306801504111

Option 4 ID : 6306801504110

Status : Not Answered

Chosen Option : --

Q.23 Find the area of the sector if radius of that circle is 2 cm and angle of that sector is 60° .

- Ans
- ☒ 1. 3.09 cm^2
 - ☒ 2. 2.00 cm^2
 - ☒ 3. 2.09 cm^2
 - ☒ 4. 3.00 cm^2

Question ID : **630680401820**

Option 1 ID : **6306801567051**

Option 2 ID : **6306801567052**

Option 3 ID : **6306801567053**

Option 4 ID : **6306801567050**

Status : **Answered**

Chosen Option : **3**

Q.24 In a certain office $\frac{1}{2}$ of the employees are women $\frac{1}{4}$ of the women are married and $\frac{1}{3}$ of the married women have children. If $\frac{2}{3}$ of the man are married and $\frac{2}{3}$ of the married men have children. What part of employee's are without children ?

- Ans
- ☒ 1. $\frac{53}{49}$
 - ☒ 2. $\frac{23}{18}$
 - ☒ 3. $\frac{11}{13}$
 - ☒ 4. $\frac{53}{72}$

Question ID : **630680385816**

Option 1 ID : **6306801503985**

Option 2 ID : **6306801503982**

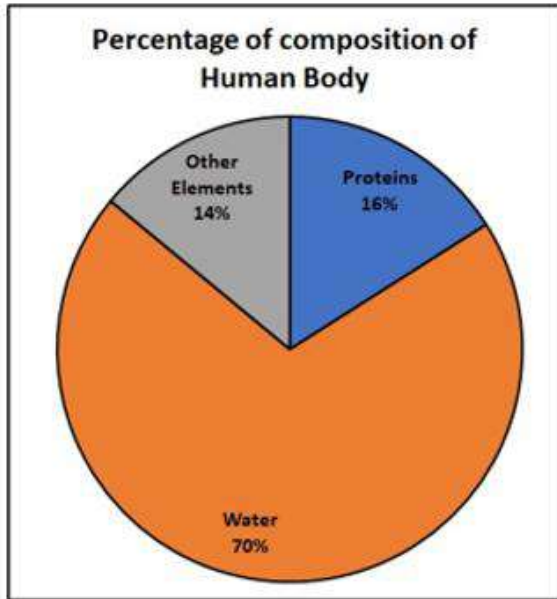
Option 3 ID : **6306801503984**

Option 4 ID : **6306801503983**

Status : **Not Answered**

Chosen Option : **--**

Q.25 What is the percentage of protein in the body?



- Ans
- ☒ 1. 30%
 - ☒ 2. 14%
 - ☒ 3. 16%
 - ☒ 4. 70%

Question ID : 630680401791
Option 1 ID : 6306801566937
Option 2 ID : 6306801566934
Option 3 ID : 6306801566935
Option 4 ID : 6306801566936
Status : Answered
Chosen Option : 3

Section : English Comprehension

Comprehension:

Read the given passage carefully and select the most appropriate answer to the questions that follow.

In the mother's eyes there could be no comparison between Vronsky and Levin. She disliked in Levin his strange and uncompromising opinions and his shyness in society, founded, as she supposed, on his pride and his queer sort of life, as she considered it, absorbed in cattle and peasants. She did not very much like it that he, who was in love with her daughter, had kept coming to the house for six weeks, as though he were waiting for something, inspecting, as though he were afraid, he might be doing them too great an honour by making an offer, and did not realize that a man, who continually visits at a house where there is a young unmarried girl, is bound to make his intentions clear. And suddenly, without doing so, he disappeared. 'It's as well he's not attractive enough for Kitty to have fallen in love with him,' thought the mother. Vronsky satisfied all the mother's desires. Very wealthy, clever, of aristocratic family, on the highroad to a brilliant career in the army.

SubQuestion No : 1

Q.1 From the given options, identify the suitable title for the passage.

Ans ✓ 1. The Suitable Match

✗ 2. Levin

✗ 3. Vronsky

✗ 4. Mother's Favourite

Question ID : 630680385676

Option 1 ID : 6306801503447

Option 2 ID : 6306801503448

Option 3 ID : 6306801503446

Option 4 ID : 6306801503449

Status : Answered

Chosen Option : 1

Comprehension:

Read the given passage carefully and select the most appropriate answer to the questions that follow.

In the mother's eyes there could be no comparison between Vronsky and Levin. She disliked in Levin his strange and uncompromising opinions and his shyness in society, founded, as she supposed, on his pride and his queer sort of life, as she considered it, absorbed in cattle and peasants. She did not very much like it that he, who was in love with her daughter, had kept coming to the house for six weeks, as though he were waiting for something, inspecting, as though he were afraid, he might be doing them too great an honour by making an offer, and did not realize that a man, who continually visits at a house where there is a young unmarried girl, is bound to make his intentions clear. And suddenly, without doing so, he disappeared. 'It's as well he's not attractive enough for Kitty to have fallen in love with him,' thought the mother. Vronsky satisfied all the mother's desires. Very wealthy, clever, of aristocratic family, on the highroad to a brilliant career in the army.

SubQuestion No : 2

Q.2 Identify the correct inference that can be drawn from the passage.

Ans ✗ 1. Vronsky and Levin are brothers.

✗ 2. Vronsky is not keen on marrying Kitty.

✗ 3. The mother preferred Levin over Vronsky for her daughter.

✓ 4. The mother is looking for a suitable marriage prospect for her daughter.

Question ID : 630680385678

Option 1 ID : 6306801503455

Option 2 ID : 6306801503454

Option 3 ID : 6306801503457

Option 4 ID : 6306801503456

Status : Answered

Chosen Option : 4

Comprehension:

Read the given passage carefully and select the most appropriate answer to the questions that follow.

In the mother's eyes there could be no comparison between Vronsky and Levin. She disliked in Levin his strange and uncompromising opinions and his shyness in society, founded, as she supposed, on his pride and his queer sort of life, as she considered it, absorbed in cattle and peasants. She did not very much like it that he, who was in love with her daughter, had kept coming to the house for six weeks, as though he were waiting for something, inspecting, as though he were afraid, he might be doing them too great an honour by making an offer, and did not realize that a man, who continually visits at a house where there is a young unmarried girl, is bound to make his intentions clear. And suddenly, without doing so, he disappeared. 'It's as well he's not attractive enough for Kitty to have fallen in love with him,' thought the mother. Vronsky satisfied all the mother's desires. Very wealthy, clever, of aristocratic family, on the highroad to a brilliant career in the army.

SubQuestion No : 3

Q.3 Which of the following statements is not true with respect to the passage.

- Ans ☒ 1. The mother liked Vronsky as he satisfied all her desires.
- ☒ 2. The mother did not appreciate Levin's coming to her house so frequently.
- ☒ 3. Levin visited the mother's house for about 6 weeks before disappearing.
- ☒ 4. Vronsky was a wealthy business man.

Question ID : 630680385677
Option 1 ID : 6306801503450
Option 2 ID : 6306801503453
Option 3 ID : 6306801503452
Option 4 ID : 6306801503451
Status : Answered
Chosen Option : 4

Comprehension:

Read the given passage carefully and select the most appropriate answer to the questions that follow.

In the mother's eyes there could be no comparison between Vronsky and Levin. She disliked in Levin his strange and uncompromising opinions and his shyness in society, founded, as she supposed, on his pride and his queer sort of life, as she considered it, absorbed in cattle and peasants. She did not very much like it that he, who was in love with her daughter, had kept coming to the house for six weeks, as though he were waiting for something, inspecting, as though he were afraid, he might be doing them too great an honour by making an offer, and did not realize that a man, who continually visits at a house where there is a young unmarried girl, is bound to make his intentions clear. And suddenly, without doing so, he disappeared. 'It's as well he's not attractive enough for Kitty to have fallen in love with him,' thought the mother. Vronsky satisfied all the mother's desires. Very wealthy, clever, of aristocratic family, on the highroad to a brilliant career in the army.

SubQuestion No : 4

Q.4 Select the options the most appropriate meaning of the bracketed word given in the sentence below.

'... on his pride and his (queer) sort of life ...'

- Ans ☒ 1. aristocratic
- ☒ 2. strange
- ☒ 3. inconsiderate
- ☒ 4. poor

Question ID : 630680385679
Option 1 ID : 6306801503459
Option 2 ID : 6306801503460
Option 3 ID : 6306801503458
Option 4 ID : 6306801503461
Status : Answered
Chosen Option : 2

Q.5 Select the correct question tag for the following statement:
"He won't be late, _____?"

- Ans ☒ 1. isn't he?
☒ 2. will he?
☒ 3. doesn't he?
☒ 4. won't he?

Question ID : 630680385239
Option 1 ID : 6306801501844
Option 2 ID : 6306801501842
Option 3 ID : 6306801501845
Option 4 ID : 6306801501843
Status : Answered
Chosen Option : 4

Q.6 Select the word from the options which is exactly opposite in meaning to the bracketed word given in the sentence below.
There was even work to make it (amenable) to industrial looms.

- Ans ☒ 1. unsusceptible
☒ 2. abstract
☒ 3. invisible
☒ 4. undecorated

Question ID : 630680385649
Option 1 ID : 6306801503354
Option 2 ID : 6306801503357
Option 3 ID : 6306801503355
Option 4 ID : 6306801503356
Status : Answered
Chosen Option : 1

Q.7 Select the word segment that substitutes the bracketed segment correctly and completes the sentence meaningfully.
The marathon runner's performance was exceptional; she [demonstrated tremendous] stamina and endurance throughout the race.

- Ans ☒ 1. possessed insignificant
☒ 2. showcased immense
☒ 3. lacked basic
☒ 4. revealed mediocre

Question ID : 630680385719
Option 1 ID : 6306801503609
Option 2 ID : 6306801503607
Option 3 ID : 6306801503606
Option 4 ID : 6306801503608
Status : Answered
Chosen Option : 2

Q.8 The sentence given below contains an idiom. Identify the idiom and choose its correct meaning from the given options.
The radio host is known for always being on his high horse, despite the fact that everyone knows he's a creep.

- Ans**
- ☒ 1. To find a way to deal something.
 - ☒ 2. Acting superior and arrogant.
 - ☒ 3. To behave or look strange.
 - ☒ 4. To find out the real cause of something.

Question ID : 630680385640

Option 1 ID : 6306801503320

Option 2 ID : 6306801503319

Option 3 ID : 6306801503318

Option 4 ID : 6306801503321

Status : Answered

Chosen Option : 2

Q.9 Select the most appropriate word for the given phrase.
Government instructions that limit trade in some way.

- Ans**
- ☒ 1. Aikido
 - ☒ 2. Impeach
 - ☒ 3. Embargo
 - ☒ 4. Carte blanche

Question ID : 630680385634

Option 1 ID : 6306801503297

Option 2 ID : 6306801503296

Option 3 ID : 6306801503295

Option 4 ID : 6306801503294

Status : Answered

Chosen Option : 4

Q.10 Select the most appropriate antonym of the given word.
Advance

- Ans**
- ☒ 1. Homage
 - ☒ 2. Slandorous
 - ☒ 3. Assault
 - ☒ 4. Retreat

Question ID : 630680385644

Option 1 ID : 6306801503336

Option 2 ID : 6306801503335

Option 3 ID : 6306801503334

Option 4 ID : 6306801503337

Status : Answered

Chosen Option : 4

Q.11 Select the most appropriate synonym to substitute the bracketed word in the given sentence.
She received an (accolade) from the president for her outstanding contribution to the field of science.

- Ans**
- ☒ 1. Indictment
 - ☒ 2. Criticism
 - ☒ 3. Praise
 - ☒ 4. Stubborn

Question ID : 630680385530

Option 1 ID : 6306801502914

Option 2 ID : 6306801502917

Option 3 ID : 6306801502915

Option 4 ID : 6306801502916

Status : Answered

Chosen Option : 3

Q.12 Select the most appropriate word for the given phrase.
Humour that describes the weaknesses.

- Ans**
- ☒ 1. Screech
 - ☒ 2. Satire
 - ☒ 3. Grunt
 - ☒ 4. Tenacious

Question ID : 630680385628

Option 1 ID : 6306801503272

Option 2 ID : 6306801503270

Option 3 ID : 6306801503273

Option 4 ID : 6306801503271

Status : Answered

Chosen Option : 1

Q.13 Fill in the blank with the most appropriate option
He studied hard for the exam. _____, he was able to score well.

- Ans**
- ☒ 1. Conversely
 - ☒ 2. Consequently
 - ☒ 3. Furthermore
 - ☒ 4. However

Question ID : 630680385466

Option 1 ID : 6306801502681

Option 2 ID : 6306801502678

Option 3 ID : 6306801502679

Option 4 ID : 6306801502680

Status : Answered

Chosen Option : 2

Q.14

Select the most appropriate synonym of the given word.

Bleakness

Ans

✗ 1. Sincerity

✓ 2. Desolation

✗ 3. Behead

✗ 4. Affection

Question ID : 630680385529

Option 1 ID : 6306801502913

Option 2 ID : 6306801502911

Option 3 ID : 6306801502910

Option 4 ID : 6306801502912

Status : Answered

Chosen Option : 2

Q.15

Select the most appropriate missing sentence to complete the paragraph meaningfully.

Kitty felt that Anna was perfectly simple and was concealing nothing, but that she had another higher world of _____.

Ans

✗ 1. who would find him reading.

✗ 2. who have tails just whisk the flies off without thinking about it.

✗ 3. who will always wait for them.

✓ 4. interests inaccessible to her, complex and poetic.

Question ID : 630680385597

Option 1 ID : 6306801503168

Option 2 ID : 6306801503167

Option 3 ID : 6306801503169

Option 4 ID : 6306801503166

Status : Answered

Chosen Option : 4

Q.16

Select the word segment that substitutes (replaces) the bracketed word segment correctly and completes the sentence meaningfully. Select the option 'no correction required' if the sentence is correct as given.

(I either spoke or looked) at anyone, but sat motionless.

Ans

✓ 1. I neither spoke nor looked

✗ 2. I neither spoke or looked

✗ 3. I either spoke nor looked

✗ 4. No correction required.

Question ID : 630680385623

Option 1 ID : 6306801503250

Option 2 ID : 6306801503251

Option 3 ID : 6306801503252

Option 4 ID : 6306801503253

Status : Answered

Chosen Option : 1

Q.17 Please select the most suitable phrasal verb from the options provided to fill in the blank.
She was feeling very tired after the long day at work, so she decided to _____ and take a short nap before dinner.

- Ans ☒ 1. put on
☒ 2. put off
☒ 3. put up
☒ 4. put out

Question ID : 630680385452

Option 1 ID : 6306801502623

Option 2 ID : 6306801502622

Option 3 ID : 6306801502624

Option 4 ID : 6306801502625

Status : Answered

Chosen Option : 2

Q.18 Fill in the blank with the correct part of speech.
Wow, that view is absolutely _____!

- Ans ☒ 1. well
☒ 2. omen
☒ 3. huge
☒ 4. fantastic

Question ID : 630680385232

Option 1 ID : 6306801501815

Option 2 ID : 6306801501814

Option 3 ID : 6306801501816

Option 4 ID : 6306801501817

Status : Answered

Chosen Option : 4

Q.19 Below given is a situation, upon your understanding of the situation choose a proverb which suits it.
John's lack of preparation for the important presentation was evident from the very start. He stumbled over his words, couldn't answer basic questions, and seemed unorganized.

- Ans ☒ 1. A bad beginning makes a bad ending.
☒ 2. A bad workman quarrels with his tools.
☒ 3. A bad corn promise is better than a good lawsuit.
☒ 4. A bargain is a bargain.

Question ID : 630680385514

Option 1 ID : 6306801502851

Option 2 ID : 6306801502852

Option 3 ID : 6306801502850

Option 4 ID : 6306801502853

Status : Answered

Chosen Option : 2

Comprehension:

In the following passage some words have been deleted. Fill in the blanks with the help of the alternatives given. Select the most appropriate option for each number.

Alice had no idea (1) _____ to do, and in despair she put her hand in her pocket, and (2) _____ out a box of comfits, and handed them around as prizes. There was (3) _____ one a-piece all around.

SubQuestion No : 20

Q.20 Select the most appropriate option to fill in the blank No. 2.

- Ans

✖

1. squared

✖

2. crammed

✖

3. pushed

✔

4. pulled

Question ID : 630680385602

Option 1 ID : 6306801503185

Option 2 ID : 6306801503184

Option 3 ID : 6306801503183

Option 4 ID : 6306801503182

Status : Answered

Chosen Option : 4

Comprehension:

In the following passage some words have been deleted. Fill in the blanks with the help of the alternatives given. Select the most appropriate option for each number.

Alice had no idea (1) _____ to do, and in despair she put her hand in her pocket, and (2) _____ out a box of comfits, and handed them around as prizes. There was (3) _____ one a-piece all around.

SubQuestion No : 21

Q.21 Select the most appropriate option to fill in the blank No. 1.

- Ans

✖

1. how

✖

2. who

✖

3. why

✔

4. what

Question ID : 630680385601

Option 1 ID : 6306801503179

Option 2 ID : 6306801503178

Option 3 ID : 6306801503180

Option 4 ID : 6306801503181

Status : Answered

Chosen Option : 4

Comprehension:

In the following passage some words have been deleted. Fill in the blanks with the help of the alternatives given. Select the most appropriate option for each number.

Alice had no idea (1) _____ to do, and in despair she put her hand in her pocket, and (2) _____ out a box of comfits, and handed them around as prizes. There was (3) _____ one a-piece all around.

SubQuestion No : 22

Q.22 Select the most appropriate option to fill in the blank No. 3.

- Ans ☒ 1. merely
☒ 2. exactly
☒ 3. not
☒ 4. exact

Question ID : 630680385603
Option 1 ID : 6306801503188
Option 2 ID : 6306801503187
Option 3 ID : 6306801503186
Option 4 ID : 6306801503189
Status : Answered
Chosen Option : 1

Q.23 Select the word segment that substitutes (replaces) the bracketed word segment correctly and completes the sentence meaningfully. Select the option 'no correction required' if the sentence is correct as given.

As the period fixed (of our marriage comes nearer), whether from cowardice or a prophetic feeling, I felt my heart sink within me.

- Ans ☒ 1. of our marriage draws nearer
☒ 2. No correction required.
☒ 3. for our marriage drew nearer
☒ 4. about our marriage draws near

Question ID : 630680385629
Option 1 ID : 6306801503274
Option 2 ID : 6306801503277
Option 3 ID : 6306801503275
Option 4 ID : 6306801503276
Status : Answered
Chosen Option : 3

Q.24 The sentences given below are all part of a paragraph but do not necessarily fall in the order that they are in. The first and the last sentences of the paragraph are given. Choose the option that arranges these sentences to form a meaningful paragraph.

Then I heard Atticus cough. I held my breath. Sometimes
A. to sleep. I waited for his light to go on, straining
B. we would find him reading. He said he often woke up
C. during the night, checked on us, and read himself back
D. when we made a midnight pilgrimage to the bathroom
my eyes to see it flood the hall.

- Ans ☒ 1. CBAD
☒ 2. DBCA
☒ 3. ADCB
☒ 4. BACD

Question ID : 630680385596
Option 1 ID : 6306801503164
Option 2 ID : 6306801503165
Option 3 ID : 6306801503163
Option 4 ID : 6306801503162
Status : Answered
Chosen Option : 2

Q.25 The sentences given below are all part of a paragraph but do not necessarily fall in the order that they are in. The first and the last sentences of the paragraph are given. Choose the option that arranges these sentences to form a meaningful paragraph.
It was completely dark when I arrived in the environs
A. and, as I was unable to rest, I resolved to visit the spot where
B. distance of half a league from the city. The sky was serene;
C. was obliged to pass the night at Secheron, a village at the
D. of Geneva; the gates of the town were already shut; and I
my poor William had been murdered.

Ans  1. ADBC
 2. CADB
 3. DCBA
 4. BADC

Question ID : 630680385594
Option 1 ID : 6306801503156
Option 2 ID : 6306801503155
Option 3 ID : 6306801503154
Option 4 ID : 6306801503157
Status : Answered
Chosen Option : 3

