
	<b>DELHI DEVELOPMENT AUTHORITY</b> <b>RECRUITMENT CELL</b> <b>VIKAS SADAN, INA, NEW DELHI - 110023</b> ( <a href="https://www.dda.gov.in">https://www.dda.gov.in</a> )
	Advertisement No. 02/2023/Recrtt. Cell/Pers./DDA
Test Date	06/10/2023
Test Time	11:30 AM - 12:30 PM
Subject	Assistant Section Officer (ASO)

Section : General Intelligence and Reasoning

**Q.1** In the following triad, each group of letters is related to the subsequent one following a certain logic.  
RME - NIA - LGY  
Which of the following option follows the same logic?

- Ans
- ☒ 1. HJW - DFS - ZBP
  - ☒ 2. KTG - GPC - ENA
  - ☒ 3. KTG - GPC - CLY
  - ☒ 4. HJW - DES - BDQ

Question ID : 630680386185  
Option 1 ID : 6306801505450  
Option 2 ID : 6306801505453  
Option 3 ID : 6306801505451  
Option 4 ID : 6306801505452  
Status : Answered  
Chosen Option : 2

# Test Prime

**ALL EXAMS,  
ONE SUBSCRIPTION**



**70,000+**  
Mock Tests



**Personalised  
Report Card**



**Unlimited  
Re-Attempt**



**600+**  
Exam Covered



**Previous Year  
Papers**



**500%  
Refund**



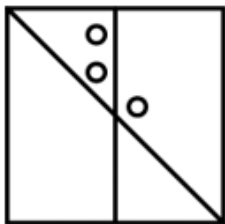
**ATTEMPT FREE MOCK NOW**

**Q.2** A question figure is given below, with four options shown such that the question figure is embedded in one of the four options. Find out the alternative figure which contains the question figure as its part.

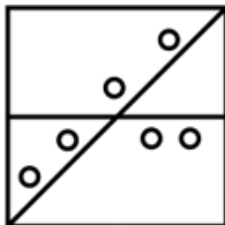


Ans

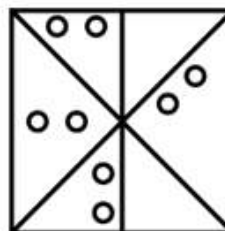
✗ 1.



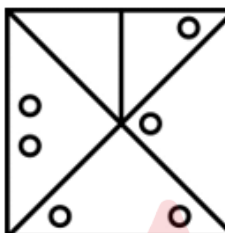
✗ 2.



✓ 3.



✗ 4.



Question ID : 630680386221

Option 1 ID : 6306801505594

Option 2 ID : 6306801505595

Option 3 ID : 6306801505596

Option 4 ID : 6306801505597

Status : Answered

Chosen Option : 3

**Q.3** If all the letters within each letter-clusters are arranged alphabetically, in how many letter-clusters will the first letter will be a vowel?

DLEV LRIV MOPU MRUS HFEJ

Ans

✗ 1. 1

✗ 2. 0

✓ 3. 2

✗ 4. 3

Question ID : 630680384751

Option 1 ID : 6306801499891

Option 2 ID : 6306801499890

Option 3 ID : 6306801499892

Option 4 ID : 6306801499893

Status : Answered

Chosen Option : 3

Q.4 Which one of the given interchange in signs would make the given equation correct?

$$10 + 4 \div 6 * 2 - 5 = 17$$

Ans ☒ 1.  $\div$  and  $*$

☐ 2.  $*$  and  $-$

☐ 3.  $-$  and  $+$

☐ 4.  $-$  and  $\div$

Question ID : 630680386168

Option 1 ID : 6306801505384

Option 2 ID : 6306801505385


Option 3 ID : 6306801505383

Option 4 ID : 6306801505382

Status : Answered

Chosen Option : 1

Q.5 Select the figure that will replace the question mark (?) in the following figure series.



Ans

☐ 1.



☐ 2.



☒ 3.



☐ 4.



Question ID : 630680384740

Option 1 ID : 6306801499849

Option 2 ID : 6306801499846

Option 3 ID : 6306801499847

Option 4 ID : 6306801499848

Status : Answered

Chosen Option : 3

**Q.6** Three Statements are given followed by two conclusions numbered I and II. Assuming the statements to be true, even if they seem to be at variance with commonly known facts, decide which of the conclusions logically follow(s) from the statements.  
Statement:  
Statement I: Some floors are roofs.  
Statement II: No roof is a terrace.  
Statement III: Some terraces are not walls.  
Conclusion:  
Conclusion I: No floor is a terrace.  
Conclusion II: Some terraces are walls.

- Ans**
- ☒ 1. Both conclusions I and II follow
  - ☒ 2. Only conclusion II follows
  - ☒ 3. Neither conclusion I nor II follows
  - ☒ 4. Only conclusion I follows

Question ID : 630680384731  
Option 1 ID : 6306801499812  
Option 2 ID : 6306801499811  
Option 3 ID : 6306801499813  
Option 4 ID : 6306801499810  
Status : Answered  
Chosen Option : 2

**Q.7** A group of eight members sit in a circle. Dorah is between Amanda and Frank and is opposite to Gerg. Emma is to the right of Amanda but on the left of Carla, whose right hand neighbour is Gerg. Bran enjoys having Howard to his left and Frank to his right. Who among the following is diagonally opposite to Amanda?

- Ans**
- ☒ 1. Gerg
  - ☒ 2. Bran
  - ☒ 3. Carla
  - ☒ 4. Howard

Question ID : 630680384816  
Option 1 ID : 6306801500151  
Option 2 ID : 6306801500150  
Option 3 ID : 6306801500152  
Option 4 ID : 6306801500153  
Status : Answered  
Chosen Option : 4

**Q.8** In the following question, four pairs of letter-cluster have been given out of which three are alike in some manner, while one is different. Select the odd pair from the given options.

- Ans**
- ☒ 1. UTSA - VTSZ
  - ☒ 2. XLPQ - YKQP
  - ☒ 3. GZWO - HYXN
  - ☒ 4. HNED - IMFC

Question ID : 630680384807  
Option 1 ID : 6306801500116  
Option 2 ID : 6306801500117  
Option 3 ID : 6306801500115  
Option 4 ID : 6306801500114  
Status : Answered  
Chosen Option : 1

**Q.9** A certain number of people are standing in a straight row facing North. A sits eight from the left end of the line and only four people are between A and B. C is second to the left of B and D is fourth to the right of C. There are as many people standing between A and D as between D and E. F is third to the right of E. The number of people between A and C is the same as that to the right of F. How many persons are there in the row?

- Ans**
- ☒ 1. 20
  - ☒ 2. 14
  - ☒ 3. 27
  - ☒ 4. 23

Question ID : 630680386204

Option 1 ID : 6306801505528

Option 2 ID : 6306801505526

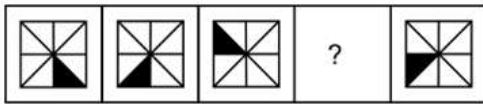
Option 3 ID : 6306801505529

Option 4 ID : 6306801505527

Status : Answered

Chosen Option : 2

**Q.10** Select the figure that will replace the question mark (?) in the following figure series.



**Ans**

- ☒ 1.
- ☒ 2.
- ☒ 3.
- ☒ 4.

Question ID : 630680384541

Option 1 ID : 6306801499052

Option 2 ID : 6306801499050

Option 3 ID : 6306801499053

Option 4 ID : 6306801499051

Status : Answered

Chosen Option : 3

**Q.11** There is some relationship between the two terms (letter clusters) on the left of the sign (:). The same relationship exists between the two terms on the right of the sign (: ) of which one is missing. Find the missing one from the four alternatives.  
EJLW : FLOA :: HKYR : ?

- Ans**
- ☒ 1. IMZU
  - ☒ 2. IMBV
  - ☒ 3. ILBU
  - ☒ 4. INAU

Question ID : 630680384809

Option 1 ID : 6306801500122

Option 2 ID : 6306801500124

Option 3 ID : 6306801500123

Option 4 ID : 6306801500125

Status : Answered

Chosen Option : 2

**Q.12** If 'A + B' means A is the daughter of B,  
'A \* B' means A is the son of B and  
'A - B' means A is the wife of B.  
If M \* N - O, which of the following is true ?

- Ans**
- ☒ 1. M is daughter of N
  - ☒ 2. O is wife of N
  - ☒ 3. O is father of M
  - ☒ 4. N is father of M

Question ID : 630680384770

Option 1 ID : 6306801499968

Option 2 ID : 6306801499966

Option 3 ID : 6306801499967

Option 4 ID : 6306801499969

Status : Answered

Chosen Option : 3

**Q.13** In a certain code language, if FIRE is called ELECTRICITY, ELECTRICITY is called WATER, WATER is called CLOUD, CLOUD is called STAR, STAR is called SOIL then what do living beings drink?

- Ans**
- ☒ 1. WATER
  - ☒ 2. CLOUD
  - ☒ 3. ELECTRICITY
  - ☒ 4. SOIL

Question ID : 630680384682

Option 1 ID : 6306801499615

Option 2 ID : 6306801499616

Option 3 ID : 6306801499614

Option 4 ID : 6306801499617

Status : Answered

Chosen Option : 2



Q.14 Which of the following numbers will replace the question mark (?) in the given series?

13, 14, ?, 27, 43, 68

- Ans
- ☒ 1. 15
  - ☒ 2. 18
  - ☒ 3. 17
  - ☒ 4. 16

Question ID : 630680384497  
Option 1 ID : 6306801498876  
Option 2 ID : 6306801498875  
Option 3 ID : 6306801498874  
Option 4 ID : 6306801498877  
Status : Answered  
Chosen Option : 2

Q.15 Consider the following table where each letter is denoted by a symbol or a digit as shown.

Read the given conditions carefully and identify combinations that correctly represents 'KIXFD' based on the following coding system and the conditions that follow.

Conditions:

- (i) If the first letter is a vowel and the last letter is a consonant, both are to be coded as the code of vowel
- (ii) If both first and last letters are consonants, both are to coded as 'or'
- (iii) If first letter is a consonant and last letter is a vowel, the codes for first and last letters are to be interchanged.

Digit / Symbol	&	5	*	@	9	2	!	3	7	%	4	8	?
Letter	P	G	F	D	K	X	I	R	U	E	V	A	J

- Ans
- ☒ 1. 9!\*2σ
  - ☒ 2. σI2\*σ
  - ☒ 3. 9!2\*@
  - ☒ 4. σ!2\*σ

Question ID : 630680384777  
Option 1 ID : 6306801499997  
Option 2 ID : 6306801499994  
Option 3 ID : 6306801499995  
Option 4 ID : 6306801499996  
Status : Not Answered  
Chosen Option : --

Q.16 Hema introduced Aman to her husband saying, "His brother's father is the only son of my father's father". How is Aman related to Hema?

- Ans
- ☒ 1. Husband
  - ☒ 2. Brother
  - ☒ 3. Father
  - ☒ 4. Son

Question ID : 630680384475  
Option 1 ID : 6306801498788  
Option 2 ID : 6306801498787  
Option 3 ID : 6306801498786  
Option 4 ID : 6306801498789  
Status : Answered  
Chosen Option : 2



Q.17 Find the wrong number in the series:

872, 864, 848, 824, 794, 752, 704

- Ans
- ☒ 1. 824
  - ☒ 2. 704
  - ☒ 3. 864
  - ☒ 4. 794

Question ID : 630680384763

Option 1 ID : 6306801499939

Option 2 ID : 6306801499941

Option 3 ID : 6306801499940

Option 4 ID : 6306801499938

Status : Answered

Chosen Option : 4

Q.18 Arrange the given words in the alphabetical order.

1. PULSE
2. PURSE
3. PRUDE
4. PICK
5. PINK

- Ans
- ☒ 1. 54312
  - ☒ 2. 43512
  - ☒ 3. 45312
  - ☒ 4. 54321

Question ID : 630680384655

Option 1 ID : 6306801499508

Option 2 ID : 6306801499506

Option 3 ID : 6306801499507

Option 4 ID : 6306801499509

Status : Answered

Chosen Option : 3

**Q.19** In the following question three statements are given, followed by two conclusions numbered I and II. Assume three given statements to be true even if they seem to be at variance with commonly known facts and then decide which of the given conclusion logically follows from the two statements disregarding commonly known facts.

Statements:

I. All bikes are bicycles.

II. No bicycle is car.

III. All cars are trucks.

Conclusions:

I. All bikes are trucks.

II. Some trucks are bicycles.

- Ans**
- ☒ 1. Both conclusions I and II follow
  - ☒ 2. Only conclusion I follows
  - ☒ 3. Only conclusion II follows
  - ☒ 4. Neither conclusion I nor II follows

Question ID : 630680386215

Option 1 ID : 6306801505572

Option 2 ID : 6306801505570

Option 3 ID : 6306801505571

Option 4 ID : 6306801505573

Status : Answered

Chosen Option : 4

**Q.20** Replace the question mark (?) with the suitable option to complete the series.

BDF, FHJ, JLN, ?

- Ans**
- ☒ 1. MOP
  - ☒ 2. NPR
  - ☒ 3. LNP
  - ☒ 4. NQR

Question ID : 630680384823

Option 1 ID : 6306801500181

Option 2 ID : 6306801500180

Option 3 ID : 6306801500179

Option 4 ID : 6306801500178

Status : Answered

Chosen Option : 2

**Q.21** In the following question two statements numbered I and II are given. There may be cause-and-effect relationship between the two statements. These two statements may be the effect of the same cause or independent causes. These statements may be independent cause without having any relationship. Read both the statements carefully and choose the most appropriate option.

Statements:

I. The prices of fruits in the local market have significantly increased in recent days.

II. Continuous rainfall has caused a situation resembling a flood in many rural areas of the state.

- Ans**
- ☒ 1. If statement I is the cause and statement II is its effect
  - ☒ 2. If statement II is the cause and statement I is its effect
  - ☒ 3. If both the statements I and II are effects of independent causes
  - ☒ 4. If both the statements I and II are independent causes

Question ID : 630680384784

Option 1 ID : 6306801500025

Option 2 ID : 6306801500024

Option 3 ID : 6306801500022

Option 4 ID : 6306801500023

Status : Answered

Chosen Option : 2

Q.22 Select the option that is related to the third word in the same way as the second word is related to the first word.

TREE : LEAF :: HUMAN : ?

- Ans
- ☒ 1. HOUSE
  - ☒ 2. INDUSTRY
  - ☒ 3. FRIDGE
  - ☒ 4. HEART

Question ID : 630680384692

Option 1 ID : 6306801499655

Option 2 ID : 6306801499656

Option 3 ID : 6306801499657

Option 4 ID : 6306801499654

Status : Answered

Chosen Option : 4

Q.23 Find the wrong number in the series:

2, 6, 15, 31, 54, 92, 141

- Ans
- ☒ 1. 92
  - ☒ 2. 54
  - ☒ 3. 31
  - ☒ 4. 141

Question ID : 630680386193

Option 1 ID : 6306801505484

Option 2 ID : 6306801505485

Option 3 ID : 6306801505482

Option 4 ID : 6306801505483

Status : Answered

Chosen Option : 2

Q.24 Find out the wrong term in the given series.

A2, F21, K16, P11, U6

- Ans
- ☒ 1. K16
  - ☒ 2. A2
  - ☒ 3. F21
  - ☒ 4. P11

Question ID : 630680384527

Option 1 ID : 6306801498997

Option 2 ID : 6306801498994

Option 3 ID : 6306801498995

Option 4 ID : 6306801498996

Status : Not Answered

Chosen Option : --

Q.25 How many numbers are there in the given series that are immediately preceded as well as followed by a symbol?

1 3 @ 5 4 \* 7 # 6 \$ 3 1 % 8 5 & 2 % \* 7 @ 4 ! 1

- Ans
- ☒ 1. 1
  - ☒ 2. 2
  - ☒ 3. 3
  - ☒ 4. 5

Question ID : 630680384653

Option 1 ID : 6306801499501

Option 2 ID : 6306801499500

Option 3 ID : 6306801499498

Option 4 ID : 6306801499499

Status : Answered

Chosen Option : 4

Section : General Awareness

Q.1 Who among the following is regarded as the founder of sovereignty in Chandel Dynasty of the medieval period?

- Ans
- ☒ 1. Yashovarman
  - ☒ 2. Hemant Sen
  - ☒ 3. Dhang
  - ☒ 4. Vasudev

Question ID : 630680384319

Option 1 ID : 6306801498162

Option 2 ID : 6306801498164

Option 3 ID : 6306801498163

Option 4 ID : 6306801498165

Status : Answered

Chosen Option : 1

Q.2 Which prestigious literary award in India is given annually to an outstanding work of fiction or non-fiction written in any of the 24 officially recognized Indian languages?

- Ans
- ☒ 1. Pulitzer Prize
  - ☒ 2. Gnanpith Award
  - ☒ 3. Sahitya Akademi Award
  - ☒ 4. Man Booker Prize

Question ID : 630680386416

Option 1 ID : 6306801506377

Option 2 ID : 6306801506375

Option 3 ID : 6306801506374

Option 4 ID : 6306801506376

Status : Answered

Chosen Option : 2

Q.3 Which spacecraft is the first to land on the lunar south pole?

- Ans ☒ 1. Chandrayaan-3  
☒ 2. Chandrayaan-4  
☒ 3. Chandrayaan-2  
☒ 4. Chandrayaan-1

Question ID : 630680384135  
 Option 1 ID : 6306801497432  
 Option 2 ID : 6306801497433  
 Option 3 ID : 6306801497431  
 Option 4 ID : 6306801497430  
 Status : Answered  
 Chosen Option : 1

Q.4 Which of the following concepts in production and costs refers to the increase in total production that results from increasing the amount of one input while keeping all other inputs constant?

- Ans ☒ 1. Total fixed cost  
☒ 2. Marginal product  
☒ 3. Economies of scale  
☒ 4. Law of diminishing returns

Question ID : 630680386439  
 Option 1 ID : 6306801506469  
 Option 2 ID : 6306801506467  
 Option 3 ID : 6306801506466  
 Option 4 ID : 6306801506468  
 Status : Answered  
 Chosen Option : 2

Q.5 Which among the following is a recent initiative taken by the Government of India to foster collaboration and knowledge-sharing between the Indian diaspora scientists and academic institutions in India?

- Ans ☒ 1. SUNIL  
☒ 2. TIDE  
☒ 3. VAIBHAV  
☒ 4. SYST

Question ID : 630680384244  
 Option 1 ID : 6306801497865  
 Option 2 ID : 6306801497862  
 Option 3 ID : 6306801497863  
 Option 4 ID : 6306801497864  
 Status : Answered  
 Chosen Option : 1

**Q.6** The "National Green Tribunal" (NGT) is a specialized judicial body in India dedicated to addressing environmental disputes and matters. In which year was the NGT established?

- Ans**
- ☒ 1. 2020
  - ☒ 2. 2010
  - ☒ 3. 2015
  - ☒ 4. 2005

Question ID : 630680384192  
 Option 1 ID : 6306801497659  
 Option 2 ID : 6306801497660  
 Option 3 ID : 6306801497658  
 Option 4 ID : 6306801497661  
 Status : Answered  
 Chosen Option : 2

**Q.7** Which of the following functions is NOT performed by money in an economy?

- Ans**
- ☒ 1. Store of value
  - ☒ 2. Monetary policy implementation
  - ☒ 3. Unit of account
  - ☒ 4. Medium of exchange

Question ID : 630680386437  
 Option 1 ID : 6306801506459  
 Option 2 ID : 6306801506461  
 Option 3 ID : 6306801506460  
 Option 4 ID : 6306801506458  
 Status : Answered  
 Chosen Option : 2

**Q.8** Who among the following wrote the book named "Indian Culture"?

- Ans**
- ☒ 1. Khushwant Singh
  - ☒ 2. R.K. Narayan
  - ☒ 3. Swami Vivekananda
  - ☒ 4. Vikram Seth

Question ID : 630680384268  
 Option 1 ID : 6306801497961  
 Option 2 ID : 6306801497958  
 Option 3 ID : 6306801497959  
 Option 4 ID : 6306801497960  
 Status : Answered  
 Chosen Option : 4

**Q.9** Which river, known as the "holy river of India," is considered sacred in Hinduism and is an important water source for millions of people?

- Ans**
- ☒ 1. Godavari River
  - ☒ 2. Yamuna River
  - ☒ 3. Krishna River
  - ☒ 4. Ganges River

Question ID : 630680386459  
 Option 1 ID : 6306801506547  
 Option 2 ID : 6306801506546  
 Option 3 ID : 6306801506548  
 Option 4 ID : 6306801506549  
 Status : Answered

**Q.10 Which among the following schemes was launched by the PM of India under the "Beti Bachao, Beti Padhao" campaign?**

- Ans ☒ 1. Pradhan Mantri Jan Dhan Yojana  
☒ 2. Pradhan Mantri Mudra Yojana  
☒ 3. Sukanya Samridhi Yojana  
☒ 4. National Social Assistance Scheme

Question ID : 630680384088  
 Option 1 ID : 6306801497244  
 Option 2 ID : 6306801497242  
 Option 3 ID : 6306801497243  
 Option 4 ID : 6306801497245  
 Status : Answered  
 Chosen Option : 3

**Q.11 On 8 April, 1929, revolutionaries Bhagat Singh and Batukeshwar Dutt threw bombs at the \_\_\_\_\_ at Delhi.**

- Ans ☒ 1. Legislative Council  
☒ 2. Central Legislative Assembly  
☒ 3. State Legislative Assembly  
☒ 4. Parliament

Question ID : 630680384231  
 Option 1 ID : 6306801497814  
 Option 2 ID : 6306801497815  
 Option 3 ID : 6306801497816  
 Option 4 ID : 6306801497817  
 Status : Answered  
 Chosen Option : 2

**Q.12 In which of the following states of India is Zoroastrianism mainly found?**

- Ans ☒ 1. Assam  
☒ 2. Rajasthan  
☒ 3. Punjab  
☒ 4. Maharashtra

Question ID : 630680384318  
 Option 1 ID : 6306801498159  
 Option 2 ID : 6306801498161  
 Option 3 ID : 6306801498160  
 Option 4 ID : 6306801498158  
 Status : Answered  
 Chosen Option : 4

**Q.13 Which festival marks the birth anniversary of Mahatma Gandhi and is celebrated with prayer meetings, tribute ceremonies, and cultural programs across India?**

- Ans ☒ 1. Republic Day  
☒ 2. Independence Day  
☒ 3. Gandhi Jayanti  
☒ 4. Diwali

Question ID : 630680384399  
 Option 1 ID : 6306801498482  
 Option 2 ID : 6306801498483  
 Option 3 ID : 6306801498484  
 Option 4 ID : 6306801498485  
 Status : Answered



Q.14 Name the book written by Chandresh Narayanan.

- Ans ☒ 1. 75 Years of Indian Sports - Game, Guts, Glory
- ☐ 2. A Shot at History: My Obsessive Journey to Olympic Gold
- ☐ 3. Ace Against Odds
- ☐ 4. Unbreakable

Question ID : 630680384152  
 Option 1 ID : 6306801497498  
 Option 2 ID : 6306801497501  
 Option 3 ID : 6306801497499  
 Option 4 ID : 6306801497500  
 Status : Answered  
 Chosen Option : 2

Q.15 Who headed the Supreme Court bench that directed the government to take immediate steps on the Manipur case, in July 2023?

- Ans ☐ 1. Chief Justice NV Ramana
- ☐ 2. Justice Uday Umesh Lalit
- ☒ 3. Chief Justice DY Chandrachud
- ☐ 4. Justice Rohinton Fali Nariman

Question ID : 630680384144  
 Option 1 ID : 6306801497466  
 Option 2 ID : 6306801497469  
 Option 3 ID : 6306801497467  
 Option 4 ID : 6306801497468  
 Status : Answered  
 Chosen Option : 3

Q.16 Which of the following is the largest Wildlife Sanctuary of India?

- Ans ☐ 1. Dihing Patkai Wildlife Sanctuary
- ☐ 2. Bhairamgarh Wildlife Sanctuary
- ☒ 3. Ranthambore National Park
- ☐ 4. Pushpagiri Wildlife Sanctuary

Question ID : 630680384305  
 Option 1 ID : 6306801498108  
 Option 2 ID : 6306801498107  
 Option 3 ID : 6306801498106  
 Option 4 ID : 6306801498109  
 Status : Answered  
 Chosen Option : 1

Q.17 Which is the most populated neighbouring country of India?

- Ans ☐ 1. Nepal
- ☐ 2. Afghanistan
- ☐ 3. Pakistan
- ☒ 4. China

Question ID : 630680384096  
 Option 1 ID : 6306801497277  
 Option 2 ID : 6306801497276  
 Option 3 ID : 6306801497274  
 Option 4 ID : 6306801497275  
 Status : Answered  
 Chosen Option : 4

Q.18 Which nation has won ICC Men's Cricket World Cup Qualifier in July 2023?

- Ans ☒ 1. Sri Lanka  
☒ 2. Scotland  
☒ 3. West Indies  
☒ 4. Netherland

Question ID : 630680386414  
 Option 1 ID : 6306801506366  
 Option 2 ID : 6306801506369  
 Option 3 ID : 6306801506368  
 Option 4 ID : 6306801506367  
 Status : Answered  
 Chosen Option : 4

Q.19 Who among the following is known as the Man of Peace?

- Ans ☒ 1. Mohammad Ali Jinnah  
☒ 2. Mohandas Karamchand Gandhi  
☒ 3. Lal Bahadur Shastri  
☒ 4. Vallabhbhai Patel

Question ID : 630680384329  
 Option 1 ID : 6306801498203  
 Option 2 ID : 6306801498205  
 Option 3 ID : 6306801498204  
 Option 4 ID : 6306801498202  
 Status : Answered  
 Chosen Option : 2

Q.20 Who among the following founded the Dharma Sabha?

- Ans ☒ 1. Swami Vivekananda  
☒ 2. David Hare  
☒ 3. Raja Ram Mohan Roy  
☒ 4. Radhakanta Deb

Question ID : 630680384130  
 Option 1 ID : 6306801497410  
 Option 2 ID : 6306801497412  
 Option 3 ID : 6306801497413  
 Option 4 ID : 6306801497411  
 Status : Answered  
 Chosen Option : 4

Q.21 How many different languages are spoken in the India?

- Ans ☒ 1. 24  
☒ 2. 22  
☒ 3. 25  
☒ 4. 21

Question ID : 630680386432  
 Option 1 ID : 6306801506440  
 Option 2 ID : 6306801506438  
 Option 3 ID : 6306801506441  
 Option 4 ID : 6306801506439  
 Status : Answered  
 Chosen Option : 3

Q.22 Which national park in India is known for its population of Asiatic lions?

- Ans
- ☒ 1. Kanha National Park
  - ☒ 2. Bandhavgarh National Park
  - ☒ 3. Gir Forest National Park
  - ☒ 4. Ranthambore National Park

Question ID : 630680384427  
 Option 1 ID : 6306801498594  
 Option 2 ID : 6306801498595  
 Option 3 ID : 6306801498597  
 Option 4 ID : 6306801498596  
 Status : Answered  
 Chosen Option : 3

Q.23 "Eid al-Fitr," also known as the Festival of Breaking the Fast, is a significant religious festival celebrated by Muslims. What is the name of the holy month that precedes Eid al-Fitr?

- Ans
- ☒ 1. Muharram
  - ☒ 2. Dhul-Hijjah
  - ☒ 3. Shawwal
  - ☒ 4. Ramadan

Question ID : 630680384174  
 Option 1 ID : 6306801497587  
 Option 2 ID : 6306801497589  
 Option 3 ID : 6306801497588  
 Option 4 ID : 6306801497586  
 Status : Answered  
 Chosen Option : 4

Q.24 The "Vijayanagara Empire," founded in the 14th century, was a significant South Indian kingdom known for its grand architecture and cultural patronage. Which ruler is often considered the greatest monarch of the Vijayanagara Empire?

- Ans
- ☒ 1. Krishnadevaraya
  - ☒ 2. Devaraya II
  - ☒ 3. Harihara II
  - ☒ 4. Bukka I

Question ID : 630680384221  
 Option 1 ID : 6306801497774  
 Option 2 ID : 6306801497776  
 Option 3 ID : 6306801497777  
 Option 4 ID : 6306801497775  
 Status : Answered  
 Chosen Option : 1

**Q.25** Name the scheme under which Chief Minister Ashok Gehlot transferred Rs 60 crore directly to the accounts of 14 lakh people.

- Ans**
- ☒ 1. Atal Pension Yojana
  - ☒ 2. Pradhan Mantri Jan Dhan Yojana
  - ☒ 3. Ayushman Bharat - Pradhan Mantri Jan Arogya Yojana
  - ☒ 4. Indira Gandhi cooking gas cylinder scheme

Question ID : **630680384147**  
 Option 1 ID : **6306801497480**  
 Option 2 ID : **6306801497478**  
 Option 3 ID : **6306801497481**  
 Option 4 ID : **6306801497479**  
 Status : **Answered**  
 Chosen Option : **4**

## Section : Quantitative Aptitude

**Q.1** The average sales per day for six days of a week in a clothing store is ₹13560. The average sale of Wednesday to Sunday is ₹12539 and the store is closed on Monday. The sales on Tuesday is \_\_\_\_\_.

- Ans**
- ☒ 1. ₹18556
  - ☒ 2. ₹18685
  - ☒ 3. ₹18666
  - ☒ 4. ₹18665

Question ID : **630680385780**  
 Option 1 ID : **6306801503838**  
 Option 2 ID : **6306801503840**  
 Option 3 ID : **6306801503841**  
 Option 4 ID : **6306801503839**  
 Status : **Answered**  
 Chosen Option : **4**

**Q.2** Out of his total income, Ramandeep spends 18% on house rent and 70% of the rest on household expenses. If he saves ₹2460 what is his total income (in rupees)?

- Ans**
- ☒ 1. ₹10000
  - ☒ 2. ₹10120
  - ☒ 3. ₹98564
  - ☒ 4. ₹11256

Question ID : **630680385820**  
 Option 1 ID : **6306801503999**  
 Option 2 ID : **6306801504000**  
 Option 3 ID : **6306801503998**  
 Option 4 ID : **6306801504001**  
 Status : **Answered**  
 Chosen Option : **4**

Q.3 Find the value of  $a^3 + b^3 + c^3 - 3abc$  when  $a = 456$ ,  $b = 457$ ,  $c = 458$

- Ans
- ☒ 1. 3784
  - ☒ 2. 4113
  - ☒ 3. 2136
  - ☒ 4. 3166

Question ID : 630680385810  
 Option 1 ID : 6306801503960  
 Option 2 ID : 6306801503961  
 Option 3 ID : 6306801503958  
 Option 4 ID : 6306801503959  
 Status : Answered  
 Chosen Option : 4

Q.4 What will be remainder when  $(56^{45} + 56)$  is divided by 57?

- Ans
- ☒ 1. 1
  - ☒ 2. 0
  - ☒ 3. 57
  - ☒ 4. 55

Question ID : 630680385815  
 Option 1 ID : 6306801503979  
 Option 2 ID : 6306801503978  
 Option 3 ID : 6306801503981  
 Option 4 ID : 6306801503980  
 Status : Answered  
 Chosen Option : 2

Q.5 If  $m + 2t = 17$  and  $m^3 + 8t^3 = 323$ , then  $mt$  is equal to:

- Ans
- ☒ 1. 49
  - ☒ 2. 32
  - ☒ 3. 26
  - ☒ 4. 45

Question ID : 630680385770  
 Option 1 ID : 6306801503801  
 Option 2 ID : 6306801503799  
 Option 3 ID : 6306801503798  
 Option 4 ID : 6306801503800  
 Status : Answered  
 Chosen Option : 4

**Q.6** Siddharth marks his goods at 24% above its cost price and allows a discount of 14% for purchase in cash. What profit per cent does he make?

- Ans** ☒ 1. 6.64%  
☒ 2. 8.56%  
☒ 3. 14%  
☒ 4. 24%

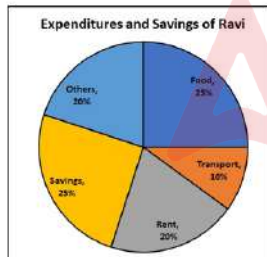
Question ID : 630680385821  
 Option 1 ID : 6306801504002  
 Option 2 ID : 6306801504003  
 Option 3 ID : 6306801504004  
 Option 4 ID : 6306801504005  
 Status : Answered  
 Chosen Option : 1

**Q.7** 500 people living in a camp have enough food for 20 days. If after 11 days, 50 men leave the camp, how long did the food last for in total?

- Ans** ☒ 1. 21 days  
☒ 2. 22 days  
☒ 3. 25 days  
☒ 4. 20 days

Question ID : 630680385204  
 Option 1 ID : 6306801501704  
 Option 2 ID : 6306801501703  
 Option 3 ID : 6306801501705  
 Option 4 ID : 6306801501702  
 Status : Answered  
 Chosen Option : 4

**Q.8** The following pie-chart represents the various monthly expenditures as well as savings of Ravi. If Ravi earns ₹50,000, then how much he spends on Food, Transport and Others?



- Ans** ☒ 1. ₹27500  
☒ 2. ₹27550  
☒ 3. ₹27450  
☒ 4. ₹27200

Question ID : 630680385786  
 Option 1 ID : 6306801503864  
 Option 2 ID : 6306801503865  
 Option 3 ID : 6306801503862  
 Option 4 ID : 6306801503863  
 Status : Answered  
 Chosen Option : 1

**Q.9** The perimeter of the top of a rectangle slab is 32 m. The area of the slab is 60 m<sup>2</sup>. What is the length of the diagonal?

- Ans
- ☒ 1.  $\sqrt{115}$  m
  - ☒ 2.  $\sqrt{136}$  m
  - ☒ 3. 5 m
  - ☒ 4.  $\sqrt{150}$  m

Question ID : 630680385794

Option 1 ID : 6306801503894

Option 2 ID : 6306801503896

Option 3 ID : 6306801503895

Option 4 ID : 6306801503897

Status : Answered

Chosen Option : 2

**Q.10** After getting two successive discounts Vishal got a earphone at ₹500 whose marked price is ₹1000. If the second discount is 20% find the first discount.

- Ans
- ☒ 1. 25.5%
  - ☒ 2. 32%
  - ☒ 3. 45%
  - ☒ 4. 37.5%

Question ID : 630680385839

Option 1 ID : 6306801504074

Option 2 ID : 6306801504076

Option 3 ID : 6306801504077

Option 4 ID : 6306801504075

Status : Answered

Chosen Option : 4

**Q.11** The radii of two cylinders are in ratio 6:5 and their curved surface areas are in the ratio 10:7. What is the ratio of their volumes?

- Ans
- ☒ 1. 13:11
  - ☒ 2. 12:7
  - ☒ 3. 10:9
  - ☒ 4. 14:11

Question ID : 630680385801

Option 1 ID : 6306801503924

Option 2 ID : 6306801503925

Option 3 ID : 6306801503923

Option 4 ID : 6306801503922

Status : Answered

Chosen Option : 2



**Q.12** If  $\Delta UVW \cong \Delta MNO$  and  $UV = 9.1$  cm and  $MN = 6.5$  cm. If perimeter of  $\Delta MNO$  is 25 cm, then perimeter of  $\Delta UVW$  is \_\_\_\_\_.

- Ans**
- ☒ 1. 23 cm
  - ☒ 2. 35 cm
  - ☒ 3. 45 cm
  - ☒ 4. 55 cm

Question ID : 630680385017

Option 1 ID : 6306801500954

Option 2 ID : 6306801500955

Option 3 ID : 6306801500956

Option 4 ID : 6306801500957

Status : Answered

Chosen Option : 2

**Q.13** Laxman loses ₹20 by selling some oranges at the rate of ₹3 per orange and gains ₹30, if he sells them at ₹3.25 per orange. The number of oranges sold by him ?

- Ans**
- ☒ 1. 100
  - ☒ 2. 200
  - ☒ 3. 125
  - ☒ 4. 150

Question ID : 630680385841

Option 1 ID : 6306801504082

Option 2 ID : 6306801504083

Option 3 ID : 6306801504085

Option 4 ID : 6306801504084

Status : Answered

Chosen Option : 2

**Q.14** The average age of Monica and Sunita is 28 years. If Monisha's age is added the average of their ages becomes 25 years. What is the age of Monisha ?

- Ans**
- ☒ 1. 19 years
  - ☒ 2. 17 years
  - ☒ 3. 24 years
  - ☒ 4. 23 years

Question ID : 630680385781

Option 1 ID : 6306801503843

Option 2 ID : 6306801503842

Option 3 ID : 6306801503845

Option 4 ID : 6306801503844

Status : Answered

Chosen Option : 1

Q.15 If  $l = m + n$  then  $l^3 - m^3 - n^3$  is \_\_\_\_\_.

Ans ☒ 1.  $3lmn$

☐ 2. 1

☐ 3. 0

☐ 4.  $-3lmn$

Question ID : 630680385768

Option 1 ID : 6306801503791

Option 2 ID : 6306801503793

Option 3 ID : 6306801503790

Option 4 ID : 6306801503792

Status : Answered

Chosen Option : 1

Q.16 Find the value of :  $\tan \theta + \cot \theta = 7$  then  $\tan^2 \theta + \cot^2 \theta = ?$

Ans ☐ 1. 46

☐ 2. 45

☒ 3. 47

☐ 4. 48

Question ID : 630680385047

Option 1 ID : 6306801501075

Option 2 ID : 6306801501074

Option 3 ID : 6306801501076

Option 4 ID : 6306801501077

Status : Answered

Chosen Option : 2

Q.17 If  $m = \frac{1}{(\sqrt{3}+2)}$ , find the value of  $m^2 + (\frac{1}{m^2})$ .

Ans ☐ 1. 18

☐ 2.  $16 + 2\sqrt{3}$

☐ 3.  $12\sqrt{3}$

☒ 4. 14

Question ID : 630680385124

Option 1 ID : 6306801501384

Option 2 ID : 6306801501383

Option 3 ID : 6306801501382

Option 4 ID : 6306801501385

Status : Answered

Chosen Option : 2

**Q.18** Raman has certain number of coins of different denominations. If he has the ratio of the number of ₹1 coins to ₹2 coins is 7:9, respectively and the ratio of number of ₹2 coins to ₹5 coins is 9:8 respectively. Find the total value of the ₹5 coins, if the total value of the ₹1 coins that Raman has is ₹28.

- Ans**
- ☒ 1. ₹140
  - ☒ 2. ₹160
  - ☒ 3. ₹125
  - ☒ 4. ₹180

Question ID : 630680385849

Option 1 ID : 6306801504115

Option 2 ID : 6306801504116

Option 3 ID : 6306801504114

Option 4 ID : 6306801504117

Status : Answered

Chosen Option : 2

**Q.19** Arvind, Bob, Carmel invest ₹84,000 for a business. Arvind invests ₹6000 more than Bob and Bob invests ₹7500 more than Carmel. Out of a total profit of ₹42000, Arvind receives:

- Ans**
- ☒ 1. ₹19560
  - ☒ 2. ₹17250
  - ☒ 3. ₹18480
  - ☒ 4. ₹17150

Question ID : 630680385846

Option 1 ID : 6306801504103

Option 2 ID : 6306801504104

Option 3 ID : 6306801504105

Option 4 ID : 6306801504102

Status : Answered

Chosen Option : 2

**Q.20** Find the area of the sector if the radius is 3.5 cm and with an angle of  $120^\circ$ .

- Ans**
- ☒ 1.  $13.74 \text{ cm}^2$
  - ☒ 2.  $14.85 \text{ cm}^2$
  - ☒ 3.  $12.83 \text{ cm}^2$
  - ☒ 4.  $7.98 \text{ cm}^2$

Question ID : 630680384908

Option 1 ID : 6306801500520

Option 2 ID : 6306801500519

Option 3 ID : 6306801500521

Option 4 ID : 6306801500518

Status : Answered

Chosen Option : 2

**Q.21** A cylindrical container of height 80 cm has base diameter  $30\sqrt{2}$  cm. If  $d$  is the diameter of a spherical vessel of equal volume, then what is the diameter of the spherical vessel?

- Ans
- ☐ 1. 50 cm
  - ☒ 2. 60 cm
  - ☐ 3. 45 cm
  - ☐ 4. 54 cm

Question ID : 630680385803

Option 1 ID : 6306801503933

Option 2 ID : 6306801503930

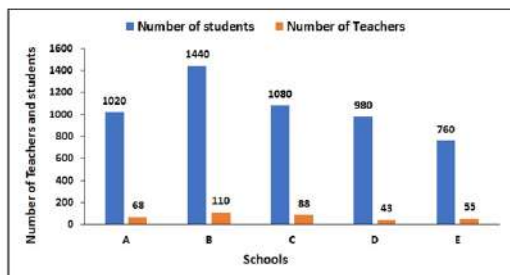
Option 3 ID : 6306801503931

Option 4 ID : 6306801503932

Status : Answered

Chosen Option : 2

**Q.22** The bar graph shows the number of teachers and students in five different schools. The total number of teachers in all schools is approximately what % of the average number of students?



- Ans
- ☐ 1. 31.7%
  - ☐ 2. 29.3%
  - ☐ 3. 39.6%
  - ☒ 4. 34.5%

Question ID : 630680385139

Option 1 ID : 6306801501443

Option 2 ID : 6306801501442

Option 3 ID : 6306801501445

Option 4 ID : 6306801501444

Status : Answered

Chosen Option : 2

**Q.23** Two parallel lines AB and CD are intersected by a transversal MN. If  $x$  and  $y$  are the interior angles on the same side of the transversal, and  $x = 75^\circ$ , find the value of  $y$ .

- Ans
- ☐ 1.  $115^\circ$
  - ☐ 2.  $15^\circ$
  - ☒ 3.  $105^\circ$
  - ☐ 4.  $30^\circ$

Question ID : 630680385176

Option 1 ID : 6306801501591

Option 2 ID : 6306801501590

Option 3 ID : 6306801501592

Option 4 ID : 6306801501593

Status : Answered

Chosen Option : 2

**Q.24** Find the percentage increase in the surface area of a cube when each side is increased four times.

- Ans**
- ☒ 1. 1000%
  - ☒ 2. 150%
  - ☒ 3. 500%
  - ☒ 4. 1500%

Question ID : 630680385808  
 Option 1 ID : 6306801503952  
 Option 2 ID : 6306801503950  
 Option 3 ID : 6306801503951  
 Option 4 ID : 6306801503953  
 Status : Answered  
 Chosen Option : 2

**Q.25** 12 pumps working 6 hours a day can empty a completely filled reservoir in 15 days. How many such pumps working 10 hours a day will empty the same reservoir in 6 days ?

- Ans**
- ☒ 1. 18 days
  - ☒ 2. 20 days
  - ☒ 3. 15 days
  - ☒ 4. 10 days

Question ID : 630680385854  
 Option 1 ID : 6306801504136  
 Option 2 ID : 6306801504137  
 Option 3 ID : 6306801504135  
 Option 4 ID : 6306801504134  
 Status : Answered  
 Chosen Option : 1

## Section : English Comprehension

**Q.1** Select the most appropriate synonym of the given word.  
 Capable

- Ans**
- ☒ 1. Agile
  - ☒ 2. Profane
  - ☒ 3. Competent
  - ☒ 4. Vicinity

Question ID : 630680385416  
 Option 1 ID : 6306801502497  
 Option 2 ID : 6306801502495  
 Option 3 ID : 6306801502494  
 Option 4 ID : 6306801502496  
 Status : Answered  
 Chosen Option : 3

**Q.2** Arrange the following sentences in the correct order to form a coherent paragraph:  
Several universities and research institutions collaborated on this ambitious project.  
A. The research paper presents a groundbreaking discovery in the field of medicine.  
B. The team of scientists worked tirelessly for years to conduct experiments and analyse data.  
C. This new finding has the potential to revolutionize how certain diseases are treated.  
D. The peer-reviewed journal published the research paper, acknowledging its significance.  
The lead researcher expressed gratitude to the team and highlighted the importance of teamwork.

- Ans**
- ☒ 1. BDCA
  - ☒ 2. ABCD
  - ☒ 3. BACD
  - ☒ 4. ABDC

Question ID : 630680385475  
Option 1 ID : 6306801502716  
Option 2 ID : 6306801502715  
Option 3 ID : 6306801502714  
Option 4 ID : 6306801502717  
Status : Answered  
Chosen Option : 3

**Comprehension:**

Read the given passage carefully and select the most appropriate answer to the questions that follow.

In the autumn I returned to my Southern home with a heart full of joyous memories. As I recall that visit North I am filled with wonder at the richness and variety of the experiences that cluster about it. It seems to have been the beginning of everything. The treasures of a new, beautiful world were laid at my feet, and I took in pleasure and information at every turn. I lived myself into all things. I was never still a moment; my life was as full of motion as those little insects that crowd a whole existence into one brief day. I met many people who talked with me by spelling into my hand, and thought in joyous sympathy leaped up to meet thought, and behold, a miracle had been wrought! The barren places between my mind and the minds of others blossomed like the rose.

**SubQuestion No : 3**

**Q.3** Identify the correct inference that can be drawn from the passage.

- Ans**
- ☒ 1. The writer describes his visit to North and how rich and active his life was there.
  - ☒ 2. The writer felt lethargic during his visit to the North.
  - ☒ 3. The writer did not like his life back in his southern home.
  - ☒ 4. The writer felt like an insect, always working for survival.

Question ID : 630680385668  
Option 1 ID : 6306801503423  
Option 2 ID : 6306801503425  
Option 3 ID : 6306801503422  
Option 4 ID : 6306801503424  
Status : Answered  
Chosen Option : 1

**Comprehension:**

Read the given passage carefully and select the most appropriate answer to the questions that follow.

In the autumn I returned to my Southern home with a heart full of joyous memories. As I recall that visit North I am filled with wonder at the richness and variety of the experiences that cluster about it. It seems to have been the beginning of everything. The treasures of a new, beautiful world were laid at my feet, and I took in pleasure and information at every turn. I lived myself into all things. I was never still a moment; my life was as full of motion as those little insects that crowd a whole existence into one brief day. I met many people who talked with me by spelling into my hand, and thought in joyous sympathy leaped up to meet thought, and behold, a miracle had been wrought! The barren places between my mind and the minds of others blossomed like the rose.

**SubQuestion No : 4**

**Q.4 From the given options, identify the suitable title for the passage.**

- Ans ☒ 1. One Brief Day  
☒ 2. The North Visit  
☒ 3. The Insects  
☒ 4. Blossom like Rose

Question ID : 630680385666

Option 1 ID : 6306801503417

Option 2 ID : 6306801503415

Option 3 ID : 6306801503414

Option 4 ID : 6306801503416

Status : Answered

Chosen Option : 2

**Comprehension:**

Read the given passage carefully and select the most appropriate answer to the questions that follow.

In the autumn I returned to my Southern home with a heart full of joyous memories. As I recall that visit North I am filled with wonder at the richness and variety of the experiences that cluster about it. It seems to have been the beginning of everything. The treasures of a new, beautiful world were laid at my feet, and I took in pleasure and information at every turn. I lived myself into all things. I was never still a moment; my life was as full of motion as those little insects that crowd a whole existence into one brief day. I met many people who talked with me by spelling into my hand, and thought in joyous sympathy leaped up to meet thought, and behold, a miracle had been wrought! The barren places between my mind and the minds of others blossomed like the rose.

**SubQuestion No : 5**

**Q.5 Select the options the most appropriate meaning of the bracketed word given in the sentence below.**

'...I was never still a moment; my life was as full of (motion) as those little insects...'

- Ans ☒ 1. indifference  
☒ 2. inertia  
☒ 3. cessation  
☒ 4. dynamic

Question ID : 630680385669

Option 1 ID : 6306801503426

Option 2 ID : 6306801503429

Option 3 ID : 6306801503428

Option 4 ID : 6306801503427

Status : Answered

Chosen Option : 2



### Comprehension:

Read the given passage carefully and select the most appropriate answer to the questions that follow.

In the autumn I returned to my Southern home with a heart full of joyous memories. As I recall that visit North I am filled with wonder at the richness and variety of the experiences that cluster about it. It seems to have been the beginning of everything. The treasures of a new, beautiful world were laid at my feet, and I took in pleasure and information at every turn. I lived myself into all things. I was never still a moment; my life was as full of motion as those little insects that crowd a whole existence into one brief day. I met many people who talked with me by spelling into my hand, and thought in joyous sympathy leaped up to meet thought, and behold, a miracle had been wrought! The barren places between my mind and the minds of others blossomed like the rose.

#### SubQuestion No : 6

**Q.6 Which of the following statements is not true with respect to the passage.**

- Ans
- ☒ 1. The writer returned to his southern home with a heart full of joyous memories.
  - ☒ 2. The writer met many people during his visit to the North.
  - ☒ 3. It was almost like a miracle.
  - ☒ 4. The writer's life had become too dull during the visit.

Question ID : 630680385667  
Option 1 ID : 6306801503421  
Option 2 ID : 6306801503418  
Option 3 ID : 6306801503420  
Option 4 ID : 6306801503419  
Status : Answered  
Chosen Option : 4

**Q.7 Choose the word that is most nearly opposite in meaning to the given word.**  
**Pernicious**

- Ans
- ☒ 1. Beneficial
  - ☒ 2. Destructive
  - ☒ 3. Brutal
  - ☒ 4. Harmful

Question ID : 630680385521  
Option 1 ID : 6306801502878  
Option 2 ID : 6306801502881  
Option 3 ID : 6306801502880  
Option 4 ID : 6306801502879  
Status : Answered  
Chosen Option : 1

**Q.8 Select the word from the options which is the same in meaning to the bracketed word given in the sentence below.**  
**Today, Rollins has largely (abandoned) his pursuit of the bonus payments from Medicaid.**

- Ans
- ☒ 1. grabbed
  - ☒ 2. left
  - ☒ 3. doubt
  - ☒ 4. devoted

Question ID : 630680385417  
Option 1 ID : 6306801502498  
Option 2 ID : 6306801502499  
Option 3 ID : 6306801502501  
Option 4 ID : 6306801502500  
Status : Answered  
Chosen Option : 2

Comprehension:

Based on the following cloze passage answer the question given below:

The annual school fair was an (1) \_\_\_\_\_ event that brought together students, teachers, and parents in a day filled with fun and excitement. The fairgrounds were adorned with colourful decorations, and the air was filled with the scent of (2) \_\_\_\_\_ food from various stalls. Children's laughter and joyful screams echoed through the air as they enjoyed thrilling rides and games. The highlight of the event was the talent show, where students showcased their (3) \_\_\_\_\_ skills, leaving the audience amazed and delighted.

SubQuestion No : 9

Q.9 Fill in the blank (3) with the appropriate word from the options below:

- Ans 

1. academic

2. artistic

3. athletic

4. musical
- Question ID : 630680385492

Option 1 ID : 6306801502766

Option 2 ID : 6306801502767

Option 3 ID : 6306801502768

Option 4 ID : 6306801502769

Status : Answered

Chosen Option : 2
- Comprehension:
- Based on the following cloze passage answer the question given below:
- The annual school fair was an (1) \_\_\_\_\_ event that brought together students, teachers, and parents in a day filled with fun and excitement. The fairgrounds were adorned with colourful decorations, and the air was filled with the scent of (2) \_\_\_\_\_ food from various stalls. Children's laughter and joyful screams echoed through the air as they enjoyed thrilling rides and games. The highlight of the event was the talent show, where students showcased their (3) \_\_\_\_\_ skills, leaving the audience amazed and delighted.
- SubQuestion No : 10
- Q.10 Fill in the blank (1) with the appropriate word from the options below:
- Ans 

1. extraordinary

2. dull

3. mundane

4. ordinary

Question ID : 630680385490

Option 1 ID : 6306801502759

Option 2 ID : 6306801502761

Option 3 ID : 6306801502760

Option 4 ID : 6306801502758

Status : Answered

Chosen Option : 1

### Comprehension:

Based on the following cloze passage answer the question given below:

The annual school fair was an (1) \_\_\_\_\_ event that brought together students, teachers, and parents in a day filled with fun and excitement. The fairgrounds were adorned with colourful decorations, and the air was filled with the scent of (2) \_\_\_\_\_ food from various stalls. Children's laughter and joyful screams echoed through the air as they enjoyed thrilling rides and games. The highlight of the event was the talent show, where students showcased their (3) \_\_\_\_\_ skills, leaving the audience amazed and delighted.

#### SubQuestion No : 11

Q.11 Fill in the blank (2) with the appropriate word from the options below:

- Ans ☒ 1. appealing  
☒ 2. delicious  
☒ 3. repulsive  
☒ 4. bland

Question ID : 630680385491

Option 1 ID : 6306801502765

Option 2 ID : 6306801502762

Option 3 ID : 6306801502763

Option 4 ID : 6306801502764

Status : Answered

Chosen Option : 2

Q.12 Fill in the blank with the most appropriate option.

Instinct made him \_\_\_\_\_ the accelerator with the double purpose of overtaking Daisy and leaving Wilson behind.

- Ans ☒ 1. pull up  
☒ 2. move down  
☒ 3. step on  
☒ 4. push down

Question ID : 630680385339

Option 1 ID : 6306801502207

Option 2 ID : 6306801502209

Option 3 ID : 6306801502208

Option 4 ID : 6306801502206

Status : Answered

Chosen Option : 1

Q.13 Select the word segment that substitutes (replaces) the bracketed word segment correctly and completes the sentence meaningfully. Select the option 'no correction required' if the sentence is correct as given.

(He throws himself heart plus soul) into the service of this great cause, and forgot to think about his book.

- Ans ☒ 1. He has threw himself heart and soul  
☒ 2. No correction required.  
☒ 3. He have thrown himself heart and soul  
☒ 4. He threw himself heart and soul

Question ID : 630680385631

Option 1 ID : 6306801503284

Option 2 ID : 6306801503285

Option 3 ID : 6306801503283

Option 4 ID : 6306801503282

Status : Answered

Chosen Option : 4

Q.14 Select the most appropriate word for the given phrase.  
One who hates marriage.

- Ans ☒ 1. Misogamist  
☐ 2. Misogynist  
☐ 3. Sycophant  
☐ 4. Androphile

Question ID : 630680385632  
Option 1 ID : 6306801503289  
Option 2 ID : 6306801503286  
Option 3 ID : 6306801503288  
Option 4 ID : 6306801503287  
Status : Answered  
Chosen Option : 3

Q.15 Select the most appropriate missing sentence to complete the paragraph meaningfully.  
The next day they journeyed quietly into Nottingham, taking only a few retainers with them. The clerk chose to stay at the hall, fearing, as he said, that his eyes would be offended with the vanity of the town. When they had come to the meadows wherein the Fair was held, Robin was \_\_\_\_\_.

- Ans ☐ 1. discussed his misfortune at some length.  
☐ 2. rushed out-of-doors to feel the first few tiny flakes descending.  
☒ 3. overcome with joy at the sight of the wonderments before him.  
☐ 4. was setting and the lattice-work shadows were fading into fuzzy nothingness.

Question ID : 630680385589  
Option 1 ID : 6306801503137  
Option 2 ID : 6306801503136  
Option 3 ID : 6306801503134  
Option 4 ID : 6306801503135  
Status : Answered  
Chosen Option : 3

Q.16 Select the most appropriate missing sentence to complete the paragraph meaningfully.  
My affection for my guest increases every day. He excites at once my admiration and my pity to an astonishing degree. How can I see so noble a creature destroyed by misery without feeling the most poignant grief? He is so gentle, yet so wise; his mind is so cultivated, and when he speaks, although his words \_\_\_\_\_.

- Ans ☒ 1. are culled with the choicest art, yet they flow with rapidity and unparalleled eloquence.  
☐ 2. had a trenchant way of cutting our bread-and butter for us, that never varied.  
☐ 3. days passed in the same manner before he was able to speak.  
☐ 4. are new source of trouble sprang from the not anticipated misfortune of Isabella Linton.

Question ID : 630680385353  
Option 1 ID : 6306801502264  
Option 2 ID : 6306801502263  
Option 3 ID : 6306801502265  
Option 4 ID : 6306801502262  
Status : Answered  
Chosen Option : 1

Q.17 Determine the meaning of the underlined idiom from the statement given below.  
When John saw the price of the new high-end smartphone, he knew he couldn't afford it as it would cost him an arm and a leg.

- Ans
- ☒ 1. To give away something valuable for free
  - ☒ 2. To save money for a future purchase
  - ☒ 3. To spend a lot of money on something
  - ☒ 4. To buy something at a bargain price

Question ID : 630680385517  
Option 1 ID : 6306801502864  
Option 2 ID : 6306801502865  
Option 3 ID : 6306801502863  
Option 4 ID : 6306801502862  
Status : Answered  
Chosen Option : 3

Q.18 Fill in the blank with the appropriate conjunction:  
The team practiced diligently for weeks, \_\_\_\_\_ they were determined to win the championship.

- Ans
- ☒ 1. therefore
  - ☒ 2. nevertheless
  - ☒ 3. albeit
  - ☒ 4. notwithstanding

Question ID : 630680385449  
Option 1 ID : 6306801502611  
Option 2 ID : 6306801502610  
Option 3 ID : 6306801502613  
Option 4 ID : 6306801502612  
Status : Answered  
Chosen Option : 1

Q.19 Fill in the blank with the most appropriate option.  
They are all jealous of him, \_\_\_\_\_ they?

- Ans
- ☒ 1. ain't
  - ☒ 2. aren't
  - ☒ 3. can't
  - ☒ 4. haven't

Question ID : 630680385579  
Option 1 ID : 6306801503094  
Option 2 ID : 6306801503096  
Option 3 ID : 6306801503095  
Option 4 ID : 6306801503097  
Status : Answered  
Chosen Option : 2

**Q.20** Select the most appropriate missing sentence to complete the paragraph meaningfully.  
And so, it was indeed: she was now only ten inches high, and her face brightened up at the thought that she was now the right size for going through the little door into that lovely garden. First, however, \_\_\_\_\_.

- Ans** ☒ 1. he sat within earshot, milking the cows by the light of a lantern.  
☒ 2. she waited for a few minutes to see if she was going to shrink any further.  
☒ 3. Mr and Mrs Bucket and little Charlie Bucket slept in the other room, upon mattresses on the floor.  
☒ 4. in the summertime, this wasn't too bad, but in the winter, freezing cold draughts blew across the floor.

Question ID : 630680385347

Option 1 ID : 6306801502240

Option 2 ID : 6306801502241

Option 3 ID : 6306801502239

Option 4 ID : 6306801502238

Status : Answered

Chosen Option : 2

**Q.21** Select the word segment that substitutes (replaces) the bracketed word segment correctly and completes the sentence meaningfully. Select the option 'no correction required' if the sentence is correct as given.  
You have (make me wretched beneath) expression.

- Ans** ☒ 1. made me wretched below  
☒ 2. made me wretched beyond  
☒ 3. No correction required.  
☒ 4. make me wretched across

Question ID : 630680385621

Option 1 ID : 6306801503244

Option 2 ID : 6306801503242

Option 3 ID : 6306801503245

Option 4 ID : 6306801503243

Status : Answered

Chosen Option : 2

**Q.22** Select the most appropriate word for the given phrase.  
Government by two agencies.

- Ans** ☒ 1. Democracy  
☒ 2. Diarchy  
☒ 3. Theocracy  
☒ 4. Anarchy

Question ID : 630680385630

Option 1 ID : 6306801503281

Option 2 ID : 6306801503280

Option 3 ID : 6306801503279

Option 4 ID : 6306801503278

Status : Answered

Chosen Option : 2

Q.23 Arrange the following sentences in the correct order to form a coherent paragraph:  
They had been planning this challenging expedition for months.  
A. The hikers marvelled at the breathtaking views of the surrounding mountains and valleys.  
B. After several hours of trekking, they reached the summit of the highest peak.  
C. The trail led them through dense forests, across gushing rivers, and over rocky terrain.  
D. Each step brought them closer to their goal, and their determination never wavered.  
The experience was both physically demanding and emotionally rewarding.

Ans ☒ 1. CDAB

☒ 2. ABCD

☒ 3. CDBA

☒ 4. ABDC

Question ID : 630680385471

Option 1 ID : 6306801502700

Option 2 ID : 6306801502699

Option 3 ID : 6306801502698

Option 4 ID : 6306801502701

Status : Answered

Chosen Option : 3

Q.24 Choose the word that is the antonym of the bracketed word in the sentence:  
The new policy aims to promote ecological sustainability and (reduce) environmental impact.

Ans ☒ 1. Enhance

☒ 2. Amplify

☒ 3. Illuminate

☒ 4. Diminish

Question ID : 630680385526

Option 1 ID : 6306801502898

Option 2 ID : 6306801502900

Option 3 ID : 6306801502901

Option 4 ID : 6306801502899

Status : Answered

Chosen Option : 1

Q.25 From the options select the most suitable proverb for the sentence given below.  
The cake hasn't baked properly it is because the oven wasn't working properly.

Ans ☒ 1. Action speaks louder than words.

☒ 2. A bad workman always blames his tools.

☒ 3. A bird in hand is worth two in the bush.

☒ 4. A fool and his money are soon parted.

Question ID : 630680385401

Option 1 ID : 6306801502436

Option 2 ID : 6306801502437

Option 3 ID : 6306801502434

Option 4 ID : 6306801502435

Status : Answered

Chosen Option : 2