
	DELHI DEVELOPMENT AUTHORITY RECRUITMENT CELL VIKAS SADAN, INA, NEW DELHI - 110023 (https://www.dda.gov.in)
	Advertisement No. 02/2023/Recrtt. Cell/Pers./DDA
Test Date	06/10/2023
Test Time	8:30 AM - 9:30 AM
Subject	Assistant Section Officer (ASO)

Section : General Intelligence and Reasoning

Q.1 Rearranging the given words in ascending alphabetical order, identify the word that appears in the middle.
Phenomenal Procrastinate Pseudonym Perseverance Prejudice

- Ans
- ☒ 1. Phenomenal
 - ☒ 2. Pseudonym
 - ☒ 3. Prejudice
 - ☒ 4. Procrastinate

Question ID : 630680384749
Option 1 ID : 6306801499883
Option 2 ID : 6306801499885
Option 3 ID : 6306801499884
Option 4 ID : 6306801499882
Status : Answered
Chosen Option : 3

Q.2 Select the odd number in the following number series.
6, 9, 15, 42, 106, 231

- Ans
- ☒ 1. 15
 - ☒ 2. 9
 - ☒ 3. 231
 - ☒ 4. 106

Question ID : 630680384662
Option 1 ID : 6306801499535
Option 2 ID : 6306801499534
Option 3 ID : 6306801499537
Option 4 ID : 6306801499536
Status : Answered
Chosen Option : 2

Test Prime

**ALL EXAMS,
ONE SUBSCRIPTION**



70,000+
Mock Tests



**Personalised
Report Card**



**Unlimited
Re-Attempt**



600+
Exam Covered



**Previous Year
Papers**



**500%
Refund**



ATTEMPT FREE MOCK NOW

Q.3 A series is given with one wrong term. Find out the wrong term.

U5, R6, P8, M11, J16

- Ans
- ☐ 1. P8
 - ☐ 2. M11
 - ☐ 3. R6
 - ☒ 4. J16

Question ID : 630680386213

Option 1 ID : 6306801505564

Option 2 ID : 6306801505563

Option 3 ID : 6306801505562

Option 4 ID : 6306801505565

Status : Answered

Chosen Option : 4

Q.4 In the following letter series some of the letters are missing which are given in that order as one of the alternatives below it. Select the correct alternative.

c _ a _ b a _ b _ c _ a

- Ans
- ☒ 1. bccab
 - ☐ 2. accba
 - ☐ 3. bacab
 - ☐ 4. bcbab

Question ID : 630680384820

Option 1 ID : 6306801500167

Option 2 ID : 6306801500168

Option 3 ID : 6306801500166

Option 4 ID : 6306801500169

Status : Answered

Chosen Option : 1

Q.5 Three Statements are given followed by two conclusions numbered I and II. Assuming the statements to be true, even if they seem to be at variance with commonly known facts, decide which of the conclusions logically follow(s) from the statements.

Statement:

Statement I: No deo is a perfume.

Statement II: All perfumes are powders.

Statement III: Some powders are shampoo.

Conclusion:

Conclusion I: All deo being powder is a possibility.

Conclusion II: Some deo are shampoo.

- Ans
- ☐ 1. Neither conclusion I nor II follows
 - ☐ 2. Only conclusion II follows
 - ☒ 3. Only conclusion I follows
 - ☐ 4. Both conclusions I and II follow

Question ID : 630680384528

Option 1 ID : 6306801499001

Option 2 ID : 6306801498999

Option 3 ID : 6306801498998

Option 4 ID : 6306801499000

Status : Answered

Chosen Option : 3

Q.6 NMLJ' is related to 'MNOQ' in the same way as 'ZYXW' is related to:

- Ans
- ☒ 1. ADCB
 - ☒ 2. ABCD
 - ☒ 3. ACBD
 - ☒ 4. ACDB

Question ID : 630680384791

Option 1 ID : 6306801500053

Option 2 ID : 6306801500052

Option 3 ID : 6306801500051

Option 4 ID : 6306801500050

Status : Answered

Chosen Option : 2

Q.7 Select the odd number in the following number series:

1097, 1025, 955, 881, 809

- Ans
- ☒ 1. 881
 - ☒ 2. 809
 - ☒ 3. 955
 - ☒ 4. 1025

Question ID : 630680384498

Option 1 ID : 6306801498878

Option 2 ID : 6306801498880

Option 3 ID : 6306801498879

Option 4 ID : 6306801498881

Status : Answered

Chosen Option : 1

Q.8 In the following question, a number series is given with one term missing. Choose the correct alternative that will continue the same pattern and fill in the blank spaces.

10, 22, 46, 94, __

- Ans
- ☒ 1. 191
 - ☒ 2. 190
 - ☒ 3. 188
 - ☒ 4. 169

Question ID : 630680384801

Option 1 ID : 6306801500093

Option 2 ID : 6306801500090

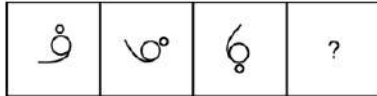
Option 3 ID : 6306801500091

Option 4 ID : 6306801500092

Status : Answered

Chosen Option : 2

Q.9 Find out the next figure (?) in the series from the option figures that follows the sequence of the question figure.



Ans

✗ 1.



✗ 2.



✓ 3.



✗ 4.



Question ID : 630680386223

Option 1 ID : 6306801505605

Option 2 ID : 6306801505603

Option 3 ID : 6306801505602

Option 4 ID : 6306801505604

Status : Answered

Chosen Option : 3

Q.10 In the question, two statements are given I and II. These statements may be either independent causes or may be effects of independent causes or a common cause. One of these statements may be the effect of the other statements. Read both statements and decide which of the following answer choice correctly depicts the relationship between these two statements.

Statement:

Statement I: Rohan is selected for under 14 category in the national-level chess championship.

Statement II: Rohan has been practising chess since he was 4 years old.

Ans

✓ 1. Statement II is the cause and statement I is its effect

✗ 2.

Both the statements I and II are effects of some common cause

✗ 3. Both statements I and II are independent causes

✗ 4. Statement I is the cause and statement II is its effect

Question ID : 630680384484

Option 1 ID : 6306801498823

Option 2 ID : 6306801498825

Option 3 ID : 6306801498824

Option 4 ID : 6306801498822

Status : Answered

Chosen Option : 3

Q.11 Four letter-clusters have been given, out of which three are alike in some manner and one is different. Select the odd letter-cluster.

- Ans**
- ☒ 1. VUT
 - ☒ 2. NML
 - ☒ 3. RQP
 - ☒ 4. HJI

Question ID : 630680384507
Option 1 ID : 6306801498917
Option 2 ID : 6306801498915
Option 3 ID : 6306801498916
Option 4 ID : 6306801498914
Status : Answered
Chosen Option : 4

Q.12 Select the odd number in the following number series.

987, 923, 857, 791, 725, 659

- Ans**
- ☒ 1. 659
 - ☒ 2. 987
 - ☒ 3. 791
 - ☒ 4. 857

Question ID : 630680384664
Option 1 ID : 6306801499545
Option 2 ID : 6306801499542
Option 3 ID : 6306801499544
Option 4 ID : 6306801499543
Status : Answered
Chosen Option : 2

Q.13 Three Statements are given followed by two conclusions numbered I and II. Assuming the statements to be true, even if they seem to be at variance with commonly known facts, decide which of the conclusions logically follow(s) from the statements.

Statement:

Statement I: Some cars are not bikes.

Statement II: All bikes are trucks.

Statement III: Some trucks are not trains.

Conclusion:

Conclusion I: Some cars are not trucks.

Conclusion II: Some bikes are trains.

- Ans**
- ☒ 1. Only conclusion II follows
 - ☒ 2. Both conclusions I and II follow
 - ☒ 3. Only conclusion I follows
 - ☒ 4. Neither conclusion I nor II follows

Question ID : 630680384733
Option 1 ID : 6306801499819
Option 2 ID : 6306801499820
Option 3 ID : 6306801499818
Option 4 ID : 6306801499821
Status : Answered
Chosen Option : 3

Q.14 Piyush, Rohan, Sashi, Tarun, Wasim, and Vedant are sitting in a circle facing the centre. Vedant is sitting second to the left of Sashi and is in between Wasim and Tarun. Sashi is not a neighbour of Rohan or Tarun. Who is sitting to the immediate right of Piyush?

- Ans**
- ☒ 1. Tarun
 - ☒ 2. Rohan
 - ☒ 3. Vedant
 - ☒ 4. Sashi

Question ID : **630680384715**
 Option 1 ID : **6306801499746**
 Option 2 ID : **6306801499748**
 Option 3 ID : **6306801499749**
 Option 4 ID : **6306801499747**
 Status : **Answered**
 Chosen Option : **2**

Q.15 If all the letters within each letter-clusters are arranged alphabetically, in how many letter-clusters will the first letter will be a vowel?
 FBOY ROXS SUPN LQIV CJEH

- Ans**
- ☒ 1. 4
 - ☒ 2. 3
 - ☒ 3. 5
 - ☒ 4. 2

Question ID : **630680384552**
 Option 1 ID : **6306801499097**
 Option 2 ID : **6306801499094**
 Option 3 ID : **6306801499095**
 Option 4 ID : **6306801499096**
 Status : **Answered**
 Chosen Option : **2**

Q.16 Four letter-clusters pairs have been given, out of which three are alike in some manner and one is different. Select the odd letter-cluster pair.

- Ans**
- ☒ 1. GLQ : HKR
 - ☒ 2. PQR : QPR
 - ☒ 3. AMT : BLU
 - ☒ 4. TUV : UTW

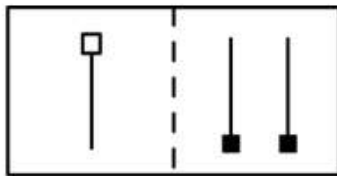
Question ID : **630680384509**
 Option 1 ID : **6306801498924**
 Option 2 ID : **6306801498922**
 Option 3 ID : **6306801498925**
 Option 4 ID : **6306801498923**
 Status : **Answered**
 Chosen Option : **2**

Q.17 If 'M \times N' means 'M is the father of N'.
If 'M + N' means 'M is the wife of N'.
If 'M \div N' means 'M is the brother of N'.
If 'M - N' means 'M is the daughter of N'.
How is T related to W in the expression 'T + U \div V - W'?

- Ans
- ☒ 1. Daughter
 - ☒ 2. Daughter-in-law
 - ☒ 3. Sister
 - ☒ 4. Mother

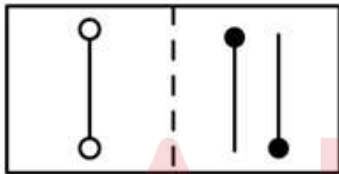
Question ID : 630680384671
Option 1 ID : 6306801499572
Option 2 ID : 6306801499573
Option 3 ID : 6306801499571
Option 4 ID : 6306801499570
Status : Answered
Chosen Option : 2

Q.18 Choose a pair similar to the pair in the question figure.

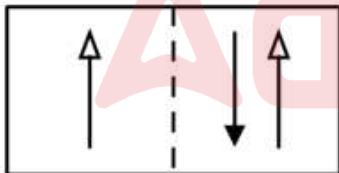


Ans

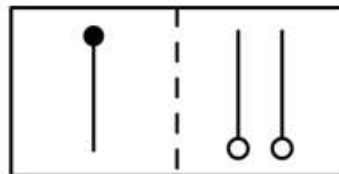
☒ 1.



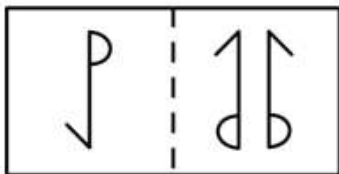
☒ 2.



☒ 3.



☒ 4.



Question ID : 630680384545
Option 1 ID : 6306801499068
Option 2 ID : 6306801499067
Option 3 ID : 6306801499066
Option 4 ID : 6306801499069
Status : Answered

Q.19 Using a particular code 'GNAFG' is encrypted as 'HMBEH'. Choose the right option for 'YEHTC' coded in the same form.

- Ans** ☒ 1. ZDISD
☒ 2. ZFIUD
☒ 3. ZDIDD
☒ 4. ZFISD

Question ID : 630680384780
 Option 1 ID : 6306801500008
 Option 2 ID : 6306801500006
 Option 3 ID : 6306801500009
 Option 4 ID : 6306801500007
 Status : Answered
 Chosen Option : 2

Q.20 How many letters are there in the given series that are immediately preceded as well as followed by a symbol?

H @ M % R P ! A * B # W \$ S F -

- Ans** ☒ 1. 4
☒ 2. 2
☒ 3. 5
☒ 4. 3

Question ID : 630680384559
 Option 1 ID : 6306801499122
 Option 2 ID : 6306801499124
 Option 3 ID : 6306801499125
 Option 4 ID : 6306801499123
 Status : Answered
 Chosen Option : 1

Q.21 In the following triad, each group of letters is related to the subsequent one following a certain logic.

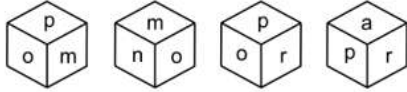
QZEP - PYDO - NWBM

Which of the following option follows the same logic?

- Ans** ☒ 1. RUOE - QTND - ORLB
☒ 2. GYBH - FXAG - EVZF
☒ 3. RUOE - QNTD - ORLB
☒ 4. GYBH - FXAG - HZCI

Question ID : 630680384792
 Option 1 ID : 6306801500056
 Option 2 ID : 6306801500054
 Option 3 ID : 6306801500057
 Option 4 ID : 6306801500055
 Status : Answered
 Chosen Option : 1

Q.22 Four different positions of the same dice are given below. Find the letter opposite of m.



- Ans
- ☒ 1. p
 - ☒ 2. o
 - ☒ 3. r
 - ☒ 4. n

Question ID : 630680384735
Option 1 ID : 6306801499827
Option 2 ID : 6306801499828
Option 3 ID : 6306801499826
Option 4 ID : 6306801499829
Status : Answered
Chosen Option : 3

Q.23 D and A are brothers. D is the son of C. B is C's father. In terms of relationship, who is A to B?

- Ans
- ☒ 1. Son
 - ☒ 2. Son's son
 - ☒ 3. Father
 - ☒ 4. Paternal grandfather

Question ID : 630680386170
Option 1 ID : 6306801505390
Option 2 ID : 6306801505393
Option 3 ID : 6306801505391
Option 4 ID : 6306801505392
Status : Answered
Chosen Option : 2

Q.24 In a certain code language, if RUBBER is coded as 2, LICENSE is coded as 3, then what will CYST be coded as?

- Ans
- ☒ 1. 1
 - ☒ 2. 3
 - ☒ 3. 0
 - ☒ 4. 2

Question ID : 630680384677
Option 1 ID : 6306801499595
Option 2 ID : 6306801499597
Option 3 ID : 6306801499594
Option 4 ID : 6306801499596
Status : Answered
Chosen Option : 3

Q.25 Six individuals P, Q, R, S, T, and U reside in a six-floor building, with each floor numbered from one to six (where the top floor is numbered 6 and the ground floor is numbered 1). Each person lives on a different floor.
P lives on a floor with an even number.
There are two floors between the floors of individuals S and U.
Person U lives on a floor above the floor of person S and S does not reside on the second floor.
Person Q does not live on an odd-numbered floor.
Person R does not reside on any floor below the floor of person U.
Person T does not live on a floor immediately above or below the floor of person Q.
On which of the following floors does Q live?

- Ans** ☒ 1. 6
☐ 2. Data insufficient
☐ 3. 2
☐ 4. 4

Question ID : 630680384813
Option 1 ID : 6306801500140
Option 2 ID : 6306801500141
Option 3 ID : 6306801500138
Option 4 ID : 6306801500139
Status : Answered
Chosen Option : 3

Section : General Awareness

Q.1 When lander and rover are expected to land near the lunar south pole region of Chandrayaan-3?

- Ans** ☐ 1. 3rd Sept 2024
☒ 2. 23 August 2023
☐ 3. 14 July 2023
☐ 4. 2nd August 2024

Question ID : 630680384373
Option 1 ID : 6306801498381
Option 2 ID : 6306801498379
Option 3 ID : 6306801498378
Option 4 ID : 6306801498380
Status : Answered
Chosen Option : 3

Q.2 Which of the following neighbouring countries is to the east of India?

- Ans** ☒ 1. Bangladesh
☐ 2. Bhutan
☐ 3. Afghanistan
☐ 4. China

Question ID : 630680384295
Option 1 ID : 6306801498066
Option 2 ID : 6306801498067
Option 3 ID : 6306801498069
Option 4 ID : 6306801498068
Status : Answered
Chosen Option : 1

Q.3 President Biden and Prime Minister Modi inaugurated which initiative in January 2023 as a major milestone in U.S.-India relations?

- Ans** ☒ 1. Climate Action and Finance Mobilization Dialogue
☒ 2. Critical and Emerging Technology
☒ 3. Civil Space Working Group
☒ 4. Strategic Clean Energy Partnership

Question ID : 630680384140
 Option 1 ID : 6306801497451
 Option 2 ID : 6306801497453
 Option 3 ID : 6306801497452
 Option 4 ID : 6306801497450
 Status : Answered
 Chosen Option : 1

Q.4 Who among the following has been selected as the Team India Flagbearer at the 2022 Commonwealth Games?

- Ans** ☒ 1. Neeraj Chopra
☒ 2. Mirabhai Chanu
☒ 3. Mary Kom
☒ 4. PV Sindhu

Question ID : 630680384058
 Option 1 ID : 6306801497124
 Option 2 ID : 6306801497125
 Option 3 ID : 6306801497122
 Option 4 ID : 6306801497123
 Status : Answered
 Chosen Option : 1

Q.5 Which language is recognized as a classical language in India?

- Ans** ☒ 1. Hindi
☒ 2. Tamil
☒ 3. Bengali
☒ 4. Telugu

Question ID : 630680386431
 Option 1 ID : 6306801506434
 Option 2 ID : 6306801506437
 Option 3 ID : 6306801506435
 Option 4 ID : 6306801506436
 Status : Answered
 Chosen Option : 4

Q.6 Which cricketer has written book Sultan: A Memoir in 2022?

- Ans** ☒ 1. Shoaib Akthar
☒ 2. Salim Malik
☒ 3. Zaheer Khan
☒ 4. Wasim Akram

Question ID : 630680384386
 Option 1 ID : 6306801498432
 Option 2 ID : 6306801498431
 Option 3 ID : 6306801498433
 Option 4 ID : 6306801498430
 Status : Answered
 Chosen Option : 1

Q.7 Which of the following is an autobiography of A.P.J Abdul Kalam?

- Ans
- ☒ 1. Natural Disaster
 - ☒ 2. Most Dope
 - ☒ 3. Wings Of Fire
 - ☒ 4. Aatma Katha

Question ID : 630680384059
 Option 1 ID : 6306801497126
 Option 2 ID : 6306801497127
 Option 3 ID : 6306801497128
 Option 4 ID : 6306801497129
 Status : Answered
 Chosen Option : 3

Q.8 Which animal is commonly associated with the Indian state of Gujarat and is considered its state animal?

- Ans
- ☒ 1. Indian Elephant
 - ☒ 2. Indian Rhinoceros
 - ☒ 3. Royal Bengal Tiger
 - ☒ 4. Asiatic Lion

Question ID : 630680386461
 Option 1 ID : 6306801506557
 Option 2 ID : 6306801506556
 Option 3 ID : 6306801506554
 Option 4 ID : 6306801506555
 Status : Answered
 Chosen Option : 4

Q.9 Which of the following is a National Festival of India?

- Ans
- ☒ 1. Onam
 - ☒ 2. Kite Festival
 - ☒ 3. Dussehra
 - ☒ 4. Gandhi Jayanti

Question ID : 630680384069
 Option 1 ID : 6306801497169
 Option 2 ID : 6306801497166
 Option 3 ID : 6306801497168
 Option 4 ID : 6306801497167
 Status : Answered
 Chosen Option : 4

Q.10 What was the duration of Catch the rain mission programme in year 2022?

- Ans
- ☒ 1. Aug 29, 2021, to Apr 30, 2022
 - ☒ 2. March 29, 2022, to November 30, 2022
 - ☒ 3. Jan 29, 2021, to Apr 30, 2021
 - ☒ 4. March 29, 2021, to November 30, 2021

Question ID : 630680384383
 Option 1 ID : 6306801498421
 Option 2 ID : 6306801498419
 Option 3 ID : 6306801498420
 Option 4 ID : 6306801498418
 Status : Answered
 Chosen Option : 2

Q.11 Which among the following financial institutions is known for the issuance of currency notes in the country?

- Ans
- ☒ 1. State Bank of India (SBI)
 - ☒ 2. NABARD
 - ☒ 3. Reserve Bank of India (RBI)
 - ☒ 4. Axis Bank

Question ID : 630680384081
 Option 1 ID : 6306801497217
 Option 2 ID : 6306801497215
 Option 3 ID : 6306801497216
 Option 4 ID : 6306801497214
 Status : Answered
 Chosen Option : 3

Q.12 Which among the following is a local harvest festival of Maharashtra?

- Ans
- ☒ 1. Onam
 - ☒ 2. Nuakhai
 - ☒ 3. Gudhi Padwa
 - ☒ 4. Lohri

Question ID : 630680384072
 Option 1 ID : 6306801497178
 Option 2 ID : 6306801497180
 Option 3 ID : 6306801497179
 Option 4 ID : 6306801497181
 Status : Answered
 Chosen Option : 3

Q.13 Which of the following components of GDP measures the value of goods and services produced by households for their own consumption?

- Ans
- ☒ 1. Government Consumption Expenditure
 - ☒ 2. Net Exports
 - ☒ 3. Gross Private Domestic Investment
 - ☒ 4. Personal Consumption Expenditure

Question ID : 630680384411
 Option 1 ID : 6306801498531
 Option 2 ID : 6306801498532
 Option 3 ID : 6306801498530
 Option 4 ID : 6306801498533
 Status : Answered
 Chosen Option : 4

Q.14 When was the Jamia Milia Islamia University opened?

- Ans
- ☒ 1. 1930
 - ☒ 2. 1926
 - ☒ 3. 1920
 - ☒ 4. 1931

Question ID : 630680384328
 Option 1 ID : 6306801498199
 Option 2 ID : 6306801498200
 Option 3 ID : 6306801498198
 Option 4 ID : 6306801498201
 Status : Answered
 Chosen Option : 4

Q.15 Who founded the Ramakrishna Mission, a spiritual organization dedicated to social service and the promotion of harmony among religions?

- Ans
- ☒ 1. Ram Mohan Roy
 - ☒ 2. Rabindranath Tagore
 - ☒ 3. Swami Vivekananda
 - ☒ 4. Aurobindo Ghosh

Question ID : 630680386490
 Option 1 ID : 6306801506672
 Option 2 ID : 6306801506671
 Option 3 ID : 6306801506670
 Option 4 ID : 6306801506673
 Status : Answered
 Chosen Option : 3

Q.16 Which event led to the partition of India and the creation of Pakistan in 1947?

- Ans
- ☒ 1. Indian Independence Act
 - ☒ 2. Quit India Movement
 - ☒ 3. Jallianwala Bagh Massacre
 - ☒ 4. Simon Commission

Question ID : 630680384443
 Option 1 ID : 6306801498658
 Option 2 ID : 6306801498661
 Option 3 ID : 6306801498659
 Option 4 ID : 6306801498660
 Status : Answered
 Chosen Option : 1

Q.17 Who among the following was the first and only female ruler of Medieval India?

- Ans
- ☒ 1. Razia Sultan
 - ☒ 2. Savitribai Phule
 - ☒ 3. Rani Lakshmibai
 - ☒ 4. Maharani Durgavati

Question ID : 630680384120
 Option 1 ID : 6306801497371
 Option 2 ID : 6306801497373
 Option 3 ID : 6306801497372
 Option 4 ID : 6306801497370
 Status : Answered
 Chosen Option : 1

Q.18 Census is conducted in India in time gap of how many years?

- Ans
- ☒ 1. 22
 - ☒ 2. 13
 - ☒ 3. 10
 - ☒ 4. 11

Question ID : 630680386463
 Option 1 ID : 6306801506564
 Option 2 ID : 6306801506563
 Option 3 ID : 6306801506562
 Option 4 ID : 6306801506565
 Status : Answered
 Chosen Option : 3

Q.19 Judiciary in India has a pyramidal structure, which body is at the top of the pyramid as on Jul 2023?

- Ans ☒ 1. Supreme Court
☒ 2. Subordinate Court
☒ 3. High Court
☒ 4. District Court

Question ID : 630680384380
 Option 1 ID : 6306801498407
 Option 2 ID : 6306801498409
 Option 3 ID : 6306801498406
 Option 4 ID : 6306801498408
 Status : Answered
 Chosen Option : 1

Q.20 The "Aravalli Range," one of the oldest mountain ranges in India, primarily extends through which states?

- Ans ☒ 1. West Bengal and Odisha
☒ 2. Odisha, Karnataka and Tamil Nadu
☒ 3. Haryana, Rajasthan and Gujarat
☒ 4. Uttarakhand and Himachal Pradesh

Question ID : 630680384199
 Option 1 ID : 6306801497686
 Option 2 ID : 6306801497689
 Option 3 ID : 6306801497687
 Option 4 ID : 6306801497688
 Status : Answered
 Chosen Option : 3

Q.21 Which ancient kingdom of South India was known for its maritime trade, seaport of Muziris, and cultural exchange with various civilizations?

- Ans ☒ 1. Pallava Kingdom
☒ 2. Pandya Kingdom
☒ 3. Chera Kingdom
☒ 4. Chola Kingdom

Question ID : 630680386473
 Option 1 ID : 6306801506603
 Option 2 ID : 6306801506604
 Option 3 ID : 6306801506605
 Option 4 ID : 6306801506602
 Status : Answered
 Chosen Option : 4

Q.22 Which of the following is a flagship initiative of the Government of India aimed at promoting sustainable development and environmental conservation?

- Ans
- ☒ 1. Pradhan Mantri Jan Dhan Yojana
 - ☒ 2. National Rural Employment Guarantee Act
 - ☒ 3. Swachh Bharat Abhiyan
 - ☒ 4. National Green Tribunal

Question ID : 630680386443
 Option 1 ID : 6306801506485
 Option 2 ID : 6306801506484
 Option 3 ID : 6306801506483
 Option 4 ID : 6306801506482
 Status : Answered
 Chosen Option : 3

Q.23 Which religion has the second highest number of followers in India?

- Ans
- ☒ 1. Christianity
 - ☒ 2. Islam
 - ☒ 3. Buddhism
 - ☒ 4. Hinduism

Question ID : 630680386470
 Option 1 ID : 6306801506593
 Option 2 ID : 6306801506592
 Option 3 ID : 6306801506591
 Option 4 ID : 6306801506590
 Status : Answered
 Chosen Option : 2

Q.24 Which of the following is an Autobiography of the famous author Khushwant Singh?

- Ans
- ☒ 1. Truth, Love & a Little Malice
 - ☒ 2. The Story of my experiments with truth
 - ☒ 3. Wings of fire
 - ☒ 4. My Times: An Autobiography

Question ID : 630680384269
 Option 1 ID : 6306801497964
 Option 2 ID : 6306801497962
 Option 3 ID : 6306801497963
 Option 4 ID : 6306801497965
 Status : Answered
 Chosen Option : 1

Q.25 Which Indian state is known as the "Water Gateway of South India" due to its extensive network of canals, lakes, and waterways?

- Ans
- ☒ 1. Odisha
 - ☒ 2. Karnataka
 - ☒ 3. Tamil Nadu
 - ☒ 4. Kerala

Question ID : 630680384195
 Option 1 ID : 6306801497671
 Option 2 ID : 6306801497672
 Option 3 ID : 6306801497670
 Option 4 ID : 6306801497673
 Status : Answered
 Chosen Option : 4

Section : Quantitative Aptitude

Q.1 If $s^2 - st + t^2 = 4$ and $s^2 + st + t^2 = 7$, then find the value of $(s^4 + s^2t^2 + t^4)$

- Ans**
- ☒ 1. 112
 - ☒ 2. 28
 - ☒ 3. 64
 - ☒ 4. 11

Question ID : 630680385122

Option 1 ID : 6306801501377

Option 2 ID : 6306801501375

Option 3 ID : 6306801501376

Option 4 ID : 6306801501374

Status : Answered

Chosen Option : 2

Q.2 Pipe W can fill a tank in 2 hours and pipe R can fill a tank in 6 hours. At 8 p.m. pipe W was opened. At what time will the tank be filled if pipe R is opened at 9:00 p.m.?

- Ans**
- ☒ 1. 9:30 p.m.
 - ☒ 2. 9:45 p.m.
 - ☒ 3. 10 p.m.
 - ☒ 4. 10:15 p.m.

Question ID : 630680385857

Option 1 ID : 6306801504146

Option 2 ID : 6306801504147

Option 3 ID : 6306801504148

Option 4 ID : 6306801504149

Status : Answered

Chosen Option : 2

Q.3 The average marks of a Rajesh in six subjects was 83. His average marks in five subjects, excluding Hindi, was 88. How many marks did he score in Hindi ?

- Ans**
- ☒ 1. 45
 - ☒ 2. 58
 - ☒ 3. 53
 - ☒ 4. 68

Question ID : 630680385777

Option 1 ID : 6306801503826

Option 2 ID : 6306801503828

Option 3 ID : 6306801503827

Option 4 ID : 6306801503829

Status : Answered

Chosen Option : 2

Q.4 Devendra and Vikas were the two candidate in an election. 12% of the voters on the voters' list did not cast their votes and 120 voters cast their ballot papers blank. Devendra was supported by 48% of all the voters in the list and he got 549 votes more than his rival. The number of voters on the list was _____.

- Ans**
- ☒ 1. 4500
 - ☒ 2. 3300
 - ☒ 3. 3598
 - ☒ 4. 2546

Question ID : **630680385823**
Option 1 ID : **6306801504013**
Option 2 ID : **6306801504011**
Option 3 ID : **6306801504012**
Option 4 ID : **6306801504010**
Status : **Answered**
Chosen Option : **1**

Q.5 The intersection point of the altitudes of a triangle is:

- Ans**
- ☒ 1. Orthocentre
 - ☒ 2. Excentre
 - ☒ 3. Centroid
 - ☒ 4. Circumcentre

Question ID : **630680384918**
Option 1 ID : **6306801500560**
Option 2 ID : **6306801500561**
Option 3 ID : **6306801500559**
Option 4 ID : **6306801500558**
Status : **Answered**
Chosen Option : **1**

Q.6 How many hours does the faster pipe alone can fill the tank if Pipe C can fill a tank in 20 hours faster than pipe D. Pipe C and D can simultaneously fill the same tank in 24 hours.

- Ans**
- ☒ 1. 30 hours
 - ☒ 2. 20 hours
 - ☒ 3. 50 hours
 - ☒ 4. 40 hours

Question ID : **630680385039**
Option 1 ID : **6306801501043**
Option 2 ID : **6306801501042**
Option 3 ID : **6306801501045**
Option 4 ID : **6306801501044**
Status : **Answered**
Chosen Option : **4**

Q.7 Find the area of a rhombus with side of 17 cm and one diagonal 16 cm.

- Ans
- ☒ 1. 225 sq.cm
 - ☒ 2. 240 sq.cm
 - ☒ 3. 200 sq.cm
 - ☒ 4. 250 sq.cm

Question ID : 630680385014
Option 1 ID : 6306801500943
Option 2 ID : 6306801500944
Option 3 ID : 6306801500942
Option 4 ID : 6306801500945
Status : Answered
Chosen Option : 2

Q.8 The table given below shows the number of registered voters and the percentage of the people who voted among them in 5 different voting centres. At Group 6, total number of registered voters was 25% less than that at Group 3. At Group 6, the number of people who voted was 320 less than that at Group 3 and 220 votes cast were declared invalid. What was the ratio of the number of valid votes cast to the total number of registered voters at Group 6?

Centres	Total number of Registered Voters	Percentage of people who voted
Group 1	1800	70%
Group 2	1600	60%
Group 3	3200	80%
Group 4	2600	76%
Group 5	2200	85%

- Ans
- ☒ 1. 56:63
 - ☒ 2. 78:89
 - ☒ 3. 120:101
 - ☒ 4. 101:120

Question ID : 630680385789
Option 1 ID : 6306801503876
Option 2 ID : 6306801503877
Option 3 ID : 6306801503874
Option 4 ID : 6306801503875
Status : Answered
Chosen Option : 4

Q.9 When the price of pendant was reduced by 35% its sale increased by 76%. What was the net effect on the revenue?

- Ans
- ☒ 1. 14.8% decrease
 - ☒ 2. 14.8% increase
 - ☒ 3. 14.4% increase
 - ☒ 4. 14.4% decrease

Question ID : 630680385817
Option 1 ID : 6306801503989
Option 2 ID : 6306801503988
Option 3 ID : 6306801503986
Option 4 ID : 6306801503987
Status : Answered
Chosen Option : 3

Q.10 Abdul dealing in chairs allows 16% discount on the marked price. What price must be marked on a chair that cost ₹825 so as to make a profit of 12%?

- Ans** ☒ 1. ₹1100
☒ 2. ₹1050
☒ 3. ₹1250
☒ 4. ₹1300

Question ID : 630680385843
 Option 1 ID : 6306801504091
 Option 2 ID : 6306801504090
 Option 3 ID : 6306801504092
 Option 4 ID : 6306801504093
 Status : Answered
 Chosen Option : 1

Q.11 If $2x4x54$ is divisible by 11, then the value of x is _____.

- Ans** ☒ 1. 9
☒ 2. 5
☒ 3. 1
☒ 4. 3

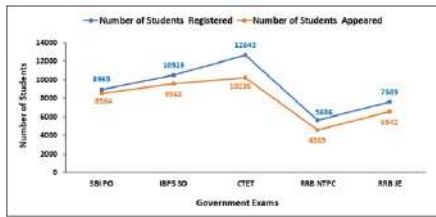
Question ID : 630680385809
 Option 1 ID : 6306801503957
 Option 2 ID : 6306801503956
 Option 3 ID : 6306801503954
 Option 4 ID : 6306801503955
 Status : Answered
 Chosen Option : 1

Q.12 If $2\sin^2 A - 1 = 0$, then find the value of $\tan^2 A + \cos^2 A$.

- Ans** ☒ 1. $\frac{1}{2}$
☒ 2. $\frac{3}{2}$
☒ 3. 2
☒ 4. $\frac{1}{3}$

Question ID : 630680384945
 Option 1 ID : 6306801500666
 Option 2 ID : 6306801500668
 Option 3 ID : 6306801500667
 Option 4 ID : 6306801500669
 Status : Answered
 Chosen Option : 2

Q.13 The line graph represents the total number of students registered and appeared in five different exams from city Delhi. The total number of students who did not appeared in RRB JE is approximately what percentage of the total number of students who did not appeared in SBI PO exam?



- Ans**
- ☒ 1. 26%
 - ☒ 2. 261%
 - ☒ 3. 156%
 - ☒ 4. 210%

Question ID : 630680385787

Option 1 ID : 6306801503866

Option 2 ID : 6306801503869

Option 3 ID : 6306801503867

Option 4 ID : 6306801503868

Status : Answered

Chosen Option : 2

Q.14 Abbas sold a kettle at a loss of 40%. If he had sold it for ₹160 more, he would have made a profit of 40%. The cost price of the kettle is:

- Ans**
- ☒ 1. ₹100
 - ☒ 2. ₹200
 - ☒ 3. ₹150
 - ☒ 4. ₹50

Question ID : 630680385838

Option 1 ID : 6306801504071

Option 2 ID : 6306801504073

Option 3 ID : 6306801504072

Option 4 ID : 6306801504070

Status : Answered

Chosen Option : 2

Q.15 One of the sides of rectangular garden is 18 m and the length of its diagonal is 30 m. Find the area of the field?

- Ans**
- ☒ 1. 423 m²
 - ☒ 2. 332 m²
 - ☒ 3. 432 m²
 - ☒ 4. 428 m²

Question ID : 630680385793

Option 1 ID : 6306801503891

Option 2 ID : 6306801503890

Option 3 ID : 6306801503893

Option 4 ID : 6306801503892

Status : Answered

Chosen Option : 3

Q.16 Find the distance between the two centres is if the radii of two circles be 5 cm and 4 cm and the length of transverse common tangent be 12 cm?

- Ans
- ☒ 1. $\sqrt{48}$ cm
 - ☒ 2. 15 cm
 - ☒ 3. 12 cm
 - ☒ 4. 8 cm

Question ID : 630680385010

Option 1 ID : 6306801500929

Option 2 ID : 6306801500928

Option 3 ID : 6306801500927

Option 4 ID : 6306801500926

Status : Answered

Chosen Option : 4

Q.17 if $x = \frac{1}{(\sqrt{2}-1)}$, find value of $x + \frac{1}{x}$

- Ans
- ☒ 1. $\sqrt{2}$
 - ☒ 2. 2
 - ☒ 3. 1
 - ☒ 4. $2\sqrt{2}$

Question ID : 630680385120

Option 1 ID : 6306801501368

Option 2 ID : 6306801501366

Option 3 ID : 6306801501369

Option 4 ID : 6306801501367

Status : Answered

Chosen Option : 4

Q.18 In the income statement of Mukund and Vinod, the ratio of their income in the year 2020 was 7 : 5. The ratio of Mukund's income in the year 2021 to that in 2020 is 4:7 and the ratio of Vinod's income in the year 2021 to that in 2020 is 5:2. If ₹19,404 is the sum of the income of Mukund and Vinod in the year 2021, then find the income of Vinod in the year 2020?

- Ans
- ☒ 1. ₹5950
 - ☒ 2. ₹6580
 - ☒ 3. ₹5880
 - ☒ 4. ₹6890

Question ID : 630680385850

Option 1 ID : 6306801504119

Option 2 ID : 6306801504120

Option 3 ID : 6306801504118

Option 4 ID : 6306801504121

Status : Answered

Chosen Option : 2

Q.19 Three friends Aju, Sid and Afzal can complete a single round of a circular stadium in 24, 36 and 48 secs respectively. If they start running continuously at the same time, in how many minutes will all three meet again?

- Ans
- ☒ 1. 2 mins
 - ☒ 2. 2 min 20 secs
 - ☒ 3. 2 mins 24 secs
 - ☒ 4. 2 mins 26 secs

Question ID : 630680385813

Option 1 ID : 6306801503970

Option 2 ID : 6306801503971

Option 3 ID : 6306801503972

Option 4 ID : 6306801503973

Status : Answered

Chosen Option : 3

Q.20 Find the value of:

$$\frac{(0.75)^3 - (0.1)^3}{(0.75)^2 + 0.075 + (0.1)^2}$$

- Ans
- ☒ 1. 0.75
 - ☒ 2. 0.55
 - ☒ 3. 0.65
 - ☒ 4. 0.85

Question ID : 630680385766

Option 1 ID : 6306801503784

Option 2 ID : 6306801503782

Option 3 ID : 6306801503783

Option 4 ID : 6306801503785

Status : Answered

Chosen Option : 3

Q.21 Copper and tin are in the ratio 7:5 in 960 gm of an alloy. How much of tin (in grams) should be added to make the ratio 7:6?

- Ans
- ☒ 1. 80 gms
 - ☒ 2. 78 gms
 - ☒ 3. 88 gms
 - ☒ 4. 92 gms

Question ID : 630680385845

Option 1 ID : 6306801504099

Option 2 ID : 6306801504098

Option 3 ID : 6306801504100

Option 4 ID : 6306801504101

Status : Answered

Chosen Option : 1

Q.22 A cube of side 21 cm is melted and smaller cubes of sides 7 cm are formed from them. Find the number of such smaller cubes formed.

- Ans**
- ☒ 1. 81
 - ☒ 2. 9
 - ☒ 3. 3
 - ☒ 4. 27

Question ID : 630680385154
 Option 1 ID : 6306801501504
 Option 2 ID : 6306801501502
 Option 3 ID : 6306801501505
 Option 4 ID : 6306801501503
 Status : Answered
 Chosen Option : 4

Q.23 A rectangular slab 14 cm by 16 cm by 18 cm is cut up in to an exact number of equal cubes. Find the least possible number of cubes.

- Ans**
- ☒ 1. 489
 - ☒ 2. 465
 - ☒ 3. 567
 - ☒ 4. 504

Question ID : 630680385804
 Option 1 ID : 6306801503935
 Option 2 ID : 6306801503934
 Option 3 ID : 6306801503937
 Option 4 ID : 6306801503936
 Status : Answered
 Chosen Option : 4

Q.24 Find the total surface area of a cylinder having a radius of 7 cm and height 10 cm.

- Ans**
- ☒ 1. 748 cm²
 - ☒ 2. 438 cm²
 - ☒ 3. 632 cm²
 - ☒ 4. 596 cm²

Question ID : 630680385149
 Option 1 ID : 6306801501484
 Option 2 ID : 6306801501485
 Option 3 ID : 6306801501483
 Option 4 ID : 6306801501482
 Status : Answered
 Chosen Option : 1

Q.25 The mean high temperature of the first four days of a week is 31.5°C where as the mean of the last four days is 26.5°C . If the mean of the whole week is 29°C then the temperature of the 4th days is _____.

- Ans**
- ☒ 1. 27.5°C
 - ☒ 2. 29°C
 - ☒ 3. 28°C
 - ☒ 4. 30.25°C

Question ID : 630680385778
 Option 1 ID : 6306801503830
 Option 2 ID : 6306801503831
 Option 3 ID : 6306801503833
 Option 4 ID : 6306801503832
 Status : Answered
 Chosen Option : 2

Section : English Comprehension

Q.1 Select the most appropriate word for the given phrase.
 Beginning to exist and evolve.

- Ans**
- ☒ 1. Nascent
 - ☒ 2. Lair
 - ☒ 3. Virtue
 - ☒ 4. Mundane

Question ID : 630680385626
 Option 1 ID : 6306801503263
 Option 2 ID : 6306801503265
 Option 3 ID : 6306801503262
 Option 4 ID : 6306801503264
 Status : Answered
 Chosen Option : 4

Q.2 Select the word from the options which is exactly opposite in meaning to the bracketed word given in the sentence below.
 Yet Ross and Makovsky (proffer) a deadline exactly as the missing ingredient to striking a deal.

- Ans**
- ☒ 1. withhold
 - ☒ 2. proceed
 - ☒ 3. exit
 - ☒ 4. artificial

Question ID : 630680385415
 Option 1 ID : 6306801502490
 Option 2 ID : 6306801502492
 Option 3 ID : 6306801502491
 Option 4 ID : 6306801502493
 Status : Answered
 Chosen Option : 2

Comprehension:

Read the given passage carefully and select the most appropriate answer to the questions that follow.

The Educational scheme or Course established by Mr. Wopsle's great-aunt may be resolved into the following synopsis. The pupils ate apples and put straws down one another's backs, until Mr Wopsle's great-aunt collected her energies, and made an indiscriminate totter at them with a birch-rod. After receiving the charge with every mark of derision, the pupils formed in line and buzzingly passed a ragged book from hand to hand. The book had an alphabet in it, some figures and tables, and a little spelling – that is to say, it had had once. As soon as this volume began to circulate, Mr. Wopsle's great-aunt fell into a state of coma; arising either from sleep or a rheumatic paroxysm. The pupils then entered among themselves upon a competitive examination on the subject of Boots, with the view of ascertaining who could tread the hardest upon whose toes. This mental exercise lasted until Biddy made a rush at them and distributed three defaced Bibles (shaped as if they had been unskilfully cut off the chump-end of something), more illegibly printed at the best than any curiosities of literature I have since met with, speckled all over with ironmould, and having various specimens of the insect world smashed between their leaves.

SubQuestion No : 3

Q.3 Which of the following statements is not true with respect to the passage.

- Ans** ✓ 1. A book was passed from hand to hand which had numbers in it.
- ✗ 2. As the book started to circulate Mr. Wopsle's great aunt would fall asleep.
- ✗ 3. The pupils ate apples and put straws down one another's backs.
- ✗ 4. The Bibles circulated were impossible to read.

Question ID : 630680385662

Option 1 ID : 6306801503402

Option 2 ID : 6306801503404

Option 3 ID : 6306801503403

Option 4 ID : 6306801503405

Status : Answered

Chosen Option : 2

Comprehension:

Read the given passage carefully and select the most appropriate answer to the questions that follow.

The Educational scheme or Course established by Mr. Wopsle's great-aunt may be resolved into the following synopsis. The pupils ate apples and put straws down one another's backs, until Mr Wopsle's great-aunt collected her energies, and made an indiscriminate totter at them with a birch-rod. After receiving the charge with every mark of derision, the pupils formed in line and buzzingly passed a ragged book from hand to hand. The book had an alphabet in it, some figures and tables, and a little spelling – that is to say, it had had once. As soon as this volume began to circulate, Mr. Wopsle's great-aunt fell into a state of coma; arising either from sleep or a rheumatic paroxysm. The pupils then entered among themselves upon a competitive examination on the subject of Boots, with the view of ascertaining who could tread the hardest upon whose toes. This mental exercise lasted until Biddy made a rush at them and distributed three defaced Bibles (shaped as if they had been unskilfully cut off the chump-end of something), more illegibly printed at the best than any curiosities of literature I have since met with, speckled all over with ironmould, and having various specimens of the insect world smashed between their leaves.

SubQuestion No : 4

Q.4 From the given options, identify the suitable title for the passage.

- Ans** ✓ 1. Mr. Wopsle's great-aunt
- ✗ 2. The Educational scheme
- ✗ 3. Rheumatic Paroxysm
- ✗ 4. Biddy's Rush

Question ID : 630680385661

Option 1 ID : 6306801503399

Option 2 ID : 6306801503401

Option 3 ID : 6306801503400

Option 4 ID : 6306801503398

Status : Answered

1

Comprehension:

Read the given passage carefully and select the most appropriate answer to the questions that follow.

The Educational scheme or Course established by Mr. Wopsle's great-aunt may be resolved into the following synopsis. The pupils ate apples and put straws down one another's backs, until Mr Wopsle's great-aunt collected her energies, and made an indiscriminate totter at them with a birch-rod. After receiving the charge with every mark of derision, the pupils formed in line and buzzingly passed a ragged book from hand to hand. The book had an alphabet in it, some figures and tables, and a little spelling – that is to say, it had had once. As soon as this volume began to circulate, Mr. Wopsle's great-aunt fell into a state of coma; arising either from sleep or a rheumatic paroxysm. The pupils then entered among themselves upon a competitive examination on the subject of Boots, with the view of ascertaining who could tread the hardest upon whose toes. This mental exercise lasted until Bidy made a rush at them and distributed three defaced Bibles (shaped as if they had been unskilfully cut off the chump-end of something), more illegibly printed at the best than any curiosities of literature I have since met with, speckled all over with ironmould, and having various specimens of the insect world smashed between their leaves.

SubQuestion No : 5

Q.5 Identify the correct inference that can be drawn from the passage.

- Ans** ☒ 1. The students would check each other's shoes, to determine who could trample the hardest.
- ☐ 2. The Bibles circulated were in excellent condition.
- ☐ 3. Mr. Wopsle and his great aunt would tutor the students together.
- ☐ 4. Mr. Wopsle's great aunt was very active during the course sessions.

Question ID : 630680385663

Option 1 ID : 6306801503406

Option 2 ID : 6306801503407

Option 3 ID : 6306801503409

Option 4 ID : 6306801503408

Status : Answered

Chosen Option : 4

Comprehension:

Read the given passage carefully and select the most appropriate answer to the questions that follow.

The Educational scheme or Course established by Mr. Wopsle's great-aunt may be resolved into the following synopsis. The pupils ate apples and put straws down one another's backs, until Mr Wopsle's great-aunt collected her energies, and made an indiscriminate totter at them with a birch-rod. After receiving the charge with every mark of derision, the pupils formed in line and buzzingly passed a ragged book from hand to hand. The book had an alphabet in it, some figures and tables, and a little spelling – that is to say, it had had once. As soon as this volume began to circulate, Mr. Wopsle's great-aunt fell into a state of coma; arising either from sleep or a rheumatic paroxysm. The pupils then entered among themselves upon a competitive examination on the subject of Boots, with the view of ascertaining who could tread the hardest upon whose toes. This mental exercise lasted until Biddy made a rush at them and distributed three defaced Bibles (shaped as if they had been unskilfully cut off the chump-end of something), more illegibly printed at the best than any curiosities of literature I have since met with, speckled all over with ironmould, and having various specimens of the insect world smashed between their leaves.

SubQuestion No : 6

Q.6 Select the options the most appropriate meaning of the bracketed word given in the sentence below.

'..Mr Wopsle's great-aunt collected her energies, and made an indiscriminate (totter) at them with a birch-rod.'

- Ans
- ☒ 1. stable
 - ☒ 2. scream
 - ☒ 3. wobble
 - ☒ 4. jump

Question ID : 630680385664

Option 1 ID : 6306801503413

Option 2 ID : 6306801503411

Option 3 ID : 6306801503412

Option 4 ID : 6306801503410

Status : Answered

Chosen Option : 2

Q.7 Choose the correct option to fill in the blank that completes the proverb used in the given situation

Jane noticed a small leak in the roof and decided to fix it immediately, knowing that a stitch in time _____ and taking care of the problem early would prevent further damage to her house.

- Ans
- ☒ 1. makes perfect
 - ☒ 2. is priceless
 - ☒ 3. saves lives
 - ☒ 4. saves nine

Question ID : 630680385298

Option 1 ID : 6306801502061

Option 2 ID : 6306801502059

Option 3 ID : 6306801502058

Option 4 ID : 6306801502060

Status : Answered

Chosen Option : 4

Q.8 Select the most appropriate missing sentence to complete the following paragraph:
The artist carefully blended colours on the canvas, creating a mesmerizing masterpiece. The brushstrokes were precise, capturing every detail with perfection. As the viewers admired the artwork, a _____.

- Ans
- ☒ 1. rainstorm began outside, causing some visitors to rush for cover.
 - ☒ 2. critic wrote a scathing review, dismissing the artwork as mediocre.
 - ☒ 3. spontaneous applause erupted, acknowledging the artist's skill.
 - ☒ 4. curator praised the artist's talent and offered a gallery exhibition.

Question ID : 630680385252

Option 1 ID : 6306801501897

Option 2 ID : 6306801501896

Option 3 ID : 6306801501895

Option 4 ID : 6306801501894

Status : Answered

Chosen Option : 3

Q.9 Arrange the following sentences in the correct order to form a coherent paragraph:
With determination and teamwork, they overcame various challenges.
A. The team worked tirelessly day and night to prepare for the championship.
B. Finally, the championship day arrived, and they gave their best performance.
C. The coach's guidance and support played a crucial role in their success.
D. They faced tough competition from other teams throughout the tournament.
This victory marked a significant milestone for the team.

- Ans
- ☒ 1. ABDC
 - ☒ 2. ABCD
 - ☒ 3. ACBD
 - ☒ 4. ADCB

Question ID : 630680385465

Option 1 ID : 6306801502677

Option 2 ID : 6306801502675

Option 3 ID : 6306801502676

Option 4 ID : 6306801502674

Status : Answered

Chosen Option : 1

Q.10 The sentences given below are all part of a paragraph but do not necessarily fall in the order that they are in. The first and the last sentences of the paragraph are given.
Choose the option that arranges these sentences to form a meaningful paragraph.
At dawn I was awakened by the smell of coffee,
A. season. I could also feel the stamping of the horses, which they had
B. the rattling of guns, and the heavy footsteps of the men as they
C. ridden out from town and hitched under the trees, where they
D. strode about, promising themselves the greatest luck of the
stood all night, neighing loudly, impatient to be off.

- Ans
- ☒ 1. ACDB
 - ☒ 2. CDAB
 - ☒ 3. BDAC
 - ☒ 4. ABCD

Question ID : 630680385584

Option 1 ID : 6306801503114

Option 2 ID : 6306801503116

Option 3 ID : 6306801503115

Option 4 ID : 6306801503117

Status : Answered

Chosen Option : 3

Q.11 Use positive question tag for statement given below
"You are a student, _____?"

- Ans ☒ 1. are you?
☒ 2. aren't you?
☒ 3. isn't it?
☒ 4. don't you?

Question ID : 630680385456
 Option 1 ID : 6306801502640
 Option 2 ID : 6306801502638
 Option 3 ID : 6306801502639
 Option 4 ID : 6306801502641
 Status : Answered
 Chosen Option : 2

Q.12 Select the most appropriate antonym of the given word.
Arduous

- Ans ☒ 1. Kindness
☒ 2. Fragile
☒ 3. Thrilling
☒ 4. Tendency

Question ID : 630680385410
 Option 1 ID : 6306801502472
 Option 2 ID : 6306801502473
 Option 3 ID : 6306801502471
 Option 4 ID : 6306801502470
 Status : Answered
 Chosen Option : 2

Q.13 Select the word segment that substitutes (replaces) the bracketed word segment correctly and completes the sentence meaningfully. Select the option 'no correction required' if the sentence is correct as given.
This imagination was dreadful in itself, but soothing in as much (as it suppose to the) safety of my friends.

- Ans ☒ 1. as it is supposed to
☒ 2. as it was suppose to the
☒ 3. as it supposed the
☒ 4. No correction required.

Question ID : 630680385633
 Option 1 ID : 6306801503290
 Option 2 ID : 6306801503291
 Option 3 ID : 6306801503292
 Option 4 ID : 6306801503293
 Status : Answered
 Chosen Option : 3

Q.14 Which of the following words is a synonym for "arduous"?

- Ans ☒ 1. Effortless
☒ 2. Easy
☒ 3. Simple
☒ 4. Difficult

Question ID : 630680385311
 Option 1 ID : 6306801502113
 Option 2 ID : 6306801502111
 Option 3 ID : 6306801502112
 Option 4 ID : 6306801502110
 Status : Answered
 Chosen Option : 4

Q.15 Fill in the blank with the most appropriate option.

Rising temperatures and extreme weather events, such as hurricanes and droughts, are becoming more frequent and intense. _____, sea levels are rising as polar ice melts, threatening coastal communities and ecosystems.

- Ans ☒ 1. In addition
☒ 2. Furthermore
☒ 3. Otherwise
☒ 4. Nonetheless

Question ID : 630680385461
 Option 1 ID : 6306801502659
 Option 2 ID : 6306801502658
 Option 3 ID : 6306801502661
 Option 4 ID : 6306801502660
 Status : Answered
 Chosen Option : 2

Q.16 Select the word segment that substitutes (replaces) the bracketed word segment correctly and completes the sentence meaningfully. Select the option 'no correction required' if the sentence is correct as given.

One morning I left the cage on the window-seat (while I went to fetch water) for his bath.

- Ans ☒ 1. while I trying to fetch water
☒ 2. as I went to gone water
☒ 3. No correction required.
☒ 4. as soon as I went to fetch water

Question ID : 630680385627
 Option 1 ID : 6306801503267
 Option 2 ID : 6306801503266
 Option 3 ID : 6306801503269
 Option 4 ID : 6306801503268
 Status : Answered
 Chosen Option : 3

Comprehension:

Based on the following cloze passage answer the question given below:

Sarah was a(1) _____ girl with a heart full of compassion. Belonging from an orphanage, she would often volunteer at the local(2) _____ to help those in need. Her(3) _____ nature and willingness to assist others made her a beloved member of the community. She would actively participate in charity events and fundraisers to support various causes.

SubQuestion No : 17

Q.17 Fill in the blank (2) with the appropriate word from the options below:

- Ans

 1. school

 2. hospital

 3. orphanage

 4. restaurant

Question ID : 630680385487

Option 1 ID : 6306801502751

Option 2 ID : 6306801502752

Option 3 ID : 6306801502750

Option 4 ID : 6306801502753

Status : Answered

Chosen Option : 3

Comprehension:

Based on the following cloze passage answer the question given below:

Sarah was a(1) _____ girl with a heart full of compassion. Belonging from an orphanage, she would often volunteer at the local(2) _____ to help those in need. Her(3) _____ nature and willingness to assist others made her a beloved member of the community. She would actively participate in charity events and fundraisers to support various causes.

SubQuestion No : 18

Q.18 Fill in the blank (3) with the appropriate word from the options below:

- Ans

 1. empathetic

 2. hostile

 3. aloof

 4. introverted

Question ID : 630680385488

Option 1 ID : 6306801502756

Option 2 ID : 6306801502757

Option 3 ID : 6306801502754

Option 4 ID : 6306801502755

Status : Answered

Chosen Option : 1

Comprehension:

Based on the following cloze passage answer the question given below:

Sarah was a(1) _____ girl with a heart full of compassion. Belonging from an orphanage, she would often volunteer at the local(2) _____ to help those in need. Her(3) _____ nature and willingness to assist others made her a beloved member of the community. She would actively participate in charity events and fundraisers to support various causes.

SubQuestion No : 19

Q.19 Fill in the blank (1) with the appropriate word from the options below:

- Ans ☒ 1. genius
☒ 2. reckless
☒ 3. caring
☒ 4. selfish

Question ID : 630680385486

Option 1 ID : 6306801502748

Option 2 ID : 6306801502749

Option 3 ID : 6306801502746

Option 4 ID : 6306801502747

Status : Answered

Chosen Option : 3

Q.20 Choose the appropriate phrasal verb to complete the sentence:

The police managed to _____ the thieves after a lengthy investigation.

- Ans ☒ 1. bring down
☒ 2. set up
☒ 3. catch up with
☒ 4. go over

Question ID : 630680385236

Option 1 ID : 6306801501833

Option 2 ID : 6306801501831

Option 3 ID : 6306801501830

Option 4 ID : 6306801501832

Status : Answered

Chosen Option : 1

Q.21 The statement below has been given with bracketed text. Select the option with correct Idiom for the bracketed text.

Failing to get those tickets , (will ruin my plans and image).

- Ans ☒ 1. easy come, easy go
☒ 2. drop in the bucket
☒ 3. cook my goose
☒ 4. come apart

Question ID : 630680385406

Option 1 ID : 6306801502456

Option 2 ID : 6306801502455

Option 3 ID : 6306801502457

Option 4 ID : 6306801502454

Status : Answered

Chosen Option : 3

Q.22 Select the most appropriate missing sentence to complete the paragraph meaningfully.
He had changed since his New Haven years. Now he was a sturdy, straw haired man of thirty with a rather hard mouth and a supercilious manner. Two shining, arrogant eyes had established dominance over his face and gave him the appearance of always leaning aggressively forward. Not even the effeminate swank of his riding clothes could hide the enormous power of that body-he seemed to fill those glistening boots until he strained the top lacing and you _____.

- Ans ☒ 1. could not answer without a great deal of thought, and it sat for a long time with one finger pressed upon its forehead.
- ☒ 2. could not think of anything to say, she simply bowed, and took the thimble, looking as solemn as she could.
- ☒ 3. could see a great pack of muscle shifting when his shoulder moved under his thin coat.
- ☒ 4. could not taste theirs, and the small ones choked and had to be patted on the back.

Question ID : 630680385361

Option 1 ID : 6306801502294

Option 2 ID : 6306801502296

Option 3 ID : 6306801502295

Option 4 ID : 6306801502297

Status : Answered

Chosen Option : 3

Q.23 Select the most appropriate word for the given phrase.
Study of collection of coins, tokens, paper money etc.

- Ans ☒ 1. Theology
- ☒ 2. Ornithology
- ☒ 3. Numismatics
- ☒ 4. Entomology

Question ID : 630680385620

Option 1 ID : 6306801503239

Option 2 ID : 6306801503238

Option 3 ID : 6306801503240

Option 4 ID : 6306801503241

Status : Answered

Chosen Option : 3

Q.24 Fill in the blank with the correct part of speech.
I enjoy playing both the piano _____ singing in the choir.

- Ans ☒ 1. so
- ☒ 2. and
- ☒ 3. after
- ☒ 4. or

Question ID : 630680385231

Option 1 ID : 6306801501812

Option 2 ID : 6306801501810

Option 3 ID : 6306801501813

Option 4 ID : 6306801501811

Status : Answered

Chosen Option : 2

Q.25 Identify the synonym for the word "precise" in the following sentence
She provided a precise explanation of the scientific theory, leaving no room for confusion.

- Ans ☒ 1. Accurate
☒ 2. Approximate
☒ 3. Ambiguous
☒ 4. Vague

Question ID : 630680385312
Option 1 ID : 6306801502114
Option 2 ID : 6306801502117
Option 3 ID : 6306801502116
Option 4 ID : 6306801502115
Status : Answered
Chosen Option : 1

