



SSC ONLINE EXAMINATION

CANDIDATE RESPONSE SHEET/GRIEVANCE SYSTEM

View Your Responses

Click Here Grievance About Question

Click Here View Grievance Questions

Admin loggedin.[ Logout ]

Exam Name : Steno Grade C and D

Test Date : 08 Aug 2025

Test Time : 05:30 PM

Centre : UKDEH070\_PESTLE WEED COLLEGE OF INFORMATION TECHNOLOGY\_360107

Correct Option selected Wrong Option selected Correct Option Not Answered

PART - A (General Intelligence & Reasoning)

Q.No: 1

**Criteria to be selected as Senior Analyst – Risk and Compliance(as on 01-04-2024):**

Must have a Postgraduate degree in Finance, Economics, or Risk Management with minimum 70% marks.  
Should have work experience of 5–8 years, out of which minimum 3 years must be in risk/compliance domain.  
Age must be between 30 and 40 years.  
Must have cleared at least one international certification such as CFA, FRM, or CAMS.

**Special Clause:**

If the candidate has only 60–69% marks in PG, but holds 2 certifications (from CFA, FRM, CAMS), and more than 7 years of experience, refer to Director of Risk Oversight.  
If the candidate is underage by less than 6 months, refer to CEO's desk.

**Case:**

Rajat holds a PG in Economics with 67%, has 7.5 years of experience (including 3.5 years in compliance), and holds CFA and FRM certifications. He is 29 years and 7 months old as of 01-04-2024.

**Question:** What should be done in Rajat's case?

**वरिष्ठ विश्लेषक - जोखिम एवं अनुपालन (01-04-2024 तक) के रूप में चयन हेतु मानदंड:**  
वित्त, अर्थशास्त्र या जोखिम प्रबंधन में न्यूनतम 70% अंकों के साथ स्नातकोत्तर उपाधि होनी चाहिए।  
5-8 वर्षों का कार्य अनुभव होना चाहिए, जिसमें से कम से कम 3 वर्ष जोखिम/अनुपालन क्षेत्र में होने चाहिए।  
आयु 30 से 40 वर्ष के बीच होनी चाहिए।  
सीएफए, एफआरएम, या सीएएमएस जैसे कम से कम एक अंतर्राष्ट्रीय प्रमाणन उत्तीर्ण होना चाहिए।

**विशेष खंड:**  
यदि उम्मीदवार के पीजी में केवल 60-69% अंक हैं, लेकिन उसके पास 2 प्रमाणन (सीएफए, एफआरएम, सीएएमएस से) और 7 वर्ष से अधिक का अनुभव है, तो जोखिम निरीक्षण निदेशक से संपर्क करें।  
यदि उम्मीदवार 6 महीने से कम उम्र का है, तो सीईओ के डेस्क से संपर्क करें।

**मामला:**  
रजत के पास अर्थशास्त्र में 67% अंकों के साथ स्नातकोत्तर की डिग्री है, 7.5 वर्षों का अनुभव (अनुपालन में 3.5 वर्ष सहित), और CFA तथा FRM प्रमाणपत्र हैं।  
01-04-2024 तक उसकी आयु 29 वर्ष और 7 महीने है।

**प्रश्न:** रजत के मामले में क्या किया जाना चाहिए?

Refer to Director of Risk Oversight

जोखिम निरीक्षण निदेशक से संपर्क करें

Refer to CEO's desk

सीईओ के डेस्क का संदर्भ लें

Reject the candidate

उम्मीदवार को अस्वीकार करें

Select the candidate

उम्मीदवार का चयन करें

Q.No: 2

A bag has 4 fair coins (1 head 1 tail) and 4 double-headed coins. A coin is drawn and flipped 3 times all heads. Probability it's double-headed?

एक थैले में 4 निष्पक्ष सिक्के (1 चित 1 पट) और 4 दोमुँहे सिक्के हैं। एक सिक्का निकाला जाता है और उसे तीन बार उछाला जाता है, सभी पर चित आता है। क्या संभावना है कि वह दोमुँहा हो?

4

5

4

5

Adda247

# Test Prime

**ALL EXAMS, ONE SUBSCRIPTION**



**80,000+**  
Mock Tests



**Personalised  
Report Card**



**Unlimited  
Re-Attempt**



**600+**  
Exam Covered



**20,000+** Previous  
Year Papers



**500%**  
Refund



**ATTEMPT FREE MOCK NOW**

8	
9	
8	
9	
2	
3	
2	
3	
3	
4	
3	
4	
Not Answered	

Q.No: 3	If $5■ = 20$ and $7■ = 28$ , then $9■ = ?$ अगर $5■ = 20$ और $7■ = 28$ , तो $9■ = ?$
42	
42	
38	
38	
36	
36	
40	
40	

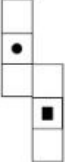
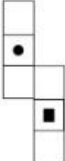
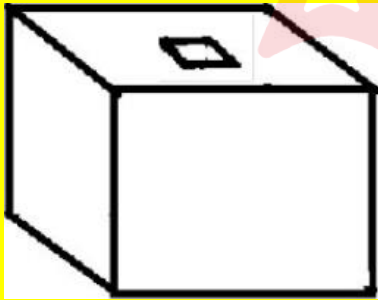
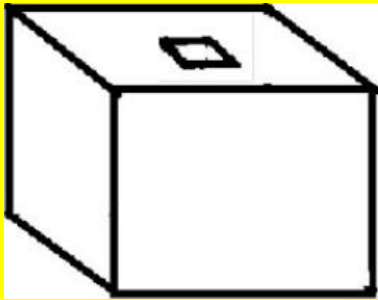
Q.No: 4	Which two signs and two numbers should be interchanged in the equation given below to make the following equation correct? $10+4-5\times 2=19$ नीचे दिए गए समीकरण को सही बनाने के लिए किन दो चिह्नों और दो संख्याओं को आपस में बदलना चाहिए? $10+4-5\times 2=19$
Signs $\times$ and $-$ , Numbers 5 and 4 चिह्न $\times$ और $-$ , संख्याएँ 5 और 4	
Signs $-$ and $+$ , Numbers 10 and 5 चिह्न $-$ और $+$ , संख्याएँ 10 और 5	
Signs $\times$ and $+$ , Numbers 2 and 4 चिह्न $\times$ और $+$ , संख्याएँ 2 और 4	
Signs $+$ and $-$ , Numbers 10 and 2 चिह्न $+$ और $-$ , संख्याएँ 10 और 2	

Q.No: 5	Find the ODD one out. Blue, Green, Red, Smooth इनमें से विषम को पहचानें। नीला, हरा, लाल, चिकना
Smooth	
चिकना	
Red	
लाल	
Green	
हरा	
Blue	
नीला	

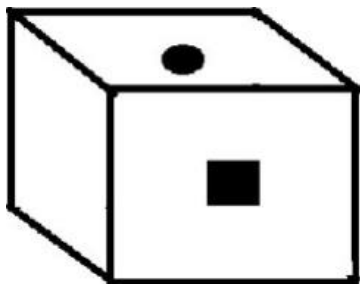
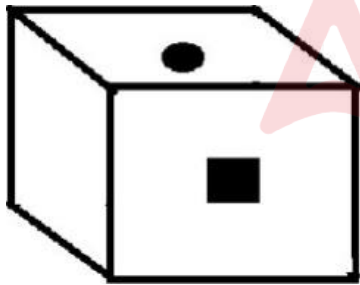
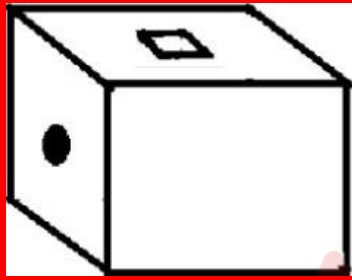
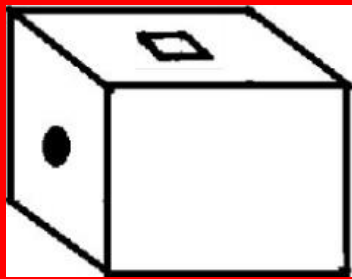
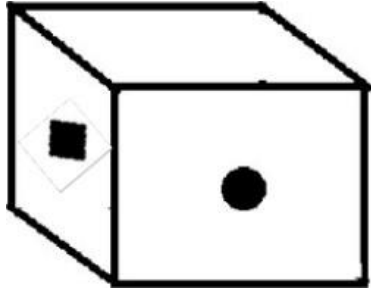
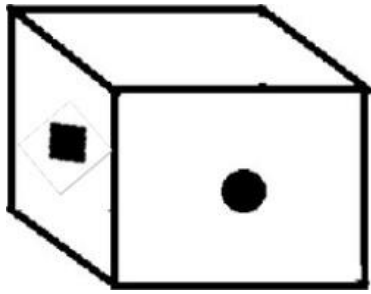
Q.No: 6	If $+$ means $\times$ , $\div$ means $-$ , $-$ means $\div$ then, and $\times$ means $+$ then, what is $150 \times 25 - 5 \div 10 + 2$ ? यदि $+$ का अर्थ $\times$ है, $\div$ का अर्थ $-$ है, $-$ का अर्थ $\div$ है, और $\times$ का अर्थ $+$ है, तो $150 \times 25 - 5 \div 10 + 2$ क्या है?
130	
130	

125
125
135
135
140
140

Q.No: 7	<p>In each of the following questions, two numbers are given which follow a certain logical or arithmetic relationship. Identify the same pattern and apply it to find the missing number in the second pair. Choose the correct option from the given alternatives.</p> <p><b>21463 : 43685 :: 38521 : ?</b></p> <p>निम्नलिखित प्रत्येक प्रश्न में दो संख्याएँ दी गई हैं जो एक निश्चित तार्किक या अंकगणितीय संबंध का पालन करती हैं। उसी पैटर्न को पहचानिए और दूसरे जोड़े में लुप्त संख्या ज्ञात करने के लिए उसका प्रयोग कीजिए। दिए गए विकल्पों में से सही विकल्प चुनिए।</p> <p><b>21463 : 43685 :: 38521 : ?</b></p>
50643	
50643	
67890	
67890	
60753	
60753	
60743	
60743	
Not Answered	

Q.No: 8	<p>Select from the alternatives, the box that can be formed by folding the sheet as shown in figure.</p> <div></div> <p>विकल्पों में से उस बॉक्स का चयन करें जो चित्र में दिखाए अनुसार शीट को मोड़कर बनाया जा सकता है।</p> <div></div>
<div></div>	
<div></div>	

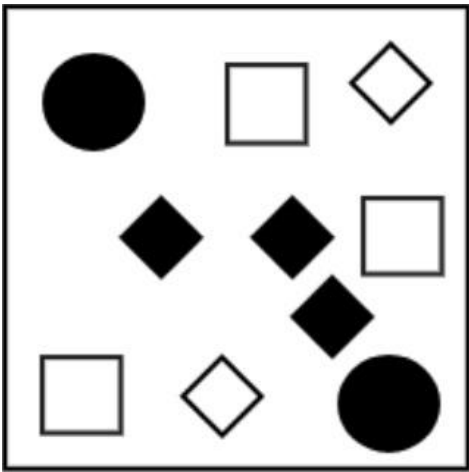
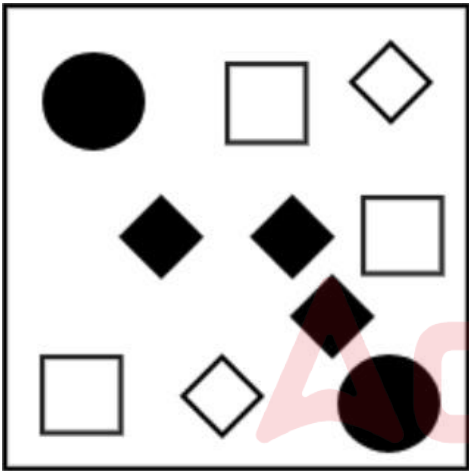
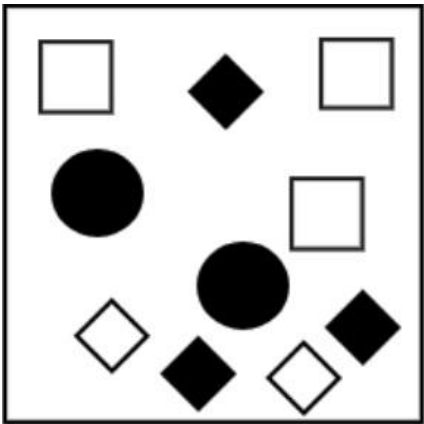
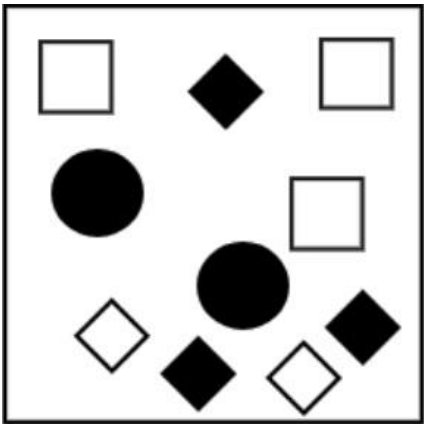




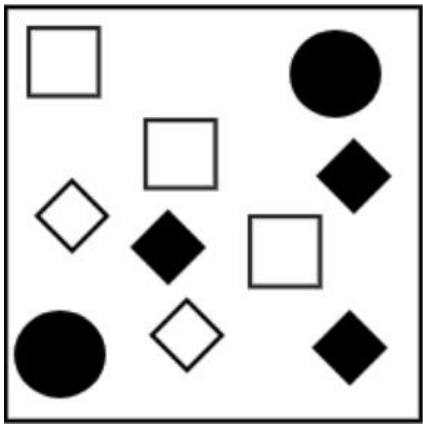
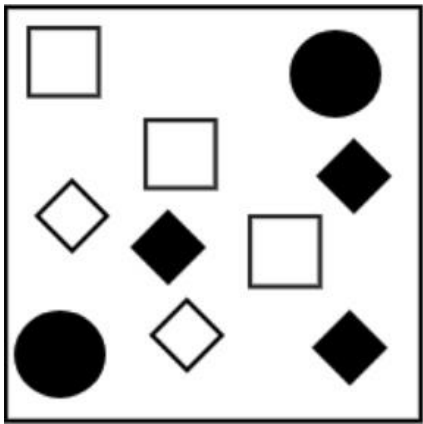


Q.No: 9

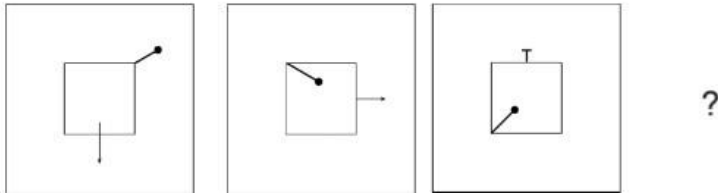
Choose the figure which is different from the rest?

वह आकृति चुनें जो बाकी से अलग है?

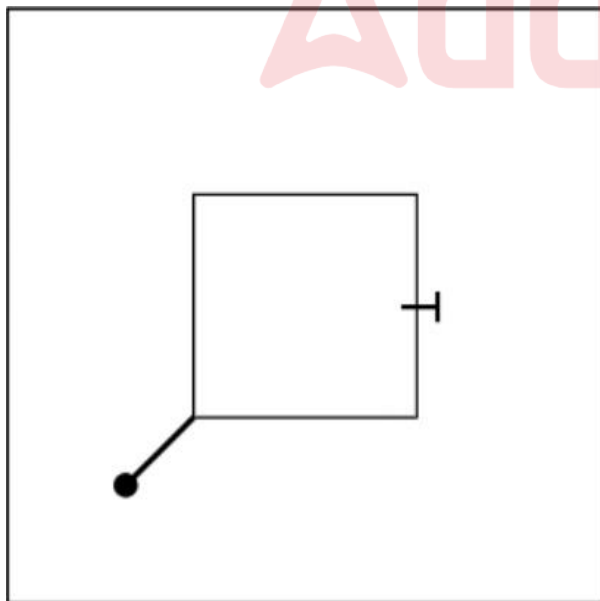
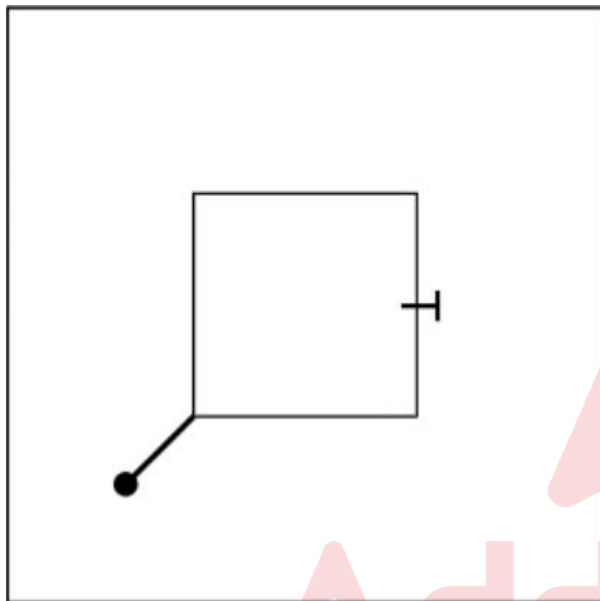
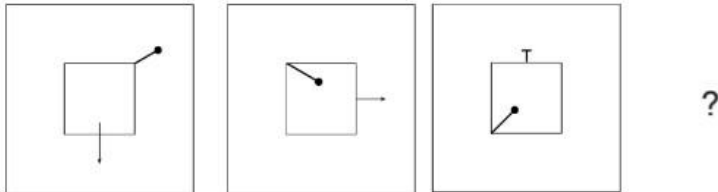




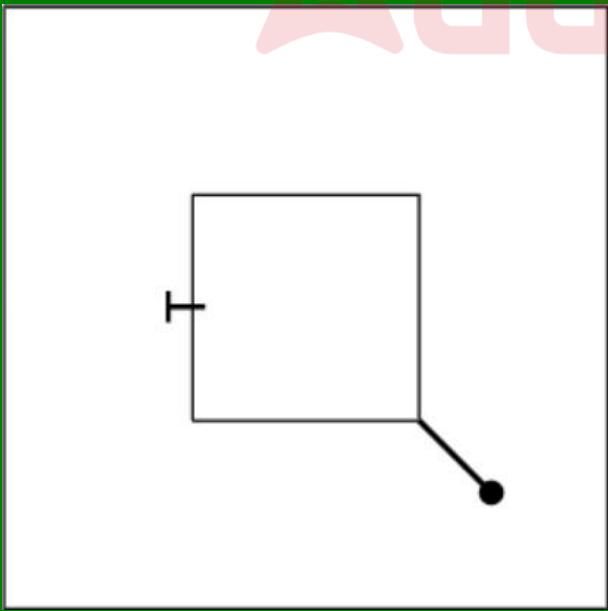
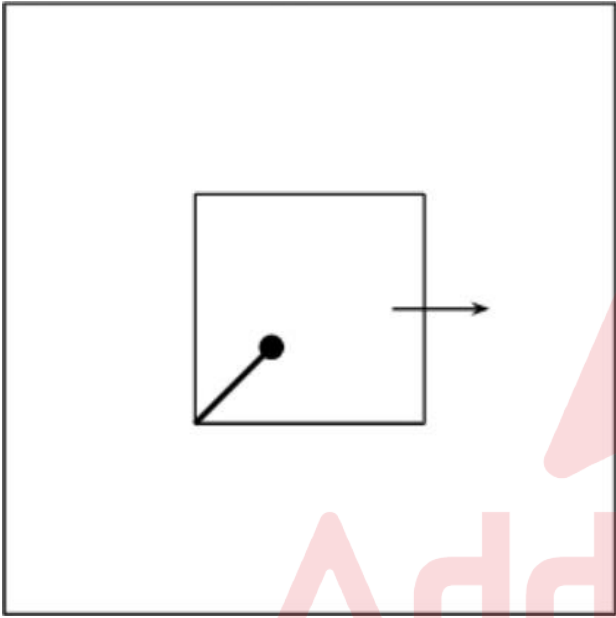
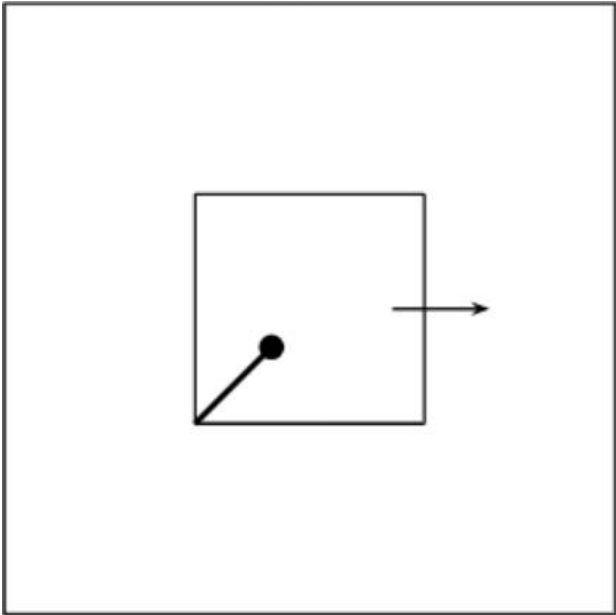
Q.No: 10 Figure A and B are related in a particular manner. Establish the same relationship between figures C and D by choosing the figure amongst these four options which would replace the question mark in figure D .

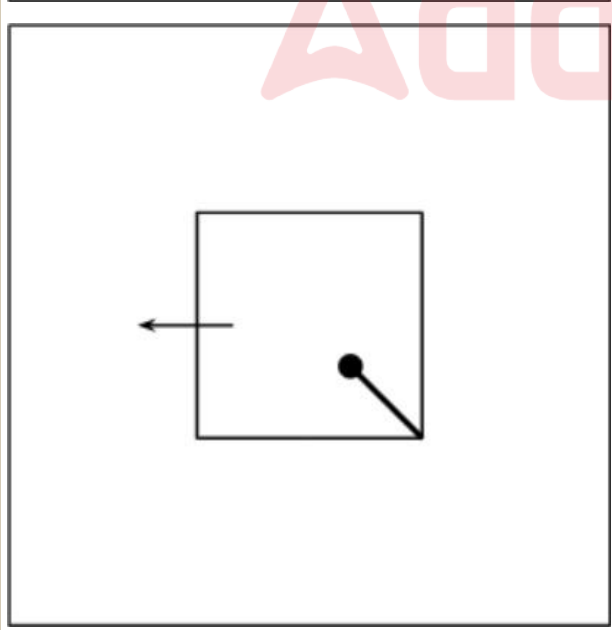
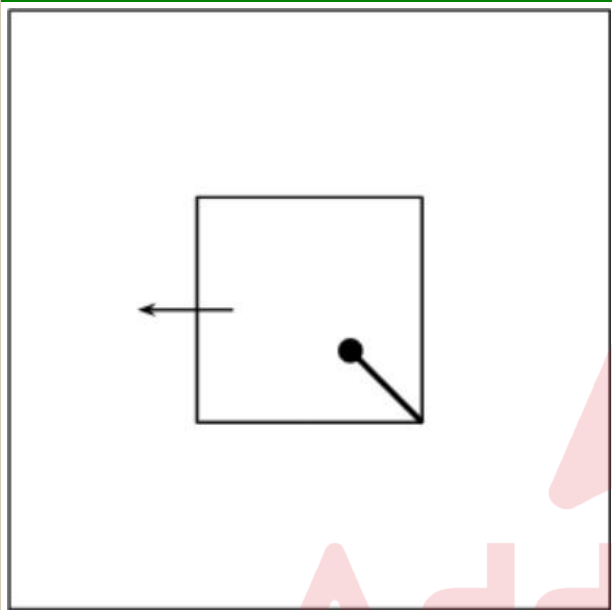
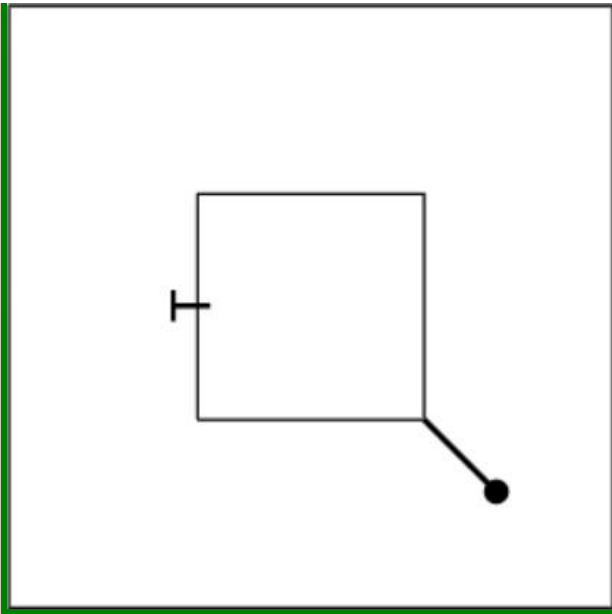


आकृति A और B एक विशेष तरीके से संबंधित हैं। इन चार विकल्पों में से वह आकृति चुनकर आकृति C और D के बीच समान संबंध स्थापित कीजिए जो आकृति D में प्रश्नवाचक चिह्न के स्थान पर आएगी।

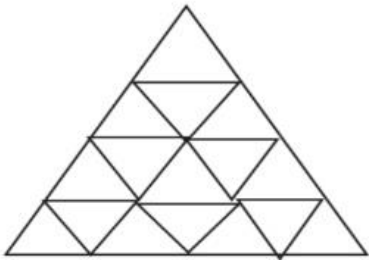




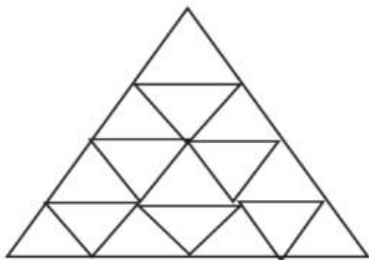




Q.No: 11    How many triangles are in the given figure?



दी गई आकृति में कितने त्रिभुज हैं?



- 27
- 27
- 20
- 20
- 25
- 25
- 24
- 24

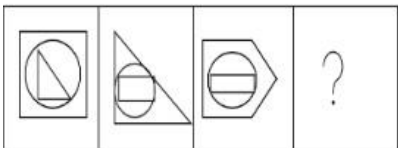
Not Answered

Q.No: 12    In each of the following questions, two numbers are given which follow a certain logical or arithmetic relationship. Identify the same pattern and apply it to find the missing number in the second pair. Choose the correct option from the given alternatives.  
**14825 : 36047 :: 27416 : ?**  
निम्नलिखित प्रत्येक प्रश्न में दो संख्याएँ दी गई हैं जो एक निश्चित तार्किक या अंकगणितीय संबंध का पालन करती हैं। समान पैटर्न की पहचान कीजिए और दूसरे जोड़े में लुप्त संख्या ज्ञात करने के लिए इसका प्रयोग कीजिए। दिए गए विकल्पों में से सही विकल्प चुनिए।  
**14825 : 36047 :: 27416 : ?**

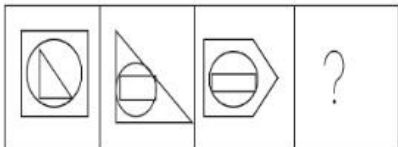
- 49638
- 49638
- 39638
- 39638
- 48637
- 48637
- 38637
- 38637

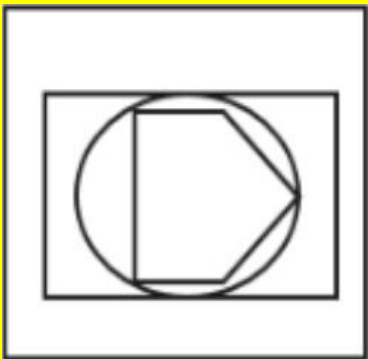
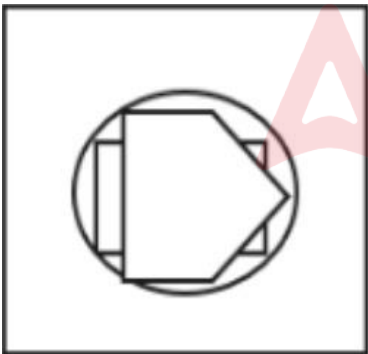
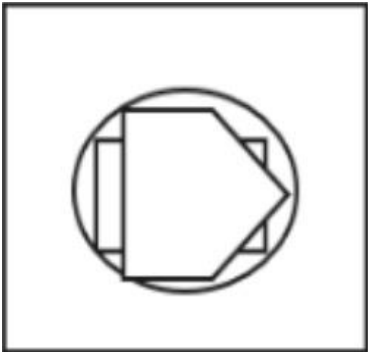
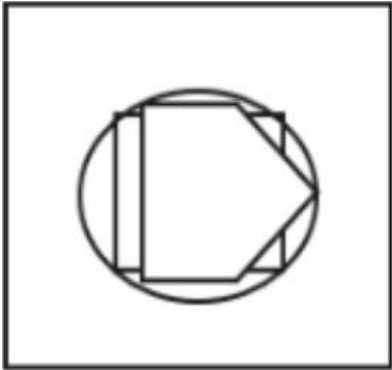
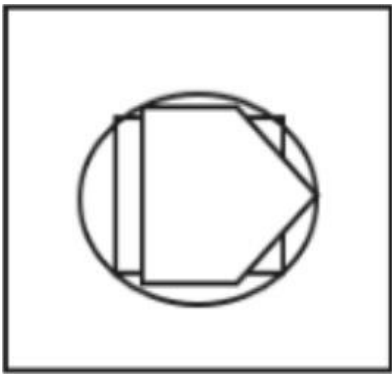
Not Answered

Q.No: 13    Identify the figure that best fits in place of the question mark.


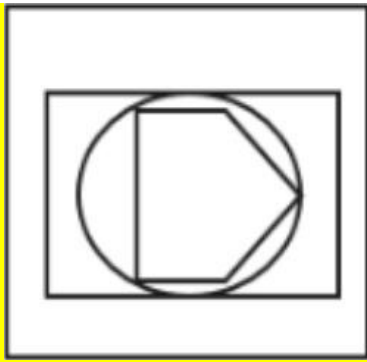


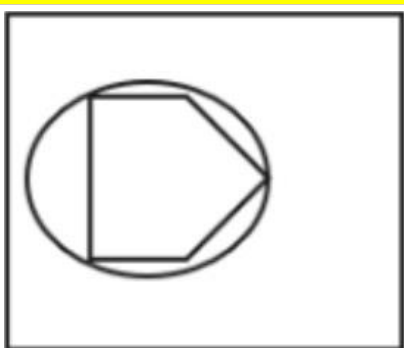
उस आकृति को पहचानिए जो प्रश्न चिह्न के स्थान पर सबसे अच्छी तरह बैठेगी।

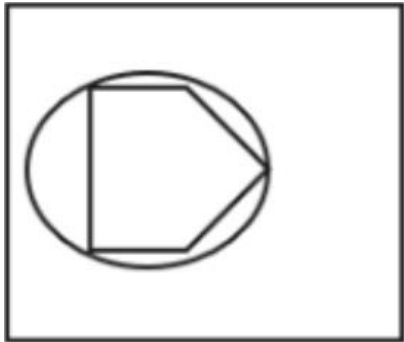




Adda247







Not Answered

Q.No: 14

A man walks 12 km north, then turns right and walks 8 km, then again turns right and walks 12 km. How far is he from the starting point?

एक आदमी 12 किमी उत्तर की ओर चलता है, फिर दाएँ मुड़कर 8 किमी चलता है, फिर दाएँ मुड़कर 12 किमी चलता है। वह शुरुआती बिंदु से कितनी दूर है?

8 km

8 किमी

12 km

12 किमी

4 km

4 किमी


6 km


6 किमी


Q.No: 15


Which figure doesn't belong based on vertices?


कौन सी आकृति शीर्षों पर आधारित नहीं है?

















Q.No: 16	Choose the next figure.  □ □ □ □ ? अगली आकृति चुनें।  □ □ □ □ ?
■	
■	
□	
□	
■	
■	
□	
□	

Q.No: 17	Complete the series: 3, 6, 12, 24, ?, 96 श्रृंखला पूरी करें: 3, 6, 12, 24, ?, 96
48	
48	
40	
40	
45	
45	
36	
36	

Q.No: 18	Find the next term in the given series. 5C, 6D, 10F, 19I, ? दी गई श्रृंखला में अगला पद ज्ञात कीजिए। 5C, 6D, 10F, 19I, ?
30J	
30J	
34K	
34K	
33L	
33L	
35M	
35M	

Q.No: 19	In each of the following questions, a specific pattern is followed for both the letters and the numbers. Identify the set of numbers that correctly fills the blanks in the given sequence. A, O, D, 8, G, __, J, 42, M, __, P, 100, S, 138, V, 182 निम्नलिखित प्रत्येक प्रश्न में, अक्षरों और संख्याओं दोनों के लिए एक विशिष्ट पैटर्न दिया गया है। दिए गए क्रम में रिक्त स्थानों को सही ढंग से भरने वाले संख्याओं के समूह को पहचानिए। A, O, D, 8, G, __, J, 42, M, __, P, 100, S, 138, V, 182
(15, 55)	
(15, 55)	
(25, 73)	
(25, 73)	
(20, 65)	
(20, 65)	
(22, 68)	
(22, 68)	
Not Answered	



Q.No: 20 In each of the following questions, a specific relationship is given between two words. Identify the word that shares a similar semantic relationship with the given pair. Choose the most appropriate option from the four choices given below.  
Seed : Sapling :: Fetus : ?  
निम्नलिखित प्रत्येक प्रश्न में दो शब्दों के बीच एक विशिष्ट संबंध दिया गया है। उस शब्द की पहचान कीजिए जो दिए गए युग्म के साथ समान अर्थ संबंध साझा करता है। नीचे दिए गए चार विकल्पों में से सबसे उपयुक्त विकल्प चुनिए।  
Seed : Sapling :: Fetus : ?

Embryo

भ्रूण

Child

बच्चा

Adult

वयस्क

Infant

शिशु

Q.No: 21 How many straight lines are there in the figure? (Don't consider the extra line if there is another line at 180 degrees)



आकृति में कितनी सीधी रेखाएँ हैं? (अगर 180 डिग्री पर कोई दूसरी रेखा हो तो अतिरिक्त रेखा पर विचार न करें)



5

5

12

12

10

10

4

4

Q.No: 22 If 'Alpha' means addition, 'Beta' means subtraction, 'Gamma' means multiplication, and 'Delta' means division, then what is the value of 100 Delta 5 Beta 10 Alpha 2 Gamma 3?

यदि 'अल्फा' का अर्थ जोड़ है, 'बीटा' का अर्थ घटाना है, 'गामा' का अर्थ गुणा है, और 'डेल्टा' का अर्थ भाग है, तो 100 डेल्टा 5 बीटा 10 अल्फा 2 गामा 3 का मान क्या है?

36

36

22

22

26

26

16

Q.No: 23 An unfolded box (cube or cuboid) appeared as shown in the figure, when sheet is folded to form a box. find the number on the face opposite to 6.



जब शीट को मोड़कर बॉक्स बनाया जाता है तो आकृति में दिखाए अनुसार एक खुला बॉक्स (घन या घनाभ) दिखाई देता है। 6 के विपरीत फलक पर संख्या ज्ञात कीजिए।



4

4

2

2

1

1

3

3

Q.No: 24 A shopkeeper sells a pen for Rs. 45 after giving a discount of 10%. What is the marked price of the pen?

एक दुकानदार एक पेन को 10% की छूट देकर 45 रुपये में बेचता है। पेन की अंकित कीमत क्या है?

Rs. 60

60 रुपये

Rs. 55

55 रुपये

Rs. 65

65 रुपये

Rs. 50

50 रुपये

Q.No: 25 Complete the analogy: HJL : JLN :: QSU : ?

सादृश्य पूरा करें: HJL : JLN :: QSU : ?

STX

STX

SUV

SUV

SUV

RSW

RSW

Q.No: 26 34, 68, 102, 136, 170, 185 - which number doesn't follow the series rule?

34, 68, 102, 136, 170, 185 - कौन सी संख्या श्रृंखला नियम का पालन नहीं करती है?

170

170

34

34

136

136

185  
185

Q.No: 27

**Criteria to be selected as Field Officer (as on 01-01-2024):**

Graduate in Agriculture or Environmental Science with at least 65% marks.

Age between 23 and 35 years.

Must have a valid driving license.

Should have field experience of at least 2 years.

**Special Clause:**

If candidate has no driving license but more than 4 years of field experience, refer to Regional Head.

**Case:**

Shalini is 29 years old, has 68% in Environmental Science, 5 years of field work, but does not hold a driving license.

**Question:** What should be done in Shalini's case?

**फील्ड ऑफिसर के रूप में चयन के मानदंड (01-01-2024 तक):**

कृषि या पर्यावरण विज्ञान में कम से कम 65% अंकों के साथ स्नातक।

आयु 23 से 35 वर्ष के बीच।

वैध ड्राइविंग लाइसेंस होना आवश्यक है।

कम से कम 2 वर्ष का फील्ड अनुभव होना चाहिए।

**विशेष खंड:**

यदि उम्मीदवार के पास ड्राइविंग लाइसेंस नहीं है, लेकिन 4 वर्ष से अधिक का फील्ड अनुभव है, तो क्षेत्रीय प्रमुख से संपर्क करें।

**मामला:**

शालिनी 29 वर्ष की है, उसके पर्यावरण विज्ञान में 68% अंक हैं, उसने 5 वर्ष फील्ड वर्क किया है, लेकिन उसके पास ड्राइविंग लाइसेंस नहीं है।

**प्रश्न:** शालिनी के मामले में क्या किया जाना चाहिए?

Reject the candidate

उम्मीदवार को अस्वीकार करें

Refer to Regional Head

क्षेत्रीय प्रमुख से संपर्क करें

Call for interview

साक्षात्कार के लिए बुलावा

Select the candidate

उम्मीदवार का चयन करें

Q.No: 28

Identify the odd image out:

विषम छवि को पहचानें:

Q.No: 29

**Read the information carefully and identify the correct relationship between the persons mentioned in the question.**

Ravi is the son of Pooja.

Pooja is the daughter-in-law of Shyam.

Shyam is the father of Karan.

**Question:** How is Karan related to Ravi?

**दी गई जानकारी को ध्यानपूर्वक पढ़ें और प्रश्न में उल्लिखित व्यक्तियों के बीच सही संबंध पहचानें।**

रवि, पूजा का पुत्र है।

पूजा, श्याम की पुत्रवधू है।

श्याम, करण का पिता है।

**प्रश्न:** करण, रवि से किस प्रकार संबंधित है?

Brother
भाई
Father
पिता
Uncle
चाचा
Grandfather
दादाजी

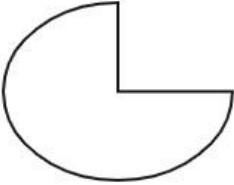
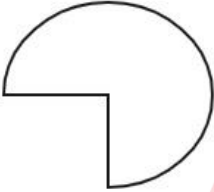
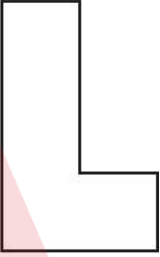
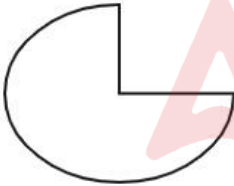
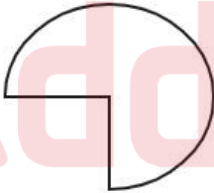

Q.No: 30	Which of the following does NOT belong to the group? निम्नलिखित में से कौनसा समूह से संबंधित नहीं है?
Cotton	
कपास	
Rose	
गुलाब	
Jasmine	
चमेली	
Lotus	
कमल	

Q.No: 31	<p><b>Criteria to be selected as Lab Assistant (as on 01-03-2024):</b></p> <p>Must have a Diploma in Lab Technology with at least 60% marks.</p> <p>Age must be 21 to 28 years.</p> <p>Should have minimum 1 year practical lab experience.</p> <p>Must be willing to work in night shifts.</p> <p><b>Special Clause:</b></p> <p>If the candidate has 70% in Diploma but only 6 months of experience, refer to Chief Lab Supervisor.</p> <p><b>Case:</b></p> <p>Irfan is 22 years old, has 72% in Lab Diploma, 6 months of experience, and agrees to night shifts.</p> <p><b>Question:</b> What should be done in Irfan's case?</p> <p><b>लैब असिस्टेंट के रूप में चुने जाने के लिए मानदंड (दिनांक 01-03-2024 तक):</b></p> <p>लैब टेक्नोलॉजी में डिप्लोमा न्यूनतम 60% अंकों के साथ होना चाहिए।</p> <p>आयु 21 से 28 वर्ष के बीच होनी चाहिए।</p> <p>न्यूनतम 1 वर्ष का व्यावहारिक लैब अनुभव होना चाहिए।</p> <p>नाइट शिफ्ट में काम करने के लिए तैयार होना चाहिए।</p> <p><b>विशेष खंड:</b></p> <p>यदि उम्मीदवार के डिप्लोमा में 70% अंक हैं, लेकिन केवल 6 महीने का अनुभव है, तो मुख्य लैब सुपरवाइजर को भेजें।</p> <p><b>मामला:</b></p> <p>इरफ़ान की उम्र 22 साल है, लैब डिप्लोमा में 72% अंक हैं, 6 महीने का अनुभव है, और वह नाइट शिफ्ट के लिए सहमत है।</p> <p><b>प्रश्न:</b> इरफ़ान के मामले में क्या किया जाना चाहिए?</p>
	Refer to Chief Lab Supervisor
	मुख्य लैब सुपरवाइजर को भेजें
	Reject the candidate
	उम्मीदवार को अस्वीकार करें।
	Information insufficient
	जानकारी अपर्याप्त है।
	Select the candidate
	उम्मीदवार का चयन करें।

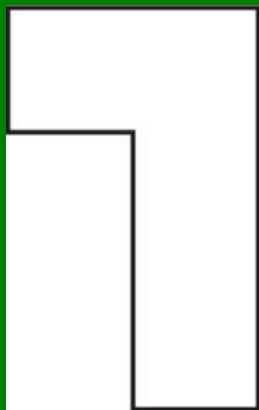
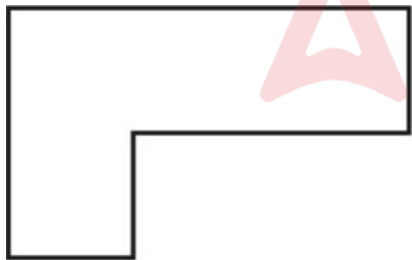
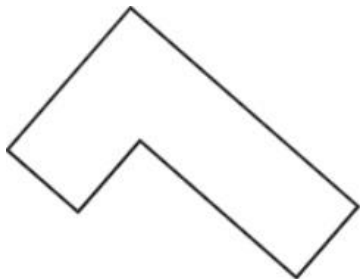
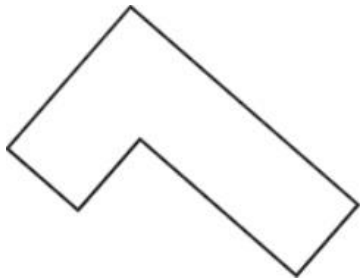
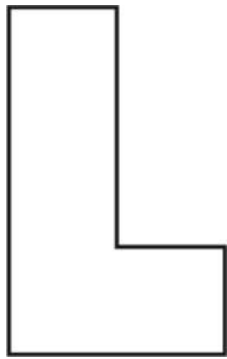
Q.No: 32	In each of the following series, determine the pattern and find the missing number represented by (?). Choose the correct answer from the given options. <b>120, 131, 115, 126, 110, (?)</b> निम्नलिखित प्रत्येक श्रृंखला में, पैटर्न निर्धारित कीजिए और (?) द्वारा दर्शाई गई लुप्त संख्या ज्ञात कीजिए। दिए गए विकल्पों में से सही उत्तर चुनिए: <b>120, 131, 115, 126, 110, (?)</b>
121	
121	
116	
116	

131
131
105
105

Q.No: 33	Find the missing number in the series:2, 4, 8, 16, ?, 64 श्रृंखला में लुप्त संख्या ज्ञात कीजिए: 2, 4, 8, 16, ?, 64
30	
30	
24	
24	
32	
32	
36	
36	

Q.No: 34	If Figure A is rotated to figure B then figure C is rotated to? <div><div><p>A</p></div><div><p>B</p></div><div><p>C</p></div></div> <p>यदि आकृति A को आकृति B में घुमाया जाए तो आकृति C को घुमाया जाएगा?</p> <div><div><p>A</p></div><div><p>B</p></div><div><p>C</p></div></div>
----------	--









Q.No: 35	<p><b>Post: Junior Librarian</b></p> <p><b>Eligibility Criteria (as on 01-04-2025):</b></p> <p>Must have a Bachelor's degree in Library Science (B.Lib.Sc.)</p> <p>Age must be less than 32 years.</p> <p>Must have minimum 1 year experience in any library.</p> <p><b>Case:</b></p> <p>Rina is 31, has B.Lib.Sc., and has 18 months experience in a college library.</p> <p>What should be done in Rina's case?</p> <p><b>पद: जूनियर लाइब्रेरियन</b></p> <p><b>पात्रता मानदंड (01-04-2025 तक):</b></p> <p>लाइब्रेरी साइंस (बी.लिब.एससी.) में स्नातक की डिग्री होनी चाहिए।</p> <p>आयु 32 वर्ष से कम होनी चाहिए।</p> <p>किसी भी पुस्तकालय में कम से कम 1 वर्ष का अनुभव होना चाहिए।</p> <p><b>मामला:</b></p> <p>रीना 31 वर्ष की है, उसके पास बी.लिब.एससी. है, और उसे कॉलेज के पुस्तकालय में 18 महीने का अनुभव है।</p> <p>रीना के मामले में क्या किया जाना चाहिए?</p>
	Reject the candidate
	उम्मीदवार को अस्वीकार करें
	Information insufficient
	जानकारी अपर्याप्त
	Refer to Senior Librarian
	वरिष्ठ लाइब्रेरियन से संपर्क करें
	Select the candidate
	उम्मीदवार का चयन करें

Q.No: 36	<p><b>Read scenario carefully, evaluate all options, identify the action that best navigates the various competing factors and values.</b></p> <p>You are part of a volunteer committee overseeing a local community garden project that is struggling financially. A large, successful local business offers a substantial donation that would secure the garden's operations for the next year. However, their offer comes with the condition that they can paint their corporate logo, in bright, contrasting colors, prominently on the garden's main entrance arch, which clashes significantly with the garden's established natural and rustic aesthetic.</p> <p><b>Question:</b> Given this situation, which of the following is the most ethical and responsible action?</p> <p><b>परिदृश्य को ध्यान से पढ़ें, सभी विकल्पों का मूल्यांकन करें, और उस कार्य की पहचान करें जो विभिन्न प्रतिस्पर्धी कारकों और मूल्यों को सबसे अच्छी तरह से संतुलित करता है।</b></p> <p>आप एक स्वयंसेवी समिति का हिस्सा हैं जो एक स्थानीय सामुदायिक उद्यान परियोजना की देखरेख कर रही है जो वित्तीय रूप से संघर्ष कर रही है। एक बड़ा, सफल स्थानीय व्यवसाय एक महत्वपूर्ण दान की पेशकश करता है जो अगले वर्ष के लिए उद्यान के संचालन को सुरक्षित करेगा। हालांकि, उनकी पेशकश इस शर्त के साथ आती है कि वे अपने कॉर्पोरेट लोगो को, चमकीले, विपरीत रंगों में, उद्यान के मुख्य प्रवेश द्वार के मेहराब पर प्रमुखता से पेंट कर सकते हैं, जो उद्यान के स्थापित प्राकृतिक और देहाती सौंदर्य के साथ काफी मेल नहीं खाता।</p> <p><b>प्रश्न:</b> इस स्थिति को देखते हुए, निम्नलिखित में से कौन सा सबसे नैतिक और जिम्मेदार कार्य है?</p>
	Immediately accept the donation and the logo placement, prioritizing the garden's financial survival above all else.
	दान और लोगो लगाने को तुरंत स्वीकार करें, उद्यान के वित्तीय अस्तित्व को सबसे ऊपर प्राथमिकता दें।
	Decline the donation entirely, citing the conflict with the garden's aesthetic and core values, even if it means potential closure.
	दान को पूरी तरह से अस्वीकार कर दें, उद्यान के सौंदर्य और मूल मूल्यों के साथ टकराव का हवाला देते हुए, भले ही इसका मतलब संभावित बंद होना हो।
	Express gratitude for the offer and attempt to negotiate alternative forms of recognition, such as a smaller, less prominent plaque, or a mention on the garden's website, explaining the importance of maintaining the garden's aesthetic integrity.
	प्रस्ताव के लिए आभार व्यक्त करें और मान्यता के वैकल्पिक रूपों पर बातचीत करने का प्रयास करें, जैसे कि एक छोटी, कम प्रमुख पट्टिका, या उद्यान की वेबसाइट पर उल्लेख, उद्यान के सौंदर्य अखंडता को बनाए रखने के महत्व को समझाते हुए।

Accept the donation and the logo placement, with the intention of secretly removing or altering the logo after a few months once the funds are secured.

दान और लोगो लगाने को स्वीकार करें, इस इरादे से कि कुछ महीनों के बाद एक बार धन सुरक्षित हो जाने पर गुप्त रूप से लोगो को हटा दिया जाए या बदल दिया जाए।

Not Answered

Q.No: 37

In each of the following questions, a specific relationship is given between two words. Identify the word that shares a similar semantic relationship with the given pair. Choose the most appropriate option from the four choices given below.

**Doctor : Diagnosis :: Judge : ?**

निम्नलिखित प्रत्येक प्रश्न में दो शब्दों के बीच एक विशिष्ट संबंध दिया गया है। उस शब्द की पहचान कीजिए जो दिए गए युग्म के साथ समान अर्थ संबंध साझा करता है। नीचे दिए गए चार विकल्पों में से सबसे उपयुक्त विकल्प चुनिए।

**Doctor : Diagnosis :: Judge : ?**

Court

अदालत

Verdict

निर्णय

Law

कानून

Jury

जूरी

Q.No: 38

Choose the correct number to complete the analogy.

**8 : 64 :: 10 : ?**

सादृश्य को पूरा करने के लिए सही संख्या चुनें।

**8 : 64 :: 10 : ?**

80

80

120

120

100

100

90

90

Q.No: 39

What will come in place of the question mark (?) in the following equation?

**72÷9-15+4×3=?**

निम्नलिखित समीकरण में प्रश्नवाचक चिह्न (?) के स्थान पर क्या आएगा?

**72÷9-15+4×3=?**

17

17

-3

-3

5

5

1

1

Q.No: 40

**Read the situation and choose the best judgment:**

While enjoying a walk in a local park, you find a wallet lying on a bench. Upon opening it, you see it contains a significant amount of cash, credit cards, and an ID card with the owner's name and address.

**Question:** Given this situation, which of the following is the most ethical and responsible action?

**स्थिति को ध्यान से पढ़ें और सर्वोत्तम निर्णय चुनें:**

किसी स्थानीय पार्क में टहलते समय, आपको एक बेंच पर एक बटुआ पड़ा मिलता है। उसे खोलने पर, आप देखते हैं कि उसमें काफी मात्रा में नकदी, क्रेडिट कार्ड और मालिक का नाम और पता लिखा एक पहचान पत्र है।

**प्रश्न:** इस स्थिति में, निम्नलिखित में से कौन सा कदम सबसे नैतिक और ज़िम्मेदाराना होगा?

Take the cash and leave the wallet with the ID and cards on the bench, hoping someone else finds it.

नकदी ले लो और पहचान पत्र तथा कार्ड सहित बटुआ बेंच पर छोड़ दो, इस उम्मीद में कि कोई और उसे पा लेगा।

Try to find the owner yourself by going to the address on the ID, even if it's far away or seems inconvenient.

आईडी पर दिए गए पते पर जाकर स्वयं मालिक को ढूँढने का प्रयास करें, भले ही वह बहुत दूर हो या असुविधाजनक लगे।

Turn the entire wallet (cash, cards, ID) over to the nearest police station or park lost-and-found office.

अपना पूरा बटुआ (नकदी, कार्ड, पहचान पत्र) निकटतम पुलिस स्टेशन या पार्क के खोया-पाया कार्यालय में जमा कर दें।

Use the contact information on the ID to call the owner directly and arrange a meeting to return it yourself.

आईडी पर दी गई संपर्क जानकारी का उपयोग करके सीधे मालिक से संपर्क करें और उसे स्वयं वापस करने के लिए एक बैठक की व्यवस्था करें।

Q.No: 41

Address 1: Ms. Rina Dey, Flat No. 302, Block A, Sunrise Apartments, Mumbai – 400089  
Address 2: Ms. Rina Dey, A-302, Sunrise Apt., Mumbai 400089  
Which of the following is TRUE?  
  
पता 1: सुश्री रीना डे, फ्लैट नंबर 302, ब्लॉक ए, सनराइज अपार्टमेंट, मुंबई – 400089  
पता 2: सुश्री रीना डे, ए-302, सनराइज अपार्टमेंट, मुंबई 400089  
निम्नलिखित में से कौन सा सत्य है?

The addresses refer to the same location

ये पते एक ही स्थान को संदर्भित करते हैं

The city pin codes are different

शहर के पिन कोड अलग-अलग हैं

The apartment names differ

अपार्टमेंट के नाम अलग-अलग हैं

The block and flat number do not match

ब्लॉक और फ्लैट नंबर मेल नहीं खाते

Q.No: 42

NPCI is to Digital Payment as UIDAI is to...?  
एनपीसीआई डिजिटल भुगतान के लिए वही है जो यूआईडीएआई के लिए है...?

Voter List

मतदाता सूची

Census

जनगणना

Biometric Identity



बायोमेट्रिक पहचान

e-Commerce

ई-कॉमर्स

Not Answered

Q.No: 43

How many triangles are there in the given figure.  
  
दी गई आकृति में कितने त्रिभुज हैं?  


15

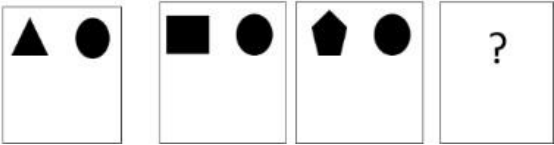
15

14





14



18  
18  
16  
16

Q.No: 44 What will be the next figure?



अगला आंकड़ा क्या होगा?





Adda247



Q.No: 45 Which figure should replace the question mark?

P	K R	Q T	G V	E K	?
Q	R S	H U	F W	D L	?

प्रश्न चिन्ह के स्थान पर कौन सी आकृति आनी चाहिए?


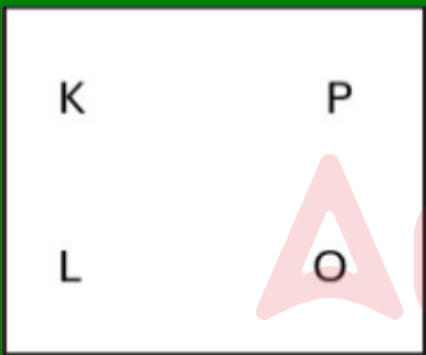
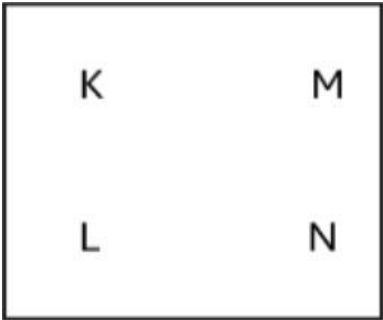
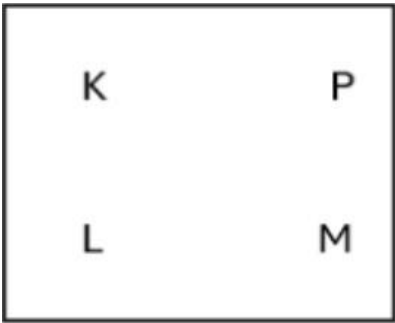
P	K R	Q T	G V	E K	?
Q	R S	H U	F W	D L	?

K	Q
L	Y

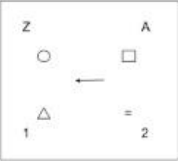
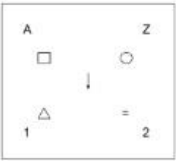
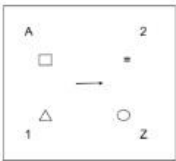
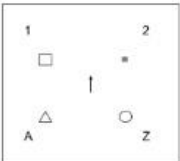
K	Q
L	Y

K	P
L	M



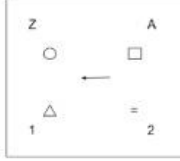
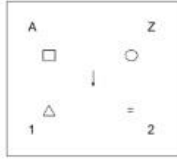
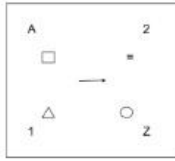
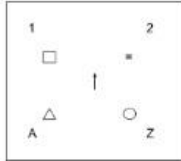


Q.No: 46 Which of the following figures will complete the figural series given below?

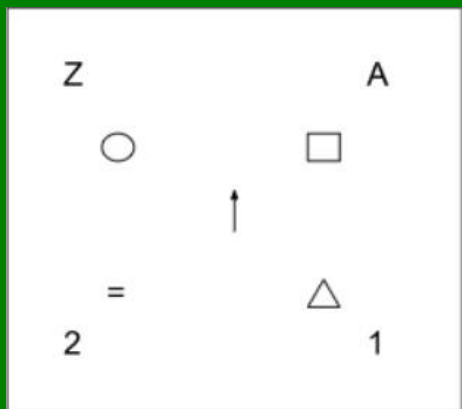
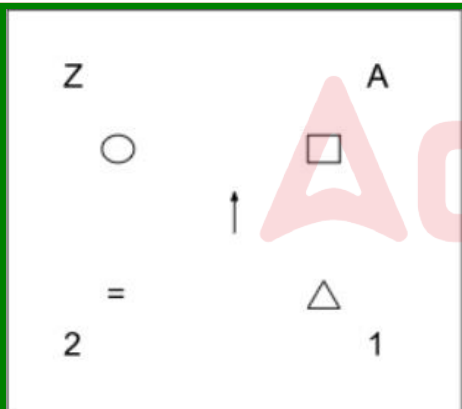
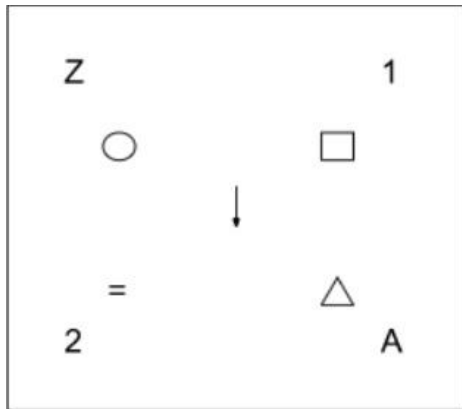
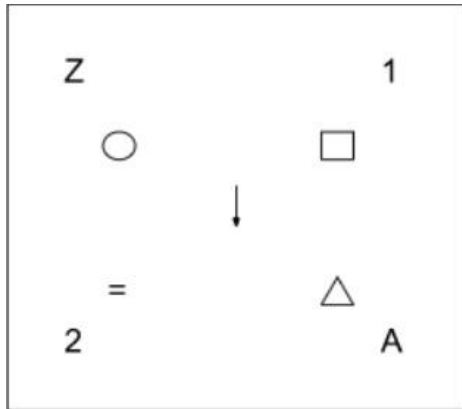


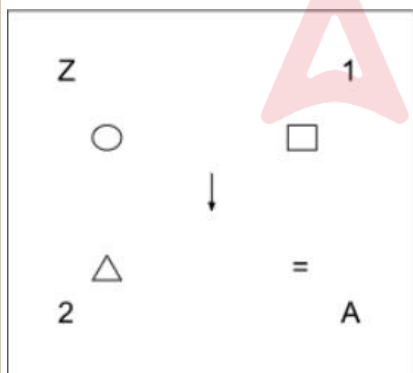
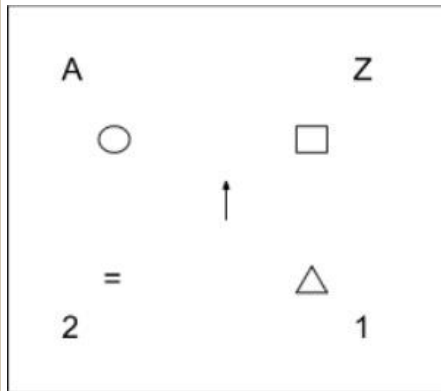
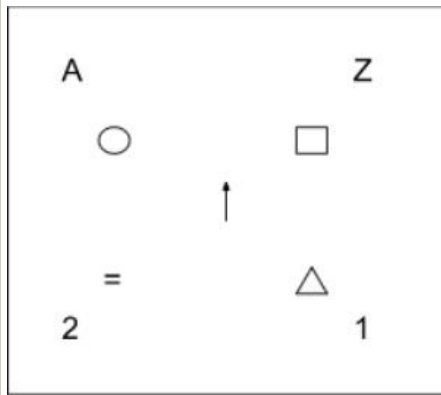
?????

निम्नलिखित में से कौन सी आकृति नीचे दी गई आकृति श्रृंखला को पूरा करेगी?

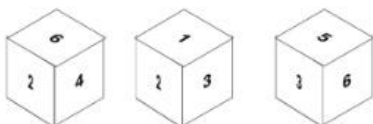


?????

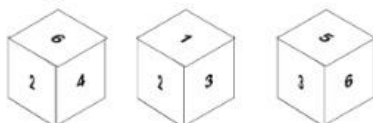




Q.No: 47 Choose the figure that will be formed when the cube is unfolded.



उस आकृति का चयन करें जो घन को खोलने पर बनेगी।

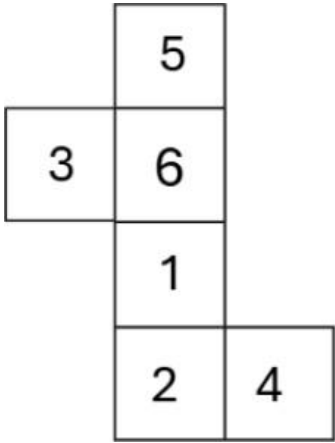
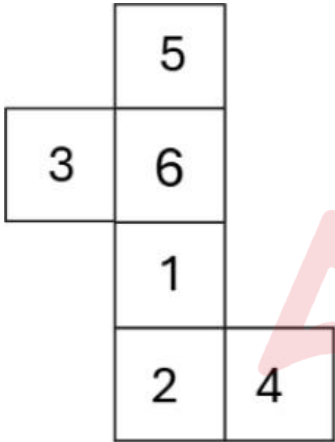
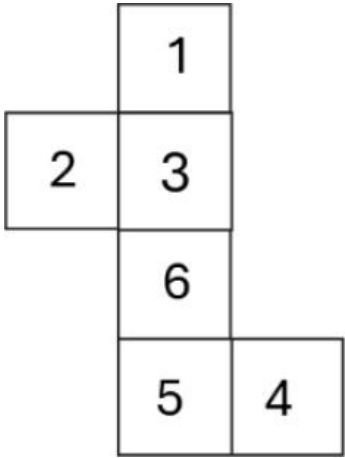
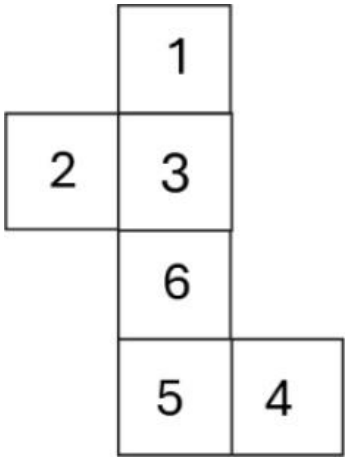


	6	
2	4	
	1	
	3	5

	6	
2	4	
	1	
	3	5

	2	
3	4	
	1	
	6	5

	2	
3	4	
	1	
	6	5



Q.No: 48    Amazon, Nile, Ganga, Everest – which is not like the others?  
अमेज़न, नील, गंगा, एवरेस्ट - इनमें से कौन सा अन्यो जैसा नहीं है?

Nile
नील
एवरेस्ट
एवरेस्ट
Ganga
गंगा
Amazon
अमेज़न

Q.No: 49	Which figure comes next in the series?  ▲ ▼ ▲ ▼ ▲ ? श्रृंखला में अगली आकृति कौन सी आएगी?  ▲ ▼ ▲ ▼ ▲ ?
▶	
▶	
◀	
◀	
▲	
▲	
▼	
▼	

Q.No: 50	Choose the figure that does not belong to the group. उस आकृति को चुनें जो समूह से संबंधित नहीं है।
□	
□	
□	
□	
□	
□	

PART - B (General Awareness)

Q.No: 51	Which of the following statements about the G0 (G zero phase) phase of the cell cycle is most accurate? कोशिका चक्र के G0 (G शून्य चरण) चरण के बारे में निम्नलिखित में से कौन सा कथन सबसे सटीक है?
	DNA synthesis occurs rapidly in cells present in the G0 phase. G0 चरण में उपस्थित कोशिकाओं में DNA संश्लेषण तेजी से होता है। It is the phase where cell division is initiated in cancerous cells. यह वह चरण है जहां कैंसर कोशिकाओं में कोशिका विभाजन शुरू होता है। It is a temporary quiescent stage where cells exit the cell cycle. यह एक अस्थायी निष्क्रिय अवस्था है जहां कोशिकाएं कोशिका चक्र से बाहर निकलती हैं। Cells in G0 actively prepare for DNA replication. G0 में कोशिकाएं सक्रिय रूप से DNA प्रतिकृति के लिए तैयारी करती हैं।

Q.No: 52	India's improvement in the Rule of Law Index is most critically challenged by which factor? विधि नियम सूचकांक में भारत के सुधार को सबसे अधिक चुनौती किस कारक से मिल रही है?
	Slow judicial delivery धीमी न्यायिक कार्यवाही Legislative overreach विधायी अतिक्रमण



Executive dominance

कार्यकारी प्रभुत्व

Media bias

मीडिया पूर्वाग्रह

Not Answered

Q.No: 53	Which instrument is commonly used in Carnatic classical music? कर्नाटक संगीत में सामान्यतः प्रयोग होने वाला वाद्य यंत्र कौन-सा है?
Dhol	
ढोल	
Mridangam	
मृदंगम	
Santoor	
संतूर	
Shehnai	
शहनाई	

Q.No: 54	What trend is reflected by increasing share of urban people in non-manual tertiary occupations? गैर-शारीरिक तृतीयक व्यवसायों में शहरी लोगों की बढ़ती हिस्सेदारी से क्या प्रवृत्ति परिलक्षित होती है?
Spatial literacy inequality	
स्थानिक साक्षरता असमानता	
Gendered education access	
लिंग आधारित शिक्षा तक पहुँच	
Emerging service economy	
उभरती सेवा अर्थव्यवस्था	
De-industrialization	
वि-औद्योगीकरण	

Q.No: 55	Which region has become the new epicenter of global terrorism, according to the GTI ( Global Terrorism Index) 2024? जीटीआई (वैश्विक आतंकवाद सूचकांक) 2024 के अनुसार कौन सा क्षेत्र वैश्विक आतंकवाद का नया केंद्र बन गया है?
Southeast Asia	
दक्षिण पूर्व एशिया	
Central Sahel region of sub-Saharan Africa	
उप-सहारा अफ्रीका का मध्य साहेल क्षेत्र	
Central Asia	
मध्य एशिया	
Middle East and North Africa	
मध्य पूर्व और उत्तरी अफ़्रीका	
Not Answered	

Q.No: 56	Match the following Wildlife Sanctuaries (Column A) with their respective States (Column B). Choose the option correct option:										
	<table><tr><th>Column A (Wildlife Sanctuary)</th><th>Column B (State)</th></tr><tr><td>1. Gandhi Sagar WLS</td><td>a. Assam</td></tr><tr><td>2. Sonai Rupai WLS</td><td>b. Madhya Pradesh</td></tr><tr><td>3. Kaimur WLS</td><td>c. Telangana</td></tr><tr><td>4. Eturnagaram WLS</td><td>d. Bihar</td></tr></table>	Column A (Wildlife Sanctuary)	Column B (State)	1. Gandhi Sagar WLS	a. Assam	2. Sonai Rupai WLS	b. Madhya Pradesh	3. Kaimur WLS	c. Telangana	4. Eturnagaram WLS	d. Bihar
Column A (Wildlife Sanctuary)	Column B (State)										
1. Gandhi Sagar WLS	a. Assam										
2. Sonai Rupai WLS	b. Madhya Pradesh										
3. Kaimur WLS	c. Telangana										
4. Eturnagaram WLS	d. Bihar										

निम्नलिखित वन्यजीव अभयारण्यों (स्तंभ A) को उनके संबंधित राज्यों (स्तंभ B) से मिलाइए। सही विकल्प चुनिए:

स्तंभ A (वन्यजीव अभयारण्य)	स्तंभ B (राज्य)
1. गांधी सागर वन्यजीव अभयारण्य	a. असम
2. सोनाई रुपाई वन्यजीव अभयारण्य	b. मध्य प्रदेश
3. कैमूर वन्यजीव अभयारण्य	c. तेलंगाना
4. एतुर्नागारम वन्यजीव अभयारण्य	d. बिहार

1-b, 2-a, 3-d, 4-c

1-b, 2-a, 3-d, 4-c

1-a, 2-c, 3-b, 4-d

1-a, 2-c, 3-b, 4-d

1-d, 2-c, 3-a, 4-b

1-d, 2-c, 3-a, 4-b

1-c, 2-d, 3-a, 4-b

1-c, 2-d, 3-a, 4-b

Q.No: 57 Which high-altitude observatory in India is known for hosting an optical-infrared telescope used for space observation in Ladakh?

भारत में कौन सी उच्च-ऊँचाई वाली वेधशाला लद्दाख में अंतरिक्ष अवलोकन के लिए उपयोग किए जाने वाले ऑप्टिकल-इन्फ्रारेड टेलीस्कोप की मेजबानी के लिए जानी जाती है?

Udaipur Solar Observatory

उदयपुर सौर वेधशाला

Hanle Indian Astronomical Observatory

हान्ले भारतीय खगोलीय वेधशाला

Nainital Aryabhatta Observatory

नैनीताल आर्यभट्ट वेधशाला

Mount Abu Infrared Observatory

माउंट आबू इन्फ्रारेड वेधशाला

Q.No: 58 Which type of galaxy has no regular shape and is rich in gas and dust?

किस प्रकार की आकाशगंगा का कोई नियमित आकार नहीं है और वह गैस और धूल से समृद्ध है?

Elliptical Galaxy

दीर्घवृत्ताकार आकाशगंगा

Lenticular Galaxies

लेंटिकुलर आकाशगंगाएँ

Irregular Galaxy

अनियमित आकाशगंगा

Spiral Galaxy

सर्पिल आकाशगंगा

Q.No: 59 Consider the emphasis placed on the public sector in India's industrial development strategy between 1947 and 1990. What was a key rationale behind giving the public sector a dominant role during this period?

1947 और 1990 के बीच भारत की औद्योगिक विकास रणनीति में सार्वजनिक क्षेत्र पर दिए गए जोर पर विचार करें। इस अवधि के दौरान सार्वजनिक क्षेत्र को प्रमुख भूमिका देने के पीछे मुख्य तर्क क्या था?

There was a lack of demand for industrial goods in the domestic market, necessitating government intervention.

घरेलू बाजार में औद्योगिक वस्तुओं की मांग में कमी थी, जिसके कारण सरकारी हस्तक्षेप ज़रूरी हो गया।

Public sector industries were inherently more efficient than private sector ones.

सार्वजनिक क्षेत्र के उद्योग निजी क्षेत्र के उद्योगों की तुलना में स्वाभाविक रूप से ज्यादा कुशल थे।

The private sector had sufficient capital and technological expertise to drive industrialization in all key sectors.

सभी प्रमुख क्षेत्रों में औद्योगीकरण को बढ़ावा देने के लिए निजी क्षेत्र के पास पर्याप्त पूंजी और तकनीकी विशेषज्ञता थी।

The public sector was seen as a tool for achieving social goals, promoting balanced regional development, and controlling strategic industries.

सार्वजनिक क्षेत्र को सामाजिक लक्ष्यों को प्राप्त करने, संतुलित क्षेत्रीय विकास को बढ़ावा देने और रणनीतिक उद्योगों को नियंत्रित करने के एक उपकरण के रूप में देखा गया।

Q.No: 60 In what way did **fiscal discipline reforms** affect center-state financial relations post-1991?

1991 के बाद **राजकोषीय अनुशासन सुधारों** ने केंद्र-राज्य वित्तीय संबंधों को किस प्रकार प्रभावित किया?

Reduced tax sharing

कम कर बंटवारा

States had to adhere to fiscal targets

राज्यों को राजकोषीय लक्ष्यों का पालन करना होगा

Increased state autonomy in tax policy

कर नीति में राज्य की स्वायत्तता में वृद्धि

Centralized control over agriculture pricing

कृषि मूल्य निर्धारण पर केंद्रीकृत नियंत्रण

Q.No: 61 Which of the following agro-climatic and soil conditions is most suitable for the cultivation of wheat?

निम्नलिखित में से कौन सी कृषि-जलवायु और मृदा परिस्थितियाँ गेहूँ की खेती के लिए सबसे उपयुक्त हैं?

Arid crop; temperature above 40°C; sandy loam soil

शुष्क फसल; तापमान 40°C से अधिक; रेतीली दोमट मिट्टी

Subtropical crop; high humidity; laterite soil

उपोष्णकटिबंधीय फसल; उच्च आर्द्रता; लैटेराइट मिट्टी

Temperate crop; winter temp 10–15°C, summer 21–26°C; clay loam soil

शीतोष्ण फसल; सर्दियों का तापमान 10-15 डिग्री सेल्सियस, गर्मियों का तापमान 21-26 डिग्री सेल्सियस; चिकनी दोमट मिट्टी

Tropical crop; 30–35°C temperature; sandy soil

उष्णकटिबंधीय फसल; 30-35 डिग्री सेल्सियस तापमान; रेतीली मिट्टी

Q.No: 62 According to Lenz’s Law, what determines the direction of an induced current in a conductor?

लेन्ज़ के नियम के अनुसार, किसी चालक में प्रेरित धारा की दिशा क्या निर्धारित करती है?

It continuously reduces the applied magnetic flux.

यह लगातार लागू चुंबकीय प्रवाह को कम करता है।

It always enhances the existing magnetic field.

यह सदैव विद्यमान चुंबकीय क्षेत्र को बढ़ाता है।

It flows to oppose the variation in magnetic flux causing it.

यह चुंबकीय प्रवाह में परिवर्तन का विरोध करने के लिए प्रवाहित होता है।

It is proportional to the strength of the magnetic field.

यह चुंबकीय क्षेत्र की ताकत के समानुपाती होता है।

Not Answered

Q.No: 63 What led to the decline of Timurid power in the second half of the 15th century?

15वीं शताब्दी के उत्तरार्ध में तैमूर शक्ति के पतन का क्या कारण था?

Economic decline due to maritime trade shifts

समुद्री व्यापार में बदलाव के कारण आर्थिक गिरावट

Internal wars due to partitioning

विभाजन के कारण आंतरिक युद्ध

Rise of Uzbeks

उज़बेकों का उदय

Ottoman invasions

ओटोमन आक्रमण

Not Answered

Q.No: 64 Which planet has the longest day in the solar system?

सौरमंडल में किस ग्रह का दिन सबसे लंबा होता है?

Venus

शुक्र

Mars

मंगल

Jupiter

बृहस्पति

Earth

पृथ्वी

Q.No: 65 Which of the following schemes provides annual income support to farmers directly into their bank accounts?

निम्नलिखित में से कौन सी योजना किसानों को सीधे उनके बैंक खातों में वार्षिक आय सहायता प्रदान करती है?

PM Fasal Bima Yojana

पीएम फसल बीमा योजना

PM-KISAN

पीएम-किसान

MGNREGA

महात्मा गांधी राष्ट्रीय ग्रामीण रोजगार गारंटी अधिनियम (मनरेगा)

PM Jan Dhan Yojana

पीएम जनधन योजना

Q.No: 66 What is one of the major future impacts of ISRO's Aditya-L1 mission that studies the Sun's chromosphere and corona?

इसरो के आदित्य-एल1 मिशन का भविष्य में क्या प्रमुख प्रभाव होगा, जो सूर्य के क्रोमोस्फीयर और कोरोना का अध्ययन करता है?

Mapping of asteroids beyond Neptune

नेपच्यून से परे क्षुद्रग्रहों का मानचित्रण

Enhanced rainfall prediction in monsoon regions

मानसून क्षेत्रों में वर्षा की बेहतर भविष्यवाणी

Improved space weather forecasting to protect satellites and power systems

उपग्रहों और विद्युत प्रणालियों की सुरक्षा के लिए बेहतर अंतरिक्ष मौसम पूर्वानुमान

Development of underwater navigation systems

पानी के अंदर नेविगेशन प्रणालियों का विकास

Not Answered

Q.No: 67 Identify the dance style recognized for its spiritual devotion and connection to the Vaishnavite movement.

कौन-सी नृत्य शैली अपनी आध्यात्मिक भक्ति और वैष्णव आंदोलन से जुड़ाव के लिए प्रसिद्ध है?

Bharatnatyam

भरतनाट्यम

Kathak

कथक

Odissi

ओडिसी

Sattriya

सत्रिया

Q.No: 68	Read the following statements about Trade Policy Reform: <b>Statement I:</b> Trade policy reform in India involved removing quantitative restrictions on imports and exports. <b>Statement II:</b> Trade policy reform increased import licensing to support domestic manufacturers.  व्यापार नीति सुधार के बारे में निम्नलिखित कथनों को पढ़ें: <b>कथन I:</b> भारत में व्यापार नीति सुधार में आयात और निर्यात पर मात्रात्मक प्रतिबंधों को हटाना शामिल था। <b>कथन II:</b> व्यापार नीति सुधार ने घरेलू निर्माताओं को समर्थन देने के लिए आयात लाइसेंसिंग में वृद्धि की।
Both statements I and II are correct	
कथन I और II दोनों सही हैं	
Both statements I and II are incorrect	
कथन I और II दोनों गलत हैं	
Only Statement II is correct	
केवल कथन II सही है	
Only Statement I is correct	
केवल कथन I सही है	
Not Answered	

Q.No: 69	Which type of vehicle is commonly used in zero-emission public transport systems? शून्य-उत्सर्जन सार्वजनिक परिवहन प्रणालियों में सामान्यतः किस प्रकार के वाहन उपयोग में लाए जाते हैं?
Diesel buses	
डीज़ल बसें	
Electric buses	
विद्युत बसें	
Petrol cars	
पेट्रोल कारें	
Hybrid vehicles	
हाइब्रिड वाहन	

Q.No: 70	Where was the Khelo India Youth Games 2024 held? खेलो इंडिया यूथ गेम्स 2024 कहाँ आयोजित किया गया?
Goa	
गोवा	
Tamil Nadu	
तमिलनाडु	
Odisha	
ओडिशा	
Maharashtra	
महाराष्ट्र	

Q.No: 71	Which of the following reflects the 'what to produce' decision in economics? निम्नलिखित में से कौन सा अर्थशास्त्र में 'क्या उत्पादन किया जाए' निर्णय को दर्शाता है?
Choosing between capital and consumer goods	
पूंजी और उपभोक्ता वस्तुओं के बीच चयन	
Increasing taxes to raise government revenue	
सरकारी राजस्व बढ़ाने के लिए करों में वृद्धि	
Deciding on distribution of output	
आउटपुट के वितरण पर निर्णय लेना	
Choosing method of production	
उत्पादन की विधि का चयन	

Q.No: 72	Read the below statements and choose the <b>correct</b> option: <b>Statement 1:</b> India's first initiative to track Fishing Cats through radio-collars has been introduced at Coringa Wildlife Sanctuary. <b>Statement 2:</b> Fishing Cats are primarily found in coastal wetlands and mangrove ecosystems.
----------	---



नीचे दिए गए कथनों को पढ़ें और **सही** विकल्प चुनें:

**कथन 1:** रेडियो-कॉलर के माध्यम से फिशिंग कैट पर नज़र रखने की भारत की पहली पहल कोरिंगा वन्यजीव अभयारण्य में शुरू की गई है।

**कथन 2:** फिशिंग कैट मुख्य रूप से तटीय आर्द्रभूमि और मैंग्रोव पारिस्थितिकी तंत्र में पाई जाती हैं।

Both Statements 1 and 2 are correct

कथन 1 और 2 दोनों सही हैं

Neither Statement 1 nor 2 is correct

न तो कथन 1 और न ही 2 सही है

Only Statement 1 is correct

केवल कथन 1 सही है

Only Statement 2 is correct

केवल कथन 2 सही है

Not Answered

Q.No: 73 Which economic consequence of migration is generally considered a challenge for the destination regions in India, particularly concerning unskilled rural migrants?

प्रवासन का कौन सा आर्थिक परिणाम आम तौर पर भारत में गंतव्य क्षेत्रों के लिए एक चुनौती माना जाता है, विशेष रूप से अकुशल ग्रामीण प्रवासियों के संबंध में?

Increased per capita income due to the inflow of highly skilled labor

अत्यधिक कुशल श्रम के प्रवाह के कारण प्रति व्यक्ति आय में वृद्धि

Reduction in pressure on land resources and unemployment rates

भूमि संसाधनों और बेरोजगारी दर पर दबाव में कमी

Exploitation of migrant labor and the growth of informal sector employment

प्रवासी श्रमिकों का शोषण और अनौपचारिक क्षेत्र में रोजगार की वृद्धि

Balanced regional development across states

राज्यों में संतुलित क्षेत्रीय विकास

Q.No: 74 Under Section 25(1) of the Bharatiya Nagarik Suraksha Sanhita, 2023, what may the Court do when a person is convicted in one trial for multiple offences?

भारतीय नागरिक सुरक्षा संहिता, 2023 की धारा 25(1) के तहत, जब किसी व्यक्ति को एक ही मुकदमे में कई अपराधों के लिए दोषी ठहराया जाता है, तो न्यायालय क्या कर सकता है?

Can impose only one punishment for all the offences, regardless of their nature

सभी अपराधों के लिए, चाहे उनकी प्रकृति कुछ भी हो, केवल एक ही सजा लागू की जा सकती है

Must give the harshest punishment only and remit other punishments altogether

केवल कठोरतम दंड देना चाहिए तथा अन्य दंडों को पूरी तरह माफ कर देना चाहिए

Shall suspend all sentences unless directed by a higher court in the same trial

जब तक उसी मुकदमे में उच्च न्यायालय द्वारा निर्देश न दिया जाए, तब तक सभी सजाओं को निलंबित कर दिया जाएगा

May impose punishments to run either concurrently or consecutively as appropriate

उपयुक्त होने पर एक साथ या लगातार दंड लागू किया जा सकता है

Q.No: 75 Which of the following is the central objective of Saksham Anganwadi and Poshan 2.0 scheme?

निम्नलिखित में से कौन सा सक्षम आंगनवाड़ी और पोषण 2.0 योजना का केंद्रीय उद्देश्य है?

Strengthening early childhood care and nutrition delivery systems

प्रारंभिक बाल्यावस्था देखभाल और पोषण वितरण प्रणालियों को सुदृढ़ बनाना

Food security through MSP

एमएसपी के माध्यम से खाद्य सुरक्षा

Urban health surveillance

शहरी स्वास्थ्य निगरानी

Providing skill-based employment

कौशल-आधारित रोजगार प्रदान करना

Q.No: 76 Which of the following festivals is celebrated by the tribal communities of Nagaland and showcases traditional dance and music?

	निम्नलिखित में से कौन-सा पर्व नागालैंड की जनजातीय समुदायों द्वारा मनाया जाता है और पारंपरिक नृत्य एवं संगीत का प्रदर्शन करता है?
Ugadi	
उगादि	
Ornbill Festival	
हॉर्नबिल महोत्सव	
Teej	
तीज	
Onam	
ओणम	

Q.No: 77	The power to legislate on 'Residuary Subjects' (matters not enumerated in any of the three Lists) rests exclusively with: 'अवशिष्ट विषयों' (वे विषय जो संविधान की तीनों सूचियों में शामिल नहीं हैं) पर कानून बनाने की शक्ति विशेष रूप से किसके पास होती है?
The President of India	
भारत के राष्ट्रपति	
Parliament	
संसद	
The Supreme Court	
सर्वोच्च न्यायालय	
State Legislatures	
राज्य विधानसभाएँ	

Q.No: 78	Which of the following pairs of newly created States/Union Territories after the States Reorganisation Act, 1956 is <b>correctly matched</b> ? राज्य पुनर्गठन अधिनियम, 1956 के बाद नव निर्मित राज्यों/केंद्र शासित प्रदेशों के निम्नलिखित युग्मों में से कौन सा <b>युग्म सही</b> सुमेलित है?
Jharkhand – 2001	
झारखंड – 2001	
Uttarakhand – 1998	
उत्तराखंड – 1998	
Chhattisgarh – 2000	
छत्तीसगढ़ – 2000	
Telangana – 2001	
तेलंगाना – 2001	

Q.No: 79	Arrange the following Fundamental Rights in the order of their appearance in the Constitution: 1. Right to Freedom 2. Right to Equality 3. Right to Freedom of Religion 4. Right against Exploitation  निम्नलिखित मौलिक अधिकारों को संविधान में उनके स्थान के क्रम में व्यवस्थित कीजिए: 1. स्वतंत्रता का अधिकार 2. समानता का अधिकार 3. धार्मिक स्वतंत्रता का अधिकार 4. शोषण के विरुद्ध अधिकार
1-2-3-4	
1-2-3-4	
2-1-4-3	
2-1-4-3	
2-4-1-3	
2-4-1-3	
4-2-1-3	
4-2-1-3	

Q.No: 80	<p><b>Read the following and choose the correct option:</b></p> <p><b>Assertion (A):</b> Sound waves travel faster in steel than in air at the same temperature.</p> <p><b>Reason (R):</b> The particles in solids (like steel) are more closely packed and experience stronger intermolecular forces compared to particles in gases (like air), allowing vibrations to be transmitted more efficiently and rapidly.</p> <p><b>निम्नलिखित को पढ़ें और सही विकल्प चुनें:</b></p> <p><b>अभिकथन (A):</b> ध्वनि तरंगें समान तापमान पर स्टील में वायु की तुलना में अधिक तेज़ी से चलती हैं।</p> <p><b>कारण (R):</b> ठोस पदार्थों (जैसे स्टील) के कण गैसों (जैसे वायु) के कणों की तुलना में अधिक सघन होते हैं और अधिक प्रबल अंतर-आणविक बलों का अनुभव करते हैं, जिससे कंपन अधिक कुशलतापूर्वक और तेज़ी से संचरित होते हैं।</p>
	<p>A is false but R is true.</p> <p>A असत्य है लेकिन R सत्य है।</p> <p>Both A and R are true and R is the correct explanation of A.</p> <p>A और R दोनों सत्य हैं और R, A का सही स्पष्टीकरण है।</p> <p>Both A and R are true but R is not the correct explanation of A.</p> <p>A और R दोनों सत्य हैं लेकिन R, A का सही स्पष्टीकरण नहीं है।</p> <p>A is true but R is false.</p> <p>A सत्य है लेकिन R असत्य है।</p>

Q.No: 81	<p>Who set up a Dayanand Anglo Vedic school in Lahore?</p> <p>लाहौर में दयानंद एंग्लो वैदिक स्कूल की स्थापना किसने की?</p>
	<p>Lala Lajpat Rai</p> <p>लाला लाजपत राय</p> <p>Bipin Chandrapal</p> <p>बिपिन चंद्रपाल</p> <p>Dayanand Saraswati</p> <p>दयानंद सरस्वती</p> <p>Balgangadhar Tilak</p> <p>बालगंगाधर तिलक</p> <p>Not Answered</p>

Q.No: 82	<p>Which of the following was a major criticism of the industrial policy followed in India during 1950-1990?</p> <p>निम्नलिखित में से कौन सी 1950-1990 के दौरान भारत में अपनाई गई औद्योगिक नीति की प्रमुख आलोचना थी?</p>
	<p>Too much emphasis on exports.</p> <p>निर्यात पर बहुत ज्यादा जोर।</p> <p>Creation of a protected market leading to inefficiency and lack of innovation.</p> <p>संरक्षित बाजार के निर्माण से अकुशलता और नवाचार की कमी पैदा होना।</p> <p>Excessive competition among domestic industries.</p> <p>घरेलू उद्योगों के बीच अत्यधिक प्रतिस्पर्धा।</p> <p>Neglect of the public sector.</p> <p>सार्वजनिक क्षेत्र की उपेक्षा।</p> <p>Not Answered</p>

Q.No: 83	<p>The Jog Falls in Karnataka is formed from which river?</p> <p>कर्नाटक में स्थित जोग जलप्रपात किस नदी पर बना है?</p>
	<p>Godavari</p> <p>गोदावरी</p> <p>Kaveri</p> <p>कावेरी</p> <p>Sharavathi</p> <p>शरावती</p> <p>Krishna</p> <p>कृष्णा नदी</p>



Q.No: 84	What kind of approach does the Happiness Index encourage in governance? हैप्पीनेस इंडेक्स शासन प्रणाली में किस प्रकार की दृष्टिकोण को बढ़ावा देता है?
Legalistic	कानूनी रूढ़िवादिता
Citizen-centric	नागरिक-केंद्रित दृष्टिकोण
Resource-based	संसाधन आधारित
Militaristic	सैन्यवादी
Not Answered	

Q.No: 85	Who was the Home Minister in the first cabinet of free India? स्वतंत्र भारत के प्रथम कैबिनेट में गृह मंत्री कौन थे?
Dr. Rajendra Prasad	डॉ. राजेंद्र प्रसाद
Rajagopalachari	राजगोपालाचारी
Maulana Abul Kalam Azad	मौलाना अबुल कलाम आज़ाद
Sardar Vallabhbhai Patel	सरदार वल्लभभाई पटेल

Q.No: 86	Which Indian state does S. Jaishankar represent in the Rajya Sabha? एस. जयशंकर राज्यसभा में किस भारतीय राज्य का प्रतिनिधित्व करते हैं?
Maharashtra	महाराष्ट्र
Gujarat	गुजरात
Uttar Pradesh	उत्तर प्रदेश
Tamil Nadu	तमिलनाडु

Q.No: 87	Which act replaces the Code of Criminal Procedure, 1973? कौन सा अधिनियम दंड प्रक्रिया संहिता, 1973 का स्थान लेता है?
Bharatiya Nagarik Suraksha Sanhita	भारतीय नागरिक सुरक्षा संहिता
Bharatiya Nyaya Sanhita	भारतीय न्याय संहिता
None of the above	इनमें से कोई भी नहीं
Bharatiya Sakshya Adhinyam	भारतीय साक्ष्य अधिनियम

Q.No: 88	Which of the following best describes the <b>goal of stem cell therapy</b> in modern medicine? निम्नलिखित में से कौन-सा विकल्प आधुनिक चिकित्सा में स्टेम सेल थेरेपी के उद्देश्य का सर्वोत्तम वर्णन करता है?
To provide genetic immunity against viruses	वायरसों के विरुद्ध आनुवंशिक प्रतिरक्षा प्रदान करना
To prevent blood clotting in arteries	धमनियों में रक्त के थक्के बनने से रोकना

To replace or regenerate damaged tissues or organs

क्षतिग्रस्त ऊतकों या अंगों को प्रतिस्थापित या पुनर्जनित करना

To stimulate hormonal glands

हार्मोन ग्रंथियों को उत्तेजित करना

Not Answered

Q.No: 89 The first known rules of Kabaddi were framed in which Indian state?

कबड्डी के सर्वप्रथम ज्ञात नियम किस भारतीय राज्य में बनाये गये थे?

Tamil Nadu

तमिलनाडु

Uttar Pradesh

उत्तर प्रदेश

Punjab

पंजाब

Maharashtra

महाराष्ट्र

Not Answered

Q.No: 90 Match the Mahajanapada with its capital:

Column A: Mahajanapada	Column B: Capital
1. Vatsa	a. Kaushambi
2. Magadha	b. Rajagriha
3. Kuru	c. Ujjayini
4. Avanti	d. Indraprastha

महाजनपद का उसकी राजधानी से मिलान करें:

कॉलम A: महाजनपद	कॉलम B: पूंजी
1. वत्स	a. कौशांबी
2. मगध	b. राजगृह
3. कुरु	c. उज्जयिनी
4. अवन्ती	d. इन्द्रप्रस्थ

1-a, 2-b, 3-d, 4-c

1-a, 2-b, 3-d, 4-c

1-b, 2-a, 3-c, 4-d

1-b, 2-a, 3-c, 4-d

1-c, 2-d, 3-a, 4-b

1-c, 2-d, 3-a, 4-b

1-d, 2-c, 3-b, 4-a

1-d, 2-c, 3-b, 4-a

Q.No: 91 Which of the following **correctly** pairs the initiative with its primary objective from India's viewpoint?

निम्नलिखित में से कौन सा भारत के दृष्टिकोण से पहल को उसके प्राथमिक उद्देश्य के साथ **सही** ढंग से जोड़ता है?

Chabahar Port – Access Central Asia via Iran

चाबहार बंदरगाह - ईरान के रास्ते मध्य एशिया तक पहुँच

BIMSTEC – Land connectivity to Europe

बिम्स्टेक - यूरोप से भूमि संपर्क

QUAD – Strengthening oil diplomacy in Gulf

क्वाड(QUAD) - खाड़ी में तेल कूटनीति को मजबूत करना

IMEC – Maritime security in South China Sea

आईएमईसी - दक्षिण चीन सागर में समुद्री सुरक्षा

Q.No: 92 Which feature is not commonly associated with French colonial architecture in India?

फ्रांसीसी औपनिवेशिक वास्तुकला से सामान्यतः कौन-सा तत्व संबद्ध नहीं होता?

Wide verandas

चौड़ी बरामदे

Tall doors and windows

ऊँचे दरवाज़े और खिड़कियाँ

Sloped tiled roofs

ढलान वाली टाइल की छतें

Ornate Mughal domes

मुगल शैली के अलंकरणयुक्त गुंबद

Not Answered

Q.No: 93 Initially, when the 'Constitution of India' was adopted on 26th November 1949, how many Articles and Schedules did it originally contain?

प्रारंभ में, जब 26 नवंबर 1949 को 'भारत का संविधान' अपनाया गया था, तो इसमें मूल रूप से कितने अनुच्छेद और अनुसूचियाँ थीं?

284 Articles and 8 Schedules

284 अनुच्छेद और 8 अनुसूचियाँ

395 Articles and 12 Schedules

395 अनुच्छेद और 12 अनुसूचियाँ

395 Articles and 8 Schedules

395 अनुच्छेद और 8 अनुसूचियाँ

444 Articles and 12 Schedules

444 अनुच्छेद और 12 अनुसूचियाँ

Q.No: 94 'The provision for 'Oath or Affirmation' by members of the legislature is mentioned in which Schedule of the Indian Constitution?

विधानमंडल के सदस्यों द्वारा 'शपथ या प्रतिज्ञान' का प्रावधान भारतीय संविधान की किस अनुसूची में उल्लिखित है?

Second Schedule

दूसरी अनुसूची

Fourth Schedule

चौथी अनुसूची

Fifth Schedule

पांचवीं अनुसूची

Third Schedule

तीसरी अनुसूची

Q.No: 95 Match the columns:

Column A (Cropping Season)	Column B (Major Crops – Shuffled)
A. Kharif (June–September)	1. Vegetables, Fruits, Fodder
B. Rabi (October–March)	2. Rice, Cotton, Bajra, Maize, Jowar, Tur
C. Zaid (April–June)	3. Wheat, Gram, Rapeseeds and Mustard, Barley

स्तंभों का मिलान करें:

स्तंभ A (फसल का मौसम)	स्तंभ B (प्रमुख फसलें – फेरबदल)
A. खरीफ (जून-सितंबर)	1. सब्जियां, फल, चारा
B. रबी (अक्टूबर-मार्च)	2. चावल, कपास, बाजरा, मक्का, ज्वार, अरहर
C. जायद (अप्रैल-जून)	3. गेहूं, चना, रेपसीड और सरसों, जौ

A-3, B-2, C-1

A-3, B-2, C-1

A-2, B-1, C-3

A-2, B-1, C-3

A-1, B-2, C-3

A-1, B-2, C-3

A-2, B-3, C-1

A-2, B-3, C-1

Q.No: 96 With reference to the Indian Councils Act, 1892, consider the following statements and choose the correct option:

1. It significantly increased the number of official members in the Central Legislative Council.
2. It empowered the legislative councils to discuss the budget and address questions to the executive.
3. It introduced the principle of direct election for non-official members of provincial legislative councils.

भारतीय परिषद अधिनियम, 1892 के संदर्भ में, निम्नलिखित कथनों पर विचार कीजिए और सही विकल्प चुनिए:

1. इसने केंद्रीय विधान परिषद में सरकारी सदस्यों की संख्या में उल्लेखनीय वृद्धि की।
2. इसने विधान परिषदों को बजट पर चर्चा करने और कार्यपालिका से प्रश्न पूछने का अधिकार दिया।
3. इसने प्रांतीय विधान परिषदों के गैर-सरकारी सदस्यों के लिए प्रत्यक्ष चुनाव का सिद्धांत प्रस्तुत किया।

1 only

केवल 1

2 only

केवल 2

1 and 3 only

केवल 1 और 3

2 and 3 only

केवल 2 और 3

Not Answered

Q.No: 97 What does 'repo rate' refer to in India's monetary policy?

भारत की मौद्रिक नीति में 'रेपो दर' (Repo Rate) का क्या अर्थ है?

Rate of foreign exchange transactions

विदेशी मुद्रा विनिमय दर

Rate at which the government borrows from banks

वह दर जिस पर सरकार बैंकों से उधार लेती है

Rate at which consumers take loans

उपभोक्ताओं द्वारा ऋण लेने की दर

Rate at which commercial banks borrow from the RBI

वह दर जिस पर वाणिज्यिक बैंक आरबीआई से उधार लेते हैं

Q.No: 98    What is a unique feature of the AstroSat mission operated by ISRO?

इसरो द्वारा संचालित एस्ट्रोसैट मिशन की अनूठी विशेषता क्या है?

Simultaneous multi-wavelength observations

एक साथ बहु-तरंगदैर्घ्य अवलोकन

Optical observations only

केवल ऑप्टिकल अवलोकन

X-ray observations only

केवल एक्स-रे अवलोकन

Single -wavelength observations

एकल-तरंगदैर्घ्य अवलोकन

Not Answered

Q.No: 99    Consider the following two statements, labeled Assertion (A) and Reason (R). Evaluate them and choose the appropriate answer from the given options.

**Assertion (A):** The standard distance between the penalty spot and the goal line on a football field is 11 meters.

**Reason (R):** This distance allows the goalkeeper a fair reaction time while challenging the accuracy and confidence of the penalty taker.

**अभिकथन (A) और कारण (R) से चिह्नित निम्नलिखित दो कथनों पर विचार करें। उनका मूल्यांकन करें और दिए गए विकल्पों में से उचित उत्तर चुनें।**

**अभिकथन (A):** फुटबॉल मैदान पर पेनल्टी स्पॉट और गोल लाइन के बीच मानक दूरी 11 मीटर है।

**कारण (R):** यह दूरी गोलकीपर को उचित प्रतिक्रिया समय देती है जबकि पेनल्टी लेने वाले की सटीकता और आत्मविश्वास को चुनौती देती है।

A is false, but R is true.

A असत्य है, लेकिन R सत्य है।

A is true, but R is false.

A सत्य है, लेकिन R असत्य है।

Both A and R are true, and R is the correct explanation of A.

A और R दोनों सत्य हैं, तथा R, A का सही स्पष्टीकरण है।

Both A and R are true, but R is not the correct explanation of A.

A और R दोनों सत्य हैं, लेकिन R, A का सही स्पष्टीकरण नहीं है।

Not Answered

Q.No: 100    Which of the following accurately describes The Seven Moons of Maali Almeida, winner of the 2022 Booker Prize?

- 1.The novel is set during the civil war in Sri Lanka and explores the afterlife of a photojournalist.
- 2.It is a non-fictional account of archaeological excavations in the Gandhara region.
- 3.The author, Shehan Karunatilaka, uses satire and ghosts to comment on violence, memory, and political trauma.

**निम्नलिखित में से कौन सा 2022 बुकर पुरस्कार विजेता माली अल्मेडा के सात चंद्रमाओं का सटीक वर्णन करता है?**

1. यह उपन्यास श्रीलंका में गृहयुद्ध के दौरान की पृष्ठभूमि पर आधारित है और एक फोटो पत्रकार के परलोक की पड़ताल करता है।
2. यह गांधार क्षेत्र में पुरातात्विक उत्खनन का एक गैर-काल्पनिक वृत्तांत है।
3. लेखक, शेहान करुणातिलका, हिंसा, स्मृति और राजनीतिक आघात पर टिप्पणी करने के लिए व्यंग्य और भूतों का उपयोग करते हैं।

2 and 3 only

केवल 2 और 3

1 and 3 only

केवल 1 और 3

1 and 2 only

केवल 1 और 2

1, 2 and 3 all are correct

1, 2 और 3 सभी सही हैं

Not Answered



Q.No: 101	<p>In the following question, the first and the last parts of the sentence/passage are numbered 1 and 6. The rest of the sentence/passage is split into four parts — P, Q, R, and S. These four parts are not given in their proper order. Read the sentence/passage and find the most logical order of the parts between 1 and 6.</p> <p>An astronaut must train before going to space.  P. They use a simulator to practice.  Q. Their body must get used to zero gravity.  R. They learn emergency procedures.  S. They also learn how to wear the space suit.  All this helps them prepare well.</p>
RPSQ	
QSPR	
PRSQ	
SQRP	

Q.No: 102	<p>Read the following passage carefully and answer the questions that follow by selecting the most appropriate option from the given alternatives.</p> <p>In today's digital age, convenience often comes at the cost of privacy. Every time a user browses a website, clicks a link, or uses an app, their data is collected—sometimes without their knowledge. Companies use this information to target ads, predict behavior, or even sell insights to third parties. While this can lead to better services, it also raises ethical concerns. Who controls this data? How is it stored, and can users truly opt out? Many people accept terms and conditions without reading them, unknowingly giving permission for data tracking. Some countries have passed laws to protect user data, but implementation remains weak. As surveillance tools grow smarter, the line between public and private becomes blurred. Individuals must now learn to balance the benefits of technology with the right to privacy—a task that requires awareness, regulation, and responsible digital behavior.</p> <p>What is the main concern raised in the passage?</p>
Lack of internet speed	
High cost of mobile data	
Threats to digital privacy	
Overuse of technology	

Q.No: 103	<p>Read the following passage carefully and answer the questions that follow by selecting the most appropriate option from the given alternatives.</p> <p>In today's digital age, convenience often comes at the cost of privacy. Every time a user browses a website, clicks a link, or uses an app, their data is collected—sometimes without their knowledge. Companies use this information to target ads, predict behavior, or even sell insights to third parties. While this can lead to better services, it also raises ethical concerns. Who controls this data? How is it stored, and can users truly opt out? Many people accept terms and conditions without reading them, unknowingly giving permission for data tracking. Some countries have passed laws to protect user data, but implementation remains weak. As surveillance tools grow smarter, the line between public and private becomes blurred. Individuals must now learn to balance the benefits of technology with the right to privacy—a task that requires awareness, regulation, and responsible digital behavior.</p> <p>According to the passage, how is user data often collected?</p>
Only with government approval	
Through printed forms	
Without users being fully aware	
After signing hardcopy documents	

Q.No: 104	<p>Read the following passage carefully and answer the questions that follow by selecting the most appropriate option from the given alternatives.</p> <p>In today's digital age, convenience often comes at the cost of privacy. Every time a user browses a website, clicks a link, or uses an app, their data is collected—sometimes without their knowledge. Companies use this information to target ads, predict behavior, or even sell insights to third parties. While this can lead to better services, it also raises ethical concerns. Who controls this data? How is it stored, and can users truly opt out? Many people accept terms and conditions without reading them, unknowingly giving permission for data tracking. Some countries have passed laws to protect user data, but implementation remains weak. As surveillance tools grow smarter, the line between public and private becomes blurred. Individuals must now learn to balance the benefits of technology with the right to privacy—a task that requires awareness, regulation, and responsible digital behavior.</p> <p>What does the passage say about laws protecting data?</p>
	They are strong and global
	They are strict in all countries
	<b>They exist but are poorly enforced</b>
	They are unnecessary

Q.No: 105	<p>Read the following passage carefully and answer the questions that follow by selecting the most appropriate option from the given alternatives.</p> <p>In today's digital age, convenience often comes at the cost of privacy. Every time a user browses a website, clicks a link, or uses an app, their data is collected—sometimes without their knowledge. Companies use this information to target ads, predict behavior, or even sell insights to third parties. While this can lead to better services, it also raises ethical concerns. Who controls this data? How is it stored, and can users truly opt out? Many people accept terms and conditions without reading them, unknowingly giving permission for data tracking. Some countries have passed laws to protect user data, but implementation remains weak. As surveillance tools grow smarter, the line between public and private becomes blurred. Individuals must now learn to balance the benefits of technology with the right to privacy—a task that requires awareness, regulation, and responsible digital behavior.</p> <p>What is one positive use of user data mentioned in the passage?</p>
	Reducing screen time
	<b>Improving service experiences</b>
	Blocking global access
	Avoiding social media

Q.No: 106	<p>Read the following passage carefully and answer the questions that follow by selecting the most appropriate option from the given alternatives.</p> <p>In today's digital age, convenience often comes at the cost of privacy. Every time a user browses a website, clicks a link, or uses an app, their data is collected—sometimes without their knowledge. Companies use this information to target ads, predict behavior, or even sell insights to third parties. While this can lead to better services, it also raises ethical concerns. Who controls this data? How is it stored, and can users truly opt out? Many people accept terms and conditions without reading them, unknowingly giving permission for data tracking. Some countries have passed laws to protect user data, but implementation remains weak. As surveillance tools grow smarter, the line between public and private becomes blurred. Individuals must now learn to balance the benefits of technology with the right to privacy—a task that requires awareness, regulation, and responsible digital behavior.</p> <p>What does the author suggest is needed to protect privacy?</p>
	Avoiding all apps
	Stronger surveillance tools
	<b>Awareness and responsible behavior</b>
	Free mobile phones for all

Q.No: 107	<p>Read the following passage carefully and answer the questions that follow by selecting the most appropriate option from the given alternatives.</p> <p>Artificial Intelligence (AI) is gradually transforming the way students learn. From virtual tutors to personalized learning paths, AI helps identify each learner’s strengths and weaknesses. With the help of data, AI systems can suggest specific topics where students need improvement. Schools are also using AI chatbots to answer basic queries, reducing the pressure on teachers. However, experts warn that over-dependence on AI may limit critical thinking. If students rely too much on machines for answers, they may lose problem-solving skills. There are also concerns about data privacy, especially when student performance data is stored online. Despite these issues, many educators believe AI can be a useful tool when used wisely. Like any technology, the key lies in balancing human guidance with machine efficiency.</p> <p>What does AI mainly help with in education?</p>
Giving marks	
Personalizing learning	
Hiring teachers	
Fixing school buildings	

Q.No: 108	<p>Read the following passage carefully and answer the questions that follow by selecting the most appropriate option from the given alternatives.</p> <p>Artificial Intelligence (AI) is gradually transforming the way students learn. From virtual tutors to personalized learning paths, AI helps identify each learner’s strengths and weaknesses. With the help of data, AI systems can suggest specific topics where students need improvement. Schools are also using AI chatbots to answer basic queries, reducing the pressure on teachers. However, experts warn that over-dependence on AI may limit critical thinking. If students rely too much on machines for answers, they may lose problem-solving skills. There are also concerns about data privacy, especially when student performance data is stored online. Despite these issues, many educators believe AI can be a useful tool when used wisely. Like any technology, the key lies in balancing human guidance with machine efficiency.</p> <p>What is a possible risk of overusing AI?</p>
Higher costs	
Fewer classrooms	
Poor thinking skills	
Better results	

Q.No: 109	<p>Read the following passage carefully and answer the questions that follow by selecting the most appropriate option from the given alternatives.</p> <p>Artificial Intelligence (AI) is gradually transforming the way students learn. From virtual tutors to personalized learning paths, AI helps identify each learner’s strengths and weaknesses. With the help of data, AI systems can suggest specific topics where students need improvement. Schools are also using AI chatbots to answer basic queries, reducing the pressure on teachers. However, experts warn that over-dependence on AI may limit critical thinking. If students rely too much on machines for answers, they may lose problem-solving skills. There are also concerns about data privacy, especially when student performance data is stored online. Despite these issues, many educators believe AI can be a useful tool when used wisely. Like any technology, the key lies in balancing human guidance with machine efficiency.</p> <p>Why are AI chatbots used in schools?</p>
To monitor cameras	
To take exams	
To answer student questions	
To conduct interviews	



Q.No: 110	<p>Read the following passage carefully and answer the questions that follow by selecting the most appropriate option from the given alternatives.</p> <p>Artificial Intelligence (AI) is gradually transforming the way students learn. From virtual tutors to personalized learning paths, AI helps identify each learner’s strengths and weaknesses. With the help of data, AI systems can suggest specific topics where students need improvement. Schools are also using AI chatbots to answer basic queries, reducing the pressure on teachers. However, experts warn that over-dependence on AI may limit critical thinking. If students rely too much on machines for answers, they may lose problem-solving skills. There are also concerns about data privacy, especially when student performance data is stored online. Despite these issues, many educators believe AI can be a useful tool when used wisely. Like any technology, the key lies in balancing human guidance with machine efficiency.</p> <p>What is a concern related to student data?</p>
	Attendance drops
	Internet speed
	Data privacy
	Exam cheating

Q.No: 111	<p>Read the following passage carefully and answer the questions that follow by selecting the most appropriate option from the given alternatives.</p> <p>Artificial Intelligence (AI) is gradually transforming the way students learn. From virtual tutors to personalized learning paths, AI helps identify each learner’s strengths and weaknesses. With the help of data, AI systems can suggest specific topics where students need improvement. Schools are also using AI chatbots to answer basic queries, reducing the pressure on teachers. However, experts warn that over-dependence on AI may limit critical thinking. If students rely too much on machines for answers, they may lose problem-solving skills. There are also concerns about data privacy, especially when student performance data is stored online. Despite these issues, many educators believe AI can be a useful tool when used wisely. Like any technology, the key lies in balancing human guidance with machine efficiency.</p> <p>What is the author's final advice?</p>
	Replace teachers
	Use only AI
	Balance tech and human input
	Avoid all AI

Q.No: 112	<p>In the following passage, some words have been omitted. Read the passage carefully and choose the most appropriate option from the given alternatives to fill in each blank. Mark your answer for each question.</p> <p>Social media has become an important part of modern life, especially among young people. It allows them to connect, share ideas, and express themselves freely. However, this freedom also brings challenges. Many teenagers feel pressure to look perfect or appear popular online. They often compare their lives to others, which can affect their self-confidence. Experts suggest that it’s important to build a healthy (1)_____ toward social media. Instead of trying to copy others, young users should focus on their real-life goals and (2)_____. Parents and schools also have a role to play by teaching students how to use digital tools (3)_____. Setting screen-time limits and encouraging outdoor activities can help restore a sense of balance. In the end, technology should be a tool for growth, not a source of (4)_____. By using social media wisely, young people can turn it into a space of learning, (5)_____ and real connection.</p> <p>(1)</p>
	attitude
	habit
	relationship
	thought

Q.No: 113 In the following passage, some words have been omitted. Read the passage carefully and choose the most appropriate option from the given alternatives to fill in each blank. Mark your answer for each question.

Social media has become an important part of modern life, especially among young people. It allows them to connect, share ideas, and express themselves freely. However, this freedom also brings challenges. Many teenagers feel pressure to look perfect or appear popular online. They often compare their lives to others, which can affect their self-confidence. Experts suggest that it's important to build a healthy (1)\_\_\_\_\_ toward social media. Instead of trying to copy others, young users should focus on their real-life goals and (2)\_\_\_\_\_. Parents and schools also have a role to play by teaching students how to use digital tools (3)\_\_\_\_\_. Setting screen-time limits and encouraging outdoor activities can help restore a sense of balance. In the end, technology should be a tool for growth, not a source of (4)\_\_\_\_\_. By using social media wisely, young people can turn it into a space of learning, (5)\_\_\_\_\_ and real connection.

(2

wishes

schedules

priorities

dreams

Q.No: 114 In the following passage, some words have been omitted. Read the passage carefully and choose the most appropriate option from the given alternatives to fill in each blank. Mark your answer for each question.

Social media has become an important part of modern life, especially among young people. It allows them to connect, share ideas, and express themselves freely. However, this freedom also brings challenges. Many teenagers feel pressure to look perfect or appear popular online. They often compare their lives to others, which can affect their self-confidence. Experts suggest that it's important to build a healthy (1)\_\_\_\_\_ toward social media. Instead of trying to copy others, young users should focus on their real-life goals and (2)\_\_\_\_\_. Parents and schools also have a role to play by teaching students how to use digital tools (3)\_\_\_\_\_. Setting screen-time limits and encouraging outdoor activities can help restore a sense of balance. In the end, technology should be a tool for growth, not a source of (4)\_\_\_\_\_. By using social media wisely, young people can turn it into a space of learning, (5)\_\_\_\_\_ and real connection.

(3)

widely

safely

effectively

blindly

Q.No: 115 In the following passage, some words have been omitted. Read the passage carefully and choose the most appropriate option from the given alternatives to fill in each blank. Mark your answer for each question.

Social media has become an important part of modern life, especially among young people. It allows them to connect, share ideas, and express themselves freely. However, this freedom also brings challenges. Many teenagers feel pressure to look perfect or appear popular online. They often compare their lives to others, which can affect their self-confidence. Experts suggest that it's important to build a healthy (1)\_\_\_\_\_ toward social media. Instead of trying to copy others, young users should focus on their real-life goals and (2)\_\_\_\_\_. Parents and schools also have a role to play by teaching students how to use digital tools (3)\_\_\_\_\_. Setting screen-time limits and encouraging outdoor activities can help restore a sense of balance. In the end, technology should be a tool for growth, not a source of (4)\_\_\_\_\_. By using social media wisely, young people can turn it into a space of learning, (5)\_\_\_\_\_ and real connection.

(4)

fun

distraction

stress

failure

Q.No: 116 In the following passage, some words have been omitted. Read the passage carefully and choose the most appropriate option from the given alternatives to fill in each blank. Mark your answer for each question.

Social media has become an important part of modern life, especially among young people. It allows them to connect, share ideas, and express themselves freely. However, this freedom also brings challenges. Many teenagers feel pressure to look perfect or appear popular online. They often compare their lives to others, which can affect their self-confidence. Experts suggest that it's important to build a healthy (1)\_\_\_\_\_ toward social media. Instead of trying to copy others, young users should focus on their real-life goals and (2)\_\_\_\_\_. Parents and schools also have a role to play by teaching students how to use digital tools (3)\_\_\_\_\_. Setting screen-time limits and encouraging outdoor activities can help restore a sense of balance. In the end, technology should be a tool for growth, not a source of (4)\_\_\_\_\_. By using social media wisely, young people can turn it into a space of learning, (5)\_\_\_\_\_ and real connection.

(5)

- fame
- growth
- fun
- creativity

Q.No: 117 Find the misspelt word.

Ubiquitous

interference

interrupt

Ubiquitus

Q.No: 118 Arrange the sentence parts:  
(A) water the plants (B) every morning (C) before breakfast (D) we

DCAB

DACB

DBCA

DABC

Q.No: 119 Select the most appropriate option to fill in the blank.  
She hasn't called me \_\_\_ Monday.

since

for

on

at

Q.No: 120 Select the synonym of **Ubiquitous**.

Isolated

Omnipresent

Rare

Occasional

Q.No: 121 What does the idiom 'Clutching at straws' mean?

Hoping without reason

Laughing loudly

Boasting unnecessarily

Winning easily

Q.No: 122 What does the idiom 'Sit on the fence' mean?

Take a risk

Remain silent

Stay neutral

Join both sides

Q.No: 123 Find the incorrect part of the sentence:  
He as well as his brothers were present.

He as well as

his brothers

were present

No error

Q.No: 124 Pick the antonym of 'Yoke'.

Immoral

Vicious

Harness

Liberate

Q.No: 125 Select the most appropriate option to improve the bold part of the sentence.  
The fiction and non fictional book, **that I borrowed**, was interesting.

whom I borrowed

what I borrowed

whose I borrowed

which I borrowed

Q.No: 126 Choose the correct meaning of idiom:  
'All at sea'

Far away

Excited

Confused

Drowning



Q.No: 127	In the following question, a sentence has been given in Indirect Speech. Choose the correct Direct Speech form.  The astronomer noted that Jupiter's rotation was the fastest among all planets in the solar system.
	The astronomer noted, "Jupiter's rotation has been the fastest among all planets in the solar system."
	The astronomer noted, "Jupiter's rotation had been the fastest among all planets in the solar system."
	The astronomer noted, "Jupiter's rotation was the fastest among all planets in the solar system."
	The astronomer noted, "Jupiter's rotation is the fastest among all planets in the solar system."

Q.No: 128	Select the option that expresses the given sentence in Direct to Indirect Speech. He said, "May God bless you."
	He told that God should bless me.
	He said that God may bless me.
	He wished God bless me.
	He prayed that God might bless me.

Q.No: 129	Choose the option that completes the sentence using the correct spelling.  It is my _____ that municipal employees handle their jobs with great professionalism.
	bilief
	beleif
	relief
	beleaf

Q.No: 130	Select the option that expresses the given sentence in Direct to Indirect Speech. She said, "I was tired."
	She said that she will be tired.
	She said that she was tired.
	She said that she is tired.
	She said that she had been tired.

Q.No: 131	Which word is closest in meaning to 'Allay'?
	Pacify
	Clash
	Noise
	Dispute

Q.No: 132	Arrange the sentence parts: (A) a scholarship (B) for higher studies (C) was awarded to (D) the topper
	DCAB
	DABC
	DACB

DBCA

Q.No: 133     Select the option that expresses the given sentence in Direct Speech.  
I told him that I was busy.

I told him, "You are busy."

I said, "I am busy."

I told him, "I was busy."

I told him, "I am busy."

Q.No: 134     Select the most appropriate option to fill in the blank.  
The manager was dissatisfied \_\_\_\_ the poor attendance.

of

with

by

to

Q.No: 135     Select the option that expresses the given sentence in Direct Speech.  
She said that she liked chocolate.

She said, "I liked chocolate."

She said, "I had liked chocolate."

She said, "I like chocolate."

She said, "She likes chocolate."

Q.No: 136     Select the option that expresses the given sentence in Direct to Indirect Speech.  
They said, "Our teacher will explain the topic tomorrow."

They said that their teacher would explain the topic the next day.

They said that our teacher will explain the topic tomorrow.

They said that the teacher should explain the topic tomorrow.

They said that the teacher explained the topic the next day.

Q.No: 137     Rearrange the parts of this sentence:  
(A) by adopting modern methods (B) farmers can increase (C) agricultural production (D) effectively

ABCD

BCAD

BADC

BACD

Q.No: 138     Identify the part containing a grammatical or structural error:  
The number of applicants have increased this year.

The number of applicants

No error
this year
have increased

Q.No: 139	What does the idiom 'To go for a song' mean?
Be expensive	
Be unsold	
Be sold cheaply	
Be sung loudly	

Q.No: 140	What does the idiom 'To bell the cat' mean?
Take a risky initiative	
Feed a pet	
Escape a problem	
Make an easy move	

Q.No: 141	Select the most appropriate option to improve the bold part of the sentence. <b>None of the option</b> seems appropriate.
<div>Any of the optionals</div>	
<div>No optionals</div>	
<div>No one of the</div>	
<div>None of the options</div>	

Q.No: 142	Choose the one which can be substituted for the given sentence. One who abandons one's religious faith or principles
Apostate	
Heretic	
Infidel	
Pagan	

Q.No: 143	Which sentence contains a word that is spelled incorrectly?
The children were <b>fasinated</b> by the glowing fireflies in the dark.	
She was absolutely <b>intrigued</b> by the magician's clever tricks.	
The audience sat still, completely <b>hypnotized</b> by the performance.	
He explained the experiment in a way that was both clear and <b>engaging</b> .	

Q.No: 144	Select the correct active form of the given sentence: "The preliminary results have been officially announced by the matriculation board."
-----------	---

The matriculation board has officially announcing the preliminary results.

The matriculation board has officially announced the final results.

The matriculation board will has officially announced the preliminary results.

The matriculation board has officially announced the preliminary results.

Q.No: 145    Select the most appropriate homonym.  
The police seized the counterfeit **notes**.

Letters

Music

Currency

Messages

Q.No: 146    Select the most appropriate homonym.  
She went to the **court** to file a case.

Ground

Law place

Yard

Field

Q.No: 147    In the following question, the first and the last parts of the sentence/passage are numbered 1 and 6. The rest of the sentence/passage is split into four parts — P, Q, R, and S. These four parts are not given in their proper order. Read the sentence/passage and find the most logical order of the parts between 1 and 6.

A stray dog entered the school gate. P: The children ran away in fear. Q: It started barking loudly. R: A peon chased it away. S: Some teachers came out of the staff room. 6. Order was soon restored.

PSRQ

QPSR

QSPR

PQSR

Q.No: 148    Select the most appropriate option to improve the bold part of the sentence.  
She gave me many **informations**.

many pieces of information

lots of knowledge

several data

much information

Q.No: 149    Transform the following sentence into active voice:  
  
The glass was broken.

No one broke the glass.

Someone broke the glass.



He broken the glass.

He broke the glass.

Q.No: 150	Select the most appropriate option to improve the bold part of the sentence. He did not <b>knew</b> the answer.
knows	
<b>know</b>	
knowing	
knews	

Q.No: 151	Select the synonym of <b>Feeble</b> .
Robust	
Strong	
Sturdy	
<b>Weak</b>	

Q.No: 152	Rearrange the parts of this sentence: (A) to improve road safety (B) stricter traffic rules (C) should be implemented (D) immediately
BCAD	
CBAD	
<b>BACD</b>	
ABCD	

Q.No: 153	Select the most appropriate option to improve the bold part of the sentence. According to the teacher, the Earth is <b>revolving</b> .
spoke that the Earth is round	
said that the Earth is round	
<b>the earth is round.</b>	
told that Earth was round	

Q.No: 154	Arrange the sentence parts: (A) I have never (B) seen such (C) a huge gathering (D) before today
ACBD	
ABDC	
BACD	
<b>ABCD</b>	

Q.No: 155	In the following question, a sentence has been given in Indirect Speech. Choose the correct Direct Speech form.  The explorer remarked that rarely had he seen such a breathtaking view in all his travels.
The explorer remarked, "I had rarely seen such a breathtaking view in all my travels."	

The explorer remarked, "Rarely had I seen such a breathtaking view in all my travels."

The explorer remarked, "I rarely saw such a breathtaking view in all my travels."

The explorer remarked, "Rarely I had seen such a breathtaking view in all my travels."

Q.No: 156 In the following question, the first and the last parts of the sentence/passage are numbered 1 and 6. The rest of the sentence/passage is split into four parts — P, Q, R, and S. These four parts are not given in their proper order. Read the sentence/passage and find the most logical order of the parts between 1 and 6.

Books have always been a source of knowledge. P: They allow us to travel across time and space. Q: We learn about different cultures and civilizations. R: Stories in books fuel our imagination. S: From science to art, books cover every field. 6. Therefore, reading must be encouraged in youth.

SQPR

SRPQ

PRQS

PSQR

Q.No: 157 Select the most appropriate option to improve the bold part of the sentence.  
He doesn't **go to shopping** as often as he used to.

seldom goes at shop

go shopping

rarely goes to purchase

is rarely going to shop

Q.No: 158 Choose the antonym of 'eloquent':

Inexpressive

Articulate

Fluent

Persuasive

Q.No: 159 In the following question, the first and the last parts of the sentence/passage are numbered 1 and 6. The rest of the sentence/passage is split into four parts — P, Q, R, and S. These four parts are not given in their proper order. Read the sentence/passage and find the most logical order of the parts between 1 and 6.

The classroom was silent. P: The teacher entered with a test sheet. Q: Everyone looked anxious. R: She distributed the papers. S: The exam was about to begin. 6. The students began writing.

PQRS

QSPR

QPSR

PSQR

Q.No: 160 Select the most appropriate option to fill in the blank.  
He presides \_\_\_\_ all important meetings.

at

on
over
with

Q.No: 161	Select the most appropriate homonym. He was given a <b>light</b> punishment.
Heavy	
Dark	
Serious	
Mild	

Q.No: 162	Rearrange the parts of this sentence: (A) the country (B) was devastated (C) by a powerful cyclone (D) last month
ABCD	
BACD	
ABDC	
ACBD	

Q.No: 163	Select the synonym of <b>Chronic</b> .
Temporary	
<b>Persistent</b>	
Fresh	
Occasional	

Q.No: 164	Choose the antonym of 'prominent':
Obscure	
Renowned	
Eminent	
Conspicuous	

Q.No: 165	<p>In the following question, the first and the last parts of the sentence/passage are numbered 1 and 6. The rest of the sentence/passage is split into four parts — P, Q, R, and S. These four parts are not given in their proper order. Read the sentence/passage and find the most logical order of the parts between 1 and 6.</p> <p>The Earth is facing a serious environmental crisis. P: Forests are being cut down. Q: Oceans are filling with plastic. R: The air is becoming toxic. S: Climate change is accelerating. 6. We must act before it's too late.</p>
<p>PQRS</p>	
<p>RQPS</p>	
<p>PRQS</p>	
<p>QPRS</p>	

Q.No: 166	Select the correct passive form of the given sentence. "He had lost the keys before the meeting."
The keys had lost before the meeting.	
The keys has been lost.	
<b>The keys had been lost by him before the meeting.</b>	
The keys were lost by him.	

Q.No: 167	Select the correct passive form of the given sentence. "He helps the poor."
<b>The poor are helped by him.</b>	
The poor were helped by him.	
The poor had been helped.	
The poor have helped.	

Q.No: 168	Select the option that expresses the given sentence in Direct Speech. They said that they were enjoying the trip.
They said, "We enjoy the trip."	
They said, "We were enjoying the trip."	
They said, "We have enjoyed the trip."	
<b>They said, "We are enjoying the trip."</b>	

Q.No: 169	Select the most appropriate option to fill in the blank. She ___ to the market every morning.
go	
gone	
<b>goes</b>	
going	

Q.No: 170	Select the correct active form of the given sentence. "The damaged road will be repaired by the municipality."
The municipality will have begin repairing the damaged road.	
The municipality will beginning repairing the damaged road.	
The municipality is begin repairing the damaged road.	
<b>The municipality will begin repairing the damaged road.</b>	

Q.No: 171	Arrange the sentence parts: (A) took care of (B) her younger brother (C) while their parents (D) were away
ACBD	
BACD	
CBAD	

ABCD

Q.No: 172 Choose the one which can be substituted for the given sentence.  
Killing of one's mother

Fratricide

Patricide

Matricide

Homicide

Q.No: 173 Select the most appropriate option to fill in the blank.  
She writes essays \_\_\_\_.

neat

neatest

neatly

neater

Q.No: 174 Select the most appropriate homonym.  
The **current** situation is tense.

Running

Electric flow

Present

Modern

Q.No: 175 Select the correct passive form of the given sentence.  
"Someone could have been using this password."

This password could have been being used.

This password could be used.

This password could have been used.

This password can be being used.

Q.No: 176 Choose the correct meaning of the idiom:  
"The gift of the gab"

Habit of exaggerating stories

Power to make quick decisions

Ability to cook well

Talent for speaking fluently and persuasively

Q.No: 177 In the following question, the first and the last parts of the sentence/passage are numbered 1 and 6. The rest of the sentence/passage is split into four parts — P, Q, R, and S. These four parts are not given in their proper order. Read the sentence/passage and find the most logical order of the parts between 1 and 6.

Oceans cover more than 70% of Earth’s surface. P: Marine species are crucial for food chains. Q: But plastic waste threatens marine life. R: Oceans regulate global temperature and climate. S: They provide food and employment to millions. 6. Ocean conservation must be prioritized.

- RSPQ
- SRPQ
- RQPS**
- PRSQ

Q.No: 178 Select the most appropriate option to improve the bold part of the sentence.  
He is **enough rich** to buy a car.

rich too much

sufficiently rich

too rich

**rich enough**

Q.No: 179 Choose the correct sequence to form a meaningful sentence:  
(A) the cat (B) sleeping (C) is (D) under the table

ABDC

ADBC

**ACBD**

ADCB

Q.No: 180 Choose the one which can be substituted for the given sentence.  
A place where dead bodies are kept temporarily

Dispensary

Crematorium

Graveyard

**Morque**

Q.No: 181 Select the most appropriate option to fill in the blank.  
He is interested \_\_\_\_ learning foreign languages.

for

**in**

at

to

Q.No: 182 Transform the following sentence into active voice:  
How beautifully has the picture been drawn by the artist!

How beautifully has the artist been drawn by the picture!

How beautifully has the artist been drew the picture!

How beautifully has the artist drew the picture!

How beautifully has the artist drawn the picture!

Q.No: 183 Select the correct active form.  
"Was the novel written by her?"

Was she writing the novel?

Is she writing the novel?

Did she write the novel?

Has she written the novel?

Q.No: 184 Choose the antonym of 'deliberate':

Calculated

Rash

Intentional

Cautious

Q.No: 185 Select the most appropriate option to fill in the blank.  
She was intent \_\_\_\_ pursuing higher studies abroad.

on

to

for

by

Q.No: 186 Select the option that expresses the given sentence in Direct to Indirect Speech.  
She said, "I must go now."

She said that she had to go then.

She said that she was going then.

She said that she must go now.

She said that she will go now.

Q.No: 187 Select the correct active form.  
"The temple has been visited by thousands of pilgrims."

Thousands of pilgrims were visiting the temple.

Thousands of pilgrims have visited the temple.

Thousands of pilgrims are visiting the temple.

Thousands of pilgrims had visited the temple.



Q.No: 188	<p>In the following question, the first and the last parts of the sentence/passage are numbered 1 and 6. The rest of the sentence/passage is split into four parts — P, Q, R, and S. These four parts are not given in their proper order. Read the sentence/passage and find the most logical order of the parts between 1 and 6.</p> <p>Rainforests are essential for biodiversity. P: Trees store carbon and release oxygen. Q: They are home to countless species. R: Yet, deforestation threatens these ecosystems. S: Some plants even hold potential medical cures. 6. So, preserving rainforests is a global concern.</p>
QPSR	
QRSP	
SRPQ	
PQSR	

Q.No: 189	<p>Select the correct passive form of the given sentence.</p> <p>"She may have told them the truth."</p>
The truth may have told to them.	
The truth may have been told to them.	
The truth may told them.	
The truth has been told.	

Q.No: 190	<p>Select the option that expresses the given sentence in Direct to Indirect Speech.</p> <p>The teacher said, "Let him try on his own."</p>
The teacher said that he should let him try on his own.	
The teacher ordered him to try on his own.	
The teacher suggested that he try on his own.	
The teacher said that let him try on his own.	

Q.No: 191	<p>Select the option that expresses the given sentence in Direct Speech.</p> <p>She said that she was going to the market.</p>
She said, "I have gone to the market."	
She said, "I am going to the market."	
She said, "I will go to the market."	
She said, "I was going to the market."	

Q.No: 192	<p>Find the incorrect part of the sentence:</p> <p>She prevented me to enter the hall.</p>
me to enter	
the hall	
She prevented	
No error	

Q.No: 193	<p>What is the one-word substitution for the misappropriation of money?</p>
Fraud	



Extortion
Embezzlement
Bribery

Q.No: 194	Which word is spelled wrongly?
Harass	
Government	
Calender	
Permanent	

Q.No: 195	Choose the part of the sentence that contains an error: The team were playing well.
No error	
were playing	
The team	
well	

Q.No: 196	Find the incorrect part of the sentence: The thief was hung for his crimes.
hung	
No error	
The thief was	
for his crimes	

Q.No: 197	Choose the correctly spelt word:
Embillish	
Imbellish	
Embellish	
Embelish	

Q.No: 198	Which sentence contains a word that is spelled incorrectly?
His performance in the play was just <b>mediocre</b> .	
She paid the <b>tuition</b> fee before the semester began.	
They enjoyed a <b>peaceful</b> evening by the lake.	
The view from the mountaintop was <b>tramendous</b> .	

Q.No: 199	Select the most appropriate option to fill in the blank. On that pleasant autumn day, I was accompanied _____ my daughter, Zenani.
in	

by
of
for

Q.No: 200	Choose the part of the sentence that contains an error: The committee have given its decision.
have given	
No error	
its decision	
The committee	

