



SSC ONLINE EXAMINATION

CANDIDATE RESPONSE SHEET/GRIEVANCE SYSTEM

View Your Responses

Click Here Grievance About Question

Click Here View Grievance Questions

Admin loggedin.[Logout]

Exam Name

:

Steno Grade C and D

Test Date

:

06 Aug 2025

Test Time

:

09:00 AM

Centre

:

DLNEW231_BRIGHT INFOTECH SERVICES_100107

Correct Option selected

Wrong Option selected

Correct Option

Not Answered

PART - A (General Intelligence & Reasoning).

Q.No: 1

All flowers are plants. Some plants are flowering plants. Which conclusion is logically valid?
सभी फूल पौधे हैं। कुछ पौधे फूलदार पौधे हैं। कौन सा निष्कर्ष तार्किक रूप से मान्य है?

No plants are flowers

कोई पौधा फूल नहीं है

Some flowers are not plants

कुछ फूल पौधे नहीं हैं

Some plants are flowers

कुछ पौधे फूल हैं

All plants are flowers

सभी पौधे फूल हैं

Q.No: 2

In a race of 40 runners, if Anu is placed 15th, how many runners are ahead of her?
40 धावकों की एक दौड़ में, यदि अनु 15वें स्थान पर है, तो उससे आगे कितने धावक हैं?

14

14

15

15

16

16

13

13

Q.No: 3

In each of the following questions, a word is transformed into another word by applying a specific alphabetical pattern to each of its letters. Identify the logic used in the first pair and apply the same logic to the second word to determine the correct answer.
DREAM : GRDBM :: MAGIC : ?
निम्नलिखित प्रत्येक प्रश्न में, एक शब्द को उसके प्रत्येक अक्षर पर एक विशिष्ट वर्णमाला पैटर्न लागू करके दूसरे शब्द में बदला गया है। पहले जोड़े में प्रयुक्त तर्क को पहचानिए और सही उत्तर निर्धारित करने के लिए उसी तर्क को दूसरे शब्द पर लागू कीजिए।
DREAM : GRDBM :: MAGIC : ?

ULOOL

ULOOL

ZEENE

ZEENE

PATJC

PATJC

TEEPO

TEEPO

Adda247

Test Prime

ALL EXAMS, ONE SUBSCRIPTION



80,000+
Mock Tests



**Personalised
Report Card**



**Unlimited
Re-Attempt**



600+
Exam Covered



20,000+ Previous
Year Papers



500%
Refund



ATTEMPT FREE MOCK NOW

Q.No: 4	<p>Input: 42 kite 93 balloon 37 lemon orange 64 Step I: 93 kite 42 balloon 37 lemon orange 64 Step II: 93 balloon kite 42 37 lemon orange 64 Step III: 93 balloon 64 kite 42 37 lemon orange Step IV: 93 balloon 64 lemon kite 42 37 orange Step V: 93 balloon 64 lemon 42 kite 37 orange Step VI: 93 balloon 64 lemon 42 orange kite 37 Question: What is the logic behind the arrangement?</p> <p>इनपुट: 42 पतंग 93 गुब्बारा 37 नींबू नारंगी 64 चरण I: 93 पतंग 42 गुब्बारा 37 नींबू नारंगी 64 चरण II: 93 गुब्बारा पतंग 42 37 नींबू नारंगी 64 चरण III: 93 गुब्बारा 64 पतंग 42 37 नींबू नारंगी चरण IV: 93 गुब्बारा 64 नींबू पतंग 42 37 नारंगी चरण V: 93 गुब्बारा 64 नींबू 42 पतंग 37 नारंगी चरण VI: 93 गुब्बारा 64 नींबू 42 नारंगी पतंग 37 प्रश्न: व्यवस्था के पीछे तर्क क्या है?</p>
	Largest number to front, then alternate word/number shifts
	सबसे बड़ी संख्या आगे, फिर वैकल्पिक शब्द/संख्या स्थानांतरित
	Words alphabetically left, numbers descending right
	शब्द वर्णानुक्रम में बायीं ओर, संख्याएं घटते हुए दायीं ओर
	Numbers and words arranged alternately by rank
	संख्याएं और शब्द क्रमानुसार वैकल्पिक रूप से व्यवस्थित किए गए
	Numbers descending left; words in reverse alphabetical order right
	बाईं ओर अवरोही क्रम में संख्याएं; दाईं ओर उल्टे वर्णमाला क्रम में शब्द
	Not Answered

Q.No: 5	<p>If 3 men and 2 women are seated in a row, how many seating arrangements are possible such that no woman is seated next to another woman?</p> <p>यदि 3 पुरुष और 2 महिलाएं एक पंक्ति में बैठे हैं, तो कितनी बैठने की व्यवस्था संभव है कि कोई भी महिला किसी अन्य महिला के बगल में न बैठे?</p>
12	
12	
48	
48	
36	
36	
72	
72	
	Not Answered

Q.No: 6	<p>Identify the missing number in the series.</p> <p>1, 1, 2, 3, 5, 8, 13, ?</p> <p>श्रृंखला में लुप्त संख्या पहचानें।</p> <p>1, 1, 2, 3, 5, 8, 13, ?</p>
22	
22	
21	
21	
20	
20	
24	
24	

Q.No: 7	<p>In a certain code, 'A + B' means A is the mother of B, 'A × B' means A is the father of B, 'A - B' means A is the sister of B, What does P × Q - R mean?</p> <p>एक निश्चित कोड में, 'A + B' का अर्थ है A, B की माँ है, 'A × B' का अर्थ है A, B का पिता है, 'A - B' का अर्थ है A, B की बहन है, P × Q - R का क्या अर्थ है?</p>
	P is the father of Q and Q is the sister of R

P, Q का पिता है और Q, R की बहन है
Q is the sister of R and Q is the sister of R
Q, R की बहन है और Q, R की बहन है
P is the father of R and Q is the sister of R
P, R का पिता है और Q, R की बहन है
P is the brother of R and Q is the sister of R
P, R का भाई है और Q, R की बहन है

Q.No: 8	<p>Four friends X, Y, Z, and W each have some marbles. X gives Y as many marbles as he already has, gives Z twice the amount of marbles Z already has, and gives W thrice the amount of marbles W already has. Then, W gives $\frac{1}{6}$th of his marbles to Y. Afterward, X gives 10% of the marbles he now owns to Z and 20% to Y. Finally, all of them have 50 marbles each. What was the original number of marbles each friend had?</p> <p>चार दोस्तों X, Y, Z और W में से प्रत्येक के पास कुछ मार्बल हैं। X, Y को उतने ही मार्बल देता है जितने उसके पास पहले से हैं, Z को Z के पास पहले से मौजूद मार्बल की संख्या का दुगुना देता है और W को W के पास पहले से मौजूद मार्बल की संख्या का तिगुना देता है। फिर, W अपने मार्बल का $\frac{1}{6}$ भाग Y को देता है। उसके बाद, X अपने पास मौजूद मार्बल का 10% Z को और 20% Y को देता है। अंत में, उन सभी के पास 50-50 मार्बल होते हैं। प्रत्येक मित्र के पास मूल रूप से कितने मार्बल थे?</p>
X - 100, Y - 15, Z - 15, W - 10	
X - 100, Y - 15, Z - 15, W - 10	
X - 110, Y - 10, Z - 10, W - 8	
X - 110, Y - 10, Z - 10, W - 8	
X - 90, Y - 40, Z - 20, W - 30	
X - 90, Y - 40, Z - 20, W - 30	
X - 120, Y - 30, Z - 30, W - 20 -	
X - 120, Y - 30, Z - 30, W - 20 -	
Not Answered	

Q.No: 9

Compare the following two addresses.
Address 1: Ms. Neha Verma, Flat No. 204, Tower B, Green Acres, Pune – 411045
Address 2: Mrs. Neha Verma, Flat No. 204, Tower B, Green Acres Society, Pune – 411045
Are these likely to be the same?

निम्नलिखित दो पत्तों की तुलना करें।
पता 1: सुश्री नेहा वर्मा, फ्लैट नंबर 204, टॉवर बी, ग्रीन एकर्स, पुणे – 411045
पता 2: श्रीमती नेहा वर्मा, फ्लैट नंबर 204, टॉवर बी, ग्रीन एकर्स सोसाइटी, पुणे – 411045
क्या ये एक ही हैं?

No, city codes do not match

नहीं, शहर कोड मेल नहीं खाते

Yes, all major details match

हां, सभी प्रमुख विवरण मेल खाते हैं

No, the flat numbers are different

नहीं, फ्लैट नंबर अलग हैं

No, the name titles are different

नहीं, नाम के शीर्षक अलग हैं

Q.No: 10	Choose the missing number in the below series. 100, 95, 90, 85, ? , 75 नीचे दी गई श्रृंखला में लुप्त संख्या चुनें। 100, 95, 90, 85, ? , 75
80	
80	
78	
78	
82	
82	
85	
85	

Q.No: 11	A person is facing north. He walks 30 meters and turns to his right, walking 20 meters. Then, he turns to his left and walks 30 meters. Which direction is he facing now? एक व्यक्ति उत्तर दिशा की ओर मुंह करके खड़ा है। वह 30 मीटर चलता है और अपने दाएं मुड़कर 20 मीटर चलता है। फिर, वह अपने बाएं मुड़कर 30 मीटर चलता है। अब वह किस दिशा की ओर मुंह करके खड़ा है?
South	
दक्षिण	
West	
पश्चिम	
East	
पूर्व	
North	
उत्तर	


Q.No: 12	Four of the following five are alike in a certain way and hence form a group. Which is the one that does not belong to that group? A. BRIGHT : DSJHF B. CUSTOM : FVUUP C. FLIGHT : HNIJI D. CHANCE : EKBMF E. STRONG : VUQPR निम्नलिखित पाँच में से चार एक निश्चित रूप से एक जैसे हैं और इसलिए एक समूह बनाते हैं। वह कौन सा है जो उस समूह से संबंधित नहीं है? A. BRIGHT : DSJHF B. CUSTOM : FVUUP C. FLIGHT : HNIJI D. CHANCE : EKBMF E. STRONG : VUQPR
STRONG : VUQPR	
STRONG : VUQPR	
FLIGHT : HNIJI	
FLIGHT : HNIJI	
CUSTOM : FVUUP	
CUSTOM : FVUUP	
BRIGHT : DSJHF	
BRIGHT : DSJHF	
Not Answered	

Q.No: 13	Sahil completed B.Sc. with 66% and M.Sc. with 60%. He has 1 year teaching experience and is 24 years old. What should be the action? साहिल ने बीएससी 66% और एमएससी 60% अंकों के साथ पूरी की है। उसे 1 साल का शिक्षण अनुभव है और उसकी उम्र 24 साल है। क्या कार्रवाई होनी चाहिए?
Refer to Principal	
प्रिंसिपल से संपर्क करें	
Select directly	
सीधे चयन करें	
Reject due to low experience	
कम अनुभव के कारण अस्वीकार	
Keep pending for verification	
सत्यापन हेतु लंबित रखें	
Not Answered	

Q.No: 14	How many ways can 4 people be seated in a circle if two people must sit next to each other? यदि दो व्यक्ति एक दूसरे के बगल में बैठें तो 4 व्यक्तियों को एक वृत्त में कितने तरीकों से बैठाया जा सकता है?
8	
8	
6	
6	
10	

10
4
4
Not Answered

Q.No: 15	Input: Box 53 21 Mobile 86 Tiger Fan 39 Question: What will be the Step II of the arrangement? इनपुट: बॉक्स 53 21 मोबाइल 86 टाइगर फैन 39 प्रश्न: व्यवस्था का चरण II क्या होगा?
86 21 Box Mobile Tiger Fan 39 53	
86 21 बॉक्स मोबाइल टाइगर फैन 39 53	
86 Box Mobile 53 Tiger Fan 39 21	
86 बॉक्स मोबाइल 53 टाइगर फैन 39 21	
86 Mobile Box 53 Tiger Fan 39 21	
86 मोबाइल बॉक्स 53 टाइगर फैन 39 21	
86 Box 53 Mobile Tiger Fan 39 21	
86 बॉक्स 53 मोबाइल टाइगर फैन 39 21	

Q.No: 16	If you are facing east and move 10 meters, then turn to your left and move 5 meters. Which direction are you facing now? यदि आप पूर्व की ओर मुंह करके खड़े हैं और 10 मीटर आगे बढ़ते हैं, तो अपनी बाईं ओर मुड़ें और 5 मीटर आगे बढ़ें। अब आप किस दिशा की ओर मुंह करके खड़े हैं?
West	
पश्चिम	
North	
उत्तर	
South	
दक्षिण	
East	
पूर्व	

Q.No: 17	<p>Among five persons — P, Q, R, S, and T: P is taller than only T. Q is taller than P but shorter than R. S is the tallest. Who is the shortest?</p> <p>पाँच व्यक्तियों - P, Q, R, S, और T में से: P केवल T से लंबा है। Q, P से लंबा है लेकिन R से छोटा है। S सबसे लंबा है। सबसे छोटा कौन है?</p>
S	
S	
II	
II	
Q	
Q	
R	
R	

Q.No: 18	In a 50 L mixture milk to water ratio is 3:2. How much water must be added to make the ratio 1:1? 50 लीटर के मिश्रण में दूध और पानी का अनुपात 3:2 है। अनुपात 1:1 करने के लिए कितना पानी मिलाना होगा?
15 L	
15 लीटर	
20 L	
20 लीटर	

12 L
12 लीटर
10 L
10 लीटर

Q.No: 19	Which figure breaks the pattern? □□■□□■□□■□ कौन सी आकृति पैटर्न को तोड़ती है? □□■□□■□□■□
3 rd ■	
3 rd ■	
6 th ■	
6 th ■	
9 th ■	
9 th ■	
11 th ■	
11 th ■	

Q.No: 20	If X is the father of Y and Y is the mother of Z, then how is X related to Z? यदि X, Y का पिता है और Y, Z की माता है, तो X का Z से क्या संबंध है?
Father-in-law	
ससुर	
Uncle	
चाचा	
Grandfather	
दादा	
Brother-in-law	
साला	

Q.No: 21	Sandeep was given some money by his father. He spent all of it in six shops. In each shop, he spent one rupee more than half of what he had when he entered. How much money did Sandeep receive from his father? संदीप को उसके पिता ने कुछ पैसे दिए थे। उसने ये सारे पैसे छह दुकानों में खर्च कर दिए। हर दुकान में उसने अपनी आधी से एक रुपया ज़्यादा खर्च किया। संदीप को अपने पिता से कितने पैसे मिले?
127 rupees	
127 रुपए	
15 rupees	
15 रुपए	
31 rupees	
31 रुपए	
63 rupees	
63 रुपए	
Not Answered	

Q.No: 22	In a class of 45 students, Rahul is ranked 20th from the top. If the students are arranged in the descending order of ranks, what will be Rahul's position from the bottom? 45 छात्रों की एक कक्षा में, राहुल शीर्ष से 20वें स्थान पर है। यदि छात्रों को अवरोही क्रम में व्यवस्थित किया जाए, तो नीचे से राहुल का स्थान क्या होगा?
26th	
26 वें	
23rd	
23 वें	
24th	
24 वें	
25th	

25 वें

Q.No: 23	If in a certain code, SUN is written as 54, and MOON is written as 57, how is STAR written? अगर किसी निश्चित कोड में SUN को 54 तथा MOON को 57 लिखा जाता है, तो STAR को किस प्रकार लिखा जाएगा?
64	
64	
58	
58	
57	
57	
75	
75	

Q.No: 24	If $5\#3=8$ and $7\#2=9$, then what is the value of $9\#4$? अगर $5\#3=8$ और $7\#2=9$, तो $9\#4$ का मान क्या है?
36	
36	
13	
13	
12	
12	
5	
5	

Q.No: 25	Find the number that doesn't belong: वह संख्या ज्ञात करें जो इस सूची में नहीं है:
11, 13, 17, 19	
11, 13, 17, 19	
37, 41, 43, 47	
37, 41, 43, 47	
23, 29, 31, 33	
23, 29, 31, 33	
2, 3, 5, 7	
2, 3, 5, 7	

Q.No: 26	Complete this series: 131, 137, 149, 163, 181, ? इस श्रृंखला को पूरा करें: 131, 137, 149, 163, 181, ?
211	
211	
193	
193	
191	
191	
197	
197	
Not Answered	

Q.No: 27	Which of the following actions shows the best judgment in a social situation? निम्नलिखित में से कौन सी क्रिया सामाजिक परिस्थिति में सर्वोत्तम निर्णय दर्शाती है?
Offering help to an elderly person carrying heavy bags भारी बैग ले जा रहे एक बुजुर्ग व्यक्ति की मदद करना	
Yelling at someone who bumped into you किसी ऐसे व्यक्ति पर चिल्लाना जो आपसे टकरा गया हो	

Posting negative comments online anonymously
गुमनाम रूप से ऑनलाइन नकारात्मक टिप्पणियाँ पोस्ट करना
Ignoring a crying child in a public place
सार्वजनिक स्थान पर रोते हुए बच्चे को नज़रअंदाज़ करना

Q.No: 28	A is to C as E is to: A, C से उसी प्रकार संबंधित है जिस प्रकार E:
I	
I	
H	
H	
F	
F	

Q.No: 29	Find the next term in the given series. B, DE, HJK, ?, WXYZB दी गई श्रृंखला में अगला पद ज्ञात कीजिए। B, DE, HJK, ?, WXYZB
S37T	
S37T	
R74A	
R74A	
OPQR	
OPQR	
T89Z	
T89Z	
Not Answered	

Q.No: 30	If A is the mother of B, and B is the father of C, then how is A related to C? यदि A, B की माता है और B, C का पिता है, तो A का C से क्या संबंध है?
Sister	
बहन	
Grandmother	
दादी	
Mother	
माँ	
Aunt	
चाची	

Q.No: 31	A boat travels 40 km upstream in 4 hours and downstream in 2 hours. What is the speed of the stream? एक नाव धारा के प्रतिकूल 40 किमी की दूरी 4 घंटे में और धारा के अनुकूल 2 घंटे में तय करती है। धारा की गति क्या है?
3 km/h	
3 किमी/घंटा	
4 km/h	
4 किमी/घंटा	
6 km/h	
6 किमी/घंटा	
5 km/h	
5 किमी/घंटा	
Not Answered	

Q.No: 32	Find the next term in the given series. K1F, M3E, O8D, Q19C, ? दी गई श्रृंखला में अगला पद ज्ञात कीजिए। K1F, M3E, O8D, Q19C, ?
----------	--

S37C
S37C
S42B
S42B
S47B
S47B
T42A
T42A

Q.No: 33	<p>Statements:</p> <p>1. All books are papers. 2. All papers are trees.</p> <p>Conclusions:</p> <p>I. All books are trees. II. Some trees are books</p> <p>कथन:</p> <p>1. सभी किताबें कागज़ हैं। 2. सभी कागज़ पेड़ हैं।</p> <p>निष्कर्ष:</p> <p>I. सभी किताबें पेड़ हैं। II. कुछ पेड़ किताबें हैं</p>
Only II follows	
केवल II अनुसरण करता है	
Only I follows	
केवल I अनुसरण करता है	
Both I and II follow	
I और II दोनों अनुसरण करते हैं	
Neither I nor II follows	
न तो I और न ही II अनुसरण करता है	

Q.No: 34	<p>Nishant has 68% B.Sc., pending M.Sc. result, 3 years teaching experience, 27 years old, willing for probation. What to do?</p> <p>निशांत के पास 68% बीएससी है, एम.एससी. का रिजल्ट आना बाकी है, 3 साल का शिक्षण अनुभव है, 27 साल का है, प्रोबेशन के लिए तैयार है। क्या करें?</p>
Wait for result then decide	
परिणाम का इंतजार करें फिर निर्णय लें	
Reject due to incomplete PG	
अपूर्ण पीजी के कारण अस्वीकृत	
Refer to Principal	
प्रिंसिपल से संपर्क करें	
Select Nishant	
निशांत का चयन करें	
Not Answered	

Q.No: 35	<p>If "A" is coded as 2, "B" as 4, "a" as 11, "b" as 12 (following a pattern for capitals and small letters), what is the code for "Hi"?</p> <p>अगर "A" को 2, "B" को 4, "a" को 11, "b" को 12 (बड़े और छोटे अक्षरों के पैटर्न का अनुसरण करते हुए) के रूप में कोड किया जाता है, तो "Hi" के लिए कोड क्या होगा?</p>
17, 20	
17, 20	
19, 22	
19, 22	
18, 21	
18, 21	
16, 19	
16, 19	

Q.No: 36	A man walks 10 meters south, then turns left and walks 15 meters. In which direction is he now from his starting point?
----------	---

	एक आदमी 10 मीटर दक्षिण की ओर चलता है, फिर बाएं मुड़ता है और 15 मीटर चलता है। अब वह अपने प्रारंभिक बिंदु से किस दिशा में है?
North	
उत्तर	
East	
पूर्व	
South	
दक्षिण	
West	
पश्चिम	

Q.No: 37	In a row of 8 seats, how many ways can 3 people sit next to each other? 8 सीटों की एक पंक्ति में, 3 लोग एक दूसरे के बगल में कितने तरीकों से बैठ सकते हैं?
48	
48	
36	
36	
54	
54	
72	
72	
Not Answered	

Q.No: 38	In how many ways can 5 people be seated in a row such that A and B are not next to each other? 5 व्यक्तियों को एक पंक्ति में कितने तरीकों से बैठाया जा सकता है कि A और B एक दूसरे के बगल में न हों?
36	
36	
54	
54	
72	
72	
48	
48	
Not Answered	

Q.No: 39	Select the correct option that will complete the series. (2, 7), (3, 13), (5, 31), ?, (11, 133) वह सही विकल्प चुनिए जो श्रृंखला को पूरा करेगा। (2, 7), (3, 13), (5, 31), ?, (11, 133)
(10, 101)	
(10, 101)	
(8,76)	
(8,76)	
(7, 57)	
(7, 57)	
(9, 91)	
(9, 91)	

Q.No: 40	A coding rule is followed by Roll numbers ending with an even digit belong to Batch 1 and Roll numbers ending with an odd digit belong to Batch 2. Identify the roll number for Batch 1 and Batch 2. कोडिंग नियम के अनुसार सम अंक पर समाप्त होने वाले रोल नंबर बैच 1 के हैं और विषम अंक पर समाप्त होने वाले रोल नंबर बैच 2 के हैं। बैच 1 और बैच 2 के रोल नंबर की पहचान करें। D1400 and C3882 D1400 और C3882
----------	--

F2894 and F3917
F2894 और F3917
A3841 and B4537
A3841 और B4537
G8763 and F4711
G8763 और F4711

Q.No: 41	All men are mortal. Socrates is a man. Which of the following is true? सभी मनुष्य नश्वर हैं। सुकरात एक मनुष्य है। निम्नलिखित में से कौन सा कथन सत्य है?
Socrates is not mortal	
सुकरात नश्वर नहीं है	
Socrates is immortal	
सुकरात अमर है	
Socrates is a god	
सुकरात एक देवता है	
Socrates is mortal	
सुकरात नश्वर है	

Q.No: 42	All birds can fly. Some birds cannot fly. Which of the following conclusions is correct? ए और बी ने 3:2 के अनुपात में निवेश किया। बी को ₹800 का फायदा हुआ। कुल लाभ कितना है?
All birds can swim	
सभी पक्षी तैर सकते हैं	
Some birds are fish	
कुछ पक्षी मछली हैं	
Some birds cannot fly	
कुछ पक्षी उड़ नहीं सकते	
All birds are animals	
सभी पक्षी जानवर हैं	
Not Answered	

Q.No: 43	Select the correct option that will complete the series. (2, 3), (5, 24), (8, 63), ?, (14, 195) वह सही विकल्प चुनिए जो श्रृंखला को पूरा करेगा। (2, 3), (5, 24), (8, 63), ?, (14, 195)
(9, 95)	
(9, 95)	
(10, 57)	
(10, 57)	
(11, 120)	
(11, 120)	
(12, 136)	
(12, 136)	

Q.No: 44	Find the missing term in the following series. ACE, BDF, CEH, DGI, ? निम्नलिखित श्रृंखला में लुप्त पद ज्ञात कीजिए। ACE, BDF, CEH, DGI, ?
EIK	
EIK	
EGI	
EGI	
EIM	
EIM	

EHL
EHL
Not Answered

Q.No: 45	D is to H as J is to: D, H के समान है, जैसे J, _ के समान है:
L	
L	
O	
O	
M	
M	
N	
N	

Q.No: 46	If in a certain code language, "TRIP" is written as "USJQ", how will "JUMP" be written in the same code? अगर किसी निश्चित कोड भाषा में, "TRIP" को "USJQ" लिखा जाता है, तो उसी कोड भाषा में "JUMP" को किस प्रकार लिखा जाएगा?
KVNO	
KVNO	
KVOQ	
KVOQ	
KUNQ	
KUNQ	
KVMQ	
KVMQ	

Q.No: 47	Input: cat 90 24 tree 48 75 flower bush Step I: 90 cat 24 tree 48 75 flower bush Step II: 90 bush cat 24 tree 48 75 flower Step III: 90 bush 75 cat 24 tree 48 flower Step IV: 90 bush 75 cat flower 24 tree 48 Step V: 90 bush 75 cat flower 48 24 tree Question: What is the logic behind the arrangement? इनपुट: बिल्ली 90 24 पेड़ 48 75 फूल झाड़ी चरण I: 90 बिल्ली 24 पेड़ 48 75 फूल झाड़ी चरण II: 90 झाड़ी बिल्ली 24 पेड़ 48 75 फूल चरण III: 90 झाड़ी 75 बिल्ली 24 पेड़ 48 फूल चरण IV: 90 झाड़ी 75 बिल्ली फूल 24 पेड़ 48 चरण V: 90 झाड़ी 75 बिल्ली फूल 48 24 पेड़ प्रश्न: व्यवस्था के पीछे तर्क क्या है?
Step III	
चरण III	
Step II	
चरण II	
Step V	
चरण V	
Step IV	
चरण IV	
Not Answered	

Q.No: 48	If + means -, ÷ means +, - means ×, and × means ÷ then, what is 18 ÷ 6 - 2 + 8? यदि + का अर्थ - है, ÷ का अर्थ + है, - का अर्थ × है, और × का अर्थ ÷ है, तो 18 ÷ 6 - 2 + 8 क्या है?
24	
24	
26	
26	
28	

28

22

22

Q.No: 49 Choose the number that is different from the others.

वह संख्या चुनें जो अन्य से भिन्न है।

64

64

49

49

32

32

48

48

Q.No: 50 In each of the following questions, a specific relationship is given between two words. Identify the word that shares a similar semantic relationship with the given pair. Choose the most appropriate option from the four choices given below.

Knife : Cut :: Pen : ?

निम्नलिखित प्रत्येक प्रश्न में दो शब्दों के बीच एक विशिष्ट संबंध दिया गया है। उस शब्द की पहचान कीजिए जो दिए गए युग्म के साथ समान अर्थ संबंध साझा करता है। नीचे दिए गए चार विकल्पों में से सबसे उपयुक्त विकल्प चुनिए।

चाकू : काटना :: कलम : ?

Ink

आईएनके

Scribble

घसीटना

Write

लिखना

Paper

कागज़

PART - B (General Awareness)

Q.No: 51 Consider the below statements regarding the Aditya-L1 mission and its payloads:

1. The SUIT payload on Aditya-L1 is designed to image the solar disk in the near-ultraviolet (UV) spectrum to study the temperature and chemical composition of the Sun's photosphere and chromosphere.

2. The SoLEXS instrument is a high-resolution X-ray spectrometer used to study solar flares and active regions in soft X-ray wavelengths.

Which of the above statements is/are correct?

आदित्य-एल1 मिशन और उसके पेलोड के बारे में नीचे दिए गए कथनों पर विचार करें:

1. आदित्य-एल1 पर SUIT पेलोड को सूर्य के फोटोस्फीयर और क्रोमोस्फीयर के तापमान और रासायनिक संरचना का अध्ययन करने के लिए निकट-पराबैंगनी (UV) स्पेक्ट्रम में सौर डिस्क की छवि बनाने के लिए डिज़ाइन किया गया है।

2. SoLEXS उपकरण एक उच्च-रिज़ॉल्यूशन एक्स-रे स्पेक्ट्रोमीटर है जिसका उपयोग नरम एक्स-रे तरंग दैर्ध्य में सौर फ्लेयर्स और सक्रिय क्षेत्रों का अध्ययन करने के लिए किया जाता है।

उपर्युक्त कथनों में से कौन सा सही है / हैं?

Both 1 and 2

1 और 2 दोनों

Neither 1 nor 2

न तो 1, न ही 2

2 only

2 केवल

1 only

1 केवल

Q.No: 52 The primary objective of the LUPEX Mission, a collaboration between ISRO and JAXA, is to:

इसरो और जाक्सा के बीच सहयोग से संचालित लूपेक्स मिशन का प्राथमिक उद्देश्य है:

Study the Martian atmosphere and soil composition

मंगल ग्रह के वायुमंडल और मिट्टी की संरचना का अध्ययन करें
Deploy a communication satellite in lunar orbit
चन्द्रमा की कक्षा में संचार उपग्रह तैनात करना
Investigate the quantity and quality of water on the Moon and explore its dark side
चंद्रमा पर पानी की मात्रा और गुणवत्ता की जांच करें और इसके अंधेरे पक्ष का पता लगाएं
Observe solar flares and coronal mass ejections
सौर ज्वालाओं और कोरोनल मास इजेक्शन का अवलोकन करें
Not Answered

Q.No: 53	<p>Read the following statements:</p> <p>Statement 1: The process of vertical heating of the atmosphere is known as advection.</p> <p>Statement 2: The transfer of heat through horizontal movement of air is called convection.</p> <p>Statement 3: 'Loo' winds in northern India during summer are caused by advection.</p> <p>Which of the above statements is/are correct?</p> <p>निम्नलिखित कथनों को पढ़ें:</p> <p>कथन 1: वायुमंडल के ऊर्ध्वाधर तापन की प्रक्रिया को संवहन के रूप में जाना जाता है।</p> <p>कथन 2: हवा की क्षैतिज गति के माध्यम से ऊष्मा के स्थानांतरण को संवहन कहा जाता है।</p> <p>कथन 3: गर्मियों के दौरान उत्तरी भारत में 'लू' हवाएँ संवहन के कारण होती हैं।</p> <p>उपर्युक्त कथनों में से कौन सा/से सही है/हैं?</p> <p>All three statements 1,2 and 3 are correct</p> <p>सभी तीन कथन 1,2 और 3 सही हैं</p> <p>Statements 2 and 3 are correct</p> <p>कथन 2 और 3 सही हैं</p> <p>Only Statements 1 and 2 are correct</p> <p>केवल कथन 1 और 2 सही हैं</p> <p>Only Statement 3 is correct</p> <p>केवल कथन 3 सही है</p> <p>Not Answered</p>
----------	--

Q.No: 54	<p>Which property of sound determines its loudness?</p> <p>ध्वनि का कौन-सा गुण उसकी तीव्रता (लाउडनेस) को निर्धारित करता है?</p> <p>Wavelength</p> <p>तरंगदैर्घ्य</p> <p>Pitch</p> <p>स्वर ऊँचाई (पिच)</p> <p>Amplitude</p> <p>आयाम (ऐम्प्लिट्यूड)</p> <p>Frequency</p> <p>आवृत्ति</p>
----------	---

Q.No: 55	<p>Which of the following is a subject under the State List?</p> <p>निम्नलिखित में से कौन-सा विषय राज्य सूची के अंतर्गत आता है?</p> <p>Banking</p> <p>बैंकिंग</p> <p>Public Order</p> <p>सार्वजनिक व्यवस्था</p> <p>Defence</p> <p>रक्षा</p> <p>Education</p> <p>शिक्षा</p>
----------	--

Q.No: 56	<p>Who was appointed as the CEO (Chief Executive Officer) of NITI Aayog in February 2023?</p> <p>फरवरी 2023 में नीति आयोग के सीईओ (मुख्य कार्यकारी अधिकारी) के रूप में किसे नियुक्त किया गया?</p>
----------	---

Dr. Sukhbir Singh Sandhu

डॉ. सुखबीर सिंह संधू

Amitabh Kant

अमिताभ कांत

Dr. Vivek Joshi

डॉ विवेक जोशी

BVR Subrahmanyam

बी.वी.आर. सुब्रह्मण्यम

Q.No: 57	How does Article 356 impact the federal structure of India? अनुच्छेद 356 भारत की संघीय संरचना को किस प्रकार प्रभावित करता है? It ensures judicial independence यह न्यायपालिका की स्वतंत्रता को सुनिश्चित करता है It promotes decentralization यह विकेंद्रीकरण को बढ़ावा देता है It allows Centre to dismiss State governments यह केंद्र को राज्य सरकारों को बर्खास्त करने की अनुमति देता है It enforces cooperative federalism यह सहकारी संघवाद को लागू करता है
Not Answered	

Q.No: 58	Which of the following is not a correct statement regarding vacuoles? रिक्तिकाओं के संबंध में निम्नलिखित में से कौन सा कथन सही नहीं है? Vacuoles are generally larger in animal cells than in plant cells. सामान्यतः पशु कोशिकाओं में रिक्तिकाएं पादप कोशिकाओं की तुलना में बड़ी होती हैं Animal cells usually contain smaller vacuoles compared to plant cells पशु कोशिकाओं में आमतौर पर पौधों की कोशिकाओं की तुलना में छोटे रिक्तिकाएं होती हैं In some plant cells, the central vacuole can take up most of the cell's volume कुछ पौधों की कोशिकाओं में, केंद्रीय रिक्तिका कोशिका के अधिकांश आयतन को घेर सकती है Vacuoles serve as storage sacs for both solids and liquids रिक्तिकाएं ठोस और तरल दोनों के लिए भंडारण थैलियों के रूप में काम करती हैं
----------	---

Q.No: 59	Which platform is used for submitting ideas under the INSPIRE MANAK Scheme? INSPIRE MANAK योजना के तहत विचार प्रस्तुत करने के लिए कौन सा मंच प्रयोग किया जाता है? Science and Technology Portal विज्ञान और प्रौद्योगिकी पोर्टल INSPIRE Portal INSPIRE पोर्टल National Innovation Portal राष्ट्रीय नवाचार पोर्टल Digital India Portal डिजिटल इंडिया पोर्टल
Not Answered	

Q.No: 60	Which of the following is the main reason that Prime Minister Narendra Modi meet Mr. Michal Spiczko, President of the Kabaddi Federation of Poland? निम्नलिखित में से कौन सा मुख्य कारण है कि प्रधान मंत्री नरेंद्र मोदी ने पोलैंड के कबड्डी महासंघ के अध्यक्ष श्री मिशल स्पिज़को से मुलाकात की? To congratulate him on Poland's football achievements पोलैंड की फुटबॉल उपलब्धियों पर उन्हें बधाई देने के लिए To appreciate his efforts in promoting Kabaddi in Europe यूरोप में कबड्डी को बढ़ावा देने के उनके प्रयासों की सराहना करना
----------	---

To sign a trade agreement between India and Poland
भारत और पोलैंड के बीच व्यापार समझौते पर हस्ताक्षर
To discuss military cooperation through sports
खेल के माध्यम से सैन्य सहयोग पर चर्चा करना

Q.No: 61	Which city is home to the cricket ground, Wankhede Stadium? वानखेड़े स्टेडियम क्रिकेट मैदान किस शहर में है?
Chennai	
चेन्नई	
Mumbai	
मुंबई	
Kolkata	
कोलकाता	
Delhi	
दिल्ली	

Q.No: 62	The Vice-President of India is part of which branch of the government? भारत का उपराष्ट्रपति सरकार की किस शाखा का हिस्सा है?
Legislative only	
केवल विधायी	
Executive only	
केवल कार्यकारी	
Judicial only	
केवल न्यायिक	
Both Executive and Legislative	
कार्यपालिका और विधायी दोनों	

Q.No: 63	Which of the following is the specific port facility within Chabahar Port that India is primarily developing and operating? चाबहार बंदरगाह के अंतर्गत निम्नलिखित में से कौन सी विशिष्ट बंदरगाह सुविधा है जिसे भारत मुख्य रूप से विकसित और संचालित कर रहा है?
Jask Port	
जस्क बंदरगाह	
Shahid Beheshti Port	
शहिद बेहेश्ती बंदरगाह	
Shahid Kalantari Port	
शहिद कलंतरी बंदरगाह	
Bandar Abbas Port	
बंदर अब्बास बंदरगाह	
Not Answered	

Q.No: 64	Consider the following statements: 1. Madhabi Puri Buch became the first woman to head SEBI in March 2022. 2. Tuhin Kanta Pandey has been appointed as the new SEBI Chief for three years from February 28, 2025. 3. Saudi Arabia has awarded PM Narendra Modi the Order of Mubarak Al-Kabeer. Which of the above statement(s) is/are correct ? निम्नलिखित कथनों पर विचार करें: 1. माधबी पुरी बुच मार्च 2022 में सेबी की प्रमुख बनने वाली पहली महिला बनीं। 2. तुहिन कांता पांडे को 28 फरवरी, 2025 से तीन साल के लिए सेबी का नया प्रमुख नियुक्त किया गया है। 3. सऊदी अरब ने पीएम नरेंद्र मोदी को ऑर्डर ऑफ मुबारक अल-कबीर से सम्मानित किया है। उपर्युक्त कथनों में से कौन सा सही है/हैं?
1 and 3 only	
केवल 1 और 3	
2 and 3 only	
केवल 2 और 3	

1, 2, and 3 all are correct

1, 2, और 3 सभी सही हैं

1 and 2 only

केवल 1 और 2

Not Answered

Q.No: 65 Name the Indian port that is the largest exporter of iron ore?

वह भारतीय बंदरगाह कौन-सा है जो लौह अयस्क (आयरन ओर) का सबसे बड़ा निर्यातक है?

Paradip Port

पारादीप बंदरगाह

Chennai Port

चेन्नई बंदरगाह

Visakhapatnam Port

विशाखापत्तनम बंदरगाह

Marmagao Port

मार्मागाओ बंदरगाह

Q.No: 66 What is the name of the writer of Tomb of Sand, the first Hindi book to be awarded the International Booker Prize?

अंतर्राष्ट्रीय बुकर पुरस्कार से सम्मानित पहली हिंदी पुस्तक 'टॉम्ब ऑफ सैंड' के लेखक का नाम क्या है?

Geetanjali Shree

गीतांजलि श्री

Arundhati Roy

अरुंधति रॉय

Kiran Desai

किरण देसाई

Jhumpa Lahiri

झुम्पा लाहिरी

Q.No: 67 What was the role of the National Dairy Development Board (NDD) in the Technology Mission on Oilseeds?

तेल बीज प्रौद्योगिकी मिशन में राष्ट्रीय दुग्ध विकास बोर्ड (NDD) की क्या भूमिका थी?

To promote milk production

दुग्ध उत्पादन को बढ़ावा देना

To regulate trade policies

व्यापार नीतियों का नियमन

To develop genetically modified crops

आनुवंशिक रूप से परिवर्तित फसलों का विकास

To manage oilseed procurement and processing

तिलहन की खरीद और प्रसंस्करण का प्रबंधन

Q.No: 68 Which of the following pairs is **correctly** matched with respect to the Schedules of the Indian Constitution?

निम्नलिखित में से कौन सा युग्म भारतीय संविधान की अनुसूचियों के संबंध में सही सुमेलित है?

Eleventh Schedule – Powers and responsibilities of Panchayats

ग्यारहवीं अनुसूची – पंचायतों की शक्तियाँ और जिम्मेदारियाँ

Twelfth Schedule – Election of President and Vice-President

बारहवीं अनुसूची – राष्ट्रपति और उपराष्ट्रपति का चुनाव

Tenth Schedule – Languages recognised by the Constitution

दसवीं अनुसूची – संविधान द्वारा मान्यता प्राप्त भाषाएँ

Ninth Schedule – Allocation of powers between Union and States

नौवीं अनुसूची – संघ और राज्यों के बीच शक्तियों का आवंटन

Q.No: 69	Which of the following powers granted under the Criminal Procedure (Identification) Act, 2022 extends beyond the scope of its predecessor, the Identification of Prisoners Act, 1920? आपराधिक प्रक्रिया (पहचान) अधिनियम, 2022 के अंतर्गत कौन-सी शक्ति पूर्ववर्ती "कैदियों की पहचान अधिनियम, 1920" की तुलना में अधिक व्यापक है?
	Permitting collection of biometric and biological data
	जैविक और बायोमेट्रिक डेटा संग्रह की अनुमति देना
	Restricting identification procedures only to convicts
	केवल दोषियों की पहचान प्रक्रिया तक सीमित रखना
	Limiting law enforcement access to stored data
	केवल सीमित कानून प्रवर्तन एजेंसियों को डेटा की पहुँच देना
	Allowing only fingerprints for crime investigation
	अपराध जांच हेतु केवल उंगलियों के निशान को मान्य करना

Q.No: 70	Under which article can the President declare a National Emergency? राष्ट्रपति राष्ट्रीय आपातकाल की घोषणा संविधान के किस अनुच्छेद के अंतर्गत कर सकता है?
	Article 360
	अनुच्छेद 360
	Article 356
	अनुच्छेद 356
	Article 352
	अनुच्छेद 352
	Article 365
	अनुच्छेद 365

Q.No: 71	In which year were the major economic reforms introduced in India? भारत में प्रमुख आर्थिक सुधार किस वर्ष लागू किए गए थे?
	1990
	1990
	1985
	1985
	2000
	2000
	1991
	1991

Q.No: 72	Which architectural style is best described by the following features: ribbed vaults, pointed arches, flying buttresses, and stained-glass windows? निम्नलिखित में से कौन-सी वास्तुशैली इन विशेषताओं से परिभाषित होती है: रिब्ड वॉल्ट, नुकीले मेहराब, फ्लाईंग बट्रेस, और रंगीन कांच की खिड़कियाँ?
	Mughal
	मुगल शैली
	Deccan
	दक्षिण भारत (डेक्कन)
	Indo-Islamic
	भारत-इस्लामी शैली
	Gothic
	गोथिक वास्तुकला
	Not Answered

Q.No: 73	Which of the following statements are correct regarding the Unique Land Parcel Identification Number (ULPIN) system? 1. ULPIN assigns a unique ID to every land parcel in India. 2. ULPIN is a 14-digit identification number. 3. ULPIN helps track land ownership and resolve disputes. 4. ULPIN is only for urban areas and not rural land.
----------	--

विशिष्ट भूमि पार्सल पहचान संख्या (ULPIN) प्रणाली के संबंध में निम्नलिखित में से कौन सा कथन सही है?

1. ULPIN भारत में प्रत्येक भूमि पार्सल को एक विशिष्ट पहचान प्रदान करता है।
2. ULPIN एक 14-अंकीय पहचान संख्या है।
3. ULPIN भूमि स्वामित्व को ट्रैक करने और विवादों को हल करने में मदद करता है।
4. ULPIN केवल शहरी क्षेत्रों के लिए है, ग्रामीण भूमि के लिए नहीं।

1, 2, and 3 only

केवल 1, 2, और 3

1, 2, and 4 only

केवल 1, 2, और 4

2 and 3 only

केवल 2 और 3

1, 3, and 4 only

केवल 1, 3, और 4

Q.No: 74 Which of the following commissions is **NOT** a statutory body in India?

निम्नलिखित में से कौन सा आयोग भारत में एक वैधानिक निकाय नहीं है?

National Commission for Scheduled Tribes

राष्ट्रीय अनुसूचित जनजाति आयोग

National Human Rights Commission

राष्ट्रीय मानवाधिकार आयोग

National Commission for Farmers

राष्ट्रीय किसान आयोग

National Commission for Women

राष्ट्रीय महिला आयोग

Q.No: 75 Which of the following is a key reason for the decline in the agricultural sector in India after 1991 economic reforms?

1991 के आर्थिक सुधारों के बाद भारत में कृषि क्षेत्र में गिरावट का मुख्य कारण निम्नलिखित में से कौन सा है?

Rising minimum support prices for all crops

सभी फसलों के लिए न्यूनतम समर्थन मूल्य में वृद्धि

Greater protection through higher import duties

उच्च आयात शुल्क के माध्यम से अधिक सुरक्षा

Shift toward export-oriented cash crops and reduced public investment

निर्यात-मुख्य नकदी फसलों की ओर रुझान और सार्वजनिक निवेश में कमी

Increased investment in irrigation and rural infrastructure

सिंचाई और ग्रामीण बुनियादी ढांचे में निवेश में वृद्धि

Q.No: 76 What is a major difficulty in the data collection process for the Happiness Index across different countries?

विभिन्न देशों में हैप्पीनेस इंडेक्स हेतु आंकड़े एकत्र करने में प्रमुख कठिनाई क्या है?

Recording trade statistics accurately

व्यापार सांख्यिकी का सटीक रिकॉर्डिंग

Lack of financial resources for advertising

विज्ञापन हेतु वित्तीय संसाधनों की कमी

Language barriers in economic treaties

आर्थिक संधियों में भाषाई बाधाएँ

Ensuring consistent and uniform survey methods globally

वैश्विक स्तर पर सर्वेक्षण की विधियों में समानता और निरंतरता सुनिश्चित करना

Q.No: 77 Which of the following is recognized as a classical dance of India?

निम्नलिखित में से कौन-सा नृत्य भारतीय शास्त्रीय नृत्य के रूप में मान्यता प्राप्त है?

Bharatnatyam

भरतनाट्यम

Garba
गरबा
Lavani
लावणी
Bhangra
भांगड़ा

Q.No: 78	Which Indian state has the highest proportion of its workforce population engaged in agriculture? भारत का वह राज्य कौन-सा है जहाँ सर्वाधिक कार्यशील जनसंख्या कृषि कार्यों में संलग्न है?
Rajasthan	
राजस्थान	
Uttar Pradesh	
उत्तर प्रदेश	
Bihar	
बिहार	
Punjab	
पंजाब	

Q.No: 79	How many key variables are used in the World Happiness Report to explain happiness levels? विश्व प्रसन्नता रिपोर्ट में प्रसन्नता के स्तर को समझाने के लिए कितने प्रमुख चरों का उपयोग किया जाता है?
6	
6	
4	
4	
10	
10	
8	
8	
Not Answered	

Q.No: 80	Given below are the statements in Assertion and Reason. Choose the correct option: Assertion (A): The naming of "Good Friday" as a positive term is universally accepted among Christian scholars and traditions. Reason (R): The day is termed "Good" to signify the positive theological meaning of Jesus's sacrificial death. नीचे कथन और कारण दिए गए हैं। सही विकल्प चुनें: कथन (A): "गुड फ्राइडे" को एक सकारात्मक शब्द के रूप में नामित करना ईसाई विद्वानों और परंपराओं के बीच सार्वभौमिक रूप से स्वीकार किया जाता है। कारण (R): यीशु की बलिदानपूर्ण मृत्यु के सकारात्मक धार्मिक अर्थ को दर्शाने के लिए इस दिन को "गुड" कहा जाता है। Both A and R are false. A और R दोनों गलत हैं। Both A and R are true, and R is the correct explanation of A. A और R दोनों सत्य हैं, तथा R, A का सही स्पष्टीकरण है। Both A and R are true, but R is not the correct explanation of A. A और R दोनों सत्य हैं, लेकिन R, A का सही स्पष्टीकरण नहीं है। A is false, but R is true. A असत्य है, लेकिन R सत्य है।
----------	--

Q.No: 81	Which Union Territory has the highest population density as per Census 2011? 2011 की जनगणना के अनुसार, किस केंद्र शासित प्रदेश की जनसंख्या घनत्व सबसे अधिक है?
Chandigarh	
चंडीगढ़	

Puducherry

पुडुचेरी

Lakshadweep

लक्षद्वीप

Delhi

दिल्ली

Q.No: 82 A conductor rod moving with a velocity v perpendicular to a uniform magnetic field B . If the length of the rod perpendicular to both v and B is L , the induced EMF across its ends is given by?

एक चालक छड़ एक समान चुंबकीय क्षेत्र B के लंबवत वेग v के साथ घूम रही है। यदि v और B दोनों के लंबवत छड़ की लंबाई L है, तो इसके सिरों पर प्रेरित EMF किसके द्वारा दिया जाता है?

BL^2v

BL^2v

BLv

BLv

Bv/L

Bv/L

B/vL

B/vL

Not Answered

Q.No: 83 What is the primary goal of the BIMSTEC Free Trade Area (FTA)?

BIMSTEC मुक्त व्यापार क्षेत्र (FTA) का प्रमुख उद्देश्य क्या है?

To reduce trade barriers and enhance economic cooperation

व्यापार बाधाओं को कम करने और आर्थिक सहयोग को प्रोत्साहित करने हेतु

To establish a common currency among BIMSTEC nations

BIMSTEC देशों के लिए एक साझा मुद्रा की स्थापना करना

To regulate trade policies globally

वैश्विक व्यापार नीतियों का विनियमन करने के उद्देश्य से

To promote cultural exchanges

सांस्कृतिक आदान-प्रदान को बढ़ावा देने के उद्देश्य से

Q.No: 84 Which Indian space mission marked the successful launch of 104 satellites in a single mission?

कौन-सा भारतीय अंतरिक्ष मिशन एकल प्रक्षेपण में 104 उपग्रहों को सफलतापूर्वक लॉन्च करने के लिए जाना जाता है?

Astrosat

एस्ट्रोसैट

GSLV Mk III

जीएसएलवी मार्क-III

Chandrayaan-2

चंद्रयान-2

PSLV-C37

पीएसएलवी-सी37

Not Answered

Q.No: 85 The term "deuce" is associated with which sport?

ड्यूस शब्द किस खेल से संबंधित है?

Football

फुटबॉल

Basketball

बास्केटबॉल

Tennis

टैनेस

Hockey
हॉकी

Q.No: 86

Which scheme was launched to promote entrepreneurship among SC and ST communities?
एससी और एसटी समुदायों के बीच उद्यमशीलता को बढ़ावा देने के लिए कौन सी योजना शुरू की गई?

Start-Up India

स्टार्ट-अप इंडिया

Atmanirbhar Bharat Abhiyan

आत्मनिर्भर भारत अभियान

Stand-Up India

स्टैंड-अप इंडिया

MUDRA Yojana

मुद्रा योजना

Q.No: 87

Match the column with their descriptions:

Column A (Laws)	Column B (Descriptions)
A. Law of Demand	1. After a certain point, increasing input leads to declining marginal product.
B. Law of Diminishing Marginal Product	2. Demand and price move in opposite directions when income increases.
C. Law of Variable Proportions	3. Marginal product initially rises with input usage, then falls.

स्तंभ का उनके विवरण से मिलान करें:

स्तंभ A (नियम)	स्तंभ B (विवरण)
A. मांग का नियम	1. एक निश्चित बिंदु के बाद, बढ़ती हुई आगत सीमांत उत्पाद में गिरावट लाती है।
B. घटते सीमांत उत्पाद का नियम	2. आय बढ़ने पर मांग और कीमत विपरीत दिशाओं में चलती हैं।
C. परिवर्तनशील अनुपात का नियम	3. सीमांत उत्पाद शुरू में इनपुट उपयोग के साथ बढ़ता है, फिर गिर जाता है।

A-3, B-2, C-1

A-3, B-2, C-1

A-1, B-3, C-2

A-1, B-3, C-2

A-2, B-3, C-1

A-2, B-3, C-1

A-2, B-1, C-3

A-2, B-1, C-3

Q.No: 88

Which institution was established in 1961 to promote management education in India?
भारत में प्रबंधन शिक्षा को बढ़ावा देने के लिए 1961 में किस संस्थान की स्थापना की गई थी?

Indian Institute of Technology (IIT)

भारतीय प्रौद्योगिकी संस्थान (IIT)

University Grants Commission (UGC)

विश्वविद्यालय अनुदान आयोग (यूजीसी)

National Productivity Council (NPC)

राष्ट्रीय उत्पादकता परिषद

Indian Institute of Management (IIM)

भारतीय प्रबंध संस्थान (IIM)

Q.No: 89	Which schedule of the Constitution contains provisions for the disqualification of legislators under the anti-defection law? कौन-सी अनुसूची विधायकों को दलबदल कानून के तहत अयोग्य ठहराने के प्रावधानों को शामिल करती है?
Ninth Schedule नौवीं अनुसूची Eleventh Schedule ग्यारहवीं अनुसूची Tenth Schedule दसवीं अनुसूची Eighth Schedule आठवीं अनुसूची	

Q.No: 90	What is the scientific term for white blood cells? श्वेत रक्त कोशिकाओं के लिए वैज्ञानिक शब्द क्या है?
Erythrocytes एरिथ्रोसाइट्स Leucocytes ल्यूकोसाइट Thrombocytes थ्रोम्बोसाइट्स Platelets प्लेटलेट्स	

Q.No: 91	Which force governs the motion of planets, stars, and galaxies? कौन सा बल ग्रहों, तारों और आकाशगंगाओं की गति को नियंत्रित करता है?
Nuclear force परमाणु बल Gravitational force गुरुत्वाकर्षण बल Magnetic force चुंबकीय बल Electromagnetic force विद्युतचुंबकीय बल	

Q.No: 92	Which principle of the Digital Personal Data Protection Act, 2023 ensures that entities collecting personal data must obtain explicit consent from individuals? डिजिटल व्यक्तिगत डेटा संरक्षण अधिनियम, 2023 के अंतर्गत कौन-सा सिद्धांत यह सुनिश्चित करता है कि डेटा संग्रहण से पूर्व व्यक्ति की स्पष्ट सहमति आवश्यक है?
Purpose Limitation उद्देश्य सीमितता सिद्धांत (Purpose Limitation) Storage Reduction Compliance भंडारण कटौती अनुपालन Data Localization डेटा स्थानीयकरण Notice and Choice Framework सूचना और पसंद आधारित ढाँचा Not Answered	

Q.No: 93	The Law of Diminishing Marginal Utility states that as a consumer consumes more and more units of a commodity: घटती सीमांत उपयोगिता का नियम कहता है कि जैसे-जैसे उपभोक्ता किसी वस्तु के ज्यादा से ज्यादा यूनिट्स का उपभोग करता है:
Marginal utility derived from each additional unit decreases.	

प्रत्येक अतिरिक्त यूनिट से प्राप्त सीमांत उपयोगिता घटती है।
Total utility increases at an increasing rate.
कुल उपयोगिता बढ़ती दर से बढ़ती है।
Total utility decreases.
कुल उपयोगिता घटती है।
Marginal utility remains constant.
सीमांत उपयोगिता स्थिर रहती है।

Q.No: 94	Which of the following rivers forms a delta along the Eastern Coastal Plains? निम्नलिखित में से कौन-सी नदी पूर्वी तटीय मैदानों में डेल्टा बनाती है?
Narmada	
नर्मदा	
Tapi	
तापी नदी	
Mahi	
माही नदी	
Godavari	
गोदावरी	

Q.No: 95	Match the following folk forms: <table><tr><th>Column A (Folk Form)</th><th>Column B</th></tr><tr><td>A. Sohar</td><td>1. Echoed love songs sung by girls and boys on hilltops</td></tr><tr><td>B. Chhakri</td><td>2. Sung during birth celebrations, shows cultural fusion</td></tr><tr><td>C. Laman</td><td>3. All-night women's songs in rainy season, danced in semicircle</td></tr><tr><td>D. Kajri</td><td>4. Kashmiri group song with rabab, sarangi, tumbaknari</td></tr></table> निम्नलिखित लोक रूपों का मिलान करें: <table><tr><th>स्तंभ A (लोक रूप)</th><th>स्तंभ B</th></tr><tr><td>A. सोहर</td><td>1. पहाड़ियों की चोटियों पर लड़के-लड़कियों द्वारा गाए गए प्रेमगीत गूंज उठे</td></tr><tr><td>B. छकरी</td><td>2. जन्म उत्सव के दौरान गाया जाने वाला यह गीत सांस्कृतिक सम्मिश्रण को दर्शाता है</td></tr><tr><td>C. लेमैन</td><td>3. वर्षा ऋतु में रात भर गाए गए महिला गीत, अर्धवृत्ताकार नृत्य</td></tr><tr><td>D. कजरी</td><td>4. रबाब, सारंगी, तुम्बकनारी के साथ कश्मीरी समूह गीत</td></tr></table>	Column A (Folk Form)	Column B	A. Sohar	1. Echoed love songs sung by girls and boys on hilltops	B. Chhakri	2. Sung during birth celebrations, shows cultural fusion	C. Laman	3. All-night women's songs in rainy season, danced in semicircle	D. Kajri	4. Kashmiri group song with rabab, sarangi, tumbaknari	स्तंभ A (लोक रूप)	स्तंभ B	A. सोहर	1. पहाड़ियों की चोटियों पर लड़के-लड़कियों द्वारा गाए गए प्रेमगीत गूंज उठे	B. छकरी	2. जन्म उत्सव के दौरान गाया जाने वाला यह गीत सांस्कृतिक सम्मिश्रण को दर्शाता है	C. लेमैन	3. वर्षा ऋतु में रात भर गाए गए महिला गीत, अर्धवृत्ताकार नृत्य	D. कजरी	4. रबाब, सारंगी, तुम्बकनारी के साथ कश्मीरी समूह गीत
Column A (Folk Form)	Column B																				
A. Sohar	1. Echoed love songs sung by girls and boys on hilltops																				
B. Chhakri	2. Sung during birth celebrations, shows cultural fusion																				
C. Laman	3. All-night women's songs in rainy season, danced in semicircle																				
D. Kajri	4. Kashmiri group song with rabab, sarangi, tumbaknari																				
स्तंभ A (लोक रूप)	स्तंभ B																				
A. सोहर	1. पहाड़ियों की चोटियों पर लड़के-लड़कियों द्वारा गाए गए प्रेमगीत गूंज उठे																				
B. छकरी	2. जन्म उत्सव के दौरान गाया जाने वाला यह गीत सांस्कृतिक सम्मिश्रण को दर्शाता है																				
C. लेमैन	3. वर्षा ऋतु में रात भर गाए गए महिला गीत, अर्धवृत्ताकार नृत्य																				
D. कजरी	4. रबाब, सारंगी, तुम्बकनारी के साथ कश्मीरी समूह गीत																				
A-1, B-3, C-4, D-2																					
A-1, B-3, C-4, D-2																					
A-4, B-2, C-3, D-1																					
A-4, B-2, C-3, D-1																					
A-3, B-1, C-2, D-4																					
A-3, B-1, C-2, D-4																					
A-2, B-4, C-1, D-3																					
A-2, B-4, C-1, D-3																					
Not Answered																					

Q.No: 96	Which of these rivers does not originate in the Peninsular Plateau of India? निम्नलिखित में से कौन-सी नदी भारत के प्रायद्वीपीय पठार से उद्गम नहीं लेती?
----------	--

Godavari
गोदावरी नदी
Gangā
गंगा नदी
Krishna
कृष्णा नदी
Cauvery
कावेरी नदी

Q.No: 97	Which Rajput ruler defeated Muhammad Ghori in the First Battle of Tarain? तराइन के प्रथम युद्ध में मुहम्मद गौरी को पराजित करने वाले राजपूत शासक कौन थे?
Hem Chandra Vikramaditya	
हेमचंद्र विक्रमादित्य	
Rana Sanga	
राणा सांगा	
Bappa Rawal	
बप्पा रावल	
Prithviraj Chauhan	
पृथ्वीराज चौहान	

Q.No: 98	Which Mughal Emperor issued the Deccan campaign against the Marathas and spent significant time in the region? किस मुगल सम्राट ने मराठाओं के विरुद्ध दक्कन अभियान चलाया और इस क्षेत्र में लंबा समय बिताया?
Shah Jahan	
शाहजहाँ	
Aurangzeb	
औरंगज़ेब	
Jahangir	
जहांगीर	
Akbar	
अकबर	

Q.No: 99	Who was the founder of the Maurya Empire? मौर्य साम्राज्य की स्थापना किस शासक ने की थी?
Harshavardhana	
हर्षवर्धन	
Chandragupta Maurya	
चंद्रगुप्त मौर्य	
Ashoka	
अशोक	
Bindusara	
बिंदुसार	

Q.No: 100	What is the term for the shift of workers from agriculture to industry and services? कृषि क्षेत्र से उद्योग एवं सेवा क्षेत्र की ओर श्रमिकों के स्थानांतरण की प्रक्रिया को क्या कहते हैं?
Industrialization	
औद्योगीकरण	
Urbanization	
शहरीकरण	
Occupational diversification	
आजीविका का विविधीकरण	
Economic transition	
आर्थिक संक्रमण	

Not Answered

PART - C (English Language and Comprehension)

Q.No: 101	Choose the antonym of 'veracity':
Falsehood	
Accuracy	
Truthfulness	
Honesty	

Q.No: 102	<p>Read the following passage and answer the questions based on the passage:</p> <p>The rise of e-commerce has dramatically reshaped retail landscapes around the world. Consumers now enjoy unprecedented convenience, i.e., with only a click, we can compare prices, read reviews, and deliver goods directly to their doors. Brick-and-mortar stores, in contrast, must contend with higher overheads—rent, utilities, and staffing—that online retailers often avoid. Many physical shops have adopted “omnichannel” strategies to stay competitive, integrating their online and in-store experiences. For example, customers might order online and pick up in-store or use a mobile app to check real-time stock levels before visiting. However, some challenges still persist for small retailers because they lack the technical expertise or capital to develop user-friendly websites, and excessive reliance on third-party delivery services can erode profit margins. Moreover, the environmental impact of rapid shipping—packaging waste and increased carbon emissions—is increasingly under scrutiny. As e-commerce continues its ascent, the most successful retailers will combine digital innovation with sustainable practices and a personalized customer experience.</p> <p>What is the primary purpose of this passage?</p>
To advocate for brick-and-mortar retail over e-commerce	
To describe how omnichannel strategies are best	
To examine both opportunities and challenges in modern retail	
To explain why delivery services are harmful	


Q.No: 103	<p>Read the following passage and answer the questions based on the passage:</p> <p>The rise of e-commerce has dramatically reshaped retail landscapes around the world. Consumers now enjoy unprecedented convenience, i.e., with only a click, we can compare prices, read reviews, and deliver goods directly to their doors. Brick-and-mortar stores, in contrast, must contend with higher overheads—rent, utilities, and staffing—that online retailers often avoid. Many physical shops have adopted “omnichannel” strategies to stay competitive, integrating their online and in-store experiences. For example, customers might order online and pick up in-store or use a mobile app to check real-time stock levels before visiting. However, some challenges still persist for small retailers because they lack the technical expertise or capital to develop user-friendly websites, and excessive reliance on third-party delivery services can erode profit margins. Moreover, the environmental impact of rapid shipping—packaging waste and increased carbon emissions—is increasingly under scrutiny. As e-commerce continues its ascent, the most successful retailers will combine digital innovation with sustainable practices and a personalized customer experience.</p> <p>In context, the word “overheads” most nearly means:</p>
Profits	
Fixed expenses	
Revenues	
Discounts	

Q.No: 104

Read the following passage and answer the questions based on the passage:

The rise of e-commerce has dramatically reshaped retail landscapes around the world. Consumers now enjoy unprecedented convenience, i.e., with only a click, we can compare prices, read reviews, and deliver goods directly to their doors. Brick-and-mortar stores, in contrast, must contend with higher overheads—rent, utilities, and staffing—that online retailers often avoid. Many physical shops have adopted “omnichannel” strategies to stay competitive, integrating their online and in-store experiences. For example, customers might order online and pick up in-store or use a mobile app to check real-time stock levels before visiting. However, some challenges still persist for small retailers because they lack the technical expertise or capital to develop user-friendly websites, and excessive reliance on third-party delivery services can erode profit margins. Moreover, the environmental impact of rapid shipping—packaging waste and increased carbon emissions—is increasingly under scrutiny. As e-commerce continues its ascent, the most successful retailers will combine digital innovation with sustainable practices and a personalized customer experience.

According to the passage, which of the following is NOT cited as a challenge for small retailers?



Your file couldn't be accessed

It may have been moved, edited, or deleted.

ERR_FILE_NOT_FOUND

High utility bills

Dependence on delivery services

Environmental scrutiny

Q.No: 105

Read the following passage and answer the questions based on the passage:

The rise of e-commerce has dramatically reshaped retail landscapes around the world. Consumers now enjoy unprecedented convenience, i.e., with only a click, we can compare prices, read reviews, and deliver goods directly to their doors. Brick-and-mortar stores, in contrast, must contend with higher overheads—rent, utilities, and staffing—that online retailers often avoid. Many physical shops have adopted “omnichannel” strategies to stay competitive, integrating their online and in-store experiences. For example, customers might order online and pick up in-store or use a mobile app to check real-time stock levels before visiting. However, some challenges still persist for small retailers because they lack the technical expertise or capital to develop user-friendly websites, and excessive reliance on third-party delivery services can erode profit margins. Moreover, the environmental impact of rapid shipping—packaging waste and increased carbon emissions—is increasingly under scrutiny. As e-commerce continues its ascent, the most successful retailers will combine digital innovation with sustainable practices and a personalized customer experience.

The tone of the passage can best be described as:

Alarmist

Analytical

Enthusiastic

Sarcastic

Q.No: 106

Read the following passage and answer the questions based on the passage:

The rise of e-commerce has dramatically reshaped retail landscapes around the world. Consumers now enjoy unprecedented convenience, i.e., with only a click, we can compare prices, read reviews, and deliver goods directly to their doors. Brick-and-mortar stores, in contrast, must contend with higher overheads—rent, utilities, and staffing—that online retailers often avoid. Many physical shops have adopted “omnichannel” strategies to stay competitive, integrating their online and in-store experiences. For example, customers might order online and pick up in-store or use a mobile app to check real-time stock levels before visiting. However, some challenges still persist for small retailers because they lack the technical expertise or capital to develop user-friendly websites, and excessive reliance on third-party delivery services can erode profit margins. Moreover, the environmental impact of rapid shipping—packaging waste and increased carbon emissions—is increasingly under scrutiny. As e-commerce continues its ascent, the most successful retailers will combine digital innovation with sustainable practices and a personalized customer experience.

Which inference is best supported by the passage?

All retailers will eventually go fully online.
Personalized experiences are key to future retail success.
Third-party delivery is always unprofitable.
Packaging waste has minimal impact on consumers.

Q.No: 107	<p>In the following passage, some words have been deleted. Read the passage carefully and select the most appropriate option to fill in each blank:</p> <p>Modern ethical debates tend to concern the conflict between deontological and consequentialist approaches, each providing a (1) _____ methodology. Deontology requires respect for moral (2) _____ irrespective of the result, while consequentialism judges on the basis of the net (3) _____. Objections against pure consequentialism suggest it will allow (4) _____ actions if these bring about maximum overall welfare. In reply, some recommend (5) _____ hybrid theories that combine obligations with outcome sensitivity.</p> <p>What should come in the place of blank number 1?</p>
quarrelsome	
rigorous	
cursory	
vacuous	

Q.No: 108	<p>In the following passage, some words have been deleted. Read the passage carefully and select the most appropriate option to fill in each blank:</p> <p>Modern ethical debates tend to concern the conflict between deontological and consequentialist approaches, each providing a (1) _____ methodology. Deontology requires respect for moral (2) _____ irrespective of the result, while consequentialism judges on the basis of the net (3) _____. Objections against pure consequentialism suggest it will allow (4) _____ actions if these bring about maximum overall welfare. In reply, some recommend (5) _____ hybrid theories that combine obligations with outcome sensitivity.</p> <p>What should come in the place of blank number 2?</p>
mood	
actions	
conjectures	
fallacies	

Q.No: 109	<p>In the following passage, some words have been deleted. Read the passage carefully and select the most appropriate option to fill in each blank:</p> <p>Modern ethical debates tend to concern the conflict between deontological and consequentialist approaches, each providing a (1) _____ methodology. Deontology requires respect for moral (2) _____ irrespective of the result, while consequentialism judges on the basis of the net (3) _____. Objections against pure consequentialism suggest it will allow (4) _____ actions if these bring about maximum overall welfare. In reply, some recommend (5) _____ hybrid theories that combine obligations with outcome sensitivity.</p> <p>What should come in the place of blank number 3?</p>
goods	
outcomes	
benefits	
profit	

Q.No: 110

In the following passage, some words have been deleted. Read the passage carefully and select the most appropriate option to fill in each blank:

Modern ethical debates tend to concern the conflict between deontological and consequentialist approaches, each providing a (1) _____ methodology. Deontology requires respect for moral (2) _____ irrespective of the result, while consequentialism judges on the basis of the net (3) _____. Objections against pure consequentialism suggest it will allow (4) _____ actions if these bring about maximum overall welfare. In reply, some recommend (5) _____ hybrid theories that combine obligations with outcome sensitivity.

What should come in the place of blank number 4?

Laudable

Immoral

Beneficial


Delightful

Q.No: 111

In the following passage, some words have been deleted. Read the passage carefully and select the most appropriate option to fill in each blank:

Modern ethical debates tend to concern the conflict between deontological and consequentialist approaches, each providing a (1) _____ methodology. Deontology requires respect for moral (2) _____ irrespective of the result, while consequentialism judges on the basis of the net (3) _____. Objections against pure consequentialism suggest it will allow (4) _____ actions if these bring about maximum overall welfare. In reply, some recommend (5) _____ hybrid theories that combine obligations with outcome sensitivity.

What should come in the place of blank number 5?



Your file couldn't be accessed

It may have been moved, edited, or deleted.

ERR_FILE_NOT_FOUND

Well-balanced

over simple

Irrelevant

Q.No: 112

In the following passage, some words have been deleted. Read the passage carefully and select the most appropriate option to fill in each blank:

Researchers in quantum computing face the twin difficulties of (1) _____ qubit coherence and (2) _____ error rates. While superconducting qubits have shown promise, maintaining coherence beyond microseconds remains (3) _____ due to environmental decoherence. Furthermore, scaling up the number of qubits requires (4) _____ control electronics that themselves introduce noise. To overcome these hurdles, teams are exploring (5) _____ techniques such as surface codes and topological qubits.

What should come in the place of blank 1?

to durable

ephemera

Permanent

Perennial

Q.No: 113

In the following passage, some words have been deleted. Read the passage carefully and select the most appropriate option to fill in each blank:

Researchers in quantum computing face the twin difficulties of (1) _____ qubit coherence and (2) _____ error rates. While superconducting qubits have shown promise, maintaining coherence beyond microseconds remains (3) _____ due to environmental decoherence. Furthermore, scaling up the number of qubits requires (4) _____ control electronics that themselves introduce noise. To overcome these hurdles, teams are exploring (5) _____ techniques such as surface codes and topological qubits.

What should come in the place of 2?

negligible

prohibitive

cheap

low

Q.No: 114

In the following passage, some words have been deleted. Read the passage carefully and select the most appropriate option to fill in each blank:

Researchers in quantum computing face the twin difficulties of (1) _____ qubit coherence and (2) _____ error rates. While superconducting qubits have shown promise, maintaining coherence beyond microseconds remains (3) _____ due to environmental decoherence. Furthermore, scaling up the number of qubits requires (4) _____ control electronics that themselves introduce noise. To overcome these hurdles, teams are exploring (5) _____ techniques such as surface codes and topological qubits.

What should come in the place of 3?

tractable

elusive

innate

redundant

Not Answered

Q.No: 115

In the following passage, some words have been deleted. Read the passage carefully and select the most appropriate option to fill in each blank:

Researchers in quantum computing face the twin difficulties of (1) _____ qubit coherence and (2) _____ error rates. While superconducting qubits have shown promise, maintaining coherence beyond microseconds remains (3) _____ due to environmental decoherence. Furthermore, scaling up the number of qubits requires (4) _____ control electronics that themselves introduce noise. To overcome these hurdles, teams are exploring (5) _____ techniques such as surface codes and topological qubits.

What should come in the place of 4?

austere

sophisticated

rudimentary

obsolete

Q.No: 116

In the following passage, some words have been deleted. Read the passage carefully and select the most appropriate option to fill in each blank:

Researchers in quantum computing face the twin difficulties of (1) _____ qubit coherence and (2) _____ error rates. While superconducting qubits have shown promise, maintaining coherence beyond microseconds remains (3) _____ due to environmental decoherence. Furthermore, scaling up the number of qubits requires (4) _____ control electronics that themselves introduce noise. To overcome these hurdles, teams are exploring (5) _____ techniques such as surface codes and topological qubits.

What should come in the place of 5?

fallacious

quantum-error-correcting

presumptive

monochromatic

Q.No: 117 Choose the correct one word substitution for: "A person who is indifferent to pleasure or pain".

Epicure

Stoic

Pessimist

Masochist

Q.No: 118 Select the correct spelling of a word meaning 'fond of company; sociable'.

Gegareous

Gregerious

Grigarious

Gregarious

Q.No: 119 Fill in the blank with an appropriate article.

There is _____ hour left for you to get ready.

a

an

the

many

Q.No: 120 Identify the word that doesn't fit the part of speech needed.

She made a quickly decision without thinking.

decision

quickly

made

thinking

Q.No: 121 Select the correct Synonym of 'ENERVATE'.

Strengthen

Revive

Motivate

Exhaust

Q.No: 122 Identify the error in the sentence.

By the time they arrive, the concert had ended.

time

arrive

concert
ended

Q.No: 123 Select the most appropriate option to fill in the blank.
Listen carefully ____ what I say.

- on
- to**
- by
- in

Q.No: 124 **A sentence is provided in indirect speech. From the four given options, choose the one that most accurately conveys the sentence in its corresponding direct speech.**
My friend said that he could meet me after lunch.

- My friend said, "Shall I meet you after lunch?"
- My friend said, "I could meet you after lunch."
- My friend said, "May I meet you after lunch?"
- My friend said, "I can meet you after lunch."**

Q.No: 125 Find the incorrect part of the sentence:
He was senior than me in college.

- senior than**
- No error
- me in college
- He was

Q.No: 126 **Arrange the parts to form a correct sentence:**
(1) The exhibition opened to the public.
(2) Visitors admired the artworks.
(3) Interactive sessions were conducted.
(4) Feedback was overwhelmingly positive.

- 1-2-4-3
- 1-2-3-4**
- 2-3-1-4
- 2-3-1-4

Q.No: 127 Choose the correct phrase for the word highlighted in bold.
Let's try to **think outside the box** and come up with a new solution to this problem.

- To consider unconventional and creative solutions.**
- To reject all solutions without analysis.
- To solve problems using only existing rules.
- To follow traditional methods strictly.

Q.No: 128	Choose the correctly spelt word:
Servillance	
Survailance	
Survilance	
Surveillance	

Q.No: 129	Which of the following is an example of onomatopoeia?
Murmur	
Silence	
Baloon	
Horrible	
Not Answered	

Q.No: 130	Find the incorrect part of the sentence: She has been teaching in this school since five years.
No error	
She has been teaching	
in this school	
since five years	

Q.No: 131	Select the antonym of 'Oracular'.
Lucid	
Impress	
Anxious	
Idealistic	

Q.No: 132	Choose the correct one word substitution for: "An ideal society marked by justice, equality, and happiness."
Oligarchy	
Technocracy	
Dystopia	
Utopia	

Q.No: 133	Rearrange the parts of the sentence in the correct order. Inflation P. making it difficult for households Q. to manage daily expenses R. affects purchasing power S. and leads to increased cost of living,
QSPR	
SRQP	
PQRS	

RSPQ

Q.No: 134 Convert the sentence provided below from its passive voice structure to an active voice structure:
The book was read by the student in just two days.

The student was reading the book in just two days.

The book is read by the student in just two days.

The student has read the book in just two days.

The student read the book in just two days.

Q.No: 135 Select the correct active form of the given sentence.
"The book is being read by him."

He was reading the book.

He is reading the book.

He has read the book.

He reads the book.

Q.No: 136 Which complex term is misspelt below?

Pseudonym

Epitaph

Inocuous

Circumlocution

Q.No: 137 Which of the following words means "prohibited by law or treaty from being imported or exported"?

Restricted

Illegal

Banned

Contraband

Q.No: 138 Choose the correct indirect speech form of the following sentence.
Rehan said to Mallika, "The Somnath Temple is in Prabhas Patan in Gujarat."

Rehan told Mallika that the Somnath Temple was in Prabhas Patan in Gujarat.

Rehan told Mallika that the Somnath Temple had been in Prabhas Patan in Gujarat.

Rehan told Mallika that the Somnath Temple has been in Prabhas Patan in Gujarat.

Rehan told Mallika that the Somnath Temple is in Prabhas Patan in Gujarat.

Q.No: 139 Which of the following sentences correctly uses the idiom "a slip of the tongue"?

The chef burned his hand and let out a slip of the tongue.

Sneha carefully planned her speech to ensure a slip of the tongue.

Sunita lost her balance while walking and had a slip of the tongue.

Ravi misspoke during the interview; it was just a slip of the tongue.

Q.No: 140 Select the sentence with correct use of article 'the.'

Dr. Johnson met the Shakespeare in England.

Kalidas is the Shakespeare of India.

Dr. Johnson saw the Shakespeare acting in King Lear.

Dr. Johnson had instructed the Shakespeare to write The Tempest.

Q.No: 141 Choose the antonym of 'Peevish'.

Suave

Flat

Tedious

Dull

Q.No: 142 Choose the sentence that uses a homonym of the underlined word:
He left the watch on the nightstand before sleeping.

The guard was assigned to night watch duty.

The watch was ticking softly beside the lamp.

He set his digital watch to the right time.

She bought a new gold watch for her husband.

Q.No: 143 Choose the antonym of 'Slander'.

Mock

Praise

Blame

Abuse

Q.No: 144 Choose the correct meaning of Idiom "Cut the Gordian knot".

Create unnecessary complications

Disagree with authority

Tie unrelated issues together

Solve a problem boldly

Q.No: 145 A sentence is provided in direct speech. From the four given options, choose the one that most accurately conveys the sentence in its corresponding indirect speech.

The officer said, "Had I known about the problem earlier, I would have helped."

The officer said he had helped if he had known it.

The officer told if he knew about the problem, he would help.

The officer said that he know if he had helped.

The officer said that if he had known about the problem earlier, he would have helped.

Q.No: 146 Select the most appropriate option to fill in the blank.
The boy was indifferent ____ his studies.

on

to

at

in

Q.No: 147 Rearrange the following parts (P, Q, R, S) to form the most meaningful and grammatically correct sentence:
P. though he lacked international experience
Q. was selected for the Olympic squad
R. the young shooter
S. due to his exceptional performance at the national trials

P S R Q

R Q P S

R Q S P

P R Q S

Q.No: 148 Select the correct passive form of the given sentence.
"He will submit the report by Friday."

The report is submitted by him by Friday.

The report will have been submitted by him.

The report submitted by him by Friday.

The report will be submitted by him by Friday.

Q.No: 149 Find the part of the sentence that contains an error:
The teacher who had conducted the workshop earlier, (1)/ along with his assistants, (2)/ have submitted the final report to the board (3)/ before the deadline last week. (4)

before the deadline last week (4)

have submitted the final report to the board (3)

The teacher who had conducted the workshop earlier (1)

along with his assistants (2)

Q.No: 150 Rearrange the parts of the sentence in the correct order.

The update
P. ensuring security
Q. enhanced encryption
R. and data autonomy
S. across user devices

SRPQ

QRPS

PSRQ

SPQR

Q.No: 151 Find the part of the sentence that contains an error:
Each participant who registered online for the event (1)/ were given a welcome kit (2)/ along with the program schedule and map (3)/ at the helpdesk near the entrance. (4)/

at the helpdesk near the entrance. (4)

were given a welcome kit (2)

along with the program schedule and map (3)

Each participant who registered online for the event (1)

Q.No: 152 Choose the correct indirect speech form of the following sentence.

Roshni said to Rakesh, "Time and tide waits for none."

Roshni told Rakesh if time and tide waited for none.

Roshni told Rakesh that time and tide waits for none.

Roshni told Rakesh whether time and tide waited for none.

Roshni told Rakesh that time and tide waited for none.

Q.No: 153 Choose the correct one-word substitution for:
"A humorous poem of five lines"

Elegy

Limerick

Haiku

Sonnet

Q.No: 154 Rearrange the parts of the sentence in the correct order.

The economic slowdown
P. reducing consumer spending
Q. in multiple industries
R. straining household incomes and
S. has led to job losses

QSPR

SQRP

PRSQ

RSPQ

Q.No: 155 Find the synonym of 'Encumbrance'.

Offend

Obstacle

Ignore

Disinterest

Not Answered

Q.No: 156	Choose the most suitable option to replace the underlined part of the sentence. If the sentence is already correct, select 'No substitution required'. By the time <u>we will reach</u> , the concert will have started.
we reached	
No improvement	
we reach	
we have reached	

Q.No: 157	Select the synonym of Reckless .
Prudent	
Cautious	
Careful	
Rash	

Q.No: 158	A sentence is provided in indirect speech. From the four given options, choose the one that most accurately conveys the sentence in its corresponding direct speech. The teacher said that the sun rises in the east.
The teacher said, "The sun rising in the east."	
The teacher said, "The sun rose in the east."	
The teacher said, "The sun has risen in the east."	
The teacher said, "The sun rises in the east."	

Q.No: 159	A sentence is provided in direct speech. From the four given options, choose the one that most accurately conveys the sentence in its corresponding indirect speech. She said to her friend, "What a beautiful painting you have made!"
She exclaimed to her friend that she had made a very beautiful painting.	
She told her that the painting is beautiful.	
She exclaimed to her friend that she had made a very beautiful painting.	
She shouted that painting was very nice.	

Q.No: 160	Fill in the blank with the appropriate tense. Jobin has been working all day. He _____ tired.
can be	
will be	
shall be	
must be	

Q.No: 161	<p>Which of the given options is the most logical sequencing of the following sentences to form a meaningful paragraph?</p> <ol style="list-style-type: none"> The primary factor in its formation was the Colorado River, which gradually carved through layers of rock, deepening and widening the canyon. The Grand Canyon was formed over millions of years through the combined forces of geological activity and erosion. Weathering from wind, rain, and temperature changes further shaped the canyon’s intricate rock formations. Tectonic uplift of the Colorado Plateau increased the river’s flow and erosive power, allowing it to cut deeper into the landscape.
-----------	--

1-3-4-2

3-2-1-4

2-1-4-3

4-3-2-1

Q.No: 162	<p>Choose the correct option to complete the sentence.</p> <p>The engineer visited the construction _____ to check the progress of the building.</p>
-----------	--

site

site

sight

cite

Q.No: 163	<p>Choose the most suitable option to replace the underlined part of the sentence. If the sentence is already correct, select ‘No substitution required’.</p> <p>The old lady was unable to climb stairs because her legs <u>is aching constantly</u> since morning.</p>
-----------	--

is been aching constantly

have been aching constantly

Had been aches constantly

No substitution required

Q.No: 164	<p>Which of the given options is the most logical sequencing of the following sentences to form a meaningful paragraph?</p> <ol style="list-style-type: none"> He co-founded Apple Inc. along with Wozniak. Steve Jobs was a visionary entrepreneur and innovator. His ideas continue to influence modern technology and design. Apple Inc. introduced products like iPhone and iPad.
-----------	---

3-1-2-4

2-1-4-3

1-2-4-3

4-3-1-2

Q.No: 165	<p>A sentence is provided in direct speech. From the four given options, choose the one that most accurately conveys the sentence in its corresponding indirect speech.</p> <p>The teacher said, "Open your books."</p>
-----------	---

The teacher asked them to open their books.

The teacher asked to open books.

The teacher ordered them opening the books.

The teacher said them open your books.

Q.No: 166 Choose the sentence that uses a homonym of the underlined word:
Please close the window before leaving.

He forgot to **close** the file before shutting the laptop.

I always **close** the curtains at night.

Their bond grew **close** over the years.

Make sure to **close** the back door too.

Q.No: 167 **Change the following from active to passive:**
By the time the team arrived, the technicians had already repaired the control panel and tested all functions twice.

By the time the team arrived, the control panel had already been repaired, and all functions had been tested twice by the technicians

All functions were being tested by the time the team arrived.

Everything was fixed before the team reached the site.

The technicians repaired and tested everything twice before the team arrived.

Q.No: 168 Spot the spelling error.

Archaetype

Misanthrope

Quintessential

Resurgence

Not Answered

Q.No: 169 Choose the correct one-word substitution for:
"A person who hates other people or mankind"

Misanthrope

Optimist

Egoist

Misogynist

Q.No: 170 Choose the sentence which uses the adjective/adverb in its superlative degree correctly.

My uncle goes to that shop mostly frequently.

My uncle goes to that shop the more frequently.

My uncle goes to that shop very most frequently.

My uncle goes to that shop most frequently.

Q.No: 171	Find the part of the sentence that contains an error: One of the guest speakers who addressed the seminar (1)/ and interacted with students (2)/ were praised widely for their clarity and enthusiasm (3)/ during the closing ceremony. (4)
and interacted with students (2)	
were praised widely for their clarity and enthusiasm (3)	
during the closing ceremony (4)	
One of the guest speakers who addressed the seminar (1)	

Q.No: 172	Select the synonym of Diligent .
Idle	
Careless	
Indolent	
Hardworking	

Q.No: 173	Select the correct active form of the given sentence. "The window had been broken by the boy."
The boy has broken the window.	
The boy is breaking the window.'	
The boy broke the window.	
The boy had broken the window.	

Q.No: 174	Select the option that correctly replaces the underlined phrase in the following sentence: The doctor gave the patient some medications after he <u>felt</u> some pain on his left knee.
did feel	
has felt	
had felt	
was felt	

Q.No: 175	The violinist played a beautiful ___ during the concert.
piece	
peas	
peace	
pace	

Q.No: 176	Select the most appropriate option to fill in the blank. She was absorbed ___ reading.
by	
to	
in	
at	

Q.No: 177 Select the correct passive form of the given sentence.
"She is painting the wall."

The wall has painted.

The wall is being painted by her.

The wall was being painted.

The wall is painted by her.

Q.No: 178 Identify the part containing a grammatical or structural error:
Neither the Principal nor the teachers was present.

No error

nor the teachers

was present

Neither the Principal

Q.No: 179 Choose the correct one word substitution for: "The practice of deliberately expressing less than what is meant."

Euphemism

Irony

Hyperbole

Litotes

Q.No: 180 Select the correct Synonym of 'EXASPERATE'.

Distract

Inspire

Calm

Annoy

Q.No: 181 Arrange the parts to form a correct sentence:

- (1) The athlete trained relentlessly.
- (2) He overcame several injuries.
- (3) He qualified for the finals.
- (4) He inspired young players.

2-1-3-4

1-2-3-4

1-2-4-3

1-3-2-4

Q.No: 182 Which figure of speech is used in "The old lady wept a river of tears"?

Euphemism

Hyperbole

Alliteration

Anticlimax

Q.No: 183 Choose the correct meaning of the idiom:
'Cast pearls before swine'

Sell things at very high prices

Share secrets with close friends

Hide something precious from everyone

Give valuable things to undeserving

Q.No: 184 Choose the antonym of 'pompous'.

Submissive

Energy

Urgency

Delight

Q.No: 185 The following sentence is in indirect speech. Choose the option that conveys it in direct speech.
He said that he had been waiting there for more than two hours before the gates finally opened.

He said, "I have been waiting here since two hours before the gates opened."

He said, "I waited here two hours before gates opened."

He said, "I was waiting here for more than two hours before the gates finally opened."

He said, "I had waiting there before the gates opened."

Q.No: 186 Convert the sentence provided below from its passive voice structure to an active voice structure.
The poem was composed by the student during the literature class.

The student composed the poem during the literature class.

The student had composed the poem during the class.

The poem is being composed by the student during the class.

The student is composing the poem during the literature class.

Q.No: 187 Select the most appropriate option to fill in the blank.
The manager was satisfied ____ the work.

for

with

to

by

Q.No: 188 Choose the underlined part of the sentence with an appropriate idiom:

As the president of a major company, Harshith is used to being the focus of attention.

The elephant in the room

A dime a dozen

Under the weather

In the limelight

Q.No: 189 A sentence is provided in direct speech. From the four given options, choose the one that most accurately conveys the sentence in its corresponding indirect speech.
They said, "We shall visit the museum tomorrow."



They said they would be visiting the museum.

Q.No: 190



The authorities had taken the emergency steps before the storm hit.

The storm was faced with emergency steps.

The authorities took emergency steps.

The emergency steps were taken before the storm hit.

Q.No: 191

Choose the antonym of 'vindicate':

Exonerate

Accuse

Defend

Justify

Q.No: 192

Select the most appropriate option to improve the bold part of the sentence.
The plane landed **in the airport**.

to the airport

into the airport

at the airport

towards airport

Q.No: 193

Convert the sentence provided below from its passive voice structure to an active voice structure:
All the entries must have been verified by the auditor before submission.

All the entries are to be verified before submission.

The auditor was verifying all entries before submission.

The auditor must have verified all the entries before submission.

All entries were verified by the auditor.

Q.No: 194	Which of the given options is the most logical sequencing of the following sentences to form a meaningful paragraph? 1. His observations eventually contributed to his groundbreaking book, <i>On the Origin of Species</i> . 2. The Galápagos Islands are famous for their diverse wildlife and their role in Charles Darwin’s theory of evolution. 3. This led him to propose the idea of natural selection, where species evolve over time to adapt to their environment. 4. Darwin observed that finches on different islands had distinct beak shapes suited to their specific diets.
2-4-1-3	
4-2-3-1	
2-4-3-1	
1-3-2-4	

Q.No: 195	Select the most appropriate option to improve the bold part of the sentence. If I was you , I would accept the offer.
am you	
have been you	
were you	
would be you	

Q.No: 196	Fill in the blank with an appropriate degree of comparison. Hari is _____ than Sohan in solving mathematical problems.
most talented	
more talented	
talenter	

Q.No: 197	Fill in the blank with appropriate prepositions. The soldier was suspected _____ being a spy and was put behind bars.
if	
after	
by	
up	

Q.No: 198	Choose the most suitable option to replace the underlined part of the sentence. If the sentence is already correct, select ‘No substitution required’. The team has been preparing for the match <u>since two months</u> without a break.

Q.No: 199



from the airport

me from

Q.No: 200

Choose the sentence that uses a homonym of the underlined word:
The judge will sentence the accused tomorrow.

He received a ten-year sentence for the crime.

The lawyer defended the sentence fiercely.

The courtroom fell silent during the sentence.

She wrote a beautiful sentence in her diary.

